

Recruitment of Sub-Inspector in Delhi Police, CAPFs and Assistant Sub-Inspector in CISF Examination, 2018

Roll No. :	WWW.EXAMSCLOUD.IN
Registration No.	WWW.EXAMSCLOYD.IN
Name :	WWW.EXAMSCLOUD.IN
Exam Venue :	Star Computer Lab
Exam Time :	10:00 AM - 12:00 PM
Exam Date :	12/03/2019

Section : SI CPO

Q.1 Three of the following four number-pairs are alike in a certain way and one is different. Find the odd one out.

- Ans
- 1. 14 : 33
 - 2. 8 : 25
 - 3. 5 : 15
 - 4. 9 : 23

Question ID : 98958010112
 Status : Not Attempted and Marked For Review
 Chosen Option : --

Q.2 In a code language, BANKER is written as NABREK. How will STRING be written as in that language?

- Ans
- 1. RSTGIN
 - 2. RTSGNI
 - 3. TSIRGN
 - 4. RTGSNI

Question ID : 98958010100
 Status : Answered
 Chosen Option : 2

Q.3 Three of the following four words are alike in a certain way and one is different. Find the odd one out.

- Ans
- 1. Carpenter
 - 2. Blacksmith
 - 3. Gardening
 - 4. Tailor

Question ID : 98958010093
 Status : Answered
 Chosen Option : 3

Q.4 Select the option that is related to the third term in the same way as the second term is related to the first term.

BYWD : DWUF :: AZYB : _____

- Ans
- 1. CXVB
 - 2. BZXC

3. CXWD

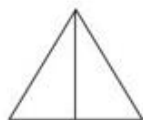
4. BYWE

Question ID : 98958010098

Status : Not Attempted and Marked For Review

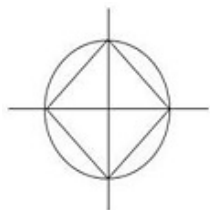
Chosen Option : --

Q.5 Select the option in which the given figure is embedded.

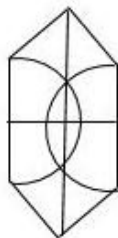


Ans

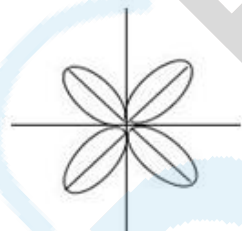
1.



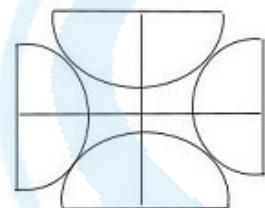
2.



3.



4.



Question ID : 98958010127

Status : Answered

Chosen Option : 1

Q.6 'Tuesday' is related to 'Mars' in the same way as 'Thursday' is related to '_____'.

Ans

1. Venus

2. Mercury

3. Saturn

4. Jupiter

Question ID : 98958010095

Status : Not Attempted and Marked For Review

Chosen Option : --

Q.7 Which two signs should be interchanged to make the given equation correct?

$$4 + 8 \times 12 \div 6 - 4 = 8$$

- Ans
- 1. \times and $+$
 - 2. $+$ and \div
 - 3. $-$ and $+$
 - 4. \div and $-$

Question ID : 98958010118

Status : Marked For Review

Chosen Option : 3

Q.8 Three of the following four number-pairs are alike in a certain way and one is different. Find the odd one out.

- Ans
- 1. 10 : 99
 - 2. 5 : 26
 - 3. 4 : 17
 - 4. 9 : 82

Question ID : 98958010113

Status : Answered

Chosen Option : 1

Q.9 Two statements are given, followed by three conclusions numbered I, II and III. Assuming the statements to be true, even if they seem to be at variance with commonly known facts, decide which of the conclusions logically follow(s) from the statements.

Statements:

Some plants are trees.
All trees are bushes.

Conclusions:

- I. Some bushes are plants.
- II. All bushes are plants.
- III. No bush is a plant.

- Ans
- 1. Only conclusion I follows.
 - 2. Only conclusion III follows.
 - 3. Only conclusions I and III follow.
 - 4. Only conclusions II and III follow.

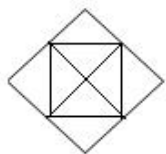
Question ID : 98958010105

Status : Answered

Chosen Option : 1

Q.1
0


How many triangles are there in the following figure?



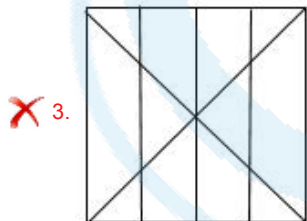
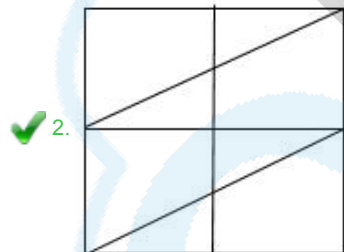
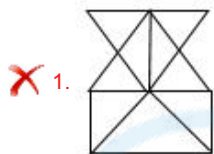
- Ans
- 1. 12
 - 2. 8
 - 3. 14
 - 4. 10

Question ID : 98958010124
Status : Answered
Chosen Option : 1

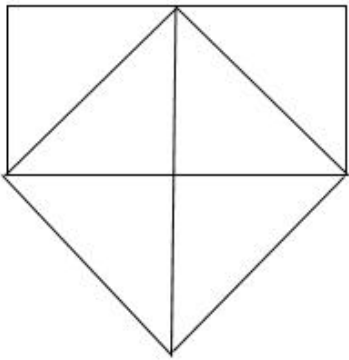
Q.1 Select the option in which the given figure is embedded.



Ans



✗ 4.



Question ID : 98958010126
 Status : Answered
 Chosen Option : 2

Q.1 Select the word-pair in which the two words are related in the same way as are the two words in the following word-pair.

2

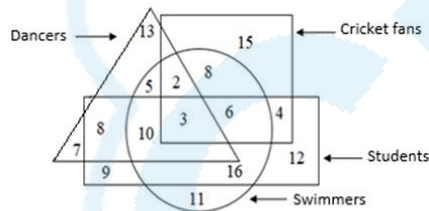
Request : Order

- Ans
- ✗ 1. Summer : Heat
 - ✗ 2. Clean : Wash
 - ✗ 3. Think : Thought
 - ✓ 4. Whisper : Shout

Question ID : 98958010096
 Status : Answered
 Chosen Option : 4

Q.1 In the following diagram, the triangle represents 'dancers', the circle represents 'swimmers', the rectangle represents 'students' and the square represents 'cricket fans'. The numbers in different segments show the number of persons.

3



How many student dancers are swimmers but not cricket fans?

- Ans
- ✗ 1. 15
 - ✓ 2. 10
 - ✗ 3. 3
 - ✗ 4. 13

Question ID : 98958010135
 Status : Answered
 Chosen Option : 2

Q.1 Select the set of numbers that is similar to the following set of numbers.

4

{15, 21, 27}

Ans

1. {25, 40, 56} 2. {20, 28, 36} 3. {40, 55, 75} 4. {12, 24, 32}

Question ID : 98958010117

Status : Answered

Chosen Option : 2

Q.1 Select the option that is related to the third term in the same way as the second term is related to the first term.

5

BDFH : DWDS :: TVYZ : _____

Ans 1. VEBB 2. VDWB 3. UDWA 4. VEWA

Question ID : 98958010099

Status : Answered

Chosen Option : 4

Q.1 Select the option that is related to the third number in the same way as the second number is related to the first number.

6

8 : 81 :: 10 : _____

Ans 1. 100 2. 121 3. 120 4. 111

Question ID : 98958010109

Status : Not Attempted and Marked For Review

Chosen Option : --

Q.1 Which number will replace the question mark (?) in the following series?

7

3, 5, 7, 8, 15, ?, 31, 26

Ans 1. 24 2. 14 3. 21 4. 18

Question ID : 98958010108

Status : Answered

Chosen Option : 2

Q.1 Three of the following four letter-clusters are alike in a certain way and one is different. Find the odd one out.

8

Ans 1. PYRU 2. CLEH

3. MKOH

4. TRVN

Question ID : 98958010091

Status : Answered

Chosen Option : 3

Q.1 Two statements are given, followed by three conclusions numbered I, II and III. Assuming the statements to be true, even if they seem to be at variance with commonly known facts, decide which of the conclusions logically follow(s) from the statements.

Statements:

Some mangoes are fruits.

No fruit is vegetable.

Conclusions:

I. Some mangoes are vegetables.

II. Some fruits are mangoes.

III. No vegetable is a mango.

Ans 1. Only conclusion II follows.

2. Only conclusions II and III follow.

3. Only conclusions I and III follow.

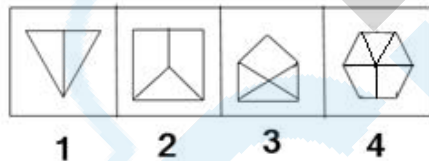
4. Only conclusion I follows.

Question ID : 98958010104

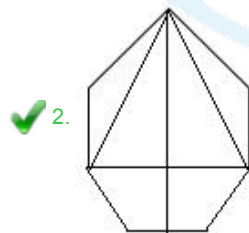
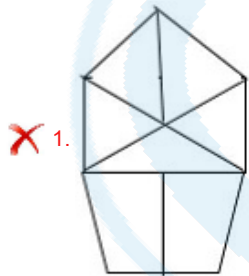
Status : Answered

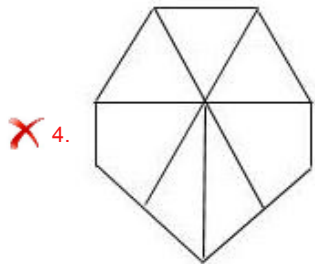
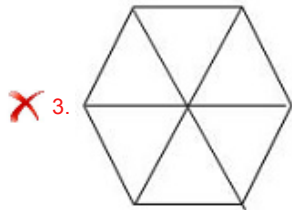
Chosen Option : 2

Q.2 Select the figure that will come next in the following figure series.



Ans

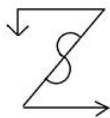




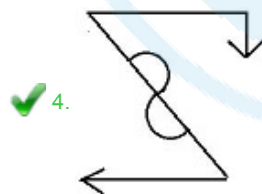
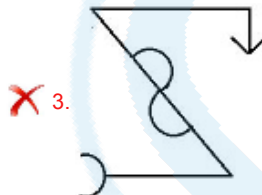
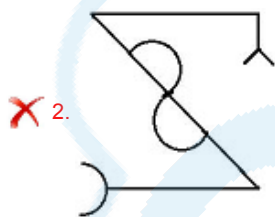
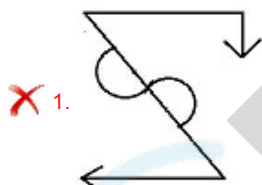
Question ID : 98958010122
Status : Answered
Chosen Option : 2

Q.2 Select the correct mirror image of the given figure when the mirror is placed on the right of the figure.

1



Ans



Question ID : 98958010128
Status : Answered
Chosen Option : 4

Q.2
2

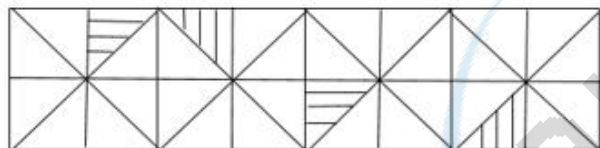
Select the word-pair in which the two words are related in the same way as are the two words in the following word-pair.

Memory : Amnesia

- Ans
- 1. Cholera : Epidemic
 - 2. Old age : Senility
 - 3. Audition : Hearing
 - 4. Vision : Blindness

Question ID : 98958010097
 Status : Answered
 Chosen Option : 4

Q.2 Select the figure that will come next in the following figure series.



1 2 3 4

Ans

- 1.
- 2.
- 3.
- 4.

Question ID : 98958010121
 Status : Not Attempted and Marked For Review
 Chosen Option : --

Q.2 Priya's school bus was facing north-west when it reached her school. After starting from her house, the bus took one left turn, one right turn and another left turn to reach her school. In which direction was the bus facing when it left Priya's house?

- Ans
- 1. South-east
 - 2. North-west
 - 3. South-west
 - 4. North-east

Question ID : 98958010131

Status : Not Attempted and Marked For Review

Chosen Option : --

Q.2 Which letter-cluster will replace the question mark (?) in the following series?

BZD, DXF, GUI, ?, PLR

- Ans
- 1. KQM
 - 2. MOQ
 - 3. KPN
 - 4. LRT

Question ID : 98958010087

Status : Answered

Chosen Option : 1

Q.2 After starting from her house, Sameera walked a few metres towards the East. From there, she took a right turn and walked 100 m, and then took a left turn and walked 30 m. Finally, she took a left turn again and walked 40 m to reach the market. If the air distance between her house and the market is 100 m, how far did Sameera walk towards the East initially from her house?

- Ans
- 1. 30 m
 - 2. 50 m
 - 3. 60 m
 - 4. 80 m

Question ID : 98958010132

Status : Marked For Review

Chosen Option : 4

Q.2 Three of the following four words are alike in a certain way and one is different. Find the odd one out.

- Ans
- 1. Jealous
 - 2. Weep
 - 3. Sad
 - 4. Angry

Question ID : 98958010092

Status : Answered

Chosen Option : 2

Q.2
8

Select the correct alternative to indicate the arrangement of the following words in a logical and meaningful order.

1. Probation
2. Selection
3. Application
4. Confirmation
5. Appointment

- Ans
- 1. 3, 2, 5, 1, 4
 - 2. 5, 1, 4, 2, 3
 - 3. 4, 1, 3, 2, 5
 - 4. 3, 2, 5, 4, 1

Question ID : 98958010088

Status : Answered

Chosen Option : 4

Q.2
9 If CAB = 12 and FED = 30, then HIDE = _____.

- Ans
- 1. 44
 - 2. 68
 - 3. 52
 - 4. 48

Question ID : 98958010102

Status : Answered

Chosen Option : 3

Q.3
0 Which number will replace the question mark (?) in the following series?

7, 10, 16, 19, 25, ?

- Ans
- 1. 29
 - 2. 33
 - 3. 31
 - 4. 28

Question ID : 98958010106

Status : Answered

Chosen Option : 4

Q.3
1 Three of the following four number-pairs are alike in a certain way and one is different. Find the odd one out.

- Ans
- 1. 78 : 13
 - 2. 18 : 9
 - 3. 34 : 7
 - 4. 56 : 11

Question ID : 98958010115

Status : Answered

Chosen Option : 1

Q.3 Select the option that is related to the third number in the same way as the second number is related to the first number.

2

15 : 25 :: 24 : _____

- Ans**
- 1. 40
 - 2. 35
 - 3. 32
 - 4. 45

Question ID : **98958010110**
 Status : **Answered**
 Chosen Option : 1

Q.3 In a code language, QUESTION is written as OPJUTFVR. How will FACTOR be written as in that language?

3

- Ans**
- 1. SUPEGB
 - 2. BGDSPU
 - 3. SPUDBG
 - 4. QPUDBE

Question ID : **98958010101**
 Status : **Not Attempted and Marked For Review**
 Chosen Option : --

Q.3 Select the number-pair in which the two numbers are related in the same way as are the two numbers of the given number pair.

4

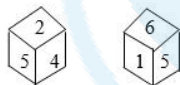
5 : 9

- Ans**
- 1. 10 : 29
 - 2. 25 : 79
 - 3. 17 : 65
 - 4. 12 : 33

Question ID : **98958010111**
 Status : **Marked For Review**
 Chosen Option : 1

Q.3 Two positions of the same dice are given. Which number will be at the top if '6' is at the bottom?

5



- Ans**
- 1. 2
 - 2. 3
 - 3. 1
 - 4. 4

Question ID : **98958010125**
 Status : **Answered**
 Chosen Option : 4

Q.3 Three of the following four number-pairs are alike in a certain way and one is different. Find the odd one out.

6

- Ans
- 1. 6 : 18
 - 2. 8 : 32
 - 3. 12 : 72
 - 4. 14 : 94

Question ID : 98958010114

Status : Answered

Chosen Option : 4

Q.3
7 Which fraction will replace the question mark (?) in the following series?

$$\frac{1}{4}, \frac{3}{5}, \frac{6}{7}, \frac{10}{11}, ?$$

- Ans
- 1. $\frac{15}{23}$
 - 2. $\frac{15}{19}$
 - 3. $\frac{17}{27}$
 - 4. $\frac{17}{21}$

Question ID : 98958010107

Status : Answered

Chosen Option : 2

Q.3
8 Three of the following four letter-clusters are alike in a certain way and one is different. Find the odd one out.

- Ans
- 1. ILOU
 - 2. AEIU
 - 3. EIOU
 - 4. AIOU

Question ID : 98958010090

Status : Answered

Chosen Option : 1

Q.3
9 Select the set of numbers that is similar to the following set of numbers.

$$\{7, 13, 20\}$$

- Ans
- 1. {10, 18, 24}
 - 2. {9, 15, 23}
 - 3. {12, 19, 29}
 - 4. {4, 10, 17}

Question ID : 98958010116

Status : Answered

Chosen Option : 4

Q.4 Which of the following interchanges of signs and numbers would make the given equation correct?

0

$$8 + 2 - 6 \times 4 + 3 = 13$$

- Ans
- 1. - and +, 6 and 4
 - 2. + and +, 4 and 8
 - 3. × and ÷, 8 and 6
 - 4. × and -, 2 and 6

Question ID : 98958010120

Status : Not Attempted and Marked For Review

Chosen Option : --

Q.4 Which two numbers should be interchanged to make the given equations correct?

1

$$6 \times 3 - 8 \div 2 + 5 = 8 \div 2 + 3 \times 5 - 6$$

- Ans
- 1. 6 and 2
 - 2. 8 and 6
 - 3. 5 and 6
 - 4. 3 and 5

Question ID : 98958010119

Status : Answered

Chosen Option : 3

Q.4 Which letter will replace the question mark (?) in the following series?

2

M, N, O, L, Q, J, ?, H

- Ans
- 1. R
 - 2. S
 - 3. K
 - 4. J

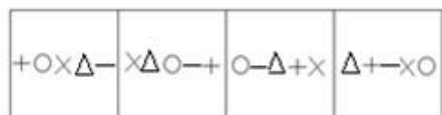
Question ID : 98958010086

Status : Answered

Chosen Option : 2

Q.4 Select the figure that will come next in the following series.

3



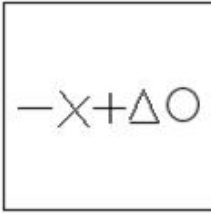
1 2 3 4

Ans

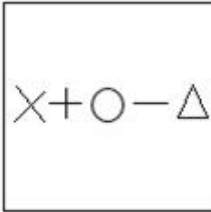
✓ 1.



✗ 2.



✗ 3.



✗ 4.



Question ID : 98958010123

Status : Not Attempted and Marked For Review

Chosen Option : --

Q.4 'Meat' is related to 'Vegetarian' in the same way as 'Alcohol' is related to '_____':

Ans ✓ 1. Teetotaller

✗ 2. Smoker

✗ 3. Water

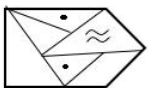
✗ 4. Dietician

Question ID : 98958010094

Status : Answered

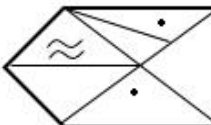
Chosen Option : 1

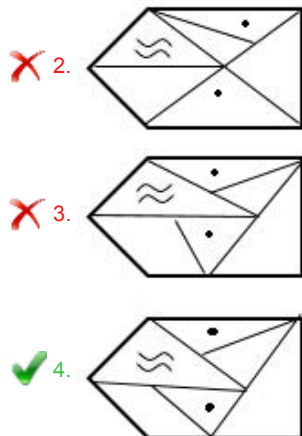
Q.4 Select the correct mirror image of the given figure when the mirror is placed on the right of the figure.



Ans

✗ 1.





Question ID : **98958010129**
 Status : **Answered**
 Chosen Option : **4**

Q.4 Select the correct alternative to indicate the arrangement of the following words in a logical and meaningful order.

6

1. Sleep
2. Cold
3. Blanket
4. Winter
5. Warm
6. Shop

- Ans**
- 1. 4, 2, 6, 3, 5, 1
 - 2. 4, 3, 6, 2, 1, 5
 - 3. 6, 3, 2, 1, 4, 5
 - 4. 4, 3, 2, 6, 1, 5

Question ID : **98958010089**
 Status : **Not Attempted and Marked For Review**
 Chosen Option : --

Q.4 If HECK is coded as 94410 and DIG is coded as 588, then how will BIKE be coded as?

7

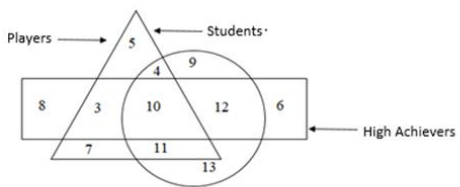
- Ans**
- 1. 38124
 - 2. 38115
 - 3. 19113
 - 4. 39105

Question ID : **98958010103**
 Status : **Answered**
 Chosen Option : **1**

Q.4

8

In the following diagram, the triangle represents 'players', the circle represents 'students' and the rectangle represents 'high achievers'. The numbers in different segments show the number of persons.

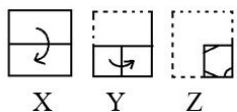


How many high-achieving students are not players?

- Ans
- 1. 15
 - 2. 13
 - 3. 12
 - 4. 3

Question ID : 98958010134
 Status : Answered
 Chosen Option : 3

Q.4 The sequence of folding a piece of square paper and the manner in which the folded paper has been cut is shown in the figures X, Y and Z. How would this paper look when unfolded?

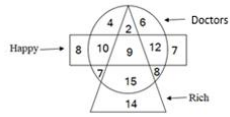


- Ans
- 1.
 - 2.
 - 3.
 - 4.

Question ID : 98958010130
 Status : Answered
 Chosen Option : 4

Q.5
0

In the following diagram, the triangle represents 'rich', the circle represents 'doctor' and the rectangle represents 'happy' persons. The numbers in different segments show the number of persons.



How many rich doctors are not happy?

- Ans
- 1. 15
 - 2. 26
 - 3. 9
 - 4. 17

Question ID : 98958010133
 Status : Answered
 Chosen Option : 4

Q.5₁ Olfactory receptors are located in our:

- Ans
- 1. Nose
 - 2. Tongue
 - 3. Ears
 - 4. Eyes

Question ID : 98958010210
 Status : Answered
 Chosen Option : 3

Q.5₂ The smallest Union Territories is _____.

- Ans
- 1. Puducherry
 - 2. Lakshadweep
 - 3. Dadra and Nagar Haveli
 - 4. Daman and Diu

Question ID : 98958010223
 Status : Answered
 Chosen Option : 2

Q.5₃ Queen Naikidevi is remembered as the woman who defeated _____ in 1178 CE.

- Ans
- 1. Muhammad bin Tughlaq
 - 2. Muhammad al-Baqir
 - 3. Al-Salih Muhammad
 - 4. Muhammad Ghori

Question ID : 98958010232
 Status : Not Answered
 Chosen Option : --

Q.5
4 'Rauf' is a folk dance associated with the state of _____.

- Ans
- 1. Haryana
 - 2. Punjab
 - 3. Rajasthan
 - 4. Jammu and Kashmir

Question ID : 98958010221
Status : Answered
Chosen Option : 3

Q.5
5 '_____' is aimed at the welfare of areas and people affected by mining-related operations, using the funds generated by District Mineral Foundations (DMFs).

- Ans
- 1. Pradhan Mantri Ujjwala Yojana
 - 2. Pradhan Mantri Digidhan Vyapar Yojana
 - 3. Pradhan Mantri Kaushal Vikas Yojana
 - 4. Pradhan Mantri Khanij Kshetra Kalyan Yojana

Question ID : 98958010197
Status : Answered
Chosen Option : 4

Q.5
6 Which Bharatiya Janata Party leader was bestowed with 'Sansad Ratna Award' for distinguished performance as a parliamentarian in January 2019?

- Ans
- 1. Virendra Kashyap
 - 2. Anurag Thakur
 - 3. Rao Inderjit Singh
 - 4. Rajesh Chudasama

Question ID : 98958010194
Status : Answered
Chosen Option : 2

Q.5
7 A study by Gitanjali Katlam and Soumya Prasad from Jawaharlal Nehru University, Mohit Agarwal from Asian Adventures and Raman Kumar from Nature Science Initiative examined the relationship between _____ which was published in the journal 'Current Science'.

- Ans
- 1. animal and plant life
 - 2. different animal species and their food
 - 3. water scarcity and animals
 - 4. animal type and behavior vis-à-vis the risk of plastic ingestion

Question ID : 98958010188
Status : Not Answered
Chosen Option : --

Q.5 In January 2019, Prime Minister Narendra Modi inaugurated and laid the foundation stone for several development projects at Silvassa in Dadra and Nagar Haveli. Which of the following is NOT one of them?

Ans 1.

Door to door waste collection, segregation and processing of solid waste in Dadra and Nagar Haveli digitally

2. New IT policy for Dadra and Nagar Haveli

3. An arts college in Dadra and Nagar Haveli

4. A medical college in Dadra and Nagar Haveli

Question ID : 98958010192

Status : Not Answered

Chosen Option : --

Q.5 The famous festival of 'Tsokum Samai' is celebrated by the people of which state to invoke blessings for a rich harvest?

Ans 1. Mizoram

2. Assam

3. Meghalaya

4. Nagaland

Question ID : 98958010225

Status : Answered

Chosen Option : 1

Q.6 The sky appears blue due to:

Ans 1. Refraction of light

2. Dispersion of light

3. Scattering of light

4. Reflection of light

Question ID : 98958010205

Status : Answered

Chosen Option : 3

Q.6 Which of the following statements is NOT true about the Export-Import Bank of India (EXIM Bank)?

Ans 1.

Its main objective is to provide financial assistance to promote Indian exports.

2. It is a premier export finance institution of India.

3.

The Bank provides assistance in helping Indian firms in their globalization efforts

4.

It was established in 2014 under the Export-Import Bank of India Act.

Question ID : 98958010193

Status : Answered

Chosen Option : 3

Q.6 Which team has won the inaugural Pro Volleyball League Title held in February 2019?

2

- Ans
- 1. Calicut Heroes
 - 2. Ahmedabad Defenders
 - 3. Black Hawks Hyderabad
 - 4. Chennai Spartans

Question ID : 98958010204

Status : Not Answered

Chosen Option : --

Q.6 The Maharana Pratap Sagar reservoir on the river Beas in Himachal Pradesh is also known as _____.

3

- Ans
- 1. Pong Dam
 - 2. Ukai Dam
 - 3. Dharoi Dam
 - 4. Tehri Dam

Question ID : 98958010191

Status : Answered

Chosen Option : 4

Q.6 The spectrum of light was first explained by _____.

4

- Ans
- 1. Neils Bohr
 - 2. Isaac Newton
 - 3. Albert Einstein
 - 4. Galileo Galilei

Question ID : 98958010201

Status : Answered

Chosen Option : 1

Q.6 Article _____ of the Constitution of India states that the Judge of a High Court shall be appointed by the President with the consultation of the Chief Justice of India and the Governor of the State.

5

- Ans
- 1. 21
 - 2. 201
 - 3. 217
 - 4. 72

Question ID : 98958010198

Status : Answered

Chosen Option : 4

Q.6 Apiculture is the technique of scientific rearing of _____ in a specially designed wooden box.

6

- Ans
- 1. Honey bees
 - 2. Silkworms
 - 3. Moths

4. Termites

Question ID : **98958010227**
Status : **Answered**
Chosen Option : 1

Q.6 Indian teen cyclist _____ created history by winning the country's maiden medal in track cycling at the world level in 2018.

- Ans
- 1. Esow Alben
 - 2. Sreedhar Savanur
 - 3. Deborah Herold
 - 4. Bikram Singh

Question ID : **98958010235**
Status : **Not Answered**
Chosen Option : --

Q.6 Why do water droplets always take a round shape when dropped onto plane surfaces?

- Ans
- 1. Due to gravity
 - 2. Due to atmospheric pressure
 - 3. Due to the presence of Eddy Currents in the air
 - 4. Due to exersion of surface tension by the molecules

Question ID : **98958010216**
Status : **Answered**
Chosen Option : 4

Q.6 A not-for-profit organisation 'Youth for Equality' has moved the Supreme Court by questioning the constitutional validity of the _____ Constitutional Amendment Act which provides 10% quota for economically weaker sections.

- Ans
- 1. 100th
 - 2. 103rd
 - 3. 99th
 - 4. 143rd

Question ID : **98958010189**
Status : **Answered**
Chosen Option : 2

Q.7 In December 2018, _____ won the Women's Singles title at the National Squash Championship held in Delhi.

- Ans
- 1. Sachika Balvani
 - 2. Aparajitha Balamurukan
 - 3. Bhuvaneshwari Kumari
 - 4. Joshna Chinappa

Question ID : **98958010217**

Status : Not Answered

Chosen Option : --

Q.7
1 Which of the following states does NOT share a border with Bangladesh?

- Ans
- 1. Meghalaya
 - 2. Manipur
 - 3. Tripura
 - 4. Mizoram

Question ID : 98958010228

Status : Answered

Chosen Option : 2

Q.7
2 Who inaugurated the National Museum of Indian Cinema in Mumbai in Jan 2019.

- Ans
- 1. Narendra Modi
 - 2. Ram Nath Kovind
 - 3. Amitabh Bachchan
 - 4. Devendra Fadnavis

Question ID : 98958010196

Status : Answered

Chosen Option : 1

Q.7
3 The Battle of Chausa was fought between Humayun and Sher Shah Suri on 26 June in the year _____.

- Ans
- 1. 1729
 - 2. 1539
 - 3. 1639
 - 4. 1440

Question ID : 98958010230

Status : Answered

Chosen Option : 1

Q.7
4 _____ has become the youngest man in the world to have scaled seven highest peaks and volcanic summits across continents.

- Ans
- 1. Raj Singh Dharmashaktu
 - 2. Satyarup Siddhanta
 - 3. Mohan Singh
 - 4. Santosh Yadav

Question ID : 98958010214

Status : Answered

Chosen Option : 4

Q.7
5 In January 2019, the Competition Commission of India (CCI) approved a deal wherein Samara Capital-backed Witzig Advisory Services and Amazon will acquire _____, which operates a supermarket store chain called 'More'.

- Ans
- 1. Aditya Birla Retail Ltd
 - 2. Reliance Retail
 - 3. Godrej Consumer Products Ltd
 - 4. Future Group

Question ID : **98958010207**
Status : **Not Answered**
Chosen Option : --

Q.7 Pune-based organisation _____ conducted a study using a 15% M-15 methanol blend in vehicles and tested them for 3,000 km to evaluate emissions in real-world conditions as well as to check the performance of the vehicles.

- Ans
- 1. Automotive Research Association of India (ARAI)
 - 2. Research Association of India (RAI)
 - 3. Automotive Organisation (AO)
 - 4. Vehicle Organisation of India (VOI)

Question ID : **98958010190**
Status : **Answered**
Chosen Option : 1

Q.7 As of January 2019, who holds the portfolio of Ministry of Science and Technology?

- Ans
- 1. Manohar Parrikar
 - 2. Piyush Goyal
 - 3. Harsh Vardhan
 - 4. Prakash Javadekar

Question ID : **98958010200**
Status : **Answered**
Chosen Option : 3

Q.7 _____ is the study of viruses.

- Ans
- 1. Mycology
 - 2. Virology
 - 3. Protozoology
 - 4. Parasitology

Question ID : **98958010233**
Status : **Answered**
Chosen Option : 2

Q.7 The Hindu Prize 2018 for Fiction was awarded to _____, the English author of 'Requiem in Raga Janki' during the Hindu Lit for Life 2019.

- Ans
- 1. Rajiv Elipe
 - 2. Vinayak Varma

3. Neelum Saran Gour

4. Mamta Nainy

Question ID : **98958010187**
Status : **Not Answered**
Chosen Option : --

Q.8
0 The audible range of sound for human beings is from:

Ans 1. 20 Hz to 200 kHz

2. 10 Hz to 100 kHz

3. 20 Hz to 20 kHz

4. 10 Hz to 10 kHz

Question ID : **98958010212**
Status : **Answered**
Chosen Option : 1

Q.8
1 In January 2019, Microsoft India launched a new e-commerce platform called 're-weave.in' under Project ReWeave to aid handloom weavers in Telangana. Which of the following is NOT a benefit of the e-commerce platform?

Ans 1.

It will showcase signature collections created by the weaver communities.

2.

It will decelerate the process of reviving traditional forgotten Indian art.

3.

It will help weavers increase their income and earn a sustainable livelihood.

4.

It will connect artisans to the buyers directly, enabling them to expand to newer customers and markets.

Question ID : **98958010226**
Status : **Not Answered**
Chosen Option : --

Q.8
2 _____ has emerged as the world's most dynamic city among 131 major established and emerging business hubs globally as per JLL City Momentum Index 2019.

Ans 1. Bengaluru

2. Hyderabad

3. Chennai

4. Delhi

Question ID : **98958010211**
Status : **Answered**
Chosen Option : 4

Q.8
3 Dadra and Nagar Haveli is a union territory located between the states of Maharashtra and _____.

Ans 1. Uttarakhand

2. Andhra Pradesh

3. West Bengal

✓ 4. Gujarat

Question ID : 98958010195
Status : Answered
Chosen Option : 4

Q.8
4 The Nobel Prize is awarded in 6 categories each year. Which of the following is NOT one of them?

- Ans
- ✓ 1. Mathematics
 - ✗ 2. Literature
 - ✗ 3. Physics
 - ✗ 4. Economics

Question ID : 98958010229
Status : Answered
Chosen Option : 1

Q.8
5 In January 2019, the Union Cabinet headed by Prime Minister Narendra Modi approved a capital infusion of ₹ _____ in state-owned Export-Import Bank of India (EXIM Bank) to expand its business.

- Ans
- ✓ 1. 6,000 crore
 - ✗ 2. 4,000 crore
 - ✗ 3. 9,000 crore
 - ✗ 4. 2,000 crore

Question ID : 98958010186
Status : Not Answered
Chosen Option : --

Q.8
6 The _____ dance form originated as a tribal dance in the forests of Odisha in the 18th century and attained the status of a martial art-based dance form in the 19th century.

- Ans
- ✗ 1. Chhobia
 - ✗ 2. Kalaripayattu
 - ✓ 3. Chhau
 - ✗ 4. Bawai

Question ID : 98958010222
Status : Answered
Chosen Option : 3

Q.8
7 In September 2018, India's ace sprinter _____ was appointed as Sports Ambassador of Assam.

- Ans
- ✗ 1. Makhan Singh
 - ✗ 2. Jata Shankar
 - ✗ 3. Anand Shetty
 - ✓ 4. Hima Das

Question ID : 98958010234
Status : Not Answered

Chosen Option : --

Q.8 "The Origin of Species" was written by:

- Ans
- 1. Charles Darwin
 - 2. Carolus Linnaeus
 - 3. Erasmus Darwin
 - 4. William Paley

Question ID : 98958010219
Status : Answered
Chosen Option : 1

Q.8 The Treaty of Sagauli was signed between the British and the _____.

- Ans
- 1. Gurkhas
 - 2. Nawab of Bengal
 - 3. Nawab of Awadh
 - 4. Marathas

Question ID : 98958010220
Status : Answered
Chosen Option : 4

Q.9 Where is the Dachigam sanctuary located?

- Ans
- 1. Jammu and Kashmir
 - 2. Assam
 - 3. Chhattisgarh
 - 4. Karnataka

Question ID : 98958010218
Status : Answered
Chosen Option : 1

Q.9 In January 2019, the Department of Science and Technology partnered with Doordarshan to launch two free-to-air channels DD Science and an internet-based channel _____ which will offer live, scheduled play and video-on-demand on science topics.

- Ans
- 1. Internet Science
 - 2. India Technology
 - 3. India Live
 - 4. India Science

Question ID : 98958010208
Status : Answered
Chosen Option : 3

Q.9 Under which of the following acts did the Government of India set up Telecom Regulatory Authority of India (TRAI)?

- Ans
- 1. Telecom Regulatory Authority of India Act, 2001

2. Telecom Regulatory Authority of India Act, 1997
3. Telecom Regulatory Authority of India Act, 2003
4. Telecom Regulatory Authority of India Act, 2005

Question ID : 98958010202
Status : Answered
Chosen Option : 4

Q.9
3 The five kingdom concept of classification of organisms was given by:

- Ans 1. William Paley
2. Charles Darwin
3. Carl Woese
4. Robert Whittaker

Question ID : 98958010231
Status : Not Answered
Chosen Option : --

Q.9
4 The first Sheikh Saud International Prize for Materials Research has been awarded to _____ who is an Indian scientist in January 2019.

- Ans 1. Vikram Sarabhai
2. M Visvesvaraya
3. Chintamani Nagesa Ramachandra Rao
4. Meghnad Saha

Question ID : 98958010213
Status : Answered
Chosen Option : 3

Q.9
5 _____ is/are being considered an alternative to reduce the country's crude oil imports worth ₹7 lakh crore. It/They can also be a potential weapon to fight increasing pollution.

- Ans 1. Extractor fans
2. Biofuels
3. Air purifiers
4. Phytoremediation

Question ID : 98958010199
Status : Answered
Chosen Option : 2

Q.9
6 What was the paternal name of Swami Dayanand Saraswati?

- Ans 1. Narayan Shankar
2. Mool Shankar
3. Krishna Shankar
4. Om Shankar

Question ID : 98958010209

Status : Answered

Chosen Option : 2

Q.9 The Governor of Tamil Nadu Banwarilal Purohit presented the 'Sansad Ratna Awards' in Chennai in January 2019.
7 Which of the following MPs is NOT a recipient of Sansad Ratna Award?

- Ans
- 1. Supriya Sule
 - 2. Nishikant Dubey
 - 3. Kirit Solanki
 - 4. N K Premachandran

Question ID : 98958010215

Status : Not Answered

Chosen Option : --

Q.9 Who was the Governor General of India during the first Anglo-Sikh War?
8

- Ans
- 1. Lord Cornwallis
 - 2. Lord Hardinge
 - 3. Lord Dalhousie
 - 4. Lord Canning

Question ID : 98958010206

Status : Answered

Chosen Option : 1

Q.9 Swadeshi Movement started in India during _____.
9

- Ans
- 1. Anti-Bengal Partition agitation
 - 2. The first non-co-operation movement of 1919-22
 - 3. The Champaran Satyagrah of Gandhi
 - 4. The protest against Rowlatt Act

Question ID : 98958010224

Status : Answered

Chosen Option : 1

Q.1 In January 2019, the Union Ministry of ____ started a 'Know Your Budget' series on its Twitter handle to educate the
00 general public about the budgetary process.

- Ans
- 1. Corporate Affairs
 - 2. Human Resource Development
 - 3. Commerce and Industry
 - 4. Finance

Question ID : 98958010203

Status : Answered

Chosen Option : 4

Q.1 01 5 cubes, each of edge 4 cm, are joined end to end. What is the total surface area of the resulting cuboid?

- Ans
- 1. 352 cm^2
 - 2. 486 cm^2
 - 3. 720 cm^2
 - 4. 526 cm^2

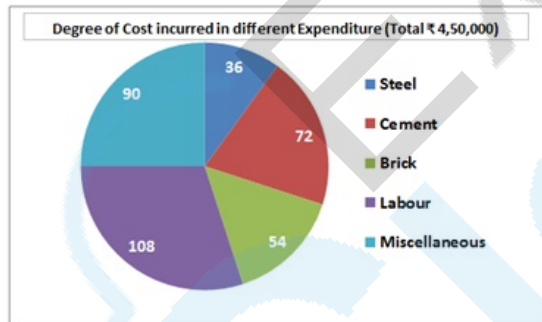
Question ID : 98958010313
 Status : Answered
 Chosen Option : 2

Q.1 02 If $a^3 - b^3 = 208$ and $a - b = 4$, then $(a + b)^2 - ab$ is equal to:

- Ans
- 1. 52
 - 2. 38
 - 3. 32
 - 4. 42

Question ID : 98958010317
 Status : Answered
 Chosen Option : 1

Q.1 03



In the given pie-chart, what is the total expenditure (in percent) on labour charges?

- Ans
- 1. 25%
 - 2. 20%
 - 3. 18%
 - 4. 30%

Question ID : 98958010330
 Status : Answered
 Chosen Option : 4

Q.1 04 A shopkeeper sold two articles for ₹ 9471 each. On one, he gained 23% and on the other, he lost 23%. What is the overall percentage gain or loss?

- Ans
- 1. 5.29% loss
 - 2. 6.29% gain
 - 3. 5.29% gain

4. 6.29% loss

Question ID : 98958010300

Status : Answered

Chosen Option : 1

Q.1 05 The sides of a triangle are 10 cm, 24 cm and 26 cm. At each of its vertices, circles of radius 3.5 cm are drawn. What is the area of the triangle excluding the portion covered by the sectors of the circles? ($\pi = \frac{22}{7}$)

- Ans
- 1. 81.5 cm²
 - 2. 100.75 cm²
 - 3. 75.75 cm²
 - 4. 78.25 cm²

Question ID : 98958010312

Status : Not Attempted and Marked For Review

Chosen Option : --

Q.1 06 If $\tan x = \cot (45^\circ + 2x)$, then what is the value of x ?

- Ans
- 1. 45°
 - 2. 15°
 - 3. $\frac{45^\circ}{2}$
 - 4. 20°

Question ID : 98958010323

Status : Not Attempted and Marked For Review

Chosen Option : --

Q.1 07 $\frac{675 \times 675 \times 675 + 325 \times 325 \times 325}{67.5 \times 67.5 + 32.5 \times 32.5 - 67.5 \times 32.5}$ is equal to:

- Ans
- 1. 100
 - 2. 10,000
 - 3. 1,000
 - 4. 1,00,000

Question ID : 98958010292

Status : Answered

Chosen Option : 3

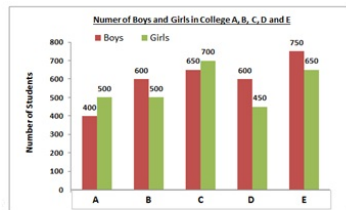
Q.1 08 A sum of ₹ 20,000 is invested for 15 months at the interest of 10% per annum compounded half yearly. What is the percentage gain, correct to one decimal place, at the end of 15 months?

- Ans
- 1. 12.5%
 - 2. 13.6%
 - 3. 13.0%
 - 4. 13.4%

Question ID : 98958010304

Status : **Not Attempted and Marked For Review**
Chosen Option : --

Q.1
09

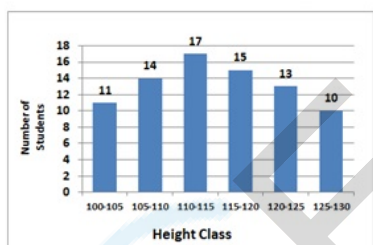


In the given bar graph, in which college the difference between the percentage of boys and girls is maximum, by taking total number of students as base for that college?

- Ans
- 1. E
 - 2. B
 - 3. D
 - 4. A

Question ID : **98958010328**
Status : **Not Attempted and Marked For Review**
Chosen Option : --

Q.1
10



In the given histogram, what is the mean height of all students correct to one decimal place?

- Ans
- 1. 116.8 cm
 - 2. 114.7 cm
 - 3. 116.2 cm
 - 4. 115.6 cm

Question ID : **98958010335**
Status : **Not Answered**
Chosen Option : --

Q.1 What is the sum of the mean proportional between 10.8 and 4.8 and the third proportional of 2 and 4?
11

- Ans
- 1. 15.2
 - 2. 11.2
 - 3. 8.2
 - 4. 10.2

Question ID : **98958010301**
Status : **Answered**
Chosen Option : 1

Q.1

- 12 PA and PB are two tangents to a circle with centre O, from a point P outside the circle. A and B are points on the circle.
If $\angle APB = 40^\circ$, then $\angle OAB$ is equal to:

- Ans 1. 40°
 2. 20°
 3. 50°
 4. 25°

Question ID : 98958010320

Status : Answered

Chosen Option : 3

- Q.1
13 $9\frac{3}{4} \div [2\frac{1}{6} + \{4\frac{1}{3} - (2\frac{1}{2} + \frac{3}{4})\}]$ is equal to:

- Ans 1. 3
 2. $\frac{15}{4}$
 3. 4
 4. $\frac{17}{4}$

Question ID : 98958010291

Status : Answered

Chosen Option : 1

- Q.1
14 The square root of which of the following is a rational number?

- Ans 1. 1250.49
 2. 6250.49
 3. 1354.24
 4. 5768.28

Question ID : 98958010286

Status : Not Attempted and Marked For Review

Chosen Option : --

- Q.1
15 What is the sum of digits of the least number, which when divided by 15, 18 and 24 leaves the remainder 8 in each case and is also divisible by 13?

- Ans 1. 17
 2. 16
 3. 15
 4. 18

Question ID : 98958010289

Status : Not Answered

Chosen Option : --

- Q.1
16 From the top of a 10 m high building, the angle of elevation of the top of a tower is 60° and the angle of depression of the foot of the tower is θ , such that $\tan \theta = \frac{2}{3}$. What is the height of the tower to nearest metres?

- Ans 1. 34 m

2. 35 m 3. 36 m 4. 33 m

Question ID : 98958010326

Status : Not Answered

Chosen Option : --

Q.1 If the six digit number $4x4y96$ is divisible by 88, then what will be the value of $(x + 2y)$?

17

Ans 1. 13 2. 10 3. 12 4. 11

Question ID : 98958010287

Status : Not Attempted and Marked For Review

Chosen Option : --

Q.1 The efficiencies of A, B and C are in the ratio 4 : 5 : 6. Working together, they can complete a work in 12 days. In how many days will A alone be able to complete that work?

18

Ans 1. 45 2. 36 3. 30 4. 40

Question ID : 98958010306

Status : Answered

Chosen Option : 1

Q.1 If $x + \frac{1}{x} = 5$, then $x^3 + \frac{1}{x^3}$ is equal to:

19

Ans 1. 110 2. 130 3. 145 4. 125

Question ID : 98958010316

Status : Answered

Chosen Option : 1

Q.1 Two pipes A and B can fill a tank in 6 hours and 9 hours respectively. They are opened alternately for 1 hour each, starting with pipe A first. In how many hours will the tank be filled ?

20

Ans 1. 5 2. 4 3. 6 4. 7

Question ID : 98958010308

Status : Answered

Chosen Option : 4

Q.1 21 If $\Delta ABC \sim \Delta QPR$, $\frac{ar(ABC)}{ar(\Delta PQR)} = \frac{9}{4}$, AC = 12 cm, AB = 18 cm and BC = 15 cm, then PR is equal to:

- Ans
- 1. $\frac{20}{3}$ cm
 - 2. 12 cm
 - 3. 8 cm
 - 4. 10 cm

Question ID : 98958010322

Status : Answered

Chosen Option : 4

Q.1 22 The price of sugar has decreased by 15% . By what percentage can a person increase the consumption so that there is no change in the expenditure?

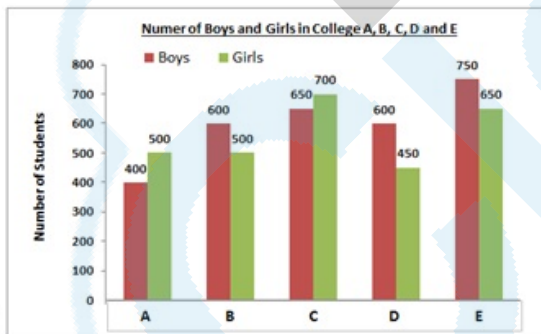
- Ans
- 1. $\frac{300}{23}$ %
 - 2. $\frac{300}{17}$ %
 - 3. $\frac{50}{3}$ %
 - 4. $\frac{20}{3}$ %

Question ID : 98958010298

Status : Answered

Chosen Option : 2

Q.1 23



In the given bar graph, what is the average number of girls in all colleges?

- Ans
- 1. 560
 - 2. 540
 - 3. 550
 - 4. 600

Question ID : 98958010329

Status : Answered

Chosen Option : 1

Q.1 24 A sphere of radius 6 cm is melted and recast into spheres of radius 2 cm each. How many such spheres can be made?

Ans

1. 36
 2. 25
 3. 27
 4. 24

Question ID : 98958010314
 Status : Answered
 Chosen Option : 3

Q.1 The average of 16 numbers is 48. The average of the first 7 numbers is 45 and the average of the next 6 numbers is 52.
 25 If the 14th number is 11 less than the 15th number and is 5 more than the 16th number, then the average of the 15th and 16th number is:

- Ans
1. 47.5
 2. 48.5
 3. 49
 4. 48

Question ID : 98958010294
 Status : Not Attempted and Marked For Review
 Chosen Option : --

Q.1 If $(x - 5)^3 + (x - 6)^3 + (x - 7)^3 = 3(x - 5)(x - 6)(x - 7)$, then what is the value of x ?
 26

- Ans
1. 6
 2. 7
 3. 5
 4. 18

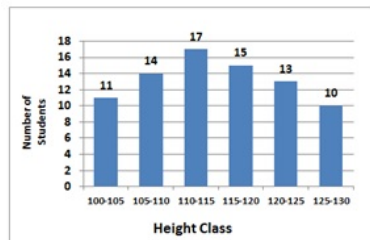
Question ID : 98958010318
 Status : Answered
 Chosen Option : 4

Q.1 A shopkeeper marks his goods at a price such that after giving a discount of 25%, he gains 20%. If the cost price of
 27 the article is ₹460, what is its marked price?

- Ans
1. ₹ 736
 2. ₹ 748
 3. ₹ 725
 4. ₹ 752

Question ID : 98958010295
 Status : Answered
 Chosen Option : 1

Q.1
 28



In the given histogram, what percentage of students have height in the interval of 105 – 110?

- Ans 1. 17.5%
 2. 18%
 3. 16.5%
 4. 17%

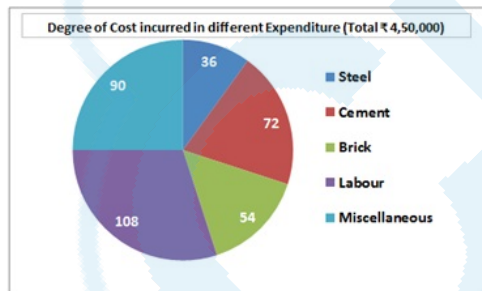
Question ID : 98958010333
 Status : Answered
 Chosen Option : 1

Q.1 In ΔABC , $\angle A = 50^\circ$. Its sides AB and AC are produced to the point D and E. If the bisectors of $\angle CBD$ and $\angle BCE$ meet at the point O, then $\angle BOC$ is equal to:

- Ans 1. 75°
 2. 65°
 3. 55°
 4. 40°

Question ID : 98958010321
 Status : Answered
 Chosen Option : 2

Q.1
30



In the given pie-chart, the expenditure on steel is what percent of the expenditure on cement?

- Ans 1. 55%
 2. 50%
 3. 40%
 4. 45%

Question ID : 98958010331
 Status : Answered
 Chosen Option : 2

Q.1 Two numbers are in the ratio 4 : 5. If their HCF is 16, then the sum of these two numbers is:

31
Ans

- 1. 144
- 2. 124
- 3. 160
- 4. 150

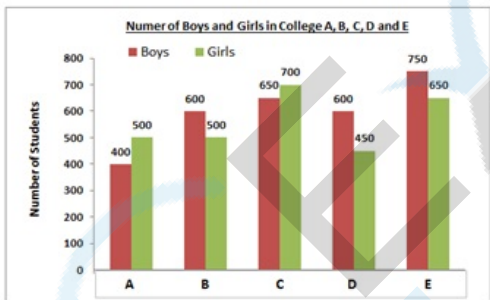
Question ID : **98958010288**
 Status : **Answered**
 Chosen Option : 1

Q.1 If a train runs at 60 km/h, it reaches its destination 15 minutes late. But, if it runs at 80 km/h, it is late by 7 minutes only.
32 The right time for the train to cover its journey is:

- Ans 1. 18 minutes
- 2. 17 minutes
 - 3. 20 minutes
 - 4. 21 minutes

Question ID : **98958010309**
 Status : **Not Answered**
 Chosen Option : --

Q.1
33



In the given bar graph, what is the ratio of the total boys and girls in all 5 colleges?

- Ans 1. 13 : 12
- 2. 14 : 15
 - 3. 15 : 14
 - 4. 12 : 13

Question ID : **98958010327**
 Status : **Answered**
 Chosen Option : 3

Q.1
34 The value of $\left[\frac{\sin^2 24^\circ + \sin^2 66^\circ}{\cos^2 24^\circ + \cos^2 66^\circ} + \sin^2 61^\circ + \cos 61^\circ \sin 29^\circ \right]$ is equal to:

- Ans 1. 2
- 2. 3
 - 3. 1
 - 4. 0

Question ID : **98958010324**
 Status : **Answered**

Chosen Option : 1

Q.1 The side of a rhombus is 5 cm and one of its diagonal is 8 cm. What is the area of the rhombus?

35

- Ans
- 1. 30 cm^2
 - 2. 20 cm^2
 - 3. 40 cm^2
 - 4. 24 cm^2

Question ID : 98958010311

Status : Answered

Chosen Option : 4

Q.1 If A's income is 40 % more than the income of B, then what percentage of B's income is less than income of A?

36

- Ans
- 1. $27\frac{4}{7}\%$
 - 2. $28\frac{5}{7}\%$
 - 3. $27\frac{5}{7}\%$
 - 4. $28\frac{4}{7}\%$

Question ID : 98958010297

Status : Answered

Chosen Option : 4

Q.1 A, B and C started a business by investing ₹ 55,000, ₹ 65,000 and ₹ 75,000 respectively. A is a working partner and gets 20% of the profit and the remaining is distributed in the proportion of their investments. If total profit is ₹ 87,750, what is the share of A?

37

- Ans
- 1. ₹ 27,000
 - 2. ₹ 37,500
 - 3. ₹ 23,000
 - 4. ₹ 37,350

Question ID : 98958010302

Status : Not Answered

Chosen Option : --

Q.1 The successive discounts of 20 % , 10 % and 15 % is equivalent to a single discount of:

38

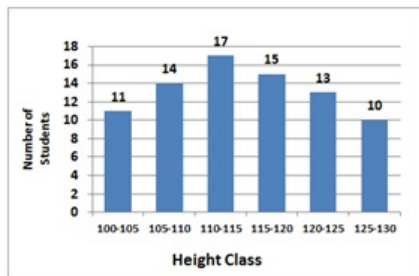
- Ans
- 1. 43.5 %
 - 2. 42.2 %
 - 3. 38.8 %
 - 4. 44.5 %

Question ID : 98958010296

Status : Answered

Chosen Option : 3

Q.1
39



In the given histogram, in which class does the median height of the students lie?

- Ans
- 1. 120-125
 - 2. 105-110
 - 3. 115-120
 - 4. 110-115

Question ID : 98958010334
Status : Answered
Chosen Option : 2

Q.1 The radius of a cylinder is increased by 150 cm and its height is decreased by 20 cm. What is the percentage increase in its volume?

- 40
- Ans
- 1. 400%
 - 2. 600%
 - 3. 500%
 - 4. 80%

Question ID : 98958010315
Status : Answered
Chosen Option : 4

Q.1 ABCD is a cyclic quadrilateral such that AB is a diameter of the circle circumscribing it and angle ADC = 140°. Then angle BAC is equal to:

- 41
- Ans
- 1. 38°
 - 2. 40°
 - 3. 50°
 - 4. 60°

Question ID : 98958010319
Status : Answered
Chosen Option : 2

Q.1 $4\frac{4}{5} \div \frac{3}{7}$ of $7 + \frac{4}{5} \times \frac{3}{10} - \frac{1}{5}$ is equal to:

- 42
- Ans
- 1. $\frac{7}{5}$
 - 2. $\frac{8}{5}$
 - 3. $\frac{34}{25}$

✓ 4. $\frac{41}{25}$

Question ID : 98958010290
Status : Not Answered
Chosen Option : --

Q.1 43 A ladder leaning against a wall makes an angle α with the horizontal ground such that $\tan \alpha = \frac{3}{4}$. If the foot of the ladder is 5 m away from the wall, what is the length of the ladder?

- Ans
- ✗ 1. 5.25 m
 - ✗ 2. 3.75 m
 - ✓ 3. 6.25 m
 - ✗ 4. 4.5 m

Question ID : 98958010325
Status : Not Answered
Chosen Option : --

Q.1 44 24 persons working 8 hours a day can complete 2 units of a work in 10 days. How many persons are required to complete 4 units of that work, if they work 6 hours a day for 16 days?

- Ans
- ✗ 1. 48
 - ✗ 2. 36
 - ✓ 3. 40
 - ✗ 4. 32

Question ID : 98958010305
Status : Not Answered
Chosen Option : --

Q.1 45 Pipes A and B can fill a tank in 6 hours and 9 hours respectively and pipe C can empty the full tank in 12 hours. If all three pipes are opened together when a tank is empty, in how many hours will 35% of the tank be filled?

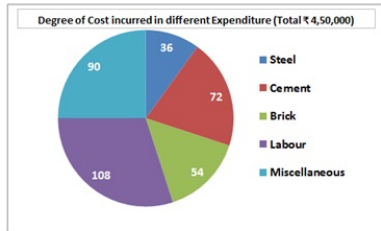
- Ans
- ✗ 1. 1.9
 - ✗ 2. 1.5
 - ✗ 3. 1.6
 - ✓ 4. 1.8

Question ID : 98958010307
Status : Not Answered
Chosen Option : --

Q.1 46 A sum of ₹ 15,000 is invested partly at 12% per annum and the remaining at 10% per annum simple interest. If the total interest at the end of 2 years is ₹ 3,344 how much money was invested at 10% per annum?

- Ans
- ✗ 1. ₹ 6,200
 - ✗ 2. ₹ 6,600
 - ✓ 3. ₹ 6,400
 - ✗ 4. ₹ 6,500

Question ID : 98958010303
Status : Not Answered
Chosen Option : --

Q.1
47

In the given pie-chart, what is the ratio of the total expenditure on steel, cement and bricks to the total expenditure on labour and miscellaneous expenses?

- Ans
- 1. 3 : 7
 - 2. 3 : 5
 - 3. 4 : 5
 - 4. 9 : 11

Question ID : 98958010332

Status : Not Answered

Chosen Option : --

Q.1 In a class of 50 students, 40% are girls. The average weight of the boys is 62 kg and that of the girls is 58 kg. What is the average weight (in kg) of the whole class?

- 48
- Ans
- 1. 60.4
 - 2. 60.2
 - 3. 60.8
 - 4. 60.6

Question ID : 98958010293

Status : Not Answered

Chosen Option : --

Q.1 A boat can go 30 km downstream and 24 km upstream in 2 hours 27 minutes. Also, it can go 20 km downstream and 8 km upstream in 74 minutes. What is the speed of the boat in still water in km/h ?

- 49
- Ans
- 1. 18
 - 2. 20
 - 3. 24
 - 4. 22

Question ID : 98958010310

Status : Not Answered

Chosen Option : --

Q.1 In an examination, 54 % of the candidates passed in science and 42 % failed in mathematics. If 32% failed in both subjects, what percentage passed in both subjects?

- 50
- Ans
- 1. 56%
 - 2. 48%
 - 3. 32%
 - 4. 44%

Question ID : 98958010299

Status : Not Answered

Chosen Option : --

Q.1 Select the synonym of the given word.

51

AMPLIFY

- Ans
- 1. magnify
 - 2. electrify
 - 3. satisfy
 - 4. supply

Question ID : 98958010409

Status : Answered

Chosen Option : 1

Q.1 Select the most appropriate option to substitute the underlined segment in the given sentence. If there is no need to substitute it, select No substitution required.

52

This is the first time anybody have explored into this part of the country.

- Ans
- 1. anybody has explored this part
 - 2. anybody has explored into this part
 - 3. No substitution required
 - 4. anybody have explored this part

Question ID : 98958010393

Status : Answered

Chosen Option : 2

Q.1 Select the most appropriate meaning of the underlined idiom in the given sentence.

53

He has set up his business now as he knows the ins and outs of it.

- Ans
- 1. usefulness
 - 2. importance
 - 3. details
 - 4. difficulties

Question ID : 98958010418

Status : Answered

Chosen Option : 3

Q.1 Select the word, which means the same as the group of words given.

54

the keeper of a museum

- Ans
- 1. compere
 - 2. curator
 - 3. commissioner
 - 4. conservator

Question ID : 98958010422

Status : Answered

Chosen Option : 2

Q.1
55 Select the synonym of the given word.

REPLETE

- Ans
- 1. restful
 - 2. occupied
 - 3. full
 - 4. calm

Question ID : 98958010411

Status : Answered

Chosen Option : 4

Q.1
56 Identify the segment in the sentence, which contains the grammatical error.

In this novel I came across some words which meaning I do not know.

- Ans
- 1. came across
 - 2. which meaning
 - 3. In this novel
 - 4. do not know

Question ID : 98958010388

Status : Answered

Chosen Option : 2

Q.1
57 Select the most appropriate word to fill in the blank.

Our new office is equipped _____ all the latest technology.

- Ans
- 1. from
 - 2. about
 - 3. with
 - 4. by

Question ID : 98958010397

Status : Answered

Chosen Option : 3

Q.1
58 Select the wrongly spelt word.

- Ans
- 1. couragious
 - 2. precious
 - 3. curious
 - 4. victorious

Question ID : 98958010431

Status : Answered

Chosen Option : 1

Q.1
59 Select the word, which means the same as the group of words given.

A large enclosure for keeping the birds in

- Ans
- 1. menagerie
 - 2. aviary
 - 3. aquarium
 - 4. apiary

Question ID : 98958010423

Status : Answered

Chosen Option : 2

Q.1
60 Select the word, which means the same as the group of words given.

a person who eats human flesh

- Ans
- 1. carnivore
 - 2. tribal
 - 3. cannibal
 - 4. scavenger

Question ID : 98958010424

Status : Answered

Chosen Option : 3

Q.1
61 Select the wrongly spelt word.

- Ans
- 1. gloomy
 - 2. gloss
 - 3. gobbel
 - 4. glutton

Question ID : 98958010429

Status : Answered

Chosen Option : 3

Q.1
62 Identify the segment in the sentence, which contains the grammatical error.

To my point of view he should not have behaved in such a manner.

- Ans
- 1. should not have
 - 2. behaved
 - 3. To my point of view

4. in such a manner

Question ID : 98958010389

Status : Answered

Chosen Option : 3

Q.1 Identify the segment in the sentence, which contains the grammatical error.

63

The old man climbed seven floors with hardly no effort at all.

- Ans
- 1. climbed
 - 2. at all
 - 3. The old man
 - 4. hardly no effort

Question ID : 98958010390

Status : Answered

Chosen Option : 4

Q.1 Select the most appropriate option to substitute the underlined segment in the given sentence. If there is no need to substitute it, select No substitution required.

64

The cause of the disaster has not yet known but an enquiry has been set up to find out what happened.

- Ans
- 1. have not yet been known
 - 2. No substitution required
 - 3. was not yet known
 - 4. is not yet known

Question ID : 98958010395

Status : Answered

Chosen Option : 2

Q.1 Select the most appropriate meaning of the underlined idiom in the given sentence.

65

A friend is no friend if he leaves you in the lurch.

- Ans
- 1. leave for one's own work
 - 2. take advantage of someone
 - 3. make a fool of someone
 - 4. leave someone in a helpless condition

Question ID : 98958010421

Status : Answered

Chosen Option : 4

Q.1 Select the antonym of the given word.

66

ADVERSITY

- Ans
- 1. casualty

- 2. calamity
- 3. misfortune
- 4. prosperity

Question ID : 98958010414
Status : Answered
Chosen Option : 4

Q.1
67 Select the word, which means the same as the group of words given.

A fortress typically one on high ground above a city

- Ans
- 1. tower
 - 2. citadel
 - 3. palace
 - 4. colossus

Question ID : 98958010426
Status : Answered
Chosen Option : 2

Q.1
68 Select the most appropriate meaning of the underlined idiom in the given sentence.

Many people in our country like to feather their own nest from the money they raise for social work.

- Ans
- 1. enrich oneself by dishonest means
 - 2. achieve something and be proud of it
 - 3. make one's family comfortable
 - 4. provide comforts in one's house

Question ID : 98958010420
Status : Answered
Chosen Option : 4

Q.1
69 Select the synonym of the given word.

FOREGO

- Ans
- 1. forget
 - 2. give up
 - 3. ban
 - 4. go ahead

Question ID : 98958010408
Status : Answered
Chosen Option : 4

Q.1
70

Select the antonym of the given word.

ENTHUSIASM

- Ans
- 1. fervor
 - 2. nervousness
 - 3. apathy
 - 4. zeal

Question ID : 98958010416

Status : Answered

Chosen Option : 2

Q.1
71 Select the antonym of the given word.

VANITY

- Ans
- 1. pride
 - 2. dignity
 - 3. humility
 - 4. timidity

Question ID : 98958010415

Status : Answered

Chosen Option : 3

Q.1
72 Select the most appropriate option to substitute the underlined segment in the given sentence. If there is no need to substitute it, select No substitution required.

Every year our association is having a meeting to elect the officers.

- Ans
- 1. No substitution required
 - 2. are having a meeting
 - 3. has a meeting
 - 4. having a meeting

Question ID : 98958010391

Status : Answered

Chosen Option : 4

Q.1
73 Select the wrongly spelt word.

- Ans
- 1. dissappoint
 - 2. disappear
 - 3. disallow
 - 4. discomfort

Question ID : 98958010428

Status : Answered

Chosen Option : 3

Comprehension:

In the following passage, some words have been deleted. Fill in the blanks with the help of the alternatives given. Select the most appropriate option for each number.

What does the word scout mean? During a war a soldier is chosen to go _____ (1) of an army in order to _____ (2) out where the enemy is. He then _____ (3) back to the commander all the _____ (4) he has gathered about the _____ (5). Such a soldier is known as a scout.

SubQuestion No : 174

Q.1
74 Select the most appropriate option to fill in blank
No.1.

- Ans
- 1. behind
 - 2. before
 - 3. ahead
 - 4. after

Question ID : 98958010402

Status : Answered

Chosen Option : 3

Comprehension:

In the following passage, some words have been deleted. Fill in the blanks with the help of the alternatives given. Select the most appropriate option for each number.

What does the word scout mean? During a war a soldier is chosen to go _____ (1) of an army in order to _____ (2) out where the enemy is. He then _____ (3) back to the commander all the _____ (4) he has gathered about the _____ (5). Such a soldier is known as a scout.

SubQuestion No : 175

Q.1
75 Select the most appropriate option to fill in blank
No.2.

- Ans
- 1. call
 - 2. bring
 - 3. carry
 - 4. find

Question ID : 98958010403

Status : Answered

Chosen Option : 4

Comprehension:

In the following passage, some words have been deleted. Fill in the blanks with the help of the alternatives given. Select the most appropriate option for each number.

What does the word scout mean? During a war a soldier is chosen to go _____ (1) of an army in order to _____ (2) out where the enemy is. He then _____ (3) back to the commander all the _____ (4) he has gathered about the _____ (5). Such a soldier is known as a scout.

SubQuestion No : 176

Q.1
76 Select the most appropriate option to fill in blank
No.3.

- Ans
- 1. sends
 - 2. tells
 - 3. carries
 - 4. reports

Question ID : 98958010404
Status : Answered
Chosen Option : 4

Comprehension:

In the following passage, some words have been deleted. Fill in the blanks with the help of the alternatives given. Select the most appropriate option for each number.

What does the word scout mean? During a war a soldier is chosen to go _____ (1) of an army in order to _____ (2) out where the enemy is. He then _____ (3) back to the commander all the _____ (4) he has gathered about the _____ (5). Such a soldier is known as a scout.

SubQuestion No : 177

Q.1
77 Select the most appropriate option to fill in blank
No.4.

- Ans
- 1. information
 - 2. news
 - 3. messages
 - 4. communications

Question ID : 98958010405
Status : Answered
Chosen Option : 1

Comprehension:

In the following passage, some words have been deleted. Fill in the blanks with the help of the alternatives given. Select the most appropriate option for each number.

What does the word scout mean? During a war a soldier is chosen to go _____ (1) of an army in order to _____ (2) out where the enemy is. He then _____ (3) back to the commander all the _____ (4) he has gathered about the _____ (5). Such a soldier is known as a scout.

SubQuestion No : 178

Q.1
78 Select the most appropriate option to fill in blank No.5.

- Ans
- 1. commanders
 - 2. army
 - 3. soldiers
 - 4. enemy

Question ID : 98958010406
Status : Answered
Chosen Option : 4

Q.1
79 Select the wrongly spelt word.

- Ans
- 1. blister
 - 2. blossom
 - 3. blind
 - 4. blemish

Question ID : 98958010427
Status : Answered
Chosen Option : 2

Q.1
80 Select the wrongly spelt word.

- Ans
- 1. estimate
 - 2. essencial
 - 3. esteem
 - 4. establish

Question ID : 98958010430
Status : Answered
Chosen Option : 2

Q.1
81 Identify the segment in the sentence, which contains the grammatical error.

I thanked him for his advices.

- Ans
- 1. him
 - 2. I thanked

3. advices

4. for his

Question ID : 98958010386

Status : Answered

Chosen Option : 3

Q.1 Select the most appropriate option to substitute the underlined segment in the given sentence. If there is no need to substitute it, select No substitution required.

82

Thirteen miners were trapped inside a coal mine due to flooding from a nearby river yesterday.

Ans 1. were trapped into a coal mine

2. No substitution required

3. have been trapped inside a coal mine

4. trapped inside a coal mine

Question ID : 98958010394

Status : Answered

Chosen Option : 1

Comprehension:

Read the following passage and answer the questions given after it.

Tutankhamun was an Egyptian pharaoh who was buried in a lavish tomb filled with gold artifacts in the Valley of the Kings. His tomb was discovered in 1922 by an archaeological team led by British Egyptologist Howard Carter.

The tomb was mostly intact, an extraordinary find given that most of the tombs in the Valley of the Kings had been looted in ancient times.

But while Tutankhamun's tomb was lavish, historical and archaeological evidence indicates that the young pharaoh was sickly and spent his short rule trying to undo a religious revolution that his father had started.

Tutankhaten (as he was called at birth) was born around the year 1341 B.C. His father was the pharaoh Akhenaten, a revolutionary pharaoh who tried to focus Egypt's polytheistic religion around the worship of the sun disc, the Aten. In his fervor, Akhenaten ordered the names and images of other Egyptian deities to be destroyed or defaced.

Tutankhamun ascended to the throne around 1332 B.C., when he was about 9 years old. Given his young age he would have relied heavily on his advisers. At some point his name was changed to Tutankhamun, removing the word "aten" — a reminder of his father's religious revolution — from his name.

Tutankhamun also condemned his father's actions in a stela (a stone with inscription) found at Karnak, saying that Akhenaten's religious revolution caused the gods to ignore Egypt. Part of the stela reads "the temples and the cities of the gods and the goddesses, starting from Elephantine as far as the Delta marshes ... were fallen into decay and their shrines were fallen into ruin, having become mere mounds overgrown with grass ... The gods were ignoring this land..."

Archaeological evidence indicates that Tutankhamun suffered from ill health. A study of his remains published in 2010 found that he suffered from a variety of maladies, including malaria and Kohler disease (a rare bone disorder of the foot). A number of canes have been found in Tutankhamun's tomb, finds that support the idea that the pharaoh had difficulty walking at times.

It's not known what killed Tutankhamun. There have been numerous hypotheses put forward over the years. It's been suggested that he died from an infection caused by a broken leg or from injuries suffered in a chariot accident.

The boy king died in 1323 B.C. around the age of 18. His death was unexpected, and his tomb appears to have been finished quickly. Microbes found on the wall of the tomb indicate that the paint on the wall wasn't even dry when the tomb was sealed.

Howard Carter's team discovered the tomb's entranceway on November 4, 1922, and on November 26 they got inside.

While the treasures were incredible, the tomb was unusually small for a pharaoh's burial, containing only 110 square meters (1,184 square feet) of floor space. The tomb's small size may have been because the pharaoh died young and unexpectedly and there wasn't time to carve out a larger tomb.

SubQuestion No : 183

Q.1
83 What is the main theme of the passage?

- Ans
- 1. The tomb of Tutankhamun
 - 2. The discovery of an incredible treasure
 - 3. The life and death of the boy Pharaoh
 - 4. The death of Tutankhamun and his burial

Question ID : 98958010433

Status : Answered

Chosen Option : 4

Comprehension:



Read the following passage and answer the questions given after it.

Tutankhamun was an Egyptian pharaoh who was buried in a lavish tomb filled with gold artifacts in the Valley of the Kings. His tomb was discovered in 1922 by an archaeological team led by British Egyptologist Howard Carter.

The tomb was mostly intact, an extraordinary find given that most of the tombs in the Valley of the Kings had been looted in ancient times.

But while Tutankhamun's tomb was lavish, historical and archaeological evidence indicates that the young pharaoh was sickly and spent his short rule trying to undo a religious revolution that his father had started.

Tutankhaten (as he was called at birth) was born around the year 1341 B.C. His father was the pharaoh Akhenaten, a revolutionary pharaoh who tried to focus Egypt's polytheistic religion around the worship of the sun disc, the Aten. In his fervor, Akhenaten ordered the names and images of other Egyptian deities to be destroyed or defaced.

Tutankhamun ascended to the throne around 1332 B.C., when he was about 9 years old. Given his young age he would have relied heavily on his advisers. At some point his name was changed to Tutankhamun, removing the word "aten" — a reminder of his father's religious revolution — from his name.

Tutankhamun also condemned his father's actions in a stela (a stone with inscription) found at Karnak, saying that Akhenaten's religious revolution caused the gods to ignore Egypt. Part of the stela reads "the temples and the cities of the gods and the goddesses, starting from Elephantine as far as the Delta marshes ... were fallen into decay and their shrines were fallen into ruin, having become mere mounds overgrown with grass ... The gods were ignoring this land..."

Archaeological evidence indicates that Tutankhamun suffered from ill health. A study of his remains published in 2010 found that he suffered from a variety of maladies, including malaria and Kohler disease (a rare bone disorder of the foot). A number of canes have been found in Tutankhamun's tomb, finds that support the idea that the pharaoh had difficulty walking at times.

It's not known what killed Tutankhamun. There have been numerous hypotheses put forward over the years. It's been suggested that he died from an infection caused by a broken leg or from injuries suffered in a chariot accident.

The boy king died in 1323 B.C. around the age of 18. His death was unexpected, and his tomb appears to have been finished quickly. Microbes found on the wall of the tomb indicate that the paint on the wall wasn't even dry when the tomb was sealed.

Howard Carter's team discovered the tomb's entranceway on November 4, 1922, and on November 26 they got inside.

While the treasures were incredible, the tomb was unusually small for a pharaoh's burial, containing only 110 square meters (1,184 square feet) of floor space. The tomb's small size may have been because the pharaoh died young and unexpectedly and there wasn't time to carve out a larger tomb.

SubQuestion No : 184

Q.1
84 The discovery of a number of canes in the tomb indicates that Tutankhamun:

- Ans
- 1. suffered from an infection.
 - 2. had difficulty in walking.
 - 3. suffered from Malaria.
 - 4. had fallen from a chariot.

Question ID : 98958010434

Status : Answered

Chosen Option : 3

Comprehension:



Read the following passage and answer the questions given after it.

Tutankhamun was an Egyptian pharaoh who was buried in a lavish tomb filled with gold artifacts in the Valley of the Kings. His tomb was discovered in 1922 by an archaeological team led by British Egyptologist Howard Carter.

The tomb was mostly intact, an extraordinary find given that most of the tombs in the Valley of the Kings had been looted in ancient times.

But while Tutankhamun's tomb was lavish, historical and archaeological evidence indicates that the young pharaoh was sickly and spent his short rule trying to undo a religious revolution that his father had started.

Tutankhaten (as he was called at birth) was born around the year 1341 B.C. His father was the pharaoh Akhenaten, a revolutionary pharaoh who tried to focus Egypt's polytheistic religion around the worship of the sun disc, the Aten. In his fervor, Akhenaten ordered the names and images of other Egyptian deities to be destroyed or defaced.

Tutankhamun ascended to the throne around 1332 B.C., when he was about 9 years old. Given his young age he would have relied heavily on his advisers. At some point his name was changed to Tutankhamun, removing the word "aten" — a reminder of his father's religious revolution — from his name.

Tutankhamun also condemned his father's actions in a stela (a stone with inscription) found at Karnak, saying that Akhenaten's religious revolution caused the gods to ignore Egypt. Part of the stela reads "the temples and the cities of the gods and the goddesses, starting from Elephantine as far as the Delta marshes ... were fallen into decay and their shrines were fallen into ruin, having become mere mounds overgrown with grass ... The gods were ignoring this land..."

Archaeological evidence indicates that Tutankhamun suffered from ill health. A study of his remains published in 2010 found that he suffered from a variety of maladies, including malaria and Kohler disease (a rare bone disorder of the foot). A number of canes have been found in Tutankhamun's tomb, finds that support the idea that the pharaoh had difficulty walking at times.

It's not known what killed Tutankhamun. There have been numerous hypotheses put forward over the years. It's been suggested that he died from an infection caused by a broken leg or from injuries suffered in a chariot accident.

The boy king died in 1323 B.C. around the age of 18. His death was unexpected, and his tomb appears to have been finished quickly. Microbes found on the wall of the tomb indicate that the paint on the wall wasn't even dry when the tomb was sealed.

Howard Carter's team discovered the tomb's entranceway on November 4, 1922, and on November 26 they got inside.

While the treasures were incredible, the tomb was unusually small for a pharaoh's burial, containing only 110 square meters (1,184 square feet) of floor space. The tomb's small size may have been because the pharaoh died young and unexpectedly and there wasn't time to carve out a larger tomb.

SubQuestion No : 185

Q.1
85 Tutankhamun's father was a revolutionary. What was his revolution?

- Ans
1. He wanted the Egyptians to worship one God – Aten.
 2. Egyptians were asked to have no religion and no god.
 3. Images and names of all the Egyptian deities had to be destroyed.
 4. He wanted his people to be polytheistic.

Question ID : 98958010435

Status : Answered

Chosen Option : 1

Comprehension:

Read the following passage and answer the questions given after it.

Tutankhamun was an Egyptian pharaoh who was buried in a lavish tomb filled with gold artifacts in the Valley of the Kings. His tomb was discovered in 1922 by an archaeological team led by British Egyptologist Howard Carter.

The tomb was mostly intact, an extraordinary find given that most of the tombs in the Valley of the Kings had been looted in ancient times.

But while Tutankhamun's tomb was lavish, historical and archaeological evidence indicates that the young pharaoh was sickly and spent his short rule trying to undo a religious revolution that his father had started.

Tutankhaten (as he was called at birth) was born around the year 1341 B.C. His father was the pharaoh Akhenaten, a revolutionary pharaoh who tried to focus Egypt's polytheistic religion around the worship of the sun disc, the Aten. In his fervor, Akhenaten ordered the names and images of other Egyptian deities to be destroyed or defaced.

Tutankhamun ascended to the throne around 1332 B.C., when he was about 9 years old. Given his young age he would have relied heavily on his advisers. At some point his name was changed to Tutankhamun, removing the word "aten" — a reminder of his father's religious revolution — from his name.

Tutankhamun also condemned his father's actions in a stela (a stone with inscription) found at Karnak, saying that Akhenaten's religious revolution caused the gods to ignore Egypt. Part of the stela reads "the temples and the cities of the gods and the goddesses, starting from Elephantine as far as the Delta marshes ... were fallen into decay and their shrines were fallen into ruin, having become mere mounds overgrown with grass ... The gods were ignoring this land..."

Archaeological evidence indicates that Tutankhamun suffered from ill health. A study of his remains published in 2010 found that he suffered from a variety of maladies, including malaria and Kohler disease (a rare bone disorder of the foot). A number of canes have been found in Tutankhamun's tomb, finds that support the idea that the pharaoh had difficulty walking at times.

It's not known what killed Tutankhamun. There have been numerous hypotheses put forward over the years. It's been suggested that he died from an infection caused by a broken leg or from injuries suffered in a chariot accident.

The boy king died in 1323 B.C. around the age of 18. His death was unexpected, and his tomb appears to have been finished quickly. Microbes found on the wall of the tomb indicate that the paint on the wall wasn't even dry when the tomb was sealed.

Howard Carter's team discovered the tomb's entranceway on November 4, 1922, and on November 26 they got inside.

While the treasures were incredible, the tomb was unusually small for a pharaoh's burial, containing only 110 square meters (1,184 square feet) of floor space. The tomb's small size may have been because the pharaoh died young and unexpectedly and there wasn't time to carve out a larger tomb.

SubQuestion No : 186

Q.1
86 Tutankhamun had a short rule. Most of his time was used in:

- Ans
- 1. looking after the well- being of his people
 - 2. erecting stelas at different places
 - 3. fighting with his own diseases
 - 4. trying to undo the religious revolution of his father

Question ID : 98958010436

Status : Answered

Chosen Option : 3

Comprehension:



Read the following passage and answer the questions given after it.

Tutankhamun was an Egyptian pharaoh who was buried in a lavish tomb filled with gold artifacts in the Valley of the Kings. His tomb was discovered in 1922 by an archaeological team led by British Egyptologist Howard Carter.

The tomb was mostly intact, an extraordinary find given that most of the tombs in the Valley of the Kings had been looted in ancient times.

But while Tutankhamun's tomb was lavish, historical and archaeological evidence indicates that the young pharaoh was sickly and spent his short rule trying to undo a religious revolution that his father had started.

Tutankhaten (as he was called at birth) was born around the year 1341 B.C. His father was the pharaoh Akhenaten, a revolutionary pharaoh who tried to focus Egypt's polytheistic religion around the worship of the sun disc, the Aten. In his fervor, Akhenaten ordered the names and images of other Egyptian deities to be destroyed or defaced.

Tutankhamun ascended to the throne around 1332 B.C., when he was about 9 years old. Given his young age he would have relied heavily on his advisers. At some point his name was changed to Tutankhamun, removing the word "aten" — a reminder of his father's religious revolution — from his name.

Tutankhamun also condemned his father's actions in a stela (a stone with inscription) found at Karnak, saying that Akhenaten's religious revolution caused the gods to ignore Egypt. Part of the stela reads "the temples and the cities of the gods and the goddesses, starting from Elephantine as far as the Delta marshes ... were fallen into decay and their shrines were fallen into ruin, having become mere mounds overgrown with grass ... The gods were ignoring this land..."

Archaeological evidence indicates that Tutankhamun suffered from ill health. A study of his remains published in 2010 found that he suffered from a variety of maladies, including malaria and Kohler disease (a rare bone disorder of the foot). A number of canes have been found in Tutankhamun's tomb, finds that support the idea that the pharaoh had difficulty walking at times.

It's not known what killed Tutankhamun. There have been numerous hypotheses put forward over the years. It's been suggested that he died from an infection caused by a broken leg or from injuries suffered in a chariot accident.

The boy king died in 1323 B.C. around the age of 18. His death was unexpected, and his tomb appears to have been finished quickly. Microbes found on the wall of the tomb indicate that the paint on the wall wasn't even dry when the tomb was sealed.

Howard Carter's team discovered the tomb's entranceway on November 4, 1922, and on November 26 they got inside.

While the treasures were incredible, the tomb was unusually small for a pharaoh's burial, containing only 110 square meters (1,184 square feet) of floor space. The tomb's small size may have been because the pharaoh died young and unexpectedly and there wasn't time to carve out a larger tomb.

SubQuestion No : 187

Q.1
87 Which statement is NOT true according to the passage?

- Ans
- 1. Tutankhamun's tomb was lavishly filled with gold artifacts.
 - 2. The tomb was unusually small for a pharaoh's burial.
 - 3. The tomb appears to have been finished quickly as the paint wasn't dry when it was sealed
 - 4. Howard Carter's team discovered the tomb's entranceway on November 26, 1922.

Question ID : 98958010437

Status : Not Attempted and Marked For Review

Chosen Option : --

Q.1
88 Select the word, which means the same as the group of words given.

a medical specialist who administers drugs for relieving pain during surgery

- Ans
- 1. anesthetist
 - 2. analgesic
 - 3. nephrologist
 - 4. dermatologist

Question ID : 98958010425

Status : Answered

Chosen Option : 1

Q.1
89 Select the most appropriate word to fill in the blank.

The assistant in the library picked up the books from the tables and put _____ back on the shelves.

- Ans
- 1. they
 - 2. its
 - 3. them
 - 4. it

Question ID : 98958010399

Status : Answered

Chosen Option : 3

Q.1
90 Select the synonym of the given word.

MASSIVE

- Ans
- 1. thick
 - 2. strong
 - 3. solid

✓ 4. huge

Question ID : 98958010407
Status : Answered
Chosen Option : 4

Q.1 91 Select the most appropriate word to fill in the blank.

I looked at my damaged car and _____ how much it would cost to repair it.

- Ans
- ✗ 1. wondering
 - ✓ 2. wondered
 - ✗ 3. wonder
 - ✗ 4. wonders

Question ID : 98958010400
Status : Answered
Chosen Option : 2

Q.1 92 Select the most appropriate meaning of the underlined idiom in the given sentence.

After getting the news of his promotion, he was in high spirits.

- Ans
- ✓ 1. joyful
 - ✗ 2. drunk
 - ✗ 3. mad
 - ✗ 4. hopeful

Question ID : 98958010417
Status : Answered
Chosen Option : 1

Q.1 93 Select the most appropriate meaning of the underlined idiom in the given sentence.

Don't take it seriously. He was simply pulling your leg.

- Ans
- ✓ 1. playing a joke with someone
 - ✗ 2. scolding someone for nothing
 - ✗ 3. trying to comfort someone
 - ✗ 4. speaking in a harsh tone

Question ID : 98958010419
Status : Answered
Chosen Option : 2

Q.1 94 Select the most appropriate word to fill in the blank.

You will not be allowed in the Film Festival _____ you have a photo ID card.

- Ans
- ✗ 1. in case
 - ✓ 2. unless

3. if
 4. whether

Question ID : 98958010398
Status : Answered
Chosen Option : 2

Q.1 Select the most appropriate option to substitute the underlined segment in the given sentence. If there is no need to substitute it, select No substitution required.

95

Everybody wants to be winning a prize in the arts competition.

- Ans 1. want winning
 2. wants to have won
 3. wants to win
 4. No substitution required

Question ID : 98958010392
Status : Answered
Chosen Option : 3

Q.1 Identify the segment in the sentence, which contains the grammatical error.

96

Why she was angry with her son?

- Ans 1. she was
 2. angry with
 3. her son
 4. Why

Question ID : 98958010387
Status : Answered
Chosen Option : 1

Q.1 Select the antonym of the given word.

97

HOLLOW

- Ans 1. vacant
 2. narrow
 3. shallow
 4. solid

Question ID : 98958010412
Status : Answered
Chosen Option : 3

Q.1 Select the synonym of the given word.

98

HARASS

- Ans 1. refuse

2. bother
 3. help
 4. care

Question ID : 98958010410
Status : Answered
Chosen Option : 2

Q.1
99 Select the most appropriate word to fill in the blank.

You have travelled a long way. You _____ be tired.

- Ans 1. should
 2. could
 3. must
 4. can

Question ID : 98958010396
Status : Answered
Chosen Option : 3

Q.2
00 Select the antonym of the given word.

LIVELY

- Ans 1. sharp
 2. bubbly
 3. active
 4. sluggish

Question ID : 98958010413
Status : Answered
Chosen Option : 4