

Recruitment of Sub-Inspector in Delhi Police, CAPFs and Assistant Sub-Inspector in CISF Examination, 2018

Roll No. :	WWW.EXAMSCLOUD.IN
Registration No.	WWW.EXAMSCLOUD.IN
Name :	WWW.EXAMSCLOUD.IN
Exam Venue :	iON Digital Zone IDZ Powai
Exam Time :	3:00 PM - 5:00 PM
Exam Date :	12/03/2019

Section : SI CPO

Q.1 After starting from his house, Naren walked a few meters towards the east. From there, he took a right turn and walked 80 m, and then took a left turn and walked 20 m. Finally, he took a right turn again and walked 40 m to reach the hospital. If the air distance between his house and the hospital is 130 m, how far did Naren walk towards the east initially?

- Ans
- 1. 50 m
 - 2. 25 m
 - 3. 40 m
 - 4. 30 m

Question ID : 98958010182

Status : Answered

Chosen Option : 4

Q.2 Three of the following four letter-clusters are alike in a certain way and one is different. Find the odd one out.

- Ans
- 1. MNOQ
 - 2. QS UW
 - 3. BDFH
 - 4. EGIK

Question ID : 98958010140

Status : Answered

Chosen Option : 1

Q.3 Which letter-cluster will replace the question mark (?) in the following series?

BECD, FIGH, KNLM, ?, XAYZ

- Ans
- 1. PSQR
 - 2. QWSU
 - 3. QTRS
 - 4. ORPQ

Question ID : 98958010137

Status : Answered

Chosen Option : 4

Q.4

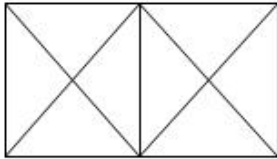
Select the option that is related to the third term in the same way as the second term is related to the first term.

ATKR : FYPW :: TLPG : _____.

- Ans
- 1. XTQL
 - 2. YQUL
 - 3. YTQL
 - 4. XQTL

Question ID : 98958010149
Status : Answered
Chosen Option : 4

Q.5 How many triangles are there in the following figure?



- Ans
- 1. 14
 - 2. 16
 - 3. 18
 - 4. 10

Question ID : 98958010174
Status : Answered
Chosen Option : 1

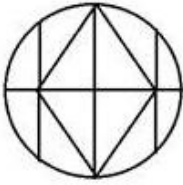
Q.6 Select the option in which the given figure is embedded. (Rotation is not allowed)



Ans

- 1.
- 2.
- 3.

4.

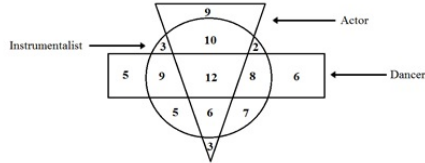


Question ID : 98958010176

Status : Answered

Chosen Option : 3

Q.7 In the following diagram, the triangle represents 'actors', the circle represents 'instrumentalists' and the rectangle represents 'dancers'. The numbers in different segments show the number of persons.



How many dancers are instrumentalists but not actors?

- Ans
- 1. 21
 - 2. 12
 - 3. 17
 - 4. 20

Question ID : 98958010184

Status : Answered

Chosen Option : 3

Q.8 If FAKE is coded as 52106 and MAD is coded as 1225, then how will DEER be coded as?

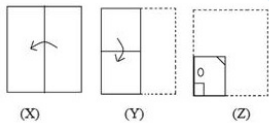
- Ans
- 1. 35418
 - 2. 36420
 - 3. 36419
 - 4. 47520

Question ID : 98958010153

Status : Answered

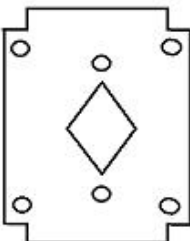
Chosen Option : 3

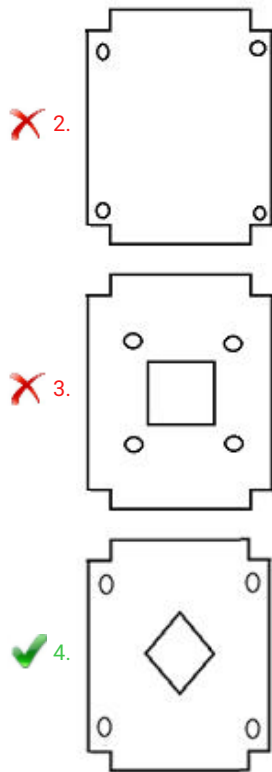
Q.9 The sequence of folding a piece of square paper and the manner in which the folded paper has been cut is shown in the figures X, Y and Z. How would this paper look when unfolded?



Ans

1.





Question ID : 98958010180
Status : Answered
Chosen Option : 3

Q.1 Which number will replace the question mark (?) in the following series?

0, 1, 5, 14, 30, ?

- Ans
- 1. 43
 - 2. 53
 - 3. 55
 - 4. 46

Question ID : 98958010157
Status : Answered
Chosen Option : 3

Q.1 Select the correct alternative to indicate the arrangement of the following words in a logical and meaningful order.

1

1. Diagnosis
2. Recovery
3. Pain
4. Treatment
5. Hospital

- Ans
- 1. 3, 5, 4, 1, 2
 - 2. 5, 3, 1, 4, 2
 - 3. 3, 5, 1, 4, 2
 - 4. 5, 1, 4, 1, 2

Question ID : 98958010138

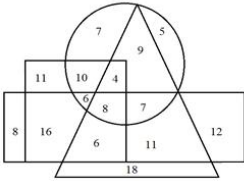
Status : Answered
Chosen Option : 3

Q.1
2 'Disease' is related to 'Pain' in the same way as 'Accident' is related to '_____'.
2

- Ans
- 1. Collision
 - 2. Driving
 - 3. Injury
 - 4. Carelessness

Question ID : 98958010144
Status : Answered
Chosen Option : 1

Q.1
3 In the following diagram, the triangle represents 'actors', the circle represents 'male', the rectangle represents 'painters' and the square represents 'artists'. The numbers in different segments show the number of persons.



How many male actors are painters but not artists?

- Ans
- 1. 13
 - 2. 7
 - 3. 8
 - 4. 15

Question ID : 98958010185
Status : Answered
Chosen Option : 2

Q.1
4 Which number will replace the question mark (?) in the following series?

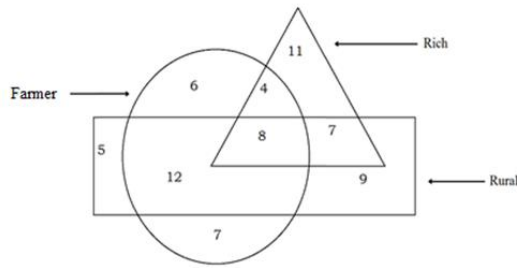
4, 10, 18, 38, ?, 150

- Ans
- 1. 78
 - 2. 74
 - 3. 84
 - 4. 70

Question ID : 98958010158
Status : Answered
Chosen Option : 2

Q.1
5

In the following diagram, the triangle represents 'rich', the circle represents 'Farmer' and the rectangle represents 'rural'. The numbers in different segments show the number of persons.



How many rich Farmers are not rural?

- Ans
- 1. 8
 - 2. 4
 - 3. 12
 - 4. 7

Question ID : 98958010183
 Status : Answered
 Chosen Option : 2

Q.1 Which letter will replace the question mark (?) in the following series?

B, D, G, I, L, ?, Q

- Ans
- 1. P
 - 2. N
 - 3. M
 - 4. O

Question ID : 98958010136
 Status : Answered
 Chosen Option : 2

Q.1 In a code language, MACHINE is written as CAMHENI. How will MONSTER be written as in that language?

- Ans
- 1. NOMSRET
 - 2. OMNSETR
 - 3. NOMETSR
 - 4. SNOMRET

Question ID : 98958010150
 Status : Answered
 Chosen Option : 1

Q.1 'Bird' is related to 'Wings' in the same way as 'Fish' is related to '_____'.
 8

- Ans
- 1. Belly
 - 2. Scales
 - 3. Fins

4. Gills

Question ID : 98958010145
 Status : Answered
 Chosen Option : 3

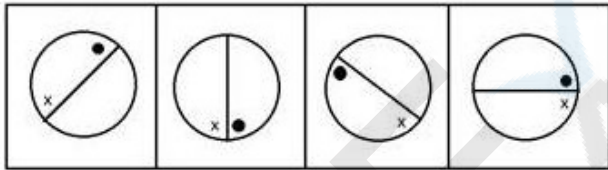
Q.1
 9 Which number will replace the question mark (?) in the following series?

3, 4, 7, 11, 18, ?

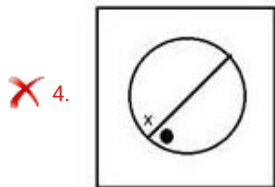
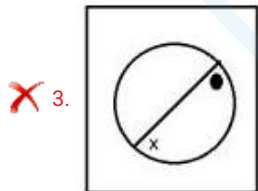
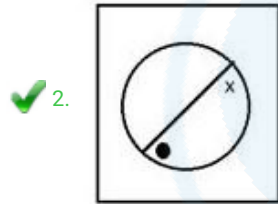
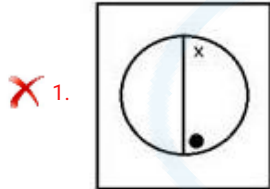
- Ans 1. 22
 2. 25
 3. 29
 4. 31

Question ID : 98958010156
 Status : Answered
 Chosen Option : 3

Q.2
 0 Select the figure that will come next in the following series.



Ans



Question ID : 98958010171

Status : Answered

Chosen Option : 2

Q.2 Select the word-pair in which the two words are related in the same way as are the two words in the given word-pair.

1

Circle : Circumference

- Ans
- 1. Square : Diagonal
 - 2. Triangle : Area
 - 3. Plane : Dimension
 - 4. Rectangle : Perimeter

Question ID : 98958010146

Status : Answered

Chosen Option : 4

Q.2 Which two numbers should be interchanged to make the given equation correct?

2

$$9 + 4 \div 2 - 6 \times 3 = 4 \div 3 \times 6 - 9 + 1$$

- Ans
- 1. 6 and 3
 - 2. 4 and 9
 - 3. 4 and 2
 - 4. 6 and 4

Question ID : 98958010169

Status : Answered

Chosen Option : 1

Q.2 Select the option that is related to the third number in the same way as the second number is related to the first number.

3

6 : 35 :: 9 : _____

- Ans
- 1. 65
 - 2. 80
 - 3. 85
 - 4. 99

Question ID : 98958010159

Status : Answered

Chosen Option : 2

Q.2 Select the correct alternative to indicate the arrangement of the following words in a logical and meaningful order.

4

1. Injury
2. Recovery
3. Accident
4. Showroom
5. Drive
6. Car

- Ans
- 1. 4, 6, 5, 3, 1, 2
 - 2. 6, 4, 3, 5, 1, 2
 - 3. 4, 6, 5, 3, 2, 1

4. 5, 6, 3, 2, 1, 4

Question ID : 98958010139
Status : Answered
Chosen Option : 1

Q.2 Three of the following four letter-clusters are alike in a certain way and one is different. Find the odd one out.
5

- Ans 1. HPKM
 2. KQNT
 3. TVUW
 4. BFDH

Question ID : 98958010141
Status : Answered
Chosen Option : 3

Q.2 Two statements are given, followed by three conclusions numbered I, II and III. Assuming the statements to be true, even if they seem to be at variance with commonly known facts, decide which of the conclusions logically follow(s) from the statements.
6

Statements:

All computers are instruments.
Some machines are computers.

Conclusions:

- I. All instruments are computers.
II. Some machines are instruments.
III. Some instruments are machines.

- Ans 1. All the conclusions follow.
 2. Only conclusions I and II follow.
 3. Only conclusions II and III follow.
 4. Only conclusions I and III follow.

Question ID : 98958010154
Status : Answered
Chosen Option : 3

Q.2 Three of the following four number-pairs are alike in a certain way and one is different. Find the odd one out.
7

- Ans 1. 56 : 75
 2. 36 : 63
 3. 24 : 48
 4. 48 : 84

Question ID : 98958010163
Status : Answered
Chosen Option : 1

Q.2 Three of the following four number-pairs are alike in a certain way and one is different. Find the odd one out.
8

- Ans 1. 13 : 29
 2. 9 : 17

- 3. 7 : 11
- 4. 11 : 25

Question ID : 98958010162
 Status : Answered
 Chosen Option : 1

Q.2 In a code language, BACHELOR is written as SNMDIBBA. How will COHESION be written as in that language?
 9

- Ans**
- 1. ONIFTJBP
 - 2. ONJRFGPB
 - 3. NPHTDIND
 - 4. BPJTFINO

Question ID : 98958010151
 Status : Answered
 Chosen Option : 4

Q.3 Select the figure that will come next in the following series.
 0



- Ans**
- 1.
 - 2.
 - 3.
 - 4.

Question ID : 98958010172
 Status : Answered
 Chosen Option : 2

Q.3 Rakesh starts walking from his house and then takes two left turns and one right turn to reach the market. If he is facing north on reaching the market, in which direction was Rakesh facing when he started from his house?
 1

- Ans**
- 1. North
 - 2. South
 - 3. East
 - 4. West

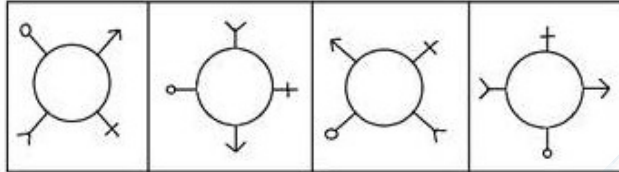
Question ID : 98958010181
 Status : Answered
 Chosen Option : 3

Q.3 Three of the following four words are alike in a certain way and one is different. Find the odd one out.
 2

- Ans
- 1. Venus
 - 2. Mercury
 - 3. Mars
 - 4. Moon

Question ID : 98958010142
 Status : Answered
 Chosen Option : 4

Q.3 Select the figure that will come next in the following series.



- Ans
- 1.
 - 2.
 - 3.
 - 4.

Question ID : 98958010173
 Status : Answered
 Chosen Option : 3

Q.3 Two statements are given, followed by three conclusions numbered I, II and III. Assuming the statements to be true, even if they seem to be at variance with commonly known facts, decide which of the conclusions logically follow(s) from the statements.

Statements:
 Some rivers are brooks.
 No brook is a stream.

- Conclusions:**
- I. No stream is a brook.
 - II. Some streams are rivers.
 - III. Some brooks are rivers.

- Ans
- 1. Only conclusions I and III follow.
 - 2. Only conclusions I and II follow.

3. Only conclusions II and III follow.

4. Only conclusion I follows.

Question ID : 98958010155

Status : Answered

Chosen Option : 3

Q.3
5 Select the set of numbers that is similar to the following set.

{10, 19, 32}

Ans 1. {5, 14, 19}

2. {12, 25, 49}

3. {3, 7, 10}

4. {7, 13, 23}

Question ID : 98958010167

Status : Answered

Chosen Option : 4

Q.3
6 If CAB = 13 and FEED = 41, then JADE = _____.

Ans 1. 35

2. 43

3. 41

4. 45

Question ID : 98958010152

Status : Answered

Chosen Option : 4

Q.3 Select the option that is related to the third number in the same way as the second number is related to the first number.

7

24 : 13 :: 38 : _____

Ans 1. 23

2. 17

3. 20

4. 25

Question ID : 98958010160

Status : Answered

Chosen Option : 3

Q.3 Three of the following four number-pairs are alike in a certain way and one is different. Find the odd one out.

8

Ans 1. 345 : 678

2. 123 : 456

3. 234 : 567

✓ 4. 456 : 798

Question ID : 98958010164
Status : Answered
Chosen Option : 4

Q.3 Three of the following four number-pairs are alike in a certain way and one is different. Find the odd one out.

9

- Ans
- ✗ 1. 49 : 82
 - ✓ 2. 36 : 63
 - ✗ 3. 25 : 50
 - ✗ 4. 9 : 26

Question ID : 98958010165
Status : Answered
Chosen Option : 3

Q.4 Which of the following interchanges of signs and numbers would make the given equation correct?

0

$$12 \div 4 + 2 - 6 \times 3 = 3 + 12 + 6 \times 2 - 4$$

- Ans
- ✗ 1. \times and $-$, 4 and 6
 - ✓ 2. \div and $+$, 6 and 4
 - ✗ 3. \times and \div , 4 and 6
 - ✗ 4. $-$ and $+$, 6 and 4

Question ID : 98958010170
Status : Answered
Chosen Option : 2

Q.4 Select the set of numbers that is similar to the following set.

1

{9, 16, 23}

- Ans
- ✗ 1. {16, 25, 32}
 - ✓ 2. {15, 24, 33}
 - ✗ 3. {7, 15, 25}
 - ✗ 4. {4, 9, 16}

Question ID : 98958010166
Status : Answered
Chosen Option : 2

Q.4 Which two signs should be interchanged to make the following equation correct?

2

$$18 + 12 \times 8 - 6 \div 3 = 9$$

- Ans
- ✗ 1. $+$ and \times
 - ✗ 2. $-$ and \times
 - ✗ 3. \times and \div

✓ 4. ÷ and +

Question ID : 98958010168
Status : Answered
Chosen Option : 2

Q.4 Select the word pair in which the two words are related in the same way as are the two words in the given word-pair.

3

Small : Dimension

Ans ✗ 1. Heat : Temperature

✓ 2. Heavy : Weight

✗ 3. Triangle : Area

✗ 4. Cold : Winter

Question ID : 98958010147
Status : Answered
Chosen Option : 1

Q.4 Three of the following four words are alike in a certain way and one is different. Find the odd one out.

4

Ans ✗ 1. Rhombus

✗ 2. Hexagon

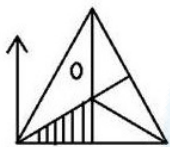
✗ 3. Parallelogram

✓ 4. Ellipse

Question ID : 98958010143
Status : Answered
Chosen Option : 4

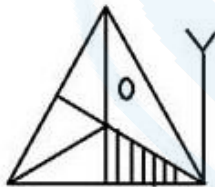
Q.4 Select the correct mirror image of the given figure when the mirror is placed on the right of the figure.

5

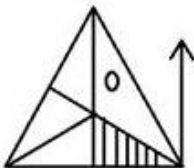


Ans

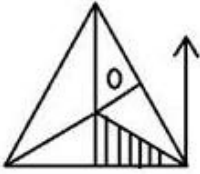
✗ 1.



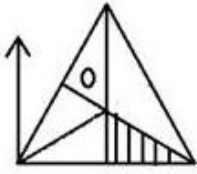
✓ 2.



3.



4.



Question ID : 98958010178

Status : Answered

Chosen Option : 3

Q.4 Select the number-pair in which the two numbers are related in the same way as are the two numbers in the given pair.

6

65 : 126

Ans 1. 37 : 50

2. 2 : 10

3. 9 : 28

4. 26 : 65

Question ID : 98958010161

Status : Answered

Chosen Option : 4

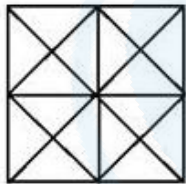
Q.4 Select the option in which the given figure is embedded.

7



Ans

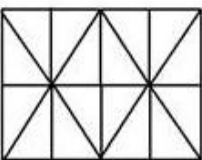
1.

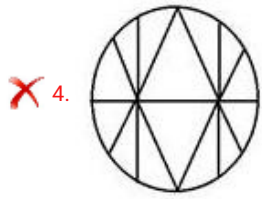


2.



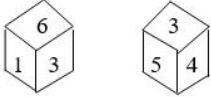
3.





Question ID : 98958010177
 Status : Answered
 Chosen Option : 3

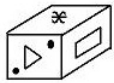
Q.4 Two positions of the same dice are given. Which number will be at the bottom if '4' is at the top?
 8



- Ans
- 1. 1
 - 2. 3
 - 3. 2
 - 4. 6

Question ID : 98958010175
 Status : Answered
 Chosen Option : 1

Q.4 Select the correct mirror image of the given figure when the mirror is placed on the right of the figure
 9



- Ans
- 1.
 - 2.
 - 3.
 - 4.

Question ID : 98958010179
 Status : Answered
 Chosen Option : 3

Q.5 Select the option that is related to the third term in the same way as the second term is related to the first term.
 0

HKNQ : JIPO :: DGJM : _____

- Ans
- 1. EELK
 - 2. FEJK
 - 3. FENO
 - 4. FELK

Question ID : 98958010148
Status : Answered
Chosen Option : 4

Q.5 _____ is a support scheme of Odisha whose primary targets are small farmers, cultivators and landless agricultural labourers.

- Ans
- 1. Aahar Yojana (AY)
 - 2. Asha Assistance for Livelihood and Income Augmentation (AALIA)
 - 3. Krushak Assistance for Livelihood and Income Augmentation (KALIA)
 - 4. Khushi Scheme

Question ID : 98958010256
Status : Answered
Chosen Option : 1

Q.5 _____ are called suicidal bags of the cell.

- Ans
- 1. Golgi Apparatus
 - 2. Lysosomes
 - 3. Ribosomes
 - 4. Mitochondria

Question ID : 98958010270
Status : Answered
Chosen Option : 2

Q.5 The _____ in Kanyakumari was awarded the 'International Gandhi Peace Prize (2015)' for its contribution to rural development, education and development of natural resources.

- Ans
- 1. Vivekananda Kendra
 - 2. Saanjh Kendra
 - 3. Akshaya Kendra
 - 4. Sewa Kendra

Question ID : 98958010237
Status : Answered
Chosen Option : 4

Q.5 Prior to September 2018, _____ was the sole state in India without a functional airport.

- Ans
- 1. Mizoram
 - 2. Assam

3. Nagaland

4. Sikkim

Question ID : 98958010278
Status : Answered
Chosen Option : 1

Q.5 In January 2019, the Cabinet Committee on Economic Affairs gave its approval for the capacity expansion project of
5 _____ Refinery from 3 MMTPA (million metric tonne per annum) to 9 MMTPA.

Ans 1. Numaligarh

2. Essar

3. Barauni

4. Mathura

Question ID : 98958010246
Status : Answered
Chosen Option : 1

Q.5 The Government of _____ has decided to ban the production, sale and use of single-use plastic products from 1 March
6 2019.

Ans 1. Delhi

2. Maharashtra

3. Puducherry

4. Goa

Question ID : 98958010241
Status : Answered
Chosen Option : 2

Q.5 In August 2018, India won four bronze medals in the Wushu (Chinese Kung Fu) sporting event at _____ held in
7 Indonesia.

Ans 1. FIFA Confederations Cup

2. UEFA Champions League 2018

3. Winter Olympics 2018

4. Jakarta-Palembang 2018 Asian Games

Question ID : 98958010258
Status : Answered
Chosen Option : 4

Q.5 _____ is the first greenfield airport to be constructed in the northeastern region of India.
8

Ans 1. Lengpui

2. Pakyong

3. Bagdogra International

4. Paro

Question ID : 98958010245

Status : **Answered**
Chosen Option : 4

Q.5 In January 2019, President Ram Nath Kovind appointed senior advocates Sanjay Jain and KM Nataraj as _____ of India.

- Ans**
- 1. Secretary Generals
 - 2. Director Generals
 - 3. Auditor Generals
 - 4. Additional Solicitor Generals

Question ID : **98958010243**
Status : **Answered**
Chosen Option : 1

Q.6 The Tyndal Effect is due to:

- Ans**
- 1. Scattering of Light
 - 2. Dispersion of Light
 - 3. Refraction of Light
 - 4. Reflection of Light

Question ID : **98958010248**
Status : **Answered**
Chosen Option : 1

Q.6 Which of the following is a dance form from Karnataka?

- Ans**
- 1. Rouf
 - 2. Karma
 - 3. Lava
 - 4. Bayalata

Question ID : **98958010281**
Status : **Answered**
Chosen Option : 4

Q.6 In January 2019, the Ministry of _____ drafted National Action Plan for Drug Demand Reduction (2018-2023).

- Ans**
- 1. Social Justice and Empowerment
 - 2. Planning and Development
 - 3. Health
 - 4. Education

Question ID : **98958010257**
Status : **Answered**
Chosen Option : 1

Q.6 According to the new travel norms set by The Union Home Ministry, Indians aged _____ can travel to Nepal and Bhutan by producing Aadhaar as Identity proof.

- Ans
- 1. under 15 and over 65 years
 - 2. under 10 and over 60 years
 - 3. under 25 and over 55 years
 - 4. under 12 and over 55 years

Question ID : 98958010262
Status : Answered
Chosen Option : 1

Q.6 In September 2018, _____ won the Duleep Trophy by defeating defending champion India Red at NPR College Ground in Dindigul, Tamil Nadu.

- Ans
- 1. India Green
 - 2. India Black
 - 3. India Yellow
 - 4. India Blue

Question ID : 98958010254
Status : Answered
Chosen Option : 3

Q.6 Where were the first headquarters of the Arya Samaj?

- Ans
- 1. Nasik
 - 2. Bombay
 - 3. Calcutta
 - 4. Lahore

Question ID : 98958010255
Status : Answered
Chosen Option : 1

Q.6 The Khalji or Khilji dynasty, founded by Jalal-ud-din Firuz Khalji ruled large parts of the Indian subcontinent between _____.

- Ans
- 1. 1320 and 1377
 - 2. 1190 and 1220
 - 3. 1290 and 1320
 - 4. 1220 and 1290

Question ID : 98958010242
Status : Answered
Chosen Option : 4

Q.6 _____, a one-hour slot on Doordarshan National channel, is an initiative by the Department of Science and Technology along with Doordarshan, Prasar Bharati.

- Ans
- 1. National Science
 - 2. Science Live
 - 3. Indian Science

✓ 4. DD Science

Question ID : 98958010284
Status : Answered
Chosen Option : 3

Q.6
8 The monuments of Khajuraho in the state of Madhya Pradesh are fine denotations of the _____ dynasty.

- Ans
- ✗ 1. Chola
 - ✗ 2. Chalukya
 - ✓ 3. Chandela
 - ✗ 4. Pallava

Question ID : 98958010263
Status : Answered
Chosen Option : 2

Q.6
9 Identify the disease caused by the deficiency of Vitamin B1.

- Ans
- ✗ 1. Ariboflavinosis
 - ✓ 2. Beriberi
 - ✗ 3. Rickets
 - ✗ 4. Glossitis

Question ID : 98958010252
Status : Answered
Chosen Option : 2

Q.7
0 In January 2019, Prime Minister Narendra Modi was awarded the first ever _____ for his outstanding leadership of the nation.

- Ans
- ✗ 1. Padma Bhushan
 - ✗ 2. Champions of the Earth Award
 - ✓ 3. Philip Kotler Presidential Award
 - ✗ 4. Padma Shri

Question ID : 98958010240
Status : Answered
Chosen Option : 1

Q.7
1 'Red Tape' in an economy refers to:

- Ans
- ✗ 1. Rigid excise rules
 - ✗ 2. High Risk Market
 - ✓ 3. Rigid conformity to formal rules
 - ✗ 4. Low Risk Market

Question ID : 98958010276
Status : Answered
Chosen Option : 1

Q.7
2 The Mahabodhi Temple in _____ is the pilgrimage site of the Buddhists.

- Ans
- 1. Bihar
 - 2. Madhya Pradesh
 - 3. Odisha
 - 4. Assam

Question ID : 98958010267
Status : Answered
Chosen Option : 3

Q.7
3 _____ won at the Australian Open Women's Double Championship in January 2019.

- Ans
- 1. Barbora Krejckikova and Katerina Siniakova
 - 2. Zhang Shuai and Samantha Stosur
 - 3. Timea Babos and Barbora Krejckikova
 - 4. Timea Babos and Kristina Mladenovic

Question ID : 98958010268
Status : Answered
Chosen Option : 3

Q.7
4 Indian mountaineer _____ is the first woman in the world to climb Mount Everest twice and the first woman to successfully climb Mt. Everest from Kangshung Face.

- Ans
- 1. Malavath Purna
 - 2. Santosh Yadav
 - 3. Premlata Agrawal
 - 4. Arunima Sinha

Question ID : 98958010282
Status : Answered
Chosen Option : 4

Q.7
5 Which element is used to make the coils used in water heaters?

- Ans
- 1. Copper
 - 2. Nichrome
 - 3. A mixture of aluminium and copper
 - 4. A mixture of iron and steel

Question ID : 98958010253
Status : Answered
Chosen Option : 3

Q.7
6 According to data released by Central Statistics Office (CSO) in December 2018, factory output measured in terms of Index of Industrial Production (IIP) grew _____ in October 2018 as against 4.5% in September 2018.

- Ans
- 1. 7.5%

2. 6.7%

3. 6 %

4. 8.1%

Question ID : 98958010280

Status : Answered

Chosen Option : 2

Q.7
7 Enzymes are _____ that act as catalysts within the living cells.

Ans 1. calcium

2. carbohydrates

3. vitamins

4. proteins

Question ID : 98958010259

Status : Answered

Chosen Option : 2

Q.7
8 In humans, fertilisation usually takes place in the _____.

Ans 1. Ovary

2. Vagina

3. Fallopian tube

4. Uterus

Question ID : 98958010271

Status : Answered

Chosen Option : 3

Q.7
9 _____ is an autonomous organisation under the Department of Science and Technology of the Government of India.

Ans 1. Prayog Prasar (PP)

2. Arogya Prasar (AP)

3. Vigyan Prasar (VP)

4. Vidhan Prasar (VP)

Question ID : 98958010274

Status : Answered

Chosen Option : 1

Q.8
0 The Judges of the Supreme Court are appointed by the President under Article _____ of the Constitution of India.

Ans 1. 217

2. 124(2)

3. 224(1)

4. 21

Question ID : 98958010238

Status : Answered

Chosen Option : 2

Q.8 The Swadesh Darshan Scheme aims to promote international and domestic tourism across India. Which of the following is NOT one of the 13 thematic circuits under the scheme of the Ministry of Tourism?

- Ans
- 1. Tribal Circuit
 - 2. Ramayana Circuit
 - 3. Desert Circuit
 - 4. Mahabharata Circuit

Question ID : 98958010277

Status : Answered

Chosen Option : 3

Q.8 The Union Government bestows national sports awards every year to recognize and reward excellence in sports in India. Which of the following is NOT one of these awards?

- Ans
- 1. Arjuna Award
 - 2. Khelo India Award
 - 3. Dhyan Chand Award
 - 4. Dronacharya Award

Question ID : 98958010251

Status : Answered

Chosen Option : 3

Q.8 Which MP from Baramati (Maharashtra) was honoured with the 'Sansad Ratna Award' in January 2019 in Tamil Nadu?

- Ans
- 1. Supriya Sule
 - 2. Meenakshi Lekhi
 - 3. Mamta Sanghamita
 - 4. Butta Renuka

Question ID : 98958010250

Status : Answered

Chosen Option : 2

Q.8 'The Hindu Young World-Good books Award for Best Book 2018: Non-Fiction' was awarded to _____, author of the book 'A Brush with Indian Art' at the Hindu Lit for Life 2019.

- Ans
- 1. Vinayak Verma
 - 2. Venita Coelho
 - 3. Rajiv Elipe
 - 4. Mamta Nainy

Question ID : 98958010236

Status : Answered

Chosen Option : 1

Q.8
5 The Collegium for the appointment of Judges of Supreme Court is headed by the _____ of India.

- Ans
- 1. President
 - 2. Prime Minister
 - 3. Parliament
 - 4. Chief Justice

Question ID : 98958010244
Status : Answered
Chosen Option : 1

Q.8
6 _____ located in Thekkady, Kerala is the perfect example of nature's bounty with great scenic beauty and rich biodiversity.

- Ans
- 1. Wild Ass Sanctuary
 - 2. Periyar Wildlife Sanctuary
 - 3. Pakhal Sanctuary
 - 4. Dachigam National Park

Question ID : 98958010264
Status : Answered
Chosen Option : 4

Q.8
7 _____, a Moroccan traveller who is known for his extensive travels, came to India during the regime of Muhammad bin Tughlaq.

- Ans
- 1. Nicolo
 - 2. Ralph Fisch
 - 3. Ibn Battuta
 - 4. Tsang Hi

Question ID : 98958010283
Status : Answered
Chosen Option : 3

Q.8
8 The _____ is an ancient Indian treatise on statecraft, economic policy and military strategy that was written in Sanskrit. Kautilya is traditionally credited as the author of the text.

- Ans
- 1. Rigveda
 - 2. Puranas
 - 3. Charaka Samhita
 - 4. Arthashastra

Question ID : 98958010266
Status : Answered
Chosen Option : 1

Q.8
9 Akbar commissioned _____ to chronicle the story of his father Humayun, 'Humayun-nama'.

- Ans
- 1. Jagat Gosain Begum
 - 2. Mariam-uz-Zamani

3. Jodha Begum

4. Gulbadan Begum

Question ID : 98958010249

Status : Answered

Chosen Option : 2

Q.9 In January 2019, Chief Minister of Tripura, Biplab Kumar Deb unveiled the official logo of the state's tea which features _____, the iconic landmark of Tripura.

Ans 1. Devtamura

2. Pilak

3. Ujjayanta palace

4. Neermahal palace

Question ID : 98958010261

Status : Answered

Chosen Option : 4

Q.9 The city of victory, Fatehpur Sikri in _____ was built during the glorious reign of the Mughals.

Ans 1. Jaipur

2. Bidar

3. Aligarh

4. Agra

Question ID : 98958010273

Status : Answered

Chosen Option : 1

Q.9 Which of the following is the universal recipient blood group?

Ans 1. O

2. B

3. A

4. AB

Question ID : 98958010275

Status : Answered

Chosen Option : 4

Q.9 The _____ in the human body controls every activity that you perform.

Ans 1. respiratory system

2. nervous system

3. digestive system

4. reproductive system

Question ID : 98958010272

Status : **Answered**
Chosen Option : 2

Q.9 The Union Defence Minister _____ inaugurated the Tamil Nadu Defence Industrial Corridor on 20 January 2019.
4

- Ans
- 1. Rajnath Singh
 - 2. Radha Mohan Singh
 - 3. Nitin Gadkari
 - 4. Nirmala Sitharaman

Question ID : **98958010260**
Status : **Answered**
Chosen Option : 1

Q.9 Standing committee on finance headed by _____ was selected for outstanding performance among the Parliamentary Standing Committees for the Sansad Ratna Awards in Chennai.
5

- Ans
- 1. Dhananjay Mahadik
 - 2. Nishikant Dubey
 - 3. M Veerappa Moily
 - 4. NK Premachandran

Question ID : **98958010269**
Status : **Answered**
Chosen Option : 4

Q.9 Which of the following best describe the nature of Indian economy?
6

- Ans
- 1. Mixed Economy
 - 2. Socialist Economy
 - 3. Communist Economy
 - 4. Capitalistic Economy

Question ID : **98958010285**
Status : **Answered**
Chosen Option : 4

Q.9 The 'Vision 2040' document, released at the Global Aviation Summit 2019, estimates that India will need _____ airports.
7

- Ans
- 1. 250
 - 2. 300
 - 3. 150
 - 4. 200

Question ID : **98958010279**
Status : **Answered**
Chosen Option : 1

Q.9 A January 2019 study by the scientists from National Chemical Laboratory, Pune suggested measuring levels of free albumin and albumin attached to glucose molecules in the blood as a diagnostic test for _____.
8

- Ans 1. Diabetes
 2. Thyroid
 3. Tuberculosis
 4. Piles

Question ID : 98958010239
Status : Answered
Chosen Option : 1

Q.9 Megasthenes, a Greek historian visited India in the reign of _____ in the 4th century B.C.

- Ans 1. Ashoka
 2. Bindusara
 3. Chandragupta Maurya
 4. Alexander

Question ID : 98958010265
Status : Answered
Chosen Option : 3

Q.1 Which of the following is a dance form from Rajasthan?

- Ans 1. Jhulan
 2. Kumi
 3. Dappu
 4. Maruni

Question ID : 98958010247
Status : Answered
Chosen Option : 1

Q.1 Two numbers are in the ratio 4 : 7. If their HCF is 26, then the sum of these two numbers will be:

- Ans 1. 312
 2. 364
 3. 338
 4. 286

Question ID : 98958010338
Status : Answered
Chosen Option : 2

Q.1 A shopkeeper sold two articles for ₹ 9831 each. On one he gained 13% and on the other, he lost 13%. What is the overall percentage gain or loss?

- Ans 1. 6.5% loss
 2. 6.5% gain
 3. 1.69% gain

✓ 4. 1.69% loss

Question ID : 98958010350
Status : Answered
Chosen Option : 3

Q.1 A boat can go 30 km downstream and 24 km upstream in 2 hours 27 minutes. Also, it can go 10 km downstream and 4 km upstream in 37 minutes. What is the speed of the boat upstream (in km/h)?

- Ans
- ✗ 1. 24
 - ✗ 2. 18
 - ✗ 3. 22
 - ✓ 4. 20

Question ID : 98958010360
Status : Answered
Chosen Option : 3

Q.1 A sphere of radius 5 cm is melted and recast into spheres of radius 2 cm each. How many such spheres can be made?

- Ans
- ✗ 1. 17
 - ✗ 2. 18
 - ✗ 3. 16
 - ✓ 4. 15

Question ID : 98958010364
Status : Answered
Chosen Option : 3

Q.1 The square root of which of the following is a rational number?

- Ans
- ✗ 1. 5823.82
 - ✗ 2. 22504.9
 - ✗ 3. 2460.14
 - ✓ 4. 1489.96

Question ID : 98958010336
Status : Answered
Chosen Option : 1

Q.1 The income of A is 24% more than the income of B. By what percent is the income of B less than the income of A?

- Ans
- ✗ 1. $\frac{150}{7}\%$
 - ✗ 2. $\frac{600}{29}\%$
 - ✗ 3. $\frac{500}{31}\%$
 - ✓ 4. $\frac{600}{31}\%$

Question ID : 98958010347
Status : Answered

Chosen Option : 1

Q.1 What is the sum of the digits of the least number, which when divided by 12, 16 and 54, leaves the same remainder 7 in each case, and is also completely divisible by 13?

- Ans**
- 1. 36
 - 2. 16
 - 3. 9
 - 4. 27

Question ID : **98958010339**
 Status : **Answered**
 Chosen Option : **3**

Q.1 A sum of ₹ 18,000 is invested for 16 months at 8% per annum compounded half-yearly. What is the percentage gain at the end of 16 months, to the nearest whole number?

- Ans**
- 1. 9%
 - 2. 11%
 - 3. 10%
 - 4. 12%

Question ID : **98958010354**
 Status : **Answered**
 Chosen Option : **2**

Q.1 The radius of a cylinder is increased by 120% and its height is decreased by 40%. What is the percentage increase in its volume?

- Ans**
- 1. 180.6%
 - 2. 212.8%
 - 3. 190.4%
 - 4. 175.4%

Question ID : **98958010365**
 Status : **Answered**
 Chosen Option : **3**

Q.1 The value of $\frac{\sin 30^\circ - \cos 60^\circ + \cot^2 45^\circ}{\cos 30^\circ - \tan 45^\circ + \sin 90^\circ}$ is equal to:

- Ans**
- 1. $\frac{2\sqrt{3}}{3}$
 - 2. $\frac{\sqrt{3}}{2}$
 - 3. $\frac{3}{2}$
 - 4. $\frac{\sqrt{3}}{4}$

Question ID : **98958010374**
 Status : **Answered**
 Chosen Option : **2**

Q.1

11 PA and PB are two tangents from a point P outside a circle with centre O. If A and B are points on the circle such that $\angle APB = 80^\circ$, then $\angle OAB$ is equal to:

- Ans
- 1. 55°
 - 2. 45°
 - 3. 50°
 - 4. 40°

Question ID : 98958010370
 Status : Answered
 Chosen Option : 1

Q.1
 12 If $(2x + 3)^3 + (x - 8)^3 + (x + 13)^3 = (2x + 3)(3x - 24)(x + 13)$, then what is the value of x ?

- Ans
- 1. -1.5
 - 2. -2.5
 - 3. -2
 - 4. -1

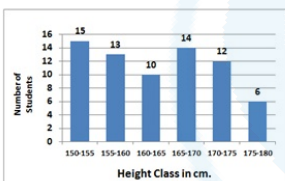
Question ID : 98958010368
 Status : Answered
 Chosen Option : 4

Q.1
 13 If the seven digit number $74x29y6$ is divisible by 72, then what will be the value of $(2x + 3y)$?

- Ans
- 1. 20
 - 2. 21
 - 3. 19
 - 4. 16

Question ID : 98958010337
 Status : Answered
 Chosen Option : 1

Q.1
 14



In the given histogram, the number of students whose height is in the class interval 175 - 180 is what percent less than the number of students whose height is in the class interval 160 - 165?

- Ans
- 1. $\frac{50}{3}\%$
 - 2. 40%
 - 3. 60%
 - 4. $\frac{200}{3}\%$

Question ID : 98958010385
 Status : Answered
 Chosen Option : 2

Q.1
15 $\frac{5.75 \times 5.75 \times 5.75 + 3.25 \times 3.25 \times 3.25}{57.5 \times 57.5 + 32.5 \times 32.5 - 57.5 \times 32.5}$ is equal to:

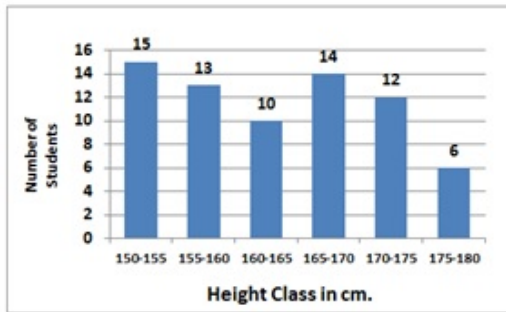
- Ans
- 1. 0.009
 - 2. 0.0009
 - 3. 0.9
 - 4. 0.09

Question ID : 98958010342

Status : Answered

Chosen Option : 4

Q.1
16



In the given histogram, which class is the median class?

- Ans
- 1. 150 - 155
 - 2. 155 - 160
 - 3. 160 - 165
 - 4. 165 - 175

Question ID : 98958010384

Status : Answered

Chosen Option : 2

Q.1
17 Two pipes A and B can fill an empty tank in 8 hours and 12 hours respectively. They are opened alternately for 1 hour each, starting with pipe A first. In how many hours will the empty tank be filled?

- Ans
- 1. $9\frac{1}{3}$
 - 2. 9
 - 3. $9\frac{1}{2}$
 - 4. $9\frac{1}{4}$

Question ID : 98958010358

Status : Answered

Chosen Option : 4

Q.1
18 $5\frac{5}{6} + \left[2\frac{2}{3} - \left\{ 3\frac{3}{4} \left(3\frac{4}{5} \div 9\frac{1}{2} \right) \right\} \right]$ is equal to:

- Ans
- 1. $\frac{44}{7}$
 - 2. 7

3. $\frac{43}{6}$

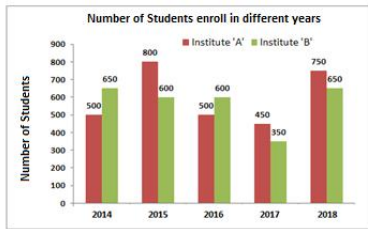
4. $\frac{22}{3}$

Question ID : 98958010341

Status : Answered

Chosen Option : 1

Q.1
19



In the given bar graph, the percentage decrease in the number of students in Institute A in 2016 is what percent of students in 2015.

Ans 1. 37.5%

2. 35.5%

3. 40.5%

4. 39.5%

Question ID : 98958010378

Status : Answered

Chosen Option : 3

Q.1 In an examination, 48% of candidates passed in science and 56% failed in mathematics. If 32% failed in both subjects, then what percent passed in both subjects?

20

Ans 1. 24%

2. 32%

3. 28%

4. 22%

Question ID : 98958010349

Status : Answered

Chosen Option : 2

Q.1 ABCD is a cyclic quadrilateral such that AB is the diameter of the circle circumscribing it and $\angle ADC = 145^\circ$. What is the measure of $\angle BAC$?

21

Ans 1. 35°

2. 50°

3. 40°

4. 55°

Question ID : 98958010369

Status : Answered

Chosen Option : 1

Q.1 If $a^3 + b^3 = 5824$ and $a + b = 28$, then $(a - b)^2 + ab$ is equal to:

22

Ans 1. 208

2. 152

3. 180

4. 236

Question ID : 98958010367

Status : Answered

Chosen Option : 1

Q.1 From the top of a 12 m high building, the angle of elevation of the top of a tower is 60° and the angle of depression of
23 the foot of the tower is θ , such that $\tan \theta = \frac{3}{4}$. What is the height of the tower ($\sqrt{3} = 1.73$)?

Ans 1. 41.41 m

2. 36.22 m

3. 39.68 m

4. 37.95 m

Question ID : 98958010376

Status : Answered

Chosen Option : 3

Q.1 Pipes A and B can fill a tank in 6 hours and 8 hours respectively and pipe C can empty the full tank in 12 hours. All
24 three pipes are opened together, but pipe A is closed after 3 hours. In how many hours will the remaining part of the tank be filled?

Ans 1. 9

2. 12

3. 11

4. 10

Question ID : 98958010357

Status : Answered

Chosen Option : 3

Q.1 The average of 18 numbers is 52. The average of the first 8 numbers is 62 and the average of the next 7 numbers is 45.
25 If the 16th number is 6 less than the 17th number and the 17th number is one more than the 18th number, then what is the average of the 16th and 18th numbers?

Ans 1. 39

2. 39.5

3. 40.5

4. 40

Question ID : 98958010344

Status : Answered

Chosen Option : 4

Q.1 One side of a rhombus is 13 cm and one of its diagonals is 24 cm. What is the area of the rhombus?
26

Ans 1. 312 cm^2

2. 156 cm^2

3. 120 cm^2

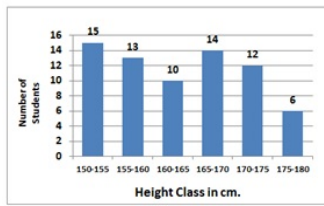
4. 130 cm^2

Question ID : 98958010361

Status : Answered

Chosen Option : 1

Q.1
27



In the given histogram, what is the percentage of students whose height is in the class interval 165 - 170?

- Ans
- 1. 25%
 - 2. 20%
 - 3. 18%
 - 4. 15%

Question ID : 98958010383

Status : Answered

Chosen Option : 2

Q.1
28 If $x - \frac{1}{x} = 6$, then $x^3 - \frac{1}{x^3}$ is equal to:

- Ans
- 1. 216
 - 2. 176
 - 3. 234
 - 4. 198

Question ID : 98958010366

Status : Answered

Chosen Option : 1

Q.1
29 The value of $3\frac{1}{5} - [2\frac{1}{2} - \{\frac{5}{6} - (\frac{2}{5} + \frac{3}{10} - \frac{4}{15})\}]$ is:

- Ans
- 1. $\frac{6}{5}$
 - 2. $\frac{9}{10}$
 - 3. $\frac{11}{10}$
 - 4. $\frac{13}{5}$

Question ID : 98958010340

Status : Answered

Chosen Option : 4

Q.1
30 In a class of 45 students, 40% are girls and the remaining are boys. The average marks of the girls is 64 and that of the boys is 60. What is the average marks of the whole class?

- Ans
- 1. 62.4
 - 2. 61.8

✓ 3. 61.6

✗ 4. 62.9

Question ID : 98958010343

Status : Answered

Chosen Option : 2

Q.1 31 The sides of a triangle are 8 cm, 15 cm, and 17 cm respectively. At each of its vertices, circles of radius 3.5 cm are drawn. What is the area of the triangle excluding the portion covered by the sectors of the circles ($\pi = \frac{22}{7}$)?

Ans ✗ 1. 23.5 cm²

✗ 2. 21.5 cm²

✗ 3. 47 cm²

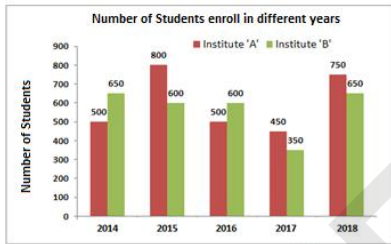
✓ 4. 40.75 cm²

Question ID : 98958010362

Status : Answered

Chosen Option : 2

Q.1 32



In the given bar graph, what is the ratio of students of A and B in the combine strength from 2016 to 2018?

Ans ✗ 1. 19 : 20

✓ 2. 20 : 19

✗ 3. 23 : 21

✗ 4. 21 : 23

Question ID : 98958010377

Status : Answered

Chosen Option : 3

Q.1 33 Let $\Delta ABC \sim \Delta PQR$ and $\frac{ar(\Delta ABC)}{ar(\Delta PQR)} = \frac{9}{16}$. If $AB = 12$ cm, $BC = 6$ cm and $AC = 9$ cm, then PR is equal to:

Ans ✗ 1. 9 cm

✗ 2. 12 cm

✗ 3. 16 cm

✓ 4. 8 cm

Question ID : 98958010372

Status : Answered

Chosen Option : 4

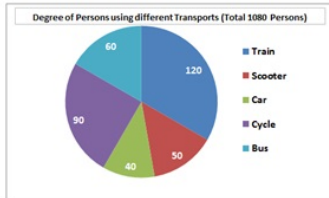
Q.1 34 A, B and C started a business by investing ₹ 55,000, ₹ 65,000 and ₹ 75,000 respectively. A is a working partner and gets 20% of the profit as working allowance and remaining is distributed in the proportion of their investment. If the money received by C is ₹ 27,000 what is the total profit?

Ans

- 1. ₹ 85,500
- 2. ₹ 87,750
- 3. ₹ 76,850
- 4. ₹ 70,200

Question ID : 98958010352
 Status : Answered
 Chosen Option : 1

Q.1
35

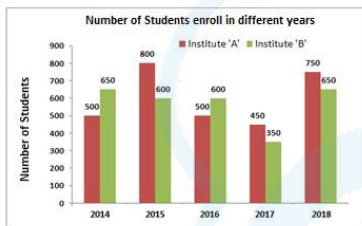


In the given pie-chart, the number of persons using a car is what percentage of persons using a scooter?

- Ans
- 1. 60%
 - 2. 75%
 - 3. 80%
 - 4. 50%

Question ID : 98958010380
 Status : Answered
 Chosen Option : 2

Q.1
36



In the given bar graph, the number of students enrolled in institute B in the year 2016 is what percentage of students enrolled in institute A in 2016?

- Ans
- 1. 120%
 - 2. $\frac{250}{3}$ %
 - 3. 85%
 - 4. $\frac{325}{6}$ %

Question ID : 98958010379
 Status : Answered
 Chosen Option : 1

Q.1 36 persons working 8 hours a day can do 3 units of work in 12 days. How many persons are required to do 5 units of that work in 16 days, if they work for 6 hours a day?

- 37
- Ans
- 1. 50
 - 2. 55
 - 3. 60

4. 45

Question ID : 98958010355
Status : Answered
Chosen Option : 2

Q.1 38 If a train runs with the speed of 48 km/h, it reaches its destination late by 12 minutes. However, if its speed in 64 km/h it is late by 3 minutes only. The right time for the train to cover its journey (in minutes) is:

- Ans
- 1. 24
 - 2. 18
 - 3. 20
 - 4. 22

Question ID : 98958010359
Status : Answered
Chosen Option : 2

Q.1 39 The successive discount of 25%, 20% and 10% is equivalent to a single discount of:

- Ans
- 1. 46%
 - 2. 48%
 - 3. 54%
 - 4. 44%

Question ID : 98958010346
Status : Answered
Chosen Option : 4

Q.1 40 A sum of ₹ 12,800 is invested partly at 15% per annum and the remaining at 12% per annum simple interest. If the total interest at the end of 3 years is ₹ 5,085, then how much money was invested at 15% per annum?

- Ans
- 1. ₹ 5,200
 - 2. ₹ 7,500
 - 3. ₹ 5,800
 - 4. ₹ 5,300

Question ID : 98958010353
Status : Answered
Chosen Option : 3

Q.1 41 If $\tan 3x = \cot (30^\circ + 2x)$, then what is the value of x ?

- Ans
- 1. 18°
 - 2. 12°
 - 3. 10°
 - 4. 15°

Question ID : 98958010373
Status : Answered
Chosen Option : 3

Q.1 The efficiency of A, B and C are in the ratio 5 : 6 : 9. Working together, they can complete a work in 18 days. In how many days can B alone complete 25% of that work?

- Ans
- 1. 18
 - 2. 10
 - 3. 15
 - 4. 16

Question ID : 98958010356
Status : Answered
Chosen Option : 3

Q.1 What is the ratio of the mean proportional between 8.1 and 3.6 and the third proportional of 2 and 3?

- Ans
- 1. 5 : 6
 - 2. 5 : 4
 - 3. 4 : 5
 - 4. 6 : 5

Question ID : 98958010351
Status : Answered
Chosen Option : 3

Q.1 A shopkeeper marks his good at a price such that after giving a discount of 25%, he gains 20%. If the marked price of the article is ₹ 736, what is the cost price of the article?

- Ans
- 1. ₹ 450
 - 2. ₹ 455
 - 3. ₹ 460
 - 4. ₹ 440

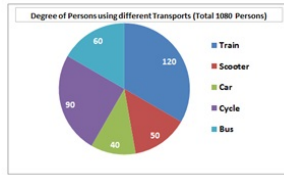
Question ID : 98958010345
Status : Answered
Chosen Option : 3

Q.1 The price of sugar is decreased by 10%. By what percent can a person increase the consumption so that there is no change in the expenditure?

- Ans
- 1. $\frac{100}{11}$ %
 - 2. $\frac{109}{11}$ %
 - 3. $\frac{100}{9}$ %
 - 4. 10%

Question ID : 98958010348
Status : Answered
Chosen Option : 1

Q.1
46



In the given pie-chart, what is the ratio of the total number of persons using train and car together to the total number of persons using other modes of transport to reach their workplace?

- Ans
- 1. 3 : 5
 - 2. 5 : 3
 - 3. 5 : 6
 - 4. 4 : 5

Question ID : 98958010382

Status : Answered

Chosen Option : 4

Q.1 In ΔABC , $\angle A = 30^\circ$. If the bisectors of the angle B and angle C meet at a point O in the interior of the triangle, then $\angle BOC$ is equal to:

- Ans
- 1. 105°
 - 2. 75°
 - 3. 90°
 - 4. 120°

Question ID : 98958010371

Status : Answered

Chosen Option : 2

Q.1 A ladder leaning against a wall makes an angle θ with the horizontal ground such that $\sin \theta = \frac{12}{13}$. If the foot of the ladder is 7.5 m from the wall, then what is the height of the point where the top of the ladder touches the wall?

- Ans
- 1. 15 m
 - 2. 8 m
 - 3. 18 m
 - 4. 12 m

Question ID : 98958010375

Status : Answered

Chosen Option : 1

Q.1 6 cubes, each of edge 4 cm, are joined end to end. What is the total surface area of the resulting cuboid?

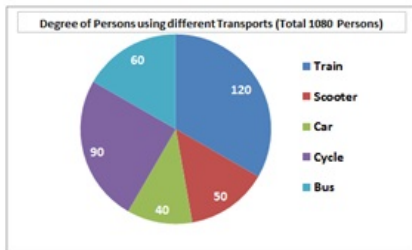
- Ans
- 1. 416 cm^2
 - 2. 496 cm^2
 - 3. 576 cm^2
 - 4. 208 cm^2

Question ID : 98958010363

Status : Answered

Chosen Option : 4

50



In the given pie-chart, how many persons are using train to reach their workplace?

- Ans
- 1. 380
 - 2. 400
 - 3. 320
 - 4. 360

Question ID : 98958010381

Status : Answered

Chosen Option : 4

Q.1 Select the word, which means the same as the group of words given.

51

to shorten a piece of writing without losing the sense

- Ans
- 1. allege
 - 2. abridge
 - 3. crop
 - 4. edit

Question ID : 98958010477

Status : Answered

Chosen Option : 1

Q.1 Select the wrongly spelt word.

52

- Ans
- 1. groggy
 - 2. gritty
 - 3. groovey
 - 4. groom

Question ID : 98958010481

Status : Answered

Chosen Option : 3

Q.1 Select the synonym of the given word.

53

COMMENDABLE

- Ans
- 1. praiseworthy
 - 2. grateful
 - 3. courteous

4. satisfying

Question ID : 98958010462
Status : Answered
Chosen Option : 3

Q.1
54 Select the synonym of the given word.

ECSTASY

- Ans 1. danger
 2. fear
 3. grief
 4. happiness

Question ID : 98958010461
Status : Answered
Chosen Option : 2

Q.1
55 Select the most appropriate word to fill in the blank.

The children had made a mess on the floor, so I asked Sana to clean _____ up.

- Ans 1. them
 2. it
 3. its
 4. they

Question ID : 98958010451
Status : Answered
Chosen Option : 2

Q.1
56 Select the most appropriate word to fill in the blank.

Next week I _____ visiting my friend and staying with him for a day.

- Ans 1. intend
 2. intended
 3. intending
 4. intends

Question ID : 98958010452
Status : Answered
Chosen Option : 4

Q.1
57 Select the word, which means the same as the group of words given.

a gigantic statue

- Ans 1. castle

- 2. colossus
- 3. column
- 4. citadel

Question ID : 98958010478
Status : Answered
Chosen Option : 2

Q.1 58 Identify the segment in the sentence, which contains the grammatical error.

He was surprised at me refusing his offer.

- Ans
- 1. He was
 - 2. at me refusing
 - 3. his offer.
 - 4. surprised

Question ID : 98958010441
Status : Answered
Chosen Option : 2

Comprehension:

In the following passage some words have been deleted. Fill in the blanks with the help of the alternatives given. Select the most appropriate option for each number.

Lord Baden Powell, the founder of Scouting was himself an army scout. During _____ (1) war in South Africa, when soldiers _____ (2) not easily available, he selected a few boys _____ (3) worked as messengers and did a wonderful _____ (4) as little scouts. Since then, the Scout Movement has _____ (5) throughout the world.

SubQuestion No : 159

Q.1 59 Select the most appropriate option to fill in blank No.1.

- Ans
- 1. a
 - 2. one
 - 3. an
 - 4. any

Question ID : 98958010454
Status : Answered
Chosen Option : 1

Comprehension:

In the following passage some words have been deleted. Fill in the blanks with the help of the alternatives given. Select the most appropriate option for each number.

Lord Baden Powell, the founder of Scouting was himself an army scout. During _____ (1) war in South Africa, when soldiers _____ (2) not easily available, he selected a few boys _____ (3) worked as messengers and did a wonderful _____ (4) as little scouts. Since then, the Scout Movement has _____ (5) throughout the world.

SubQuestion No : 160

Q.1
60 Select the most appropriate option to fill in blank
No.2.

- Ans
- 1. were
 - 2. have
 - 3. had
 - 4. are

Question ID : 98958010455
Status : Answered
Chosen Option : 1

Comprehension:

In the following passage some words have been deleted. Fill in the blanks with the help of the alternatives given. Select the most appropriate option for each number.

Lord Baden Powell, the founder of Scouting was himself an army scout. During _____ (1) war in South Africa, when soldiers _____ (2) not easily available, he selected a few boys _____ (3) worked as messengers and did a wonderful _____ (4) as little scouts. Since then, the Scout Movement has _____ (5) throughout the world.

SubQuestion No : 161

Q.1
61 Select the most appropriate option to fill in blank
No.3.

- Ans
- 1. who
 - 2. whose
 - 3. whom
 - 4. which

Question ID : 98958010456
Status : Answered
Chosen Option : 1

Comprehension:

In the following passage some words have been deleted. Fill in the blanks with the help of the alternatives given. Select the most appropriate option for each number.

Lord Baden Powell, the founder of Scouting was himself an army scout. During _____ (1) war in South Africa, when soldiers _____ (2) not easily available, he selected a few boys _____ (3) worked as messengers and did a wonderful _____ (4) as little scouts. Since then, the Scout Movement has _____ (5) throughout the world.

SubQuestion No : 162

Q.1
62 Select the most appropriate option to fill in blank
No.4.

- Ans
- 1. post
 - 2. job
 - 3. work
 - 4. thing

Question ID : 98958010457
Status : Answered
Chosen Option : 2

Comprehension:

In the following passage some words have been deleted. Fill in the blanks with the help of the alternatives given. Select the most appropriate option for each number.

Lord Baden Powell, the founder of Scouting was himself an army scout. During _____ (1) war in South Africa, when soldiers _____ (2) not easily available, he selected a few boys _____ (3) worked as messengers and did a wonderful _____ (4) as little scouts. Since then, the Scout Movement has _____ (5) throughout the world.

SubQuestion No : 163

Q.1
63 Select the most appropriate option to fill in blank
No. 5.

- Ans
- 1. scattered
 - 2. extended
 - 3. spread
 - 4. stretched

Question ID : 98958010458
Status : Answered
Chosen Option : 2

Q.1
64

Select the most appropriate word to fill in the blank.

His new job is connected _____ developing software for teaching.

- Ans
- 1. from
 - 2. by
 - 3. about
 - 4. with

Question ID : 98958010449
Status : Answered
Chosen Option : 4

Q.1
65 Select the antonym of the given word.

MOROSE

- Ans
- 1. tasteless
 - 2. gloomy
 - 3. cheerful
 - 4. sick

Question ID : 98958010467
Status : Answered
Chosen Option : 1

Q.1
66 Select the antonym of the given word.

EXTRAVAGANT

- Ans
- 1. wasteful
 - 2. resentful
 - 3. thrifty
 - 4. deficient

Question ID : 98958010468
Status : Answered
Chosen Option : 4

Comprehension:

Read the following passage and answer the questions given after it.

The ocean will not look the same color in the future.

Essentially, climate change will make the blues of the ocean bluer and the greens greener. Scientists from MIT, Boston, figured this out by creating a global model that simulates the growth of a tiny creature that lives in the oceans and affects the color we see. Their research was published in the journal Nature Communications.

The ocean looks blue or green to us because of a combination of how sunlight interacts with water molecules and with whatever else lives in that water.

The molecules in water absorb all but the blue part of the spectrum of sunlight, and the water reflects that blue color back. That's the color we see.

The water looks greener when it has more phytoplankton, tiny, microscopic organisms that, like plants, can use chlorophyll to capture mostly the blue portions of the spectrum of sunlight. They then use photosynthesis to create the chemical energy they need to live. When there are more of these creatures in the water absorbing sunlight, they make the water look greener. Conversely, if there are fewer phytoplankton, the water looks bluer.

The creatures' growth is dependent on how much sunlight, carbon dioxide and nutrients are around. Climate change is altering the ocean currents, meaning there will be fewer nutrients for phytoplankton to feed on in some areas, so there will be a decline in their number in those regions.

Since the 1990s, satellites have taken regular measurements of how much chlorophyll is in the ocean. Those levels can change because of weather events or because of climate change.

The study predicts that the blues will intensify, most likely in subtropical regions where phytoplankton will decrease. These are areas near the equator like Bermuda and the Bahamas that are already quite low in phytoplankton.

Regions where there are a lot of nutrients, like in the Southern Ocean or parts of the North Atlantic, will see even faster-growing phytoplankton because those waters are warming with climate change. Those waters will look greener.

Climate change will bring a color change to half of the world's oceans by the end of the 21st century, the study says. That's bad on several levels: For one, phytoplankton remove about as much carbon dioxide from the air as plants and help regulate our climate, research shows. They are also key to other animals' survival." Phytoplankton are at the base, and if the base changes, it endangers everything else along the food web, going far enough to the polar bears or tuna or just about anything that you want to eat or love to see in pictures, "said Stephanie Dutkiewicz, a principal research scientist in MIT.

SubQuestion No : 167

Q.1
67 The passage is mainly about:

Ans 1. The growth of phytoplankton in the ocean.

- 2. How the growth of phytoplankton will impact the food web
- 3. The change of the ocean color due to climate change.
- 4. Why ocean water looks blue.

Question ID : 98958010485

Status : Answered

Chosen Option : 4

Comprehension:



Read the following passage and answer the questions given after it.

The ocean will not look the same color in the future.

Essentially, climate change will make the blues of the ocean bluer and the greens greener. Scientists from MIT, Boston, figured this out by creating a global model that simulates the growth of a tiny creature that lives in the oceans and affects the color we see. Their research was published in the journal Nature Communications.

The ocean looks blue or green to us because of a combination of how sunlight interacts with water molecules and with whatever else lives in that water.

The molecules in water absorb all but the blue part of the spectrum of sunlight, and the water reflects that blue color back. That's the color we see.

The water looks greener when it has more phytoplankton, tiny, microscopic organisms that, like plants, can use chlorophyll to capture mostly the blue portions of the spectrum of sunlight. They then use photosynthesis to create the chemical energy they need to live. When there are more of these creatures in the water absorbing sunlight, they make the water look greener. Conversely, if there are fewer phytoplankton, the water looks bluer.

The creatures' growth is dependent on how much sunlight, carbon dioxide and nutrients are around. Climate change is altering the ocean currents, meaning there will be fewer nutrients for phytoplankton to feed on in some areas, so there will be a decline in their number in those regions.

Since the 1990s, satellites have taken regular measurements of how much chlorophyll is in the ocean. Those levels can change because of weather events or because of climate change.

The study predicts that the blues will intensify, most likely in subtropical regions where phytoplankton will decrease. These are areas near the equator like Bermuda and the Bahamas that are already quite low in phytoplankton.

Regions where there are a lot of nutrients, like in the Southern Ocean or parts of the North Atlantic, will see even faster-growing phytoplankton because those waters are warming with climate change. Those waters will look greener.

Climate change will bring a color change to half of the world's oceans by the end of the 21st century, the study says. That's bad on several levels: For one, phytoplankton remove about as much carbon dioxide from the air as plants and help regulate our climate, research shows. They are also key to other animals' survival." Phytoplankton are at the base, and if the base changes, it endangers everything else along the food web, going far enough to the polar bears or tuna or just about anything that you want to eat or love to see in pictures, "said Stephanie Dutkiewicz, a principal research scientist in MIT.

SubQuestion No : 168

Q.1
68 The colour of the ocean depends on:

Ans 1. the growth of phytoplankton in the ocean.

- ✓ 2. the sunlight's interaction with the water molecules and sea organisms.
- ✗ 3. water molecules absorbing the blue of the sunlight
- ✗ 4. the sunlight's absorption by the sea organisms.

Question ID : 98958010486

Status : Answered

Chosen Option : 1

Comprehension:



Read the following passage and answer the questions given after it.

The ocean will not look the same color in the future.

Essentially, climate change will make the blues of the ocean bluer and the greens greener. Scientists from MIT, Boston, figured this out by creating a global model that simulates the growth of a tiny creature that lives in the oceans and affects the color we see. Their research was published in the journal Nature Communications.

The ocean looks blue or green to us because of a combination of how sunlight interacts with water molecules and with whatever else lives in that water.

The molecules in water absorb all but the blue part of the spectrum of sunlight, and the water reflects that blue color back. That's the color we see.

The water looks greener when it has more phytoplankton, tiny, microscopic organisms that, like plants, can use chlorophyll to capture mostly the blue portions of the spectrum of sunlight. They then use photosynthesis to create the chemical energy they need to live. When there are more of these creatures in the water absorbing sunlight, they make the water look greener. Conversely, if there are fewer phytoplankton, the water looks bluer.

The creatures' growth is dependent on how much sunlight, carbon dioxide and nutrients are around. Climate change is altering the ocean currents, meaning there will be fewer nutrients for phytoplankton to feed on in some areas, so there will be a decline in their number in those regions.

Since the 1990s, satellites have taken regular measurements of how much chlorophyll is in the ocean. Those levels can change because of weather events or because of climate change.

The study predicts that the blues will intensify, most likely in subtropical regions where phytoplankton will decrease. These are areas near the equator like Bermuda and the Bahamas that are already quite low in phytoplankton.

Regions where there are a lot of nutrients, like in the Southern Ocean or parts of the North Atlantic, will see even faster-growing phytoplankton because those waters are warming with climate change. Those waters will look greener.

Climate change will bring a color change to half of the world's oceans by the end of the 21st century, the study says. That's bad on several levels: For one, phytoplankton remove about as much carbon dioxide from the air as plants and help regulate our climate, research shows. They are also key to other animals' survival." Phytoplankton are at the base, and if the base changes, it endangers everything else along the food web, going far enough to the polar bears or tuna or just about anything that you want to eat or love to see in pictures, "said Stephanie Dutkiewicz, a principal research scientist in MIT.

SubQuestion No : 169

Q.1 In which areas will the ocean look bluer?

69

- Ans
- 1. Southern ocean
 - 2. Areas near poles

✓ 3. Areas near equator

✗ 4. North Atlantic ocean

Question ID : 98958010487

Status : Answered

Chosen Option : 2

Comprehension:



Read the following passage and answer the questions given after it.

The ocean will not look the same color in the future.

Essentially, climate change will make the blues of the ocean bluer and the greens greener. Scientists from MIT, Boston, figured this out by creating a global model that simulates the growth of a tiny creature that lives in the oceans and affects the color we see. Their research was published in the journal Nature Communications.

The ocean looks blue or green to us because of a combination of how sunlight interacts with water molecules and with whatever else lives in that water.

The molecules in water absorb all but the blue part of the spectrum of sunlight, and the water reflects that blue color back. That's the color we see.

The water looks greener when it has more phytoplankton, tiny, microscopic organisms that, like plants, can use chlorophyll to capture mostly the blue portions of the spectrum of sunlight. They then use photosynthesis to create the chemical energy they need to live. When there are more of these creatures in the water absorbing sunlight, they make the water look greener. Conversely, if there are fewer phytoplankton, the water looks bluer.

The creatures' growth is dependent on how much sunlight, carbon dioxide and nutrients are around. Climate change is altering the ocean currents, meaning there will be fewer nutrients for phytoplankton to feed on in some areas, so there will be a decline in their number in those regions.

Since the 1990s, satellites have taken regular measurements of how much chlorophyll is in the ocean. Those levels can change because of weather events or because of climate change.

The study predicts that the blues will intensify, most likely in subtropical regions where phytoplankton will decrease. These are areas near the equator like Bermuda and the Bahamas that are already quite low in phytoplankton.

Regions where there are a lot of nutrients, like in the Southern Ocean or parts of the North Atlantic, will see even faster-growing phytoplankton because those waters are warming with climate change. Those waters will look greener.

Climate change will bring a color change to half of the world's oceans by the end of the 21st century, the study says. That's bad on several levels: For one, phytoplankton remove about as much carbon dioxide from the air as plants and help regulate our climate, research shows. They are also key to other animals' survival." Phytoplankton are at the base, and if the base changes, it endangers everything else along the food web, going far enough to the polar bears or tuna or just about anything that you want to eat or love to see in pictures, "said Stephanie Dutkiewicz, a principal research scientist in MIT.

SubQuestion No : 170

Q.1
70 Where do phytoplankton grow profusely?

Ans 1. Where the sun rays are absorbed by ocean water

2. Where the ocean waters are hot as at equator

- ✓ 3. Where there are a lot of nutrients in the ocean water
- ✗ 4. Where the ocean currents are cold

Question ID : 98958010488
Status : Answered
Chosen Option : 2

Comprehension:



Read the following passage and answer the questions given after it.

The ocean will not look the same color in the future.

Essentially, climate change will make the blues of the ocean bluer and the greens greener. Scientists from MIT, Boston, figured this out by creating a global model that simulates the growth of a tiny creature that lives in the oceans and affects the color we see. Their research was published in the journal Nature Communications.

The ocean looks blue or green to us because of a combination of how sunlight interacts with water molecules and with whatever else lives in that water.

The molecules in water absorb all but the blue part of the spectrum of sunlight, and the water reflects that blue color back. That's the color we see.

The water looks greener when it has more phytoplankton, tiny, microscopic organisms that, like plants, can use chlorophyll to capture mostly the blue portions of the spectrum of sunlight. They then use photosynthesis to create the chemical energy they need to live. When there are more of these creatures in the water absorbing sunlight, they make the water look greener. Conversely, if there are fewer phytoplankton, the water looks bluer.

The creatures' growth is dependent on how much sunlight, carbon dioxide and nutrients are around. Climate change is altering the ocean currents, meaning there will be fewer nutrients for phytoplankton to feed on in some areas, so there will be a decline in their number in those regions.

Since the 1990s, satellites have taken regular measurements of how much chlorophyll is in the ocean. Those levels can change because of weather events or because of climate change.

The study predicts that the blues will intensify, most likely in subtropical regions where phytoplankton will decrease. These are areas near the equator like Bermuda and the Bahamas that are already quite low in phytoplankton.

Regions where there are a lot of nutrients, like in the Southern Ocean or parts of the North Atlantic, will see even faster-growing phytoplankton because those waters are warming with climate change. Those waters will look greener.

Climate change will bring a color change to half of the world's oceans by the end of the 21st century, the study says. That's bad on several levels: For one, phytoplankton remove about as much carbon dioxide from the air as plants and help regulate our climate, research shows. They are also key to other animals' survival." Phytoplankton are at the base, and if the base changes, it endangers everything else along the food web, going far enough to the polar bears or tuna or just about anything that you want to eat or love to see in pictures, "said Stephanie Dutkiewicz, a principal research scientist in MIT.

SubQuestion No : 171

Q.1
71 Which statement is not true according to the passage?

Ans

- 1. By the end of 21st century the colour of ocean waters will change.
- 2. In subtropical regions phytoplankton will decrease.
- 3. More blue colour in the ocean will affect the climate change.
- 4. Phytoplankton has a key role in the survival of other animals.

Question ID : 98958010489
Status : Answered
Chosen Option : 3

Q.1
72 Select the synonym of the given word.

AFFLUENT

- Ans
- 1. wealthy
 - 2. clever
 - 3. joyous
 - 4. strong

Question ID : 98958010460
Status : Answered
Chosen Option : 3

Q.1
73 Select the most appropriate meaning of the underlined idiom in the given sentence.

The cost of living has increased so much that many people find it difficult to make both ends meet.

- Ans
- 1. buy expensive gadgets
 - 2. buy something new
 - 3. earn enough to survive
 - 4. help other people

Question ID : 98958010473
Status : Answered
Chosen Option : 3

Q.1
74 Identify the segment in the sentence, which contains the grammatical error.

The landlady made me changing the design of the kitchen three times.

- Ans
- 1. the design
 - 2. made me
 - 3. changing
 - 4. of the kitchen

Question ID : 98958010439

Status : Answered

Chosen Option : 3

Q.1 75 Select the most appropriate option to substitute the underlined segment in the given sentence. If there is no need to substitute it, select No improvement.

He will pass the driving test if he tries hard enough.

- Ans
- 1. if he had tried hard
 - 2. if he is trying hard
 - 3. if he tried hard
 - 4. No improvement.

Question ID : 98958010446

Status : Answered

Chosen Option : 4

Q.1 76 Identify the segment in the sentence, which contains the grammatical error.

Neither Mohit nor Rohit were there at the shop when I went there.

- Ans
- 1. when
 - 2. Neither Mohit nor Rohit
 - 3. were there
 - 4. at the shop

Question ID : 98958010440

Status : Answered

Chosen Option : 4

Q.1 77 Select the wrongly spelt word.

- Ans
- 1. benevolent
 - 2. benign
 - 3. beneath
 - 4. benefitial

Question ID : 98958010482

Status : Answered

Chosen Option : 4

Q.1 78 Select the synonym of the given word.

FEIGN

- Ans
- 1. prefer
 - 2. prepare
 - 3. pester
 - 4. pretend

Question ID : 98958010463

Status : Answered

Chosen Option : 1

Q.1 79 Select the most appropriate option to substitute the underlined segment in the given sentence. If there is no need to substitute it, select No improvement.

You must go to Bhopal if you are liking it or not.

- Ans
- 1. whether you have liked it
 - 2. whether you like it
 - 3. if you like it
 - 4. No improvement.

Question ID : 98958010445

Status : Answered

Chosen Option : 2

Q.1 80 Select the most appropriate word to fill in the blank.

Mr. Sharma may be late but I am sure Mr. Kapoor _____ be.

- Ans
- 1. should
 - 2. won't
 - 3. can't
 - 4. would

Question ID : 98958010448

Status : Answered

Chosen Option : 2

Q.1 81 Select the word, which means the same as the group of words given.

a place where bees are kept

- Ans
- 1. aquarium
 - 2. orchard
 - 3. apiary
 - 4. aviary

Question ID : 98958010475

Status : Answered

Chosen Option : 2

Q.1 82 Select the most appropriate meaning of the underlined idiom in the given sentence.

Let's hope they will bury the hatchet and be friends again.

- Ans
- 1. forget past quarrels
 - 2. make plans cleverly

3. take courage

4. keep quiet

Question ID : 98958010472

Status : Answered

Chosen Option : 1

Q.1
83 Select the wrongly spelt word.

Ans 1. bewitched

2. bitter

3. blizzard

4. bizzare

Question ID : 98958010479

Status : Answered

Chosen Option : 1

Q.1
84 Select the word, which means the same as the group of words given.

a person who compiles dictionaries

Ans 1. lexicographer

2. calligrapher

3. choreographer

4. cartographer

Question ID : 98958010474

Status : Answered

Chosen Option : 1

Q.1
85 Select the most appropriate option to substitute the underlined segment in the given sentence. If there is no need to substitute it, select No improvement.

It is not wise relying to anybody too much.

Ans 1. to rely in anybody

2. No improvement.

3. to rely on anybody

4. relying at anybody

Question ID : 98958010444

Status : Answered

Chosen Option : 2

Q.1
86 Select the most appropriate meaning of the underlined idiom in the given sentence.

I am fed up with his false promises.

Ans 1. disgusted

- 2. hopeful
- 3. furious
- 4. pleased

Question ID : 98958010470
Status : Answered
Chosen Option : 1

Q.1
87 Select the wrongly spelt word.

- Ans
- 1. dreamy
 - 2. dreadful
 - 3. dribble
 - 4. droughth

Question ID : 98958010480
Status : Answered
Chosen Option : 4

Q.1
88 Select the most appropriate meaning of the underlined idiom in the given sentence.

If you go for this training, it will be beneficial to you in the long run.

- Ans
- 1. eventually
 - 2. intermittently
 - 3. regularly
 - 4. immediately

Question ID : 98958010469
Status : Answered
Chosen Option : 3

Q.1
89 Select the word, which means the same as the group of words given.

A place where coins are made

- Ans
- 1. exchange
 - 2. mint
 - 3. bank
 - 4. reserve

Question ID : 98958010476
Status : Answered
Chosen Option : 3

Q.1
90 Select the antonym of the given word.

BONDAGE

- Ans
- 1. slavery
 - 2. affection
 - 3. wealth
 - 4. liberty

Question ID : 98958010466
Status : Answered
Chosen Option : 1

Q.1
91 Identify the segment in the sentence, which contains the grammatical error.

He spends good deal of money on eating out.

- Ans
- 1. good deal
 - 2. He spends
 - 3. on eating out.
 - 4. of money

Question ID : 98958010438
Status : Answered
Chosen Option : 3

Q.1
92 Select the synonym of the given word.

DAME

- Ans
- 1. man
 - 2. female
 - 3. lady
 - 4. girl

Question ID : 98958010459
Status : Answered
Chosen Option : 1

Q.1
93 Select the antonym of the given word.

ASSEMBLE

- Ans
- 1. disperse
 - 2. create
 - 3. gather
 - 4. resemble

Question ID : 98958010465
Status : Answered
Chosen Option : 4

Q.1
94 Select the wrongly spelt word.

- Ans
- 1. laborious
 - 2. mysterious
 - 3. courtious
 - 4. religious

Question ID : 98958010483
Status : Answered
Chosen Option : 3

Q.1
95 Select the most appropriate option to substitute the underlined segment in the given sentence. If there is no need to substitute it, select No improvement.

Did you do what I telling you to do yesterday.

- Ans
- 1. No improvement.
 - 2. what I told you
 - 3. what I have told you
 - 4. that I am telling you

Question ID : 98958010443
Status : Answered
Chosen Option : 3

Q.1
96 Select the antonym of the given word.

HOSTILE

- Ans
- 1. friendly
 - 2. rebel
 - 3. aggressive
 - 4. forceful

Question ID : 98958010464
Status : Answered
Chosen Option : 1

Q.1
97 Select the most appropriate meaning of the underlined idiom in the given sentence.

Getting the Fulbright Scholarship at this young age is a feather in his cap.

- Ans
- 1. a sign of his intelligence
 - 2. an accomplishment to be proud of
 - 3. Something he can show off about
 - 4. an award not to be given up

Question ID : 98958010471
Status : Answered
Chosen Option : 1

Q.1
98 Identify the segment in the sentence, which contains the grammatical error.

If the car hadn't broken down we will be at the office now.

- Ans
- 1. If the car
 - 2. we will be
 - 3. hadn't broken down
 - 4. at the office

Question ID : 98958010442
Status : Answered
Chosen Option : 3

Q.1
99 Select the most appropriate word to fill in the blank.

The plant will die _____ you look after it.

- Ans
- 1. if
 - 2. unless
 - 3. until
 - 4. otherwise

Question ID : 98958010450
Status : Answered
Chosen Option : 2

Q.2
00 Select the most appropriate option to substitute the underlined segment in the given sentence. If there is no need to substitute it, select No improvement.

The man who seen the accident to occur telephoned the police.

- Ans
- 1. saw the accident occurred
 - 2. had seen the accident occur
 - 3. saw the accident was occurring
 - 4. No improvement.

Question ID : 98958010447
Status : Answered
Chosen Option : 2