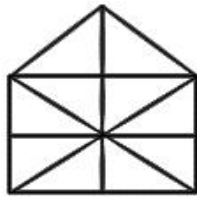


## Recruitment of Sub-Inspector in Delhi Police, CAPFs and Assistant Sub-Inspector in CISF Examination, 2018

Roll No. :	WWW.EXAMSCLOUD.IN
Registration No.	WWW.EXAMSCLOUD.IN
Name :	WWW.EXAMSCLOUD.IN
Exam Venue :	BBDIT A Block Duhai
Exam Time :	3:00 PM - 5:00 PM
Exam Date :	13/03/2019

Section : SI CPO

Q.1 How many triangles are there in the following figure?



- Ans
- 1. 14
  - 2. 19
  - 3. 21
  - 4. 23

Question ID : 98958012396  
Status : Answered  
Chosen Option : 3

Q.2 Three of the following four words are alike in a certain way and one is different. Find the odd one out.

- Ans
- 1. Stress
  - 2. Fatigue
  - 3. Concentration
  - 4. Tension

Question ID : 98958012364  
Status : Answered  
Chosen Option : 3

Q.3 Select the option that is related to the third term in the same way as the second term is related to the first term.

HJLN : ILOR :: DFHJ : \_\_\_\_\_

- Ans
- 1. EHJL
  - 2. EHKN
  - 3. CGJM
  - 4. EHLO

Question ID : 98958012370  
Status : Answered  
Chosen Option : 2

Q.4

Select the correct alternative to indicate the arrangement of the following words in a logical and meaningful order.

1. Fruit
2. Harvest
3. Seed

- Ans  1. 3, 5, 1, 2, 4  
 2. 1, 3, 5, 2, 4  
 3. 4, 2, 1, 3, 5  
 4. 3, 1, 5, 2, 4

Question ID : 98958012360  
Status : Answered  
Chosen Option : 1

Q.5 Which letter will replace the question mark (?) in the following series?

J, Q, L, O, N, ?, P, K

- Ans  1. M  
 2. I  
 3. K  
 4. L

Question ID : 98958012358  
Status : Answered  
Chosen Option : 1

Q.6 Select the word-pair in which the two words are related in the same way as are the two words in the given word-pair.

Dress : Stitch

- Ans  1. Dish : Cook  
 2. Water : Swim  
 3. Liquid : Measure  
 4. Drive : Road

Question ID : 98958012368  
Status : Answered  
Chosen Option : 1

Q.7 In a code language, EXPLAIN is written as XEALPNI. How will FACTORY be written in that language?

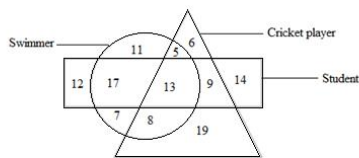
- Ans  1. AFTCROY  
 2. CAFOTYR  
 3. AFOTCYR  
 4. AFTOCYR

Question ID : 98958012373  
Status : Answered  
Chosen Option : 3

Q.8

In the following diagram, the triangle represents 'cricket players', the circle represents 'swimmers' and the rectangle represents 'students'. The numbers in different segments show the number of persons.

- Ans  1. 17  
 2. 8  
 3. 13  
 4. 18



How many students are swimmers but not cricket players?

Question ID : 98958012405  
 Status : Answered  
 Chosen Option : 1

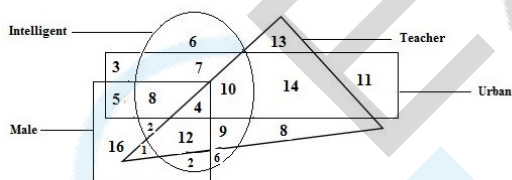
Q.9 Which number will replace the question mark (?) in the following series?

3, 5, 10, 18, 29, ?, 60

- Ans  1. 46  
 2. 37  
 3. 45  
 4. 43

Question ID : 98958012379  
 Status : Not Attempted and Marked For Review  
 Chosen Option : --

Q.1 In the following diagram, the triangle represents 'teachers', the circle represents 'intelligent', the rectangle represents 'urban' and the square represents 'males'. The numbers in different segments show the number of persons.



How many urban intelligent teachers are not male?

- Ans  1. 12  
 2. 14  
 3. 10  
 4. 4

Question ID : 98958012407  
 Status : Answered  
 Chosen Option : 3

Q.1 If FATHER = 7 and DAUGHTER = 9, then DISTANT = \_\_\_\_\_.

- Ans  1. 6  
 2. 10  
 3. 8  
 4. 7

Question ID : 98958012375  
 Status : Answered  
 Chosen Option : 3

Q.1

2 Select the option that is related to the third number in the same way as the second number is related to the first number.

- Ans  1. 51 –  
 2. 49  
 3. 63  
 4. 72

Question ID : 98958012382  
 Status : Answered  
 Chosen Option : 3

Q.1 Select the option that is related to the third term in the same way as the second term is related to the first term.

3  
 ACFJ : ZXUQ :: ELHK : \_\_\_\_\_

- Ans  1. WRSQ  
 2. VUSP  
 3. VOSP  
 4. WOSP

Question ID : 98958012371  
 Status : Answered  
 Chosen Option : 3

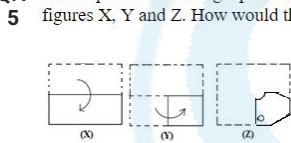
Q.1 Select the option that is related to the third number in the same way as the second number is related to the first number.

4  
 9 : 19 :: 29 : \_\_\_\_\_

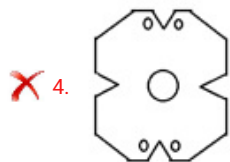
- Ans  1. 39  
 2. 69  
 3. 59  
 4. 49

Question ID : 98958012381  
 Status : Answered  
 Chosen Option : 3

Q.1 The sequence of folding a piece of square paper and the manner in which the folded paper has been cut is shown in the figures X, Y and Z. How would this paper look when unfolded?



- Ans
- 1.
- 2.
- 3.



Question ID : 98958012402  
 Status : Answered  
 Chosen Option : 2

Q.1  
 6 Select the set of numbers that is similar to the following set.

{5, 10, 17}

- Ans
- ✗ 1. {26, 50, 65}
  - ✗ 2. {17, 35, 72}
  - ✓ 3. {37, 50, 65}
  - ✗ 4. {24, 35, 48}

Question ID : 98958012389  
 Status : Not Answered  
 Chosen Option : --

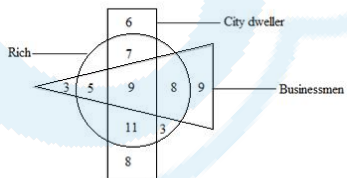
Q.1  
 7 Which two signs should be interchanged to make the given equation correct?

$$9 + 12 \div 6 \times 8 - 4 = 14$$

- Ans
- ✗ 1. - and ×
  - ✗ 2. + and ×
  - ✗ 3. ÷ and +
  - ✓ 4. × and ÷

Question ID : 98958012390  
 Status : Not Answered  
 Chosen Option : --

Q.1  
 8 In the following diagram, the triangle represents 'businessmen', the circle represents 'rich' and the rectangle represents 'city dwellers'. The numbers in different segments show the number of persons.



How many rich city dwellers are not businessmen?

- Ans
- ✗ 1. 20
  - ✗ 2. 14
  - ✓ 3. 18
  - ✗ 4. 16

Question ID : 98958012406  
 Status : Answered  
 Chosen Option : 3

Q.1

9 'Experiment' is related to 'Invention' in the same way as 'Read' is related to '\_\_\_\_\_'.  
 0

- Ans
- 1. Invention
  - 2. Concentration
  - 3. Learn
  - 4. Evaluation

Question ID : 98958012367  
 Status : Answered  
 Chosen Option : 3

Q.2 Which of the following interchanges of signs and numbers would make the flowing equation correct?  
 0

$$18 - 8 \div 12 \times 6 + 10 = 12$$

- Ans
- 1.  $\times$  and  $\div$ , 12 and 6
  - 2. + and -, 8 and 10
  - 3. + and -, 6 and 8
  - 4.  $\times$  and -, 18 and 6

Question ID : 98958012392  
 Status : Not Answered  
 Chosen Option : --

Q.2 Which two numbers should be interchanged to make the following equation correct?  
 1

$$8 + 12 \div 9 \times 6 - 4 = 12 \div 6 \times 8 + 9 - 1$$

- Ans
- 1. 12 and 8
  - 2. 6 and 9
  - 3. 6 and 12
  - 4. 8 and 4

Question ID : 98958012391  
 Status : Not Answered  
 Chosen Option : --

Q.2 Two statements are given, followed by three conclusions numbered I, II and III. Assuming the statements to be true, even if they seem to be at variance with commonly known facts, decide which of the conclusions logically follow(s) from the statements.

**Statements:**  
 Some males are swimmers.  
 All swimmers are athletes.

**Conclusions:**  
 I. Some athletes are males.  
 II. No athlete is male.  
 I. Some athletes are swimmers.

- Ans
- 1. Only conclusions I and II follow.
  - 2. Only conclusions I and III follow.
  - 3. Only conclusions II and III follow.
  - 4. All of the conclusions follow.

Question ID : 98958012376  
 Status : Answered  
 Chosen Option : 2

Q.2

3 Select the correct alternative to indicate the arrangement of the following words in a logical and meaningful order.

1. Judgment
2. Arrest
3. Prison
4. Court
5. Crime

Ans  1. 5, 2, 4, 1, 6, 3

2. 5, 2, 3, 4, 1, 6

3. 5, 4, 2, 1, 6, 3

4. 3, 6, 4, 1, 2, 5

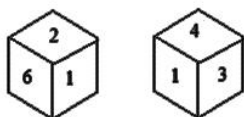
Question ID : 98958012361

Status : Answered

Chosen Option : 1

Q.2 Two positions of the same dice are given. Which number will be at the top if '6' is at the bottom?

4



Ans  1. 3

2. 4

3. 5

4. 1

Question ID : 98958012397

Status : Answered

Chosen Option : 2

Q.2 Select the word-pair in which the two words are related in the same way as are the two words in the given word-pair.

5

Word : Letter

Ans  1. Father : Son

2. Doctor : Medicine

3. House : Building

4. School : Class

Question ID : 98958012369

Status : Answered

Chosen Option : 4

Q.2 Rinky walked 70 m towards the east from her house, and then took a right turn and walked 50 m to reach the post office.

6

From there, she took a right turn again and walked 150 m to reach the market, from where she took a left turn and walked a few meters to reach the school. If the air distance between Rinky's house and the school is 170 m, what is the air distance between the market and the school?

Ans  1. 70 m

2. 90 m

3. 100 m

4. 120 m

Question ID : 98958012404

Status : Answered

Chosen Option : 4

Q.2 Three of the following four number-pairs are alike in a certain way and one is different. Find the odd one out.

7

Ans

- 1. 739 : 527
- 2. 156 : 231
- 3. 975 : 753
- 4. 697 : 475

Question ID : 98958012386  
Status : Answered  
Chosen Option : 2

Q.2 Select the number-pair in which the two numbers are related in the same way as are the two numbers of the given number pair.

1 : 8

- Ans
- 1. 9 : 36
  - 2. 6 : 30
  - 3. 8 : 27
  - 4. 16 : 49

Question ID : 98958012383  
Status : Answered  
Chosen Option : 3

Q.2 Three of the following four number-pairs are alike in a certain way and one is different. Find the odd one out.

- 9
- Ans
- 1. 9 : 20
  - 2. 19 : 40
  - 3. 14 : 30
  - 4. 21 : 45

Question ID : 98958012384  
Status : Answered  
Chosen Option : 4

Q.3 Swati's school bus starts from her house and takes one left turn to reach the hospital. Then, it takes a right turn and covers 5 km. Finally, it takes a left turn to reach her school. On reaching the school, the bus faces south-west. In which direction was the bus facing when it left Swati's house?

- 0
- Ans
- 1. North-east
  - 2. East
  - 3. North-west
  - 4. South-east

Question ID : 98958012403  
Status : Answered  
Chosen Option : 4

Q.3 Which number will replace the question mark (?) in the following series?

7, 9, 13, 15, ?, 21, 25

- 1
- Ans
- 1. 18
  - 2. 20
  - 3. 17
  - 4. 19

Question ID : 98958012378  
Status : Answered  
Chosen Option : 3



Q.3  
2 Three of the following four number-pairs are alike in a certain way and one is different. Find the odd one out.

- Ans
- 1. 20 : 30
  - 2. 12 : 20
  - 3. 30 : 40
  - 4. 42 : 56

Question ID : 98958012387

Status : Not Attempted and Marked For Review

Chosen Option : --

Q.3  
3 'Tired' is related to 'Exhausted' in the same way as 'Sad' is related to '\_\_\_\_\_'.  
3

- Ans
- 1. Emotional
  - 2. Withdrawn
  - 3. Depressed
  - 4. Regret

Question ID : 98958012366

Status : Answered

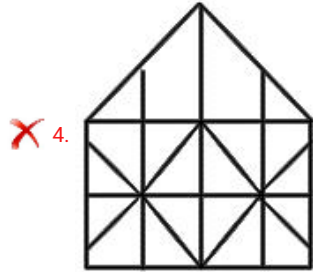
Chosen Option : 3

Q.3  
4 Select the option in which the given figure is embedded.  
4



Ans

- 1.
- 2.
- 3.



Question ID : 98958012398  
Status : Answered  
Chosen Option : 1

Q.3  
5 Which letter-cluster will replace the question mark (?) in the following series?

HKNQ, JIPO, KHQN, MFSL, ?

- Ans
- ✗ 1. ODUJ
  - ✗ 2. NGRM
  - ✗ 3. NEKT
  - ✓ 4. NETK

Question ID : 98958012359  
Status : Answered  
Chosen Option : 4

Q.3  
6 Select the set of numbers that is similar to the following set.

{8, 19, 30}

- Ans
- ✗ 1. {11, 24, 38}
  - ✗ 2. {9, 20, 35}
  - ✓ 3. {12, 25, 38}
  - ✗ 4. {6, 21, 32}

Question ID : 98958012388  
Status : Not Answered  
Chosen Option : --

Q.3  
7 If DRIVE is coded as 59372 and SPUR is coded as 6489, what will be the code for PRIDE?

- Ans
- ✗ 1. 49235
  - ✗ 2. 94532
  - ✓ 3. 49352
  - ✗ 4. 43925

Question ID : 98958012374  
Status : Not Answered  
Chosen Option : --

Q.3  
8 Three of the following four number-pairs are alike in a certain way and one is different. Find the odd one out.

- Ans
- ✗ 1. 35 : 42
  - ✓ 2. 45 : 55
  - ✗ 3. 15 : 18

✗ 4. 25 : 30

Question ID : 98958012385  
 Status : Not Answered  
 Chosen Option : --

Q.3 Select the correct mirror image of the given figure when the mirror is placed on the right of the figure.

9

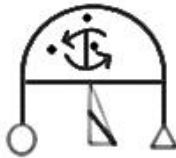


Ans

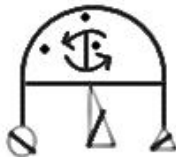
✗ 1.



✗ 2.



✗ 3.



✓ 4.



Question ID : 98958012401  
 Status : Not Answered  
 Chosen Option : --

Q.4 In a code language, PENCIL is written as PNEICL. How will MOTHER be written as in that language?

0

Ans

✗ 1. MTOREH

✗ 2. MHTORE

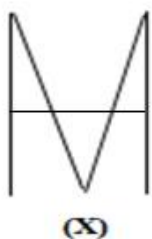
✗ 3. OMHTRE

✓ 4. MTOEHR

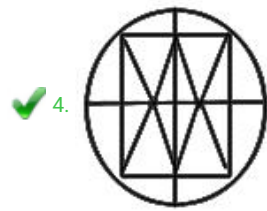
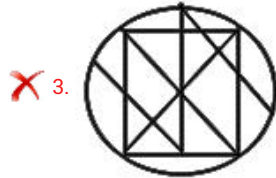
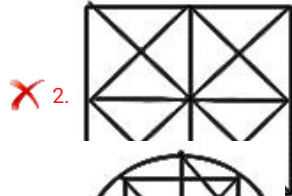
Question ID : 98958012372  
 Status : Not Answered  
 Chosen Option : --

Q.4 Select the option in which the given figure is embedded.

1



Ans

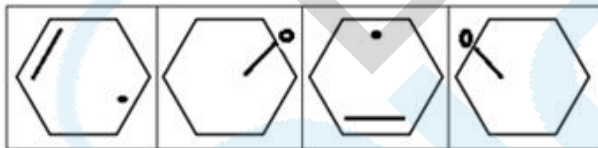


Question ID : 98958012399

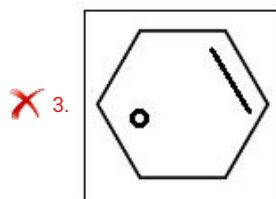
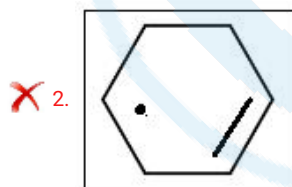
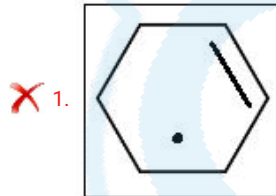
Status : Not Answered

Chosen Option : --

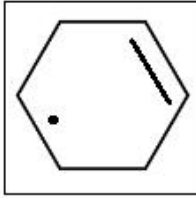
Q.4 <sub>2</sub> Select the figure that will come next in the following series.



Ans



✓ 4.



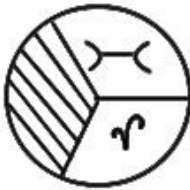
Question ID : 98958012393  
 Status : Not Answered  
 Chosen Option : --

Q.4 Select the correct mirror image of the given figure when the mirror is placed on the right of the figure.



Ans

✓ 1.



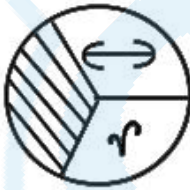
✗ 2.



✗ 3.



✗ 4.



Question ID : 98958012400  
 Status : Not Answered  
 Chosen Option : --

Q.4 Three of the following four words are alike in a certain way and one is different. Find the odd one out.

Ans

- ✓ 1. Intermission
- ✗ 2. Conclusion
- ✗ 3. Valediction
- ✗ 4. Termination

Question ID : 98958012365  
 Status : Not Answered  
 Chosen Option : --

Q.4  
5

Two statements are given, followed by three conclusions numbered I, II and III. Assuming the statements to be true, even if they seem to be at variance with commonly known facts, decide which of the conclusions logically follow(s) from the statements.

**Statements:**

Some animals are mammals.  
No mammal is herbivore.

**Conclusions:**

I. No herbivore is mammal.

- Ans  1. None of the conclusions follows.  
 2. Only conclusions II and III follow.  
 3. Only conclusions I and II follow.  
 4. Only conclusions I and III follow.

Question ID : 98958012377

Status : Not Answered

Chosen Option : --

Q.4 Which number will replace the question mark (?) in the following series?  
6

5, 7, 11, 14, 23, ?, 43, 48

- Ans  1. 27  
 2. 39  
 3. 31  
 4. 26

Question ID : 98958012380

Status : Not Answered

Chosen Option : --

Q.4 Three of the following four letter-clusters are alike in a certain way and one is different. Find the odd one out.  
7

- Ans  1. SQOM  
 2. JMPS  
 3. GHIJ  
 4. WUTR

Question ID : 98958012362

Status : Not Answered

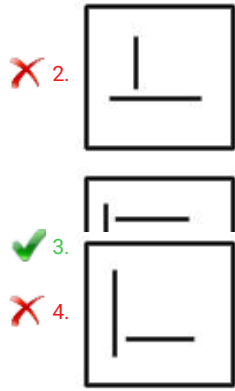
Chosen Option : --

Q.4 Identify the missing figure in the following series.  
8



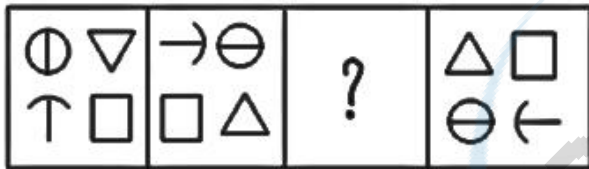
Ans

- 1.

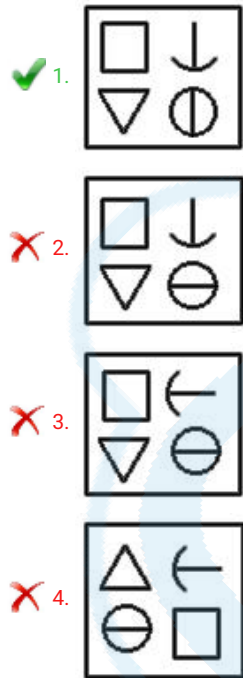


Question ID : 98958012394  
 Status : Not Answered  
 Chosen Option : --

Q.4 Identify the missing figure in the following series.



Ans



Question ID : 98958012395  
 Status : Not Answered  
 Chosen Option : --

Q.5 Three of the following four letter-clusters are alike in a certain way and one is different. Find the odd one out.

- Ans
- ✓ 1. NEHK
  - ✗ 2. MSOQ
  - ✗ 3. RXTV
  - ✗ 4. GPJM

Question ID : 98958012363  
 Status : Not Answered

Chosen Option : --

Q.5  
1 The first India-ASEAN InnoTech Summit was held in \_\_\_\_\_ in November 2018.

- Ans
- 1. Chennai
  - 2. Ahmedabad
  - 3. Mumbai
  - 4. New Delhi

Question ID : 98958010810  
Status : Not Answered  
Chosen Option : --

Q.5  
2 Who wrote the book "Gulamgiri"?

- Ans
- 1. Jyotiba Phule
  - 2. Swami Vivekanand
  - 3. Vinoba Bhave
  - 4. Swami Dayanand Saraswati

Question ID : 98958010819  
Status : Not Answered  
Chosen Option : --

Q.5  
3 \_\_\_\_\_ is an inherited blood disorder due to which people suffering from this condition are unable to make haemoglobin.

- Ans
- 1. Bone Marrow failure
  - 2. Thalassemia
  - 3. Stroke
  - 4. Thrombosis

Question ID : 98958010808  
Status : Answered  
Chosen Option : 2

Q.5  
4 In January 2019, Union Minister of Petroleum and Natural Gas \_\_\_\_\_ flagged off Sanrakshan Kshmata Mahotsav (SAKSHAM) vans.

- Ans
- 1. Dharmendra Pradhan
  - 2. Suresh Prabhu
  - 3. DV Sadananda Gowda
  - 4. Nitin Jairam Gadkari

Question ID : 98958010824  
Status : Answered  
Chosen Option : 1

Q.5  
5 \_\_\_\_\_ was awarded the International Gandhi Peace Award (2016) for its contribution towards the improvement of sanitation facilities in India and the emancipation of manual scavengers.

- Ans
- 1. Vivekananda Kendra
  - 2. Sulabh International
  - 3. Akshaya Patra Foundation
  - 4. Ekal Abhiyan Trust



Question ID : 98958010813  
Status : Answered  
Chosen Option : 2

Q.5 In January 2019, US-based Indian poet \_\_\_\_\_ received the 'Woman's Voice Award' at the Apeejay Kolkata Literary Festival (AKLF) 2019.

- Ans
- 1. Meena Alexander
  - 2. Smita Agarwal
  - 3. Ranjani Murali
  - 4. Sujata Bhatt

Question ID : 98958010804  
Status : Not Answered  
Chosen Option : --

Q.5 \_\_\_\_\_ became India's first judo medallist at the Youth Olympics Games held in Argentina in 2018.

- Ans
- 1. Kalpana Devi
  - 2. Rajwinder Kaur
  - 3. Garima Chaudhary
  - 4. Thangjam Tababi Devi

Question ID : 98958010828  
Status : Not Answered  
Chosen Option : --

Q.5 \_\_\_\_\_ became the first Indian Badminton player to win the BWF World Tour Final in December 2018.

- Ans
- 1. PV Sindhu
  - 2. Aparna Popat
  - 3. Saina Nehwal
  - 4. Jwala Gutta

Question ID : 98958010818  
Status : Answered  
Chosen Option : 1

Q.5 The Second Battle of Tarain was fought in the year \_\_\_\_\_.

- Ans
- 1. 1345 AD
  - 2. 1294 AD
  - 3. 1079 AD
  - 4. 1192 AD

Question ID : 98958010832  
Status : Answered  
Chosen Option : 4

Q.6 The hypothalamus, a small region of the \_\_\_\_\_ plays a crucial role in many important functions of the human body.

- Ans
- 1. stomach
  - 2. liver
  - 3. kidney

4. brain

Question ID : 98958010841  
Status : Answered  
Chosen Option : 4

Q.6 The \_\_\_\_\_ is a Jain text containing the biographies of the Jain Tirthankaras, most notably Parshvanath and Mahavira.

1

- Ans
- 1. Uttaradhyayana
  - 2. Adi Purana
  - 3. Mahapurana
  - 4. Kalpa Sutra

Question ID : 98958010840  
Status : Not Answered  
Chosen Option : --

Q.6 An exhibition \_\_\_\_\_ was held in New Delhi, in January 2019 by the Minority Affairs Ministry to project the talent of Indian artisans.

2

- Ans
- 1. Threads Fashion and Lifestyle
  - 2. Adaah
  - 3. Hunar Haat
  - 4. Andaaz

Question ID : 98958010823  
Status : Answered  
Chosen Option : 3

Q.6 The \_\_\_\_\_ dance is performed by shepherd community of Goa during Navratri.

3

- Ans
- 1. Lava
  - 2. Dhangar
  - 3. Fugdi
  - 4. Kolkali

Question ID : 98958010798  
Status : Not Answered  
Chosen Option : --

Q.6 Which is the smallest bone in the human body?

4

- Ans
- 1. Incus
  - 2. Stapes
  - 3. Malleus
  - 4. Metacarsal

Question ID : 98958010821  
Status : Answered  
Chosen Option : 2

Q.6 In November 2018, \_\_\_\_\_ electronics company CASIO launched the world's first Goods and Services Tax (GST) calculator in India.

5

- Ans
- 1. Chinese
  - 2. UK

3. US  
 4. Japanese

Question ID : 98958010811  
Status : Answered  
Chosen Option : 4

Q.6 'The Hindu Young World-Goodbooks Award' 2018 in the 'Best Book: Fiction' category was given to \_\_\_\_\_ for 'Boy No. 32'.

- Ans  1. Venita Coelho  
 2. Vinayak Verma  
 3. Mamta Nainy  
 4. Rajiv Elipe

Question ID : 98958010820  
Status : Not Answered  
Chosen Option : --

Q.6 The \_\_\_\_\_ was awarded the International Gandhi Peace Prize (2016) for its work towards providing mid-day meals to children across India.

- Ans  1. Sulabh International  
 2. Vivekananda Kendra  
 3. Ekal Abhiyan Trust  
 4. Akshaya Patra Foundation

Question ID : 98958010800  
Status : Not Answered  
Chosen Option : --

Q.6 Which of the following gases turn lime water milky?

- Ans  1. Hydrogen  
 2. Oxygen  
 3. Nitrogen  
 4. Carbon Dioxide

Question ID : 98958010822  
Status : Answered  
Chosen Option : 4

Q.6 Which Schedule of the Indian Constitution deals with the disqualification of elected members on the ground of defection?

- Ans  1. Tenth  
 2. Twelfth  
 3. Ninth  
 4. Eleventh

Question ID : 98958010809  
Status : Answered  
Chosen Option : 1

Q.7 Weightlifter \_\_\_\_\_ won India's maiden gold medal at 2018 Youth Olympic Games in the men's 62 kg category in Argentina.

Ans

1. Jeremy Lalrinnunga

2. Tithi Dai  
 3. Santosh Yadav

4. Sanjita Chanu

Question ID : 98958010825

Status : Answered

Chosen Option : 4

Q.7  
1 The construction work of the ₹ 500-crore Pagladiya Multipurpose Dam project in Nalbari district of \_\_\_\_\_ will begin from February 2019.

Ans  1. Tripura

2. Assam

3. Meghalaya

4. Telangana

Question ID : 98958010816

Status : Not Answered

Chosen Option : --

Q.7  
2 Karma is a dance form from which of the following states?

Ans  1. Jharkhand

2. Rajasthan

3. Gujarat

4. Maharashtra

Question ID : 98958010834

Status : Not Answered

Chosen Option : --

Q.7  
3 The power of a lens is measured in \_\_\_\_\_.

Ans  1. Ampere

2. Kelvin

3. Candela

4. Diopter

Question ID : 98958010817

Status : Answered

Chosen Option : 4

Q.7  
4 Passer Domesticus is commonly known as \_\_\_\_\_.

Ans  1. Parrot

2. Lark

3. Sparrow

4. Pigeon

Question ID : 98958010835

Status : Answered

Chosen Option : 1

Q.7 In January 2019, the Reserve Bank of India initiated two surveys namely, Industrial Outlook Survey (IOS) and \_\_\_\_\_.  
5

- Ans
- 1. Services Trade Survey (STS)
  - 2. Services and Infrastructure Outlook Survey (SIOS)
  - 3. Services Outlook Survey (SOS)
  - 4. Services and Trade Outlook Survey (STOS)

Question ID : 98958010814  
Status : Not Answered  
Chosen Option : --

Q.7 In January 2019, the World Health Organisation released its list of 10 global health threats which demand immediate attention. Which of the following is NOT one of them?  
6

- Ans
- 1. HIV
  - 2. Dengue
  - 3. Communicable diseases
  - 4. Antimicrobial resistance

Question ID : 98958010831  
Status : Not Answered  
Chosen Option : --

Q.7 Sanrakshan Kshamata Mahotsav (SAKSHAM) falls under the aegis of the \_\_\_\_\_ Government of India.  
7

- Ans
- 1. Ministry of Finance
  - 2. Ministry of External Affairs
  - 3. Ministry of Chemicals and Fertilizers
  - 4. Ministry of Petroleum & Natural Gas

Question ID : 98958010801  
Status : Not Answered  
Chosen Option : --

Q.7 The tennis pair of \_\_\_\_\_ won a gold medal in the Men's Doubles tennis event at the 2018 Asian Games.  
8

- Ans
- 1. Rohan Bopanna and Divij Sharan
  - 2. Yuki Bhambri and Ramanathan Krishnan
  - 3. Aleksandr Bublik and Denis Yevseyev
  - 4. Mahesh Bhupathi and Leander Paes

Question ID : 98958010827  
Status : Not Answered  
Chosen Option : --

Q.7 'Sakhi centre' or 'One Stop Centre (OSC)' is a fully sponsored scheme of the Central Government under the Ministry of \_\_\_\_\_.  
9

- Ans
- 1. Women and Child Development
  - 2. Housing and Urban Affairs
  - 3. Culture
  - 4. Law and Justice

Question ID : 98958010799

Status : **Answered**  
Chosen Option : 1

Q.8  
0 The states of \_\_\_\_\_ celebrated their 47th Statehood Day on 21st January 2019.

- Ans
- 1. Uttarakhand, Manipur and Telangana
  - 2. Chhattisgarh, Telangana and Tripura
  - 3. Tripura, Assam and Telangana
  - 4. Tripura, Manipur and Meghalaya

Question ID : **98958010805**  
Status : **Not Answered**  
Chosen Option : --

Q.8  
1 The book 'Ammachi's Amazing Machines' by \_\_\_\_\_ won 'The Hindu Young World-Goodbooks Award' 2018 in the 'Best Picture Book: Illustration' category at the event.

- Ans
- 1. Vinayak Verma
  - 2. Rajiv Elipe
  - 3. Mamta Nainy
  - 4. Venita Coelho

Question ID : **98958010794**  
Status : **Not Answered**  
Chosen Option : --

Q.8  
2 Which of the following elements/chemical compounds has the highest density?

- Ans
- 1. Mercury
  - 2. Osmium
  - 3. Zinc
  - 4. Nickel

Question ID : **98958010796**  
Status : **Not Answered**  
Chosen Option : --

Q.8  
3 In January 2019, President Ramnath Kovind gave his assent to the 124th constitutional Amendment Bill (which is now the 103rd Amendment Act of the Constitution of India) providing \_\_\_\_\_ reservation for economically weaker sections from the upper castes.

- Ans
- 1. 15%
  - 2. 20%
  - 3. 5%
  - 4. 10%

Question ID : **98958010797**  
Status : **Answered**  
Chosen Option : 4

Q.8  
4 Who started the Asiatic Society of Bengal in 1784?

- Ans
- 1. William Jones
  - 2. William Adam
  - 3. William Wordsworth

4. William Carey

Question ID : 98958010829  
Status : Answered  
Chosen Option : 1

Q.8  
5 As of January 2019, the number of high courts in India is \_\_\_\_\_.

- Ans  1. 25  
 2. 30  
 3. 20  
 4. 18

Question ID : 98958010839  
Status : Not Answered  
Chosen Option : --

Q.8  
6 Banabhatta was the court poet of which of the following Indian kings?

- Ans  1. Harshavardhana  
 2. Chandra gupta II  
 3. Pulkesin II  
 4. Yasovarman

Question ID : 98958010836  
Status : Answered  
Chosen Option : 1

Q.8  
7 Pune is set to become the first Indian city to have a traffic robot in 2019. Which of the following statements is NOT true about the traffic police authorities of Pune and their robot named 'Roadeo'?

- Ans  1. Roadeo is equipped with a siren, skid-steering wheels and obstacle-detection sensors.  
 2. Roadeo has a 26-inch LCD display.  
 3. Roadeo will move around city roads, functioning as a quasi-traffic policeman and cautioning commuters.  
 4. Roadeo's hands have been engineered to move and show stop signs to vehicles

Question ID : 98958010795  
Status : Not Answered  
Chosen Option : --

Q.8  
8 Shot-putter \_\_\_\_\_ won a gold medal in the men's shot put event at the 2018 Jakarta-Palembang Asian Games held in Indonesia.

- Ans  1. Inderjit Singh  
 2. Tejinder Pal Singh Toor  
 3. Om Prakash Singh  
 4. Bahadur Singh Sagoo

Question ID : 98958010837  
Status : Not Answered  
Chosen Option : --

Q.8  
9 In which year did Independent India win its first Olympic gold medal?

- Ans  1. 2008  
 2. 1948  
 3. 1972  
 4. 1960

Question ID : 98958010815  
Status : Answered  
Chosen Option : 1

Q.9 The expansion project of Numaligarh Refinery involves setting up a crude oil pipeline from \_\_\_\_\_ to Numaligarh.

- Ans  1. Paradip  
 2. Banauni  
 3. Halida  
 4. Bina

Question ID : 98958010802  
Status : Not Answered  
Chosen Option : --

Q.9 Which of the following articles of the India Constitution deals with the Uniform Civil Code?

- Ans  1. Article 43  
 2. Article 46  
 3. Article 45  
 4. Article 44

Question ID : 98958010842  
Status : Not Answered  
Chosen Option : --

Q.9 In June 2017, NASA successfully launched \_\_\_\_\_ mission to study the interstellar medium, the matter between stars.

- Ans  1. BLESS  
 2. FLESS  
 3. CHESS  
 4. HESS

Question ID : 98958010803  
Status : Not Answered  
Chosen Option : --

Q.9 In January 2018, renowned scientist, \_\_\_\_\_ took charge as the Director of Vikram Sarabhai Space Centre (VSSC).

- Ans  1. Salim Ali  
 2. Jayant Narlikar  
 3. S. Somanath  
 4. C. N .R Rao

Question ID : 98958010806  
Status : Not Answered  
Chosen Option : --

Q.9 In January 2019, Prime Minister Narendra Modi inaugurated the Kollam Bypass. Which of the following is NOT true of the bypass?



4

Ans  1. It is 18 km long and has three lanes.

2.

It is the first National Highway project in the country taken up on a 50:50 Centre-State partnership.

3. It lies on the National Highway-66.

4.

Its opening would considerably reduce travel time between Alappuzha and Thiruvananthapuram.

Question ID : 98958010843

Status : Not Answered

Chosen Option : --

Q.9 The Drishyakala-Exhibition held at the Red Fort showcased art works from \_\_\_\_\_ till India's independence.

5

Ans  1. 11th century

2. 12th century

3. 16th century

4. 10th century

Question ID : 98958010838

Status : Not Answered

Chosen Option : --

Q.9 DNA was first isolated, analysed and recognised as a unique macro-molecule by \_\_\_\_\_ in 1869.

6

Ans  1. Friedrich Miescher

2. William Astbury

3. Oswald Avery

4. Alfred Hershey

Question ID : 98958010807

Status : Answered

Chosen Option : 1

Q.9 The Gurmukhi script was created in the 16th century CE by the second Sikh guru \_\_\_\_\_.

7

Ans  1. Guru Arjan

2. Guru Angad

3. Guru Ram Das

4. Guru Amar Das

Question ID : 98958010812

Status : Not Answered

Chosen Option : --

Q.9 In August 2018, India rejected Pakistan's objections on its two hydropower projects, Pakal Dul and Lower Kalnai on the \_\_\_\_\_ river.

8

Ans  1. Yamuna

2. Chenab

3. Brahmaputra

4. Kaveri

Question ID : 98958010833  
Status : Answered  
Chosen Option : 2

Q.9  
9 Garo Hills lie in \_\_\_\_\_ state.

- Ans
- 1. Nagaland
  - 2. Meghalaya
  - 3. Manipur
  - 4. Assam

Question ID : 98958010830  
Status : Not Answered  
Chosen Option : --

Q.1  
00 Manas Tiger Reserve is located in which Indian state?

- Ans
- 1. Assam
  - 2. Maharashtra
  - 3. Karnataka
  - 4. Rajasthan

Question ID : 98958010826  
Status : Not Answered  
Chosen Option : --

Q.1  
01 16 persons working 6 hours a day can complete a work in 10 days. In how many days 24 persons working 8 hours a day will complete 80% of that work?

- Ans
- 1. 3
  - 2. 6
  - 3. 4
  - 4. 8

Question ID : 98958010913  
Status : Answered  
Chosen Option : 3

Q.1  
02 Let  $\Delta ABC \sim \Delta RPQ$  and  $\frac{ar(\Delta ABC)}{ar(\Delta PQR)} = \frac{1}{9}$ . If  $AB = 3$  cm,  $BC = 4$  cm and  $AC = 5$  cm, then  $PQ$  is equal to:

- Ans
- 1. 9 cm
  - 2. 18 cm
  - 3. 12 cm
  - 4. 15 cm

Question ID : 98958010930  
Status : Answered  
Chosen Option : 1

Q.1  
03 ABCD is a cyclic quadrilateral such that AB is a diameter of the circle circumscribing it and  $\angle ADC = 160^\circ$ . What is the measure of the  $\angle BAC$ ?

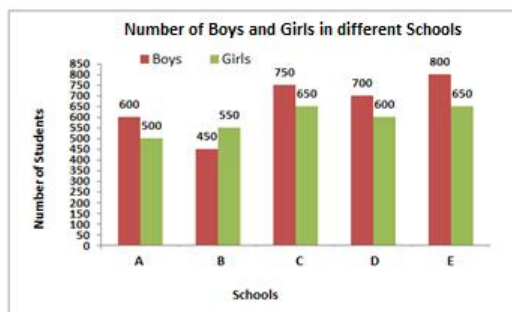
- Ans
- 1.  $60^\circ$
  - 2.  $75^\circ$
  - 3.  $70^\circ$
  - 4.  $65^\circ$

Question ID : 98958010927

Status : Answered

Chosen Option : 3

Q.1  
04



In the given bar graph, in which college, the percentage of boys is the highest?

- Ans
- 1. C
  - 2. D
  - 3. E
  - 4. A

Question ID : 98958010936

Status : Answered

Chosen Option : 1

Q.1  
05 From the top of a 120 m high tower, the angle of depression of the top of a pole is  $45^\circ$  and the angle of depression of the foot of the pole is  $\theta$ , such that  $\tan\theta = \frac{3}{2}$ . What is the height of the pole?

- Ans
- 1. 60 m
  - 2. 75 m
  - 3. 80 m
  - 4. 40 m

Question ID : 98958010934

Status : Answered

Chosen Option : 4

Q.1  
06 What is the ratio of mean proportional between 3.6 and 12.1 and third proportional between 2 and 11?

- Ans
- 1. 36 : 5
  - 2. 6 : 5
  - 3. 11 : 36
  - 4. 6 : 55

Question ID : 98958010909

Status : Not Answered

Chosen Option : --

Q.1  
07 If  $x + \frac{1}{x} = 7$ , then  $x^3 + \frac{1}{x^3}$  is equal to:

- Ans
- 1. 364
  - 2. 385
  - 3. 343
  - 4. 322

Question ID : 98958010924

Status : Answered  
Chosen Option : 4

Q.1 08 Two numbers are in the ratio 6 : 11. If their HCF is 28, then the sum of these two numbers is:

- Ans
- 1. 476
  - 2. 448
  - 3. 392
  - 4. 420

Question ID : 98958010896  
Status : Answered  
Chosen Option : 1

Q.1 09 A sum of ₹ 10,200 is invested partly at 8% per annum and remaining at 6% per annum for 3 years at simple interest. If the total interest is ₹ 2,124, how much money was invested at 6% per annum?

- Ans
- 1. ₹ 4,900
  - 2. ₹ 5,200
  - 3. ₹ 4,800
  - 4. ₹ 5,400

Question ID : 98958010911  
Status : Answered  
Chosen Option : 4

Q.1 10 If  $\sec 2x = \operatorname{cosec} (3x - 45^\circ)$ , then  $x$  is equal to:

- Ans
- 1.  $40^\circ$
  - 2.  $45^\circ$
  - 3.  $27^\circ$
  - 4.  $35^\circ$

Question ID : 98958010931  
Status : Answered  
Chosen Option : 3

Q.1 11 A cuboid of edges 32 cm, 4 cm and 4 cm is cut to form cubes of edge 4 cm each. What is the sum of total surface areas of all cubes formed?

- Ans
- 1.  $576 \text{ cm}^2$
  - 2.  $768 \text{ cm}^2$
  - 3.  $640 \text{ cm}^2$
  - 4.  $544 \text{ cm}^2$

Question ID : 98958010921  
Status : Answered  
Chosen Option : 2

Q.1 12 If  $a^3 - b^3 = 3552$  and  $(a - b) = 6$ , then  $(a + b)^2 - ab$  is equal to:

- Ans
- 1. 618
  - 2. 636
  - 3. 592
  - 4. 568

Question ID : 98958010925

Status : Answered

Chosen Option : 3

Q.1 13 The sides of a triangle are 24 cm, 45 cm and 51 cm. At each of its vertices, circles of radius 10.5 cm are drawn. What is the area of the triangle, excluding the portion covered by sectors of the circles? ( $\pi = \frac{22}{7}$ )

- Ans
- 1. 244.75 cm<sup>2</sup>
  - 2. 366.75 cm<sup>2</sup>
  - 3. 464.75 cm<sup>2</sup>
  - 4. 327.75 cm<sup>2</sup>

Question ID : 98958010920

Status : Not Attempted and Marked For Review

Chosen Option : --

Q.1 14 In an examination, 47% passed in science and 51% failed in mathematics. If 42% failed in both subjects, what percentage passed in both subjects?

- Ans
- 1. 38%
  - 2. 42%
  - 3. 40%
  - 4. 36%

Question ID : 98958010907

Status : Answered

Chosen Option : 2

Q.1 15 If a train runs with the speed of 52 km/h, it reaches its destination late by 15 minutes. However, if its speed is 65 km/h, it is late by 5 minutes only. The right time for the train to cover its journey is:

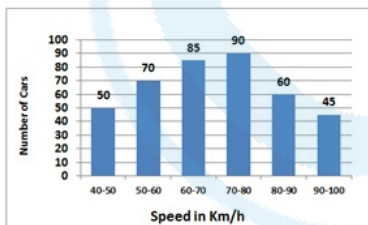
- Ans
- 1. 45 minutes
  - 2. 40 minutes
  - 3. 35 minutes
  - 4. 30 minutes

Question ID : 98958010917

Status : Answered

Chosen Option : 3

Q.1 16



In the given histogram, what is the mean speed of cars (in km/h) to nearest whole number?

- Ans
- 1. 69
  - 2. 70
  - 3. 72
  - 4. 71

Question ID : 98958010943

Status : Not Answered

Chosen Option : --

Q.1 The efficiencies of A, B and C are in the ratio 5 : 6 : 8. Working together, they can complete a piece of work in 120 hours. In how many hours will, B alone be able to complete 40% of that work?

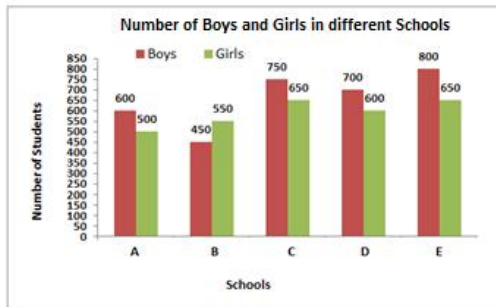
- Ans
- 1. 114
  - 2. 152
  - 3. 182.4
  - 4. 167.2

Question ID : 98958010914

Status : Answered

Chosen Option : 2

Q.1  
18



In the given bar graph, what is the ratio of the total boys and girls in all schools?

- Ans
- 1. 65 : 63
  - 2. 59 : 66
  - 3. 65 : 58
  - 4. 66 : 59

Question ID : 98958010935

Status : Answered

Chosen Option : 4

Q.1 A boat can go 10 km downstream and 8 km upstream in 49 minutes. Also it can go 12 km downstream and 4 km upstream in 42 minutes. What is the speed of stream in km/h?

- Ans
- 1. 1.5
  - 2. 1
  - 3. 2
  - 4. 2.5

Question ID : 98958010918

Status : Not Answered

Chosen Option : --

Q.1 The length of shadow of a vertical pole on the ground is 24 m. If the angle of elevation of the sun at that time is  $\theta$ , such that  $\sin \theta = \frac{5}{13}$ , then what is the height of the pole?

- Ans
- 1. 8 m
  - 2. 10 m
  - 3. 12 m
  - 4. 18 m

Question ID : 98958010933

Status : Answered

Chosen Option : 2

Q.1 In a class of 45 students, 40% are boys and rest are girls. The average weight of the girls is 55 kg and that of boys is 65 kg. What is the average weight (in kg) of the whole class?

Ans

1. 58 kg

2. 61 kg

3. 59 kg

Question ID : 98958010901

Status : Answered

Chosen Option : 4

Q.1 If the seven digit number  $3x6349y$  is divisible by 88, then what will be the value of  $(2x + 3y)$ ?

Ans  1. 32

2. 30

3. 28

4. 35

Question ID : 98958010895

Status : Answered

Chosen Option : 2

Q.1 If  $(x - 3)^2 + (2x - 5)^3 + (x - 4)^3 = (3x - 9)(2x - 5)(x - 4)$ , then what is the value of  $x$  ?

Ans  1. 4

2. 5

3. 2

4. 3

Question ID : 98958010926

Status : Answered

Chosen Option : 4

Q.1  $\frac{63.5 \times 63.5 \times 63.5 + 36.5 \times 36.5 \times 36.5}{6.35 \times 6.35 + 3.65 \times 3.65 - 6.35 \times 3.65}$  is equal to:

Ans  1. 10,000

2. 1,00,000

3. 100

4. 1,000

Question ID : 98958010900

Status : Answered

Chosen Option : 3

Q.1 One side of a rhombus is 6.5 cm and one of its diagonal is 12 cm. What is the area of the rhombus?

Ans  1.  $78 \text{ cm}^2$

2.  $15 \text{ cm}^2$

3.  $30 \text{ cm}^2$

4.  $60 \text{ cm}^2$

Question ID : 98958010919

Status : Answered

Chosen Option : 3

Q.1 If the income of A is 24% less than income of B, then what percentage is B's income is more than that of A?

26

- Ans
- 1.  $\frac{600}{31}\%$
  - 2.  $\frac{600}{17}\%$
  - 3.  $\frac{600}{29}\%$
  - 4.  $\frac{600}{19}\%$

Question ID : 98958010905

Status : Answered

Chosen Option : 4

Q.1 The price of sugar has increased by 14%. By what percentage can a person decrease the consumption so that there is an increase in the expenditure by 8% only? (correct to one decimal place)

27

- Ans
- 1. 5.9%
  - 2. 5.3%
  - 3. 5.7%
  - 4. 5.5%

Question ID : 98958010906

Status : Answered

Chosen Option : 2

Q.1 In  $\triangle ABC$ ,  $\angle A = 70^\circ$ . AB and AC are produced to points D and E respectively. If the bisectors of  $\angle CBD$  and  $\angle BCE$  meet at the point O, then  $\angle BOC$  is equal to:

28

- Ans
- 1.  $95^\circ$
  - 2.  $70^\circ$
  - 3.  $55^\circ$
  - 4.  $105^\circ$

Question ID : 98958010929

Status : Not Answered

Chosen Option : --

Q.1 Pipes A and B can fill a tank in 16 hours and 24 hours respectively whereas pipe C can empty the full tank in 40 hours. All three pipes are opened together, but pipe A is closed after 8 hours. After how many hours, the remaining part of tank will be filled?

29

- Ans
- 1. 28
  - 2. 22
  - 3. 26
  - 4. 30

Question ID : 98958010915

Status : Answered

Chosen Option : 2

Q.1 A shopkeeper sold two articles for ₹ 9,879 each. On one, he gained 11% and on the other, he lost 11%. What is the overall percentage gain or loss?

30

- Ans
- 1. 1.21% loss
  - 2. 1.21% gain
  - 3. 1.25% loss
  - 4. 1.25% gain



Question ID : 98958010908

Status : Answered

Chosen Option : 1

Q.1  
31 The value of  $\frac{\sin^2 60^\circ + \cos^2 30^\circ - \sec 35^\circ \cdot \sin 55^\circ}{\sec 60^\circ + \operatorname{cosec} 30^\circ}$  is equal to:

- Ans
- 1.  $\frac{1}{8}$
  - 2.  $\frac{1}{3}$
  - 3.  $\frac{1}{2}$
  - 4.  $\frac{1}{4}$

Question ID : 98958010932

Status : Answered

Chosen Option : 1

Q.1 The average of 20 numbers is 65. The average of the first 9 numbers is 68 and the average of next 8 numbers is 62. If the  
32 18<sup>th</sup> number is 3 more than 19<sup>th</sup> number and 9 less than 20<sup>th</sup> number, then what is the average of 19<sup>th</sup> and 20<sup>th</sup> number?

- Ans
- 1. 66
  - 2. 64.5
  - 3. 65
  - 4. 65.5

Question ID : 98958010902

Status : Answered

Chosen Option : 3

Q.1 PA and PB are two tangents from a point P outside the circle with centre O. If A and B are points on the circle such that  
33  $\angle APB = 110^\circ$ , then  $\angle OAB$  is equal to:

- Ans
- 1.  $45^\circ$
  - 2.  $55^\circ$
  - 3.  $70^\circ$
  - 4.  $35^\circ$

Question ID : 98958010928

Status : Answered

Chosen Option : 2

Q.1 A sum of ₹ 10,000 is invested for 17 months at 8% per annum compounded half yearly. What is the percentage gain at  
34 the end of 17 month, nearest to one decimal place?

- Ans
- 1. 12.0%
  - 2. 12.2%
  - 3. 12.4%
  - 4. 11.8%

Question ID : 98958010912

Status : Answered

Chosen Option : 3

Q.1 Two pipes A and B can fill a tank in 16 hours and 20 hours respectively. They are opened alternatively for 1 hour each,  
35 starting with pipe A first. In how many hours will the empty tank be filled?

- Ans
- 1.  $17\frac{3}{5}$

2.  $17\frac{1}{5}$

3.  $17\frac{1}{4}$

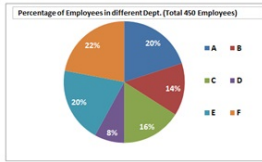
4.  $17\frac{3}{4}$

Question ID : 98958010916

Status : Answered

Chosen Option : 4

Q.1  
36



In the given pie-chart, if the female employees in department D is 75%, then how many male employees are in that department?

Ans  1. 5

2. 6

3. 9

4. 4

Question ID : 98958010940

Status : Answered

Chosen Option : 3

Q.1  
37

A sphere of radius 9 cm is melted and recast into small spheres of radius 2 cm each. How many such sphere can be made?

Ans  1. 90

2. 92

3. 93

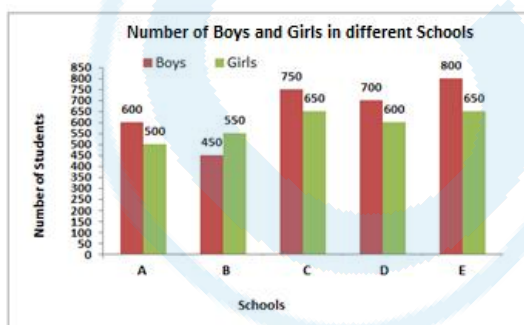
4. 91

Question ID : 98958010923

Status : Answered

Chosen Option : 4

Q.1  
38



In the given bar graph, what is the average number of girls from all schools?

Ans  1. 575

2. 595

3. 580

4. 590

Question ID : 98958010937

Status : Answered

Chosen Option : 4

Q.1 39 A, B and C started a business by investing ₹ 1,37,500 and ₹ 1,62,500 and ₹ 1,87,500 respectively. A is a working partner and gets 20% of the profit as working allowance and remaining is distributed in the proportion of their investment. If the total profit is ₹ 2,19,375, what is the share of C?

- Ans
- 1. ₹ 88,600
  - 2. ₹ 64,500
  - 3. ₹ 67,500
  - 4. ₹ 62,700

Question ID : 98958010910  
 Status : Answered  
 Chosen Option : 3

Q.1 40 What is the sum of digits of the least number, which when divided by 15, 18 and 42 leaves the same remainder 8 in each case and is also divisible by 13?

- Ans
- 1. 25
  - 2. 24
  - 3. 22
  - 4. 26

Question ID : 98958010897  
 Status : Answered  
 Chosen Option : 4

Q.1 41 The radius of a cylinder is increased by 60% and radius of base is decreased by 20%. What is percentage increase in its volume?

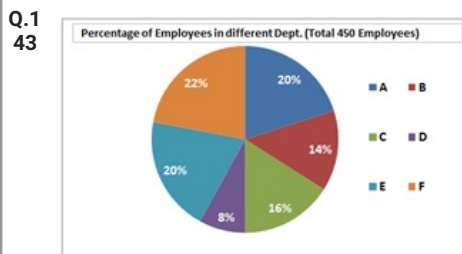
- Ans
- 1. 105.2%
  - 2. 104.8%
  - 3. 105.8%
  - 4. 105.6%

Question ID : 98958010922  
 Status : Answered  
 Chosen Option : 2

Q.1 42 The square root which of the following is a rational number?

- Ans
- 1. 5535.36
  - 2. 3152.88
  - 3. 72905.2
  - 4. 67508.5

Question ID : 98958010894  
 Status : Not Answered  
 Chosen Option : --



In the given pie-chart, what is the number of employees working in department A?

- Ans
- 1. 960

- 2. 90
- 3. 80
- 4. 85

Question ID : 98958010938  
 Status : Answered  
 Chosen Option : 2

Q.1 44 A shopkeeper marks the price of an article such that after giving a discount of 30%, he gains 20%. If the marked price of the article is ₹ 480, what is the cost price of the article?

- Ans
- 1. ₹ 280
  - 2. ₹ 300
  - 3. ₹ 250
  - 4. ₹ 260

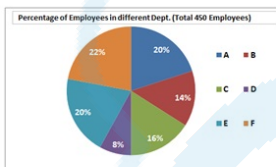
Question ID : 98958010903  
 Status : Answered  
 Chosen Option : 1

Q.1 45 The successive discounts of 30%, 25% and 15% is equivalent to a single discount of:

- Ans
- 1. 60.275%
  - 2. 54.625%
  - 3. 55.375%
  - 4. 60.725%

Question ID : 98958010904  
 Status : Answered  
 Chosen Option : 3

Q.1 46



In the given pie-chart, what is the central angle of the sector representing the number of employees in the department D?

- Ans
- 1. 28.8°
  - 2. 29.6°
  - 3. 29.2°
  - 4. 29.8°

Question ID : 98958010939  
 Status : Answered  
 Chosen Option : 1

Q.1 47 The value of  $6\frac{1}{5} - [4\frac{1}{2} - \{\frac{5}{6} - (\frac{3}{5} + \frac{3}{10} - \frac{7}{15})\}]$  is:

- Ans
- 1. 2.5
  - 2. 1.8
  - 3. 2.1
  - 4. 2.8

Question ID : 98958010898  
 Status : Answered

Chosen Option : 2

Q.1  
48  $\frac{17}{30} + [3\frac{1}{5} - \{ \frac{5}{6} - (3\frac{4}{5} \div 9\frac{1}{2}) \}]$  is equal to:

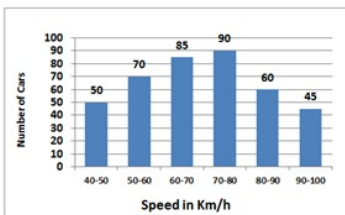
- Ans
- 1.  $\frac{3}{5}$
  - 2.  $\frac{1}{5}$
  - 3.  $\frac{11}{3}$
  - 4.  $\frac{10}{3}$

Question ID : 98958010899

Status : Answered

Chosen Option : 4

Q.1  
49



In the given histogram, what percentage of cars were running with the speed less than 60 km/h?

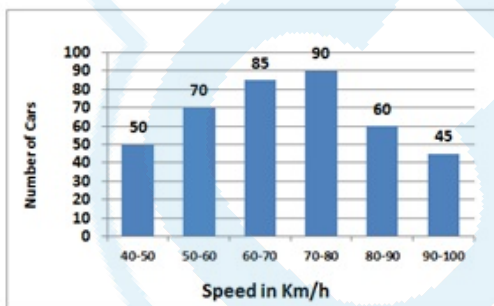
- Ans
- 1. 30%
  - 2. 35%
  - 3. 25%
  - 4. 28%

Question ID : 98958010941

Status : Answered

Chosen Option : 1

Q.1  
50



In the given histogram, in which class interval, the median lies?

- Ans
- 1. 70-80
  - 2. 60-70
  - 3. 80-90
  - 4. 50-60

Question ID : 98958010942

Status : Not Answered

Chosen Option : --

Q.1  
51

Ans  1. once in a while

2. having long ears

3. instantly

4. a very long time

Question ID : 98958010577

Status : Answered

Chosen Option : 4

Q.1 52 Select the most appropriate meaning of the given idiom.

Take heart

Ans  1. to assess the situation

2. to feel grieved

3. to rebuke

4. to take courage

Question ID : 98958010574

Status : Answered

Chosen Option : 2

Q.1 53 Select the most appropriate word to fill in the blank.

I saw her \_\_\_\_\_ your cupboard.

Ans  1. to opening

2. opened

3. opening

4. to open

Question ID : 98958010556

Status : Answered

Chosen Option : 3

Q.1 54 Select the wrongly spelt word.

Ans  1. devout

2. devotion

3. divert

4. devison

Question ID : 98958010583

Status : Answered

Chosen Option : 4

Comprehension:

In the following passage some words have been deleted. Fill in the blanks with the help of the alternatives given. Select the most appropriate option for each number.

The woolly mammoth was a very large elephant-like mammal that lived on Earth several thousand years \_\_\_\_\_ (1). Some mammoths grew to be four meters \_\_\_\_\_ (2) and the largest weighed almost nine tons. \_\_\_\_\_ (3) male and female mammoths had very large tusks and walked \_\_\_\_\_ (4) every continent except Australia \_\_\_\_\_ (5) South America. Sadly, these giant creatures became extinct.

SubQuestion No : 155

Q.1  
55 Select the most appropriate option to fill in blank No.1.

- Ans
- 1. before
  - 2. past
  - 3. ahead
  - 4. ago

Question ID : 98958010558

Status : Not Answered

Chosen Option : --

Comprehension:

In the following passage some words have been deleted. Fill in the blanks with the help of the alternatives given. Select the most appropriate option for each number.

The woolly mammoth was a very large elephant-like mammal that lived on Earth several thousand years \_\_\_\_\_ (1). Some mammoths grew to be four meters \_\_\_\_\_ (2) and the largest weighed almost nine tons. \_\_\_\_\_ (3) male and female mammoths had very large tusks and walked \_\_\_\_\_ (4) every continent except Australia \_\_\_\_\_ (5) South America. Sadly, these giant creatures became extinct.

SubQuestion No : 156

Q.1  
56 Select the most appropriate option to fill in blank No.2.

- Ans
- 1. low
  - 2. lofty
  - 3. huge
  - 4. high

Question ID : 98958010559

Status : Not Answered

Chosen Option : --

Comprehension:

In the following passage some words have been deleted. Fill in the blanks with the help of the alternatives given. Select the most appropriate option for each number.

The woolly mammoth was a very large elephant-like mammal that lived on Earth several thousand years \_\_\_\_\_ (1). Some mammoths grew to be four meters \_\_\_\_\_ (2) and the largest weighed almost nine tons. \_\_\_\_\_ (3) male and female mammoths had very large tusks and walked \_\_\_\_\_ (4) every continent except Australia \_\_\_\_\_ (5) South America. Sadly, these giant creatures became extinct.

SubQuestion No : 157

Q.1  
57 Select the most appropriate option to fill in blank No.3.

- Ans
- 1. Either
  - 2. Each
  - 3. Every
  - 4. Both

Question ID : 98958010560  
Status : Not Answered  
Chosen Option : --

Comprehension:

In the following passage some words have been deleted. Fill in the blanks with the help of the alternatives given. Select the most appropriate option for each number.

The woolly mammoth was a very large elephant-like mammal that lived on Earth several thousand years \_\_\_\_\_ (1). Some mammoths grew to be four meters \_\_\_\_\_ (2) and the largest weighed almost nine tons. \_\_\_\_\_ (3) male and female mammoths had very large tusks and walked \_\_\_\_\_ (4) every continent except Australia \_\_\_\_\_ (5) South America. Sadly, these giant creatures became extinct.

SubQuestion No : 158

Q.1  
58 Select the most appropriate option to fill in blank No.4.

- Ans
- 1. on
  - 2. into
  - 3. under
  - 4. over

Question ID : 98958010561  
Status : Not Answered  
Chosen Option : --

Comprehension:



In the following passage some words have been deleted. Fill in the blanks with the help of the alternatives given. Select the most appropriate option for each number.

The woolly mammoth was a very large elephant-like mammal that lived on Earth several thousand years \_\_\_\_\_ (1). Some mammoths grew to be four meters \_\_\_\_\_ (2) and the largest weighed almost nine tons. \_\_\_\_\_ (3) male and female mammoths had very large tusks and walked \_\_\_\_\_ (4) every continent except Australia \_\_\_\_\_ (5) South America. Sadly, these giant creatures became extinct.

SubQuestion No : 159

Q.1  
59 Select the most appropriate option to fill in blank No.5.

- Ans
- 1. and
  - 2. also
  - 3. or
  - 4. but

Question ID : 98958010562  
Status : Not Answered  
Chosen Option : --

Q.1  
60 In the sentence identify the segment which contains the grammatical error.

No sooner he had left the house than there was a phone call for him.

- Ans
- 1. No sooner
  - 2. he had left
  - 3. for him
  - 4. than there was

Question ID : 98958010544  
Status : Answered  
Chosen Option : 2

Q.1  
61 Select the most appropriate meaning of the given idiom.

get a gold star

- Ans
- 1. to earn a merit point for doing well
  - 2. to compliment someone
  - 3. to obtain possession of something
  - 4. to get killed in war

Question ID : 98958010573  
Status : Not Answered  
Chosen Option : --

Q.1  
62 Select the most appropriate word to fill in the blank.

After the end of this lesson you \_\_\_\_\_ be able to write a paragraph on this topic.

- Ans
- 1. will
  - 2. could
  - 3. can

4. must

Question ID : 98958010552  
Status : Answered  
Chosen Option : 1

Q.1  
63 Select the wrongly spelt word.

- Ans
- 1. villain
  - 2. valuable
  - 3. victory
  - 4. vaccum

Question ID : 98958010586  
Status : Answered  
Chosen Option : 4

Q.1  
64 Select the wrongly spelt word.

- Ans
- 1. recieve
  - 2. reign
  - 3. rivalry
  - 4. rupee

Question ID : 98958010585  
Status : Answered  
Chosen Option : 1

Q.1  
65 Select the most appropriate word for the given group of words.

a wooden drum in which beer or oil is stored

- Ans
- 1. gale
  - 2. bale
  - 3. barrel
  - 4. cache

Question ID : 98958010580  
Status : Answered  
Chosen Option : 1

Q.1  
66 Select the antonym of the given word.

IMMACULATE

- Ans
- 1. untarnished
  - 2. flawless
  - 3. systematic
  - 4. messy

Question ID : 98958010572  
Status : Answered  
Chosen Option : 4

Q.1

67 Select the synonym of the given word.

- Ans
- 1. trekking
  - 2. holiday
  - 3. boating
  - 4. tour

Question ID : 98958010565  
Status : Answered  
Chosen Option : 4

Q.1  
68 In the sentence identify the segment which contains the grammatical error.

Although the toys are altogether in the cupboard they are not properly arranged.

- Ans
- 1. in the cupboard
  - 2. are altogether
  - 3. are not properly arranged
  - 4. Although the toys

Question ID : 98958010545  
Status : Answered  
Chosen Option : 3

Q.1  
69 Select the synonym of the given word.

NINCOMPOOP

- Ans
- 1. bold
  - 2. innocent
  - 3. clever
  - 4. foolish

Question ID : 98958010567  
Status : Not Answered  
Chosen Option : --

Q.1  
70 Select the most appropriate option to substitute the underlined segment in the given sentence. If there is no need to substitute it, Select No improvement.

A fire broke out in a slum cluster in the capital yesterday for short circuit at the overhanging wires.

- Ans
- 1. No improvement
  - 2. for short circuit in the overhanging wires.
  - 3. due to short circuit in the overhanging wires.
  - 4. due to short circuiting on the overhanging wires.

Question ID : 98958010549  
Status : Answered  
Chosen Option : 3

Q.1  
71 In the sentence identify the segment which contains the grammatical error.

Silver, as well as gold, are considered as precious metals.

- Ans
- 1. as precious metals.

- 2. as well as
- 3. Silver
- 4. are considered

Question ID : 98958010542  
Status : Answered  
Chosen Option : 4

Q.1 72 Select the most appropriate word for the given group of words.

A system of government in which priests rule in the name of Gods or a god.

- Ans
- 1. plutocracy
  - 2. theocracy
  - 3. aristocracy
  - 4. oligarchy

Question ID : 98958010581  
Status : Answered  
Chosen Option : 2

Q.1 73 Select the most appropriate word to fill in the blank.

We cannot postpone today's discussion on the issue of security of the colony \_\_\_\_\_ it is urgent.

- Ans
- 1. in case
  - 2. although
  - 3. because
  - 4. therefore

Question ID : 98958010554  
Status : Answered  
Chosen Option : 3

Q.1 74 Select the most appropriate word to fill in the blank.

The flat \_\_\_\_\_ is nice but the approach road is too narrow and congested.

- Ans
- 1. itself
  - 2. herself
  - 3. himself
  - 4. oneself

Question ID : 98958010555  
Status : Answered  
Chosen Option : 1

Q.1 75 Select the synonym of the given word.

AVOID

- Ans
- 1. evade
  - 2. face
  - 3. approach
  - 4. pursue

Question ID : 98958010566

Status : Answered  
Chosen Option : 1

Q.1  
76 Select the synonym of the given word.

EXECUTE

- Ans
- 1. apply
  - 2. occupy
  - 3. variety
  - 4. implement

Question ID : 98958010563  
Status : Answered  
Chosen Option : 4

Q.1  
77 Select the most appropriate meaning of the given idiom.

the icing on the cake

- Ans
- 1. something that delays action
  - 2. Something that is essential but difficult to do
  - 3. something that makes one happy
  - 4. something that makes a good situation even better

Question ID : 98958010576  
Status : Answered  
Chosen Option : 4

Q.1  
78 Select the antonym of the given word.

DETER

- Ans
- 1. dissuade
  - 2. encourage
  - 3. prevent
  - 4. excite

Question ID : 98958010571  
Status : Answered  
Chosen Option : 2

Q.1  
79 Select the synonym of the given word.

REMEDY

- Ans
- 1. bearing
  - 2. healing
  - 3. cure
  - 4. restore

Question ID : 98958010564  
Status : Answered  
Chosen Option : 2

Q.1  
80 Select the wrongly spelt word.

- Ans
- 1. equivocal
  - 2. equivelant
  - 3. equation
  - 4. equality

Question ID : 98958010584  
Status : Answered  
Chosen Option : 2

Q.1  
81 In the sentence identify the segment which contains the grammatical error.

From my hotel I could see that a flock of birds were flying over the lake.

- Ans
- 1. over the lake
  - 2. were flying
  - 3. From my hotel
  - 4. I could see

Question ID : 98958010543  
Status : Answered  
Chosen Option : 2

Q.1  
82 Select the most appropriate word for the given group of words.

persons working at the same place

- Ans
- 1. homogeneous
  - 2. fellows
  - 3. contemporaries
  - 4. colleagues

Question ID : 98958010578  
Status : Answered  
Chosen Option : 4

Q.1  
83 Select the most appropriate option to substitute the underlined segment in the given sentence. If there is no need to substitute it, Select No improvement.

All the professor of this college are provided with free bungalows.

- Ans
- 1. Each professor of this college
  - 2. All the professors of this college
  - 3. No improvement
  - 4. All professor of this college

Question ID : 98958010547  
Status : Answered  
Chosen Option : 2

Comprehension:

Read the following passage and answer the questions given after it.

Some 200 km from Leh are the villages of Dha, Hanu, Garkone and Darchik on both sides of the Indus River, inhabited by the Buddhist Dard Tribes. The villages are together called the “Aryan valley”. “The word ‘Dard’ is derived from a Sanskrit word, ‘Daradas’, which means people who live on hillsides,” said Virendra Bangroo, assistant professor at Indira Gandhi National Centre for the Arts (IGNCA), who has extensively researched on their lives. He added people of this region are culturally and linguistically different from those in other parts of Ladakh. Among other researchers who have gone into the community’s roots, there is a line of thought that the “Aryans of Ladakh” or the “Brokpas” might have descended from soldiers in Alexander’s army who had come to the region over 2,000 years ago. The Dard Aryans, however, do not document their history, Bangroo said.

They rear goat and sheep for milk and meat, and their festivals are based on the solar calendar. Bangroo visited the regions inhabited by the Dard Aryan community back in 2017, where he helped set up two museums to archive their cultural heritage. Bangroo is of the view that their traditions go back 5,000 years; those who still follow the original customs worship trees, rivers and mountains. These tribals are mainly dependent on agriculture; the apricots grown here are considered among the best in the world and there are 12 varieties of grapes in the region. Bangroo said grape-wine is very popular in the “Aryan valley”.

A number of researchers, as well as the tribals, perceive a threat to the heritage of the community owing to modernisation, migration and religious conversion. The community now numbers about 4,000. Over the last few decades, many of them have embraced Islam or Buddhism. “The community prohibits marriage with outsiders to keep the gene pool intact. Of late, the Dard men have been migrating to other parts of the region in search of livelihood and marrying outside the tribe,” Bangroo said. “The tribe is struggling to find a balance between modernity and traditional values.” Also, after the Kargil War, development work in this region has been restricted. Some of the areas of the Aryan valley are out of bounds for outsiders, since it borders Pakistan-occupied Kashmir.

Members of the community said there are only three high schools in their villages and very limited resources for livelihood — mainly because of the harsh weather and difficult terrain. As such, they have no option but to migrate to cities for higher education and employment. They have demanded that the government set up a tribal hostel and declare the “Aryan valley” a heritage village to boost tourism.

SubQuestion No : 184

Q.1 The first paragraph of the passage mainly talks about

84

Ans  1. the concerns of Dard Aryans.

2. what the demands of Dard Aryans are.

✗ 3. the customs of Dard Aryans.

✓ 4. who the Dard Aryans are.

Question ID : 98958010589

Status : Not Answered

Chosen Option : --

Comprehension:





Read the following passage and answer the questions given after it.

Some 200 km from Leh are the villages of Dha, Hanu, Garkone and Darchik on both sides of the Indus River, inhabited by the Buddhist Dard Tribes. The villages are together called the “Aryan valley”. “The word ‘Dard’ is derived from a Sanskrit word, ‘Daradas’, which means people who live on hillsides,” said Virendra Bangroo, assistant professor at Indira Gandhi National Centre for the Arts (IGNCA), who has extensively researched on their lives. He added people of this region are culturally and linguistically different from those in other parts of Ladakh. Among other researchers who have gone into the community’s roots, there is a line of thought that the “Aryans of Ladakh” or the “Brokpas” might have descended from soldiers in Alexander’s army who had come to the region over 2,000 years ago. The Dard Aryans, however, do not document their history, Bangroo said.

They rear goat and sheep for milk and meat, and their festivals are based on the solar calendar. Bangroo visited the regions inhabited by the Dard Aryan community back in 2017, where he helped set up two museums to archive their cultural heritage. Bangroo is of the view that their traditions go back 5,000 years; those who still follow the original customs worship trees, rivers and mountains. These tribals are mainly dependent on agriculture; the apricots grown here are considered among the best in the world and there are 12 varieties of grapes in the region. Bangroo said grape-wine is very popular in the “Aryan valley”.

A number of researchers, as well as the tribals, perceive a threat to the heritage of the community owing to modernisation, migration and religious conversion. The community now numbers about 4,000. Over the last few decades, many of them have embraced Islam or Buddhism. “The community prohibits marriage with outsiders to keep the gene pool intact. Of late, the Dard men have been migrating to other parts of the region in search of livelihood and marrying outside the tribe,” Bangroo said. “The tribe is struggling to find a balance between modernity and traditional values.” Also, after the Kargil War, development work in this region has been restricted. Some of the areas of the Aryan valley are out of bounds for outsiders, since it borders Pakistan-occupied Kashmir.

Members of the community said there are only three high schools in their villages and very limited resources for livelihood — mainly because of the harsh weather and difficult terrain. As such, they have no option but to migrate to cities for higher education and employment. They have demanded that the government set up a tribal hostel and declare the “Aryan valley” a heritage village to boost tourism.

SubQuestion No : 185

Q.1  
85 What is the main concern of the Dard Aryans?

- Ans
- 1. their heritage is facing a threat.
  - 2. many people are migrating from the villages.

✗ 3. some people are converting their religion.

✗ 4. people of the community are becoming modern.

Question ID : 98958010590

Status : Not Answered

Chosen Option : --

Comprehension:



Read the following passage and answer the questions given after it.

Some 200 km from Leh are the villages of Dha, Hanu, Garkone and Darchik on both sides of the Indus River, inhabited by the Buddhist Dard Tribes. The villages are together called the “Aryan valley”. “The word ‘Dard’ is derived from a Sanskrit word, ‘Daradas’, which means people who live on hillsides,” said Virendra Bangroo, assistant professor at Indira Gandhi National Centre for the Arts (IGNCA), who has extensively researched on their lives. He added people of this region are culturally and linguistically different from those in other parts of Ladakh. Among other researchers who have gone into the community’s roots, there is a line of thought that the “Aryans of Ladakh” or the “Brokpas” might have descended from soldiers in Alexander’s army who had come to the region over 2,000 years ago. The Dard Aryans, however, do not document their history, Bangroo said.

They rear goat and sheep for milk and meat, and their festivals are based on the solar calendar. Bangroo visited the regions inhabited by the Dard Aryan community back in 2017, where he helped set up two museums to archive their cultural heritage. Bangroo is of the view that their traditions go back 5,000 years; those who still follow the original customs worship trees, rivers and mountains. These tribals are mainly dependent on agriculture; the apricots grown here are considered among the best in the world and there are 12 varieties of grapes in the region. Bangroo said grape-wine is very popular in the “Aryan valley”.

A number of researchers, as well as the tribals, perceive a threat to the heritage of the community owing to modernisation, migration and religious conversion. The community now numbers about 4,000. Over the last few decades, many of them have embraced Islam or Buddhism. “The community prohibits marriage with outsiders to keep the gene pool intact. Of late, the Dard men have been migrating to other parts of the region in search of livelihood and marrying outside the tribe,” Bangroo said. “The tribe is struggling to find a balance between modernity and traditional values.” Also, after the Kargil War, development work in this region has been restricted. Some of the areas of the Aryan valley are out of bounds for outsiders, since it borders Pakistan-occupied Kashmir.

Members of the community said there are only three high schools in their villages and very limited resources for livelihood — mainly because of the harsh weather and difficult terrain. As such, they have no option but to migrate to cities for higher education and employment. They have demanded that the government set up a tribal hostel and declare the “Aryan valley” a heritage village to boost tourism.

SubQuestion No : 186

Q.1  
86 What are the demands of the Dard Aryans from the government?

Ans  1. to provide livelihood and establish a tribal hostel  
 2. to stop migration of people and set up a school

- 3. to boost tourism and take up development work in the valley
- 4. to set up a tribal hostel and declare the Aryan Valley a heritage village

Question ID : 98958010591  
Status : Not Answered  
Chosen Option : --

Comprehension:



Read the following passage and answer the questions given after it.

Some 200 km from Leh are the villages of Dha, Hanu, Garkone and Darchik on both sides of the Indus River, inhabited by the Buddhist Dard Tribes. The villages are together called the “Aryan valley”. “The word ‘Dard’ is derived from a Sanskrit word, ‘Daradas’, which means people who live on hillsides,” said Virendra Bangroo, assistant professor at Indira Gandhi National Centre for the Arts (IGNCA), who has extensively researched on their lives. He added people of this region are culturally and linguistically different from those in other parts of Ladakh. Among other researchers who have gone into the community’s roots, there is a line of thought that the “Aryans of Ladakh” or the “Brokpas” might have descended from soldiers in Alexander’s army who had come to the region over 2,000 years ago. The Dard Aryans, however, do not document their history, Bangroo said.

They rear goat and sheep for milk and meat, and their festivals are based on the solar calendar. Bangroo visited the regions inhabited by the Dard Aryan community back in 2017, where he helped set up two museums to archive their cultural heritage. Bangroo is of the view that their traditions go back 5,000 years; those who still follow the original customs worship trees, rivers and mountains. These tribals are mainly dependent on agriculture; the apricots grown here are considered among the best in the world and there are 12 varieties of grapes in the region. Bangroo said grape-wine is very popular in the “Aryan valley”.

A number of researchers, as well as the tribals, perceive a threat to the heritage of the community owing to modernisation, migration and religious conversion. The community now numbers about 4,000. Over the last few decades, many of them have embraced Islam or Buddhism. “The community prohibits marriage with outsiders to keep the gene pool intact. Of late, the Dard men have been migrating to other parts of the region in search of livelihood and marrying outside the tribe,” Bangroo said. “The tribe is struggling to find a balance between modernity and traditional values.” Also, after the Kargil War, development work in this region has been restricted. Some of the areas of the Aryan valley are out of bounds for outsiders, since it borders Pakistan-occupied Kashmir.

Members of the community said there are only three high schools in their villages and very limited resources for livelihood — mainly because of the harsh weather and difficult terrain. As such, they have no option but to migrate to cities for higher education and employment. They have demanded that the government set up a tribal hostel and declare the “Aryan valley” a heritage village to boost tourism.

SubQuestion No : 187

Q.1  
87 Which statement indicates best that the Dard Aryans is a community with ancient past?

Ans

- Some scholars think that they might have descended from
1. the soldiers in Alexander's army who had come about 2000 years ago.
  2. Dar Aryans rear goat and sheep for milk and meat, and their festivals are based on the solar calendar.
  3. Barbarians - which means people who live on hillside Bangroo is of the view that their traditions go back 5,000 years; those who still follow the original customs worship trees, rivers and mountains.
  - 4.

Question ID : 98958010592

Status : Not Answered

Chosen Option : --

Comprehension:

Read the following passage and answer the questions given after it.

Some 200 km from Leh are the villages of Dha, Hanu, Garkone and Darchik on both sides of the Indus River, inhabited by the Buddhist Dard Tribes. The villages are together called the “Aryan valley”. “The word ‘Dard’ is derived from a Sanskrit word, ‘Daradas’, which means people who live on hillsides,” said Virendra Bangroo, assistant professor at Indira Gandhi National Centre for the Arts (IGNCA), who has extensively researched on their lives. He added people of this region are culturally and linguistically different from those in other parts of Ladakh. Among other researchers who have gone into the community’s roots, there is a line of thought that the “Aryans of Ladakh” or the “Brokpas” might have descended from soldiers in Alexander’s army who had come to the region over 2,000 years ago. The Dard Aryans, however, do not document their history, Bangroo said.

They rear goat and sheep for milk and meat, and their festivals are based on the solar calendar. Bangroo visited the regions inhabited by the Dard Aryan community back in 2017, where he helped set up two museums to archive their cultural heritage. Bangroo is of the view that their traditions go back 5,000 years; those who still follow the original customs worship trees, rivers and mountains. These tribals are mainly dependent on agriculture; the apricots grown here are considered among the best in the world and there are 12 varieties of grapes in the region. Bangroo said grape-wine is very popular in the “Aryan valley”.

A number of researchers, as well as the tribals, perceive a threat to the heritage of the community owing to modernisation, migration and religious conversion. The community now numbers about 4,000. Over the last few decades, many of them have embraced Islam or Buddhism. “The community prohibits marriage with outsiders to keep the gene pool intact. Of late, the Dard men have been migrating to other parts of the region in search of livelihood and marrying outside the tribe,” Bangroo said. “The tribe is struggling to find a balance between modernity and traditional values.” Also, after the Kargil War, development work in this region has been restricted. Some of the areas of the Aryan valley are out of bounds for outsiders, since it borders Pakistan-occupied Kashmir.

Members of the community said there are only three high schools in their villages and very limited resources for livelihood — mainly because of the harsh weather and difficult terrain. As such, they have no option but to migrate to cities for higher education and employment. They have demanded that the government set up a tribal hostel and declare the “Aryan valley” a heritage village to boost tourism.

SubQuestion No : 188

Q.1  
88 Which statement is NOT true according to the passage?

Ans  
✓ 1. The Aryans are culturally and linguistically the same as the other people of Ladakh.

2. There are only three high schools in their villages and very limited resources for livelihood
3. Dard Aryans have to migrate to cities for higher education
4. The valley has a difficult terrain and faces harsh weather conditions.

Question ID : 98958010593

Status : Not Answered

Chosen Option : --

Q.1 89 Select the most appropriate option to substitute the underlined segment in the given sentence. If there is no need to substitute it, Select No improvement.

Kumbh Mela, held at Prayagraj at the confluence of the rivers Ganga and Yamuna, is knowing to be the bigger human gathering in the world.

Ans  1. is known to be the biggest human gathering

2. has been known to be the bigger human gathering

3. is knowing to be the biggest human gathering

4. No improvement

Question ID : 98958010548

Status : Not Answered

Chosen Option : --

Q.1 90 In the sentence identify the segment which contains the grammatical error.

A new research study has shown that long before they took up a strict vegetarian diet, the much loved pandas was a meat-eater.

Ans  1. has shown

2. that long before

3. was a meat-eater

4. took up

Question ID : 98958010546

Status : Not Answered

Chosen Option : --

Q.1 91 Select the most appropriate option to substitute the underlined segment in the given sentence. If there is no need to substitute it, Select No improvement.

Australia had to deploy the army to tackle the devastating floods that inundate homes, schools and airports in the country's northeastern part.

Ans  1. the devastating floods what inundate homes

2. No improvement

3. the devastating floods that inundated homes

4. the devastating floods that were inundating homes

Question ID : 98958010551

Status : Not Answered

Chosen Option : --

Q.1 92 Select the most appropriate option to substitute the underlined segment in the given sentence. If there is no need to substitute it, Select No improvement.

Officials say more than 10 million people take a dip at the confluence of the rivers Ganga and Yamuna in auspicious days for Kumbh Mela.

Ans  1. in auspicious days during Kumbh Mela.

2. on auspicious days during Kumbh Mela.



3. on auspicious days for Kumbh Mela.

4. No improvement

Question ID : 98958010550

Status : Not Answered

Chosen Option : --

Q.1  
93 Select the wrongly spelt word.

Ans  1. ommision

2. provision

3. invasion

4. occasion

Question ID : 98958010587

Status : Not Answered

Chosen Option : --

Q.1  
94 Select the antonym of the given word.

ANTIQUÉ

Ans  1. prehistoric

2. conventional

3. modern

4. traditional

Question ID : 98958010569

Status : Not Answered

Chosen Option : --

Q.1  
95 Select the most appropriate meaning of the given idiom.

to be taken aback

Ans  1. to pay no heed

2. to be very excited

3. to be surprised

4. to take something back

Question ID : 98958010575

Status : Not Answered

Chosen Option : --

Q.1  
96 Select the antonym of the given word.

AGILE

Ans  1. lethargic

2. strong

3. nimble

4. confused

Question ID : 98958010568

Status : **Not Answered**  
Chosen Option : --

Q.1  
97 Select the antonym of the given word.

**BOISTEROUS**

- Ans
- 1. peaceful
  - 2. excited
  - 3. turbulent
  - 4. unruly

Question ID : **98958010570**  
Status : **Not Answered**  
Chosen Option : --

Q.1  
98 Select the most appropriate word for the given group of words.  
an instrument for measuring time accurately in spite of motion or variations in temperature, humidity, and air pressure.

- Ans
- 1. crescograph
  - 2. cardiograph
  - 3. chronometer
  - 4. cryptograph

Question ID : **98958010582**  
Status : **Not Answered**  
Chosen Option : --

Q.1  
99 Select the most appropriate word to fill in the blank.

She left \_\_\_\_\_ Mumbai \_\_\_\_\_ the Rajdhani Express yesterday.

- Ans
- 1. in; in
  - 2. for; by
  - 3. out; by
  - 4. to; at

Question ID : **98958010553**  
Status : **Not Answered**  
Chosen Option : --

Q.2  
00 Select the most appropriate word for the given group of words.

a place where fish are kept

- Ans
- 1. zoo
  - 2. herbarium
  - 3. aviary
  - 4. aquarium

Question ID : **98958010579**  
Status : **Not Answered**  
Chosen Option : --