

## Recruitment of Sub-Inspector in Delhi Police, CAPFs and Assistant Sub-Inspector in CISF Examination, 2018

Roll No. :	WWW.EXAMSCLOUD.IN
Registration No.	WWW.EXAMSCLOUD.IN
Name :	WWW.EXAMSCLOUD.IN
Exam Venue :	Marudhar Engineering College
Exam Time :	10:00 AM - 12:00 PM
Exam Date :	14/03/2019

Section : SI CPO

**Q.1** Select the option that is related to the third term in the same way as the second term is related to the first term.

6 : 18 :: 14 : \_\_\_\_\_

- Ans
- 1. 64
  - 2. 98
  - 3. 108
  - 4. 70

Question ID : 98958011068  
Status : Answered  
Chosen Option : 2

**Q.2** Select the correct alternative to indicate the arrangement of the following words in a logical and meaningful order.

1. Ornaments
2. Gold
3. Goldsmith
4. Jewelry shop
5. Bride

- Ans
- 1. 4, 2, 5, 3, 1
  - 2. 2, 5, 4, 3, 1
  - 3. 2, 4, 5, 1, 3
  - 4. 2, 3, 1, 4, 5

Question ID : 98958011046  
Status : Answered  
Chosen Option : 4

**Q.3** Select the set of numbers that is similar to the following set of numbers.

(7, 16, 34)

- Ans
- 1. (10, 19, 28)
  - 2. (23, 31, 48)
  - 3. (29, 57, 96)
  - 4. (49, 58, 76)

Question ID : 98958011075  
Status : Answered  
Chosen Option : 4

Q.4

If sign '×' is interchanged with '+' and number '3' is interchanged with '2', then which of the following equations would be correct?

- Ans
- 1.  $3 \div 2 \times 2 + 2 - 3 = 1$
  - 2.  $3 \times 2 \div 2 + 2 - 3 = 3$
  - 3.  $2 \times 3 \div 2 + 2 - 3 = 0$
  - 4.  $2 \times 3 - 2 + 2 \div 3 = 0$

Question ID : 98958011078

Status : Answered

Chosen Option : 2

Q.5 Mayank's house faces South. He leaves from the back gate of his house and walks 18 m. Then he turns right and walks 28 m. Then he turns right and walks 35 m. Then he turns left and walks 12 m. He then turns left and walks 17 m. In which direction and how many metres away is he from the original position?

- Ans
- 1. 20 meters North
  - 2. 17 meters South
  - 3. 30 meters West
  - 4. 40 meters East

Question ID : 98958011080

Status : Answered

Chosen Option : 4

Q.6 Which letter will replace the question mark (?) in the following series?

Z, X, V, T, R, ?

- Ans
- 1. S
  - 2. O
  - 3. P
  - 4. Q

Question ID : 98958011044

Status : Answered

Chosen Option : 3

Q.7 Select the set of numbers that is similar to the following set of numbers.

(3, 5, 7)

- Ans
- 1. (29, 35, 41)
  - 2. (23, 29, 31)
  - 3. (19, 21, 31)
  - 4. (11, 13, 19)

Question ID : 98958011074

Status : Answered

Chosen Option : 1

Q.8 Three of the following four number-pairs are alike in a certain way and one is different. Find the odd one out.

- Ans
- 1. 14, 6
  - 2. 7, 12
  - 3. 21, 4

✓ 4. 41, 2

Question ID : 98958011073

Status : Marked For Review

Chosen Option : 1

Q.9 If South-East becomes North, North-East becomes West and so on, what will South-West become?

- Ans
- ✗ 1. North
  - ✗ 2. West
  - ✓ 3. East
  - ✗ 4. South

Question ID : 98958011079

Status : Answered

Chosen Option : 3

Q.1 Choose the mirror image of the given word if the mirror is placed to the right of the word.

BK5ORP62

- Ans
- ✗ 1. BK2ORP62
  - ✗ 2. BK5ORP92
  - ✓ 3. BK2ORP62
  - ✗ 4. BK2ORP62

Question ID : 98958011089

Status : Answered

Chosen Option : 3

Q.1 Which two signs should be interchanged to make the given equation correct?

$$14 + 4 \div 5 - 18 \times 2 = 25$$

- Ans
- ✗ 1.  $\div$  and +
  - ✗ 2.  $\times$  and +
  - ✗ 3.  $\times$  and -
  - ✓ 4.  $\div$  and  $\times$

Question ID : 98958011076

Status : Answered

Chosen Option : 4

Q.1 Three of the following four numbers are alike in a certain way and one is different. Find the odd one out.

- Ans
- ✗ 1. 130
  - ✓ 2. 60
  - ✗ 3. 52
  - ✗ 4. 78

Question ID : 98958011070

Status : Answered  
Chosen Option : 2

Q.1  
3 If AN = 14 and CAT = 60, then BEG = ?

- Ans
- 1. 68
  - 2. 72
  - 3. 74
  - 4. 70

Question ID : 98958011060  
Status : Answered  
Chosen Option : 4

Q.1  
4 Which number will come next in the following series?

1, 4, 4, 16, 64, \_\_\_\_\_

- Ans
- 1. 216
  - 2. 1024
  - 3. 128
  - 4. 1026

Question ID : 98958011066  
Status : Answered  
Chosen Option : 2

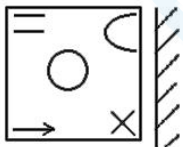
Q.1  
5 Select the option that is related to the third term in the same way as the second term is related to the first term.

REFORM : MROFER : : ACTION : \_\_\_\_\_

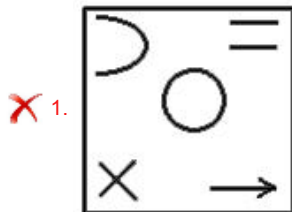
- Ans
- 1. NOITCA
  - 2. NOTICA
  - 3. CTOINA
  - 4. CTIONA

Question ID : 98958011056  
Status : Answered  
Chosen Option : 1

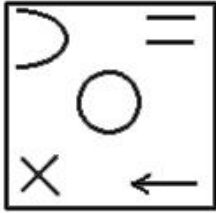
Q.1  
6 Select the mirror image of the given figure when the mirror is placed vertically to the right of the figure.



Ans



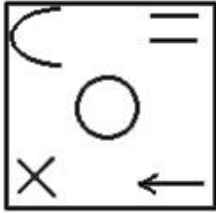
✓ 2.



✗ 3.



✗ 4.



Question ID : 98958011088

Status : Answered

Chosen Option : 2

Q.1 Three of the following four letter-clusters are alike in a certain way and one is different. Find the odd one out.

7

- Ans
- ✗ 1. LNPRT
  - ✗ 2. NPRTV
  - ✓ 3. HJMOR
  - ✗ 4. DFHJL

Question ID : 98958011048

Status : Answered

Chosen Option : 3

Q.1 Select the word-pair in which the two words are related in the same way as are the two words in the following word-pair.

8

Mammal : Bear

- Ans
- ✗ 1. Pen : Pencil
  - ✗ 2. Player : Team
  - ✓ 3. Fruit : Mango
  - ✗ 4. Plants : Food

Question ID : 98958011055

Status : Answered

Chosen Option : 3

Q.1 In a certain language, EMBEZZLE is coded as MEEBZZEL. How will MAXIMIZE be coded in the same language?

9

- Ans
- ✗ 1. AIMXMIEZ
  - ✓ 2. AMIXIMEZ
  - ✗ 3. AMIMIXEZ
  - ✗ 4. EMIXIMEM

Question ID : 98958011058

Status : Answered

Chosen Option : 2

Q.2 Select the word-pair in which the two words are related in the same way as are the two words in the following word-pair.

0

Doctor : Hospital

- Ans
- 1. Supervisor : Officer
  - 2. Teacher : School
  - 3. Museum : Visitor
  - 4. Governor : President

Question ID : 98958011054

Status : Answered

Chosen Option : 2

Q.2 Three of the following four words are alike in a certain way and one is different. Find the odd one out.

1

- Ans
- 1. Flaw : Defect
  - 2. Mend : Repair
  - 3. Vacant : Empty
  - 4. Sink : Float

Question ID : 98958011051

Status : Answered

Chosen Option : 4

Q.2 Select the figure in which the given figure is embedded.

2




Ans

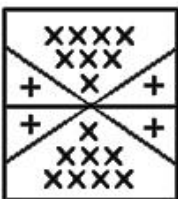
1.



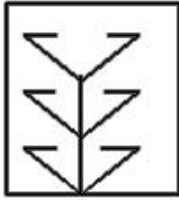
2.



3.



4.



Question ID : 98958011086

Status : Answered

Chosen Option : 1

Q.2 If + means '+', - means '-', × means '×' and ÷ means '÷', then what will be the value of the following expression?

3

$$18 \div 6 - 27 + 3 \times 12 = ?$$

Ans  1. 92

2. 105

3. 95

4. 107

Question ID : 98958011077

Status : Answered

Chosen Option : 2

Q.2 Which number will come next in the following series?

4

3, 7, 16, 32, 57, \_\_\_\_\_

Ans  1. 85

2. 80

3. 98

4. 93

Question ID : 98958011065

Status : Answered

Chosen Option : 4

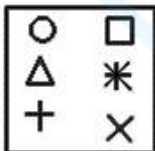
Q.2 Select the figure that will come next in the following figure series.

5



Ans

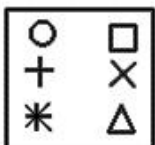
1.

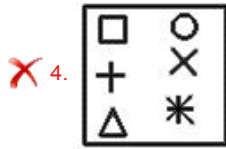


2.



3.





Question ID : 98958011082  
 Status : Answered  
 Chosen Option : 3

Q.2  
6 Which set of letters will come next in the following series?

BDZ, DGX, FJV, HMT, JPR, \_\_\_\_\_

- Ans
- 1. MSP
  - 2. LSP
  - 3. LTP
  - 4. LSO

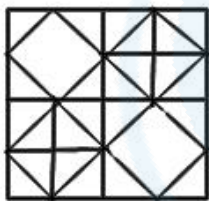
Question ID : 98958011045  
 Status : Answered  
 Chosen Option : 2

Q.2  
7 If in a certain code 'OPERATION' is written as 'BWDATXPBJ' and 'PARENT' is written as 'WTADJX', how will 'ORIENT' be written in that code?

- Ans
- 1. PSJFOU
  - 2. BAPDJX
  - 3. BPADJX
  - 4. BWPDJX

Question ID : 98958011059  
 Status : Answered  
 Chosen Option : 2

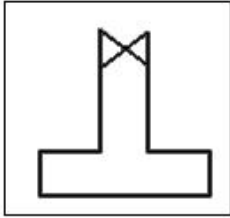
Q.2  
8 Select the answer figure which is embedded in the given figure.



- Ans
- 1.
  - 2.
  - 3.



X 4.



Question ID : 98958011087

Status : Answered

Chosen Option : 3

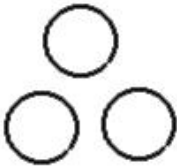
Q.2 Choose the Venn diagram from the given options that best represents the relationship amongst the following classes:

9

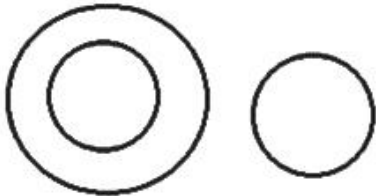
Vienna, Europe, New Zealand

Ans

X 1.



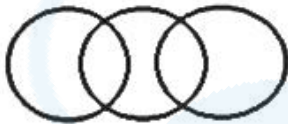
✓ 2.



X 3.



X 4.



Question ID : 98958011092

Status : Answered

Chosen Option : 2

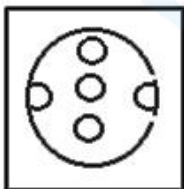
Q.3 A circular piece of paper is folded and cut as shown below. How will it appear when unfolded?

0

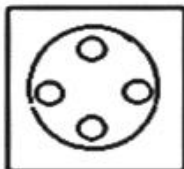


Ans

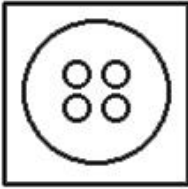
X 1.



X 2.



✓ 3.

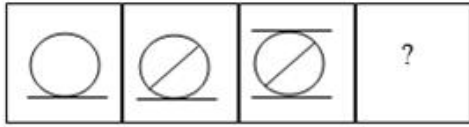


✗ 4.



Question ID : 98958011090  
 Status : Answered  
 Chosen Option : 2

Q.3  
 1 Select the figure that will come next in the following figure series.



Ans

✗ 1.



✗ 2.



✓ 3.



✗ 4.



Question ID : 98958011081  
 Status : Answered  
 Chosen Option : 3

Q.3  
 2 In a certain code language 'CANDLE' is written as 'D1OEM2' and 'MODERN' is written as N4E2SO. How will 'BEWARE' be written in the same code language?

Ans

✗ 1. D2OEM2

✗ 2. C2X2S2

✗ 3. CFY2S2

✓ 4. C2X1S2

Question ID : 98958011061  
 Status : Answered  
 Chosen Option : 4

Q.3  
 3

Consider the following statements to be true even if they seem to be at variance from commonly known facts and decide which of the conclusions logically follows from the statements.

**Statements:**

- A. All roads are vehicles.
- B. Some vehicles are trees.

**Conclusions:**

- I. Some trees are roads.
- II. All vehicles are trees.

- Ans**
- 1. Both conclusions I and II follow
  - 2. Only conclusion I follows
  - 3. Neither conclusion I nor conclusion II follow
  - 4. Only conclusion II follows

Question ID : 98958011062

Status : Answered

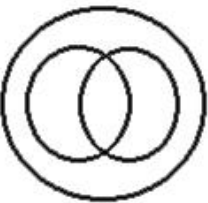


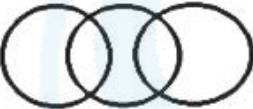
Chosen Option : 3

**Q.3** Choose the Venn diagram from the given options that best represents the relationship amongst the following classes:

4

Mothers, Doctors, Homo Sapiens

**Ans**

- 1. 
- 2. 
- 3. 
- 4. 

Question ID : 98958011093

Status : Answered

Chosen Option : 1

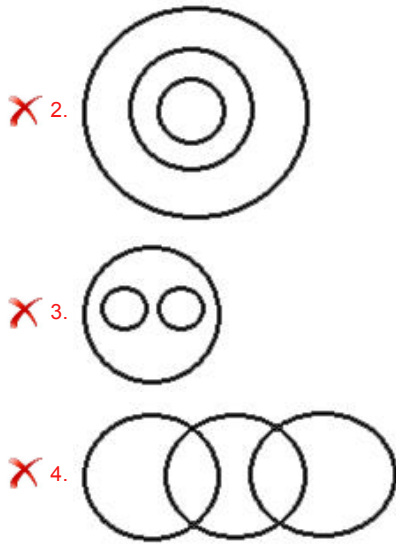
**Q.3** Choose the Venn diagram from the given options that best represents the relationship amongst the following classes:

5

Inert Gases, Chlorine, Helium

**Ans**

- 1. 



Question ID : 98958011091  
Status : Answered  
Chosen Option : 1

Q.3 Select the option that is related to the fourth term in the same way as the first term is related to the second term.

6

CFZ : HIU : : \_\_\_\_\_ : JLS

- Ans
- ✓ 1. EIX
  - ✗ 2. EHW
  - ✗ 3. FHX
  - ✗ 4. EIY

Question ID : 98958011057  
Status : Answered  
Chosen Option : 1

Q.3 Which number in the given series is INCORRECT?

7

11, 30, 67, 120, 219, 346

- Ans
- ✗ 1. 11
  - ✓ 2. 120
  - ✗ 3. 67
  - ✗ 4. 346

Question ID : 98958011064  
Status : Not Answered  
Chosen Option : --

Q.3 'Ocean' is related to 'Water' in the same way as 'Desert' is related to:

8

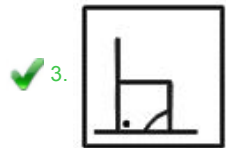
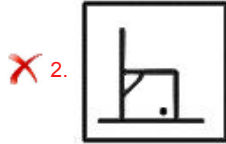
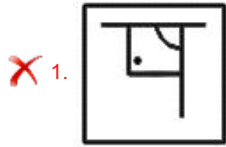
- Ans
- ✓ 1. Sand
  - ✗ 2. Wind
  - ✗ 3. Wave
  - ✗ 4. Mountain

Question ID : 98958011052  
Status : Answered  
Chosen Option : 1

Q.3  
9 Select the figure that will come next in the following figure series.



Ans



Question ID : 98958011083  
Status : Answered  
Chosen Option : 3

Q.4  
0 Three of the following four number-pairs are alike in a certain way and one is different. Find the odd one out.

- Ans
- ✓ 1. 93 : 117
  - ✗ 2. 63 : 81
  - ✗ 3. 133 : 171
  - ✗ 4. 119 : 153

Question ID : 98958011072  
Status : Answered  
Chosen Option : 1

Q.4  
1 'Skating' is related to 'Rink' in the same way as 'Tennis' is related to:

- Ans
- ✓ 1. Court
  - ✗ 2. Arena
  - ✗ 3. Pitch
  - ✗ 4. Racket

Question ID : 98958011053  
Status : Answered  
Chosen Option : 1

Q.4  
2

Consider the following statements to be true even if they seem to be at variance from commonly known facts and decide which of the conclusions logically follows from the statements.

**Statements:**

- A. Some bulbs are LEDs.
- B. Some LEDs are tubelights.

**Conclusions:**

- I. Some tubelights are bulbs.
- II. No tubelight is a bulb.

- Ans**
- 1. Neither conclusion I nor II follows
  - 2. Only conclusion II follows
  - 3. Either conclusion I or II follows
  - 4. Only conclusion I follows

Question ID : 98958011063

Status : Answered

Chosen Option : 3

**Q.4** Three of the following four letter-clusters are alike in a certain way and one is different. Find the odd one out.  
3

- Ans**
- 1. KKlmn
  - 2. EEfgg
  - 3. CCdee
  - 4. TTuvv

Question ID : 98958011049

Status : Answered

Chosen Option : 1

**Q.4** Select the correct alternative to indicate the arrangement of the following words in a logical and meaningful order.  
4

- 1. Chapter
- 2. Word
- 3. Letter
- 4. Phrase
- 5. Paragraph
- 6. Sentence

- Ans**
- 1. 3, 2, 4, 6, 5, 1
  - 2. 2, 3, 4, 1, 6, 5
  - 3. 3, 2, 6, 4, 5, 1
  - 4. 3, 2, 4, 6, 1, 5

Question ID : 98958011047

Status : Answered

Chosen Option : 1

**Q.4** Select the number-pair in which the two numbers are related in the same way as are the two numbers of the given number pair.  
5

36 : 49

- Ans**
- 1. 25 : 64
  - 2. 16 : 36
  - 3. 289 : 324
  - 4. 256 : 361

Question ID : 98958011069

Status : Answered

Chosen Option : 3

Q.4 Three of the following four words are alike in a certain way and one is different. Find the odd one out.

6

- Ans
- 1. Lawyer
  - 2. Doctor
  - 3. Engineer
  - 4. Education

Question ID : 98958011050

Status : Answered

Chosen Option : 4

Q.4 Three of the following four number-pairs are alike in a certain way and one is different. Find the odd one out.

7

- Ans
- 1. 8 : 20
  - 2. 10 : 25
  - 3. 18 : 81
  - 4. 12 : 36

Question ID : 98958011071

Status : Answered

Chosen Option : 1

Q.4 Select the option that is related to the third term in the same way as the second term is related to the first term.

8

2264 : 7241 : : 3129 : \_\_\_\_\_

- Ans
- 1. 6342
  - 2. 2572
  - 3. 7132
  - 4. 9521

Question ID : 98958011067

Status : Answered

Chosen Option : 1

Q.4 How many triangles are there in the following figure?

9



- Ans
- 1. 35
  - 2. 36
  - 3. 34
  - 4. 30

Question ID : 98958011084

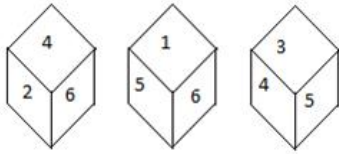
Status : Answered

Chosen Option : 4

Q.5

0

Three different positions of a dice are shown below. Find the number opposite '2'.



- Ans
- 1. 1
  - 2. 3
  - 3. 5
  - 4. 6

Question ID : 98958011085  
Status : Answered  
Chosen Option : 3

Q.5 Guru Gobind Singh commanded Sikhs to wear five items all the time. Which of the following is NOT one of these five items?  
1

- Ans
- 1. Kesh
  - 2. Kara
  - 3. Kangha
  - 4. Kila

Question ID : 98958010965  
Status : Answered  
Chosen Option : 4

Q.5 Which is the longest tributary of the river Indus?  
2

- Ans
- 1. Jhelum
  - 2. Chenab
  - 3. Sutlej
  - 4. Beas

Question ID : 98958010976  
Status : Answered  
Chosen Option : 1

Q.5 Who was the first Indian to ski to the North pole?  
3

- Ans
- 1. Neal Paramjeet
  - 2. Arun Nayyar
  - 3. Ajeet Bajaj
  - 4. Sanjay Thapar

Question ID : 98958010972  
Status : Not Answered  
Chosen Option : --

Q.5 The Presidential order was issued under \_\_\_\_\_ of the Constitution of India which allows the President to make certain  
4

"exceptions and modification" to the Constitution for the benefit of 'State subjects' of Jammu and Kashmir.

- Ans
- 1. Article 304 (1) (d)
  - 2. Article 340 (1) (d)



3. Article 370 (1) (d)

4. Article 314 (1) (d)

Question ID : 98958010979

Status : Answered

Chosen Option : 3

**Q.5** In January 2019, Indian Space Research Organisation launched a special programme for school children named \_\_\_\_\_  
**5** to inculcate and nurture space research fervour in young minds.

**Ans**  1. Young Scientist programme

2. Young Minds programme

3. Young Thoughts programme

4. Young Blood programme

Question ID : 98958010974

Status : Answered

Chosen Option : 1

**Q.5** \_\_\_\_\_ Tiger reserve in Karnataka is home to the largest number of Asian elephants in the world.  
**6**

**Ans**  1. Nagarhole Tiger Reserve

2. Ranthambore Tiger Project

3. Kanha National Park

4. Bandhvarhar National Park

Question ID : 98958010987

Status : Answered

Chosen Option : 4

**Q.5** In Carbon dating, a weak C-14 molecule deteriorates and transforms into \_\_\_\_\_.  
**7**

**Ans**  1. C-16

2. C-11

3. N-14

4. N-12

Question ID : 98958010970

Status : Answered

Chosen Option : 3

**Q.5** Identify the largest muscle in the human body.  
**8**

**Ans**  1. Sartorius

2. Iliopsoas

3. Gluteus Maximus

4. Latissimus Dorsi

Question ID : 98958010989

Status : Answered

Chosen Option : 3

**Q.5** Where was the Sanskriti Kumbh, a 29 days cultural extravaganza, held in January 2019?  
**9**

**Ans**

- 1. Chandrashila
- 2. Sonprayag
- 3. Agastyamuni
- 4. Prayagraj

Question ID : **98958010957**  
Status : **Answered**  
Chosen Option : **4**

Q.6  
0 Which of the following is the vector of Malaria?

- Ans
- 1. Aedes Mosquito
  - 2. Anopheles Mosquito
  - 3. Sand Fly
  - 4. Fleas

Question ID : **98958010958**  
Status : **Answered**  
Chosen Option : **1**

Q.6 With which of the following folk dance, India has made it's entry in the Guinness Book of World Records in the year 2015?

- 1
- Ans
- 1. Nati
  - 2. Garba
  - 3. Bihu
  - 4. Bhangra

Question ID : **98958010962**  
Status : **Answered**  
Chosen Option : **2**

Q.6  
2 Which of the following banks is NOT a public sector bank?

- Ans
- 1. Jammu and Kashmir Bank Ltd.
  - 2. Canara Bank
  - 3. State Bank of India
  - 4. IndusInd Bank

Question ID : **98958010960**  
Status : **Answered**  
Chosen Option : **1**

Q.6 A petition has been filed by NGO \_\_\_\_\_ challenging the constitutional validity of both, Article 35A and Article 370.

- 3
- Ans
- 1. We The Citizens
  - 2. We The Challengers
  - 3. We The Opposers
  - 4. We The Indians

Question ID : **98958010983**  
Status : **Answered**  
Chosen Option : **4**

Q.6 The fifth Sikh Guru compiled Adi Granth, the first official edition of the Sikh scripture.

4

- Ans
- 1. Guru Arjan Dev
  - 2. Guru Gobind Singh
  - 3. Guru Ram Das
  - 4. Guru Amar Das

Question ID : 98958010982

Status : Answered

Chosen Option : 3

Q.6 Who is the author of the book, 'The Google Story'?

5

- Ans
- 1. Frederick Forsyth
  - 2. Vikram Seth
  - 3. David A. Vise
  - 4. Shobha Dey

Question ID : 98958010964

Status : Not Answered

Chosen Option : --

Q.6 Which of the following metals is found in free state in nature?

6

- Ans
- 1. Copper
  - 2. Sodium
  - 3. Potassium
  - 4. Aluminium

Question ID : 98958010988

Status : Answered

Chosen Option : 4

Q.6 Article 35A was incorporated into the Constitution of India in \_\_\_\_\_ by an order of the then President Rajendra Prasad

7

on the advice of the Jawaharlal Nehru Cabinet.

- Ans
- 1. 1956
  - 2. 1959
  - 3. 1954
  - 4. 1950

Question ID : 98958010984

Status : Answered

Chosen Option : 1

Q.6 Which of the following instruments measures infra-red radiation?

8

- Ans
- 1. Phenograph
  - 2. Pyrheliometer
  - 3. Cathetometer
  - 4. Bolometer

Question ID : 98958010978

Status : Answered

Chosen Option : 2

Q.6 The Sepoy Mutiny of 1857 took place when \_\_\_\_\_ was the Governor General of India.

- Ans
- 1. Lord Bentinck
  - 2. Lord Wellesley
  - 3. Lord Dalhousie
  - 4. Lord Canning

Question ID : 98958010993

Status : Answered

Chosen Option : 4

Q.7 Guru Gobind Singh was the \_\_\_\_\_ Sikh Guru.

- Ans
- 1. eighth
  - 2. tenth
  - 3. ninth
  - 4. fifth

Question ID : 98958010948

Status : Answered

Chosen Option : 2

Q.7 The total forest cover in India as per the 2011 census is \_\_\_\_\_.

- Ans
- 1. 17.80%
  - 2. 23.42%
  - 3. 21.05%
  - 4. 22.07%

Question ID : 98958010991

Status : Answered

Chosen Option : 4

Q.7  $ZnSO_4 \cdot 7H_2O$  is the chemical formula of which substance?

- Ans
- 1. Green Vitriol
  - 2. White Vitriol
  - 3. Bleaching powder
  - 4. Blue Vitriol

Question ID : 98958010981

Status : Answered

Chosen Option : 1

Q.7 In January 2019, the \_\_\_\_\_ cargo craft departed from the International Space Station after its successful mission to deliver scientific equipment and other supplies.

- Ans
- 1. SpaceY
  - 2. SpaceZ
  - 3. SpaceM
  - 4. SpaceX

Question ID : 98958010955  
Status : Answered  
Chosen Option : 4

Q.7  
4 Which ruler constructed the highest and biggest gateway of Victory, Buland Darwaza?

- Ans
- 1. Mohammed Ghori
  - 2. Akbar
  - 3. Aurangzeb
  - 4. Jahangir

Question ID : 98958010961  
Status : Answered  
Chosen Option : 2

Q.7  
5 As of February 2019, who is the Governor of Tamil Nadu?

- Ans
- 1. B.D. Mishra
  - 2. Banwarilal Purohit
  - 3. O. P. Kohli
  - 4. Jagdish Mukhi

Question ID : 98958010949  
Status : Marked For Review  
Chosen Option : 2

Q.7  
6 In January 2019, the Supreme Court gave its nod to the on-going projects under India Nepal Buddhist Tour Plan, which connects four holy places by all-weather roads. Which of the following is NOT one of them.

- Ans
- 1. Yamunotri
  - 2. Badrinath
  - 3. Kedarnath
  - 4. Sabarimala

Question ID : 98958010956  
Status : Answered  
Chosen Option : 4

Q.7  
7 Poor vision in human can be due to the deficiency of \_\_\_\_\_

- Ans
- 1. Iron
  - 2. Vitamin A
  - 3. Iodine
  - 4. Vitamin D

Question ID : 98958010946  
Status : Answered  
Chosen Option : 2

Q.7  
8 Which of the following is known as the study of earthquakes?

- Ans
- 1. Seismology
  - 2. Lithology
  - 3. Semiology

4. Histology

Question ID : **98958010990**  
Status : **Answered**  
Chosen Option : **1**

Q.7  
9 Identify the SI unit of electrical resistance.

- Ans  1. Ohm  
 2. Watt  
 3. Coulomb  
 4. Ampere

Question ID : **98958010980**  
Status : **Answered**  
Chosen Option : **1**

Q.8 Article 35A was incorporated into the Indian Constitution based on the \_\_\_\_\_ Delhi agreement entered between then  
0 Prime Minister Jawaharlal Nehru and the then Prime Minister of Jammu and Kashmir Sheikh Abdullah.

- Ans  1. 1960  
 2. 1952  
 3. 1956  
 4. 1955

Question ID : **98958010975**  
Status : **Answered**  
Chosen Option : **1**

Q.8  
1 Which amongst the following is NOT the member of the BASIC group?

- Ans  1. South Africa  
 2. India  
 3. Australia  
 4. Brazil

Question ID : **98958010968**  
Status : **Answered**  
Chosen Option : **2**

Q.8 From which city did Jeevan Rekha, the world's first hospital train start its journey on July 16, 1991?  
2

- Ans  1. Bangalore  
 2. New Delhi  
 3. Varanasi  
 4. Bombay

Question ID : **98958010959**  
Status : **Not Answered**  
Chosen Option : **--**

Q.8 Bharat Ratna and Padma Vibhushan Awards in India were instituted in the year \_\_\_\_\_.  
3

- Ans  1. 1964  
 2. 1958

3. 1968

4. 1954

Question ID : 98958010963

Status : Answered

Chosen Option : 3

Q.8  
4 India won \_\_\_\_\_ medals at the Asian Games 2018 held in Indonesia.

Ans  1. 39

2. 49

3. 69

4. 29

Question ID : 98958010969

Status : Answered

Chosen Option : 3

Q.8  
5 Name the annual fair of Rajasthan at which camel trading is a major event?

Ans  1. Suraj Kund Mela

2. Maru Mela

3. Pushkar Mela

4. Sonepur Mela

Question ID : 98958010944

Status : Answered

Chosen Option : 3

Q.8  
6 From India, \_\_\_\_\_ won gold in the Men's Triple Jump event at Asian Games 2018 organized in Jakarta-Palembang, Indonesia.

Ans  1. Arpinder Singh

2. Renjith Maheshwari

3. Vijay Kumar

4. Manjit Singh

Question ID : 98958010971

Status : Answered

Chosen Option : 4

Q.8  
7 \_\_\_\_\_ temple in Karnataka is the most extravagant architectural showpiece of Hampi.

Ans  1. Meenakshi

2. Lingaraj

3. Vittala

4. Akshardham

Question ID : 98958010966

Status : Answered

Chosen Option : 1

Q.8  
8 Which vitamin is prepared by our body in presence of sunlight?

- Ans
- 1. Vitamin A
  - 2. Vitamin C
  - 3. Vitamin D
  - 4. Vitamin B

Question ID : 98958010967  
Status : Answered  
Chosen Option : 3

Q.8  
9 In which city of India was the first ever Formula One race held?

- Ans
- 1. Mumbai
  - 2. Pune
  - 3. Greater Noida
  - 4. Faridabad

Question ID : 98958010992  
Status : Answered  
Chosen Option : 3

Q.9  
0 The Imperial Bank of India was renamed as \_\_\_\_\_ in 1955.

- Ans
- 1. Central Bank of India
  - 2. The State Bank of India
  - 3. Allahabad Bank
  - 4. Punjab National Bank

Question ID : 98958010953  
Status : Answered  
Chosen Option : 2

Q.9  
1 Which is the largest freshwater lake in India?

- Ans
- 1. Chilika Lake
  - 2. Pangong Tso
  - 3. Wular Lake
  - 4. Udai Sagar

Question ID : 98958010985  
Status : Answered  
Chosen Option : 3

Q.9  
2 Jahangir, the \_\_\_\_\_ Mughal emperor ruled India from 1605 until his death in 1627.

- Ans
- 1. third
  - 2. fifth
  - 3. second
  - 4. fourth

Question ID : 98958010951  
Status : Answered  
Chosen Option : 3

Q.9



3 The 'Global Talent Competitive Index' prepared by the \_\_\_\_\_ in partnership with Tata Communications and Adecco Group was released on the first day of the World Economic Forum Annual Meeting 2019.

- Ans
- 1. GURU GOBIND Business School
  - 2. SGT Business School
  - 3. INSEAD Business school
  - 4. JAMNALAL Business School

Question ID : **98958010952**  
Status : **Answered**  
Chosen Option : **3**

Q.9 India won South Asian 2018 Football Federation (SAFF) Under-15 Women's Championship in \_\_\_\_\_.

4

- Ans
- 1. Hangzhou, China
  - 2. Jakarta, Indonesia
  - 3. Thimphu, Bhutan
  - 4. Nanjing, China

Question ID : **98958010986**  
Status : **Not Answered**  
Chosen Option : **--**

Q.9 A minor planet is named after which of the following legends?

5

- Ans
- 1. Milkha Singh
  - 2. A. R. Rehman
  - 3. Viswanathan Anand
  - 4. Sachin Tendulkar

Question ID : **98958010950**  
Status : **Answered**  
Chosen Option : **1**

Q.9 In July 2018, \_\_\_\_\_ became the second Indian mountaineer after Malli Mastan Babu to climb Mount Ojos del Salado, the highest volcano in the world.

6

- Ans
- 1. Satyarup Siddhanta
  - 2. Aruna Sinha
  - 3. Premlata Agrawal
  - 4. Mohan Singh Kohli

Question ID : **98958010977**  
Status : **Not Answered**  
Chosen Option : **--**

Q.9 Prime Minister Narendra Modi released a commemorative coin and stamp dedicated to \_\_\_\_\_ to mark his 350th birth anniversary on 5th January 2019.

7

- Ans
- 1. Guru Amar Das
  - 2. Guru Gobind Singh
  - 3. Guru Arjan Dev
  - 4. Guru Ram Das

Question ID : **98958010947**

Status : **Not Answered**  
Chosen Option : --

Q.9  
8 When was NABARD established?

- Ans  1. 1982  
 2. 1980  
 3. 1986  
 4. 1984

Question ID : **98958010954**  
Status : **Answered**  
Chosen Option : **1**

Q.9  
9 Article \_\_\_\_\_ of the Constitution of India provides special rights and privileges to permanent residents of Jammu and Kashmir.

- Ans  1. 32A  
 2. 34A  
 3. 35A  
 4. 31A

Question ID : **98958010973**  
Status : **Answered**  
Chosen Option : **3**

Q.1  
00 The first woman Secretary general of SAARC is from which country?

- Ans  1. India  
 2. Maldives  
 3. Bhutan  
 4. Sri Lanka

Question ID : **98958010945**  
Status : **Answered**  
Chosen Option : **1**

Q.1  
01 The given bar chart shows the details of cycle sales by a company between January and May for years 2017 and 2018.



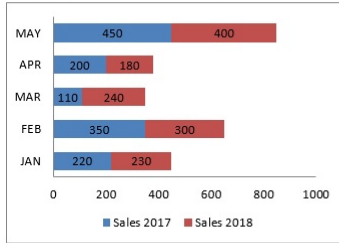
In the given bar-chart, which month sales show the maximum decrease in 2018 as compared to 2017?

- Ans  1. May  
 2. February  
 3. April  
 4. January

Question ID : **98958011236**  
Status : **Answered**  
Chosen Option : **2**

Q.1

02 The given bar chart shows the details of cycle sales by a company between January and May for years 2017 and 2018.



In the given bar-chart, which month sale shows the maximum increase in 2018 as against 2017?

- Ans
- 1. April
  - 2. March
  - 3. January
  - 4. May

Question ID : 98958011235

Status : Answered

Chosen Option : 2

Q.1 03 The average age of a cricket team of eleven players is 27 years. If two more players are included in the team the average becomes 26 years, then the average age (in years) of the two included players is:

- Ans
- 1. 24.5
  - 2. 20.5
  - 3. 26
  - 4. 27

Question ID : 98958011201

Status : Answered

Chosen Option : 2

Q.1 04 A can do a work in 12 days while B can do same work in 18 days. How long (in days) will it take if they do the work together?

- Ans
- 1.  $5\frac{3}{4}$
  - 2.  $7\frac{1}{5}$
  - 3.  $6\frac{1}{5}$
  - 4.  $6\frac{2}{3}$

Question ID : 98958011213

Status : Answered

Chosen Option : 2

Q.1 05 The value of  $3 \times 3 - [6 - \{12 + 15 \div (7 - 2)\}]$  is equal to:

- Ans
- 1. -15
  - 2. 18
  - 3. 0
  - 4. 15

Question ID : 98958011198

Status : Answered

Chosen Option : 2

Q.1  
06 A number which, when increased by 16% becomes 1914. The number is:

- Ans
- 1. 2220
  - 2. 1650
  - 3. 2010
  - 4. 1780

Question ID : 98958011206  
Status : Answered  
Chosen Option : 2

Q.1  
07 The average of all prime numbers between 10 and 25 is:

- Ans
- 1. 18.67
  - 2. 16.6
  - 3. 15.3
  - 4. 14.7

Question ID : 98958011202  
Status : Answered  
Chosen Option : 2

Q.1  
08 A trader marks the products 25% above the cost price and allows a discount of 15%. If the cost price is ₹ 2,080, then the selling price is:

- Ans
- 1. ₹ 2,210
  - 2. ₹ 1,809
  - 3. ₹ 2,392
  - 4. ₹ 2,600

Question ID : 98958011203  
Status : Answered  
Chosen Option : 1

Q.1  
09 ABCD is a cyclic quadrilateral such that AB is a diameter of the circle circumscribing it and angle BAC =  $50^\circ$ . Then angle ADC is equal to:

- Ans
- 1.  $60^\circ$
  - 2.  $150^\circ$
  - 3.  $130^\circ$
  - 4.  $140^\circ$

Question ID : 98958011227  
Status : Answered  
Chosen Option : 4

Q.1  
10 An alloy contains 32% copper, 24% nickel and rest zinc. How much zinc is present in 12 kg of the alloy?

- Ans
- 1. 5.28 kg
  - 2. 6.72 kg
  - 3. 528 gm
  - 4. 672 gm

Question ID : 98958011209  
Status : Answered

Chosen Option : 1

Q.1 11 6 men or 5 women earn ₹14,820 in two days. How much will 4 women and 6 men earn in one day?

- Ans
- 1. ₹13,338
  - 2. ₹13,832
  - 3. ₹26,676
  - 4. ₹27,664

Question ID : 98958011214

Status : Answered

Chosen Option : 1

Q.1 12 The ages of A and B are in the ratio 5 : 7. Five years ago, their ages were in the ratio 5 : 8. The respective present ages (in years) are:

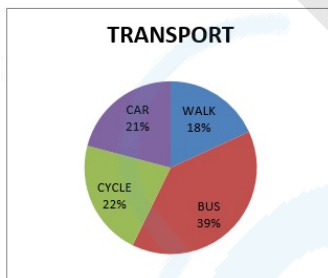
- Ans
- 1. 10, 14
  - 2. 20, 28
  - 3. 25, 40
  - 4. 15, 21

Question ID : 98958011207

Status : Answered

Chosen Option : 4

Q.1 13 The given pie-chart depicts the percentage of students coming to school using different modes of transport. Total number of students = 1300



In the given pie-chart, if 234 students used to walk, then how many come by bus?

- Ans
- 1. 507
  - 2. 273
  - 3. 432
  - 4. 286

Question ID : 98958011238

Status : Answered

Chosen Option : 1

Q.1 14 One-fourth of a tank can be filled in 3 hours by pipe A and one-third of the same tank can be filled in 2 hours by pipe B. How long will it take for the tank to be filled if both the pipes are kept open?

- Ans
- 1. 5 h
  - 2. 2 h
  - 3. 4 h
  - 4.  $2\frac{1}{2}$  h

Question ID : 98958011216

Status : Answered

Chosen Option : 3

Q.1 15 A manufacturer sells the product to a wholesaler at 6% profit, the wholesaler sells the product to a retailer at 8% profit and the retailer sells the product to his customer at 10% profit. The price paid by the customer is ₹31,482. The cost of the product to the manufacturer is:

- Ans
- 1. ₹28,306
  - 2. ₹26,524
  - 3. ₹25,000
  - 4. ₹26,980

Question ID : 98958011208

Status : Answered

Chosen Option : 3

Q.1 16 The volume of a conical tent is  $924 \text{ m}^3$  and its base area is  $154 \text{ m}^2$ . The height of the tent is:

- Ans
- 1. 24 m
  - 2. 6 m
  - 3. 18 m
  - 4. 12 m

Question ID : 98958011221

Status : Answered

Chosen Option : 3

Q.1 17 The value of  $\frac{1}{3} \div \frac{5}{6} \times \frac{-5}{8}$  is equal to:

- Ans
- 1. 1
  - 2.  $\frac{1}{4}$
  - 3.  $-\frac{1}{4}$
  - 4. 0

Question ID : 98958011199

Status : Answered

Chosen Option : 3

Q.1 18 Three cubes with edges 6 cm each are joined end to end to form a cuboid. The total surface area of the cuboid is:

- Ans
- 1.  $432 \text{ cm}^2$
  - 2.  $504 \text{ cm}^2$
  - 3.  $648 \text{ cm}^2$
  - 4.  $720 \text{ cm}^2$

Question ID : 98958011222

Status : Answered

Chosen Option : 2

Q.1 19 A borrowed a loan from B at 8% simple interest for 2 years and repaid the loan with interest totaling ₹1,91,864. The amount of loan taken by A is:

- Ans
- 1. ₹1,68,920

2. ₹1,66,540

3. ₹1,64,492

4. ₹1,65,400

Question ID : 98958011211

Status : Answered

Chosen Option : 4

Q.1  
20 If  $x^2 + \frac{1}{x^2} = 11$ , then  $x - \frac{1}{x}$  is equal to:

Ans  1. 2

2. 3

3. 5

4. 4

Question ID : 98958011224

Status : Answered

Chosen Option : 2

Q.1  
21 If  $\cos \theta = \frac{1}{\sqrt{10}}$ , then  $\tan \theta$  is equal to:

Ans  1.  $\frac{1}{\sqrt{3}}$

2.  $\frac{1}{3}$

3.  $\sqrt{3}$

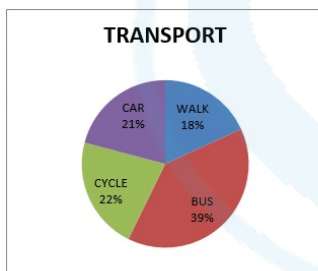
4. 3

Question ID : 98958011232

Status : Answered

Chosen Option : 4

Q.1  
22 The given pie-chart depicts the percentage of students coming to school using different modes of transport. Total number of students = 1300



In the given pie-chart, the difference between the number of students travel by bus or walk to the number of students travel by car or cycle.

Ans  1. 182

2. 364

3. 125

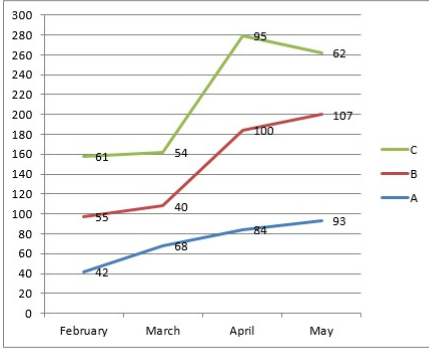
4. 142

Question ID : 98958011239

Status : Answered

Chosen Option : 1

**Q.1** The line graph shows electricity consumption (in units) for three households A, B and C for months February to May.

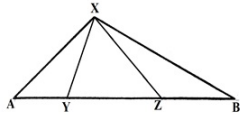


In the given line graph, the percentage increase in electricity consumption of 'B' between March and May is:

- Ans**
- 1. 95%
  - 2. 85%
  - 3. 7%
  - 4. 98%

Question ID : 98958011241  
 Status : Answered  
 Chosen Option : 2

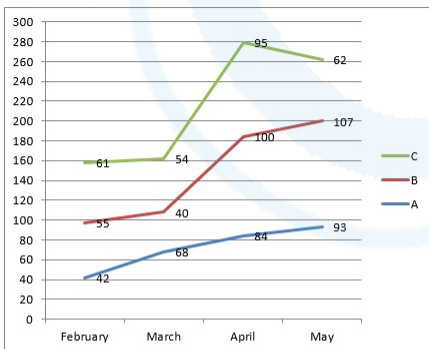
**Q.1** In the given figure, XYZ is an equilateral triangle.  $\angle XAY=40^\circ$ ,  $\angle XBZ=30^\circ$  then  $\angle AXB$  is equal to:



- Ans**
- 1.  $110^\circ$
  - 2.  $60^\circ$
  - 3.  $80^\circ$
  - 4.  $90^\circ$

Question ID : 98958011229  
 Status : Answered  
 Chosen Option : 1

**Q.1** The line graph shows electricity consumption (in units) for three households A, B and C for months February to May.



If the per unit rate chart is:

Units	Rate per unit(₹)
First 50	2.40
Next 50	3.50
Above 100	5.50

In the given line graph, the electricity charges collected from all (A, B and C) for the month of February is:

- Ans**
- 1. ₹348.00



2. ₹474.20

3. ₹396.80

4. ₹506.8

Question ID : 98958011243

Status : Answered

Chosen Option : 3

Q.1  
26 If  $x - \frac{1}{x} = 4$ , then  $x^3 - \frac{1}{x^3}$  is equal to:

Ans  1. 72

2. 68

3. 76

4. 64

Question ID : 98958011225

Status : Answered

Chosen Option : 3

Q.1  
27 From the top of 120 m high lighthouse, the angle of depression of two ships on opposite side of the base of the lighthouse is  $30^\circ$  and  $60^\circ$ . What is the distance between the ships? (rounded off)

Ans  1. 327 m

2. 127 m

3. 277 m

4. 177 m

Question ID : 98958011234

Status : Answered

Chosen Option : 3

Q.1  
28 A, borrowed ₹28,500 at 8% pa interest compounded annually. If ₹5,780 was paid at the end of first year, then the outstanding amount at the end of second year is:

Ans  1. ₹27,000.00

2. ₹27,462.40

3. ₹30,780.00

4. ₹33,242.40

Question ID : 98958011212

Status : Answered

Chosen Option : 1

Q.1  
29 A goes to a mall from his house on a cycle at 8 km/h and comes back to his house on a cycle at 6 km/h. If he takes 1 hour 10 minutes in all, what is the distance between his house and the mall?

Ans  1. 8 km

2. 4 km

3. 5 km

4. 6 km

Question ID : 98958011218

Status : Answered

Chosen Option : 2

Q.1

30 The area of each square of a chessboard having 64 equal squares is  $4 \text{ cm}^2$ . If there is a border on all the sides of the chessboard of 2 cm, then the perimeter of the chessboard is:

- Ans
- 1. 128 cm
  - 2. 80 cm
  - 3. 70 cm
  - 4. 256 cm

Question ID : 98958011223

Status : Answered

Chosen Option : 2

Q.1 31 The sum of all possible three digit numbers formed by digits 3, 0 and 7, using each digit only once is:

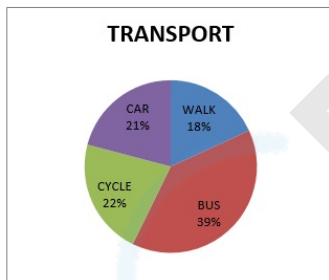
- Ans
- 1. 2010
  - 2. 1990
  - 3. 2220
  - 4. 2110

Question ID : 98958011200

Status : Answered

Chosen Option : 4

Q.1 32 The given pie-chart depicts the percentage of students coming to school using different modes of transport. Total number of students = 1300



In the given pie-chart, the percentage difference between students coming by car or bus to coming by walking or cycling.

- Ans
- 1. 15%
  - 2. 25%
  - 3. 20%
  - 4. 30%

Question ID : 98958011240

Status : Answered

Chosen Option : 3

Q.1 33 If  $2\sin 3\theta = 1$ , then the value of  $\theta$  is:

- Ans
- 1.  $10^\circ$
  - 2.  $45^\circ$
  - 3.  $20^\circ$
  - 4.  $30^\circ$

Question ID : 98958011231

Status : Answered

Chosen Option : 1

Q.1 PA and PB are two tangents to a circle with centre O, from a point P outside the circle. A and B are points on the circle.

34 If  $\angle OAB = 20^\circ$ , then  $\angle APB$  is equal to:

- Ans
- 1.  $25^\circ$
  - 2.  $50^\circ$
  - 3.  $20^\circ$
  - 4.  $40^\circ$

Question ID : 98958011228

Status : Answered

Chosen Option : 4

Q.1 A, B and C are partners. They share profits in the ratio of 5 : 3 : 6. If A earns ₹1,92,380 as his share of profit, then the share of C is:

- Ans
- 1. ₹2,30,856
  - 2. ₹1,15,428
  - 3. ₹82,449
  - 4. ₹1,60,317

Question ID : 98958011210

Status : Answered

Chosen Option : 3

Q.1 To what power -3 should be raised to get -2187?

- 36
- Ans
- 1. 5
  - 2. 7
  - 3. -7
  - 4. -5

Question ID : 98958011194

Status : Answered

Chosen Option : 2

Q.1 Triangle PQR is a right-angled at Q. If PQ=6 cm, PR=10 cm, then QR is equal to:

- 37
- Ans
- 1. 5 cm
  - 2. 8 cm
  - 3. 7 cm
  - 4. 9 cm

Question ID : 98958011230

Status : Answered

Chosen Option : 2

Q.1 The volume of a solid cylinder with height 6 cm is  $231 \text{ cm}^3$ . The radius of the cylinder is:

- 38
- Ans
- 1. 21 cm
  - 2. 2.1 cm
  - 3. 35 cm
  - 4. 3.5 cm

Question ID : 98958011220

Status : Answered

Chosen Option : 4

Q.1 The HCF and LCM of two numbers is 6 and 5040 respectively. If one of the numbers is 210, then the other number is:

39

- Ans
- 1. 256
  - 2. 144
  - 3. 30
  - 4. 630

Question ID : 98958011197

Status : Answered

Chosen Option : 2

Q.1 The length of diagonal of a square whose area is  $64 \text{ m}^2$  is:

40

- Ans
- 1.  $4\sqrt{2}\text{m}$
  - 2.  $8\sqrt{2}\text{m}$
  - 3. 4 m
  - 4. 8 m

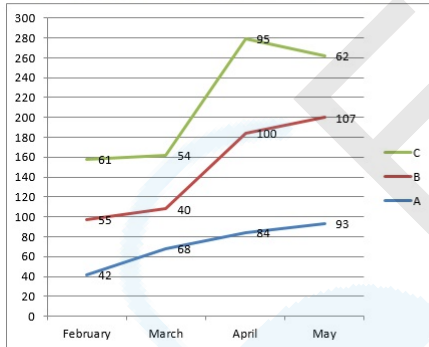
Question ID : 98958011219

Status : Answered

Chosen Option : 2

Q.1 The line graph shows electricity consumption (in units) for three households A, B and C for months February to May.

41



In the given line graph, the difference between the total electrical consumption between months of February and April is:

- Ans
- 1. 97
  - 2. 74
  - 3. 121
  - 4. 15

Question ID : 98958011242

Status : Answered

Chosen Option : 3

Q.1 If  $ab + bc + ca = 8$  and  $a + b + c = 12$  then  $(a^2 + b^2 + c^2)$  is equal to:

42

- Ans
- 1. 160
  - 2. 144
  - 3. 134
  - 4. 128

Question ID : 98958011226

Status : Answered

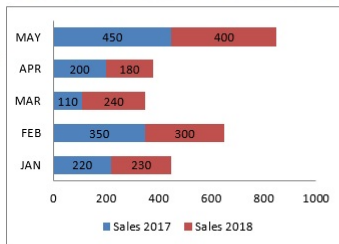
Chosen Option : 4

Q.1 43 The single discount equivalent to two successive discounts of 12% and 8% is: (rounded off)

- Ans
- 1. 17%
  - 2. 18%
  - 3. 19%
  - 4. 20%

Question ID : 98958011204  
Status : Answered  
Chosen Option : 3

Q.1 44 The given bar chart shows the details of cycle sales by a company between January and May for years 2017 and 2018.



In the given bar-chart, what is the total increase or decrease in percentage sale in 2018?

- Ans
- 1. 1.5% increase
  - 2. 3% increase
  - 3. 3% decrease
  - 4. 1.5% decrease

Question ID : 98958011237  
Status : Answered  
Chosen Option : 4

Q.1 45 The string of a kite is 30 m long and it makes an angle  $60^\circ$  with the horizontal. The height of the kite above the ground is:

- Ans
- 1.  $10\sqrt{3}$  m
  - 2. 15 m
  - 3. 7.5 m
  - 4.  $15\sqrt{3}$  m

Question ID : 98958011233  
Status : Answered  
Chosen Option : 4

Q.1 46 The population of a town has increased by 5% at the end of the first year and decreased by 4% at the end of second year.

If the population at the end of second year was 55,12,248, then the population at the beginning of first year was:

- Ans
- 1. 55,72,950
  - 2. 56,23,012
  - 3. 54,68,500
  - 4. 53,00,420

Question ID : 98958011205  
Status : Answered  
Chosen Option : 3

Q.1 47 The number 23474 is exactly divisible by:

- Ans
- 1. 2 and 3 only

2. 2 and 4 only
3. 2 and 11 only
4. 2 only

Question ID : 98958011195  
 Status : Answered  
 Chosen Option : 3

Q.1 A tank can be filled by pipe A in 5 hours and emptied by pipe B in 8 hours respectively. How much time will it take for  
 48 the tank to be half full?

- Ans
1.  $3\frac{1}{3}$  h
2.  $8\frac{2}{3}$  h
3.  $12\frac{1}{3}$  h
4.  $6\frac{2}{3}$  h

Question ID : 98958011215  
 Status : Answered  
 Chosen Option : 4

Q.1 Which of the following statement is true?  
 49

- Ans
1. LCM of two natural numbers is divisible by their HCF.
2. HCF+LCM of two numbers = Product of the two numbers
3. Two prime numbers are co-prime numbers if their LCM is 1.
4. HCF of two numbers is the smallest common divisor of both numbers.

Question ID : 98958011196  
 Status : Answered  
 Chosen Option : 1

Q.1 A and B are at a distance of 1.7 km apart and they start running towards each other at a speed of 8 m/s and 9 m/s  
 50 respectively. After how much time, will they meet each other?

- Ans
1. 1 minute 40 seconds
2. 1 minute 4 seconds
3. 14 minutes
4. 14 seconds

Question ID : 98958011217  
 Status : Answered  
 Chosen Option : 1

Q.1 Select the antonym of the given word.  
 51

VISIONARY

- Ans
1. creative
2. pragmatic
3. futuristic

4. imaginative

Question ID : 98958011374  
Status : Answered  
Chosen Option : 2

Q.1 52 Identify the segment in the sentence, which contains the grammatical error.

Unless you do not run fast, you cannot catch the bus.

- Ans
- 1. you do not
  - 2. catch the bus.
  - 3. you cannot
  - 4. run fast

Question ID : 98958011346  
Status : Answered  
Chosen Option : 1

Q.1 53 Select the most appropriate meaning of the given idiom.

a lot on your plate

- Ans
- 1. having many responsibilities
  - 2. having a large meal
  - 3. having wealth in abundance
  - 4. having something which causes envy

Question ID : 98958011379  
Status : Answered  
Chosen Option : 1

Q.1 54 Select the most appropriate word for the given group of words.

irrational fear of closed or confined places

- Ans
- 1. kleptomania
  - 2. insomnia
  - 3. hydrophobia
  - 4. claustrophobia

Question ID : 98958011382  
Status : Answered  
Chosen Option : 4

Q.1 55 Select the synonym of the given word.

FILLIP

- Ans
- 1. flip
  - 2. knock
  - 3. blow
  - 4. boost

Question ID : 98958011365

Status : **Marked For Review**  
Chosen Option : 1

Q.1 Identify the segment in the sentence which contains the grammatical error.

56

Scarcely she had heard the news when she fainted.

- Ans
- 1. she fainted.
  - 2. when
  - 3. heard the news
  - 4. Scarcely she had

Question ID : **98958011348**  
Status : **Answered**  
Chosen Option : 4

Q.1 Select the most appropriate option to substitute the underlined segment in the given sentence. If there is no need to substitute it, select No improvement.

57

Can you go and ask from the cook if the tea is ready?

- Ans
- 1. ask from the cook when the tea
  - 2. No improvement
  - 3. ask of the cook if the tea
  - 4. ask the cook if the tea

Question ID : **98958011349**  
Status : **Answered**  
Chosen Option : 4

Q.1 Identify the segment in the sentence which contains the grammatical error.

58

Where have you been from such a long time?

- Ans
- 1. Where
  - 2. from
  - 3. such a long time?
  - 4. have you been

Question ID : **98958011347**  
Status : **Answered**  
Chosen Option : 3

Q.1 Select the most appropriate word for the given group of words.

59

relating to speeds close to that of sound.

- Ans
- 1. translucent
  - 2. transparent
  - 3. transonic
  - 4. transformed

Question ID : **98958011383**  
Status : **Answered**  
Chosen Option : 3

Q.1 Select the wrongly spelt word.

60



- Ans
- 1. explanation
  - 2. explained
  - 3. expertise
  - 4. experiment

Question ID : 98958011389  
Status : Answered  
Chosen Option : 1

Q.1  
61 Select the most appropriate word to fill in the blank.

We didn't buy the dining table because \_\_\_\_\_ was too expensive.

- Ans
- 1. its'
  - 2. its
  - 3. it's
  - 4. it

Question ID : 98958011357  
Status : Answered  
Chosen Option : 4

Q.1  
62 Select the most appropriate option to substitute the underlined segment in the given sentence. If there is no need to substitute it, select No improvement.

He sat down beside me and start to read his newspaper.

- Ans
- 1. started reading
  - 2. started to be reading
  - 3. No improvement.
  - 4. started read

Question ID : 98958011351  
Status : Answered  
Chosen Option : 1

Comprehension:

Read the following passage and answer the questions given after it.

Twenty five years ago, while travelling and teaching in Turkey, Nepal and Iran, Bonnie Bergin noticed self-sufficient disabled people going about their unremarkable daily business, often using donkeys to hold pots, pans and other wares to be sold. She later returned to the United States to begin work on a master's degree in special education.

"I thought hard about what can be done to get people out of institutions and onto the streets, getting jobs, and it came to me: dogs," says Bergin, who today has a doctorate in education and is the founder of the Assistance Dog Institute and originator of the service-dog concept.

She ran into fierce resistance from academics and professionals at first: Dogs spread disease. Dogs are stupid. The disabled can't take care of dogs, how could dogs take care of them? But the long list of negative reactions didn't stop her. Her first trainee was Abdul, a golden retriever puppy someone had given her.

Her first dog-assistance client was Kerry Knaus, a soft-spoken 19-year-old woman who had a neuromuscular disorder that had left her unable to move her legs and much of her arms. If Knaus accidentally fell forward in her wheelchair, she could not get up. She clearly lacked the physical force to train and maintain a dog. But Bergin was undeterred.

Bergin and Knaus concentrated not on physical gestures, but on verbal cues such as "sit" or "stay," using variations in tone of voice and facial expression to get Abdul to help Knaus.

By the end of his training, the dog could push Knaus up from her in-chair falls, open doors, turn on lights, retrieve food and push levers to help her operate the chair lift to her van. Most important, Knaus developed a trusting emotional bond with Abdul simply by spending time with him, much in the way humans get to know one another and develop subtle, complex relationships based on mutual understanding.

Today, more than 150 programs provide similar services, and an estimated 3,500 service dogs are in place worldwide. Waiting lists for the dogs, who are worth around \$10,000 by the end of training, can be long--sometimes five years--because of the extensive breeding, training and bonding required.

SubQuestion No : 163

Q.1  
63 What inspired Bonnie Bergin to help disabled people become self-sufficient?

- Ans
1. Her travels and teaching in foreign countries as part of her daily work
  2. Her training in handling dogs and teaching them to help people

3. Her Master's degrees in Special Education
4. Her observation of disabled people who managed everyday chores using donkeys

Question ID : 98958011391

Status : Answered

Chosen Option : 4

**Comprehension:**

Read the following passage and answer the questions given after it.

Twenty five years ago, while travelling and teaching in Turkey, Nepal and Iran, Bonnie Bergin noticed self-sufficient disabled people going about their unremarkable daily business, often using donkeys to hold pots, pans and other wares to be sold. She later returned to the United States to begin work on a master's degree in special education.

"I thought hard about what can be done to get people out of institutions and onto the streets, getting jobs, and it came to me: dogs," says Bergin, who today has a doctorate in education and is the founder of the Assistance Dog Institute and originator of the service-dog concept.

She ran into fierce resistance from academics and professionals at first: Dogs spread disease. Dogs are stupid. The disabled can't take care of dogs, how could dogs take care of them? But the long list of negative reactions didn't stop her. Her first trainee was Abdul, a golden retriever puppy someone had given her.

Her first dog-assistance client was Kerry Knaus, a soft-spoken 19-year-old woman who had a neuromuscular disorder that had left her unable to move her legs and much of her arms. If Knaus accidentally fell forward in her wheelchair, she could not get up. She clearly lacked the physical force to train and maintain a dog. But Bergin was undeterred.

Bergin and Knaus concentrated not on physical gestures, but on verbal cues such as "sit" or "stay," using variations in tone of voice and facial expression to get Abdul to help Knaus.

By the end of his training, the dog could push Knaus up from her in-chair falls, open doors, turn on lights, retrieve food and push levers to help her operate the chair lift to her van. Most important, Knaus developed a trusting emotional bond with Abdul simply by spending time with him, much in the way humans get to know one another and develop subtle, complex relationships based on mutual understanding.

Today, more than 150 programs provide similar services, and an estimated 3,500 service dogs are in place worldwide. Waiting lists for the dogs, who are worth around \$10,000 by the end of training, can be long--sometimes five years--because of the extensive breeding, training and bonding required.

SubQuestion No : 164

Q.1  
64 The academics and professionals tried to dissuade Bonnie from using dogs to help the disabled basically because they

- Ans
- 1. believed that dogs spread diseases.
  - 2. knew that the disabled couldn't take care of dogs.
  - 3. thought dogs were stupid animals.
  - 4. were convinced that dogs could not help the disabled.

Question ID : 98958011392

Status : Answered

Chosen Option : 2

Comprehension:



Read the following passage and answer the questions given after it.

Twenty five years ago, while travelling and teaching in Turkey, Nepal and Iran, Bonnie Bergin noticed self-sufficient disabled people going about their unremarkable daily business, often using donkeys to hold pots, pans and other wares to be sold. She later returned to the United States to begin work on a master's degree in special education.

"I thought hard about what can be done to get people out of institutions and onto the streets, getting jobs, and it came to me: dogs," says Bergin, who today has a doctorate in education and is the founder of the Assistance Dog Institute and originator of the service-dog concept.

She ran into fierce resistance from academics and professionals at first: Dogs spread disease. Dogs are stupid. The disabled can't take care of dogs, how could dogs take care of them? But the long list of negative reactions didn't stop her. Her first trainee was Abdul, a golden retriever puppy someone had given her.

Her first dog-assistance client was Kerry Knaus, a soft-spoken 19-year-old woman who had a neuromuscular disorder that had left her unable to move her legs and much of her arms. If Knaus accidentally fell forward in her wheelchair, she could not get up. She clearly lacked the physical force to train and maintain a dog. But Bergin was undeterred.

Bergin and Knaus concentrated not on physical gestures, but on verbal cues such as "sit" or "stay," using variations in tone of voice and facial expression to get Abdul to help Knaus.

By the end of his training, the dog could push Knaus up from her in-chair falls, open doors, turn on lights, retrieve food and push levers to help her operate the chair lift to her van. Most important, Knaus developed a trusting emotional bond with Abdul simply by spending time with him, much in the way humans get to know one another and develop subtle, complex relationships based on mutual understanding.

Today, more than 150 programs provide similar services, and an estimated 3,500 service dogs are in place worldwide. Waiting lists for the dogs, who are worth around \$10,000 by the end of training, can be long--sometimes five years--because of the extensive breeding, training and bonding required.

SubQuestion No : 165

Q.1  
65 Which of the following approaches did Bonnie and Knaus NOT adopt to train Abdul to help Knaus?

- Ans
- 1. variations in facial expressions
  - 2. physical gestures to direct the dog
  - 3. verbal clues like 'sit' or 'stay'
  - 4. variations in tones of voice

Question ID : 98958011393

Status : Answered

Chosen Option : 2

**Comprehension:**

Read the following passage and answer the questions given after it.

Twenty five years ago, while travelling and teaching in Turkey, Nepal and Iran, Bonnie Bergin noticed self-sufficient disabled people going about their unremarkable daily business, often using donkeys to hold pots, pans and other wares to be sold. She later returned to the United States to begin work on a master's degree in special education.

"I thought hard about what can be done to get people out of institutions and onto the streets, getting jobs, and it came to me: dogs," says Bergin, who today has a doctorate in education and is the founder of the Assistance Dog Institute and originator of the service-dog concept.

She ran into fierce resistance from academics and professionals at first: Dogs spread disease. Dogs are stupid. The disabled can't take care of dogs, how could dogs take care of them? But the long list of negative reactions didn't stop her. Her first trainee was Abdul, a golden retriever puppy someone had given her.

Her first dog-assistance client was Kerry Knaus, a soft-spoken 19-year-old woman who had a neuromuscular disorder that had left her unable to move her legs and much of her arms. If Knaus accidentally fell forward in her wheelchair, she could not get up. She clearly lacked the physical force to train and maintain a dog. But Bergin was undeterred.

Bergin and Knaus concentrated not on physical gestures, but on verbal cues such as "sit" or "stay," using variations in tone of voice and facial expression to get Abdul to help Knaus.

By the end of his training, the dog could push Knaus up from her in-chair falls, open doors, turn on lights, retrieve food and push levers to help her operate the chair lift to her van. Most important, Knaus developed a trusting emotional bond with Abdul simply by spending time with him, much in the way humans get to know one another and develop subtle, complex relationships based on mutual understanding.

Today, more than 150 programs provide similar services, and an estimated 3,500 service dogs are in place worldwide. Waiting lists for the dogs, who are worth around \$10,000 by the end of training, can be long--sometimes five years--because of the extensive breeding, training and bonding required.

**SubQuestion No : 166**

Q.1  
66 At the end of the training, which of the following was the most important help that Abdul could provide to Knaus?

Ans

1. he could push Knaus up from her in-chair falls
2. he could retrieve food
3. he could open doors and turn on lights
4. he could help her operate the chair lift to her van

Question ID : 98958011394

Status : Answered

Chosen Option : 3

Comprehension:



Read the following passage and answer the questions given after it.

Twenty five years ago, while travelling and teaching in Turkey, Nepal and Iran, Bonnie Bergin noticed self-sufficient disabled people going about their unremarkable daily business, often using donkeys to hold pots, pans and other wares to be sold. She later returned to the United States to begin work on a master's degree in special education.

"I thought hard about what can be done to get people out of institutions and onto the streets, getting jobs, and it came to me: dogs," says Bergin, who today has a doctorate in education and is the founder of the Assistance Dog Institute and originator of the service-dog concept.

She ran into fierce resistance from academics and professionals at first: Dogs spread disease. Dogs are stupid. The disabled can't take care of dogs, how could dogs take care of them? But the long list of negative reactions didn't stop her. Her first trainee was Abdul, a golden retriever puppy someone had given her.

Her first dog-assistance client was Kerry Knaus, a soft-spoken 19-year-old woman who had a neuromuscular disorder that had left her unable to move her legs and much of her arms. If Knaus accidentally fell forward in her wheelchair, she could not get up. She clearly lacked the physical force to train and maintain a dog. But Bergin was undeterred.

Bergin and Knaus concentrated not on physical gestures, but on verbal cues such as "sit" or "stay," using variations in tone of voice and facial expression to get Abdul to help Knaus.

By the end of his training, the dog could push Knaus up from her in-chair falls, open doors, turn on lights, retrieve food and push levers to help her operate the chair lift to her van. Most important, Knaus developed a trusting emotional bond with Abdul simply by spending time with him, much in the way humans get to know one another and develop subtle, complex relationships based on mutual understanding.

Today, more than 150 programs provide similar services, and an estimated 3,500 service dogs are in place worldwide. Waiting lists for the dogs, who are worth around \$10,000 by the end of training, can be long--sometimes five years--because of the extensive breeding, training and bonding required.

SubQuestion No : 167

Q.1  
67 Which statement is NOT true according to the passage?

Ans

1. Today, more than 150 programs provide similar services of trained dogs to disabled people.
2. Bonnie Bergin got her master's degree from Assistance Dog Institute.



3. Today about 3,500 service dogs are in place worldwide for helping the disabled.
4. The service dogs cost about \$10,000 after the training.

Question ID : 98958011395  
 Status : Answered  
 Chosen Option : 2

Q.1  
68 Select the most appropriate word to fill in the blank.

Everything happened \_\_\_\_\_ quickly \_\_\_\_\_ I felt dazed.

- Ans  1. as; so
2. as; as
3. so; that
4. so; as

Question ID : 98958011356  
 Status : Answered  
 Chosen Option : 3

Q.1  
69 Select the most appropriate word for the given group of words.

A thing that motivates or encourages someone to do something

- Ans  1. remuneration
2. salary
3. incentive
4. allowance

Question ID : 98958011381  
 Status : Answered  
 Chosen Option : 3

#### Comprehension:

In the following passage some words have been deleted. Fill in the blanks with the help of the alternatives given. Select the most appropriate option for each number.

Mount Agung is a volcano on the popular tourist island of Bali in Indonesia. The volcano \_\_\_\_\_ (1) in November 2017. More than 134,000 people were \_\_\_\_\_ (2) to safe areas in advance. They \_\_\_\_\_ (3) housed far away from the volcano. \_\_\_\_\_ (4), some had refused to leave. These people did not \_\_\_\_\_ (5) to leave their homes. They wanted to take care of their farms and animals.

SubQuestion No : 170

Q.1  
70 Select the most appropriate option to fill in blank No.1.

- Ans  1. fired
2. blasted
3. exploded
4. erupted

Question ID : 98958011360  
 Status : Marked For Review  
 Chosen Option : 4

**Comprehension:**

In the following passage some words have been deleted. Fill in the blanks with the help of the alternatives given. Select the most appropriate option for each number.

Mount Agung is a volcano on the popular tourist island of Bali in Indonesia. The volcano \_\_\_\_\_ (1) in November 2017. More than 134,000 people were \_\_\_\_\_ (2) to safe areas in advance. They \_\_\_\_\_ (3) housed far away from the volcano. \_\_\_\_\_ (4), some had refused to leave. These people did not \_\_\_\_\_ (5) to leave their homes. They wanted to take care of their farms and animals.

**SubQuestion No : 171****Q.1** Select the most appropriate option to fill in blank No.2.  
**71**

- Ans**
- 1. exited
  - 2. left
  - 3. abandoned
  - 4. evacuated

Question ID : 98958011361

Status : Answered

Chosen Option : 4

**Comprehension:**

In the following passage some words have been deleted. Fill in the blanks with the help of the alternatives given. Select the most appropriate option for each number.

Mount Agung is a volcano on the popular tourist island of Bali in Indonesia. The volcano \_\_\_\_\_ (1) in November 2017. More than 134,000 people were \_\_\_\_\_ (2) to safe areas in advance. They \_\_\_\_\_ (3) housed far away from the volcano. \_\_\_\_\_ (4), some had refused to leave. These people did not \_\_\_\_\_ (5) to leave their homes. They wanted to take care of their farms and animals.

**SubQuestion No : 172****Q.1** Select the most appropriate option to fill in blank No.3.  
**72**

- Ans**
- 1. were
  - 2. have
  - 3. is
  - 4. had

Question ID : 98958011362

Status : Answered

Chosen Option : 1

**Comprehension:**

In the following passage some words have been deleted. Fill in the blanks with the help of the alternatives given. Select the most appropriate option for each number.

Mount Agung is a volcano on the popular tourist island of Bali in Indonesia. The volcano \_\_\_\_\_ (1) in November 2017. More than 134,000 people were \_\_\_\_\_ (2) to safe areas in advance. They \_\_\_\_\_ (3) housed far away from the volcano. \_\_\_\_\_ (4), some had refused to leave. These people did not \_\_\_\_\_ (5) to leave their homes. They wanted to take care of their farms and animals.

SubQuestion No : 173

Q.1  
73 Select the most appropriate option to fill in blank No.4.

- Ans
- 1. However
  - 2. Because
  - 3. Whether
  - 4. Moreover

Question ID : 98958011363

Status : Answered

Chosen Option : 1

Comprehension:

In the following passage some words have been deleted. Fill in the blanks with the help of the alternatives given. Select the most appropriate option for each number.

Mount Agung is a volcano on the popular tourist island of Bali in Indonesia. The volcano \_\_\_\_\_ (1) in November 2017. More than 134,000 people were \_\_\_\_\_ (2) to safe areas in advance. They \_\_\_\_\_ (3) housed far away from the volcano. \_\_\_\_\_ (4), some had refused to leave. These people did not \_\_\_\_\_ (5) to leave their homes. They wanted to take care of their farms and animals.

SubQuestion No : 174

Q.1  
74 Select the most appropriate option to fill in blank No.5.

- Ans
- 1. desire
  - 2. wish
  - 3. long
  - 4. fancy

Question ID : 98958011364

Status : Answered

Chosen Option : 2

Q.1  
75 Select the most appropriate option to substitute the underlined segment in the given sentence. If there is no need to substitute it, select No improvement.

The money collected by the students of this school was deposited in the Prime Minister's fund.

- Ans
- 1. by the students of this schools
  - 2. from the student from this school
  - 3. No improvement.
  - 4. by the students at this school

Question ID : 98958011352

Status : Answered

Chosen Option : 3

Q.1  
76 Select the wrongly spelt word.

- Ans
- 1. laudable
  - 2. laughable
  - 3. lamentable
  - 4. liabel

Question ID : 98958011385  
Status : Answered  
Chosen Option : 4

Q.1  
77 Select the wrongly spelt word.

- Ans
- 1. luggage
  - 2. luxurious
  - 3. luminous
  - 4. ludicrous

Question ID : 98958011387  
Status : Answered  
Chosen Option : 4

Q.1  
78 Select the most appropriate word to fill in the blank.

Last year there was an increase \_\_\_\_\_ the number of road accidents on the Eastern Expressway.

- Ans
- 1. at
  - 2. to
  - 3. in
  - 4. with

Question ID : 98958011355  
Status : Answered  
Chosen Option : 3

Q.1  
79 Select the most appropriate meaning of the given idiom.

a sea change

- Ans
- 1. a fast change
  - 2. a slow change
  - 3. a radical change
  - 4. a nominal change

Question ID : 98958011375  
Status : Answered  
Chosen Option : 1

Q.1  
80 Select the antonym of the given word.

CONSTANT

- Ans
- 1. uninterrupted
  - 2. perpetual

3. varying

4. regular

Question ID : 98958011372

Status : Answered

Chosen Option : 3

**Q.1** Select the most appropriate option to substitute the underlined segment in the given sentence. If there is no need to substitute it, select No improvement.

**81**

I think all our furniture needing to be polished.

**Ans**  1. are needing to be polished.

2. need to polish.

3. needs to be polished.

4. No improvement.

Question ID : 98958011350

Status : Answered

Chosen Option : 3

**Q.1** Select the synonym of the given word.

**82**

**DRAG**

**Ans**  1. pull

2. lift

3. push

4. crack

Question ID : 98958011367

Status : Answered

Chosen Option : 1

**Q.1** Select the synonym of the given word.

**83**

**TREAD**

**Ans**  1. follow

2. walk

3. run

4. climb

Question ID : 98958011368

Status : Answered

Chosen Option : 2

**Q.1** Select the most appropriate word for the given group of words.

**84**

Something made impure by exposure to polluting substances

**Ans**  1. contractual

2. contagious

3. contented

4. contaminated

Question ID : 98958011380

Status : Answered

Chosen Option : 4

Q.1 85 Identify the segment in the sentence, which contains the grammatical error.

He is the same man which I saw yesterday at the gate.

- Ans
- 1. He is
  - 2. the same man
  - 3. at the gate
  - 4. which I saw

Question ID : 98958011344

Status : Answered

Chosen Option : 4

Q.1 86 Select the most appropriate meaning of the given idiom.

a safe pair of hands

- Ans
- 1. a reliable person
  - 2. a happy person
  - 3. a person who guards someone
  - 4. a person who does many jobs

Question ID : 98958011376

Status : Answered

Chosen Option : 1

Q.1 87 Select the most appropriate word to fill in the blank.

It is difficult for him to \_\_\_\_\_ all the comforts to his family in this small income.

- Ans
- 1. provided
  - 2. provide
  - 3. providing
  - 4. provides

Question ID : 98958011358

Status : Answered

Chosen Option : 2

Q.1 88 Select the antonym of the given word.

GRIM

- Ans
- 1. pleasant
  - 2. gloomy
  - 3. severe
  - 4. harsh

Question ID : 98958011370

Status : Answered

Chosen Option : 1

Q.1  
89 Select the most appropriate meaning of the given idiom.

A hot potato

- Ans
- 1. a tasty snack
  - 2. an offensive remark
  - 3. a memorable thing
  - 4. a controversial issue

Question ID : 98958011377  
Status : Answered  
Chosen Option : 4

Q.1  
90 Select the most appropriate option to substitute the underlined segment in the given sentence. If there is no need to substitute it, select No improvement.

Last week he promised that he would have come today, but he hasn't arrived yet.

- Ans
- 1. that he will be coming
  - 2. No improvement.
  - 3. that he would come
  - 4. that he will have come

Question ID : 98958011353  
Status : Answered  
Chosen Option : 3

Q.1  
91 Select the synonym of the given word.

PROFESS

- Ans
- 1. lead
  - 2. teach
  - 3. predict
  - 4. admit

Question ID : 98958011369  
Status : Answered  
Chosen Option : 3

Q.1  
92 Select the wrongly spelt word.

- Ans
- 1. innocent
  - 2. inflammable
  - 3. insoluble
  - 4. installation

Question ID : 98958011388  
Status : Answered  
Chosen Option : 2

Q.1  
93 Select the antonym of the given word.

DUBIOUS

- Ans
- 1. certain
  - 2. hesitant

3. unconvinced

4. doubtful

Question ID : 98958011373

Status : Answered

Chosen Option : 1

Q.1  
94 Select the most appropriate word for the given group of words.

an obsessive desire to set fire to things

Ans  1. monomania

2. insomnia

3. hypomania

4. pyromania

Question ID : 98958011384

Status : Answered

Chosen Option : 4

Q.1  
95 Select the most appropriate meaning of the given idiom.

A stone's throw

Ans  1. a memorable place

2. an easy task

3. a short distance

4. a faraway place

Question ID : 98958011378

Status : Answered

Chosen Option : 3

Q.1  
96 Select the synonym of the given word.

DAMSEL

Ans  1. hag

2. maiden

3. witch

4. spinster

Question ID : 98958011366

Status : Answered

Chosen Option : 4

Q.1  
97 Select the most appropriate word to fill in the blank.

If I had money, I \_\_\_\_\_ have helped him.

Ans  1. would

2. can

3. should

4. will



Question ID : 98958011354

Status : Answered

Chosen Option : 1

Q.1  
98 Select the wrongly spelt word.

- Ans
- 1. magnifisent
  - 2. masculine
  - 3. marshal
  - 4. matchless

Question ID : 98958011386

Status : Answered

Chosen Option : 1

Q.1  
99 Select the antonym of the given word.

ELABORATE

- Ans
- 1. minimal
  - 2. detailed
  - 3. complicated
  - 4. involved

Question ID : 98958011371

Status : Answered

Chosen Option : 3

Q.2  
00 Identify the segment in the sentence, which contains the grammatical error.

He is not such a clever boy that you are.

- Ans
- 1. clever boy
  - 2. such a
  - 3. that you are
  - 4. He is not

Question ID : 98958011345

Status : Answered

Chosen Option : 3