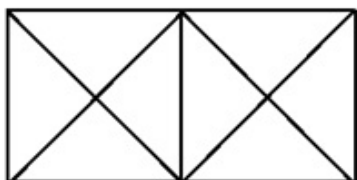


## Recruitment of Sub-Inspector in Delhi Police, CAPFs and Assistant Sub-Inspector in CISF Examination, 2018

|                  |                                 |
|------------------|---------------------------------|
| Roll No. :       | WWW.EXAMSCLOUD.IN               |
| Registration No. | WWW.EXAMSCLOUD.IN               |
| Name :           | WWW.EXAMSCLOUD.IN               |
| Exam Venue :     | iON Digital Zone Phulwarisharif |
| Exam Time :      | 10:00 AM - 12:00 PM             |
| Exam Date :      | 15/03/2019                      |

Section : SI CPO

Q.1 How many triangles are there in the following figure?



- Ans
- 1. 22
  - 2. 16
  - 3. 18
  - 4. 20

Question ID : 98958011184  
 Status : Answered  
 Chosen Option : 3

Q.2 'Chef' is related to 'Food' in the same way as 'Choreographer' is related to:

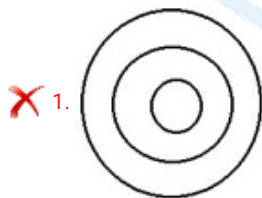
- Ans
- 1. Stage
  - 2. Dance
  - 3. Music
  - 4. Photography


Question ID : 98958011152  
 Status : Answered  
 Chosen Option : 2

Q.3 Choose the Venn diagram from the given options that best represents the relationship among the following classes.

Mizoram, Manipur, India

Ans





Question ID : 98958011191  
Status : Answered  
Chosen Option : 3

Q.4 Which number will come next in the following series?

5, 12, 31, 68, 129, \_\_\_\_\_

- Ans  1. 220  
 2. 218  
 3. 131  
 4. 190

Question ID : 98958011166  
Status : Not Answered  
Chosen Option : --

Q.5 Select the set of numbers that is similar to the following set of numbers.

(13, 40, 121)

- Ans  1. (5, 16, 49)  
 2. (3, 12, 39)  
 3. (7, 24, 73)  
 4. (9, 28, 83)

Question ID : 98958011175  
Status : Answered  
Chosen Option : 1

Q.6 If, in a certain code, EDITION is written as VWRGRLM, which word would be coded as SLMVHGB ?

- Ans  1. HAUGHTY  
 2. HONESTY

- 3. EDITORS
- 4. AMNESTY

Question ID : 98958011159  
Status : Answered  
Chosen Option : 2

**Q.7** In a certain code language, 'ROCK' is written as '3587' and 'TIDE' is written as '4261'. How will 'DOCTOR' be written in the same code language?

- Ans**
- 1. 658453
  - 2. 658435
  - 3. 654853
  - 4. 685453

Question ID : 98958011160  
Status : Answered  
Chosen Option : 1

**Q.8** Three of the following four letter-clusters are alike in a certain way and one is different. Find the odd one out.

- Ans**
- 1. CXUF
  - 2. DWYA
  - 3. HSKP
  - 4. QJTG

Question ID : 98958011149  
Status : Answered  
Chosen Option : 2

**Q.9** Which letter-cluster will replace the question mark (?) in the following series?

EZI, FYJ, GXK, HWL, ?

- Ans**
- 1. MVM
  - 2. MVN
  - 3. JVM
  - 4. IVM

Question ID : 98958011145  
Status : Answered  
Chosen Option : 4

**Q.1** Select the word-pair in which the two words are related in the same way as are the two words in the following word-pair. (in the same order).

Council : Ministers

- Ans**
- 1. Band : Musicians
  - 2. Team : Umpire
  - 3. Student : Teacher
  - 4. King : Palace

Question ID : 98958011155

Status : Answered

Chosen Option : 1

Q.1 Three of the following four number-pairs are alike in a certain way and one is different. Find the odd one out.

1

- Ans
- 1. 7-56
  - 2. 23-185
  - 3. 13-104
  - 4. 17-136

Question ID : 98958011171

Status : Answered

Chosen Option : 2

Q.1 Which option gives the two signs that need to be interchanged to make the given equation correct?

2

$$6 - 20 \div 12 \times 7 + 1 = 70$$

- Ans
- 1.  $\div$  and  $+$
  - 2.  $\times$  and  $-$
  - 3.  $\times$  and  $+$
  - 4.  $\div$  and  $\times$

Question ID : 98958011176

Status : Answered

Chosen Option : 1

Q.1 Select the correct alternative to indicate the arrangement of the following words in a logical and meaningful order.

3

1. Paragraphs
2. Letters
3. Sentences
4. Words
5. Book
6. Pages

- Ans
- 1. 2, 3, 4, 1, 6, 5
  - 2. 2, 4, 1, 3, 6, 5
  - 3. 2, 4, 3, 1, 5, 6
  - 4. 2, 4, 3, 1, 6, 5

Question ID : 98958011146

Status : Answered

Chosen Option : 4

Q.1 Select the number-pair in which the two numbers are related in the same way as are the two numbers of the given number pair.

4

7 : 54

- Ans
- 1. 8 : 69
  - 2. 15 : 224
  - 3. 4 : 17
  - 4. 9 : 81

Question ID : 98958011168

Status : Answered

Chosen Option : 1

Q.1 Select the option that is related to the third term in the same way as the second term is related to the first term.

5 YWUS : TVXZ :: PNLJ : \_\_\_\_\_

- Ans
- 1. MKQO
  - 2. KMOQ
  - 3. KMQO
  - 4. MKOQ

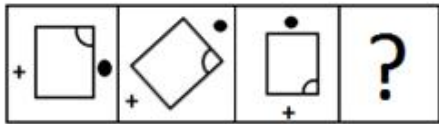
Question ID : 98958011157

Status : Answered

Chosen Option : 2

Q.1 Select the figure that will come next in the following figure series.

6



Ans

- 1.
- 2.
- 3.
- 4.

Question ID : 98958011181

Status : Answered

Chosen Option : 4

**Q.1** 7 Abhishek started from a point A and walked 15 meters towards south. He turned left and walked 20 meters. He then turned left again and walked 15 meters. He again turned left and walked 35 meters and reached a point B. How far and in which direction is point B with respect to point 'A'?

- Ans**
- 1. 15 meters, West
  - 2. 20 meters, North
  - 3. 35 meters, South
  - 4. 15 meters, East

Question ID : 98958011180

Status : Answered

Chosen Option : 1

**Q.1** 8 Select the option that is related to the third term in the same way as the second term is related to the first term.

GOWE : OWOG :: MXML : \_\_\_\_\_

- Ans**
- 1. LMLM
  - 2. MXMX
  - 3. XLXL
  - 4. XMXM

Question ID : 98958011156

Status : Answered

Chosen Option : 4

**Q.1** 9 Which number will come next in the following series?

9, 196, 25, 169, 49, 144, 81, \_\_\_\_\_

- Ans**
- 1. 121
  - 2. 100
  - 3. 64
  - 4. 36

Question ID : 98958011165

Status : Answered

Chosen Option : 1

**Q.2** 0 Select the number-pair in which the two numbers are related in the same way as are the two numbers of the given number pair.

222 : 130

- Ans**
- 1. 125 : 27
  - 2. 350 : 49
  - 3. 68 : 30
  - 4. 25 : 36

Question ID : 98958011169

Status : Not Answered

Chosen Option : --



Q.2 If 'S' stands for addition, '@' stands for subtraction, '#' stands for multiplication and '&' stands for division, then what is the value of

1  $12 \# 8 \ S \ 36 \ \& \ 3 \ @ \ 6?$

- Ans
- 1. 98
  - 2. 102
  - 3. 79
  - 4. 46

Question ID : 98958011178  
Status : Answered  
Chosen Option : 2

Q.2 Select the word-pair in which the two words are related in the same way as are the two words in the following word-pair. (in the same order).

2

Thermometer : Temperature

- Ans
- 1. Odometer : Pressure
  - 2. Scale : Humidity
  - 3. Barometer : Depth
  - 4. Anemometer : Wind

Question ID : 98958011154  
Status : Answered  
Chosen Option : 4

Q.2 Three of the following four words are alike in a certain way and one is different. Find the odd one out.

3

- Ans
- 1. Mercury
  - 2. Mars
  - 3. Moon
  - 4. Venus

Question ID : 98958011150  
Status : Answered  
Chosen Option : 3

Q.2 Two statements are given followed by two conclusions I and II. You have to consider these statements to be true, even if they seem to be at variance with commonly known facts and Decide which of the given conclusions logically follow(s) from the given statements.

4

**Statements:**

Some mirrors are combs.

Some combs are stools.

**Conclusions:**

I. All stools are either mirrors or combs

II. Some stools are combs.

- Ans
- 1. Only conclusion II follows.
  - 2. Either conclusion I or II follows.
  - 3. Only conclusion I follows.
  - 4. Neither conclusion I nor II follows.

Question ID : 98958011163  
Status : Answered

Chosen Option : 1

Q.2  
5 Which number in the given series is Incorrect?

3, 7, 15, 27, 53, 63

- Ans
- 1. 53
  - 2. 63
  - 3. 27
  - 4. 7

Question ID : 98958011164  
Status : Not Answered  
Chosen Option : --

Q.2  
6 'Bee' is related to 'Hive' in the same way as 'Horse' is related to:

- Ans
- 1. Cottage
  - 2. Stable
  - 3. Den
  - 4. House

Question ID : 98958011153  
Status : Answered  
Chosen Option : 2

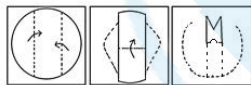
Q.2  
7 Select the correct equation from the given options after interchanging operations '-' and 'x' and numbers '4' and '5'.

- Ans
- 1.  $9 - 4 \times 5 = 21$
  - 2.  $5 \times 4 - 9 = 7$
  - 3.  $5 \times 9 - 4 = 4$
  - 4.  $4 - 5 \times 9 = 11$

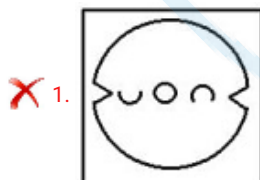
Question ID : 98958011177  
Status : Answered  
Chosen Option : 4

Q.2  
8 A paper is folded and cut as shown below. How will it appear when unfolded? Select the figure that most closely resembles the formed figure after unfolding.

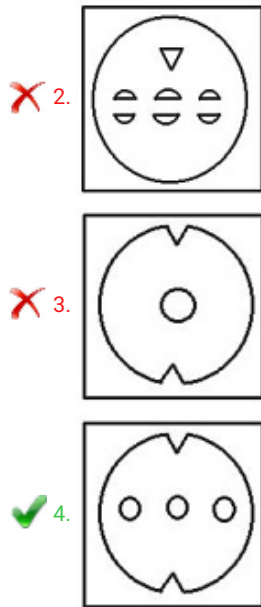
Question Figures



Ans







Question ID : 98958011190  
 Status : Not Answered  
 Chosen Option : --

Q.2 Select the correct alternative to indicate the arrangement of the following words in a logical and meaningful order.

9

1. State
2. Individual
3. Family
4. Community
5. Country

- Ans
- ✓ 1. 2, 3, 4, 1, 5
  - ✗ 2. 5, 2, 4, 3, 1
  - ✗ 3. 2, 3, 4, 5, 1
  - ✗ 4. 2, 5, 4, 3, 1

Question ID : 98958011147  
 Status : Answered  
 Chosen Option : 1

Q.3 Three of the following four words are alike in a certain way and one is different. Find the odd one out.

0

- Ans
- ✗ 1. Division
  - ✗ 2. Addition
  - ✗ 3. Subtraction
  - ✓ 4. Mathematics

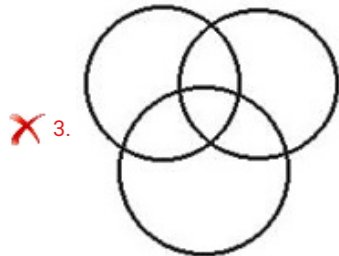
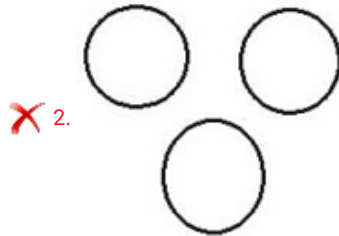

Question ID : 98958011151  
 Status : Answered  
 Chosen Option : 4

Q.3 Choose the Venn diagram from the given options that best represents the relationship among the following classes.

1

Bird, Parrot, Snake

Ans



Question ID : 98958011192

Status : Answered

Chosen Option : 4

Q.3 In a certain language, JUSTICE is coded as JSUTCIE. How will JUPITER be coded in that language?  
2

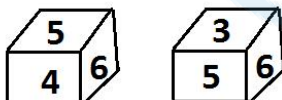
- Ans
- ✗ 1. JPUIERT
  - ✗ 2. PJUIETR
  - ✗ 3. JPUEITR
  - ✓ 4. JPUIETR

Question ID : 98958011158

Status : Answered

Chosen Option : 4

Q.3 Two positions of a dice are shown as below. After rolling the dice, if we get the number 4 on the face at the top, which number will be on the face at the bottom?  
3

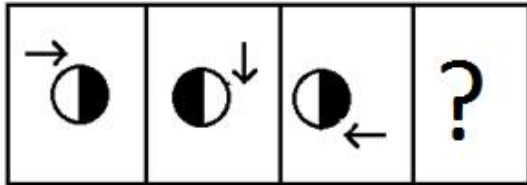


- Ans
- ✗ 1. 1
  - ✗ 2. 2
  - ✗ 3. 5

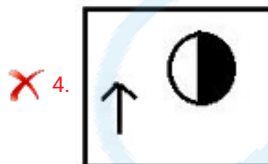
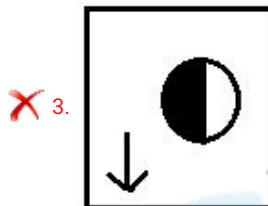
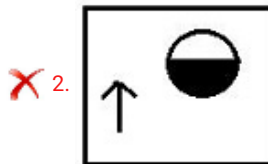
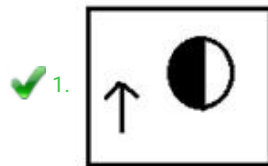
✓ 4. 3

Question ID : 98958011185  
 Status : Answered  
 Chosen Option : 4

Q.3  
 4 Select the figure that will come next in the following figure series.



Ans



Question ID : 98958011183  
 Status : Answered  
 Chosen Option : 1

Q.3  
 5 Two statements are given followed by two conclusions I and II. You have to consider these statements to be true, even if they seem to be at variance with commonly known facts and choose which of the given conclusions logically follow(s) from the given statements.

**Statements:**

All Chairs are expensive.  
 All expensive are unique.

**Conclusions:**

I. All chairs are unique.  
 II. All unique are expensive.

- Ans
- ✗ 1. Both conclusions I and II follow.
  - ✗ 2. Neither conclusion I nor II follows.
  - ✓ 3. Only conclusion I follows.

4. Only conclusion II follows.

Question ID : 98958011162  
Status : Answered  
Chosen Option : 3

Q.3  
6 If AS = 19 and BAT = 40, then how will you code BREAD?

- Ans
- 1. 30
  - 2. 720
  - 3. 205
  - 4. 625

Question ID : 98958011161  
Status : Not Answered  
Chosen Option : --

Q.3  
7 Select the option that most closely resembles the mirror image of the given figure, when mirror is placed to its right side.

TER72HG

- Ans
- 1. GHSZRET
  - 2. TERTZRHG
  - 3. GHSZRET
  - 4. TERZRHG

Question ID : 98958011189  
Status : Answered  
Chosen Option : 4

Q.3  
8 Select the set of numbers that is similar to the following set of numbers.

(20, 42, 72)

- Ans
- 1. (10, 22, 52)
  - 2. (16, 40, 70)
  - 3. (2, 12, 20)
  - 4. (18, 38, 68)

Question ID : 98958011174  
Status : Answered  
Chosen Option : 4

Q.3  
9 Three of the following four number-pairs are alike in a certain way and one is different. Find the odd one out.

- Ans
- 1. 29-59
  - 2. 27-55
  - 3. 21-43

✓ 4. 25-53

Question ID : 98958011172  
Status : Answered  
Chosen Option : 4

Q.4 Select the option that is related to the third term in the same way as the second term is related to the first term.

0 33 : 198 :: 19 : \_\_\_\_\_

- Ans
- ✗ 1. 49
  - ✗ 2. 346
  - ✓ 3. 114
  - ✗ 4. 77

Question ID : 98958011167  
Status : Answered  
Chosen Option : 3

Q.4 Three of the following four number-pairs are alike in a certain way and one is different. Find the odd one out.

1

- Ans
- ✗ 1. 13-40
  - ✗ 2. 18-55
  - ✓ 3. 9-29
  - ✗ 4. 17-52

Question ID : 98958011170  
Status : Answered  
Chosen Option : 3

Q.4 Three of the following four letter-clusters are alike in a certain way and one is different. Find the odd one out.

2

- Ans
- ✓ 1. FHLO
  - ✗ 2. EINT
  - ✗ 3. KOTZ
  - ✗ 4. JNSY

Question ID : 98958011148  
Status : Not Answered  
Chosen Option : --

Q.4 Which letter will replace the question mark (?) in the following series?

3

A, D, G, J, M, ?

- Ans
- ✗ 1. Q
  - ✓ 2. P
  - ✗ 3. O
  - ✗ 4. N

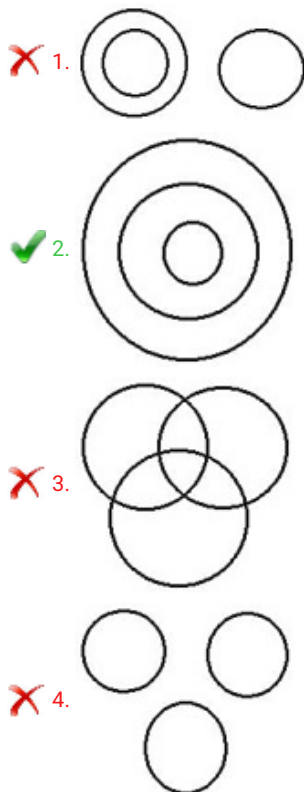
Question ID : 98958011144  
Status : Answered

Chosen Option : 2

Q.4 Choose the Venn diagram from the given options that best represents the relationship among the following classes.

4 Year, month, day

Ans



Question ID : 98958011193

Status : Answered

Chosen Option : 2

Q.4 Seema walks to her office. She is facing south when she reaches her office. After starting from home, she turned left twice and then right before reaching her office. Which direction was Seema facing when she started from her home?

5

- Ans
- 1. South
  - 2. East
  - 3. North
  - 4. West

Question ID : 98958011179

Status : Answered

Chosen Option : 3

Q.4 From the given options, select the number that is different from the other three options.

6

- Ans
- 1. 6051
  - 2. 2027
  - 3. 2306
  - 4. 5024

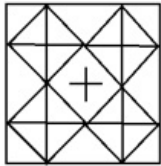
Question ID : 98958011173

Status : Answered

Chosen Option : 1



Q.4  
7 From the given options, select the one that is embedded in the following figure.

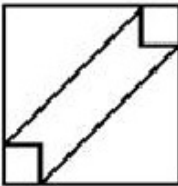


Ans


✗ 1.



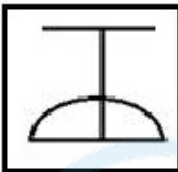
✓ 2.



✗ 3.



✗ 4.

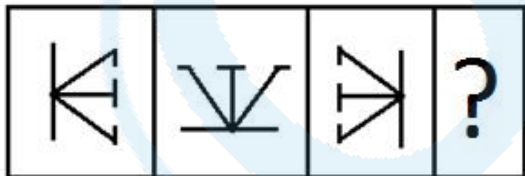


Question ID : 98958011187

Status : Answered

Chosen Option : 3

Q.4  
8 Select the figure that will come next in the following figure series.

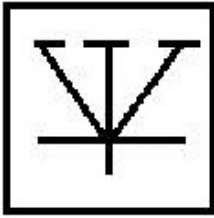


Ans

✓ 1.



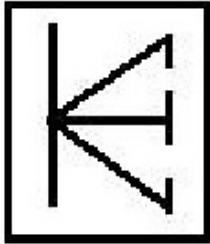
✗ 2.



✗ 3.



✗ 4.



Question ID : 98958011182

Status : Answered

Chosen Option : 3

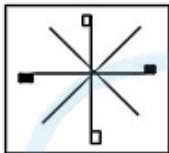
Q.4 Select the option that most closely resembles the mirror image of the given figure, when mirror is placed to its right side.

9

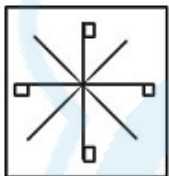


Ans

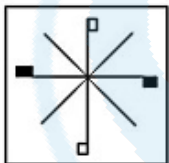
✗ 1.



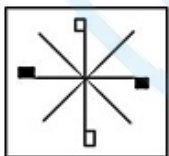
✗ 2.



✗ 3.



✓ 4.



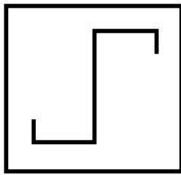
Question ID : 98958011188

Status : Answered

Chosen Option : 4

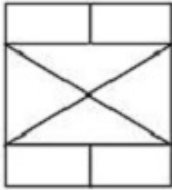
Q.5

0 From the given options, select the one in which the question figure is hidden/embedded.



Ans

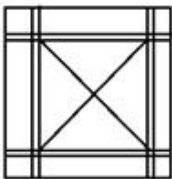
1.



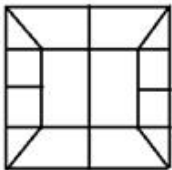
2.



3.



4.



Question ID : 98958011186

Status : Answered

Chosen Option : 4

Q.5 The world's largest mobile phone factory was set up in \_\_\_\_\_ under the Indian Government's 'Make in India' initiative.

1

1. Hyderabad

2. Noida

3. Amravati

4. Sanand

Question ID : 98958011764

Status : Answered

Chosen Option : 2

Q.5 The last Maha Kumbh was held in Prayag in \_\_\_\_\_.

2

1. 2011

2. 2014

3. 2015

4. 2013

Question ID : 98958011761  
Status : Answered  
Chosen Option : 4

Q.5 Name the theatre and film actor who apart from training contestants for the Miss India pageant has also hosted a popular quiz show in the 1970s.

- Ans
- 1. Sabira Merchant
  - 2. Padma Laxmi
  - 3. Tabassum
  - 4. Simi Garewal

Question ID : 98958011794  
Status : Answered  
Chosen Option : 4

Q.5 The \_\_\_\_\_ in Kerala has its own elephant sanctuary.

- Ans
- 1. Sabarimala Sree Ayyappa Temple
  - 2. Guruvayoor Temple
  - 3. Sri Padmanabhaswamy Temple
  - 4. Chottanikkara Devi Temple

Question ID : 98958011758  
Status : Answered  
Chosen Option : 1

Q.5 The innovative concept of using sunshine to keep houses warm in freezing winters is called \_\_\_\_\_.

- Ans
- 1. latent solar heating
  - 2. conductive solar heating
  - 3. radiation heating
  - 4. passive solar heating

Question ID : 98958011780  
Status : Answered  
Chosen Option : 2

Q.5 \_\_\_\_\_ from Bihar is a GI tagged food item.

- Ans
- 1. Moa
  - 2. Petha
  - 3. Silao Khaja
  - 4. Sita Bhog

Question ID : 98958011782  
Status : Answered  
Chosen Option : 3

Q.5  
7 Brass is an alloy of:

- Ans
- 1. zinc and iron
  - 2. lead and copper
  - 3. iron and lead
  - 4. copper and zinc

Question ID : 98958011768  
Status : Answered  
Chosen Option : 4

Q.5  
8 The \_\_\_\_\_ Commission was set up to investigate the Jallianwala Bagh massacre.

- Ans
- 1. Hunter
  - 2. Butler
  - 3. Sadler
  - 4. Campbell

Question ID : 98958011789  
Status : Answered  
Chosen Option : 1

Q.5  
9 The firing order issued by \_\_\_\_\_ on a gathering of people on Baisakhi Day, 1931 became a turning point in India's freedom struggle.

- Ans
- 1. Lord Wellesley
  - 2. General Dyer
  - 3. Lord Cornwallis
  - 4. Warren Hastings

Question ID : 98958011790  
Status : Answered  
Chosen Option : 2

Q.6  
0 Which ad filmmaker also played a role in the historical film 'Gandhi'?

- Ans
- 1. Saeed Jaffrey
  - 2. Alyque Padamsee
  - 3. Gerson da Cunha
  - 4. Roshan Seth

Question ID : 98958011797  
Status : Answered  
Chosen Option : 2

Q.6  
1 \_\_\_\_\_ is India's oldest research reactor.

- Ans
- 1. Kamini
  - 2. Circus

- 3. Dhruva
- 4. Apsara

Question ID : 98958011770  
Status : Answered  
Chosen Option : 4

Q.6  
2 The state of Jharkhand was formed by division of Bihar in the year \_\_\_\_\_.

- Ans
- 1. 2002
  - 2. 2001
  - 3. 2003
  - 4. 2000

Question ID : 98958011783  
Status : Answered  
Chosen Option : 4

Q.6  
3 Asian Premium is the high price that Asian countries pay to import \_\_\_\_\_.

- Ans
- 1. machinery
  - 2. precious metals
  - 3. mobile phones
  - 4. crude oil

Question ID : 98958011765  
Status : Answered  
Chosen Option : 4

Q.6  
4 A high tensile alloy steel called \_\_\_\_\_ was used to construct Howrah Bridge.

- Ans
- 1. TISCAL
  - 2. TISCBROM
  - 3. TISCOP
  - 4. TISCROM

Question ID : 98958011785  
Status : Not Answered  
Chosen Option : --

Q.6  
5 \_\_\_\_\_ is known as Universal Solvent.

- Ans
- 1. Kerosene
  - 2. Alcohol
  - 3. Acetone
  - 4. Water

Question ID : 98958011769  
Status : Answered



Chosen Option : 4

Q.6 A character in the Hindi feature film '3 idiots' was inspired by \_\_\_\_\_, an engineer based in Ladakh.

6

- Ans
- 1. Phunsukh Wangchuk
  - 2. Phunsuk Wangdu
  - 3. Sonam Wangchuk
  - 4. Sonam Wangdu

Question ID : 98958011793  
Status : Answered  
Chosen Option : 3

Q.6 Maharani Gayatri Devi was a member of the \_\_\_\_\_.

7

- Ans
- 1. Swatantra Party
  - 2. Bharatiya Janata Party
  - 3. Bahujan Samaj Party
  - 4. Indian National Congress Party

Question ID : 98958011795  
Status : Not Answered  
Chosen Option : --

Q.6 Human body creates Vitamin \_\_\_\_\_ from sunlight.

8

- Ans
- 1. D
  - 2. B
  - 3. C
  - 4. A

Question ID : 98958011776  
Status : Answered  
Chosen Option : 1

Q.6 Paryushan is an important festival for the \_\_\_\_\_ community.

9

- Ans
- 1. Buddhist
  - 2. Jew
  - 3. Jain
  - 4. Zoroastrian

Question ID : 98958011760  
Status : Not Answered  
Chosen Option : --

Q.7 Right \_\_\_\_\_ ceased to be a fundamental right after the 45th Amendment bill, 1978 to the Indian Constitution.

0

- Ans
- 1. To Education

- 2. To Property
- 3. To Equality
- 4. Against Exploitation

Question ID : 98958011802  
Status : Answered  
Chosen Option : 2

Q.7 \_\_\_\_\_ is a commonly used medicine that can help treat pain and reduce a high body temperature.

- Ans
- 1. Dextromethorphan
  - 2. Bismuth
  - 3. Paracetamol
  - 4. Guaifenesin

Question ID : 98958011779  
Status : Not Answered  
Chosen Option : --

Q.7 Shooter \_\_\_\_\_ won a gold medal in the Men's 10 m Air Pistol event at the 2018 Jakarta Palembang Asian Games held in Indonesia.

- Ans
- 1. Abhishek Verma
  - 2. Om Prakash Mitharwal
  - 3. Jitu Rai
  - 4. Saurabh Chaudhary

Question ID : 98958011807  
Status : Answered  
Chosen Option : 4

Q.7 The process of blood clotting is called \_\_\_\_\_.

- Ans
- 1. coagulation
  - 2. thrombocytopenia
  - 3. haemophilia
  - 4. homophobia

Question ID : 98958011778  
Status : Answered  
Chosen Option : 1

Q.7 Dr. Zakir Husain, the 3<sup>rd</sup> President of India, was awarded the \_\_\_\_\_ in 1963.

- Ans
- 1. Bharat Ratna
  - 2. Padma Shree
  - 3. Padma Bhushan
  - 4. Padma Vibhushan

Question ID : 98958011803

Status : Answered

Chosen Option : 1

Q.7  
5 Name the Nobel Laureate who helped crack the genetic code.

- Ans
- 1. Venkatraman Ramakrishnan
  - 2. Abdus Salam
  - 3. Subramaniam Chandrasekar
  - 4. Har Gobind Khorana

Question ID : 98958011774

Status : Answered

Chosen Option : 4

Q.7  
6 The Government of Odisha announced a hike of \_\_\_\_\_ in the social security pension under Madhu Babu Pension Yojana (MBPY) in January 2019.

- Ans
- 1. ₹ 500 per month
  - 2. ₹ 400 per month
  - 3. ₹ 200 per month
  - 4. ₹ 300 per month

Question ID : 98958011800

Status : Answered

Chosen Option : 1

Q.7  
7 India's first 3D planetarium is located in \_\_\_\_\_.

- Ans
- 1. Bengaluru
  - 2. Mangalore
  - 3. Hyderabad
  - 4. Kochi

Question ID : 98958011772

Status : Answered

Chosen Option : 3

Q.7  
8 Diabetes is a condition in which the level of \_\_\_\_\_ in an individual's blood becomes too high.

- Ans
- 1. sucrose
  - 2. glucose
  - 3. galactose
  - 4. maltose

Question ID : 98958011777

Status : Answered

Chosen Option : 1

Q.7  
9 Which of the following CANNOT be attributed to Aryabhata?

- Ans
- 1. Zero
  - 2. Theory of Atom
  - 3. Theory of eclipses
  - 4. Value of pi

Question ID : 98958011787  
Status : Answered  
Chosen Option : 4

Q.8  
0 \_\_\_\_\_ is India's largest research reactor.

- Ans
- 1. Dhruva
  - 2. Apsara
  - 3. Circus
  - 4. Kamini

Question ID : 98958011771  
Status : Answered  
Chosen Option : 2

Q.8  
1 The Khelo India Youth Games was previously called \_\_\_\_\_.

- Ans
- 1. Khel Khelo India
  - 2. Chalo India School Games
  - 3. Khelo Bharat School Games
  - 4. Khelo India School Games

Question ID : 98958011804  
Status : Answered  
Chosen Option : 4

Q.8  
2 The \_\_\_\_\_ Channel separates the Andaman and Nicobar groups of Islands.

- Ans
- 1. Ten Degree
  - 2. Six Degree
  - 3. Eight Degree
  - 4. Twelve Degree

Question ID : 98958011781  
Status : Answered  
Chosen Option : 3

Q.8  
3 The Serum Institute of India launched the oral polio vaccine in \_\_\_\_\_.

- Ans
- 1. 2012

2. 2013

3. 2014

4. 2011

Question ID : 98958011775  
Status : Not Answered  
Chosen Option : --

Q.8 Which of the following Indian psychiatrists was awarded the Ramon Magsaysay Award in 2018 for leading the rescue  
4 of thousands of mentally ill street paupers and reuniting them with their families?

Ans  1. Bharat Vatwani

2. N Rangarajan

3. Vipul Rastogi

4. Subin Vazhayil

Question ID : 98958011792  
Status : Answered  
Chosen Option : 1

Q.8 Raghuram Rajan succeeded \_\_\_\_\_ as the Governor of the Reserve Bank of India in 2013.  
5

Ans  1. Manmohan Singh

2. D. Subbarao

3. Bimal Jalan

4. Urjit Patel

Question ID : 98958011763  
Status : Answered  
Chosen Option : 2

Q.8 Smiling Buddha is a code name for \_\_\_\_\_.  
6

Ans  1. India's first nuclear bomb test

2. India's first unmanned tank

3. The Father of the Indian Nuclear Program

4. India's largest power plant

Question ID : 98958011773  
Status : Answered  
Chosen Option : 1

Q.8 The \_\_\_\_\_ Stock Exchange was the first to be recognized by the Government of India under the Securities Contracts  
7 Regulation Act.

Ans  1. Ahmedabad

2. Bombay

3. Madras

4. Calcutta



Question ID : 98958011767  
Status : Answered  
Chosen Option : 2

Q.8 Which of the following is NOT another name for Ram Setu?

- Ans
- 1. Adam's Bridge
  - 2. Setu Banda
  - 3. Nala Banda
  - 4. Nala Setu

Question ID : 98958011784  
Status : Not Answered  
Chosen Option : --

Q.8 Neelam Sanjeeva Reddy served as \_\_\_\_\_ from 1956 to 1959.

- Ans
- 1. Chief Minister
  - 2. President
  - 3. Member of Rajya Sabha
  - 4. Deputy Chief Minister

Question ID : 98958011801  
Status : Not Answered  
Chosen Option : --

Q.9 The 2<sup>nd</sup> National Conference on Self Reliance in Defense Manufacturing was organized at \_\_\_\_\_ in 2019.

- Ans
- 1. Chennai
  - 2. Delhi
  - 3. Pune
  - 4. Hyderabad

Question ID : 98958011766  
Status : Not Answered  
Chosen Option : --

Q.9 In January 2019, the Government of \_\_\_\_\_ released 'Startup and Innovation policy 2018-2023' to make the state a "Global Innovation hub for startups" by 2023.

- Ans
- 1. Kerala
  - 2. Tamil Nadu
  - 3. Telangana
  - 4. Uttarakhand

Question ID : 98958011799  
Status : Not Answered  
Chosen Option : --



Q.9  
2 \_\_\_\_\_ was the coach of the World Cup winning Indian Cricket team in 2011.

- Ans
- 1. Gary Kirsten
  - 2. Duncan Fletcher
  - 3. John Wright
  - 4. Greg Chappell

Question ID : 98958011806  
Status : Answered  
Chosen Option : 1

Q.9  
3 The daughter of Moropant Tambe and Bhagirathi Sapre became famous as \_\_\_\_\_.

- Ans
- 1. Ahilyabai Holkar
  - 2. Rani Laxmibai
  - 3. Rajmata Gayatri Devi
  - 4. Jijabai

Question ID : 98958011791  
Status : Not Answered  
Chosen Option : --

Q.9  
4 Bhagat Singh, Rajguru and Sukhdev were hanged in the year \_\_\_\_\_.

- Ans
- 1. 1930
  - 2. 1935
  - 3. 1933
  - 4. 1931

Question ID : 98958011788  
Status : Answered  
Chosen Option : 4

Q.9  
5 \_\_\_\_\_ was the first Indian board member of the World Editors Forum.

- Ans
- 1. Behram Contractor
  - 2. Bachi Karkaria
  - 3. Shobhaa De
  - 4. Khushwant Singh

Question ID : 98958011796  
Status : Not Answered  
Chosen Option : --

Q.9  
6 \_\_\_\_\_ is an ancient Sanskrit text on medicine and surgery.

- Ans
- 1. Arthashashtra
  - 2. Raghuvamsha

- 3. Sushruta Samhita
- 4. Abhijnanashakuntala

Question ID : 98958011786  
Status : Not Answered  
Chosen Option : --

Q.9  
7 \_\_\_\_\_ was constructed in 1994 for the National Games, 1994.

- Ans
- 1. Shree Shiv Chhatrapati Sports Complex, Pune
  - 2. DY Patil Stadium, Navi Mumbai
  - 3. Kalinga Stadium, Bhubaneshwar
  - 4. Jawaharlal Nehru Stadium, Kochi

Question ID : 98958011805  
Status : Not Answered  
Chosen Option : --

Q.9  
8 Kailasa temple in the \_\_\_\_\_ Caves is the largest rock-cut monument in the world.

- Ans
- 1. Elephanta
  - 2. Ajanta
  - 3. Ellora
  - 4. Karla

Question ID : 98958011759  
Status : Answered  
Chosen Option : 3

Q.9  
9 Which of the following is NOT recognised as an Intangible Cultural Heritage (ICH) by UNESCO?

- Ans
- 1. Sitar Vadan
  - 2. Yoga
  - 3. Kumbh Mela
  - 4. Chhau dance

Question ID : 98958011762  
Status : Not Answered  
Chosen Option : --

Q.1  
00 The Election Commission celebrated its golden jubilee in the year \_\_\_\_\_.

- Ans
- 1. 1998
  - 2. 1997
  - 3. 2001
  - 4. 2011

Question ID : 98958011798

Status : Answered  
Chosen Option : 3

Q.1 01 The sides of a triangle are in the ratio 3 : 4 : 5. If the perimeter of the triangle is 24 cm, its area is:

- Ans
- 1.  $18 \text{ cm}^2$
  - 2.  $24 \text{ cm}^2$
  - 3.  $20 \text{ cm}^2$
  - 4.  $22.89 \text{ cm}^2$

Question ID : 98958011329  
Status : Answered  
Chosen Option : 2

Q.1 02 In an office of 1200 employees, the ratio of urban to rural members of staff is 8 : 7. After joining of some new employees, out of which 20 are rural, the ratio becomes 5 : 4. The number of new urban employees is:

- Ans
- 1. 100
  - 2. 85
  - 3. 76
  - 4. 108

Question ID : 98958011309  
Status : Answered  
Chosen Option : 2

Q.1 03 A scored 73, 76, 20, and 7 runs in four out of five innings. What should be his score in the fifth innings, if he has to make an average of 55 runs in five innings?

- Ans
- 1. 99
  - 2. 11
  - 3. 55
  - 4. 42

Question ID : 98958011301  
Status : Answered  
Chosen Option : 1

Q.1 04 ₹ 4,06,736 is divided among A, B and C such that the ratio between A and B is 2 : 3 and B and C is 1 : 2. The share of C is:

- Ans
- 1. ₹ 73,952
  - 2. ₹ 1,10,928
  - 3. ₹ 2,64,796
  - 4. ₹ 2,21,856

Question ID : 98958011310  
Status : Answered  
Chosen Option : 4

Q.1 05 If  $x + \frac{1}{x} = 2\sqrt{3}$ , then  $x^2 + \frac{1}{x^2}$  is equal to:

- Ans  1. 8  
 2. 16  
 3. 10  
 4. 12

Question ID : 98958011325  
Status : Answered  
Chosen Option : 3

Q.1 06 The distance between two cities is covered in  $3\frac{1}{4}$  hours at a speed of 52 km/h. If the speed is increased to 65 km/h, how much time would be saved?

- Ans  1. 39 minutes  
 2. 45 minutes  
 3. 40 minutes  
 4. 42 minutes

Question ID : 98958011318  
Status : Answered  
Chosen Option : 1

Q.1 07 The product of two numbers is 45360; if the HCF of the numbers is 36, then their LCM is:

- Ans  1. 252  
 2. 630  
 3. 126  
 4. 1260

Question ID : 98958011296  
Status : Answered  
Chosen Option : 4

Q.1 08 ₹ 2,40,000 is taken as loan for three years compounded annually at 12.5% p.a. At the end of first year, the interest is revised to 12% p.a. The total amount to be repaid at the end of third year is:

- Ans  1. ₹ 3,26,400  
 2. ₹ 3,34,800  
 3. ₹ 3,38,688  
 4. ₹ 3,42,648

Question ID : 98958011312  
Status : Not Answered  
Chosen Option : --

Q.1 09 ABCD is a cyclic quadrilateral such that AB is a diameter of the circle circumscribing it and angle ADC =  $125^\circ$ . Then angle BAC is equal to:

- Ans  1.  $20^\circ$   
 2.  $30^\circ$   
 3.  $60^\circ$   
 4.  $35^\circ$

Question ID : 98958011327  
 Status : Answered  
 Chosen Option : 4

Q.1 How many soap cakes of size  $8\text{ cm} \times 4.5\text{ cm} \times 2\text{ cm}$  can be kept in a carton of size  $11\text{ m} \times 0.82\text{ m} \times 0.63\text{ m}$ ?  
 10

- Ans
- 1. 81052
  - 2. 75626
  - 3. 73498
  - 4. 78925

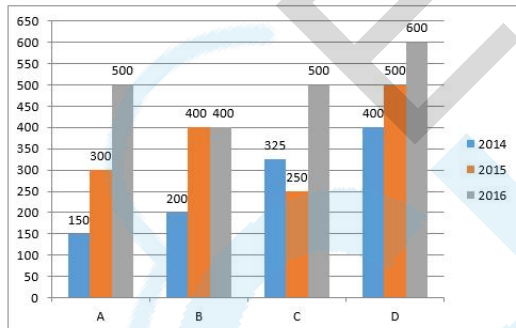
Question ID : 98958011323  
 Status : Answered  
 Chosen Option : 4

Q.1 8% of 5 litres is:  
 11

- Ans
- 1. 0.4 ml
  - 2. 400 ml
  - 3. 40 ml
  - 4. 4 ml

Question ID : 98958011305  
 Status : Answered  
 Chosen Option : 2

Q.1 The given bar chart shows production of steel by companies A, B, C and D for years 2014, 2015, 2016 (in tonnes).  
 12



In the given bar-chart, the average production of steel at 'C' for the year 2014-2016 is:

- Ans
- 1. 358.33
  - 2. 333.33
  - 3. 423.58
  - 4. 400

Question ID : 98958011335  
 Status : Answered  
 Chosen Option : 1

Q.1 If the height of an equilateral triangle is  $10\sqrt{3}\text{ cm}$ , the area is:  
 13

- Ans
- 1.  $124\sqrt{3}\text{ cm}^2$



- 2.  $75\sqrt{3} \text{ cm}^2$
- 3.  $80\sqrt{3} \text{ cm}^2$
- 4.  $100\sqrt{3} \text{ cm}^2$

Question ID : 98958011330  
 Status : Answered  
 Chosen Option : 4

Q.1 PA and PB are two tangents to a circle with centre O, from a point P outside the circle. A and B are points on the circle.  
 14 If  $\angle APB = 86^\circ$ , then  $\angle OAB$  is equal to:

- Ans
- 1.  $43^\circ$
  - 2.  $45^\circ$
  - 3.  $50^\circ$
  - 4.  $20^\circ$

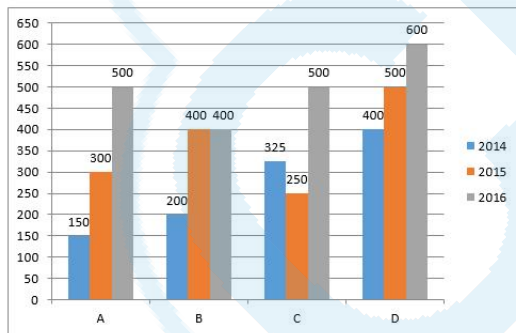
Question ID : 98958011328  
 Status : Answered  
 Chosen Option : 1

Q.1 Which of the following solids has least number of faces?  
 15

- Ans
- 1. Cube
  - 2. Cone
  - 3. Triangular prism
  - 4. Square pyramid

Question ID : 98958011319  
 Status : Answered  
 Chosen Option : 2

Q.1 The given bar chart shows production of steel by companies A, B, C and D for years 2014, 2015, 2016 (in tonnes).  
 16



In the given bar-chart, which company has the maximum total production of steel?

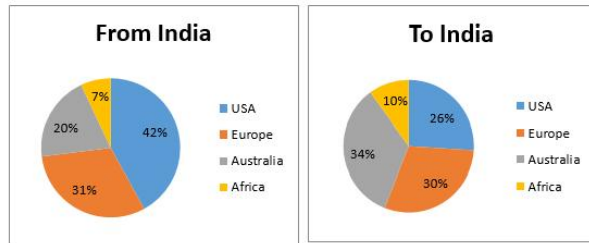
- Ans
- 1. C
  - 2. D
  - 3. A
  - 4. B

Question ID : 98958011336  
 Status : Answered



Chosen Option : 2

Q.1 17 The given pie-chart shows the numbers of tourists for the year 2015, traveling from India and to India.



In the given pie-chart, if 1657850 is the total number of tourists visiting India, how many visited from Australia:

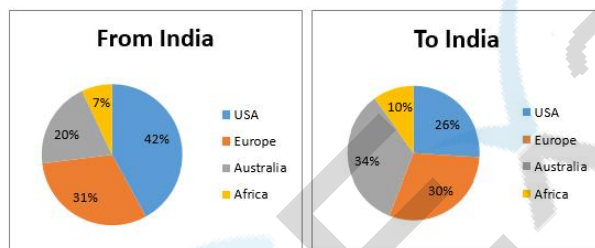
- Ans  1. 563669  
 2. 589320  
 3. 457602  
 4. 331570

Question ID : 98958011339

Status : Answered

Chosen Option : 4

Q.1 18 The given pie-chart shows the numbers of tourists for the year 2015, traveling from India and to India.



In the given pie-chart, from which country tourists have come to India more than Indians going to that country:

- Ans  1. Australia and Africa  
 2. Europe  
 3. USA  
 4. Australia only

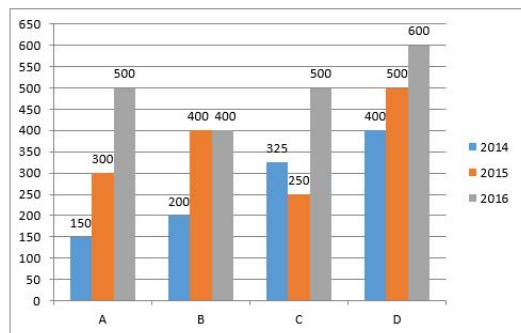
Question ID : 98958011338

Status : Answered

Chosen Option : 1

Q.1 19

The given bar chart shows production of steel by companies A, B, C and D for years 2014, 2015, 2016 (in tonnes).



In the given bar-chart, what is the percentage production of 'B' in 2014 to the total production of 2014?

- Ans
- 1. 19.4%
  - 2. 20%
  - 3. 27.6%
  - 4. 18.6%

Question ID : 98958011337

Status : Answered

Chosen Option : 4

Q.1 The price of petrol was raised by 15%. By how much percentage should a motorist reduce the consumption of petrol so that the expenditure on it does not increase?

- Ans
- 1.  $9\frac{2}{11}\%$
  - 2.  $15\frac{3}{13}\%$
  - 3.  $13\frac{1}{23}\%$
  - 4.  $6\frac{7}{8}\%$

Question ID : 98958011306

Status : Answered

Chosen Option : 3

Q.1 If a cuboid has  $l = 24$  cm,  $b = 16$  cm,  $h = 7.5$  cm, its lateral surface area is:

- Ans
- 1.  $720$  cm<sup>2</sup>
  - 2.  $2880$  cm<sup>2</sup>
  - 3.  $600$  cm<sup>2</sup>
  - 4.  $1440$  cm<sup>2</sup>

Question ID : 98958011320

Status : Answered

Chosen Option : 3

Q.1 Two pipes A and B can fill a tank in 45 minutes. If pipe A can fill an empty tank in 1 hour, how long will it take pipe B to fill the empty tank?

- Ans
- 1. 2 hours

- 2. 3 hours
- 3. 1 hour
- 4. 4 hours

Question ID : 98958011316  
Status : Answered  
Chosen Option : 2

Q.1  
23 The number 66249 is divisible by which of the single digit numbers:

- Ans
- 1. Only by 3 and 9
  - 2. Only by 3 and 7
  - 3. Only by 9
  - 4. Only by 3

Question ID : 98958011295  
Status : Answered  
Chosen Option : 1

Q.1  
24 The marked price of a dress is ₹ 2,340 which is 25% above the cost price. If the dress is sold at a profit of 10%, the profit earned on the dress is:

- Ans
- 1. ₹ 234
  - 2. ₹ 187.20
  - 3. ₹ 197
  - 4. ₹ 175.50

Question ID : 98958011308  
Status : Answered  
Chosen Option : 2

Q.1  
25 If  $x = a \cos\theta + b \sin\theta$  and  $y = a \sin\theta - b \cos\theta$ , the value of  $x^2 + y^2$  is:

- Ans
- 1.  $a^2 - b^2$
  - 2.  $a - b$
  - 3.  $a^2 + b^2$
  - 4.  $a + b$

Question ID : 98958011331  
Status : Answered  
Chosen Option : 3

Q.1  
26 A and B are standing on the same side of a wall and observe that the angles of elevation to the top of the wall are  $45^\circ$  and  $60^\circ$  respectively. If the height of the wall is 50 m, the distance between A and B is: (Use  $\sqrt{3}=1.73$  and  $\sqrt{2}=1.41$ )

- Ans
- 1. 25.07 m
  - 2. 21.10 m
  - 3. 17.38 m
  - 4. 14.65 m

Question ID : 98958011333  
 Status : Answered  
 Chosen Option : 1

Q.1 27 Three painters have to spend 6 hours a day for 12 days to finish a work. If after 3 days one painter leaves, in how many days the remaining work will be completed?

- Ans
- 1.  $15\frac{2}{3}$
  - 2.  $13\frac{1}{2}$
  - 3. 11
  - 4. 8

Question ID : 98958011314  
 Status : Answered  
 Chosen Option : 2

Q.1 28 The value of  $4\sin^2 30^\circ + 3\cot^2 60^\circ$  is:

- Ans
- 1. 1
  - 2.  $\frac{1}{\sqrt{3}}$
  - 3. 2
  - 4. 0

Question ID : 98958011332  
 Status : Answered  
 Chosen Option : 3

Q.1 29 A pipe can fill a tank in 30 minutes. Due to two leakages A and B, the filled tank would be drained off in  $1\frac{1}{2}$  hour and  $1\frac{1}{4}$  hour respectively. How long will it take to fill the tank if the pipe, A and B are left open?

- Ans
- 1.  $1\frac{7}{8}$  hour
  - 2.  $1\frac{1}{3}$  hour
  - 3.  $1\frac{4}{5}$  hour
  - 4.  $1\frac{5}{6}$  hour

Question ID : 98958011315  
 Status : Not Answered  
 Chosen Option : --

Q.1 30

The table shows Income and expenditure of a person for 3 years (in thousands):

| Statement of Income and expenditure |        |         |         |
|-------------------------------------|--------|---------|---------|
| Year                                | Income | Expense | Savings |
| 2000                                | 110    | 103     | +7      |
| 2001                                | 223    | 214     | +9      |
| 2002                                | 243    | 197     | +46     |
| 2003                                | 189    | 232     | -43     |

In the given table, if a person invested his savings every year at 8% simple interest, how much interest will he earn at the end of 2003?

- Ans
- 1. 7.46
  - 2. 6.80
  - 3. 4.96
  - 4. 5.52

Question ID : 98958011342  
 Status : Not Answered  
 Chosen Option : --

Q.1 A drives at the rate of 45 km/h and reaches its destination 4 minutes late. If speed is 60 km/h, A reaches 5 minutes early.  
 31 The distance traveled by A is:

- Ans
- 1. 24 km
  - 2. 21 km
  - 3. 27 km
  - 4. 30 km

Question ID : 98958011317  
 Status : Answered  
 Chosen Option : 3

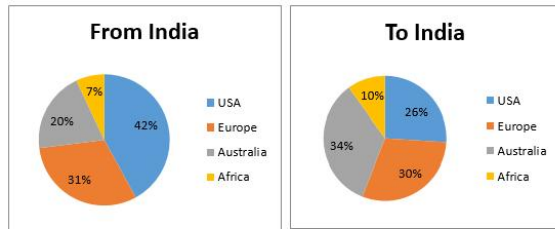
Q.1 A tall rectangular vessel is half filled with water. The base dimension of the vessel is 62 cm × 45 cm. A heavy metal  
 32 cube of edge 15 cm is dropped into the vessel. The rise in level of the vessel is:

- Ans
- 1. 1.21 cm
  - 2. 1.15 cm
  - 3. 1.07 cm
  - 4. 1 cm

Question ID : 98958011322  
 Status : Not Answered  
 Chosen Option : --

Q.1  
 33

The given pie-chart shows the numbers of tourists for the year 2015, traveling from India and to India.



In the given pie-chart, if the number of tourists visiting India is 21,35,600 and the number from India to other countries is 20,45,450, how many more people visited USA from India than from USA to India?

- Ans
- 1. 303833
  - 2. 358097
  - 3. 342675
  - 4. 287698

Question ID : 98958011340  
 Status : Not Answered  
 Chosen Option : --

Q.1 A bought 600 gm, 750 gm, 1.1 kg, 2.3 kg and 800 gm packs of dal from a shop. What is the average weight of the packs?

34

- Ans
- 1. 11.1 kg
  - 2. 111 gm
  - 3. 1.11 gm
  - 4. 1.11 kg

Question ID : 98958011302  
 Status : Answered  
 Chosen Option : 4

Q.1 A trader gives a discount of 4% for purchases above ₹ 25,000, 6% for purchases above ₹ 35,000 and 8% for purchases above ₹ 50,000. If an item is purchased for ₹ 38,500, what would be the amount of discount?

35

- Ans
- 1. ₹ 3,740
  - 2. ₹ 1,810
  - 3. ₹ 3,080
  - 4. ₹ 2,310

Question ID : 98958011304  
 Status : Not Answered  
 Chosen Option : --

Q.1 If the height of a pole and the distance between the pole and a man standing nearby are equal, what would be the angle of elevation to the top of the pole?

36

- Ans
- 1. 60°
  - 2. 90°
  - 3. 30°
  - 4. 45°

Question ID : 98958011334



Status : **Answered**  
Chosen Option : 4

Q.1 37  $(-4) \times (-8) \div (-2) + 3 \times 5$  is equal to:

- Ans  1. -1  
 2. 1  
 3. 31  
 4. -31

Question ID : **98958011298**  
Status : **Answered**  
Chosen Option : 1

Q.1 38 The table shows Income and expenditure of a person for 3 years (in thousands):

Statement of Income and expenditure

| Year | Income | Expense | Savings |
|------|--------|---------|---------|
| 2000 | 110    | 103     | +7      |
| 2001 | 223    | 214     | +9      |
| 2002 | 243    | 197     | +46     |
| 2003 | 189    | 232     | -43     |

In the given table, what is the percentage of expenditure on income in the year 2002?(round off)

- Ans  1. 85%  
 2. 78%  
 3. 82%  
 4. 81%

Question ID : **98958011341**  
Status : **Answered**  
Chosen Option : 3

Q.1 39 The dimensions of a swimming pool are  $66 \text{ m} \times 35 \text{ m} \times 3 \text{ m}$ . How many hours will it take to fill the pool by a pipe of diameter 35 cm with water flowing at speed 8 m/s?

- Ans  1. 2.75  
 2. 3.5  
 3. 2.5  
 4. 3.2

Question ID : **98958011321**  
Status : **Not Answered**  
Chosen Option : --

Q.1 40 The price of a refrigerator is ₹ 22,000. A shopkeeper marks its price 15% above its cost price and gives a discount of 8%. The discount is:

- Ans  1. ₹ 1,960

2. ₹ 1,824

3. ₹ 1,672

4. ₹ 2,024

Question ID : 98958011303  
Status : Answered  
Chosen Option : 4

Q.1  
41 The least number that should be added to 10000 so that it is exactly divisible by 327 is:

Ans  1. 327

2. 237

3. 137

4. 190

Question ID : 98958011300  
Status : Answered  
Chosen Option : 3

Q.1  
42 A car consumes 5.4 litres of petrol to cover 60.48 km, how many kilometers be covered with 22 litres of petrol?

Ans  1. 246.4

2. 238.62

3. 240.24

4. 243.5

Question ID : 98958011313  
Status : Answered  
Chosen Option : 1

Q.1  
43 If  $(2x - 1)^3 + (3x - 4)^3 + (x - 7)^3 = (6x - 3)(3x - 4)(x - 7)$ , then what is the value of  $x$ ?

Ans  1. 5

2. 8

3. 2

4. 3

Question ID : 98958011324  
Status : Answered  
Chosen Option : 3

Q.1  
44

The table shows Income and expenditure of a person for 3 years (in thousands):

| Statement of Income and expenditure |        |         |         |
|-------------------------------------|--------|---------|---------|
| Year                                | Income | Expense | Savings |
| 2000                                | 110    | 103     | +7      |
| 2001                                | 223    | 214     | +9      |
| 2002                                | 243    | 197     | +46     |
| 2003                                | 189    | 232     | -43     |

In the given table, if a person reduced his expenditure by 10%, by how much would his total savings increased?

- Ans
- 1. 69.8
  - 2. 83
  - 3. 74.6
  - 4. 78.2

Question ID : 98958011343  
 Status : Not Answered  
 Chosen Option : --

Q.1  
45 The greatest number of four digits which is exactly divisible by 24, 36 and 54 is:

- Ans
- 1. 9990
  - 2. 9924
  - 3. 9936
  - 4. 9960

Question ID : 98958011297  
 Status : Answered  
 Chosen Option : 3

Q.1  
46 The simple interest on a certain sum at 15% p.a. for three years is ₹ 7,200. The sum is:

- Ans
- 1. ₹ 16,000
  - 2. ₹ 24,000
  - 3. ₹ 32,000
  - 4. ₹ 48,000

Question ID : 98958011311  
 Status : Answered  
 Chosen Option : 1

Q.1  
47 If  $a^3 + b^3 = 416$  and  $a + b = 16$ , then  $(a - b)^2 + ab$  is equal to:

- Ans
- 1. 32
  - 2. 22
  - 3. 24
  - 4. 26

Question ID : 98958011326  
 Status : Answered  
 Chosen Option : 4

Q.1  
 48 The cube root of 3375 is equal to:

- Ans
- 1. 35
  - 2. 25
  - 3. 55
  - 4. 15

Question ID : 98958011294  
 Status : Answered  
 Chosen Option : 4

Q.1  
 49 A marketing agent earns a commission of 2% on first ₹ 2,00,000, 1.5% on next ₹ 2,00,000 and 1% on the remaining amount of sales made in a month. If the sales achieved by the agent for the month of April 2018 are ₹ 5,68,000, the commission earned is:

- Ans
- 1. ₹ 8,680
  - 2. ₹ 7,730
  - 3. ₹ 8,240
  - 4. ₹ 7,105

Question ID : 98958011307  
 Status : Not Answered  
 Chosen Option : --

Q.1  
 50  $\frac{3}{4} + \frac{5}{2} \left[ \frac{1}{4} \times \left( \frac{8}{5} - \frac{4}{3} \right) \right]$  is equal to:

- Ans
- 1.  $\frac{13}{24}$
  - 2.  $\frac{3}{4}$
  - 3.  $\frac{1}{4}$
  - 4.  $\frac{11}{12}$

Question ID : 98958011299  
 Status : Answered  
 Chosen Option : 4

Q.1  
 51 Select the most appropriate meaning of the given idiom.

to leave no stone unturned

- Ans
- 1. to comprehensively arrange things
  - 2. to fully revise something produced
  - 3. to completely renovate an old building
  - 4. to make all possible efforts

Question ID : 98958011481  
Status : Answered  
Chosen Option : 4

Q.1 Select the most appropriate word to fill in the blank.

52 Around 1,900–4,200 years before the present time was a time of \_\_\_\_\_ change in India, characterized by the de-urbanization of the Indus Valley civilization.

- Ans
- 1. promising
  - 2. weighty
  - 3. profound
  - 4. reflective

Question ID : 98958011458  
Status : Answered  
Chosen Option : 4

Q.1 Select the antonym of the given word.

DYE

- Ans
- 1. blend
  - 2. bleach
  - 3. wash
  - 4. live

Question ID : 98958011474  
Status : Answered  
Chosen Option : 2

Q.1 Select the most appropriate word to fill in the blank.

54 The study has uncovered differences in how the brain \_\_\_\_\_ visual information in patients with various types of lazy eye.

- Ans
- 1. exchanges
  - 2. transforms
  - 3. changes
  - 4. processes

Question ID : 98958011459  
Status : Answered  
Chosen Option : 3

Q.1 Select the wrongly spelt word.

- 55
- Ans
- 1. allergic
  - 2. alegorical
  - 3. altitude
  - 4. alpine

Question ID : 98958011491

Status : Answered

Chosen Option : 2

Q.1 Identify the segment in the sentence, which contains the grammatical error.

56

For the long-term strength of the economy the limit of corporate stock buybacks is a potential solution.

Ans  1. is a potential solution

2. strength of the economy

3. limit of corporate stock buybacks

4. For the long term

Question ID : 98958011450

Status : Not Answered

Chosen Option : --

Q.1 Identify the segment in the sentence, which contains the grammatical error.

57

We are witnessing the worse level of income inequality in decades.

Ans  1. in decades.

2. the worse level of

3. income inequality

4. are witnessing

Question ID : 98958011451

Status : Answered

Chosen Option : 2

Q.1 Select the most appropriate meaning of the given idiom.

58

to pigeon hole

Ans  1. to blindly accept someone

2. to typecast someone

3. to call someone names

4. to hurriedly reject someone

Question ID : 98958011479

Status : Not Answered

Chosen Option : --

Q.1 Select the most appropriate word to fill in the blank.

59

Depression is now the single largest illness in the world; suicide is thus the second leading cause of death among \_\_\_\_\_ and young adults.

Ans  1. boys

2. infants

3. girls

4. adolescents



Question ID : 98958011460

Status : Answered

Chosen Option : 4

Q.1  
60 Select the antonym of the given word.

DESTINATION

- Ans
- 1. arrival
  - 2. origin
  - 3. departure
  - 4. target

Question ID : 98958011478

Status : Answered

Chosen Option : 2

Q.1  
61 Select the most appropriate word to fill in the blank.

Cells in our body have built-in \_\_\_\_\_ to divide and grow to optimum size.

- Ans
- 1. appliances
  - 2. mechanism
  - 3. approaches
  - 4. tools

Question ID : 98958011462

Status : Answered

Chosen Option : 2

Q.1  
62 Select the wrongly spelt word.

- Ans
- 1. resplendent
  - 2. resistance
  - 3. resurrect
  - 4. reseptacle

Question ID : 98958011493

Status : Answered

Chosen Option : 3

Q.1  
63 Select the most appropriate meaning of the given idiom.

to make no bones about

- Ans
- 1. to state something clearly
  - 2. to reveal the hidden structure
  - 3. to consume only the fleshy part
  - 4. to make something unsubstantial

Question ID : 98958011483  
Status : Answered  
Chosen Option : 1

Q.1  
64 Select the most appropriate meaning of the given idiom.

to hold a brief for

- Ans
- 1. to support someone's cause
  - 2. to write a speech for someone
  - 3. to upset someone's campaign
  - 4. to wait for someone

Question ID : 98958011480  
Status : Answered  
Chosen Option : 4

Comprehension:

In the following passage, some words have been deleted. Fill in the blanks with the help of the alternatives given. Select the most appropriate option for each number.

The modern CEO is very much at the \_\_\_\_\_ (1) of the political and media stage. It leaves them open to being identified as \_\_\_\_\_ (2) for economic injustice. The increasingly public role taken \_\_\_\_\_ (3) CEOs is related to a renewed corporate focus on \_\_\_\_\_ (4) social responsibility. Firms must now balance between making profits and fulfilling corporate social \_\_\_\_\_ (5).

SubQuestion No : 165

Q.1  
65 Select the most appropriate option to fill in blank No.1.

- Ans
- 1. margins
  - 2. forefront
  - 3. background
  - 4. beginning

Question ID : 98958011464  
Status : Not Answered  
Chosen Option : --

Comprehension:

In the following passage, some words have been deleted. Fill in the blanks with the help of the alternatives given. Select the most appropriate option for each number.

The modern CEO is very much at the \_\_\_\_\_ (1) of the political and media stage. It leaves them open to being identified as \_\_\_\_\_ (2) for economic injustice. The increasingly public role taken \_\_\_\_\_ (3) CEOs is related to a renewed corporate focus on \_\_\_\_\_ (4) social responsibility. Firms must now balance between making profits and fulfilling corporate social \_\_\_\_\_ (5).

SubQuestion No : 166

Q.1  
66 Select the most appropriate option to fill in blank No.2.

Ans  1. scapegoats

2. victims

3. accused

4. retainers

Question ID : 98958011465

Status : Answered

Chosen Option : 2

Comprehension:

In the following passage, some words have been deleted. Fill in the blanks with the help of the alternatives given. Select the most appropriate option for each number.

The modern CEO is very much at the \_\_\_\_\_ (1) of the political and media stage. It leaves them open to being identified as \_\_\_\_\_ (2) for economic injustice. The increasingly public role taken \_\_\_\_\_ (3) CEOs is related to a renewed corporate focus on \_\_\_\_\_ (4) social responsibility. Firms must now balance between making profits and fulfilling corporate social \_\_\_\_\_ (5).

SubQuestion No : 167

Q.1  
67 Select the most appropriate option to fill in blank No.3.

Ans  1. on

2. by

3. from

4. with

Question ID : 98958011466

Status : Not Answered

Chosen Option : --

Comprehension:



In the following passage, some words have been deleted. Fill in the blanks with the help of the alternatives given. Select the most appropriate option for each number.

The modern CEO is very much at the \_\_\_\_\_ (1) of the political and media stage. It leaves them open to being identified as \_\_\_\_\_ (2) for economic injustice. The increasingly public role taken \_\_\_\_\_ (3) CEOs is related to a renewed corporate focus on \_\_\_\_\_ (4) social responsibility. Firms must now balance between making profits and fulfilling corporate social \_\_\_\_\_ (5).

SubQuestion No : 168

Q.1  
68 Select the most appropriate option to fill in blank No.4.

- Ans
- 1. his
  - 2. their
  - 3. its
  - 4. our

Question ID : 98958011467  
Status : Not Answered  
Chosen Option : --

Comprehension:

In the following passage, some words have been deleted. Fill in the blanks with the help of the alternatives given. Select the most appropriate option for each number.

The modern CEO is very much at the \_\_\_\_\_ (1) of the political and media stage. It leaves them open to being identified as \_\_\_\_\_ (2) for economic injustice. The increasingly public role taken \_\_\_\_\_ (3) CEOs is related to a renewed corporate focus on \_\_\_\_\_ (4) social responsibility. Firms must now balance between making profits and fulfilling corporate social \_\_\_\_\_ (5).

SubQuestion No : 169

Q.1  
69 Select the most appropriate option to fill in blank No.5.

- Ans
- 1. responsibility
  - 2. target
  - 3. outcome
  - 4. priority

Question ID : 98958011468  
Status : Answered  
Chosen Option : 1

Q.1  
70 Select the word, which means the same as the group of words given.

identification with another person's feelings

Ans

- 1. empathy
- 2. charity
- 3. humanity
- 4. antipathy

Question ID : 98958011487  
Status : Answered  
Chosen Option : 3

Q.1  
71 Select the word, which means the same as the group of words given.

person who pretends to have special knowledge or skill

- Ans
- 1. egotist
  - 2. charlatan
  - 3. scholar
  - 4. student

Question ID : 98958011484  
Status : Answered  
Chosen Option : 2

Q.1  
72 Select the antonym of the given word.

UNCANNY

- Ans
- 1. fantastic
  - 2. ordinary
  - 3. logical
  - 4. wise

Question ID : 98958011476  
Status : Answered  
Chosen Option : 2

Q.1  
73 Select the most appropriate option to substitute the underlined segment in the given sentence. If there is no need to substitute it, select No improvement.

The avalanche of new data have been as overwhelming that many scientists who were skeptical about Bronze Age migrations into India have changed their opinions.

- Ans
- 1. The avalanche of new data has been as overwhelming
  - 2. The avalanche of new data has been so overwhelming
  - 3. The avalanche of new data have been so overwhelming
  - 4. No improvement

Question ID : 98958011457  
Status : Answered  
Chosen Option : 2

Q.1 Identify the segment in the sentence, which contains the grammatical error.

74 There is something special about life: the closer one looks to these performances, the more impressive the show becomes.

- Ans
- 1. something special about
  - 2. the more impressive
  - 3. these performances
  - 4. the closer one looks to

Question ID : 98958011449  
Status : Not Answered  
Chosen Option : --

Q.1 Identify the segment in the sentence, which contains the grammatical error.

75 In the ideal 21st century classroom, children are actually excited about going to school, and there is little or no discipline problems because everyone is eager to learn.

- Ans
- 1. children are actually excited
  - 2. In the ideal 21st century classroom
  - 3. there is little
  - 4. everyone is eager

Question ID : 98958011448  
Status : Not Answered  
Chosen Option : --

Q.1 Select the synonym of the given word.

76

COMPLIANT

- Ans
- 1. submissive
  - 2. protestor
  - 3. obdurate
  - 4. resolute

Question ID : 98958011472  
Status : Answered  
Chosen Option : 1

Q.1 Select the synonym of the given word.

77

LAUNCHING

- Ans
- 1. introducing
  - 2. driving
  - 3. running
  - 4. navigating

Question ID : 98958011473



Status : **Answered**  
Chosen Option : 1

**Q.1** Select the most appropriate option to substitute the underlined segment in the given sentence. If there is no need to substitute it, select No improvement.

**78**

A phenomenon called the polar vortex has hit central and eastern parts of the United States. It has brought with it snow, brutally cold temperatures and potentially life-threatening wind chill.

- Ans
- 1. potentially life-threaten windy chills.
  - 2. No improvement
  - 3. potentially life-threatened wind chill.
  - 4. potential life-threatening wind chill.

Question ID : **98958011455**  
Status : **Answered**  
Chosen Option : 2

**Q.1** Select the most appropriate option to substitute the underlined segment in the given sentence. If there is no need to substitute it, select No improvement.

**79**

Though we have developed the technology for process wastewater with the textile industry, it can be used for any other industrial wastewater.

- Ans
- 1. processing wastewater in the textile industry
  - 2. processing wastewater from the textile industry
  - 3. processed wastewater from the textile industry
  - 4. No improvement

Question ID : **98958011453**  
Status : **Not Answered**  
Chosen Option : --

**Comprehension:**

Read the following passage and answer the questions that follow-

The Blue Mountains, just 90 minutes from Sydney, get their name from the natural blue haze created by vast eucalyptus forests in this World Heritage area. Tiny droplets of oil released from the trees mix with water vapour and sunlight to produce the distinctive colour.

Etched with deep fissures that have been chiselled and shaped over ages from the sandstone of an ancient sea, the Blue Mountains is ideal for the thrilling adventure sport of canyoning. A rope-assisted descent into a canyon or cave, canyoning gives access to a beautiful subterranean world. With its dramatic vistas, soaring forests, deep gorges, waterfalls and hundreds of kilometres of walking trails, the Blue Mountains saves its best for bushwalkers.

A highlight of the Greater Blue Mountains World Heritage Area, Jenolan Caves is a labyrinth of stalactite-lined limestone chasms carved by underground rivers. Set in a deep and secluded valley on the western edge of the Blue Mountains, the pure underground rivers and amazing formations inside the caves make this one of the finest cave systems in the world. With 11 spectacular show caves, underground rivers and awe-inspiring formations, you can explore the caves on a guided day tour, get goose bumps on a ghost tour or enjoy a monthly cave concert with natural acoustics and fairy tale ambience.

Another way to experience the natural splendour of the Blue Mountains is by biking or walking. Blue Mountain Bikes provide a mobile service that meets you with bikes, equipment and maps. You can also discover the Blue Mountains' rich Aboriginal heritage on a walking tour with a local guide. It's best to join a guided tour if you're unfamiliar with the region and weather conditions. A trip to the Blue Mountains wouldn't be complete without visiting Katoomba. There you can ride the Scenic Skyway gondola across Jamison Valley, taking in views of the Three Sisters, Mount Solitary and Katoomba Falls. You can also visit the Scenic Railway, the world's steepest incline railway, descending more than 400 metres (0.25 miles) down the escarpment. This thrilling ride passes through a long tunnel and gorge, ending on the valley floor, and is a huge hit with children.

With thousands of plants from the southern hemisphere and around the world, including the rare Wollemi Pine, the Blue Mountains Botanic Garden at Mount Tomah is a must-see for nature lovers. The cool climate garden is 1000 metres (0.62 miles) above sea level and has stunning views across the area. Wander around the estate and explore the many formal gardens. The region is also worth checking out to understand why it was classified a World Heritage Area.

SubQuestion No : 180

Q.1 The Blue Mountains get their unique colour from -

- Ans
- 1. Merging of sunlight and water droplets with eucalyptus oil.
  - 2. water drops as they mix together in the sunlight.
  - 3. drops of oil given out by trees in the region.



✘ 4. the eucalyptus trees that turn blue in the bright sunlight .

Question ID : 98958011495

Status : Answered

Chosen Option : 1

**Comprehension:**

Read the following passage and answer the questions that follow-

The Blue Mountains, just 90 minutes from Sydney, get their name from the natural blue haze created by vast eucalyptus forests in this World Heritage area. Tiny droplets of oil released from the trees mix with water vapour and sunlight to produce the distinctive colour.

Etched with deep fissures that have been chiselled and shaped over ages from the sandstone of an ancient sea, the Blue Mountains is ideal for the thrilling adventure sport of canyoning. A rope-assisted descent into a canyon or cave, canyoning gives access to a beautiful subterranean world. With its dramatic vistas, soaring forests, deep gorges, waterfalls and hundreds of kilometres of walking trails, the Blue Mountains saves its best for bushwalkers.

A highlight of the Greater Blue Mountains World Heritage Area, Jenolan Caves is a labyrinth of stalactite-lined limestone chasms carved by underground rivers . Set in a deep and secluded valley on the western edge of the Blue Mountains, the pure underground rivers and amazing formations inside the caves make this one of the finest cave systems in the world. With 11 spectacular show caves, underground rivers and awe-inspiring formations, you can explore the caves on a guided day tour, get goose bumps on a ghost tour or enjoy a monthly cave concert with natural acoustics and fairy tale ambience.

Another way to experience the natural splendour of the Blue Mountains is by biking or walking. Blue Mountain Bikes provide a mobile service that meets you with bikes, equipment and maps. You can also discover the Blue Mountains' rich Aboriginal heritage on a walking tour with a local guide. It's best to join a guided tour if you're unfamiliar with the region and weather conditions. A trip to the Blue Mountains wouldn't be complete without visiting Katoomba. There you can ride the Scenic Skyway gondola across Jamison Valley, taking in views of the Three Sisters, Mount Solitary and Katoomba Falls. You can also visit the Scenic Railway, the world's steepest incline railway, descending more than 400 metres (0.25 miles) down the escarpment . This thrilling ride passes through a long tunnel and gorge, ending on the valley floor, and is a huge hit with children.

With thousands of plants from the southern hemisphere and around the world, including the rare Wollemi Pine, the Blue Mountains Botanic Garden at Mount Tomah is a must-see for nature lovers. The cool climate garden is 1000 metres (0.62 miles) above sea level and has stunning views across the area. Wander around the estate and explore the many formal gardens. The region is also worth checking out to understand why it was classified a World Heritage Area.

SubQuestion No : 181

Q.1  
81 Which of the following experiences will a visit to the Jenolan caves NOT provide?

- Ans
- 1. stalactite formations
  - 2. cave concert with natural acoustics
  - 3. underground rivers
  - 4. shows featuring popular fairy tales

Question ID : 98958011496

Status : Answered

Chosen Option : 4

Comprehension:





Read the following passage and answer the questions that follow-

The Blue Mountains, just 90 minutes from Sydney, get their name from the natural blue haze created by vast eucalyptus forests in this World Heritage area. Tiny droplets of oil released from the trees mix with water vapour and sunlight to produce the distinctive colour.

Etched with deep fissures that have been chiselled and shaped over ages from the sandstone of an ancient sea, the Blue Mountains is ideal for the thrilling adventure sport of canyoning. A rope-assisted descent into a canyon or cave, canyoning gives access to a beautiful subterranean world. With its dramatic vistas, soaring forests, deep gorges, waterfalls and hundreds of kilometres of walking trails, the Blue Mountains saves its best for bushwalkers.

A highlight of the Greater Blue Mountains World Heritage Area, Jenolan Caves is a labyrinth of stalactite-lined limestone chasms carved by underground rivers. Set in a deep and secluded valley on the western edge of the Blue Mountains, the pure underground rivers and amazing formations inside the caves make this one of the finest cave systems in the world. With 11 spectacular show caves, underground rivers and awe-inspiring formations, you can explore the caves on a guided day tour, get goose bumps on a ghost tour or enjoy a monthly cave concert with natural acoustics and fairy tale ambience.

Another way to experience the natural splendour of the Blue Mountains is by biking or walking. Blue Mountain Bikes provide a mobile service that meets you with bikes, equipment and maps. You can also discover the Blue Mountains' rich Aboriginal heritage on a walking tour with a local guide. It's best to join a guided tour if you're unfamiliar with the region and weather conditions. A trip to the Blue Mountains wouldn't be complete without visiting Katoomba. There you can ride the Scenic Skyway gondola across Jamison Valley, taking in views of the Three Sisters, Mount Solitary and Katoomba Falls. You can also visit the Scenic Railway, the world's steepest incline railway, descending more than 400 metres (0.25 miles) down the escarpment. This thrilling ride passes through a long tunnel and gorge, ending on the valley floor, and is a huge hit with children.

With thousands of plants from the southern hemisphere and around the world, including the rare Wollemi Pine, the Blue Mountains Botanic Garden at Mount Tomah is a must-see for nature lovers. The cool climate garden is 1000 metres (0.62 miles) above sea level and has stunning views across the area. Wander around the estate and explore the many formal gardens. The region is also worth checking out to understand why it was classified a World Heritage Area.

SubQuestion No : 182

Q.1  
82

Match the places with experiences

|                  |  |
|------------------|--|
| 1 Mount Tomah    | a) Sharp descent through a narrow valley; underground passages |
| 2 Jenolan Caves  | b) sky ride across a valley; breath taking views of mountains  |
| 3 Scenic Railway | c) entertaining shows; cave formations                         |
| 4 Katoomba       | d) uncommon varieties of pine trees; protected areas           |

- Ans
- 1. 1-a), 2-d), 3-b), 4-c)
  - 2. 1-a), 2-b), 3-d), 4-c)
  - 3. 1-d), 2-c), 3-a), 4-b)
  - 4. 1-d), 2-c), 3-b), 4-a)

Question ID : 98958011497  
Status : Answered  
Chosen Option : 3

Comprehension:



Read the following passage and answer the questions that follow-

The Blue Mountains, just 90 minutes from Sydney, get their name from the natural blue haze created by vast eucalyptus forests in this World Heritage area. Tiny droplets of oil released from the trees mix with water vapour and sunlight to produce the distinctive colour.

Etched with deep fissures that have been chiselled and shaped over ages from the sandstone of an ancient sea, the Blue Mountains is ideal for the thrilling adventure sport of canyoning. A rope-assisted descent into a canyon or cave, canyoning gives access to a beautiful subterranean world. With its dramatic vistas, soaring forests, deep gorges, waterfalls and hundreds of kilometres of walking trails, the Blue Mountains saves its best for bushwalkers.

A highlight of the Greater Blue Mountains World Heritage Area, Jenolan Caves is a labyrinth of stalactite-lined limestone chasms carved by underground rivers. Set in a deep and secluded valley on the western edge of the Blue Mountains, the pure underground rivers and amazing formations inside the caves make this one of the finest cave systems in the world. With 11 spectacular show caves, underground rivers and awe-inspiring formations, you can explore the caves on a guided day tour, get goose bumps on a ghost tour or enjoy a monthly cave concert with natural acoustics and fairy tale ambience.

Another way to experience the natural splendour of the Blue Mountains is by biking or walking. Blue Mountain Bikes provide a mobile service that meets you with bikes, equipment and maps. You can also discover the Blue Mountains' rich Aboriginal heritage on a walking tour with a local guide. It's best to join a guided tour if you're unfamiliar with the region and weather conditions. A trip to the Blue Mountains wouldn't be complete without visiting Katoomba. There you can ride the Scenic Skyway gondola across Jamison Valley, taking in views of the Three Sisters, Mount Solitary and Katoomba Falls. You can also visit the Scenic Railway, the world's steepest incline railway, descending more than 400 metres (0.25 miles) down the escarpment. This thrilling ride passes through a long tunnel and gorge, ending on the valley floor, and is a huge hit with children.

With thousands of plants from the southern hemisphere and around the world, including the rare Wollemi Pine, the Blue Mountains Botanic Garden at Mount Tomah is a must-see for nature lovers. The cool climate garden is 1000 metres (0.62 miles) above sea level and has stunning views across the area. Wander around the estate and explore the many formal gardens. The region is also worth checking out to understand why it was classified a World Heritage Area.

SubQuestion No : 183

Q.1  
83 What do the river waters do to the cave walls?

- Ans
- 1. create fearful waterfalls
  - 2. give beautiful shapes and patterns
  - 3. create ghosts and fearful images



✘ 4. provide a place to put up sound and light shows

Question ID : 98958011498

Status : Not Answered

Chosen Option : --

**Comprehension:**

Read the following passage and answer the questions that follow-

The Blue Mountains, just 90 minutes from Sydney, get their name from the natural blue haze created by vast eucalyptus forests in this World Heritage area. Tiny droplets of oil released from the trees mix with water vapour and sunlight to produce the distinctive colour.

Etched with deep fissures that have been chiselled and shaped over ages from the sandstone of an ancient sea, the Blue Mountains is ideal for the thrilling adventure sport of canyoning. A rope-assisted descent into a canyon or cave, canyoning gives access to a beautiful subterranean world. With its dramatic vistas, soaring forests, deep gorges, waterfalls and hundreds of kilometres of walking trails, the Blue Mountains saves its best for bushwalkers.

A highlight of the Greater Blue Mountains World Heritage Area, Jenolan Caves is a labyrinth of stalactite-lined limestone chasms carved by underground rivers. Set in a deep and secluded valley on the western edge of the Blue Mountains, the pure underground rivers and amazing formations inside the caves make this one of the finest cave systems in the world. With 11 spectacular show caves, underground rivers and awe-inspiring formations, you can explore the caves on a guided day tour, get goose bumps on a ghost tour or enjoy a monthly cave concert with natural acoustics and fairy tale ambience.

Another way to experience the natural splendour of the Blue Mountains is by biking or walking. Blue Mountain Bikes provide a mobile service that meets you with bikes, equipment and maps. You can also discover the Blue Mountains' rich Aboriginal heritage on a walking tour with a local guide. It's best to join a guided tour if you're unfamiliar with the region and weather conditions. A trip to the Blue Mountains wouldn't be complete without visiting Katoomba. There you can ride the Scenic Skyway gondola across Jamison Valley, taking in views of the Three Sisters, Mount Solitary and Katoomba Falls. You can also visit the Scenic Railway, the world's steepest incline railway, descending more than 400 metres (0.25 miles) down the escarpment. This thrilling ride passes through a long tunnel and gorge, ending on the valley floor, and is a huge hit with children.

With thousands of plants from the southern hemisphere and around the world, including the rare Wollemi Pine, the Blue Mountains Botanic Garden at Mount Tomah is a must-see for nature lovers. The cool climate garden is 1000 metres (0.62 miles) above sea level and has stunning views across the area. Wander around the estate and explore the many formal gardens. The region is also worth checking out to understand why it was classified a World Heritage Area.

SubQuestion No : 184

Q.1  
84 Where are you likely to read this piece?

- Ans
- 1. essay book
  - 2. travel brochure
  - 3. personal diary
  - 4. newspaper report

Question ID : 98958011499  
Status : Answered  
Chosen Option : 2

Q.1  
85 Select the most appropriate option to substitute the underlined segment in the given sentence. If there is no need to substitute it, select No improvement.

South Asia, reaching from Afghanistan in the west to Bangladesh in the east, is home to at last six hundred languages belonging to six large language families.

- Ans
- 1. No improvement
  - 2. home to at least six hundred languages
  - 3. home to at least six hundred language
  - 4. home to at most six hundred languages

Question ID : 98958011454  
Status : Not Answered  
Chosen Option : --

Q.1  
86 Select the most appropriate meaning of the given idiom.

to blow hot and cold

- Ans
- 1. to work like bellows and blow air
  - 2. to exhale heat and inhale cold
  - 3. to be friendly and unfriendly at the same time
  - 4. to show favour and disfavour alternately

Question ID : 98958011482  
Status : Answered  
Chosen Option : 3

Q.1  
87 Select the antonym of the given word.

FERTILE

- Ans
- 1. barren
  - 2. damaging
  - 3. enemy
  - 4. fresh

Question ID : 98958011477  
Status : Answered  
Chosen Option : 1

Q.1  
88 Select the synonym of the given word.

STIMULATION

- Ans
- 1. enthusiasm
  - 2. indolence
  - 3. provocation
  - 4. eagerness

Question ID : 98958011469  
Status : Answered  
Chosen Option : 3

Q.1  
89 Select the synonym of the given word.

REPLACED

- Ans
- 1. removed
  - 2. moved
  - 3. instituted
  - 4. substituted

Question ID : 98958011470  
Status : Answered  
Chosen Option : 1

Q.1  
90 Select the word, which means the same as the group of words given.

method of talking in a roundabout way

- Ans
- 1. talkative
  - 2. circumlocution
  - 3. elocution
  - 4. convoluted

Question ID : 98958011485  
Status : Answered  
Chosen Option : 2

Q.1  
91 Select the word, which means the same as the group of words given.

a person claiming to be superior in culture and intellect to others

- Ans
- 1. patrician
  - 2. highbrow
  - 3. elite



4. noble

Question ID : 98958011488  
Status : Not Answered  
Chosen Option : --

Q.1  
92 Select the wrongly spelt word.

- Ans
- 1. contiguous
  - 2. confirmed
  - 3. confarmist
  - 4. contagious

Question ID : 98958011492  
Status : Answered  
Chosen Option : 3

Q.1  
93 Select the antonym of the given word.

SEVER

- Ans
- 1. remove
  - 2. trim
  - 3. keep
  - 4. unite

Question ID : 98958011475  
Status : Answered  
Chosen Option : 4

Q.1 Identify the segment in the sentence, which contains the grammatical error.

94 The subway system has become very safe and it has come a long way since the 1980s and 1990s where violence was rampant.

- Ans
- 1. has become very safe
  - 2. a long way
  - 3. where violence
  - 4. it has come

Question ID : 98958011452  
Status : Not Answered  
Chosen Option : --

Q.1  
95 Select the wrongly spelt word.

- Ans
- 1. recieipient
  - 2. recede
  - 3. recent
  - 4. receipt



Question ID : 98958011490  
Status : Answered  
Chosen Option : 1

Q.1  
96 Select the wrongly spelt word.

- Ans
- 1. assension
  - 2. ascent
  - 3. assertion
  - 4. accent

Question ID : 98958011489  
Status : Answered  
Chosen Option : 4

Q.1 Select the most appropriate word to fill in the blank.

97 Similar to physical ailments, mental illness is also rooted in a \_\_\_\_\_ basis, as opposed to beliefs which attribute mental illnesses to the presence of evil spirits.

- Ans
- 1. logical
  - 2. biological
  - 3. physical
  - 4. biochemical

Question ID : 98958011461  
Status : Answered  
Chosen Option : 2

Q.1  
98 Select the word, which means the same as the group of words given.

something which is easily breakable

- Ans
- 1. docile
  - 2. fragile
  - 3. fertile
  - 4. futile

Question ID : 98958011486  
Status : Answered  
Chosen Option : 2

Q.1  
99 Select the synonym of the given word.

CONTAMINATING

- Ans
- 1. investing
  - 2. polluting
  - 3. containing

4. encompassing

Question ID : 98958011471

Status : Answered

Chosen Option : 2

**Q.2** Select the most appropriate option to substitute the underlined segment in the given sentence. If there is no need to substitute it, select No improvement.

Genetic influx from Central Asia in the Bronze Age was strongly male-driven, consistent with the patriarchal social structure attributing to the Indo-European pastoralist society.

**Ans**  1. to be attributed to the Indo-European

2. No improvement

3. attributed to the Indo-European

4. attributed by the Indo-European

Question ID : 98958011456

Status : Not Answered

Chosen Option : --