

## Recruitment of Sub-Inspector in Delhi Police, CAPFs and Assistant Sub-Inspector in CISF Examination, 2018

Roll No. :	WWW.EXAMSCLOUD.IN
Registration No.	WWW.EXAMSCLOUD.IN
Name :	WWW.EXAMSCLOUD.IN
Exam Venue :	iON Digital Zone iDZ Naino Ka Bas
Exam Time :	12:45 PM - 2:45 PM
Exam Date :	16/03/2019

Section : SI CPO

Q.1 If  $AT = 20$  and  $BEG = 70$ , then  $BANK = \underline{\hspace{2cm}}$ .

- Ans
- 1. 318
  - 2. 308
  - 3. 228
  - 4. 282

Question ID : 98958012075  
Status : Answered  
Chosen Option : 2

Q.2 Identify the number that does NOT belong in the given series.

5, 9, 17, 29, 55, 65

- Ans
- 1. 55
  - 2. 29
  - 3. 9
  - 4. 5

Question ID : 98958012078  
Status : Answered  
Chosen Option : 1

Q.3 Three of the following four numbers are alike in a certain way and one is different. Identify the different one.

- Ans
- 1. 2047
  - 2. 4702
  - 3. 6041
  - 4. 4306

Question ID : 98958012087  
Status : Answered  
Chosen Option : 3

Q.4

If a mirror is placed on the line MN, then which of the answer figures is the correct mirror image of the given figure?



Ans

1.



2.



3.



4.



Question ID : 98958012102

Status : Answered

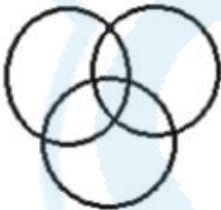
Chosen Option : 4

Q.5 Select the Venn diagram that represents the correct relationship between the following classes.

Vegetables, Brinjal, Apple

Ans

1.



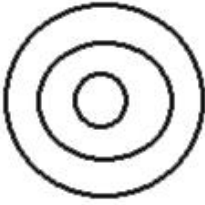
2.



3.



✗ 4.



Question ID : 98958012107

Status : Answered

Chosen Option : 3

Q.6 Select the set of numbers that is similar to the following set of numbers.

(18, 54, 36)

- Ans
- ✗ 1. (16, 40, 32)
  - ✗ 2. (10, 40, 20)
  - ✗ 3. (2, 6, 10)
  - ✓ 4. (8, 24, 16)

Question ID : 98958012088

Status : Answered

Chosen Option : 4

Q.7 Select the word-pair in which the two words are related in the same way as are the two words in the given word-pair.

Steel : Iron

- Ans
- ✗ 1. Chromium : Silver
  - ✓ 2. Brass : Copper
  - ✗ 3. Bronze : Iron
  - ✗ 4. Nickel : Tin

Question ID : 98958012068

Status : Answered

Chosen Option : 2

Q.8 उस विकल्प का चयन कीजिए जिसके शब्द-युग्म के बीच वही संबंध है जो निम्नलिखित शब्द-युग्म के बीच है।

हवाईजहाज : विमान घर

- Ans
- ✓ 1. कार : गैरेज
  - ✗ 2. खेत : अनाज
  - ✗ 3. वस्तुएं : भंडार
  - ✗ 4. घोड़ा : काठी

Question ID : 98958012069

Status : Answered  
Chosen Option : 1

Q.9 Which two numbers should be interchanged to make the following equation correct?

$$7 - 8 \div 4 + 5 \times 3 = 8 \times 3 + 6 \div 2 - 3$$

- Ans
- 1. 4 and 5
  - 2. 7 and 5
  - 3. 4 and 2
  - 4. 6 and 7

Question ID : 98958012090  
Status : Answered  
Chosen Option : 2

Q.1 Select the correct alternative to indicate the arrangement of the following words in a logical and meaningful order.

- 1) Editor
- 2) Publisher
- 3) Author
- 4) Reader
- 5) Bookseller

- Ans
- 1. 3, 1, 2, 5, 4
  - 2. 4, 3, 1, 2, 5
  - 3. 1, 3, 2, 5, 4
  - 4. 3, 2, 1, 5, 4

Question ID : 98958012060  
Status : Answered  
Chosen Option : 1

Q.1 If '×' stands for addition, '+' stands for subtraction, '÷' stands for multiplication and '-' stands for division, then what will be the value of the following expression?

$$26 \div 13 \times 8 + 6 - 2$$

- Ans
- 1. 17
  - 2. 47
  - 3. 27
  - 4. 37

Question ID : 98958012092  
Status : Answered  
Chosen Option : 4

Q.1  
2

Two statements are given, followed by two conclusions I and II. Assuming these statements to be true, even if they seem to be at variance with commonly known facts, decide which of the given conclusions logically follow (s) from the statements.

Statements:

Some roads are metros.

Some metros are cars.

Conclusions:

I. All cars are either roads or metros.

II. Some cars are metros.

- Ans
- 1. Only conclusion I follows.
  - 2. Neither conclusion I nor II follows.
  - 3. Only conclusion II follows.
  - 4. Either conclusion I or II follows.

Question ID : 98958012077  
Status : Answered  
Chosen Option : 3

Q.1 Three of the following four words are alike in a certain way and one is different. Find the odd one out.  
3

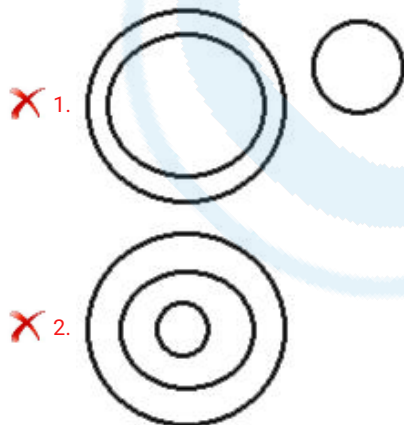
- Ans
- 1. Lion
  - 2. Whale
  - 3. Elephant
  - 4. Shark

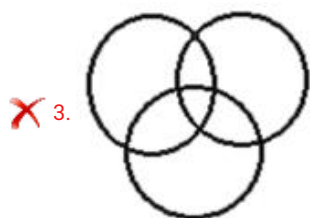
Question ID : 98958012065  
Status : Answered  
Chosen Option : 4

Q.1 Select the Venn diagram that represents the correct relationship between the following classes.  
4

Jaisalmer, Jaipur, Rajasthan

Ans





Question ID : 98958012106  
Status : Answered  
Chosen Option : 4

Q.1 Three of the following four number-pairs are alike in a certain way and one is different. Identify the different one.  
5

- Ans  1. 37 : 75  
 2. 29 : 59  
 3. 28 : 56  
 4. 26 : 53

Question ID : 98958012086  
Status : Answered  
Chosen Option : 3

Q.1 Select the option that is related to the third term in the same way as the second term is related to the first term.  
6

ADGJ : ZWTQ :: MPSV : \_\_\_\_\_

- Ans  1. NKHE  
 2. MKHE  
 3. NJGC  
 4. GJLM

Question ID : 98958012070  
Status : Answered  
Chosen Option : 1

Q.1 'Optimist' is related to 'Pessimist' in the same way as 'Cheerful' is related to '\_\_\_\_\_'.  
7

- Ans  1. Selfish  
 2. Beautiful  
 3. Ugly  
 4. Gloomy

Question ID : 98958012067  
Status : Answered  
Chosen Option : 4



Q.1 <sub>8</sub> Select the set of numbers that is similar to the following set of numbers.

(12, 37, 112)

- Ans
- 1. (15, 46, 139)
  - 2. (7, 24, 73)
  - 3. (13, 40, 118)
  - 4. (9, 28, 83)

Question ID : 98958012089  
Status : Answered  
Chosen Option : 1

Q.1 <sub>9</sub> Select the number-pair in which the two numbers are related in the same way as are the two numbers of the given number pair.

13 : 174

- Ans
- 1. 15 : 224
  - 2. 8 : 69
  - 3. 14 : 200
  - 4. 9 : 81

Question ID : 98958012082  
Status : Answered  
Chosen Option : 2

Q.2 <sub>0</sub> Three of the following four letter-clusters are alike in a certain way and one is different. Find the odd one out.

- Ans
- 1. KOTZ
  - 2. DHMS
  - 3. GIMP
  - 4. FJOU

Question ID : 98958012062  
Status : Answered  
Chosen Option : 3

Q.2 <sub>1</sub> In a certain code language, SON is written as 345 and ROAM is written as 6412. How will RANSOM be written as in the same language?

- Ans
- 1. 615342
  - 2. 651342
  - 3. 615324
  - 4. 612435

Question ID : 98958012074  
Status : Answered

Chosen Option : 1

Q.2 Three of the following four number-pairs are alike in a certain way and one is different. Identify the different one.

2

- Ans
- 1. 15 : 115
  - 2. 23 : 161
  - 3. 29 : 203
  - 4. 27 : 189

Question ID : 98958012085

Status : Answered

Chosen Option : 1

Q.2 Select the option that is related to the third term in the same way as the second term is related to the first term.

3

HVW : FTU :: DRS : \_\_\_\_\_

- Ans
- 1. FTU
  - 2. BOQ
  - 3. BPQ
  - 4. APQ

Question ID : 98958012071

Status : Answered

Chosen Option : 3

Q.2 Which number will replace the question mark (?) in the following series?

4

1, 4, 3, 4, 7, 7, 13, 13, ?

- Ans
- 1. 20
  - 2. 22
  - 3. 31
  - 4. 21

Question ID : 98958012079

Status : Answered

Chosen Option : 4

Q.2 Which number will replace the question mark (?) in the following series?

5

7, 14, 33, 70, 131, ?

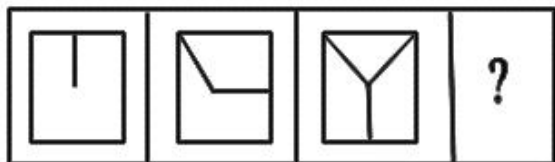
- Ans
- 1. 190
  - 2. 218
  - 3. 131



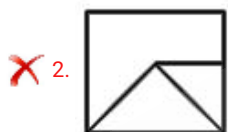
✓ 4. 222

Question ID : 98958012080  
Status : Not Answered  
Chosen Option : --

Q.2  
6 Select the option that will come next in the given series.



Ans



Question ID : 98958012097  
Status : Answered  
Chosen Option : 3

Q.2  
7 Three of the following four letter-clusters are alike in a certain way and one is different. Find the odd one out.

- Ans
- ✗ 1. UFXC
  - ✗ 2. SHBY
  - ✗ 3. TGPK
  - ✓ 4. YAJQ

Question ID : 98958012063  
Status : Answered  
Chosen Option : 4

Q.2  
8

Select the correct alternative to indicate the arrangement of the following words in a logical and meaningful order.

- 1) Knee
- 2) Heel
- 3) Ankle
- 4) Thigh
- 5) Calf

- Ans
- 1. 2, 3, 1, 4, 5
  - 2. 2, 3, 1, 5, 4
  - 3. 4, 5, 3, 2, 1
  - 4. 2, 3, 5, 1, 4

Question ID : 98958012061

Status : Answered

Chosen Option : 4

Q.2 If sign '+' is interchanged with '-' and number '2' is interchanged with '6', which of the following equations would be correct?

- Ans
- 1.  $8 + 6 \div 2 = 8$
  - 2.  $2 + 8 \div 6 = 6$
  - 3.  $2 + 8 \div 2 = 8$
  - 4.  $2 + 6 \div 8 = 11$

Question ID : 98958012091

Status : Answered

Chosen Option : 1

Q.3 Choose the mirror image of the given word if the mirror is placed to the right of the word.

MOUNTAIN

- Ans
- 1. NIATNUOM
  - 2. MOUNTAIN
  - 3. NIATIUOM
  - 4. NIATNUOM

Question ID : 98958012103

Status : Answered

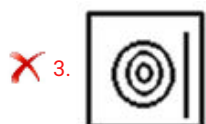
Chosen Option : 1

Q.3  
1

Select the option that will come next in the given series.



Ans



Question ID : 98958012096

Status : Answered

Chosen Option : 2

Q.3 How many squares are there in the following figure?



Ans

1. 8

2. 14

3. 10

4. 12

Question ID : 98958012098

Status : Answered

Chosen Option : 3

Q.3 If in a language, 'foot' is called 'elbow', 'elbow' is called 'ankle', 'ankle' is called 'palm', 'palm' is called 'finger' and 'finger' is called 'knee', then in that language, on what would one wear a ring?

Ans  1. Ankle

- 2. Knee
- 3. Palm
- 4. Finger

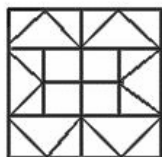
Question ID : 98958012072  
Status : Answered  
Chosen Option : 2

Q.3 Three of the following four number-pairs are alike in a certain way and one is different. Identify the different one.  
4

- Ans
- 1. 9 : 729
  - 2. 13 : 2197
  - 3. 7 : 343
  - 4. 17 : 4814

Question ID : 98958012084  
Status : Answered  
Chosen Option : 4

Q.3 Select the option that is embedded in the following figure. (Rotation is not allowed)  
5



- Ans
- 1.
  - 2.
  - 3.
  - 4.

Question ID : 98958012101  
Status : Answered  
Chosen Option : 3

Q.3  
6

Two statements are given, followed by two conclusions I and II Assuming these statements to be true, even if they seem to be at variance with commonly known facts, decide which of the given conclusions logically follow(s) from the statements.

Statements:

No Tablet is lion.  
All lions are bells.

Conclusions:

- I. No bell is tablet.
- II. Some bells are lions.

- Ans
- 1. Only conclusion I follows.
  - 2. Both conclusions I and II follow.
  - 3. Only conclusion II follows.
  - 4. Neither conclusion I nor II follows.

Question ID : 98958012076

Status : Answered

Chosen Option : 3

Q.3  
7 Which letter-cluster will replace the question mark (?) in the following series?

IVM, HWL, GXK, FYJ, ?

- Ans
- 1. EZH
  - 2. EAH
  - 3. EZI
  - 4. DZI

Question ID : 98958012059

Status : Answered

Chosen Option : 3

Q.3  
8 Which letter will replace the question mark (?) in the following series?

B, E, H, K, N, ?

- Ans
- 1. O
  - 2. P
  - 3. Q
  - 4. N

Question ID : 98958012058

Status : Answered

Chosen Option : 3

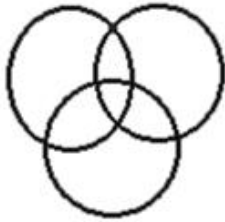
Q.3  
9 Select the Venn diagram that represents the correct relationship between the following classes.

Fathers, Doctors, Singers



Ans

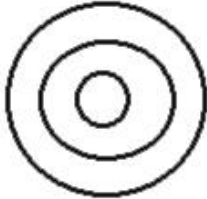
✓ 1.



✗ 2.



✗ 3.



✗ 4.



Question ID : 98958012105  
 Status : Answered  
 Chosen Option : 1

Q.4 Select the number-pair in which the two numbers are related in the same way as are the two numbers of the given number pair.

68 : 30

Ans

✗ 1. 350 : 49

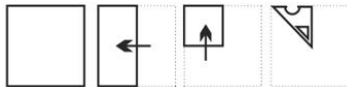
✗ 2. 222 : 131

✗ 3. 125 : 27

✓ 4. 520 : 350

Question ID : 98958012083  
 Status : Not Answered  
 Chosen Option : --

Q.4 The sequence of folding a piece of square paper and the manner in which the folded paper has been cut is shown. How would this paper look when unfolded?

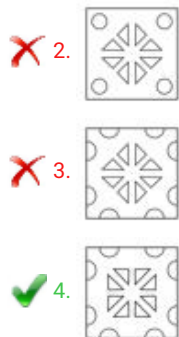


Ans

✗ 1.







Question ID : 98958012104  
Status : Answered  
Chosen Option : 4

Q.4 Three of the following four words are alike in a certain way and one is different. Find the odd one out.  
2

- Ans  1. Potato  
 2. Garlic  
 3. Tomato  
 4. Ginger

Question ID : 98958012064  
Status : Answered  
Chosen Option : 3

Q.4 A man is facing towards the east. He then turns  $45^\circ$  anti-clockwise, again  $180^\circ$  anti-clockwise and then  $225^\circ$  clockwise.  
3 In which direction is he facing now?

- Ans  1. West  
 2. North  
 3. South  
 4. East

Question ID : 98958012094  
Status : Answered  
Chosen Option : 4

Q.4 If in a certain code, EDITION is written as VWRGRLM, then which word will be coded as SLMVHGB?  
4

- Ans  1. HAUGHTY  
 2. HONESTY  
 3. AMNESTY  
 4. EDITORS

Question ID : 98958012073  
Status : Answered  
Chosen Option : 2

Q.4 'Belgium' is related to 'Europe' in the same way as 'Japan' is related to '\_\_\_\_\_'.  
5

- Ans  1. Africa

2. Australia

3. Asia

4. Europe

Question ID : 98958012066

Status : Answered

Chosen Option : 3

Q.4 From his house, Avinash went to Kapil's house situated 500 m towards the north-east of his own house. From there, both of them went to Varun's house situated 400 m towards the south of Kapil's house. What is the shortest distance between Avinash's current location and his location at the beginning?

Ans  1. 900 m

2. 400 m

3. 300 m

4. 500 m

Question ID : 98958012093

Status : Answered

Chosen Option : 3

Q.4 Select the option that is related to the third number in the same way as the second number is related to the first number.  
7

23 : 138 :: 17 : \_\_\_\_\_

Ans  1. 96

2. 102

3. 346

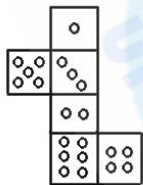
4. 56

Question ID : 98958012081

Status : Answered

Chosen Option : 2

Q.4 If the following figure is folded to form a cube, how many dots would appear on the face opposite the face bearing four dots?



Ans  1. 5

2. 3

3. 6

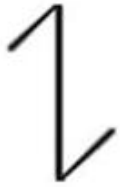
4. 2

Question ID : 98958012099

Status : Answered

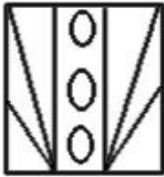
Chosen Option : 1

Q.4  
9 Select the option in which the given figure is embedded.



Ans

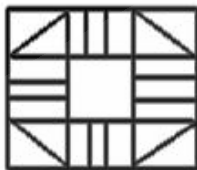
✗ 1.



✓ 2.



✗ 3.



✗ 4.

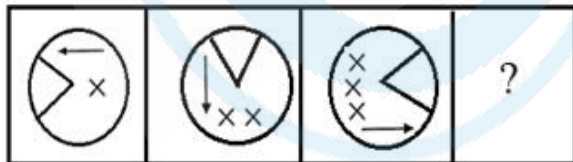


Question ID : 98958012100

Status : Answered

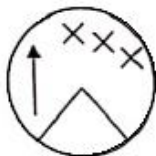
Chosen Option : 2

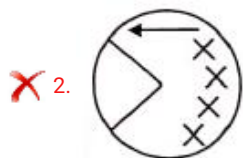
Q.5  
0 Select the option that will come next in the given series.



Ans

✗ 1.





Question ID : 98958012095

Status : Answered

Chosen Option : 4

Q.5  
1 Which of the following would you associate with the word 'dioptré'?

- Ans
- 1. Urology
  - 2. Ophthalmology
  - 3. Neurology
  - 4. Oncology

Question ID : 98958011011

Status : Answered

Chosen Option : 2

Q.5  
2 \_\_\_\_\_ fabric from Madhya Pradesh is registered with a GI tag.

- Ans
- 1. Pembrothi
  - 2. Chanderi
  - 3. Bhagalpuri
  - 4. Sholapuri

Question ID : 98958011016

Status : Answered

Chosen Option : 3

Q.5  
3 Which of the following is NOT a nationalised bank?

- Ans
- 1. South Indian Bank
  - 2. Syndicate Bank
  - 3. Canara Bank
  - 4. Vijaya Bank



Question ID : 98958010999

Status : Not Answered

Chosen Option : --

Q.5  
4 Which of the following is NOT a national political party?

- Ans
- 1. Nationalist Congress Party
  - 2. Bhartiya Janata Party
  - 3. United Democratic Party
  - 4. Indian National Congress

Question ID : 98958011035

Status : Answered

Chosen Option : 3

Q.5  
5 'Expectation is the root of all heartache' is a quote by \_\_\_\_\_.

- Ans
- 1. William Shakespeare
  - 2. Dalai Lama
  - 3. Mahavir
  - 4. Buddha

Question ID : 98958011031

Status : Answered

Chosen Option : 2

Q.5  
6 Considered one of the best in India, Temi Tea garden is the only tea estate in the state of:

- Ans
- 1. West Bengal
  - 2. Sikkim
  - 3. Assam
  - 4. Odisha

Question ID : 98958011017

Status : Not Answered

Chosen Option : --

Q.5  
7 Which renowned tabla player's son is also a famous tabla player who has collaborated with international bands?

- Ans
- 1. Ustad Bismillah Khan
  - 2. Ustad Amjad Ali
  - 3. Ustad Allah Rakha
  - 4. Ustad Rashid Khan

Question ID : 98958011028

Status : Answered

Chosen Option : 4

Q.5

8 Who was the first Indian woman to win an Olympic medal?

- Ans
- 1. Karnam Malleswari
  - 2. Saina Nehwal
  - 3. Mary Kom
  - 4. Sakshi Malik

Question ID : 98958011041  
Status : Answered  
Chosen Option : 1

Q.5 \_\_\_\_\_ was honoured with the "Outstanding Parliamentarian Award" in 2017.

- Ans
- 1. Hukum Dev Narayan
  - 2. Bhartruhari Mahtab
  - 3. Ghulam Nabi Azad
  - 4. Dinesh Trivedi

Question ID : 98958011039  
Status : Not Answered  
Chosen Option : --

Q.6 \_\_\_\_\_ is the biography of Sachin Tendulkar.

- Ans
- 1. The Test of My Life
  - 2. Playing to Win
  - 3. Playing It My Way
  - 4. Ace Against Odds

Question ID : 98958011033  
Status : Answered  
Chosen Option : 3

Q.6 In humans, each cell normally contains \_\_\_\_\_ pairs of chromosomes.

- Ans
- 1. 22
  - 2. 24
  - 3. 23
  - 4. 21

Question ID : 98958011005  
Status : Not Answered  
Chosen Option : --

Q.6 Mangal Pandey was hanged in 1857 for attacking the British officers in:

- Ans
- 1. Allahabad
  - 2. Benaras



3. Calcutta  
 4. Barrackpore

Question ID : 98958011022  
Status : Answered  
Chosen Option : 4

Q.6  
3 Who discovered radium?

- Ans  1. Abdus Salam  
 2. Alexander Fleming  
 3. Pierre and Marie Currie  
 4. Ronald Ross

Question ID : 98958011008  
Status : Answered  
Chosen Option : 3

Q.6  
4 Who is the second woman Speaker of the Lok Sabha?

- Ans  1. Smriti Irani  
 2. Nirmala Sitharaman  
 3. Meira Kumar  
 4. Sumitra Mahajan

Question ID : 98958011034  
Status : Answered  
Chosen Option : 4

Q.6  
5 India celebrates National Engineer's Day on September 15, which is the birth anniversary of:

- Ans  1. Veeru Shahastrabuddhi  
 2. Mokshagundam Visvesvaraya  
 3. E. Sreedharan  
 4. Shiva Ayyadurai

Question ID : 98958011009  
Status : Answered  
Chosen Option : 2

Q.6  
6 \_\_\_\_\_ was the first President of the Bhartiya Janata Party.

- Ans  1. Kushabhau Thakre  
 2. Atal Bihari Vajpayee  
 3. Lal Krishna Advani  
 4. Murli Manohar Joshi

Question ID : 98958011038

Status : Answered  
Chosen Option : 4

Q.6  
7 Nepa Nagar in Madhya Pradesh is known for:

- Ans
- 1. Steel Mills
  - 2. Pottery
  - 3. Sugar Mills
  - 4. Newsprint Factory

Question ID : 98958011019  
Status : Not Answered  
Chosen Option : --

Q.6  
8 'All the world's a stage, And all the men and women merely players' – is a phrase from the play:

- Ans
- 1. Macbeth
  - 2. Julius Ceaser
  - 3. The Merchant of Venice
  - 4. As You Like It

Question ID : 98958011030  
Status : Not Answered  
Chosen Option : --

Q.6  
9 The Thimithi festival in Tamil Nadu is celebrated in the honor of:

- Ans
- 1. Padmavati
  - 2. Sita
  - 3. Draupadi
  - 4. Surpanakha

Question ID : 98958010998  
Status : Not Answered  
Chosen Option : --

Q.7  
0 Security Printing and Minting Corporation of India Limited (SPMCIL) was established in:

- Ans
- 1. 2001
  - 2. 2005
  - 3. 2003
  - 4. 2006

Question ID : 98958011002  
Status : Not Answered  
Chosen Option : --

Q.7  
1 Penicillin, one of the world's first antibiotics, was discovered by:

Ans

- 1. Marie Curie
- 2. Alexander Fleming
- 3. Alexander Graham Bell
- 4. Pierre Curie

Question ID : 98958011007  
Status : Answered  
Chosen Option : 2

Q.7  
2 The Wright brothers completed the world's first successful controlled powered flight in:

- Ans
- 1. 1908
  - 2. 1909
  - 3. 1911
  - 4. 1903

Question ID : 98958011006  
Status : Answered  
Chosen Option : 4

Q.7  
3 The Bahujan Samaj Party was formed in:

- Ans
- 1. 1988
  - 2. 1984
  - 3. 1976
  - 4. 1967

Question ID : 98958011037  
Status : Answered  
Chosen Option : 2

Q.7  
4 Which of the following has an odometer?

- Ans
- 1. Water heater
  - 2. Car
  - 3. Blood pressure monitoring device
  - 4. Air pump

Question ID : 98958011013  
Status : Answered  
Chosen Option : 2

Q.7  
5 The \_\_\_\_\_ period has been described as the 'golden age' of Indian history.

- Ans
- 1. Mughal
  - 2. Maratha
  - 3. Gupta
  - 4. Buddhist

Question ID : 98958011026

Status : Answered

Chosen Option : 3

Q.7 Which of the following is NOT a printing press of the Security Printing and Minting Corporation of India Limited (SPMCIL)?

- Ans
- 1. Bank Note Press
  - 2. Bank Security Press
  - 3. Currency Note Press
  - 4. Security Printing Press

Question ID : 98958011003

Status : Answered

Chosen Option : 4

Q.7 The Sanskrit phrase "Atithi Devo Bhava" means:

- Ans
- 1. I salute you
  - 2. The guest is God
  - 3. Good day
  - 4. See you soon

Question ID : 98958010996

Status : Answered

Chosen Option : 2

Q.7 Which Indian State/Union Territory has the shortest coastline?

- Ans
- 1. Gujarat
  - 2. Maharashtra
  - 3. Puducherry
  - 4. Tamil Nadu

Question ID : 98958011018

Status : Answered

Chosen Option : 3

Q.7 Who among the following is the highest-rated visually impaired chess player in India?

- Ans
- 1. Darpan Inani
  - 2. Baskaran Adhiban
  - 3. Krishnan Sasikiran
  - 4. Pentala Harikrishna

Question ID : 98958011040

Status : Answered

Chosen Option : 1



Q.8 \_\_\_\_\_ was officially acknowledged as the most recorded artist in music history by the Guinness Book of World Records in 2011.

- Ans
- 1. Mariah Carey
  - 2. Asha Bhosle
  - 3. Lata Mangeshkar
  - 4. Beyonce

Question ID : 98958011029  
Status : Answered  
Chosen Option : 1

Q.8 Which Gharana of classical singing did late Pandit Bhimsen Joshi belong to?

- Ans
- 1. Etawah
  - 2. Malhar
  - 3. Kirana
  - 4. Dhruwad

Question ID : 98958010997  
Status : Not Answered  
Chosen Option : --

Q.8 As of January 2019 \_\_\_\_\_ was the longest serving Chief Minister of Gujarat.

- Ans
- 1. Keshubhai Patel
  - 2. Narendra Modi
  - 3. Madhav Singh Solanki
  - 4. Chimanbhai Patel

Question ID : 98958011024  
Status : Answered  
Chosen Option : 3

Q.8 Ohm's Law states that:

- Ans
- 1. Electric current = Voltage / Resistance
  - 2. Power = Voltage + Current
  - 3. Power = Voltage × Current
  - 4. Electric current = Resistance / Voltage

Question ID : 98958011010  
Status : Answered  
Chosen Option : 1

Q.8 The Test of My Life is an autobiography of:

- Ans
- 1. Yuvraj Singh

- 2. Sachin Tendulkar
- 3. MS Dhoni
- 4. Gautam Gambhir

Question ID : 98958011042  
Status : Answered  
Chosen Option : 1

Q.8  
5 The names of Wright brothers credited with inventing the aeroplane were:

- Ans
- 1. William and Oliver
  - 2. William and Orville
  - 3. Wilbur and Orville
  - 4. Wilbur and Oliver

Question ID : 98958011004  
Status : Answered  
Chosen Option : 3

Q.8  
6 As on December 12, 2018 The Nationalist Congress Party was led by:

- Ans
- 1. Sudhakar Reddy
  - 2. Sharad Pawar
  - 3. Rahul Gandhi
  - 4. Sitaram Yechury

Question ID : 98958011036  
Status : Answered  
Chosen Option : 2

Q.8  
7 Kanishka was a \_\_\_\_\_ king.

- Ans
- 1. Kushan
  - 2. Gupta
  - 3. Maurya
  - 4. Chola

Question ID : 98958011027  
Status : Answered  
Chosen Option : 1

Q.8  
8 'Sardeshmukhi' in the Maratha regime was a:

- Ans
- 1. Designation equivalent to Peshwa
  - 2. A coin during the Maratha regime
  - 3. Tax levied on revenue
  - 4. Name given to Shivaji



Question ID : 98958011023  
Status : Not Answered  
Chosen Option : --

Q.8  
9 \_\_\_\_\_ is the stigma of Crocus Sativus L.

- Ans
- 1. Saffron
  - 2. Turmeric
  - 3. Artichoke
  - 4. Ginger

Question ID : 98958011015  
Status : Answered  
Chosen Option : 1

Q.9  
0 What is known as Hunter's Moon in the West, is called as \_\_\_\_\_ in India.

- Ans
- 1. Pausa Purnima
  - 2. Magha Purnima
  - 3. Chaitra Purnima
  - 4. Kartik Purnima

Question ID : 98958010994  
Status : Not Answered  
Chosen Option : --

Q.9  
1 Which of the following states is NOT famous for the Bhut Jolokia pepper?

- Ans
- 1. Odisha
  - 2. Nagaland
  - 3. Manipur
  - 4. Assam

Question ID : 98958011021  
Status : Not Answered  
Chosen Option : --

Q.9  
2 Inertia is proportional to:

- Ans
- 1. Mass
  - 2. Weight
  - 3. Length
  - 4. Height

Question ID : 98958011014  
Status : Answered  
Chosen Option : 1

Q.9

3 Fulminology is the study of:

- Ans
- 1. Volcanic eruptions
  - 2. Lightening
  - 3. Natural gases
  - 4. Atmosphere

Question ID : 98958011012  
Status : Not Answered  
Chosen Option : --

Q.9  
4 The \_\_\_\_\_ is a tax on production/manufacture of goods within the country.

- Ans
- 1. Sales tax
  - 2. Excise duty
  - 3. Service tax
  - 4. Customs duty

Question ID : 98958011001  
Status : Answered  
Chosen Option : 2

Q.9  
5 Devanagari evolved from the \_\_\_\_\_ script.

- Ans
- 1. Brahmi
  - 2. Inuktikut
  - 3. Hebrew
  - 4. Kana

Question ID : 98958010995  
Status : Answered  
Chosen Option : 1

Q.9  
6 \_\_\_\_\_ won a gold medal by setting a world record score in the men's skeet final event of the 8th Asian Shotgun Championship held in Kuwait in December 2018.

- Ans
- 1. Saeed Al Maktoum
  - 2. Angad Vir Singh Bajwa
  - 3. Vijay Kumar
  - 4. Jitu Rai

Question ID : 98958011043  
Status : Answered  
Chosen Option : 2

Q.9  
7 Which Indian state has the maximum number of sea ports?

- Ans
- 1. Tamil Nadu
  - 2. Maharashtra

- 3. Gujarat
- 4. Karnataka

Question ID : 98958011020  
Status : Answered  
Chosen Option : 1

Q.9 The Mughal empire reached its greatest extent under:

- Ans
- 1. Jahangir
  - 2. Shah Jahan
  - 3. Akbar
  - 4. Aurangzeb

Question ID : 98958011025  
Status : Answered  
Chosen Option : 3

Q.9 \_\_\_\_\_ means the minimum lending rate which is determined by the Reserve Bank of India (RBI) and no bank is allowed to lend funds below this rate.

- Ans
- 1. Cash reserve ratio
  - 2. Base rate
  - 3. Repo rate
  - 4. Marginal cost

Question ID : 98958011000  
Status : Answered  
Chosen Option : 3

Q.1 This contemporary Indian dancer who merged Kathak and Kathakali with other dance forms has been awarded the Sangeet Natak Akademi Award in 1996 and Padma Shri in 2007. His/her name is:

- Ans
- 1. Birju Maharaj
  - 2. Jailal Misra
  - 3. Astad Deboo
  - 4. Uday Shankar

Question ID : 98958011032  
Status : Not Answered  
Chosen Option : --

Q.1 If  $x - \frac{1}{x} = 2\sqrt{2}$ , then  $x^2 + \frac{1}{x^2}$  is equal to:

- Ans
- 1. 16
  - 2. 12
  - 3. 11
  - 4. 10

Question ID : 98958012289

Status : Answered

Chosen Option : 4

Q.1  
02 2.4 converted to percentage is:

- Ans
- 1. 0.24
  - 2. 24
  - 3. 240
  - 4. 2.4

Question ID : 98958012269

Status : Answered

Chosen Option : 3

Q.1  
03 A can do a work in 30 days, B can do the same work in 48 days. After working alone for 20 days A left and B started working, how long will B take to complete the work?

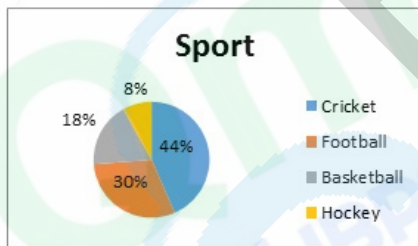
- Ans
- 1. 24 days
  - 2. 28 days
  - 3. 38 days
  - 4. 16 days

Question ID : 98958012278

Status : Answered

Chosen Option : 4

Q.1  
04 The given pie-chart shows favourite sport of students of a school.



In the given pie-chart, if there were 1280 students in all, how many liked football?

- Ans
- 1. 102
  - 2. 550
  - 3. 230
  - 4. 384

Question ID : 98958012302

Status : Answered

Chosen Option : 4

Q.1  
05 The sides of a triangle are in the ratio 3 : 2 : 4 and the perimeter is 72 cm. The sides are:

- Ans
- 1. 24, 16, 32



2. 48, 24, 12

3. 36, 24, 12

4. 36, 18, 9

Question ID : 98958012294

Status : Answered

Chosen Option : 1

Q.1  
06 What percent of 2.4 m is 3.2 cm?

Ans  1. 75%

2. 7.5%

3.  $1000\frac{1}{3}\%$

4.  $13\frac{1}{3}\%$

Question ID : 98958012270

Status : Answered

Chosen Option : 1

Q.1  
07 A shopkeeper buys a book for ₹2,500 and marks its price at 15% above cost. He allows a discount of ₹345. The discount percentage is:

Ans  1. 10

2. 12

3. 11

4. 13

Question ID : 98958012268

Status : Answered

Chosen Option : 2

Q.1  
08 A sum at a simple interest of 8% p.a. becomes  $\frac{7}{5}$  of itself in how many years?

Ans  1. 5

2.  $2\frac{1}{2}$

3.  $3\frac{1}{2}$

4. 2

Question ID : 98958012276

Status : Answered

Chosen Option : 1

Q.1  
09 PA and PB are two tangents to a circle with centre O, from a point P outside the circle. A and B are points on the circle. If  $\angle OAB = 38^\circ$ , then  $\angle APB$  is equal to:

Ans  1.  $25^\circ$

2.  $35^\circ$

3.  $20^\circ$

4.  $76^\circ$

Question ID : 98958012292

Status : Answered

Chosen Option : 4

Q.1  
10 The largest number of four digits that is exactly divisible by 15, 21 and 30 is:

Ans  1. 9840

2. 9910

3. 9830

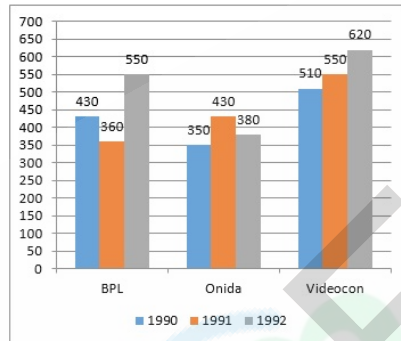
4. 9870

Question ID : 98958012261

Status : Answered

Chosen Option : 4

Q.1  
11 The given bar chart, shows the sales (in thousands) for sets of televisions of three companies in three years.



In the given bar-chart, what is a difference between the average sales of televisions A and B for 3 years?

Ans  1. 78

2. 56

3. 104

4. 60

Question ID : 98958012300

Status : Answered

Chosen Option : 4

Q.1  
12 Two pipes can fill a cistern in 72 and 90 minutes respectively. If both the pipes are left open how long will it take for the cistern to be half full?

Ans  1. 40 minutes

2. 24 minutes

3. 48 minutes

4. 20 minutes

Question ID : 98958012280

Status : Answered

Chosen Option : 4



Q.1 13 A watch was sold at a profit of 10%. Had it been sold at ₹77 more the profit percent would have been 12%. The cost price of the watch is:

- Ans
- 1. ₹3,760
  - 2. ₹3,850
  - 3. ₹3,945
  - 4. ₹3,900

Question ID : 98958012272  
Status : Answered  
Chosen Option : 2

Q.1 14 Find the cost of carpeting a room which is 11 m long and 6 m broad by a carpet which is 60 cm broad at the rate of ₹112.50 per meter.

- Ans
- 1. ₹12,375
  - 2. ₹13,280
  - 3. ₹11,695
  - 4. ₹12,040

Question ID : 98958012285  
Status : Answered  
Chosen Option : 1

Q.1 15 A trader allows a discount of 8% on marked price. If the selling price is ₹667, the discount in rupees is:

- Ans
- 1. ₹47
  - 2. ₹54
  - 3. ₹58
  - 4. ₹43

Question ID : 98958012267  
Status : Answered  
Chosen Option : 3

Q.1 16 A field is 119 m × 18 m in dimension. A tank 17 m × 6 m × 3 m is dug out in the middle and the soil removed is evenly spread over the remaining part of the field. The increase in level on the remaining part of the field is:

- Ans
- 1. 14 cm
  - 2. 13 cm
  - 3. 15 cm
  - 4. 12 cm

Question ID : 98958012283  
Status : Marked For Review  
Chosen Option : 1

Q.1 17 Divide ₹8,288 between A, B and C such that the proportion of their shares is 5 : 7 : 9. The share of C is:

- Ans
- 1. ₹2,032

✓ 2. ₹3,552

✗ 3. ₹3,872

✗ 4. ₹2,612

Question ID : 98958012273

Status : Answered

Chosen Option : 2

Q.1 If 15 men can do a piece of work in 14 days, how many men will be needed to do the work in 30 days?

18

Ans ✗ 1. 8

✗ 2. 10

✓ 3. 7

✗ 4. 9

Question ID : 98958012277

Status : Answered

Chosen Option : 3

Q.1 The interest on ₹24,000 in 2 years compounded annually when the rates are 8% p.a and 10% p.a for two successive years is:

19

Ans ✗ 1. ₹3,994

✓ 2. ₹4,512

✗ 3. ₹5,040

✗ 4. ₹5,866

Question ID : 98958012275

Status : Answered

Chosen Option : 2

Q.1  $15 - \{5 + 24 \div (3 \times 9 - 15)\}$  is equal to:

20

Ans ✗ 1. -2

✗ 2.  $11\frac{1}{3}$

✗ 3.  $6\frac{1}{4}$

✓ 4. 8

Question ID : 98958012262

Status : Answered

Chosen Option : 4

Q.1 The angle of elevation of a flying drone from a point on the ground is  $60^\circ$ . After flying for 5 seconds the angle of elevation drops to  $30^\circ$ . If the drone is flying horizontally at a constant height of  $1000\sqrt{3}$  m, the distance travelled by the drone is:

21

Ans ✓ 1. 2000 m

✗ 2. 1000 m

✗ 3. 3000 m

4. 4000 m

Question ID : 98958012297  
 Status : Answered  
 Chosen Option : 1

Q.1 An oil merchant has 3 varieties of oil of volumes 432, 594 and 702 litres respectively. The number of cans of equal size  
 22 that would be required to fill the oil separately is:

- Ans  1. 13, 15, 17  
 2. 8, 11, 13  
 3. 8, 13, 15  
 4. 6, 9, 11

Question ID : 98958012260  
 Status : Answered  
 Chosen Option : 2

Q.1 The table below shows the admission and transfer in standards 1-3 of a school.  
 23

Std	2015			2016	
	Existing	Admission	Transfer	Admission	Transfer
1	232	12	8	23	36
2	241	6	11	15	10
3	248	16	13	21	24

In the given table, in Standard 1, how many students were there at the end of year 2016?

- Ans  1. 223  
 2. 228  
 3. 236  
 4. 232

Question ID : 98958012305  
 Status : Answered  
 Chosen Option : 1

Q.1 The average of squares of numbers 1 to 5 is:  
 24

- Ans  1. 11  
 2. 5  
 3. 8  
 4. 9

Question ID : 98958012265  
 Status : Answered  
 Chosen Option : 1

Q.1 210102 can be divided exactly by:

- Ans  1. 7  
 2. 3  
 3. 4

4. 8

Question ID : 98958012259  
Status : Answered  
Chosen Option : 2

Q.1  
26 A pipe can fill a tank in 4 hours and a leak at the bottom can empty that full tank in 6 hours. If after the tank is  $\frac{1}{3}$  full, the leak is completely closed, how much time from beginning will it take for the tank to get filled completely?

- Ans
- 1. 12 hours
  - 2. 4 hours
  - 3. 9 hours
  - 4.  $\frac{20}{3}$  hours

Question ID : 98958012279  
Status : Answered  
Chosen Option : 4

Q.1  
27 In an examination, Shreya score 84 out of 90 in Mathematics, 45 out of 50 in Science, 23 out of 25 in Computer Science and 68 out of 80 in English. In which subject did Shreya score the highest percentage?

- Ans
- 1. Mathematics
  - 2. English
  - 3. Science
  - 4. Computer Science

Question ID : 98958012271  
Status : Answered  
Chosen Option : 1

Q.1  
28  $(-4) \times \{1020 \div 85 \times 3 - 22\}$  is equal to:

- Ans
- 1. -402
  - 2. -56
  - 3. 912
  - 4. 72

Question ID : 98958012263  
Status : Answered  
Chosen Option : 2

Q.1  
29 The value of  $\cos^2 45^\circ + \sin^2 30^\circ - \sin^2 60^\circ$  is equal to:

- Ans
- 1.  $\frac{3}{2}$
  - 2.  $\frac{1}{2}$
  - 3. 0
  - 4. 1



Question ID : 98958012296

Status : Answered

Chosen Option : 3

Q.1 30 A, B and C are partners in a firm sharing profit in the ratio of 3 : 4 : 5. If they set aside 4% of the profits as emergency fund and shared the rest of the profit and B gets his share of profit as ₹1,81,400, the amount of profit set aside for emergency fund is:

- Ans
- 1. ₹27,845
  - 2. ₹18,140
  - 3. ₹22,675
  - 4. ₹24,500

Question ID : 98958012274

Status : Answered

Chosen Option : 3

Q.1 31 If  $(x - 2)^3 + (x - 3)^3 + (x - 10)^3 = (x - 2)(x - 3)(3x - 30)$ , then what is the value of  $x$ ?

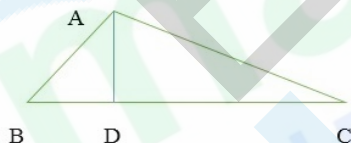
- Ans
- 1. 7
  - 2. 5
  - 3. 18
  - 4. 3

Question ID : 98958012288

Status : Answered

Chosen Option : 2

Q.1 32



In the triangle given above  $\angle ADB = 90^\circ$ ,  $\angle ABC = 45^\circ$ ,  $AD = 10$  cm,  $AC = 20$  cm. The length of  $BC$  is:

- Ans
- 1. 10 cm
  - 2. 27.32 cm
  - 3. 18.42 cm
  - 4. 14.14 cm

Question ID : 98958012293

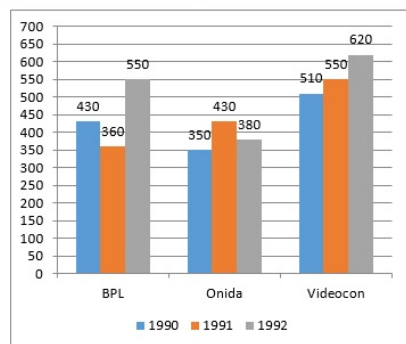
Status : Answered

Chosen Option : 2

Q.1 33



The given bar chart, shows the sales (in thousands) for sets of televisions of three companies in three years.



In the given bar-chart, if profit earned per television by C in 1992 was ₹825, the total profit earned was:

- Ans
- 1. ₹51150 lakhs
  - 2. ₹5115 lakhs
  - 3. ₹511.5 lakhs
  - 4. ₹51.15 lakhs

Question ID : 98958012301

Status : Answered

Chosen Option : 3

Q.1 A gardener planted 1936 saplings in a garden such that there were as many rows of saplings as the columns. The number of rows planted is:

- Ans
- 1. 46
  - 2. 44
  - 3. 48
  - 4. 42

Question ID : 98958012258

Status : Answered

Chosen Option : 2

Q.1 A boy walks 15 m in 7 seconds and then walks back in 5 seconds. His average speed (in m/s) is:

- Ans
- 1. 6
  - 2. 2.5
  - 3. 3.25
  - 4. 4

Question ID : 98958012266

Status : Answered

Chosen Option : 2

Q.1 If  $a^3 + b^3 = 432$  and  $a + b = 12$ , then  $(a + b)^2 - 3ab$  is equal to:

- Ans
- 1. 42
  - 2. 52
  - 3. 36

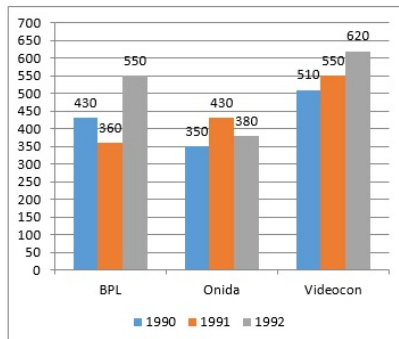
✗ 4. 38

Question ID : 98958012290

Status : Answered

Chosen Option : 3

Q.1 The given bar chart, shows the sales (in thousands) for sets of televisions of three companies in three years.  
37



In the given bar-chart, what is the ratio of television sales between A in year 1992 and C in year 1991?

- Ans
- ✓ 1. 1 : 1
  - ✗ 2. 1 : 2
  - ✗ 3. 2 : 1
  - ✗ 4. 1 : 3

Question ID : 98958012299

Status : Answered

Chosen Option : 1

Q.1 A swimming pool is 40 m in length, 30 m in breadth and 2.2 m in depth. The cost of cementing its floor and the four sides at ₹25/m<sup>2</sup> is:  
38

- Ans
- ✗ 1. ₹43,980
  - ✗ 2. ₹37,540
  - ✗ 3. ₹34,260
  - ✓ 4. ₹37,700

Question ID : 98958012287

Status : Answered

Chosen Option : 4

Q.1 39 The value of  $\cot^2 A - \frac{1}{\sin^2 A}$  is equal to:

- Ans
- ✗ 1. 0
  - ✓ 2. -1
  - ✗ 3. -2
  - ✗ 4. 1

Question ID : 98958012295

Status : Answered

Chosen Option : 2

Q.1 A river is 3 m deep and 36 m wide which flows at the rate of 5 km/h in to the sea. The volume of water that runs into the sea per minute is:

- Ans
- 1.  $8300 \text{ m}^3$
  - 2.  $9000 \text{ m}^3$
  - 3.  $7600 \text{ m}^3$
  - 4.  $6400 \text{ m}^3$

Question ID : 98958012286

Status : Answered

Chosen Option : 2

Q.1 A part of the journey is covered in 31.5 minutes at 80 km/h and the remaining part in 16 minutes at 75 km/h. The total distance of the journey is:

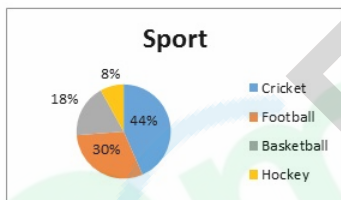
- Ans
- 1. 45 km
  - 2. 38 km
  - 3. 62 km
  - 4. 54 km

Question ID : 98958012282

Status : Answered

Chosen Option : 3

Q.1 The given pie-chart shows favourite sport of students of a school.



In the given pie-chart, what is the difference in percentage between liking for football and basketball?

- Ans
- 1. 10
  - 2. 8
  - 3. 13
  - 4. 12

Question ID : 98958012304

Status : Answered

Chosen Option : 4

Q.1 A girl 1.2 m tall can just see the sun over a 3.62 m tall wall which is 2.42 m away from her. The angle of elevation of the sun is:

- Ans
- 1.  $60^\circ$
  - 2.  $30^\circ$
  - 3.  $90^\circ$
  - 4.  $45^\circ$

Question ID : 98958012298

Status : Answered  
Chosen Option : 4

Q.1 44 The table below shows the admissions and transfers in standards 1-3 of a school.

Std	2015			2016	
	Existing	Admission	Transfer	Admission	Transfer
1	232	12	8	23	36
2	241	6	11	15	10
3	248	16	13	21	24

In the given table, what was the total strength in Standards 1-3 at the end of 2015?

- Ans  1. 723  
 2. 721  
 3. 710  
 4. 704

Question ID : 98958012307  
Status : Answered  
Chosen Option : 1

Q.1 45 ABCD is a cyclic quadrilateral such that AB is a diameter of the circle circumscribing it and angle ADC =  $144^\circ$ . Then angle BAC is equal to: ( $\pi = \frac{22}{7}$ )

- Ans  1.  $60^\circ$   
 2.  $150^\circ$   
 3.  $54^\circ$   
 4.  $40^\circ$

Question ID : 98958012291  
Status : Answered  
Chosen Option : 3

Q.1 46 Which least number should be added to 1000 so that the number obtained is exactly divisible by 37?

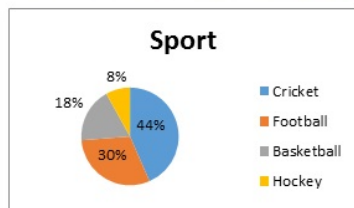
- Ans  1. 1  
 2. 25  
 3. 36  
 4. 13

Question ID : 98958012264  
Status : Answered  
Chosen Option : 1

Q.1 47



The given pie-chart shows favourite sport of students of a school.



In the given pie-chart, if the school strength was 2500, how many liked cricket more than hockey?

- Ans
- 1. 1075
  - 2. 504
  - 3. 900
  - 4. 750

Question ID : 98958012303

Status : Answered

Chosen Option : 3

Q.1  
48 A rectangular solid is 20 cm long and 12 cm wide. If its volume is  $2160 \text{ cm}^3$ , the height is:

- Ans
- 1. 11 cm
  - 2. 10 cm
  - 3. 12 cm
  - 4. 9 cm

Question ID : 98958012284

Status : Answered

Chosen Option : 4

Q.1  
49 The table below shows the admission and transfer in standards 1-3 of a school.

Std	2015			2016	
	Existing	Admission	Transfer	Admission	Transfer
1	232	12	8	23	36
2	241	6	11	15	10
3	248	16	13	21	24

In the given table, what was the difference between admission and transfer in standard 3 in year 2016?

- Ans
- 1. 3
  - 2. 9
  - 3. 8
  - 4. 5

Question ID : 98958012306

Status : Answered

Chosen Option : 1

Q.1  
50 A train 100 m long running at uniform speed crosses a station which is 500 m long in 25 seconds. How long will it take for the train to pass a station that is 380 m long?

- Ans
- 1. 21 seconds
  - 2. 20 seconds
  - 3. 19 seconds



4. 22 seconds

Question ID : 98958012281

Status : Answered

Chosen Option : 2

Q.1 51 Select the most appropriate option to substitute the underlined segment in the given sentence. If there is no need to substitute it, select No substitution required.

A third of us are feeling compelled to check our phones in the middle of the night.

- Ans
- 1. A third among us feeling compelled to check our phones
  - 2. A third of us feel compelled to check our phones
  - 3. No substitution required
  - 4. A third of us feel compelled checking our phones

Question ID : 98958011613

Status : Answered

Chosen Option : 2

Q.1 52 Select the word, which means the same as the group of words given.

A harsh chaotic mixture of sounds

- Ans
- 1. consonance
  - 2. dissonance
  - 3. cacophony
  - 4. euphony

Question ID : 98958011644

Status : Answered

Chosen Option : 3

Q.1 53 Identify the segment in the sentence, which contains the grammatical error.

Scientists have found that life was creeping and crawling about the Earth 1.5 billion years early than previously thought.

- Ans
- 1. previously thought
  - 2. 1.5 billion years early than
  - 3. Scientists have found
  - 4. about the Earth

Question ID : 98958011606

Status : Answered

Chosen Option : 4

Q.1 54 Select the wrongly spelt word.

- Ans
- 1. horrible
  - 2. heiress
  - 3. hospitallity

4. hostility

Question ID : 98958011646  
Status : Answered  
Chosen Option : 3

Q.1  
55 Select the synonym of the given word.

DETRACTORS

- Ans  1. devotees  
 2. reviewers  
 3. critics  
 4. admirers

Question ID : 98958011625  
Status : Answered  
Chosen Option : 3

Q.1  
56 Select the synonym of the given word.

IMMINENT

- Ans  1. important  
 2. forthcoming  
 3. immature  
 4. truthful

Question ID : 98958011627  
Status : Answered  
Chosen Option : 2

Comprehension:

Read the following passage and answer the questions given after it.

We often worry about lying awake in the middle of the night - but it could be good for you. A growing body of evidence from both science and history suggests that the eight-hour sleep may be unnatural.

In the early 1990s, psychiatrist Thomas Wehr conducted an experiment in which a group of people were plunged into darkness for 14 hours every day for a month. It took some time for their sleep to regulate but by the fourth week the subjects had settled into a very distinct sleeping pattern. They slept first for four hours, then woke for one or two hours before falling into a second four-hour sleep. Though sleep scientists were impressed by the study, among the general public the idea that we must sleep for eight consecutive hours persists.

In 2001, historian Roger Ekirch of Virginia Tech published a seminal paper, drawn from 16 years of research, revealing a wealth of historical evidence that humans used to sleep in two distinct chunks. Roger Ekirch says a 1595 engraving by Jan Saenredam is evidence of activity at night. His book *At Day's Close: Night in Times Past*, published four years later, unearths more than 500 references to a segmented sleeping pattern - in diaries, court records, medical books and literature, from Homer's *Odyssey* to an anthropological account of modern tribes in Nigeria.

Much like the experience of Wehr's subjects, these references describe a first sleep which began about two hours after dusk, followed by waking period of one or two hours and then a second sleep. "It's not just the number of references - it is the way they refer to it, as if it was common knowledge," Ekirch says. During this waking period people were quite active. They often got up, went to the toilet or smoked tobacco and some even visited neighbors. Most people stayed in bed, read, wrote and often prayed. Countless prayer manuals from the late 15th century offered special prayers for the hours in between sleeps. Ekirch found that references to the first and second sleep started to disappear during the late 17th Century. This started among the urban upper classes in northern Europe and over the course of the next 200 years filtered down to the rest of Western society. By the 1920s the idea of a first and second sleep had receded entirely from our social consciousness. He attributes the initial shift to improvements in street lighting, domestic lighting and a surge in coffee houses - which were sometimes open all night. As the night became a place for legitimate activity and as that activity increased, the length of time people could dedicate to rest dwindled.

SubQuestion No : 157

Q.1  
57 The above passage \_\_\_\_\_ that an eight-hour sleep is natural.

- Ans
- 1. confirms the myth
  - 2. elaborates the myth
  - 3. promotes the myth
  - 4. examines the myth



## Comprehension:

Read the following passage and answer the questions given after it.

We often worry about lying awake in the middle of the night - but it could be good for you. A growing body of evidence from both science and history suggests that the eight-hour sleep may be unnatural.

In the early 1990s, psychiatrist Thomas Wehr conducted an experiment in which a group of people were plunged into darkness for 14 hours every day for a month. It took some time for their sleep to regulate but by the fourth week the subjects had settled into a very distinct sleeping pattern. They slept first for four hours, then woke for one or two hours before falling into a second four-hour sleep. Though sleep scientists were impressed by the study, among the general public the idea that we must sleep for eight consecutive hours persists.

In 2001, historian Roger Ekirch of Virginia Tech published a seminal paper, drawn from 16 years of research, revealing a wealth of historical evidence that humans used to sleep in two distinct chunks. Roger Ekirch says a 1595 engraving by Jan Saenredam is evidence of activity at night. His book *At Day's Close: Night in Times Past*, published four years later, unearths more than 500 references to a segmented sleeping pattern - in diaries, court records, medical books and literature, from Homer's *Odyssey* to an anthropological account of modern tribes in Nigeria.

Much like the experience of Wehr's subjects, these references describe a first sleep which began about two hours after dusk, followed by waking period of one or two hours and then a second sleep. "It's not just the number of references - it is the way they refer to it, as if it was common knowledge," Ekirch says. During this waking period people were quite active. They often got up, went to the toilet or smoked tobacco and some even visited neighbors. Most people stayed in bed, read, wrote and often prayed. Countless prayer manuals from the late 15th century offered special prayers for the hours in between sleeps. Ekirch found that references to the first and second sleep started to disappear during the late 17th Century. This started among the urban upper classes in northern Europe and over the course of the next 200 years filtered down to the rest of Western society. By the 1920s the idea of a first and second sleep had receded entirely from our social consciousness. He attributes the initial shift to improvements in street lighting, domestic lighting and a surge in coffee houses - which were sometimes open all night. As the night became a place for legitimate activity and as that activity increased, the length of time people could dedicate to rest dwindled.

SubQuestion No : 158

Q.1  
58 What did the experiment conducted by Thomas Wehr prove?

- Ans
1. It brought into question that sleeping for four consecutive hours is necessary.
  2. It proved sleeping for eight consecutive hours is not a norm.

3. It established that when the nights are longer, people slept in two distinct chunks.
4. It proved that all people slept in two distinct chunks of four hours.

Question ID : 98958011652

Status : Answered

Chosen Option : 4

Comprehension:

Read the following passage and answer the questions given after it.

We often worry about lying awake in the middle of the night - but it could be good for you. A growing body of evidence from both science and history suggests that the eight-hour sleep may be unnatural.

In the early 1990s, psychiatrist Thomas Wehr conducted an experiment in which a group of people were plunged into darkness for 14 hours every day for a month. It took some time for their sleep to regulate but by the fourth week the subjects had settled into a very distinct sleeping pattern. They slept first for four hours, then woke for one or two hours before falling into a second four-hour sleep. Though sleep scientists were impressed by the study, among the general public the idea that we must sleep for eight consecutive hours persists.

In 2001, historian Roger Ekirch of Virginia Tech published a seminal paper, drawn from 16 years of research, revealing a wealth of historical evidence that humans used to sleep in two distinct chunks. Roger Ekirch says a 1595 engraving by Jan Saenredam is evidence of activity at night. His book *At Day's Close: Night in Times Past*, published four years later, unearths more than 500 references to a segmented sleeping pattern - in diaries, court records, medical books and literature, from Homer's *Odyssey* to an anthropological account of modern tribes in Nigeria.

Much like the experience of Wehr's subjects, these references describe a first sleep which began about two hours after dusk, followed by waking period of one or two hours and then a second sleep. "It's not just the number of references - it is the way they refer to it, as if it was common knowledge," Ekirch says. During this waking period people were quite active. They often got up, went to the toilet or smoked tobacco and some even visited neighbors. Most people stayed in bed, read, wrote and often prayed. Countless prayer manuals from the late 15th century offered special prayers for the hours in between sleeps. Ekirch found that references to the first and second sleep started to disappear during the late 17th Century. This started among the urban upper classes in northern Europe and over the course of the next 200 years filtered down to the rest of Western society. By the 1920s the idea of a first and second sleep had receded entirely from our social consciousness. He attributes the initial shift to improvements in street lighting, domestic lighting and a surge in coffee houses - which were sometimes open all night. As the night became a place for legitimate activity and as that activity increased, the length of time people could dedicate to rest dwindled.

SubQuestion No : 159

Q.1



59 Roger Ekirch indicated that \_\_\_\_\_.

- Ans
- 1. sleeping for eight consecutive hours is a modern standard for sleep.
  - 2. a segmented sleeping pattern was an established common habit in nations with long winters.
  - 3. a segmented sleeping pattern was a historically established common old habit.
  - 4. the practice of sleeping for eight consecutive hours was popularized by epics

Question ID : 98958011653

Status : Answered

Chosen Option : 3

Comprehension:

Read the following passage and answer the questions given after it.

We often worry about lying awake in the middle of the night - but it could be good for you. A growing body of evidence from both science and history suggests that the eight-hour sleep may be unnatural.

In the early 1990s, psychiatrist Thomas Wehr conducted an experiment in which a group of people were plunged into darkness for 14 hours every day for a month. It took some time for their sleep to regulate but by the fourth week the subjects had settled into a very distinct sleeping pattern. They slept first for four hours, then woke for one or two hours before falling into a second four-hour sleep. Though sleep scientists were impressed by the study, among the general public the idea that we must sleep for eight consecutive hours persists.

In 2001, historian Roger Ekirch of Virginia Tech published a seminal paper, drawn from 16 years of research, revealing a wealth of historical evidence that humans used to sleep in two distinct chunks. Roger Ekirch says a 1595 engraving by Jan Saenredam is evidence of activity at night. His book *At Day's Close: Night in Times Past*, published four years later, unearths more than 500 references to a segmented sleeping pattern - in diaries, court records, medical books and literature, from Homer's *Odyssey* to an anthropological account of modern tribes in Nigeria.

Much like the experience of Wehr's subjects, these references describe a first sleep which began about two hours after dusk, followed by waking period of one or two hours and then a second sleep. "It's not just the number of references - it is the way they refer to it, as if it was common knowledge," Ekirch says. During this waking period people were quite active. They often got up, went to the toilet or smoked tobacco and some even visited neighbors. Most people stayed in bed, read, wrote and often prayed. Countless prayer manuals from the late 15th century offered special prayers for the hours in between sleeps. Ekirch found that references to the first and second sleep started to disappear during the late 17th Century. This started among the urban upper classes in northern Europe and over the course of the next 200 years filtered down to the rest of Western society. By the 1920s the idea of a first and second sleep had receded entirely from our social consciousness. He attributes the initial shift to improvements in street lighting, domestic lighting and a surge in coffee houses - which were sometimes open all night. As the night became a place for legitimate activity and as that activity increased, the length of time people could dedicate to rest dwindled.

SubQuestion No : 160

Q.1  
60 Which of the following options is NOT true with reference to the segmented sleeping pattern?

- Ans
- 1. People were physically active.
  - 2. People were socially active.
  - 3. People prayed actively.
  - 4. People visited all-night coffee shops.

Question ID : 98958011654

Status : Answered



## Comprehension:

Read the following passage and answer the questions given after it.

We often worry about lying awake in the middle of the night - but it could be good for you. A growing body of evidence from both science and history suggests that the eight-hour sleep may be unnatural.

In the early 1990s, psychiatrist Thomas Wehr conducted an experiment in which a group of people were plunged into darkness for 14 hours every day for a month. It took some time for their sleep to regulate but by the fourth week the subjects had settled into a very distinct sleeping pattern. They slept first for four hours, then woke for one or two hours before falling into a second four-hour sleep. Though sleep scientists were impressed by the study, among the general public the idea that we must sleep for eight consecutive hours persists.

In 2001, historian Roger Ekirch of Virginia Tech published a seminal paper, drawn from 16 years of research, revealing a wealth of historical evidence that humans used to sleep in two distinct chunks. Roger Ekirch says a 1595 engraving by Jan Saenredam is evidence of activity at night. His book *At Day's Close: Night in Times Past*, published four years later, unearths more than 500 references to a segmented sleeping pattern - in diaries, court records, medical books and literature, from Homer's *Odyssey* to an anthropological account of modern tribes in Nigeria.

Much like the experience of Wehr's subjects, these references describe a first sleep which began about two hours after dusk, followed by waking period of one or two hours and then a second sleep. "It's not just the number of references - it is the way they refer to it, as if it was common knowledge," Ekirch says. During this waking period people were quite active. They often got up, went to the toilet or smoked tobacco and some even visited neighbors. Most people stayed in bed, read, wrote and often prayed. Countless prayer manuals from the late 15th century offered special prayers for the hours in between sleeps. Ekirch found that references to the first and second sleep started to disappear during the late 17th Century. This started among the urban upper classes in northern Europe and over the course of the next 200 years filtered down to the rest of Western society. By the 1920s the idea of a first and second sleep had receded entirely from our social consciousness. He attributes the initial shift to improvements in street lighting, domestic lighting and a surge in coffee houses - which were sometimes open all night. As the night became a place for legitimate activity and as that activity increased, the length of time people could dedicate to rest dwindled.

SubQuestion No : 161

Q.1  
61 What caused the idea of a first and second sleep to entirely recede from our social consciousness?

- Ans
- 1. Industrialization and introduction of night shifts
  - 2. All-night coffee shops
  - 3. A group of rich people defying sleep

- ✓ 4. An active night life facilitated by artificial lighting

Question ID : 98958011655

Status : Answered

Chosen Option : 4

Q.1 62 Select the word, which means the same as the group of words given.

the hard remains of a prehistoric animal or plant that are found inside a rock.

- Ans ✓ 1. fossil  
✗ 2. ruins  
✗ 3. relics  
✗ 4. vestiges

Question ID : 98958011642

Status : Answered

Chosen Option : 1

Q.1 63 Select the most appropriate option to substitute the underlined segment in the given sentence. If there is no need to substitute it, select No substitution required.

Creatures began moving properly around 570 million years ago shortly before the Cambrian explosion sparked the first vertebrates.

- Ans ✗ 1. the Cambrian explosion when sparked the first vertebrates.  
✓ 2. No substitution required  
✗ 3. the Cambrian explosion whom sparked the first vertebrates.  
✗ 4. the Cambrian explosion who sparked the first vertebrates.

Question ID : 98958011612

Status : Answered

Chosen Option : 2

Q.1 64 Select the most appropriate option to substitute the underlined segment in the given sentence. If there is no need to substitute it, select No substitution required.

A study has uncovered a previously overlooked law of natural selection based on "survival of the slacker", that is, spend all day lazing about could be good for human evolution.

- Ans ✗ 1. No substitution required  
✗ 2. spending all day lazing about must be good for human evolution  
✗ 3. spend all day lazing about will be good for human evolution  
✓ 4. spending all day lazing about could be good for human evolution

Question ID : 98958011611

Status : Answered

Chosen Option : 4

Q.1 65 Select the most appropriate meaning of the underlined idiom in the given sentence.

When the mixer would not work Naren's mother said, "If it's not one thing, it's another." How will I manage?"



- Ans  1. when one thing goes wrong, then another, and another  
 2.  
when we entertain one guest, then there are many more coming  
 3.  
when we know a cause, then there isn't another to be looked for  
 4.  
when a machine is not functional, it makes others also malfunction

Question ID : 98958011637  
Status : Answered  
Chosen Option : 1

Q.1 Select the most appropriate meaning of the underlined idiom in the given sentence.

66 Sandhya was excited about getting her new posting but I told her "Don't count your chickens before they hatch".

- Ans  1. do not count on something that is not going to happen  
 2. do not wish for something that has not yet happened  
 3. do not count on a good thing that has not yet happened  
 4. do not expect something good to happen

Question ID : 98958011635  
Status : Answered  
Chosen Option : 3

Q.1 Identify the segment in the sentence, which contains the grammatical error.

67 More than 25% people admits they have not sent or received a hand-written letter in the past decade.

- Ans  1. a hand-written letter  
 2. More than 25% people admits  
 3. they have not sent or received  
 4. in the past decade

Question ID : 98958011607  
Status : Answered  
Chosen Option : 2

Q.1 Select the most appropriate meaning of the underlined idiom in the given sentence.

68 Anil and Suresh are just finding their feet in the new venture.

- Ans  1. beginning to understand the work and feeling confident  
 2. getting comfortable and getting a good salary  
 3. buying and using comfortable foot wear  
 4. making people fall at their feet, accepting defeat

Question ID : 98958011636  
Status : Answered  
Chosen Option : 1



Q.1 Identify the segment in the sentence, which contains the grammatical error.

69

Security firms would get prosecuted for a breach of their duty if they do not introduced adequate procedures to protect children from harm.

- Ans
- 1. would get prosecuted
  - 2. for a breach of their duty
  - 3. to protect children
  - 4. do not introduced

Question ID : 98958011608

Status : Answered

Chosen Option : 2

Q.1 Select the antonym of the given word.

70

MUDDLE

- Ans
- 1. refuse
  - 2. order
  - 3. refute
  - 4. spoil

Question ID : 98958011631

Status : Answered

Chosen Option : 2

Q.1 Select the synonym of the given word.

71

CLINCHED

- Ans
- 1. bounded
  - 2. finalized
  - 3. devoted
  - 4. argued

Question ID : 98958011626

Status : Answered

Chosen Option : 2

Q.1 Select the most appropriate meaning of the underlined idiom in the given sentence.

72

The politician began his speech by saying, "Lend me your ears".

- Ans
- 1. to politely ask for someone's hearing-aid
  - 2. to politely ask for someone's speakers
  - 3. to politely ask for someone's full attention
  - 4. to politely ask for someone's headphones

Question ID : 98958011638

Status : Answered

Chosen Option : 3

Q.1 Select the most appropriate words to fill in the blanks.

73

Teaching is so much more than \_\_\_\_\_ in front of a whiteboard as one of the most important elements of teaching is \_\_\_\_\_ relationships with students.

Ans

- 1. standing; building
- 2. waiting; building
- 3. waiting; enabling
- 4. standing; enabling

Question ID : 98958011616

Status : Answered

Chosen Option : 1

Q.1 Select the most appropriate words to fill in the blanks.

74

Although many western cultures are moving towards more \_\_\_\_\_, less hierarchical organizations, the new research suggests that \_\_\_\_\_ power structures and basic values of charity and fraternity are the cornerstones of successful societies.

Ans

- 1. organized; radical
- 2. substantial; informal
- 3. liberal; traditional
- 4. liberal; radical

Question ID : 98958011614

Status : Answered

Chosen Option : 3

Q.1 Select the wrongly spelt word.

75

Ans

- 1. reinforcement
- 2. remembrance
- 3. reimburssement
- 4. reflection

Question ID : 98958011645

Status : Answered

Chosen Option : 1

Q.1 Select the antonym of the given word.

76

COMPLACENT

Ans

- 1. conceited
- 2. concerned
- 3. contentious
- 4. contended

Question ID : 98958011632  
Status : Answered  
Chosen Option : 2

Q.1  
77 Select the antonym of the given word

LAUNCH

- Ans
- 1. withdraw
  - 2. dinner
  - 3. release
  - 4. brake

Question ID : 98958011634  
Status : Answered  
Chosen Option : 1

Q.1  
78 Select the word, which means the same as the group of words given.

to show or state that someone or something is not guilty of something

- Ans
- 1. escape
  - 2. pardon
  - 3. charge
  - 4. vindicate

Question ID : 98958011643  
Status : Answered  
Chosen Option : 4

Q.1  
79 Select the synonym of the given word.

ELUSIVE

- Ans
- 1. distorted
  - 2. wrong
  - 3. intangible
  - 4. refined

Question ID : 98958011628  
Status : Answered  
Chosen Option : 3

Q.1  
80 Select the most appropriate meaning of the underlined idiom in the given sentence.

"Get down to brass tacks now", ordered the Team Leader, when he found that the targets were nowhere near completion.

- Ans
- 1. start taking up the most important facts of a situation
  - 2. become angry about something that is not done
  - 3. come back to the tracks and start again



4. examine the thumb tacks used to fix a notice

Question ID : 98958011639

Status : Answered

Chosen Option : 1

Q.1 Select the most appropriate words to fill in the blanks.

81 Advocates say the idea of a basic income eliminates poverty traps and \_\_\_\_\_ income while \_\_\_\_\_ the individual and reducing paperwork.

Ans  1. redistributes; empowering

2. earned; helping

3. earns; eliminating

4. distributes; empowers

Question ID : 98958011618

Status : Answered

Chosen Option : 1

Q.1 Select the wrongly spelt word.

82

Ans  1. contraction

2. contextual

3. concievable

4. commitment

Question ID : 98958011648

Status : Answered

Chosen Option : 4

Q.1 Identify the segment in the sentence, which contains the grammatical error.

83

Last year the UK saw it's first child diagnosed with internet addiction.

Ans  1. Last year

2. the UK saw

3. it's first child

4. diagnosed with

Question ID : 98958011605

Status : Answered

Chosen Option : 2

Q.1 Select the word, which means the same as the group of words given.

84

the science and art of growing fruits, vegetables, flowers, or ornamental plants

Ans  1. agriculture

2. horticulture

3. viniculture

4. sericulture

Question ID : 98958011641

Status : Answered

Chosen Option : 2

Q.1 Identify the segment in the sentence, which contains the grammatical error.  
85

Tesla designed system for sending electricity over the air through a series of enormous towers.

- Ans
- 1. for sending electricity
  - 2. Tesla designed system
  - 3. through a series of enormous towers
  - 4. over the air

Question ID : 98958011604

Status : Answered

Chosen Option : 1

Q.1 Select the synonym of the given word.  
86

REQUISITE

- Ans
- 1. dominant
  - 2. dynamic
  - 3. critical
  - 4. obligatory

Question ID : 98958011629

Status : Answered

Chosen Option : 4

Q.1 Select the most appropriate words to fill in the blanks.

87

All societies are held together by seven universal moral rules, which include \_\_\_\_\_ to superiors and \_\_\_\_\_ the property of others.

- Ans
- 1. deferring; respecting
  - 2. deferring; guarding
  - 3. following; respecting
  - 4. conforming; guarding

Question ID : 98958011615

Status : Answered

Chosen Option : 2

Q.1 Select the wrongly spelt word.  
88

- Ans
- 1. Inquisitive
  - 2. Inherent
  - 3. Ininstitutional



✗ 4. Invitation

Question ID : 98958011647

Status : Answered

Chosen Option : 3

Q.1 Select the most appropriate words to fill in the blanks.

89

The idea of a basic income as a replacement for means-tested \_\_\_\_\_ payments has its share of supporters on both the left and the right of the political \_\_\_\_\_.

Ans

✗ 1. extra; support

✗ 2. goodness; zone

✗ 3. free; range

✓ 4. welfare; spectrum

Question ID : 98958011617

Status : Answered

Chosen Option : 4

Q.1 Select the most appropriate option to substitute the underlined segment in the given sentence. If there is no need to substitute it, select No substitution required.

90

Doing short bursts of high intensity exercise can be most effective to weight loss than moderate workouts.

Ans

✗ 1. more effective to weight loss than

✗ 2. No substitution required

✗ 3. most effective for weight loss than

✓ 4. more effective for weight loss than

Question ID : 98958011609

Status : Answered

Chosen Option : 4

Comprehension:

In the following passage some words have been deleted. Fill in the blanks with the help of the alternatives given. Select the most appropriate option for each number.

Screen time is an inescapable reality of modern childhood, with kids of every age (1) \_\_\_\_\_ hours upon hours in front of iPads, smartphones and televisions. That's not always a bad thing: Educational apps and TV shows (2) \_\_\_\_\_ great ways for children to sharpen their developing brains and (3) \_\_\_\_\_ their communication skills—not to mention the break these (4) \_\_\_\_\_ provide to harried parents. But tread carefully: A number of troubling studies connect delayed cognitive (5) \_\_\_\_\_ in kids with extended exposure to electronic media.

SubQuestion No : 191

Q.1 Select the most appropriate option to fill in blank

91

No.1.

Ans

✗ 1. complying

2. spending

3. earning

4. cheating

Question ID : 98958011620

Status : Answered

Chosen Option : 2

Comprehension:

In the following passage some words have been deleted. Fill in the blanks with the help of the alternatives given. Select the most appropriate option for each number.

Screen time is an inescapable reality of modern childhood, with kids of every age (1) \_\_\_\_\_ hours upon hours in front of iPads, smartphones and televisions. That's not always a bad thing: Educational apps and TV shows (2) \_\_\_\_\_ great ways for children to sharpen their developing brains and (3) \_\_\_\_\_ their communication skills—not to mention the break these (4) \_\_\_\_\_ provide to harried parents. But tread carefully: A number of troubling studies connect delayed cognitive (5) \_\_\_\_\_ in kids with extended exposure to electronic media.

SubQuestion No : 192

Q.1  
92 Select the most appropriate option to fill in blank  
No.2.

- Ans
- 1. are
  - 2. is
  - 3. were
  - 4. have been

Question ID : 98958011621

Status : Answered

Chosen Option : 1

Comprehension:

In the following passage some words have been deleted. Fill in the blanks with the help of the alternatives given. Select the most appropriate option for each number.

Screen time is an inescapable reality of modern childhood, with kids of every age (1) \_\_\_\_\_ hours upon hours in front of iPads, smartphones and televisions. That's not always a bad thing: Educational apps and TV shows (2) \_\_\_\_\_ great ways for children to sharpen their developing brains and (3) \_\_\_\_\_ their communication skills—not to mention the break these (4) \_\_\_\_\_ provide to harried parents. But tread carefully: A number of troubling studies connect delayed cognitive (5) \_\_\_\_\_ in kids with extended exposure to electronic media.

SubQuestion No : 193

Q.1  
93 Select the most appropriate option to fill in blank  
No.3.

- Ans
- 1. improve
  - 2. burnish
  - 3. dull
  - 4. freshen

Question ID : 98958011622  
Status : Answered  
Chosen Option : 1

Comprehension:

In the following passage some words have been deleted. Fill in the blanks with the help of the alternatives given. Select the most appropriate option for each number.

Screen time is an inescapable reality of modern childhood, with kids of every age (1) \_\_\_\_\_ hours upon hours in front of iPads, smartphones and televisions. That's not always a bad thing: Educational apps and TV shows (2) \_\_\_\_\_ great ways for children to sharpen their developing brains and (3) \_\_\_\_\_ their communication skills—not to mention the break these (4) \_\_\_\_\_ provide to harried parents. But tread carefully: A number of troubling studies connect delayed cognitive (5) \_\_\_\_\_ in kids with extended exposure to electronic media.

SubQuestion No : 194

Q.1  
94 Select the most appropriate option to fill in blank  
No.4.

- Ans
- 1. vessels
  - 2. gadgets
  - 3. utensils
  - 4. products

Question ID : 98958011623  
Status : Answered  
Chosen Option : 2

Comprehension:



In the following passage some words have been deleted. Fill in the blanks with the help of the alternatives given. Select the most appropriate option for each number.

Screen time is an inescapable reality of modern childhood, with kids of every age (1) \_\_\_\_\_ hours upon hours in front of iPads, smartphones and televisions. That's not always a bad thing: Educational apps and TV shows (2) \_\_\_\_\_ great ways for children to sharpen their developing brains and (3) \_\_\_\_\_ their communication skills—not to mention the break these (4) \_\_\_\_\_ provide to harried parents. But tread carefully: A number of troubling studies connect delayed cognitive (5) \_\_\_\_\_ in kids with extended exposure to electronic media.

SubQuestion No : 195

Q.1  
95 Select the most appropriate option to fill in blank No.5.

- Ans
- 1. increment
  - 2. improvement
  - 3. progress
  - 4. change

Question ID : 98958011624

Status : Answered

Chosen Option : 4

Q.1  
96 Select the word, which means the same as the group of words given.

a company or person that makes or sells sweets or chocolate

- Ans
- 1. confectioner
  - 2. vendor
  - 3. chef
  - 4. wholesaler

Question ID : 98958011640

Status : Answered

Chosen Option : 1

Q.1  
97 Select the wrongly spelt word.

- Ans
- 1. apartheid
  - 2. appearance
  - 3. appropriate
  - 4. apparent

Question ID : 98958011649

Status : Answered

Chosen Option : 3



Q.1  
98 Select the antonym of the given word

EXPANSION

- Ans
- 1. complaint
  - 2. constraint
  - 3. contraction
  - 4. constriction

Question ID : 98958011633  
Status : Answered  
Chosen Option : 3

Q.1  
99 Select the antonym of the given word.

EVASIVE

- Ans
- 1. frank
  - 2. abusive
  - 3. opaque
  - 4. slippery

Question ID : 98958011630  
Status : Answered  
Chosen Option : 3

Q.2  
00 Select the most appropriate option to substitute the underlined segment in the given sentence. If there is no need to substitute it, select No substitution required.

The World Health Organization were classified Internet gaming as an official mental health disorder.

- Ans
- 1. No substitution required
  - 2. The World Health Organization classify Internet gaming
  - 3. The World Health Organization has classified Internet gaming
  - 4. The World Health Organization classifying Internet gaming

Question ID : 98958011610  
Status : Answered  
Chosen Option : 3