

Exam Date	30/11/2021
Exam Time :	12:30 PM - 2:00 PM
Subject	Constable GD 2021

Section : **Part A General Intelligence and Reasoning**

Q.1 Select the number from among the given options that can replace the question mark (?) in the following series.

144, 289, 484, ?, 1024

- Ans
- 1. 625
 - 2. 725
 - 3. 676
 - 4. 729

Question ID : 65497833819
 Status : Answered
 Chosen Option : 4

Q.2 Select the combination of letters that when sequentially placed in the blanks of the given series will complete the series.

_ b _ p p p _ q p _ p b _ p _

- Ans
- 1. b q b p b p
 - 2. p b q p b q
 - 3. p q b p q p
 - 4. p q p p q b

Question ID : 65497833822
 Status : Answered
 Chosen Option : 3

Q.3 Read the given statements and conclusions carefully. Assuming that the information given in the statements is true, even if it appears to be at variance with commonly known facts, decide which of the given conclusions logically follow(s) from the statements.

Statements:
 All laptops are monitors.
 All monitors are TVs.

Conclusions:
 1. All monitors are laptops.
 2. Some TVs are monitors.
 3. No monitor is a laptop.

- Ans
- 1. Only conclusion 2 follows
 - 2. Only conclusion 1 follows
 - 3. Only conclusion 3 follows
 - 4. Both conclusions 2 and 3 follow

Question ID : 65497833810
 Status : Answered
 Chosen Option : 1

Q.4 Two different positions of the same dice marked with the letters F, G, P, Q, R and S are shown .
Select the letter that will be on the face opposite to the face having the letter 'G'.



- Ans
- 1. R
 - 2. F
 - 3. Q
 - 4. S

Question ID : 65497833803
Status : Answered
Chosen Option : 2

Q.5 Select the option that is related to the third term in the same way as the second term is related to the first term.

PRINT : RNTPI :: LEMON : ?

- Ans
- 1. ELOMN
 - 2. LNEMO
 - 3. EONLM
 - 4. MLNOE

Question ID : 65497833814
Status : Answered
Chosen Option : 3

Q.6 In an imaginary mathematical system, P denotes subtraction, Q denotes division, R denotes addition and S denotes multiplication. All other rules of mathematics are the same as in the existing system. What is the value of the given expression?

106 R 115 Q 23 S 7 P 19

- Ans
- 1. 154
 - 2. 87
 - 3. 45
 - 4. 122

Question ID : 65497833802
Status : Answered
Chosen Option : 4

Q.7 Select the option that is related to the fourth number in the same way as the first number is related to the second number.

54 : 9 :: ? : 7

- Ans
- 1. 56
 - 2. 62
 - 3. 42
 - 4. 60

Question ID : 65497833801
Status : Answered
Chosen Option : 3

Q.8 Four letter-clusters have been given, out of which three are alike in some manner and one is different. Select the one that is different.

Ans 1. HAA

2. UHH

3. OFF

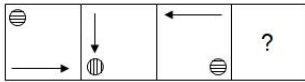
4. IXX

Question ID : 65497833817

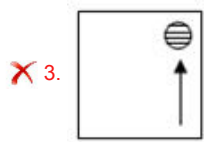
Status : Answered

Chosen Option : 1

Q.9 Select the figure from among the given options that can replace the question mark (?) in the following series.



Ans



Question ID : 65497833824

Status : Answered

Chosen Option : 4

Q.10 Study the given pattern carefully and select the number that can replace the question mark (?) in it.

5 12 ?
11 19 25
26 55 79

Ans 1. 22

2. 17

3. 20

4. 18

Question ID : 65497833811

Status : Answered

Chosen Option : 4

Q.11 In a certain code language, 'go went gone' is written as 'da ma dof', 'he had gone' is written as 'ga dol ma', and 'he was good' is written as 'na ga ca'. How will 'had' be written in that language?

- Ans
- 1. ca
 - 2. ga
 - 3. dol
 - 4. ma

Question ID : 65497833809
Status : Answered
Chosen Option : 3

Q.12 Seven friends, M, N, O, P, Q, R and S, are sitting in a straight line, all facing towards the north. N is sitting at the middle position. M is sitting between Q and P. Q is sitting to the immediate left of N. S is sitting to the immediate left of O. M and O are not sitting at any of the ends. Who is sitting at the right end?

- Ans
- 1. R
 - 2. Q
 - 3. N
 - 4. P

Question ID : 65497833800
Status : Answered
Chosen Option : 1

Q.13 In a certain code language, 'REACH' is coded as 85139 and 'SUN' is coded as 264. How will 'SEARCH' be coded in that language?

- Ans
- 1. 251839
 - 2. 253819
 - 3. 258139
 - 4. 253189

Question ID : 65497833818
Status : Answered
Chosen Option : 1

Q.14 'A×B' means 'A is the brother of B'. 'A-B' means 'A is the mother of B'. 'A÷B' means 'A is the father of B'. Which of the following means 'M is the son of Q'?

- Ans
- 1. $M \times R \div Q$
 - 2. $Q \div M \times R$
 - 3. $M \div R \times Q$
 - 4. $M - R \div T$

Question ID : 65497833816
Status : Answered
Chosen Option : 2

Q.15 Select the number from among the given options that can replace the question mark (?) in the following series.

3, 35, 99, 195, ?

Ans 1. 323

2. 225

3. 325

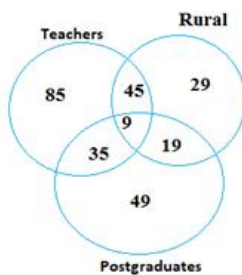
4. 299

Question ID : 65497833823

Status : Answered

Chosen Option : 1

Q.16 Study the given diagram carefully and answer the question that follows.



What is the number of teachers who are NEITHER rural NOR postgraduates?

Ans 1. 45

2. 85

3. 35

4. 9

Question ID : 65497833808

Status : Answered

Chosen Option : 2

Q.17 Select the letter-cluster from among the given options that can replace the question mark (?) in the following series.

GBL, JEO, MHR, ?

Ans 1. QJV

2. OJB

3. PKU

4. QKW

Question ID : 65497833805

Status : Answered

Chosen Option : 3

Q.18 When 12 is added to a number, it is equal to 2 times the sum of 4 and the number. Find the number.

- Ans
- 1. 10
 - 2. 5
 - 3. 8
 - 4. 4

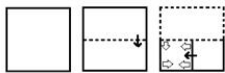
Question ID : 65497833812
 Status : Answered
 Chosen Option : 4

Q.19 Seven friends, L, M, N, O, P, Q and R, are sitting around a circular table, with their backs towards the centre. L is sitting to the immediate right of P. M is not the neighbour of P. O is sitting third to the left of L. Q is sitting between R and O. Who is sitting to the immediate right of L?

- Ans
- 1. N
 - 2. M
 - 3. Q
 - 4. R

Question ID : 65497833807
 Status : Answered
 Chosen Option : 2

Q.20 The sequence of folding a piece of paper and the manner in which the folded paper has been cut is shown in the following figures. How would this paper look when unfolded?



Ans

- 1.
- 2.
- 3.
- 4.

Question ID : 65497833813
 Status : Answered
 Chosen Option : 1

Q.21 'Patna' is related to 'Bihar' in the same way as 'Dispur' is related to '_____'.
Ans 1. Nagaland
 2. Mizoram
 3. Meghalaya
 4. Assam

Question ID : 65497833806
Status : Answered
Chosen Option : 4

Q.22 In a certain code language, 'SPIRIT' is written as 'WKMIMG'. How will 'GLOBAL' be written in that language?
Ans 1. GTYOOX
 2. GOTYXO
 3. KOSYEO
 4. KSOEYO

Question ID : 65497833815
Status : Answered
Chosen Option : 3

Q.23 Select the correct mirror image of the given combination when the mirror is placed at 'PQ' as shown.

TRIANGLE 

Ans 1. LBVINGE
 2. LBIVNGE
 3. EINGELT
 4. EINGELT

Question ID : 65497833820
Status : Answered
Chosen Option : 4

Q.24 Select the correct option that indicates the arrangement of the given words in the order in which they appear in an English dictionary.

- i. Declaim
- ii. Decline
- iii. Decisive
- iv. Declare
- v. Decode

Ans 1. i, iv, ii, iii, v
 2. i, ii, iv, iii, v
 3. v, iii, iv, ii, i
 4. iii, i, iv, ii, v


Question ID : 65497833821
Status : Answered
Chosen Option : 4

Q.25 Select the option in which the given figure is embedded (rotation is NOT allowed).




Ans

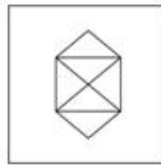
1.




2.



3.



4.



Question ID : 65497833804
Status : Answered
Chosen Option : 3

Section : Part B General Knowledge and General Awareness

Q.1 In November 2020, who among the following inaugurated the 'Lilawati Awards', which is an initiative of All India Council for Technical Education?

Ans 1. Rajiv Kumar

2. Amit Shah

3. Harsh Vardhan

4. Ramesh Pokhriyal 'Nishank'

Question ID : 65497833832
Status : Not Answered
Chosen Option : --

Q.2 Which of the following compounds contains an ionic bond?

Ans 1. CHCl_3

2. NaCl

3. N_2

4. CH_4

Question ID : 65497833846
Status : Answered
Chosen Option : 2

Q.3 Manika Batra is famous as an Indian _____.

- Ans
- 1. basketball player
 - 2. swimmer
 - 3. table tennis player
 - 4. athlete

Question ID : 65497833840
Status : Not Answered
Chosen Option : --

Q.4 Which among the following monuments is in Rajasthan?

- Ans
- 1. Ujjayanta Palace
 - 2. Hawa Mahal
 - 3. Bara Imambara
 - 4. Bibi Ka Maqbara

Question ID : 65497833827
Status : Not Answered
Chosen Option : --

Q.5 Through the Royal Titles Act (1876), Queen Victoria assumed the title of 'Kaiser-i-Hind' or Queen Empress of India. Who was the Viceroy of British India when Queen Victoria assumed the title 'Kaiser-i-Hind'?

- Ans
- 1. Lord Canning
 - 2. Lord Ripon
 - 3. Lord Lansdowne
 - 4. Lord Lytton

Question ID : 65497833835
Status : Not Answered
Chosen Option : --

Q.6 Which of the following types of goods is defined as 'the goods that are identical, similar or comparable to another product, in the eyes of the consumer, such that they can either fully or partly satisfy the same needs of the consumer'?

- Ans
- 1. Capital goods
 - 2. Intermediate goods
 - 3. Substitute goods
 - 4. Consumer goods

Question ID : 65497833825
Status : Not Answered
Chosen Option : --

Q.7 India and Bangladesh are the leading producers of _____.

- Ans
- 1. jute
 - 2. millet
 - 3. coffee
 - 4. tea

Question ID : 65497833843
Status : Not Answered
Chosen Option : --

Q.8 Which of the following was NOT the theme for Union Budget 2020-21?

- Ans
- 1. Develop a Caring Society
 - 2. Aspirational India
 - 3. Economic Development for All
 - 4. Education for All

Question ID : 65497833834
Status : Not Answered
Chosen Option : --

Q.9 Pressure is equal to thrust divided by _____.

- Ans
- 1. area
 - 2. mass
 - 3. Force
 - 4. length

Question ID : 65497833829
Status : Answered
Chosen Option : 1

Q.10 _____ became the first Indian to win the Fed Cup Heart Award 2020 for Asia/Oceania zone, for her successful return to the court post motherhood.

- Ans
- 1. Ankita Raina
 - 2. Riya Bhatia
 - 3. Sania Mirza
 - 4. Rutuja Bhosale

Question ID : 65497833844
Status : Not Answered
Chosen Option : --

Q.11 Which of the following statements about the Equal Remuneration Act of 1976 is INCORRECT?

- Ans
- 1. It applies to certain parts of India.
 - 2. It is a Central Legislation.
 - 3. It provides for prevention of discrimination against women at workplace.
 - 4. It provides for payment of equal remuneration to men and women, in the matter of employment.

Question ID : 65497833839
Status : Not Answered
Chosen Option : --

Q.12 Malala Yousafzai is the youngest Nobel Peace Prize Laureate, having being awarded the prize when she was only 17 years old. In which year was she awarded this Nobel Peace Prize?

- Ans
- 1. 2016
 - 2. 2019
 - 3. 2018
 - 4. 2014

Question ID : 65497833830
Status : Not Answered
Chosen Option : --

Q.13 The Ministry of Information and Broadcasting announced _____ as the new President of the Film and Television Institute of India in September 2020.

- Ans
- 1. Mahesh Bhatt
 - 2. Anupam Kher
 - 3. Gajendra Chauhan
 - 4. Shekhar Kapur

Question ID : 65497833841
Status : Not Answered
Chosen Option : --

Q.14 Which of the following grasslands are present in North America?

- Ans
- 1. Prairies
 - 2. Steppes
 - 3. Pampas
 - 4. Downs

Question ID : 65497833826
Status : Answered
Chosen Option : 1

Q.15 How many members represent Himachal Pradesh in the 17th Lok Sabha as of 22 November 2020?

- Ans
- 1. 12
 - 2. 6
 - 3. 4
 - 4. 8

Question ID : 65497833831
Status : Not Answered
Chosen Option : --

Q.16 Nizam-ul-Mulk Asaf Jah, the founder of Hyderabad state, was the most powerful member at the court of the _____ Farrukh Siyar.

- Ans
- 1. Mughal Emperor
 - 2. Gupta Emperor
 - 3. Khalji Emperor
 - 4. Rajput Emperor

Question ID : 65497833838
Status : Not Answered
Chosen Option : --

Q.17 World Pneumonia Day is observed on:

- Ans
- 1. 18 December
 - 2. 5 September
 - 3. 12 November
 - 4. 15 October

Question ID : 65497833848
Status : Marked For Review
Chosen Option : 3

Q.18 Who among the following is the founder of Fit India movement?

- Ans
- 1. Kiren R jiju
 - 2. Amit Shah
 - 3. Narendra Modi
 - 4. Suparno Satpathy

Question ID : 65497833833
Status : Not Answered
Chosen Option : --

Q.19 India completed the 50th anniversary of bank nationalisation programme in _____.

- Ans
- 1. 2019
 - 2. 2020
 - 3. 2017
 - 4. 2015

Question ID : 65497833849
Status : Not Answered
Chosen Option : --

Q.20 What is the maximum number of electrons that can be accommodated in the 'N' shell of an atom?

- Ans
- 1. 24
 - 2. 8
 - 3. 4
 - 4. 32

Question ID : 65497833828
Status : Answered
Chosen Option : 4

Q.21 The language of administration under the Delhi Sultans was:

- Ans
- 1. Urdu
 - 2. Persian
 - 3. Turkish
 - 4. Sanskrit

Question ID : 65497833837
Status : Not Answered
Chosen Option : --

Q.22 Jallikattu is a _____ held mainly in Tamil Nadu.

- Ans
- 1. kite flying festival
 - 2. candle lighting festival
 - 3. bull taming festival
 - 4. buffalo fighting festival

Question ID : 65497833842
Status : Not Answered
Chosen Option : --

Q.23 Who among the following Australian cricketers won the Allan Border Medal 2020?

- Ans
- 1. Cameron Green
 - 2. Glenn Maxwell
 - 3. David Warner
 - 4. Pat Cummins

Question ID : 65497833845
Status : Not Answered
Chosen Option : --

Q.24 Which of the following movements against the British has been INCORRECTLY matched with its leader?

- Ans
- 1. Paika Rebellion - Bakshi Jagabandhu
 - 2. Pagal Panthi Revolt - Tirot Sing
 - 3. Kol Uprising - Buddhu Bhagat
 - 4. Ahom Revolt - Gomdhar Konwar

Question ID : 65497833847
Status : Not Answered
Chosen Option : --

Q.25 A kharif crop used both as food and fodder is:

- Ans
- 1. jowar
 - 2. bajra
 - 3. maize
 - 4. wheat

Question ID : 65497833836
Status : Marked For Review
Chosen Option : 1

Section : Part C Elementary Mathematics

Q.1 With a uniform speed, a car covers a distance in 6 hours. Had the speed been increased by 10 km/h, the same distance could have been covered in 5 hours. The distance covered by the car is:

- Ans
- 1. 300 km
 - 2. 200 km
 - 3. 250 km
 - 4. 350 km

Question ID : 65497833858
Status : Answered
Chosen Option : 1

Q.2 What is to be added to 35% of 440 so that the sum may be equal to 42% of 550?

- Ans
- 1. 70
 - 2. 75
 - 3. 77
 - 4. 65

Question ID : 65497833856
Status : Answered
Chosen Option : 3

Q.3 When the speed of a train is decreased by 25%, it takes 42 minutes more to cover the same distance. What is the time (in hours) taken by the train to cover the same distance with its actual speed?

- Ans**
- ✓ 1. $2\frac{1}{10}$
 - ✗ 2. $1\frac{1}{20}$
 - ✗ 3. $1\frac{4}{5}$
 - ✗ 4. $2\frac{1}{5}$

Question ID : 65497833871
Status : Answered
Chosen Option : 1

Q.4 The compound interest on a certain sum for 2 years at 10% per annum is ₹651 (interest compounded yearly). The simple interest on the same sum for double the time at half the rate of interest per annum is:

- Ans**
- ✗ 1. ₹600
 - ✗ 2. ₹630
 - ✗ 3. ₹520
 - ✓ 4. ₹620

Question ID : 65497833862
Status : Answered
Chosen Option : 4

Q.5 A and B undertake to do a job for ₹6,000. A can do it in 10 days and B can do it in 12 days. With the assistance of C, they finish the work in 4 days. How much should C be paid for his work?

- Ans**
- ✗ 1. ₹2,400
 - ✗ 2. ₹1,500
 - ✗ 3. ₹1,400
 - ✓ 4. ₹1,600

Question ID : 65497833857
Status : Answered
Chosen Option : 4

Q.6 A sum of money is distributed among P, Q and R in the ratio 13 : 17 : 25, respectively. If R gets ₹6,800 more than Q, then the difference between P's share and Q's share is:

- Ans**
- ✓ 1. ₹3,400
 - ✗ 2. ₹3,200
 - ✗ 3. ₹3,600
 - ✗ 4. ₹4,400

Question ID : 65497833859
Status : Answered
Chosen Option : 1

Q.7 A man borrows ₹15,000 at 15% p.a. compound interest. At the end of every year, he pays ₹2,500 as part repayment. How much does he still owe after three such instalments?

- Ans**
- 1. ₹ 14,131.87
 - 2. ₹ 13,175.66
 - 3. ₹ 12,150
 - 4. ₹ 12,642.50

Question ID : 65497833873
Status : Answered
Chosen Option : 1

Q.8 When a plot is sold for ₹34,080, the owner loses 20%. At what price must that plot be sold in order to gain 20%?

- Ans**
- 1. ₹50,120
 - 2. ₹51,120
 - 3. ₹41,120
 - 4. ₹51,020

Question ID : 65497833861
Status : Answered
Chosen Option : 2

Q.9 25 and 750 are the highest common factor and the lowest common multiple of two numbers, respectively. If one of the two numbers is 75, find the other number.

- Ans**
- 1. 250
 - 2. 75
 - 3. 50
 - 4. 25

Question ID : 65497833863
Status : Answered
Chosen Option : 1

Q.10 The average of five consecutive even numbers is 36. If the next five consecutive odd numbers are included, then what is the average of all the numbers?

- Ans**
- 1. 39
 - 2. 41.25
 - 3. 40.5
 - 4. 37.75

Question ID : 65497833851
Status : Answered
Chosen Option : 3

Q.11 The average weight of 24 boys is 7 kg more than the average weight of 28 girls. If the total weight of 24 boys is 1080 kg, then the total weight of 28 girls is:

- Ans**
- 1. 1074 kg
 - 2. 1064 kg
 - 3. 1054 kg
 - 4. 1046 kg

Question ID : 65497833854
Status : Answered
Chosen Option : 2

Q.12 If $2 \text{ of } 8 \div 3 + 3 \frac{4}{5} \div x - 4 \frac{7}{9} = 6 \frac{8}{9}$, what is the value of x ?

- Ans**
- 1. $\frac{2}{3}$
 - 2. $\frac{3}{5}$
 - 3. $\frac{5}{9}$
 - 4. $\frac{6}{7}$

Question ID : 65497833865
Status : Answered
Chosen Option : 2

Q.13 The height of a right circular cylinder is 14 cm and its curved surface is 264 cm^2 . Its volume is:

- Ans**
- 1. 396 cm^3
 - 2. 290 cm^3
 - 3. 366 cm^3
 - 4. 252 cm^3

Question ID : 65497833874
Status : Answered
Chosen Option : 1

Q.14 An article is marked at ₹700. If it is sold at a discount of 35%, then the selling price becomes $\frac{5}{3}$ times of its cost price. What is its cost price (in ₹)?

- Ans**
- 1. 273
 - 2. 455
 - 3. 291
 - 4. 420

Question ID : 65497833868
Status : Answered
Chosen Option : 1

Q.15 The value of $\frac{3}{5} \div 4\frac{4}{5}$ of $\frac{5}{16} + \frac{2}{3} \div \frac{8}{15} \times 1\frac{1}{5} - \frac{1}{4} \times \frac{3}{4} \div 1\frac{1}{4}$ of $\frac{2}{5}$ is:

- Ans
- 1. $\frac{61}{40}$
 - 2. $\frac{12}{5}$
 - 3. $\frac{9}{4}$
 - 4. $\frac{21}{10}$

Question ID : 65497833870
 Status : Answered
 Chosen Option : 1

Q.16 Ravi borrowed ₹1,800 at 6% per annum and ₹2,800 at 7% per annum simple interest for the same duration and paid ₹2,736 in all as interest. His friend Shiv borrowed ₹2,500 at 8% per annum simple interest for the same duration. How much (in ₹) Shiv had to pay to clear off the loan?

- Ans
- 1. 3,900
 - 2. 4,500
 - 3. 4,300
 - 4. 4,000

Question ID : 65497833853
 Status : Answered
 Chosen Option : 3

Q.17 32 workers working for 9 hours a day can finish a work in 14 days. If each worker works for 8 hours per day, how many workers are required to finish the same work in 18 days?

- Ans
- 1. 30
 - 2. 24
 - 3. 26
 - 4. 28

Question ID : 65497833867
 Status : Answered
 Chosen Option : 4

Q.18 The single equivalent discount for three successive discounts of 8%, 12.5% and 20% is:

- Ans
- 1. 40.5%
 - 2. 35.6%
 - 3. 35.4%
 - 4. 36.5%

Question ID : 65497833855
 Status : Answered
 Chosen Option : 2

Q.19 35 litres of a mixture contain milk and water in the ratio 3 : 2. If 4 litres of this mixture be replaced by 4 litres of milk, then find the ratio of milk to the water in the new mixture.

- Ans**
- 1. 4 : 7
 - 2. 3 : 5
 - 3. 5 : 2
 - 4. 3 : 7

Question ID : **65497833872**
Status : **Answered**
Chosen Option : **3**

Q.20 What will be the least number of marbles with Seema, if she can arrange them in rows of 6, 10, 12 and 15 marbles each, and the number is also a perfect square?

- Ans**
- 1. 625
 - 2. 900
 - 3. 225
 - 4. 400

Question ID : **65497833850**
Status : **Answered**
Chosen Option : **2**

Q.21 A student got 160 marks and required 50 more marks to secure the minimum 35% marks to pass. Find the maximum marks.

- Ans**
- 1. 600
 - 2. 750
 - 3. 800
 - 4. 500

Question ID : **65497833864**
Status : **Answered**
Chosen Option : **1**

Q.22 ₹1,26,672 is divided between A and B in the ratio 7 : 9. The difference between the share of B and that of A (in ₹) is:

- Ans**
- 1. 18,354
 - 2. 21,317
 - 3. 15,834
 - 4. 13,485

Question ID : **65497833852**
Status : **Answered**
Chosen Option : **3**

Q.23 The perimeter and area of a rectangular sheet are 40 m and 72 m^2 , respectively. The length of the diagonal will be:

- Ans**
- 1. 14 m
 - 2. 12 m
 - 3. 16 m
 - 4. 10 m

Question ID : **65497833860**
Status : **Answered**
Chosen Option : **3**

Q.24 A sold an article to B at 20% profit. B sold it to C at 12% loss and C sold it to D at 25% profit. If B had a loss of ₹72, then D would have bought the article for:

- Ans
- 1. ₹660
 - 2. ₹396
 - 3. ₹594
 - 4. ₹528

Question ID : 65497833869
Status : Answered
Chosen Option : 1

Q.25 A man bought some eggs at ₹60 per dozen and bought another lot of the same number of eggs at ₹50 per dozen. If he gained ₹930 after selling all these eggs at ₹70 per dozen, what was the total number of eggs bought by him?

- Ans
- 1. 54 dozens
 - 2. 48 dozens
 - 3. 62 dozens
 - 4. 70 dozens

Question ID : 65497833866
Status : Answered
Chosen Option : 3

Section : Part D English

Q.1 Select the option that is closest in meaning to the underlined idiom/phrase in the given sentence.

Losing my job was a blessing in disguise because I got to spend more time with my family.

- Ans
- 1. task that appeared difficult at first but became easy later
 - 2. a joyful event that made everybody happy
 - 3. event that seemed bad at first but resulted in something good later
 - 4. a good thing that happened only once

Question ID : 65497833886
Status : Answered
Chosen Option : 3

Q.2 Select the most appropriate meaning of the given idiom.

To lose one's head

- Ans
- 1. To be happy
 - 2. To take responsibility
 - 3. To become upset or angry
 - 4. To be robbed

Question ID : 65497833883
Status : Answered
Chosen Option : 3

Q.3 The following sentence has been split into four segments. Identify the segment that contains a grammatical error.

Mr. Ghosh is senior / than Mr. Sen, / so he must be / promoted first.

- Ans
- 1. Mr. Ghosh is senior
 - 2. so he must be
 - 3. than Mr. Sen
 - 4. promoted first

Question ID : 65497833877
Status : Answered
Chosen Option : 3

Q.4 Select the most appropriate synonym of the given word.

Brutal

- Ans
- 1. Considerate
 - 2. Cheerful
 - 3. Cruel
 - 4. Courteous

Question ID : 65497833878
Status : Answered
Chosen Option : 3

Q.5 Select the most appropriate option that can substitute the underlined segment in the given sentence. If there is no need to substitute it, select 'No substitution required'.

Trees can live in an extremely long time – tens, hundreds, even thousands of years.

- Ans
- 1. can live with an extremely long time
 - 2. can live for an extremely long time
 - 3. can live in an extremely longest time
 - 4. No substitution required

Question ID : 65497833884
Status : Answered
Chosen Option : 2

Q.6 Select the option that can be used as a one-word substitute for the given group of words.

A dummy used to display clothes in a shop window

- Ans
- 1. Mannequin
 - 2. Supermodel
 - 3. Statue
 - 4. Model

Question ID : 65497833894
Status : Answered
Chosen Option : 1

Q.7 Select the most appropriate synonym of the given word.

Perforate

- Ans 1. Pierce
 2. Fold
 3. Tear
 4. Crack

Question ID : 65497833893
Status : Answered
Chosen Option : 3

Q.8 Select the correctly spelt word.

- Ans 1. Schemes
 2. Malnourised
 3. Recognisable
 4. Intigrated

Question ID : 65497833879
Status : Answered
Chosen Option : 1

Q.9 Select the most appropriate option to fill in the blank.

It is important to _____ with the police and listen to their advice.

- Ans 1. cope
 2. combine
 3. concern
 4. cooperate

Question ID : 65497833887
Status : Answered
Chosen Option : 4

Q.10 Select the most appropriate option to fill in the blank.

Nobody seems to be _____ in visiting museums.

- Ans 1. attracted
 2. anxious
 3. obsessed
 4. interested

Question ID : 65497833882
Status : Answered
Chosen Option : 4

Q.11 Select the most appropriate option that can substitute the underlined segment in the given sentence. If there is no need to substitute it, select 'No substitution required'.

He will not get admission in a good college unless he will work hard.

- Ans
- 1. would work
 - 2. No substitution required
 - 3. works
 - 4. is working

Question ID : 65497833875
Status : Answered
Chosen Option : 3

Q.12 Select the option that can be used as a one-word substitute for the given group of words.

Able to be eaten

- Ans
- 1. Decibel
 - 2. Scribble
 - 3. Hobble
 - 4. Edible

Question ID : 65497833876
Status : Answered
Chosen Option : 4

Q.13 Select the most appropriate option to fill in the blank.

The _____ of directors gave their approval for the project.

- Ans
- 1. team
 - 2. board
 - 3. bunch
 - 4. band

Question ID : 65497833880
Status : Answered
Chosen Option : 2

Q.14 Select the most appropriate ANTONYM of the given word.

Remorse

- Ans
- 1. Indifference
 - 2. Guilt
 - 3. Anger
 - 4. Denial

Question ID : 65497833889
Status : Answered
Chosen Option : 2

Q.15 The following sentence has been split into four segments. Identify the segment that contains a grammatical error.

Emma agreed / thinking of an excuse / to get Paul / out of the house.

Ans 1. thinking of an excuse

2. Emma agreed

3. to get Paul

4. out of the house

Question ID : 65497833892

Status : Answered

Chosen Option : 1

Q.16 The following sentence has been split into four segments. Identify the segment that contains a grammatical error.

Why do you think / why John / refused to / marry her?

Ans 1. why John

2. marry her

3. Why do you think

4. refused to

Question ID : 65497833888

Status : Answered

Chosen Option : 1

Q.17 Select the option that can be used as a one-word substitute for the given group of words.

Owing money to someone

Ans 1. Indebted

2. Exchanged

3. Loaned

4. Donated

Question ID : 65497833890

Status : Answered

Chosen Option : 3

Q.18 Select the most appropriate option that can substitute the underlined segment in the given sentence. If there is no need to substitute it, select 'No substitution required'.

Vanilla ice cream with chocolate sauce is my favourite.

Ans 1. with chocolate sauce are

2. No substitution required

3. with chocolate sauces are

4. with chocolate sauce is being

Question ID : 65497833885

Status : Answered

Chosen Option : 2

Q.19 Select the **INCORRECTLY** spelt word.

- Ans 1. Omission
 2. Remission
 3. Comission
 4. Submission

Question ID : 65497833891
Status : Answered
Chosen Option : 3

Q.20 Select the most appropriate **ANTONYM** of the given word.

United

- Ans 1. Bonded
 2. Linked
 3. Separated
 4. Together

Question ID : 65497833881
Status : Answered
Chosen Option : 3

Comprehension:

In the following passage, some words have been deleted. Read the passage carefully and select the most appropriate option to fill in each blank.

When the temperature (1)_____ during the summer season, many people choose to use air-conditioners to keep their homes and offices cool. Air-conditioners, which were once regarded as a luxury, have now almost become a/an (2)_____. The air-conditioning system not only cools the indoor air down but also filters out harmful pollutants. This helps reduce dust, pollen and allergens inside the home and (3)_____ the quality of air inside the house or room. However, along with the (4)_____, there are some disadvantages. A major disadvantage is that if the filter inside the air-conditioner is not cleaned and maintained regularly, it (5)_____ to problems such as allergic colds, fever, headaches and dryness of the skin.

SubQuestion No : 21

Q.21 Select the most appropriate option to fill in blank no. 1.

- Ans 1. raises
 2. gains
 3. rises
 4. extends

Question ID : 65497833896
Status : Answered
Chosen Option : 3

Comprehension:

In the following passage, some words have been deleted. Read the passage carefully and select the most appropriate option to fill in each blank.

When the temperature (1)_____ during the summer season, many people choose to use air-conditioners to keep their homes and offices cool. Air-conditioners, which were once regarded as a luxury, have now almost become a/an (2)_____. The air-conditioning system not only cools the indoor air down but also filters out harmful pollutants. This helps reduce dust, pollen and allergens inside the home and (3)_____ the quality of air inside the house or room. However, along with the (4)_____, there are some disadvantages. A major disadvantage is that if the filter inside the air-conditioner is not cleaned and maintained regularly, it (5)_____ to problems such as allergic colds, fever, headaches and dryness of the skin.

SubQuestion No : 22

Q.22 Select the most appropriate option to fill in blank no. 2.

Ans 1. necessity

2. demand

3. urgency

4. essence

Question ID : 65497833897

Status : Answered

Chosen Option : 1

Comprehension:

In the following passage, some words have been deleted. Read the passage carefully and select the most appropriate option to fill in each blank.

When the temperature (1)_____ during the summer season, many people choose to use air-conditioners to keep their homes and offices cool. Air-conditioners, which were once regarded as a luxury, have now almost become a/an (2)_____. The air-conditioning system not only cools the indoor air down but also filters out harmful pollutants. This helps reduce dust, pollen and allergens inside the home and (3)_____ the quality of air inside the house or room. However, along with the (4)_____, there are some disadvantages. A major disadvantage is that if the filter inside the air-conditioner is not cleaned and maintained regularly, it (5)_____ to problems such as allergic colds, fever, headaches and dryness of the skin.

SubQuestion No : 23

Q.23 Select the most appropriate option to fill in blank no. 3.

Ans 1. improve

2. develops

3. alters

4. reforms

Question ID : 65497833898

Status : Answered

Chosen Option : 1

Comprehension:

In the following passage, some words have been deleted. Read the passage carefully and select the most appropriate option to fill in each blank.

When the temperature (1)_____ during the summer season, many people choose to use air-conditioners to keep their homes and offices cool. Air-conditioners, which were once regarded as a luxury, have now almost become a/an (2)_____. The air-conditioning system not only cools the indoor air down but also filters out harmful pollutants. This helps reduce dust, pollen and allergens inside the home and (3)_____ the quality of air inside the house or room. However, along with the (4)_____, there are some disadvantages. A major disadvantage is that if the filter inside the air-conditioner is not cleaned and maintained regularly, it (5)_____ to problems such as allergic colds, fever, headaches and dryness of the skin.

SubQuestion No : 24

Q.24 Select the most appropriate option to fill in blank no. 4.

- Ans 1. benefits
 2. credits
 3. virtue
 4. merit

Question ID : 65497833899
Status : Answered
Chosen Option : 1

Comprehension:

In the following passage, some words have been deleted. Read the passage carefully and select the most appropriate option to fill in each blank.

When the temperature (1)_____ during the summer season, many people choose to use air-conditioners to keep their homes and offices cool. Air-conditioners, which were once regarded as a luxury, have now almost become a/an (2)_____. The air-conditioning system not only cools the indoor air down but also filters out harmful pollutants. This helps reduce dust, pollen and allergens inside the home and (3)_____ the quality of air inside the house or room. However, along with the (4)_____, there are some disadvantages. A major disadvantage is that if the filter inside the air-conditioner is not cleaned and maintained regularly, it (5)_____ to problems such as allergic colds, fever, headaches and dryness of the skin.

SubQuestion No : 25

Q.25 Select the most appropriate option to fill in blank no. 5.

- Ans 1. could lead
 2. led
 3. leads
 4. is leading

Question ID : 65497833900
Status : Answered
Chosen Option : 3

Section : Part D Hindi

Q.1 'मृगांक' किसका पर्यायवाची है?

- Ans 1. कमल
 2. चन्द्र
 3. नयन
 4. सूय

Question ID : 65497833917
Status : Not Answered
Chosen Option : --

Q.2 दिए गए वाक्य का वह भाग ज्ञात करें जिसमें कोई त्रुटि है। यदि कोई त्रुटि नहीं है, तो 'कोई त्रुटि नहीं है' चुनें।

हमारे यहाँ(1)/ तरुण नवयुवकों की(2)/ शिक्षा का अच्छा प्रबंध है।(3)/ कोई त्रुटि नहीं है।(4)

Ans 1. 2

2. 3

3. 4

4. 1

Question ID : 65497833911

Status : Not Answered

Chosen Option : --

Q.3 सही वर्तनी वाले शब्द का चयन करें।

Ans 1. पारीतोषिक

2. पारितोषिक

3. परीतोषिक

4. परितोषिक

Question ID : 65497833904

Status : Not Answered

Chosen Option : --

Q.4 दिए गए विकल्पों में से निम्नलिखित वाक्यांश के लिए एक शब्द का चयन कीजिए-

जिसके हृदय में ममता नहीं है

Ans 1. निर्मूल

2. निर्भय

3. निर्मम

4. निर्दय

Question ID : 65497833913

Status : Not Answered

Chosen Option : --

Q.5 दिए गए वाक्य में रेखांकित खंड को प्रतिस्थापित करने के लिए सर्वाधिक उपयुक्त विकल्प का चयन करें। यदि इसे प्रतिस्थापित करने की आवश्यकता नहीं है, तो विकल्प 'किसी बदलाव की आवश्यकता नहीं है' का चयन करें।

मैंने सुई, कंघी, दर्पण और पुस्तकें मोल लिए।

Ans 1. किसी बदलाव की आवश्यकता नहीं है।

2. मोल लीं।

3. मोल दी।

4. मोल किए।

Question ID : 65497833910

Status : Not Answered

Chosen Option : --

Q.6 दिए गए वाक्य के किस भाग में त्रुटि है?

छात्राओं ने रंगारंग कार्यक्रम में भाग लिया।

- Ans
- 1. रंगारंग
 - 2. छात्राओं ने
 - 3. भाग लिया।
 - 4. कार्यक्रम म

Question ID : 65497833916
Status : Not Answered
Chosen Option : --

Q.7 सही बर्तनी वाले शब्द का चयन करें।

- Ans
- 1. गाम्भीय
 - 2. गर्भीय
 - 3. गंभीय
 - 4. गांभीय

Question ID : 65497833903
Status : Not Answered
Chosen Option : --

Q.8 रिक्त स्थान की पूर्ति करने के लिए सर्वाधिक उपयुक्त शब्द का चयन करें।

आज का युवा अपने अधिकारों के प्रति अत्यंत _____ है।

- Ans
- 1. सहज
 - 2. सजग
 - 3. अनभिज्ञ
 - 4. बेखबर

Question ID : 65497833909
Status : Not Answered
Chosen Option : --

Q.9 दिए गए वाक्य में रेखांकित खंड को प्रतिस्थापित करने के लिए सर्वाधिक उपयुक्त विकल्प का चयन करें। यदि इसे प्रतिस्थापित करने की आवश्यकता नहीं है, तो विकल्प 'किसी बदलाव की आवश्यकता नहीं है' का चयन करें।

अपराधी छूट जाते हैं, निरपराध को सजा मिलती है।

- Ans
- 1. निरपराध का सजा मिलती है।
 - 2. किसी बदलाव की आवश्यकता नहीं है।
 - 3. निरपराध को सजा मिलती है।
 - 4. निरपराध को सजा मिलती है।

Question ID : 65497833905
Status : Not Answered
Chosen Option : --

Q.10 छप्पर फाड़ कर देना मुहावरे का उचित अर्थ स्पष्ट कीजिए-

- Ans
- 1. विवाह करना
 - 2. अप्रत्याक्षित हानि होना।
 - 3. बिना प्रयत्न प्राप्त होना
 - 4. जवाब नहीं देना

Question ID : 65497833919
Status : Not Answered
Chosen Option : --

Q.11 'आँखें नीची होना' मुहावरे का सही अर्थ है-

- Ans
- 1. क्रोधित होना
 - 2. लज्जित होना
 - 3. परेशान होना
 - 4. चिंतित होना

Question ID : 65497833915
Status : Not Answered
Chosen Option : --

Q.12 दिए गए वाक्य में रेखांकित खंड को प्रतिस्थापित करने के लिए सर्वाधिक उपयुक्त विकल्प का चयन करें। यदि इसे प्रतिस्थापित करने की आवश्यकता नहीं है, तो विकल्प 'किसी बदलाव की आवश्यकता नहीं है' का चयन करें।

कुछ बच्चे मैदान में क्रिकेट खेल रहे थे तो मेरे लड़का ने भी उनके साथ खेलने की जिद की।

- Ans
- 1. तो मेरे बेटे ने भी उनके साथ
 - 2. किसी बदलाव की आवश्यकता नहीं है।
 - 3. तो मेरा बच्चा ने भी उनके साथ
 - 4. तो मेरा लड़का ने भी उनके साथ

Question ID : 65497833906
Status : Not Answered
Chosen Option : --

Q.13 रिक्त स्थान की पूर्ति करने के लिए सर्वाधिक उपयुक्त शब्द का चयन करें।

श्रीकृष्ण के मामा कंस एक _____ राजा थे।

- Ans
- 1. धार्मिक
 - 2. विनयी
 - 3. देशप्रेमी
 - 4. अत्याचारी

Question ID : 65497833901
Status : Not Answered
Chosen Option : --

Q.14 दिए गए शब्द के समानार्थी शब्द का चयन करें।

जलज

- Ans
- 1. सलिल
 - 2. राजीव
 - 3. जरायु
 - 4. जलधि

Question ID : 65497833908
Status : Not Answered
Chosen Option : --

Q.15 रिक्त स्थान की पूर्ति करने के लिए सर्वाधिक उपयुक्त शब्द का चयन करें।

पुलिस सारी घटना की _____ कर रही है।

- Ans
- 1. माप
 - 2. जाँच
 - 3. परीक्षा
 - 4. टीका

Question ID : 65497833920
Status : Not Answered
Chosen Option : --

Q.16 दिए गए शब्द का विलोम चुनें-

प्रचुर

- Ans
- 1. अप्रचुर
 - 2. प्रचलित
 - 3. प्रचारित
 - 4. अप्रचारित

Question ID : 65497833912
Status : Not Answered
Chosen Option : --

Q.17 दिए गए विकल्पों में से निम्नलिखित वाक्यांश के लिए एक शब्द का चयन कीजिए-

अपने देश के साथ विश्वासघात करने वाला

- Ans
- 1. देशप्रेमी
 - 2. देशद्रोही
 - 3. दुर्भिक्ष
 - 4. विश्वासघाती

Question ID : 65497833914
Status : Not Answered
Chosen Option : --

Q.18 बहु संख्यक रेखांकित शब्द का सही विलोम बताइए-

- Ans
- 1. अल्पतज्ञ
 - 2. असीम
 - 3. अल्पसंख्यक
 - 4. अल्प

Question ID : 65497833918
Status : Not Answered
Chosen Option : --

Q.19 दिए गए वाक्यांश के लिए एक शब्द दीजिए-

जो अक्षरों को पढ़ना-लिखना जानता हो

- Ans
- 1. सर्वज्ञ
 - 2. साक्षर
 - 3. अनपढ़
 - 4. निराक्षर

Question ID : 65497833902
Status : Not Answered
Chosen Option : --

Q.20 दिए गए वाक्य का वह भाग ज्ञात करें जिसमें कोई त्रुटि है। यदि कोई त्रुटि नहीं है, तो 'कोई त्रुटि नहीं है' चुनें।

क्या आप अपनी (1)/ बात की स्पष्टीकरण करने के लिए (2)/ बिलकुल तैयार हैं? (3)/ कोई त्रुटि नहीं है (4)

- Ans
- 1. 4
 - 2. 1
 - 3. 3
 - 4. 2

Question ID : 65497833907
Status : Not Answered
Chosen Option : --

Comprehension:

दिए गए गद्यांश में से कुछ शब्द हटा दिए गए हैं। नीचे दिए विकल्पों की सहायता से रिक्त स्थानों की पूर्ति करें। प्रत्येक संख्या के लिए सर्वाधिक उपयुक्त विकल्प का चयन करें।

तुलसीदास ने 'रामचरितमानस' के द्वारा वेद-शास्त्र-सम्मत हिन्दू धर्म का (1)_____ किया। हमारी संस्कृति का (2)_____ ही वेद, शास्त्र, स्मृति आदि ग्रंथ हैं। तुलसीदास ने उस संस्कृति के आध्यात्मिक और सामाजिक पक्ष की (3)_____ की और हमारे सामने कई आदर्श प्रस्तुत किए। 'रामचरितमानस' के (4)_____ से हिन्दुओं में अपनी संस्कृति के अतीत और भविष्य पर आस्था और गर्व का (5)_____ हुआ।

SubQuestion No : 21

Q.21 गद्यांश के रिक्त स्थान (1) के लिए सर्वाधिक उपयुक्त शब्द होगा-

- Ans
- 1. प्रदान
 - 2. प्रकार
 - 3. प्रचार
 - 4. प्राचार

Question ID : 65497833922
Status : Not Answered
Chosen Option : --

Comprehension:

दिए गए गद्यांश में से कुछ शब्द हटा दिए गए हैं। नीचे दिए विकल्पों की सहायता से रिक्त स्थानों की पूर्ति करें। प्रत्येक संख्या के लिए सर्वाधिक उपयुक्त विकल्प का चयन करें।

तुलसीदास ने 'रामचरितमानस' के द्वारा वेद-शास्त्र-सम्मत हिन्दू धर्म का (1)_____ किया। हमारी संस्कृति का (2)_____ ही वेद, शास्त्र, स्मृति आदि ग्रंथ हैं। तुलसीदास ने उस संस्कृति के आध्यात्मिक और सामाजिक पक्ष की (3)_____ की और हमारे सामने कई आदर्श प्रस्तुत किए। 'रामचरितमानस' के (4)_____ से हिन्दुओं में अपनी संस्कृति के अतीत और भविष्य पर आस्था और गर्व का (5)_____ हुआ।

SubQuestion No : 22

Q.22 गद्यांश के रिक्त स्थान (2) के लिए सर्वाधिक उपयुक्त शब्द होगा-

- Ans
- 1. आभार
 - 2. आधार
 - 3. उद्धार
 - 4. अधार

Question ID : **65497833923**
Status : **Not Answered**
Chosen Option : --

Comprehension:

दिए गए गद्यांश में से कुछ शब्द हटा दिए गए हैं। नीचे दिए विकल्पों की सहायता से रिक्त स्थानों की पूर्ति करें। प्रत्येक संख्या के लिए सर्वाधिक उपयुक्त विकल्प का चयन करें।

तुलसीदास ने 'रामचरितमानस' के द्वारा वेद-शास्त्र-सम्मत हिन्दू धर्म का (1)_____ किया। हमारी संस्कृति का (2)_____ ही वेद, शास्त्र, स्मृति आदि ग्रंथ हैं। तुलसीदास ने उस संस्कृति के आध्यात्मिक और सामाजिक पक्ष की (3)_____ की और हमारे सामने कई आदर्श प्रस्तुत किए। 'रामचरितमानस' के (4)_____ से हिन्दुओं में अपनी संस्कृति के अतीत और भविष्य पर आस्था और गर्व का (5)_____ हुआ।

SubQuestion No : 23

Q.23 गद्यांश के रिक्त स्थान (3) के लिए सर्वाधिक उपयुक्त शब्द होगा-

- Ans
- 1. रखा
 - 2. महता
 - 3. गुणगान
 - 4. रक्षा

Question ID : **65497833924**
Status : **Not Answered**
Chosen Option : --

Comprehension:

दिए गए गद्यांश में से कुछ शब्द हटा दिए गए हैं। नीचे दिए विकल्पों की सहायता से रिक्त स्थानों की पूर्ति करें। प्रत्येक संख्या के लिए सर्वाधिक उपयुक्त विकल्प का चयन करें।

तुलसीदास ने 'रामचरितमानस' के द्वारा वेद-शास्त्र-सम्मत हिन्दू धर्म का (1)_____ किया। हमारी संस्कृति का (2)_____ ही वेद, शास्त्र, स्मृति आदि ग्रंथ हैं। तुलसीदास ने उस संस्कृति के आध्यात्मिक और सामाजिक पक्ष की (3)_____ की और हमारे सामने कई आदर्श प्रस्तुत किए। 'रामचरितमानस' के (4)_____ से हिन्दुओं में अपनी संस्कृति के अतीत और भविष्य पर आस्था और गर्व का (5)_____ हुआ।

SubQuestion No : 24

Q.24 गद्यांश के रिक्त स्थान (4) के लिए सर्वाधिक उपयुक्त शब्द होगा-

- Ans
- 1. मनन-गुनन
 - 2. लिखन-मनन
 - 3. पठन-पाठन
 - 4. लिखन-पाठन

Question ID : **65497833925**
Status : **Not Answered**
Chosen Option : --

Comprehension:

दिए गए गद्यांश में से कुछ शब्द हटा दिए गए हैं। नीचे दिए विकल्पों की सहायता से रिक्त स्थानों की पूर्ति करें। प्रत्येक संख्या के लिए सर्वाधिक उपयुक्त विकल्प का चयन करें।

तुलसीदास ने 'रामचरितमानस' के द्वारा वेद-शास्त्र-सम्मत हिन्दू धर्म का (1)_____ किया। हमारी संस्कृति का (2)_____ ही वेद, शास्त्र, स्मृति आदि ग्रंथ हैं। तुलसीदास ने उस संस्कृति के आध्यात्मिक और सामाजिक पक्ष की (3)_____ की और हमारे सामने कई आदर्श प्रस्तुत किए। 'रामचरितमानस' के (4)_____ से हिन्दुओं में अपनी संस्कृति के अतीत और भविष्य पर आस्था और गर्व का (5)_____ हुआ।

SubQuestion No : 25

Q.25 गद्यांश के रिक्त स्थान (5) के लिए सर्वाधिक उपयुक्त शब्द होगा-

- Ans**
- 1. विचार
 - 2. संसार
 - 3. संचार
 - 4. प्रचार

Question ID : **65497833926**

Status : **Not Answered**

Chosen Option : --