

Exam Date	14/12/2021
Exam Time :	4:00 PM - 5:30 PM
Subject	Constable GD 2021

Section : Part A General Intelligence and Reasoning

Q.1 In a certain code language, 'CASTER' is coded as '32619759'. How will 'FRIDGE' be coded in that language?

- Ans
- 1. 61824722
 - 2. 69922721
 - 3. 69923722
 - 4. 61894705

Question ID : 65497834563
 Status : Answered
 Chosen Option : 3

Q.2 Select the combination of letters that when sequentially placed in the blanks of the given series will complete the series.

_ P G _ _ M P _ _ A _ _ G F A

- Ans
- 1. MFAGMFP
 - 2. MFAGFMP
 - 3. MAGFMPF
 - 4. MFAFGMP

Question ID : 65497834567
 Status : Answered
 Chosen Option : 2

Q.3 If '÷' means '+', '-' means '×', '+' means '-' and '×' means '÷', then which of the following equations is correct?

- Ans
- 1. $42 \times 28 - 30 \div 48 + 45 = 45$
 - 2. $42 \times 28 - 30 \div 48 + 45 = 50$
 - 3. $42 \times 28 - 30 \div 48 + 45 = 48$
 - 4. $42 \times 28 - 30 \div 48 + 45 = 40$

Question ID : 65497834575
 Status : Answered
 Chosen Option : 3

Q.4 Select the number from among the given options that can replace the question mark (?) in the following series.

7, 14, 28, 56, ?

- Ans
- 1. 150
 - 2. 72
 - 3. 90
 - 4. 112

Question ID : 65497834568
Status : Answered
Chosen Option : 4

Q.5 In a certain code language, 'FASHION' is written as 'NISFAHO'. How will 'BLANKET' be written in that language?

- Ans
- 1. ANKBLET
 - 2. TKABLNE
 - 3. NKETBLA
 - 4. TEKNALB

Question ID : 65497834580
Status : Answered
Chosen Option : 2

Q.6 Select the option in which the given figure is embedded (rotation is NOT allowed).



Ans

- 1.
- 2.
- 3.
- 4.

Question ID : 65497834577
Status : Answered
Chosen Option : 4

Q.7 Select the correct mirror image of the given combination when the mirror is placed at the right side.

4 7 6 Y f Q

Ans

- 1. Q † Y θ √ 4
- 2. Q † Y 9 √ 4
- 3. Q † Y θ √ 4
- 4. Q † Y θ √ 4

Question ID : 65497834565
Status : Answered
Chosen Option : 3

Q.8 Select the option that is related to the third term in the same way as the second term is related to the first term.

CAMEL : BBLFK :: WORDS : ?

Ans

- 1. XXSES
- 2. XNSCT
- 3. VVQRE
- 4. VPQER

Question ID : 65497834579
Status : Answered
Chosen Option : 4

Q.9 Select the number from among the given options that can replace the question mark (?) in the following series.

5, 5, 15, 75, ?, 4725

Ans

- 1. 325
- 2. 385
- 3. 150
- 4. 525

Question ID : 65497834564
Status : Answered
Chosen Option : 4

Q.10 Select the option in which the numbers are related in the same way as are the numbers of the following set.

5, 10, 100

Ans

- 1. 20, 40, 120
- 2. 16, 32, 320
- 3. 15, 30, 225
- 4. 12, 36, 160

Question ID : 65497834584
Status : Answered
Chosen Option : 2

Q.11 J and K are siblings. M is the maternal uncle of J. S is the maternal grandmother of K. A is the only daughter of S. How is A related to M?

- Ans
- 1. Brother
 - 2. Sister
 - 3. Sister-in-law
 - 4. Cousin

Question ID : **65497834581**
 Status : **Answered**
 Chosen Option : **2**

Q.12 Select the figure from among the given options that can replace the question mark (?) in the following series.

	%	?	% # @ # @ S
S @ #	#		& S %
S @			S & S Q

Ans

- 1.

&
S
S @ %
- 2.

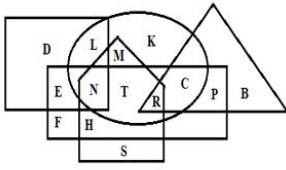
& % #
@
S
- 3.

&
%
@ # S
- 4.

& %
Q S @

Question ID : **65497834569**
 Status : **Answered**
 Chosen Option : **2**

Q.13 In the following figure, the circle represents 'paragraphs', the triangle represents 'black', the pentagon represents 'books', the square represents 'pages', and the rectangle represents 'blue'.



Select the letter that represents blue books that have pages and paragraphs.

- Ans
- 1. M
 - 2. N
 - 3. C
 - 4. R

Question ID : 65497834578
 Status : Answered
 Chosen Option : 2

Q.14 In a row, Manu is at the 14th position from the left and Sam is at the 9th position from the right. If they interchange their positions, then Sam becomes 12th from the right. Find the total number of persons present in the row.

- Ans
- 1. 30
 - 2. 28
 - 3. 20
 - 4. 25

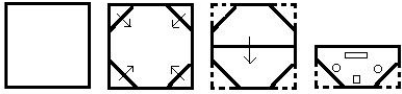
Question ID : 65497834572
 Status : Answered
 Chosen Option : 4

Q.15 In a certain code language, RINGS is written as IRNSG, and PURSE is written as UPRES. How will STORM be written in that language?

- Ans
- 1. TSOMR
 - 2. MROTS
 - 3. UTPNS
 - 4. ORMGH

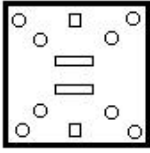
Question ID : 65497834582
 Status : Answered
 Chosen Option : 1

Q.16 The sequence of folding a piece of paper and the manner in which the folded paper has been cut is shown in the following figures. How would this paper look when unfolded?

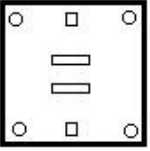


Ans

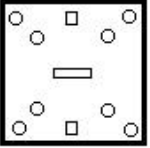
✓ 1.



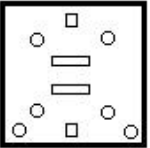
✗ 2.



✗ 3.



✗ 4.



Question ID : 65497834586
Status : Answered
Chosen Option : 1

Q.17 Select the letter-cluster from among the given options that can replace the question mark (?) in the following series.

FW, JS, ?, RK, VG

Ans ✗ 1. MO

✗ 2. MP

✓ 3. NO

✗ 4. NP

Question ID : 65497834570
Status : Answered
Chosen Option : 3

Q.18 Four letter-clusters have been given, out of which three are alike in some manner and one is different. Select the letter-cluster that is different.

Ans ✗ 1. QSUWY

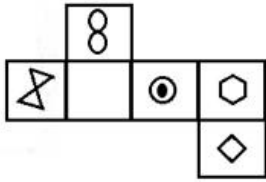
✓ 2. CEHJK

✗ 3. JLNPR

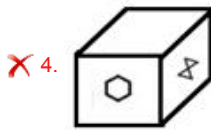
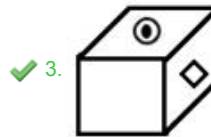
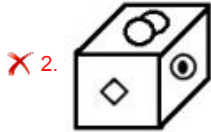
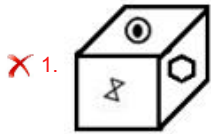
✗ 4. BDFHJ

Question ID : 65497834562
Status : Answered
Chosen Option : 2

Q.19 Select the box that can be formed by folding the given sheet along the lines.



Ans



Question ID : 65497834576

Status : Answered

Chosen Option : 3

Q.20 Seven persons, K, L, M, N, O, P and Q, are sitting in a row facing towards the north. K and M are sitting together. O is at the east-end. P is between Q and M. Q is sitting in the middle. N is between O and L. K is sitting at the west-end. Who is sitting at the fifth position from the east?

Ans ✗ 1. M

✗ 2. N

✗ 3. L

✓ 4. P

Question ID : 65497834573

Status : Answered

Chosen Option : 4

Q.21 Select the option that is related to the third number in the same way as the second number is related to the first number.

13 : 169 :: 21 : ?

Ans ✓ 1. 441

✗ 2. 361

✗ 3. 256

✗ 4. 400

Question ID : 65497834574

Status : Answered

Chosen Option : 1

Q.22 Select the option that is related to the third word in the same way as the second word is related to the first word.

Spinach : Leaves :: Carrot : ?

- Ans 1. Root
 2. Seed
 3. Stem
 4. Flower

Question ID : 65497834571
Status : Answered
Chosen Option : 1

Q.23 Three persons A, B and C start a business with a total amount of ₹2,60,000. The ratio of their investment in the total amount is 15 : 18 : 19, respectively. They earn a profit of 12% this year on the total investment. The profit is to be distributed in the same ratio of investment. How much profit will C earn?

- Ans 1. ₹12,200
 2. ₹13,200
 3. ₹11,400
 4. ₹10,800

Question ID : 65497834585
Status : Answered
Chosen Option : 3

Q.24 Select the correct option that indicates the arrangement of the given words in the order in which they appear in an English dictionary.

1. Possibility
2. Possession
3. Posthumous
4. Posterity
5. Possessive

- Ans 1. 2, 5, 1, 3, 4
 2. 2, 5, 1, 4, 3
 3. 2, 5, 3, 4, 1
 4. 3, 5, 1, 4, 2

Question ID : 65497834566
Status : Answered
Chosen Option : 2

Q.25 Read the given statement(s) and conclusions carefully. Assuming that the information given in the statements is true, even if it appears to be at variance with commonly known facts, decide which of the given conclusions logically follow(s) from the statement(s).

Statements:

Some Queens are kings.

All kings are officers.

No officer is architect.

Conclusions:

I. Some officers are queens.

II. No king is architect.

- Ans**
- 1. Either conclusion I or II follows.
 - 2. Both the conclusions follow.
 - 3. Only conclusion II follows.
 - 4. Only conclusion I follows.

Question ID : 65497834583

Status : Answered

Chosen Option : 1

Section : Part B General Knowledge and General Awareness

Q.1 Which of the following nations will host the Indian Ocean Island Games 2023?

- Ans**
- 1. Mauritius
 - 2. Seychelles
 - 3. Maldives
 - 4. Madagascar

Question ID : 65497834590

Status : Not Answered

Chosen Option : --

Q.2 Team India ranked _____ in World Test Championship standings after the International Cricket Council (ICC) released a new point system in November 2020.

- Ans**
- 1. second
 - 2. third
 - 3. fourth
 - 4. first

Question ID : 65497834609

Status : Answered

Chosen Option : 4

Q.3 The Cabinet Committee on Economic Affairs approved the increase in the Minimum Support Prices (MSPs) for all mandated Kharif crops for the marketing season 2021-22 in June 2021. The highest absolute increase in MSP over the previous year has been recommended for _____ at ₹452 per quintal.

- Ans**
- 1. sesame
 - 2. groundnut
 - 3. cotton
 - 4. maize

Question ID : 65497834610

Status : Not Answered

Chosen Option : --

Q.4 Which of the following dams is NOT built across the river Kaveri (Cauvery)?

- Ans 1. Maithon
 2. Mettur
 3. Kallanai
 4. Krishna Raja Sagara

Question ID : 65497834608
Status : Answered
Chosen Option : 4

Q.5 Who had handwritten the original Constitution of India?

- Ans 1. Nandalal Bose
 2. Dr Sachchidananda Sinha
 3. Beohar Rammanohar Sinha
 4. Prem Behari Narain Raizada

Question ID : 65497834606
Status : Answered
Chosen Option : 4

Q.6 Mount Siniolchu is located in which state of India?

- Ans 1. Himachal Pradesh
 2. Nagaland
 3. Andhra Pradesh
 4. Sikkim

Question ID : 65497834588
Status : Not Answered
Chosen Option : --

Q.7 Who among the following won the French Open tennis tournament in October 2020 and equalled Roger Federer's all-time record of winning 20 Grand Slams titles?

- Ans 1. Andy Murray
 2. Novak Djokovic
 3. Dominic Thiem
 4. Rafael Nadal

Question ID : 65497834591
Status : Answered
Chosen Option : 4

Q.8 Which of the following institutions organised an international webinar on Indian Knowledge Systems from 6 to 8 November 2020?

- Ans 1. IIT Delhi
 2. IIT Bombay
 3. IIT Kharagpur
 4. IIT Kanpur

Question ID : 65497834601
Status : Not Answered
Chosen Option : --

Q.9 As of November 2020, Asiatic Lions are protected in India under Schedule _____ of the Wildlife Protection Act (1972).

- Ans
- 1. III
 - 2. II
 - 3. IV
 - 4. I

Question ID : 65497834593
Status : Not Answered
Chosen Option : --

Q.10 Which of the following rivers is a tributary of Ghaghara River?

- Ans
- 1. Son River
 - 2. Gomti River
 - 3. Kosi River
 - 4. Sarayu River

Question ID : 65497834602
Status : Answered
Chosen Option : 3

Q.11 Which Indian author was shortlisted for International Dublin Literary Award 2020?

- Ans
- 1. Shashi Deshpande
 - 2. Anuradha Roy
 - 3. Chitra Banerjee Divakaruni
 - 4. Anita Nair

Question ID : 65497834589
Status : Not Answered
Chosen Option : --

Q.12 In which of the following states of India is the 'Black Hole' monument located?

- Ans
- 1. Odisha
 - 2. Telangana
 - 3. Gujarat
 - 4. West Bengal

Question ID : 65497834587
Status : Answered
Chosen Option : 4

Q.13 Which of the following folk dances belongs to the tribes of the Jharkhand state?

- Ans
- 1. Huttari dance
 - 2. Nati Dance
 - 3. Mundari dance
 - 4. Bhavai dance

Question ID : 65497834596
Status : Not Answered
Chosen Option : --

Q.14 The Fourth Schedule of the Constitution of India contains the subject matter related to:

- Ans
- 1. languages recognised by the Constitution
 - 2. forms of oath or affirmations
 - 3. power, authority and responsibilities of panchayats
 - 4. allocation of seats in the Rajya Sabha

Question ID : 65497834600
Status : Answered
Chosen Option : 4

Q.15 Who took over charge as the chairman of Telecom Regulatory Authority of India (TRAI) on 1 October 2020?

- Ans
- 1. PD Vaghela
 - 2. Pradip Bajjal
 - 3. Rahul Khullar
 - 4. RS Sharma

Question ID : 65497834607
Status : Answered
Chosen Option : 4

Q.16 Geneva is the headquarters of _____.

- Ans
- 1. WTO
 - 2. UNICEF
 - 3. IMF
 - 4. UNESCO

Question ID : 65497834592
Status : Answered
Chosen Option : 1

Q.17 Which of the following laws can be explained as 'An object remains in a state of rest or of uniform motion in a straight line unless compelled to change that state by an applied force.'?

- Ans
- 1. Second law of motion
 - 2. First law of motion
 - 3. Third law of motion
 - 4. First law of thermodynamics

Question ID : 65497834597
Status : Answered
Chosen Option : 2

Q.18 Which satellite-based system that was launched by the Indian National Centre for Ocean Information Services (INCOIS) and Airport Authority of India (AAI) in October 2019 will alert deep-sea fishermen of upcoming disasters?

- Ans
- 1. GPS
 - 2. GEMINI
 - 3. SBAS
 - 4. GNSS

Question ID : 65497834604
Status : Not Answered
Chosen Option : --

Q.19 Where will the Reserve Bank of India be setting up its first Automated Banknote Processing Centre for storage, receipt and dispatch of currency notes in 2020?

- Ans
- 1. Mumbai
 - 2. Ahmedabad
 - 3. Bengaluru
 - 4. Jaipur

Question ID : **65497834603**
Status : **Not Answered**
Chosen Option : --

Q.20 Which of the following is NOT one of the 16 Mahajanapadas?

- Ans
- 1. Kosala
 - 2. Anga
 - 3. Kuru
 - 4. Kamarupa

Question ID : **65497834594**
Status : **Answered**
Chosen Option : 4

Q.21 Who became the first Indian to be honoured with the 'Richard Dawkins Award 2020'?

- Ans
- 1. Anurag Kashyap
 - 2. Javed Akhtar
 - 3. Shahrukh Khan
 - 4. Aamir Khan

Question ID : **65497834599**
Status : **Answered**
Chosen Option : 1

Q.22 Ashvaghosha was a poet in the court of King _____

- Ans
- 1. Kanishka
 - 2. Chandragupta Maurya
 - 3. Harshavardhana
 - 4. Ashoka

Question ID : **65497834611**
Status : **Answered**
Chosen Option : 1

Q.23 Who started the Satnami movement in central India to improve the social status of leather workers?

- Ans
- 1. Shri Narayana
 - 2. Ghasidas
 - 3. Balakdas
 - 4. Haridas Thakur

Question ID : **65497834605**
Status : **Not Answered**
Chosen Option : --

Q.24 Which of the following is NOT an example of a viral disease?

- Ans
- 1. Roseola
 - 2. Plague
 - 3. Ebola
 - 4. AIDS

Question ID : 65497834598
Status : Answered
Chosen Option : 2

Q.25 In October 2020, _____ became the first 'Har Ghar Jal' state in the country by providing 100% functional household tap water connections to every rural household in the state.

- Ans
- 1. Bihar
 - 2. Goa
 - 3. Punjab
 - 4. Andhra Pradesh

Question ID : 65497834595
Status : Answered
Chosen Option : 2

Section : Part C Elementary Mathematics

Q.1 A circle and a rectangle have the same perimeter. If the sides of the rectangle are 15 cm and 7 cm, then the area of circle is:

- Ans
- 1. 145 cm²
 - 2. 144 cm²
 - 3. 154 cm²
 - 4. 156 cm²

Question ID : 65497834618
Status : Answered
Chosen Option : 3

Q.2 In an election between two candidates, 8% of the votes were invalid. The winning candidate got 60% of the total valid votes and won the election by 5888 votes. How many voters were registered?

- Ans
- 1. 29500
 - 2. 33260
 - 3. 30000
 - 4. 32000

Question ID : 65497834635
Status : Answered
Chosen Option : 4

Q.3 What is the largest 4-digit number that is divisible by 10, 15 and 18?

- Ans
- 1. 9900
 - 2. 9090
 - 3. 9990
 - 4. 9999

Question ID : 65497834634
Status : Answered
Chosen Option : 3

Q.4 An AC can cool a hall in 10 min, while an AC of another brand can cool the same hall in 15 min. If both the ACs are switched on at the same time, then in how much time will they cool the hall?

- Ans
- 1. 3 min
 - 2. 18 min
 - 3. 6 min
 - 4. 12 min

Question ID : 65497834633
Status : Answered
Chosen Option : 3

Q.5 The letter B in the BODMAS rule stands for:

- Ans
- 1. Bracket
 - 2. By
 - 3. Binomial
 - 4. Before

Question ID : 65497834631
Status : Answered
Chosen Option : 1

Q.6 The sum of three positive numbers is 339. If the ratio of the first number to the second number is 3 : 7, and that of the second number to the third number is 5 : 9, then the second number is:

- Ans
- 1. 105
 - 2. 115
 - 3. 125
 - 4. 95

Question ID : 65497834617
Status : Answered
Chosen Option : 1

Q.7 A batsman in his 18th innings makes a score of 80 and thereby increasing his average by 4. What is his average after the 18th innings?

- Ans**
- 1. 12
 - 2. 14
 - 3. 10
 - 4. 8

Question ID : 65497834620
Status : Answered
Chosen Option : 1

Q.8 An amount is distributed among 4 friends X, Y, Z, W in the ratio 5 : 2 : 4 : 3, respectively. If Z gets ₹1,000 more than W, then what is Y's share?

- Ans**
- 1. ₹1,000
 - 2. ₹2,000
 - 3. ₹4,000
 - 4. ₹3,000

Question ID : 65497834628
Status : Answered
Chosen Option : 2

Q.9 Simran gets a discount of 20% on an oven whose price is ₹3,200. Since she pays cash, she gets an additional 5% discount too. How much does she pay?

- Ans**
- 1. ₹2,402
 - 2. ₹2,432
 - 3. ₹2,500
 - 4. ₹2,439

Question ID : 65497834622
Status : Answered
Chosen Option : 2

Q.10 If the Selling Price of a toy is $\frac{4}{3}$ of its Cost Price, then the profit percentage is:

- Ans**
- 1. $\frac{1}{3}$ %
 - 2. $\frac{61}{3}$ %
 - 3. $\frac{100}{3}$ %
 - 4. $\frac{41}{3}$ %

Question ID : 65497834632
Status : Answered
Chosen Option : 3

Q.11

The expression $\frac{5 - \left[\frac{3}{4} + \left\{ 2\frac{1}{2} - \left(\frac{1}{2} + \frac{1}{6} - \frac{1}{7} \right) \right\} \right]}{6}$ equals:

- Ans
- 1. $\frac{13}{56}$
 - 2. $\frac{97}{168}$
 - 3. $\frac{191}{504}$
 - 4. $\frac{19}{54}$

Question ID : 65497834615
 Status : Answered
 Chosen Option : 3

Q.12 A sum of money is to be distributed among A, B, C, D in the ratio of 5 : 2 : 4 : 3. If A gets ₹1,000 more than D, then what is B's share?

- Ans
- 1. ₹1,200
 - 2. ₹1,000
 - 3. ₹500
 - 4. ₹1,600

Question ID : 65497834624
 Status : Answered
 Chosen Option : 2

Q.13 If V and S denote the volume and Total Surface Area of a cuboid (of sides a, b, c), respectively, then which of the following is true?

- Ans
- 1. $(1/V) = (2/S) (a + b + c)$
 - 2. $(1/V) = (S) (1/a + 1/b + 1/c)$
 - 3. $(1/V) = (2/S) (1/a + 1/b + 1/c)$
 - 4. $V = (2/S) (1/a + 1/b + 1/c)$

Question ID : 65497834630
 Status : Answered
 Chosen Option : 3

Q.14 A man walked at a speed of 9 km/h from point A to B and came back from point B to A at a speed of 15 km/h. The ratio of the time taken by the man in walking from B to A to that from A to B was:

- Ans
- 1. 7 : 2
 - 2. 5 : 3
 - 3. 3 : 5
 - 4. 2 : 7

Question ID : 65497834616
 Status : Answered
 Chosen Option : 2

Q.15 A trader lists his articles 26% above the cost price and allows a discount of 15% on every article. What is his gain percentage?

- Ans**
- 1. 20.5
 - 2. 26
 - 3. 7.1
 - 4. 11

Question ID : 65497834612
Status : Answered
Chosen Option : 3

Q.16 Yusuf purchased an item for ₹5,500 and sold it at a profit of 15%. From that amount, he purchased another item and sold it at 12% profit. What is his overall gain?

- Ans**
- 1. ₹825
 - 2. ₹1,485
 - 3. ₹859
 - 4. ₹1,584

Question ID : 65497834613
Status : Answered
Chosen Option : 4

Q.17 Two boys start from the same place walking at the speeds of 5.5 km/h and 3.5 km/h, respectively, in the same direction. What time will they take to be 8.8 km apart?

- Ans**
- 1. 4.4 h
 - 2. 4 h
 - 3. 4.2 h
 - 4. 4.8 h

Question ID : 65497834627
Status : Answered
Chosen Option : 1

Q.18 A can finish as much work in 6 days as C can in 8 days. B can finish as much work in 6 days as C can in 4 days. How much time will B require to finish a work if A takes 54 days to finish it?

- Ans**
- 1. 118 days
 - 2. 128 days
 - 3. 100 days
 - 4. 108 days

Question ID : 65497834626
Status : Answered
Chosen Option : 4

Q.19 A fruit seller had some oranges. He sold 30% oranges and still had 210 oranges. The number of oranges he had, initially, was:

- Ans**
- 1. 300
 - 2. 200
 - 3. 150
 - 4. 350

Question ID : **65497834623**
Status : **Answered**
Chosen Option : **1**

Q.20 The difference between the compound interest and the simple interest on a certain sum at 10% per annum for 2 years is ₹1,200. Find the sum.

- Ans**
- 1. ₹1,20,000
 - 2. ₹2,70,000
 - 3. ₹2,00,000
 - 4. ₹1,50,000

Question ID : **65497834629**
Status : **Answered**
Chosen Option : **1**

Q.21 The average weight of X and Y is 40 kg. The average weight of Y and R is 62 kg and the average weight of X and R is 56 kg. The weight of X is:

- Ans**
- 1. 34 kg
 - 2. 30 kg
 - 3. 44 kg
 - 4. 32 kg

Question ID : **65497834621**
Status : **Answered**
Chosen Option : **1**

Q.22 What is the smallest number which when increased by 17 becomes exactly divisible by both 520 and 936?

- Ans**
- 1. 4663
 - 2. 6643
 - 3. 4643
 - 4. 4366

Question ID : **65497834619**
Status : **Answered**
Chosen Option : **1**

Q.23 A man buys milk at ₹50 per litre and adds to it water equal to one-third of the milk. If he sells it at ₹60 per litre, then find his profit percentage.

- Ans
- 1. 40%
 - 2. 30%
 - 3. 20%
 - 4. 60%

Question ID : 65497834636
Status : Answered
Chosen Option : 4

Q.24 Anil took some loan on simple interest at a certain rate and paid ₹12,800 as interest after 2 years. His friend Sumit also borrowed the same sum on compound interest for the same period and same rate of interest compounded annually and paid ₹704 more interest than that paid by Anil. What is the rate of interest per annum?

- Ans
- 1. 10%
 - 2. 11%
 - 3. 10.5%
 - 4. 12%

Question ID : 65497834614
Status : Answered
Chosen Option : 2

Q.25 At what rate of simple interest will a sum of ₹4,500 amount to ₹5,310 after 4 years?

- Ans
- 1. 4.5%
 - 2. 4.0%
 - 3. 3.5%
 - 4. 5.5%

Question ID : 65497834625
Status : Answered
Chosen Option : 1

Section : Part D English

Q.1 Select the most appropriate synonym of the given word.

Alter

- Ans
- 1. Transform
 - 2. Retain
 - 3. Preserve
 - 4. Beautify

Question ID : 65497834653
Status : Answered
Chosen Option : 1

Q.2 Select the most appropriate synonym of the given word.

Adversity

- Ans**
- 1. Fortune
 - 2. Privilege
 - 3. Emergency
 - 4. Misfortune

Question ID : 65497834649
Status : Answered
Chosen Option : 4

Q.3 Select the option that can be used as a one-word substitute for the given group of words.

Make a machine active or operative

- Ans**
- 1. Enthuse
 - 2. Activate
 - 3. Energise
 - 4. Initiate

Question ID : 65497834654
Status : Answered
Chosen Option : 3

Q.4 The following sentence has been split into four segments. Identify the segment that contains a grammatical error.

When Nancy saw the mess / the burglar was made, / she broke down / in tears.

- Ans**
- 1. she broke down
 - 2. in tears
 - 3. the burglar was made
 - 4. When Nancy saw the mess

Question ID : 65497834652
Status : Answered
Chosen Option : 3

Q.5 Select the INCORRECTLY spelt word.

- Ans**
- 1. Fluttering
 - 2. Menace
 - 3. Abbrevations
 - 4. Notoriety

Question ID : 65497834644
Status : Answered
Chosen Option : 3

Q.6 The following sentence has been split into four segments. Identify the segment that contains a grammatical error.

It was cold / and / we still / went swimming.

- Ans 1. and
 2. went swimming
 3. It was cold
 4. we still

Question ID : 65497834648
Status : Answered
Chosen Option : 2

Q.7 Select the option that can be used as a one-word substitute for the given group of words.

First show of a film or theatre

- Ans 1. Debris
 2. Easel
 3. Charade
 4. Premiere

Question ID : 65497834643
Status : Answered
Chosen Option : 4

Q.8 Select the most appropriate option to fill in the blank.

Suddenly, she jumped up and _____ his arm.

- Ans 1. captured
 2. grabbed
 3. snatched
 4. occupied

Question ID : 65497834637
Status : Answered
Chosen Option : 3

Q.9 Select the most appropriate meaning of the given idiom.

To get wind of

- Ans 1. To gain something unfairly
 2. To enjoy a nice weather
 3. To be clear about something
 4. To learn something secret

Question ID : 65497834638
Status : Answered
Chosen Option : 4

Q.10 Select the option that can be used as a one-word substitute for the given group of words.

Matter which is against moral values

- Ans 1. Mortal
 2. Immoral
 3. Immortal
 4. Amorous

Question ID : 65497834642
Status : Answered
Chosen Option : 2

Q.11 Select the most appropriate ANTONYM of the given word.

Deny

- Ans 1. Deflate
 2. Mourn
 3. Agree
 4. Exhaust

Question ID : 65497834641
Status : Answered
Chosen Option : 3

Q.12 Select the most appropriate option that can substitute the underlined segment in the given sentence. If there is no need to substitute it, select 'No substitution required'.

People in North India doesn't know much about South Indian culture.

- Ans 1. doesn't knows
 2. are not knowing
 3. No substitution required
 4. don't know

Question ID : 65497834650
Status : Answered
Chosen Option : 4

Q.13 Select the most appropriate option to fill in the blank.

The little girl walked slowly _____ her burden.

- Ans 1. bearing
 2. storing
 3. holding
 4. loading

Question ID : 65497834656
Status : Answered
Chosen Option : 1

Q.14 Select the most appropriate option that can substitute the underlined word in the given sentence.

In this modern world, everyone is associated in making easy money.

- Ans
- 1. accounted
 - 2. disassociated
 - 3. bothered
 - 4. interested

Question ID : 65497834640
Status : Answered
Chosen Option : 4

Q.15 Select the most appropriate meaning of the given idiom.

Get out of hand

- Ans
- 1. Lose control
 - 2. Slow down
 - 3. Calm down
 - 4. Work hard

Question ID : 65497834655
Status : Answered
Chosen Option : 1

Q.16 Select the most appropriate option that can substitute the underlined segment in the given sentence. If there is no need to substitute it, select 'No substitution required'.

When news of the concert leaks out, there will be a rush for the ticket.

- Ans
- 1. a rush for a ticket
 - 2. a rush for tickets
 - 3. No substitution required
 - 4. the rush for the tickets

Question ID : 65497834651
Status : Answered
Chosen Option : 2

Q.17 Select the most appropriate option to fill in the blank.

I was _____ by the sound of the doorbell.

- Ans
- 1. awakened
 - 2. enhanced
 - 3. enabled
 - 4. activated

Question ID : 65497834647
Status : Answered
Chosen Option : 1

Q.18 Select the **INCORRECTLY** spelt word.

- Ans 1. Beverage
 2. Cuisine
 3. Mundane
 4. Celastiel

Question ID : 65497834646
Status : Answered
Chosen Option : 4

Q.19 Select the most appropriate **ANTONYM** of the given word.

Advance

- Ans 1. Assemble
 2. Progress
 3. Approach
 4. Retreat

Question ID : 65497834645
Status : Answered
Chosen Option : 4

Q.20 The following sentence has been split into four segments. Identify the segment that contains a grammatical error.

Mona is from Paris. / She has live / there all / her life.

- Ans 1. she has live
 2. there all
 3. Mona is from Paris
 4. her life

Question ID : 65497834639
Status : Answered
Chosen Option : 1

Comprehension:

In the following passage, some words have been deleted. Read the passage carefully and select the most appropriate option to fill in each blank.

Naval architects never claim that a ship is unsinkable, but sinking of the passenger-and-car ferry Estonia in the Baltic surely should never (1)_____. It was well designed and carefully (2)_____. It carried the proper number of lifeboats. It had been (3)_____ inspected the day of its fatal voyage. Yet hours (4)_____, the Estonia rolled over and sank in a cold, stormy night. It went down (5)_____ quickly that most of those on board, caught in their dark, flooding cabins, had no chance to save themselves.

SubQuestion No : 21

Q.21 Select the most appropriate option to fill in blank no. 1.

- Ans 1. has happened
 2. had happened
 3. happened
 4. have happened

Question ID : 65497834658
Status : Answered
Chosen Option : 4

Comprehension:

In the following passage, some words have been deleted. Read the passage carefully and select the most appropriate option to fill in each blank.

Naval architects never claim that a ship is unsinkable, but sinking of the passenger-and-car ferry Estonia in the Baltic surely should never (1)_____. It was well designed and carefully (2)_____. It carried the proper number of lifeboats. It had been (3)_____ inspected the day of its fatal voyage. Yet hours (4)_____, the Estonia rolled over and sank in a cold, stormy night. It went down (5)_____ quickly that most of those on board, caught in their dark, flooding cabins, had no chance to save themselves.

SubQuestion No : 22

Q.22 Select the most appropriate option to fill in blank no. 2.

- Ans
- 1. maintain
 - 2. to be maintained
 - 3. maintaining
 - 4. maintained

Question ID : 65497834659
Status : Answered
Chosen Option : 4

Comprehension:

In the following passage, some words have been deleted. Read the passage carefully and select the most appropriate option to fill in each blank.

Naval architects never claim that a ship is unsinkable, but sinking of the passenger-and-car ferry Estonia in the Baltic surely should never (1)_____. It was well designed and carefully (2)_____. It carried the proper number of lifeboats. It had been (3)_____ inspected the day of its fatal voyage. Yet hours (4)_____, the Estonia rolled over and sank in a cold, stormy night. It went down (5)_____ quickly that most of those on board, caught in their dark, flooding cabins, had no chance to save themselves.

SubQuestion No : 23

Q.23 Select the most appropriate option to fill in blank no. 3.

- Ans
- 1. steadily
 - 2. thoroughly
 - 3. gradually
 - 4. immediately

Question ID : 65497834660
Status : Answered
Chosen Option : 2

Comprehension:

In the following passage, some words have been deleted. Read the passage carefully and select the most appropriate option to fill in each blank.

Naval architects never claim that a ship is unsinkable, but sinking of the passenger-and-car ferry Estonia in the Baltic surely should never (1)_____. It was well designed and carefully (2)_____. It carried the proper number of lifeboats. It had been (3)_____ inspected the day of its fatal voyage. Yet hours (4)_____, the Estonia rolled over and sank in a cold, stormy night. It went down (5)_____ quickly that most of those on board, caught in their dark, flooding cabins, had no chance to save themselves.

SubQuestion No : 24

Q.24 Select the most appropriate option to fill in blank no. 4.

- Ans
- 1. before
 - 2. latter
 - 3. earlier
 - 4. later

Question ID : 65497834661
Status : Answered
Chosen Option : 4

Comprehension:

In the following passage, some words have been deleted. Read the passage carefully and select the most appropriate option to fill in each blank.

Naval architects never claim that a ship is unsinkable, but sinking of the passenger-and-car ferry Estonia in the Baltic surely should never (1)_____. It was well designed and carefully (2)_____. It carried the proper number of lifeboats. It had been (3)_____ inspected the day of its fatal voyage. Yet hours (4)_____, the Estonia rolled over and sank in a cold, stormy night. It went down (5)_____ quickly that most of those on board, caught in their dark, flooding cabins, had no chance to save themselves.

SubQuestion No : 25

Q.25 Select the most appropriate option to fill in blank no. 5.

- Ans 1. so
 2. such
 3. as
 4. very

Question ID : 65497834662
Status : Answered
Chosen Option : 1

Section : Part D Hindi

Q.1 कौन सा शब्द 'केसर' का समानार्थी शब्द नहीं है?

- Ans 1. कदली
 2. कुमकुम
 3. जाफरान
 4. कश्मीरज

Question ID : 65497834666
Status : Not Answered
Chosen Option : --

Q.2 'अम्बु' किसका पर्यायवाची है?

- Ans 1. कमल
 2. बादल
 3. जल
 4. समुद्र

Question ID : 65497834682
Status : Not Answered
Chosen Option : --

Q.3 दिए गए वाक्य में रेखांकित अंश को प्रतिस्थापित करने के लिए सर्वाधिक उपयुक्त विकल्प का चयन करें।

लोग बड़ी मात्रा में जमा हो गए।

- Ans 1. संख्या
 2. जनसंख्या
 3. ढेर
 4. भीड़

Question ID : 65497834678
Status : Not Answered
Chosen Option : --

Q.4 दिए गए वाक्य में रेखांकित खंड को प्रतिस्थापित करने के लिए सर्वाधिक उपयुक्त विकल्प का चयन करें। यदि इसे प्रतिस्थापित करने की आवश्यकता नहीं है, तो विकल्प 'किसी बदलाव की आवश्यकता नहीं है' का चयन करें।

बजट के ऊपर बहस होगी।

- Ans
- 1. से ऊपर बहस होगी।
 - 2. किसी बदलाव की आवश्यकता नहीं है।
 - 3. पर बहस होगी।
 - 4. की बहस होगी।

Question ID : 65497834663
Status : Not Answered
Chosen Option : --

Q.5 दिए गए शब्द का विलोम चुनें।

आहत

- Ans
- 1. विक्षत
 - 2. क्षत
 - 3. अनाहत
 - 4. हत

Question ID : 65497834676
Status : Not Answered
Chosen Option : --

Q.6 दिए गए विकल्पों में से निम्नलिखित शब्द के विलोम शब्द का चयन करें:

उल्लास

- Ans
- 1. प्रसन्नचित
 - 2. उमंग
 - 3. वैमनस्य
 - 4. विषाद

Question ID : 65497834667
Status : Not Answered
Chosen Option : --

Q.7 रिक्त स्थान भरने के लिए सर्वाधिक उपयुक्त शब्द का चयन करें।

वहां की जलवायु मेरे _____ नहीं थी।

- Ans
- 1. अनुमानित
 - 2. अनुसार
 - 3. अनुकूल
 - 4. अनुरूप

Question ID : 65497834669
Status : Not Answered
Chosen Option : --

Q.8 निम्नलिखित चार विकल्पों में से उस विकल्प का चयन करें, जो दिए गए मुहावरे के सही अर्थ को व्यक्त करता है।

आंख का काजल

- Ans 1. अत्यंत प्रिय
 2. दर्द देने वाला
 3. गहरा रंग
 4. सुंदर

Question ID : 65497834668
Status : Not Answered
Chosen Option : --

Q.9 दिए गए वाक्यांश के लिए एक शब्द दीजिए।

इन्द्रियों से परे

- Ans 1. इंद्रदेव
 2. अतीन्द्रिय
 3. इन्द्रजीत
 4. ऐन्द्रिक

Question ID : 65497834677
Status : Not Answered
Chosen Option : --

Q.10 'नींद उड़ जाना' इस मुहावरे का उचित अर्थ कौन सा है?

- Ans 1. नींद जाती रहना
 2. नींद उचाट करना
 3. अत्यंत शयन करना
 4. जरा भी नींद न आना

Question ID : 65497834664
Status : Not Answered
Chosen Option : --

Q.11 दिए गए वाक्यांश के लिए एक शब्द दीजिए।

जिसकी उपमा न हो

- Ans 1. उपमान
 2. उपमाहीन
 3. अनुपम
 4. उपमेय

Question ID : 65497834673
Status : Not Answered
Chosen Option : --

Q.12 दिए गए वाक्य का वह भाग ज्ञात करें जिसमें कोई त्रुटि है। यदि कोई त्रुटि नहीं है, तो 'कोई त्रुटि नहीं है' चुनें।

स्वतंत्रता के साथ (1)/ देश की निर्धनता का (2)/ अंत हो जाएगा। (3)/ कोई त्रुटि नहीं है (4)

Ans 1. 1

2. 2

3. 3

4. 4

Question ID : 65497834665
Status : Not Answered
Chosen Option : --

Q.13 सही बर्तनी वाले शब्द का चयन करें।

Ans 1. लिजीये

2. लीजिए

3. लिजिये

4. लीजीए

Question ID : 65497834672
Status : Not Answered
Chosen Option : --

Q.14 'जो कहा न जा सके' वाक्यांश के लिए एक शब्द दीजिए।

Ans 1. कथित

2. अकथित

3. अकथनीय

4. अपठनीय

Question ID : 65497834679
Status : Not Answered
Chosen Option : --

Q.15 दिए गए वाक्य के किस भाग में त्रुटि है?

वस्तुओं की कीमतें बढ़ रही हैं।

Ans 1. बढ़

2. की कीमत

3. वस्तुओं

4. रही हैं।

Question ID : 65497834681
Status : Not Answered
Chosen Option : --

Q.16 सही बर्तनी वाले शब्द का चयन करें।

Ans 1. विनति

2. विनती

3. वीनती

4. वीनति

Question ID : 65497834671
Status : Not Answered
Chosen Option : --

Q.17 दिए गए वाक्य का वह भाग ज्ञात करें जिसमें कोई त्रुटि है। यदि कोई त्रुटि नहीं है, तो 'कोई त्रुटि नहीं है' चुनें।

तमाम देश भर (1)/ में जल्दी ही (2)/ बात फैल गई (3)/ कोई त्रुटि नहीं है (4)

- Ans
- 1. 4
 - 2. 2
 - 3. 3
 - 4. 1

Question ID : 65497834675
Status : Not Answered
Chosen Option : --

Q.18 रिक्त स्थान की पूर्ति करने के लिए सर्वाधिक उपयुक्त शब्द का चयन करें।

मैं केवल _____ चाहती हूँ।

- Ans
- 1. इतना ही
 - 2. इतना भर
 - 3. इतना तक
 - 4. इतना

Question ID : 65497834674
Status : Not Answered
Chosen Option : --

Q.19 दिए गए वाक्य में रेखांकित खंड को प्रतिस्थापित करने के लिए सर्वाधिक उपयुक्त विकल्प का चयन करें। यदि इसे प्रतिस्थापित करने की आवश्यकता नहीं है, तो विकल्प 'किसी बदलाव की आवश्यकता नहीं है' का चयन करें।

पढ़ने के बहाने से शिल्पा इधर आती है।

- Ans
- 1. के बहाने
 - 2. के बहाना से
 - 3. के बहाने म
 - 4. किसी बदलाव की आवश्यकता नहीं है।

Question ID : 65497834670
Status : Not Answered
Chosen Option : --

Q.20 रिक्त स्थान की पूर्ति करने के लिए सर्वाधिक उपयुक्त विकल्प का चयन करें।

अध्यापक को अध्यापन कार्य में _____ होना चाहिए।

- Ans
- 1. प्रवीण
 - 2. दक्ष
 - 3. परमवीर
 - 4. निपुण

Question ID : 65497834680
Status : Not Answered
Chosen Option : --

Comprehension:

दिए गए गद्यांश में कुछ शब्द हटा दिए गए हैं। दिए गए विकल्पों की सहायता से रिक्त स्थानों की पूर्ति करें। प्रत्येक संख्या के लिए सर्वाधिक उपयुक्त विकल्प का चयन करें।

लिपि का (1) _____ रूप चित्रलिपि रहा है। (2) _____ में मानव ने (3) _____ की दीवारों पर तथा अन्य वस्तुओं पर जो (4) _____ चित्र बनाये, उन चित्रों से ही (5) _____ प्रारंभ हुई।

SubQuestion No : 21

Q.21 गद्यांश के रिक्त स्थान (1) के लिए सर्वाधिक उपयुक्त शब्द होगा-

- Ans
- 1. सर्वोच्च
 - 2. प्रारम्भिक
 - 3. उत्तम
 - 4. उत्कृष्ट

Question ID : **65497834684**
Status : **Not Answered**
Chosen Option : --

Comprehension:

दिए गए गद्यांश में कुछ शब्द हटा दिए गए हैं। दिए गए विकल्पों की सहायता से रिक्त स्थानों की पूर्ति करें। प्रत्येक संख्या के लिए सर्वाधिक उपयुक्त विकल्प का चयन करें।

लिपि का (1) _____ रूप चित्रलिपि रहा है। (2) _____ में मानव ने (3) _____ की दीवारों पर तथा अन्य वस्तुओं पर जो (4) _____ चित्र बनाये, उन चित्रों से ही (5) _____ प्रारंभ हुई।

SubQuestion No : 22

Q.22 गद्यांश के रिक्त स्थान (2) के लिए सर्वाधिक उपयुक्त शब्द होगा-

- Ans
- 1. मध्यकाल
 - 2. आधुनिककाल
 - 3. वर्तमानकाल
 - 4. प्राचीनकाल

Question ID : **65497834685**
Status : **Not Answered**
Chosen Option : --

Comprehension:

दिए गए गद्यांश में कुछ शब्द हटा दिए गए हैं। दिए गए विकल्पों की सहायता से रिक्त स्थानों की पूर्ति करें। प्रत्येक संख्या के लिए सर्वाधिक उपयुक्त विकल्प का चयन करें।

लिपि का (1) _____ रूप चित्रलिपि रहा है। (2) _____ में मानव ने (3) _____ की दीवारों पर तथा अन्य वस्तुओं पर जो (4) _____ चित्र बनाये, उन चित्रों से ही (5) _____ प्रारंभ हुई।

SubQuestion No : 23

Q.23 गद्यांश के रिक्त स्थान (3) के लिए सर्वाधिक उपयुक्त शब्द होगा-

- Ans
- 1. गुफाओं
 - 2. जंगलों
 - 3. पहाड़ों
 - 4. वृक्षों

Question ID : **65497834686**
Status : **Not Answered**
Chosen Option : --

Comprehension:

दिए गए गद्यांश में कुछ शब्द हटा दिए गए हैं। दिए गए विकल्पों की सहायता से रिक्त स्थानों की पूर्ति करें। प्रत्येक संख्या के लिए सर्वाधिक उपयुक्त विकल्प का चयन करें।

लिपि का (1) _____ रूप चित्रलिपि रहा है। (2) _____ में मानव ने (3) _____ की दीवारों पर तथा अन्य वस्तुओं पर जो (4) _____ चित्र बनाये, उन चित्रों से ही (5) _____ प्रारंभ हुई।

SubQuestion No : 24

Q.24 गद्यांश के रिक्त स्थान (4) के लिए सर्वाधिक उपयुक्त शब्द होगा-

- Ans**
- 1. टेढ़े-मेढ़े
 - 2. उल्टे-सीधे
 - 3. ऊबड़-खाबड़
 - 4. हल्के-फुल्के

Question ID : **65497834687**
Status : **Not Answered**
Chosen Option : --

Comprehension:

दिए गए गद्यांश में कुछ शब्द हटा दिए गए हैं। दिए गए विकल्पों की सहायता से रिक्त स्थानों की पूर्ति करें। प्रत्येक संख्या के लिए सर्वाधिक उपयुक्त विकल्प का चयन करें।

लिपि का (1) _____ रूप चित्रलिपि रहा है। (2) _____ में मानव ने (3) _____ की दीवारों पर तथा अन्य वस्तुओं पर जो (4) _____ चित्र बनाये, उन चित्रों से ही (5) _____ प्रारंभ हुई।

SubQuestion No : 25

Q.25 गद्यांश के रिक्त स्थान (5) के लिए सर्वाधिक उपयुक्त शब्द होगा-

- Ans**
- 1. चित्र
 - 2. वाक
 - 3. लिपि
 - 4. भाषा

Question ID : **65497834688**
Status : **Not Answered**
Chosen Option : --