

Exam Date	22/11/2021
Exam Time :	4:00 PM - 5:30 PM
Subject	Constable GD 2021

Section : Part A General Intelligence and Reasoning

Q.1 In a certain code language, VOLLEY is written as WpMMfZ, and DON is written as EpO.
How will DENSITY be written in that language?

- Ans
- 1. EFotJUy
 - 2. EEoTjUz
 - 3. FfOtJuZ
 - 4. EfOTjUZ

Question ID : 65497831664
Status : Answered
Chosen Option : 4

Q.2 Select the letter-cluster from among the given options that can replace the question mark (?) in the following series.

NKI, PMK, ROM, ?

- Ans
- 1. TRP
 - 2. TOM
 - 3. SPN
 - 4. TQO

Question ID : 65497831641
Status : Answered
Chosen Option : 4

Q.3 Which two numbers (NOT digits) need to be interchanged to make the following equation correct?

$$3 \times 45 \div 5 + 7 - 12 = 70$$

- Ans
- 1. 3 and 5
 - 2. 5 and 12
 - 3. 5 and 7
 - 4. 3 and 7

Question ID : 65497831647
Status : Answered
Chosen Option : 1

Q.4 Select the option that is related to the third term in the same way as the second term is related to the first term.

TANGY : GZMTB :: PRIEST : ?

- Ans
- 1. LIRVJG
 - 2. KIRVHG
 - 3. KJSVHG
 - 4. KIRUHF

Question ID : 65497831663
Status : Answered
Chosen Option : 2

Q.5 Select the option in which the given figure is embedded (rotation is NOT allowed).



Ans

- 1.
- 2.
- 3.
- 4.

Question ID : 65497831649
Status : Answered
Chosen Option : 1

Q.6 In a certain code language, KING is coded as 1012810131568. How will ROSE be coded in that language?

- Ans
- 1. 17191614201864
 - 2. 19171614192035
 - 3. 17181416192056
 - 4. 17191416182046

Question ID : 65497831655
Status : Answered
Chosen Option : 4

Q.7 Select the correct option that indicates the arrangement of the given words in the order in which they appear in an English dictionary.

1. Power
2. Piece
3. Peace
4. Poem
5. Palm

- Ans
- 1. 5, 4, 3, 2, 1
 - 2. 2, 3, 1, 5, 4
 - 3. 1, 2, 3, 4, 5
 - 4. 5, 3, 2, 4, 1

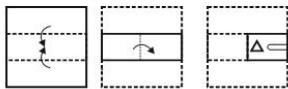
Question ID : 65497831650
 Status : Answered
 Chosen Option : 4

Q.8 'Honey' is related to 'Bees' in the same way as 'Sugar' is related to '_____'.
 Ans

- 1. Cake
- 2. Sugarcane
- 3. Juicer
- 4. Sweet

Question ID : 65497831642
 Status : Answered
 Chosen Option : 2

Q.9 The sequence of folding a piece of paper and the manner in which the folded paper has been cut is shown in the following figures. How would this paper look when unfolded?



Ans

- 1.
- 2.
- 3.
- 4.

Question ID : 65497831662
 Status : Answered
 Chosen Option : 1

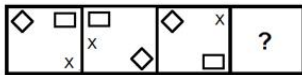
Q.10 Select the number from among the given options that can replace the question mark (?) in the following series.

6, 8, 20, 50, 106, ?

- Ans
- 1. 212
 - 2. 280
 - 3. 196
 - 4. 218

Question ID : 65497831656
 Status : Answered
 Chosen Option : 3

Q.11 Select the figure from among the given options that can replace the question mark (?) in the following series.



Ans

- 1.
- 2.
- 3.
- 4.

Question ID : 65497831653
 Status : Answered
 Chosen Option : 4

Q.12 At the end of a conference, all the 30 people present shake hands with each other once. How many handshakes will there be altogether?

- Ans
- 1. 60
 - 2. 450
 - 3. 435
 - 4. 300

Question ID : 65497831661
 Status : Answered
 Chosen Option : 2

Q.13 A, B, C और D नाम के चार मित्र एक रेस्तरा में एक वर्गाकार मेज के चारों ओर बैठे हुए हैं। यदि B, A के ठीक सामने और D के विकर्णतः सामने बैठा हुआ है, तो C के सामने कौन बैठा है?

- Ans
- 1. D
 - 2. A
 - 3. कोई नहीं
 - 4. B

Question ID : 65497831643
 Status : Answered
 Chosen Option : 1

Q.14 Select the correct mirror image of the given figure when the mirror is placed to the right side of the figure.

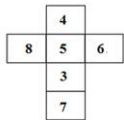


Ans

- 1.
- 2.
- 3.
- 4.

Question ID : 65497831657
 Status : Answered
 Chosen Option : 1

Q.15 A cube is made by folding the given sheet. In the cube so formed, which number will be on the face opposite to the face having the number '7'?



- Ans
- 1. 4
 - 2. 5
 - 3. 6
 - 4. 8

Question ID : 65497831648
 Status : Answered
 Chosen Option : 1

Q.16 Study the given pattern carefully and select the number that can replace the question mark (?) in it.

10 13 17
12 11 ?
160 185 235

- Ans 1. 15
 2. 13
 3. 10
 4. 17

Question ID : 65497831660
Status : Answered
Chosen Option : 2

Q.17 Four letter-clusters have been given, out of which three are alike in some manner and one is different. Select the letter-cluster that is different.

- Ans 1. ZTG
 2. IDE
 3. RDN
 4. USB

Question ID : 65497831654
Status : Answered
Chosen Option : 1

Q.18 Identify the number that does NOT belong to the following series.

18, 27, 35, 45, 54

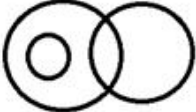



- Ans 1. 18
 2. 45
 3. 54
 4. 35

Question ID : 65497831652
Status : Answered
Chosen Option : 4

Q.19 Select the Venn diagram that best represents the relationship between the following classes.

Police, Males, Husbands

Ans

1. 
2. 
3. 
4. 

Question ID : 65497831644
Status : Answered
Chosen Option : 3

Q.20 If Samaira is the daughter of my father's mother's only son, how is Samaira related to me?

- Ans 1. Mother
 2. Sister
 3. Niece
 4. Daughter

Question ID : 65497831665
Status : Answered
Chosen Option : 2

Q.21 Read the given statements and conclusions carefully. Assuming that the information given in the statements is true, even if it appears to be at variance with commonly known facts, decide which of the given conclusions logically follow(s) from the statements.

Statements:
All fruits are flowers.
Some fruits are kiwis.

Conclusions:
I. Some flowers are kiwis.
II. All kiwis are fruits.

- Ans 1. Only conclusion II follows.
 2. Both conclusions I and II follow.
 3. Neither conclusion I nor II follows.
 4. Only conclusion I follows.

Question ID : 65497831659
Status : Answered
Chosen Option : 4

Q.22 Select the combination of letters that when sequentially placed in the blanks of the given series will complete the series.

BCB_BC_IB_BI

- Ans
- 1. BCI
 - 2. BCC
 - 3. CBI
 - 4. IBC

Question ID : 65497831651
Status : Answered
Chosen Option : 4

Q.23 Six friends A, B, C, D, E and F, have different heights. A is taller than only C and E. B is shorter than D but D is not the tallest among them. Who is the tallest among them all?

- Ans
- 1. C
 - 2. E
 - 3. A
 - 4. F

Question ID : 65497831645
Status : Answered
Chosen Option : 4

Q.24 In a certain code language, 'ORACLE' is written as 'HSVUXG' and 'DAVID' is written as 'BVJFB'. How will 'VIDEO' be written in that language?

- Ans
- 1. JFBGH
 - 2. GFBJH
 - 3. JFGBH
 - 4. JBFGH

Question ID : 65497831658
Status : Answered
Chosen Option : 1

Q.25 Select the option that is related to the third number in the same way as the second number is related to the first number.

6 : 216 :: 8 : ?

- Ans
- 1. 64
 - 2. 154
 - 3. 1024
 - 4. 512

Question ID : 65497831646
Status : Answered
Chosen Option : 4

Section : Part B General Knowledge and General Awareness

Q.1 जीव-जंतुओं की संरचना, स्वरूप और पारिस्थितिक वितरण के वैज्ञानिक अध्ययन को _____ कहा जाता है।

- Ans
- 1. जंतु विज्ञान (zoology)
 - 2. वनस्पति विज्ञान (botany)
 - 3. छिपकली विज्ञान (saurology)
 - 4. नृजाति विज्ञान (ethnology)

Question ID : 65497831674
Status : Answered
Chosen Option : 1

Q.2 Which state has the second-highest number of Lok Sabha seats, after Uttar Pradesh?

- Ans
- 1. Tamil Nadu
 - 2. Andhra Pradesh
 - 3. Bihar
 - 4. Maharashtra

Question ID : 65497831667
Status : Answered
Chosen Option : 3

Q.3 Who is the author of the book 'Exam Warriors'?

- Ans
- 1. Vikram Seth
 - 2. Bibek Debroy
 - 3. Abhishek Manu Singhvi
 - 4. Narendra Modi

Question ID : 65497831680
Status : Answered
Chosen Option : 2

Q.4 मृदा प्रबंधन और फसल चक्र, खरपतवार और कीट नियंत्रण और फसलों की वृद्धि और खाद्य उत्पादन में महत्वपूर्ण भूमिका निभाने वाली जलवायु के अध्ययन से संबंधित विज्ञान क्या कहलाता है?

- Ans
- 1. कोशिका विज्ञान (Cytology)
 - 2. कृषि विज्ञान (Agronomy)
 - 3. शरीर-रचना विज्ञान (Anatomy)
 - 4. घास विज्ञान (Agrostology)

Question ID : 65497831677
Status : Answered
Chosen Option : 2

Q.5 Who among the following was appointed as Goodwill Ambassador of United Nations Development Programme (UNDP) in September 2020?

- Ans
- 1. Yemi Alade
 - 2. Michelle Obama
 - 3. Padma Lakshmi
 - 4. M. Nethra

Question ID : 65497831673
Status : Not Answered
Chosen Option : --

Q.6 As per Census 2011, which of the following states' sex ratio is less than 900?

- Ans 1. Haryana
 2. Assam
 3. Jharkhand
 4. Madhya Pradesh

Question ID : 65497831679
Status : Answered
Chosen Option : 1

Q.7 In which of the following years was the Hindu Widows' Remarriage Act enacted?

- Ans 1. 1856
 2. 1890
 3. 1906
 4. 1934

Question ID : 65497831675
Status : Not Answered
Chosen Option : --

Q.8 People in ancient India believed that when the '_____' ritual was performed with the help of Brahmanas, it led to the rebirth of the sacrificer as a Kshatriya, even if he was not one by birth.

- Ans 1. Samavaj-tana
 2. Upanayana
 3. Medhajanana
 4. Hiranya-garbha

Question ID : 65497831685
Status : Answered
Chosen Option : 4

Q.9 Forty years after disbanding, music group _____ announced its return in September 2021.

- Ans 1. Rolling Stones
 2. Eagles
 3. Led Zeppelin
 4. ABBA

Question ID : 65497831690
Status : Not Answered
Chosen Option : --

Q.10 पृथ्वी की सतह के नीचे सबसे नजदीकी खनिज केवल _____ प्रक्रिया द्वारा खोदकर निकाले जा सकते जाते हैं।

- Ans 1. खुदाई (ड्रिलिंग)
 2. उल्खनन (कॉर्रीडिंग)
 3. कूपकी खनन (शाफ्ट माइनिंग)
 4. विवृत खनन (ओपन कास्ट माइनिंग)

Question ID : 65497831682
Status : Answered
Chosen Option : 2

Q.11 The Open Era in tennis began in _____ when the Grand Slam tournaments agreed to allow professional players to compete with amateurs.

- Ans
- 1. 1958
 - 2. 1948
 - 3. 1968
 - 4. 1938

Question ID : 65497831669
Status : Not Answered
Chosen Option : --

Q.12 The Lebang Boomani Dance is part of the folk dance repertoire of which of these Indian states?

- Ans
- 1. Tripura
 - 2. Odisha
 - 3. Maharashtra
 - 4. Kerala

Question ID : 65497831678
Status : Not Answered
Chosen Option : --

Q.13 अपघटित पारिस्थितिकी तंत्र और पारिस्थितिक स्थिरता के संरक्षण और पुनर्जनन के माध्यम से एक क्षेत्र के विकास की प्रक्रिया _____ कहलाती है।

- Ans
- 1. पारिस्थितिक-विकास
 - 2. सामाजिक विकास
 - 3. सामाजिक स्थिरता
 - 4. स्थायी विकास

Question ID : 65497831671
Status : Answered
Chosen Option : 1

Q.14 When is Women's Entrepreneurship Day observed every year?

- Ans
- 1. 10 October
 - 2. 19 November
 - 3. 25 November
 - 4. 14 September

Question ID : 65497831676
Status : Not Answered
Chosen Option : --

Q.15 Which of the following is awarded to the coaches for producing medal winners at prestigious international sports events?

- Ans
- 1. Dhyan Chand Award
 - 2. Dronacharya Award
 - 3. Rajiv Gandhi Khel Ratna
 - 4. Arjuna Award

Question ID : 65497831683
Status : Answered
Chosen Option : 2

Q.16 The 9th edition of the International Sand Art Festival was organised in December 2020 in:

- Ans 1. Odisha
 2. Tamil Nadu
 3. Maharashtra
 4. Andhra Pradesh

Question ID : **65497831668**
Status : **Not Answered**
Chosen Option : --

Q.17 How many pairs of chromosomes are present in human beings?

- Ans 1. 23
 2. 26
 3. 19
 4. 22

Question ID : **65497831672**
Status : **Answered**
Chosen Option : **1**

Q.18 The National Sports University, Imphal is a central university established under an Act passed in the year _____.

- Ans 1. 2014
 2. 2018
 3. 2015
 4. 2019

Question ID : **65497831689**
Status : **Not Answered**
Chosen Option : --

Q.19 What is the percentage hike in defence expenditure in the Budget 2020-2021 as against the allocation in the previous financial year?

- Ans 1. 6.1%
 2. 4.3%
 3. 7.4%
 4. 5.8%

Question ID : **65497831666**
Status : **Answered**
Chosen Option : **4**

Q.20 In which of the following years was Sanchi declared as a UNESCO World Heritage Site?

- Ans 1. 1989
 2. 1999
 3. 1967
 4. 2014

Question ID : **65497831670**
Status : **Not Answered**
Chosen Option : --

Q.21 In relation to banking, CTS is an acronym for _____.

- Ans 1. Cheque Truncation System
 2. Corporate Trade Schedule
 3. Credit Transfer Statement
 4. Cash Transaction Scrutiny

Question ID : 65497831686
Status : Answered
Chosen Option : 3

Q.22 Who among the following persons led the 'No Tax Campaign' against the British after the floods in Khera (Khaira/Kaira) in 1918?

- Ans 1. Morarji Desai
 2. Tribhuvandas Patel
 3. Mahadev Desai
 4. Vallabhbhai Patel

Question ID : 65497831688
Status : Answered
Chosen Option : 1

Q.23 In February 2020, the Board of the Reserve Bank of India recommended that its accounting year be changed from _____ to April - March.

- Ans 1. September - August
 2. January - December
 3. October - September
 4. July - June

Question ID : 65497831684
Status : Answered
Chosen Option : 4

Q.24 With which of the following games/sports is the William Jones Cup associated?

- Ans 1. Billiards
 2. Basketball
 3. Boxing
 4. Cricket

Question ID : 65497831681
Status : Answered
Chosen Option : 1

Q.25 The _____ empire was the first pan-Indian empire that covered most of the Indian subcontinent.

- Ans 1. Chola
 2. Kushan
 3. Mauryan
 4. Gupta

Question ID : 65497831687
Status : Not Answered
Chosen Option : --

Q.1 The ratio of two numbers x and y is $4 : 7$. If 6 is added to x and 7 is subtracted from y , then their ratio becomes $3 : 4$.
What is the difference between x and y ?

- Ans**
- 1. 36
 - 2. 30
 - 3. 24
 - 4. 27

Question ID : 65497831709
Status : Answered
Chosen Option : 4

Q.2 The curved surface area of a right circular cylinder of height 14 cm is 176 cm². What is the area (in cm²) of the base of the cylinder? (Take $\pi = \frac{22}{7}$)

- Ans**
- 1. $\frac{44}{7}$
 - 2. $\frac{176}{7}$
 - 3. $\frac{66}{7}$
 - 4. $\frac{88}{7}$

Question ID : 65497831711
Status : Answered
Chosen Option : 4

Q.3 7 men can pack 14 boxes in 6 days by working for 7 hours a day. How many days will be required by 14 men to pack 18 boxes, if they work for 9 hours a day?

- Ans**
- 1. 2
 - 2. 5
 - 3. 4
 - 4. 3

Question ID : 65497831694
Status : Answered
Chosen Option : 4

Q.4 If HCF of 328, 451 and 697 is x , then the value of x lies between:

- Ans**
- 1. 44 and 48
 - 2. 40 and 44
 - 3. 36 and 40
 - 4. 48 and 52

Question ID : 65497831707
Status : Answered
Chosen Option : 2

Q.5 A sum amounts to ₹9,261 in 3 years at 5% per annum, interest compounded annually. What is the simple interest (in ₹) on the same sum for $3\frac{3}{4}$ years at the same rate of interest?

- Ans**
- 1. ₹1,350
 - 2. ₹1,500
 - 3. ₹1,620
 - 4. ₹1,560

Question ID : 65497831710
Status : Answered
Chosen Option : 2

Q.6 A sum of ₹10500 amounts to ₹12705 in 2 years at $x\%$ p.a., when the interest is compounded annually. The same sum will amount (in ₹) to what at $2x\%$ p.a. in $1\frac{1}{2}$ years, when interest compounded half yearly?

- Ans**
- 1. 11297
 - 2. 17395.75
 - 3. 13975.50
 - 4. 19753.25

Question ID : 65497831697
Status : Answered
Chosen Option : 3

Q.7 A person travels equal distances at speeds of 3 km/h, 4 km/h, 5 km/h and 6 km/h, and takes a total time of 3 hours 48 minutes. The total distance (in km) is:

- Ans**
- 1. 16
 - 2. 4
 - 3. 12
 - 4. 20

Question ID : 65497831695
Status : Answered
Chosen Option : 2

Q.8 Pipes A, B and C can fill a tank in 10, 15 and 18 hours, respectively. A and C are opened for 5 hours, then only pipe A is closed and B is opened at the same time (with C). The total time taken to fill the tank completely is:

- Ans**
- 1. $3\frac{2}{3}$ hours
 - 2. $6\frac{9}{11}$ hours
 - 3. $5\frac{8}{11}$ hours
 - 4. $2\frac{1}{3}$ hours

Question ID : 65497831715
Status : Answered
Chosen Option : 2

Q.9 If a sum of ₹644 is divided into three parts proportional to $\frac{1}{2} : \frac{2}{3} : \frac{3}{4}$, then the first part will be:

- Ans**
- 1. ₹322
 - 2. ₹168
 - 3. ₹280
 - 4. ₹186

Question ID : 65497831704
Status : Answered
Chosen Option : 2

Q.10 The surface areas of three coterminal faces of a cuboid are 5 cm^2 , 16 cm^2 and 20 cm^2 respectively. Find the volume of the cuboid.

- Ans**
- 1. 45 cm^3
 - 2. 50 cm^3
 - 3. 30 cm^3
 - 4. 40 cm^3

Question ID : 65497831705
Status : Answered
Chosen Option : 4

Q.11 Radha saves 28% of her income. If her expenditure increases by 25% and savings increase by 30%, then by what percentage will her income increase?

- Ans**
- 1. 27.6%
 - 2. 26.4%
 - 3. 27%
 - 4. 25%

Question ID : 65497831708
Status : Answered
Chosen Option : 2

Q.12 A shopkeeper decides to sell a certain item at a certain price. He tags the price on the item by increasing the decided price by 45%. While selling the item, he offers 40% discount. Find how much more or less he gets on the decided price.

- Ans**
- 1. ₹87 less
 - 2. ₹13 less
 - 3. ₹87 more
 - 4. ₹13 more

Question ID : 65497831706
Status : Answered
Chosen Option : 2

Q.13 The average of 37 numbers is 49. The average of the first 21 numbers is 43.8 and that of the last 17 numbers is 55.6. If the 21st number is excluded, then what is the average of the remaining numbers (correct to one decimal place)?

- Ans**
- 1. 53.5
 - 2. 48.9
 - 3. 49.7
 - 4. 47.6

Question ID : 65497831691
Status : Answered
Chosen Option : 2

Q.14 Vimala took a loan of ₹7,200 on simple interest for as many years as the rate of interest. If she paid ₹5,832 as interest at the end of the loan period, then the rate of interest is:

- Ans**
- 1. 8.5%
 - 2. 9%
 - 3. 12%
 - 4. 8%

Question ID : 65497831701
Status : Answered
Chosen Option : 2

Q.15 Find the value of $9\frac{4}{15} \div \frac{7}{8}$ of $\left(6\frac{1}{5} + 3\frac{2}{5}\right) - \left(\frac{2}{21} + \frac{1}{126}\right)$.

- Ans**
- 1. 1
 - 2. 3
 - 3. 10
 - 4. 5

Question ID : 65497831702
Status : Answered
Chosen Option : 1

Q.16 The LCM of two positive numbers is 13 times their HCF. The sum of HCF and LCM is 252. If one number is 54, then the other number is:

- Ans**
- 1. 73
 - 2. 78
 - 3. 68
 - 4. 63

Question ID : 65497831698
Status : Answered
Chosen Option : 2

Q.17 Reema sold a suit at a profit of 10.5%. If she had sold it for ₹70 more, then the profit would have been 14%. The initial selling price (in ₹) of the suit is:

- Ans**
- 1. 2,350
 - 2. 2,140
 - 3. 2,210
 - 4. 2,280

Question ID : 65497831696
Status : Answered
Chosen Option : 3

Q.18 Out of six numbers A, B, C, D, E and F, the average of first five numbers A, B, C, D and E is greater than the average of last five numbers B, C, D, E and F by 26. The difference between A and F is:

- Ans**
- 1. 130
 - 2. 125
 - 3. 140
 - 4. 120

Question ID : 65497831699
Status : Answered
Chosen Option : 1

Q.19 The value of $72 \div 16 \text{ of } 3 - [28 \div 6 \text{ of } 4 - 20 \div 7 \times (23 - 37) - 41] \times 1\frac{1}{2}$ is:

- Ans**
- 1. 1
 - 2. $\frac{5}{8}$
 - 3. $\frac{3}{2}$
 - 4. $\frac{5}{4}$

Question ID : 65497831713
Status : Answered
Chosen Option : 4

Q.20 In a college election, Seema and Geeta got the votes in the ratio of 4 : 5 of the total valid votes. If 19% are invalid votes out of 15000 votes, then the difference of the votes polled in favour of Seema and Geeta is:

- Ans**
- 1. 1500
 - 2. 1150
 - 3. 1800
 - 4. 1350

Question ID : 65497831693
Status : Answered
Chosen Option : 4

Q.21 Ravi gains 12.5% by selling an article for ₹157.50. If he sells it for ₹147, then what is his loss/gain percentage?

- Ans**
- 1. Loss 5%
 - 2. Gain 5%
 - 3. Gain 10.5%
 - 4. Loss 10.5%

Question ID : 65497831714
Status : Answered
Chosen Option : 2

Q.22 Madhu bought 35 kg of sugar for ₹1,470. She sold it at a loss equal to the selling price of 5 kg of it. What is the selling price (in ₹) of 8 kg of sugar?

- Ans**
- 1. 296
 - 2. 288
 - 3. 300
 - 4. 294

Question ID : 65497831712
Status : Answered
Chosen Option : 2

Q.23 A train travels from place A to place B at a speed of 90 km/h and returns at a speed of 75 km/h. If it takes a total time of $14\frac{2}{3}$ hours, the distance between the places A and B is:

- Ans**
- 1. 600 km
 - 2. 560 km
 - 3. 620 km
 - 4. 580 km

Question ID : 65497831703
Status : Answered
Chosen Option : 1

Q.24 A reduction of $12\frac{1}{2}$ % in the price of wheat enables a person to buy $2\frac{1}{2}$ kg more for ₹280. Initially, how much wheat (in kg) was the person able to buy?

- Ans**
- 1. 15
 - 2. 12.5
 - 3. 17.5
 - 4. 20

Question ID : 65497831692
Status : Answered
Chosen Option : 3

Q.25 A sum of ₹980 is divided among A, B and C such that A gets $\frac{3}{7}$ of B's share and C gets 75% of A's share. The share of C is:

- Ans
- 1. ₹160
 - 2. ₹250
 - 3. ₹180
 - 4. ₹280

Question ID : 65497831700
Status : Answered
Chosen Option : 3

Section : Part D English

Q.1 Select the most appropriate option to fill in the blank.

Radha was extremely _____ about the welfare of her parents.

- Ans
- 1. impatient
 - 2. eager
 - 3. intense
 - 4. anxious

Question ID : 65497831721
Status : Answered
Chosen Option : 4

Q.2 Select the most appropriate ANTONYM of the given word.

Defend

- Ans
- 1. Abandon
 - 2. Tarnish
 - 3. Adjourn
 - 4. Derange

Question ID : 65497831718
Status : Answered
Chosen Option : 2

Q.3 Select the most appropriate option that can substitute the underlined segment in the given sentence. If there is no need to substitute it, select 'No substitution required'.

All the mangoes is sweet; you should try one.

- Ans
- 1. All the mangoes are sweet
 - 2. No substitution required
 - 3. All mangoes sweet
 - 4. All the mangoes sweet

Question ID : 65497831729
Status : Answered
Chosen Option : 1

Q.4 Select the most appropriate option to fill in the blank.

If you do not return my money, I will _____ you to court.

- Ans
- 1. push
 - 2. lift
 - 3. carry
 - 4. drag

Question ID : 65497831731
Status : Answered
Chosen Option : 4

Q.5 The following sentence has been split into four segments. Identify the segment that contains a grammatical error.

These children / are attended / yoga classes / regularly.

- Ans
- 1. yoga classes
 - 2. regularly
 - 3. These children
 - 4. are attended

Question ID : 65497831726
Status : Answered
Chosen Option : 4

Q.6 Select the most appropriate ANTONYM of the given word.

Petty

- Ans
- 1. Quick
 - 2. Dull
 - 3. Big
 - 4. Light

Question ID : 65497831723
Status : Answered
Chosen Option : 3

Q.7 The following sentence has been divided into parts. One of them contains an error. Select the part that contains the error from the given options.

Neither the guests / nor the host / were dressed appropriately / for the party.

- Ans
- 1. Neither the guests
 - 2. were dressed appropriately
 - 3. nor the host
 - 4. for the party

Question ID : 65497831722
Status : Answered
Chosen Option : 2

Q.8 Select the most appropriate option that can substitute the underlined word in the given sentence.

The Maldives is one of the few places in the world where ancient pleasure can be derived from doing nothing.

- Ans
- 1. curt
 - 2. bustling
 - 3. tremendous
 - 4. prosperous

Question ID : 65497831717
Status : Answered
Chosen Option : 3

Q.9 Select the INCORRECTLY spelt word.

- Ans
- 1. Sumptuous
 - 2. Prosperous
 - 3. Pretious
 - 4. Pompous

Question ID : 65497831725
Status : Answered
Chosen Option : 1

Q.10 Select the most appropriate synonym of the given word.

Marvellous

- Ans
- 1. Dangerous
 - 2. Childish
 - 3. Wonderful
 - 4. Innocent

Question ID : 65497831727
Status : Answered
Chosen Option : 3

Q.11 The following sentence has been split into four segments. Identify the segment that contains a grammatical error.

Plants that grow / in deserts / do not requires / much water.

- Ans
- 1. do not requires
 - 2. much water
 - 3. in deserts
 - 4. Plants that grow

Question ID : 65497831733
Status : Answered
Chosen Option : 1

Q.12 Select the option that can be used as a one-word substitute for the given group of words.

One who travels on foot

- Ans
- 1. Visitor
 - 2. Traveller
 - 3. Tourist
 - 4. Pedestrian

Question ID : 65497831724
Status : Answered
Chosen Option : 4

Q.13 Select the option that can be used as a one-word substitute for the given group of words.

A cage for keeping rabbits

- Ans
- 1. Hutch
 - 2. Lair
 - 3. Apiary
 - 4. Kennel

Question ID : 65497831735
Status : Answered
Chosen Option : 3

Q.14 Select the option that can be used as a one-word substitute for the given group of words.

A spider's home

- Ans
- 1. Hole
 - 2. Den
 - 3. Cobweb
 - 4. Hive

Question ID : 65497831716
Status : Answered
Chosen Option : 4

Q.15 Select the INCORRECTLY spelt word.

- Ans
- 1. Drainage
 - 2. Opening
 - 3. Spoonful
 - 4. Vegeteble

Question ID : 65497831720
Status : Answered
Chosen Option : 4

Q.16 Select the most appropriate meaning of the given idiom.

Not breathe a word

- Ans
- 1. To be quiet not knowing what to say
 - 2. To be quiet because you are angry
 - 3. To decide not to talk to someone
 - 4. To remain silent about some secret

Question ID : 65497831730
Status : Answered
Chosen Option : 1

Q.17 Select the most appropriate meaning of the given idiom.

To give up the ghost

- Ans
- 1. To pretend to be a ghost
 - 2. To scare away a ghost
 - 3. To stop working
 - 4. To speak lies

Question ID : 65497831728
Status : Answered
Chosen Option : 3

Q.18 Select the most appropriate SYNONYM of the given word.

Choke

- Ans
- 1. Hack
 - 2. Block
 - 3. Slash
 - 4. Chop

Question ID : 65497831734
Status : Answered
Chosen Option : 2

Q.19 Select the most appropriate option to fill in the blank.

Social distancing should be practiced in _____ with other everyday preventive actions.

- Ans
- 1. comprehension
 - 2. understanding
 - 3. arrangement
 - 4. combination

Question ID : 65497831719
Status : Answered
Chosen Option : 1

Q.20 Select the option that will improve the underlined part of the given sentence. In case no improvement is needed, select 'No improvement required'.

Please walk carefully unless you should hurt yourself.

- Ans 1. or you might
 2. No improvement required
 3. unless you will
 4. so you should

Question ID : 65497831732
Status : Answered
Chosen Option : 3

Comprehension:

In the following passage, some words have been deleted. Read the passage carefully and select the most appropriate option to fill in each blank.

Consumption of junk and fast food is the main (1) _____ of obesity in teenagers. Large intake of high-calorie and low-nutrient food leads to (2) _____ weight gain. A number of health issues arise out of it. Obesity can also result in (3) _____ problems like low self-esteem and low confidence. It can also lead to laziness and inactiveness among teens. Junk food and soft drinks should be (4) _____ with lots of fruits, vegetables and whole grains in the diet. The best way to control obesity is to do (5) _____ physical exercise.

SubQuestion No : 21

Q.21 Select the most appropriate option to fill in blank no. 1.

- Ans 1. result
 2. effect
 3. cause
 4. event

Question ID : 65497831737
Status : Answered
Chosen Option : 3

Comprehension:

In the following passage, some words have been deleted. Read the passage carefully and select the most appropriate option to fill in each blank.

Consumption of junk and fast food is the main (1) _____ of obesity in teenagers. Large intake of high-calorie and low-nutrient food leads to (2) _____ weight gain. A number of health issues arise out of it. Obesity can also result in (3) _____ problems like low self-esteem and low confidence. It can also lead to laziness and inactiveness among teens. Junk food and soft drinks should be (4) _____ with lots of fruits, vegetables and whole grains in the diet. The best way to control obesity is to do (5) _____ physical exercise.

SubQuestion No : 22

Q.22 Select the most appropriate option to fill in blank no. 2.

- Ans 1. insignificant
 2. unnecessary
 3. irrelevant
 4. necessary

Question ID : 65497831738
Status : Answered
Chosen Option : 2

Comprehension:

In the following passage, some words have been deleted. Read the passage carefully and select the most appropriate option to fill in each blank.

Consumption of junk and fast food is the main (1)_____ of obesity in teenagers. Large intake of high-calorie and low-nutrient food leads to (2)_____ weight gain. A number of health issues arise out of it. Obesity can also result in (3)_____ problems like low self-esteem and low confidence. It can also lead to laziness and inactiveness among teens. Junk food and soft drinks should be (4)_____ with lots of fruits, vegetables and whole grains in the diet. The best way to control obesity is to do (5)_____ physical exercise.

SubQuestion No : 23

Q.23 Select the most appropriate option to fill in blank no. 3.

- Ans 1. physiological
 2. psychological
 3. political
 4. mental

Question ID : 65497831739
Status : Answered
Chosen Option : 2

Comprehension:

In the following passage, some words have been deleted. Read the passage carefully and select the most appropriate option to fill in each blank.

Consumption of junk and fast food is the main (1)_____ of obesity in teenagers. Large intake of high-calorie and low-nutrient food leads to (2)_____ weight gain. A number of health issues arise out of it. Obesity can also result in (3)_____ problems like low self-esteem and low confidence. It can also lead to laziness and inactiveness among teens. Junk food and soft drinks should be (4)_____ with lots of fruits, vegetables and whole grains in the diet. The best way to control obesity is to do (5)_____ physical exercise.

SubQuestion No : 24

Q.24 Select the most appropriate option to fill in blank no. 4.

- Ans 1. altered
 2. exchanged
 3. placed
 4. substituted

Question ID : 65497831740
Status : Answered
Chosen Option : 4

Comprehension:

In the following passage, some words have been deleted. Read the passage carefully and select the most appropriate option to fill in each blank.

Consumption of junk and fast food is the main (1)_____ of obesity in teenagers. Large intake of high-calorie and low-nutrient food leads to (2)_____ weight gain. A number of health issues arise out of it. Obesity can also result in (3)_____ problems like low self-esteem and low confidence. It can also lead to laziness and inactiveness among teens. Junk food and soft drinks should be (4)_____ with lots of fruits, vegetables and whole grains in the diet. The best way to control obesity is to do (5)_____ physical exercise.

SubQuestion No : 25

Q.25 Select the most appropriate option to fill in blank no. 5.

- Ans 1. unsystematic
 2. formal
 3. regular
 4. irregular

Question ID : 65497831741
Status : Answered
Chosen Option : 3

Section : Part D Hindi

Q.1 'जिस पर आक्रमण हो' वाक्यांश के लिए एक शब्द होगा-

- Ans 1. आक्रांत
 2. आततायी
 3. आक्रामक
 4. आक्राता

Question ID : 65497831761

Status : Not Answered

Chosen Option : --

Q.2 दिए गए वाक्य में रेखांकित खंड को प्रतिस्थापित करने के लिए सबसे उपयुक्त विकल्प का चयन करें।
यदि इसे प्रतिस्थापित करने की आवश्यकता नहीं है, तो विकल्प 'किसी बदलाव की आवश्यकता नहीं है'
का चयन करें।

आप ठीक कहते हों।

- Ans 1. है
 2. हैं
 3. किसी बदलाव की आवश्यकता नहीं है।
 4. हो

Question ID : 65497831754

Status : Not Answered

Chosen Option : --

Q.3 दिये गये वाक्य के किस भाग में त्रुटि है?

झूट बोलना पाप है।

- Ans 1. है।
 2. बोलना
 3. पाप
 4. झूट

Question ID : 65497831757

Status : Not Answered

Chosen Option : --

Q.4 उस विकल्प का चयन कीजिए जो निम्न मुहावरे का अर्थ व्यक्त करता है।

घर की मुर्गी दाल बराबर

- Ans 1. लाभ के स्थान पर हानि
 2. अत्यधिक कजूस
 3. घर की वस्तु को महत्त्व देना
 4. घर की वस्तु को तुच्छ समझना

Question ID : 65497831752

Status : Not Answered

Chosen Option : --

Q.5 दिए गए वाक्य में रेखांकित खंड को प्रतिस्थापित करने के लिए सबसे उपयुक्त विकल्प का चयन करें।
यदि इसे प्रतिस्थापित करने की आवश्यकता नहीं है, तो विकल्प 'किसी बदलाव की आवश्यकता नहीं है'
का चयन करें।

सीता की मुखचंद्र देखकर राम भी खिल उठे।

- Ans
- 1. सीता का मुखचंद्र
 - 2. सीता के मुखचंद्र
 - 3. किसी बदलाव की आवश्यकता नहीं है
 - 4. सीता जीके मुखचंद्र

Question ID : 65497831743
Status : Not Answered
Chosen Option : --

Q.6 दिये गये वाक्यांश के लिए एक शब्द दीजिये।

जो प्राणी जमीन पर रहता हो

- Ans
- 1. नभचर
 - 2. थलचर
 - 3. जलचर
 - 4. जमीनी

Question ID : 65497831751
Status : Not Answered
Chosen Option : --

Q.7 सही वर्तनी वाले शब्द का चयन करें।

- Ans
- 1. मन्तव्य
 - 2. मतव्य
 - 3. मनत्व्य
 - 4. मनतव्य

Question ID : 65497831747
Status : Not Answered
Chosen Option : --

Q.8 दिये गये वाक्य के किस भाग में त्रुटि है?

पत्र किसके नाम पर लिखा गया है?

- Ans
- 1. पत्र किसके
 - 2. गया है?
 - 3. नाम पर
 - 4. लिखा

Question ID : 65497831759
Status : Not Answered
Chosen Option : --

Q.9 दिए गए वाक्य में रेखांकित खंड को प्रतिस्थापित करने के लिए सबसे उपयुक्त विकल्प का चयन करें।
यदि इसे प्रतिस्थापित करने की आवश्यकता नहीं है, तो विकल्प 'किसी बदलाव की आवश्यकता नहीं है'
का चयन करें।

आवश्यक कार्य में व्यस्त रहने के कारण मुझे अवकाश नहीं मिले।

- Ans
- 1. व्यस्त रहने के कारण मुझे अवकाश नहीं मिली।
 - 2. व्यस्त रहने के कारण मुझे अवकाश नहीं मिला।
 - 3. व्यस्त रहते के कारण मुझे अवकाश नहीं मिला।
 - 4. किसी बदलाव की आवश्यकता नहीं है।

Question ID : 65497831746
Status : Not Answered
Chosen Option : --

Q.10 'विफल' का विलोम शब्द होगा-

- Ans
- 1. निष्फल
 - 2. सफल
 - 3. प्रफुल्ल
 - 4. असफल

Question ID : 65497831760
Status : Not Answered
Chosen Option : --

Q.11 रिक्त स्थान की पूर्ति के लिए सबसे उपयुक्त शब्द का चयन कीजिए।

घोड़ा बीच में ही _____ गया।

- Ans
- 1. अड़
 - 2. टोक
 - 3. डट
 - 4. चल

Question ID : 65497831742
Status : Not Answered
Chosen Option : --

Q.12 सही वर्तनी वाले शब्द का चयन करें।

- Ans
- 1. नीनिमेष
 - 2. निर्निमेष
 - 3. निनिमेष
 - 4. निनिर्मेष

Question ID : 65497831748
Status : Not Answered
Chosen Option : --

Q.13 रिक्त स्थान की पूर्ति के लिए सबसे उपयुक्त विकल्प का चयन करें।

पत्र का उत्तर शीघ्र देने की _____ करें।

- Ans
- 1. दया
 - 2. अनुकंपा
 - 3. करुणा
 - 4. कृपा

Question ID : 65497831756
Status : Not Answered
Chosen Option : --

Q.14 दिए गए शब्द का विलोम चुनें।

ऊपरलिखित

- Ans
- 1. स्वलिखित
 - 2. पूर्वलिखित
 - 3. परलिखित
 - 4. निम्नलिखित

Question ID : 65497831749
Status : Not Answered
Chosen Option : --

Q.15 रिक्त स्थान की पूर्ति के लिए सबसे उपयुक्त विकल्प का चयन करें।

जो _____ करता है उसका सर्वनाश हो जाता है।

- Ans
- 1. गर्व
 - 2. घमंड
 - 3. गौरव
 - 4. सम्मान

Question ID : 65497831755
Status : Not Answered
Chosen Option : --

Q.16 दिए गए शब्द के समानार्थी शब्द का चयन कीजिए।

पर्वत

- Ans
- 1. नग
 - 2. भूय
 - 3. इषु
 - 4. द्रुम

Question ID : 65497831745
Status : Not Answered
Chosen Option : --

Q.17 उस विकल्प का चयन कीजिए जो निम्न मुहावरे का अर्थ व्यक्त करता है।

लँगोटी में फाग खेलना

- Ans
- 1. काम खराब कर देना
 - 2. दुःख सहते जाना
 - 3. दरिद्रता में आनन्द लूटना
 - 4. लड़ने को तैयार होना

Question ID : 65497831750
Status : Not Answered
Chosen Option : --

Q.18 'सरोवर' का पर्यायवाची है-

- Ans
- 1. बादल
 - 2. समुद्र
 - 3. तालाब
 - 4. कमल

Question ID : 65497831758
Status : Not Answered
Chosen Option : --

Q.19 दिये गये वाक्यांश के लिए एक शब्द दीजिये।

जिसके - समान दूसरा न हो

- Ans
- 1. असीम
 - 2. अद्भुत
 - 3. अद्वितीय
 - 4. अनन्त

Question ID : 65497831753
Status : Not Answered
Chosen Option : --

Q.20 दिए गए वाक्य का वह भाग ज्ञात करें जिसमें कोई त्रुटि है। यदि कोई त्रुटि नहीं है, तो 'कोई त्रुटि नहीं' विकल्प को चुनें।

विद्यार्थियों ने प्रधानमंत्री को अभिनन्दन-पत्र अर्पित की।

- Ans
- 1. प्रधानमंत्री को
 - 2. विद्यार्थियों ने
 - 3. अभिनन्दन-पत्र अर्पित की।
 - 4. कोई त्रुटि नहीं

Question ID : 65497831744
Status : Not Answered
Chosen Option : --

Comprehension:

संस्कृति की रचना और अभिव्यक्ति कला के माध्यम से होती है और भारतीय कला का यह (1)_____ है कि वह यूरोप की कलात्मक भंगिमाओं से (2)_____ नहीं बिठा सकती। बहुत प्राचीन काल में, यूनानी कला का सम्मिश्रण भारतीय (3)_____ से हुआ था। परिणामस्वरूप गांधार - कला का (4)_____ हुआ। किंतु वह भारत में टिक नहीं सकी, क्योंकि वह अ भारतीय थी, क्योंकि भारत की (5)_____ अपने को इस मिश्रित कला के भीतर से व्यक्त नहीं कर सकती थी।

निम्न प्रश्नों के उत्तर उपरोक्त गद्यांश के आधार पर दीजिए।

SubQuestion No : 21

Q.21 गद्यांश के रिक्त स्थान (1) के लिए सर्वाधिक उपयुक्त शब्द होगा-

- Ans
- 1. दोष
 - 2. स्वभाव
 - 3. विचार
 - 4. प्रभाव

Question ID : 65497831763

Status : Not Answered

Chosen Option : --

Comprehension:

संस्कृति की रचना और अभिव्यक्ति कला के माध्यम से होती है और भारतीय कला का यह (1)_____ है कि वह यूरोप की कलात्मक भंगिमाओं से (2)_____ नहीं बिठा सकती। बहुत प्राचीन काल में, यूनानी कला का सम्मिश्रण भारतीय (3)_____ से हुआ था। परिणामस्वरूप गांधार - कला का (4)_____ हुआ। किंतु वह भारत में टिक नहीं सकी, क्योंकि वह अ भारतीय थी, क्योंकि भारत की (5)_____ अपने को इस मिश्रित कला के भीतर से व्यक्त नहीं कर सकती थी।

निम्न प्रश्नों के उत्तर उपरोक्त गद्यांश के आधार पर दीजिए।

SubQuestion No : 22

Q.22 गद्यांश के रिक्त स्थान (2) के लिए सर्वाधिक उपयुक्त शब्द होगा-

- Ans
- 1. सामजस्य
 - 2. मेलजोल
 - 3. गठबंधन
 - 4. वैमनस्य

Question ID : 65497831764

Status : Not Answered

Chosen Option : --

Comprehension:

संस्कृति की रचना और अभिव्यक्ति कला के माध्यम से होती है और भारतीय कला का यह (1)_____ है कि वह यूरोप की कलात्मक भंगिमाओं से (2)_____ नहीं बिठा सकती। बहुत प्राचीन काल में, यूनानी कला का सम्मिश्रण भारतीय (3)_____ से हुआ था। परिणामस्वरूप गांधार - कला का (4)_____ हुआ। किंतु वह भारत में टिक नहीं सकी, क्योंकि वह अ भारतीय थी, क्योंकि भारत की (5)_____ अपने को इस मिश्रित कला के भीतर से व्यक्त नहीं कर सकती थी।

निम्न प्रश्नों के उत्तर उपरोक्त गद्यांश के आधार पर दीजिए।

SubQuestion No : 23

Q.23 गद्यांश के रिक्त स्थान (3) के लिए सर्वाधिक उपयुक्त शब्द होगा-

- Ans
- 1. कला
 - 2. नृत्य
 - 3. संगीत
 - 4. कविता

Question ID : 65497831765

Status : Not Answered

Chosen Option : --

Comprehension:

संस्कृति की रचना और अभिव्यक्ति कला के माध्यम से होती है और भारतीय कला का यह (1)_____ है कि वह यूरोप की कलात्मक भंगिमाओं से (2)_____ नहीं बिठा सकती। बहुत प्राचीन काल में, यूनानी कला का सम्मिश्रण भारतीय (3)_____ से हुआ था। परिणामस्वरूप गांधार - कला का (4)_____ हुआ। किंतु वह भारत में टिक नहीं सकी, क्योंकि वह अभारतीय थी, क्योंकि भारत की (5)_____ अपने को इस मिश्रित कला के भीतर से व्यक्त नहीं कर सकती थी।

निम्न प्रश्नों के उत्तर उपरोक्त गद्यांश के आधार पर दीजिए।

SubQuestion No : 24

Q.24 गद्यांश के रिक्त स्थान (4) के लिए सर्वाधिक उपयुक्त शब्द होगा-

- Ans**
- 1. जन्म
 - 2. अनुसंधान
 - 3. आविष्कार
 - 4. खोज

Question ID : 65497831766

Status : Not Answered

Chosen Option : --

Comprehension:

संस्कृति की रचना और अभिव्यक्ति कला के माध्यम से होती है और भारतीय कला का यह (1)_____ है कि वह यूरोप की कलात्मक भंगिमाओं से (2)_____ नहीं बिठा सकती। बहुत प्राचीन काल में, यूनानी कला का सम्मिश्रण भारतीय (3)_____ से हुआ था। परिणामस्वरूप गांधार - कला का (4)_____ हुआ। किंतु वह भारत में टिक नहीं सकी, क्योंकि वह अभारतीय थी, क्योंकि भारत की (5)_____ अपने को इस मिश्रित कला के भीतर से व्यक्त नहीं कर सकती थी।

निम्न प्रश्नों के उत्तर उपरोक्त गद्यांश के आधार पर दीजिए।

SubQuestion No : 25

Q.25 गद्यांश के रिक्त स्थान (5) के लिए सर्वाधिक उपयुक्त शब्द होगा-

- Ans**
- 1. चिंता
 - 2. इच्छा
 - 3. परमात्मा
 - 4. आत्मा

Question ID : 65497831767

Status : Not Answered

Chosen Option : --