

Exam Date	17/11/2021
Exam Time :	12:30 PM - 2:00 PM
Subject	Constable GD 2021

Section : Part A General Intelligence and Reasoning

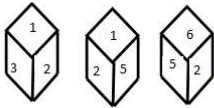
Q.1 Which two signs need to be interchanged to make the following equation correct?

$$16 \div 32 \times 128 + 9 - 17 = -4$$

- Ans
- 1. \times and $-$
 - 2. $+$ and $+$
 - 3. \times and $+$
 - 4. $+$ and $-$

Question ID : 65497830258
 Status : Answered
 Chosen Option : 3

Q.2 Three different positions of the same dice are shown. Select the number that will be on the face opposite to the one having '4'.



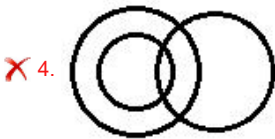
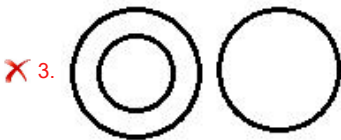
- Ans
- 1. 6
 - 2. 2
 - 3. 1
 - 4. 3

Question ID : 65497830259
 Status : Answered
 Chosen Option : 2

Q.3 Select the Venn diagram that best represents the relationship between the following classes.

Mammals, Zebra, Animals

Ans



Question ID : 65497830264

Status : Answered

Chosen Option : 1

Q.4 In a certain code language, 'SINGER' is written as 'TKROUX'. How will 'ROOKIE' be written in that language?

Ans

✗ 1. SQSRYK

✗ 2. SQRSYK

✗ 3. SQRRYK

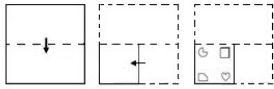
✓ 4. SQSSYK

Question ID : 65497830249

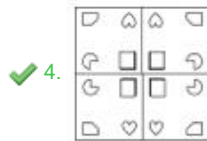
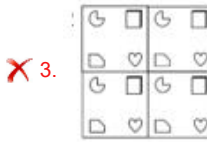
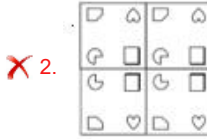
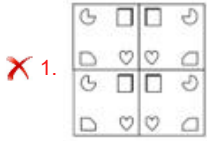
Status : Answered

Chosen Option : 4

Q.5 The sequence of folding a piece of paper and the manner in which the folded paper has been cut is shown in the following figures. How would this paper look when unfolded?



Ans



Question ID : 65497830255
 Status : Answered
 Chosen Option : 4

Q.6 Study the given pattern carefully and select the number that can replace the question mark (?) in it.

81 33 56

3 6 4

54 11 ?

Ans 1. 9

2. 28

3. 27

4. 14

Question ID : 65497830253
 Status : Answered
 Chosen Option : 2

Q.7 C is the brother of B and D is the grandfather of E. B is the daughter-in-law of D and A is the father of E. How is C related to E?

Ans 1. Paternal Aunt

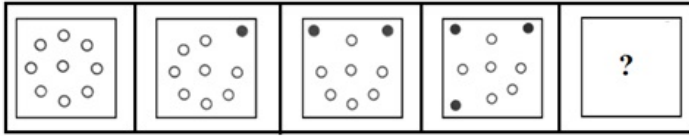
2. Maternal aunt

3. Maternal uncle

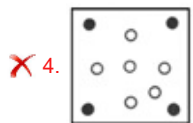
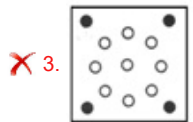

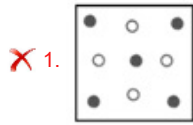
4. Paternal Uncle

Question ID : 65497830250
 Status : Answered
 Chosen Option : 3

Q.8 Which figure will replace the question mark (?) in the following figure series?



Ans



Question ID : 65497830247
Status : Answered
Chosen Option : 2

Q.9 Select the option that is related to the third number in the same way as the second number is related to the first number.

77 : 11 :: 259 : ?

- Ans
- ✗ 1. 31
 - ✗ 2. 43
 - ✗ 3. 29
 - ✓ 4. 37

Question ID : 65497830257
Status : Answered
Chosen Option : 4

Q.10 Select the letter-cluster from among the given options that can replace the question mark (?) in the following series.

BKR, DNV, FQZ, ?, JWH

- Ans
- ✗ 1. HSC
 - ✗ 2. THE
 - ✗ 3. HUD
 - ✓ 4. HTD

Question ID : 65497830261
Status : Answered
Chosen Option : 4

Q.11 A number is subtracted from 4 times of it and then, the number obtained is added to its (the resultant's) next number. If this gives the answer as 91, what was the original number?

- Ans
- 1. 17
 - 2. 13
 - 3. 14
 - 4. 15

Question ID : 65497830254
Status : Answered
Chosen Option : 4

Q.12 Select the number from among the given options that can replace the question mark (?) in the following series.

15, 45, 75, 105, ?

- Ans
- 1. 120
 - 2. 135
 - 3. 125
 - 4. 130

Question ID : 65497830246
Status : Answered
Chosen Option : 2

Q.13 In a certain code language, 'DESK' is coded as '@#+% ' and 'RAIN' is coded as '\$-x*'. How will 'RISK' be coded in that language?

- Ans
- 1. \$x+%
 - 2. +-+%
 - 3. #+%@
 - 4. S#%x

Question ID : 65497830251
Status : Answered
Chosen Option : 1

Q.14 Twelve friends are sitting in two parallel lines. There are 6 people sitting in each row and facing a person of the other row. In row 1, A, B, C, D, E and F are seated and all of them are facing north. In row 2, O, P, Q, R, S and T are seated and all of them are facing south but not necessarily in the same order. C, is third to the right of B. C is not an immediate neighbour to either E or A. P is third to the left of S. Neither P nor S are sitting at the extreme ends of any row. F, faces O, who is second to the right of T, and T is not an immediate neighbour to S. Only two people are sitting between Q and T. A, is not facing R. Which of the following pairs are sitting at the extreme ends?

- Ans
- 1. SB, PC
 - 2. RB, TC
 - 3. RE, TC
 - 4. SA, PD

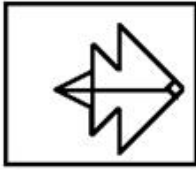
Question ID : 65497830256
Status : Answered
Chosen Option : 3

Q.15 Select the option in which the given figure is embedded (rotation is NOT allowed).



Ans

✗ 1.



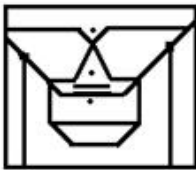
✓ 2.



✗ 3.



✗ 4.



Question ID : 65497830260

Status : Answered

Chosen Option : 2

Q.16 In a certain code language, COACH is coded as 90, and POST is coded as 210. How will NOISE be coded in that language?

Ans ✗ 1. 158

✗ 2. 124

✗ 3. 168

✓ 4. 186

Question ID : 65497830266

Status : Answered

Chosen Option : 4

Q.17 Read the given statements and conclusions carefully. Assuming that the information given in the statements is true, even if it appears to be at variance with commonly known facts, decide which of the given conclusions logically follow(s) from the statements.

Statements:

All M. Tech students are engineers.
All LLM students are lawyers.

Conclusions:

I. All lawyers are LLM students.
II. All engineers are M. Tech students.

- Ans
- 1. Both conclusions I and II follow.
 - 2. Only conclusion II follows.
 - 3. Only conclusion I follows.
 - 4. Neither conclusion I nor II follows.

Question ID : 65497830252
Status : Answered
Chosen Option : 4

Q.18 'Nephrologist' is related to 'Kidney' in the same way as 'Cardiologist' is related to _____.

- Ans
- 1. Pancreas
 - 2. Lungs
 - 3. Heart
 - 4. Gall bladder

Question ID : 65497830262
Status : Answered
Chosen Option : 3

Q.19 Select the number from among the given options that can replace the question mark (?) in the following series.

14, 33, 71, 147, 299, ?

- Ans
- 1. 612
 - 2. 493
 - 3. 593
 - 4. 603

Question ID : 65497830267
Status : Answered
Chosen Option : 4

Q.20 Neeta, Vinita, Satya, Kamini, Divya and Alpa are sitting around a circular table facing the centre of the table. Alpa is to the immediate right of Vinita. Kamini is between Neeta and Satya. Divya is between Neeta and Vinita. Who is sitting third to the left of Satya?

- Ans
- 1. Divya
 - 2. Neeta
 - 3. Vinita
 - 4. Alpa

Question ID : 65497830263
Status : Answered
Chosen Option : 1

Q.21 Four letter-clusters have been given, out of which three are alike in some manner and one is different. Select the letter-cluster that is different.

- Ans
- 1. DGJMP
 - 2. TWZCF
 - 3. PSVYB
 - 4. NQTWA

Question ID : 65497830265
Status : Answered
Chosen Option : 4

Q.22 Select the option that is related to the third letter-cluster in the same way as the second letter-cluster is related to the first letter-cluster.

RKM : VFS :: PSQ : ?

- Ans
- 1. SNW
 - 2. TMW
 - 3. TNW
 - 4. SNX

Question ID : 65497830248
Status : Answered
Chosen Option : 3

Q.23 Select the combination of letters that when sequentially placed in the blanks of the given series will complete the series.

G _ _ P K _ D F _ K G D _ _ K

- Ans
- 1. DFGDFP
 - 2. DPDFKF
 - 3. DFGPFP
 - 4. DFGDFK

Question ID : 65497830245
Status : Answered
Chosen Option : 3

Q.24 Select the correct mirror image of the given combination when the mirror is placed to its right side.

FR4PW5

- Ans
- 1. ƆWƆPƆRƆ
 - 2. ƆWƆPƆRƆ
 - 3. ƆWƆPƆRƆ
 - 4. ƆWƆPƆRƆ

Question ID : 65497830268
Status : Answered
Chosen Option : 1

Q.25 Select the correct option that indicates the arrangement of the given words in the order in which they appear in an English dictionary.

1. Uneventful
2. Uneconomical
3. Unexplained
4. Unexpected
5. Unemployment

- Ans
- 1. 2, 5, 3, 4, 1
 - 2. 2, 5, 1, 3, 4
 - 3. 2, 5, 1, 4, 3
 - 4. 3, 5, 1, 4, 2

Question ID : **65497830244**
Status : **Answered**
Chosen Option : **3**

Section : **Part B General Knowledge and General Awareness**

Q.1 Politician-writer M Veerappa Moily was awarded the Sahitya Akademi Award 2020 for his poetry titled 'Sri Bahubali Ahimsadigvijayam' in _____.

- Ans
- 1. Tamil
 - 2. Telugu
 - 3. Kannada
 - 4. Malayalam

Question ID : **65497830289**
Status : **Not Answered**
Chosen Option : **--**

Q.2 Which of the following diseases is caused by the deficiency of haemoglobin?

- Ans
- 1. Malaria
 - 2. Anemia
 - 3. Rabies
 - 4. Cholera

Question ID : **65497830270**
Status : **Answered**
Chosen Option : **2**

Q.3 Which of the following taxes was introduced in India to achieve the goal of 'One Nation, One Tax, One Market'?

- Ans
- 1. Goods and Services Tax
 - 2. Union Excise Duty
 - 3. Custom Duty
 - 4. Security Transaction Tax

Question ID : **65497830293**
Status : **Answered**
Chosen Option : **1**

Q.4 Which of the following awards did Virat Kohli win in December 2020?

- Ans
- 1. ICC Men's Test Cricketer of the Decade
 - 2. ICC Men's T20 Cricketer of the Decade
 - 3. ICC Men's ODI Cricketer of the Decade
 - 4. ICC Spirit of Cricket Award of the Decade

Question ID : **65497830292**
Status : **Answered**
Chosen Option : **3**

Q.5 When did the Hindu Succession Act abandon the rule of primogeniture in India?

- Ans
- 1. 1956
 - 2. 1950
 - 3. 1946
 - 4. 1960

Question ID : **65497830280**
Status : **Answered**
Chosen Option : **1**

Q.6 Which of the following statements is INCORRECT?

- Ans
- 1. Food from the stomach passes into the small intestine.
 - 2. Complete digestion of carbohydrates, proteins and fats takes place in the small intestine.
 - 3. Saliva contains an enzyme called salivary lipase that breaks down starch into simple sugar.
 - 4. Food enters the stomach through the oesophagus (esophagus).

Question ID : **65497830282**
Status : **Answered**
Chosen Option : **1**

Q.7 Which of the following parts of the human body contains gustatory receptors?

- Ans
- 1. Eyes
 - 2. Nose
 - 3. Tongue
 - 4. Skin

Question ID : **65497830283**
Status : **Answered**
Chosen Option : **2**

Q.8 Farmers in some parts of India celebrate the Pola festival by worshipping their _____.

- Ans
- 1. farm tools
 - 2. ancestors
 - 3. farms
 - 4. bullocks

Question ID : **65497830281**
Status : **Not Answered**
Chosen Option : **--**

Q.9 Who among the following laid the foundation of independent Awadh dynasty?

- Ans
- 1. Chin Qilich Khan
 - 2. Marthanda Varma
 - 3. Saadat Khan
 - 4. Haider Ali

Question ID : 65497830276
Status : Answered
Chosen Option : 4

Q.10 Which among the following is the longest river in the Thar Desert?

- Ans
- 1. Jhelum
 - 2. Chambal
 - 3. Son
 - 4. Luni

Question ID : 65497830288
Status : Answered
Chosen Option : 4

Q.11 The '_____' is an initiative of the National Bamboo Mission and the Government e-Marketplace (GeM) to showcase bamboo products.

- Ans
- 1. Indian Gold Collection
 - 2. Indian Bamboo Collection
 - 3. Green Wood Collection
 - 4. Green Gold Collection

Question ID : 65497830291
Status : Not Answered
Chosen Option : --

Q.12 The fifth storey of Qutub Minar was built during the reign of:

- Ans
- 1. Iltutmish
 - 2. Mohammad-bin-Tughlaq
 - 3. Firoz Shah Tughlaq
 - 4. Razia Sultana

Question ID : 65497830275
Status : Answered
Chosen Option : 1

Q.13 In which year was the Indian Industrial and Commercial Congress formed by Indian merchants and industrialists to organise their business interests?

- Ans
- 1. 1934
 - 2. 1909
 - 3. 1920
 - 4. 1945

Question ID : 65497830272
Status : Not Answered
Chosen Option : --

Q.14 Which of the following words in the Preamble to the Constitution describes India as a country having complete political freedom and being the supreme authority?

- Ans 1. Sovereign
 2. Democratic
 3. Socialist
 4. Secular

Question ID : 65497830285
Status : Answered
Chosen Option : 1

Q.15 Which of the following persons was NOT amongst the female judges sworn in as judges of the Supreme Court of India on 31st August 2021?

- Ans 1. Justice Indira Banerjee
 2. Justice BV Nagarathna
 3. Justice Bela M Trivedi
 4. Justice Hima Kohli

Question ID : 65497830286
Status : Answered
Chosen Option : 1

Q.16 Vikramshila Gangetic Dolphin Wildlife Sanctuary is located in which of the following states?

- Ans 1. Chhattisgarh
 2. Bihar
 3. Uttar Pradesh
 4. Goa

Question ID : 65497830271
Status : Answered
Chosen Option : 2

Q.17 _____ is a risk management strategy employed to offset losses in investments by taking an opposite position in a related asset.

- Ans 1. Scalability
 2. Hedging
 3. Amortization
 4. Collateral

Question ID : 65497830279
Status : Answered
Chosen Option : 2

Q.18 In which state was the Indo-Dutch centre of excellence (CoE) for vegetables and flowers opened in November 2020?

- Ans 1. Kerala
 2. Punjab
 3. Telangana
 4. Gujarat

Question ID : 65497830278
Status : Not Answered
Chosen Option : --

Q.19 The founder of Yes Bank is:

- Ans
- 1. Rajesh Kapoor
 - 2. Rahul Kumar
 - 3. Prashant Kumar
 - 4. Rana Kapoor

Question ID : 65497830274
Status : Answered
Chosen Option : 4

Q.20 Which of the following is a temple in Mangaluru, dedicated to an avatar of Lord Shiva?

- Ans
- 1. Mukteshvara Temple
 - 2. Ananta Vasudeva Temple
 - 3. Kadri Manjunatha Temple
 - 4. Gundicha Temple

Question ID : 65497830287
Status : Not Answered
Chosen Option : --

Q.21 'The Commonwealth of Cricket: A Lifelong Love Affair with the Most Subtle and Sophisticated Game Known to Humankind' is a book written by _____.

- Ans
- 1. Vinod Rai
 - 2. Vikram Limaye
 - 3. Diana Edulji
 - 4. Ramachandra Guha

Question ID : 65497830284
Status : Answered
Chosen Option : 4

Q.22 Sutirtha Mukherjee is an Indian _____.

- Ans
- 1. golfer
 - 2. table tennis player
 - 3. badminton player
 - 4. swimmer

Question ID : 65497830290
Status : Not Answered
Chosen Option : --

Q.23 The inaugural Olympic Congress was organised in the year 1894 in:

- Ans
- 1. Stockholm
 - 2. Oslo
 - 3. Paris
 - 4. London

Question ID : 65497830269
Status : Not Answered
Chosen Option : --

Q.24 Who among the following was elected as the speaker of the Bihar Assembly in November 2020?

- Ans
- 1. Prem Kumar
 - 2. V jay Kumar Sinha
 - 3. Awadh Bihari Choudhary
 - 4. Jitan Ram Manjhi

Question ID : 65497830273
Status : Not Answered
Chosen Option : --

Q.25 Article 76 of the Constitution of India is associated with:

- Ans
- 1. Election Commission
 - 2. Supreme Court
 - 3. Attorney General of India
 - 4. Administrative Tribunals

Question ID : 65497830277
Status : Answered
Chosen Option : 3

Section : Part C Elementary Mathematics

Q.1 The difference between the compound interest and the simple interest on a certain sum at 8% per annum for 2 years is ₹144. What is the amount (in ₹)?

- Ans
- 1. 20,500
 - 2. 24,500
 - 3. 40,000
 - 4. 22,500

Question ID : 65497830295
Status : Answered
Chosen Option : 4

Q.2 The value of $75 \div 30 - \frac{3}{4}$ of $\left(\frac{5}{7} \div \frac{9}{14}\right) - \left(3\frac{1}{3} - 1\frac{2}{3}\right)$ is:

- Ans
- 1. 0
 - 2. 10
 - 3. 1
 - 4. 5

Question ID : 65497830298
Status : Answered
Chosen Option : 1

Q.3 After applying successive discounts of 10% and 5% on the marked price of an article, it was sold for ₹3,420. Find the marked price of the article.

- Ans**
- 1. ₹5,000
 - 2. ₹4,400
 - 3. ₹6,000
 - 4. ₹4,000

Question ID : 65497830301
Status : Answered
Chosen Option : 4

Q.4 12 spherical balls of radius 10 cm are dropped in a bucket which is full of water up to the brim. The water flowed out is collected in a cylindrical jar of radius 20 cm. What is the height (in cm) of the water in the jar? (Take $\pi = \frac{22}{7}$)

- Ans**
- 1. 45
 - 2. 32
 - 3. 40
 - 4. 18

Question ID : 65497830297
Status : Answered
Chosen Option : 3

Q.5 Raghu and Raman start together to walk a certain equal distance at a speed of 10 km/h and 8 km/h, respectively. Raghu arrives 30 minutes before Raman arrives. Find the distance between the start and the end point.

- Ans**
- 1. 25 km
 - 2. 28 km
 - 3. 24 km
 - 4. 20 km

Question ID : 65497830299
Status : Answered
Chosen Option : 4

Q.6 The sum of two numbers m and n is 84 ($m > n$) and their difference is 6. What is the ratio of the two numbers?

- Ans**
- 1. 4 : 3
 - 2. 17 : 15
 - 3. 9 : 8
 - 4. 15 : 13

Question ID : 65497830316
Status : Answered
Chosen Option : 4

Q.7 Soni and Gita together can complete a job in 8 h and Arti alone can complete the job in 12 h. In how many hours can Gita alone complete the job?

- Ans**
- 1. 48
 - 2. 12
 - 3. 24
 - 4. 14

Question ID : 65497830302
Status : **Marked For Review**
Chosen Option : 3

Q.8 The speed of a train is 110 km/h. It is increased by 20% and then runs at uniform speed. The train driver sees the 'Slow Down' sign, so he reduces the speed of the train by 40% of the speed at that moment. What is the final speed (in km/h, correct to one decimal place) of the train?

- Ans**
- 1. 69.2
 - 2. 75.5
 - 3. 66.5
 - 4. 79.2

Question ID : 65497830312
Status : **Answered**
Chosen Option : 4

Q.9 The average weight of 24 persons in a group is 72 kg. If 3 persons with average weight 78 kg leave the group and 4 persons of average weight 75 kg join the group, then what will be the average weight (in kg) of the persons in the group now?

- Ans**
- 1. 66.5
 - 2. 71.76
 - 3. 67.74
 - 4. 67.8

Question ID : 65497830306
Status : **Answered**
Chosen Option : 2

Q.10 Let x be a number between 1420 and 1780 such that when x is divided by 10, 15, 24 and 32, the remainder in each case is 7. The sum of the digits of x is:

- Ans**
- 1. 22
 - 2. 13
 - 3. 16
 - 4. 19

Question ID : 65497830305
Status : **Answered**
Chosen Option : 3

Q.11 The least number of square tiles required to pave the floor of a room with dimensions 15 metres and 12 metres will be:

- Ans**
- 1. 20
 - 2. 16
 - 3. 15
 - 4. 60

Question ID : 65497830303
Status : Answered
Chosen Option : 1

Q.12 A can do a certain piece of work in 20 days. B is 25% more efficient than A, and C is 20% more efficient than B. A and C work together for 5 days. B alone will complete the remaining work in:

- Ans**
- 1. 9 days
 - 2. 8 days
 - 3. 6 days
 - 4. 5 days

Question ID : 65497830313
Status : Answered
Chosen Option : 3

Q.13 By selling an article for ₹170, a man loses 15%. What per cent will he gain or lose, if he sells it for ₹206.40?

- Ans**
- 1. Loss, 1.6%
 - 2. Loss, 3.2%
 - 3. Gain, 3.2%
 - 4. Gain, 1.6%

Question ID : 65497830309
Status : Answered
Chosen Option : 3

Q.14 Seema is younger than Reema by 8 years. If 4 years back, their ages were in the ratio 1 : 2, then the age (in years) of Seema after 6 years from now will be:

- Ans**
- 1. 24
 - 2. 18
 - 3. 20
 - 4. 12

Question ID : 65497830296
Status : Answered
Chosen Option : 2

Q.15 A trader sells an item for ₹805 after offering a discount of 12.5% on its marked price. Had he not offered the discount, he would have earned a profit of 15%. What is the cost price (in ₹) of the item?

- Ans**
- 1. 780
 - 2. 700
 - 3. 800
 - 4. 750

Question ID : 65497830315
Status : Answered

Q.16 The speed of a boat in still water is 10 km/h. The time taken by the boat to go 35 km downstream is 1.25 times the time taken by it to go 14 km upstream. How much time (in hours) will it take to go 60 km downstream?

- Ans**
- 1. 3
 - 2. 3.5
 - 3. 4
 - 4. 4.5

Question ID : 65497830314
Status : Answered
Chosen Option : 4

Q.17 The marked price of an article is ₹450. It is sold for ₹267.30, after offering three successive discounts of 10%, x %, and 20%. What is the value of x ?

- Ans**
- 1. 16.5
 - 2. 17.5
 - 3. 18
 - 4. 19

Question ID : 65497830311
Status : Answered
Chosen Option : 2

Q.18 P sold a lamp to Q at a profit of 20%. Later, Q sold the same lamp to P at a profit of 30%, thereby making a profit of ₹108. How much (in ₹) did P pay originally for the lamp?

- Ans**
- 1. 300
 - 2. 330
 - 3. 320
 - 4. 280

Question ID : 65497830294
Status : Answered
Chosen Option : 1

Q.19 A number is decreased by 25% and then increased by 25%. The net percentage increase or decrease is:

- Ans**
- 1. 2.5% decrease
 - 2. $6\frac{1}{4}$ % decrease
 - 3. $3\frac{2}{3}$ % increase
 - 4. 4% decrease

Question ID : 65497830304
Status : Answered
Chosen Option : 2

Q.20 A certain sum amounts to ₹8,640 in 2 years at simple interest and to ₹9,720 in 3 years. The sum (in ₹) and the rate of interest p.a., respectively, are:

- Ans**
- 1. ₹6,450 and 15%
 - 2. ₹6,450 and $16\frac{2}{3}\%$
 - 3. ₹6,480 and $16\frac{2}{3}\%$
 - 4. ₹6,480 and 15%

Question ID : 65497830308
Status : Answered
Chosen Option : 3

Q.21 The ratio of the incomes of A and B is 4 : 5 and the ratio of their expenditures is 2 : 3. If A and B save ₹7,200 and ₹6,000, respectively, then the income (in ₹) of A is:

- Ans**
- 1. 19,200
 - 2. 20,000
 - 3. 24,000
 - 4. 18,000

Question ID : 65497830307
Status : Answered
Chosen Option : 1

Q.22 The average weight of 56 students in a group is 55 kg. If 12 students of average weight 60 kg leave and 6 students of average weight 52.5 kg join the group, then the average weight of the remaining students in the group decreases by:

- Ans**
- 1. 2 kg
 - 2. 1.8 kg
 - 3. 1.5 kg
 - 4. 2.5 kg

Question ID : 65497830310
Status : Answered
Chosen Option : 3

Q.23 The value of $[6 + 3 \text{ of } 7 - 5] \div 2 \text{ of } 11$ is:

- Ans**
- 1. 22
 - 2. 11
 - 3. 1
 - 4. 121

Question ID : 65497830300
Status : Answered
Chosen Option : 3

Q.24 Three solid metallic cubes of sides 6 cm, 8 cm and 10 cm, respectively, were melted to form a new solid cube.
Find the side (in cm) of the new solid cube.

- Ans**
- 1. 9
 - 2. 12
 - 3. 8
 - 4. 12.5

Question ID : 65497830318
Status : Answered
Chosen Option : 2

Q.25 The difference between the compound interest and the simple interest on a certain sum at 5% per annum for 2 years is ₹152. What is the amount (in ₹)?

- Ans**
- 1. 50,500
 - 2. 60,000
 - 3. 60,800
 - 4. 10,500

Question ID : 65497830317
Status : Answered
Chosen Option : 3

Section : Part D English

Q.1 Select the option that can be used as a one-word substitute for the given group of words.

An object through which we cannot see at all

- Ans**
- 1. Opaque
 - 2. Translucent
 - 3. Transparent
 - 4. Crystal

Question ID : 65497830326
Status : Answered
Chosen Option : 1

Q.2 Select the most appropriate option to fill in the blank.

The socio-economic policy has been the _____ of much debate.

- Ans**
- 1. subject
 - 2. talk
 - 3. object
 - 4. concept

Question ID : 65497830335
Status : Answered
Chosen Option : 1

Q.3 Select the option that can be used as a one-word substitute for the given group of words.

Imitate someone's action or words in order to entertain or ridicule

- Ans
- 1. Copy
 - 2. Mimic
 - 3. Repeat
 - 4. Duplicate

Question ID : 65497830332
Status : Answered
Chosen Option : 2

Q.4 Select the most appropriate meaning of the given idiom.

To beat around the bush

- Ans
- 1. To explain something in detail
 - 2. To avoid noticing someone
 - 3. To discuss the main topic
 - 4. To avoid the main issue

Question ID : 65497830329
Status : Answered
Chosen Option : 4

Q.5 Select the option that will improve the underlined part of the given sentence. In case no improvement is needed, select 'No improvement required'.

The movie theatre is a excited place where people can relax and enjoy the experience.

- Ans
- 1. exciting
 - 2. the excited
 - 3. No improvement required
 - 4. an exciting

Question ID : 65497830338
Status : Answered
Chosen Option : 4

Q.6 Select the INCORRECTLY spelt word.

- Ans
- 1. Omission
 - 2. Remission
 - 3. Recession
 - 4. Precission

Question ID : 65497830333
Status : Answered
Chosen Option : 4

Q.7 Select the most appropriate meaning of the given idiom.

Drop names

- Ans**
- 1. Delete someone's name from a list
 - 2. Show disrespect to someone's name
 - 3. Assume a false name
 - 4. Name famous people to impress others

Question ID : **65497830337**
Status : **Not Answered**
Chosen Option : --

Q.8 Select the **INCORRECTLY** spelt word.

- Ans**
- 1. Collection
 - 2. Complaint
 - 3. Coessponding
 - 4. Consolidation

Question ID : **65497830324**
Status : **Answered**
Chosen Option : **3**

Q.9 Select the most appropriate synonym of the given word.

Defy

- Ans**
- 1. Disobey
 - 2. Destroy
 - 3. Abide
 - 4. React

Question ID : **65497830331**
Status : **Answered**
Chosen Option : **1**

Q.10 Select the most appropriate synonym of the given word.

Stun

- Ans**
- 1. Shock
 - 2. Trick
 - 3. Joke
 - 4. Jest

Question ID : **65497830321**
Status : **Answered**
Chosen Option : **1**

Q.11 Select the option that can be used as a one-word substitute for the given group of words.

Release someone from a duty or obligation

- Ans
- 1. Banish
 - 2. Expel
 - 3. Dismiss
 - 4. Exonerate

Question ID : 65497830323
Status : Answered
Chosen Option : 2

Q.12 Select the option that will improve the underlined part of the sentence. In case no improvement is needed, select 'No improvement required'.

The decision to become a doctor is completely hers.

- Ans
- 1. No improvement required
 - 2. are completely her
 - 3. is complete her's
 - 4. is completely her

Question ID : 65497830325
Status : Answered
Chosen Option : 1

Q.13 The following sentence has been split into four segments. Identify the segment that contains a grammatical error.

The president forced / to leave the country / when the people rose up against / the government.

- Ans
- 1. when the people rose up against
 - 2. the government
 - 3. to leave the country
 - 4. The president forced

Question ID : 65497830330
Status : Answered
Chosen Option : 4

Q.14 The following sentence has been split into four segments. Identify the segment that contains a grammatical error.

The education of girls / is a primary concern for the country, / so it should be started early, / isn't it?

- Ans
- 1. The education of girls
 - 2. so it should be started early
 - 3. is a primary concern for the country
 - 4. isn't it

Question ID : 65497830319
Status : Answered
Chosen Option : 4

Q.15 Select the most appropriate ANTONYM of the given word.

Alert

- Ans
- 1. Aware
 - 2. Active
 - 3. Ready
 - 4. Careless

Question ID : 65497830322
Status : Answered
Chosen Option : 4

Q.16 Select the most appropriate option to fill in the blank.

Teams from all over India _____ in the talent show.

- Ans
- 1. participated
 - 2. proh bited
 - 3. produced
 - 4. provided

Question ID : 65497830328
Status : Answered
Chosen Option : 1

Q.17 The following sentence has been split into four segments. Identify the segment that contains a grammatical error.

The lady was furious / to see that no one / were wearing masks / on the road near the shop.

- Ans
- 1. The lady was furious
 - 2. on the road near the shop
 - 3. were wearing masks
 - 4. to see that no one

Question ID : 65497830320
Status : Answered
Chosen Option : 3

Q.18 Select the option that will improve the underlined part of the given sentence. In case no improvement is needed, select 'No improvement required'.

Unless we sat in an incorrect posture, we may strain our back.

- Ans
- 1. Until we sit
 - 2. If we sit
 - 3. Although we are sitting
 - 4. No improvement required

Question ID : 65497830327
Status : Answered
Chosen Option : 2

Q.19 Select the most appropriate **ANTONYM** of the given word.

Vulnerable

- Ans** 1. Secure
 2. Breakable
 3. Tender
 4. Sensitive

Question ID : **65497830336**
Status : **Answered**
Chosen Option : **1**

Q.20 Select the most appropriate option to fill in the blank.

For a member to borrow money from the association, three _____ need to be met.

- Ans** 1. points
 2. accounts
 3. restrictions
 4. conditions

Question ID : **65497830334**
Status : **Answered**
Chosen Option : **4**

Comprehension:

In the following passage, some words have been deleted. Read the passage carefully and select the most appropriate option to fill in each blank.

You should elect me as Class President as I think that everyone's (1)_____ matters. I am a confident speaker and have won prizes (2)_____ public speaking. I will make sure that the school council (3)_____ to us. When people come to me with problems, I (4)_____ listen carefully. I never judge people who come to me for (5)_____. You can count on me for help.

SubQuestion No : 21

Q.21 Select the most appropriate option to fill in blank no.1.

- Ans** 1. reaction
 2. estimate
 3. theorem
 4. opinion

Question ID : **65497830340**
Status : **Answered**
Chosen Option : **4**

Comprehension:

In the following passage, some words have been deleted. Read the passage carefully and select the most appropriate option to fill in each blank.

You should elect me as Class President as I think that everyone's (1)_____ matters. I am a confident speaker and have won prizes (2)_____ public speaking. I will make sure that the school council (3)_____ to us. When people come to me with problems, I (4) _____listen carefully. I never judge people who come to me for (5)_____. You can count on me for help.

SubQuestion No : 22

Q.22 Select the most appropriate option to fill in blank no.2.

- Ans 1. on
 2. for
 3. by
 4. of

Question ID : 65497830341
Status : Answered
Chosen Option : 2

Comprehension:

In the following passage, some words have been deleted. Read the passage carefully and select the most appropriate option to fill in each blank.

You should elect me as Class President as I think that everyone's (1)_____ matters. I am a confident speaker and have won prizes (2)_____ public speaking. I will make sure that the school council (3)_____ to us. When people come to me with problems, I (4) _____listen carefully. I never judge people who come to me for (5)_____. You can count on me for help.

SubQuestion No : 23

Q.23 Select the most appropriate option to fill in blank no.3.

- Ans 1. accepts
 2. hears
 3. believes
 4. listens

Question ID : 65497830342
Status : Answered
Chosen Option : 4

Comprehension:

In the following passage, some words have been deleted. Read the passage carefully and select the most appropriate option to fill in each blank.

You should elect me as Class President as I think that everyone's (1)_____ matters. I am a confident speaker and have won prizes (2)_____ public speaking. I will make sure that the school council (3)_____ to us. When people come to me with problems, I (4) _____listen carefully. I never judge people who come to me for (5)_____. You can count on me for help.

SubQuestion No : 24

Q.24 Select the most appropriate option to fill in blank no.4.

- Ans 1. barely
 2. always
 3. seldom
 4. never

Question ID : 65497830343
Status : Answered
Chosen Option : 2

Comprehension:

In the following passage, some words have been deleted. Read the passage carefully and select the most appropriate option to fill in each blank.

You should elect me as Class President as I think that everyone's (1)_____ matters. I am a confident speaker and have won prizes (2)_____ public speaking. I will make sure that the school council (3)_____ to us. When people come to me with problems, I (4) _____listen carefully. I never judge people who come to me for (5)_____. You can count on me for help.

SubQuestion No : 25

Q.25 Select the most appropriate option to fill in blank no.5.

- Ans 1. advice
 2. news
 3. lesson
 4. caution

Question ID : 65497830344
Status : Answered
Chosen Option : 1

Section : Part D Hindi

Q.1 दिये गये वाक्य के किस भाग में त्रुटि है?

इस ग्रथ की इतिहासिकता अत्यत सदिग्ध है।

- Ans 1. अत्यत
 2. इस ग्रथ
 3. सदिग्ध है।
 4. की इतिहासिकता

Question ID : 65497830358
Status : Not Answered
Chosen Option : --

Q.2 निम्नलिखित में से शुद्ध वर्तनी वाला शब्द कौन सा है?

- Ans 1. तिरस्कार
 2. तिरष्कार
 3. तीरस्कार
 4. तिरश्कार

Question ID : 65497830356
Status : Not Answered
Chosen Option : --

Q.3 दिए गए वाक्य में रेखांकित खंड को प्रतिस्थापित करने के लिए सबसे उपयुक्त विकल्प का चयन करें। यदि इसे प्रतिस्थापित करने की आवश्यकता नहीं है, तो विकल्प 'किसी बदलाव की आवश्यकता नहीं है' का चयन करें।

इसका उत्तरदायित्व मेरे ऊपर है।

- Ans 1. मुझ पर
 2. मुझ ऊपर
 3. मेरे पर
 4. किसी बदलाव की आवश्यकता नहीं है।

Question ID : 65497830352
Status : Not Answered
Chosen Option : --

Q.4 दिये गये वाक्यांश के लिए एक शब्द दीजिये।

मध्य रात्रि का समय

- Ans
- 1. प्रदोष
 - 2. उषाकाल
 - 3. निशीथ
 - 4. विभावरी

Question ID : 65497830354
Status : Not Answered
Chosen Option : --

Q.5 दिए गए शब्द के समानार्थी शब्द का चयन करें।

घृणा

- Ans
- 1. नफ़रत
 - 2. रिपु
 - 3. चाय
 - 4. करी

Question ID : 65497830346
Status : Not Answered
Chosen Option : --

Q.6 दिये गये वाक्य में रेखांकित अश को प्रतिस्थापित करने के लिए सबसे उपयुक्त विकल्प का चयन करें।

सैनिकों ने देश को भारी सकट से रोक दिया।

- Ans
- 1. रोक लिया।
 - 2. भगा दिया
 - 3. बचा लिया।
 - 4. हटा दिया।

Question ID : 65497830361
Status : Not Answered
Chosen Option : --

Q.7 दिए गए वाक्य का वह भाग ज्ञात करें जिसमें कोई त्रुटि है। यदि कोई त्रुटि नहीं है, तो 'कोई त्रुटि नहीं है' विकल्प को चुनें।

मालिन ने माला गुँथ लिया।

- Ans
- 1. गुँथ लिया
 - 2. माला
 - 3. मालिन ने
 - 4. कोई त्रुटि नहीं

Question ID : 65497830345
Status : Not Answered
Chosen Option : --

Q.8 रिक्त स्थान की पूर्ति के लिए सबसे उपयुक्त विकल्प का चयन करें।

धमकी देते हुए बदमाश लोगो को _____ रहा था।

- Ans
- 1. ताक
 - 2. झाँक
 - 3. घूर
 - 4. देख

Question ID : 65497830364
Status : Not Answered
Chosen Option : --

Q.9 रिक्त स्थान की पूर्ति के लिए सबसे उपयुक्त शब्द का चयन करें।

कमल का पुष्प _____ होता है।

- Ans
- 1. निर्मल
 - 2. कोमल
 - 3. विमल
 - 4. सुकोमल

Question ID : 65497830350
Status : Not Answered
Chosen Option : --

Q.10 दिए गए वाक्य का वह भाग ज्ञात करें जिसमें कोई त्रुटि है। यदि कोई त्रुटि नहीं है, तो 'कोई त्रुटि नहीं है' चुनें।

नदियों के (1)/ बाढ़ ने (2)/ तबाही मचा दी है (3)/ कोई त्रुटि नहीं है (4)

- Ans
- 1. 2
 - 2. 3
 - 3. 4
 - 4. 1

Question ID : 65497830351
Status : Not Answered
Chosen Option : --

Q.11 निम्न चार विकल्पों में से, उस विकल्प का चयन करें जो दिए गये मुहावरे का अर्थ व्यक्त करता है-

चटनी हो जाना

- Ans
- 1. बर्बाद हो जाना
 - 2. कुचल जाना
 - 3. बहुत जल्द खर्च हो जाना
 - 4. पिस जाना

Question ID : 65497830348
Status : Not Answered
Chosen Option : --

Q.12 'गिरि' का पर्यायवाची है-

- Ans
- 1. आकाश
 - 2. धरती
 - 3. पर्वत
 - 4. बादल

Question ID : 65497830359
Status : Not Answered
Chosen Option : --

Q.13 दिये गये वाक्य में रेखांकित अश को प्रतिस्थापित करने के लिए सबसे उपयुक्त विकल्प का चयन करें।

भारत एक ताकतवर देश है।

- Ans
- 1. शक्तिशाली
 - 2. प्रभावशाली
 - 3. दुर्बल
 - 4. अविकसित

Question ID : 65497830360
Status : Not Answered
Chosen Option : --

Q.14 'जिसे त्याग देना उचित हो' वाक्यांश के लिए एक शब्द होगा-

- Ans
- 1. त्याज्य
 - 2. त्यागी
 - 3. वाछनीय
 - 4. त्यागपत्र

Question ID : 65497830363
Status : Not Answered
Chosen Option : --

Q.15 दिए गए शब्द का विलोम चुनें।

मधुर

- Ans
- 1. तिक्त
 - 2. लवण
 - 3. अम्ल
 - 4. कटु

Question ID : 65497830353
Status : Not Answered
Chosen Option : --

Q.16 दिए गये वाक्यांश के लिए एक शब्द दीजिये-

किसी के पीछे-पीछे चलने वाला

- Ans
- 1. अनुज
 - 2. सहचर
 - 3. अनुकरणीय
 - 4. अनुगामी

Question ID : 65497830349
Status : Not Answered
Chosen Option : --

Q.17 'पाँव उखड़ना' मुहावरे का सही अर्थ है-

- Ans 1. हारकर भाग जाना
 2. घायल होना
 3. गिर पड़ना
 4. आत्मसमर्पण करना

Question ID : 65497830362
Status : Not Answered
Chosen Option : --

Q.18 निम्नलिखित में से शुद्ध वर्तनी वाला शब्द कौन सा है?

- Ans 1. उज्ज्वल
 2. उज्वल
 3. उजवल
 4. उज्ज्वल

Question ID : 65497830357
Status : Not Answered
Chosen Option : --

Q.19 दिए गए शब्द के विलोम शब्द का चयन करें-

सहित

- Ans 1. असहित
 2. विमुख
 3. असीम
 4. विहीन

Question ID : 65497830347
Status : Not Answered
Chosen Option : --

Q.20 रिक्त स्थान की पूर्ति के लिए सबसे उपयुक्त शब्द का चयन करें।

आजकल वहाँ काफी सरगर्मी _____ है।

- Ans 1. दिखती
 2. वायवीय
 3. सभावित
 4. दृष्टिकोण

Question ID : 65497830355
Status : Not Answered
Chosen Option : --

Comprehension:

दिए गए गद्यांश में से कुछ शब्द हटा दिए गए हैं। विकल्पों की सहायता से प्रत्येक सखा के लिए सबसे उपयुक्त विकल्प का चयन करें।

सगीत का मानव- (1) _____ में विशेष स्थान है। प्रकृति का कण-कण सगीत से (2) _____ है। बाल-वृद्ध, नर-नारी सभी अनादि काल से उससे (3) _____ होते आये हैं और सदैव होते रहेंगे। शिशु की (4) _____ में, सरिता के (5) _____ निनाद में सगीत ही तो है।

SubQuestion No : 21

Q.21 गद्यांश के रिक्त स्थान (1) के लिए सर्वाधिक उपयुक्त शब्द होगा-

- Ans** 1. मस्तिष्क
 2. जीवन
 3. हृदय
 4. ससार

Question ID : **65497830366**

Status : **Not Answered**

Chosen Option : --

Comprehension:

दिए गए गद्यांश में से कुछ शब्द हटा दिए गए हैं। विकल्पों की सहायता से प्रत्येक सखा के लिए सबसे उपयुक्त विकल्प का चयन करें।

सगीत का मानव- (1) _____ में विशेष स्थान है। प्रकृति का कण-कण सगीत से (2) _____ है। बाल-वृद्ध, नर-नारी सभी अनादि काल से उससे (3) _____ होते आये हैं और सदैव होते रहेंगे। शिशु की (4) _____ में, सरिता के (5) _____ निनाद में सगीत ही तो है।

SubQuestion No : 22

Q.22 गद्यांश के रिक्त स्थान (2) के लिए सर्वाधिक उपयुक्त शब्द होगा-

- Ans** 1. ओत-प्रोत
 2. सराबोर
 3. डूबा
 4. भीगा

Question ID : **65497830367**

Status : **Not Answered**

Chosen Option : --

Comprehension:

दिए गए गद्यांश में से कुछ शब्द हटा दिए गए हैं। विकल्पों की सहायता से प्रत्येक सखा के लिए सबसे उपयुक्त विकल्प का चयन करें।

सगीत का मानव- (1) _____ में विशेष स्थान है। प्रकृति का कण-कण सगीत से (2) _____ है। बाल-वृद्ध, नर-नारी सभी अनादि काल से उससे (3) _____ होते आये हैं और सदैव होते रहेंगे। शिशु की (4) _____ में, सरिता के (5) _____ निनाद में सगीत ही तो है।

SubQuestion No : 23

Q.23 गद्यांश के रिक्त स्थान (3) के लिए सर्वाधिक उपयुक्त शब्द होगा-

- Ans** 1. तृप्त
 2. गतिशील
 3. सचालित
 4. प्रभावित

Question ID : **65497830368**

Status : **Not Answered**

Chosen Option : --

Comprehension:

दिए गए गद्यांश में से कुछ शब्द हटा दिए गए हैं। विकल्पों की सहायता से प्रत्येक सखा के लिए सबसे उपयुक्त विकल्प का चयन करें।

सगीत का मानव- (1) _____ में विशेष स्थान है। प्रकृति का कण-कण सगीत से (2) _____ है। बाल-वृद्ध, नर-नारी सभी अनादि काल से उससे (3) _____ होते आये हैं और सदैव होते रहेंगे। शिशु की (4) _____ में, सरिता के (5) _____ निनाद में सगीत ही तो है।

SubQuestion No : 24

Q.24 गद्यांश के रिक्त स्थान (4) के लिए सर्वाधिक उपयुक्त शब्द होगा-

- Ans**
- 1. हलचल
 - 2. नटखटपन
 - 3. कलरव
 - 4. मुस्कान

Question ID : **65497830369**

Status : **Not Answered**

Chosen Option : --

Comprehension:

दिए गए गद्यांश में से कुछ शब्द हटा दिए गए हैं। विकल्पों की सहायता से प्रत्येक सखा के लिए सबसे उपयुक्त विकल्प का चयन करें।

सगीत का मानव- (1) _____ में विशेष स्थान है। प्रकृति का कण-कण सगीत से (2) _____ है। बाल-वृद्ध, नर-नारी सभी अनादि काल से उससे (3) _____ होते आये हैं और सदैव होते रहेंगे। शिशु की (4) _____ में, सरिता के (5) _____ निनाद में सगीत ही तो है।

SubQuestion No : 25

Q.25 गद्यांश के रिक्त स्थान (5) के लिए सर्वाधिक उपयुक्त शब्द होगा-

- Ans**
- 1. छुल-छुल
 - 2. छल-छल
 - 3. कल-कल
 - 4. झर-झर

Question ID : **65497830370**

Status : **Not Answered**

Chosen Option : --