

Exam Date	18/11/2021
Exam Time :	9:00 AM - 10:30 AM
Subject	Constable GD 2021

Section : Part A General Intelligence and Reasoning

Q.1 Select the number from among the given options that can replace the question mark (?) in the following series.

38, 42, 58, 94, ?, 258

- Ans
- 1. 164
 - 2. 108
 - 3. 152
 - 4. 158

Question ID : 65497833684
Status : Answered
Chosen Option : 4

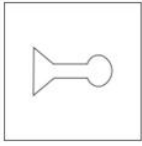
Q.2 उस विकल्प का चयन करें जो तीसरे अक्षर-समूह से उसी प्रकार संबंधित है, जिस प्रकार दूसरा अक्षर-समूह पहले अक्षर-समूह से संबंधित है।

DHM : GCX :: KOT : ?

- Ans
- 1. NJE
 - 2. NHD
 - 3. NIE
 - 4. NKL

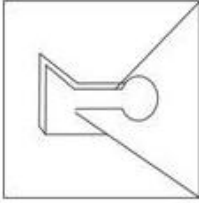
Question ID : 65497833686
Status : Answered
Chosen Option : 1

Q.3 उस विकल्प का चयन करें जिसमें दी गई आकृति अंतर्निहित है (घुमाने की अनुमति नहीं है)।

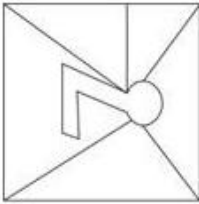


Ans


✗ 1.



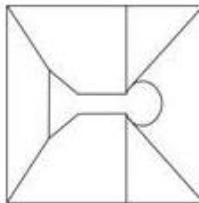
✗ 2.



✗ 3.



✓ 4.



Question ID : 65497833677

Status : Answered

Chosen Option : 4

Q.4 उन अक्षरों के संयोजन का चयन करें जिसे दी गई श्रृंखला के रिक्त स्थान में क्रमिक रूप से रखे जाने पर श्रृंखला पूर्ण होगी।

P E _ _ L E P _ _ P L E _ _ O P _ _

Ans ✗ 1. OPEOPLEE

✗ 2. OPOEPELE

✓ 3. OPEOPELE

✗ 4. OPOEEPLE

Question ID : 65497833690

Status : Answered

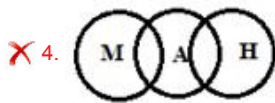
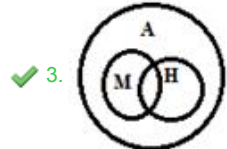
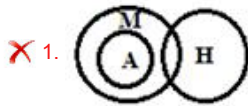
Chosen Option : 3

Q.5 Select the Venn diagram that best represents the relationship between the following classes.

Human, Male, Animal

(H: Human; M: Male; A: Animal)

Ans



Question ID : 65497833681

Status : Answered

Chosen Option : 1

Q.6 दिए गए विकल्पों में से उस अक्षर-समूह का चयन कीजिए जो निम्न श्रृंखला में प्रश्नवाचक चिह्न (?) के स्थान पर आ सकता है।

YEM, BHP, EKS, HNV, ?

Ans ✓ 1. KQY

✗ 2. KRX

✗ 3. LNU

✗ 4. KPZ

Question ID : 65497833678

Status : Answered

Chosen Option : 1

Q.7 Read the given statements and conclusions carefully. Assuming that the information given in the statements is true, even if it appears to be at variance with commonly known facts, decide which of the given conclusions logically follow(s) from the statements.

Statements:

All kites are planes.

All planes are papers.

Conclusions:

I. All kites are papers.

II. No paper is a plane.

Ans ✗ 1. Neither conclusion I nor II follows

✗ 2. Both conclusions I and II follow

✗ 3. Only conclusion II follows

✓ 4. Only conclusion I follows

Question ID : 65497833694

Status : Answered

Chosen Option : 4

Q.8 Six friends, A, B, C, D, E and F, are sitting opposite to each other in a circle, facing towards the centre. C and D are adjacent to each other. Also, B and F are adjacent to each other. E is sitting opposite to B. F is sitting to the left of B. Who is sitting between E and F?

- Ans 1. A
 2. F
 3. E
 4. B

Question ID : 65497833680
Status : Answered
Chosen Option : 1

Q.9 'cloth' is related to 'Cotton' in the same way as 'Flour' is related to '_____'.
Ans 1. Food
 2. Chapatti
 3. Wheat
 4. Tiles

Question ID : 65497833679
Status : Answered
Chosen Option : 3

Q.10 In a certain code language, REMAIN is coded as 92214261813. How will MACHINE be coded in that language?
Ans 1. 131389145
 2. 14262419181322
 3. 22131819242614
 4. 514981313

Question ID : 65497833683
Status : Answered
Chosen Option : 2

Q.11 If, $5 + 7 = 473 + 8 = 359 + 2 = 29$ then, $7 + 4 = ?$
Ans 1. 42
 2. 45
 3. 37
 4. 39

Question ID : 65497833696
Status : Not Answered
Chosen Option : --

Q.12 Study the given pattern carefully and select the number that can replace the question mark (?) in it.

7 343 3
5 ? 4
2 256 8

- Ans
- 1. 225
 - 2. 250
 - 3. 525
 - 4. 625

Question ID : 65497833695
Status : Answered
Chosen Option : 4

Q.13 उस विकल्प का चयन करें जो तीसरी संख्या से उसी प्रकार संबंधित है जिस प्रकार दूसरी संख्या पहली संख्या से संबंधित है।

7 : 56 :: 13 : ?

- Ans
- 1. 92
 - 2. 78
 - 3. 67
 - 4. 104

Question ID : 65497833674
Status : Answered
Chosen Option : 4

Q.14 Six friends, Ravi, Kavya, Mahima, Gita, Mohan and Neha, are sitting in a straight line, all facing the north. Kavya is not sitting at either of the ends. Neha is sitting between Ravi and Mohan. Mohan is sitting to the immediate right of Gita. There are three friends sitting between Ravi and Kavya. Kavya is sitting to the immediate right of Mahima. Who is sitting at the fifth position from the left end?

- Ans
- 1. Gita
 - 2. Neha
 - 3. Kavya
 - 4. Mohan

Question ID : 65497833673
Status : Answered
Chosen Option : 3

Q.15 Which two numbers (NOT digits) should be interchanged to make the given equation correct?

$5 \times 40 \div 8 + 3 - 14 = 53$

- Ans
- 1. 8 and 14
 - 2. 5 and 3
 - 3. 5 and 8
 - 4. 8 and 3

Question ID : 65497833675
Status : Answered
Chosen Option : 3

Q.16 Select the correct option that indicates the arrangement of the given words in the order in which they appear in an English dictionary.

1. Goffer
2. Goblin
3. Goatling
4. Goatish
5. Goer

- Ans
- 1. 4, 2, 3, 5, 1
 - 2. 4, 3, 2, 5, 1
 - 3. 4, 3, 5, 2, 1
 - 4. 4, 2, 5, 3, 1

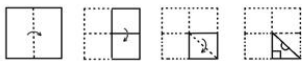
Question ID : 65497833689
Status : Answered
Chosen Option : 2

Q.17 In a certain code language, 'LECTURE' is written as 'MGFXZXL' and 'TEACHER' is written as 'UGDGMKY'. How will 'STUDENT' be written in that language?

- Ans
- 1. TVXJHTA
 - 2. TVWHJTA
 - 3. TVXHJTA
 - 4. TVVJHTA

Question ID : 65497833687
Status : Answered
Chosen Option : 3

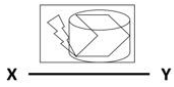
Q.18 The sequence of folding a piece of paper and the manner in which the folded paper has been cut is shown in the following figures. How would this paper look when unfolded?



- Ans
- 1.
 - 2.
 - 3.
 - 4.

Question ID : 65497833697
Status : Answered
Chosen Option : 3

Q.19 दिए गए संयोजन के सही दर्पण प्रतिबिंब का चयन करें, जब दर्पण को दिखाए गए अनुसार XY पर रखा गया है।



Ans



Question ID : 65497833685
Status : Answered
Chosen Option : 2

Q.20 चार अक्षर-समूह दिए गए हैं जिनमें से तीन किसी तरीके से समान हैं और एक भिन्न है। भिन्न अक्षर-समूह को चुनिए।

Ans ✓ 1. NTD

✗ 2. RTI

✗ 3. QSJ

✗ 4. EGV

Question ID : 65497833682
Status : Answered
Chosen Option : 1

Q.21 Two different positions of the same dice marked with the numbers 4, 5, 6, 7, 8 and 9 are shown.
Select the number that will be on the face opposite to the face having the number '9'.



Ans ✗ 1. 8

✗ 2. 6

✓ 3. 7

✗ 4. 4

Question ID : 65497833676
Status : Answered
Chosen Option : 3

Q.22 विकल्पों से वह चित्र चुनें जिसे प्रश्न चिह्न (?) के स्थान पर रखा जा सकता है और दिए गए पैटर्न को पूरा किया जा सकता है (धुमने की अनुमति नहीं है)।



Ans

✓ 1.



✗ 2.



✗ 3.



✗ 4.



Question ID : 65497833692

Status : Answered

Chosen Option : 4

Q.23 In a certain code language, 'BOOK' is written as 'CRTR'. How will 'PETROL' be written in that language?

Ans

✗ 1. QIXYYW

✓ 2. QHYXXW

✗ 3. HYXXW

✗ 4. QHXYYW

Question ID : 65497833693

Status : Answered

Chosen Option : 2

Q.24 दिए गए विकल्पों में से वह संख्या चुनें जिसे नीचे दी गई श्रृंखला में प्रश्न चिह्न (?) के स्थान पर रखा जा सकता है।

9, 14, 34, 114, ?, 1714

Ans

✗ 1. 524

✗ 2. 914

✗ 3. 654

✓ 4. 434

Question ID : 65497833691

Status : Answered

Chosen Option : 4

Q.25 L is the mother of M. L has only two children. N is the sister of M. N is the daughter of K. Z is the grandson of K. O is the mother of Z. How is O related to N?

- Ans
- 1. Sister
 - 2. Mother
 - 3. Wife
 - 4. Sister-in-law

Question ID : 65497833688
Status : Answered
Chosen Option : 4

Section : Part B General Knowledge and General Awareness

Q.1 The Right to Information Act is a good example of a law and it has more chances of working because:

- Ans
- 1. it eases penalties on frauds
 - 2. it acts as an enemy of democracy
 - 3. it supplements laws that encourage corruption
 - 4. it empowers people to find out what is happening in the government

Question ID : 65497833714
Status : Answered
Chosen Option : 4

Q.2 In which of the following states is Saryu river located?

- Ans
- 1. West Bengal
 - 2. Himachal Pradesh
 - 3. Uttarakhand
 - 4. Chhattisgarh

Question ID : 65497833704
Status : Answered
Chosen Option : 3

Q.3 Different crops grown in alternate rows is an example of:

- Ans
- 1. intercropping
 - 2. contour cropping
 - 3. combined cropping
 - 4. mixed cropping

Question ID : 65497833711
Status : Answered
Chosen Option : 4

Q.4 What was the rank of India in the final medals tally of Commonwealth Games 2018?

- Ans
- 1. Third
 - 2. Fourth
 - 3. Fifth
 - 4. Second

Question ID : 65497833715
Status : Not Answered
Chosen Option : --

Q.5 Ballabgarh became an important trading centre under the leadership of the Jat ruler

- Ans 1. Raja Ram
 2. Suraj Mal
 3. Randhir Singh
 4. Badan Singh

Question ID : 65497833713
Status : Not Answered
Chosen Option : --

Q.6 Which of the following is NOT an abiotic component of the eco system?

- Ans 1. Temperature
 2. Living organisms
 3. Minerals
 4. Wind

Question ID : 65497833717
Status : Answered
Chosen Option : 2

Q.7 In which of the following countries was paper invented approximately 1900 years ago?

- Ans 1. Japan
 2. China
 3. Nepal
 4. India

Question ID : 65497833718
Status : Answered
Chosen Option : 2

Q.8 In which of the following places is the Vulture Conservation and Breeding Centre located?

- Ans 1. Pushkar
 2. Pinjore
 3. Rampur
 4. Agra

Question ID : 65497833701
Status : Answered
Chosen Option : 3

Q.9 Where is the active volcano found in India?

- Ans 1. Lakshadweep
 2. Andaman and Nicobar
 3. Goa
 4. Puducherry

Question ID : 65497833708
Status : Answered
Chosen Option : 2

Q.10 Which of the following is non-justiciable in nature in Indian Constitution?

- Ans
- 1. Equality of law and equal protection of law
 - 2. Protection with respect to conviction of offences
 - 3. Equal justice and free legal aid
 - 4. Freedom to manage religious affairs

Question ID : 65497833705
Status : Answered
Chosen Option : 3

Q.11 In which state was the special awareness campaign for women 'Mission Shakti' launched in October 2020?

- Ans
- 1. Bihar
 - 2. Madhya Pradesh
 - 3. Uttar Pradesh
 - 4. Punjab

Question ID : 65497833706
Status : Answered
Chosen Option : 3

Q.12 Who was the Governor General of British India when the annexation of Punjab was carried out by the Britishers?

- Ans
- 1. Lord Canning
 - 2. Lord Dalhousie
 - 3. Lord Harding
 - 4. Lord Ellenborough

Question ID : 65497833722
Status : Answered
Chosen Option : 2

Q.13 The Kelkar Committee 2015 is related to the _____.

- Ans
- 1. calculation of GDP
 - 2. fixation of poverty line
 - 3. merger of banks
 - 4. PPP model of infrastructure development

Question ID : 65497833699
Status : Answered
Chosen Option : 4

Q.14 According to the Public Affairs Index 2020, which among the following has been adjudged the best governed union territory in the category of UTs?

- Ans
- 1. Puducherry
 - 2. Chandigarh
 - 3. Ladakh
 - 4. Jammu and Kashmir

Question ID : 65497833716
Status : Answered
Chosen Option : 2

Q.15 Who among the following was adjudged as the 'Most Valuable Player of the Tournament' at the Indian Premier League 2020?

- Ans
- 1. Jasprit Bumrah
 - 2. Kagiso Rabada
 - 3. KL Rahul
 - 4. Jofra Archer

Question ID : **65497833703**
Status : **Answered**
Chosen Option : **2**

Q.16 In which year did the first Bengali woman writer Ashapurna Devi win the Jnanpith Award?

- Ans
- 1. 1974
 - 2. 1976
 - 3. 1975
 - 4. 1973

Question ID : **65497833709**
Status : **Answered**
Chosen Option : **2**

Q.17 Which private bank launched a remote payment service named 'SMS Pay' for merchants on 26 November 2020?

- Ans
- 1. Axis Bank
 - 2. ICICI Bank
 - 3. Yes Bank
 - 4. HDFC Bank

Question ID : **65497833721**
Status : **Answered**
Chosen Option : **2**

Q.18 To which nation does swimmer Gaurika Singh, who was the youngest athlete in Rio Olympics 2016, belong to?

- Ans
- 1. Pakistan
 - 2. Nepal
 - 3. Bangladesh
 - 4. India

Question ID : **65497833710**
Status : **Answered**
Chosen Option : **4**

Q.19 Which of the following countries is the second largest cotton producer in the world as of October 2020?

- Ans
- 1. T bet
 - 2. Bangladesh
 - 3. India
 - 4. China

Question ID : **65497833719**
Status : **Answered**
Chosen Option : **4**

Q.20 Who among the following was the recipient of the 29th Vyas Samman?

- Ans 1. Leeladhar Jagoori
 2. Nasera Sharma
 3. Surendra Verma
 4. Mamta Kalia

Question ID : 65497833702
Status : Answered
Chosen Option : 1

Q.21 Salla dance form is performed in the state of _____.

- Ans 1. Jharkhand
 2. Uttar Pradesh
 3. Chhattisgarh
 4. Uttarakhand

Question ID : 65497833707
Status : Answered
Chosen Option : 1

Q.22 _____ is secreted by the pineal gland.

- Ans 1. Melatonin
 2. Progesterone
 3. Epinephrine
 4. Insulin

Question ID : 65497833700
Status : Answered
Chosen Option : 1

Q.23 Which of the following temples is located in Sri Lanka?

- Ans 1. Munneswaram
 2. Preah Vihear
 3. Katas Raj
 4. Pashupatinath

Question ID : 65497833698
Status : Not Answered
Chosen Option : --

Q.24 Muhammad Tughluq used 'token' currency to pay his soldiers, which was made out of:

- Ans 1. silver
 2. precious gold
 3. bronze
 4. cheap metals

Question ID : 65497833712
Status : Answered
Chosen Option : 2

Q.25 Reserve Bank of India put which bank under moratorium in November 2020?

- Ans**
- 1. State Bank of India
 - 2. Lakshmi Vilas Bank
 - 3. Bank of India
 - 4. Bank of Baroda

Question ID : 65497833720
Status : Answered
Chosen Option : 2

Section : Part C Elementary Mathematics

Q.1 Two positive numbers are in the ratio of 7 : 4. If the difference between their squares is 297, then the sum of the two numbers is:

- Ans**
- 1. 35
 - 2. 33
 - 3. 32
 - 4. 42

Question ID : 65497833727
Status : Answered
Chosen Option : 2

Q.2 A fruit seller had some apples. He sold 40% apples and still had 540 apples. The number of apples he had originally was:

- Ans**
- 1. 600
 - 2. 800
 - 3. 740
 - 4. 900

Question ID : 65497833733
Status : Answered
Chosen Option : 4

Q.3 Excluding stoppages, the speed of a bus is 60 km/h and including stoppages, it is 42 km/h. For how many minutes does the bus stop per hour?

- Ans**
- 1. 12
 - 2. 18
 - 3. 9
 - 4. 10

Question ID : 65497833735
Status : Answered
Chosen Option : 2

Q.4 In a sale, perfumes are available at a discount of 25% on the selling price. If a perfume costs ₹6,873 in the sale, what is the original selling price of the perfume?

- Ans**
- 1. ₹9,146
 - 2. ₹9,066
 - 3. ₹9,064
 - 4. ₹9,164

Question ID : 65497833732
Status : Not Answered
Chosen Option : --

Q.5 What is the compound interest (in ₹, nearest to a ₹) on a sum of ₹8,000 for $2\frac{1}{8}$ years at the rate of 16% p.a., interest compounded yearly?

- Ans**
- 1. 2,840
 - 2. 2,790
 - 3. 2,765
 - 4. 2,980

Question ID : 65497833745
Status : Not Answered
Chosen Option : --

Q.6 The monthly salaries of an officer and a clerk are in the ratio 11 : 4. If the monthly salary of the officer increases by ₹7,000 and that of the clerk by ₹3,000, then the ratio becomes 19 : 7. What was the initial salary (in ₹) of the officer?

- Ans**
- 1. 88,000
 - 2. 1,52,000
 - 3. 56,000
 - 4. 32,000

Question ID : 65497833725
Status : Answered
Chosen Option : 1

Q.7 One year ago, the ratio of the ages of A and B was 4 : 3. The ratio of their ages, after 7 years from now, will be 9 : 7. What is the present age (in years) of B?

- Ans**
- 1. 49
 - 2. 52
 - 3. 51
 - 4. 48

Question ID : 65497833744
Status : Answered
Chosen Option : 4

Q.8 The HCF of 3073, 1756 and 4829 is x . The product of the digits of x is:

- Ans
- 1. 96
 - 2. 72
 - 3. 81
 - 4. 108

Question ID : 65497833742
Status : Not Answered
Chosen Option : --

Q.9 Find the compound interest, if ₹3,000 was invested for 3 years at 20% p.a., interest compounded half yearly (nearest to a rupee).

- Ans
- 1. ₹2,010
 - 2. ₹2,301
 - 3. ₹2,110
 - 4. ₹2,315

Question ID : 65497833730
Status : Not Answered
Chosen Option : --

Q.10 Aman spends 74% of his income. If his expenditure increases by 30% and savings increase by 25%, then by what percentage will his income increase?

- Ans
- 1. 28.7%
 - 2. 26.8%
 - 3. 27.8%
 - 4. 27.2%

Question ID : 65497833743
Status : Answered
Chosen Option : 1

Q.11 The area (in m^2) of a triangular field, whose sides are 85 m, 85 m and 154 m, is:

- Ans
- 1. 2768
 - 2. 2872
 - 3. 2772
 - 4. 2868

Question ID : 65497833746
Status : Not Answered
Chosen Option : --

Q.12 15 boys can complete a work in 10 days and 12 girls can complete the same work in 15 days. If all 15 boys and 12 girls work together, in how many days, will the work get completed?

- Ans**
- 1. 6
 - 2. 8
 - 3. 4
 - 4. 5

Question ID : 65497833739
Status : Answered
Chosen Option : 1

Q.13 By selling a guitar for ₹846, Rakhi loses 6%. For how much should Rima sell it to gain 8%?

- Ans**
- 1. ₹912
 - 2. ₹992
 - 3. ₹972
 - 4. ₹922

Question ID : 65497833729
Status : Answered
Chosen Option : 3

Q.14 If the volume of a cube is $192\sqrt{3}$ cubic cm, then the length of its diagonal is:

- Ans**
- 1. 16 cm
 - 2. 14 cm
 - 3. 13 cm
 - 4. 12 cm

Question ID : 65497833728
Status : Answered
Chosen Option : 4

Q.15 $\left(\frac{1}{4} \times \frac{3}{4} \div 1\frac{1}{4} \text{ of } \frac{2}{5}\right) \div \left(\frac{3}{4} \div 1\frac{2}{3} \text{ of } \frac{4}{5}\right) - \left(\frac{1}{2} - \frac{1}{2} \times \frac{1}{4}\right)$ का मान कितना होगा?

- Ans**
- 1. $\frac{7}{24}$
 - 2. $\frac{2}{3}$
 - 3. $\frac{5}{12}$
 - 4. $\frac{11}{12}$

Question ID : 65497833740
Status : Answered
Chosen Option : 1

Q.16 The average of six numbers A, B, C, D, E and F is 58. If the first number A is two-fifth of the sum of B and C, and is also equal to three-fourth of the sum of D, E and F, then what is the value of the sum of B and C?

- Ans**
- 1. 180
 - 2. 360
 - 3. 116
 - 4. 240

Question ID : 65497833724
Status : Not Answered
Chosen Option : --

Q.17 Which is the greatest number of seven digits, which when divided by 10, 15, 20, 24 and 30, leaves the remainders 6, 11, 16, 20 and 26, respectively?

- Ans**
- 1. 9999960
 - 2. 9999956
 - 3. 9999980
 - 4. 9999976

Question ID : 65497833723
Status : Answered
Chosen Option : 2

Q.18 A can complete a work in 10 days and B can complete it in 15 days. If they work on it together for 5 days, then the fraction of the work left will be:

- Ans**
- 1. $\frac{1}{6}$
 - 2. $\frac{1}{2}$
 - 3. $\frac{1}{3}$
 - 4. $\frac{1}{8}$

Question ID : 65497833734
Status : Answered
Chosen Option : 1

Q.19 One-third of the goods are sold at 15% profit, 25% of the goods are sold at 20% profit, and the rest of the goods are sold at 10% loss. If a profit of ₹350 is earned in the entire transaction, then the original value of the goods (in ₹) is:

- Ans**
- 1. 5,400
 - 2. 7,200
 - 3. 9,000
 - 4. 6,000

Question ID : 65497833747
Status : Not Answered
Chosen Option : --

Q.20 $12 - [3 + \{4 \text{ of } 2 \div 8 - (8 - 6 \div 3)\}]$ का मान ज्ञात कीजिए।

- Ans
- 1. 20
 - 2. 12
 - 3. 14
 - 4. 10

Question ID : 65497833737
Status : Answered
Chosen Option : 3

Q.21 A man incurred 8% loss by selling a TV for ₹18,400. At what price should the TV be sold to earn 5% profit?

- Ans
- 1. ₹ 22,500
 - 2. ₹ 24,000
 - 3. ₹ 21,725
 - 4. ₹ 21,000

Question ID : 65497833738
Status : Answered
Chosen Option : 4

Q.22 The distance between two stations A and B is 700 km. A train covers the journey from A to B at a speed of 80 km/h and returns back to A with a uniform speed of 65 km/h. The average speed of train during the whole journey, is closest to:

- Ans
- 1. 74 km/h
 - 2. 71.72 km/h
 - 3. 72.7 km/h
 - 4. 70.73 km/h

Question ID : 65497833731
Status : Answered
Chosen Option : 2

Q.23 A single discount equivalent to three successive discounts i.e. 7%, 12% and 5%, is:

- Ans
- 1. 23%
 - 2. 27.3%
 - 3. 22.252%
 - 4. 22%

Question ID : 65497833736
Status : Answered
Chosen Option : 1

Q.24 A certain sum amounts to ₹12,740 in 4 years and to ₹15,925 in $7\frac{1}{2}$ years at the same rate percentage per annum at simple interest. The sum (in ₹) and the rate percentage per annum, respectively, are:

- Ans**
- 1. ₹7,800; 10%
 - 2. ₹9,100; 10%
 - 3. ₹7,800; 7.5%
 - 4. ₹9,100; 7.5%

Question ID : 65497833726
Status : Not Answered
Chosen Option : --

Q.25 A 253 m long train running at a speed of 60 km/h takes 42 seconds to cross a bridge. The length (in m) of the bridge is:

- Ans**
- 1. 447
 - 2. 435
 - 3. 443
 - 4. 427

Question ID : 65497833741
Status : Answered
Chosen Option : 1

Section : Part D English

Q.1 Select the most appropriate synonym of the given word.

Enjoyable

- Ans**
- 1. Bright
 - 2. Cloudy
 - 3. Delightful
 - 4. Beautiful

Question ID : 65497833754
Status : Not Answered
Chosen Option : --

Q.2 Select the most appropriate synonym of the given word.

DEFER

- Ans**
- 1. Conflict
 - 2. Postpone
 - 3. Balance
 - 4. Match

Question ID : 65497833765
Status : Not Answered
Chosen Option : --

Q.3 Select the option that can be used as a one-word substitute for the given group of words.

Certain to happen

- Ans 1. Necessary
 2. Predicted
 3. Inevitable
 4. Avoidable

Question ID : 65497833761
Status : Not Answered
Chosen Option : --

Q.4 Select the most appropriate ANTONYM of the given word.

Reign

- Ans 1. Manage
 2. Yield
 3. Govern
 4. Influence

Question ID : 65497833755
Status : Not Answered
Chosen Option : --

Q.5 Select the most appropriate option that can substitute the underlined segment in the given sentence. If there is no need to substitute it, select 'No substitution required'.

Don't disturb me while I talk to someone on the phone.

- Ans 1. talked
 2. am ta king
 3. was talking
 4. No substitution required

Question ID : 65497833748
Status : Not Answered
Chosen Option : --

Q.6 Select the most appropriate option to fill in the blank.

This antique sculpture is indeed _____.

- Ans 1. endless
 2. priceless
 3. helpless
 4. harmless

Question ID : 65497833767
Status : Not Answered
Chosen Option : --

Q.7 Select the option that can be used as a one-word substitute for the given group of words.

Eskimo's house that is made of ice blocks

- Ans
- 1. Igloo
 - 2. Burrow
 - 3. Den
 - 4. Cave

Question ID : 65497833749
Status : Not Answered
Chosen Option : --

Q.8 The following sentence has been split into four segments. Identify the segment that contains a grammatical error.

Who do you think / who stole / the painting / from the museum?

- Ans
- 1. Who do you think
 - 2. the painting
 - 3. from the museum
 - 4. who stole

Question ID : 65497833759
Status : Not Answered
Chosen Option : --

Q.9 Select the option that can be used as a one-word substitute for the given group of words.

Unable to act

- Ans
- 1. Inert
 - 2. Lazy
 - 3. Idle
 - 4. Lax

Question ID : 65497833766
Status : Not Answered
Chosen Option : --

Q.10 Select the most appropriate meaning of the given idiom.

Big bucks

- Ans
- 1. A lot of money
 - 2. A big function
 - 3. A big bucket
 - 4. A big loss

Question ID : 65497833756
Status : Not Answered
Chosen Option : --

Q.11 Select the most appropriate option to fill in the blank.

He ran towards his mother _____ and hugged her.

- Ans 1. gaily
 2. spitefully
 3. partially
 4. eventually

Question ID : 65497833751
Status : Not Answered
Chosen Option : --

Q.12 Select the INCORRECTLY spelt word.

- Ans 1. Miscreant
 2. Misalliance
 3. Misrepresent
 4. Miscelleneous

Question ID : 65497833762
Status : Not Answered
Chosen Option : --

Q.13 Select the correctly spelt word.

- Ans 1. Bureaucracy
 2. Scavange
 3. Warriar
 4. Inheritance

Question ID : 65497833750
Status : Not Answered
Chosen Option : --

Q.14 The following sentence has been divided into parts. One of them may contain an error. Select the part that contains the error from the given options. If you don't find any error, mark 'No error' as your answer.

Reva is / one of Gita's best friend / in the class.

- Ans 1. one of Gita's best friend
 2. No error
 3. in the class
 4. Reva is

Question ID : 65497833764
Status : Not Answered
Chosen Option : --

Q.15 Select the most appropriate option that can substitute the underlined segment in the given sentence. If there is no need to substitute it, select 'No substitution required'.

I thanked my teacher for explaining me the lesson.

- Ans
- 1. explaining the lesson to me
 - 2. her explaining me the lesson
 - 3. explain me the lessons
 - 4. No substitution required

Question ID : 65497833758
Status : Not Answered
Chosen Option : --

Q.16 Select the most appropriate option that can substitute the underlined segment in the given sentence. If there is no need to substitute it, select 'No substitution required'.

The laptop that I bought last week works very good.

- Ans
- 1. very well
 - 2. very nice
 - 3. too good
 - 4. No substitution required

Question ID : 65497833757
Status : Not Answered
Chosen Option : --

Q.17 Select the most appropriate ANTONYM of the given word.

Crisp

- Ans
- 1. Hard
 - 2. Fresh
 - 3. Rotten
 - 4. Tender

Question ID : 65497833760
Status : Not Answered
Chosen Option : --

Q.18 Select the most appropriate meaning of the given idiom.

To break loose

- Ans
- 1. To escape
 - 2. To untie
 - 3. To set free
 - 4. To let go

Question ID : 65497833763
Status : Not Answered
Chosen Option : --

Q.19 The following sentence has been split into four segments. Identify the segment that contains a grammatical error.

The mountain / seems to steep / for us / to climb.

- Ans
- 1. The mountain
 - 2. to climb
 - 3. for us
 - 4. seems to steep

Question ID : 65497833753
Status : Not Answered
Chosen Option : --

Q.20 Select the most appropriate option to fill in the blank.

Visitors come from all over the world to _____ the Shalimar Gardens.

- Ans
- 1. perceive
 - 2. observe
 - 3. see
 - 4. look

Question ID : 65497833752
Status : Not Answered
Chosen Option : --

Comprehension:

In the following passage, some words have been deleted. Read the passage carefully and select the most appropriate option to fill in each blank.

Mahatma Gandhi was born (1)_____ 2 October 1869 to Karamchand and Putlibai (2)_____ Porbandar. After completing his studies in England, he (3)_____ to South Africa. When he suffered (4)_____, he started the Civil Disobedience movement (5)_____ civil rights of the Indian community.

SubQuestion No : 21

Q.21 Select the most appropriate option to fill in blank no. 1.

- Ans
- 1. from
 - 2. of
 - 3. on
 - 4. in

Question ID : 65497833769
Status : Not Answered
Chosen Option : --

Comprehension:

In the following passage, some words have been deleted. Read the passage carefully and select the most appropriate option to fill in each blank.

Mahatma Gandhi was born (1)_____ 2 October 1869 to Karamchand and Putlibai (2)_____ Porbandar. After completing his studies in England, he (3)_____ to South Africa. When he suffered (4)_____, he started the Civil Disobedience movement (5)_____ civil rights of the Indian community.

SubQuestion No : 22

Q.22 Select the most appropriate option to fill in blank no. 2.

- Ans 1. at
 2. through
 3. above
 4. below

Question ID : **65497833770**
Status : **Not Answered**
Chosen Option : --

Comprehension:

In the following passage, some words have been deleted. Read the passage carefully and select the most appropriate option to fill in each blank.

Mahatma Gandhi was born (1)_____ 2 October 1869 to Karamchand and Putlibai (2)_____ Porbandar. After completing his studies in England, he (3)_____ to South Africa. When he suffered (4)_____, he started the Civil Disobedience movement (5)_____ civil rights of the Indian community.

SubQuestion No : 23

Q.23 Select the most appropriate option to fill in blank no. 3.

- Ans 1. gone
 2. went
 3. going
 4. will go

Question ID : **65497833771**
Status : **Not Answered**
Chosen Option : --

Comprehension:

In the following passage, some words have been deleted. Read the passage carefully and select the most appropriate option to fill in each blank.

Mahatma Gandhi was born (1)_____ 2 October 1869 to Karamchand and Putlibai (2)_____ Porbandar. After completing his studies in England, he (3)_____ to South Africa. When he suffered (4)_____, he started the Civil Disobedience movement (5)_____ civil rights of the Indian community.

SubQuestion No : 24

Q.24 Select the most appropriate option to fill in blank no. 4.

- Ans 1. delegation
 2. discrimination
 3. deterioration
 4. distinction

Question ID : **65497833772**
Status : **Not Answered**
Chosen Option : --

Comprehension:

In the following passage, some words have been deleted. Read the passage carefully and select the most appropriate option to fill in each blank.

Mahatma Gandhi was born (1)_____ 2 October 1869 to Karamchand and Putlibai (2)_____ Porbandar. After completing his studies in England, he (3)_____ to South Africa. When he suffered (4)_____, he started the Civil Disobedience movement (5)_____ civil rights of the Indian community.

SubQuestion No : 25

Q.25 Select the most appropriate option to fill in blank no. 5.

- Ans 1. to
 2. for
 3. after
 4. with

Question ID : **65497833773**
Status : **Not Answered**
Chosen Option : --

Section : **Part D Hindi**

Q.1 _____ हमारी राजभाषा है। उचित शब्द लिखिए।

- Ans 1. संस्कृत
 2. हिन्दी
 3. गुजराती
 4. मराठी

Question ID : **65497833790**
Status : **Answered**
Chosen Option : 2

Q.2 दिए गए वाक्य में रेखांकित खंड को प्रतिस्थापित करने के लिए सबसे उपयुक्त विकल्प का चयन करें। यदि इसे प्रतिस्थापित करने की आवश्यकता नहीं है, तो विकल्प 'किसी बदलाव की आवश्यकता नहीं है' का चयन करें।

मैं आम खाया गया।

- Ans 1. मेरे को
 2. किसी बदलाव की आवश्यकता नहीं है।
 3. मुझे
 4. मुझसे

Question ID : **65497833783**
Status : **Answered**
Chosen Option : 4

Q.3 रिक्त स्थान भरने के लिए सबसे उपयुक्त शब्द का चयन करें।

मेरे ऊपर परिवार के पालन-पोषण का _____ है।

- Ans 1. निर्वहन
 2. आभार
 3. आधार
 4. दायित्व

Question ID : **65497833776**
Status : **Answered**
Chosen Option : 4

Q.4 दिए गए वाक्य में रेखांकित खंड को प्रतिस्थापित करने के लिए सबसे उपयुक्त विकल्प का चयन करें। यदि इसे प्रतिस्थापित करने की आवश्यकता नहीं है, तो विकल्प 'किसी बदलाव की आवश्यकता नहीं है' का चयन करें।

अधिक जनसंख्या अनेक समस्याओं को जन्म देता है।

- Ans
- 1. किसी बदलाव की आवश्यकता नहीं है।
 - 2. अनेक समस्याओं को जन्म देती है।
 - 3. अनेक समस्या को जन्म देती है।
 - 4. अनेक समस्याओं को जन्म देती हैं।

Question ID : 65497833777
Status : Answered
Chosen Option : 2

Q.5 'छठी का दूध याद आना' मुहावरे का सही अर्थ है-

- Ans
- 1. संकट के समय पिछले सुख की याद आना
 - 2. अतीत पर गौरवान्वित होना
 - 3. संकट के समय पिछले दुख की याद आना
 - 4. अत्यंत प्रसन्न होना

Question ID : 65497833789
Status : Answered
Chosen Option : 3

Q.6 दिये गये वाक्य के किस भाग में त्रुटि है?

केवल आप ही यह काम निपुणता से कर सकते हैं।

- Ans
- 1. निपुणता से
 - 2. केवल आप ही
 - 3. यह काम
 - 4. कर सकते हैं।

Question ID : 65497833784
Status : Answered
Chosen Option : 1

Q.7 दिए गए शब्द के समानार्थी शब्द का चयन करें।

मोल

- Ans
- 1. मुँ
 - 2. दाम
 - 3. मूल
 - 4. मलीन

Question ID : 65497833779
Status : Answered
Chosen Option : 2

Q.8 सही वर्तनी वाले शब्द का चयन करें।

- Ans 1. परिनाम
 2. परिणाम
 3. परीणाम
 4. परीनाम

Question ID : 65497833774
Status : Answered
Chosen Option : 3

Q.9 सही वर्तनी वाले शब्द का चयन करें।

- Ans 1. धराशायी
 2. धाराशाई
 3. धाराशायी
 4. धराशयी

Question ID : 65497833775
Status : Answered
Chosen Option : 1

Q.10 'उन्नति' का विलोम शब्द होगा-

- Ans 1. दुर्गति
 2. अपनति
 3. सम्मति
 4. अवनति

Question ID : 65497833785
Status : Answered
Chosen Option : 1

Q.11 दिये गये वाक्यांश के लिए एक शब्द दीजिये।

अतिथि की सेवा करने वाला

- Ans 1. आतिथ्य
 2. आतिथेय
 3. आशुतोष
 4. सेवक

Question ID : 65497833780
Status : Answered
Chosen Option : 4

Q.12 'किसी और स्थान पर' वाक्यांश के लिए एक शब्द होगा-

- Ans 1. अन्यत्र
 2. तत्र
 3. यत्र
 4. सर्वत्र

Question ID : 65497833786
Status : Answered
Chosen Option : 2

Q.13 निम्नलिखित प्रश्न में, दिए गए चार विकल्पों में से, उस विकल्प का चयन करें जो मुहावरे का अर्थ व्यक्त करता है।

हाथ मलना

- Ans 1. वीरता दिखाना
 2. व्यायाम करना
 3. पछताना
 4. संकल्प करना

Question ID : 65497833782
Status : Answered
Chosen Option : 4

Q.14 'तिमिर' का विलोम शब्द होगा-

- Ans 1. आकाश
 2. प्रकाश
 3. अंधकार
 4. रात्रि

Question ID : 65497833788
Status : Answered
Chosen Option : 2

Q.15 मनुष्य जीवन _____ से सफल होता है। रिक्त स्थान की पूर्ति कीजिए।

- Ans 1. क्रोध
 2. आलसी जीवन से
 3. लोभ-लालच
 4. परिश्रम

Question ID : 65497833791
Status : Answered
Chosen Option : 4

Q.16 'व्यथा' का पर्यायवाची है-

- Ans 1. दुःख
 2. वियोग
 3. चिंता
 4. सुख

Question ID : 65497833793
Status : Answered
Chosen Option : 3

Q.17 दिये गये वाक्य के किस भाग में त्रुटि है?

मालिक मजदूरों का शोसण करते हैं।

- Ans 1. मालिक
 2. मजदूरों का
 3. शोसण
 4. करते हैं।

Question ID : 65497833792
Status : Answered
Chosen Option : 3

Q.18 दिए गए वाक्य का वह भाग ज्ञात करें जिसमें कोई त्रुटि है। यदि कोई त्रुटि नहीं है, तो 'कोई त्रुटि नहीं है' चुने।

कई दिनों की बदली के पीछे आज धूप निकली है।

- Ans
- 1. बदली के पीछे
 - 2. धूप निकली है।
 - 3. कई दिनों क
 - 4. कोई त्रुटि नहीं है।

Question ID : 65497833778
Status : Answered
Chosen Option : 1

Q.19 'धरती और आकाश के बीच का स्थान' वाक्यांश के लिए एक शब्द होगा-

- Ans
- 1. अंतरीप
 - 2. द्वीप
 - 3. गिरि
 - 4. अंतरिक्ष

Question ID : 65497833787
Status : Answered
Chosen Option : 3

Q.20 दिए गए वाक्य में रेखांकित खंड को प्रतिस्थापित करने के लिए सबसे उपयुक्त विकल्प का चयन करें। यदि इसे प्रतिस्थापित करने की आवश्यकता नहीं है, तो विकल्प 'किसी बदलाव की आवश्यकता नहीं है' का चयन करें।

परिवार नियोजन को कार्यक्रमों द्वारा जनसंख्या वृद्धि को रोका जाना चाहिए।

- Ans
- 1. परिवार नियोजन के कार्यक्रमों द्वारा
 - 2. किसी बदलाव की आवश्यकता नहीं है।
 - 3. परिवार नियोजन में कार्यक्रमों द्वारा
 - 4. परिवार नियोजन से कार्यक्रमों के द्वारा

Question ID : 65497833781
Status : Answered
Chosen Option : 1

Comprehension:

आचरण की सभ्यता का देश ही (1) _____ है। उसमें न शारीरिक झगड़े हैं, न मानसिक, न आध्यात्मिक। न उसमें विद्रोह है, न जंग ही का (2) _____ है और न वहाँ कोई ऊँचा है, न (3) _____। न कोई वहाँ धनवान् है और न कोई वहाँ (4) _____। वहाँ प्रकृति का नाम नहीं, वहाँ तो प्रेम और एकता का (5) _____ राज्य रहता है।

निम्न प्रश्नों के उत्तर उपरोक्त गद्यांश के आधार पर दीजिए।

SubQuestion No : 21

Q.21 गद्यांश के रिक्त स्थान (1) के लिए सर्वाधिक उपयुक्त शब्द होगा-

- Ans
- 1. मतवाला
 - 2. निराला
 - 3. भयंकर
 - 4. रंगीला

Question ID : 65497833795
Status : Answered
Chosen Option : 2

Comprehension:

आचरण की सभ्यता का देश ही (1) _____ है। उसमें न शारीरिक झगड़े हैं, न मानसिक, न आध्यात्मिक। न उसमें विद्रोह है, न जंग ही का (2) _____ है और न वहाँ कोई ऊँचा है, न (3) _____। न कोई वहाँ धनवान् है और न कोई वहाँ (4) _____। वहाँ प्रकृति का नाम नहीं, वहाँ तो प्रेम और एकता का (5) _____ राज्य रहता है।

निम्न प्रश्नों के उत्तर उपरोक्त गद्यांश के आधार पर दीजिए।

SubQuestion No : 22

Q.22 गद्यांश के रिक्त स्थान (2) के लिए सर्वाधिक उपयुक्त शब्द होगा-

- Ans
- 1. संकेत
 - 2. नामोनिशान
 - 3. चीत्कार
 - 4. लक्षण

Question ID : 65497833796
Status : Answered
Chosen Option : 2

Comprehension:

आचरण की सभ्यता का देश ही (1) _____ है। उसमें न शारीरिक झगड़े हैं, न मानसिक, न आध्यात्मिक। न उसमें विद्रोह है, न जंग ही का (2) _____ है और न वहाँ कोई ऊँचा है, न (3) _____। न कोई वहाँ धनवान् है और न कोई वहाँ (4) _____। वहाँ प्रकृति का नाम नहीं, वहाँ तो प्रेम और एकता का (5) _____ राज्य रहता है।

निम्न प्रश्नों के उत्तर उपरोक्त गद्यांश के आधार पर दीजिए।

SubQuestion No : 23

Q.23 गद्यांश के रिक्त स्थान (3) के लिए सर्वाधिक उपयुक्त शब्द होगा-

- Ans
- 1. मूर्ख
 - 2. विद्वान
 - 3. नीचा
 - 4. समान

Question ID : 65497833797
Status : Answered
Chosen Option : 3

Comprehension:

आचरण की सभ्यता का देश ही (1) _____ है। उसमें न शारीरिक झगड़े हैं, न मानसिक, न आध्यात्मिक। न उसमें विद्रोह है, न जंग ही का (2) _____ है और न वहाँ कोई ऊँचा है, न (3) _____। न कोई वहाँ धनवान् है और न कोई वहाँ (4) _____। वहाँ प्रकृति का नाम नहीं, वहाँ तो प्रेम और एकता का (5) _____ राज्य रहता है।

निम्न प्रश्नों के उत्तर उपरोक्त गद्यांश के आधार पर दीजिए।

SubQuestion No : 24

Q.24 गद्यांश के रिक्त स्थान (4) के लिए सर्वाधिक उपयुक्त शब्द होगा-

- Ans
- 1. देवता
 - 2. निर्धन
 - 3. वीर
 - 4. बलवान

Question ID : 65497833798
Status : Answered
Chosen Option : 2

Comprehension:

आचरण की सभ्यता का देश ही (1) _____ है। उसमें न शारीरिक झगड़े हैं, न मानसिक, न आध्यात्मिक। न उसमें विद्रोह है; न जंग ही का (2) _____ है और न वहाँ कोई ऊँचा है, न (3) _____। न कोई वहाँ धनवान् है और ना कोई वहाँ (4) _____। वहाँ प्रकृति का नाम नहीं, वहाँ तो प्रेम और एकता का (5) _____ राज्य रहता है।

निम्न प्रश्नों के उत्तर उपरोक्त गद्यांश के आधार पर दीजिए।

SubQuestion No : 25

Q.25 गद्यांश के रिक्त स्थान (5) के लिए सर्वाधिक उपयुक्त शब्द होगा-

- Ans** 1. अखंड
 2. सम्पूर्ण
 3. खंडित
 4. कृत्रिम

Question ID : **65497833799**
Status : **Answered**
Chosen Option : **2**

GovtJobsAlert.In