

Exam Date	14/12/2021
Exam Time :	12:30 PM - 2:00 PM
Subject	Constable GD 2021

Section : Part A General Intelligence and Reasoning

Q.1 Nine friends, A, B, C, D, E, F, G, H, and I are sitting in a row, facing the north. A is second to the left of H. H is at the second place to the left of B. B is at the one end of the row. F is between A and H. D is between I and C. C is at the third place to the right of E. Who is at the centre of the row?

- Ans
- 1. C
 - 2. G
 - 3. A
 - 4. F

Question ID : 65497831529
 Status : Answered
 Chosen Option : 3

Q.2 Select the option in which the number-pairs share the same relationship as that shared by the given number-pair.

36 : 221

- Ans
- 1. 43 : 263
 - 2. 32 : 288
 - 3. 21 : 132
 - 4. 26 : 150

Question ID : 65497831530
 Status : Answered
 Chosen Option : 1

Q.3 In a certain code language, TATA is coded as 401202. How will TITAN be coded in that language?

- Ans
- 1. 20401982
 - 2. 20408219
 - 3. 40920128
 - 4. 40920821

Question ID : 65497831519
 Status : Answered
 Chosen Option : 3

Q.4 Three of the following four letter-clusters are alike in a certain way and one is different.
Pick the odd one out.

- Ans
- 1. OWL
 - 2. LUX
 - 3. GHE
 - 4. BJP

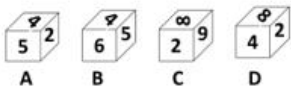
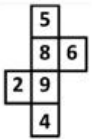
Question ID : 65497831518
Status : Answered
Chosen Option : 3

Q.5 Neeraj pointed at a photo of a lady and said, "She is the daughter of my paternal grandfather's only son. What is the relation of Neeraj with the lady in the photo?"

- Ans
- 1. Father
 - 2. Father-in-law
 - 3. Uncle
 - 4. Brother

Question ID : 65497831524
Status : Answered
Chosen Option : 4

Q.6 Select the dice that can be formed by folding the given sheet along the lines.



- Ans
- 1. B, C and D
 - 2. Only D
 - 3. Only C and D
 - 4. Only C

Question ID : 65497831532
Status : Answered
Chosen Option : 4

Q.7 'Oven' is related to 'Baking' in the similar way as 'knife' is related to '_____'.

- Ans
- 1. Grating
 - 2. Painting
 - 3. Chopping
 - 4. Making

Question ID : 65497831515
Status : Answered
Chosen Option : 3

Q.8 Five friends are standing in a line facing towards north. A Lawyer and a Judge are standing at the two extreme ends of the line. A Scientist is standing to the right of a Teacher. A Pharmacist is to the left of the Judge. The Teacher is standing between the Lawyer and the Scientist. Counting from the left, the Scientist is standing at which place?

- Ans
- 1. Fifth
 - 2. Fourth
 - 3. First
 - 4. Third

Question ID : 65497831516
 Status : Answered
 Chosen Option : 4

Q.9 Select the letter-cluster from among the given options that can replace the question mark (?) in the following series.

BHO, GMT, LRY, ?

- Ans
- 1. IOU
 - 2. DJL
 - 3. HMT
 - 4. QWD

Question ID : 65497831514
 Status : Answered
 Chosen Option : 4

Q.10 Select the figure from among the given options that can replace the question mark (?) in the following series.



Ans

- 1.
- 2.
- 3.
- 4.

Question ID : 65497831528
 Status : Answered
 Chosen Option : 2

Q.11 Select the correct option that indicates the arrangement of the given words in the order in which they appear in an English dictionary.

1. Creepy
2. Cremate
3. Creosote
4. Crescendo
5. Crescent

- Ans
- 1. 2, 5, 1, 4, 3
 - 2. 1, 2, 3, 4, 5
 - 3. 3, 5, 4, 1, 2
 - 4. 1, 3, 2, 5, 4

Question ID : 65497831525

Status : Answered

Chosen Option : 2

Q.12 Select the option that is embedded in the given figure (rotation is NOT allowed).



Ans

- 1.
- 2.
- 3.
- 4.

Question ID : 65497831533

Status : Answered

Chosen Option : 3

Q.13 In a certain code language, TEMPER is written as QBJMBO. How will POSTED be written in that language?

- Ans
- 1. MLPQBA
 - 2. MLQQCA
 - 3. MMPQCA
 - 4. MLOQBB

Question ID : 65497831534

Status : Answered

Chosen Option : 1

Q.14 If '÷' means '×', '×' means '÷', '-' means '+' and '+' means '-', then what will be the value of the following expression?

$$(11 + 5 \times 18) - 8 \div 17$$

- Ans
- 1. 52
 - 2. 51
 - 3. 53
 - 4. 55

Question ID : 65497831531
 Status : Answered
 Chosen Option : 2

Q.15 Select the correct mirror image of the given combination when the mirror is placed at PQ as shown.

E G P T B N |
 |
 P Q

- Ans
- 1. N B T P G E
 - 2. N B T P E G
 - 3. N B T P E G
 - 4. N B T P E G

Question ID : 65497831521
 Status : Answered
 Chosen Option : 2

Q.16 Select the number from among the given options that can replace the question mark (?) in the following series.

105, 102, 96, 87, 75, ?

- Ans
- 1. 60
 - 2. 55
 - 3. 45
 - 4. 35

Question ID : 65497831527
 Status : Answered
 Chosen Option : 1

Q.17 If May 27, 2007, is Sunday, what will be the day of the week on May 25, 2018?

- Ans
- 1. Friday
 - 2. Sunday
 - 3. Saturday
 - 4. Thursday

Question ID : 65497831537
 Status : Answered
 Chosen Option : 3

Q.18 Select the option that is related to the third term in the same way as the second term is related to the first term.

ROPE : VSTI :: BOSE : ?

- Ans
- 1. ISWF
 - 2. FSWI
 - 3. SFIW
 - 4. IWSF

Question ID : 65497831522
Status : Answered
Chosen Option : 2

Q.19 Read the given statement(s) and conclusions carefully. Assuming that the information given in the statements is true, even if it appears to be at variance with commonly known facts, decide which of the given conclusions logically follow(s) from the statement(s).

Statements:

All caretakers are skilled.
Some skilled are lawyers.
All skilled are painters.

Conclusions:

I. Some painters are lawyers.
II. No painter is lawyer.

- Ans
- 1. Only conclusion II follows.
 - 2. Only conclusion I follows.
 - 3. Both the conclusions follow.
 - 4. Either conclusion I or II follows.

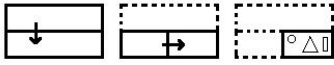
Question ID : 65497831535
Status : Answered
Chosen Option : 4

Q.20 In a certain code language, REWARI is coded as 185231189. How will SIRSA be coded in that language?

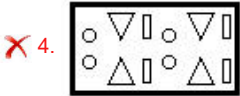
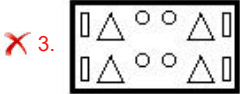
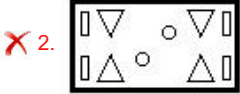
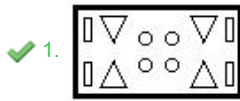
- Ans
- 1. 19919118
 - 2. 11819199
 - 3. 11819919
 - 4. 19918191

Question ID : 65497831523
Status : Answered
Chosen Option : 4

Q.21 The sequence of folding a piece of paper and the manner in which the folded paper has been cut is shown in the following figures. How would this paper look when unfolded?



Ans



Question ID : 65497831538

Status : Answered

Chosen Option : 1

Q.22 Select the option in which the numbers are related in the same way as are the numbers of the following set.

12, 168, 7

Ans ✗ 1. 18, 240, 10

✗ 2. 11, 145, 17

✗ 3. 15, 180, 12

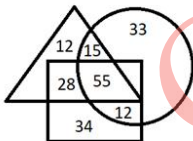
✓ 4. 14, 448, 16

Question ID : 65497831536

Status : Answered

Chosen Option : 4

Q.23 In the given Venn diagram, the rectangle represents 'people having blue eyes', the triangle represents 'people having extra fingers', and the circle represents 'people having dimples'.



The number of people who have extra fingers and blue eyes and no dimples is A and if the number of people who have extra fingers and dimples and no blue eyes is B. What is the sum of A and B?

Ans ✗ 1. 70

✗ 2. 40

✗ 3. 67

✓ 4. 43

Question ID : 65497831517

Status : Answered

Chosen Option : 4

Q.24 Select the number from among the given options that can replace the question mark (?) in the following series.

38, 120, 366, ?

- Ans
- 1. 1103
 - 2. 1102
 - 3. 1101
 - 4. 1104

Question ID : 65497831520
Status : Answered
Chosen Option : 4

Q.25 Select the combination of letters that when sequentially placed in the blanks of the given series will complete the series.

bi_h_h_is_ohb_sh_h

- Ans
- 1. sobhio
 - 2. sohboi
 - 3. shoboi
 - 4. shobio

Question ID : 65497831526
Status : Answered
Chosen Option : 1

Section : Part B General Knowledge and General Awareness

Q.1 In which of the following places were the fire altars of Harappan culture found?

- Ans
- 1. Padri
 - 2. Bhagatrav
 - 3. Lothal
 - 4. Manda

Question ID : 65497831547
Status : Answered
Chosen Option : 3

Q.2 Greg Barclay, the new independent chairman of the International Cricket Council, belongs to which of the following countries?

- Ans
- 1. Australia
 - 2. England
 - 3. New Zealand
 - 4. South Africa

Question ID : 65497831546
Status : Not Answered
Chosen Option : --

Q.3 In September 2021, the Cabinet Committee on Economic Affairs (CCEA) approved the highest absolute increase in Minimum Support Prices (MSP) over the previous year for lentil (masur), rapeseed and mustard at _____ per quintal for Rabi Marketing Season (RMS) 2022-23.

- Ans
- 1. ₹1,200
 - 2. ₹400
 - 3. ₹200
 - 4. ₹800

Question ID : 65497831562
Status : Answered
Chosen Option : 1

Q.4 In which of the following Indian states was the Railway Museum inaugurated in August 2020?

- Ans
- 1. Karnataka
 - 2. Punjab
 - 3. Andhra Pradesh
 - 4. New Delhi

Question ID : 65497831553
Status : Answered
Chosen Option : 4

Q.5 Which of the following bacteria helps in fixing atmospheric nitrogen?

- Ans
- 1. Clostridium
 - 2. Azotobacter
 - 3. Azospirillum
 - 4. Rhizobium

Question ID : 65497831556
Status : Answered
Chosen Option : 2

Q.6 _____ is a system of equitable distribution of water in the command area of the canal outlet.

- Ans
- 1. Flow
 - 2. Lift
 - 3. Warabandi
 - 4. Harvesting

Question ID : 65497831544
Status : Answered
Chosen Option : 3

Q.7 Which of the following state governments has announced in November 2020 that it would establish a Gau Cabinet for the protection and promotion of cows?

- Ans
- 1. Uttar Pradesh
 - 2. Bihar
 - 3. Madhya Pradesh
 - 4. Karnataka

Question ID : 65497831550
Status : Answered
Chosen Option : 1

Q.8 Which of the following pairs represent the units of energy?

- Ans 1. Joule and pascal
 2. Calorie and joule
 3. Weber and ampere
 4. Electron volt and lightyear

Question ID : 65497831551
Status : Answered
Chosen Option : 2

Q.9 Which of the following hills is NOT located in Meghalaya?

- Ans 1. Daffa Hills
 2. Jaintia Hills
 3. Khasi Hills
 4. Garo Hills

Question ID : 65497831554
Status : Answered
Chosen Option : 1

Q.10 All branches of Allahabad Bank will function as branches of _____ following the amalgamation of the two lenders as per Reserve Bank of India (RBI)'s notification dated March 28, 2020.

- Ans 1. Bank of Baroda
 2. Canara Bank
 3. Dena Bank
 4. Indian Bank

Question ID : 65497831539
Status : Not Answered
Chosen Option : --

Q.11 In which of the following states is the 'Shirui Lily Festival' celebrated?

- Ans 1. Manipur
 2. Goa
 3. Kerala
 4. Nagaland

Question ID : 65497831543
Status : Answered
Chosen Option : 1

Q.12 How many Ramsar sites exist in India as of December 2020?

- Ans 1. 39
 2. 42
 3. 41
 4. 40

Question ID : 65497831559
Status : Answered
Chosen Option : 1

Q.13 Nominal GDP is an assessment of economic production in an economy that includes _____ in its calculations.

- Ans
- 1. prices of the last 5 years
 - 2. accounts of citizens
 - 3. only services
 - 4. current prices

Question ID : **65497831561**
Status : **Not Answered**
Chosen Option : --

Q.14 How many schedules are mentioned in the Constitution of India?

- Ans
- 1. 23
 - 2. 45
 - 3. 12
 - 4. 34

Question ID : **65497831549**
Status : **Answered**
Chosen Option : 3

Q.15 Which of the following is the main festival of the state of Mizoram?

- Ans
- 1. Saga Dawa
 - 2. Hornbill
 - 3. Chapchar Kut
 - 4. Onam

Question ID : **65497831555**
Status : **Answered**
Chosen Option : 3

Q.16 Raja Mansingh Tomar ruled over _____.

- Ans
- 1. Jaisalmer
 - 2. Bikaner
 - 3. Mysore
 - 4. Gwalior

Question ID : **65497831563**
Status : **Answered**
Chosen Option : 4

Q.17 Who among the following was the founder of the Chola dynasty?

- Ans
- 1. V jayalaya
 - 2. Rajendra III
 - 3. Rajaraja
 - 4. Rajendra I

Question ID : **65497831548**
Status : **Answered**
Chosen Option : 1

Q.18 Tintu Luka is an Indian track and field athlete. In which of the following events for women is she a national record holder?

- Ans 1. 800 m race
 2. 400 m race
 3. 100 m race
 4. 200 m race

Question ID : **65497831542**
Status : **Not Answered**
Chosen Option : --

Q.19 Nehru Report (1928) was associated with -

- Ans 1. education reforms
 2. Surat split
 3. communal rewards
 4. constitutional framework

Question ID : **65497831552**
Status : **Answered**
Chosen Option : **3**

Q.20 Which of the following countries will host Asian Football Confederation's Women's Asian Cup in 2022?

- Ans 1. China
 2. Malaysia
 3. Taiwan
 4. India

Question ID : **65497831560**
Status : **Answered**
Chosen Option : **4**

Q.21 In which year did Maldives turn from a Sultanate to a Presidential form of the government?

- Ans 1. 1962
 2. 1947
 3. 1968
 4. 1956

Question ID : **65497831540**
Status : **Not Answered**
Chosen Option : --

Q.22 Who among the following foreigners won the Padma Vibhushan in 2019?

- Ans 1. John Chambers
 2. Shinzo Abe
 3. Pravin Gordhan
 4. Ismail Omar Guelleh

Question ID : **65497831558**
Status : **Not Answered**
Chosen Option : --

Q.23 When is World Migratory Bird Day celebrated every year?

- Ans
- 1. First Sunday of April and November
 - 2. Second Saturday of May and October
 - 3. Second Saturday of April and November
 - 4. First Sunday of May and October

Question ID : 65497831557
Status : Not Answered
Chosen Option : --

Q.24 In November 2020, the Union Cabinet of India approved the merger of capital-starved Lakshmi Vilas Bank (LVB) with:

- Ans
- 1. DBS Bank India
 - 2. Punjab National Bank
 - 3. HDFC Bank
 - 4. State Bank of India

Question ID : 65497831541
Status : Answered
Chosen Option : 1

Q.25 Who became the brand ambassador of Bengal Peerless Housing Development Company in September 2020?

- Ans
- 1. Sourav Ganguly
 - 2. Virat Kohli
 - 3. Smriti Mandhana
 - 4. MS Dhoni

Question ID : 65497831545
Status : Answered
Chosen Option : 1

Section : Part C Elementary Mathematics

Q.1 Reeta purchased an ornament of gold, weighing 15 grams, for ₹71820, which included GST and making charges of 12%. The original price of gold per gram (in ₹) is:

- Ans
- 1. 4788
 - 2. 4157
 - 3. 4572
 - 4. 4275

Question ID : 65497831566
Status : Answered
Chosen Option : 4

Q.2 Arun Kumar bought 8 pieces of TV sets at ₹24,000 each and sold all 8 pieces at a total price of ₹2,26,560. What was his profit percentage or loss percentage?

- Ans
- 1. Loss 18%
 - 2. Profit 18%
 - 3. Loss 16%
 - 4. Profit 16%

Question ID : 65497831575
Status : Answered
Chosen Option : 2

Q.3 The area of the base of a right circular cone is 7546 cm^2 and its height is 15 cm. The volume of the cone in cm^3 is

(Use $\pi = \frac{22}{7}$):

- Ans**
- 1. 40000
 - 2. 37730
 - 3. 36930
 - 4. 35000

Question ID : **65497831570**
Status : **Answered**
Chosen Option : **2**

Q.4 The side of an equilateral triangular board is 12 m. Find the cost (in ₹) of fencing the board at ₹4.50 per metre.

- Ans**
- 1. ₹162
 - 2. ₹210
 - 3. ₹198
 - 4. ₹150

Question ID : **65497831585**
Status : **Answered**
Chosen Option : **1**

Q.5 The compound interest on a certain sum for 16 months at 12% p.a. is ₹3494.40, interest being compounded 8-monthly. What will be the compound interest (in ₹) of the same sum at the same rate for 2 years, when the interest is compounded yearly?

- Ans**
- 1. 26342.40
 - 2. 29432.60
 - 3. 22634.20
 - 4. 24362.80

Question ID : **65497831572**
Status : **Answered**
Chosen Option : **1**

Q.6 If three-fifths of a number is 54, what is two-ninth of it?

- Ans**
- 1. 27
 - 2. 20
 - 3. 45
 - 4. 36

Question ID : **65497831586**
Status : **Answered**
Chosen Option : **2**

Q.7 The value of $(5 \div 8)$ of $(4 \div 5)$ of 25 $(15^2 - 13^2)$ is:

- Ans
- 1. 725
 - 2. 700
 - 3. 525
 - 4. 625

Question ID : 65497831577
Status : Answered
Chosen Option : 2

Q.8 A, B and C can do a work separately in 20, 35 and 60 days, respectively. They started the work together, but B and C left 8 days and 12 days, respectively, before the completion of the work. For how many days, did all three work together?

- Ans
- 1. 12
 - 2. 10
 - 3. 7
 - 4. 3

Question ID : 65497831567
Status : Answered
Chosen Option : 2

Q.9 The least number of four digits divisible by 3, 5, 7 and 9 is:

- Ans
- 1. 1045
 - 2. 1145
 - 3. 1260
 - 4. 1125

Question ID : 65497831579
Status : Answered
Chosen Option : 3

Q.10 ₹8,505 is divided among P, Q and R with their shares in the ratio of $1\frac{1}{3} : 1\frac{3}{4} : 2\frac{1}{6}$.
What is the difference of P and R's shares (in ₹)?

- Ans
- 1. 1,701
 - 2. 1,350
 - 3. 675
 - 4. 1,530

Question ID : 65497831581
Status : Answered
Chosen Option : 2

Q.11 A person crosses a 1800 m long street in 5 min. What is his speed (in km/h)?

- Ans
- 1. 20.6
 - 2. 11.6
 - 3. 21.6
 - 4. 21

Question ID : 65497831578
Status : Answered
Chosen Option : 3

Q.12 The expenditure of Renu is 150% more than her savings. If her income increases by 20% and the savings increase by 50%, then by what percentage does her expenditure increase?

- Ans
- 1. 12%
 - 2. 8%
 - 3. 5%
 - 4. 10%

Question ID : 65497831587
Status : Answered
Chosen Option : 2

Q.13 An article was sold for ₹1,225 after allowing a discount of 12.5%. If 9.5% discount is given, then for how much will it be sold?

- Ans
- 1. ₹1,267
 - 2. ₹1,246
 - 3. ₹1,367
 - 4. ₹1,260

Question ID : 65497831573
Status : Answered
Chosen Option : 3

Q.14 The average of twelve numbers is 38. The average of the first three numbers is 33, that of the next four numbers is $35\frac{1}{2}$, and that of the next two numbers is 40. If the tenth number is less than the eleventh and twelfth numbers by 4 and 5, respectively, then the twelfth number is:

- Ans
- 1. 45
 - 2. 40
 - 3. 49
 - 4. 47

Question ID : 65497831564
Status : Answered
Chosen Option : 2

Q.15 A dealer marked the price of an item 50% above the cost price. He allowed three successive discounts of 10%, 15% and 20% to a particular customer. As a result, he incurred a loss of ₹410. At what price (in ₹) did he sell the item to the said customer?

- Ans**
- 1. 4950
 - 2. 5490
 - 3. 4590
 - 4. 5940

Question ID : 65497831565
Status : Answered
Chosen Option : 3

Q.16 P takes six hours more than Q to walk 96 km, but if P doubles his speed, then he can make it in two hours less than Q. How much time (in hours) does Q require for walking 48 km?

- Ans**
- 1. 16
 - 2. 6
 - 3. 5
 - 4. 10

Question ID : 65497831568
Status : Answered
Chosen Option : 3

Q.17 A person lost 15% by selling an item for ₹5,270. If he had sold the item for ₹6,324, then what would his profit or loss percentage have been?

- Ans**
- 1. Profit, 20%
 - 2. Loss, 10%
 - 3. Profit, 12%
 - 4. Profit, 2%

Question ID : 65497831588
Status : Answered
Chosen Option : 1

Q.18 The simple interest on a certain amount is $\frac{4}{25}$ of the principal. If the numbers representing the rate of interest in per cent and time in years are equal, then find the time for which the principal is lent out.

- Ans**
- 1. 6 years
 - 2. 4 years
 - 3. 5 years
 - 4. 2 years

Question ID : 65497831584
Status : Answered
Chosen Option : 2

Q.19 A person invested ₹20,000 at a rate of 4.5% on simple interest for three years. Had the person invested ₹16,000 on compound interest at a rate of 5% for 2 years, the difference in the interests would have been:

- Ans
- 1. ₹1,200
 - 2. ₹1,060
 - 3. ₹800
 - 4. ₹1,000

Question ID : 65497831582
Status : Answered
Chosen Option : 2

Q.20 Find the value of $\frac{1}{4} \div 4\frac{2}{9}$ of $\frac{9}{19} + \left(\frac{5}{4} - \frac{3}{8}\right)$.

- Ans
- 1. 8
 - 2. 4
 - 3. 1
 - 4. 2

Question ID : 65497831574
Status : Answered
Chosen Option : 3

Q.21 Person A takes 28 hours to complete a work. Person B completes the same work in one-fourth of the time taken by A. If the two persons work together; in how much time will the work be completed?

- Ans
- 1. 5 h 36 min
 - 2. 5 h
 - 3. 5 h 30 min
 - 4. 6 h 36 min

Question ID : 65497831576
Status : Answered
Chosen Option : 1

Q.22 A sum of ₹25110 is divided between A, B, C, and D such that the ratio of shares of A and B is 8 : 9, that of B and C is 3 : 5 and that of C and D is 1 : 2. What is the difference between the shares (in ₹) of B and D?

- Ans
- 1. 6075
 - 2. 8505
 - 3. 11125
 - 4. 13150

Question ID : 65497831569
Status : Answered
Chosen Option : 2

Q.23 A student purchased a box of pencils at the rate of ₹35 for 10 pencils and sold all of them at the rate of ₹54 for 9 pencils. In this transaction, he gained ₹350. How many pencils did the box contain?

- Ans
- 1. 120
 - 2. 150
 - 3. 130
 - 4. 140

Question ID : 65497831571
Status : Answered
Chosen Option : 4

Q.24 Find the third proportional to 15 and 45.

- Ans
- 1. 125
 - 2. 145
 - 3. 165
 - 4. 135

Question ID : 65497831583
Status : Answered
Chosen Option : 4

Q.25 The difference between the average of all those numbers between 50 and 7 which are divisible by 6 and the average of all prime numbers between 10 and 45, is:

- Ans
- 1. 35.4
 - 2. 33.6
 - 3. 33.4
 - 4. 35.6

Question ID : 65497831580
Status : Not Answered
Chosen Option : --

Section : Part D English

Q.1 The following sentence has been split into four segments. Identify the segment that contains a grammatical error.

This apartment / is / nice than / that one.

- Ans
- 1. is
 - 2. This apartment
 - 3. that one
 - 4. nice than

Question ID : 65497831599
Status : Answered
Chosen Option : 4

Q.2 Select the option that can be used as a one-word substitute for the given group of words.

The system of money used in a particular country

- Ans
- 1. Valency
 - 2. Assets
 - 3. Currency
 - 4. Bullion

Question ID : 65497831606
Status : Answered
Chosen Option : 3

Q.3 Select the most appropriate option to fill in the blank.

Pahari is the most _____ spoken language in Himachal Pradesh.

- Ans
- 1. commonly
 - 2. carefully
 - 3. quickly
 - 4. strictly

Question ID : 65497831608
Status : Answered
Chosen Option : 1

Q.4 Select the option that can be used as a one-word substitute for the given group of words.

Shortened form of a word

- Ans
- 1. Punctuation
 - 2. Connotation
 - 3. Abbreviation
 - 4. Allocation

Question ID : 65497831597
Status : Answered
Chosen Option : 3

Q.5 Select the most appropriate option to fill in the blank.

Making notes will _____ you to organise your thoughts in a better way.

- Ans
- 1. capable
 - 2. enable
 - 3. disable
 - 4. adjustable

Question ID : 65497831591
Status : Answered
Chosen Option : 1

Q.6 Select the most appropriate **ANTONYM** of the given word.

Dull

- Ans** 1. Potent
 2. Charitable
 3. Keen
 4. Tender

Question ID : **65497831590**
Status : **Answered**
Chosen Option : **1**

Q.7 Select the option that can be used as a one-word substitute for the given group of words.

Sound made by ducks

- Ans** 1. Moo
 2. Caw
 3. Quack
 4. Grunt

Question ID : **65497831589**
Status : **Answered**
Chosen Option : **3**

Q.8 Select the most appropriate **ANTONYM** of the given word.

Possess

- Ans** 1. Release
 2. Maintain
 3. Obtain
 4. Occupy

Question ID : **65497831596**
Status : **Answered**
Chosen Option : **1**

Q.9 Select the most appropriate synonym of the given word.

Sufficient

- Ans** 1. Enough
 2. Lacking
 3. Large
 4. Deficient

Question ID : **65497831605**
Status : **Answered**
Chosen Option : **1**

Q.10 The following sentence has been split into four segments. Identify the segment that contains a grammatical error.

My friend / never tells / a lie, / doesn't he?

- Ans
- 1. a lie
 - 2. never tells
 - 3. doesn't he
 - 4. My friend

Question ID : 65497831604
Status : Answered
Chosen Option : 3

Q.11 Select the INCORRECTLY spelt word.

- Ans
- 1. Essence
 - 2. Innocence
 - 3. Conveniance
 - 4. Conveyance

Question ID : 65497831598
Status : Answered
Chosen Option : 4

Q.12 Select the most appropriate option that can substitute the underlined segment in the given sentence. If there is no need to substitute it, select 'No substitution required'.

Tourism is one in the biggest businesses in the world.

- Ans
- 1. are one in the
 - 2. No substitution required
 - 3. is one of the
 - 4. are one of the

Question ID : 65497831603
Status : Answered
Chosen Option : 3

Q.13 Select the most appropriate meaning of the given idiom.

Draw first blood

- Ans
- 1. Be the first to donate blood to help a friend
 - 2. Agree to accompany someone for the diagnosis of an illness
 - 3. Take a blood test early in the morning
 - 4. Be the first to gain an advantage or score against an opponent

Question ID : 65497831593
Status : Answered
Chosen Option : 4

Q.14 Select the most appropriate option that can substitute the underlined segment in the given sentence. If there is no need to substitute it, select 'No substitution required'.

The ostrich is an interesting bird which has wings but cannot fly.

- Ans
- 1. which is having wings but cannot fly
 - 2. No substitution required
 - 3. which have wings but cannot fly
 - 4. which has got wing but cannot fly

Question ID : 65497831592
Status : Answered
Chosen Option : 3

Q.15 Select the option that will improve the underlined part of the sentence. In case no improvement is needed, select 'No improvement required'.

My father is wishing me to give all my time to studies now.

- Ans
- 1. No improvement required
 - 2. has wished
 - 3. was wishing
 - 4. wishes

Question ID : 65497831594
Status : Answered
Chosen Option : 4

Q.16 Select the INCORRECTLY spelt word.

- Ans
- 1. Agitate
 - 2. Aggression
 - 3. Agreement
 - 4. Aggravate

Question ID : 65497831601
Status : Answered
Chosen Option : 1

Q.17 Select the most appropriate synonym of the given word.

Lethal

- Ans
- 1. Fatal
 - 2. Slothful
 - 3. Beneficial
 - 4. Lazy

Question ID : 65497831600
Status : Answered
Chosen Option : 1

Q.18 The following sentence has been split into four segments. Identify the segment that contains a grammatical error.

Fortunately, / the fire did not / caused much damage / to the building.

Ans 1. caused much damage

2. the fire did not

3. Fortunately

4. to the building

Question ID : 65497831595

Status : Answered

Chosen Option : 2

Q.19 Select the most appropriate option to fill in the blank.

The little girl tried to _____ the singer.

Ans 1. imitate

2. imply

3. languish

4. emit

Question ID : 65497831602

Status : Answered

Chosen Option : 1

Q.20 Select the most appropriate meaning of the given idiom.

Take up room

Ans 1. Use mildly

2. Rent a place

3. Occupy space

4. Feel choked

Question ID : 65497831607

Status : Answered

Chosen Option : 4

Comprehension:

In the following passage, some words have been deleted. Read the passage carefully and select the most appropriate option to fill in each blank.

His friend did not return even the next day, or the day after. For several days, the partridge (1)_____ worrying, and then gave up (2)_____ of his friend's return.(3)_____ dusk, a hare came to the tree and (4)_____ an empty hole at the foot of the tree, (5)_____ shelter inside. Since the partridge had given up hope, he did not object to the hole being occupied by the hare.

SubQuestion No : 21

Q.21 Select the most appropriate option to fill in blank no. 1.

Ans 1. was

2. had

3. did

4. kept

Question ID : 65497831610

Status : Answered

Chosen Option : 1

Comprehension:

In the following passage, some words have been deleted. Read the passage carefully and select the most appropriate option to fill in each blank.

His friend did not return even the next day, or the day after. For several days, the partridge (1)_____ worrying, and then gave up (2)_____ of his friend's return.(3)_____ dusk, a hare came to the tree and (4)_____ an empty hole at the foot of the tree, (5)_____ shelter inside. Since the partridge had given up hope, he did not object to the hole being occupied by the hare.

SubQuestion No : 22

Q.22 Select the most appropriate option to fill in blank No. 2.

- Ans 1. chance
 2. trial
 3. hope
 4. risk

Question ID : 65497831611
Status : Answered
Chosen Option : 3

Comprehension:

In the following passage, some words have been deleted. Read the passage carefully and select the most appropriate option to fill in each blank.

His friend did not return even the next day, or the day after. For several days, the partridge (1)_____ worrying, and then gave up (2)_____ of his friend's return.(3)_____ dusk, a hare came to the tree and (4)_____ an empty hole at the foot of the tree, (5)_____ shelter inside. Since the partridge had given up hope, he did not object to the hole being occupied by the hare.

SubQuestion No : 23

Q.23 Select the most appropriate option to fill in blank No. 3.

- Ans 1. At
 2. From
 3. On
 4. Since

Question ID : 65497831612
Status : Answered
Chosen Option : 1

Comprehension:

In the following passage, some words have been deleted. Read the passage carefully and select the most appropriate option to fill in each blank.

His friend did not return even the next day, or the day after. For several days, the partridge (1)_____ worrying, and then gave up (2)_____ of his friend's return.(3)_____ dusk, a hare came to the tree and (4)_____ an empty hole at the foot of the tree, (5)_____ shelter inside. Since the partridge had given up hope, he did not object to the hole being occupied by the hare.

SubQuestion No : 24

Q.24 Select the most appropriate option to fill in blank No. 4.

- Ans 1. noting
 2. watching
 3. looking
 4. seeing

Question ID : 65497831613
Status : Answered
Chosen Option : 4

Comprehension:

In the following passage, some words have been deleted. Read the passage carefully and select the most appropriate option to fill in each blank.

His friend did not return even the next day, or the day after. For several days, the partridge (1)_____ worrying, and then gave up (2)_____ of his friend's return.(3)_____ dusk, a hare came to the tree and (4)_____ an empty hole at the foot of the tree, (5)_____ shelter inside. Since the partridge had given up hope, he did not object to the hole being occupied by the hare.

SubQuestion No : 25

Q.25 Select the most appropriate option to fill in blank No. 5.

- Ans 1. taken
 2. take
 3. took
 4. takes

Question ID : 65497831614
Status : Answered
Chosen Option : 3

Section : Part D Hindi

Q.1 निम्नलिखित प्रश्न में, दिए गए चार विकल्पों में से, उस विकल्प का चयन करें जो मुहावरे का अर्थ व्यक्त करता है।

'हथेली पर दही जमाना'

- Ans 1. साधारण काम समझना
 2. मात्र कल्पना करते रहना
 3. बहुत उतावली करना
 4. छीन लेना

Question ID : 65497831620
Status : Not Answered
Chosen Option : --

Q.2 दिए गए वाक्य का वह भाग ज्ञात करें जिसमें कोई त्रुटि है। यदि कोई त्रुटि नहीं है, तो 'कोई त्रुटि नहीं है' चुनें।

शेर की तरह दहाड़ने वाले तुम, आज भीगी बिल्ली बने हुए हो!

- Ans 1. तुम, आज भीगी बिल्ली
 2. शेर की तरह दहाड़ने वाले
 3. बने हुए हो!
 4. कोई त्रुटि नहीं है।

Question ID : 65497831621
Status : Not Answered
Chosen Option : --

Q.3 रिक्त स्थान को भरने के लिए सबसे उपयुक्त विकल्प का चयन करें।

गौतम बुद्ध को _____ हुआ कि ससार में दुःख व्याप्त है।

- Ans 1. बोध
 2. ज्ञान
 3. सज्ञान
 4. अनुभव

Question ID : 65497831632
Status : Not Answered
Chosen Option : --

Q.4 दिये गये वाक्य के किस भाग में त्रुटि है?

हमने एक सभा का सघटन किया।

- Ans
- 1. सभा का
 - 2. हमने
 - 3. एक
 - 4. सघटन किया।

Question ID : 65497831633
Status : Not Answered
Chosen Option : --

Q.5 'दामिनी' का पर्यायवाची है-

- Ans
- 1. नदिनी
 - 2. तरिणी
 - 3. सरिता
 - 4. चपला

Question ID : 65497831634
Status : Not Answered
Chosen Option : --

Q.6 रिक्त स्थान की पूर्ति के लिए सबसे उपयुक्त शब्द का चयन करें।

विराट इतना अच्छा खेल रहा है; बस किसी की _____ न लगे।

- Ans
- 1. नज़र
 - 2. दृष्टि
 - 3. खाइश
 - 4. आख

Question ID : 65497831630
Status : Not Answered
Chosen Option : --

Q.7 दिये गये वाक्यांश के लिए एक शब्द दीजिये।

आशा से अधिक

- Ans
- 1. आशा प्रतिकूल
 - 2. आशातीत
 - 3. सभावित
 - 4. आशान्वित

Question ID : 65497831629
Status : Not Answered
Chosen Option : --

Q.8 दिए गए शब्द का विलोम चुनें।

अनुयायी

- Ans 1. विरोधी
 2. आगत
 3. बाहरी
 4. निर्वात

Question ID : 65497831624
Status : Not Answered
Chosen Option : --

Q.9 दिए गए वाक्य में रेखांकित खंड को प्रतिस्थापित करने के लिए सबसे उपयुक्त विकल्प का चयन करें।
यदि इसे प्रतिस्थापित करने की आवश्यकता नहीं है, तो विकल्प 'किसी बदलाव की आवश्यकता नहीं है'
का चयन करें।

अब मेरे दादाजी से उठे भी नहीं जाते।

- Ans 1. उठे भी नहीं जाते।
 2. किसी बदलाव की आवश्यकता नहीं है
 3. उठा भी नहीं जाता।
 4. उठा भी नहीं जाते।

Question ID : 65497831616
Status : Not Answered
Chosen Option : --

Q.10 रिक्त स्थान को भरने के लिए सबसे उपयुक्त शब्द का चयन कीजिए।

प्रेम करना तलवार की _____ पर चलना है।

- Ans 1. धार
 2. शक्ति
 3. सिर
 4. नोक

Question ID : 65497831615
Status : Not Answered
Chosen Option : --

Q.11 दिए गए वाक्य में रेखांकित खंड को प्रतिस्थापित करने के लिए सबसे उपयुक्त विकल्प का चयन करें।
यदि इसे प्रतिस्थापित करने की आवश्यकता नहीं है, तो विकल्प 'किसी बदलाव की आवश्यकता नहीं है'
का चयन करें।

वह वीर सिपाही जीवन भर लड़ते रहे।

- Ans 1. लड़ता रहा
 2. लड़ता रहे
 3. किसी बदलाव की आवश्यकता नहीं है
 4. लड़ती रही

Question ID : 65497831617
Status : Not Answered
Chosen Option : --

Q.12 सही वर्तनी वाले शब्द का चयन करें।

- Ans 1. अद्वितीय
 2. अदिवियाई
 3. अद्वितया
 4. अद्वितियाई

Question ID : 65497831627
Status : Not Answered
Chosen Option : --

Q.13 दिये गये वाक्यांश के लिए एक शब्द दीजिये।

जो कल्पना से परे हो

- Ans 1. कल्पनात्मक
 2. कल्पनातीत
 3. काल्पनिक
 4. अकाल्पनिक

Question ID : 65497831626
Status : Not Answered
Chosen Option : --

Q.14 रात के समय अन्धेरा छाया रहता है।

रेखांकित शब्द के स्थान पर उचित शब्द प्रस्थापित कीजिए।

- Ans 1. दीन
 2. राँ
 3. दिन
 4. अलि

Question ID : 65497831631
Status : Not Answered
Chosen Option : --

Q.15 सही वर्तनी वाले शब्द का चयन करें।

- Ans 1. आर्भिव्य
 2. आर्भिर्भाव
 3. आर्बिभाव
 4. आविर्भाव

Question ID : 65497831628
Status : Not Answered
Chosen Option : --

Q.16 दिए गए शब्द का विलोम चुनें।

सुशील

- Ans 1. विशील
 2. अशील
 3. गतिशील
 4. दुश्शील

Question ID : 65497831622
Status : Not Answered
Chosen Option : --

Q.17 दिये गये वाक्यांश के लिए एक शब्द दीजिये।

जिसका अपहरण हो सके

- Ans 1. अपहार्य
 2. अपरिहार्य
 3. अपसव्य
 4. अपहारित

Question ID : 65497831623
Status : Not Answered
Chosen Option : --

Q.18 दिए गए शब्द का समानार्थी शब्द बताइए।

जनक

- Ans 1. जन्मदाता
 2. जानकार
 3. जड़
 4. जननी

Question ID : 65497831619
Status : Not Answered
Chosen Option : --

Q.19 दिए गए वाक्य का वो भाग ज्ञात करें जिसमें कोई त्रुटि है। यदि कोई त्रुटि नहीं है, तो 'कोई त्रुटि नहीं है' चुनें।

प्रतिभाशाली छात्रों ने (1) विद्यालय का नाम (2) रौशन किये (3) कोई त्रुटि नहीं है (4)

- Ans 1. 2
 2. 4
 3. 3
 4. 1

Question ID : 65497831618
Status : Not Answered
Chosen Option : --

Q.20 निम्नलिखित प्रश्न में, दिए गए चार विकल्पों में से, उस विकल्प का चयन करें जो मुहावरे का अर्थ व्यक्त करता है।

म्याऊँ की ठौर पकड़ना

- Ans 1. प्रकुपित होना
 2. जोखिम का कार्य करना
 3. क्रोध के आवेश में होना
 4. उत्साह हीन होना

Question ID : 65497831625
Status : Not Answered
Chosen Option : --

Comprehension:

दिए गए अनुच्छेद में कुछ शब्द हटा दिए गए हैं। दिए गए विकल्पों की सहायता से रिक्त स्थान भरें। प्रत्येक सख्या के लिए सबसे उपयुक्त विकल्प का चयन करें।

हमारे समाज में अनेक (1) _____ हैं। पाँच-सात वर्ष की बालिकाओं का (2) _____ साठ-सत्तर साल के (3) _____ के साथ कर दिया जाता है। दूसरी कुप्रथा (4) _____ है जिसे भारत की सरकार ने कानून के द्वारा (5) _____ घोषित कर दिया है।

SubQuestion No : 21

Q.21 गद्यांश के रिक्त स्थान (1) के लिए सर्वाधिक उपयुक्त शब्द होगा-

- Ans**
- 1. सुप्रथाएँ और कुरीतियाँ
 - 2. रीतियाँ और नीतियाँ
 - 3. कुप्रथाएँ और कुरीतियाँ
 - 4. प्रथाएँ और नीतियाँ

Question ID : 65497831636

Status : Not Answered

Chosen Option : --

Comprehension:

दिए गए अनुच्छेद में कुछ शब्द हटा दिए गए हैं। दिए गए विकल्पों की सहायता से रिक्त स्थान भरें। प्रत्येक सख्या के लिए सबसे उपयुक्त विकल्प का चयन करें।

हमारे समाज में अनेक (1) _____ हैं। पाँच-सात वर्ष की बालिकाओं का (2) _____ साठ-सत्तर साल के (3) _____ के साथ कर दिया जाता है। दूसरी कुप्रथा (4) _____ है जिसे भारत की सरकार ने कानून के द्वारा (5) _____ घोषित कर दिया है।

SubQuestion No : 22

Q.22 गद्यांश के रिक्त स्थान (2) के लिए सर्वाधिक उपयुक्त शब्द होगा-

- Ans**
- 1. कन्यादान
 - 2. विवाह
 - 3. बन्धन
 - 4. कर्ण-छेदन

Question ID : 65497831637

Status : Not Answered

Chosen Option : --

Comprehension:

दिए गए अनुच्छेद में कुछ शब्द हटा दिए गए हैं। दिए गए विकल्पों की सहायता से रिक्त स्थान भरें। प्रत्येक सख्या के लिए सबसे उपयुक्त विकल्प का चयन करें।

हमारे समाज में अनेक (1) _____ हैं। पाँच-सात वर्ष की बालिकाओं का (2) _____ साठ-सत्तर साल के (3) _____ के साथ कर दिया जाता है। दूसरी कुप्रथा (4) _____ है जिसे भारत की सरकार ने कानून के द्वारा (5) _____ घोषित कर दिया है।

SubQuestion No : 23

Q.23 गद्यांश के रिक्त स्थान (3) के लिए सर्वाधिक उपयुक्त शब्द होगा-

- Ans**
- 1. प्रौढ़ो
 - 2. वृद्धो
 - 3. युवाओ
 - 4. बालको

Question ID : 65497831638

Status : Not Answered

Chosen Option : --

Comprehension:

दिए गए अनुच्छेद में कुछ शब्द हटा दिए गए हैं। दिए गए विकल्पों की सहायता से रिक्त स्थान भरें। प्रत्येक सख्खा के लिए सबसे उपयुक्त विकल्प का चयन करें।

हमारे समाज में अनेक (1) _____ हैं। पाँच-सात वर्ष की बालिकाओं का (2) _____ साठ-सत्तर साल के (3) _____ के साथ कर दिया जाता है। दूसरी कुप्रथा (4) _____ है जिसे भारत की सरकार ने कानून के द्वारा (5) _____ घोषित कर दिया है।

SubQuestion No : 24

Q.24 गद्यांश के रिक्त स्थान (4) के लिए सर्वाधिक उपयुक्त शब्द होगा-

- Ans**
- 1. जातीयता
 - 2. विधवा विवाह
 - 3. स्वच्छता
 - 4. अस्पृश्यता

Question ID : 65497831639

Status : Not Answered

Chosen Option : --

Comprehension:

दिए गए अनुच्छेद में कुछ शब्द हटा दिए गए हैं। दिए गए विकल्पों की सहायता से रिक्त स्थान भरें। प्रत्येक सख्खा के लिए सबसे उपयुक्त विकल्प का चयन करें।

हमारे समाज में अनेक (1) _____ हैं। पाँच-सात वर्ष की बालिकाओं का (2) _____ साठ-सत्तर साल के (3) _____ के साथ कर दिया जाता है। दूसरी कुप्रथा (4) _____ है जिसे भारत की सरकार ने कानून के द्वारा (5) _____ घोषित कर दिया है।

SubQuestion No : 25

Q.25 गद्यांश के रिक्त स्थान (5) के लिए सर्वाधिक उपयुक्त शब्द होगा-

- Ans**
- 1. कानूनी
 - 2. अवैध
 - 3. अस्पृश्य
 - 4. निष्प्रभावी

Question ID : 65497831640

Status : Not Answered

Chosen Option : --