

Exam Date	17/11/2021
Exam Time :	9:00 AM - 10:30 AM
Subject	Constable GD 2021

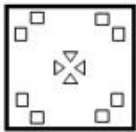
Section : **Part A General Intelligence and Reasoning**

Q.1 The sequence of folding a piece of paper and the manner in which the folded paper has been cut is shown in the following figures. How would this paper look when unfolded?

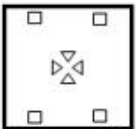


Ans

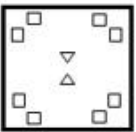
✓ 1.



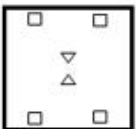
✗ 2.



✗ 3.



✗ 4.



Question ID : 65497831153

Status : Answered

Chosen Option : 1

Q.2 Four letter-clusters have been given, out of which three are alike in some manner and one is different. Select the letter-cluster that is different.

Ans ✗ 1. LOPK

✗ 2. EVIR

✓ 3. CXGV

✗ 4. HSLO

Question ID : 65497831133

Status : Answered

Chosen Option : 3

Q.3 In a certain code language, 'NOTION' is coded as '13127181213'. How will 'BEAUTIFY' be coded in that language?

- Ans 1. 2522266718212
 2. 2505016718212
 3. 2022266818222
 4. 2522268719215

Question ID : 65497831134
Status : Answered
Chosen Option : 1

Q.4 In a certain code language, KILOGRAM is written as LZQFNKHJ. How will AIRCRAFT be written in that language?

- Ans 1. BSHZQEZB
 2. ZHSBQZQH
 3. SEZQBQHZ
 4. SEZQHZBQ

Question ID : 65497831143
Status : Answered
Chosen Option : 3

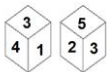
Q.5 Select the option that is related to the third term in the same way as the second term is related to the first term.

METHOD : OIZPYP :: NORMAL : ?

- Ans 1. PSXUKX
 2. PXSUXK
 3. QRYVLY
 4. PSXVLX

Question ID : 65497831142
Status : Answered
Chosen Option : 1

Q.6 Two different positions of the same dice are shown, the six faces of which are numbered from 1 to 6. Select the number that will be on the face opposite to the face having '6'.



- Ans 1. 1
 2. 3
 3. 4
 4. 2

Question ID : 65497831140
Status : Answered
Chosen Option : 1

Q.7 Read the given statements and conclusions carefully. Assuming that the information given in the statements is true, even if it appears to be at variance with commonly known facts, decide which of the given conclusions logically follow(s) from the statements.

Statements:

Some stars are planets.
Some planets are comets.

Conclusions:

I. Some comets are planets.
II. All stars are comets.

- Ans** 1. Only conclusion I follows
 2. Only conclusion II follows
 3. Both conclusions I and II follow
 4. Neither conclusion I nor II follows

Question ID : 65497831150

Status : Answered

Chosen Option : 4

Q.8 Select the figure from among the given options that can replace the question mark (?) in the following series.

S	T	1	S	1	U	?
V	U	V	U	V	S	

Ans

1.

S	2	T
3		1
U		V

2.

T	1	V
		2
S	3	U

3.

T	3	S
		2
V	1	U

4.

T	1	U
		2
S	3	V

Question ID : 65497831148

Status : Answered

Chosen Option : 4

Q.9 Select the number from among the given options that can replace the question mark (?) in the following series.

16, 9, 27, 19, 76, 67, 335, ?

- Ans
- 1. 650
 - 2. 325
 - 3. 415
 - 4. 90

Question ID : 65497831135
Status : Answered
Chosen Option : 4

Q.10 Select the combination of letters that when sequentially placed in the blanks of the given series will complete the series.

P_RQPS_ _P_ _Q_SR_P_RQ

- Ans
- 1. SRQSRPQS
 - 2. SRSQRPQS
 - 3. QRQSRPQS
 - 4. SQQSRPQS

Question ID : 65497831146
Status : Answered
Chosen Option : 1

Q.11 Select the letter-cluster from among the given options that can replace the question mark (?) in the following series.

UC, AE, GG, MI, SK, ?

- Ans
- 1. LM
 - 2. YM
 - 3. YO
 - 4. WN

Question ID : 65497831154
Status : Answered
Chosen Option : 2

Q.12 Select the option that is related to the third number in the same way as the second number is related to the first number and the sixth number is related to the fifth number.

16 : 256 :: 21 : ? :: 19 : 361

- Ans
- 1. 441
 - 2. 324
 - 3. 422
 - 4. 484

Question ID : 65497831138
Status : Answered
Chosen Option : 1

Q.13 आठ मित्र, P, Q, R, S, T, U, V और W, एक गोल मेज़ के परितः इसके केंद्र की ओर अभिमुख होकर बैठे हैं। P, R और S के बीच में है। T, W के बाईं ओर तीसरे स्थान पर है। Q, S के एकदम बाएँ बगल में है। T, S के दाईं ओर तीसरे स्थान पर है। V, U और W के बीच में है। S और W के बीच में कौन बैठा है?

- Ans
- 1. T
 - 2. P
 - 3. Q
 - 4. R

Question ID : 65497831137
Status : Answered
Chosen Option : 3

Q.14 Two years ago, T was twice as old as P. P is thrice as old as R. In five years, P will be 29. What is the present age of T?

- Ans
- 1. 42
 - 2. 48
 - 3. 44
 - 4. 46

Question ID : 65497831152
Status : Answered
Chosen Option : 2

Q.15 Select the correct mirror image of the given combination when the mirror is placed at the right side.

s x g 5 A Y

- Ans
- 1. Y A 2 p x s
 - 2. Y A 2 p x s
 - 3. Y A 2 p x s
 - 4. Y A 5 p x s

Question ID : 65497831136
Status : Answered
Chosen Option : 3

Q.16 राधा और ज्ञानेश की तीन बेटियाँ हैं - मनुजा, तारिणी और सुषमा। तारिणी की शादी जय से हुई है और सुषमा की शादी अभय से हुई है। ज्ञानेश का तीसरा दामाद अखिल है। अखिल के दो बच्चे पीयूष और रानी हैं। जय की दो बेटियाँ ऋचा और नेहा हैं। मृदुल, अभय का इकलौता बेटा है। राधा का रानी से क्या संबंध है?

- Ans
- 1. नानी
 - 2. सास
 - 3. माँ
 - 4. मौसेरी बहन

Question ID : 65497831144
Status : Answered
Chosen Option : 1

Q.17 In a certain code language, 'ABSTRACT' is written as 'IYYVDEU'. How will 'INSTINCT' be written in that language?

- Ans
- 1. QUYYNPEU
 - 2. OUYMQUEU
 - 3. OUYYNQEU
 - 4. QUYPMEU

Question ID : 65497831149
Status : Answered
Chosen Option : 1

Q.18 Select the correct option that indicates the arrangement of the given words in the order in which they appear in an English dictionary.

1. Creditor
2. Creature
3. Credible
4. Creditable
5. Credentials

- Ans
- 1. 2, 5, 1, 3, 4
 - 2. 2, 5, 4, 3, 1
 - 3. 2, 5, 3, 4, 1
 - 4. 3, 5, 1, 4, 2

Question ID : 65497831145
Status : Answered
Chosen Option : 3

Q.19 Which of the given equations is correctly balanced if 'A' means '+', 'B' means '-', 'C' means 'x', and 'D' means '÷'?

- Ans
- 1. $66 B 2 D 54 C 18 = 135$
 - 2. $45 A 5 C 7 D 14 = 77$
 - 3. $45 D 5 C 7 A 14 = 77$
 - 4. $66 C 2 B 54 D 18 = 135$

Question ID : 65497831139
Status : Answered
Chosen Option : 3

Q.20 Select the number from among the given options that can replace the question mark (?) in the following series.

240, 258, 278, 300, ?

- Ans
- 1. 324
 - 2. 312
 - 3. 400
 - 4. 355

Question ID : 65497831147
Status : Answered
Chosen Option : 1

Q.21 Study the given pattern carefully and select the number that can replace the question mark (?) in it.

57 28 29
68 ? 33
72 37 35

- Ans
- 1. 34
 - 2. 33
 - 3. 35
 - 4. 29

Question ID : 65497831151
Status : Answered
Chosen Option : 2

Q.22 'Complicated' is related to 'Simple' in the same way as 'Shrink' is related to '_____'.
Ans

- 1. Expand
- 2. Execute
- 3. Shorten
- 4. Narrow

Question ID : 65497831155
Status : Answered
Chosen Option : 1

Q.23 Select the option in which the given figure is embedded (rotation is NOT allowed).



Ans

- 1.
- 2.
- 3.
- 4.

Question ID : 65497831141
Status : Answered
Chosen Option : 3

Q.24 Select the Venn diagram that correctly represents the relationship between the following classes.

Mothers, Fathers, Men

Ans


✗ 1.



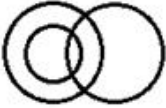
✓ 2.



✗ 3.



✗ 4.



Question ID : 65497831157

Status : Answered

Chosen Option : 2

Q.25 छः मित्र A, B, C, D, E और F एक सीधी क्षैतिज पक्ति में उत्तर की ओर मुह करके बैठे हुए हैं। B, F और C के बीच में बैठा है। E, C के दाईं ओर तीसरे स्थान पर बैठा है। D, E के बाईं ओर ठीक बगल में बैठा है। B के दाईं ओर दूसरे स्थान पर कौन बैठा है?

Ans

✗ 1. E

✗ 2. F

✓ 3. A

✗ 4. D

Question ID : 65497831156

Status : Answered

Chosen Option : 4

Section : Part B General Knowledge and General Awareness

Q.1 As per an announcement made by the Chairman of ISRO on 6 September 2021, Chandrayaan-2 had completed _____ revolutions of the Moon.

Ans

✓ 1. 9000

✗ 2. 12000

✗ 3. 15000

✗ 4. 11000

Question ID : 65497831180

Status : Not Answered

Chosen Option : --

Q.2 Which country is regarded as the origin of SUMO Wrestling game?

- Ans 1. Japan
 2. Vietnam
 3. Indonesia
 4. South Korea

Question ID : **65497831161**
Status : **Answered**
Chosen Option : **1**

Q.3 Who is known as the 'Father of Microeconomics'?

- Ans 1. Paul Krugman
 2. Milton Friedman
 3. James J Heckman
 4. Alfred Marshall

Question ID : **65497831178**
Status : **Not Answered**
Chosen Option : **--**

Q.4 The Deputy Speaker of the Lok Sabha is removed from his office by:

- Ans 1. the order of the Vice-President of India
 2. the order of the Comptroller and Auditor-General of India
 3. a resolution of the Lok Sabha passed by a majority of all the then members of the Lok Sabha
 4. the order of the Attorney-General for India

Question ID : **65497831169**
Status : **Answered**
Chosen Option : **3**

Q.5 CNG stands for which among the following?

- Ans 1. Cardiac nerve grid
 2. Coal and natural gases
 3. Compressed natural gas
 4. Chemically neutral gene

Question ID : **65497831171**
Status : **Answered**
Chosen Option : **3**

Q.6 Till which year was Bangladesh a part of Pakistan?

- Ans 1. 1962
 2. 1974
 3. 1971
 4. 1956

Question ID : **65497831179**
Status : **Answered**
Chosen Option : **3**

Q.7 Which of the following was NOT a Mesopotamian language?

- Ans
- 1. Elamite
 - 2. Amorite
 - 3. Akkadian
 - 4. Sumerian

Question ID : 65497831177
Status : Answered
Chosen Option : 4

Q.8 Who among the following was instrumental in declaring Awadh a disturbed region requiring it to be brought under British control?

- Ans
- 1. Lord Wellesley
 - 2. Lord Dalhousie
 - 3. Lord Canning
 - 4. Lord Ripon

Question ID : 65497831173
Status : Answered
Chosen Option : 2

Q.9 How many seats did the Indian National Congress win at the Bihar Assembly Elections held during October-November, 2020?

- Ans
- 1. 22
 - 2. 15
 - 3. 10
 - 4. 19

Question ID : 65497831174
Status : Answered
Chosen Option : 4

Q.10 Which of the following is the SI base unit for photometry — the science of measuring light as perceived by the human visual system?

- Ans
- 1. Ampere
 - 2. Mole
 - 3. Candela
 - 4. Kelvin

Question ID : 65497831165
Status : Answered
Chosen Option : 3

Q.11 In which of the following cities of India is the 'Saptak Music Festival' celebrated?

- Ans
- 1. Ahmedabad
 - 2. Lucknow
 - 3. Bhopal
 - 4. Amritsar

Question ID : 65497831158
Status : Answered
Chosen Option : 4

Q.12 Who is the author of the book 'Two Lives'?

- Ans
- 1. VS Naipaul
 - 2. Arvind Adiga
 - 3. Salman Rusdie
 - 4. V kram Seth

Question ID : 65497831160
Status : Not Answered
Chosen Option : --

Q.13 In August 2021, Prime Minister Narendra Modi announced that the Rajiv Gandhi Khel Ratna Award would be renamed to _____.

- Ans
- 1. Ekalavya Khel Ratna Award
 - 2. Vijay Hazare Khel Ratna Award
 - 3. Dronacharya Khel Ratna Award
 - 4. Major Dhyan Chand Khel Ratna Award

Question ID : 65497831182
Status : Answered
Chosen Option : 4

Q.14 With reference to India's freedom movement, which Prime Minister of Great Britain announced the Communal Award in 1932?

- Ans
- 1. Neville Chamberlain
 - 2. Sir Winston Churchill
 - 3. Stanley Baldwin
 - 4. James Ramsay MacDonald

Question ID : 65497831168
Status : Not Answered
Chosen Option : --

Q.15 In which city did the freedom fighter Chandrashekhhar Azad shoot himself on being besieged by the British police?

- Ans
- 1. Jabalpur
 - 2. Kanpur
 - 3. Allahabad
 - 4. Bhopal

Question ID : 65497831167
Status : Not Answered
Chosen Option : --

Q.16 The Kadam dam is located at the confluence of the Kadam river into _____.

- Ans
- 1. Sharavati
 - 2. Godavari
 - 3. Kabini
 - 4. Kaveri

Question ID : 65497831181
Status : Not Answered
Chosen Option : --

Q.17 In November 2020, WhatsApp partnered with five Indian banks to process its payment services. Which of the following banks is NOT one of the five banks in that list?

- Ans
- 1. Axis
 - 2. Bank of India
 - 3. HDFC
 - 4. Jio Payments Bank

Question ID : 65497831175
Status : Answered
Chosen Option : 4

Q.18 According to APEDA report 2020 which Indian state has the highest percentage of commercially cultivated floriculture?

- Ans
- 1. Tamil Nadu
 - 2. Maharashtra
 - 3. Karnataka
 - 4. Madhya Pradesh

Question ID : 65497831159
Status : Answered
Chosen Option : 2

Q.19 When the caterpillar is ready to enter the next stage of its life cycle called _____, it first weaves a net to hold itself.

- Ans
- 1. egg
 - 2. pupa
 - 3. late cocoon
 - 4. early cocoon

Question ID : 65497831164
Status : Answered
Chosen Option : 2

Q.20 India is ranked at the _____ place in the 'Climate Change Performance Index (CCPI) 2021', which was released on 7 December 2020.

- Ans
- 1. 10th
 - 2. 15th
 - 3. 11th
 - 4. 20th

Question ID : 65497831170
Status : Answered
Chosen Option : 1

Q.21 Who among the following was awarded the 2020 Tyler Prize for Environmental Achievement on 27 January 2020?

- Ans
- 1. Partha S Dasgupta
 - 2. Pavan Sukhdev
 - 3. Jyoti Par kh
 - 4. Madhav Gadgil

Question ID : 65497831166
Status : Not Answered
Chosen Option : --

Q.22 In which of the following states is the Yumthang Valley located?

- Ans 1. Uttarakhand
 2. Himachal Pradesh
 3. Nagaland
 4. Sikkim

Question ID : 65497831172
Status : Answered
Chosen Option : 4

Q.23 What is the ratio of money held by public in currency to that they hold in bank deposits called?

- Ans 1. Reserve Deposit Ratio
 2. Cash Reserve Ratio
 3. Currency Deposit Ratio
 4. Statutory Liquidity Ratio

Question ID : 65497831176
Status : Answered
Chosen Option : 4

Q.24 Who among the following dancers is best known for the renaissance of the 'Bharatnatyam' dance form?

- Ans 1. Mallika Sarabhai
 2. Yamini Krishnamurthy
 3. Rukmani Devi Arundale
 4. Alamel Valli

Question ID : 65497831163
Status : Answered
Chosen Option : 2

Q.25 The International Cricket Council (ICC) Board announced a minimum age policy for International cricket in November 2020. As per the policy, a player must be at least _____ to play cricket globally.

- Ans 1. 16 years old
 2. 15 years old
 3. 14 years old
 4. 13 years old

Question ID : 65497831162
Status : Answered
Chosen Option : 3

Section : Part C Elementary Mathematics

Q.1

The value of $\frac{33}{40} + \frac{1}{5} \left[\frac{4}{5} - \frac{1}{5} \times \left(\frac{7}{8} - \frac{5}{4} \right) \right] - \frac{4}{5}$ is:

Ans

- 1. $\frac{1}{5}$
- 2. $\frac{1}{4}$
- 3. $\frac{1}{7}$
- 4. $\frac{1}{3}$

Question ID : 65497831195
Status : Answered
Chosen Option : 1

Q.2

The value of $\frac{(251)^2 + (249)^2}{25.1 \times 25.1 - 624.99 + 24.9 \times 24.9}$ is 5×10^k , where the value of k is:

Ans

- 1. 4
- 2. 6
- 3. 3
- 4. 5

Question ID : 65497831192
Status : Answered
Chosen Option : 1

Q.3

A shopkeeper buys a table fan marked at ₹2,600 on 18% discount. He marked it for ₹2,800 and allows a 15% discount. How much does he earn?

Ans

- 1. ₹420
- 2. ₹200
- 3. ₹220
- 4. ₹248

Question ID : 65497831183
Status : Answered
Chosen Option : 4

Q.4

A can do a certain work in 15 days. B is 10% less efficient than A, and C is 20% more efficient than A. All the three work together for 3 days. The remaining work is completed by D alone in $9\frac{1}{2}$ days. D alone can complete the original work in:

Ans

- 1. 18 days
- 2. 15 days
- 3. 25 days
- 4. 20 days

Question ID : 65497831206
Status : Not Answered
Chosen Option : --

Q.5 Pipes A and B can empty a full tank in 15 minutes and 20 minutes, respectively, while pipe C alone can fill the empty tank in 8 minutes. If pipes A, B and C are opened together, then in how many hours will the tank be filled?

- Ans**
- 1. 2.5
 - 2. 1.5
 - 3. 2
 - 4. 3

Question ID : 65497831194
Status : Answered
Chosen Option : 3

Q.6 A factory requires 56 machines to manufacture a given number of articles in 144 days. How many machines will be required to produce the same number of articles in 96 days?

- Ans**
- 1. 63
 - 2. 84
 - 3. 77
 - 4. 81

Question ID : 65497831190
Status : Answered
Chosen Option : 2

Q.7 The average height of 20 students of class 8 is 152 cm and the average height of 15 students of class 9 is 168 cm. What is the average height (to the nearest cm) of the students of both classes?

- Ans**
- 1. 159
 - 2. 160
 - 3. 157
 - 4. 158

Question ID : 65497831189
Status : Answered
Chosen Option : 1

Q.8 A sum of ₹73,500 is divided among A, B, C and D in the ratio 3 : 7 : 9 : 11, respectively. What is the sum of the shares of A and D?

- Ans**
- 1. ₹34,300
 - 2. ₹39,200
 - 3. ₹24,500
 - 4. ₹29,400

Question ID : 65497831184
Status : Answered
Chosen Option : 1

Q.9 Five years ago, the average age of A, B and C was 20 years. Six years ago, the average age of B and C was 9 years. What will be the age (in years) of A 3 years from now?

- Ans**
- 1. 41
 - 2. 48
 - 3. 45
 - 4. 47

Question ID : **65497831203**
Status : **Answered**
Chosen Option : **2**

Q.10 The difference between the height and the radius of a solid cylinder is 23 cm. The total surface area of the cylinder is 1628 cm^2 . The height and the radius of the cylinder, respectively, are (take $\pi = \frac{22}{7}$):

- Ans**
- 1. 33 cm, 10 cm
 - 2. 30 cm, 7 cm
 - 3. 32 cm, 09 cm
 - 4. 28 cm, 5 cm

Question ID : **65497831201**
Status : **Not Answered**
Chosen Option : --

Q.11 The number of years taken for a sum of ₹5,000 to become ₹5,832 at a rate of 16 % per annum compounded half yearly, will be:

- Ans**
- 1. 1.5 years
 - 2. $\frac{1}{2}$ year
 - 3. 2 years
 - 4. 1 year

Question ID : **65497831200**
Status : **Answered**
Chosen Option : **4**

Q.12 If 25% of x is 40 less than 30% of $(x + 60)$, then 35% of $(x - 40)$ is what percentage more than 120?

- Ans**
- 1. $16\frac{2}{3}\%$
 - 2. 20%
 - 3. $12\frac{1}{2}\%$
 - 4. 25%

Question ID : **65497831205**
Status : **Not Answered**
Chosen Option : --

Q.13 What is the least number added to 2483 so that it is completely divisible by 3, 4, 5 and 6?

- Ans**
- 1. 37
 - 2. 23
 - 3. 22
 - 4. 30

Question ID : 65497831197
Status : Answered
Chosen Option : 1

Q.14 How many minutes will Radha take to cover a distance of 1950 m, if she runs at a speed of 26 km/h?

- Ans**
- 1. $7\frac{1}{2}$ minutes
 - 2. $4\frac{1}{2}$ minutes
 - 3. $3\frac{1}{2}$ minutes
 - 4. $5\frac{1}{2}$ minutes

Question ID : 65497831196
Status : Answered
Chosen Option : 2

Q.15 Two numbers are in the ratio 9 : 11. If their HCF is 23, then the difference of the two numbers is:

- Ans**
- 1. 46
 - 2. 146
 - 3. 56
 - 4. 253

Question ID : 65497831188
Status : Answered
Chosen Option : 1

Q.16 A certain sum of money doubles itself in 6 years. How much time (in years) will it take to become five times of itself at the same rate?

- Ans**
- 1. 30
 - 2. 24
 - 3. 35
 - 4. 28

Question ID : 65497831191
Status : Answered
Chosen Option : 1

Q.17 A train can cross a tunnel of length 600 m in 54 seconds, and it can cross a 350 m long bridge in 36 seconds. Which of the following statements is/are correct?

- (i) The speed of the train is 60 km/h.
- (ii) The length of the train is 150 m.

Ans 1. Only statement (ii)

2. Only statement (i)

3. Neither statement (i) nor (ii)

4. Both statements (i) and (ii)

Question ID : 65497831207

Status : Not Answered

Chosen Option : --

Q.18 A man bought two mobiles phones for ₹50,000. He sold one of them at a profit of 15% and the other at a loss of 20%. If the selling price of each mobile is the same, what is the approximate cost price (to the nearest rupee) of the mobile that was sold at a loss?

Ans 1. 27,368

2. 25,465

3. 29,487

4. 20,513

Question ID : 65497831186

Status : Not Answered

Chosen Option : --

Q.19 A man lent out ₹14,000 at 5% and ₹19,000 at 6% simple interest per annum. His total income (in ₹) from the interest in 3 years is:

Ans 1. 3,420

2. 2,100

3. 5,445

4. 5,520

Question ID : 65497831187

Status : Answered

Chosen Option : 4

Q.20 If X is 12.25% more than Y, then Y is approximately _____ less than X.

Ans 1. 3%

2. 10.9%

3. 12%

4. 15.6%

Question ID : 65497831198

Status : Not Answered

Chosen Option : --

Q.21 Raghu bought some pens at the rate of 12 for ₹100 and an equal number of pens at 15 for ₹135. How many pens should he sell for ₹260, so as to make a profit of 20%?

- Ans**
- 1. 20
 - 2. 30
 - 3. 24
 - 4. 25

Question ID : 65497831202
Status : Not Answered
Chosen Option : --

Q.22 A person bought a rectangular piece of land whose length and breadth are in the ratio 7 : 5. If the cost of fencing the land is ₹2,880 at the rate of ₹15/m, then what is the length of the land?

- Ans**
- 1. 56 m
 - 2. 40 m
 - 3. 60 m
 - 4. 84 m

Question ID : 65497831185
Status : Not Answered
Chosen Option : --

Q.23 The ages of two persons P and Q are in the ratio 5 : 7. Eight years ago, the ratio of P and Q was 7 : 13. The present ages of P and Q, respectively, are:

- Ans**
- 1. 15 and 21 years
 - 2. 20 and 28 years
 - 3. 21 and 15 years
 - 4. 12 and 13 years

Question ID : 65497831199
Status : Answered
Chosen Option : 1

Q.24 By selling an article for ₹1800, triple the profit is obtained than the profit that would have been obtained by selling it for ₹1350. The cost price (in ₹) of the article is:

- Ans**
- 1. 1200
 - 2. 1125
 - 3. 1250
 - 4. 1175

Question ID : 65497831193
Status : Answered
Chosen Option : 1

Q.25 The marked price of an article is ₹550. It is sold for ₹317.90, after giving three successive discounts of 15%, $x\%$ and 20% on its marked price. If it is sold by giving a single discount of $2x\%$, then its selling price (in ₹) will be:

- Ans
- 1. 440
 - 2. 385
 - 3. 495
 - 4. 484

Question ID : 65497831204
Status : Not Answered
Chosen Option : --

Section : Part D English

Q.1 The following sentence has been split into four segments. Identify the segment that contains a grammatical error.

The report said that / people who are eat meat / are at a higher risk / of fractures.

- Ans
- 1. are at a higher risk
 - 2. people who are eat meat
 - 3. of fractures
 - 4. The report said that

Question ID : 65497831214
Status : Answered
Chosen Option : 2

Q.2 Select the most appropriate synonym of the given word.

Imperial

- Ans
- 1. Paternal
 - 2. Sovereign
 - 3. God-fearing
 - 4. Ancestral

Question ID : 65497831223
Status : Answered
Chosen Option : 4

Q.3 Parts of the given sentence have been given as options. One of them contains a grammatical error. Select the option that has the error.

I am sure that Vasu is not going to returned the money that he owes you.

- Ans
- 1. returned
 - 2. I am sure
 - 3. he owes you
 - 4. not going to

Question ID : 65497831222
Status : Answered
Chosen Option : 1

Q.4 Select the correctly spelt word.

- Ans 1. Continuosly
 2. Contenuously
 3. Continuously
 4. Contenewosly

Question ID : 65497831211
Status : Answered
Chosen Option : 1

Q.5 Select the most appropriate option to fill in the blank.

From these findings, we can _____ that the rate of crime is increasing in the city.

- Ans 1. presuppose
 2. infer
 3. summarise
 4. presume

Question ID : 65497831225
Status : Answered
Chosen Option : 4

Q.6 Select the most appropriate meaning of the given idiom.

Down in the dumps

- Ans 1. In a high spirit
 2. In a depressed state of mind
 3. In a state of fury
 4. In a very happy mood

Question ID : 65497831221
Status : Answered
Chosen Option : 2

Q.7 Select the most appropriate synonym of the given word.

Monotonous

- Ans 1. Modified
 2. Varied
 3. Boring
 4. Fluctuated

Question ID : 65497831216
Status : Answered
Chosen Option : 3

Q.8 The following sentence has been split into four segments. Identify the segment that contains a grammatical error.

Angad says that / he follows / his exercise regimen strictly / and that helping to him stay fit.

- Ans
- 1. his exercise regimen strictly
 - 2. Angad says that
 - 3. he follows
 - 4. and that helping to him stay fit

Question ID : 65497831215
Status : Answered
Chosen Option : 4

Q.9 Select the option that can be used as a one-word substitute for the given group of words.

Delay an event to a later date or time

- Ans
- 1. Postpone
 - 2. Prepone
 - 3. Preserve
 - 4. Persevere

Question ID : 65497831220
Status : Answered
Chosen Option : 1

Q.10 Select the most appropriate option to fill in the blank.

The shops at the Indian airports have to _____ prices in Indian rupees.

- Ans
- 1. display
 - 2. convert
 - 3. trace
 - 4. tag

Question ID : 65497831208
Status : Answered
Chosen Option : 1

Q.11 Select the most appropriate option that can substitute the underlined segment in the given sentence. If there is no need to substitute it, select 'No substitution required'.

If she likes the scenery, she will paint it.

- Ans
- 1. No substitution required
 - 2. If she like
 - 3. If she had liked
 - 4. If she is liking

Question ID : 65497831209
Status : Answered
Chosen Option : 1

Q.12 Select the most appropriate option to fill in the blank.

Besides having a good academic record, it is important that you learn how to face an interview with _____ and self-confidence.

- Ans
- 1. counsel
 - 2. ease
 - 3. experience
 - 4. adaptation

Question ID : 65497831212
Status : Answered
Chosen Option : 2

Q.13 Select the most appropriate option that can substitute the underlined word in the given sentence.

He became the first Indian to be invited to perform at the advantageous Maple Theatre in Canada.

- Ans
- 1. prestigious
 - 2. inauspicious
 - 3. heterogeneous
 - 4. multifarious

Question ID : 65497831213
Status : Answered
Chosen Option : 1

Q.14 Select the most appropriate ANTONYM of the given word.

Enthusiasm

- Ans
- 1. Excitement
 - 2. Lethargy
 - 3. Passion
 - 4. Devotion

Question ID : 65497831226
Status : Answered
Chosen Option : 2

Q.15 Select the most appropriate meaning of the given idiom.

To get out of hand

- Ans
- 1. To lose courage
 - 2. To act irresponsibly
 - 3. To become uncontrollable
 - 4. To be indecisive

Question ID : 65497831210
Status : Answered
Chosen Option : 3

Q.16 Select the option that will improve the underlined part of the given sentence. In case no improvement is needed, select 'No improvement required'.

I have never see anything like this before.

- Ans
- 1. never saw anything
 - 2. never seen anything
 - 3. never saw something
 - 4. No improvement required

Question ID : 65497831227
Status : Answered
Chosen Option : 2

Q.17 Select the INCORRECTLY spelt word.

- Ans
- 1. Sensible
 - 2. Campatable
 - 3. Accessible
 - 4. Feasible

Question ID : 65497831219
Status : Answered
Chosen Option : 2

Q.18 Select the option that can be used as a one-word substitute for the given group of words.

An outgoing, socially confident person

- Ans
- 1. Extrovert
 - 2. Introvert
 - 3. Brooder
 - 4. Solitary

Question ID : 65497831224
Status : Answered
Chosen Option : 1

Q.19 Select the most appropriate ANTONYM of the given word.

Deny

- Ans
- 1. Block
 - 2. Prevent
 - 3. Accept
 - 4. Check

Question ID : 65497831217
Status : Answered
Chosen Option : 3

Q.20 Select the option that can be used as a one-word substitute for the given group of words.

A study of the human body

- Ans 1. Philanthropy
 2. Pathology
 3. Physiology
 4. Philology

Question ID : 65497831218
Status : Answered
Chosen Option : 3

Comprehension:

In the following passage, some words have been deleted. Read the passage carefully and select the most appropriate option to fill in each blank.

Few people lived near the North Pole. A small Inuit community had settled the closest, (1) _____ for the most part the region remained isolated (2) _____ the rest of the world for centuries. A few (3) _____ explorers like Henry Hudson and James Cook (4) _____ to navigate the region in search of a sea (5) _____ to connect the Atlantic and Pacific Oceans in the waters above North America.

SubQuestion No : 21

Q.21 Select the most appropriate option to fill in blank no. 1.

- Ans 1. so
 2. because
 3. or
 4. but

Question ID : 65497831229
Status : Answered
Chosen Option : 4

Comprehension:

In the following passage, some words have been deleted. Read the passage carefully and select the most appropriate option to fill in each blank.

Few people lived near the North Pole. A small Inuit community had settled the closest, (1) _____ for the most part the region remained isolated (2) _____ the rest of the world for centuries. A few (3) _____ explorers like Henry Hudson and James Cook (4) _____ to navigate the region in search of a sea (5) _____ to connect the Atlantic and Pacific Oceans in the waters above North America.

SubQuestion No : 22

Q.22 Select the most appropriate option to fill in blank no. 2.

- Ans 1. by
 2. with
 3. of
 4. from

Question ID : 65497831230
Status : Answered
Chosen Option : 4

Comprehension:

In the following passage, some words have been deleted. Read the passage carefully and select the most appropriate option to fill in each blank.

Few people lived near the North Pole. A small Inuit community had settled the closest, (1) _____ for the most part the region remained isolated (2) _____ the rest of the world for centuries. A few (3) _____ explorers like Henry Hudson and James Cook (4) _____ to navigate the region in search of a sea (5) _____ to connect the Atlantic and Pacific Oceans in the waters above North America.

SubQuestion No : 23

Q.23 Select the most appropriate option to fill in blank no. 3.

- Ans
- 1. strong
 - 2. powerful
 - 3. daring
 - 4. thoughtful

Question ID : 65497831231
Status : Answered
Chosen Option : 3

Comprehension:

In the following passage, some words have been deleted. Read the passage carefully and select the most appropriate option to fill in each blank.

Few people lived near the North Pole. A small Inuit community had settled the closest, (1) _____ for the most part the region remained isolated (2) _____ the rest of the world for centuries. A few (3) _____ explorers like Henry Hudson and James Cook (4) _____ to navigate the region in search of a sea (5) _____ to connect the Atlantic and Pacific Oceans in the waters above North America.

SubQuestion No : 24

Q.24 Select the most appropriate option to fill in blank no. 4.

- Ans
- 1. tried
 - 2. trying
 - 3. try
 - 4. had tried

Question ID : 65497831232
Status : Answered
Chosen Option : 4

Comprehension:

In the following passage, some words have been deleted. Read the passage carefully and select the most appropriate option to fill in each blank.

Few people lived near the North Pole. A small Inuit community had settled the closest, (1) _____ for the most part the region remained isolated (2) _____ the rest of the world for centuries. A few (3) _____ explorers like Henry Hudson and James Cook (4) _____ to navigate the region in search of a sea (5) _____ to connect the Atlantic and Pacific Oceans in the waters above North America.

SubQuestion No : 25

Q.25 Select the most appropriate option to fill in blank no. 5.

- Ans
- 1. track
 - 2. route
 - 3. path
 - 4. road

Question ID : 65497831233
Status : Answered
Chosen Option : 2

Q.1 निम्नलिखित में से अशुद्ध वर्तनी वाले शब्द को पहचानिए-

- Ans
- 1. दशहरा
 - 2. डारधिची
 - 3. ताज्जुब
 - 4. ज्योतिषी

Question ID : 65497831238
Status : Not Answered
Chosen Option : --

Q.2 'ठीक परिणाम देने वाला' वाक्यांश के लिए उपयुक्त शब्द होगा-

- Ans
- 1. सुखदायी
 - 2. फलदायी
 - 3. सुखात
 - 4. फलक

Question ID : 65497831253
Status : Not Answered
Chosen Option : --

Q.3 रिक्त स्थान की पूर्ति के लिए सबसे उपयुक्त शब्द का चयन करें।

आज इस साल का पहला तूफान _____।

- Ans
- 1. आया
 - 2. चला
 - 3. नाचा
 - 4. उठा

Question ID : 65497831247
Status : Not Answered
Chosen Option : --

Q.4 'काँटो पर लोटना' इस मुहावरे का उचित अर्थ किस विकल्प में है?

- Ans
- 1. बाधा दूर होना
 - 2. बेचैन होना
 - 3. अडचनें पैदा करना
 - 4. सकट में डालना

Question ID : 65497831235
Status : Not Answered
Chosen Option : --

Q.5 रिक्त स्थान की पूर्ति के लिए सबसे उपयुक्त शब्द का चयन करें।

इस _____ घर-घर में यही दशा है।

- Ans
- 1. गाव तक
 - 2. गाव के
 - 3. गाव की
 - 4. गाव में

Question ID : 65497831246
Status : Not Answered
Chosen Option : --

Q.6 उस विकल्प का चयन कीजिए जो नीचे दिए गये मुहावरे का अर्थ व्यक्त करता है-

आपे में आना

- Ans
- 1. बेहोश हो जाना
 - 2. बहुत गुस्से में आना
 - 3. होश में आना
 - 4. काबू में न रहना

Question ID : 65497831244
Status : Not Answered
Chosen Option : --

Q.7 दिए गए शब्द के विलोम शब्द का चयन करें।

आसक्त

- Ans
- 1. सक्त
 - 2. विरक्त
 - 3. विस्तृत
 - 4. अनासक्त

Question ID : 65497831241
Status : Not Answered
Chosen Option : --

Q.8 दिए गए वाक्य में रेखांकित खंड को प्रतिस्थापित करने के लिए सबसे उपयुक्त विकल्प का चयन करें।
यदि इसे प्रतिस्थापित करने की आवश्यकता नहीं है, तो विकल्प 'किसी बदलाव की आवश्यकता नहीं है'
का चयन करें।

जनता के अदर असतोष फैल गया।

- Ans
- 1. के पास
 - 2. किसी बदलाव की आवश्यकता नहीं है।
 - 3. जनता में
 - 4. के भीतर

Question ID : 65497831234
Status : Not Answered
Chosen Option : --

Q.9 दिए गए वाक्य का वह भाग ज्ञात करें जिसमें कोई त्रुटि है। यदि कोई त्रुटि नहीं है, तो 'कोई त्रुटि नहीं है'
विकल्प को चुनें।

शिक्षक ने उन छात्रों को पूछा।

- Ans
- 1. पूछा
 - 2. कोई त्रुटि नहीं है
 - 3. उन छात्रों को
 - 4. शिक्षक ने

Question ID : 65497831240
Status : Not Answered
Chosen Option : --

Q.10 जिसके दस आनन है - वाक्याश के लिए एक शब्द लिखिए।

- Ans
- 1. राम
 - 2. कबीर
 - 3. दशानन
 - 4. कवि दिनकर

Question ID : 65497831242
Status : Not Answered
Chosen Option : --

Q.11 दिए गये वाक्याश के लिए एक शब्द दीजिये-

बिना वेतन के काम करने वाला

- Ans
- 1. अवैतनिक
 - 2. वैतनिक
 - 3. भुगतानविहीन
 - 4. अपेय

Question ID : 65497831245
Status : Not Answered
Chosen Option : --

Q.12 निम्नलिखित में से शुद्ध वर्तनी वाले शब्द को पहचानिए-

- Ans
- 1. बिकारी
 - 2. ओषधी
 - 3. सच्च
 - 4. कारीगर

Question ID : 65497831239
Status : Not Answered
Chosen Option : --

Q.13 दिए गए शब्द के समानार्थी का चयन करें।

कोयल

- Ans
- 1. मुरारी
 - 2. वसतदूत
 - 3. श्वान
 - 4. अन्ग

Question ID : 65497831237
Status : Not Answered
Chosen Option : --

Q.14 दिये गये वाक्य के किस भाग में त्रुटि है?

पिताजी मेरे परीक्षाफल से सतुष्ट नहीं हुए।

- Ans
- 1. सतुष्ट
 - 2. परीक्षाफल से
 - 3. नहीं हुए।
 - 4. पिताजी मेरे

Question ID : 65497831250
Status : Not Answered
Chosen Option : --

Q.15 दिये गये वाक्य में रेखांकित अश को प्रतिस्थापित करने के लिए सबसे उपयुक्त विकल्प का चयन करें।

कर्मचारी अपना वेतन नहीं पा पाया।

- Ans
- 1. दे पाया।
 - 2. भर पाया।
 - 3. कर पाया।
 - 4. ले पाया।

Question ID : 65497831252
Status : Not Answered
Chosen Option : --

Q.16 दिए गए वाक्य में रेखांकित खंड को प्रतिस्थापित करने के लिए सबसे उपयुक्त विकल्प का चयन करें। यदि इसे प्रतिस्थापित करने की आवश्यकता नहीं है, तो विकल्प 'किसी बदलाव की आवश्यकता नहीं है' का चयन करें।

मैं गाने का कसरत कर रहा हूँ।

- Ans
- 1. समर्पण कर रहा हूँ
 - 2. व्यायाम कर रहा हूँ
 - 3. किसी बदलाव की आवश्यकता नहीं है।
 - 4. अभ्यास कर रहा हूँ

Question ID : 65497831249
Status : Not Answered
Chosen Option : --

Q.17 रिक्त स्थान की पूर्ति के लिए सबसे उपयुक्त शब्द का चयन करें।

बारिश की बूंदें _____ रही हैं।

- Ans
- 1. टपक
 - 2. रिस
 - 3. बरस
 - 4. गीर

Question ID : 65497831248
Status : Not Answered
Chosen Option : --

Q.18 दिए गए वाक्य का वह भाग ज्ञात करें जिसमें कोई त्रुटि है। यदि कोई त्रुटि नहीं है, तो 'कोई त्रुटि नहीं है' विकल्प को चुनें।

रमादेवी एक विद्वान महिला थी।

- Ans
- 1. एक विद्वान
 - 2. रमादेवी
 - 3. कोई त्रुटि नहीं है
 - 4. महिला थी

Question ID : 65497831236
Status : Not Answered
Chosen Option : --

Q.19 दिए गए शब्द के विलोम शब्द का चयन करें-

स्वल्पायु

- Ans 1. चिरायु
 2. अल्पायु
 3. अवस्था
 4. दीर्घ

Question ID : 65497831243
Status : Not Answered
Chosen Option : --

Q.20 'नलिन' किसका पर्यायवाची है?

- Ans 1. जल
 2. कमल
 3. स्वर्ग
 4. कपड़ा

Question ID : 65497831251
Status : Not Answered
Chosen Option : --

Comprehension:

नीचे दिए गए गद्यांश में से कुछ शब्द हटा दिए गए हैं। संबंधित प्रश्नों में प्रत्येक सख्खा के लिए सबसे उपयुक्त विकल्प का चयन करें।

(1) _____ को सबल बनाने के लिए हमें नियमित (2) _____ करना चाहिए। सुदर (3) _____ के लिए हमें खेलना, दौड़ना, चलना, कूदना और (4) _____ चाहिए। अतएव हम सभी को विद्यालयों में होनेवाले (5) _____ में भाग लेना चाहिए।

SubQuestion No : 21

Q.21 गद्यांश के रिक्त स्थान (1) के लिए सर्वाधिक उपयुक्त शब्द होगा-

- Ans 1. काम
 2. शरीर
 3. परिवार
 4. हृदय

Question ID : 65497831255
Status : Not Answered
Chosen Option : --

Comprehension:

नीचे दिए गए गद्यांश में से कुछ शब्द हटा दिए गए हैं। संबंधित प्रश्नों में प्रत्येक सख्खा के लिए सबसे उपयुक्त विकल्प का चयन करें।

(1) _____ को सबल बनाने के लिए हमें नियमित (2) _____ करना चाहिए। सुदर (3) _____ के लिए हमें खेलना, दौड़ना, चलना, कूदना और (4) _____ चाहिए। अतएव हम सभी को विद्यालयों में होनेवाले (5) _____ में भाग लेना चाहिए।

SubQuestion No : 22

Q.22 गद्यांश के रिक्त स्थान (2) के लिए सर्वाधिक उपयुक्त शब्द होगा-

- Ans 1. भाषण करना
 2. शोना
 3. खाना
 4. व्यायाम

Question ID : 65497831256
Status : Not Answered
Chosen Option : --

Comprehension:

नीचे दिए गए गद्यांश में से कुछ शब्द हटा दिए गए हैं। संबंधित प्रश्नों में प्रत्येक सख्खा के लिए सबसे उपयुक्त विकल्प का चयन करें।

(1) _____ को सबल बनाने के लिए हमें नियमित (2) _____ करना चाहिए। सुदूर (3) _____ के लिए हमें खेलना, दौड़ना, चलना, कूदना और (4) _____ चाहिए। अतएव हम सभी को विद्यालयों में होनेवाले (5) _____ में भाग लेना चाहिए।

SubQuestion No : 23

Q.23 गद्यांश के रिक्त स्थान (3) के लिए सर्वाधिक उपयुक्त शब्द होगा-

- Ans**
- 1. कार्य
 - 2. व्यवहार
 - 3. स्वास्थ्य
 - 4. वेश-भूषा

Question ID : 65497831257

Status : Not Answered

Chosen Option : --

Comprehension:

नीचे दिए गए गद्यांश में से कुछ शब्द हटा दिए गए हैं। संबंधित प्रश्नों में प्रत्येक सख्खा के लिए सबसे उपयुक्त विकल्प का चयन करें।

(1) _____ को सबल बनाने के लिए हमें नियमित (2) _____ करना चाहिए। सुदूर (3) _____ के लिए हमें खेलना, दौड़ना, चलना, कूदना और (4) _____ चाहिए। अतएव हम सभी को विद्यालयों में होनेवाले (5) _____ में भाग लेना चाहिए।

SubQuestion No : 24

Q.24 गद्यांश के रिक्त स्थान (4) के लिए सर्वाधिक उपयुक्त शब्द होगा-

- Ans**
- 1. पढ़ना
 - 2. टहलना
 - 3. गीत गाना
 - 4. रोना

Question ID : 65497831258

Status : Not Answered

Chosen Option : --

Comprehension:

नीचे दिए गए गद्यांश में से कुछ शब्द हटा दिए गए हैं। संबंधित प्रश्नों में प्रत्येक सख्खा के लिए सबसे उपयुक्त विकल्प का चयन करें।

(1) _____ को सबल बनाने के लिए हमें नियमित (2) _____ करना चाहिए। सुदूर (3) _____ के लिए हमें खेलना, दौड़ना, चलना, कूदना और (4) _____ चाहिए। अतएव हम सभी को विद्यालयों में होनेवाले (5) _____ में भाग लेना चाहिए।

SubQuestion No : 25

Q.25 गद्यांश के रिक्त स्थान (5) के लिए सर्वाधिक उपयुक्त शब्द होगा-

- Ans**
- 1. बातचीत में
 - 2. कसरत
 - 3. खेलो
 - 4. मजाक

Question ID : 65497831259

Status : Not Answered

Chosen Option : --