

Exam Date	10/12/2021
Exam Time :	12:30 PM - 2:00 PM
Subject	Constable GD 2021

Section : Part A General Intelligence and Reasoning

Q.1 Select the letter-cluster from among the given options that can replace the question mark (?) in the following series.

BZCA, EXFY, HVIW, KTLU, ?

- Ans
- 1. ORNP
 - 2. NRPS
 - 3. NROS
 - 4. RNPO

Question ID : 65497831278
Status : Answered
Chosen Option : 3

Q.2 Select the option that is related to the third number in the same way as the second number is related to the first number and the sixth number is related to the fifth number.

13: 156 :: 18: ? :: 17 : 272

- Ans
- 1. 305
 - 2. 306
 - 3. 307
 - 4. 308

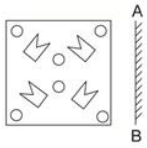
Question ID : 65497831271
Status : Answered
Chosen Option : 2

Q.3 In a certain code language, 'GLOBE' is written as 'KPKFA'. How will 'DRINK' be written in that language?

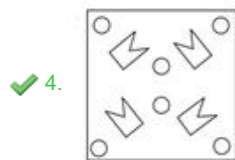
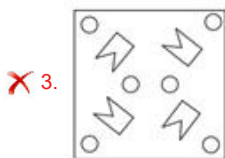
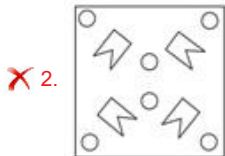
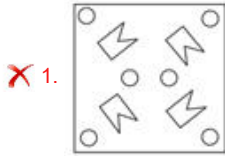
- Ans
- 1. HNEJO
 - 2. ZRVMG
 - 3. HVERO
 - 4. ZVMRG

Question ID : 65497831268
Status : Answered
Chosen Option : 3

Q.4 Select the correct mirror image of the given figure when the mirror is placed at 'AB' as shown.



Ans



Question ID : 65497831267
Status : Answered
Chosen Option : 4

Q.5 If 'A' denotes 'addition', 'B' denotes 'multiplication', 'C' denotes 'subtraction' and 'D' denotes 'division', then what will be the value of the following expression?

483 D 23 A 93 C 16 B 4

- Ans
- ✗ 1. 67
 - ✗ 2. 60
 - ✗ 3. 57
 - ✓ 4. 50

Question ID : 65497831273
Status : Answered
Chosen Option : 4

Q.6 Four letter-clusters have been given, out of which three are alike in some manner and one is different. Select the letter-cluster that is different.

- Ans
- ✗ 1. FGHE
 - ✗ 2. BCDA
 - ✗ 3. HIJG
 - ✓ 4. STUV

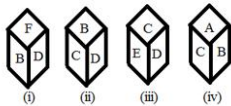
Question ID : 65497831264
Status : Answered
Chosen Option : 4

Q.7 In a certain code language, 'CROW' is coded as '3-18-15-23' and 'FISH' is coded as '6-9-19-8'. How will 'BULL' be coded in that language?

- Ans
- 1. 3-20-11-11
 - 2. 2-22-13-13
 - 3. 2-22-12-12
 - 4. 2-21-12-12

Question ID : 65497831265
 Status : Answered
 Chosen Option : 4

Q.8 Four different positions of the same dice are shown. Select the letter that will be on the face opposite to the face having the letter 'B'.



- Ans
- 1. E
 - 2. C
 - 3. D
 - 4. F

Question ID : 65497831275
 Status : Answered
 Chosen Option : 1

Q.9 Select the number from among the given options that can replace the question mark (?) in the following series.

6, 54, 378, 1890, ?

- Ans
- 1. 5670
 - 2. 6811
 - 3. 4236
 - 4. 6002

Question ID : 65497831266
 Status : Answered
 Chosen Option : 1

Q.10 Study the given pattern carefully and select the number that can replace the question mark (?) in it.

5 17 61
 6 21 75
 8 ? 103



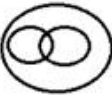
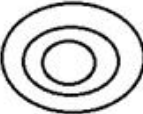
- Ans
- 1. 27
 - 2. 29
 - 3. 21
 - 4. 23

Question ID : 65497831272
 Status : Answered
 Chosen Option : 1

Q.11 Select the Venn diagram that best illustrates the relationship between the following classes.

Civics, Subject, Chemistry

Ans

- ✓ 1. 
- ✗ 2. 
- ✗ 3. 
- ✗ 4. 

Question ID : 65497831281
Status : Answered
Chosen Option : 1

Q.12 Select the number from among the given options that can replace the question mark (?) in the following series.

241, 258, 275, 292, ?

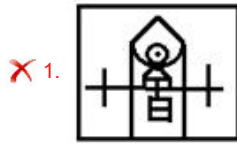
- Ans ✗ 1. 299
- ✗ 2. 325
- ✗ 3. 313
- ✓ 4. 309

Question ID : 65497831262
Status : Answered
Chosen Option : 4

Q.13 Select the option in which the given figure is embedded (rotation is NOT allowed).



Ans



Question ID : 65497831276
 Status : Answered
 Chosen Option : 2

Q.14 Read the given statements and conclusions carefully. Assuming that the information given in the statements is true, even if it appears to be at variance with commonly known facts, decide which of the given conclusions logically follow(s) from the statements.

Statements:

All belts are shoes.
 All shoes are caps.
 Some hats are caps.

Conclusions:

I. Some caps are belts.
 II. Some hats are shoes.
 III. All shoes are belts.

Ans ✓ 1. Only conclusion I follows

✗ 2. Only conclusions I and II follow

✗ 3. Only conclusions I and III follow

✗ 4. Only conclusion II follows

Question ID : 65497831270
 Status : Answered
 Chosen Option : 1

Q.15 In a certain code language, CLOUD is written as DMNTE, and MANGO is written as NZOHN. How will PASTEUR be written in that language?

- Ans
- 1. UTBQSVF
 - 2. QZTUDTS
 - 3. QZRSVDS
 - 4. QBTUFVS

Question ID : 65497831283
Status : Answered
Chosen Option : 2

Q.16 If 'A % B' means 'A is the daughter of B', 'A & B' means 'A is the wife of B', and 'A # B' means 'A is the son of B', then how is G related to Z in the expression V % G & H # L & Z?

- Ans
- 1. Sister-in-law
 - 2. Daughter-in-law
 - 3. Daughter
 - 4. Maternal aunt

Question ID : 65497831284
Status : Answered
Chosen Option : 2

Q.17 Six professional interior designers, Pavan, Nayan, Ratan, Shiva, Tanuja and Urmila, are sitting around a hexagonal table, each at one corner, and are facing the centre of the hexagonal table. Pavan is second to the left of Urmila. Nayan is the neighbour of Ratan and Shiva. Tanuja is second to the left of Shiva. Who among the following are the neighbours of Pavan?

- Ans
- 1. Urmila and Ratan
 - 2. Tanuja and Ratan
 - 3. Urmila and Tanuja
 - 4. Shiva and Nayan

Question ID : 65497831269
Status : Answered
Chosen Option : 2

Q.18 'Mouse' is related to 'Computer' in the same way as 'Flash' is related to '_____'.
Ans

- 1. Camera
- 2. Sparkle
- 3. Card
- 4. Printer

Question ID : 65497831279
Status : Answered
Chosen Option : 1

Q.19 Select the option that is related to the third term in the same way as the second term is related to the first term.

PLUM : KOFN :: MIST : ?

- Ans
- 1. NRFH
 - 2. ROGH
 - 3. NRHG
 - 4. ORGH

Question ID : 65497831282
Status : Answered
Chosen Option : 3

Q.20 Select the combination of letters that when sequentially placed in the blanks of the given series will complete the series.

L P _ S T _ _ Q _ T L _ _ S T

- Ans
- 1. QLPSPQ
 - 2. PQSLSP
 - 3. PQLQLP
 - 4. LQPQSP

Question ID : 65497831261
Status : Answered
Chosen Option : 1

Q.21 The sequence of folding a piece of paper and the manner in which the folded paper has been cut is shown in the following figures. How would this paper look when unfolded?



- Ans
- 1.
 - 2.
 - 3.
 - 4.

Question ID : 65497831277
Status : Answered
Chosen Option : 3

Q.22 Manoj starts from his home and reaches the temple in 7 hours. He travels 1/4 th of the total distance at a speed of 10 km/h and the remaining distance at 12 km/h. Find the distance between his home and the temple.

- Ans
- 1. 80 km
 - 2. 90 km
 - 3. 70 km
 - 4. 72 km

Question ID : 65497831274
Status : Answered
Chosen Option : 1

Q.23 Select the correct option that indicates the arrangement of the given words in the order in which they appear in an English dictionary.

1. Mischievous
2. Miscreant
3. Millennium
4. Misconception
5. Millionaire

Ans 1. 1, 2, 3, 4, 5
 2. 3, 5, 1, 2, 4
 3. 3, 5, 2, 4, 1
 4. 3, 5, 1, 4, 2

Question ID : 65497831260

Status : Answered

Chosen Option : 4

Q.24 Five persons are standing in a row facing north. G is standing at the second place to the right of J. H is not next to K. If M is standing second from the extreme right, then who is standing at the extreme left end of the row?

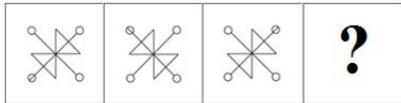
Ans 1. K
 2. M
 3. G
 4. J

Question ID : 65497831280

Status : Answered

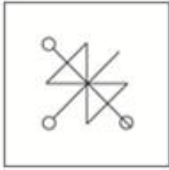
Chosen Option : 4

Q.25 Select the figure from among the given options that can replace the question mark (?) in the following series.

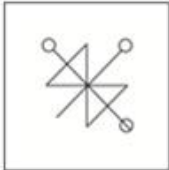


Ans

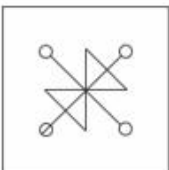
✗ 1.



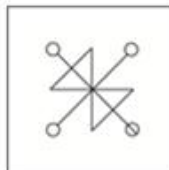
✗ 2.



✗ 3.



✓ 4.



Question ID : 65497831263
Status : Answered
Chosen Option : 4

Section : Part B General Knowledge and General Awareness

Q.1 Increase in MSP has forced farmers to divert land from production of coarse grains to production of _____.

Ans ✗ 1. barley and jowar

✓ 2. wheat and rice

✗ 3. maize

✗ 4. small millets

Question ID : 65497831297
Status : Answered
Chosen Option : 2

Q.2 In July 2021, the Indian Oil Corporation Limited announced that it would set up India's first 'Green Hydrogen' plant at its _____ refinery.

Ans ✓ 1. Mathura

✗ 2. Paradip

✗ 3. Panipat

✗ 4. Haldia

Question ID : 65497831309
Status : Answered
Chosen Option : 1

Q.3 The excessive quantities of chemicals which get washed from the fields act as nutrients for _____ to flourish.

- Ans 1. algae
 2. fungi
 3. bacteria
 4. soil

Question ID : 65497831298
Status : Answered
Chosen Option : 3

Q.4 What is least required for production of goods and services?

- Ans 1. Land and other natural resources
 2. People to do the work
 3. Tools, raw material and money
 4. Institutes to educate people

Question ID : 65497831295
Status : Answered
Chosen Option : 4

Q.5 The 'Dronacharya Award' is associated with _____.

- Ans 1. famous artisans
 2. outstanding coaches in sports and games
 3. exceptional warriors
 4. eminent doctors and surgeons

Question ID : 65497831301
Status : Answered
Chosen Option : 2

Q.6 As a part of Nationally Determined Contributions as per the Paris Accord on Climate Change, India has made a pledge that by 2030, _____ of our installed power generation capacity shall be from non-fossil fuel sources.

- Ans 1. 40%
 2. 20%
 3. 30%
 4. 10%

Question ID : 65497831299
Status : Not Answered
Chosen Option : --

Q.7 1932 म.हा. र त पूना समझौता, महा गांधी और _____ के बीच हुआ एक समझौता था, जिसके बाद महा गांधी ने अपना अनशन समाप्त किया।

- Ans 1. मुहम्मद अली जिन्ना
 2. जवाहरलाल नेहरू
 3. लॉर्ड इरविन
 4. बीआर अम्बेडकर

Question ID : 65497831306
Status : Answered
Chosen Option : 3

Q.8 Who among the following won the Global Gandhi Peace Award in October 2020?

- Ans
- 1. Anita Devi
 - 2. Santosh Sharma
 - 3. Kanchan Sharma
 - 4. Poonam Khangarot

Question ID : 65497831291
Status : Not Answered
Chosen Option : --

Q.9 Article 72 of the Constitution of India deals with _____.

- Ans
- 1. conduct of business of the Government of India
 - 2. qualification for membership of the Parliament
 - 3. the constitution of the Parliament
 - 4. the power of the President to grant pardons

Question ID : 65497831308
Status : Answered
Chosen Option : 4

Q.10 Many scholars argue that the Mesopotamian people of Tigris- Euphrates valley called Indus Valley Civilization _____.

- Ans
- 1. Magan
 - 2. Meluhha
 - 3. Sumerian
 - 4. Babylon

Question ID : 65497831287
Status : Not Answered
Chosen Option : --

Q.11 In which of the following places is the headquarters of Eastern Command of Indian Army located?

- Ans
- 1. Kolkata
 - 2. Pune
 - 3. Guwahati
 - 4. Lucknow

Question ID : 65497831290
Status : Answered
Chosen Option : 3

Q.12 Which of the following organs is related with the anatomy of the human eye?

- Ans
- 1. Stigma
 - 2. Patella
 - 3. Iris
 - 4. Spleen

Question ID : 65497831286
Status : Answered
Chosen Option : 3

Q.13 The first amendment to the Constitution of India was made in the year _____.

- Ans
- 1. 1954
 - 2. 1950
 - 3. 1959
 - 4. 1951

Question ID : 65497831302
Status : Answered
Chosen Option : 4

Q.14 मौलद, निम्नलिख त में से किसो हार का दूसरा नाम है?

- Ans
- 1. मुहर्रम
 - 2. मिलाद-उन-नबी
 - 3. ईद-उल-फ़ितर
 - 4. ईद-उल-जुहा

Question ID : 65497831289
Status : Not Answered
Chosen Option : --

Q.15 मुगल सा टों के शासन काल में, कथक मूल रूप से निम्न के दरबारों में दो 'घरानों' में विकसित हुआ:

- Ans
- 1. ग्वालियर और आगरा
 - 2. किराना और पटियाला
 - 3. जयपुर और लखनऊ
 - 4. इंदौर और मेवाड़

Question ID : 65497831296
Status : Not Answered
Chosen Option : --

Q.16 In November 2020, Prime Minister Narendra Modi unveiled a statue of _____ via video conferencing at the Jawaharlal Nehru University campus in Delhi.

- Ans
- 1. Swami Vivekananda
 - 2. Ramakrishna Paramahansa
 - 3. Bhagat Singh
 - 4. Mangal Pandey

Question ID : 65497831303
Status : Answered
Chosen Option : 1

Q.17 Which of the following statements about the Mahalwari system of revenue settlement is INCORRECT?

- Ans
- 1. The right to collect the revenue and pay it to the East India Company was given to the Zamindars.
 - 2. The system was devised by Holt Mackenzie.
 - 3. Land revenue under the system was revised from time to time.
 - 4. The system was introduced in 1822.

Question ID : 65497831307
Status : Answered
Chosen Option : 1

Q.18 In July 2020, which of the following ministries launched the 'Manodarpan' initiative under the Atmanirbhar Bharat Abhiyan?

- Ans
- 1. Ministry of Defence
 - 2. Ministry of Health and Family Welfare
 - 3. Ministry of Education
 - 4. Ministry of Tribal Affairs

Question ID : 65497831288
Status : Not Answered
Chosen Option : --

Q.19 India won _____ bronze medals at the (2020) Olympic Games held in Tokyo in 2021.

- Ans
- 1. 5
 - 2. 4
 - 3. 7
 - 4. 3

Question ID : 65497831305
Status : Answered
Chosen Option : 2

Q.20 Bengal broke away from Mughal control under _____, who was deputy to the governor of the province.

- Ans
- 1. Shaista Khan
 - 2. Qasim Khan
 - 3. Farrukh Siyar
 - 4. Murshid Quli Khan

Question ID : 65497831300
Status : Not Answered
Chosen Option : --

Q.21 पूं पेम और कच रेम नामक शहर किस भारतीय रा० में थ त हैं?

- Ans
- 1. कर्नाटक
 - 2. सिक्किम
 - 3. गोवा
 - 4. मणिपुर

Question ID : 65497831304
Status : Not Answered
Chosen Option : --

Q.22 Who among the following won Chess.com's 2020 Junior Speed Online Chess Championship?

- Ans
- 1. Nihal Sarin
 - 2. Anton Smirnov
 - 3. Alexey Sarana
 - 4. Andrew Tang

Question ID : 65497831285
Status : Not Answered
Chosen Option : --

Q.23 GVA is the measure of the value of goods and services produced in an area, industry or sector of an economy. What is the full form of GVA?

- Ans
- 1. Growth Value Added
 - 2. Growth Value Asset
 - 3. Gross Value Added
 - 4. Gross Value Asset

Question ID : 65497831294
Status : Answered
Chosen Option : 4

Q.24 भारत का सबसे लंबा नदी पुल, ढोला-सादिया निम्नलिखित में से किस नदी पर बनाया जा रहा है?

- Ans
- 1. गंगा
 - 2. यमुना
 - 3. गोदावरी
 - 4. ब्रह्मपुत्र

Question ID : 65497831293
Status : Not Answered
Chosen Option : --

Q.25 With which sports do you associate the India international, KM Beenamol?

- Ans
- 1. Athletics
 - 2. Wrestling
 - 3. Table Tennis
 - 4. Badminton

Question ID : 65497831292
Status : Not Answered
Chosen Option : --

Section : Part C Elementary Mathematics

Q.1 A lent ₹26,000 to B for 2 years and ₹15,000 to C for 4 years. He received altogether ₹8,960 as simple interest from both. What is the interest rate?

- Ans
- 1. 7%
 - 2. 7.5%
 - 3. 8%
 - 4. 8.5%

Question ID : 65497831311
Status : Answered
Chosen Option : 3

Q.2 An article is marked 60% above its cost price. If a profit of 20% is made by selling the article, then what is the discount percentage offered on its marked price?

- Ans**
- 1. 25%
 - 2. 20%
 - 3. 40%
 - 4. $12\frac{1}{2}\%$

Question ID : 65497831327
Status : Answered
Chosen Option : 1

Q.3 Twenty-five men take 16 days to complete a certain work working 6 hours a day. How many men will be required to complete the work in 5 days working 8 hours a day?

- Ans**
- 1. 56
 - 2. 60
 - 3. 54
 - 4. 68

Question ID : 65497831334
Status : Answered
Chosen Option : 2

Q.4 36 litres of a mixture contains milk and water in the ratio 3 : 1. If 5 litres of this mixture is replaced by 5 litres of milk, then find the ratio of milk to water in the new mixture.

- Ans**
- 1. 3 : 7
 - 2. 3 : 5
 - 3. 8 : 1
 - 4. 5 : 2

Question ID : 65497831324
Status : Answered
Chosen Option : 3

Q.5 A shopkeeper marks his goods 20% above the cost price. He sells one-fourth of the goods at the marked price and the remaining at 30% discount on the marked price. What is his gain/loss percentage?

- Ans**
- 1. Gain 7%
 - 2. Gain 11%
 - 3. Loss 7%
 - 4. Loss 11%

Question ID : 65497831314
Status : Answered
Chosen Option : 3

Q.6 The marked price of an article is ₹900. If a shopkeeper sold the article at 20% loss after giving 36% discount, then the cost price of the article is:

- Ans
- 1. ₹620
 - 2. ₹740
 - 3. ₹720
 - 4. ₹760

Question ID : 65497831331
Status : Answered
Chosen Option : 3

Q.7 Find the LCM of $\frac{2}{3}$, $\frac{4}{7}$ and $\frac{9}{13}$.

- Ans
- 1. 28
 - 2. 12
 - 3. 36
 - 4. 15

Question ID : 65497831320
Status : Answered
Chosen Option : 3

Q.8 Simplify $\left[3\frac{1}{4} \div \left\{1\frac{1}{4} - \frac{1}{2}\left(2\frac{1}{2} - \frac{1}{4} - \frac{1}{6}\right)\right\}\right] \div \left(\frac{1}{5} \text{ of } 4\frac{1}{3}\right) - 2 \times 3 \div 6 \text{ of } \frac{1}{3}$.

- Ans
- 1. 90
 - 2. 87
 - 3. 84
 - 4. 36

Question ID : 65497831312
Status : Answered
Chosen Option : 1

Q.9 If 30% of $(x - y) = 20\%$ of $(x + y)$, then what per cent of x is y ?

- Ans
- 1. 24%
 - 2. 20%
 - 3. 15%
 - 4. 35%

Question ID : 65497831323
Status : Answered
Chosen Option : 2

Q.10 If the perimeter of a rectangle is 50 cm and its diagonal is 23 cm long, then what is the area of the rectangle?

- Ans**
- 1. 48 cm²
 - 2. 36 cm²
 - 3. 50 cm²
 - 4. 40 cm²

Question ID : 65497831319
Status : Answered
Chosen Option : 1

Q.11 What is the volume of a right circular cylinder whose area of the base is 40 cm² and the height is 7 cm?

- Ans**
- 1. 140 cm³
 - 2. 240 cm³
 - 3. 280 cm³
 - 4. 160 cm³

Question ID : 65497831316
Status : Answered
Chosen Option : 3

Q.12 The simple interest on a certain sum of money for 2 years at 15% per annum is half of the compound interest on ₹5,000 for 2 years at 10% per annum. What is the sum placed on simple interest?

- Ans**
- 1. ₹2,250
 - 2. ₹2,000
 - 3. ₹1,750
 - 4. ₹1,050

Question ID : 65497831318
Status : Answered
Chosen Option : 3

Q.13 A boat takes 2 hours to cover a certain distance downstream, but it takes $3\frac{1}{4}$ hours to cover the same distance upstream. If the speed of the stream is 5 km/h, then what is the speed (in km/h) of the boat in still water?

- Ans**
- 1. 21
 - 2. 24
 - 3. 18
 - 4. 20

Question ID : 65497831330
Status : Answered
Chosen Option : 1

Q.14 In a class of 80 students, 40% are girls and the rest are boys. The average weight of the boys is 55.5 kg. If the average weight of all the students in the class is 54 kg, then the average weight (in kg) of the girls is:

- Ans**
- 1. 51.75
 - 2. 52
 - 3. 50.25
 - 4. 51

Question ID : 65497831326
Status : Answered
Chosen Option : 1

Q.15 The income of A is 40% more than the income of B, and the income of C is 30% less than the total incomes of A and B. The income of A is what per cent less than the income of C?

- Ans**
- 1. 25%
 - 2. 16%
 - 3. $16\frac{2}{3}\%$
 - 4. 20%

Question ID : 65497831328
Status : Answered
Chosen Option : 3

Q.16 A vegetable vendor buys vegetables from a wholesale market for ₹4,500. If the overhead expenses are 4% of the cost price, then at what price should he sell the vegetables to earn 15%?

- Ans**
- 1. ₹4,995
 - 2. ₹5,175
 - 3. ₹5,382
 - 4. ₹5,355

Question ID : 65497831310
Status : Answered
Chosen Option : 3

Q.17 A train X travelling at a speed of 58 km/h takes 16 seconds to completely cross another train Y travelling at a speed of 50 km/h in the opposite direction. The length of train Y is three times the length of train X. Train Y passes a bridge in 54 seconds. The length (in m) of the bridge is:

- Ans**
- 1. 360
 - 2. 390
 - 3. 750
 - 4. 480

Question ID : 65497831313
Status : Answered
Chosen Option : 2

Q.18 Simplify the following expression.

$$5 \div \frac{5}{6} \times 6 - 1 \div \frac{1}{2} \times 2$$

- Ans
- 1. 30
 - 2. 36
 - 3. 0
 - 4. 32

Question ID : 65497831332
Status : Answered
Chosen Option : 4

Q.19 A retailer buys a tricycle for ₹1,125. His overhead expenses are ₹75. If he sells the tricycle for ₹1,380, then what is his profit percentage?

- Ans
- 1. 18%
 - 2. 12.5%
 - 3. 15%
 - 4. 12%

Question ID : 65497831333
Status : Answered
Chosen Option : 3

Q.20 At what rate per cent per annum will a sum of money double in 12 years?

- Ans
- 1. 7%
 - 2. $8\frac{1}{3}\%$
 - 3. $8\frac{2}{3}\%$
 - 4. $7\frac{1}{3}\%$

Question ID : 65497831325
Status : Answered
Chosen Option : 2

Q.21 A can complete a certain task in 18 days, B in 27 days and C in 36 days. A, B and C began to work together, but A left 4 days before and B left 6 days before the completion of the task. For how many days did B work?

- Ans
- 1. 12
 - 2. 6
 - 3. 8
 - 4. 10

Question ID : 65497831329
Status : Answered
Chosen Option : 2

Q.22 The LCM of two numbers is 12 times their HCF. If one of the numbers is 15 and the sum of the HCF and LCM is 65, then find the other number.

- Ans**
- 1. 25
 - 2. 20
 - 3. 30
 - 4. 42

Question ID : 65497831321
 Status : Answered
 Chosen Option : 2

Q.23 If 45% of a number is equal to two-third of another number, what is the ratio of the first number to the second number?

- Ans**
- 1. 9 : 10
 - 2. 40 : 27
 - 3. 40 : 9
 - 4. 30 : 27

Question ID : 65497831315
 Status : Answered
 Chosen Option : 2

Q.24 In a class of 45 students, the average age of the class is 18 years. The average age of 35 students is 15. What is the average age of the remaining 10 students?

- Ans**
- 1. 28.5
 - 2. 25.2
 - 3. 21.70
 - 4. 23.25

Question ID : 65497831322
 Status : Answered
 Chosen Option : 1

Q.25 If $(x + y) : (x - y) = 23 : 3$, what is the value of $\frac{x^2 - y^2}{x^2 + y^2}$?

- Ans**
- 1. $\frac{269}{69}$
 - 2. $\frac{69}{269}$
 - 3. $\frac{165}{269}$
 - 4. $\frac{269}{165}$

Question ID : 65497831317
 Status : Answered
 Chosen Option : 2

Section : Part D English

Q.1 Select the INCORRECTLY spelt word.

- Ans 1. Misanthorpe
 2. Alumni
 3. Mascot
 4. Socialite

Question ID : 65497831339
Status : Answered
Chosen Option : 2

Q.2 The following sentence has been split into four segments. Identify the segment that contains a grammatical error.

Iron is / most useful / than any / other metal.

- Ans 1. most useful
 2. Iron is
 3. than any
 4. other metal

Question ID : 65497831352
Status : Answered
Chosen Option : 1

Q.3 Select the most appropriate SYNONYM of the given word.

Seize

- Ans 1. Catch
 2. Offer
 3. Shut
 4. Lose

Question ID : 65497831353
Status : Answered
Chosen Option : 1

Q.4 Select the option that can be used as a one-word substitute for the given group of words.

Song which is sung in a church by a group of singers

- Ans 1. Lullaby
 2. Anthem
 3. Carol
 4. Dirge

Question ID : 65497831338
Status : Answered
Chosen Option : 3

Q.5 Select the option that can be used as a one-word substitute for the given group of words.

Twice a month

- Ans 1. Bimonthly
 2. Monthly
 3. Biennial
 4. Half-yearly

Question ID : 65497831344
Status : Answered
Chosen Option : 1

Q.6 Select the most appropriate ANTONYM of the given word.

Vaguely

- Ans 1. Distinctly
 2. Marginally
 3. Distractedly
 4. Uncertainly

Question ID : 65497831348
Status : Answered
Chosen Option : 1

Q.7 Select the INCORRECTLY spelt word.

- Ans 1. Transleate
 2. Transcend
 3. Transmit
 4. Transpire

Question ID : 65497831346
Status : Answered
Chosen Option : 1

Q.8 Select the most appropriate option to fill in the blank.

Because of the loss of _____ and lack of food, animals are forced to enter villages.

- Ans 1. ecosystem
 2. culture
 3. habitats
 4. grasslands

Question ID : 65497831335
Status : Answered
Chosen Option : 1

Q.9 Select the most appropriate synonym of the given word.

Worth

- Ans
- 1. Vigour
 - 2. Roughness
 - 3. Value
 - 4. Power

Question ID : 65497831343
Status : Answered
Chosen Option : 3

Q.10 Select the option that can be used as a one-word substitute for the given group of words.

A period of ten years

- Ans
- 1. Fortnight
 - 2. Decade
 - 3. Millennium
 - 4. Centenary

Question ID : 65497831354
Status : Answered
Chosen Option : 2

Q.11 Fill in the blank with the most appropriate word.

Pallavi gave a _____ smile when she saw her daughter on the stage.

- Ans
- 1. broad
 - 2. strong
 - 3. deep
 - 4. thick

Question ID : 65497831349
Status : Answered
Chosen Option : 1

Q.12 Select the most appropriate meaning of the given idiom.

Pain in the neck

- Ans
- 1. Someone or something that is annoying or a nuisance
 - 2. Some who is forever ill
 - 3. Someone who is always angry
 - 4. Someone who is always depressed

Question ID : 65497831345
Status : Answered
Chosen Option : 1

Q.13 The following sentence has been split into four segments. Identify the segment that contains a grammatical error.

Research in the medical field / claims that German measles / usually cause milder / infection than Martian measles.

- Ans
- 1. claims that German measles
 - 2. Research in the medical field
 - 3. infection than Martian measles
 - 4. usually cause milder

Question ID : 65497831336
Status : Answered
Chosen Option : 4

Q.14 Select the option that will improve the underlined part of the given sentence. In case no improvement is needed, select 'No improvement required'.

Hopefully, I will have got my driving license by the end of this year.

- Ans
- 1. had got
 - 2. No improvement required
 - 3. will have get
 - 4. would got

Question ID : 65497831351
Status : Answered
Chosen Option : 2

Q.15 Select the option that will improve the underlined part of the given sentence. In case no improvement is needed, select 'No improvement required'.

Children played cheerfully in the park all day.

- Ans
- 1. cheerfully on
 - 2. cheerful at
 - 3. No improvement required
 - 4. cheerfully between

Question ID : 65497831350
Status : Answered
Chosen Option : 3

Q.16 Select the most appropriate ANTONYM of the given word.

Connect

- Ans
- 1. Affirm
 - 2. Link
 - 3. Demur
 - 4. Detach

Question ID : 65497831337
Status : Answered
Chosen Option : 4

Q.17 Select the most appropriate option to fill in the blank.

The Elizabethan society was extremely _____ and therefore, believed in the existence of ghosts and witches.

- Ans 1. superstitious
 2. enthralling
 3. lovable
 4. industrious

Question ID : 65497831347
Status : Answered
Chosen Option : 1

Q.18 Select the most appropriate option that can substitute the underlined segment in the given sentence. If there is no need to substitute it, select 'No substitution required'.

Does the manufacturer have a website where details of the product are available?

- Ans 1. for the product be available
 2. on the product was available
 3. No substitution required
 4. of the product is available

Question ID : 65497831342
Status : Answered
Chosen Option : 3

Q.19 The following sentence has been split into four segments. Identify the segment that contains a grammatical error.

People vary greatly / on the way / they appear and / in their personality traits.

- Ans 1. in their personality traits
 2. they appear and
 3. People vary greatly
 4. on the way

Question ID : 65497831341
Status : Answered
Chosen Option : 4

Q.20 Select the most appropriate meaning of the given idiom.

Loaded words

- Ans 1. Words that have been used by well-known writers
 2. Words that common people cannot understand
 3. Words that carry more significance than their literal meaning
 4. Words or language that is impolite and rude

Question ID : 65497831340
Status : Answered
Chosen Option : 3

Comprehension:

In the following passage, some words have been deleted. Read the passage carefully and select the most appropriate option to fill in each blank.

The Great Indian, or Thar, Desert forms an important southern extension of the Indo-Gangetic Plain. (1)_____ is mostly in north-western India but (2)_____ extends into eastern Pakistan and is (3)_____ an area of gently undulating terrain . Further, (4)_____ it are several areas dominated (5)_____ shifting sand dunes and numerous isolated hills.

SubQuestion No : 21

Q.21 Select the most appropriate option to fill in blank no. 1.

- Ans
- 1. Where
 - 2. That
 - 3. There
 - 4. It

Question ID : 65497831356

Status : Answered

Chosen Option : 4

Comprehension:

In the following passage, some words have been deleted. Read the passage carefully and select the most appropriate option to fill in each blank.

The Great Indian, or Thar, Desert forms an important southern extension of the Indo-Gangetic Plain. (1)_____ is mostly in north-western India but (2)_____ extends into eastern Pakistan and is (3)_____ an area of gently undulating terrain . Further, (4)_____ it are several areas dominated (5)_____ shifting sand dunes and numerous isolated hills.

SubQuestion No : 22

Q.22 Select the most appropriate option to fill in blank no. 2.

- Ans
- 1. sometimes
 - 2. plus
 - 3. also
 - 4. moreover

Question ID : 65497831357

Status : Answered

Chosen Option : 4

Comprehension:

In the following passage, some words have been deleted. Read the passage carefully and select the most appropriate option to fill in each blank.

The Great Indian, or Thar, Desert forms an important southern extension of the Indo-Gangetic Plain. (1)_____ is mostly in north-western India but (2)_____ extends into eastern Pakistan and is (3)_____ an area of gently undulating terrain . Further, (4)_____ it are several areas dominated (5)_____ shifting sand dunes and numerous isolated hills.

SubQuestion No : 23

Q.23 Select the most appropriate option to fill in blank no. 3.

- Ans
- 1. mostly
 - 2. nearly
 - 3. closely
 - 4. quite

Question ID : 65497831358

Status : Answered

Chosen Option : 4

Comprehension:

In the following passage, some words have been deleted. Read the passage carefully and select the most appropriate option to fill in each blank.

The Great Indian, or Thar, Desert forms an important southern extension of the Indo-Gangetic Plain. (1)_____ is mostly in north-western India but (2)_____ extends into eastern Pakistan and is (3)_____ an area of gently undulating terrain . Further, (4)_____ it are several areas dominated (5)_____ shifting sand dunes and numerous isolated hills.

SubQuestion No : 24

Q.24 Select the most appropriate option to fill in blank no. 4.

- Ans 1. above
 2. within
 3. over
 4. interior

Question ID : 65497831359
Status : Answered
Chosen Option : 2

Comprehension:

In the following passage, some words have been deleted. Read the passage carefully and select the most appropriate option to fill in each blank.

The Great Indian, or Thar, Desert forms an important southern extension of the Indo-Gangetic Plain. (1)_____ is mostly in north-western India but (2)_____ extends into eastern Pakistan and is (3)_____ an area of gently undulating terrain . Further, (4)_____ it are several areas dominated (5)_____ shifting sand dunes and numerous isolated hills.

SubQuestion No : 25

Q.25 Select the most appropriate option to fill in blank no. 5.

- Ans 1. through
 2. via
 3. by
 4. beside

Question ID : 65497831360
Status : Answered
Chosen Option : 3

Section : Part D Hindi

Q.1 नीचे दिए वा म.र. र. ध्यान भरने के लिए सबसे उपयुक्त श. का चयन करें।

चाट पर म. याँ _____ रही थीं।

- Ans 1. सनसना
 2. भिनभिना
 3. फड़फड़ा
 4. चहचहा

Question ID : 65497831372
Status : Not Answered
Chosen Option : --

Q.2 आकाश में बादल छाये हुए हैं।

कौन-सा शब्द रेखांकित शब्द का पर्याय नहीं है?

- Ans
- 1. पयोधर
 - 2. जलधर
 - 3. वाग्देवी
 - 4. मेघ

Question ID : 65497831376
Status : Not Answered
Chosen Option : --

Q.3 दिए गए वाक्य का वह भाग त करे जिसमें कोई त्रुटि है। यदि कोई त्रुटि नहीं है, तो 'कोई त्रुटि नहीं है' चुनें।

एक नागरिक को (1)/ अपना कर्तव्य (2)/ निबाहना चाहिए।(3)/ कोई त्रुटि नहीं है(4)

- Ans
- 1. 2
 - 2. 3
 - 3. 1
 - 4. 4

Question ID : 65497831361
Status : Not Answered
Chosen Option : --

Q.4 दिए गये शब्द का निम्न शब्दों में से विलोम नहीं है-

सुख वात्था

- Ans
- 1. अव्यवस्था
 - 2. सुचारू
 - 3. गड़बड़ी
 - 4. कुव्यवस्था

Question ID : 65497831364
Status : Not Answered
Chosen Option : --

Q.5 'जो इंद्रियों की पहुँच से बाहर हो' वाक्य के लिए एक शब्द होगा-

- Ans
- 1. इंद्रियजित
 - 2. इंद्रियातीत
 - 3. ऐंद्रिक
 - 4. इंद्रियनिग्रह

Question ID : 65497831377
Status : Not Answered
Chosen Option : --

Q.6 कम बोलने वाले शब्दों को कौन कहते हैं?

- Ans
- 1. अल्पभाषी
 - 2. वाचाल
 - 3. गूंगा
 - 4. गायक

Question ID : 65497831375
Status : Not Answered
Chosen Option : --

Q.7 सही वर्तनी वाले शब्द का चयन करें।

- Ans
- 1. पेटुक
 - 2. पैतुक
 - 3. पैत्रिक
 - 4. पितुक

Question ID : 65497831370
Status : Not Answered
Chosen Option : --

Q.8 दिये गये वाक्य के लिए एक शब्द दीजिए।

परम्परा से चली आ रही बात या कथा

- Ans
- 1. अविचारित
 - 2. अनुभूत
 - 3. अनुश्रुति
 - 4. पारम्परिक

Question ID : 65497831367
Status : Not Answered
Chosen Option : --

Q.9 दिये गये वाक्य के किस भाग में त्रुटि है?

यह मानसिक दासता सदा काल से चली आ रही है।

- Ans
- 1. चली आ
 - 2. यह मानसिक दासता
 - 3. सदा काल से
 - 4. रही है।

Question ID : 65497831378
Status : Not Answered
Chosen Option : --

Q.10 सही वर्तनी वाले शब्द का चयन करें।

- Ans
- 1. संयास
 - 2. संन्यास
 - 3. सनयास
 - 4. सन्यास

Question ID : 65497831371
Status : Not Answered
Chosen Option : --

Q.11 माँ रसोईघर में बच्चों के लिए खाने कु पका रहि है।

अशुद्ध अंश को पहचानिए।

- Ans
- 1. माँ
 - 2. रसोई घर मे
 - 3. खाने कु पका रहि है।
 - 4. बच्चों के लिए

Question ID : 65497831374
Status : Not Answered
Chosen Option : --

Q.12 दिये गये वाक्यों में रेखांकित अंश को प्रतिस्थापित करने के लिए सबसे उपयुक्त विकल्प का चयन करें।

मैं और मेरे मित्रों को हाकी खेलने का शौक है।

- Ans
- 1. मैंने
 - 2. मैंने को
 - 3. मेरे को
 - 4. मुझे

Question ID : 65497831373
Status : Not Answered
Chosen Option : --

Q.13 'चंचल' का विलोम शब्द होगा-

- Ans
- 1. स्तब्ध
 - 2. अचेत
 - 3. स्थिर
 - 4. अस्थिर

Question ID : 65497831379
Status : Not Answered
Chosen Option : --

Q.14 दिए गए वाक्यों में रेखांकित खंड को प्रतिस्थापित करने के लिए सबसे उपयुक्त विकल्प का चयन करें।
यदि इसे प्रतिस्थापित करने की आवश्यकता नहीं है, तो विकल्प 'किसी बदलाव की आवश्यकता नहीं है' का चयन करें।

आजकल राजनीति बदल गया है।

- Ans
- 1. किसी बदलाव की आवश्यकता नहीं है।
 - 2. बदल गई है
 - 3. बदल गए हैं
 - 4. बदल गई हैं

Question ID : 65497831363
Status : Not Answered
Chosen Option : --

Q.15 रक्त प्लाज्मा को भरने के लिए सबसे उपयुक्त शब्द का चयन करें।

दहेजप्रथा समाज के लिए _____ है।

- Ans
- 1. अपराध
 - 2. सम्मान
 - 3. अपमान
 - 4. अभिशाप

Question ID : 65497831368
Status : Not Answered
Chosen Option : --

Q.16 'अंधेरी रातों वाला पखवारा' वाक्य के लिए उपयुक्त शब्द होगा-

- Ans
- 1. अमावस्या
 - 2. कृष्णपक्ष
 - 3. शुक्लपक्ष
 - 4. मलमास

Question ID : 65497831380
Status : Not Answered
Chosen Option : --

Q.17 निम्न चार विकल्पों में से, उस विकल्प का चयन करें जो दिए गये मुहावरे का अर्थ व्यक्त करता है।

'मोहर लगा देना'

- Ans
- 1. दाग लगाना
 - 2. लड़ाई जीत लेना
 - 3. पुष्टि करना
 - 4. निश्चित होना

Question ID : 65497831365
Status : Not Answered
Chosen Option : --

Q.18 दिए गए शब्दों के समानार्थक शब्दों का चयन कीजिए।

सूर्य

- Ans
- 1. मयंक
 - 2. हिमांशु
 - 3. आदित्य
 - 4. शशधर

Question ID : 65497831362
Status : Not Answered
Chosen Option : --

Q.19 'आँखें दिखाना' मुहावरे का अर्थ बताइए।

- Ans
- 1. रूखापन
 - 2. बहुत गौर से देखना
 - 3. शर्म करना
 - 4. आँखों में रोग होना

Question ID : 65497831366
Status : Not Answered
Chosen Option : --

Q.20 नीचे दिए गए वाक्यों में रिक्त स्थान भरने के लिए सबसे उपयुक्त शब्दों का चयन करें।

शर्मिला का ऊंची एड़ी का सैडिल _____ किए जा रहा था।

- Ans
- 1. गटर-गटर
 - 2. खटर-पटर
 - 3. खिटिर-खिटिर
 - 4. पटर-पटर

Question ID : 65497831369
Status : Not Answered
Chosen Option : --

Comprehension:

दिमाग मनुष्य के लिए सुख के साधन बटोर सकता है, मगर संतोष और (1) _____ मनुष्य के हृदय से उत्पन्न होती है। लेकिन मनुष्यता के लिए यह घोर (2) _____ की बात है कि आज आदमी के पास दिल नाम की चीज नहीं रह गयी। उसकी सारी (3) _____ उसका दिमाग हो गया है। दिमाग से तलवार तो वह बहुत (4) _____ निकाल रहा है, लेकिन दिल की गैरहाजिरी में वह यह (5) _____ ही नहीं पा रहा है कि यह तलवार कहाँ गिरायी जानी चाहिए। परिणामतः वह इस तलवार से अपना ही गला काट रहा है।

निम्न प्रश्नों के उत्तर उपरोक्त गद्यांश के आधार पर दीजिए।

SubQuestion No : 21

Q.21 गाँश के रक्तस्थान (1) के लिए सर्वाधिक उपयुक्त शब्द होगा-

- Ans
- 1. शांति
 - 2. मुक्ति
 - 3. प्रगति
 - 4. शक्ति

Question ID : 65497831382

Status : Not Answered

Chosen Option : --

Comprehension:

दिमाग मनुष्य के लिए सुख के साधन बटोर सकता है, मगर संतोष और (1) _____ मनुष्य के हृदय से उत्पन्न होती है। लेकिन मनुष्यता के लिए यह घोर (2) _____ की बात है कि आज आदमी के पास दिल नाम की चीज नहीं रह गयी। उसकी सारी (3) _____ उसका दिमाग हो गया है। दिमाग से तलवार तो वह बहुत (4) _____ निकाल रहा है, लेकिन दिल की गैरहाजिरी में वह यह (5) _____ ही नहीं पा रहा है कि यह तलवार कहाँ गिरायी जानी चाहिए। परिणामतः वह इस तलवार से अपना ही गला काट रहा है।

निम्न प्रश्नों के उत्तर उपरोक्त गद्यांश के आधार पर दीजिए।

SubQuestion No : 22

Q.22 गाँश के रक्तस्थान (2) के लिए सर्वाधिक उपयुक्त शब्द होगा-

- Ans
- 1. अपमान
 - 2. संकट
 - 3. भय
 - 4. हर्ष

Question ID : 65497831383

Status : Not Answered

Chosen Option : --

Comprehension:

दिमाग मनुष्य के लिए सुख के साधन बटोर सकता है, मगर संतोष और (1) _____ मनुष्य के हृदय से उत्पन्न होती है। लेकिन मनुष्यता के लिए यह घोर (2) _____ की बात है कि आज आदमी के पास दिल नाम की चीज नहीं रह गयी। उसकी सारी (3) _____ उसका दिमाग हो गया है। दिमाग से तलवार तो वह बहुत (4) _____ निकाल रहा है, लेकिन दिल की गैरहाजिरी में वह यह (5) _____ ही नहीं पा रहा है कि यह तलवार कहाँ गिरायी जानी चाहिए। परिणामतः वह इस तलवार से अपना ही गला काट रहा है।

निम्न प्रश्नों के उत्तर उपरोक्त गद्यांश के आधार पर दीजिए।

SubQuestion No : 23

Q.23 गाँश के रक्तस्थान (3) के लिए सर्वाधिक उपयुक्त शब्द होगा-

- Ans
- 1. सफलता
 - 2. पूंजी
 - 3. इज्जत
 - 4. मेहनत

Question ID : 65497831384

Status : Not Answered

Chosen Option : --

Comprehension:

दिमाग मनुष्य के लिए सुख के साधन बटोर सकता है, मगर संतोष और (1) _____ मनुष्य के हृदय से उत्पन्न होती है। लेकिन मनुष्यता के लिए यह घोर (2) _____ की बात है कि आज आदमी के पास दिल नाम की चीज नहीं रह गयी। उसकी सारी (3) _____ उसका दिमाग हो गया है। दिमाग से तलवार तो वह बहुत (4) _____ निकाल रहा है, लेकिन दिल की गैरहाजिरी में वह यह (5) _____ ही नहीं पा रहा है कि यह तलवार कहां गिरायी जानी चाहिए। परिणामतः वह इस तलवार से अपना ही गला काट रहा है।

निम्न प्रश्नों के उत्तर उपरोक्त गद्यांश के आधार पर दीजिए।

SubQuestion No : 24

Q.24 गाँव के रक्तस्थान (4) के लिए सर्वाधिक उपयुक्त शब्द होगा-

- Ans
- 1. नुकीली
 - 2. सुंदर
 - 3. चटक
 - 4. तीखी

Question ID : 65497831385

Status : Not Answered

Chosen Option : --

Comprehension:

दिमाग मनुष्य के लिए सुख के साधन बटोर सकता है, मगर संतोष और (1) _____ मनुष्य के हृदय से उत्पन्न होती है। लेकिन मनुष्यता के लिए यह घोर (2) _____ की बात है कि आज आदमी के पास दिल नाम की चीज नहीं रह गयी। उसकी सारी (3) _____ उसका दिमाग हो गया है। दिमाग से तलवार तो वह बहुत (4) _____ निकाल रहा है, लेकिन दिल की गैरहाजिरी में वह यह (5) _____ ही नहीं पा रहा है कि यह तलवार कहां गिरायी जानी चाहिए। परिणामतः वह इस तलवार से अपना ही गला काट रहा है।

निम्न प्रश्नों के उत्तर उपरोक्त गद्यांश के आधार पर दीजिए।

SubQuestion No : 25

Q.25 गाँव के रक्तस्थान (5) के लिए सर्वाधिक उपयुक्त शब्द होगा-

- Ans
- 1. देख
 - 2. समझ
 - 3. मान
 - 4. सुन

Question ID : 65497831386

Status : Not Answered

Chosen Option : --