

Exam Date	29/11/2021
Exam Time :	4:00 PM - 5:30 PM
Subject	Constable GD 2021

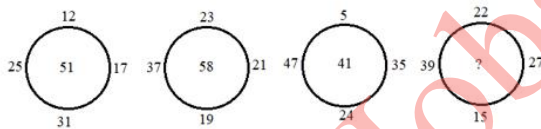
Section : Part A General Intelligence and Reasoning

Q.1 In a festival sale, seven cars of different companies - A, B, C, D, E, F and G - are standing facing west. A is second to the left of B. B is third to the left of C. D is between F and B. C, which is fourth to the right of G, is at one end. Which of the following is the correct position of E?

- Ans 1. Third to the left of B
 2. Fourth to the left of A
 3. Second to right of C
 4. Fifth to the right of G

Question ID : 65497829625
 Status : Answered
 Chosen Option : 1

Q.2 Study the given pattern carefully and select the number that can replace the question mark (?) in it.



- Ans 1. 51
 2. 45
 3. 49
 4. 53

Question ID : 65497829619
 Status : Answered
 Chosen Option : 2

Q.3 Select the option that is related to the third number in the same way as the second number is related to the first number.

8 : 73 :: 9 : ?

- Ans 1. 100
 2. 91
 3. 8
 4. 98

Question ID : 65497829626
 Status : Answered
 Chosen Option : 2

Q.4 Select the Venn diagram that best represents the relationship between the following classes.

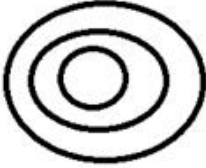
Men, Entrepreneurs, Philanthropists

Ans

✓ 1.



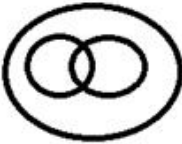
✗ 2.



✗ 3.



✗ 4.



Question ID : 65497829624
Status : Answered
Chosen Option : 1

Q.5 Select the correct option that indicates the arrangement of the given words in the order in which they appear in an English dictionary.

1. Thought
2. Throating
3. Throttlehold
4. Thorough
5. Thrombocyte

Ans ✓ 1. 4, 1, 2, 5, 3

✗ 2. 1, 4, 2, 3, 5

✗ 3. 1, 4, 2, 5, 3

✗ 4. 4, 1, 2, 3, 5

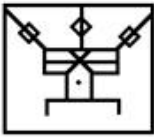
Question ID : 65497829609
Status : Answered
Chosen Option : 1

Q.6 Select the option in which the given figure is embedded (rotation is NOT allowed).

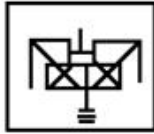


Ans

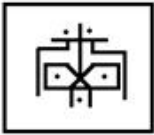
1.



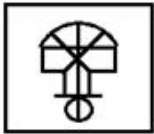
2.



3.



4.



Question ID : 65497829629

Status : Answered

Chosen Option : 4

Q.7 Read the given statements and conclusions carefully. Assuming that the information given in the statements is true, even if it appears to be at variance with commonly known facts, decide which of the given conclusions logically follow(s) from the statements.

Statements:

All woods are bottles.
All bottles are curtains.

Conclusions:

I. All curtains are bottles.
II. Some bottles are woods.

Ans 1. Only conclusion I follows

2. Only conclusion II follows

3. Either conclusion I or II follows

4. Both conclusions I and II follow

Question ID : 65497829617

Status : Answered

Chosen Option : 2

Q.8 Select the letter-cluster from among the given options that can replace the question mark (?) in the following series.

SLOW, UNMU, WPKS, YRIQ, ?

- Ans
- 1. WUKO
 - 2. APKO
 - 3. ATGO
 - 4. WTGS

Question ID : 65497829621
Status : Answered
Chosen Option : 3

Q.9 Select the option that is related to the third letter-cluster in the same way as the second letter-cluster is related to the first letter-cluster.

FGYJK : KJYGF :: LMQBQ : ?

- Ans
- 1. GCPNM
 - 2. GBQML
 - 3. HCRNM
 - 4. HBQNL

Question ID : 65497829613
Status : Answered
Chosen Option : 2

Q.10 Five members, the Director, Producer, Script writer, Choreographer and Set designer, of a film production team are sitting in a row facing towards the north. The Director is sitting next to the Producer. The Script writer is sitting next to the Choreographer. The Choreographer is not sitting with the Set designer, who is at the left end of the row. The Script writer is at the second position from the right. The Director is to the right of the Producer and Set designer. The Director and Script writer are sitting together. In which of the following positions is the Director sitting?

- Ans
- 1. Between the Scriptwriter and the Set designer
 - 2. Between the Producer and the Scriptwriter
 - 3. Between the Set designer and the Choreographer
 - 4. Between the Producer and the Choreographer

Question ID : 65497829623
Status : Not Answered
Chosen Option : --

Q.11 Select the number from among the given options that can replace the question mark (?) in the following series.

12, 3, 24, 6, 36, 9, ?

- Ans
- 1. 54
 - 2. 12
 - 3. 48
 - 4. 60

Question ID : 65497829611
Status : Answered
Chosen Option : 3

Q.12 Select the combination of letters that when sequentially placed in the blanks of the given series will complete the sequence.

_ P _ L I P _ L _ _ N L

- Ans
- 1. PNLLI
 - 2. INNIP
 - 3. IPPIP
 - 4. INLII

Question ID : 65497829610
 Status : Answered
 Chosen Option : 2

Q.13 Study the given pattern carefully and select the number that can replace the question mark (?) in it.

23 63 34
 31 ? 28
 27 63 18

- Ans
- 1. 76
 - 2. 71
 - 3. 67
 - 4. 63

Question ID : 65497829618
 Status : Not Answered
 Chosen Option : --

Q.14 In a certain code language, 'CONVERT' is coded as '34142221820', and 'FORTUNE' is coded as '6418205142'. How will 'ACQUIRE' be coded in that language?

- Ans
- 1. 131759185
 - 2. 1317219185
 - 3. 131753185
 - 4. 131753182

Question ID : 65497829631
 Status : Answered
 Chosen Option : 1

Q.15 Select the correct mirror image of the given combination when the mirror is placed at PQ as shown.

HEADLINES
 P
 |
 Q

- Ans
- 1. HEVDLINE2
 - 2. HVEDLINE2
 - 3. 2ENIDNEH
 - 4. 2ENIDNEH

Question ID : 65497829633
 Status : Answered
 Chosen Option : 3

Q.16 'Belgium' is related to 'Euro' in the same way as 'Slovakia' is related to '_____'.
Ans 1. Euro

- 2. Riel
- 3. Ruble
- 4. Dollar

Question ID : 65497829622
Status : Answered
Chosen Option : 1

Q.17 In a certain code language, 'WORD' is written as 'DLIW' and 'NOUN' is written as 'MLFM'. How will 'VERB' be written in that language?
Ans 1. EWIX

- 2. EVIY
- 3. GVIX
- 4. FUJY

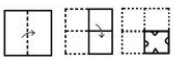
Question ID : 65497829614
Status : Answered
Chosen Option : 2

Q.18 Pointing to a photograph, a woman said to a man, "She is the wife of the only son of your brother's grandfather." How is the woman in the photograph related to the man?
Ans 1. Mother

- 2. Sister
- 3. Aunt
- 4. Grandmother

Question ID : 65497829615
Status : Answered
Chosen Option : 1

Q.19 The sequence of folding a piece of paper and the manner in which the folded paper has been cut is shown in the following figures. How would this paper look when unfolded?
Ans 1.



- 1.
- 2.
- 3.
- 4.

Question ID : 65497829620
Status : Answered
Chosen Option : 2

Q.20 Three different positions of the same dice are shown. Select the number that will be on the face opposite to the one having '1'.



- Ans
- 1. 3
 - 2. 5
 - 3. 4
 - 4. 6

Question ID : 65497829628
Status : Answered
Chosen Option : 1

Q.21 If '+' means 'subtraction', '÷' means 'addition', '<' means 'multiplication' and '>' means 'division', then find the value of ' $79 \div 11 < 18 > (6 > 3) + 9$ '.

- Ans
- 1. 81
 - 2. 169
 - 3. 109
 - 4. 121

Question ID : 65497829627
Status : Answered
Chosen Option : 2

Q.22 Four letter-clusters have been given, out of which three are alike in some manner and one is different. Select the letter-cluster that is different.

- Ans
- 1. QORM
 - 2. FDGB
 - 3. XVYS
 - 4. TRUP

Question ID : 65497829630
Status : Answered
Chosen Option : 1

Q.23 Select the figure that will replace the question mark (?) in the following figure series.



Ans



Question ID : 65497829612
Status : Answered
Chosen Option : 2

Q.24 In a certain code language, 'ANGUISH' is written as 'BOIWLVL'. How will 'DICTATOR' be written in that language?

- Ans
- ✗ 1. EJFVDVSV
 - ✗ 2. EJEVDWSW
 - ✗ 3. EJFUDWSV
 - ✓ 4. EJEVDWSV

Question ID : 65497829616
Status : Answered
Chosen Option : 4

Q.25 Select the number from among the given options that can replace the question mark (?) in the following series.

4, 22, 47, 83, 132, 198, 283, ?

- Ans
- ✗ 1. 319
 - ✓ 2. 391
 - ✗ 3. 491
 - ✗ 4. 419

Question ID : 65497829632
Status : Not Answered
Chosen Option : --

Section : Part B General Knowledge and General Awareness

Q.1 In 2020, scientists at the Institute of Nano Science and Technology (INST) developed a simple and economical treatment for _____ using the drug Aspirin.

- Ans
- 1. polio
 - 2. asthma
 - 3. diabetes
 - 4. cataract

Question ID : 65497829650
Status : Answered
Chosen Option : 2

Q.2 The Natya Shastra describes stringed instruments as ' _____ Vadya'.

- Ans
- 1. Avanaddha
 - 2. Sushir
 - 3. Ghan
 - 4. Tat

Question ID : 65497829648
Status : Answered
Chosen Option : 4

Q.3 Which form of music is the legendary 'Lalon Fakir' associated with?

- Ans
- 1. Thumri
 - 2. Qawwali
 - 3. Sufi
 - 4. Baul

Question ID : 65497829654
Status : Not Answered
Chosen Option : --

Q.4 The cotton textiles 'Calico' originated from the present-day state of _____.

- Ans
- 1. Goa
 - 2. Tamil Nadu
 - 3. Karnataka
 - 4. Kerala

Question ID : 65497829640
Status : Answered
Chosen Option : 4

Q.5 Who wrote the book 'India: An Introduction'?

- Ans
- 1. Lal Krishna Advani
 - 2. Khushwant Singh
 - 3. Jairam Ramesh
 - 4. APJ Abdul Kalam

Question ID : 65497829656
Status : Not Answered
Chosen Option : --

Q.6 Which of the following statements is FALSE?

- Ans
- 1. Iodine is a lustrous non-metal.
 - 2. Carbon is a non-metal.
 - 3. Lithium has a high density.
 - 4. Sodium can catch fire if left in the open.

Question ID : 65497829649
Status : Answered
Chosen Option : 1

Q.7 Who according to the tribals of Chota Nagpur were referred to as the 'Dikus'?

- Ans
- 1. Slaves
 - 2. Predators
 - 3. Outsiders
 - 4. Warriors

Question ID : 65497829639
Status : Not Answered
Chosen Option : --

Q.8 The International Day of Commemoration and Dignity of the Victims of the Crime of Genocide and of the Prevention of this crime is observed annually on:

- Ans
- 1. 9 December
 - 2. 9 October
 - 3. 9 November
 - 4. 9 September

Question ID : 65497829637
Status : Answered
Chosen Option : 4

Q.9 As stated by the Minister of State for Finance, Shri. Pankaj Chaudhary, in Lok Sabha on 19 July 2021, India is the _____ largest holder of foreign exchange reserves in the world.

- Ans
- 1. fourth
 - 2. fifth
 - 3. ninth
 - 4. seventh

Question ID : 65497829658
Status : Answered
Chosen Option : 1

Q.10 Which among the following is observed as the Constitution Day of India?

- Ans
- 1. 26 November
 - 2. 28 November
 - 3. 27 November
 - 4. 29 November

Question ID : 65497829641
Status : Answered
Chosen Option : 1

Q.11 Who among the following was appointed as the new independent Chairman of the International Cricket Council (ICC) in November 2020?

- Ans
- 1. N Srinivasan
 - 2. Greg Barclay
 - 3. Shashank Manohar
 - 4. Imran Khwaja

Question ID : 65497829634
Status : Answered
Chosen Option : 2

Q.12 _____ is a method of soil conservation.

- Ans
- 1. Terrace farming
 - 2. Nomadic farming
 - 3. Shelter farming
 - 4. hydroponic farming

Question ID : 65497829652
Status : Not Answered
Chosen Option : --

Q.13 The Constitution of India lays down rules that guard against the misuse of power by our political leaders. Many of these laws are contained in the section on _____.

- Ans
- 1. Fundamental Rights
 - 2. Fundamental Duties
 - 3. Directive Principles
 - 4. Relations between the Union and the States

Question ID : 65497829646
Status : Answered
Chosen Option : 4

Q.14 Dominic Thiem is a professional tennis player from _____.

- Ans
- 1. Austria
 - 2. Russia
 - 3. Spain
 - 4. Germany

Question ID : 65497829657
Status : Answered
Chosen Option : 1

Q.15 Which of the following is NOT considered as a type of foul in the game of hockey?

- Ans
- 1. Against the player who raises the stick dangerously near another player
 - 2. Against the player who uses their stick to hit an opponent's stick
 - 3. Against the player who hits the ball using the flat side of the stick
 - 4. Against the player who uses their body or stick to prevent opponent from reaching the ball

Question ID : 65497829653
Status : Not Answered
Chosen Option : --

Q.16 Who among the following is the author of the book 'A Fine Balance'?

- Ans 1. Shashi Tharoor
 2. Rohinton Mistry
 3. Jhumpa Lahiri
 4. Arundhati Roy

Question ID : 65497829651
Status : Not Answered
Chosen Option : --

Q.17 In September 2020, the Government of Australia appointed former cricketer Matthew Hayden and Indian origin politician _____ as trade envoys for advancing business ties with India.

- Ans 1. Kaushaliya Vaghela
 2. Deepak Raj Gupta
 3. Dave Sharma
 4. Lisa Singh

Question ID : 65497829647
Status : Answered
Chosen Option : 4

Q.18 Herpes in humans is a:

- Ans 1. parasitic disease
 2. fungal disease
 3. viral disease
 4. bacterial disease

Question ID : 65497829635
Status : Answered
Chosen Option : 2

Q.19 Who among the following foreign travellers was an Italian merchant who visited the Vijayanagara Kingdom?

- Ans 1. Niccola de Conti
 2. Fernao Nuniz
 3. Duarte Barbosa
 4. Marco Ricci

Question ID : 65497829645
Status : Answered
Chosen Option : 1

Q.20 A mature tropical cyclone is characterised by the strong spirally circulating wind around the centre, called the _____.

- Ans 1. head
 2. heart
 3. nose
 4. eye

Question ID : 65497829638
Status : Answered
Chosen Option : 4

Q.21 Why is Bodh Gaya an important Buddhist pilgrimage centre?

- Ans
- 1. Gautam Buddha preached his first sermon here after attaining enlightenment.
 - 2. Gautam Buddha attained parinirvana here.
 - 3. Gautam Buddha attained enlightenment here.
 - 4. Gautam Buddha was born here.

Question ID : 65497829636
Status : Answered
Chosen Option : 3

Q.22 When an organisation is unable to honour its financial obligations or make payment to its creditors, it files for _____ in the court.

- Ans
- 1. account payable
 - 2. account receivable
 - 3. debt financing
 - 4. bankruptcy

Question ID : 65497829643
Status : Answered
Chosen Option : 4

Q.23 In the Union Budget 2020-21, which of the following schemes was launched to reduce tax litigation?

- Ans
- 1. Vivad Se Vardan
 - 2. Vivad Pe Vishwas
 - 3. Vivad Se Vishwas
 - 4. Vishwas Pe Vishwas

Question ID : 65497829644
Status : Not Answered
Chosen Option : --

Q.24 Gorichen is the highest peak in _____.

- Ans
- 1. Arunachal Pradesh
 - 2. Assam
 - 3. Sikkim
 - 4. Manipur

Question ID : 65497829655
Status : Not Answered
Chosen Option : --

Q.25 The Sardar Patel Zoological Park in Gujarat was inaugurated on the 30th October 2020 by _____.

- Ans
- 1. Smriti Irani
 - 2. JP Nadda
 - 3. Narendra Modi
 - 4. Amit Shah

Question ID : 65497829642
Status : Not Answered
Chosen Option : --

Section : Part C Elementary Mathematics

Q.1 The sum of the ages of A, B and C is 66 years. The ratio of the age of A to the combined ages of B and C is 5 : 6. The ratio of the age of B to the combined ages of A and C is 4 : 7. What is the age (in years) of C?

- Ans**
- 1. 12
 - 2. 18
 - 3. 24
 - 4. 15

Question ID : 65497829681
Status : Answered
Chosen Option : 1

Q.2 Simplify $\frac{2\frac{3}{4} \div \frac{7}{8} \times \left(\frac{1}{3} + \frac{1}{4}\right) + \frac{5}{7} \div \frac{3}{4} \text{ of } \frac{3}{7} - \frac{5}{4} \text{ of } \frac{3}{5}}$.

- Ans**
- 1. $5\frac{1}{36}$
 - 2. $4\frac{11}{36}$
 - 3. $2\frac{17}{36}$
 - 4. $3\frac{5}{36}$

Question ID : 65497829663
Status : Not Answered
Chosen Option : --

Q.3 A और B की आय का अनुपात $x : y$ है। यदि A की आय में 20% की वृद्धि हुई और B की आय में 25% की कमी हुई, तो अनुपात 64 : 45 हो जाएगा। $x : y$ का मान ज्ञात करें।

- Ans**
- 1. 8 : 9
 - 2. 4 : 9
 - 3. 4 : 5
 - 4. 8 : 15

Question ID : 65497829677
Status : Answered
Chosen Option : 4

Q.4 k is the smallest number of 5-digits, which when divided by 18, 24, 30, 40 and 42, leaves a remainder 7 in each case. The sum of the digits of k is:

- Ans**
- 1. 9
 - 2. 7
 - 3. 16
 - 4. 11

Question ID : 65497829675
Status : Answered
Chosen Option : 3

Q.5 A path of uniform width of 5 m runs around the outside of a rectangular field 30 m long and 25 m in breadth. What is the area (in m^2) of the path?

- Ans**
- 1. 1400
 - 2. 750
 - 3. 450
 - 4. 650

Question ID : 65497829662
Status : Answered
Chosen Option : 4

Q.6 What is the amount (in ₹) obtained by investing a sum of ₹18,000 at $13\frac{1}{3}\%$ p.a. for $2\frac{1}{4}$ years, if the interest is compounded 9-monthly?

- Ans**
- 1. 23,859
 - 2. 23,895
 - 3. 23,958
 - 4. 23,598

Question ID : 65497829682
Status : Not Answered
Chosen Option : --

Q.7 A lent ₹10,000 to B for 3 years on compound interest at 10% per annum compounded annually. C lent the same amount for the same period to D at 11% simple interest. Who gained more at the end of 3 years and how much?

- Ans**
- 1. A gained ₹376 more
 - 2. C gained ₹10 more
 - 3. A gained ₹10 more
 - 4. C gained ₹300 more

Question ID : 65497829660
Status : Answered
Chosen Option : 3

Q.8 A certain sum amounts to ₹14,160 in 3 years at 6% per annum, at simple interest. What will be the simple interest on the same sum in $4\frac{2}{3}$ years at the same rate of interest?

- Ans**
- 1. ₹3,920
 - 2. ₹3,120
 - 3. ₹3,360
 - 4. ₹2,800

Question ID : 65497829678
Status : Answered
Chosen Option : 3

Q.9 A shopkeeper marked an item at ₹4,000. He earns a profit of 20% after selling it with a 10% discount on the marked price. If he sells it at a price of ₹100 less than the marked price, then what is his profit percentage?

- Ans**
- 1. 30
 - 2. 25
 - 3. 28
 - 4. 20

Question ID : 65497829659
Status : Answered
Chosen Option : 1

Q.10 Nine solid metallic spheres of radius 2.5 cm each are melted and recast into a solid cylinder of height 7.5 cm. The curved surface area (in cm^2) of the cylinder is:

- Ans**
- 1. 125π
 - 2. 150π
 - 3. 120π
 - 4. 75π

Question ID : 65497829683
Status : Answered
Chosen Option : 4

Q.11 By selling four articles for ₹1,680, a person gains the cost price of four articles. The profit percentage is:

- Ans**
- 1. 120%
 - 2. 100%
 - 3. 90%
 - 4. 75%

Question ID : 65497829666
Status : Answered
Chosen Option : 2

Q.12 A person wanted to sell his watch initially at 10% discount to his sister who wants to buy that watch. Later, the person sells it at 12% discount having ₹80 less in his profit. Find the marked price of the watch.

- Ans**
- 1. ₹4,000
 - 2. ₹4,200
 - 3. ₹3,500
 - 4. ₹3,750

Question ID : 65497829680
Status : Answered
Chosen Option : 2

Q.13 Gita bought 80 oranges at the rate of ₹9.50 per orange. She sold 25% of these at ₹12 each and one-third of the remaining at ₹10 each. At what price per orange should she sell the remaining oranges to get an overall profit of 25%?

- Ans**
- ✓ 1. ₹12.75
 - ✗ 2. ₹11.50
 - ✗ 3. ₹12
 - ✗ 4. ₹13

Question ID : 65497829679
Status : Not Answered
Chosen Option : --

Q.14 A certain sum of money is divided into three parts in the proportion of 11 : 8 : 5. If the third part is ₹530, what is the sum (in ₹) of the other two parts?

- Ans**
- ✓ 1. 2,014
 - ✗ 2. 1,378
 - ✗ 3. 1,696
 - ✗ 4. 2,544

Question ID : 65497829661
Status : Answered
Chosen Option : 1

Q.15 The value of $3 \times 2 \div 3 \text{ of } 2 \times 3 \div (5 + 5 \times 5 \div 5 \text{ of } 5 - 5 \div 10 \text{ of } \frac{1}{5}) + 2 \div 7 \text{ of } 2$ is:

- Ans**
- ✗ 1. -1
 - ✗ 2. 0
 - ✗ 3. 2
 - ✓ 4. 1

Question ID : 65497829665
Status : Answered
Chosen Option : 4

Q.16 A car covers a distance of 150 km at a uniform speed. The time taken for the journey is two-third of the speed in km/h, in terms of numerical values. The time (in hours) taken to cover the distance of 150 km is:

- Ans**
- ✗ 1. 9
 - ✗ 2. 12
 - ✓ 3. 10
 - ✗ 4. 15

Question ID : 65497829664
Status : Answered
Chosen Option : 3

Q.17 What will be an equivalent discount of two successive discounts of 40% and 30% for an article?

- Ans**
- 1. 38%
 - 2. 42%
 - 3. 35%
 - 4. 58%

Question ID : **65497829671**
Status : **Answered**
Chosen Option : **4**

Q.18 The average of four numbers is 10. If the first number is two-third of the second number, the second number is three-fourth of the third number and the third number is four times the fourth number, then what is the third number?

- Ans**
- 1. 4
 - 2. 12
 - 3. 16
 - 4. 8

Question ID : **65497829670**
Status : **Answered**
Chosen Option : **3**

Q.19 If 4 men and 5 women can finish a work in 30 days and 6 men and 7 women can finish the same work in 24 days, how many days will it take for one woman alone to finish the two-third of the same work?

- Ans**
- 1. 60
 - 2. 72
 - 3. 70
 - 4. 40

Question ID : **65497829673**
Status : **Not Answered**
Chosen Option : **--**

Q.20 The speed of a train was increasing by 3 km/h after every one hour for up to 10 hours and then, it was increasing by 5 km/h. If the distance travelled in the first one hour was 40 km, what was the total distance covered by the train in 20 hours?

- Ans**
- 1. 535 km
 - 2. 895 km
 - 3. 1,480 km
 - 4. 800 km

Question ID : **65497829674**
Status : **Answered**
Chosen Option : **2**

Q.21 In a college, 80% of students are less than 20 years of age. The number of students more than 20 years of age is $\frac{2}{3}$ of the number of students 20 years of age which is 48. What is the total number of students in the college?

- Ans**
- 1. 200
 - 2. 400
 - 3. 450
 - 4. 300

Question ID : 65497829669
Status : Answered
Chosen Option : 4

Q.22 A and B can complete a piece of work in 12 days and 20 days, respectively. They work together for 6 days. The remaining work is completed by C in 12 days. In how many days will B and C together complete $\frac{2}{3}$ of the same work?

- Ans**
- 1. 15 days
 - 2. 12 days
 - 3. 10 days
 - 4. 8 days

Question ID : 65497829667
Status : Answered
Chosen Option : 2

Q.23 If 15% of a number exceeds 9% of the same number by 33, what is that number?

- Ans**
- 1. 500
 - 2. 590
 - 3. 570
 - 4. 550

Question ID : 65497829672
Status : Answered
Chosen Option : 2

Q.24 Find the largest number which can exactly divide 228, 282 and 288.

- Ans**
- 1. 4
 - 2. 3
 - 3. 8
 - 4. 6

Question ID : 65497829668
Status : Answered
Chosen Option : 4

Q.25 The average of six consecutive even numbers, taken in increasing order, is 107. What is the average of the last three numbers?

- Ans**
- 1. 116
 - 2. 108
 - 3. 112
 - 4. 110

Question ID : **65497829676**
Status : **Answered**
Chosen Option : **4**

Section : **Part D English**

Q.1 Select the option that can be used as a one-word substitute for the given group of words.

Things which are of the same kind and of the same dimensions

- Ans**
- 1. Balanced
 - 2. Pleasant
 - 3. Homogeneous
 - 4. Harmonious

Question ID : **65497829691**
Status : **Answered**
Chosen Option : **3**

Q.2 Select the most appropriate ANTONYM of the given word.

Rash

- Ans**
- 1. Defiant
 - 2. Wayward
 - 3. Unruly
 - 4. Careful

Question ID : **65497829685**
Status : **Answered**
Chosen Option : **4**

Q.3 Select the option that will improve the underlined part of the sentence. In case no improvement is needed, select 'No improvement required'.

You may either wait at the reception or come back later.

- Ans**
- 1. even wait
 - 2. neither wait
 - 3. No improvement required
 - 4. either waiting

Question ID : **65497829692**
Status : **Answered**
Chosen Option : **3**

Q.4 Select the most appropriate option to fill in the blank.

My brother wants to _____ a career in medicine.

- Ans
- 1. chase
 - 2. pursue
 - 3. aspire
 - 4. aim

Question ID : 65497829700
Status : Answered
Chosen Option : 2

Q.5 Select the most appropriate synonym of the given word.

Rapid

- Ans
- 1. Lumbering
 - 2. Straight
 - 3. Quick
 - 4. Successive

Question ID : 65497829689
Status : Answered
Chosen Option : 3

Q.6 Select the most appropriate meaning of the given idiom.

To lag behind

- Ans
- 1. To fail to maintain the pace or progress
 - 2. To chase someone for long
 - 3. To follow someone as a spy
 - 4. To imitate someone closely

Question ID : 65497829694
Status : Answered
Chosen Option : 1

Q.7 Select the option that can be used as a one-word substitute for the given group of words.

Well-known for bad qualities or deeds

- Ans
- 1. Notorious
 - 2. Burglar
 - 3. Thief
 - 4. Idiot

Question ID : 65497829697
Status : Answered
Chosen Option : 1

Q.8 The following sentence has been split into four segments. Identify the segment that contains a grammatical error.

Jack asked his / friends to send the parcel / on his / new address.

- Ans
- 1. new address
 - 2. Jack asked his
 - 3. friends to send the parcel
 - 4. on his

Question ID : 65497829688
Status : Answered
Chosen Option : 3

Q.9 Select the INCORRECTLY spelt word.

- Ans
- 1. Successfull
 - 2. Strategy
 - 3. Definition
 - 4. Continuously

Question ID : 65497829699
Status : Answered
Chosen Option : 3

Q.10 Select the option that can be used as a one-word substitute for the given group of words.

Land beside a sea

- Ans
- 1. Island
 - 2. Coast
 - 3. Archipelago
 - 4. Peninsula

Question ID : 65497829686
Status : Answered
Chosen Option : 2

Q.11 Select the most appropriate option that can substitute the underlined segment in the given sentence. If there is no need to substitute it, select 'No substitution required'.

We will be in touch with them when the time is arrived.

- Ans
- 1. No substitution required
 - 2. was arrived
 - 3. Arrives
 - 4. Arrived

Question ID : 65497829702
Status : Answered
Chosen Option : 3

Q.12 Select the most appropriate option to fill in the blank.

Customs and traditions play a _____ role in all the societies.

- Ans 1. significant
 2. inspiring
 3. sufficient
 4. refreshing

Question ID : 65497829693
Status : Answered
Chosen Option : 1

Q.13 Parts of the given sentence have been given as options. One of them contains a grammatical error. Select the option that has the error.

The Hindi question paper was extremely tougher for 7th grade students.

- Ans 1. tougher
 2. The Hindi question paper
 3. for 7th grade students
 4. was extremely

Question ID : 65497829695
Status : Answered
Chosen Option : 1

Q.14 Select the most appropriate meaning of the given idiom.

Lap up

- Ans 1. Eat something slowly
 2. Go around a circle
 3. Move up very fast
 4. Accept eagerly

Question ID : 65497829703
Status : Answered
Chosen Option : 2

Q.15 Select the INCORRECTLY spelt word.

- Ans 1. Aluminem
 2. Manufacturing
 3. Excretory
 4. Resistivity

Question ID : 65497829687
Status : Answered
Chosen Option : 1

Q.16 Select the most appropriate option that can substitute the underlined segment in the given sentence. If there is no need to substitute it, select 'No substitution required'.

Your decision to stay home this weekend is more better than mine to go out for dinner.

- Ans
- 1. No substitution required
 - 2. much better than mine
 - 3. most better than mine
 - 4. much better than my

Question ID : 65497829690
Status : Answered
Chosen Option : 2

Q.17 Select the most appropriate ANTONYM of the given word.

Contextual

- Ans
- 1. Circumstantial
 - 2. Unrelated
 - 3. Dependent
 - 4. Provisional

Question ID : 65497829698
Status : Answered
Chosen Option : 2

Q.18 The following sentence has been split into four segments. Identify the segment that contains a grammatical error.

Mother beat Jenny / by a stick / for going out / without permission.

- Ans
- 1. for going out
 - 2. without permission
 - 3. by a stick
 - 4. Mother beat Jenny

Question ID : 65497829684
Status : Answered
Chosen Option : 4

Q.19 Select the most appropriate synonym of the given word.

Fare

- Ans
- 1. Fresh
 - 2. Beautiful
 - 3. Progress
 - 4. Bright

Question ID : 65497829696
Status : Answered
Chosen Option : 4

Q.20 Select the most appropriate option to fill in the blank.

The paintings on the church altar seem to be in need of _____.

- Ans
- 1. renovation
 - 2. redecoration
 - 3. restoration
 - 4. reconstruction

Question ID : 65497829701

Status : Answered

Chosen Option : 1

Comprehension:

In the following passage, some words have been deleted. Read the passage carefully and select the most appropriate option to fill in each blank.

There was a time when storybooks were the only (1) _____ of entertainment for children. A decade or two ago, kids (2) _____ their time reading stories and role playing (3) _____ favourite characters from the stories. (4) _____, times have changed now – in the age of the internet, kids spend (5) _____ of their time playing games on smartphones or watching cartoons or videos on YouTube.

SubQuestion No : 21

Q.21 Select the most appropriate option to fill in blank number 1.

- Ans
- 1. meaning
 - 2. mean
 - 3. meant
 - 4. means

Question ID : 65497829705

Status : Answered

Chosen Option : 2

Comprehension:

In the following passage, some words have been deleted. Read the passage carefully and select the most appropriate option to fill in each blank.

There was a time when storybooks were the only (1) _____ of entertainment for children. A decade or two ago, kids (2) _____ their time reading stories and role playing (3) _____ favourite characters from the stories. (4) _____, times have changed now – in the age of the internet, kids spend (5) _____ of their time playing games on smartphones or watching cartoons or videos on YouTube.

SubQuestion No : 22

Q.22 Select the most appropriate option to fill in blank number 2.

- Ans
- 1. are spending
 - 2. spend
 - 3. spent
 - 4. have spent

Question ID : 65497829706

Status : Answered

Chosen Option : 3

Comprehension:

In the following passage, some words have been deleted. Read the passage carefully and select the most appropriate option to fill in each blank.

There was a time when storybooks were the only (1) _____ of entertainment for children. A decade or two ago, kids (2) _____ their time reading stories and role playing (3) _____ favourite characters from the stories. (4) _____, times have changed now – in the age of the internet, kids spend (5) _____ of their time playing games on smartphones or watching cartoons or videos on YouTube.

SubQuestion No : 23

Q.23 Select the most appropriate option to fill in blank number 3.

- Ans
- 1. her
 - 2. his
 - 3. its
 - 4. their

Question ID : 65497829707
Status : Answered
Chosen Option : 4

Comprehension:

In the following passage, some words have been deleted. Read the passage carefully and select the most appropriate option to fill in each blank.

There was a time when storybooks were the only (1) _____ of entertainment for children. A decade or two ago, kids (2) _____ their time reading stories and role playing (3) _____ favourite characters from the stories. (4) _____, times have changed now – in the age of the internet, kids spend (5) _____ of their time playing games on smartphones or watching cartoons or videos on YouTube.

SubQuestion No : 24

Q.24 Select the most appropriate option to fill in blank number 4.

- Ans
- 1. However
 - 2. While
 - 3. Though
 - 4. In spite

Question ID : 65497829708
Status : Answered
Chosen Option : 1

Comprehension:

In the following passage, some words have been deleted. Read the passage carefully and select the most appropriate option to fill in each blank.

There was a time when storybooks were the only (1) _____ of entertainment for children. A decade or two ago, kids (2) _____ their time reading stories and role playing (3) _____ favourite characters from the stories. (4) _____, times have changed now – in the age of the internet, kids spend (5) _____ of their time playing games on smartphones or watching cartoons or videos on YouTube.

SubQuestion No : 25

Q.25 Select the most appropriate option to fill in blank number 5.

- Ans
- 1. masses
 - 2. many
 - 3. most
 - 4. maximum

Question ID : 65497829709
Status : Answered
Chosen Option : 3

Q.1 दिए गए शब्द के विलोम शब्द का चयन करें-

सयमी

- Ans
- 1. विकृत
 - 2. भ्रष्टाचारी
 - 3. दुश्चरित्र
 - 4. व्यभिचारी

Question ID : 65497829716
Status : Not Answered
Chosen Option : --

Q.2 निम्नलिखित में से शुद्ध वर्तनी वाला शब्द कौन सा है?

- Ans
- 1. निर्दर्यी
 - 2. नीर्दय
 - 3. निर्दय
 - 4. निरदय

Question ID : 65497829722
Status : Not Answered
Chosen Option : --

Q.3 दिए गए वाक्य में रेखांकित खंड को प्रतिस्थापित करने के लिए सर्वाधिक उपयुक्त विकल्प का चयन करें। यदि इसे प्रतिस्थापित करने की आवश्यकता नहीं है, तो विकल्प 'किसी बदलाव की आवश्यकता नहीं है' का चयन करें।

स्वतंत्रता संग्राम में हजारों देशवासियों ने अपना प्राण त्याग कर दिया।

- Ans
- 1. अपना प्राण त्याग दिया।
 - 2. अपने प्राण न्योछावर कर दिए।
 - 3. अपने प्राण त्याग दिया।
 - 4. किसी बदलाव की आवश्यकता नहीं है।

Question ID : 65497829719
Status : Not Answered
Chosen Option : --

Q.4 'जिसे जानना आवश्यक हो' वाक्यांश के लिए एक शब्द होगा-

- Ans
- 1. अगेय
 - 2. अज्ञेय
 - 3. गेय
 - 4. ज्ञेय

Question ID : 65497829726
Status : Not Answered
Chosen Option : --

Q.5 दिए गए वाक्य में रेखांकित खंड को प्रतिस्थापित करने के लिए सर्वाधिक उपयुक्त विकल्प का चयन करें। यदि इसे प्रतिस्थापित करने की आवश्यकता नहीं है, तो विकल्प 'किसी बदलाव की आवश्यकता नहीं है' का चयन करें।

इस पुस्तक का छपित मूल्य कितना है?

- Ans
- 1. मुद्रित
 - 2. प्रकाशित
 - 3. छापित
 - 4. किसी बदलाव की आवश्यकता नहीं है।

Question ID : 65497829721
Status : Not Answered
Chosen Option : --

Q.6 'गेह' किसका पर्यायवाची है?

- Ans
- 1. पर्वत
 - 2. बादल
 - 3. आकाश
 - 4. घर

Question ID : 65497829725
Status : Not Answered
Chosen Option : --

Q.7 दिए गए शब्द के विलोम का चयन करें।

छली

- Ans
- 1. निष्फल
 - 2. चंचल
 - 3. अचल
 - 4. निश्चल

Question ID : 65497829712
Status : Not Answered
Chosen Option : --

Q.8 दिए गए वाक्य का वो भाग ज्ञात करें जिसमें कोई त्रुटि है। यदि कोई त्रुटि नहीं है, तो 'कोई त्रुटि नहीं है' चुनें।

मैंने और उसने (1) घूमने (2) जाना है(3) कोई त्रुटि नहीं है (4)

- Ans
- 1. 1
 - 2. 2
 - 3. 3
 - 4. 4

Question ID : 65497829715
Status : Not Answered
Chosen Option : --

Q.9 दिए गये वाक्यांश के लिए एक शब्द दीजिये।

जिसकी कोई उपमा न हो

- Ans
- 1. अद्वितीय
 - 2. अनूठा
 - 3. कल्पनातीत
 - 4. अनुपम

Question ID : 65497829714
Status : Not Answered
Chosen Option : --

Q.10 रिक्त स्थान की पूर्ति करने के लिए सर्वाधिक उपयुक्त शब्द का चयन करें।

कोयल की आवाज़ अत्यधिक _____ होती है।

- Ans
- 1. लचीली
 - 2. कर्णप्रिय
 - 3. कोमल
 - 4. कर्कश

Question ID : 65497829718
Status : Not Answered
Chosen Option : --

Q.11 'नाक कटना' मुहावरे का सही अर्थ है-

- Ans
- 1. हतोत्साहित होना
 - 2. परेशान होना
 - 3. चोट लगना
 - 4. बदनामी होना

Question ID : 65497829727
Status : Not Answered
Chosen Option : --

Q.12 दिए गए वाक्य का वह भाग ज्ञात करें जिसमें कोई त्रुटि है। यदि कोई त्रुटि नहीं है, तो 'कोई त्रुटि नहीं है' चुनें।

अगली गोष्ठी (1)/ मेरे निवास-स्थान में (2)/ होगी। (3)/ कोई त्रुटि नहीं है (4)

- Ans
- 1. 1
 - 2. 3
 - 3. 2
 - 4. 4

Question ID : 65497829710
Status : Not Answered
Chosen Option : --

Q.13 रिक्त स्थान की पूर्ति करने के लिए सर्वाधिक उपयुक्त शब्द का चयन करें।

_____ क्या चाहिए?

- Ans 1. तुम्हें
 2. तुम्हारे को
 3. तुमको
 4. तेरे को

Question ID : 65497829720
Status : Not Answered
Chosen Option : --

Q.14 निम्नलिखित प्रश्न में, दिए गए चार विकल्पों में से उस विकल्प का चयन करें, जो मुहावरे के अर्थ को दर्शाता है।

उल्टे पाव लौटना

- Ans 1. निराश लौटना
 2. असंभव कार्य करना
 3. विपरीत दिशा में लौटना
 4. दोषी ठहरना

Question ID : 65497829713
Status : Not Answered
Chosen Option : --

Q.15 निम्नलिखित में से शुद्ध वर्तनी वाला शब्द कौन सा है?

- Ans 1. अक्षोहिणी
 2. अक्षौहिणी
 3. अक्षौहणी
 4. अक्षोहणी

Question ID : 65497829723
Status : Not Answered
Chosen Option : --

Q.16 कौनसा शब्द 'बादल' का समानार्थी शब्द है?

- Ans 1. अबु
 2. अबुज
 3. अबुद
 4. अबुनिधि

Question ID : 65497829711
Status : Not Answered
Chosen Option : --

Q.17 रिक्त स्थान की पूर्ति करने के लिए सर्वाधिक उपयुक्त विकल्प का चयन करें।

कक्षा में छात्रों की _____ दर्ज की गई।

- Ans 1. अवस्थिति
 2. अस्मिता
 3. विद्यमानता
 4. उपस्थिति

Question ID : 65497829729
Status : Not Answered
Chosen Option : --

Q.18 दिए गए वाक्य में रेखांकित अश को प्रतिस्थापित करने के लिए सर्वाधिक उपयुक्त विकल्प का चयन करें।

लोग बड़ी मात्रा में जमा हो गए।

- Ans
- 1. सख्या
 - 2. भीड़
 - 3. अक
 - 4. गणना

Question ID : 65497829728
Status : Not Answered
Chosen Option : --

Q.19 दिए गये वाक्याश के लिए एक शब्द दीजिये-

जो अपनी हत्या कर लेता है।

- Ans
- 1. प्रतिघाती
 - 2. दुर्बल
 - 3. हत्यारा
 - 4. आत्मघाती

Question ID : 65497829717
Status : Not Answered
Chosen Option : --

Q.20 दिए गए वाक्य के किस भाग में त्रुटि है?

हरिश्चंद्र के सदृश्य कोई सत्यवादी नहीं हुआ।

- Ans
- 1. सत्यवादी
 - 2. हरिश्चंद्र के
 - 3. नहीं हुआ।
 - 4. सदृश्य कोई

Question ID : 65497829724
Status : Not Answered
Chosen Option : --

Comprehension:

दिए गए गद्यांश में से कुछ शब्द हटा दिए गए हैं। दिए गए विकल्पों की सहायता से रिक्त स्थान भरें। प्रत्येक सख्या के लिए सर्वाधिक उपयुक्त विकल्प का चयन करें।

शिशु को यदि हम राष्ट्र की अमूल्य (1) _____ के रूप में देखना चाहते हैं, तो उसे एक ऐसा (2) _____ वातावरण प्रदान करना पड़ेगा, जिसमें निर्बाध गति से उसका (3) _____ विकास हो सके। स्वच्छ, शांत, भयमुक्त और (4) _____ वातावरण में ही शिशु की कोमल (5) _____ सुरक्षित रह सकती है। शिशु की सुकोमल भावनाओं को आघात पहुंचाना सामाजिक अपराध है। गद्यांश के आधार पर उत्तर दीजिए -

SubQuestion No : 21

Q.21 गद्यांश के रिक्त स्थान (1) के लिए सर्वाधिक उपयुक्त शब्द होगा-

- Ans
- 1. निधि
 - 2. धरोहर
 - 3. व्यक्ति
 - 4. वस्तु

Question ID : 65497829731
Status : Not Answered
Chosen Option : --

Comprehension:

दिए गए गद्यांश में से कुछ शब्द हटा दिए गए हैं। दिए गए विकल्पों की सहायता से रिक्त स्थान भरें। प्रत्येक सख्या के लिए सर्वाधिक उपयुक्त विकल्प का चयन करें।

शिशु को यदि हम राष्ट्र की अमूल्य (1) _____ के रूप में देखना चाहते हैं, तो उसे एक ऐसा (2) _____ वातावरण प्रदान करना पड़ेगा, जिसमें निर्बाध गति से उसका (3) _____ विकास हो सके। स्वच्छ, शांत, भयमुक्त और (4) _____ वातावरण में ही शिशु की कोमल (5) _____ सुरक्षित रह सकती है। शिशु की सुकोमल भावनाओं को आघात पहुंचाना सामाजिक अपराध है। गद्यांश के आधार पर उत्तर दीजिए -

SubQuestion No : 22

Q.22 गद्यांश के रिक्त स्थान (2) के लिए सर्वाधिक उपयुक्त शब्द होगा-

- Ans
- 1. निकृष्ट
 - 2. आदर्श
 - 3. सुंदर
 - 4. पतित

Question ID : 65497829732
Status : Not Answered
Chosen Option : --

Comprehension:

दिए गए गद्यांश में से कुछ शब्द हटा दिए गए हैं। दिए गए विकल्पों की सहायता से रिक्त स्थान भरें। प्रत्येक सख्या के लिए सर्वाधिक उपयुक्त विकल्प का चयन करें।

शिशु को यदि हम राष्ट्र की अमूल्य (1) _____ के रूप में देखना चाहते हैं, तो उसे एक ऐसा (2) _____ वातावरण प्रदान करना पड़ेगा, जिसमें निर्बाध गति से उसका (3) _____ विकास हो सके। स्वच्छ, शांत, भयमुक्त और (4) _____ वातावरण में ही शिशु की कोमल (5) _____ सुरक्षित रह सकती है। शिशु की सुकोमल भावनाओं को आघात पहुंचाना सामाजिक अपराध है। गद्यांश के आधार पर उत्तर दीजिए -

SubQuestion No : 23

Q.23 गद्यांश के रिक्त स्थान (3) के लिए सर्वाधिक उपयुक्त शब्द होगा-

- Ans
- 1. उच्च
 - 2. चहुँओर
 - 3. चहुँमुखी
 - 4. विशेष

Question ID : 65497829733
Status : Not Answered
Chosen Option : --

Comprehension:

दिए गए गद्यांश में से कुछ शब्द हटा दिए गए हैं। दिए गए विकल्पों की सहायता से रिक्त स्थान भरें। प्रत्येक सख्या के लिए सर्वाधिक उपयुक्त विकल्प का चयन करें।

शिशु को यदि हम राष्ट्र की अमूल्य (1) _____ के रूप में देखना चाहते हैं, तो उसे एक ऐसा (2) _____ वातावरण प्रदान करना पड़ेगा, जिसमें निर्बाध गति से उसका (3) _____ विकास हो सके। स्वच्छ, शांत, भयमुक्त और (4) _____ वातावरण में ही शिशु की कोमल (5) _____ सुरक्षित रह सकती है। शिशु की सुकोमल भावनाओं को आघात पहुंचाना सामाजिक अपराध है। गद्यांश के आधार पर उत्तर दीजिए -

SubQuestion No : 24

Q.24 गद्यांश के रिक्त स्थान (4) के लिए सर्वाधिक उपयुक्त शब्द होगा-

- Ans
- 1. असुरक्षित
 - 2. स्वास्थ्यप्रद
 - 3. अस्वास्थ्यप्रद
 - 4. दमघोटू

Question ID : 65497829734
Status : Not Answered
Chosen Option : --

Comprehension:

दिए गए गद्यांश में से कुछ शब्द हटा दिए गए हैं। दिए गए विकल्पों की सहायता से रिक्त स्थान भरें। प्रत्येक सख्या के लिए सर्वाधिक उपयुक्त विकल्प का चयन करें।

शिशु को यदि हम राष्ट्र की अमूल्य (1) _____ के रूप में देखना चाहते हैं, तो उसे एक ऐसा (2) _____ वातावरण प्रदान करना पड़ेगा, जिसमें निर्बाध गति से उसका (3) _____ विकास हो सके। स्वच्छ, शांत, भयमुक्त और (4) _____ वातावरण में ही शिशु की कोमल (5) _____ सुरक्षित रह सकती है। शिशु की सुकोमल भावनाओं को आघात पहुंचाना सामाजिक अपराध है। गद्यांश के आधार पर उत्तर दीजिए -

SubQuestion No : 25

Q.25 गद्यांश के रिक्त स्थान (5) के लिए सर्वाधिक उपयुक्त शब्द होगा-

- Ans**
- 1. सपने
 - 2. विचार
 - 3. भावनाएँ
 - 4. व्यक्तित्व

Question ID : **65497829735**

Status : **Not Answered**

Chosen Option : --

GovtJobsAlert.In