

Exam Date	13/12/2021
Exam Time :	4:00 PM - 5:30 PM
Subject	Constable GD 2021

Section : Part A General Intelligence and Reasoning

Q.1 Select the number from among the given options that can replace the question mark (?) in the following series.

13, 7, 6, ?, 19, 50

- Ans
- 1. 11
 - 2. 10.5
 - 3. 12.5
 - 4. 4.5

Question ID : 65497836227
Status : Not Answered
Chosen Option : --

Q.2 A jug of 147 ml volume capacity is to be filled with water by using the minimum number of glasses from among three glasses of 11 ml, 17 ml and 23 ml capacity. The glasses can be used only at their fullest capacity and each glass has to be used at least once. How many minimum number of glasses would be needed to fill the jug fully by using these three glasses?

- Ans
- 1. 9
 - 2. 11
 - 3. 12
 - 4. 10

Question ID : 65497836219
Status : Marked For Review
Chosen Option : 1

Q.3 Four letter-clusters have been given, out of which three are alike in some manner and one is different. Select the letter-cluster that is different.

- Ans
- 1. MRF
 - 2. LIP
 - 3. HOT
 - 4. POD

Question ID : 65497836225
Status : Answered
Chosen Option : 1

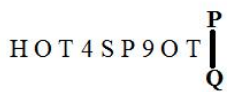
Q.4 Select the set of classes the relationship among which is best represented by the following Venn diagram.



- Ans
- 1. Students, Part-time workers, Girls
 - 2. Engineers, Illiterates, Urban residents
 - 3. Females, Mothers, Sisters
 - 4. Mammals, Human beings, Reptiles

Question ID : 65497836224
Status : Answered
Chosen Option : 1

Q.5 Select the correct mirror image of the given combination when the mirror is placed at 'PQ' as shown.



- Ans
- 1. T O 9 2 4 T O H
 - 2. H O L 4 2 B 0 L
 - 3. T O 4 9 2 9 T O H
 - 4. H O L 0 2 B 4 O L

Question ID : 65497836228
Status : Answered
Chosen Option : 1

Q.6 In a certain code language, 'FESTIVAL' is written as 'UTFGMBWJ'. How will 'MAJESTIC' be written in that language?

- Ans
- 1. NBKFTUJE
 - 2. FKBNDJUT
 - 3. BNFKUTRX
 - 4. CJURFBKT

Question ID : 65497836214
Status : Answered
Chosen Option : 2

Q.7 Select the option in which the given figure is embedded (rotation is NOT allowed).



Ans

✓ 1.



✗ 2.



✗ 3.



✗ 4.



Question ID : 65497836237

Status : Answered

Chosen Option : 1

Q.8 Select the letter-cluster from among the given options that can replace the question mark (?) in the following series.

HK, FM, DO, BQ, ?, XU, VW

Ans ✗ 1. WS

✓ 2. ZS

✗ 3. ZK

✗ 4. AK

Question ID : 65497836221

Status : Answered

Chosen Option : 2

Q.9 What will be the value of the given expression if 'A' means '+', 'B' means '-', 'C' means 'x', and 'D' means '÷'?

50 A 19 B (36 D 2) C 3 A 15 A (10 D 5) = ?

Ans ✗ 1. 44

✗ 2. 40

✓ 3. 32

✗ 4. 28

Question ID : 65497836235

Status : Answered

Chosen Option : 2

Q.10 Select the option that is related to the fourth number in the same way as the first number is related to the second number and the fifth number is related to the sixth number.

60 : 28 :: ? : 41 :: 70 : 33

- Ans
- 1. 94
 - 2. 102
 - 3. 89
 - 4. 86

Question ID : 65497836234
Status : Answered
Chosen Option : 4

Q.11 'Mount Everest' is related to 'Mountain' in the same way as 'Nobel' is related to '_____'.
,

- Ans
- 1. Fame
 - 2. Duty
 - 3. Book
 - 4. Prize

Question ID : 65497836222
Status : Answered
Chosen Option : 4

Q.12 Select the option in which the numbers are related in the same way as are the numbers in the given set.

(64, 51, 38)

- Ans
- 1. (52, 46, 40)
 - 2. (90, 120, 64)
 - 3. (22, 50, 79)
 - 4. (45, 54, 99)

Question ID : 65497836218
Status : Answered
Chosen Option : 1

Q.13 Select the number from among the given options that can replace the question mark (?) in the following series.

7, 13, 25, 43, ?, 97

- Ans
- 1. 67
 - 2. 56
 - 3. 61
 - 4. 63

Question ID : 65497836231
Status : Answered
Chosen Option : 1

Q.14 In a certain code language, 'STORE' is coded as '8712922' and 'PURE' is coded as '116922'. How will 'ASSURED' be written in that language?

- Ans
- 1. 2688982223
 - 2. 2688692223
 - 3. 2695872223
 - 4. 2686982223

Question ID : 65497836226
Status : Answered
Chosen Option : 2

Q.15 Select the option that is related to the third letter-cluster in the same way as the second letter-cluster is related to the first letter-cluster.

QZCT : JAXG :: MRDY : ?

- Ans
- 1. NIHS
 - 2. QUBM
 - 3. GIES
 - 4. NIWB

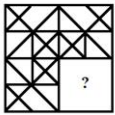
Question ID : 65497836213
Status : Answered
Chosen Option : 4

Q.16 Four persons, Deepak, Gurkiran, Shahid and Vikrant, are sitting around a square shaped table facing the centre. They are sitting in such a way that each person is at the middle of each side of the table. Vikrant is to the immediate right of Deepak. Shahid is facing Vikrant. Who is sitting to the immediate left of Gurkiran?

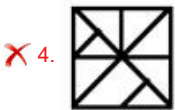
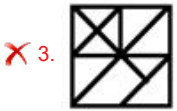
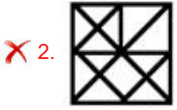
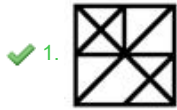
- Ans
- 1. Either Shahid or Deepak
 - 2. V krant
 - 3. Shahid
 - 4. Deepak

Question ID : 65497836223
Status : Answered
Chosen Option : 2

Q.17 Select the figure from among the given options that can replace the question mark (?) in the following series (rotation is NOT allowed).



Ans



Question ID : 65497836232
Status : Answered
Chosen Option : 1

Q.18 Pointing to the photograph of Krip, Poorvi said, "He is my brother's wife's only daughter's paternal grandfather's son." How is Poorvi related to Krip?

- Ans
- ✗ 1. Paternal grandmother
 - ✗ 2. Mother
 - ✗ 3. Daughter
 - ✓ 4. Sister

Question ID : 65497836215
Status : Marked For Review
Chosen Option : 4

Q.19 Read the given statements and conclusions carefully. Assuming that the information given in the statements is true, even if it appears to be at variance with commonly known facts, decide which of the given conclusions logically follow(s) from the statements.

Statements:

1. All nurses are doctors.
2. All doctors are designers.
3. Some nurses are architects.

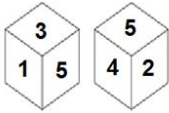
Conclusions:

- I. Some designers are architects.
- II. No doctor is an architect.

- Ans
- ✗ 1. Only conclusion II follows
 - ✓ 2. Only conclusion I follows
 - ✗ 3. Both the conclusions follow
 - ✗ 4. Neither conclusion I nor II follows

Question ID : 65497836217
Status : Answered
Chosen Option : 2

Q.20 Two different positions of the same dice are shown, the six faces of which are numbered 1 to 6. Select the number that will be on the face opposite to the face showing the number '5'.



- Ans
- 1. 1
 - 2. 3
 - 3. 6
 - 4. 2

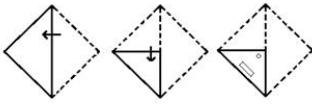
Question ID : 65497836236
Status : Answered
Chosen Option : 3

Q.21 K, L, M, N, O, P, Q and R are sitting around a circular table with their backs towards the centre of the table. R is to the immediate left of M, who is second to the left of P. K is at fourth place to the right of P. Q is between L and N. R is second to the right of L. Who is sitting between M and P?

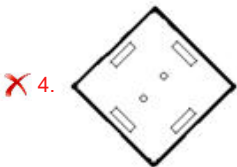
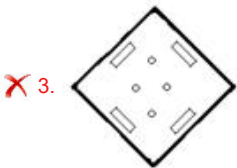
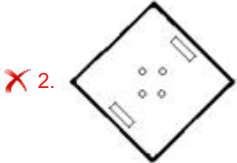
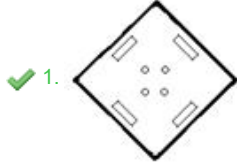
- Ans
- 1. L
 - 2. N
 - 3. O
 - 4. R

Question ID : 65497836233
Status : Answered
Chosen Option : 3

Q.22 The sequence of folding a piece of paper and the manner in which the folded paper has been cut is shown in the following figures. How would this paper look when unfolded?



Ans



Question ID : 65497836220
Status : Answered
Chosen Option : 1

Q.23 Select the combination of letters that when sequentially placed in the blanks of the given series will complete the series.

P R _ _ U C _ _ R O D U _ _ P R O D _ _ T

- Ans
- ✗ 1. ODCPTCUT
 - ✗ 2. ODPTUTCC
 - ✗ 3. ODTCTPUC
 - ✓ 4. ODTPTUC

Question ID : 65497836230
Status : Answered
Chosen Option : 4

Q.24 In a certain code language, 'CAR' is written as 'XZI' and 'TOP' is written as 'GLK'. How will 'FATHER' be written in that language?

- Ans
- ✗ 1. WZGHUI
 - ✗ 2. VZHTKI
 - ✓ 3. UZGSVI
 - ✗ 4. UZHTVJ

Question ID : 65497836216
Status : Answered
Chosen Option : 3

Q.25 Select the correct option that indicates the arrangement of the given words in the order in which they appear in an English dictionary.

1. Mosaic
2. Mortise
3. Morpheus
4. Mortified
5. Morris

Ans 1. 3, 5, 4, 2, 1
 2. 3, 2, 5, 4, 1
 3. 3, 5, 2, 4, 1
 4. 3, 4, 5, 2, 1

Question ID : **65497836229**
Status : **Answered**
Chosen Option : **1**

Section : **Part B General Knowledge and General Awareness**

Q.1 What is SIMBEX-20?

Ans 1. A financial benchmark created to ascertain the growth of the economic relationship between India and Singapore
 2. A bilateral maritime exercise between India and Singapore
 3. A bilateral maritime exercise between India and Saudi Arabia
 4. A financial benchmark created to ascertain the growth of the economic relationship between India and Saudi Arabia

Question ID : **65497836247**
Status : **Answered**
Chosen Option : **2**

Q.2 Where did India stand in the FIFA world ranking which was revealed in June 2020?

Ans 1. 107
 2. 106
 3. 108
 4. 105

Question ID : **65497836250**
Status : **Not Answered**
Chosen Option : **--**

Q.3 Which of the following folk dances is performed holding a sword in one hand and a shield in the other?

Ans 1. Santhal
 2. Jadur
 3. Karma
 4. Paika

Question ID : **65497836258**
Status : **Answered**
Chosen Option : **4**

Q.4 Which of the following persons does NOT feature in Forbes 'World's Billionaires List', 2021?

- Ans
- 1. Shiv Nadar
 - 2. Adar Poonawalla
 - 3. Radhakishan Damani
 - 4. Uday Kotak

Question ID : 65497836262
Status : Not Answered
Chosen Option : --

Q.5 Which of the following was the title sponsor of the 2020 Women's T20 Challenge (cricket)?

- Ans
- 1. Paytm
 - 2. Jio
 - 3. Dream 11
 - 4. Unacademy

Question ID : 65497836254
Status : Answered
Chosen Option : 2

Q.6 The Bare Necessities Index (BNI) constructed by the Economic Survey 2020-21 integrates 26 indicators across five dimensions. Which of the following is NOT one of them?

- Ans
- 1. Employment
 - 2. Sanitation
 - 3. Housing
 - 4. Water

Question ID : 65497836259
Status : Not Answered
Chosen Option : --

Q.7 In November 2020, Nitish Kumar became the Chief Minister of Bihar for the consecutive _____ time.

- Ans
- 1. third
 - 2. second
 - 3. fourth
 - 4. fifth

Question ID : 65497836241
Status : Answered
Chosen Option : 3

Q.8 Which was the only sector in the Indian economy that showed an increased GVA (Gross Value Added) of 3.4% in the first quarter of 2020?

- Ans
- 1. Services
 - 2. Manufacturing
 - 3. Construction
 - 4. Agriculture

Question ID : 65497836242
Status : Answered
Chosen Option : 4

Q.9 Which Act allows persecution of a person who being abroad refuses to return to India to face criminal prosecution?

- Ans
- 1. Bankers Book Evidence Act, 1891
 - 2. Fugitive Economic Offenders (FEO) Act, 2018
 - 3. The Depositories Act, 1996
 - 4. International Financial Services Centres Authority Act, 2019

Question ID : 65497836240
Status : Answered
Chosen Option : 2

Q.10 As of 2015, how many states were the focus of the World Bank funded National Ganga River Basin Projects (NGRBP) of National Mission for Clean Ganga (NMCG)?

- Ans
- 1. Nine
 - 2. Five
 - 3. Seven
 - 4. Three

Question ID : 65497836243
Status : Answered
Chosen Option : 2

Q.11 A dendritic drainage pattern is formed _____.

- Ans
- 1. when a river is joined by its tributaries at approximately right angles
 - 2. when the river channel follows the slope of the terrain and with its tributaries resembles the branches of a tree
 - 3. on a strongly jointed rocky terrain
 - 4. when streams flow in different directions from a central peak or dome like structure

Question ID : 65497836252
Status : Answered
Chosen Option : 2

Q.12 The first session of the Indian National Congress was held in Bombay in _____ under the Presidentship of Womesh Chandra Banerjee.

- Ans
- 1. December, 1885
 - 2. November, 1906
 - 3. January, 1884
 - 4. October, 1882

Question ID : 65497836245
Status : Answered
Chosen Option : 1

Q.13 The Advocate-General holds office during the pleasure of:

- Ans
- 1. the Attorney-General
 - 2. the Prime Minister
 - 3. the Governor
 - 4. the Chief Minister

Question ID : 65497836246
Status : Answered
Chosen Option : 1

Q.14 Which of the following nations emerged as the second-biggest source of foreign direct investment (FDI) into India during April-September 2020, according to data by the Ministry of Commerce and Industry in India?

- Ans
- 1. The US
 - 2. Japan
 - 3. France
 - 4. Mauritius

Question ID : 65497836244
Status : Answered
Chosen Option : 4

Q.15 Which mission was initiated by the British Government to India to secure full Indian cooperation for their efforts in World War II?

- Ans
- 1. Irwin
 - 2. Simon
 - 3. Cripps
 - 4. Cornwallis

Question ID : 65497836239
Status : Answered
Chosen Option : 3

Q.16 'A Promised Land' is a book by _____.

- Ans
- 1. Nelson Mandela
 - 2. Barack Obama
 - 3. Milkha Singh
 - 4. Priyanka Chopra

Question ID : 65497836253
Status : Answered
Chosen Option : 2

Q.17 Which of the following terms is NOT associated with the temple architecture in India?

- Ans
- 1. Vesara
 - 2. Dravida
 - 3. Oordhwaka
 - 4. Nagara

Question ID : 65497836251
Status : Answered
Chosen Option : 3

Q.18 निम्न में से किस वृक्ष/पौधे का उपयोग खासी और सर्दी के उपचार में किया जाता है?

- Ans
- 1. सर्पगंधा
 - 2. बबूल
 - 3. तुलसी
 - 4. कचनार

Question ID : 65497836255
Status : Answered
Chosen Option : 3

Q.19 In which year were the islands of Laccadive, Minicoy, and Amindivi changed into Union Territory of Lakshadweep by an Act of Parliament?

- Ans
- 1. 1972
 - 2. 1971
 - 3. 1974
 - 4. 1973

Question ID : 65497836249
Status : Not Answered
Chosen Option : --

Q.20 The 'kharaj' tax imposed by Alauddin Khalji was equal to about _____ % of a peasant's produce.

- Ans
- 1. 10
 - 2. 25
 - 3. 20
 - 4. 50

Question ID : 65497836256
Status : Answered
Chosen Option : 1

Q.21 AG Tansley put forward the concept of _____ in 1935.

- Ans
- 1. ecosystem
 - 2. motion
 - 3. zero
 - 4. respiration

Question ID : 65497836260
Status : Answered
Chosen Option : 1

Q.22 Which of the following statements is CORRECT in relation to chemical bases?

- Ans
- 1. Bases are sticky to touch, sour to taste and corrosive.
 - 2. Bases are soapy to touch, bitter to taste and corrosive.
 - 3. Bases are soapy to touch, sour to taste and corrosive.
 - 4. Bases are sticky to touch, bitter to taste and corrosive.

Question ID : 65497836261
Status : Answered
Chosen Option : 3

Q.23 In which of the following countries is the headquarters of ICC (International Cricket Council) located?

- Ans
- 1. The UAE
 - 2. India
 - 3. Australia
 - 4. The UK

Question ID : 65497836248
Status : Answered
Chosen Option : 1

Q.24 Into how many books (Mandalas) is the Rigveda divided?

- Ans
- 1. 16
 - 2. 10
 - 3. 5
 - 4. 13

Question ID : 65497836238
Status : Answered
Chosen Option : 2

Q.25 The SpaceX Crew Dragon spacecraft launched into orbit in November 2020 had three American and one _____ astronaut onboard.

- Ans
- 1. Japanese
 - 2. South Korean
 - 3. Russian
 - 4. Chinese

Question ID : 65497836257
Status : Answered
Chosen Option : 1

Section : Part C Elementary Mathematics

Q.1 If $a = 2 \times 32 \times 5$, $b = 34 \times 5 \times 7$, $c = 22 \times 3 \times 7$, then what is the LCM of a , b and c ?

- Ans
- 1. 3
 - 2. 3780
 - 3. 5670
 - 4. 11340

Question ID : 65497836268
Status : Answered
Chosen Option : 4

Q.2 A sum of ₹6,400 amounts to ₹8,848 in $4\frac{1}{2}$ years at a certain rate per annum at simple interest. What will be the amount (in ₹) of a sum of ₹9,000 in $2\frac{2}{5}$ years at the same rate at simple interest?

- Ans
- 1. 10,646
 - 2. 10,764
 - 3. 10,836
 - 4. 10,863

Question ID : 65497836285
Status : Answered
Chosen Option : 3

Q.3 The marked price of an article is ₹480. After a discount of 18% on the marked price, a shopkeeper earns a profit of ₹63.60. His percentage gain is:

- Ans
- 1. $19\frac{1}{11}\%$
 - 2. $19\frac{3}{11}\%$
 - 3. $13\frac{1}{4}\%$
 - 4. $13\frac{3}{4}\%$

Question ID : **65497836278**
Status : **Answered**
Chosen Option : **2**

Q.4 Solutions A and B contain acid and water in the ratio 3 : 5 and 9 : 7, respectively. Solution A and B are mixed in the ratio 2 : 3. What is the ratio of acid and water in the resulting solution?

- Ans
- 1. 9 : 11
 - 2. 19 : 21
 - 3. 39 : 41
 - 4. 37 : 43

Question ID : **65497836284**
Status : **Not Answered**
Chosen Option : --

Q.5 Two cars are running towards each other at the speeds of 45 km/h and 70 km/h, respectively. What will be the distance between them 12 min before they meet?

- Ans
- 1. 23 km
 - 2. 21 km
 - 3. 22 km
 - 4. 20 km

Question ID : **65497836274**
Status : **Answered**
Chosen Option : **1**

Q.6 The amount of a certain sum at simple interest at 15% p.a. in $5\frac{1}{2}$ years is ₹1,755 more than the simple interest on the same sum at the same rate in 10 years. What is the sum (in ₹)?

- Ans
- 1. 5,400
 - 2. 5,500
 - 3. 5,800
 - 4. 5,200

Question ID : **65497836286**
Status : **Not Answered**
Chosen Option : --

Q.7 The speed of B in completing a work is 3 times that of A. If B completes the work in 28 days, then how many days will they take to complete the same work if they work together?

- Ans**
- 1. 21 days
 - 2. 22 days
 - 3. $22\frac{2}{5}$ days
 - 4. 14 days

Question ID : **65497836266**
Status : **Marked For Review**
Chosen Option : **4**

Q.8 A trader purchased a room cooler for ₹5,400. After allowing a discount of 25%, he gains 25%. What is the price marked on the room cooler?

- Ans**
- 1. ₹3,600
 - 2. ₹6,750
 - 3. ₹1,350
 - 4. ₹9,000

Question ID : **65497836271**
Status : **Not Answered**
Chosen Option : **--**

Q.9 Simplify the following expression.

$$(-5) \text{ of } (-45) \div (-15) - (-3) + 5 \times \frac{1}{15}$$

- Ans**
- 1. $18\frac{1}{3}$
 - 2. $-11\frac{2}{3}$
 - 3. $3\frac{74}{225}$
 - 4. $3\frac{2}{15}$

Question ID : **65497836263**
Status : **Answered**
Chosen Option : **2**

Q.10 The value of $\frac{5}{6} \div \frac{5}{6}$ of $\frac{5}{6} \times 1\frac{2}{3} + \frac{3}{4} \div \frac{4}{3}$ of $1\frac{1}{2} - 1\frac{1}{2} - \frac{5}{6} \div \frac{3}{4}$ is:

- Ans
- 1. $\frac{-17}{72}$
 - 2. $\frac{-29}{18}$
 - 3. $\frac{7}{8}$
 - 4. $\frac{28}{9}$

Question ID : 65497836279
 Status : Not Answered
 Chosen Option : --

Q.11 A man sold a radio and a TV set together for ₹20,850, thereby making a profit of 20% on the radio and 15% on the TV set. If he had sold them together for ₹21,450, then he would have made 15% profit on the radio and 20% profit on the TV set. The cost price of the TV set was:

- Ans
- 1. ₹18,000
 - 2. ₹15,000
 - 3. ₹24,000
 - 4. ₹20,000

Question ID : 65497836275
 Status : Not Answered
 Chosen Option : --

Q.12 The ratio of the sides of a rectangular field is 3 : 2 and its perimeter is 600 m. The area of a square field is 6 times the area of the rectangular field. The perimeter (in m) of the square field is:

- Ans
- 1. 1440
 - 2. 1200
 - 3. 1280
 - 4. 1120

Question ID : 65497836287
 Status : Not Answered
 Chosen Option : --

Q.13 Two men can complete as much work as 3 women can do in a certain time. Ten men and 6 women can complete a work in 5 days. If 4 men and 9 women work together, then in how many days will they be able to complete the same work?

- Ans
- 1. 8
 - 2. 7
 - 3. $6\frac{1}{2}$
 - 4. $7\frac{1}{2}$

Question ID : 65497836273
 Status : Not Answered
 Chosen Option : --

Q.14 What is the average of eight smallest even natural numbers which are NOT divisible by 3?

- Ans
- 1. 12
 - 2. 11
 - 3. 9
 - 4. 8

Question ID : 65497836270
Status : Answered
Chosen Option : 1

Q.15 If $a : b = 9 : 7$, then what is $(11a-9b) : (2a+3b)$?

- Ans
- 1. 12 : 13
 - 2. 54 : 13
 - 3. 4 : 21
 - 4. 4 : 13

Question ID : 65497836265
Status : Answered
Chosen Option : 1

Q.16 What is the total surface area of a hemispherical solid having radius 14 cm?

(Use $\pi = \frac{22}{7}$)

- Ans
- 1. 1232 cm²
 - 2. 616 cm²
 - 3. 2352 cm²
 - 4. 1848 cm²

Question ID : 65497836267
Status : Answered
Chosen Option : 4

Q.17 A car was sold for ₹66,000 at a gain of 10%. Had it been sold for ₹600 more, then the percentage gain would have been:

- Ans
- 1. 15%
 - 2. 13%
 - 3. 11.5%
 - 4. 11%

Question ID : 65497836277
Status : Answered
Chosen Option : 4

Q.18 If the sum of the simple interest on ₹16,400 for 3 years at the rate of interest R and that on ₹18,000 for 4 years at the same rate R is ₹10,302, then the value of R will be:

- Ans**
- 1. 8%
 - 2. 9%
 - 3. 10.5%
 - 4. 8.5%

Question ID : 65497836276
Status : Answered
Chosen Option : 4

Q.19 A 320 m long train crosses a platform thrice its length in 90 seconds. What is the speed (in km/h) of the train?

- Ans**
- 1. 48
 - 2. 54
 - 3. 50.4
 - 4. 51.2

Question ID : 65497836280
Status : Answered
Chosen Option : 4

Q.20 The value of $25 - 4 \text{ of } (14.4 \div 9) + 16 \times 0.4$ is:

- Ans**
- 1. 5
 - 2. 0
 - 3. 25
 - 4. 20

Question ID : 65497836281
Status : Answered
Chosen Option : 3

Q.21 Six years ago, the ratio of the ages of A and B was 17 : 13, and the ratio of their present ages is 5 : 4. What will be the ratio of their ages after 4 years from now?

- Ans**
- 1. 4 : 3
 - 2. 3 : 2
 - 3. 9 : 5
 - 4. 11 : 9

Question ID : 65497836283
Status : Answered
Chosen Option : 4

Q.22 The average of 19 numbers is 46. The average of the first 5 numbers is 49 and the average of the next 6 numbers is 54. What is the average of the remaining numbers? (Correct to one decimal place)

- Ans**
- 1. 43.5
 - 2. 33.9
 - 3. 42.4
 - 4. 38.1

Question ID : 65497836282
Status : Answered
Chosen Option : 4

Q.23 A shopkeeper bought 200 notebooks at the rate of ₹80 for 5. He sold half of them at the cost price and the remaining notebooks at the rate of ₹100 for 5. What is his profit percentage?

- Ans**
- 1. 15%
 - 2. 10%
 - 3. 12.5%
 - 4. 12%

Question ID : 65497836264
Status : Answered
Chosen Option : 3

Q.24 A number p increased by $p\%$ of 99 equals 99 increased by 99% of p . What is $(p + 51)\%$ of $928 + 72$?

- Ans**
- 1. 1392
 - 2. 1500
 - 3. 1464
 - 4. 1371.2

Question ID : 65497836269
Status : Not Answered
Chosen Option : --

Q.25 If 200% of $k - (k + 2)\%$ of $50 = k$, then what is the value of k ?

- Ans**
- 1. $\frac{2}{3}$
 - 2. $\frac{100}{149}$
 - 3. 2
 - 4. 1

Question ID : 65497836272
Status : Answered
Chosen Option : 3

Section : Part D English

Q.1 The following sentence has been split into four segments. Identify the segment that contains a grammatical error.

When I got back / to the flat, / I found that / I was locked out.

- Ans
- 1. I found that
 - 2. to the flat
 - 3. I was locked out
 - 4. When I got back

Question ID : 65497836302
Status : Not Answered
Chosen Option : --

Q.2 The following sentence has been divided into parts. One of them may contain an error. Select the part that contains the error from the given options. If you don't find any error, mark 'No error' as your answer.

Mr. Sharma is one of / the best teacher / I have ever seen.

- Ans
- 1. the best teacher
 - 2. I have ever seen
 - 3. Mr. Sharma is one of
 - 4. No error

Question ID : 65497836289
Status : Answered
Chosen Option : 1

Q.3 Select the INCORRECTLY spelt word.

- Ans
- 1. Ommitted
 - 2. Committed
 - 3. Remitted
 - 4. Submitted

Question ID : 65497836305
Status : Marked For Review
Chosen Option : 1

Q.4 Select the most appropriate option to fill in the blank.

My grandmother is _____ to the bed.

- Ans
- 1. confined
 - 2. concealed
 - 3. concerned
 - 4. confirmed

Question ID : 65497836307
Status : Not Answered
Chosen Option : --

Q.5 Select the option that can be used as a one-word substitute for the given group of words.

Connected with the sense of touch

- Ans
- 1. Auditory
 - 2. Olfactory
 - 3. Visual
 - 4. Tactile

Question ID : 65497836304
Status : Answered
Chosen Option : 4

Q.6 Select the INCORRECTLY spelt word.

- Ans
- 1. Attention
 - 2. Immediate
 - 3. Appeal
 - 4. Arrogent

Question ID : 65497836306
Status : Answered
Chosen Option : 4

Q.7 Select the most appropriate option that can substitute the underlined word in the given sentence. If there is no need to substitute it, select 'No substitution required'.

There is two pens in the box.

- Ans
- 1. No substitution required
 - 2. have
 - 3. was
 - 4. are

Question ID : 65497836300
Status : Answered
Chosen Option : 4

Q.8 Select the option that will improve the underlined part of the given sentence. In case no improvement is needed, select 'No improvement required'.

What fun is it to ride a rollercoaster with friends!

- Ans
- 1. it is to ride
 - 2. No improvement required
 - 3. it is for riding
 - 4. is it riding

Question ID : 65497836295
Status : Marked For Review
Chosen Option : 2

Q.9 Select the most appropriate meaning of the given idiom.

Out of question

- Ans
- 1. Wishful
 - 2. Impossible
 - 3. Difficult
 - 4. Doubtful

Question ID : 65497836292
Status : Marked For Review
Chosen Option : 2

Q.10 Select the most appropriate option that can substitute the underlined segment in the given sentence. If there is no need to substitute it, select 'No substitution required'.

She made the shopkeeper to take back the damaged headset.

- Ans
- 1. take back
 - 2. taken back
 - 3. No substitution required
 - 4. taking back

Question ID : 65497836288
Status : Answered
Chosen Option : 1

Q.11 Select the option that is closest in meaning to the underlined idiom/phrase in the given sentence.

The teacher couldn't make head or tail of the student's answer.

- Ans
- 1. recommend
 - 2. understand
 - 3. overlook
 - 4. appreciate

Question ID : 65497836301
Status : Marked For Review
Chosen Option : 2

Q.12 Select the most appropriate ANTONYM of the given word.

Severe

- Ans
- 1. Short
 - 2. Sharp
 - 3. Narrow
 - 4. Mild

Question ID : 65497836293
Status : Answered
Chosen Option : 4

Q.13 Select the most appropriate synonym of the given word.

Bargain

- Ans 1. Deal
 2. Gain
 3. Dispute
 4. Disagreement

Question ID : 65497836297
Status : Marked For Review
Chosen Option : 1

Q.14 Select the most appropriate ANTONYM of the given word.

Originate

- Ans 1. Emerge
 2. Terminate
 3. Exist
 4. Continue

Question ID : 65497836303
Status : Answered
Chosen Option : 2

Q.15 Select the most appropriate option to fill in the blank.

Traffic _____ is a very serious problem in metro cities.

- Ans 1. congestion
 2. chain
 3. collection
 4. gathering

Question ID : 65497836299
Status : Answered
Chosen Option : 1

Q.16 Select the option that can be used as a one-word substitute for the given group of words.

One who makes an eloquent public speech

- Ans 1. Presenter
 2. Lecturer
 3. Orator
 4. Mentor

Question ID : 65497836298
Status : Answered
Chosen Option : 3

Q.17 Select the most appropriate option to fill in the blank.

When she _____ the hall, she was pleasantly surprised.

- Ans
- 1. appeared
 - 2. entered
 - 3. intruded
 - 4. arrived

Question ID : 65497836294
Status : Answered
Chosen Option : 2

Q.18 Select the most appropriate synonym of the given word.

Common

- Ans
- 1. Usual
 - 2. Scarce
 - 3. Particular
 - 4. Individual

Question ID : 65497836290
Status : Answered
Chosen Option : 1

Q.19 The following sentence has been split into four segments. Identify the segment that contains a grammatical error.

She arrived / at / Monday morning / to attend the marriage.

- Ans
- 1. to attend the marriage
 - 2. She arrived
 - 3. Monday morning
 - 4. at

Question ID : 65497836296
Status : Marked For Review
Chosen Option : 4

Q.20 Select the option that can be used as a one-word substitute for the given group of words.

Go or come after a person or thing proceeding ahead

- Ans
- 1. Race
 - 2. Follow
 - 3. Hunt
 - 4. Search

Question ID : 65497836291
Status : Answered
Chosen Option : 2

Comprehension:

In the following passage, some words have been deleted. Read the passage carefully and select the most appropriate option to fill in each blank.

Riding a bicycle, also called cycling, has a number of health (1)_____. Cycling is an aerobic activity, which means your heart, lungs and blood vessels all get a workout. It also helps (2)_____ stamina and physical strength. Another important advantage is that cycling helps (3)_____ endorphins or the feel-good chemicals in the brain (4)_____ help reduce stress levels. People who (5)_____ cycling as an exercise find that they have more energy for their day-to-day activities.

SubQuestion No : 21

Q.21 Select the most appropriate option to fill in blank no. 1.

- Ans 1. traits
 2. benefits
 3. credits
 4. values

Question ID : 65497836309
Status : Answered
Chosen Option : 2

Comprehension:

In the following passage, some words have been deleted. Read the passage carefully and select the most appropriate option to fill in each blank.

Riding a bicycle, also called cycling, has a number of health (1)_____. Cycling is an aerobic activity, which means your heart, lungs and blood vessels all get a workout. It also helps (2)_____ stamina and physical strength. Another important advantage is that cycling helps (3)_____ endorphins or the feel-good chemicals in the brain (4)_____ help reduce stress levels. People who (5)_____ cycling as an exercise find that they have more energy for their day-to-day activities.

SubQuestion No : 22

Q.22 Select the most appropriate option to fill in blank no. 2.

- Ans 1. build
 2. establish
 3. grow
 4. expand

Question ID : 65497836310
Status : Answered
Chosen Option : 1

Comprehension:

In the following passage, some words have been deleted. Read the passage carefully and select the most appropriate option to fill in each blank.

Riding a bicycle, also called cycling, has a number of health (1)_____. Cycling is an aerobic activity, which means your heart, lungs and blood vessels all get a workout. It also helps (2)_____ stamina and physical strength. Another important advantage is that cycling helps (3)_____ endorphins or the feel-good chemicals in the brain (4)_____ help reduce stress levels. People who (5)_____ cycling as an exercise find that they have more energy for their day-to-day activities.

SubQuestion No : 23

Q.23 Select the most appropriate option to fill in blank no. 3.

- Ans 1. clear
 2. leak
 3. release
 4. realise

Question ID : 65497836311
Status : Answered
Chosen Option : 3

Comprehension:

In the following passage, some words have been deleted. Read the passage carefully and select the most appropriate option to fill in each blank.

Riding a bicycle, also called cycling, has a number of health (1)_____. Cycling is an aerobic activity, which means your heart, lungs and blood vessels all get a workout. It also helps (2)_____ stamina and physical strength. Another important advantage is that cycling helps (3)_____ endorphins or the feel-good chemicals in the brain (4)_____ help reduce stress levels. People who (5)_____ cycling as an exercise find that they have more energy for their day-to-day activities.

SubQuestion No : 24

Q.24 Select the most appropriate option to fill in blank no. 4.

- Ans
- 1. thus
 - 2. such
 - 3. that
 - 4. who

Question ID : 65497836312
Status : Marked For Review
Chosen Option : 3

Comprehension:

In the following passage, some words have been deleted. Read the passage carefully and select the most appropriate option to fill in each blank.

Riding a bicycle, also called cycling, has a number of health (1)_____. Cycling is an aerobic activity, which means your heart, lungs and blood vessels all get a workout. It also helps (2)_____ stamina and physical strength. Another important advantage is that cycling helps (3)_____ endorphins or the feel-good chemicals in the brain (4)_____ help reduce stress levels. People who (5)_____ cycling as an exercise find that they have more energy for their day-to-day activities.

SubQuestion No : 25

Q.25 Select the most appropriate option to fill in blank no. 5.

- Ans
- 1. take off
 - 2. take up
 - 3. take out
 - 4. take after

Question ID : 65497836313
Status : Not Answered
Chosen Option : --

Section : Part D Hindi

Q.1 दिए गए शब्द के समानार्थी शब्द का चयन करें।

घोड़ा

- Ans
- 1. गय
 - 2. वारिज
 - 3. हय
 - 4. हरिवाहन

Question ID : 65497836325
Status : Not Answered
Chosen Option : --

Q.2 'खून सफेद हो जाना' मुहावरे का सही अर्थ क्या है?

- Ans
- 1. अत्याचार करना
 - 2. आश्चर्यचकित होना
 - 3. घृणा करना
 - 4. दया न रह जाना

Question ID : 65497836329
Status : Not Answered
Chosen Option : --

Q.3 रिक्त स्थान की पूर्ति करने के लिए सर्वाधिक उपयुक्त विकल्प का चयन करें।

मैंने _____ में सोचा कि ऐसा क्यों होता है।

- Ans
- 1. अन्तःकरण
 - 2. मन
 - 3. आत्मा
 - 4. चित्त

Question ID : 65497836332
Status : Not Answered
Chosen Option : --

Q.4 दिए गए वाक्य में रेखांकित खंड को प्रतिस्थापित करने के लिए सर्वाधिक उपयुक्त विकल्प का चयन करें। यदि इसे प्रतिस्थापित करने की आवश्यकता नहीं है, तो विकल्प 'किसी बदलाव की आवश्यकता नहीं है' का चयन करें।

उसकी आपबीती सुनकर मैं द्रविभूत हो गया।

- Ans
- 1. किसी बदलाव की आवश्यकता नहीं है।
 - 2. आपबीती सुनकर मैं द्रवीभूत हो गया।
 - 3. आपबिती सुनकर मैं द्रविभित हो गया।
 - 4. आपबीती सुनकर मैं द्रवीभूत हो गया।

Question ID : 65497836320
Status : Not Answered
Chosen Option : --

Q.5 दिए गए वाक्यांश के लिए एक सार्थक शब्द दीजिए।

जिसे तरने या पार जाने की इच्छा हो

- Ans
- 1. निरामिष
 - 2. मुमूर्षु
 - 3. तस्कर
 - 4. तितीर्षु

Question ID : 65497836317
Status : Not Answered
Chosen Option : --

Q.6 दिए गए शब्द के विलोम का चयन कीजिए।

न्यून

- Ans
- 1. बृहत
 - 2. अधिकतम
 - 3. अधिक
 - 4. अत्यत

Question ID : 65497836315
Status : Not Answered
Chosen Option : --

Q.7 दिए गए वाक्य का वह भाग ज्ञात करें जिसमें कोई त्रुटि है। यदि कोई त्रुटि नहीं है, तो 'कोई त्रुटि नहीं है' चुनें।

महापुरुषों के (1)/ उपदेशों को अपने (2)/ जीवन में प्रयोग करो (3)/ कोई त्रुटि नहीं है (4)

- Ans
- 1. 3
 - 2. 2
 - 3. 4
 - 4. 1

Question ID : 65497836324
Status : Not Answered
Chosen Option : --

Q.8 दिए गए वाक्य का वह भाग ज्ञात करें जिसमें कोई त्रुटि है। यदि कोई त्रुटि नहीं है, तो 'कोई त्रुटि नहीं है' चुनें।

कोयल की (1)/ कू कू सुनकर (2)/ मेरी नींद खुल गयी। (3)/ कोई त्रुटि नहीं है (4)

- Ans
- 1. 1
 - 2. 2
 - 3. 4
 - 4. 3

Question ID : 65497836322
Status : Not Answered
Chosen Option : --

Q.9 दिए गए वाक्य में रेखांकित अर्थ को प्रतिस्थापित करने के लिए सर्वाधिक उपयुक्त विकल्प का चयन करें।

स्कूल में व्याकरण की विद्या दी जाती है।

- Ans
- 1. बुद्धि
 - 2. दीक्षा
 - 3. ज्ञान
 - 4. शिक्षा

Question ID : 65497836333
Status : Not Answered
Chosen Option : --

Q.10 निम्नलिखित में से शुद्ध वर्तनी वाला शब्द कौन सा है?

- Ans
- 1. अनीष्ठ
 - 2. अनिष्ठ
 - 3. अनीष्ट
 - 4. अनिष्ट

Question ID : 65497836331
Status : Not Answered
Chosen Option : --

Q.11 रिक्त स्थान की पूर्ति करने के लिए सर्वाधिक उपयुक्त शब्द का चयन कीजिए।

भारत _____ देश है।

- Ans
- 1. धर्मनिरपेक्ष
 - 2. अपक्ष
 - 3. असहिष्णु
 - 4. सापेक्ष

Question ID : 65497836319
Status : Not Answered
Chosen Option : --

Q.12 'अनुरक्ति' का विलोम शब्द क्या होगा?

- Ans
- 1. आसक्ति
 - 2. भक्ति
 - 3. शक्ति
 - 4. विरक्ति

Question ID : 65497836328
Status : Not Answered
Chosen Option : --

Q.13 दिए गए शब्द के समानार्थी शब्द का चयन करें।

लक्ष्मी

- Ans
- 1. ब्राह्मी
 - 2. शैलसुता
 - 3. कालिका
 - 4. पद्मा

Question ID : 65497836323
Status : Not Answered
Chosen Option : --

Q.14 रिक्त स्थान की पूर्ति करने के लिए सर्वाधिक उपयुक्त शब्द का चयन कीजिए।

_____ अपनी-अपनी सेनाएं लेकर आए।

- Ans
- 1. राजा
 - 2. अध्यापक
 - 3. नेता
 - 4. राजे

Question ID : 65497836318
Status : Not Answered
Chosen Option : --

Q.15 'जिसके हाथ में चक्र है' इस वाक्यांश के लिए एक सार्थक शब्द का चयन कीजिए।

- Ans
- 1. चंद्रशेखर
 - 2. चक्रधर
 - 3. चंद्रचूड़
 - 4. चक्रपाणि

Question ID : 65497836316
Status : Not Answered
Chosen Option : --

Q.16 दिए गए वाक्य में रेखांकित खंड को प्रतिस्थापित करने के लिए सर्वाधिक उपयुक्त विकल्प का चयन करें। यदि इसे प्रतिस्थापित करने की आवश्यकता नहीं है, तो विकल्प 'किसी बदलाव की आवश्यकता नहीं है' का चयन करें।

आजकल अफवाहों पर हरेक कोई विश्वास कर डालता है।

- Ans
- 1. हरेक विश्वास कर डालता है।
 - 2. हर कोई विश्वास कर डालता है।
 - 3. किसी बदलाव की आवश्यकता नहीं है।
 - 4. हर कोई विश्वास कर लेता है।

Question ID : 65497836321
Status : Not Answered
Chosen Option : --

Q.17 दिए गए वाक्यांश के लिए एक शब्द दीजिए।

जो ईश्वर में विश्वास रखता हो

- Ans
- 1. आस्तिक
 - 2. वास्तविक
 - 3. नास्तिक
 - 4. सात्विक

Question ID : 65497836326
Status : Not Answered
Chosen Option : --

Q.18 दिए गए वाक्य का वह भाग ज्ञात करें जिसमें कोई त्रुटि है। यदि कोई त्रुटि नहीं है, तो 'कोई त्रुटि नहीं है' चुनें।

वहाँ बहुत से पशु और पक्षी (1) उड़ते और चरते हुए (2) दिखाई दिए। (3) कोई त्रुटि नहीं है (4)

- Ans
- 1. 3
 - 2. 2
 - 3. 1
 - 4. 4

Question ID : 65497836314
Status : Not Answered
Chosen Option : --

Q.19 'आखें चार होना' मुहावरे का सही अर्थ क्या है?

- Ans 1. आमने-सामने होना
 2. घूरना
 3. लज्जित होना
 4. आकर्षित होना

Question ID : 65497836327
Status : Not Answered
Chosen Option : --

Q.20 निम्नलिखित में से शुद्ध वर्तनी वाला शब्द कौन सा है?

- Ans 1. नीरिह
 2. नीरीह
 3. निरीह
 4. निरिह

Question ID : 65497836330
Status : Not Answered
Chosen Option : --

Comprehension:

दिए गए गद्यांश में कुछ शब्द हटा दिए गए हैं। दिए गए विकल्पों की सहायता से रिक्त स्थानों की पूर्ति करें। प्रत्येक प्रश्न सख्या के लिए सर्वाधिक उपयुक्त विकल्प का चयन कीजिए।

जिज्ञासा मनुष्य की (1) _____ प्रवृत्ति है और आनन्द प्राप्ति उसकी स्वाभाविक (2) _____। घोर से घोर (3) _____ मनुष्य में भी ये दोनों प्रवृत्तियाँ स्वाभाविक और जन्म-जात हैं। उनका सतोषजनक (4) _____ न होने पर मनुष्य में एक ओर तो (5) _____ उत्पन्न होती है और दूसरी ओर भय, निराशा और अवसाद।

SubQuestion No : 21

Q.21 गद्यांश के रिक्त स्थान (1) के लिए सर्वाधिक उपयुक्त शब्द होगा-

- Ans 1. अनौपचारिक
 2. औपचारिक
 3. स्वाभाविक
 4. अस्वाभाविक

Question ID : 65497836335
Status : Not Answered
Chosen Option : --

Comprehension:

दिए गए गद्यांश में कुछ शब्द हटा दिए गए हैं। दिए गए विकल्पों की सहायता से रिक्त स्थानों की पूर्ति करें। प्रत्येक प्रश्न सख्या के लिए सर्वाधिक उपयुक्त विकल्प का चयन कीजिए।

जिज्ञासा मनुष्य की (1) _____ प्रवृत्ति है और आनन्द प्राप्ति उसकी स्वाभाविक (2) _____। घोर से घोर (3) _____ मनुष्य में भी ये दोनों प्रवृत्तियाँ स्वाभाविक और जन्म-जात हैं। उनका सतोषजनक (4) _____ न होने पर मनुष्य में एक ओर तो (5) _____ उत्पन्न होती है और दूसरी ओर भय, निराशा और अवसाद।

SubQuestion No : 22

Q.22 गद्यांश के रिक्त स्थान (2) के लिए सर्वाधिक उपयुक्त शब्द होगा-

- Ans 1. अर्वा
 2. कामना
 3. निर्वृ
 4. जिज्ञासा

Question ID : 65497836336
Status : Not Answered
Chosen Option : --

Comprehension:

दिए गए गद्यांश में कुछ शब्द हटा दिए गए हैं। दिए गए विकल्पों की सहायता से रिक्त स्थानों की पूर्ति करें। प्रत्येक प्रश्न सख्या के लिए सर्वाधिक उपयुक्त विकल्प का चयन कीजिए।

जिज्ञासा मनुष्य की (1) _____ प्रवृत्ति है और आनंद प्राप्ति उसकी स्वाभाविक (2) _____। घोर से घोर (3) _____ मनुष्य में भी ये दोनों प्रवृत्तियाँ स्वाभाविक और जन्म-जात हैं। उनका सतोषजनक (4) _____ न होने पर मनुष्य में एक ओर तो (5) _____ उत्पन्न होती है और दूसरी ओर भय, निराशा और अवसाद।

SubQuestion No : 23

Q.23 गद्यांश के रिक्त स्थान (3) के लिए सर्वाधिक उपयुक्त शब्द होगा-

- Ans**
- 1. आर्थिक
 - 2. सामाजिक
 - 3. राजनीतिक
 - 4. भौतिकवादी

Question ID : 65497836337

Status : Not Answered

Chosen Option : --

Comprehension:

दिए गए गद्यांश में कुछ शब्द हटा दिए गए हैं। दिए गए विकल्पों की सहायता से रिक्त स्थानों की पूर्ति करें। प्रत्येक प्रश्न सख्या के लिए सर्वाधिक उपयुक्त विकल्प का चयन कीजिए।

जिज्ञासा मनुष्य की (1) _____ प्रवृत्ति है और आनंद प्राप्ति उसकी स्वाभाविक (2) _____। घोर से घोर (3) _____ मनुष्य में भी ये दोनों प्रवृत्तियाँ स्वाभाविक और जन्म-जात हैं। उनका सतोषजनक (4) _____ न होने पर मनुष्य में एक ओर तो (5) _____ उत्पन्न होती है और दूसरी ओर भय, निराशा और अवसाद।

SubQuestion No : 24

Q.24 गद्यांश के रिक्त स्थान (4) के लिए सर्वाधिक उपयुक्त शब्द होगा-

- Ans**
- 1. गमन
 - 2. शमन
 - 3. निवारण
 - 4. उद्वेलन

Question ID : 65497836338

Status : Not Answered

Chosen Option : --

Comprehension:

दिए गए गद्यांश में कुछ शब्द हटा दिए गए हैं। दिए गए विकल्पों की सहायता से रिक्त स्थानों की पूर्ति करें। प्रत्येक प्रश्न सख्या के लिए सर्वाधिक उपयुक्त विकल्प का चयन कीजिए।

जिज्ञासा मनुष्य की (1) _____ प्रवृत्ति है और आनंद प्राप्ति उसकी स्वाभाविक (2) _____। घोर से घोर (3) _____ मनुष्य में भी ये दोनों प्रवृत्तियाँ स्वाभाविक और जन्म-जात हैं। उनका सतोषजनक (4) _____ न होने पर मनुष्य में एक ओर तो (5) _____ उत्पन्न होती है और दूसरी ओर भय, निराशा और अवसाद।

SubQuestion No : 25

Q.25 गद्यांश के रिक्त स्थान (5) के लिए सर्वाधिक उपयुक्त शब्द होगा-

- Ans**
- 1. सुआवस्था
 - 2. दुरावस्था
 - 3. आस्था
 - 4. अनास्था

Question ID : 65497836339

Status : Not Answered

Chosen Option : --