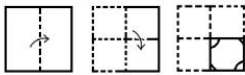


Exam Date	30/11/2021
Exam Time :	9:00 AM - 10:30 AM
Subject	Constable GD 2021

Section : **Part A General Intelligence and Reasoning**

Q.1 The sequence of folding a piece of paper and the manner in which the folded paper has been cut is shown in the following figures. How would this paper look when unfolded?



Ans

- 1.
- 2.
- 3.
- 4.

Question ID : 65497831776
 Status : Answered
 Chosen Option : 4

Q.2 In a certain code language, DANGER is written as EDSHHW. How will SPEEDY be written in that language?

- 1. TSIFGD
- 2. TSJEGE
- 3. TSIEGE
- 4. TSJFGD

Question ID : 65497831772
 Status : Answered
 Chosen Option : 2

Q.3 Select the option that is related to the third number in the same way as the second number is related to the first number.

129 : 216 :: 165 : ?

- Ans 1. 252
 2. 306
 3. 269
 4. 348

Question ID : 65497831785
Status : Answered
Chosen Option : 1

Q.4 Select the option that is related to the third term in the same way as the second term is related to the first term.

BUMP : NOSD :: PICK : ?

- Ans 1. GIAR
 2. QJBX
 3. LGDL
 4. IEGR

Question ID : 65497831777
Status : Answered
Chosen Option : 4

Q.5 Select the correct combination of mathematical signs that can sequentially replace the (?) signs and make the given equation correct.

72 ? 18 ? 11 ? 44

- Ans 1. ×, +, =
 2. +, ×, =
 3. ×, +, =
 4. +, -, =

Question ID : 65497831786
Status : Answered
Chosen Option : 2

Q.6 'Sword' is related to 'Weapon' in the same way as 'Necklace' is related to '_____'.
Ans 1. Jewellery
 2. Goldsmith
 3. Women
 4. Neck

Question ID : 65497831790
Status : Answered
Chosen Option : 1

Q.7 Select the option in which the given figure is embedded (rotation is NOT allowed).



Ans


1.



2.



3.



4.



Question ID : 65497831788
Status : Answered
Chosen Option : 1

Q.8 Select the letter-cluster from among the given options that can replace the question mark (?) in the following series.

DQH, HUL, MZQ, SFW, ?

Ans 1. ZMD

2. ZNE

3. ZLC

4. YMC

Question ID : 65497831789
Status : Answered
Chosen Option : 1

Q.9 Select the number from among the given options that can replace the question mark (?) in the following series.

13, 15, 12, 17, 10, 21, 8, ?

Ans 1. 24

2. 22

3. 23

4. 25

Question ID : 65497831782
Status : Answered
Chosen Option : 1

Q.10 P, Q, R, S, T and U are six members in a family. P is the husband of Q. U is the brother of Q. R is the son of the only brother of Q. S is the sister of T. P is the father of S. How is U related to T?

- Ans
- 1. Cousin
 - 2. Brother
 - 3. Paternal uncle
 - 4. Maternal uncle

Question ID : 65497831779
 Status : Answered
 Chosen Option : 4

Q.11 The cost of an apple is four less than twice the cost of a banana, and that of a papaya is half the cost of an apple. If the total cost of the fruits is ₹150, then what is the cost of a banana?

- Ans
- 1. ₹33
 - 2. ₹36
 - 3. ₹39
 - 4. ₹42

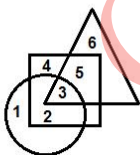
Question ID : 65497831775
 Status : Not Attempted and Marked For Review
 Chosen Option : --

Q.12 Four persons A, B, C and D are playing carrom. A is to the immediate left of C. D is to the immediate right of B. Which statement shows the correct position of A?

- Ans
- 1. Opposite B
 - 2. Opposite D
 - 3. Immediate left of B
 - 4. Opposite C

Question ID : 65497831791
 Status : Answered
 Chosen Option : 1

Q.13 In the following diagram, the 'circle' stands for 'soldiers', the 'square' stands for 'Indians', and the 'triangle' stands for 'singers'. The numbers given in the different segments represent persons belonging to that category.



Which category is represented by the number '5'?

- Ans
- 1. Indian singers who are not soldiers
 - 2. Indian soldiers who are not singers
 - 3. Indians who are neither singers nor soldiers
 - 4. Indian singers who are soldiers

Question ID : 65497831792
 Status : Answered
 Chosen Option : 1

Q.14 Select the correct option that indicates the arrangement of the given words in the order in which they appear in an English dictionary.

1. Terminus
2. Therefore
3. Terrace
4. Thesis
5. Thiamine

- Ans
- 1. 1, 2, 3, 4, 5
 - 2. 1, 3, 2, 4, 5
 - 3. 1, 2, 4, 3, 5
 - 4. 1, 5, 2, 4, 3

Question ID : 65497831780
Status : Answered
Chosen Option : 2

Q.15 Four letter-clusters have been given, out of which three are alike in some manner and one is different. Select the letter-cluster that is different.

- Ans
- 1. HFDZX
 - 2. CAYWU
 - 3. TRPNL
 - 4. OMKIG

Question ID : 65497831768
Status : Answered
Chosen Option : 4

Q.16 Six people, K, L, M, N, O and P, are sitting on the ground in a hexagonal shape but not necessarily in the same order. K is not sitting next to L or M. N is not sitting next to M or O. L is the neighbour of M. P is in the middle of M and N. What is the correct order of seating positions of the people in clockwise direction?

- Ans
- 1. L-M-P-N-K-O
 - 2. L-N-O-K-M-P
 - 3. L-O-K-P-M-N
 - 4. L-M-N-P-K-O

Question ID : 65497831784
Status : Not Attempted and Marked For Review
Chosen Option : --

Q.17 In a certain code language, 'VENDOR' is written as 'TMFLGT'. How will 'CUSTOM' be written in that language?

- Ans
- 1. BSTSPA
 - 2. DTVQPN
 - 3. OMVQWA
 - 4. OTVQMW

Question ID : 65497831778
Status : Not Answered
Chosen Option : --

Q.18 Read the given statements and conclusions carefully. Assuming that the information given in the statements is true, even if it appears to be at variance with commonly known facts, decide which of the given conclusions logically follow(s) from the statements.

Statements:

All guavas are pears.
Some kiwis are pears.

Conclusions:

I. Some kiwis are guavas.
II. Some pears are kiwis.

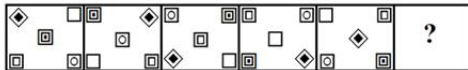
- Ans**
- 1. Both conclusions I and II follow
 - 2. Only conclusion II follows
 - 3. Neither conclusion I nor II follows
 - 4. Only conclusion I follows

Question ID : 65497831773

Status : Answered

Chosen Option : 2

Q.19 Select the figure from among the given options that can replace the question mark (?) in the following series.



Ans

- 1.
- 2.
- 3.
- 4.

Question ID : 65497831783

Status : Answered

Chosen Option : 3

Q.20 Select the correct mirror image of the given combination when the mirror is placed at the right side.

f h d B 3 1

- Ans
- 1. f h d B 3 1
 - 2. f h d B 3 1
 - 3. f h d B 3 1
 - 4. f h d B 3 1

Question ID : 65497831771

Status : Answered

Chosen Option : 4

Q.21 Study the given pattern carefully and select the number that can replace the question mark (?) in it.

13 30 34
27 ? 14
19 30 22

- Ans
- 1. 30
 - 2. 34
 - 3. 32
 - 4. 36

Question ID : 65497831774

Status : Not Answered

Chosen Option : --

Q.22 Select the number from among the given options that can replace the question mark (?) in the following series.

14, 16, 22, 34, 54, 84, ?

- Ans
- 1. 126
 - 2. 148
 - 3. 121
 - 4. 112

Question ID : 65497831770

Status : Answered

Chosen Option : 1

Q.23 Select the combination of letters that when sequentially placed in the blanks of the given series will complete the series.

L_PO_LO_OK_OP_KL_POK

- Ans
- 1. O, K, P, L, O, O
 - 2. O, P, O, K, O, L
 - 3. O, P, K, O, L, O
 - 4. O, O, P, K, L, O

Question ID : 65497831781

Status : Answered

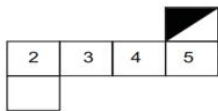
Chosen Option : 1

Q.24 In a certain code language, 'SOBER' is coded as '64' and 'NOSTALGIA' is coded as '107'. How will 'REPAIR' be coded in that language?

- Ans
- 1. 83
 - 2. 67
 - 3. 73
 - 4. 80

Question ID : 65497831769
 Status : Not Answered
 Chosen Option : --

Q.25 Choose the box that is not similar to the box formed from the given sheet of paper when it is folded.



Ans

- 1.
- 2.
- 3.
- 4.

Question ID : 65497831787
 Status : Answered
 Chosen Option : 1

Section : Part B General Knowledge and General Awareness

Q.1 The Mughals were proud of their Timurid ancestry. How did they celebrate this?

- Ans
- 1. By holding events like horse racing and shooting
 - 2. By declaring a particular day as a holiday in the country
 - 3. By each ruler getting a picture made of Timur and himself
 - 4. By dedicating the day to soldiers

Question ID : 65497831808
 Status : Not Answered
 Chosen Option : --

Q.2 Which of the following chemicals is known as vinegar?

- Ans
- 1. Oxalic acid
 - 2. Formic acid
 - 3. Acetic acid
 - 4. Tartaric acid

Question ID : 65497831812
Status : Answered
Chosen Option : 3

Q.3 With which of the following dance forms is Laxmi Narayana Sastri associated?

- Ans
- 1. Odissi
 - 2. Kathak
 - 3. Kuchipudi
 - 4. Mohiniyattam

Question ID : 65497831810
Status : Not Answered
Chosen Option : --

Q.4 When did the rules under the Fiscal Responsibility and Budget Management Act come into force?

- Ans
- 1. July 2004
 - 2. August 2004
 - 3. August 2003
 - 4. July 2003

Question ID : 65497831802
Status : Not Answered
Chosen Option : --

Q.5 Emma Raducanu is a professional tennis player from _____.

- Ans
- 1. The US
 - 2. Canada
 - 3. Croatia
 - 4. The UK

Question ID : 65497831817
Status : Not Answered
Chosen Option : --

Q.6 Who among the following was a Portuguese viceroy in India?

- Ans
- 1. Robert Clive
 - 2. Comte de Lally
 - 3. Francisco de Almeida
 - 4. Francois Dupleix

Question ID : 65497831801
Status : Not Answered
Chosen Option : --

Q.7 The Constitution (One Hundred and Twenty-Sixth Amendment) Bill, 2019 aims to retain the inclusive character as envisioned by the founding fathers of the Constitution of India by continuing the reservation of seats for the scheduled castes and the scheduled tribes up to _____.

- Ans
- 1. 25 January 2035
 - 2. 25 January 2025
 - 3. 25 January 2040
 - 4. 25 January 2030

Question ID : **65497831814**
Status : **Not Answered**
Chosen Option : --

Q.8 Laterite soil is poor in oxides of which among the following?

- Ans
- 1. Aluminium
 - 2. Titanium
 - 3. Iron
 - 4. Silicon

Question ID : **65497831797**
Status : **Not Answered**
Chosen Option : --

Q.9 Who wrote 'Gita Rahasya', which is a commentary on the Bhagavad-Gita, in the Mandalay jail of Myanmar?

- Ans
- 1. Bal Gangadhar Tilak
 - 2. Subhas Chandra Bose
 - 3. Aurobindo Ghosh
 - 4. Lala Lajpat Rai

Question ID : **65497831813**
Status : **Not Answered**
Chosen Option : --

Q.10 Who chaired 'Aarogya Manthan' 2.0 to celebrate the 2nd anniversary of Ayushman Bharat-Pradhan Mantri Jan Aarogya Yojana?

- Ans
- 1. Dr Ashwini Kumar Choubey
 - 2. Amit Shah
 - 3. Dr Harsh Vardhan
 - 4. Dr Indu Bhushan

Question ID : **65497831809**
Status : **Answered**
Chosen Option : **2**

Q.11 Which of the following is a multicellular organism?

- Ans
- 1. Paramecium
 - 2. Amoeba
 - 3. Sponge
 - 4. Chlamydomonas

Question ID : **65497831811**
Status : **Not Answered**
Chosen Option : --

Q.12 Neil Nongkynrih is a concert pianist and founder of _____ from India.

- Ans
- 1. East Parade Malayalam Choir
 - 2. Indian Fusion Chamber Choir
 - 3. Shillong Chamber Choir
 - 4. The Mozart Choir of India

Question ID : 65497831793
Status : Not Answered
Chosen Option : --

Q.13 What do you call a region with a large number of deep gullies or ravines?

- Ans
- 1. Badland topography
 - 2. Arid topography
 - 3. Humus region
 - 4. Peninsular region

Question ID : 65497831794
Status : Not Answered
Chosen Option : --

Q.14 _____ has launched its new brand campaign titled 'Contactless Connections', in October 2020.

- Ans
- 1. Contactless PNB Card
 - 2. Contactless ICICI Card
 - 3. Contactless SBI Card
 - 4. Contactless Canara Card

Question ID : 65497831806
Status : Not Answered
Chosen Option : --

Q.15 In which year was the Badminton Association of India formed?

- Ans
- 1. 1967
 - 2. 1956
 - 3. 1934
 - 4. 1978

Question ID : 65497831798
Status : Not Answered
Chosen Option : --

Q.16 According to the Union Budget 2020, when will India host G20 presidency?

- Ans
- 1. 2022
 - 2. 2023
 - 3. 2020
 - 4. 2021

Question ID : 65497831800
Status : Not Answered
Chosen Option : --

Q.17 How many drugs were removed from the National List of Essential Medicines (NLEM) in September 2021?

- Ans 1. 16
 2. 19
 3. 39
 4. 36

Question ID : 65497831815
Status : Not Answered
Chosen Option : --

Q.18 Which of the following countries has the world's largest ice rink called 'Rideau Canal'?

- Ans 1. Canada
 2. Switzerland
 3. Russia
 4. The US

Question ID : 65497831796
Status : Not Answered
Chosen Option : --

Q.19 According to which amended Act, can sons, daughters and their mothers get an equal share of family property?

- Ans 1. Hindu Amendment Act 1950
 2. Hindu Act 1956
 3. Hindu Succession Amendment Act 2005
 4. Hindu Succession Act 1950

Question ID : 65497831805
Status : Not Answered
Chosen Option : --

Q.20 Who among the following is the author of the book 'Letters to Mother'?

- Ans 1. Narendra Modi
 2. Jawaharlal Nehru
 3. Manmohan Singh
 4. PV Narsimha Rao

Question ID : 65497831795
Status : Not Answered
Chosen Option : --

Q.21 Which of the following banks signed a \$1 billion loan agreement with Japan Bank for International Cooperation in October 2020?

- Ans 1. Bank of Baroda
 2. Industrial Development Bank of India
 3. Punjab National Bank
 4. State Bank of India

Question ID : 65497831799
Status : Not Answered
Chosen Option : --

Q.22 Change of a liquid into gas at any temperature below its boiling point is called:

- Ans
- 1. crystallisation
 - 2. evaporation
 - 3. deposition
 - 4. condensation

Question ID : 65497831807
Status : Answered
Chosen Option : 2

Q.23 Which of the following conditions could harm tea plantations?

- Ans
- 1. Temperature above 35°C
 - 2. Rainfall ranging between 150-300 cm
 - 3. Hot and wet climate
 - 4. Plantations along shady trees

Question ID : 65497831816
Status : Not Answered
Chosen Option : --

Q.24 The Persian chronicles described the Muslim Sultans as:

- Ans
- 1. The Incarnation of God
 - 2. The Shadow of God
 - 3. The Disciple of God
 - 4. The Follower of God

Question ID : 65497831803
Status : Not Answered
Chosen Option : --

Q.25 The Mughal Empire had started facing a crisis towards the end of the 17th century. Which of the following was NOT a factor for it?

- Ans
- 1. Aurangzeb had depleted the military and financial resources of his empire by fighting a long war in the Deccan.
 - 2. Under the successors of Aurangzeb, the efficiency of the imperial administration broke down.
 - 3. The later Mughals kept a good check on their powerful 'mansabdars'.
 - 4. The peasant and zamindari rebellions in many parts of North and West India added to the problems.

Question ID : 65497831804
Status : Not Answered
Chosen Option : --

Section : Part C Elementary Mathematics

Q.1 The curved surface area of a cylinder is 96 cm^2 and its volume is 672 cm^3 . Its diameter is:

- Ans
- 1. 32 cm
 - 2. 26 cm
 - 3. 24 cm
 - 4. 28 cm

Question ID : 65497831820
Status : Not Answered
Chosen Option : --

Q.2 If $3 \text{ of } 5 \div 2 + \frac{3x}{1 + \frac{12}{2 + \frac{2x}{1-x}}} = 12\frac{1}{2}$, what is the value of x ?

- Ans
- ✓ 1. $\frac{35}{33}$
 - ✗ 2. $\frac{25}{13}$
 - ✗ 3. $\frac{34}{33}$
 - ✗ 4. $\frac{15}{11}$

Question ID : 65497831831
Status : Not Answered
Chosen Option : --

Q.3 Find CI on ₹8,000 at 15% for 2 years 4 months compounded annually.

- Ans
- ✗ 1. ₹12,008
 - ✗ 2. ₹1,264
 - ✗ 3. ₹11,109
 - ✓ 4. ₹3,109

Question ID : 65497831826
Status : Answered
Chosen Option : 4

Q.4 The list price of a fan is ₹4,500 and it is sold at 15% discount. If its final selling price, after allowing a second discount percentage on the list price, is ₹3,213, then the second discount percentage is:

- Ans
- ✗ 1. 15%
 - ✓ 2. 16%
 - ✗ 3. 12%
 - ✗ 4. 18%

Question ID : 65497831839
Status : Answered
Chosen Option : 2

Q.5 A certain number of men complete a piece of work in 60 days. If there were 9 more men, then the work would be completed in 50 days. How many men are originally there?

- Ans
- ✓ 1. 45
 - ✗ 2. 55
 - ✗ 3. 48
 - ✗ 4. 42

Question ID : 65497831830
Status : Answered
Chosen Option : 1

Q.6 When 154 l of oil is removed from an upright cylindrical tank, the level falls down by 10 cm. What is the diameter (in cm) of the tank?

(Take $\pi = \frac{22}{7}$)

- Ans**
- 1. 220
 - 2. 140
 - 3. 100
 - 4. 70

Question ID : 65497831827
Status : Not Answered
Chosen Option : --

Q.7 Bike A moving at a speed of 30 km/h covers some distance for 2 hours, while another bike B moving at a speed of 35 km/h covers the same distance as bike A. What is the ratio of the time taken by bike A to that taken by bike B?

- Ans**
- 1. 5 : 6
 - 2. 8 : 5
 - 3. 6 : 7
 - 4. 7 : 6

Question ID : 65497831832
Status : Answered
Chosen Option : 4

Q.8 In an election, a candidate got 75% of the total valid votes. If 20% of the total votes were declared invalid, and the total numbers of votes is 560000, find the number of valid votes polled in favour of the candidate.

- Ans**
- 1. 363000
 - 2. 330000
 - 3. 336000
 - 4. 346000

Question ID : 65497831824
Status : Answered
Chosen Option : 3

Q.9 Vessels A and B contain solutions of acid and water. The ratio of acid and water in vessel A is 7 : 5 and that in vessel B is 11 : 13. Four litres of solution from vessel A is mixed with 5 litres of solution from vessel B. What is the ratio of acid and water in the mixture?

- Ans**
- 1. 35 : 37
 - 2. 22 : 21
 - 3. 37 : 35
 - 4. 21 : 22

Question ID : 65497831836
Status : Answered
Chosen Option : 3

Q.10 The average weight of 20 students in a group is 54 kg. If 12 students of average weight 52 kg join the group and 7 students of average weight 56 kg leave the group, then what will be the average weight (in kg) of the remaining students in the group?

- Ans**
- 1. 53.84
 - 2. 51.96
 - 3. 52.48
 - 4. 54.24

Question ID : **65497831835**
Status : **Not Answered**
Chosen Option : --

Q.11 The time taken by a boat to go 34 km upstream is 25% more than the time it takes to go 40 km downstream. If the speed of the stream is 4 km/h, then what is the speed (in km/h) of the boat in still water?

- Ans**
- 1. 21
 - 2. 24
 - 3. 20
 - 4. 22

Question ID : **65497831842**
Status : **Not Attempted and Marked For Review**
Chosen Option : --

Q.12 A sum of money becomes ₹12,600 after 6 years and ₹21,000 after 9 years on compound interest. The sum invested is:

- Ans**
- 1. ₹4,500
 - 2. ₹4,600
 - 3. ₹4,536
 - 4. ₹4,436

Question ID : **65497831822**
Status : **Not Attempted and Marked For Review**
Chosen Option : --

Q.13 8 pens and 14 pencils cost as much as 12 pens and 5 pencils. The ratio of the cost of one pen to the cost of one pencil is:

- Ans**
- 1. 9 : 5
 - 2. 9 : 4
 - 3. 7 : 5
 - 4. 8 : 5

Question ID : **65497831819**
Status : **Not Answered**
Chosen Option : --

Q.14 The income of X is 20% less than the income of Y, and the income of Z is 35% less than the combined incomes of X and Y. By what percentage is the income of Z more than that of X?

- Ans** 1. 46.25%
 2. 38.8%
 3. 31.6%
 4. 45.5%

Question ID : **65497831840**
Status : **Not Answered**
Chosen Option : --

Q.15 A sum amounts to ₹4,260 in 5 years at the rate of 4% p.a. simple interest. What will be the simple interest (in ₹, nearest to a ₹) on the same sum for $4\frac{1}{5}$ years at the rate of $8\frac{1}{2}$ % p.a.?

- Ans** 1. 1,250
 2. 1,267
 3. 1,285
 4. 1,271

Question ID : **65497831837**
Status : **Not Attempted and Marked For Review**
Chosen Option : --

Q.16 The total cost price of a watch and a fan is ₹1,170. Rama sells the watch at a profit of 20% and the fan at a profit of 25%. If he earns a total profit of ₹265, then the cost price of the watch is:

- Ans** 1. ₹550
 2. ₹480
 3. ₹450
 4. ₹620

Question ID : **65497831833**
Status : **Answered**
Chosen Option : 1

Q.17 A shopkeeper offers successive discounts of 10% and k%. Customers get items marked at ₹1,200 for ₹864. What is the value of k?

- Ans** 1. 15
 2. 20
 3. 80
 4. 25

Question ID : **65497831818**
Status : **Answered**
Chosen Option : 2

Q.18 Simplify $2 - \left[\frac{1}{2} + \frac{1}{4} + \frac{1}{6} \div \left(\frac{3}{4} - \frac{1}{2} \right) \right]$.

- Ans
- 1. $\frac{7}{12}$
 - 2. $\frac{1}{12}$
 - 3. $\frac{17}{12}$
 - 4. $\frac{11}{12}$

Question ID : 65497831828
 Status : Answered
 Chosen Option : 1

Q.19 The average weight of students in a class was 58.5 kg. When 8 more students with average weight of 64.5 kg joined the class, then the average weight of all the students increased by 0.96 kg. What was the number of students, initially, in the class?

- Ans
- 1. 40
 - 2. 32
 - 3. 37
 - 4. 42

Question ID : 65497831838
 Status : Not Answered
 Chosen Option : --

Q.20 An article was sold at $x\%$ profit for ₹875. When the same article was sold for ₹896, the profit made was 3% more than the previous profit. The value of x is:

- Ans
- 1. 30
 - 2. 24
 - 3. 25
 - 4. 20

Question ID : 65497831821
 Status : Answered
 Chosen Option : 3

Q.21 Three persons start a morning walk together. Their steps measure 70 cm, 75 cm and 80 cm, respectively. What is the minimum distance each should walk, so that all of them can cover the same distance in complete steps?

- Ans
- 1. 8800 cm
 - 2. 8400 cm
 - 3. 6400 cm
 - 4. 8000 cm

Question ID : 65497831823
 Status : Answered
 Chosen Option : 2

Q.22 Kohli deals with second-hand goods. He bought a second-hand AC for ₹10,000. He spent ₹500 on transport and ₹2,000 on its repair and sold it for ₹15,000. What is his gain or loss percentage?

- Ans**
- 1. 20% gain
 - 2. 18% gain
 - 3. 18% loss
 - 4. 20% loss

Question ID : 65497831829
Status : Answered
Chosen Option : 1

Q.23 A group of persons can complete a piece of work in a certain time. If there were 4 more persons, they would take 2 days less to complete it. If there were 6 persons less, they would take 4 days more to complete it. What is the number of persons, initially, in the group?

- Ans**
- 1. 40
 - 2. 45
 - 3. 36
 - 4. 32

Question ID : 65497831841
Status : Not Answered
Chosen Option : --

Q.24 x is the smallest number of 5-digits which when divided by 10, 15, 24, 35 and 42, leaves a remainder 7 in each case. The sum of the digits of x is:

- Ans**
- 1. 18
 - 2. 19
 - 3. 13
 - 4. 16

Question ID : 65497831834
Status : Not Answered
Chosen Option : --

Q.25 Two numbers are, respectively, 20% and 50% more than a third number. The ratio of the first 2 numbers is:

- Ans**
- 1. 2 : 3
 - 2. 1 : 1
 - 3. 4 : 5
 - 4. 5 : 6

Question ID : 65497831825
Status : Answered
Chosen Option : 3

Section : Part D English

Q.1 Select the most appropriate meaning of the given idiom.

Bite someone's head off

- Ans
- 1. Ask someone the same question again and again
 - 2. Go on repeating the same point
 - 3. Scold someone for misbehaving
 - 4. Speak angrily without any reason

Question ID : 65497831844
Status : Not Answered
Chosen Option : --

Q.2 Select the option that can be used as a one-word substitute for the given group of words.

Declare someone not guilty

- Ans
- 1. Acquit
 - 2. Sentence
 - 3. Pardon
 - 4. Arrest

Question ID : 65497831860
Status : Answered
Chosen Option : 3

Q.3 Select the most appropriate synonym of the given word.

Grim

- Ans
- 1. Stern
 - 2. Forceful
 - 3. Joyful
 - 4. Arrogant

Question ID : 65497831859
Status : Not Answered
Chosen Option : --

Q.4 Select the INCORRECTLY spelt word.

- Ans
- 1. Melodrama
 - 2. Melody
 - 3. Melodous
 - 4. Malignant

Question ID : 65497831854
Status : Answered
Chosen Option : 3

Q.5 Select the most appropriate option to fill in the blank.

The landscape _____ Hardy to write this fine poem.

- Ans
- 1. inspired
 - 2. induced
 - 3. pestered
 - 4. incited

Question ID : 65497831855
Status : Not Answered
Chosen Option : --

Q.6 Select the most appropriate meaning of the given idiom.

Once in a blue moon

- Ans
- 1. Happening usually
 - 2. Taking place very rarely
 - 3. Doing something very often
 - 4. When the moon rises

Question ID : 65497831848
Status : Not Answered
Chosen Option : --

Q.7 The following sentence has been divided into parts. One of them may contain an error. Select the part that contains the error from the given options. If you don't find any error, select 'No error' as your answer.

In summers, we must take care / to drink enough water / to keep ourselves hydrated.

- Ans
- 1. to drink enough water
 - 2. In summers we must take care
 - 3. No error
 - 4. to keep ourselves hydrated

Question ID : 65497831845
Status : Not Answered
Chosen Option : --

Q.8 Select the most appropriate option that can substitute the underlined segment in the given sentence. If there is no need to substitute it, select 'No substitution required'.

The pack of wolves moving towards the children are a frightening sight.

- Ans
- 1. was a frightening sight
 - 2. No substitution required
 - 3. are an frightening sight
 - 4. had a frightening sight

Question ID : 65497831850
Status : Answered
Chosen Option : 1

Q.9 Select the option that can be used as a one-word substitute for the given group of words.

One who has keen interest in good food

Ans 1. Gourmet

2. Hungry

3. Greedy

4. Gallant

Question ID : 65497831853
Status : Not Answered
Chosen Option : --

Q.10 Select the option that can be used as a one-word substitute for the given group of words.

A place where birds are kept

Ans 1. Apiary

2. Aquarium

3. Attic

4. Aviary

Question ID : 65497831849
Status : Not Answered
Chosen Option : --

Q.11 Select the most appropriate option to fill in the blank.

He was _____ by the judge for his courageous actions.

Ans 1. criticised

2. discouraged

3. commended

4. reprimanded

Question ID : 65497831857
Status : Answered
Chosen Option : 1

Q.12 Select the most appropriate ANTONYM of the given word.

Desperate

Ans 1. Content

2. Determined

3. Frantic

4. Daring

Question ID : 65497831852
Status : Answered
Chosen Option : 1

Q.13 The following sentence has been split into four segments. Identify the segment that contains a grammatical error.

Everyone needs / to have a home / and to feel secured / and be wanted.

- Ans
- 1. and be wanted
 - 2. Everyone needs
 - 3. and to feel secured
 - 4. to have a home

Question ID : 65497831858
Status : Answered
Chosen Option : 2

Q.14 Select the most appropriate option to fill in the blank.

Sometime back, onion used to be the poor man's food as it was _____.

- Ans
- 1. cheap
 - 2. inferior
 - 3. available
 - 4. low

Question ID : 65497831843
Status : Answered
Chosen Option : 1

Q.15 Select the most appropriate ANTONYM of the given word.

Naive

- Ans
- 1. Experienced
 - 2. Simple
 - 3. Impulsive
 - 4. Sincere

Question ID : 65497831861
Status : Not Answered
Chosen Option : --

Q.16 Select the INCORRECTLY spelt word.

- Ans
- 1. Separate
 - 2. Desperate
 - 3. Considerate
 - 4. Disparate

Question ID : 65497831856
Status : Answered
Chosen Option : 4

Q.17 Parts of the given sentence have been given as options. One of them contains a grammatical error. Select the option that has the error.

After a month-long vacation due to the sudden floods, Mani's school has been resuming today.

- Ans
- 1. After
 - 2. has been resuming
 - 3. due to the sudden floods
 - 4. a month-long vacation

Question ID : 65497831851
Status : Answered
Chosen Option : 2

Q.18 Select the option that will improve the underlined part of the sentence. In case no improvement is needed, select 'No improvement required'.

She frequent go to her old school to visit her teachers.

- Ans
- 1. frequent goes
 - 2. frequently goes
 - 3. No improvement required
 - 4. frequently going

Question ID : 65497831847
Status : Answered
Chosen Option : 2

Q.19 Select the option that will improve the underlined part of the given sentence. In case no improvement is needed, select 'No improvement required'.

Need you please hold my bag for a moment?

- Ans
- 1. No improvement required
 - 2. May you
 - 3. Would you
 - 4. Should you

Question ID : 65497831862
Status : Answered
Chosen Option : 3

Q.20 Select the most appropriate synonym of the given word.

Rift

- Ans
- 1. Boat
 - 2. Heal
 - 3. Break
 - 4. Bind

Question ID : 65497831846
Status : Not Answered
Chosen Option : --

Comprehension:

In the following passage, some words have been deleted. Read the passage carefully and select the most appropriate option to fill in each blank.

When Roald Amundsen first (1) _____ the South Pole in 1911, he could plant (2) _____ flag there whilst, back in (3) _____ Arctic, no explorer ever had the luxury (4) _____ his claim with a flag. If he did, it would (5) _____ end up floating away to Greenland, making it a totally useless exercise.

SubQuestion No : 21

Q.21 Select the most appropriate option to fill in blank no. 1.

Ans 1. had reached

2. reached

3. reach

4. reaching

Question ID : 65497831864

Status : Answered

Chosen Option : 2

Comprehension:

In the following passage, some words have been deleted. Read the passage carefully and select the most appropriate option to fill in each blank.

When Roald Amundsen first (1) _____ the South Pole in 1911, he could plant (2) _____ flag there whilst, back in (3) _____ Arctic, no explorer ever had the luxury (4) _____ his claim with a flag. If he did, it would (5) _____ end up floating away to Greenland, making it a totally useless exercise.

SubQuestion No : 22

Q.22 Select the most appropriate option to fill in blank no. 2.

Ans 1. his

2. its

3. your

4. her

Question ID : 65497831865

Status : Answered

Chosen Option : 1

Comprehension:

In the following passage, some words have been deleted. Read the passage carefully and select the most appropriate option to fill in each blank.

When Roald Amundsen first (1) _____ the South Pole in 1911, he could plant (2) _____ flag there whilst, back in (3) _____ Arctic, no explorer ever had the luxury (4) _____ his claim with a flag. If he did, it would (5) _____ end up floating away to Greenland, making it a totally useless exercise.

SubQuestion No : 23

Q.23 Select the most appropriate option to fill in blank no. 3.

Ans 1. an

2. a

3. any

4. the

Question ID : 65497831866

Status : Answered

Chosen Option : 4

Comprehension:

In the following passage, some words have been deleted. Read the passage carefully and select the most appropriate option to fill in each blank.

When Roald Amundsen first (1) _____ the South Pole in 1911, he could plant (2) _____ flag there whilst, back in (3) _____ Arctic, no explorer ever had the luxury (4) _____ his claim with a flag. If he did, it would (5) _____ end up floating away to Greenland, making it a totally useless exercise.

SubQuestion No : 24

Q.24 Select the most appropriate option to fill in blank no. 4.

- Ans** 1. to secure
 2. secure
 3. secured
 4. securing

Question ID : 65497831867
Status : Answered
Chosen Option : 1

Comprehension:

In the following passage, some words have been deleted. Read the passage carefully and select the most appropriate option to fill in each blank.

When Roald Amundsen first (1) _____ the South Pole in 1911, he could plant (2) _____ flag there whilst, back in (3) _____ Arctic, no explorer ever had the luxury (4) _____ his claim with a flag. If he did, it would (5) _____ end up floating away to Greenland, making it a totally useless exercise.

SubQuestion No : 25

Q.25 Select the most appropriate option to fill in blank no. 5.

- Ans** 1. eventually
 2. entirely
 3. totally
 4. happily

Question ID : 65497831868
Status : Answered
Chosen Option : 1

Section : Part D Hindi

Q.1 दिए गये वाक्यांश के लिए एक शब्द दीजिये।

जो देखा नहीं जा सकता

- Ans** 1. दृष्टिहीन
 2. दृश्य
 3. अदृश्य
 4. दृटव्य

Question ID : 65497831871
Status : Not Answered
Chosen Option : --

Q.2 दिये गये वाक्य में रेखांकित अंश को प्रतिस्थापित करने के लिए सबसे उपयुक्त विकल्प का चयन करें।

मकान गिर जाने का सुंदेह है।

- Ans
- 1. शोक
 - 2. लोभ
 - 3. डर
 - 4. भ्रम

Question ID : 65497831886
Status : Not Answered
Chosen Option : --

Q.3 'अंशु' किसका पर्यायवाची है?

- Ans
- 1. अमृत
 - 2. स्त्री
 - 3. आँख
 - 4. किरण

Question ID : 65497831883
Status : Not Answered
Chosen Option : --

Q.4 निम्नलिखित में से शुद्ध वर्तनी वाला शब्द कौन सा है?

- Ans
- 1. आविस्कार
 - 2. आविष्कार
 - 3. आविश्कार
 - 4. अविष्कार

Question ID : 65497831884
Status : Not Answered
Chosen Option : --

Q.5 दिए गए शब्द के समानार्थी शब्द का चयन करें।

उन्मूलन

- Ans
- 1. उखाड़ फेंकना
 - 2. अपमान
 - 3. समानता
 - 4. उर्वरक

Question ID : 65497831873
Status : Not Answered
Chosen Option : --

Q.6 दिये गये वाक्य के किस भाग में त्रुटि है?

उनके निधन से देश की अपूरणीय छति हुई है।

- Ans
- 1. छति हुई है।
 - 2. उनके निधन से
 - 3. देश क
 - 4. अपूरणीय

Question ID : 65497831882
Status : Not Answered
Chosen Option : --

Q.7 दिए गए शब्द का विलोम चुनें।

शोक

- Ans
- 1. शोभित
 - 2. अशोभित
 - 3. हर्ष
 - 4. विषाद

Question ID : 65497831878
Status : Not Answered
Chosen Option : --

Q.8 रिक्त स्थान को भरने के लिए सबसे उपयुक्त शब्द का चयन करें।

विफलता का कारण अध्ययन पद्धति का _____ ही था।

- Ans
- 1. आदर्श
 - 2. दोष
 - 3. समुचित
 - 4. विस्तार

Question ID : 65497831875
Status : Not Answered
Chosen Option : --

Q.9 दिये गये वाक्य में रेखांकित अंश को प्रतिस्थापित करने के लिए सबसे उपयुक्त विकल्प का चयन करें।

गुरुजनों पर श्रद्धा करो।

- Ans
- 1. श्रद्धा पूजो।
 - 2. श्रद्धा भरो।
 - 3. श्रद्धा रखो।
 - 4. श्रद्धा दो।

Question ID : 65497831887
Status : Not Answered
Chosen Option : --

Q.10 निम्नलिखित में से शुद्ध वर्तनी वाला शब्द कौन सा है?

- Ans
- 1. सन्यास
 - 2. संन्याष
 - 3. संन्याश
 - 4. संन्यास

Question ID : 65497831885
Status : Not Answered
Chosen Option : --

Q.11 नीचे दिए वाक्यांश के लिए एक शब्द दिए गए विकल्पों में से चुनिए।

जिसके पास कुछ भी न हो

- Ans 1. कंचन
 2. अकिंचन
 3. अक्षम
 4. अकथित

Question ID : 65497831879
Status : Not Answered
Chosen Option : --

Q.12 रिक्त स्थान को भरने के लिए सबसे उपयुक्त शब्द का चयन करें।

हिन्दी द्वारा सारे भारत को एक सूत्र में _____ जा सकता है।

- Ans 1. पिरोया
 2. डाला
 3. बांधा
 4. फंसाया

Question ID : 65497831874
Status : Not Answered
Chosen Option : --

Q.13 'आँखों में सरसों फूलना' इस मुहावरे का अर्थ कौनसा है?

- Ans 1. गुस्से से आँखें लाल हो जाना
 2. आदर भाव घाट जाना
 3. विवेक न होना
 4. धोखा देना

Question ID : 65497831870
Status : Not Answered
Chosen Option : --

Q.14 'चुनाव में अपना मत देने की क्रिया' वाक्यांश के लिए एक शब्द होगा-

- Ans 1. मत विभाजन
 2. मताधिकार
 3. मतपेटी
 4. मतदान

Question ID : 65497831888
Status : Not Answered
Chosen Option : --

Q.15 दिए गए वाक्य का वह भाग ज्ञात करें जिसमें कोई त्रुटि है। यदि कोई त्रुटि नहीं है, तो 'कोई त्रुटि नहीं है' चुनें।

इस बात के कहने में(1)/ किसी को(2)/ संकोच न होगा।(3)/ कोई त्रुटि नहीं है। (4)

- Ans 1. 4
 2. 3
 3. 1
 4. 2

Question ID : 65497831877
Status : Not Answered
Chosen Option : --

Q.16 दिए गए वाक्य का वह भाग ज्ञात करें जिसमें कोई त्रुटि है। यदि कोई त्रुटि नहीं है, तो 'कोई त्रुटि नहीं है' चुनें।

प्रदर्शनी, प्रायः शहर के उस स्थान पर (1)/ लगाया जाता है, जहाँ (2)/ लोग आसानी से पहुँच सकें। (3)/ कोई त्रुटि नहीं है (4)

Ans 1. 2

2. 1

3. 3

4. 4

Question ID : 65497831872

Status : Not Answered

Chosen Option : --

Q.17 दिए गए शब्द का विलोम चुनें।

प्रवेश

Ans 1. प्रवृत्ति

2. निकास

3. प्रवर

4. द्वार

Question ID : 65497831880

Status : Not Answered

Chosen Option : --

Q.18 रिक्त स्थान को भरने के लिए सबसे उपयुक्त शब्द का चयन करें।

राम ने मुझे पुस्तक _____ की।

Ans 1. वितरित

2. प्राप्त

3. समर्पण

4. समर्पित

Question ID : 65497831876

Status : Not Answered

Chosen Option : --

Q.19 दिए गए चार विकल्पों में से, उस विकल्प का चयन करें जो नीचे दिए मुहावरे का अर्थ व्यक्त करता है।

साँप छछूंदर की गति होना

Ans 1. गुप चुप हो जाना

2. विस्तृत अनुभव होना

3. तुरंत भाग जाना

4. असमंजस की स्थिति होना

Question ID : 65497831881

Status : Not Answered

Chosen Option : --

Q.20 दिए गए वाक्य में रेखांकित खंड को प्रतिस्थापित करने के लिए सबसे उपयुक्त विकल्प का चयन करें। यदि इसे प्रतिस्थापित करने की आवश्यकता नहीं है, तो विकल्प 'किसी बदलाव की आवश्यकता नहीं है' का चयन करें।

ठंडा घड़े का पानी पिलाइए।

- Ans
- 1. किसी बदलाव की आवश्यकता नहीं है।
 - 2. पानी ठंडा घड़े का पिलाइए।
 - 3. ठंडा पानी घड़े का पिलाइए।
 - 4. घड़े का ठंडा पानी पिलाइए।

Question ID : 65497831869
Status : Not Answered
Chosen Option : --

Comprehension:

दिए गए अनुच्छेद में से कुछ शब्द हटा दिए गए हैं। नीचे दिए विकल्पों की सहायता से रिक्त स्थान भरें। प्रत्येक संख्या के लिए सबसे उपयुक्त विकल्प का चयन करें।

धरती वह है जो (1)_____ करती है, सब (2)_____ इस पर रहते हैं, उनका पालन-पोषण करके उनकी रक्षा करती है। धर्म भी हमें (3)_____ करता है। धर्म न हो तो हम काम न कर सकें। अथवा, हम जो धारण करते हैं, मन में निश्चय कर लेते हैं वह (4)_____ है। चंद्र में जो शीतलता है, स्नेह है, वह हममें शांति उत्पन्न करता है। आकाश विस्तार है जिससे हम (5)_____ के विस्तार की प्रेरणा पाते हैं।

SubQuestion No : 21

Q.21 गद्यांश के रिक्त स्थान (1) के लिए सर्वाधिक उपयुक्त शब्द होगा-

- Ans
- 1. धारण
 - 2. ग्रहण
 - 3. गमन
 - 4. चक्कर

Question ID : 65497831890
Status : Not Answered
Chosen Option : --

Comprehension:

दिए गए अनुच्छेद में से कुछ शब्द हटा दिए गए हैं। नीचे दिए विकल्पों की सहायता से रिक्त स्थान भरें। प्रत्येक संख्या के लिए सबसे उपयुक्त विकल्प का चयन करें।

धरती वह है जो (1)_____ करती है, सब (2)_____ इस पर रहते हैं, उनका पालन-पोषण करके उनकी रक्षा करती है। धर्म भी हमें (3)_____ करता है। धर्म न हो तो हम काम न कर सकें। अथवा, हम जो धारण करते हैं, मन में निश्चय कर लेते हैं वह (4)_____ है। चंद्र में जो शीतलता है, स्नेह है, वह हममें शांति उत्पन्न करता है। आकाश विस्तार है जिससे हम (5)_____ के विस्तार की प्रेरणा पाते हैं।

SubQuestion No : 22

Q.22 गद्यांश के रिक्त स्थान (2) के लिए सर्वाधिक उपयुक्त शब्द होगा-

- Ans
- 1. लोग
 - 2. जीव
 - 3. पशु
 - 4. पक्षी

Question ID : 65497831891
Status : Not Answered
Chosen Option : --

Comprehension:

दिए गए अनुच्छेद में से कुछ शब्द हटा दिए गए हैं। नीचे दिए विकल्पों की सहायता से रिक्त स्थान भरें। प्रत्येक संख्या के लिए सबसे उपयुक्त विकल्प का चयन करें।

धरती वह है जो (1) _____ करती है, सब (2) _____ इस पर रहते हैं, उनका पालन-पोषण करके उनकी रक्षा करती है। धर्म भी हमें (3) _____ करता है। धर्म न हो तो हम काम न कर सकें। अथवा, हम जो धारण करते हैं, मन में निश्चय कर लेते हैं वह (4) _____ है। चंद्र में जो शीतलता है, स्नेह है, वह हममें शांति उत्पन्न करता है। आकाश विस्तार है जिससे हम (5) _____ के विस्तार की प्रेरणा पाते हैं।

SubQuestion No : 23

Q.23 गद्यांश के रिक्त स्थान (3) के लिए सर्वाधिक उपयुक्त शब्द होगा-

- Ans
- 1. पालन
 - 2. ग्रहण
 - 3. पोषण
 - 4. धारण

Question ID : 65497831892
Status : Not Answered
Chosen Option : --

Comprehension:

दिए गए अनुच्छेद में से कुछ शब्द हटा दिए गए हैं। नीचे दिए विकल्पों की सहायता से रिक्त स्थान भरें। प्रत्येक संख्या के लिए सबसे उपयुक्त विकल्प का चयन करें।

धरती वह है जो (1) _____ करती है, सब (2) _____ इस पर रहते हैं, उनका पालन-पोषण करके उनकी रक्षा करती है। धर्म भी हमें (3) _____ करता है। धर्म न हो तो हम काम न कर सकें। अथवा, हम जो धारण करते हैं, मन में निश्चय कर लेते हैं वह (4) _____ है। चंद्र में जो शीतलता है, स्नेह है, वह हममें शांति उत्पन्न करता है। आकाश विस्तार है जिससे हम (5) _____ के विस्तार की प्रेरणा पाते हैं।

SubQuestion No : 24

Q.24 गद्यांश के रिक्त स्थान (4) के लिए सर्वाधिक उपयुक्त शब्द होगा-

- Ans
- 1. संकल्प
 - 2. धम
 - 3. कम
 - 4. प्रेम

Question ID : 65497831893
Status : Not Answered
Chosen Option : --

Comprehension:

दिए गए अनुच्छेद में से कुछ शब्द हटा दिए गए हैं। नीचे दिए विकल्पों की सहायता से रिक्त स्थान भरें। प्रत्येक संख्या के लिए सबसे उपयुक्त विकल्प का चयन करें।

धरती वह है जो (1) _____ करती है, सब (2) _____ इस पर रहते हैं, उनका पालन-पोषण करके उनकी रक्षा करती है। धर्म भी हमें (3) _____ करता है। धर्म न हो तो हम काम न कर सकें। अथवा, हम जो धारण करते हैं, मन में निश्चय कर लेते हैं वह (4) _____ है। चंद्र में जो शीतलता है, स्नेह है, वह हममें शांति उत्पन्न करता है। आकाश विस्तार है जिससे हम (5) _____ के विस्तार की प्रेरणा पाते हैं।

SubQuestion No : 25

Q.25 गद्यांश के रिक्त स्थान (5) के लिए सर्वाधिक उपयुक्त शब्द होगा-

- Ans
- 1. चित्त
 - 2. संस्कृति
 - 3. मस्तिष्क
 - 4. संस्कार

Question ID : 65497831894
Status : Not Answered
Chosen Option : --