

Exam Date	24/11/2021
Exam Time :	12:30 PM - 2:00 PM
Subject	Constable GD 2021

Section : Part A General Intelligence and Reasoning

Q.1 Mira is the wife of Ketan. Chaitanya is the brother of Kapila, who is the wife of Sudeep. Rani is the mother of Ketan and the wife of Surendra. Chaitanya is the son of Rani. How is Surendra related to Sudeep?

- Ans
- 1. Son
 - 2. Brother
 - 3. Father
 - 4. Father-in-law

Question ID : 65497834194
Status : Answered
Chosen Option : 4

Q.2 Read the given statements and conclusions carefully. Assuming that the information given in the statements is true, even if it appears to be at variance with commonly known facts, decide which of the given conclusions logically follow(s) from the statements.

Statements:

1. Some medicines are injections.
2. No injection is an equipment.

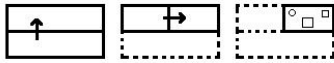
Conclusions:

- I. No equipment is an injection.
- II. No medicine is an equipment.

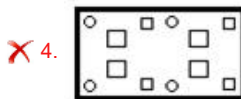
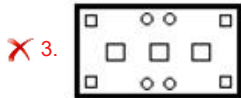
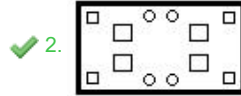
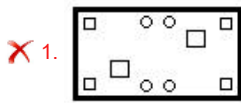
- Ans
- 1. Only conclusion II follows
 - 2. Only conclusion I follows
 - 3. None of the conclusions follow
 - 4. Both the conclusions follow

Question ID : 65497834186
Status : Answered
Chosen Option : 2

Q.3 The sequence of folding a piece of paper and the manner in which the folded paper has been cut is shown in the following figures. How would this paper look when unfolded?

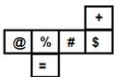


Ans



Question ID : 65497834189
Status : Answered
Chosen Option : 2

Q.4 A cube is made by folding the given sheet. In the cube so formed, what would be the symbol on the opposite side of the symbol '+'?



Ans

✗ 1. %

✗ 2. @

✓ 3. =

✗ 4. #

Question ID : 65497834204
Status : Answered
Chosen Option : 3

Q.5 Select the number from among the given options that can replace the question mark (?) in the following series.

1, 2, 2, 4, 8, 32, ?

Ans

✗ 1. 64

✗ 2. 40

✗ 3. 16

✓ 4. 256

Question ID : 65497834199
Status : Answered
Chosen Option : 4

Q.6 Select the number from among the given options that can replace the question mark (?) in the following series.

40, 76, 44, 70, 49, 64, 55, 58, ?

Ans 1. 62

2. 80

3. 65

4. 71

Question ID : 65497834195

Status : Answered

Chosen Option : 1

Q.7 Select the letter from among the given options that can replace the question mark (?) in the following series.

G, K, O, S, W, A, ?

Ans 1. J

2. E

3. G

4. C

Question ID : 65497834181

Status : Answered

Chosen Option : 2

Q.8 In a certain code language, 'LEJ' is written as 'XJT' and 'FAME' is written as 'LBZJ'. How will 'CABLE' be written in that language?

Ans 1. HBDZJ

2. FBDXJ

3. DBCXF

4. XZYOJ

Question ID : 65497834192

Status : Answered

Chosen Option : 2

Q.9 Six persons, P, Q, R, S, T and U, are watching a movie sitting in a line, all facing the north. S is sitting between P and Q. T is at second place to the left of P. R is third to the left of Q. Q is sitting at one of the corners. Who is sitting at the other corner?

Ans 1. S

2. R

3. T

4. U

Question ID : 65497834183

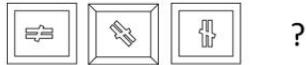
Status : Answered

Chosen Option : 4

Q.10 'Majority' is related to 'Minority' in the same way as 'Natural' is related to '_____'.
 Ans 1. Nature
 2. Fragrance
 3. Artificial
 4. Environment

Question ID : 65497834182
 Status : Answered
 Chosen Option : 3

Q.11 Select the figure from among the given options that can replace the question mark (?) in the following series.



- Ans
- 1.
 - 2.
 - 3.
 - 4.

Question ID : 65497834200
 Status : Answered
 Chosen Option : 3

Q.12 Select the option in which the numbers are related in the same way as are the numbers in the given set.

(9, 79, 7)

- Ans 1. (15, 239, 14)
 2. (24, 635, 25)
 3. (20, 800, 40)
 4. (12, 135, 18)

Question ID : 65497834187
 Status : Answered
 Chosen Option : 4

Q.13 Which two signs should be interchanged to make the given equation correct?

$$12 - 14 \times 21 \div 7 + 28 = 193$$

- Ans 1. \times and $-$
 2. $+$ and \times
 3. $+$ and \div
 4. \times and \div

Question ID : 65497834203
 Status : Answered

Q.14 Select the combination of letters that when sequentially placed in the blanks of the given series will complete the series.

L _ _ R _ T _ M P _ S _ _ M P _ S T

- Ans 1. M, P, S, L, R, T, L, R
 2. L, R, T, S, P, P, S, T
 3. L, M, R, S, L, M, P, R
 4. R, P, L, M, S, L, S, T

Question ID : 65497834198
Status : Answered
Chosen Option : 1

Q.15 Select the option that is related to the fourth number in the same way as the first number is related to the second number and the fifth number is related to the sixth number.

345 : 7 :: ? : 9 :: 66 : 4

- Ans 1. 514
 2. 731
 3. 445
 4. 651

Question ID : 65497834202
Status : Answered
Chosen Option : 2

Q.16 Select the correct mirror image of the given combination when the mirror is placed at the right side.

GN21qK

- Ans 1. Kp1ZnG
 2. Kp1ZnG
 3. Kp1ZnG
 4. Kp1ZnG

Question ID : 65497834196
Status : Answered
Chosen Option : 4

Q.17 Four letter-clusters have been given, out of which three are alike in some manner and one is different. Select the letter-cluster that is different.

- Ans 1. HLM
 2. KOP
 3. PRT
 4. DHI

Question ID : 65497834190
Status : Answered
Chosen Option : 3

Q.18 P, Q, R, S, T, U, V and W are sitting anticlockwise around a circular table in the same sequence at equal distances between them. All are facing the centre of the table. S is facing the south. Then V and Q interchange their positions. In which direction is Q sitting now?

- Ans
- 1. South-east
 - 2. North-east
 - 3. South-west
 - 4. North

Question ID : 65497834201
Status : Answered
Chosen Option : 2

Q.19 An amount of ₹1,189 is to be divided among Rakesh, Mrinal and Sanjay in the ratio of 11 : 13 : 17, respectively. How much amount will Sanjay get more than Rakesh?

- Ans
- 1. ₹160
 - 2. ₹222
 - 3. ₹194
 - 4. ₹174

Question ID : 65497834188
Status : Answered
Chosen Option : 4

Q.20 In a certain code language, 'SOIL' is coded as '38301824'. How will 'DECIMAL' be coded in that language?

- Ans
- 1. 81061826224
 - 2. 41060928224
 - 3. 85161626224
 - 4. 81062028226

Question ID : 65497834193
Status : Answered
Chosen Option : 1

Q.21 Select the option that is related to the third term in the same way as the second term is related to the first term.

ORATOR : RQDSRQ :: TACKLE : ?

- Ans
- 1. WYFMOG
 - 2. WZFJOD
 - 3. VYFJPQ
 - 4. WZFLOF

Question ID : 65497834191
Status : Answered
Chosen Option : 2

Q.22 In a certain code language, 'MANGOES' is written as 'AEGMNOS'. How will 'FRIEND' be written in that language?

- Ans
- 1. DEFINR
 - 2. RDHFNI
 - 3. RFEIDN
 - 4. UIRVMW

Question ID : 65497834185
Status : Answered
Chosen Option : 1

Q.23 Select the option in which the given figure is embedded (rotation is NOT allowed).



Ans

- 1.
- 2.
- 3.
- 4.

Question ID : 65497834205
Status : Answered
Chosen Option : 2

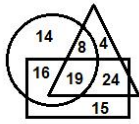
Q.24 Select the correct option that indicates the arrangement of the given words in the order in which they appear in an English dictionary.

1. Pegmatites
2. Persistence
3. Peroration
4. Percodan
5. Perfection

- Ans
- 1. 1, 3, 2, 4, 5
 - 2. 1, 4, 5, 2, 3
 - 3. 1, 4, 5, 3, 2
 - 4. 1, 3, 4, 5, 2

Question ID : 65497834197
Status : Answered
Chosen Option : 3

Q.25 In the following diagram, the circle stands for 'teachers', the rectangle stands for 'part-time workers', and the triangle stands for 'online educators'. The numbers given in the different segments represent the number of persons of that category.



How many teachers are online educators and also part-time workers?

- Ans**
- 1. 24
 - 2. 19
 - 3. 15
 - 4. 16

Question ID : **65497834184**
 Status : **Answered**
 Chosen Option : **2**

Section : Part B General Knowledge and General Awareness

Q.1 A 'duopoly' is a type of oligopoly wherein _____ firms have dominant or exclusive control over a market.

- Ans**
- 1. two
 - 2. five
 - 3. four
 - 4. three

Question ID : **65497834223**
 Status : **Answered**
 Chosen Option : **1**

Q.2 Who among the following had laid the foundation of Lodi dynasty?

- Ans**
- 1. Ibrahim Lodi
 - 2. Bahlul Lodi
 - 3. Sikandar Lodi
 - 4. Jalaluddin Lodi

Question ID : **65497834215**
 Status : **Answered**
 Chosen Option : **3**

Q.3 Which team became the first IPL team to win the IPL title for the fifth time in 2020?

- Ans**
- 1. Delhi Capitals
 - 2. Chennai Super Kings
 - 3. Royal Challengers Bangalore
 - 4. Mumbai Indians

Question ID : **65497834208**
 Status : **Answered**
 Chosen Option : **4**

Q.4 According to Census 2011, which is the least populous state in India?

- Ans 1. Arunachal Pradesh
 2. S kkim
 3. Mizoram
 4. Goa

Question ID : 65497834213
Status : Answered
Chosen Option : 2

Q.5 Which of the following statements is CORRECT?

- Ans 1. The sun is an example of an illuminated object.
 2. A frying pan is an example of an opaque object.
 3. A wooden box is an example of a luminous object.
 4. An empty bottle made of clear glass is an example of a translucent object.

Question ID : 65497834228
Status : Answered
Chosen Option : 4

Q.6 Which neighbouring country and India's boundary was ratified by The Constitution (100th Amendment) Act, 2015?

- Ans 1. Bhutan
 2. Myanmar
 3. Bangladesh
 4. Nepal

Question ID : 65497834207
Status : Answered
Chosen Option : 2

Q.7 Which clause allows the government to breach its fiscal deficit target by 0.5% points at times of severe stress in the economy?

- Ans 1. FAR clause
 2. Guarantee clause
 3. DEAR clause
 4. Escape clause

Question ID : 65497834210
Status : Answered
Chosen Option : 4

Q.8 Annie Zaidi was awarded the Nine Dots Prize for the year _____.

- Ans 1. 2020-21
 2. 2021-22
 3. 2019-20
 4. 2018-19

Question ID : 65497834230
Status : Not Answered
Chosen Option : --

Q.9 Which of the following states is the 'Vinchhudo' dance primarily associated with?

- Ans
- 1. Nagaland
 - 2. Madhya Pradesh
 - 3. Gujarat
 - 4. Goa

Question ID : 65497834227
Status : Not Answered
Chosen Option : --

Q.10 The natural tendency of objects to resist a change in their state of rest or of uniform motion is known as _____.

- Ans
- 1. momentum
 - 2. acceleration
 - 3. force
 - 4. inertia

Question ID : 65497834224
Status : Answered
Chosen Option : 4

Q.11 When government is lowering taxes and raising government spending, which kind of fiscal policy is it following?

- Ans
- 1. Neutral Fiscal Policy
 - 2. Contractional Fiscal Policy
 - 3. Both, Contractional Fiscal Policy and Expansionary Fiscal Policy
 - 4. Expansionary Fiscal Policy

Question ID : 65497834206
Status : Answered
Chosen Option : 2

Q.12 Kamala Harris, the first female Vice-President of the US, has family roots in the Indian state of:

- Ans
- 1. Karnataka
 - 2. Kerala
 - 3. Andhra Pradesh
 - 4. Tamil Nadu

Question ID : 65497834219
Status : Answered
Chosen Option : 1

Q.13 In which Indian city is one of the country's ancient lakes, the 'Lendiya Talab' located?

- Ans
- 1. Chennai
 - 2. Bhopal
 - 3. Lucknow
 - 4. Varanasi

Question ID : 65497834209
Status : Not Answered
Chosen Option : --

Q.14 Who among the following players won the Women's Singles event at the French Open 2020?

- Ans
- 1. Katie Boulter
 - 2. Elina Svitolina
 - 3. Iga Swiatek
 - 4. Sofia Kenin

Question ID : 65497834222
Status : Answered
Chosen Option : 3

Q.15 Which of the following conspiracies was linked to the train robbery in 1925?

- Ans
- 1. Kakori Conspiracy
 - 2. Delhi Conspiracy
 - 3. Peshawar Conspiracy
 - 4. Muzaffarpur Conspiracy

Question ID : 65497834225
Status : Answered
Chosen Option : 1

Q.16 The Fundamental Principles of the Olympic Charter are based on a document written by:

- Ans
- 1. Leo Tolstoy
 - 2. Aristotle
 - 3. Muhammad Ali
 - 4. Pierre de Coubertin

Question ID : 65497834218
Status : Answered
Chosen Option : 4

Q.17 Deepa Malik is India's first female para-athlete to win a medal at the _____ Rio Paralympics.

- Ans
- 1. 2014
 - 2. 2018
 - 3. 2016
 - 4. 2015

Question ID : 65497834220
Status : Answered
Chosen Option : 3

Q.18 In which year did Subhash Chandra Bose escape from under British surveillance?

- Ans
- 1. 1941
 - 2. 1939
 - 3. 1932
 - 4. 1945

Question ID : 65497834211
Status : Answered
Chosen Option : 1

Q.19 Which is the first month of the Indian national calendar year beginning on 22 March, which is the day after the spring equinox?

- Ans
- 1. Ashwin
 - 2. Kartika
 - 3. Phalguna
 - 4. Chaitra

Question ID : 65497834212
Status : Answered
Chosen Option : 1

Q.20 Which of the following is a chemical element with the atomic number 10?

- Ans
- 1. Helium
 - 2. Neon
 - 3. Lithium
 - 4. Carbon

Question ID : 65497834229
Status : Answered
Chosen Option : 2

Q.21 With reference to the ancient history of India, which of the following sites is associated with the Ashoka Pillar?

- Ans
- 1. Sanchi
 - 2. Khajuraho
 - 3. Chatru
 - 4. Mandu

Question ID : 65497834214
Status : Not Answered
Chosen Option : --

Q.22 Rechna Doab is located between:

- Ans
- 1. Ganga and Ghaghara rivers
 - 2. Ravi and Chenab rivers
 - 3. Beas and Sutlej rivers
 - 4. Indus and Jhelum rivers

Question ID : 65497834221
Status : Not Answered
Chosen Option : --

Q.23 With reference to the constitutional provisions regarding Rajya Sabha, which of the following statements is correct?

- Ans
- 1. The Vice-president of India is ex officio Chairman of the Rajya Sabha.
 - 2. The Attorney-General of India is ex officio Chairman of the Rajya Sabha.
 - 3. The President of India is ex officio Chairman of the Rajya Sabha.
 - 4. The Prime Minister of India is ex officio Chairman of the Rajya Sabha.

Question ID : 65497834217
Status : Answered
Chosen Option : 1

Q.24 When was the Fit India movement launched to encourage Indians to include fitness activities and sports in their daily lives to pave the way for a healthy and fit lifestyle?

- Ans**
- 1. June 2019
 - 2. July 2019
 - 3. September 2019
 - 4. August 2019

Question ID : 65497834226
Status : Answered
Chosen Option : 4

Q.25 Who among the following took oath as Lieutenant Governor of Jammu and Kashmir in August 2020?

- Ans**
- 1. Farooq Khan
 - 2. Satya Pal Mal k
 - 3. Girish Chandra Murmu
 - 4. Manoj Sinha

Question ID : 65497834216
Status : Answered
Chosen Option : 3

Section : Part C Elementary Mathematics

Q.1 In a toy factory, a worker can assemble a toy in 5 minutes. If, from 10:30 a.m. to 12:30 p.m., 1248 toys are to be assembled, then how many workers should be employed?

- Ans**
- 1. 52
 - 2. 50
 - 3. 78
 - 4. 26

Question ID : 65497834243
Status : Answered
Chosen Option : 1

Q.2 A dealer sold an article at a loss of 8%. Had he sold it for ₹72 more, he would have gained 16%. The cost price of the article was:

- Ans**
- 1. ₹350
 - 2. ₹300
 - 3. ₹450
 - 4. ₹400

Question ID : 65497834244
Status : Answered
Chosen Option : 2

Q.3 If the simple interest on a certain sum of money for 15 months at 9.6% per annum exceeds the simple interest on the same sum for 8 months at 11.4% by ₹1,320, then the sum is:

- Ans**
- 1. ₹30,000
 - 2. ₹32,000
 - 3. ₹28,000
 - 4. ₹25,000

Question ID : 65497834245
Status : Answered
Chosen Option : 4

Q.4 Two students A and B appeared in a class test. B scored 40% of the sum total of their marks, which is 7 less than the marks of A. How many marks did B score?

- Ans**
- 1. 5
 - 2. 14
 - 3. 12
 - 4. 21

Question ID : 65497834233
Status : Answered
Chosen Option : 2

Q.5 The LCM and HCF of two numbers are 25 and 150, respectively. If one of the numbers is 50, then what is the sum of the two numbers?

- Ans**
- 1. 100
 - 2. 175
 - 3. 75
 - 4. 125

Question ID : 65497834238
Status : Answered
Chosen Option : 4

Q.6 A shopkeeper buys a computer table for ₹5,500. What should be the marked price of the computer table such that even after allowing a 10% discount, he gains ₹1,070?

- Ans**
- 1. ₹6,050
 - 2. ₹7,227
 - 3. ₹7,300
 - 4. ₹6,570

Question ID : 65497834241
Status : Answered
Chosen Option : 3

Q.7 Two solutions A and B of acid and water contain acid and water in the ratio 7 : 9 and 5 : 3, respectively. A and B are mixed in the ratio $x : y$. If the ratio of acid and water in the resulting solution is 9 : 7, then $x : y$ is:

- Ans**
- 1. 4 : 5
 - 2. 2 : 3
 - 3. 1 : 2
 - 4. 3 : 4

Question ID : 65497834254
Status : Answered
Chosen Option : 3

Q.8 The price of a commodity has increased by 20%. The Gupta family reframed their monthly budget and plans to spend 8% more money on that particular commodity. By what percentage should they reduce its consumption so as to manage with the increased amount of money?

- Ans**
- 1. 12
 - 2. 8
 - 3. 14
 - 4. 10

Question ID : 65497834239
Status : Answered
Chosen Option : 4

Q.9 A student, walking at a speed of 5 km/h, took 50 minutes, but reached the school 10 minutes later than the scheduled time. To reach school on time, the speed of the student should be:

- Ans**
- 1. 6.5 km/h
 - 2. $\frac{25}{6}$ km/h
 - 3. 6 km/h
 - 4. $\frac{25}{4}$ km/h

Question ID : 65497834250
Status : Answered
Chosen Option : 4

Q.10 If 62% of a number is equal to three-fifth of another number, then what is the ratio of the first number to the second number?

- Ans**
- 1. 30 : 31
 - 2. 31 : 30
 - 3. 31 : 20
 - 4. 20 : 31

Question ID : 65497834236
Status : Answered
Chosen Option : 1

Q.11 Four years ago, the average age of 45 employees in an office was 32 years. During this period 3 more persons joined the company and at present the average age of the company's employees is 37 years. What is the average age of the 3 new employees?

- Ans**
- 1. 54 years 3 months
 - 2. 52 years
 - 3. 51 years
 - 4. 58 years

Question ID : **65497834231**
Status : **Answered**
Chosen Option : **2**

Q.12 The average of four 3-digit numbers $34x$, 197 , $6x4$ and 348 is 386 . What is the average of $(3x + 1)$ and $(7x - 2)$?

- Ans**
- 1. 26
 - 2. 23
 - 3. 24.5
 - 4. 25.5

Question ID : **65497834253**
Status : **Answered**
Chosen Option : **3**

Q.13 A motorist travels a certain distance at an average speed of 48 km/h and returns at an average speed of 32 km/h. What is the average speed (in km/h) for the whole journey?

- Ans**
- 1. 38
 - 2. 38.4
 - 3. 39.8
 - 4. 40

Question ID : **65497834235**
Status : **Answered**
Chosen Option : **2**

Q.14 Simplify the following expression.

$$7 + 35 \div 7 \times 5 \text{ of } 6 - 1$$

- Ans**
- 1. 156
 - 2. 132
 - 3. 12
 - 4. 179

Question ID : **65497834240**
Status : **Answered**
Chosen Option : **1**

Q.15 If the ratio of the base radii of a cylinder and a cone is 1 : 2 and that of their heights is 2 : 1, then what is the ratio of the volume of the cylinder to that of the cone?

- Ans**
- 1. 2 : 3
 - 2. 1 : 1
 - 3. 2 : 1
 - 4. 3 : 2

Question ID : 65497834237
Status : Answered
Chosen Option : 4

Q.16 The LCM of two numbers is 45 times their HCF, and the sum of the LCM and HCF is 1518. If one of the numbers is divided by 16, the quotient is 18 and the remainder is 9. What is the other number?

- Ans**
- 1. 495
 - 2. 363
 - 3. 330
 - 4. 165

Question ID : 65497834252
Status : Answered
Chosen Option : 4

Q.17 $2 + 3 \div 2 \text{ of } \frac{3}{2} + 2(4 \times 2 \div 2 \text{ of } \frac{1}{2} + 2 - \frac{1}{2})$, after simplification, will give the result as:

- Ans**
- 1. $\frac{7}{2}$
 - 2. 21
 - 3. 19
 - 4. 22

Question ID : 65497834247
Status : Answered
Chosen Option : 2

Q.18 A shopkeeper buys a gadget for ₹1,125 after getting 25% discount. If he sells it by allowing 10% discount on the marked price, then how much does he gain?

- Ans**
- 1. ₹150
 - 2. ₹225
 - 3. ₹325
 - 4. ₹250

Question ID : 65497834232
Status : Answered
Chosen Option : 2

Q.19 A man sells two mobile phones for ₹6,000 each, gaining 25% on one and losing 25% on the other. What is his gain or loss percent in whole transaction (up to two decimal places)?

- Ans**
- 1. Profit, 6.67
 - 2. Loss, 6.67
 - 3. Loss, 6.25
 - 4. Profit, 6.25

Question ID : **65497834246**
Status : **Answered**
Chosen Option : **3**

Q.20 A certain sum amounts to ₹12,236 in $3\frac{3}{4}$ years at 8.8% p.a. at simple interest. What will be the simple interest (in ₹) on the same sum at the same rate in $4\frac{3}{8}$ years?

- Ans**
- 1. 3,624
 - 2. 3,542
 - 3. 3,484
 - 4. 3,524

Question ID : **65497834255**
Status : **Answered**
Chosen Option : **2**

Q.21 A sum of ₹39,000 is divided among A, B, C such that A's share is $\frac{1}{3}$ of B and B gets 20% more than C. A's share is:

- Ans**
- 1. ₹9,000
 - 2. ₹7,500
 - 3. ₹6,000
 - 4. ₹8,000

Question ID : **65497834248**
Status : **Answered**
Chosen Option : **3**

Q.22 6 men and 8 women can complete as much work in a given time as 3 men and 13 women. If a man can complete a work in 12 days, then in how many days will 4 women be able to complete the same work?

- Ans**
- 1. 5 days
 - 2. 8 days
 - 3. 4 days
 - 4. 20 days

Question ID : **65497834234**
Status : **Answered**
Chosen Option : **1**

Q.23 A retailer buys a tracksuit for ₹850. His overhead expenses are ₹50. If he sells the tracksuit for ₹1,170, then what is his profit percentage?

- Ans
- 1. 20
 - 2. 25
 - 3. 22
 - 4. 30

Question ID : 65497834242
Status : Answered
Chosen Option : 4

Q.24 A sum of money becomes double in 5 years at compound interest rate. The same sum of money will be 4 times of itself in:

- Ans
- 1. 12 years
 - 2. 10 years
 - 3. 8 years
 - 4. 15 years

Question ID : 65497834249
Status : Answered
Chosen Option : 2

Q.25 The circumference of a circle of diameter 14 cm is the same as the perimeter of a square. The area of the square is (take $\pi = \frac{22}{7}$):

- Ans
- 1. 400 cm²
 - 2. 256 cm²
 - 3. 121 cm²
 - 4. 289 cm²

Question ID : 65497834251
Status : Answered
Chosen Option : 3

Section : Part D English

Q.1 Select the most appropriate option that can substitute the underlined segment in the given sentence. If there is no need to substitute it, select 'No substitution required'.

I don't have some money at all.

- Ans
- 1. few
 - 2. No substitution required
 - 3. any
 - 4. little

Question ID : 65497834264
Status : Answered
Chosen Option : 3

Q.2 Select the most appropriate synonym of the given word.

Precarious

- Ans 1. Safe
 2. Insecure
 3. Stable
 4. Strange

Question ID : 65497834269
Status : Answered
Chosen Option : 1

Q.3 The following sentence has been split into four segments. Identify the segment that contains a grammatical error.

I will / be in school / for / 7 a.m. to 2 p.m.

- Ans 1. be in school
 2. 7 a.m. to 2 p.m.
 3. for
 4. I will

Question ID : 65497834267
Status : Answered
Chosen Option : 3

Q.4 Select the INCORRECTLY spelt word.

- Ans 1. Hover
 2. Dreary
 3. Monark
 4. Adorn

Question ID : 65497834274
Status : Answered
Chosen Option : 3

Q.5 Select the most appropriate option that can substitute the underlined segment in the given sentence. If there is no need to substitute it, select 'No substitution required'.

I have been worked hard to finish this project.

- Ans 1. No substitution required
 2. have been working
 3. working
 4. had been worked

Question ID : 65497834265
Status : Answered
Chosen Option : 2

Q.6 Select the correctly spelt word.

- Ans 1. Harbore
 2. Glossery
 3. Premire
 4. Orchestra

Question ID : 65497834273
Status : Answered
Chosen Option : 1

Q.7 Select the most appropriate option to fill in the blank.

Please _____ my subscription of the children's magazine.

- Ans
- 1. settle
 - 2. renew
 - 3. finish
 - 4. regain

Question ID : 65497834266
Status : Answered
Chosen Option : 2

Q.8 The following sentence has been divided into parts. One of them may contain an error. Select the part that contains the error from the given options. If you don't find any error, select 'No error' as your answer.

Jyoti is one of / the best police officer / in this town.

- Ans
- 1. No error
 - 2. the best police officer
 - 3. in this town
 - 4. Jyoti is one of

Question ID : 65497834258
Status : Answered
Chosen Option : 2

Q.9 Select the most appropriate ANTONYM of the given word.

Obscure

- Ans
- 1. Vague
 - 2. Dim
 - 3. Clear
 - 4. Doubtful

Question ID : 65497834256
Status : Answered
Chosen Option : 3

Q.10 Select the most appropriate meaning of the given idiom.

Spick and span

- Ans
- 1. Safe and secure
 - 2. Over and over again
 - 3. Very neat and clean
 - 4. Far from each other

Question ID : 65497834261
Status : Answered
Chosen Option : 1

Q.11 Select the option that can be used as a one-word substitute for the given group of words.

A remedy for all diseases

- Ans
- 1. Medicine
 - 2. Treatment
 - 3. Panacea
 - 4. Diagnosis

Question ID : 65497834272
Status : Answered
Chosen Option : 3

Q.12 Select the most appropriate option to fill in the blank.

The company is going to _____ the North Sea for oil.

- Ans
- 1. search
 - 2. tour
 - 3. explore
 - 4. traverse

Question ID : 65497834260
Status : Answered
Chosen Option : 3

Q.13 Select the most appropriate ANTONYM of the given word.

Reverence

- Ans
- 1. Respect
 - 2. Admiration
 - 3. Awe
 - 4. Contempt

Question ID : 65497834270
Status : Answered
Chosen Option : 4

Q.14 Select the most appropriate option that can substitute the underlined segment in the given sentence. If there is no need to substitute it, select 'No substitution required'.

During foggy weather, flights are often cancelled, isn't it?

- Ans
- 1. do they
 - 2. aren't they
 - 3. No substitution required
 - 4. haven't they

Question ID : 65497834262
Status : Answered
Chosen Option : 3

Q.15 Select the most appropriate option to fill in the blank.

The police _____ the protestors from entering the parliament.

- Ans
- 1. persuaded
 - 2. presumed
 - 3. protected
 - 4. prevented

Question ID : 65497834275
Status : Answered
Chosen Option : 4

Q.16 Select the option that can be used as a one-word substitute for the given group of words.

A place where money is coined

- Ans
- 1. Store
 - 2. Mint
 - 3. Factory
 - 4. Industry

Question ID : 65497834271
Status : Answered
Chosen Option : 2

Q.17 The following sentence has been split into four segments. Identify the segment that contains a grammatical error.

The poet / and the author / is awarded / by the President.

- Ans
- 1. by the President
 - 2. The poet
 - 3. and the author
 - 4. is awarded

Question ID : 65497834268
Status : Answered
Chosen Option : 4

Q.18 Select the most appropriate synonym of the given word.

Noble

- Ans
- 1. Dignified
 - 2. Poor
 - 3. Ordinary
 - 4. Normal

Question ID : 65497834259
Status : Answered
Chosen Option : 1

Q.19 Select the option that can be used as a one-word substitute for the given group of words.

The sound made by bees

- Ans** 1. Buzz
 2. Hiss
 3. Moo
 4. Coo

Question ID : 65497834257
Status : Answered
Chosen Option : 1

Q.20 Select the most appropriate meaning of the given idiom.

At a snail's pace

- Ans** 1. Quickly
 2. Very slowly
 3. Peacefully
 4. Carelessly

Question ID : 65497834263
Status : Answered
Chosen Option : 2

Comprehension:

In the following passage, some words have been deleted. Read the passage carefully and select the most appropriate option to fill in each blank.

Elephants regularly swarm to the landfill (1) _____ near a wildlife sanctuary in Sri Lanka. (2) _____ with food scraps, they consume plastic, (3) _____ slowly kills them, officials say. Images (4) _____ the elephants foraging through the waste (5) _____ environmentalists. Plastic from landfill sites is a known killer of wild elephants, which are estimated to number about 7,500 in Sri Lanka.

SubQuestion No : 21

Q.21 Select the most appropriate option to fill in blank no. 1.

- Ans** 1. site
 2. scene
 3. scenery
 4. sight

Question ID : 65497834277
Status : Answered
Chosen Option : 1

Comprehension:

In the following passage, some words have been deleted. Read the passage carefully and select the most appropriate option to fill in each blank.

Elephants regularly swarm to the landfill (1) _____ near a wildlife sanctuary in Sri Lanka. (2) _____ with food scraps, they consume plastic, (3) _____ slowly kills them, officials say. Images (4) _____ the elephants foraging through the waste (5) _____ environmentalists. Plastic from landfill sites is a known killer of wild elephants, which are estimated to number about 7,500 in Sri Lanka.

SubQuestion No : 22

Q.22 Select the most appropriate option to fill in blank no. 2.

- Ans 1. Beside
 2. Next
 3. Along
 4. Across

Question ID : 65497834278
Status : Answered
Chosen Option : 3

Comprehension:

In the following passage, some words have been deleted. Read the passage carefully and select the most appropriate option to fill in each blank.

Elephants regularly swarm to the landfill (1) _____ near a wildlife sanctuary in Sri Lanka. (2) _____ with food scraps, they consume plastic, (3) _____ slowly kills them, officials say. Images (4) _____ the elephants foraging through the waste (5) _____ environmentalists. Plastic from landfill sites is a known killer of wild elephants, which are estimated to number about 7,500 in Sri Lanka.

SubQuestion No : 23

Q.23 Select the most appropriate option to fill in blank no. 3.

- Ans 1. what
 2. whom
 3. which
 4. who

Question ID : 65497834279
Status : Answered
Chosen Option : 3

Comprehension:

In the following passage, some words have been deleted. Read the passage carefully and select the most appropriate option to fill in each blank.

Elephants regularly swarm to the landfill (1) _____ near a wildlife sanctuary in Sri Lanka. (2) _____ with food scraps, they consume plastic, (3) _____ slowly kills them, officials say. Images (4) _____ the elephants foraging through the waste (5) _____ environmentalists. Plastic from landfill sites is a known killer of wild elephants, which are estimated to number about 7,500 in Sri Lanka.

SubQuestion No : 24

Q.24 Select the most appropriate option to fill in blank no. 4.

- Ans 1. on
 2. of
 3. for
 4. in

Question ID : 65497834280
Status : Answered
Chosen Option : 2

Comprehension:

In the following passage, some words have been deleted. Read the passage carefully and select the most appropriate option to fill in each blank.

Elephants regularly swarm to the landfill (1) _____ near a wildlife sanctuary in Sri Lanka. (2) _____ with food scraps, they consume plastic, (3) _____ slowly kills them, officials say. Images (4) _____ the elephants foraging through the waste (5) _____ environmentalists. Plastic from landfill sites is a known killer of wild elephants, which are estimated to number about 7,500 in Sri Lanka.

SubQuestion No : 25

Q.25 Select the most appropriate option to fill in blank no. 5.

- Ans
- 1. are shocking
 - 2. have been shocking
 - 3. has shocked
 - 4. have shocked

Question ID : 65497834281
Status : Answered
Chosen Option : 4

Section : Part D Hindi

Q.1 दिये गये वाक्यांश के लिए एक शब्द दीजिये।

व्यर्थ खर्च करने वाला

- Ans
- 1. अतिव्ययी
 - 2. अल्पव्ययी
 - 3. अपव्ययी
 - 4. मितव्ययी

Question ID : 65497834293
Status : Not Answered
Chosen Option : --

Q.2 दिये गये वाक्यांश के लिए एक सार्थक शब्द दीजिए।

कविता रचनेवाली स्त्री

- Ans
- 1. कवयित्री
 - 2. कवियत्री
 - 3. कवियित्री
 - 4. विदुषी

Question ID : 65497834284
Status : Not Answered
Chosen Option : --

Q.3 दिए गए शब्द के समानार्थी शब्द का चयन करें।

बेटी

- Ans
- 1. वनिता
 - 2. अगना
 - 3. वासा
 - 4. दुहिता

Question ID : 65497834295
Status : Not Answered
Chosen Option : --

Q.4 निम्नलिखित में से शुद्ध वर्तनी वाला शब्द कौन सा है?

- Ans
- 1. कोतुहल
 - 2. कौतुहल
 - 3. कौतूहल
 - 4. कोतूहल

Question ID : 65497834300
Status : Not Answered
Chosen Option : --

Q.5 रिक्त स्थान की पूर्ति के लिए सबसे उपयुक्त शब्द का चयन कीजिए।

मुझे दुर्घटना की _____ है।

- Ans
- 1. अभिलाषा
 - 2. आशा
 - 3. इच्छा
 - 4. आशका

Question ID : 65497834286
Status : Not Answered
Chosen Option : --

Q.6 उस विकल्प का चयन करें जो निम्न मुहावरे का अर्थ व्यक्त करता है।

कान भरना

- Ans
- 1. बदनाम करना
 - 2. सावधान करना
 - 3. चुगली करना
 - 4. प्रभावित करना

Question ID : 65497834297
Status : Not Answered
Chosen Option : --

Q.7 'नीरुजता' शब्द का विलोम शब्द कौनसा है?

- Ans
- 1. नीरस
 - 2. निर्धारित
 - 3. रुग्णता
 - 4. निर्दोष

Question ID : 65497834288
Status : Not Answered
Chosen Option : --

Q.8 दिए गए शब्द का समानार्थी शब्द बताइए-

किनारा

- Ans
- 1. केतु
 - 2. कूल
 - 3. केली
 - 4. कुल

Question ID : 65497834292
Status : Not Answered
Chosen Option : --

Q.9 'शिगूफा खिलाना' इस मुहावरे का अर्थ है-

- Ans
- 1. बहुत उपद्रव करना
 - 2. काल्पनिक योजनाएँ बनाना
 - 3. विचित्र बात कहना
 - 4. सिफ़ारिश करवाना

Question ID : 65497834289
Status : Not Answered
Chosen Option : --

Q.10 दिये गये वाक्यांश के लिए एक सार्थक शब्द का चयन कीजिए।

जो स्वयं उत्पन्न हुआ हो

- Ans
- 1. स्वयम्भू
 - 2. स्वावलम्बी
 - 3. सार्वभौम
 - 4. स्वाधीन

Question ID : 65497834290
Status : Not Answered
Chosen Option : --

Q.11 दिए गए वाक्य में रेखांकित खंड को प्रतिस्थापित करने के लिए सबसे उपयुक्त विकल्प का चयन करें।
यदि इसे प्रतिस्थापित करने की आवश्यकता नहीं है, तो विकल्प 'किसी बदलाव की आवश्यकता नहीं है'
का चयन करें।

योगी ने समाधि लगाई और अतर्धान हो गया।

- Ans
- 1. और अर्धान हो गया।
 - 2. और अतर्धान हो गया।
 - 3. किसी बदलाव की आवश्यकता नहीं है।
 - 4. और अत्यर्धान हो गया।

Question ID : 65497834282
Status : Not Answered
Chosen Option : --

Q.12 रिक्त स्थान की पूर्ति के लिए सबसे उपयुक्त शब्द का चयन कीजिए।

_____ न करने वाले लड़के अच्छे अंक नहीं पा सकते।

- Ans
- 1. प्रार्थना
 - 2. परिश्रम
 - 3. भक्ति
 - 4. पूजा

Question ID : 65497834283
Status : Not Answered
Chosen Option : --

Q.13 दिए गए शब्द का विलोम चुनें।

आदर

- Ans
- 1. अपमान
 - 2. सम्मान
 - 3. सादर
 - 4. निरादर

Question ID : 65497834296
Status : Not Answered
Chosen Option : --

Q.14 दिए गए वाक्य का वह भाग ज्ञात करें जिसमें कोई त्रुटि है। यदि कोई त्रुटि नहीं है, तो 'कोई त्रुटि नहीं है' चुनें।

हमारा लक्ष्य (1)/ देश की चहुमुखी प्रगति (2)/ होनी चाहिए (3)/ कोई त्रुटि नहीं है (4)

- Ans
- 1. 3
 - 2. 2
 - 3. 4
 - 4. 1

Question ID : 65497834294
Status : Not Answered
Chosen Option : --

Q.15 दिये गये वाक्य में रेखांकित अश को प्रतिस्थापित करने के लिए सबसे उपयुक्त विकल्प का चयन करें।

युवती ने स्वर्ण आवरण पहन रखे हैं।

- Ans
- 1. वस्त्र
 - 2. आभरण
 - 3. सुवर्ण
 - 4. परिधान

Question ID : 65497834301
Status : Not Answered
Chosen Option : --

Q.16 दिए गए वाक्य का वह भाग ज्ञात करें जिसमें कोई त्रुटि है। यदि कोई त्रुटि नहीं है, तो 'कोई त्रुटि नहीं है' चुनें।

नाटक समारोह का (1)/ सारा उत्तरदायित्व (2)/ छात्रों के ऊपर है। (3)/ कोई त्रुटि नहीं है (4)

- Ans
- 1. 2
 - 2. 3
 - 3. 1
 - 4. 4

Question ID : 65497834287
Status : Not Answered
Chosen Option : --

Q.17 दिए गए वाक्य में रेखांकित खंड को प्रतिस्थापित करने के लिए सबसे उपयुक्त विकल्प का चयन करें। यदि इसे प्रतिस्थापित करने की आवश्यकता नहीं है, तो विकल्प 'किसी बदलाव की आवश्यकता नहीं है' का चयन करें।

भारत के और देशों के साथ सबंध अच्छे हैं।

- Ans
- 1. और देशों के साथ
 - 2. और देशों के साथ
 - 3. और देश के साथ
 - 4. किसी बदलाव की आवश्यकता नहीं है।

Question ID : 65497834285
Status : Not Answered
Chosen Option : --

Q.18 रिक्त स्थान की पूर्ति के लिए सबसे उपयुक्त शब्द का चयन करें।

उसे फासी पर _____ गया था।

- Ans
- 1. लटकाया
 - 2. चढ़ाया
 - 3. झुलाया
 - 4. उठाया

Question ID : 65497834298
Status : Not Answered
Chosen Option : --

Q.19 दिए गए वाक्य का वो भाग ज्ञात करें जिसमें कोई त्रुटि है। यदि कोई त्रुटि नहीं है, तो 'कोई त्रुटि नहीं है' चुनें।

प्रत्येक भारतवासी को (1)\ हिंदी का व्यावहारिक (2)\ ज्ञान होनी चाहिए। (3)\ कोई त्रुटि नहीं है (4)

- Ans
- 1. 4
 - 2. 1
 - 3. 3
 - 4. 2

Question ID : 65497834291
Status : Not Answered
Chosen Option : --

Q.20 निम्नलिखित में से शुद्ध वर्तनी वाला शब्द कौन सा है?

- Ans
- 1. यथेस्त
 - 2. यथेष्ठ
 - 3. यथेष्ट
 - 4. यथेस्थ

Question ID : 65497834299
Status : Not Answered
Chosen Option : --

Comprehension:

दिए गए गद्यांश में से कुछ शब्द हटा दिए गए हैं। सबधित प्रश्नों में प्रत्येक सख्या के लिए सबसे उपयुक्त विकल्प का चयन कीजिए।

मनुष्य स्वयं (1) _____ का निर्माता है। पर कायर मनुष्य नहीं वरन् (2) _____ ही भाग्य का सामर्थ्य रखता है। (3) _____ तो देवता को पुकारता है। साहसी मनुष्य भाग्य के हाथ की (4) _____ नहीं बनता अपितु स्वयं अपने भाग्य का निर्माण करता है, क्योंकि उसे अपनी शक्ति पर विश्वास होता है। मनुष्य के समक्ष कार्यों की सफलता, असफलता भाग्य पर नहीं, उसके (5) _____ पर आधारित है।

SubQuestion No : 21

Q.21 गद्यांश के रिक्त स्थान (1) के लिए सर्वाधिक उपयुक्त शब्द होगा-

- Ans
- 1. देश
 - 2. विश्व
 - 3. भाग्य
 - 4. शक्ति

Question ID : 65497834303

Status : Not Answered

Chosen Option : --

Comprehension:

दिए गए गद्यांश में से कुछ शब्द हटा दिए गए हैं। सबधित प्रश्नों में प्रत्येक सख्या के लिए सबसे उपयुक्त विकल्प का चयन कीजिए।

मनुष्य स्वयं (1) _____ का निर्माता है। पर कायर मनुष्य नहीं वरन् (2) _____ ही भाग्य का सामर्थ्य रखता है। (3) _____ तो देवता को पुकारता है। साहसी मनुष्य भाग्य के हाथ की (4) _____ नहीं बनता अपितु स्वयं अपने भाग्य का निर्माण करता है, क्योंकि उसे अपनी शक्ति पर विश्वास होता है। मनुष्य के समक्ष कार्यों की सफलता, असफलता भाग्य पर नहीं, उसके (5) _____ पर आधारित है।

SubQuestion No : 22

Q.22 गद्यांश के रिक्त स्थान (2) के लिए सर्वाधिक उपयुक्त शब्द होगा-

- Ans
- 1. सत
 - 2. सबल
 - 3. ईश्वर
 - 4. दुर्बल

Question ID : 65497834304

Status : Not Answered

Chosen Option : --

Comprehension:

दिए गए गद्यांश में से कुछ शब्द हटा दिए गए हैं। सबधित प्रश्नों में प्रत्येक सख्या के लिए सबसे उपयुक्त विकल्प का चयन कीजिए।

मनुष्य स्वयं (1) _____ का निर्माता है। पर कायर मनुष्य नहीं वरन् (2) _____ ही भाग्य का सामर्थ्य रखता है। (3) _____ तो देवता को पुकारता है। साहसी मनुष्य भाग्य के हाथ की (4) _____ नहीं बनता अपितु स्वयं अपने भाग्य का निर्माण करता है, क्योंकि उसे अपनी शक्ति पर विश्वास होता है। मनुष्य के समक्ष कार्यों की सफलता, असफलता भाग्य पर नहीं, उसके (5) _____ पर आधारित है।

SubQuestion No : 23

Q.23 गद्यांश के रिक्त स्थान (3) के लिए सर्वाधिक उपयुक्त शब्द होगा-

- Ans
- 1. शक्तिशाली
 - 2. कायर
 - 3. कमजोर
 - 4. साहसी

Question ID : 65497834305

Status : Not Answered

Chosen Option : --

Comprehension:

दिए गए गद्यांश में से कुछ शब्द हटा दिए गए हैं। सबधित प्रश्नों में प्रत्येक सख्या के लिए सबसे उपयुक्त विकल्प का चयन कीजिए।

मनुष्य स्वयं (1) _____ का निर्माता है। पर कायर मनुष्य नहीं वरन् (2) _____ ही भाग्य का सामर्थ्य रखता है। (3) _____ तो देवता को पुकारता है। साहसी मनुष्य भाग्य के हाथ की (4) _____ नहीं बनता अपितु स्वयं अपने भाग्य का निर्माण करता है, क्योंकि उसे अपनी शक्ति पर विश्वास होता है। मनुष्य के समक्ष कार्यों की सफलता, असफलता भाग्य पर नहीं, उसके (5) _____ पर आधारित है।

SubQuestion No : 24

Q.24 गद्यांश के रिक्त स्थान (4) के लिए सर्वाधिक उपयुक्त शब्द होगा-

- Ans** 1. खिलौना
 2. कठपुतली
 3. नियता
 4. निर्माता

Question ID : 65497834306

Status : Not Answered

Chosen Option : --

Comprehension:

दिए गए गद्यांश में से कुछ शब्द हटा दिए गए हैं। सबधित प्रश्नों में प्रत्येक सख्या के लिए सबसे उपयुक्त विकल्प का चयन कीजिए।

मनुष्य स्वयं (1) _____ का निर्माता है। पर कायर मनुष्य नहीं वरन् (2) _____ ही भाग्य का सामर्थ्य रखता है। (3) _____ तो देवता को पुकारता है। साहसी मनुष्य भाग्य के हाथ की (4) _____ नहीं बनता अपितु स्वयं अपने भाग्य का निर्माण करता है, क्योंकि उसे अपनी शक्ति पर विश्वास होता है। मनुष्य के समक्ष कार्यों की सफलता, असफलता भाग्य पर नहीं, उसके (5) _____ पर आधारित है।

SubQuestion No : 25

Q.25 गद्यांश के रिक्त स्थान (5) के लिए सर्वाधिक उपयुक्त शब्द होगा-

- Ans** 1. राजनीतिक बल
 2. मानसिक बल
 3. शारीरिक बल
 4. आर्थिक बल

Question ID : 65497834307

Status : Not Answered

Chosen Option : --