

| | |
|-------------|--------------------|
| | |
| | |
| | |
| Exam Date | 13/12/2021 |
| Exam Time : | 12:30 PM - 2:00 PM |
| Subject | Constable GD 2021 |

Section : Part A General Intelligence and Reasoning

Q.1 Select the option that is NOT embedded in the given figure (rotation is NOT allowed).



Ans

✓ 1.



✗ 2.



✗ 3.



✗ 4.



Question ID : 65497833058

Status : Answered

Chosen Option : 1

Q.2 Select the correct mirror image of the given combination when the mirror is placed at PQ as shown.

EMPHASIS |
P
Q

Ans

✗ 1. EMBHVZIS

✗ 2. EMBHISVZ

✓ 3. EMBHISVZ

✗ 4. EMBHISVZ

Question ID : 65497833048

Status : Answered

Chosen Option : 3

Q.3 Which two numbers should be interchanged to make the given equation correct?

$$48 + 37 \times 5 - 36 \div 12 = 274$$

- Ans 1. 37 and 48
 2. 12 and 5
 3. 12 and 36
 4. 48 and 12

Question ID : 65497833056
Status : Answered
Chosen Option : 1

Q.4 In a certain code language, the word 'PARTH' is coded as 'TEVXL'. What will be the word for code 'XVEHI' in that language?

- Ans 1. TRADE
 2. BZLIM
 3. TARDE
 4. BZILM

Question ID : 65497833049
Status : Answered
Chosen Option : 4

Q.5 Select the correct option that indicates the arrangement of the given words in the order in which they appear in an English dictionary.

1. Trimmer
2. Tripled
3. Trinity
4. Trinket
5. Triumph

- Ans 1. 3, 1, 2, 5, 4
 2. 1, 3, 4, 2, 5
 3. 2, 3, 1, 5, 4
 4. 1, 4, 3, 2, 5

Question ID : 65497833041
Status : Answered
Chosen Option : 2

Q.6 'Axe' is related to 'Woodcutting' in the same way as 'Sieve' is related to '_____'.

- Ans 1. Flame
 2. Filter
 3. Grind
 4. Hold

Question ID : 65497833060
Status : Answered
Chosen Option : 2

Q.7 In a certain code language, 'SLEEPER' is written as 'UKGDRDT'. How will 'BEGUMPET' be written in that language?

- Ans
- 1. DOITDOGS
 - 2. DOITDOOG
 - 3. DDITOOGS
 - 4. DDITDOGO

Question ID : 65497833039
Status : Answered
Chosen Option : 3

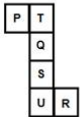
Q.8 Select the combination of letters that when sequentially placed in the blanks of the given series will complete the series.

U _ _ Q G _ X P _ _ UX _ _ G

- Ans
- 1. XPUQGPGQ
 - 2. XQPGUPQ
 - 3. XPQUQGPG
 - 4. QPXUGQP

Question ID : 65497833042
Status : Answered
Chosen Option : 1

Q.9 A cube is made by folding the given sheet. In the cube so formed, which of the following pairs of letters will be on opposite sides?



- Ans
- 1. U and T
 - 2. P and Q
 - 3. S and R
 - 4. Q and U

Question ID : 65497833057
Status : Answered
Chosen Option : 4

Q.10 Four letter-clusters have been given, out of which three are alike in some manner and one is different. Select the letter-cluster that is different.

- Ans
- 1. MDNK
 - 2. GBTM
 - 3. SFHJ
 - 4. JLQC

Question ID : 65497833045
Status : Answered
Chosen Option : 3

Q.11 Pooja is the only sister of Gulab. Keshav and Sumer are brothers. Gulab is the only nephew of Keshav. Sumer is the father-in-law of Sonu (male). How is Pooja related to Sonu?

- Ans
- 1. Mother
 - 2. Wife
 - 3. Sister
 - 4. Sister-in-law

Question ID : 65497833040
Status : Answered
Chosen Option : 2

Q.12 Select the number from among the given options that can replace the question mark (?) in the following series.

27, 32, 42, 57, 77, ?

- Ans
- 1. 124
 - 2. 102
 - 3. 97
 - 4. 105

Question ID : 65497833043
Status : Answered
Chosen Option : 2

Q.13 Select the option that is related to the third term in the same way as the second term is related to the first term.

BACK : ZCAM :: REAR : ?

- Ans
- 1. YPGT
 - 2. TYPG
 - 3. PYGT
 - 4. PGYT

Question ID : 65497833038
Status : Answered
Chosen Option : 4

Q.14 Six friends A, B, C, D, E and F are sitting in two lines, facing the north. Three persons are sitting in each line. F is sitting in the middle. C is just behind B. D is to the immediate right of E. B is to the immediate left of F. Which three persons are sitting in the same line?

- Ans
- 1. C, D and E
 - 2. B, C and D
 - 3. A, F and C
 - 4. A, B and D

Question ID : 65497833061
Status : Answered
Chosen Option : 1

Q.15 Which term of the series 195, 188, 181, is its first negative term?

- Ans 1. 29
 2. 32
 3. 35
 4. 42

Question ID : 65497833052
Status : Answered
Chosen Option : 2

Q.16 Select the number from among the given options that can replace the question mark (?) in the following series.

17, 18, 14, 23, 7, 32, -4, ?

- Ans 1. 25
 2. -45
 3. 45
 4. -25

Question ID : 65497833047
Status : Answered
Chosen Option : 3

Q.17 Select the set of words best represented by the given Venn diagram.




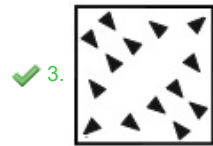
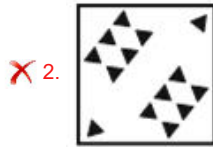
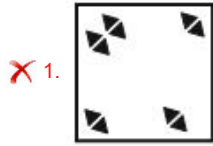
- Ans 1. Jasmine, Flowers, Eggs
 2. Water, Liquid, Juice
 3. Roses, Lilies, Flowers
 4. Maize, Rice, Food

Question ID : 65497833062
Status : Answered
Chosen Option : 1

Q.18 The sequence of folding a piece of paper and the manner in which the folded paper has been cut is shown in the following figures. How would this paper look when unfolded?



Ans



Question ID : 65497833053
 Status : Answered
 Chosen Option : 3

Q.19 Select the option that is related to the fourth number in the same way as the first number is related to the second number and the fifth number is related to the sixth number.

72 : 6 :: ? : 7 :: 128 : 8

- Ans
- 1. 95
 - 2. 101
 - 3. 98
 - 4. 90

Question ID : 65497833055
 Status : Answered
 Chosen Option : 3

Q.20 Select the figure from among the given options that can replace the question mark (?) in the following series.



Ans

- 1.
- 2.
- 3.
- 4.

Question ID : 65497833044
 Status : Answered
 Chosen Option : 2

Q.21 Select the letter-cluster from among the given options that can replace the question mark (?) in the following series.

NX, LZ, JB, ?, FF, DH

- Ans
- 1. HC
 - 2. GC
 - 3. HD
 - 4. ED

Question ID : 65497833059
 Status : Answered
 Chosen Option : 3

Q.22 Read the given statements and conclusions carefully. Assuming that the information given in the statements is true, even if it appears to be at variance with commonly known facts, decide which of the given conclusions logically follow(s) from the statements.

Statements:

- I. Some trolley-bags are backpacks.
- II. Some backpacks are suitcases.
- III. All suitcases are bags.

Conclusions:

- I. At least some backpacks are bags.
- II. some bags are suitcases.

- Ans
- 1. Only conclusion II follows.
 - 2. Neither conclusion I nor II follows.
 - 3. Both, conclusion I and II follow.
 - 4. Only conclusion I follows.

Question ID : 65497833050
 Status : Answered
 Chosen Option : 3

Q.23 Eight persons A, B, C, D, E, F, G and H are sitting clockwise around a circular table in the same sequence at equal distances between them. All are facing the centre of the table. If E is sitting in the north-west, then in which direction is G facing?

- Ans 1. South-west
 2. South-east
 3. North-west
 4. North

Question ID : 65497833054
Status : Answered
Chosen Option : 1

Q.24 In a certain code language, 'SLIDE' is coded as '382418822'. How will 'TREND' be coded in that language?

- Ans 1. 463028282
 2. 428282036
 3. 430622828
 4. 403622288

Question ID : 65497833046
Status : Answered
Chosen Option : 4

Q.25 Study the given pattern carefully and select the number that can replace the question mark (?) in it.

9 7 12
12 24 ?
15 25 37

- Ans 1. 42
 2. 35
 3. 36
 4. 40

Question ID : 65497833051
Status : Answered
Chosen Option : 2

Section : Part B General Knowledge and General Awareness

Q.1 In which of the following states is India's largest saline wetland, the Sambhar Lake, located?

- Ans 1. Karnataka
 2. Maharashtra
 3. Tamil Nadu
 4. Rajasthan

Question ID : 65497833064
Status : Answered
Chosen Option : 4

Q.2 In which of the following Indus Valley Civilisation sites was the 'Great Bath' discovered?

- Ans**
- 1. Lothal
 - 2. Kalibangan
 - 3. Mohenjo-daro
 - 4. Banawali

Question ID : 65497833065
Status : Answered
Chosen Option : 3

Q.3 Afghan cricketer Rashid Khan played for _____ in the Indian Premier League (IPL) 2021.

- Ans**
- 1. Sunrisers Hyderabad
 - 2. Punjab Kings
 - 3. Delhi Capitals
 - 4. Rajasthan Royals

Question ID : 65497833086
Status : Answered
Chosen Option : 1

Q.4 Which of the following awards is given by World Economic Forum to artists who have used their art to improve the state of the world?

- Ans**
- 1. Oscar Award
 - 2. Grammy Award
 - 3. Crystal Award
 - 4. Filmfare Award

Question ID : 65497833075
Status : Answered
Chosen Option : 3

Q.5 The Census of India 2021 is the _____ decennial Census of India since 1872, when the first systematic census was conducted throughout the country as per uniform pattern.

- Ans**
- 1. 15th
 - 2. 13th
 - 3. 14th
 - 4. 16th

Question ID : 65497833084
Status : Answered
Chosen Option : 1

Q.6 Which of the following has seeds with two cotyledons?

- Ans**
- 1. Maize
 - 2. Grass
 - 3. Rose
 - 4. Rice

Question ID : 65497833081
Status : Answered
Chosen Option : 3

Q.7 Which of the following is the total value of goods and services produced by a country during a financial year?

- Ans
- 1. Disposable income
 - 2. National income
 - 3. Private income
 - 4. Personal income

Question ID : 65497833069
Status : Answered
Chosen Option : 2

Q.8 The Government of India appointed _____ as the country's G20 Sherpa in September 2021.

- Ans
- 1. Suresh Prabhu
 - 2. Shaktikanta Das
 - 3. Montek Singh Ahluwalia
 - 4. Piyush Goyal

Question ID : 65497833087
Status : Answered
Chosen Option : 4

Q.9 Which of the following nations chaired the G-20 Foreign Ministers' Extraordinary Meeting, which was held in the virtual mode, on 3 September 2020?

- Ans
- 1. Saudi Arabia
 - 2. Argentina
 - 3. Mexico
 - 4. India

Question ID : 65497833068
Status : Not Answered
Chosen Option : --

Q.10 The 'Stand Up India' Scheme facilitates bank loans between ₹ _____ to at least one Scheduled Caste (SC) or Scheduled Tribe (ST) borrower and at least one woman per bank branch for setting up a greenfield enterprise.

- Ans
- 1. 5 lakhs and 10 lakhs
 - 2. 10 lakhs and 1 crore
 - 3. 1 lakh and 5 lakhs
 - 4. 10 thousand and 1 lakh

Question ID : 65497833077
Status : Answered
Chosen Option : 3

Q.11 Which of the following objects is visible only due to reflected light?

- Ans
- 1. a lit torch
 - 2. a burning candle
 - 3. the Moon
 - 4. Stars

Question ID : 65497833082
Status : Answered
Chosen Option : 4

Q.12 Which of the following chemicals is NOT used as a preservative to check the growth of microorganisms?

- Ans
- 1. Sodium metabisulphite
 - 2. Sodium hydrogen carbonate
 - 3. Benzoic acid
 - 4. Sodium benzoate

Question ID : 65497833070
Status : Answered
Chosen Option : 2

Q.13 In which of the following years the Mughal Emperor Shah Alam II appointed the English East India Company as the Diwan of the province of Bengal?

- Ans
- 1. 1865
 - 2. 1665
 - 3. 1735
 - 4. 1765

Question ID : 65497833066
Status : Answered
Chosen Option : 4

Q.14 Which of the following states was the first to try out modern methods of farming during the Green Revolution in India?

- Ans
- 1. Tamil Nadu
 - 2. Punjab
 - 3. Rajasthan
 - 4. Madhya Pradesh

Question ID : 65497833079
Status : Answered
Chosen Option : 2

Q.15 Which of the following Indian football players is nicknamed as 'Sikkimese Sniper'?

- Ans
- 1. Sandesh Jhingan
 - 2. Bhaichung Bhutia
 - 3. Subrata Pal
 - 4. Sunil Chhetri

Question ID : 65497833076
Status : Answered
Chosen Option : 2

Q.16 DRDO successfully conducted the final trial of which anti-tank guided missile in Pokhran range in October 2020?

- Ans
- 1. Amogha
 - 2. Dhruvastra
 - 3. Nag
 - 4. Jasmine

Question ID : 65497833072
Status : Not Answered
Chosen Option : --

Q.17 Rani Durgawati, who ruled over on behalf of her five-year-old son Bir Narain, belonged to which of the following tribes?

- Ans
- 1. Korku
 - 2. Gonds
 - 3. Baiga
 - 4. Madia

Question ID : 65497833071
Status : Answered
Chosen Option : 2

Q.18 Who among the following decides whether a particular bill is a Money Bill or not?

- Ans
- 1. Speaker of the Lok Sabha
 - 2. Finance Minister of India
 - 3. Attorney-General of India
 - 4. Comptroller and Auditor-General of India

Question ID : 65497833067
Status : Answered
Chosen Option : 1

Q.19 As per the Natya Shastra, idiophones are called _____.

- Ans
- 1. Ghan Vadya
 - 2. Sushir Vadya
 - 3. Avanaddha Vadya
 - 4. Tat Vadya

Question ID : 65497833080
Status : Answered
Chosen Option : 1

Q.20 The Indian Forest (Amendment) Bill, 2017 excluded _____ from the definition of 'tree'.

- Ans
- 1. palm
 - 2. cane
 - 3. brush-wood
 - 4. bamboo

Question ID : 65497833085
Status : Answered
Chosen Option : 1

Q.21 Shifting cultivation is also known as:

- Ans
- 1. rumble and tumble
 - 2. slash and burn
 - 3. shift and burn
 - 4. stash and burn

Question ID : 65497833074
Status : Answered
Chosen Option : 1

Q.22 The Nobel Prize in _____ 2020 was awarded jointly to Emmanuelle Charpentier and Jennifer A. Doudna.

- Ans
- 1. Medicine
 - 2. Chemistry
 - 3. Literature
 - 4. Physics

Question ID : 65497833083
Status : Not Answered
Chosen Option : --

Q.23 Which of the following statements is INCORRECT?

- Ans
- 1. Arabic was the language of administration under the Delhi Sultans.
 - 2. Coins minted in Delhi were called 'Dehliwal'.
 - 3. Qutb al-Din Aibak ruled over Delhi from 1206 - 1210.
 - 4. Delhi first became the capital of a kingdom under the Tomara Rajputs.

Question ID : 65497833078
Status : Answered
Chosen Option : 2

Q.24 How many sportspersons won the Rajiv Gandhi Khel Ratna Award in 2020?

- Ans
- 1. Five
 - 2. Seven
 - 3. One
 - 4. Two

Question ID : 65497833063
Status : Answered
Chosen Option : 2

Q.25 अर्जुन तपस्या, दुनिया की सबसे बड़ी नक्काशीदार मूर्तियों में से एक है जो _____ में स्थित है।

- Ans
- 1. सतारा, महाराष्ट्र
 - 2. वायनाड, केरल
 - 3. महाबलीपुरम, तमिलनाडु
 - 4. जोधपुर, राजस्थान

Question ID : 65497833073
Status : Not Answered
Chosen Option : --

Section : Part C Elementary Mathematics

Q.1 A sum of money lent out at simple interest amounts to ₹715 after 3 years and to ₹990 after a further period of 5 years.
Find the sum.

- Ans
- 1. ₹550
 - 2. ₹600
 - 3. ₹590
 - 4. ₹625

Question ID : 65497833101
Status : Not Answered
Chosen Option : --

Q.2 The ratio of alcohol and water in a solution is 4 : 3. In 350 mL of this solution, how much water (in mL) should be added to get a solution containing alcohol and water in the ratio 5 : 6?

- Ans**
- 1. 120
 - 2. 80
 - 3. 100
 - 4. 90

Question ID : **65497833106**
Status : **Answered**
Chosen Option : **4**

Q.3 Find the value of x in the following equation.

$$45\% \text{ of } 360 + 30\% \text{ of } 400 = 25\% \text{ of } x$$

- Ans**
- 1. 1112
 - 2. 1200
 - 3. 1128
 - 4. 1180

Question ID : **65497833110**
Status : **Not Answered**
Chosen Option : **--**

Q.4 If HCF of 341, 434 and 620 is x , then the value of x lies between:

- Ans**
- 1. 40 and 45
 - 2. 25 and 30
 - 3. 30 and 35
 - 4. 35 and 40

Question ID : **65497833098**
Status : **Not Answered**
Chosen Option : **--**

Q.5 The value of $96 - 4 \text{ of } (18 - 13) + 4 \times 7$ is:

- Ans**
- 1. -36
 - 2. 560
 - 3. 104
 - 4. 36

Question ID : **65497833092**
Status : **Answered**
Chosen Option : **3**

Q.6 A square of side $6\sqrt{2}$ cm is inscribed in a circle. What is the area (in cm^2) of the circle excluding the square (correct to the nearest integer)? (Use $\pi = \frac{22}{7}$)

- Ans**
- 1. 39
 - 2. 41
 - 3. 27
 - 4. 47

Question ID : **65497833089**
 Status : **Not Answered**
 Chosen Option : --

Q.7 The value of $\frac{3 \text{ of } 5\frac{1}{2} + 6 \div 5 - 2 \text{ of } 3 \div 4}{1 + \frac{3}{1} \text{ of } 5 - 3\frac{1}{3} \text{ of } 2 \div 5}$ is :

- Ans**
- 1. $\frac{243}{175}$
 - 2. $\frac{302}{105}$
 - 3. $\frac{247}{205}$
 - 4. $\frac{257}{302}$

Question ID : **65497833095**
 Status : **Answered**
 Chosen Option : 1

Q.8 The average score of 35 students in a class test is 46. Later, it was found that at two places 23 was read as 33, and at one place 36 was read as 30. What is the actual average score of the class?

- Ans**
- 1. 45.3
 - 2. 45.6
 - 3. 42.6
 - 4. 44.8

Question ID : **65497833108**
 Status : **Not Answered**
 Chosen Option : --

Q.9 A shopkeeper marks the marked price of an article 30% more than its real price and offers 10% discount. What is the gain percentage?

- Ans**
- 1. 15%
 - 2. 17%
 - 3. 18%
 - 4. 20%

Question ID : **65497833097**
 Status : **Answered**
 Chosen Option : 2

Q.10 Reshma spends 84% of her income. If her income increases by 30% and savings increase by 40%, then by what percentage will her expenditure increase (correct to one decimal place)?

- Ans**
- 1. 28.8%
 - 2. 27.2%
 - 3. 29.2%
 - 4. 28.1%

Question ID : 65497833099
Status : Not Answered
Chosen Option : --

Q.11 The simple interest on a certain sum at 6.4% p.a. for $3\frac{3}{4}$ years is ₹1,896. What will be the amount (in ₹) of the same sum at the same rate in $6\frac{1}{4}$ years?

- Ans**
- 1. 11,000
 - 2. 11,080
 - 3. 11,050
 - 4. 11,060

Question ID : 65497833107
Status : Not Answered
Chosen Option : --

Q.12 The average of 19 numbers is 58. The average of the first 12 numbers is 63.6 and the average of the last 8 numbers is 55.1. If the 12th number from the beginning is excluded, then what is the average of the remaining numbers?

- Ans**
- 1. $55\frac{5}{9}$
 - 2. $61\frac{1}{3}$
 - 3. $53\frac{2}{3}$
 - 4. $54\frac{4}{9}$

Question ID : 65497833105
Status : Not Answered
Chosen Option : --

Q.13 What is the volume of the largest right circular cone that can be cut out of a cube of edge 12 cm (correct to two decimal places)?

- Ans**
- 1. 282.30 cm³
 - 2. 452.57 cm³
 - 3. 395.65 cm³
 - 4. 290.90 cm³

Question ID : 65497833102
Status : Not Answered
Chosen Option : --

Q.14 If an alloy is to contain copper and zinc in the ratio of 5 : 4, how much quantity of copper is required to be melted with 20 kg of zinc?

- Ans**
- 1. 10 kg
 - 2. 12 kg
 - 3. 15 kg
 - 4. 25 kg

Question ID : 65497833100
Status : Answered
Chosen Option : 4

Q.15 The price of jeans was slashed from ₹1,250 to ₹1,150 by a shopkeeper. What is the discount percentage allowed by the shopkeeper?

- Ans**
- 1. 7.25%
 - 2. 10%
 - 3. 7.5%
 - 4. 8%

Question ID : 65497833109
Status : Answered
Chosen Option : 4

Q.16 Mr. Jugal Kishore invested a certain sum at simple interest for 4 years such that $\frac{2}{7}$ of the sum was invested at 7% p.a., $\frac{1}{5}$ of the sum at 9% p.a. and the remaining sum at 11% p.a. If the total interest received is ₹11,880, then the total sum invested is:

- Ans**
- 1. ₹30,000
 - 2. ₹35,000
 - 3. ₹38,000
 - 4. ₹32,000

Question ID : 65497833091
Status : Not Answered
Chosen Option : --

Q.17 If a, b and c are positive numbers such that $(a^2 + b^2) : (b^2 + c^2) : (c^2 + a^2) = 34 : 61 : 45$, then $a + b : b + c : c + a =$

- Ans**
- 1. 8 : 11 : 9
 - 2. 8 : 9 : 11
 - 3. 9 : 8 : 11
 - 4. 9 : 11 : 8

Question ID : 65497833088
Status : Answered
Chosen Option : 1

Q.18 Shyamlal marks his goods at 35% above the cost price and allows a discount of 5%. What is his percentage gain?

- Ans**
- 1. 28.50%
 - 2. 28.25%
 - 3. 28.75%
 - 4. 28%

Question ID : **65497833093**
Status : **Answered**
Chosen Option : **2**

Q.19 When the LCM of 34, 38, 85 and 95 is divided by the average of these numbers, the remainder is:

- Ans**
- 1. 19
 - 2. 23
 - 3. 17
 - 4. 21

Question ID : **65497833104**
Status : **Not Answered**
Chosen Option : --

Q.20 The speed of a bus increases by 4 km after every one hour. If the distance travelled in the first one hour was 55 km, then what was the total distance travelled in 13 hours?

- Ans**
- 1. 1050 km
 - 2. 1000 km
 - 3. 1100 km
 - 4. 1027 km

Question ID : **65497833096**
Status : **Answered**
Chosen Option : **4**

Q.21 By selling an article for ₹375, a man gains an amount such that the profit percentage is equal to cost price. The cost price of the article is:

- Ans**
- 1. ₹150
 - 2. ₹250
 - 3. ₹200
 - 4. ₹160

Question ID : **65497833090**
Status : **Not Answered**
Chosen Option : --

Q.22 A tank is filled in 3 hours by three pipes A, B and C. Pipe A is 6 times as fast as pipe C and 2 times as fast as pipe B. How many hours will pipes B and C take to fill the tank?

Ans

1. $7\frac{4}{5}$

2. 7

3. $7\frac{1}{4}$

4. $7\frac{1}{2}$

Question ID : 65497833111

Status : Not Answered

Chosen Option : --

Q.23 A can complete a work in 8 days. B can complete it in 12 days. With the assistance of C, they completed the work in 4 days. In how many days can C alone complete the same work?

Ans

1. 24 Days

2. 6 Days

3. 18 Days

4. 4 Days

Question ID : 65497833094

Status : Answered

Chosen Option : 1

Q.24 A man takes 2 hours to swim 25 km downstream. He swims 19 km upstream in the same time. What is the speed (in km/h) of the current?

Ans

1. 1.65

2. 2

3. 1.8

4. 1.5

Question ID : 65497833112

Status : Not Answered

Chosen Option : --

Q.25 Arun sold two articles for ₹631.80 each. On one he gained 17% and on the other he lost 19%. His loss percentage (correct to one decimal place) in the entire transaction is:

Ans

1. 5.4%

2. 4.8%

3. 5.2%

4. 4.3%

Question ID : 65497833103

Status : Answered

Chosen Option : 3

Section : Part D English

Q.1 Select the option that can be used as a one-word substitute for the given group of words.

A plan or route to be followed on a journey

- Ans
- 1. Travel
 - 2. Arrangement
 - 3. Itinerary
 - 4. Tour

Question ID : 65497833118
Status : Answered
Chosen Option : 3

Q.2 Select the most appropriate option to fill in the blank.

The guests were amazed at the _____ spread of food.

- Ans
- 1. lucky
 - 2. lavish
 - 3. lonely
 - 4. light

Question ID : 65497833128
Status : Answered
Chosen Option : 2

Q.3 Select the option that will improve the underlined part of the sentence. In case no improvement is needed, select 'No improvement required'.

We were took on the vineyards for a tour.

- Ans
- 1. take in
 - 2. taken on
 - 3. taken to
 - 4. No improvement required

Question ID : 65497833116
Status : Answered
Chosen Option : 3

Q.4 Select the option that will improve the underlined part of the given sentence. In case no improvement is needed, select 'No improvement required'.

Although he got the message he rushed home.

- Ans
- 1. No improvement required
 - 2. No sooner
 - 3. As soon as
 - 4. Hardly

Question ID : 65497833131
Status : Answered
Chosen Option : 3

Q.5 Select the option that can be used as a one-word substitute for the given group of words.

A type of substance or material that burns very quickly

- Ans 1. Incredible
 2. Inflammable
 3. Invisible
 4. Indelible

Question ID : 65497833126
Status : Answered
Chosen Option : 2

Q.6 Select the most appropriate ANTONYM of the given word.

Betterment

- Ans 1. Progress
 2. Prosperity
 3. Deterioration
 4. Advancement

Question ID : 65497833120
Status : Answered
Chosen Option : 3

Q.7 Select the most appropriate meaning of the given idiom.

As thick as two short planks

- Ans 1. Extremely stupid
 2. Extremely angry
 3. Extremely ugly
 4. Extremely intelligent

Question ID : 65497833123
Status : Answered
Chosen Option : 4

Q.8 Select the most appropriate meaning of the given idiom.

To beat the clock

- Ans 1. To be very angry for being late
 2. To brag about oneself
 3. To perform a task within the time limit
 4. To race against time

Question ID : 65497833127
Status : Answered
Chosen Option : 3

Q.9 Select the option that can be used as a one-word substitute for the given group of words.

A person who never drinks alcohol.

- Ans
- 1. Alcoholic
 - 2. Abandoner
 - 3. Noctambulist
 - 4. Teetotaler

Question ID : 65497833121
Status : Answered
Chosen Option : 4

Q.10 Parts of the given sentence have been given as options. One of them contains a grammatical error. Select the option that has the error.

I could not went for my sister's wedding in Rajasthan as I had my final examination at that time.

- Ans
- 1. at that time
 - 2. as I had
 - 3. could not went
 - 4. sister's wedding in Rajasthan

Question ID : 65497833119
Status : Answered
Chosen Option : 3

Q.11 Select the most appropriate synonym of the given word.

Sturdy

- Ans
- 1. Delicate
 - 2. Unhealthy
 - 3. Tough
 - 4. Active

Question ID : 65497833115
Status : Answered
Chosen Option : 2

Q.12 Select the most appropriate option to fill in the blank.

It looks as if it might rain tonight as the sky is _____.

- Ans
- 1. overjoyed
 - 2. overdue
 - 3. oversized
 - 4. overcast

Question ID : 65497833130
Status : Answered
Chosen Option : 4

Q.13 Select the INCORRECTLY spelt word.

- Ans 1. Mutter
 2. Hotal
 3. Guard
 4. Strain

Question ID : 65497833129
Status : Answered
Chosen Option : 2

Q.14 Select the INCORRECTLY spelt word.

- Ans 1. Occasion
 2. Offering
 3. Occurence
 4. Auction

Question ID : 65497833122
Status : Answered
Chosen Option : 3

Q.15 Select the most appropriate option to fill in the blank.

Tukaram said that scaling every mountain peak has its own _____.

- Ans 1. checks
 2. contests
 3. burdens
 4. challenges

Question ID : 65497833113
Status : Answered
Chosen Option : 4

Q.16 The following sentence has been split into four segments. Identify the segment that contains a grammatical error.

If I will meet / my friend today, / I shall give / him this book.

- Ans 1. him this book
 2. I shall give
 3. my friend today
 4. If I will meet

Question ID : 65497833124
Status : Answered
Chosen Option : 4

Q.17 Select the most appropriate synonym of the given word.

Steady

- Ans 1. Shaky
 2. Soft
 3. Flexible
 4. Stable

Question ID : 65497833125
Status : Answered
Chosen Option : 4

Q.18 Select the option that will improve the underlined part of the given sentence. In case no improvement is needed, select 'No improvement required'.

The students felt a shame by their bad behaviour.

- Ans
- 1. feel shame on
 - 2. felt ashamed by
 - 3. No improvement required
 - 4. felt ashamed for

Question ID : 65497833117
Status : Answered
Chosen Option : 4

Q.19 The following sentence has been split into four segments. Identify the segment that contains a grammatical error.

The Nature Channel / gives a lots of / interesting information / on wildlife.

- Ans
- 1. interesting information
 - 2. The Nature Channel
 - 3. on wildlife
 - 4. gives a lots of

Question ID : 65497833114
Status : Answered
Chosen Option : 4

Q.20 Select the most appropriate ANTONYM of the given word.

Volatile

- Ans
- 1. Certain
 - 2. Subtle
 - 3. Erratic
 - 4. Flighty

Question ID : 65497833132
Status : Answered
Chosen Option : 2

Comprehension:

In the following passage, some words have been deleted. Read the passage carefully and select the most appropriate option to fill in each blank.

The pandemic (1)_____ created a very difficult situation (2)_____ the migrant workers. They were forced to (3)_____ long distances (4)_____ foot to reach their native places. On the way, several people suffered (5)_____ and died too.

SubQuestion No : 21

Q.21 Select the most appropriate option to fill in blank number 1.

- Ans
- 1. has
 - 2. would
 - 3. may
 - 4. is

Question ID : 65497833134
Status : Answered
Chosen Option : 1

Comprehension:

In the following passage, some words have been deleted. Read the passage carefully and select the most appropriate option to fill in each blank.

The pandemic (1)_____ created a very difficult situation (2)_____ the migrant workers. They were forced to (3)_____ long distances (4)_____ foot to reach their native places. On the way, several people suffered (5)_____ and died too.

SubQuestion No : 22

Q.22 Select the most appropriate option to fill in blank number 2.

- Ans 1. for
 2. from
 3. at
 4. out of

Question ID : 65497833135
Status : Answered
Chosen Option : 1

Comprehension:

In the following passage, some words have been deleted. Read the passage carefully and select the most appropriate option to fill in each blank.

The pandemic (1)_____ created a very difficult situation (2)_____ the migrant workers. They were forced to (3)_____ long distances (4)_____ foot to reach their native places. On the way, several people suffered (5)_____ and died too.

SubQuestion No : 23

Q.23 Select the most appropriate option to fill in blank number 3.

- Ans 1. sleep
 2. stand
 3. travel
 4. rumble

Question ID : 65497833136
Status : Answered
Chosen Option : 3

Comprehension:

In the following passage, some words have been deleted. Read the passage carefully and select the most appropriate option to fill in each blank.

The pandemic (1)_____ created a very difficult situation (2)_____ the migrant workers. They were forced to (3)_____ long distances (4)_____ foot to reach their native places. On the way, several people suffered (5)_____ and died too.

SubQuestion No : 24

Q.24 Select the most appropriate option to fill in blank number 4.

- Ans 1. in
 2. to
 3. on
 4. from

Question ID : 65497833137
Status : Answered
Chosen Option : 3

Comprehension:

In the following passage, some words have been deleted. Read the passage carefully and select the most appropriate option to fill in each blank.

The pandemic (1)_____ created a very difficult situation (2)_____ the migrant workers. They were forced to (3)_____ long distances (4)_____ foot to reach their native places. On the way, several people suffered (5)_____ and died too.

SubQuestion No : 25

Q.25 Select the most appropriate option to fill in blank number 5.

- Ans
- 1. excitedly
 - 2. posthumously
 - 3. miserably
 - 4. haphazardly

Question ID : 65497833138
Status : Answered
Chosen Option : 4

Section : Part D Hindi

Q.1 दिये गये वाक्य में रेखांकित अश को प्रतिस्थापित करने के लिए सबसे उपयुक्त विकल्प का चयन करें।

गिरीश ने अपने पाँव से जूता निकाला।

- Ans
- 1. जूता खिसकाया।
 - 2. जूता उतारा।
 - 3. जूता हटाया।
 - 4. जूता गिराया।

Question ID : 65497833157
Status : Not Answered
Chosen Option : --

Q.2 दिए गए शब्द का विलोम चुनें।

ज्ञान

- Ans
- 1. विज्ञान
 - 2. अज्ञान
 - 3. सज्ञान
 - 4. अहकार

Question ID : 65497833144
Status : Not Answered
Chosen Option : --

Q.3 दिए गए शब्द का विलोम चुनें।

अथ

- Ans
- 1. शुरू
 - 2. इति
 - 3. उद्घाटन
 - 4. प्रारंभ

Question ID : 65497833147
Status : Not Answered
Chosen Option : --

Q.4 निम्नलिखित में से शुद्ध वर्तनी वाला शब्द कौन सा है?

- Ans
- 1. वक्षनीय
 - 2. वछनीय
 - 3. वाक्षनीय
 - 4. वाछनीय

Question ID : 65497833155
Status : Not Answered
Chosen Option : --

Q.5 दिये गये वाक्य में रेखांकित अश को प्रतिस्थापित करने के लिए सबसे उपयुक्त विकल्प का चयन करें।

यह विषय अत्यंत कठोर है।

- Ans
- 1. दुर्गम
 - 2. अगम
 - 3. कठिन
 - 4. कर्कश

Question ID : 65497833156
Status : Not Answered
Chosen Option : --

Q.6 दिये गये वाक्य के किस भाग में त्रुटि है?

आज विद्यालय के निरिक्षक आए हैं।

- Ans
- 1. आए हैं।
 - 2. आज
 - 3. विद्यालय के
 - 4. निरिक्षक

Question ID : 65497833152
Status : Not Answered
Chosen Option : --

Q.7 निम्नलिखित में से शुद्ध वर्तनी वाला शब्द कौन सा है?

- Ans
- 1. घनीष्ट
 - 2. घनिष्ट
 - 3. घनिष्ठ
 - 4. घनीष्ठ

Question ID : 65497833154
Status : Not Answered
Chosen Option : --

Q.8 दिए गए वाक्य में रेखांकित खंड को प्रतिस्थापित करने के लिए सबसे उपयुक्त विकल्प का चयन करें। यदि इसे प्रतिस्थापित करने की आवश्यकता नहीं है, तो विकल्प 'किसी बदलाव की आवश्यकता नहीं है' का चयन करें।

गंदे पानी की समुचित निकासी का प्रबंध न होने के कारण समस्त गाँव की जनसंख्या परेशान है।

- Ans
- 1. सारे गाँव की जनसंख्या परेशान है।
 - 2. किसी बदलाव की आवश्यकता नहीं है।
 - 3. समस्त गाँवों की जनसंख्या परेशान है।
 - 4. गाँव की समस्त जनसंख्या परेशान है।

Question ID : 65497833141
Status : Not Answered
Chosen Option : --

Q.9 दिये गये वाक्यांश के लिए एक शब्द दीजिये।

चोरी के लिए मकान की दीवार में किया गया बड़ा सा छेद

- Ans
- 1. स्तंभ
 - 2. संघ
 - 3. भेद्य
 - 4. दुर्भेद्य

Question ID : 65497833145
Status : Not Answered
Chosen Option : --

Q.10 दिए गए वाक्य का वह भाग ज्ञात करें जिसमें कोई त्रुटि है। यदि कोई त्रुटि नहीं है, तो 'कोई त्रुटि नहीं है' चुनें।

मुझे उसके विरुद्ध कुछ कहना या करना ही नहीं पड़ा।

- Ans
- 1. कोई त्रुटि नहीं है।
 - 2. मुझे उसके विरुद्ध
 - 3. ही नहीं पड़ा।
 - 4. कुछ कहना या करना

Question ID : 65497833143
Status : Not Answered
Chosen Option : --

Q.11 रिक्त स्थान की पूर्ति के लिए सबसे उपयुक्त शब्द का चयन करें।

मैं _____ नहीं जानता कि वह कहा गया।

- Ans
- 1. बिलकुल
 - 2. बिलकुल ही
 - 3. बिलकुल भी
 - 4. बिलकुल तो

Question ID : 65497833146
Status : Not Answered
Chosen Option : --

Q.12 दिये गये वाक्यांश के लिए एक शब्द दीजिये।

जिसके आर-पार दिखाई देता हो

- Ans
- 1. पारलौकिक
 - 2. पारदर्शी
 - 3. प्रत्यागत
 - 4. प्रकाश्य

Question ID : 65497833142
Status : Not Answered
Chosen Option : --

Q.13 'चक्षु' किसका पर्यायवाची है?

- Ans
- 1. आँख
 - 2. घोड़ा
 - 3. आकाश
 - 4. पक्षी

Question ID : 65497833153
Status : Not Answered
Chosen Option : --

Q.14 दिए गए वाक्य का वह भाग ज्ञात करें जिसमें कोई त्रुटि है। यदि कोई त्रुटि नहीं है, तो 'कोई त्रुटि नहीं है' विकल्प चुनें।

वह चार दिन का (1)\ आकस्मिक अवकाश पर (2)\ घर चला गया है। (3)\ कोई त्रुटि नहीं है (4)

- Ans
- 1. 4
 - 2. 1
 - 3. 3
 - 4. 2

Question ID : 65497833139
Status : Not Answered
Chosen Option : --

Q.15 रिक्त स्थान की पूर्ति के लिए सबसे उपयुक्त विकल्प का चयन करें।

मुझे बच्चे के स्वास्थ्य की _____ है।

- Ans
- 1. ग्लानि
 - 2. चिंता
 - 3. लज्जा
 - 4. शका

Question ID : 65497833151
Status : Not Answered
Chosen Option : --

Q.16 उस विकल्प का चयन कीजिए जिसमें निम्न मुहावरे का अर्थ दिया गया है।

आकाश के तारे तोड़ना-

- Ans 1. असभव काम करना
 2. काम तमाम करना
 3. आसमान छूने की कोशिश करना
 4. आसमान से तारे तोड़ने की कोशिश करना

Question ID : 65497833149
Status : Not Answered
Chosen Option : --

Q.17 रिक्त स्थान की पूर्ति के लिए सबसे उपयुक्त विकल्प का चयन करें।

खेलकूद में _____ अच्छी बात है।

- Ans 1. द्वेष
 2. क्रोध
 3. ईर्ष्या
 4. स्पद्धा

Question ID : 65497833150
Status : Not Answered
Chosen Option : --

Q.18 दिए गए शब्द के समानार्थी शब्द का चयन करें।

आश्रम

- Ans 1. विहार
 2. मकान
 3. इमारत
 4. भवन

Question ID : 65497833140
Status : Not Answered
Chosen Option : --

Q.19 उस विकल्प का चयन कीजिए जिसमें निम्न मुहावरे का अर्थ दिया गया है।

पर निकलना

- Ans 1. दूसरो का हो जाना
 2. घायल हो जाना
 3. स्वच्छद हो जाना
 4. पराधीन हो जाना

Question ID : 65497833148
Status : Not Answered
Chosen Option : --

Q.20 'जहाँ तक और जितना सभव हो' वाक्यांश के लिए उपयुक्त शब्द होगा-

- Ans 1. सभाव्य
 2. यथासभव
 3. सभावना
 4. सभवतः

Question ID : 65497833158
Status : Not Answered
Chosen Option : --

Comprehension:

दिए गए गद्यांश में से कुछ शब्द हटा दिए गए हैं। संबंधित प्रश्नों में, प्रत्येक सख्या के लिए सबसे उपयुक्त विकल्प का चयन करें-

मैं दिल्ली हूँ। सबसे पहले पांडवों ने मुझे (1) _____ और नाम रखा- इन्द्रप्रस्थ। वास्तव में मेरा सौन्दर्य इंद्र की अलकापुरी के (2) _____ था। युग बदला। मैं गुप्तवंश के (3) _____ हुई। मुगलों के शासन में मेरा (4) _____ बहुत बढ़ा। अंग्रेजों को भी मैं ही सबसे अधिक (5) _____ हुई, इसीलिए वे कलकत्ता से अपने मुख्य कार्यालयों को मेरे यहाँ ही ले आये।

SubQuestion No : 21

Q.21 गद्यांश के रिक्त स्थान (1) के लिए सर्वाधिक उपयुक्त शब्द होगा-

- Ans 1. उठाया
 2. चलाया
 3. बनाया
 4. बसाया

Question ID : 65497833160
Status : Not Answered
Chosen Option : --

Comprehension:

दिए गए गद्यांश में से कुछ शब्द हटा दिए गए हैं। संबंधित प्रश्नों में, प्रत्येक सख्या के लिए सबसे उपयुक्त विकल्प का चयन करें-

मैं दिल्ली हूँ। सबसे पहले पांडवों ने मुझे (1) _____ और नाम रखा- इन्द्रप्रस्थ। वास्तव में मेरा सौन्दर्य इंद्र की अलकापुरी के (2) _____ था। युग बदला। मैं गुप्तवंश के (3) _____ हुई। मुगलों के शासन में मेरा (4) _____ बहुत बढ़ा। अंग्रेजों को भी मैं ही सबसे अधिक (5) _____ हुई, इसीलिए वे कलकत्ता से अपने मुख्य कार्यालयों को मेरे यहाँ ही ले आये।

SubQuestion No : 22

Q.22 गद्यांश के रिक्त स्थान (2) के लिए सर्वाधिक उपयुक्त शब्द होगा-

- Ans 1. प्रकार
 2. समान
 3. सुन्दर
 4. अनुसार

Question ID : 65497833161
Status : Not Answered
Chosen Option : --

Comprehension:

दिए गए गद्यांश में से कुछ शब्द हटा दिए गए हैं। सबधित प्रश्नों में, प्रत्येक सख्या के लिए सबसे उपयुक्त विकल्प का चयन करें-

मैं दिल्ली हूँ। सबसे पहले पाडवो ने मुझे (1) _____ और नाम रखा- इन्द्रप्रस्थ। वास्तव में मेरा सौन्दर्य इद्र की अलकापुरी के (2) _____ था। युग बदला। मैं गुप्तश के (3) _____ हुई। मुगलो के शासन में मेरा (4) _____ बहुत बढ़ा। अंग्रेजो को भी मैं ही सबसे अधिक (5) _____ हुई, इसीलिए वे कलकत्ता से अपने मुख्य कार्यालयो को मेरे यहाँ ही ले आये।

SubQuestion No : 23

Q.23 गद्यांश के रिक्त स्थान (3) के लिए सर्वाधिक उपयुक्त शब्द होगा-

- Ans** 1. अधीन
 2. जैसी
 3. अन्दर
 4. ऊपर

Question ID : 65497833162

Status : Not Answered

Chosen Option : --

Comprehension:

दिए गए गद्यांश में से कुछ शब्द हटा दिए गए हैं। सबधित प्रश्नों में, प्रत्येक सख्या के लिए सबसे उपयुक्त विकल्प का चयन करें-

मैं दिल्ली हूँ। सबसे पहले पाडवो ने मुझे (1) _____ और नाम रखा- इन्द्रप्रस्थ। वास्तव में मेरा सौन्दर्य इद्र की अलकापुरी के (2) _____ था। युग बदला। मैं गुप्तश के (3) _____ हुई। मुगलो के शासन में मेरा (4) _____ बहुत बढ़ा। अंग्रेजो को भी मैं ही सबसे अधिक (5) _____ हुई, इसीलिए वे कलकत्ता से अपने मुख्य कार्यालयो को मेरे यहाँ ही ले आये।

SubQuestion No : 24

Q.24 गद्यांश के रिक्त स्थान (4) के लिए सर्वाधिक उपयुक्त शब्द होगा-

- Ans** 1. उजड़ना
 2. उत्सव
 3. सजना
 4. महत्त्व

Question ID : 65497833163

Status : Not Answered

Chosen Option : --

Comprehension:

दिए गए गद्यांश में से कुछ शब्द हटा दिए गए हैं। सबधित प्रश्नों में, प्रत्येक सख्या के लिए सबसे उपयुक्त विकल्प का चयन करें-

मैं दिल्ली हूँ। सबसे पहले पाडवो ने मुझे (1) _____ और नाम रखा- इन्द्रप्रस्थ। वास्तव में मेरा सौन्दर्य इद्र की अलकापुरी के (2) _____ था। युग बदला। मैं गुप्तश के (3) _____ हुई। मुगलो के शासन में मेरा (4) _____ बहुत बढ़ा। अंग्रेजो को भी मैं ही सबसे अधिक (5) _____ हुई, इसीलिए वे कलकत्ता से अपने मुख्य कार्यालयो को मेरे यहाँ ही ले आये।

SubQuestion No : 25

Q.25 गद्यांश के रिक्त स्थान (5) के लिए सर्वाधिक उपयुक्त शब्द होगा-

- Ans** 1. प्रिय
 2. बुरी
 3. सुन्दर
 4. अच्छी

Question ID : 65497833164

Status : Not Answered

Chosen Option : --