

Exam Date	23/11/2021
Exam Time :	4:00 PM - 5:30 PM
Subject	Constable GD 2021

Section : Part A General Intelligence and Reasoning

Q.1 Eight officers A, B, C, D, E, F, G and H are attending a meeting sitting clockwise around a circular table in the same sequence. All are facing the centre of the table and have equal distances between them. If D is facing the north-west direction, in which direction is F sitting?

- Ans 1. South-west
 2. North-east
 3. South-east
 4. North-west

Question ID : 65497829121
 Status : Answered
 Chosen Option : 2

Q.2 In a certain code language, 'READY' is written as 'IVZWB'. How will 'PERFORM' be written in that language?

- Ans 1. KVPREFJ
 2. RPLIFIRE
 3. KVIULIN
 4. LORPREFI

Question ID : 65497829108
 Status : Answered
 Chosen Option : 3

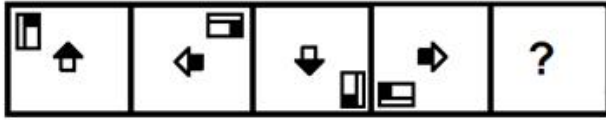
Q.3 Select the correct option that indicates the arrangement of the given words in the order in which they appear in an English dictionary.

1. Rotate
2. Rose
3. Resolute
4. Repair
5. Recreate

- Ans 1. 4, 5, 3, 2, 1
 2. 5, 4, 3, 1, 2
 3. 5, 4, 3, 2, 1
 4. 1, 4, 3, 2, 5

Question ID : 65497829113
 Status : Answered
 Chosen Option : 3

Q.4 Select the figure that will come next in the following figure series.



Ans

- 1.
- 2.
- 3.
- 4.

Question ID : 65497829116
 Status : Answered
 Chosen Option : 3

Q.5 Select the option that is related to the fourth number in the same way as the first number is related to the second number and the fifth number is related to the sixth number.

9 : 44001 :: ? : 46521 :: 14 : 55211

- Ans
- 1. 14
 - 2. 18
 - 3. 20
 - 4. 10

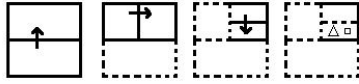
Question ID : 65497829122
 Status : Answered
 Chosen Option : 2

Q.6 'Tailor' is related to 'Dress' in the same way as 'Cobbler' is related to '_____'. .

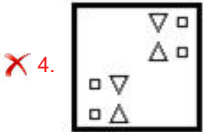
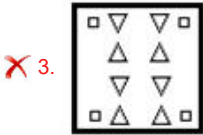
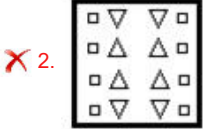
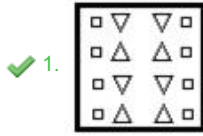
- Ans
- 1. Shoes
 - 2. Cycle
 - 3. Furniture
 - 4. Building

Question ID : 65497829118
 Status : Answered
 Chosen Option : 3

Q.7 The sequence of folding a piece of paper and the manner in which the folded paper has been cut is shown in the following figures. How would this paper look when unfolded?



Ans



Question ID : 65497829112

Status : Answered

Chosen Option : 1

Q.8 Seven friends S, T, U, V, W, X and Y, are sitting around a circle with their backs towards the centre. There are three persons between Y and V. W is sitting to the immediate right of V. U is sitting between Y and X. T is not the neighbour of W or Y. S is the neighbour of W. Who is sitting between V and X?

Ans ✓ 1. T

✗ 2. S

✗ 3. Y

✗ 4. U

Question ID : 65497829119

Status : Answered

Chosen Option : 1

Q.9 Vishal is the husband of Narmada. Pratik is the brother of Gaurvi. Kartik is the son of Prathmesh, who is the husband of Arti. Arti's son is married to Narmada. Gaurvi is the daughter of Vishal. How is Prathmesh related to Gaurvi?

Ans ✗ 1. Paternal uncle

✗ 2. Maternal grandfather

✗ 3. Maternal uncle

✓ 4. Paternal grandfather

Question ID : 65497829103

Status : Answered

Chosen Option : 4

Q.10 In a certain code language, 'TARGET' is coded as '219752' and 'PRIZE' is coded as '79985'. How will 'QUEEN' be coded in that language?

- Ans
- 1. 73554
 - 2. 83555
 - 3. 83225
 - 4. 82554

Question ID : 65497829105
Status : Answered
Chosen Option : 2


Q.11 Select the letter-cluster from among the given options that can replace the question mark (?) in the following series.

MLW, JJV, GHU, ?

- Ans
- 1. EGR
 - 2. DFT
 - 3. FFS
 - 4. GET

Question ID : 65497829117
Status : Answered
Chosen Option : 2

Q.12 A cube is made by folding the given sheet. In the cube so formed, what would be the letter on the opposite side of the letter 'A'?



- Ans
- 1. D
 - 2. C
 - 3. B
 - 4. F

Question ID : 65497829124
Status : Answered
Chosen Option : 2

Q.13 Select the option that is embedded in the given figure (rotation is NOT allowed).



Ans

- 1.
- 2.
- 3.
- 4.

Question ID : 65497829125
Status : Answered
Chosen Option : 4

Q.14 Select the number from among the given options that can replace the question mark (?) in the following series.

40, 46, 58, 82, 130, ?

- Ans
- 1. 206
 - 2. 226
 - 3. 174
 - 4. 166

Question ID : 65497829115
Status : Answered
Chosen Option : 2

Q.15 Select the option that is related to the third term in the same way as the second term is related to the first term.

NOSE : ENOS :: PROUD : ?

- Ans
- 1. DOPRU
 - 2. DUROP
 - 3. OUPDR
 - 4. RPUOD

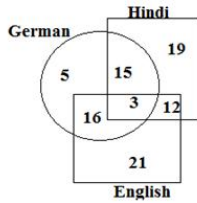
Question ID : 65497829101
Status : Answered
Chosen Option : 1

Q.16 Four letter-clusters have been given, out of which three are alike in some manner and one is different. Select the letter-cluster that is different.

- Ans
- 1. KNQTW
 - 2. CGILN
 - 3. DGJMP
 - 4. PSVYB

Question ID : 65497829104
Status : Answered
Chosen Option : 2

Q.17 The given diagram shows the number of students who know different languages (Hindi, English and German).



What is the number of students who know English and German both but do NOT know Hindi?

- Ans
- 1. 3
 - 2. 12
 - 3. 15
 - 4. 16

Question ID : 65497829120

Status : Answered

Chosen Option : 4

Q.18 Read the given statements and conclusions carefully. Assuming that the information given in the statements is true, even if it appears to be at variance with commonly known facts, decide which of the given conclusions logically follow(s) from the statements.

Statements:

1. All needles are papers.
2. Some needles are knives.

Conclusions:

- I. Some knives are papers.
- II. No paper is a knife.

- Ans
- 1. Both the conclusions follow
 - 2. Only conclusion I follows
 - 3. Only conclusion II follows
 - 4. Neither conclusion I nor II follows

Question ID : 65497829109

Status : Answered

Chosen Option : 2

Q.19 What will be the value of the given expression if 'A' means '+', 'B' means '-', 'C' means 'x', and 'D' means '÷'?

$$27 \text{ D } 3 \text{ A } 5 \text{ A } (9 \text{ C } 6) \text{ B } 15 \text{ A } (14 \text{ B } 11) \text{ C } 6 = ?$$

- Ans
- 1. 81
 - 2. 71
 - 3. 43
 - 4. 54

Question ID : 65497829123

Status : Answered

Chosen Option : 2

Q.20 Select the correct mirror image of the given combination when the mirror is placed at the right side.

8 5 6 w q a

Ans

✓ 1. 8 p w ɔ̂ ɔ̂ 8

✗ 2. 8 p w ɔ̂ 9 8

✗ 3. 8 b w 9 ɔ̂ 8

✗ 4. a p w ɔ̂ ɔ̂ 8

Question ID : 65497829107

Status : Answered

Chosen Option : 1

Q.21 Select the number from among the given options that can replace the question mark (?) in the following series.

7, 14, 17, 68, 73, ?

Ans

✗ 1. 408

✓ 2. 438

✗ 3. 528

✗ 4. 432

Question ID : 65497829106

Status : Answered

Chosen Option : 2

Q.22 The total of the salary of Mandeep and Swati is ₹85,000. The total of the salary of Swati and Yukti is ₹60,000. If Swati's salary is ₹10,000 more than the salary of Yukti, then what is the salary of Mandeep?

Ans

✗ 1. ₹25,000

✗ 2. ₹35,000

✗ 3. ₹40,000

✓ 4. ₹50,000

Question ID : 65497829111

Status : Answered

Chosen Option : 4

Q.23 Select the option in which the numbers are related in the same way as are the numbers in the given set.

(9, 45, 10)

Ans

✗ 1. (5, 75, 26)

✗ 2. (7, 40, 12)

✓ 3. (8, 72, 18)

✗ 4. (6, 85, 22)

Question ID : 65497829110

Status : Answered

Chosen Option : 3

Q.24 In a certain code language, 'DUMP' is written as 'ETNQ' and 'EAGER' is written as 'DZHDS'. How will 'FINGER' be written in that language?

- Ans
- 1. HHOHDS
 - 2. IFGNRE
 - 3. GHOHDS
 - 4. GJOHQS

Question ID : 65497829102
Status : Answered
Chosen Option : 3

Q.25 Select the combination of letters that when sequentially placed in the blanks of the given series will complete the series.

G _ C T _ X _ T G X _ T _ X C T G _ C T

- Ans
- 1. T G C C G G
 - 2. X G C C G X
 - 3. X X C G G Y
 - 4. X G C C C G

Question ID : 65497829114
Status : Answered
Chosen Option : 2

Section : Part B General Knowledge and General Awareness

Q.1 Who is known as the founding father of macroeconomics?

- Ans
- 1. John Maynard Keynes
 - 2. Alfred Marshall
 - 3. Adam Smith
 - 4. Paul Samuelson

Question ID : 65497829144
Status : Answered
Chosen Option : 3

Q.2 The value of the Special Drawing Right (SDR) of the International Monetary Fund is determined by a basket of currencies consisting of _____ currencies.

- Ans
- 1. six
 - 2. five
 - 3. seven
 - 4. eight

Question ID : 65497829136
Status : Not Answered
Chosen Option : --

Q.3 India's first seaplane service was launched in October 2020 in:

- Ans
- 1. Karnataka
 - 2. Kerala
 - 3. Goa
 - 4. Gujarat

Question ID : 65497829141
Status : Answered
Chosen Option : 4

Q.4 Which of the following is a folk dance performed by the 'tea tribes' of Assam?

- Ans
- 1. Alkap
 - 2. Barao
 - 3. Domkach
 - 4. Jhumur

Question ID : 65497829130
Status : Answered
Chosen Option : 4

Q.5 During India's independence movement, who was the only President of the Indian National Congress who resigned from the presidency even after being elected?

- Ans
- 1. Dadabhai Naoroji
 - 2. Subhash Chandra Bose
 - 3. Abul Kalam Azad
 - 4. Vallabhbhai Patel

Question ID : 65497829140
Status : Answered
Chosen Option : 2

Q.6 Who among the following was one of the Congress leaders who drafted a Constitution for India in 1928?

- Ans
- 1. Motilal Nehru
 - 2. Jaipal Singh
 - 3. Somnath Lahiri
 - 4. Shyama Prasad Mukherjee

Question ID : 65497829142
Status : Answered
Chosen Option : 1

Q.7 When is Indian Army Day celebrated every year?

- Ans
- 1. 15 January
 - 2. 8 March
 - 3. 5 June
 - 4. 23 October

Question ID : 65497829143
Status : Answered
Chosen Option : 1

Q.8 In 1944, the Battle of Imphal was fought between the British Army and the _____ Army.

- Ans
- 1. Japanese
 - 2. Dutch
 - 3. Chinese
 - 4. French

Question ID : 65497829126
Status : Not Answered
Chosen Option : --

Q.9 Which of the following is an Arthropod?

- Ans 1. Liver fluke
 2. Millipede
 3. Snail
 4. Leech

Question ID : 65497829139
Status : Not Answered
Chosen Option : --

Q.10 Which of the following is India's first river interlinking project?

- Ans 1. Palar - Bhavani
 2. Ken - Betwa
 3. Vaigai - Noyyal
 4. Kosi - Gandak

Question ID : 65497829134
Status : Answered
Chosen Option : 4

Q.11 Which district of Odisha has the highest peak of the Eastern Ghats?

- Ans 1. Koraput
 2. Balangir
 3. Boudh
 4. Angul

Question ID : 65497829131
Status : Not Answered
Chosen Option : --

Q.12 Which of the following statements about camels is INCORRECT?

- Ans 1. Their dung is dry.
 2. They excrete small amounts of urine.
 3. They live in terrestrial habitats.
 4. They sweat a lot.

Question ID : 65497829148
Status : Answered
Chosen Option : 3

Q.13 Which of the following is paired CORRECTLY?

- Ans 1. Fixed/immovable joint: Elbow
 2. Ball and socket joint: Upper jaw-head
 3. Hinge joint: Shoulder
 4. Pivotal joint: Neck-head

Question ID : 65497829149
Status : Answered
Chosen Option : 3

Q.14 Which of the following is a stringed musical instrument?

- Ans 1. Jantar
 2. Bungal/Bhungal
 3. Turi
 4. Zanz

Question ID : 65497829147
Status : Not Answered
Chosen Option : --

Q.15 In October 2020, the Government of India launched the SERB - POWER Scheme with the objective of promoting opportunities for:

- Ans 1. youth in medical research
 2. women in exploratory research
 3. women in biotechnology research
 4. youth in educational research

Question ID : 65497829129
Status : Answered
Chosen Option : 3

Q.16 In which prison did Mahatma Gandhi go on a hunger strike in protest of the British Government's decision to separate India's electoral system by caste, in the year 1932?

- Ans 1. Dongri
 2. Yerwada
 3. Byculla
 4. Bhoiwada

Question ID : 65497829132
Status : Answered
Chosen Option : 2

Q.17 The Preamble to the Constitution of India is based on the Objective Resolution moved by Jawaharlal Nehru in the Constituent Assembly on _____.

- Ans 1. 4 November 1946
 2. 13 December 1946
 3. 29 August 1947
 4. 14 February 1945

Question ID : 65497829128
Status : Not Answered
Chosen Option : --

Q.18 Which of the following was set up as the apex level institution for housing in India?

- Ans 1. Maharashtra Housing and Area Development Authority
 2. Delhi Development Authority
 3. The Housing Development Finance Corporation
 4. National Housing Bank

Question ID : 65497829138
Status : Answered
Chosen Option : 4

Q.19 Which of the following does NOT refer to movements in the oceans?

- Ans
- 1. Waves
 - 2. Currents
 - 3. Reflections
 - 4. Tides

Question ID : 65497829145
Status : Answered
Chosen Option : 3

Q.20 'The Other Side of Silence: Voices from the Partition of India' is a book by _____.

- Ans
- 1. Yasmin Khan
 - 2. Ayesha Jalal
 - 3. Bapsi Sidhwa
 - 4. Urvashi Butalia

Question ID : 65497829150
Status : Not Answered
Chosen Option : --

Q.21 Robert Clive, who was one of the founders of the establishment of British supremacy in India, came to India in the year:

- Ans
- 1. 1543
 - 2. 1733
 - 3. 1743
 - 4. 1643

Question ID : 65497829137
Status : Answered
Chosen Option : 3

Q.22 Who among the following was the first Indian woman to participate in the Olympic golf tournament?

- Ans
- 1. D ksha Dagar
 - 2. Aditi Ashok
 - 3. Sharmila Nicollet
 - 4. Smriti Mehra

Question ID : 65497829135
Status : Not Answered
Chosen Option : --

Q.23 Christian Coleman, who was banned for two years from 14 May 2020 for anti-doping violations, is associated with _____.

- Ans
- 1. boxing
 - 2. tennis
 - 3. swimming
 - 4. athletics

Question ID : 65497829146
Status : Not Answered
Chosen Option : --

Q.24 Under whose advice did Mahatma Gandhi decide to travel throughout India for a year, getting to know the land and its people since arriving in India from South Africa in 1915?

- Ans
- 1. Motilal Nehru
 - 2. Gopal Krishna Gokhale
 - 3. Bal Gangadhar Tilak
 - 4. Subhash Chandra Bose

Question ID : 65497829127
Status : Answered
Chosen Option : 2

Q.25 Since which year has Kabaddi been recognised as a full-fledged sport at the Asian Games?

- Ans
- 1. 2000
 - 2. 1994
 - 3. 1996
 - 4. 1990

Question ID : 65497829133
Status : Not Answered
Chosen Option : --

Section : Part C Elementary Mathematics

Q.1 If 20 men can complete a work in 36 days, then how many men can complete three-fourth of the same work in 18 days?

- Ans
- 1. 40
 - 2. 30
 - 3. 15
 - 4. 20

Question ID : 65497829155
Status : Answered
Chosen Option : 2

Q.2 A can complete a task in 15 hours and B can do it in 30 hours. After A had worked for 5 hours, B also joined A to finish the remaining task. In how much time will the remaining work be completed?

- Ans
- 1. 6 hours 40 minutes
 - 2. 5 hours 30 minutes
 - 3. 6 hours 20 minutes
 - 4. 5 hours 40 minutes

Question ID : 65497829166
Status : Answered
Chosen Option : 1

Q.3 If $x : y = 5 : 8$, then what is $(4x - 3y) : (4x - 7y)$?

- Ans
- 1. 1 : 9
 - 2. 1 : 1
 - 3. 11 : 19
 - 4. 9 : 1

Question ID : 65497829151
Status : Answered
Chosen Option : 1

Q.4 A retailer buys an article at a discount of 20% and sells it for ₹2,200, making a profit of 10%. What is the discount (in ₹)?

- Ans
- 1. ₹400
 - 2. ₹300
 - 3. ₹500
 - 4. ₹200

Question ID : 65497829156
Status : Answered
Chosen Option : 3

Q.5 At what rate percentage per annum (p.a.), will a sum of money double in $8\frac{1}{3}$ years simple interest?

- Ans
- 1. 8.5% p.a.
 - 2. 12% p.a.
 - 3. 7% p.a.
 - 4. 8% p.a.

Question ID : 65497829169
Status : Answered
Chosen Option : 2

Q.6 If the area of a rectangle with dimensions 18 m \times 50 m is the same as that of a square, then what is the length of the side of the square?

- Ans
- 1. 34 m
 - 2. 17.5 m
 - 3. 15 m
 - 4. 30 m

Question ID : 65497829152
Status : Answered
Chosen Option : 4

Q.7 The average of the resultant of three times of A and four times of B is 17. Also, the average of the resultant of four times of A and three times of B is 18. The sum of A and B is:

- Ans
- 1. 15
 - 2. 16
 - 3. 12
 - 4. 10

Question ID : 65497829163
Status : Answered
Chosen Option : 4

Q.8 A train takes 50 minutes to cover a certain distance at a speed of 90 km/h. If the speed is increased by $33\frac{1}{3}\%$, then how long will it take to cover $2\frac{4}{5}$ times of the distance?

- Ans**
- 1. 1 hour 30 minutes
 - 2. 1 hour 25 minutes
 - 3. 1 hour 20 minutes
 - 4. 1 hour 45 minutes

Question ID : 65497829167
Status : Answered
Chosen Option : 4

Q.9 The value of $8 - 4 \div 8 \text{ of } 3 + (7 \div 7 \text{ of } \frac{1}{7}) \div 6 + (3 \times 6 \div \frac{1}{3}) \times \frac{1}{6}$ is:

- Ans**
- 1. 0
 - 2. $18\frac{2}{3}$
 - 3. $12\frac{2}{3}$
 - 4. 18

Question ID : 65497829161
Status : Answered
Chosen Option : 4

Q.10 If the seven-digit number 57282p9 is completely divisible by 11, what is the value of $(11 - p)$, where $p > 0$?

- Ans**
- 1. 8
 - 2. 5
 - 3. 10
 - 4. 2

Question ID : 65497829159
Status : Answered
Chosen Option : 1

Q.11 If the difference between 70% of a number and 40% of the same number is 135, then the number is:

- Ans**
- 1. 420
 - 2. 350
 - 3. 550
 - 4. 450

Question ID : 65497829165
Status : Answered
Chosen Option : 4

Q.12 A sum of ₹26,000 is lent on simple interest in two parts such that the interest on the first part for 3 years at 5% per annum is equal to the interest on the second part for 4 years at 6% per annum. How much is the first part?

- Ans**
- 1. ₹14,860
 - 2. ₹10,000
 - 3. ₹11,835
 - 4. ₹16,000

Question ID : 65497829158
Status : Answered
Chosen Option : 4

Q.13 A's salary is 10% less than B's salary, B's salary is 25% less than C's salary. By how much percentage approximately, is C's salary more than A's salary?

- Ans**
- 1. 48%
 - 2. 33%
 - 3. 90%
 - 4. 65%

Question ID : 65497829160
Status : Answered
Chosen Option : 1

Q.14 The incomes of A and B are in the ratio 7 : 9 and the ratio of their expenditures is 13 : 15. If A and B save ₹9,000 and ₹15,000, respectively, then what is the income (in ₹) of A?

- Ans**
- 1. 28,000
 - 2. 31,500
 - 3. 35,000
 - 4. 38,500

Question ID : 65497829174
Status : Answered
Chosen Option : 3

Q.15 A piggy bank contains ₹1 coins, ₹2 coins and ₹5 coins in the ratio of 5 : 9 : 4. If the total amount in the piggy bank is ₹860, how many ₹5 coins are there?

- Ans**
- 1. 60
 - 2. 50
 - 3. 80
 - 4. 90

Question ID : 65497829168
Status : Answered
Chosen Option : 3

Q.16 A fruit seller purchased 30 kg apples at ₹520 per 10 kg. He sold 60% of them at the rate of ₹60/kg. To get a gain of 20%, the selling price of the remaining apples, per kg, is:

- Ans**
- ✓ 1. ₹66
 - ✗ 2. ₹62
 - ✗ 3. ₹65
 - ✗ 4. ₹60

Question ID : 65497829171
Status : Answered
Chosen Option : 1

Q.17 Two successive discounts of 12% and 10% are given on an item. If the marked price of the item is ₹3,500, then the selling price of the item is:

- Ans**
- ✗ 1. ₹2,650
 - ✗ 2. ₹2,652
 - ✓ 3. ₹2,772
 - ✗ 4. ₹2,770

Question ID : 65497829164
Status : Answered
Chosen Option : 3

Q.18 Walking at three-fifth of her usual speed, a girl reaches her workplace 1 hour 30 minutes late. What is her usual time of travel?

- Ans**
- ✗ 1. 56 min
 - ✗ 2. 54 min
 - ✓ 3. 2 h 15 min
 - ✗ 4. 2 h 45 min

Question ID : 65497829162
Status : Not Answered
Chosen Option : --

Q.19 Let x and y be the LCM and HCF of 165, 297 and 495, respectively. What is the value of $\frac{x}{y}$?

- Ans**
- ✗ 1. 75
 - ✗ 2. 55
 - ✓ 3. 45
 - ✗ 4. 15

Question ID : 65497829172
Status : Not Answered
Chosen Option : --

Q.20 Jagan bought 4 almirahs of equal cost. He sold 3 of these with a profit of 14%. He sold the 4th almirah at k% profit. What is the value of k, if the overall profit is 15%?

- Ans**
- 1. 16
 - 2. 14
 - 3. 15
 - 4. 18

Question ID : 65497829154
Status : Answered
Chosen Option : 4

Q.21 The average of 16 numbers is 24.5. If the average of the first 6 numbers is 20.5 and that of the last 5 numbers is 32.4, then what is the average of the remaining numbers?

- Ans**
- 1. 21.4
 - 2. 22.4
 - 3. 21.8
 - 4. 20.2

Question ID : 65497829173
Status : Answered
Chosen Option : 1

Q.22 If the length and the breadth of a rectangle are doubled, then its perimeter will become:

- Ans**
- 1. four times
 - 2. half
 - 3. thrice
 - 4. twice

Question ID : 65497829170
Status : Answered
Chosen Option : 4

Q.23 A certain sum amounts to ₹8,094 at 10.5% p.a. in 4 years, at simple interest. What will be the amount (in ₹) of the same sum at the same rate in $6\frac{2}{3}$ years, at simple interest?

- Ans**
- 1. 9,850
 - 2. 9,760
 - 3. 9,690
 - 4. 9,960

Question ID : 65497829175
Status : Answered
Chosen Option : 3

Q.24 Simplify the following expression.

$$\frac{1}{5} \div \frac{3}{4} \text{ of } \frac{2}{5} + \frac{1}{5} \times \frac{5}{6} - \frac{2}{3}$$

Ans

1. $-\frac{2}{5}$

2. $\frac{1}{6}$

3. $-\frac{59}{150}$

4. $-\frac{37}{90}$

Question ID : 65497829153

Status : Answered

Chosen Option : 2

Q.25 Due to some damage, Nitin sells a woollen jacket at 10% below the cost price. If he could sell it for ₹500 more, he would make a profit of 15%. What is the cost price of the jacket?

Ans

1. ₹3,333

2. ₹2,000

3. ₹2,500

4. ₹5,000

Question ID : 65497829157

Status : Answered

Chosen Option : 2

Section : Part D English

Q.1 The following sentence has been divided into parts. One of them may contain an error. Select the part that contains the error from the given options. If you don't find any error, mark 'No error' as your answer.

She didn't liked / any disturbance / during her studies.

Ans

1. No error

2. any disturbance

3. during her studies

4. She didn't liked

Question ID : 65497829179

Status : Answered

Chosen Option : 4

Q.2 Select the most appropriate option to fill in the blank.

This is the _____ clock that I have ever seen.

Ans

1. purest

2. finest

3. sharpest

4. tastiest

Question ID : 65497829176

Status : Answered

Chosen Option : 2

Q.3 Select the most appropriate ANTONYM of the given word.

Awkward

- Ans** 1. Graceful
 2. Bu ky
 3. Uneasy
 4. Inelegant

Question ID : 65497829187
Status : Answered
Chosen Option : 1

Q.4 Select the INCORRECTLY spelt word.

- Ans** 1. Metal
 2. Taccal
 3. Brutal
 4. Fatal

Question ID : 65497829194
Status : Answered
Chosen Option : 2

Q.5 Select the option that can be used as a one-word substitute for the given group of words.

Giving orders in a manner that permits no refusal

- Ans** 1. Infidelity
 2. Dictatorial
 3. Benedictory
 4. Adulterous

Question ID : 65497829185
Status : Answered
Chosen Option : 2

Q.6 Select the most appropriate option to fill in the blank.

Friendship increases happiness and _____ misery.

- Ans** 1. delegates
 2. distinguishes
 3. diminishes
 4. determines

Question ID : 65497829195
Status : Answered
Chosen Option : 3

Q.7 Select the option that can be used as a one-word substitute for the given group of words.

Study of diseases

- Ans 1. Telepathy
 2. Pathology
 3. Antipathy
 4. Empathy

Question ID : 65497829184
Status : Answered
Chosen Option : 2

Q.8 Select the most appropriate meaning of the given idiom.

Eagle eye

- Ans 1. An eye full of curiosity
 2. An eye with sense of admiration
 3. An eye full of suspicion
 4. An eye with sharp visual powers

Question ID : 65497829181
Status : Answered
Chosen Option : 4

Q.9 Select the most appropriate option that can substitute the underlined segment in the given sentence. If there is no need to substitute it, select 'No substitution required'.

The book are not owned by him.

- Ans 1. are not being owned
 2. is not owned
 3. is not own
 4. No substitution required

Question ID : 65497829193
Status : Answered
Chosen Option : 2

Q.10 Select the most appropriate meaning of the given idiom.

To bear fruit

- Ans 1. To be creative
 2. To put in hard work
 3. To produce positive results
 4. To accept the truth

Question ID : 65497829178
Status : Answered
Chosen Option : 4

Q.11 Select the option that will improve the underlined part of the given sentence. In case no improvement is needed, select 'No improvement required'.

He was too tired for walking anymore.

- Ans
- 1. very tired for walking
 - 2. too tired to walk
 - 3. No improvement required
 - 4. to tired for walk

Question ID : 65497829188
Status : Answered
Chosen Option : 2

Q.12 Select the most appropriate option that can substitute the underlined segment in the given sentence. If there is no need to substitute it, select 'No substitution required'.

We watched the carpenter to repair our broken table.

- Ans
- 1. repairing
 - 2. No substitution required
 - 3. repaired
 - 4. to repairing

Question ID : 65497829177
Status : Answered
Chosen Option : 1

Q.13 Select the most appropriate ANTONYM of the given word.

Captivity

- Ans
- 1. Tumble
 - 2. Prosperity
 - 3. Elevate
 - 4. Freedom

Question ID : 65497829183
Status : Answered
Chosen Option : 4

Q.14 Select the most appropriate synonym of the given word.

Attract

- Ans
- 1. Prevent
 - 2. Entice
 - 3. Repel
 - 4. Disgust

Question ID : 65497829180
Status : Answered
Chosen Option : 2

Q.15 The following sentence has been split into four segments. Identify the segment that contains a grammatical error.

Even though Mahindra & Mahindra warn / consumers not to use low-standard engine oil, / people refuse to read the instructions / and damage their vehicles.

- Ans
- 1. people refuse to read the instructions
 - 2. Even though Mahindra & Mahindra warn
 - 3. and damage their vehicles
 - 4. consumers not to use low standard engine oil

Question ID : 65497829182
Status : Answered
Chosen Option : 2

Q.16 The following sentence has been split into four segments. Identify the segment that contains a grammatical error.

He is / the more intelligent / and hardworking student / of our class.

- Ans
- 1. the more intelligent
 - 2. of our class
 - 3. and hardworking student
 - 4. He is

Question ID : 65497829189
Status : Answered
Chosen Option : 1

Q.17 Select the option that can be used as a one-word substitute for the given group of words.

Disease that spreads by physical touch and contact

- Ans
- 1. Poisonous
 - 2. Contemptible
 - 3. Contagious
 - 4. Resistible

Question ID : 65497829191
Status : Answered
Chosen Option : 3

Q.18 Select the most appropriate synonym of the given word.

Deliberate

- Ans
- 1. Accidental
 - 2. Disastrous
 - 3. Unplanned
 - 4. Planned

Question ID : 65497829190
Status : Answered
Chosen Option : 4

Q.19 Select the most appropriate option to fill in the blank.

We have decided to go on a long _____ with our friends.

- Ans
- 1. visit
 - 2. travel
 - 3. drive
 - 4. passage

Question ID : 65497829192
Status : Answered
Chosen Option : 3

Q.20 Select the correctly spelt word.

- Ans
- 1. Mechanism
 - 2. Machanism
 - 3. Mechenism
 - 4. Mechanisum

Question ID : 65497829186
Status : Answered
Chosen Option : 1

Comprehension:

In the following passage, some words have been deleted. Read the passage carefully and select the most appropriate option to fill in each blank.

During a festival in Kerala, an elephant went on a rampage, attacking nearly 27 vehicles (1) _____ near a temple. Festivals in Kerala often (2) _____ hundreds of elephants to attract crowds and accidents are not uncommon.

The big animal (3) _____ tethered by the tusk along with four other elephants (4) _____ broke free and started flinging parked vehicles, (5) _____ rickshaws and motorbikes, around.

SubQuestion No : 21

Q.21 Select the most appropriate option to fill in blank no. 1.

- Ans
- 1. placed
 - 2. parked
 - 3. put
 - 4. planted

Question ID : 65497829197
Status : Answered
Chosen Option : 2

Comprehension:

In the following passage, some words have been deleted. Read the passage carefully and select the most appropriate option to fill in each blank.

During a festival in Kerala, an elephant went on a rampage, attacking nearly 27 vehicles (1) _____ near a temple. Festivals in Kerala often (2) _____ hundreds of elephants to attract crowds and accidents are not uncommon. The big animal (3) _____ tethered by the tusk along with four other elephants (4) _____ broke free and started flinging parked vehicles, (5) _____ rickshaws and motorbikes, around.

SubQuestion No : 22

Q.22 Select the most appropriate option to fill in blank no. 2.

- Ans 1. have
 2. has
 3. had
 4. are having

Question ID : 65497829198
Status : Answered
Chosen Option : 1

Comprehension:

In the following passage, some words have been deleted. Read the passage carefully and select the most appropriate option to fill in each blank.

During a festival in Kerala, an elephant went on a rampage, attacking nearly 27 vehicles (1) _____ near a temple. Festivals in Kerala often (2) _____ hundreds of elephants to attract crowds and accidents are not uncommon. The big animal (3) _____ tethered by the tusk along with four other elephants (4) _____ broke free and started flinging parked vehicles, (5) _____ rickshaws and motorbikes, around.

SubQuestion No : 23

Q.23 Select the most appropriate option to fill in blank no. 3.

- Ans 1. is
 2. are
 3. were
 4. was

Question ID : 65497829199
Status : Answered
Chosen Option : 1

Comprehension:

In the following passage, some words have been deleted. Read the passage carefully and select the most appropriate option to fill in each blank.

During a festival in Kerala, an elephant went on a rampage, attacking nearly 27 vehicles (1) _____ near a temple. Festivals in Kerala often (2) _____ hundreds of elephants to attract crowds and accidents are not uncommon. The big animal (3) _____ tethered by the tusk along with four other elephants (4) _____ broke free and started flinging parked vehicles, (5) _____ rickshaws and motorbikes, around.

SubQuestion No : 24

Q.24 Select the most appropriate option to fill in blank no. 4.

- Ans 1. although
 2. but
 3. hence
 4. so

Question ID : 65497829200
Status : Answered
Chosen Option : 2

Comprehension:

In the following passage, some words have been deleted. Read the passage carefully and select the most appropriate option to fill in each blank.

During a festival in Kerala, an elephant went on a rampage, attacking nearly 27 vehicles (1) _____ near a temple. Festivals in Kerala often (2) _____ hundreds of elephants to attract crowds and accidents are not uncommon. The big animal (3) _____ tethered by the tusk along with four other elephants (4) _____ broke free and started flinging parked vehicles, (5) _____ rickshaws and motorbikes, around.

SubQuestion No : 25

Q.25 Select the most appropriate option to fill in blank no. 5.

- Ans
- 1. included
 - 2. including
 - 3. include
 - 4. to include

Question ID : 65497829201
Status : Answered
Chosen Option : 2

Section : Part D Hindi

Q.1 दिये गये वाक्यांश के लिए एक सार्थक शब्द दीजिए।

जिसका दमन करना कठिन हो

- Ans
- 1. दुर्दम
 - 2. दुर्जय
 - 3. दुर्गम
 - 4. दुर्बोध

Question ID : 65497829209
Status : Not Answered
Chosen Option : --

Q.2 दिये गये वाक्यांश के लिए एक सार्थक शब्द का चयन कीजिए।

जिसे मर जाने की कामना हो

- Ans
- 1. मुमूर्षु
 - 2. मुमूर्षा
 - 3. मृत्यञ्जय
 - 4. मुमुक्षु

Question ID : 65497829205
Status : Not Answered
Chosen Option : --

Q.3 निम्नलिखित में से शुद्ध वर्तनी वाला शब्द कौन सा है?

- Ans
- 1. परिच्छण
 - 2. परीच्छण
 - 3. परिक्षण
 - 4. परीक्षण

Question ID : 65497829220
Status : Not Answered
Chosen Option : --

Q.4 दिए गए शब्द के समानार्थी शब्द का चयन करें।

आँख

- Ans 1. गगन
 2. लोचन
 3. दूरदर्शी
 4. सर्वदर्शी

Question ID : 65497829217
Status : Not Answered
Chosen Option : --

Q.5 दिए गए वाक्य का वह भाग ज्ञात करें जिसमें कोई त्रुटि है। यदि कोई त्रुटि नहीं है, तो 'कोई त्रुटि नहीं है' चुनें।

मुझे तो (1)/ कहा गया था कि (2)/ आप तैयार हैं। (3)/ कोई त्रुटि नहीं है (4)

- Ans 1. 4
 2. 2
 3. 3
 4. 1

Question ID : 65497829207
Status : Not Answered
Chosen Option : --

Q.6 दिए गए शब्द के समानार्थी शब्द का चयन कीजिए।

निपुण

- Ans 1. कुशलता
 2. अभिज्ञता
 3. पटुता
 4. अभिज्ञ

Question ID : 65497829208
Status : Not Answered
Chosen Option : --

Q.7 रिक्त स्थान भरने के लिए सबसे उपयुक्त शब्द का चयन करें।

बेटी पिताजी के साथ _____ थी।

- Ans 1. जानेवाले
 2. जानेवाली
 3. चलनेवाले
 4. जानेवाला

Question ID : 65497829213
Status : Not Answered
Chosen Option : --

Q.8 निम्नलिखित प्रश्न में, दिए गए चार विकल्पों में से उस विकल्प का चयन करें, जो मुहावरे का अर्थ व्यक्त करता है।

चारपाई पकड़ना

- Ans
- 1. उत्तेजित होना
 - 2. दुःख देना
 - 3. निश्चित हो जाना
 - 4. बीमार होना

Question ID : 65497829212
Status : Not Answered
Chosen Option : --

Q.9 'कृतज्ञ' शब्द का विलोम शब्द कौनसा है?

- Ans
- 1. विकृतज्ञ
 - 2. अकृतज्ञ
 - 3. अनकृतज्ञ
 - 4. अपकृतज्ञ

Question ID : 65497829204
Status : Not Answered
Chosen Option : --

Q.10 दिए गए वाक्य का वह भाग ज्ञात करें जिसमें कोई त्रुटि है। यदि कोई त्रुटि नहीं है, तो 'कोई त्रुटि नहीं है' चुनें।

कालिदास ने (1)/ अशोक पुष्प का (2)/ वर्णन शरतकाल में किया है। (3)/ कोई त्रुटि नहीं है (4)

- Ans
- 1. 4
 - 2. 1
 - 3. 2
 - 4. 3

Question ID : 65497829203
Status : Not Answered
Chosen Option : --

Q.11 निम्नलिखित में से शुद्ध वर्तनी वाला शब्द कौन सा है?

- Ans
- 1. आकाछा
 - 2. आकाक्षा
 - 3. अकाक्षा
 - 4. अकाछा

Question ID : 65497829219
Status : Not Answered
Chosen Option : --

Q.12 दिये गये वाक्य में रेखांकित अश को प्रतिस्थापित करने के लिए सबसे उपयुक्त विकल्प का चयन करें।

टकी की योग्यता सौ लीटर है।

- Ans
- 1. आयतन
 - 2. गहराई
 - 3. क्षमता
 - 4. प्रतिभा

Question ID : 65497829221
Status : Not Answered
Chosen Option : --

Q.13 दिए गए वाक्य का वह भाग ज्ञात करें जिसमें कोई त्रुटि है। यदि कोई त्रुटि नहीं है, तो 'कोई त्रुटि नहीं है' चुनें।

महात्मा गाँधी (1)/ भारत के राष्ट्रपिता (2)/ माना जाता है। (3)/ कोई त्रुटि नहीं है(4)

- Ans
- 1. 1
 - 2. 3
 - 3. 4
 - 4. 2

Question ID : 65497829216
Status : Not Answered
Chosen Option : --

Q.14 दिए गए वाक्य में रेखांकित खंड को प्रतिस्थापित करने के लिए सबसे उपयुक्त विकल्प का चयन करें। यदि इसे प्रतिस्थापित करने की आवश्यकता नहीं है, तो विकल्प 'किसी बदलाव की आवश्यकता नहीं है' का चयन करें।

मेरे सामने कौन ठहर सकता है?

- Ans
- 1. हमारे आगे
 - 2. किसी बदलाव की आवश्यकता नहीं है।
 - 3. मेरे आगे
 - 4. तुम्हारे आगे

Question ID : 65497829202
Status : Not Answered
Chosen Option : --

Q.15 रिक्त स्थान को भरने के लिए सबसे उपयुक्त शब्द का चयन करें।

दिल्ली _____ मलेरिया का जोर है।

- Ans
- 1. के अंदर
 - 2. के भीतर
 - 3. में
 - 4. के ऊपर

Question ID : 65497829215
Status : Not Answered
Chosen Option : --

Q.16 रिक्त स्थान को भरने के लिए सबसे उपयुक्त शब्द का चयन करें।

उनकी _____ मनाई गई।

- Ans
- 1. विवाह
 - 2. जयती
 - 3. जन्मदिन
 - 4. तिरोथान

Question ID : 65497829210
Status : Not Answered
Chosen Option : --

Q.17 नीचे दिए वाक्यांश के लिए एक शब्द दिए गए विकल्पों में से चुनिए-

जिस भूमि में कुछ उत्पन्न न होता हो

- Ans
- 1. उज्जड़
 - 2. वीरान
 - 3. ऊसर
 - 4. उपजाऊ

Question ID : 65497829218
Status : Not Answered
Chosen Option : --

Q.18 'मुँह में ठेंपी देना' इस मुहावरे का अर्थ कौनसा है?

- Ans
- 1. बोलने की हिम्मत न होना
 - 2. कुछ न बोलने देना
 - 3. खूब बदनाम करना
 - 4. दीनता प्रकट करना

Question ID : 65497829206
Status : Not Answered
Chosen Option : --

Q.19 दिए गए वाक्य में रेखांकित खंड को प्रतिस्थापित करने के लिए सबसे उपयुक्त विकल्प का चयन करें।
यदि इसे प्रतिस्थापित करने की आवश्यकता नहीं है, तो विकल्प 'किसी बदलाव की आवश्यकता नहीं है'
का चयन करें।

गाँधी जी ने अहिंसा के मार्ग का पालन कर अंग्रेजों को भारत से भगा दिये।

- Ans
- 1. किसी बदलाव की आवश्यकता नहीं है।
 - 2. पालन करते हुए अंग्रेजों को भारत से भगा दिये।
 - 3. पालन कर अंग्रेजों को भारत से भगा दिया।
 - 4. पालन करके अंग्रेजों को भारत से भगा दिये।

Question ID : 65497829214
Status : Not Answered
Chosen Option : --

Q.20 दिए गए शब्द का विलोम चुनें।

परकीय

- Ans 1. क्षत्रिय
 2. स्वकीय
 3. लाघव
 4. दृश्य

Question ID : 65497829211

Status : Not Answered

Chosen Option : --

Comprehension:

दिए गए अनुच्छेद में कुछ शब्द हटा दिए गए हैं। दिए गए विकल्पों की सहायता से रिक्त स्थान भरें। प्रत्येक प्रश्न सख्या के लिए सबसे उपयुक्त विकल्प का चयन कीजिए।

तुलसीदास को ईश्वर-प्रेम की झलक (1) _____ के रूप में मिली। उनके ग्रंथों विशेषतया रामचरितमानस के द्वारा उन्होंने वेद-शास्त्र-सम्मत (2) _____ का प्राचर किया। हमारी (3) _____ का आधार ही वेद, शास्त्र, स्मृति आदि ग्रंथ हैं। तुलसीदास ने उस संस्कृति के (4) _____ पक्ष की रक्षा की, और हमारे सामने कई आदर्श प्रस्तुत किए। उन्होंने श्रीरामचंद्र जैसे आदर्श चरित्र द्वारा हमारी पारिवारिक (5) _____ की स्थापना की। सत्य और पौरुष की प्रेरणा दी।

SubQuestion No : 21

Q.21 गद्यांश के रिक्त स्थान (1) के लिए सर्वाधिक उपयुक्त शब्द होगा-

- Ans 1. श्रीरामचंद्र
 2. भक्ति
 3. मानव सेवा
 4. ईश्वर सेवा

Question ID : 65497829223

Status : Not Answered

Chosen Option : --

Comprehension:

दिए गए अनुच्छेद में कुछ शब्द हटा दिए गए हैं। दिए गए विकल्पों की सहायता से रिक्त स्थान भरें। प्रत्येक प्रश्न सख्या के लिए सबसे उपयुक्त विकल्प का चयन कीजिए।

तुलसीदास को ईश्वर-प्रेम की झलक (1) _____ के रूप में मिली। उनके ग्रंथों विशेषतया रामचरितमानस के द्वारा उन्होंने वेद-शास्त्र-सम्मत (2) _____ का प्राचर किया। हमारी (3) _____ का आधार ही वेद, शास्त्र, स्मृति आदि ग्रंथ हैं। तुलसीदास ने उस संस्कृति के (4) _____ पक्ष की रक्षा की, और हमारे सामने कई आदर्श प्रस्तुत किए। उन्होंने श्रीरामचंद्र जैसे आदर्श चरित्र द्वारा हमारी पारिवारिक (5) _____ की स्थापना की। सत्य और पौरुष की प्रेरणा दी।

SubQuestion No : 22

Q.22 गद्यांश के रिक्त स्थान (2) के लिए सर्वाधिक उपयुक्त शब्द होगा-

- Ans 1. ख्रिस्ती धर्म
 2. पारसी धर्म
 3. हिन्दू धर्म
 4. बौद्ध धर्म

Question ID : 65497829224

Status : Not Answered

Chosen Option : --

Comprehension:

दिए गए अनुच्छेद में कुछ शब्द हटा दिए गए हैं। दिए गए विकल्पों की सहायता से रिक्त स्थान भरें। प्रत्येक प्रश्न संख्या के लिए सबसे उपयुक्त विकल्प का चयन कीजिए।

तुलसीदास को ईश्वर-प्रेम की झलक (1) _____ के रूप में मिली। उनके ग्रंथों विशेषतया रामचरितमानस के द्वारा उन्होंने वेद-शास्त्र-सम्मत (2) _____ का प्राचर किया। हमारी (3) _____ का आधार ही वेद, शास्त्र, स्मृति आदि ग्रंथ हैं। तुलसीदास ने उस संस्कृति के (4) _____ पक्ष की रक्षा की, और हमारे सामने कई आदर्श प्रस्तुत किए। उन्होंने श्रीरामचंद्र जैसे आदर्श चरित्र द्वारा हमारी पारिवारिक (5) _____ की स्थापना की। सत्य और पौरुष की प्रेरणा दी।

SubQuestion No : 23

Q.23 गद्यांश के रिक्त स्थान (3) के लिए सर्वाधिक उपयुक्त शब्द होगा-

- Ans**
- 1. रीति
 - 2. डर
 - 3. नीति
 - 4. संस्कृति

Question ID : **65497829225**
Status : **Not Answered**
Chosen Option : --

Comprehension:

दिए गए अनुच्छेद में कुछ शब्द हटा दिए गए हैं। दिए गए विकल्पों की सहायता से रिक्त स्थान भरें। प्रत्येक प्रश्न संख्या के लिए सबसे उपयुक्त विकल्प का चयन कीजिए।

तुलसीदास को ईश्वर-प्रेम की झलक (1) _____ के रूप में मिली। उनके ग्रंथों विशेषतया रामचरितमानस के द्वारा उन्होंने वेद-शास्त्र-सम्मत (2) _____ का प्राचर किया। हमारी (3) _____ का आधार ही वेद, शास्त्र, स्मृति आदि ग्रंथ हैं। तुलसीदास ने उस संस्कृति के (4) _____ पक्ष की रक्षा की, और हमारे सामने कई आदर्श प्रस्तुत किए। उन्होंने श्रीरामचंद्र जैसे आदर्श चरित्र द्वारा हमारी पारिवारिक (5) _____ की स्थापना की। सत्य और पौरुष की प्रेरणा दी।

SubQuestion No : 24

Q.24 गद्यांश के रिक्त स्थान (4) के लिए सर्वाधिक उपयुक्त शब्द होगा-

- Ans**
- 1. आध्यत्मिक और समाजिक
 - 2. राजनीतिक और शैक्षणिक
 - 3. भौतिक और राजनीतिक
 - 4. शैक्षणिक और आर्थिक

Question ID : **65497829226**
Status : **Not Answered**
Chosen Option : --

Comprehension:

दिए गए अनुच्छेद में कुछ शब्द हटा दिए गए हैं। दिए गए विकल्पों की सहायता से रिक्त स्थान भरें। प्रत्येक प्रश्न संख्या के लिए सबसे उपयुक्त विकल्प का चयन कीजिए।

तुलसीदास को ईश्वर-प्रेम की झलक (1) _____ के रूप में मिली। उनके ग्रंथों विशेषतया रामचरितमानस के द्वारा उन्होंने वेद-शास्त्र-सम्मत (2) _____ का प्राचर किया। हमारी (3) _____ का आधार ही वेद, शास्त्र, स्मृति आदि ग्रंथ हैं। तुलसीदास ने उस संस्कृति के (4) _____ पक्ष की रक्षा की, और हमारे सामने कई आदर्श प्रस्तुत किए। उन्होंने श्रीरामचंद्र जैसे आदर्श चरित्र द्वारा हमारी पारिवारिक (5) _____ की स्थापना की। सत्य और पौरुष की प्रेरणा दी।

SubQuestion No : 25

Q.25 गद्यांश के रिक्त स्थान (5) के लिए सर्वाधिक उपयुक्त शब्द होगा-

- Ans**
- 1. कलह
 - 2. उन्नति
 - 3. सुख-शांति
 - 4. विवाद

Question ID : **65497829227**
Status : **Not Answered**
Chosen Option : --