

Exam Date	26/11/2021
Exam Time :	12:30 PM - 2:00 PM
Subject	Constable GD 2021

Section : Part A General Intelligence and Reasoning

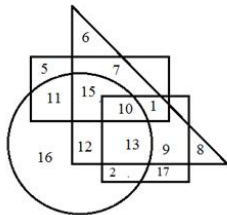
Q.1 Select the option that is related to the third term in the same way as the second term is related to the first term.

LARGE : NDTJG :: APPLES : ?

- Ans
- 1. CSROPU
 - 2. CSROGV
 - 3. CSORGV
 - 4. DSROGV

Question ID : 65497831392
 Status : Answered
 Chosen Option : 2

Q.2 In the following diagram, the circle represents 'Managers', the square represents 'Honest', the rectangle represents 'Females', and the triangle represents 'Rural'.



The number that represents rural honest managers who are NOT females is:

- Ans
- 1. 12
 - 2. 9
 - 3. 13
 - 4. 10

Question ID : 65497831398
 Status : Answered
 Chosen Option : 3

Q.3 In a certain code language, 'FLORA' is written as 'DORII'. How will 'MUSIC' be written in that language?

- Ans
- 1. FVFPR
 - 2. GQWQF
 - 3. FFVRP
 - 4. GFWQQ

Question ID : 65497831399
 Status : Answered
 Chosen Option : 3

Q.4 Rajan's family spends 60% of their monthly income on groceries, 12% of their monthly income on room rent, 8% of their monthly income on medical expenses, and the remaining amount of ₹18,000 is savings. What is Rajan's family's monthly income?

- Ans
- 1. ₹80,250
 - 2. ₹90,200
 - 3. ₹90,000
 - 4. ₹80,000

Question ID : 65497831402
 Status : Answered
 Chosen Option : 3


Q.5 Select the correct mirror image of the given combination when the mirror is placed at PQ as shown.

DOC4UME9NT
 P
 |
 Q

- Ans
- 1. TИAEMUƆOD
 - 2. TИEEMUƆOD
 - 3. DOC4UMƆOИ
 - 4. DOCƆUMƆOИ

Question ID : 65497831411
 Status : Answered
 Chosen Option : 2

Q.6 Select the option in which the given figure is embedded (rotation is NOT allowed).



- Ans
- 1.
 - 2.
 - 3.
 - 4.

Question ID : 65497831391
 Status : Answered
 Chosen Option : 3

Q.7 Six friends, G, H I, J, K and L, are sitting around a circular table, facing towards the centre of the table. H is sitting third to the left of G. L and I are not neighbours of H. K is sitting to the immediate right of I. Who is sitting to the immediate left of L?

- Ans
- 1. J
 - 2. H
 - 3. I
 - 4. G

Question ID : 65497831397

Status : Answered

Chosen Option : 1

Q.8 Select the correct option that indicates the arrangement of the given words in the order in which they appear in an English dictionary.

1. Censored
2. Cerebellum
3. Centripetal
4. Ceremonial
5. Centurion

- Ans
- 1. 1, 3, 5, 2, 4
 - 2. 3, 1, 2, 5, 4
 - 3. 3, 2, 1, 4, 5
 - 4. 1, 5, 3, 4, 2

Question ID : 65497831404

Status : Answered

Chosen Option : 1

Q.9 Atharv is married to Chetna, who is the only sister of Dilip. Chetna's paternal grandfather is Mukul. Neha is married to Mukul and they have two sons, Hardik and Bhavesh. Hardik is unmarried. Anjali is the daughter-in-law of Neha. Gyan is the son of Dilip and Ekta. How is Chetna related to Gyan?

- Ans
- 1. Wife
 - 2. Sister-in-law
 - 3. Aunt
 - 4. Daughter-in-law

Question ID : 65497831394

Status : Answered

Chosen Option : 3

Q.10 Eight friends, P, Q, R, S, T, U, V and W, are sitting clockwise around a circular table in the same sequence, facing the centre, at equal distances between them. If U is facing the north-east direction, then who is facing the south direction?

- Ans
- 1. T
 - 2. R
 - 3. S
 - 4. P

Question ID : 65497831387

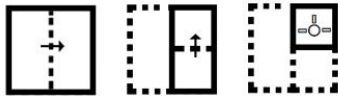
Status : Answered

Chosen Option : 4

Q.11 'Lucknow' is related to 'Gomti' in the same way as 'Varanasi' is related to '_____'.
 Ans 1. Yamuna
 2. Saryu
 3. Ganga
 4. Godavari

Question ID : 65497831396
 Status : Answered
 Chosen Option : 3

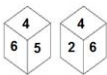
Q.12 The sequence of folding a piece of paper and the manner in which the folded paper has been cut is shown in the following figures. How would this paper look when unfolded?



- Ans
- 1.
 - 2.
 - 3.
 - 4.

Question ID : 65497831403
 Status : Answered
 Chosen Option : 2

Q.13 Two different positions of the same dice are shown, the six faces of which are numbered from 1 to 6. Select the number that will be on the face opposite to the face showing '2'.



- Ans
- 1. 5
 - 2. 3
 - 3. 4
 - 4. 1

Question ID : 65497831390
 Status : Answered
 Chosen Option : 1

Q.14 Select the letter-cluster from among the given options that can replace the question mark (?) in the following series.

STGMQ, SGQTM, SQMGT, ?

- Ans
- 1. STQMG
 - 2. SGTQM
 - 3. SMTQG
 - 4. SMQTG

Question ID : 65497831395
Status : Answered
Chosen Option : 1

Q.15 Select the combination of letters that when sequentially placed in the blanks of the given series will complete the series.

TK_TKT_P_K_KPTK_K_TK

- Ans
- 1. P, T, K, P, T, K
 - 2. P, K, T, T, T, P
 - 3. P, K, T, P, K, T
 - 4. P, T, T, K, P, T

Question ID : 65497831405
Status : Answered
Chosen Option : 2

Q.16 In a certain code language, 'POEM' is coded as '63'. How will 'FILE' be coded in that language?

- Ans
- 1. 78
 - 2. 82
 - 3. 80
 - 4. 76

Question ID : 65497831409
Status : Not Answered
Chosen Option : --

Q.17 Four letter-clusters have been given, out of which three are alike in some manner and one is different. Select the letter-cluster that is different.

- Ans
- 1. BQJM
 - 2. ATGN
 - 3. GSHH
 - 4. DEWK

Question ID : 65497831408
Status : Answered
Chosen Option : 4

Q.18 Which two numbers should be interchanged to make the given equation correct?

$$27 + 36 \div 9 \times 15 - 24 = 57$$

- Ans 1. 27 and 24
 2. 27 and 9
 3. 24 and 9
 4. 15 and 9

Question ID : 65497831389
Status : Answered
Chosen Option : 1

Q.19 Study the given pattern carefully and select the number that can replace the question mark (?) in it.

3 16 26
4 20 32
6 28 ?

- Ans 1. 38
 2. 46
 3. 44
 4. 48

Question ID : 65497831401
Status : Answered
Chosen Option : 3

Q.20 Select the number from among the given options that can replace the question mark (?) in the following series.

31, 32, 36, 63, 79, 204, ?

- Ans 1. 220
 2. 202
 3. 204
 4. 240

Question ID : 65497831406
Status : Answered
Chosen Option : 4

Q.21 Select the number from among the given options that can replace the question mark (?) in the following series.

10, 21, 35, 56, 90, 145, 231, 360, ?

- Ans 1. 546
 2. 463
 3. 564
 4. 436

Question ID : 65497831410
Status : Answered
Chosen Option : 1

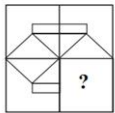
Q.22 Select the option that is related to the fourth number in the same way as the first number is related to the second number and the fifth number is related to the sixth number.

15 : 555 :: ? : 221 :: 17 : 719

- Ans
- 1. 23
 - 2. 11
 - 3. 19
 - 4. 5

Question ID : 65497831388
 Status : Answered
 Chosen Option : 2

Q.23 Select the figure from among the given options that can replace the question mark (?) and complete the pattern (rotation is NOT allowed).



- Ans
- 1.
 - 2.
 - 3.
 - 4.

Question ID : 65497831407
 Status : Answered
 Chosen Option : 1

Q.24 Read the given statements and conclusions carefully. Assuming that the information given in the statements is true, even if it appears to be at variance with commonly known facts, decide which of the given conclusions logically follow(s) from the statements.

Statements:
 Some cars are trains.
 Some trains are tractors.

Conclusions:
 I. No tractor is a car.
 II. No train is a car.
 III. Some tractors are cars.

- Ans
- 1. Both conclusions I and II follow
 - 2. All the conclusions follow
 - 3. Either conclusion I or III follows
 - 4. Both conclusions II and III follow

Question ID : 65497831400
 Status : Answered
 Chosen Option : 3

Q.25 In a certain code language, 'FLOWER' is written as 'KQTSAN'. How will 'WINDOW' be written in that language?

- Ans
- 1. CNSZLS
 - 2. BNSALS
 - 3. BNSZKS
 - 4. BMSAKS

Question ID : 65497831393
Status : Answered
Chosen Option : 3

Section : Part B General Knowledge and General Awareness

Q.1 In which of the following seasons are watermelon, muskmelon etc. produced in India?

- Ans
- 1. Kharif
 - 2. Zaid
 - 3. Rainy
 - 4. Rabi

Question ID : 65497831425
Status : Answered
Chosen Option : 2

Q.2 'Jagoi', an Indian classical dance form, is traditionally from the state of _____.

- Ans
- 1. Punjab
 - 2. Gujarat
 - 3. Karnataka
 - 4. Manipur

Question ID : 65497831412
Status : Not Answered
Chosen Option : --

Q.3 Every bill after being passed by the houses of parliament, either singly or in a joint sitting, is presented to the _____ for his assent.

- Ans
- 1. President
 - 2. Law Minister
 - 3. Chief Justice
 - 4. Prime Minister

Question ID : 65497831419
Status : Answered
Chosen Option : 1

Q.4 The first Economic Survey of India was presented in _____.

- Ans
- 1. 1965-66
 - 2. 1972-73
 - 3. 1948-49
 - 4. 1950-51

Question ID : 65497831436
Status : Answered
Chosen Option : 4

Q.5 Which of the following is an instrument of monetary policy of the Reserve Bank of India?

- Ans
- 1. Public debt
 - 2. Tax rate
 - 3. Government expenditure
 - 4. Repo rate

Question ID : 65497831416
Status : Answered
Chosen Option : 4

Q.6 Which of the following is NOT a sustainable method of waste management?

- Ans
- 1. Recycling
 - 2. Landfill
 - 3. Burning
 - 4. Incineration

Question ID : 65497831414
Status : Answered
Chosen Option : 3

Q.7 Who among the following was one of the Indian winners of the Great Immigrants of the Year 2020 award given by the US?

- Ans
- 1. Deepak Chopra
 - 2. N kki Haley
 - 3. Siddhartha Mukherjee
 - 4. Gita Gopinath

Question ID : 65497831415
Status : Answered
Chosen Option : 4

Q.8 Diego Maradona, the Argentine soccer player who passed away on 25 Nov 2020, is fondly remembered for one memorable goal known as:

- Ans
- 1. 'Golden hand' goal
 - 2. 'Silver lining' goal
 - 3. 'Hand of God' goal
 - 4. 'Hand of Maradona' goal

Question ID : 65497831435
Status : Answered
Chosen Option : 1

Q.9 With reference to the literature of the medieval Indian period, which of the following pairs is correct?

- Ans
- 1. Rajatarangini - Bilhana
 - 2. Prithviraj Raso - Nripatunga
 - 3. Vikramankadevacharita - Kalhana
 - 4. Gitagovinda - Jayadeva

Question ID : 65497831418
Status : Answered
Chosen Option : 3

Q.10 Who invented the electric bulb?

- Ans
- 1. Albert Einstein
 - 2. Isaac Newton
 - 3. Thomas Alva Edison
 - 4. Alexander Graham Bell

Question ID : 65497831434
Status : Answered
Chosen Option : 3

Q.11 Who among the following was the founder of Khudai Khidmatgar, a predominantly Pashtun nonviolent resistance movement known for its activism against the British Raj in colonial India?

- Ans
- 1. Lala Lajpat Rai
 - 2. Bal Gangadhar Tilak
 - 3. Khan Abdul Ghaffar Khan
 - 4. Subhash Chandra Bose

Question ID : 65497831417
Status : Not Answered
Chosen Option : --

Q.12 The Rajarajeshwara temple at Thanjavur is dedicated to:

- Ans
- 1. Lord Rama
 - 2. Lord Ganesha
 - 3. Lord Krishna
 - 4. Lord Shiva

Question ID : 65497831432
Status : Answered
Chosen Option : 1

Q.13 Which of the following statements about the Mughal Emperor Babur is INCORRECT?

- Ans
- 1. He was the first Mughal Emperor.
 - 2. He succeeded to the throne in 1494.
 - 3. He was 18 years old when he ascended the throne.
 - 4. He succeeded to the throne of Ferghana.

Question ID : 65497831430
Status : Answered
Chosen Option : 2

Q.14 In which of the following states is the Similipal National Park located?

- Ans
- 1. Odisha
 - 2. Tamil Nadu
 - 3. Bihar
 - 4. Maharashtra

Question ID : 65497831423
Status : Answered
Chosen Option : 1

Q.15 In November 2020, the Andaman and Nicobar Command (ANC) conducted a joint services exercise code-named _____ involving the three services components of Andaman and Nicobar Command.

- Ans
- 1. Blue Ribbon
 - 2. Bull Fight
 - 3. Blue Sea
 - 4. Bull Strike

Question ID : 65497831422
Status : Not Answered
Chosen Option : --

Q.16 The term 'Panchsheel' is associated with which of the following options?

- Ans
- 1. Fundamental Duties
 - 2. Composition of NITI Aayog
 - 3. Inter-State Relations
 - 4. Foreign Policy of India

Question ID : 65497831421
Status : Not Answered
Chosen Option : --

Q.17 Which Indian union territory has 'Dugong' as the state animal?

- Ans
- 1. Daman Diu
 - 2. Puducherry
 - 3. Ladakh
 - 4. Andaman Nicobar

Question ID : 65497831429
Status : Answered
Chosen Option : 4

Q.18 Who among the following declares the Minimum Support Price (MSP) for the crops?

- Ans
- 1. Ministry of Rural Development
 - 2. Ministry of Consumer Affairs, Food and Public distribution
 - 3. Ministry of Agriculture and Farmers Welfare
 - 4. Ministry of Food Processing Industries

Question ID : 65497831427
Status : Answered
Chosen Option : 3

Q.19 Lala Lajpat Rai, a nationalist from Punjab, was a member of the _____.

- Ans
- 1. Conservative group
 - 2. Moderate group
 - 3. Radical group
 - 4. Republican group

Question ID : 65497831428
Status : Answered
Chosen Option : 4

Q.20 As of October 2020, how many beaches of India have been awarded the 'Blue Flag Certification'?

- Ans
- 1. 7
 - 2. 8
 - 3. 9
 - 4. 6

Question ID : 65497831431
Status : Answered
Chosen Option : 2

Q.21 Rice needs _____ to grow.

- Ans
- 1. moderate temperature and rainfall
 - 2. high temperature, high humidity and rainfall
 - 3. moderate temperature and lots of sunshine
 - 4. high temperature and light rainfall

Question ID : 65497831433
Status : Answered
Chosen Option : 2

Q.22 Which of the following words has been named the '2020 Word of the Year' by Cambridge Dictionary?

- Ans
- 1. Pandemic
 - 2. Quarantine
 - 3. Lockdown
 - 4. Survive

Question ID : 65497831420
Status : Answered
Chosen Option : 2

Q.23 Which of the following is a characteristic of 'Pteridophytes'?

- Ans
- 1. They do not have a true vascular tissue containing lignin.
 - 2. Their lifecycles are dominated by the gametophyte stage.
 - 3. Their sporophytes are unbranched.
 - 4. They neither produce flowers or seeds.

Question ID : 65497831413
Status : Not Answered
Chosen Option : --

Q.24 Which of the following was NOT a venue in IPL 2020?

- Ans
- 1. Sharjah
 - 2. Muscat
 - 3. Dubai
 - 4. Abu Dhabi

Question ID : 65497831426
Status : Not Answered
Chosen Option : --

Q.25 In which of the following states did the Union Minister of Youth Affairs and Sports, Kiren Rijiju virtually inaugurate the 11th Regional Centre of Sports Authority of India in November 2020?

- Ans
- 1. Odisha
 - 2. Assam
 - 3. Kerala
 - 4. Punjab

Question ID : 65497831424
 Status : Answered
 Chosen Option : 1

Section : Part C Elementary Mathematics

Q.1 A motor boat covers a distance of 24 km upstream in one hour more than the time taken to cover the same distance downstream. If the speed of the current of the river is 2 km/h, then what is the speed (in km/h) of the boat in upstream travel?

- Ans
- 1. 8
 - 2. 6
 - 3. 10
 - 4. 9

Question ID : 65497831450
 Status : Not Answered
 Chosen Option : --

Q.2 If the retail price of a table is ₹900 and the gain percentages of the manufacturer, the wholesale dealer and the retailer are 8%, 10% and 20%, respectively, then what is the cost of production of the table (rounded off to the integer value)?

- Ans
- 1. ₹869
 - 2. ₹631
 - 3. ₹546
 - 4. ₹750

Question ID : 65497831458
 Status : Answered
 Chosen Option : 2

Q.3 The value of $\frac{9 \div \{5 - 5 \div (6 - 7) \times 8 + 9\}}{4 + 4 \times 4 \div 4 \text{ of } 4}$ is:

- Ans
- 1. $\frac{1}{10}$
 - 2. $\frac{1}{30}$
 - 3. $\frac{1}{15}$
 - 4. $\frac{1}{90}$

Question ID : 65497831443
 Status : Answered
 Chosen Option : 2

Q.4 Marked price of an item is ₹800. If a shopkeeper offers two discounts, one of 10% and another of 5% on the item, how much will be the selling price of the item?

- Ans**
- 1. ₹690
 - 2. ₹720
 - 3. ₹562
 - 4. ₹684

Question ID : 65497831457
Status : Answered
Chosen Option : 4

Q.5 The profit made by selling an article for ₹12,400 is equal to the loss incurred on selling the same article at ₹10,600. What will be the profit per cent if it is sold for ₹14,950?

- Ans**
- 1. 25
 - 2. 28
 - 3. 32
 - 4. 30

Question ID : 65497831451
Status : Answered
Chosen Option : 4

Q.6 The LCM and HCF of two numbers are 420 and 6, respectively. If sum of the numbers is 102, then what is the difference of the numbers?

- Ans**
- 1. 22
 - 2. 42
 - 3. 18
 - 4. 60

Question ID : 65497831437
Status : Answered
Chosen Option : 3

Q.7 The volume of a right circular cylinder is 8448 cm^3 and its curved surface area (in cm^2) is $\frac{1}{8}$ of the number representing its volume. What is the height (in cm) of the cylinder?

- Ans**
- 1. 8.4
 - 2. 9.1
 - 3. 11.2
 - 4. 10.5

Question ID : 65497831461
Status : Answered
Chosen Option : 4

Q.8 15 persons begin to work together on a job, but after some days 6 persons leave. As a result, the job which could have been completed in 42 days is completed in 54 days. After how many days of the commencement of the work did 6 persons leave?

- Ans**
- 1. 24
 - 2. 12
 - 3. 18
 - 4. 32

Question ID : 65497831449
Status : Not Answered
Chosen Option : --

Q.9 In a right-angled triangle, the right angle is contained between the sides with lengths 14 cm and 48 cm. If it is made to revolve around the longer side, what is the volume of the solid so formed? (Use $\pi = \frac{22}{7}$)

- Ans**
- 1. 29568 cm³
 - 2. 2112 cm³
 - 3. 33792 cm³
 - 4. 9856 cm³

Question ID : 65497831442
Status : Not Answered
Chosen Option : --

Q.10 The amount obtained by investing a sum of ₹15,000 at 8% p.a. in a certain time is ₹17,496, interest compounded annually. What will be the amount (in ₹) of the same sum at 15% p.a. for the same time, interest compounded 8-monthly?

- Ans**
- 1. 19,976
 - 2. 19,965
 - 3. 19,943
 - 4. 19,954

Question ID : 65497831460
Status : Not Answered
Chosen Option : --

Q.11 In a college election, the winning secretarial candidate got 69% of the votes and won 342 votes more than his rival. The total number of students in the college is:

- Ans**
- 1. 800
 - 2. 900
 - 3. 750
 - 4. 1000

Question ID : 65497831448
Status : Answered
Chosen Option : 2

Q.12 The average weight of a certain number of children in a group was 31 kg. If 11 children of average weight 32.5 kg joined the group, then the average weight of all the children would increase by 0.25 kg. The number of children initially in the group was:

- Ans**
- 1. 60
 - 2. 50
 - 3. 55
 - 4. 45

Question ID : 65497831446
 Status : Not Answered
 Chosen Option : --

Q.13 Find the value of $3 + \left(1 + \frac{1}{2} - \{3 - (8 \div 2)\} + \frac{1}{3} + \frac{2}{5}\right)$.

- Ans**
- 1. $\frac{187}{30}$
 - 2. $\frac{67}{30}$
 - 3. $\frac{37}{30}$
 - 4. $\frac{125}{30}$

Question ID : 65497831455
 Status : Answered
 Chosen Option : 1

Q.14 Pipe A is a filling pipe while B and C are emptying pipes. Pipe A alone can fill the tank in 10 hours and pipe B alone can empty two-third part of the tank in 20 hours. If all the three pipes are opened together, the tank is completely filled in 40 hours. In how many hours can C alone empty two-third part of the tank?

- Ans**
- 1. 24
 - 2. 12
 - 3. 16
 - 4. 20

Question ID : 65497831445
 Status : Answered
 Chosen Option : 3

Q.15 A person walking at a speed of 7.2 km/h and crosses a bridge in 25 minutes. Find the length of the bridge (in metres).

- Ans**
- 1. 1575
 - 2. 1960
 - 3. 3000
 - 4. 2000

Question ID : 65497831456
 Status : Answered
 Chosen Option : 3

Q.16 What is the greatest four-digit number which is exactly divisible by 24, 40 and 48?

- Ans
- 1. 9960
 - 2. 9990
 - 3. 9980
 - 4. 9840

Question ID : 65497831453
Status : Answered
Chosen Option : 4

Q.17 From a basket full of eggs, 20% of the eggs broke, 8% were rotten and 24% were kept aside for baking a cake. The remaining 12 eggs were consumed by some people. How many eggs were there in the basket initially?

- Ans
- 1. 25
 - 2. 52
 - 3. 20
 - 4. 48

Question ID : 65497831454
Status : Answered
Chosen Option : 1

Q.18 What is the third proportional to 18, 12?

- Ans
- 1. 7
 - 2. 8
 - 3. $6\sqrt{6}$
 - 4. 9

Question ID : 65497831441
Status : Answered
Chosen Option : 2

Q.19 Amarnath invested a sum of ₹22,500. At what rate of simple interest per annum will he obtain a total amount of ₹28,800 at the end of 4 years?

- Ans
- 1. 7%
 - 2. 6%
 - 3. 5%
 - 4. 4%

Question ID : 65497831440
Status : Answered
Chosen Option : 1

Q.20 A certain sum of money amounts to ₹12,144 at simple interest in 4 years and to ₹13,984 in $6\frac{1}{2}$ years. The rate of interest is:

- Ans
- 1. 9%
 - 2. 8%
 - 3. 10%
 - 4. 6%

Question ID : 65497831452
Status : Not Answered
Chosen Option : --

Q.21 A trader earns a profit of 30% by selling an article X and loses 16% by selling another article Y. If the ratio of the cost prices of X and Y is 3 : 4, then what is the gain/loss in the entire transaction (correct to one decimal place)?

- Ans**
- 1. Gain of 3.7%
 - 2. Gain of 4.8%
 - 3. Loss of 4.5%
 - 4. Loss of 3.9%

Question ID : 65497831444
Status : Answered
Chosen Option : 1

Q.22 152 is divided into three parts such that one-fifth of the first part, one-third of the second part and one-eleventh of the third part are equal. What is the sum of the second and the third part?

- Ans**
- 1. 112
 - 2. 128
 - 3. 120
 - 4. 64

Question ID : 65497831439
Status : Not Answered
Chosen Option : --

Q.23 The average of 48 numbers is 48. It was found later that observation 48 was wrongly taken as 84 at two places. What is the correct average?

- Ans**
- 1. 47.25
 - 2. 46.5
 - 3. 84
 - 4. 49.5

Question ID : 65497831438
Status : Answered
Chosen Option : 1

Q.24 The marked price of an item is ₹15,800. If a shopkeeper earns a profit of 18% after allowing a discount of 20%, then the cost price (in ₹) of the item (nearest to ₹1) is:

- Ans**
- 1. 12,640
 - 2. 15,415
 - 3. 13,756
 - 4. 10,712

Question ID : 65497831447
Status : Answered
Chosen Option : 4

Q.25 The incomes of A and B are in the ratio 5 : 7. The expenditure of A is equal to the savings of B. If the total expenditure of A and B is ₹15,750, then their total savings (in ₹) is:

- Ans
- 1. 11,250
 - 2. 11,180
 - 3. 11,200
 - 4. 11,280

Question ID : 65497831459
Status : Not Answered
Chosen Option : --

Section : Part D English

Q.1 Select the most appropriate ANTONYM of the given word.

Resource

- Ans
- 1. Property
 - 2. Reserve
 - 3. Lack
 - 4. Source

Question ID : 65497831477
Status : Not Answered
Chosen Option : --

Q.2 Select the most appropriate option that can substitute the underlined word in the given sentence.

She was the only companion Becky could confine in.

- Ans
- 1. confide
 - 2. console
 - 3. confer
 - 4. content

Question ID : 65497831466
Status : Not Answered
Chosen Option : --

Q.3 Select the most appropriate option that can substitute the underlined segment in the given sentence. If there is no need to substitute it, select 'No substitution required'.

You are ill if you eat all that food.

- Ans
- 1. have been
 - 2. will be
 - 3. were
 - 4. No substitution required

Question ID : 65497831462
Status : Not Answered
Chosen Option : --

Q.4 Select the option that can be used as a one-word substitute for the given group of words.

A recurrent urge to steal

- Ans 1. Kleptomania
 2. Pyromania
 3. Monomania
 4. Dipsomania

Question ID : 65497831478
Status : Not Answered
Chosen Option : --

Q.5 Select the most appropriate meaning of the given idiom.

To put something on hold

- Ans 1. To cancel something
 2. To procure something
 3. To postpone something
 4. To transfer something

Question ID : 65497831480
Status : Not Answered
Chosen Option : --

Q.6 Select the option that can be used as a one-word substitute for the given group of words.

A person who loves, supports and defends his country

- Ans 1. Dreamer
 2. Lover
 3. Fellow man
 4. Patriot

Question ID : 65497831474
Status : Not Answered
Chosen Option : --

Q.7 Select the option that can be used as a one-word substitute for the given group of words.

The sound a bear makes

- Ans 1. Caw
 2. Bray
 3. Growl
 4. Purr

Question ID : 65497831465
Status : Not Answered
Chosen Option : --

Q.8 The following sentence has been split into four segments. Identify the segment that contains a grammatical error.

Nobody were / allowed into / the containment zones / during the pandemic.

- Ans
- 1. during the pandemic
 - 2. allowed into
 - 3. the containment zones
 - 4. Nobody were

Question ID : 65497831468
Status : Not Answered
Chosen Option : --

Q.9 Select the most appropriate option that can substitute the underlined segment in the given sentence. If there is no need to substitute it, select 'No substitution required'.

Last Sunday I returning home late at night.

- Ans
- 1. No substitution required
 - 2. I returned home
 - 3. I am returning home
 - 4. I had been returning home

Question ID : 65497831472
Status : Not Answered
Chosen Option : --

Q.10 Select the most appropriate option to fill in the blank.

The type of turban worn by Indians _____ from one region to another.

- Ans
- 1. varies
 - 2. originates
 - 3. belongs
 - 4. follows

Question ID : 65497831470
Status : Not Answered
Chosen Option : --

Q.11 Select the most appropriate option to fill in the blank.

_____, he has only himself to blame.

- Ans
- 1. Immediately
 - 2. Accurately
 - 3. Ultimately
 - 4. Happily

Question ID : 65497831481
Status : Not Answered
Chosen Option : --

Q.12 Select the most appropriate synonym of the given word.

Restrain

- Ans 1. Provoke
 2. Control
 3. Force
 4. Encourage

Question ID : 65497831473
Status : Not Answered
Chosen Option : --

Q.13 Select the INCORRECTLY spelt word.

- Ans 1. Termite
 2. Terabyte
 3. Terrestrial
 4. Terminal

Question ID : 65497831479
Status : Not Answered
Chosen Option : --

Q.14 Select the INCORRECTLY spelt word.

- Ans 1. Picnic
 2. Picture
 3. Pickel
 4. Piano

Question ID : 65497831463
Status : Not Answered
Chosen Option : --

Q.15 Select the most appropriate ANTONYM of the given word.

Collect

- Ans 1. Hoard
 2. Compose
 3. Disperse
 4. Confine

Question ID : 65497831467
Status : Not Answered
Chosen Option : --

Q.16 Select the most appropriate synonym of the given word.

Vital

- Ans 1. Hungry
 2. Crucial
 3. Bold
 4. Ambitious

Question ID : 65497831469
Status : Not Answered
Chosen Option : --

Q.17 Parts of the given sentence have been given as options. One of them contains a grammatical error. Select the option that has the error.

A grand celebration in honour of a first woman gold medallist was organised by the family members.

- Ans 1. a first woman gold medallist
 2. by the family members
 3. in honour of
 4. grand celebration

Question ID : 65497831476
Status : Not Answered
Chosen Option : --

Q.18 Select the most appropriate meaning of the given idiom.

At the eleventh hour

- Ans 1. Too late in the night
 2. One hour before noon
 3. At the very last minute
 4. At 11:00 am

Question ID : 65497831475
Status : Not Answered
Chosen Option : --

Q.19 Parts of the given sentence have been given as options. One of them contains a grammatical error. Select the option that has the error.

Children are fond of eating food from Mala aunties small shop at the corner of the street.

- Ans 1. Mala aunties small shop
 2. are fond of
 3. food from
 4. at the corner

Question ID : 65497831471
Status : Not Answered
Chosen Option : --

Q.20 Select the most appropriate option to fill in the blank.

Though he earned meagre wages, he was _____ with his life.

- Ans 1. contented
 2. enthusiastic
 3. irritated
 4. miserable

Question ID : 65497831464
Status : Not Answered
Chosen Option : --

Comprehension:

In the following passage, some words have been deleted. Read the passage carefully and select the most appropriate option to fill in each blank.

Life processes are similar in all animals with (1)_____. So physiologists can find out a lot about the human body by studying animals (2)_____ frogs, rats and rabbits. Sometimes, research involves the death of these animals. But, physiologists take great care to not (3)_____ the animals. The animals are (4)_____ put to sleep during the experiments. It is only by physiological research (5)_____ medicine has been able to advance

SubQuestion No : 21

Q.21 Select the most appropriate option to fill in blank number 1.

- Ans
- 1. backbone
 - 2. the backbones
 - 3. the backbone
 - 4. backbones

Question ID : **65497831483**
Status : **Not Answered**
Chosen Option : --

Comprehension:

In the following passage, some words have been deleted. Read the passage carefully and select the most appropriate option to fill in each blank.

Life processes are similar in all animals with (1)_____. So physiologists can find out a lot about the human body by studying animals (2)_____ frogs, rats and rabbits. Sometimes, research involves the death of these animals. But, physiologists take great care to not (3)_____ the animals. The animals are (4)_____ put to sleep during the experiments. It is only by physiological research (5)_____ medicine has been able to advance

SubQuestion No : 22

Q.22 Select the most appropriate option to fill in blank number 2.

- Ans
- 1. as I ke as
 - 2. as such
 - 3. such as
 - 4. as I ke

Question ID : **65497831484**
Status : **Not Answered**
Chosen Option : --

Comprehension:

In the following passage, some words have been deleted. Read the passage carefully and select the most appropriate option to fill in each blank.

Life processes are similar in all animals with (1)_____. So physiologists can find out a lot about the human body by studying animals (2)_____ frogs, rats and rabbits. Sometimes, research involves the death of these animals. But, physiologists take great care to not (3)_____ the animals. The animals are (4)_____ put to sleep during the experiments. It is only by physiological research (5)_____ medicine has been able to advance

SubQuestion No : 23

Q.23 Select the most appropriate option to fill in blank number 3.

- Ans
- 1. hurt
 - 2. displease
 - 3. damage
 - 4. destroy

Question ID : **65497831485**
Status : **Not Answered**
Chosen Option : --

Comprehension:

In the following passage, some words have been deleted. Read the passage carefully and select the most appropriate option to fill in each blank.

Life processes are similar in all animals with (1)_____. So physiologists can find out a lot about the human body by studying animals (2)_____ frogs, rats and rabbits. Sometimes, research involves the death of these animals. But, physiologists take great care to not (3)_____ the animals. The animals are (4)_____ put to sleep during the experiments. It is only by physiological research (5)_____ medicine has been able to advance

SubQuestion No : 24

Q.24 Select the most appropriate option to fill in blank number 4.

- Ans
- 1. oddly
 - 2. strangely
 - 3. usually
 - 4. incidentally

Question ID : **65497831486**
Status : **Not Answered**
Chosen Option : --

Comprehension:

In the following passage, some words have been deleted. Read the passage carefully and select the most appropriate option to fill in each blank.

Life processes are similar in all animals with (1)_____. So physiologists can find out a lot about the human body by studying animals (2)_____ frogs, rats and rabbits. Sometimes, research involves the death of these animals. But, physiologists take great care to not (3)_____ the animals. The animals are (4)_____ put to sleep during the experiments. It is only by physiological research (5)_____ medicine has been able to advance

SubQuestion No : 25

Q.25 Select the most appropriate option to fill in blank number 5.

- Ans
- 1. that
 - 2. then
 - 3. than
 - 4. so

Question ID : **65497831487**
Status : **Not Answered**
Chosen Option : --

Section : **Part D Hindi**

Q.1 सही वर्तनी वाले शब्द का चयन कीजिए।

- Ans
- 1. अत्यधिक
 - 2. अत्याधिक
 - 3. अत्याधिक
 - 4. अत्यधिक

Question ID : **65497831489**
Status : **Answered**
Chosen Option : 1

Q.2 दिए गए वाक्य में रेखांकित खंड को प्रतिस्थापित करने के लिए सबसे उपयुक्त विकल्प का चयन करें।
यदि इसे प्रतिस्थापित करने की आवश्यकता नहीं है, तो विकल्प 'किसी बदलाव की आवश्यकता नहीं है'
का चयन करें।

शरीर पर कई अंग होते हैं।

- Ans
- 1. शरीर के
 - 2. शरीर के भीतर
 - 3. शरीर की
 - 4. किसी बदलाव की आवश्यकता नहीं है।

Question ID : 65497831499
Status : Answered
Chosen Option : 2

Q.3 'मत्स्य' का पर्यायवाची है-

- Ans
- 1. मुनि
 - 2. राजा
 - 3. मीन
 - 4. मेघ

Question ID : 65497831505
Status : Answered
Chosen Option : 3

Q.4 दिये गये वाक्यांश के लिए एक शब्द दीजिये।

जिस पर उपकार किया गया हो

- Ans
- 1. उत्पादित
 - 2. उद्धृत
 - 3. उपकृत
 - 4. उक्त

Question ID : 65497831497
Status : Answered
Chosen Option : 3

Q.5 रिक्त स्थान की पूर्ति के लिए सबसे उपयुक्त शब्द का चयन कीजिए।

बिच्छ का _____ विषेला होता है।

- Ans
- 1. डक
 - 2. फन
 - 3. दश
 - 4. काटना

Question ID : 65497831490
Status : Answered
Chosen Option : 1

Q.6 नीचे दिए गए मुहावरे का अर्थ व्यक्त करने वाले विकल्प का चयन कीजिए।

हवाई किले बनाना

- Ans
- 1. हवा से किले बनाना
 - 2. हवाई जहाज से किले बनाना
 - 3. मात्र कल्पना करते रहना
 - 4. हवा में किले बनाना

Question ID : 65497831503
Status : Answered
Chosen Option : 3

Q.7 सही वर्तनी वाले शब्द का चयन कीजिए।

- Ans
- 1. औद्योगीकरण
 - 2. औद्योगिकरण
 - 3. ओद्योगीकरण
 - 4. औद्योगीकरन

Question ID : 65497831488
Status : Answered
Chosen Option : 1

Q.8 दिए गए वाक्य में रेखांकित खंड को प्रतिस्थापित करने के लिए सबसे उपयुक्त विकल्प का चयन करें। यदि इसे प्रतिस्थापित करने की आवश्यकता नहीं है, तो विकल्प 'किसी बदलाव की आवश्यकता नहीं है' का चयन करें।

प्रधानमंत्री 15 अगस्त के दिन लाल किले पर झंडा फहराते हैं।

- Ans
- 1. लाल किले पर झंडा फहराता हैं।
 - 2. लाल किले पर झंडा फहराते है।
 - 3. किसी बदलाव की आवश्यकता नहीं है।
 - 4. लाल किले पर झंडा फहरते हैं।

Question ID : 65497831494
Status : Answered
Chosen Option : 3

Q.9 दिए गए वाक्य का वह भाग ज्ञात करें जिसमें कोई त्रुटि है। यदि कोई त्रुटि नहीं है, तो 'कोई त्रुटि नहीं है' विकल्प को चुनें।

लगभग गोपाल जानता है कि उसका मित्र बीमार है।

- Ans
- 1. कि उसका मित्र
 - 2. लगभग गोपाल जानता है
 - 3. बीमार है
 - 4. कोई त्रुटि नहीं

Question ID : 65497831491
Status : Answered
Chosen Option : 2

Q.10 रिक्त स्थान की पूर्ति के लिए सबसे उपयुक्त विकल्प का चयन करें।

मुझे _____ है कि आप स्वस्थ हो गए हैं।

- Ans 1. हर्ष
 2. आनंद
 3. आह्लाद
 4. उल्लास

Question ID : 65497831507
Status : Answered
Chosen Option : 2

Q.11 नीचे दिए वाक्य में रिक्त-स्थान की पूर्ति के लिए सबसे उपयुक्त शब्द का चयन करें।

झीगुर _____ रहा है।

- Ans 1. झंकार
 2. चुकर
 3. कैक
 4. डकार

Question ID : 65497831501
Status : Answered
Chosen Option : 1

Q.12 दिए गए वाक्यांश के लिए एक शब्द चुनें।

जो कई भाषाएँ बोलता हो -

- Ans 1. बहुभाषी
 2. वाचाल
 3. अल्पभाषी
 4. मितभाषी

Question ID : 65497831500
Status : Answered
Chosen Option : 1

Q.13 दिए गए वाक्य का वह भाग ज्ञात करें जिसमें कोई त्रुटि है। यदि कोई त्रुटि नहीं है, तो 'कोई त्रुटि नहीं है' चुनें।

कृपया कार्यालय में सूचित कीजिए कि आपने अपनी स्वेच्छा से अवकाश लिया है।

- Ans 1. कृपया कार्यालय में सूचित कीजिए
 2. कि आपने अपनी स्वेच्छा से
 3. कोई त्रुटि नहीं है।
 4. अवकाश लिया है।

Question ID : 65497831495
Status : Answered
Chosen Option : 2

Q.14 दिए गए वाक्यांश के लिए एक शब्द दीजिए।

जो व्यक्ति किसी के उपकार को मानता हो

- Ans
- 1. कृतघ्न
 - 2. कृतज्ञ
 - 3. कृतकृत्य
 - 4. अकृतज्ञ

Question ID : 65497831493
Status : Answered
Chosen Option : 2

Q.15 'चूना लगाना' मुहावरे का सही अर्थ है-

- Ans
- 1. धोखा देना
 - 2. चोरी करना
 - 3. प्रसन्न करना
 - 4. पान खिलाना

Question ID : 65497831506
Status : Answered
Chosen Option : 1

Q.16 दिए गए वाक्य में रेखांकित खंड को प्रतिस्थापित करने के लिए सबसे उपयुक्त विकल्प का चयन करें।
यदि इसे प्रतिस्थापित करने की आवश्यकता नहीं है, तो विकल्प 'किसी बदलाव की आवश्यकता नहीं है'
का चयन करें।

उसकी परेशानी देखकर मेरा प्राण मुँह को आ गया।

- Ans
- 1. मेरे प्राण मुँह को आ गए।
 - 2. किसी बदलाव की आवश्यकता नहीं है।
 - 3. मेरे प्राण मुँह से आ गए।
 - 4. मेरे प्राण मुँह में आ गया।

Question ID : 65497831498
Status : Answered
Chosen Option : 1

Q.17 दिए गए शब्द का विलोम चुनें।

क्रोध

- Ans
- 1. हिंसा
 - 2. गुस्सा
 - 3. दया
 - 4. क्षमा

Question ID : 65497831492
Status : Answered
Chosen Option : 3

Q.18 दिए गए शब्द के समानार्थी शब्द का चयन करें।

व्योम

- Ans 1. अबक
 2. आकाश
 3. अशु
 4. अि

Question ID : 65497831496
Status : Answered
Chosen Option : 2

Q.19 दिए गए शब्द का विलोम चुनें-

जाति

- Ans 1. विजाति
 2. बिरादरी
 3. जाना-पहचाना
 4. बेजान

Question ID : 65497831502
Status : Answered
Chosen Option : 1

Q.20 दिये गये वाक्य के किस भाग में त्रुटि है?

प्रायः लोग देहिक सुख चाहते हैं।

- Ans 1. प्रायः लोग
 2. देहिक
 3. सुख
 4. चाहते हैं।

Question ID : 65497831504
Status : Answered
Chosen Option : 2

Comprehension:

दिए गए गद्यांश में से कुछ शब्द हटा दिए गए हैं। संबंधित प्रश्नों में प्रत्येक सख्खा के लिए सबसे उपयुक्त विकल्प का चयन करें।

आधुनिक युग (1) _____ उपलब्धियों का युग है। जैसे-जैसे विज्ञान के (2) _____ बढ़ रहे हैं, वैसे-वैसे मानव की उन्नति और समृद्धि का मार्ग प्रशस्त हुआ है। आज का मानव धरती, आकाश और सुदूर (3) _____ के अनेक रहस्यों से अवगत हो चुका है। उसने (4) _____ के उद्भव और विकास से संबंधित नवीनतम व्याख्याएँ प्रस्तुत कर अपने बढ़ते कदमों को उचित (5) _____ प्रदान किया है।

SubQuestion No : 21

Q.21 गद्यांश के रिक्त स्थान (1) के लिए सर्वाधिक उपयुक्त शब्द होगा-

- Ans 1. साहित्यिक
 2. वैज्ञानिक
 3. ऐतिहासिक
 4. दार्शनिक

Question ID : 65497831509
Status : Answered
Chosen Option : 2

Comprehension:

दिए गए गद्यांश में से कुछ शब्द हटा दिए गए हैं। संबंधित प्रश्नों में प्रत्येक सख्खा के लिए सबसे उपयुक्त विकल्प का चयन करें।

आधुनिक युग (1) _____ उपलब्धियों का युग है। जैसे-जैसे विज्ञान के (2) _____ बढ़ रहे हैं, वैसे-वैसे मानव की उन्नति और समृद्धि का मार्ग प्रशस्त हुआ है। आज का मानव धरती, आकाश और सुदूर (3) _____ के अनेक रहस्यों से अवगत हो चुका है। उसने (4) _____ के उद्भव और विकास से संबंधित नवीनतम व्याख्याएँ प्रस्तुत कर अपने बढ़ते कदमों को उचित (5) _____ प्रदान किया है।

SubQuestion No : 22

Q.22 गद्यांश के रिक्त स्थान (2) के लिए सर्वाधिक उपयुक्त शब्द होगा-

- Ans 1. कदम
 2. पहल
 3. माँग
 4. फैलाव

Question ID : 65497831510
Status : Answered
Chosen Option : 1

Comprehension:

दिए गए गद्यांश में से कुछ शब्द हटा दिए गए हैं। संबंधित प्रश्नों में प्रत्येक सख्खा के लिए सबसे उपयुक्त विकल्प का चयन करें।

आधुनिक युग (1) _____ उपलब्धियों का युग है। जैसे-जैसे विज्ञान के (2) _____ बढ़ रहे हैं, वैसे-वैसे मानव की उन्नति और समृद्धि का मार्ग प्रशस्त हुआ है। आज का मानव धरती, आकाश और सुदूर (3) _____ के अनेक रहस्यों से अवगत हो चुका है। उसने (4) _____ के उद्भव और विकास से संबंधित नवीनतम व्याख्याएँ प्रस्तुत कर अपने बढ़ते कदमों को उचित (5) _____ प्रदान किया है।

SubQuestion No : 23

Q.23 गद्यांश के रिक्त स्थान (3) के लिए सर्वाधिक उपयुक्त शब्द होगा-

- Ans 1. उपकरण
 2. अतरिक्ष
 3. यातायात
 4. उद्यान

Question ID : 65497831511
Status : Answered
Chosen Option : 2

Comprehension:

दिए गए गद्यांश में से कुछ शब्द हटा दिए गए हैं। संबंधित प्रश्नों में प्रत्येक सख्खा के लिए सबसे उपयुक्त विकल्प का चयन करें।

आधुनिक युग (1) _____ उपलब्धियों का युग है। जैसे-जैसे विज्ञान के (2) _____ बढ़ रहे हैं, वैसे-वैसे मानव की उन्नति और समृद्धि का मार्ग प्रशस्त हुआ है। आज का मानव धरती, आकाश और सुदूर (3) _____ के अनेक रहस्यों से अवगत हो चुका है। उसने (4) _____ के उद्भव और विकास से संबंधित नवीनतम व्याख्याएँ प्रस्तुत कर अपने बढ़ते कदमों को उचित (5) _____ प्रदान किया है।

SubQuestion No : 24

Q.24 गद्यांश के रिक्त स्थान (4) के लिए सर्वाधिक उपयुक्त शब्द होगा-

- Ans 1. ब्रह्मांड
 2. आश्रम
 3. आसमान
 4. देवालय

Question ID : 65497831512
Status : Answered
Chosen Option : 1

Comprehension:

दिए गए गद्यांश में से कुछ शब्द हटा दिए गए हैं। संबंधित प्रश्नों में प्रत्येक सख्या के लिए सबसे उपयुक्त विकल्प का चयन करें।

आधुनिक युग (1) _____ उपलब्धियों का युग है। जैसे-जैसे विज्ञान के (2) _____ बढ़ रहे हैं, वैसे-वैसे मानव की उन्नति और समृद्धि का मार्ग प्रशस्त हुआ है। आज का मानव धरती, आकाश और सुदूर (3) _____ के अनेक रहस्यों से अवगत हो चुका है। उसने (4) _____ के उद्भव और विकास से संबंधित नवीनतम व्याख्याएँ प्रस्तुत कर अपने बढ़ते कदमों को उचित (5) _____ प्रदान किया है।

SubQuestion No : 25

Q.25 गद्यांश के रिक्त स्थान (5) के लिए सर्वाधिक उपयुक्त शब्द होगा-

- Ans** 1. स्वरूप
 2. अपरूप
 3. महत्व
 4. अधिकार

Question ID : 65497831513

Status : Answered

Chosen Option : 3

GovtJobsAlert.In