

Exam Date	23/11/2021
Exam Time :	12:30 PM - 2:00 PM
Subject	Constable GD 2021

Section : Part A General Intelligence and Reasoning

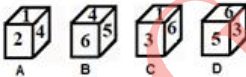
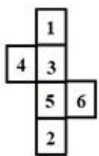
Q.1 Select the correct mirror image of the given combination when the mirror is placed at 'PQ' as shown.



- Ans
- 1. UAKNAI
 - 2. NAUKAU
 - 3. KAUANA
 - 4. NAUNAK

Question ID : 65497835335
 Status : Answered
 Chosen Option : 1

Q.2 Select the dice that can be formed by folding the given sheet along the lines.



- Ans
- 1. Only A and B
 - 2. Only C
 - 3. Only A and C
 - 4. Only A, B and D

Question ID : 65497835339
 Status : Marked For Review
 Chosen Option : 3

Q.3 Five players are sitting in a straight line in a park, facing north. A and B are sitting together. C is between B and D. E is second to the right of C. Find the position of B from the left.

- Ans
- 1. 2nd
 - 2. 1st
 - 3. 4th
 - 4. 5th

Question ID : 65497835336
Status : Answered
Chosen Option : 1

Q.4 Five friends, R, S, V, P and Q, are sitting in a row facing north. Q is sitting to the right of R and left of S. If V is the only one sitting to the left of R, then who is sitting in the left most position?

- Ans
- 1. R
 - 2. P
 - 3. S
 - 4. V

Question ID : 65497835326
Status : Answered
Chosen Option : 4

Q.5 Pointing to the photograph of a boy, Nikhil said, "He is my mother's mother-in-law's daughter's only brother's son". How is the boy in the photograph related to Nikhil?

- Ans
- 1. Cousin
 - 2. Father
 - 3. Paternal uncle
 - 4. Brother

Question ID : 65497835348
Status : Answered
Chosen Option : 4

Q.6 In a certain code language, JAGUAR is written as MDJXDU. How will LEOPARD be written as in that language?

- Ans
- 1. OHQSDVG
 - 2. OGRSEUG
 - 3. OHRTDUH
 - 4. OHRSDUG

Question ID : 65497835341
Status : Answered
Chosen Option : 4

Q.7 Select the correct option that indicates the arrangement of the given words in the order in which they appear in an English dictionary.

1. Gracious
2. Gorgeous
3. Government
4. Governor
5. Governess

- Ans
- 1. 2, 5, 1, 4, 3
 - 2. 2, 5, 1, 3, 4
 - 3. 2, 5, 3, 4, 1
 - 4. 3, 5, 1, 4, 2

Question ID : 65497835328
Status : Answered
Chosen Option : 3

Q.8 Select the option that is related to the third term in the same way as the second term is related to the first term.

SITAR : TKWEW :: CRAME : ?

- Ans
- 1. DTDSJ
 - 2. DSCQJ
 - 3. DTDQJ
 - 4. DTDQK

Question ID : 65497835346
Status : Answered
Chosen Option : 3

Q.9 If 'Z' denotes 'addition', 'X' denotes 'multiplication', 'Y' denotes 'division', and 'W' denotes 'subtraction', then what will be the value of the following expression?

15 Y (11 Z 4) Z 3 X 4 (19 Z 3) Y 11 X 3 (3 Z 2)

- Ans
- 1. 405
 - 2. 361
 - 3. 408
 - 4. 390

Question ID : 65497835338
Status : Answered
Chosen Option : 2

Q.10 In a certain code language, 'TOY' is written as 'UPZ' and 'COW' is written as 'DPX'. How will 'MONU' be written in that language?

- Ans
- 1. VONP
 - 2. VOPN
 - 3. NPVO
 - 4. NPOV

Question ID : 65497835333
Status : Answered
Chosen Option : 4

Q.11 Select the option that is related to the third number in the same way as the second number is related to the first number.

15 : 210 :: 26 : ?

- Ans
- 1. 666
 - 2. 656
 - 3. 650
 - 4. 676

Question ID : 65497835337

Status : Answered

Chosen Option : 3

Q.12 Read the given statements and conclusions carefully. Assuming that the information given in the statements is true, even if it appears to be at variance with commonly known facts, decide which of the given conclusions logically follow(s) from the statements.

Statements:

Some pumpkins are bananas.
All bananas are bitter gourds.

Conclusions:

- I. No bitter gourd is a pumpkin.
- II. Some bitter gourds are bananas.

- Ans
- 1. Both conclusions I and II follow
 - 2. Only conclusion II follows
 - 3. Only conclusion I follows
 - 4. Either conclusion I or II follows

Question ID : 65497835342

Status : Answered

Chosen Option : 2

Q.13 In a certain code language, DOUBLE is written as ZKQRYM, and TEN is written as XMV. How will TOLL be written in that language?

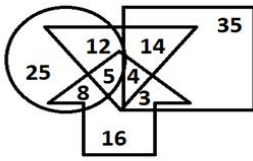
- Ans
- 1. UKQR
 - 2. XKYY
 - 3. YKXM
 - 4. MVYY

Question ID : 65497835347

Status : Marked For Review

Chosen Option : 2

Q.14 In the given Venn diagram, the circle represents 'girls who play football', the rectangle represents 'boys who play football', the triangle represents 'girls and boys who play hockey', and the arrow represents 'players who play badminton'.



What is the total number of girls and boys who play both football and hockey?

- Ans
- 1. 70
 - 2. 26
 - 3. 35
 - 4. 9

Question ID : 65497835327
 Status : Answered
 Chosen Option : 2

Q.15 Select the combination of letters that when sequentially placed in the blanks of the given series will complete the series.

L _ _ K C _ O Q _ C L O _ _ C

- Ans
- 1. OQLKQK
 - 2. QOLKQK
 - 3. OQLOQC
 - 4. OKOQCQ

Question ID : 65497835329
 Status : Answered
 Chosen Option : 1

Q.16 Select the option in which the numbers are related in the same way as are the numbers in the given set.

4, 17, 33

- Ans
- 1. 5, 10, 55
 - 2. 12, 15, 244
 - 3. 6, 15, 71
 - 4. 10, 14, 114

Question ID : 65497835343
 Status : Answered
 Chosen Option : 2

Q.17 Select the figure from among the given options that can replace the question mark (?) in the following series.



Ans

✗ 1.



✗ 2.



✗ 3.



✓ 4.



Question ID : 65497835331

Status : Answered

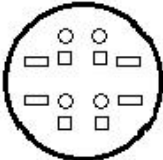
Chosen Option : 4

Q.18 The sequence of folding a piece of paper and the manner in which the folded paper has been cut is shown in the following figures. How would this paper look when unfolded?

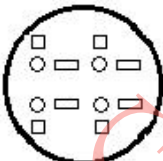


Ans

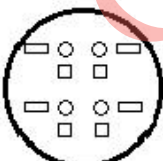
✗ 1.



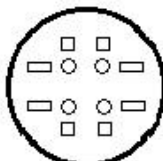
✗ 2.



✗ 3.



✓ 4.



Question ID : 65497835345

Status : Answered


Chosen Option : 4

Q.19 Select the option in which the given figure is embedded (rotation is NOT allowed).

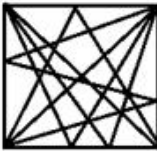


Ans

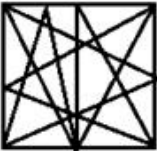
✓ 1.



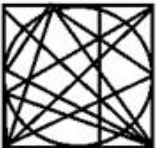
✗ 2.



✗ 3.



✗ 4.



Question ID : 65497835340

Status : Answered

Chosen Option : 1

Q.20 Select the number from among the given options that can replace the question mark (?) in the following series.

92, 86, 81, 77, ?, 72

Ans ✗ 1. 75

✗ 2. 76

✗ 3. 73

✓ 4. 74

Question ID : 65497835330

Status : Answered

Chosen Option : 4

Q.21 The sum of four numbers A, B, C and D is 147. The ratio of C and D is 3 : 5, respectively. D is five times A. C is twice B. What is the value of B?

Ans ✗ 1. 45

✗ 2. 27

✓ 3. 21

✗ 4. 42

Question ID : 65497835344

Status : Answered

Chosen Option : 3

Q.22 'Pen' is related to 'Ink' in the same way as 'Brush' is related to '_____'.
Ans 1. Pencil

- 2. Paint
- 3. Paper
- 4. Drawing Book

Question ID : 65497835325
Status : Answered
Chosen Option : 2

Q.23 Select the letter-cluster from among the given options that can replace the question mark (?) in the following series.

FIK, HKM, JMO, LOQ, ?

- Ans 1. NRQ
- 2. NQS
 - 3. QNS
 - 4. SQN

Question ID : 65497835324
Status : Answered
Chosen Option : 2

Q.24 Select the number from among the given options that can replace the question mark (?) in the following series.

9, 18, 45, 126, ?

- Ans 1. 369
- 2. 333
 - 3. 393
 - 4. 396

Question ID : 65497835334
Status : Answered
Chosen Option : 1

Q.25 Four letter-clusters have been given, out of which three are alike in some manner and one is different. Select the letter-cluster that is different.

- Ans 1. HI
- 2. AB
 - 3. CD
 - 4. PG

Question ID : 65497835332
Status : Answered
Chosen Option : 4

Section : Part B General Knowledge and General Awareness

Q.1 Who among the following is the first bowler to bowl two maiden overs in the Indian Premier league match?

- Ans 1. Mohammed Siraj
 2. Mohit Sharma
 3. Imran Tahir
 4. Sohail Tanvir

Question ID : 65497835366
Status : Marked For Review
Chosen Option : 3

Q.2 'Shaheedi Sabha' is a festival celebrated by which of the following states?

- Ans 1. Bihar
 2. Haryana
 3. Sikkim
 4. Punjab

Question ID : 65497835360
Status : Answered
Chosen Option : 4

Q.3 Which uninhabited island in India has a bird sanctuary?

- Ans 1. Bluff Island
 2. Barren Island
 3. Pitti Island
 4. Belle Island

Question ID : 65497835365
Status : Answered
Chosen Option : 2

Q.4 Who among the following kings of Benaras (Banaras) was arrested by Warren Hastings in 1781?

- Ans 1. Chait (Chet) Singh
 2. Mahip (Maheep) Narayan Singh
 3. Udit Narayan Singh
 4. Balwant Singh

Question ID : 65497835369
Status : Not Answered
Chosen Option : --

Q.5 Achanta Sharath Kamal is a professional player of _____ from India.

- Ans 1. swimming
 2. golf
 3. table tennis
 4. lawn tennis

Question ID : 65497835350
Status : Answered
Chosen Option : 2

Q.6 What is the amount of annual health cover available to a family under the 'Ayushman Bharat' scheme of the Government of India?

- Ans 1. ₹ 5 lakh
 2. ₹ 10 lakh
 3. ₹ 1 lakh
 4. ₹ 3 lakh

Question ID : 65497835349
Status : Answered
Chosen Option : 2

Q.7 What is India's rank in the Global Economic Freedom Index 2020?

- Ans 1. 105
 2. 92
 3. 107
 4. 100

Question ID : 65497835367
Status : Answered
Chosen Option : 3

Q.8 Who among the following persons can be described as 'a spokesperson of the backward classes and castes in India'?

- Ans 1. Vallabhbhai Patel
 2. Dr. Babasaheb Ambedkar
 3. Dr. Rajendra Prasad
 4. Subhas Chandra Bose

Question ID : 65497835370
Status : Answered
Chosen Option : 2

Q.9 The theme for Shikshak Parv 2021 was '_____':

- Ans 1. Quality and Sustainable Schools: Learnings from the Schools in India
 2. Vidyarthi Devo Bhava
 3. National Education Policy
 4. Acharya Devo Bhava

Question ID : 65497835373
Status : Marked For Review
Chosen Option : 1

Q.10 Banabhatta wrote the biography of King _____.

- Ans 1. Harshavardhana
 2. Chandragupta Maurya
 3. Samudragupta
 4. Ashoka

Question ID : 65497835371
Status : Answered
Chosen Option : 1

Q.11 In which of the following years was the National Jute Policy formulated? Its objective was to increase productivity, improve quality, ensure good prices to jute farmers and enhance the yield per hectare.

- Ans
- 1. 2000
 - 2. 2005
 - 3. 1998
 - 4. 2014

Question ID : 65497835357
Status : Answered
Chosen Option : 2

Q.12 Calcitonin hormone is released by which of the following glands in humans when the amount of calcium in the bloodstream is high?

- Ans
- 1. Thyroid
 - 2. Adrenal
 - 3. Pituitary
 - 4. Pineal

Question ID : 65497835362
Status : Marked For Review
Chosen Option : 3

Q.13 For how many days is the Indian festival of Onam celebrated in Kerala?

- Ans
- 1. 12
 - 2. 10
 - 3. 15
 - 4. 7

Question ID : 65497835356
Status : Marked For Review
Chosen Option : 4

Q.14 Who among the following is the author of 'Grandparents' Bag of Stories'?

- Ans
- 1. Gauri Khan
 - 2. Twinkle Khanna
 - 3. Arundhati Roy
 - 4. Sudha Murty

Question ID : 65497835358
Status : Answered
Chosen Option : 2

Q.15 In which of the following years was the first Commonwealth Games held ?

- Ans
- 1. 1930
 - 2. 1912
 - 3. 1965
 - 4. 1956

Question ID : 65497835359
Status : Answered
Chosen Option : 3

Q.16 According to which of the following Articles of the Constitution of India does a citizen of the country have the right to protection of life and personal liberty?

- Ans
- 1. Article 17
 - 2. Article 21
 - 3. Article 20
 - 4. Article 26

Question ID : 65497835351
Status : Answered
Chosen Option : 2

Q.17 NABARD launched a sanitation literacy campaign to promote literacy on water, sanitation and hygiene under which of the following missions in Karnataka in October 2020?

- Ans
- 1. Jagananna Thodu
 - 2. Jal Shakti
 - 3. Hans Jal Dhara Yojana
 - 4. Swachh Bharat Mission

Question ID : 65497835361
Status : Marked For Review
Chosen Option : 2

Q.18 As per Economic Survey 2020–21, from the year _____, infant mortality rates declined by 12% for states that did not adopt the 'Ayushman Bharat Pradhan Mantri Jan Arogya Yojana' (AB-PMJAY).

- Ans
- 1. 2016–17 to 2020–21
 - 2. 2019–20 to 2020–21
 - 3. 2018–19 to 2019–20
 - 4. 2015–16 to 2019–20

Question ID : 65497835368
Status : Not Answered
Chosen Option : --

Q.19 In which of the following states did Prime Minister Narendra Modi unveil the Statue of Peace in November 2020?

- Ans
- 1. Maharashtra
 - 2. Rajasthan
 - 3. Tamil Nadu
 - 4. Gujarat

Question ID : 65497835355
Status : Marked For Review
Chosen Option : 4

Q.20 Article _____ of the Constitution of India states that the President can nominate two members of the Anglo-Indian community to the Lok Sabha if the community is not adequately represented.

- Ans
- 1. 335
 - 2. 331
 - 3. 333
 - 4. 337

Question ID : 65497835372
Status : Answered
Chosen Option : 2

Q.21 In which of the following years was the Gandhi-Irwin Pact signed?

- Ans 1. 1931
 2. 1921
 3. 1929
 4. 1919

Question ID : 65497835354
Status : Answered
Chosen Option : 1

Q.22 In November 2020, India signed an implementation agreement on hydrography with _____.

- Ans 1. China
 2. Indonesia
 3. Vietnam
 4. Japan

Question ID : 65497835352
Status : Answered
Chosen Option : 2

Q.23 Which of the following oceans' deepest point is Java Trench?

- Ans 1. Indian Ocean
 2. Pacific Ocean
 3. Atlantic Ocean
 4. Arctic Ocean

Question ID : 65497835364
Status : Answered
Chosen Option : 4

Q.24 Who among the following was appointed as the brand ambassador of Equitas Small Finance Bank in November 2020?

- Ans 1. Akshay Kumar
 2. Virat Kohli
 3. Smriti Mandhana
 4. Sushmita Sen

Question ID : 65497835363
Status : Answered
Chosen Option : 3

Q.25 Which of the following inert gases is used to inflate party balloons?

- Ans 1. Helium
 2. Xenon
 3. Argon
 4. Neon

Question ID : 65497835353
Status : Answered
Chosen Option : 1

Section : Part C Elementary Mathematics

Q.1 The average of some numbers is 37. If each of $\frac{3}{5}$ of the numbers is increased by 7, and each of the remaining is decreased by 9, then the average of the numbers, so obtained, is:

- Ans**
- 1. 35.8
 - 2. 38.5
 - 3. 37.6
 - 4. 36.7

Question ID : 65497835376
Status : Answered
Chosen Option : 3

Q.2 If a sum of ₹713 is divided into three parts, A, B and C in the ratio $\frac{1}{2} : \frac{2}{3} : \frac{3}{4}$, then C is equal to:

- Ans**
- 1. ₹209
 - 2. ₹297
 - 3. ₹270
 - 4. ₹279

Question ID : 65497835388
Status : Answered
Chosen Option : 4

Q.3 An article is listed at ₹18000 and the discount offered is 12%. What additional discount must be given to bring the net selling price to ₹14414.40?

- Ans**
- 1. 11%
 - 2. 8%
 - 3. 9%
 - 4. 10%

Question ID : 65497835377
Status : Answered
Chosen Option : 3

Q.4 A dealer marked the price of an item 40% above its cost price. He allowed two successive discounts of 25% and 16% to a particular customer. As a result, he incurred a loss of ₹590. At what price did he sell the item to the said customer?

- Ans**
- 1. ₹4,240
 - 2. ₹4,320
 - 3. ₹4,410
 - 4. ₹4,400

Question ID : 65497835383
Status : Answered
Chosen Option : 3

Q.5 A and B can do a piece of work in 36 days and 48 days, respectively. They work together for 12 days. The remaining work is completed by C alone in 10 days. A and C together can complete 62.5% of the original work in:

- Ans**
- 1. 9 days
 - 2. $12\frac{1}{2}$ days
 - 3. $14\frac{2}{5}$ days
 - 4. 10 days

Question ID : 65497835397
Status : Answered
Chosen Option : 1

Q.6 A sum of money at simple interest amounts to ₹750 in 5 years and to ₹800 in 6 years. The sum is:

- Ans**
- 1. ₹500
 - 2. ₹680
 - 3. ₹550
 - 4. ₹650

Question ID : 65497835387
Status : Answered
Chosen Option : 1

Q.7 Find the compound interest on ₹15,600 at 12% per annum for 9 months, compounded quarterly.

- Ans**
- 1. ₹ 1,446.54
 - 2. ₹ 1,972.40
 - 3. ₹ 1,925.75
 - 4. ₹ 1,969.25

Question ID : 65497835391
Status : Answered
Chosen Option : 3

Q.8 If $P : Q = 2 : 3$, then find $(2P + Q) : (5P - 3Q)$.

- Ans**
- 1. 4 : 3
 - 2. 2 : 5
 - 3. 7 : 1
 - 4. 3 : 8

Question ID : 65497835390
Status : Answered
Chosen Option : 3

Q.9 A certain sum amounts to ₹13860 after 5 years and to ₹16776 after 8 years at the same rate per cent per annum at simple interest. What will be simple interest (in ₹) on a sum of ₹20,000 for $3\frac{2}{5}$ years at the same rate?

- Ans**
- ✓ 1. 7344
 - ✗ 2. 7434
 - ✗ 3. 6374
 - ✗ 4. 6473

Question ID : 65497835375
Status : Answered
Chosen Option : 1

Q.10 If an integer 'k' is divisible by 3, 5 and 10, then what will be the next larger integer divisible by all these numbers?

- Ans**
- ✗ 1. $k + 2$
 - ✗ 2. $k + 20$
 - ✗ 3. $k + 10$
 - ✓ 4. $2k$

Question ID : 65497835384
Status : Answered
Chosen Option : 4

Q.11 Three articles are bought at ₹500 each. One of them is sold at a profit of 12%. If the other two articles are also sold and a loss of 20% occurs on the whole transaction, then what is the gain or loss percentage on selling the remaining two articles?

- Ans**
- ✗ 1. Profit of 15%
 - ✗ 2. Loss of 25%
 - ✗ 3. Loss of 40%
 - ✓ 4. Loss of 36%

Question ID : 65497835374
Status : Answered
Chosen Option : 4

Q.12 A shopkeeper bought an oven for ₹15,000 and sold it for ₹19,200. He paid ₹350 at the octroi and ₹650 transportation charges. What is his loss or gain per cent?

- Ans**
- ✓ 1. 20% gain
 - ✗ 2. 21% loss
 - ✗ 3. 20% loss
 - ✗ 4. 21% gain

Question ID : 65497835398
Status : Marked For Review
Chosen Option : 4

Q.13 A and B together have ₹4,655. If $\frac{4}{15}$ of A's amount is equal to $\frac{2}{5}$ of B's amount, what amount does B have?

- Ans
- 1. ₹9,310
 - 2. ₹1,680
 - 3. ₹2,311
 - 4. ₹1,862

Question ID : 65497835386
Status : Answered
Chosen Option : 4

Q.14 Seema and Geeta start at the same time to ride from place A to place B, which is 90 km away from A. Seema travels 3 km per hour slower than Geeta. Geeta reaches place B and at once turns back, meeting Seema 15 km from place B. Geeta's speed (in km/h) is:

- Ans
- 1. 12
 - 2. 10.5
 - 3. 7.5
 - 4. 9

Question ID : 65497835380
Status : Not Answered
Chosen Option : --

Q.15 The value of $78 \div 13 \text{ of } 5 - [48 \div 72 \times 3 - 15 \div 8 \times (23 - 29) - 17] \text{ of } 4$ is:

- Ans
- 1. $5\frac{1}{4}$
 - 2. $4\frac{1}{5}$
 - 3. $15\frac{1}{4}$
 - 4. $16\frac{1}{5}$

Question ID : 65497835395
Status : Answered
Chosen Option : 4

Q.16 The value of $42\frac{1}{5} \div \left[36 + \frac{2}{3} \text{ of } 15 - \left(24 \div 8 + \frac{4}{5} \right) \right]$ is:

- Ans
- 1. 1
 - 2. 10
 - 3. 15
 - 4. 5

Question ID : 65497835381
Status : Answered
Chosen Option : 1

Q.17 The average weight of A, B and C is 60 kg. If the average weight of A and B is 45 kg, then the weight of C is:

- Ans**
- 1. 80 kg
 - 2. 70 kg
 - 3. 60 kg
 - 4. 90 kg

Question ID : 65497835385
Status : Answered
Chosen Option : 4

Q.18 A can do a piece of work in 15 days working 6 hours per day and B can do it in 10 days working 5 hours per day. How long (in days) will they take to do it, working together for 9 hours per day?

- Ans**
- 1. $6\frac{4}{7}$
 - 2. $5\frac{4}{7}$
 - 3. $3\frac{4}{7}$
 - 4. $2\frac{4}{7}$

Question ID : 65497835379
Status : Answered
Chosen Option : 3

Q.19 A pool has length 15 m, breadth 10 m, and depth 3 m. The water is filled up to a depth of 2.5 m. What is the quantity (in kilo litres) of water in the pool?

- Ans**
- 1. 370.5
 - 2. 375
 - 3. 450
 - 4. 475

Question ID : 65497835389
Status : Answered
Chosen Option : 2

Q.20 The savings of Radha are equal to 40% of her expenditure. If her income increases by 25% and the expenditure increases by 40%, then her savings increase/decrease by how much?

- Ans**
- 1. Increase by 15%
 - 2. Increase by 12.5%
 - 3. Decrease by 15%
 - 4. Decrease by 12.5%

Question ID : 65497835394
Status : Answered
Chosen Option : 4

Q.21 The speed of a train is 80 km/h. The distance travelled by it from 10.20 a.m. to 1.50 p.m. is:

- Ans**
- 1. 250 km
 - 2. 260 km
 - 3. 280 km
 - 4. 240 km

Question ID : 65497835382
Status : Answered
Chosen Option : 3

Q.22 Find the area of a square, one of whose diagonals is 2.6 m long.

- Ans**
- 1. 1.25 m²
 - 2. 3.38 m²
 - 3. 2.42 m²
 - 4. 3.50 m²

Question ID : 65497835392
Status : Answered
Chosen Option : 2

Q.23 By selling an article for ₹299.20, a shopkeeper loses 12%. If he sells it for ₹350.20, then there is:

- Ans**
- 1. 1.5% gain
 - 2. 3% loss
 - 3. 1.5% loss
 - 4. 3% gain

Question ID : 65497835396
Status : Answered
Chosen Option : 4

Q.24 Sita scored 756 marks out of 900 and her brother Avi scored 350 marks out of 500. How many more marks should Avi get to make his score per cent equivalent to Sita?

- Ans**
- 1. 65
 - 2. 80
 - 3. 70
 - 4. 60

Question ID : 65497835378
Status : Answered
Chosen Option : 3

Q.25 Let x be the greatest number which when divides 6564, 7416 and 8907, the remainder in each case is the same. The sum of the digits of x is:

- Ans**
- 1. 9
 - 2. 5
 - 3. 10
 - 4. 6

Question ID : 65497835393
Status : Answered

Section : Part D English

Q.1 Select the option that will improve the underlined part of the given sentence. In case no improvement is needed, select 'No improvement required'.

He acted in according to my instructions.

- Ans
- 1. behalf of
 - 2. accordance with
 - 3. spite to
 - 4. No improvement required

Question ID : 65497835414
Status : Answered
Chosen Option : 2

Q.2 Select the most appropriate ANTONYM of the given word.

Sparse

- Ans
- 1. Clear
 - 2. Dense
 - 3. Extra
 - 4. Thin

Question ID : 65497835404
Status : Answered
Chosen Option : 1

Q.3 The following sentence has been split into four segments. Identify the segment that contains a grammatical error.

Banking today, / in a seamless world, / make it possible for you / to access your account from any city.

- Ans
- 1. make it possible for you
 - 2. to access your account from any city
 - 3. Banking today
 - 4. in a seamless world

Question ID : 65497835403
Status : Answered
Chosen Option : 1

Q.4 Select the option that can be used as a one-word substitute for the given group of words.

A medical practitioner specialising in children and their diseases

- Ans
- 1. Cardiologist
 - 2. Nephrologist
 - 3. Paediatrician
 - 4. Physician

Question ID : 65497835399
Status : Marked For Review
Chosen Option : 3

Q.5 Select the option that can be used as a one-word substitute for the given group of words.

A large group of people

- Ans 1. Herd
 2. Horde
 3. Flock
 4. Pride

Question ID : 65497835418
Status : Answered
Chosen Option : 2

Q.6 Select the most appropriate meaning of the given idiom.

Pass the baton

- Ans 1. pass on belongings to the heirs
 2. shift responsibility to others
 3. take part in a relay race
 4. share a reward with someone

Question ID : 65497835407
Status : Marked For Review
Chosen Option : 2

Q.7 Select the most appropriate SYNONYM of the given word.

Humble

- Ans 1. Loud
 2. Meek
 3. Mute
 4. Rude

Question ID : 65497835417
Status : Answered
Chosen Option : 3

Q.8 The following sentence has been split into four segments.

Identify the segment that contains a grammatical error. Tagore was / a poet / as well / a patriot.

- Ans 1. a patriot
 2. as well
 3. Tagore was
 4. a poet

Question ID : 65497835416
Status : Marked For Review
Chosen Option : 2

Q.9 Select the most appropriate option to fill in the blank.

In the jungle, he saw a _____ of wolves.

- Ans
- 1. bunch
 - 2. pack
 - 3. grove
 - 4. herd

Question ID : 65497835400
Status : Marked For Review
Chosen Option : 4

Q.10 Select the most appropriate option that can substitute the underlined word in the given sentence.

After graduation, he found a transaction job as a technical expert in regional office.

- Ans
- 1. rickety
 - 2. auspicious
 - 3. stable
 - 4. stalwart

Question ID : 65497835401
Status : Marked For Review
Chosen Option : 4

Q.11 The following sentence has been split into four segments. Identify the segment that contains a grammatical error.

The children / were warned / to keep away / for the edge of the cliff.

- Ans
- 1. The children
 - 2. were warned
 - 3. for the edge of the cliff
 - 4. to keep away

Question ID : 65497835410
Status : Answered
Chosen Option : 3

Q.12 Select the most appropriate option to fill in the blank.

The news reporter refused to _____ his source of information.

- Ans
- 1. disclose
 - 2. distribute
 - 3. discover
 - 4. distract

Question ID : 65497835409
Status : Answered
Chosen Option : 1

Q.13 Select the option that can be used as a one-word substitute for the given group of words.

Person who sells and arranges cut flowers

- Ans 1. Florist
 2. Horticulturist
 3. Decorator
 4. Gardener

Question ID : 65497835405
Status : Answered
Chosen Option : 1

Q.14 Select the most appropriate ANTONYM of the given word.

Deposit

- Ans 1. Withdraw
 2. Save
 3. Exhaust
 4. Submit

Question ID : 65497835402
Status : Answered
Chosen Option : 1

Q.15 Select the INCORRECTLY spelt word.

- Ans 1. Jelous
 2. Sincere
 3. Laughter
 4. Collide

Question ID : 65497835408
Status : Answered
Chosen Option : 1

Q.16 Select the most appropriate meaning of the given idiom.

Keep in touch

- Ans 1. Search closely
 2. Maintain contact
 3. Be sincere
 4. Trust someone

Question ID : 65497835413
Status : Answered
Chosen Option : 2

Q.17 Select the INCORRECTLY spelt word.

- Ans 1. Disobediaent
 2. Disapprove
 3. Proportionate
 4. Overreact

Question ID : 65497835406
Status : Answered
Chosen Option : 1

Q.18 Select the most appropriate synonym of the given word.

Spurn

- Ans 1. Despise
 2. Include
 3. Admire
 4. Gossip

Question ID : 65497835411
Status : Answered
Chosen Option : 1

Q.19 Select the most appropriate option to fill in the blank.

They were _____ of the consequences of their decision.

- Ans 1. aware
 2. alert
 3. alive
 4. awake

Question ID : 65497835415
Status : Answered
Chosen Option : 1

Q.20 Select the most appropriate option that can substitute the underlined segment in the given sentence. If there is no need to substitute it, select 'No substitution required'.

Trees clean an air and remove polluted gases.

- Ans 1. No substitution required
 2. clean the air
 3. clean a air
 4. clean an airs

Question ID : 65497835412
Status : Answered
Chosen Option : 2

Comprehension:

In the following passage, some words have been deleted. Read the passage carefully and select the most appropriate option to fill in each blank.

Once a severe epidemic broke out in Cuttack. Subhas Bose went there with a small (1)_____ to help the poor and sick people. Some people (2)_____ the work done by Subhas and his friends (3)_____ others made fun of them. Haider was one (4)_____ person who always ridiculed them. Once, when Haider fell ill, Subhas (5)_____ looked after him till he recovered.

SubQuestion No : 21

Q.21 Select the most appropriate option to fill in blank no. 1.

- Ans 1. club
 2. body
 3. team
 4. gang

Question ID : 65497835420
Status : Answered
Chosen Option : 3

Comprehension:

In the following passage, some words have been deleted. Read the passage carefully and select the most appropriate option to fill in each blank.

Once a severe epidemic broke out in Cuttack. Subhas Bose went there with a small (1)_____ to help the poor and sick people. Some people (2)_____ the work done by Subhas and his friends (3)_____ others made fun of them. Haider was one (4)_____ person who always ridiculed them. Once, when Haider fell ill, Subhas (5)_____ looked after him till he recovered.

SubQuestion No : 22

Q.22 Select the most appropriate option to fill in blank no. 2.

- Ans
- 1. obliged
 - 2. enjoyed
 - 3. thanked
 - 4. praised

Question ID : 65497835421
Status : Answered
Chosen Option : 4

Comprehension:

In the following passage, some words have been deleted. Read the passage carefully and select the most appropriate option to fill in each blank.

Once a severe epidemic broke out in Cuttack. Subhas Bose went there with a small (1)_____ to help the poor and sick people. Some people (2)_____ the work done by Subhas and his friends (3)_____ others made fun of them. Haider was one (4)_____ person who always ridiculed them. Once, when Haider fell ill, Subhas (5)_____ looked after him till he recovered.

SubQuestion No : 23

Q.23 Select the most appropriate option to fill in blank no. 3.

- Ans
- 1. while
 - 2. as long as
 - 3. since
 - 4. unless

Question ID : 65497835422
Status : Answered
Chosen Option : 1

Comprehension:

In the following passage, some words have been deleted. Read the passage carefully and select the most appropriate option to fill in each blank.

Once a severe epidemic broke out in Cuttack. Subhas Bose went there with a small (1)_____ to help the poor and sick people. Some people (2)_____ the work done by Subhas and his friends (3)_____ others made fun of them. Haider was one (4)_____ person who always ridiculed them. Once, when Haider fell ill, Subhas (5)_____ looked after him till he recovered.

SubQuestion No : 24

Q.24 Select the most appropriate option to fill in blank no. 4.

- Ans
- 1. such
 - 2. so
 - 3. which
 - 4. that

Question ID : 65497835423
Status : Answered
Chosen Option : 1

Comprehension:

In the following passage, some words have been deleted. Read the passage carefully and select the most appropriate option to fill in each blank.

Once a severe epidemic broke out in Cuttack. Subhas Bose went there with a small (1)_____ to help the poor and sick people. Some people (2)_____ the work done by Subhas and his friends (3)_____ others made fun of them. Haider was one (4)_____ person who always ridiculed them. Once, when Haider fell ill, Subhas (5)_____ looked after him till he recovered.

SubQuestion No : 25

Q.25 Select the most appropriate option to fill in blank no. 5.

- Ans 1. smoothly
 2. gently
 3. freely
 4. politely

Question ID : 65497835424
Status : Answered
Chosen Option : 4

Section : Part D Hindi

Q.1 दिए गए वाक्य के किस भाग में त्रुटि है?

इसमें समस्त प्राणिमात्र का कल्याण निहित है।

- Ans 1. इसमें
 2. निहित है।
 3. समस्त प्राणिमात्र
 4. का कल्याण

Question ID : 65497835440
Status : Not Answered
Chosen Option : --

Q.2 रिक्त स्थान की पूर्ति के लिए सर्वाधिक उपयुक्त शब्द का चयन कीजिए:

सैनिक आतकवादी के पैरो में _____ डालकर ले गए।

- Ans 1. पाज़ेब
 2. घुघरू
 3. हथकड़िया
 4. बेड़िया

Question ID : 65497835437
Status : Not Answered
Chosen Option : --

Q.3 रिक्त स्थान की पूर्ति करने के लिए सर्वाधिक उपयुक्त विकल्प का चयन करें।

अर्जुन के सामने एक ही _____ था - मछली की आख।

- Ans 1. उद्देश्य
 2. लक्ष्य
 3. ध्येय
 4. मन्तव्य

Question ID : 65497835439
Status : Not Answered
Chosen Option : --

Q.4 निम्नलिखित प्रश्न में, दिए गए चार विकल्पों में से, उस विकल्प का चयन करें, जो मुहावरे के सही अर्थ को व्यक्त करता है।

भेड़ बना लेना

- Ans
- 1. घोर विपत्ति आना
 - 2. मन में जगह बना लेना
 - 3. दीवार में चुनना
 - 4. वश में कर लेना

Question ID : 65497835432
Status : Not Answered
Chosen Option : --

Q.5 दिए गए वाक्यांश के लिए एक शब्द दीजिए।

जिसकी आशा की गई हो

- Ans
- 1. आशानुसार
 - 2. आशातीत
 - 3. प्रत्याशित
 - 4. अप्रत्याशित

Question ID : 65497835435
Status : Not Answered
Chosen Option : --

Q.6 दिए गए वाक्य का वह भाग ज्ञात करें जिसमें कोई त्रुटि है। यदि कोई त्रुटि नहीं है, तो 'कोई त्रुटि नहीं है' विकल्प को चुनें।

(1) उसने (2) कपड़े सीने में (3) दक्ष है (4) कोई त्रुटि नहीं है।

- Ans
- 1. उसने
 - 2. कोई त्रुटि नहीं है।
 - 3. दक्ष है
 - 4. कपड़े सीने में

Question ID : 65497835426
Status : Not Answered
Chosen Option : --

Q.7 'रश्मि' किसका पर्यायवाची है?

- Ans
- 1. नौका
 - 2. बिजली
 - 3. किरण
 - 4. स्त्री

Question ID : 65497835444
Status : Not Answered
Chosen Option : --

Q.8 दिए गए शब्द के समानार्थी शब्द का चयन करें।

पक्षी

- Ans 1. विपिन
 2. पखेरू
 3. कुक्कू
 4. फलक

Question ID : 65497835427
Status : Not Answered
Chosen Option : --

Q.9 दिए गए वाक्यांश के लिए एक शब्द दीजिए।

कम बोलने वाला

- Ans 1. मितभाषी
 2. गभीर
 3. वाचाल
 4. मृदुभाषी

Question ID : 65497835436
Status : Not Answered
Chosen Option : --

Q.10 दिए गए वाक्य के किस भाग में त्रुटि है?

मुझे इस आदमी का पता मालुम नहीं है।

- Ans 1. इस आदमी
 2. मालुम नहीं है।
 3. का पता
 4. मुझे

Question ID : 65497835443
Status : Not Answered
Chosen Option : --

Q.11 सही वर्तनी वाले शब्द का चयन करें।

- Ans 1. स्वादिश्ट
 2. स्वादिष्ट
 3. स्वादुष्ट
 4. सवादिष्ठ

Question ID : 65497835433
Status : Not Answered
Chosen Option : --

Q.12 'सूर्योदय के पहले का समय' वाक्यांश के लिए एक शब्द क्या होगा?

- Ans 1. प्रातःकाल
 2. पूर्वाह्न
 3. उषाकाल
 4. अपराह्न

Question ID : 65497835442
Status : Not Answered
Chosen Option : --

Q.13 'सामान्य' का विलोम शब्द क्या होगा?

- Ans 1. विशिष्ट
 2. अभद्र
 3. अवशिष्ट
 4. वशिष्ट

Question ID : 65497835441
Status : Not Answered
Chosen Option : --

Q.14 दिए गए वाक्य में रेखांकित खंड को प्रतिस्थापित करने के लिए सर्वाधिक उपयुक्त विकल्प का चयन करें। यदि इसे प्रतिस्थापित करने की आवश्यकता नहीं है, तो विकल्प 'किसी बदलाव की आवश्यकता नहीं है' का चयन करें।

मेज पर रखी हुई पुस्तक उसका नहीं है।

- Ans 1. उसके नहीं है
 2. किसीका नहीं है
 3. किसी बदलाव की आवश्यकता नहीं है।
 4. उसकी नहीं है

Question ID : 65497835428
Status : Not Answered
Chosen Option : --

Q.15 सही वर्तनी वाले शब्द का चयन करें।

- Ans 1. कवयिनि
 2. कवयित्री
 3. कवयत्री
 4. कवयीत्री

Question ID : 65497835434
Status : Not Answered
Chosen Option : --

Q.16 दिए गए वाक्य में रेखांकित खंड को प्रतिस्थापित करने के लिए सर्वाधिक उपयुक्त विकल्प का चयन करें। यदि इसे प्रतिस्थापित करने की आवश्यकता नहीं है, तो विकल्प 'किसी बदलाव की आवश्यकता नहीं है' का चयन करें।

रवींद्रनाथ जी ने भारत के एक प्रसिद्ध कवि थे।

- Ans 1. किसी बदलाव की आवश्यकता नहीं है।
 2. रवींद्रनाथ जी को
 3. रवींद्रनाथ जी से
 4. रवींद्रनाथ जी

Question ID : 65497835429
Status : Not Answered
Chosen Option : --

Q.17 निम्न चार विकल्पों में से, उस विकल्प का चयन करें, जो दिए गए मुहावरे के सही अर्थ को व्यक्त करता है-

गागर में सागर भरना

- Ans 1. थोड़े में बहुत कुछ कहना
 2. थोड़े पैसों से बहुत कुछ खरीद लेना
 3. थोड़ी जगह में बहुत सामान जमाना
 4. छोटे बर्तन में ज्यादा चीज़ रखना

Question ID : 65497835431
Status : Not Answered
Chosen Option : --

Q.18 दिए गए विकल्पों में से निम्नलिखित शब्द के विलोम शब्द का चयन कीजिए:

जटिल

- Ans 1. सरल
 2. सयुक्त
 3. पेचीदा
 4. कठिन

Question ID : 65497835430
Status : Not Answered
Chosen Option : --

Q.19 दिए गए वाक्य में रेखांकित अश को प्रतिस्थापित करने के लिए सर्वाधिक उपयुक्त विकल्प का चयन करें।

गोलियों की बाढ़ के सामने कोई न टिक सका।

- Ans 1. चोट
 2. मार
 3. आहट
 4. बौछार

Question ID : 65497835438
Status : Not Answered
Chosen Option : --

Q.20 रिक्त स्थान की पूर्ति करने के लिए सर्वाधिक उपयुक्त शब्द का चयन कीजिए।

उसके पैर में _____ लग गई।

- Ans 1. टक्कर
 2. धुन
 3. काटा
 4. ठोकर

Question ID : 65497835425
Status : Not Answered
Chosen Option : --

Comprehension:

अब मनुष्य का सारा (1)_____ शक्ति – सचय, सफलता और जीत पर चला गया है, आज वह जब अपने (2)_____ की ओर चलता है, तब उसे यह देखने की जरूरत (3)_____ नहीं होती कि उसके जूतों के नाल किसकी छाती को (4)_____ रहे हैं। जब तक मनुष्य के भीतर (5)_____ का जोर था, वह अपने को सुखी और दूसरे को दुखी देखकर लज्जित होता था।

निम्न प्रश्नों के उत्तर उपरोक्त गद्यांश के आधार पर दीजिए।

SubQuestion No : 21

Q.21 गद्यांश के रिक्त स्थान (1) के लिए सर्वाधिक उपयुक्त शब्द होगा-

- Ans**
- 1. मन
 - 2. चितन
 - 3. होश
 - 4. ध्यान

Question ID : 65497835446

Status : Not Answered

Chosen Option : --

Comprehension:

अब मनुष्य का सारा (1)_____ शक्ति – सचय, सफलता और जीत पर चला गया है, आज वह जब अपने (2)_____ की ओर चलता है, तब उसे यह देखने की जरूरत (3)_____ नहीं होती कि उसके जूतों के नाल किसकी छाती को (4)_____ रहे हैं। जब तक मनुष्य के भीतर (5)_____ का जोर था, वह अपने को सुखी और दूसरे को दुखी देखकर लज्जित होता था।

निम्न प्रश्नों के उत्तर उपरोक्त गद्यांश के आधार पर दीजिए।

SubQuestion No : 22

Q.22 गद्यांश के रिक्त स्थान (2) के लिए सर्वाधिक उपयुक्त शब्द होगा-

- Ans**
- 1. साधन
 - 2. घर
 - 3. भविष्य
 - 4. लक्ष्य

Question ID : 65497835447

Status : Not Answered

Chosen Option : --

Comprehension:

अब मनुष्य का सारा (1)_____ शक्ति – सचय, सफलता और जीत पर चला गया है, आज वह जब अपने (2)_____ की ओर चलता है, तब उसे यह देखने की जरूरत (3)_____ नहीं होती कि उसके जूतों के नाल किसकी छाती को (4)_____ रहे हैं। जब तक मनुष्य के भीतर (5)_____ का जोर था, वह अपने को सुखी और दूसरे को दुखी देखकर लज्जित होता था।

निम्न प्रश्नों के उत्तर उपरोक्त गद्यांश के आधार पर दीजिए।

SubQuestion No : 23

Q.23 गद्यांश के रिक्त स्थान (3) के लिए सर्वाधिक उपयुक्त शब्द होगा-

- Ans**
- 1. एहसास
 - 2. अनुभूति
 - 3. महसूस
 - 4. प्रकट

Question ID : 65497835448

Status : Not Answered

Chosen Option : --

Comprehension:

अब मनुष्य का सारा (1)_____ शक्ति – सचय, सफलता और जीत पर चला गया है, आज वह जब अपने (2)_____ की ओर चलता है, तब उसे यह देखने की जरूरत (3)_____ नहीं होती कि उसके जूतों के नाल किसकी छाती को (4)_____ रहे हैं। जब तक मनुष्य के भीतर (5)_____ का जोर था, वह अपने को सुखी और दूसरे को दुखी देखकर लज्जित होता था।

निम्न प्रश्नों के उत्तर उपरोक्त गद्यांश के आधार पर दीजिए।

SubQuestion No : 24

Q.24 गद्यांश के रिक्त स्थान (4) के लिए सर्वाधिक उपयुक्त शब्द होगा-

- Ans** 1. जोत
 2. मसल
 3. निगल
 4. छील

Question ID : **65497835449**

Status : **Not Answered**

Chosen Option : --

Comprehension:

अब मनुष्य का सारा (1)_____ शक्ति – सचय, सफलता और जीत पर चला गया है, आज वह जब अपने (2)_____ की ओर चलता है, तब उसे यह देखने की जरूरत (3)_____ नहीं होती कि उसके जूतों के नाल किसकी छाती को (4)_____ रहे हैं। जब तक मनुष्य के भीतर (5)_____ का जोर था, वह अपने को सुखी और दूसरे को दुखी देखकर लज्जित होता था।

निम्न प्रश्नों के उत्तर उपरोक्त गद्यांश के आधार पर दीजिए।

SubQuestion No : 25

Q.25 गद्यांश के रिक्त स्थान (5) के लिए सर्वाधिक उपयुक्त शब्द होगा-

- Ans** 1. प्रतिस्पर्द्धा
 2. स्वार्थ
 3. बुद्धि
 4. भावना

Question ID : **65497835450**

Status : **Not Answered**

Chosen Option : --