

Exam Date	01/12/2021
Exam Time :	12:30 PM - 2:00 PM
Subject	Constable GD 2021

Section : Part A General Intelligence and Reasoning

Q.1 T has two sons namely N and L. S is the only son of his father. R and S are grandchildren of T. P is L's wife. M is the mother of S. How is N related to R?

- Ans 1. Uncle
 2. Father
 3. Son
 4. Nephew

Question ID : 65497834454
Status : Answered
Chosen Option : 1

Q.2 If 'P' denotes '+', 'Q' denotes '-', 'R' denotes 'x' and 'S' denotes '÷', then what will be the value of the following expression?

(14 R 9) S 6 P 40 Q 11

- Ans 1. 55
 2. 48
 3. 60
 4. 50

Question ID : 65497834449
Status : Answered
Chosen Option : 4

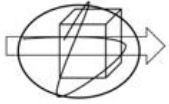
Q.3 Select the number from among the given options that can replace the question mark (?) in the following series.

11, 14, 26, 53, 101, ?

- Ans 1. 162
 2. 154
 3. 168
 4. 176

Question ID : 65497834445
Status : Not Answered
Chosen Option : --

Q.4 Select the option that is embedded in the given figure (rotation is NOT allowed).



Ans



Question ID : 65497834451
Status : Answered
Chosen Option : 2

Q.5 Select the number from among the given options that can replace the question mark (?) in the following series.

20, 22, 27, ?, 55, 78, 109

Ans

1. 38

2. 30

3. 32

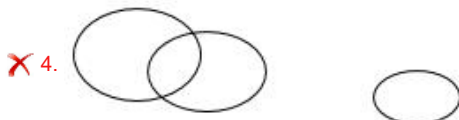
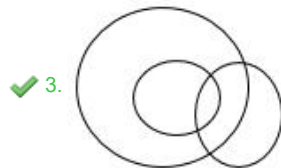
4. 49

Question ID : 65497834437
Status : Answered
Chosen Option : 1

Q.6 Select the Venn diagram that best illustrates the relationship between the following classes.

Teachers, Mothers, Females

Ans



Question ID : 65497834442
Status : Answered
Chosen Option : 3

Q.7 Read the given statements and conclusions carefully. Assuming that the information given in the statements is true, even if it appears to be at variance with commonly known facts, decide which of the given conclusions logically follow(s) from the statements.

Statements:

- I) All computers are desktops.
- II) Some computers are laptops.

Conclusions:

- I) Some laptops are desktops.
- II) All desktops are laptops.

- Ans**
- 1. Only conclusion II follows.
 - 2. Neither conclusion I nor II follows.
 - 3. Both conclusions I and II follow.
 - 4. Only conclusion I follows.

Question ID : 65497834456

Status : Not Answered

Chosen Option : --

Q.8 In a class, if 3 students are absent, then the rest of the students can be divided equally into 7 groups and if 7 students are absent, then the rest of the students can be divided equally into 9 groups. How many students are present in the class?

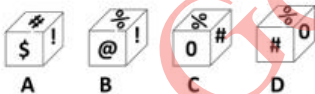
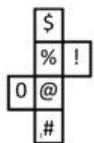
- Ans**
- 1. 115
 - 2. 140
 - 3. 87
 - 4. 101

Question ID : 65497834458

Status : Answered

Chosen Option : 1

Q.9 Select the dice that can be formed by folding the given sheet along the lines.



- Ans**
- 1. A, B, C and D
 - 2. Only A and B
 - 3. Only D
 - 4. Only C and D

Question ID : 65497834450

Status : Answered

Chosen Option : 2

Q.10 All six friends are sitting in a row and facing north, H is sitting between D and G whereas B is sitting between L and A. A and D is sitting at extreme ends. Who is sitting between G and B?

- Ans
- 1. L
 - 2. A
 - 3. H
 - 4. D

Question ID : 65497834441
Status : Answered
Chosen Option : 1

Q.11 Four letter-clusters have been given, out of which three are alike in some manner and one is different. Select the letter-cluster that is different.

- Ans
- 1. KOSWA
 - 2. EIMQU
 - 3. NRUZE
 - 4. AEIMQ

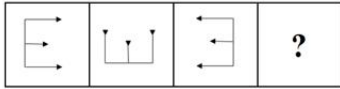
Question ID : 65497834435
Status : Answered
Chosen Option : 3

Q.12 In a certain code language, 'SUPERWASH' is written as 'UWRGTYCUJ'. How will 'ANTISEPTIC' be written in that language?

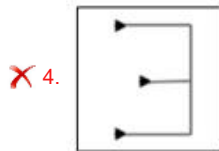
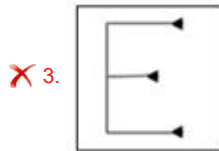
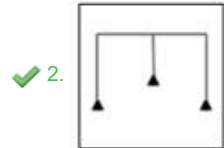
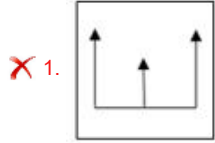
- Ans
- 1. CPUKVGRVKE
 - 2. CPVKUGRVKE
 - 3. CPVKUGRRVE
 - 4. CPKVUGRVKE

Question ID : 65497834455
Status : Answered
Chosen Option : 2

Q.13 Select the figure from among the given options that can replace the question mark (?) in the following series.



Ans



Question ID : 65497834446
 Status : Answered
 Chosen Option : 2

Q.14 Select the correct mirror image of the given figure when the mirror is placed at the right side.



Ans



Question ID : 65497834438
 Status : Answered
 Chosen Option : 1

Q.15 Seven people, Gaurav, Manish, Rahul, Anish, Meeta, Priya, and Preeti, are sitting in a circle. Gaurav is the neighbour of Manish and Rahul. Anish is not the neighbour of Meeta and Rahul. Preeti is the neighbour of Meeta and Priya and sitting second to the left of Anish. What is the position of Rahul?

- Ans
- 1. Fourth to the right of Priya
 - 2. Second to the right of Anish
 - 3. Between Manish and Gaurav
 - 4. Immediate left to Preeti

Question ID : 65497834447
Status : Not Answered
Chosen Option : --

Q.16 Select the correct option that indicates the arrangement of the given words in the order in which they appear in an English dictionary.

- i. Facet
- ii. Facility
- iii. Facile
- iv. Fact
- v. Faculty

- Ans
- 1. i, iii, ii, iv, v
 - 2. iii, ii, v, i, iv
 - 3. v, iv, iii, ii, i
 - 4. i, ii, iii, iv, v

Question ID : 65497834443
Status : Answered
Chosen Option : 1

Q.17 'Up' is related to 'Down' in the same way as 'Cold' is related to '_____'. .

- Ans
- 1. Coffee
 - 2. Cool
 - 3. Winter
 - 4. Hot

Question ID : 65497834440
Status : Answered
Chosen Option : 4

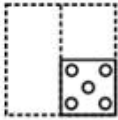
Q.18 A paper sheet is folded in a particular manner and several punches are made. When unfolded, the paper sheet looks like the question figure. From the given options select the one that follows the manner in which the paper is folded and punched.

Question figure

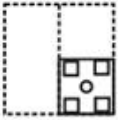


Ans

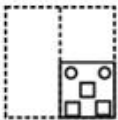
1.



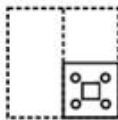
2.



3.



4.



Question ID : 65497834459

Status : Answered

Chosen Option : 4

Q.19 Select the letter-cluster from among the given options that can replace the question mark (?) in the following series.

ADF, BEG, CFH, ?

Ans 1. FDI

2. DGI

3. DIF

4. DFT

Question ID : 65497834439

Status : Answered

Chosen Option : 2

Q.20 Select the option in which the numbers are related in the same way as are the numbers in the given set.

(11, 13, 17)

Ans 1. (61, 63, 65)

2. (29, 31, 33)

3. (41, 43, 53)

4. (9, 25, 17)

Question ID : 65497834448

Status : Answered

Chosen Option : 3

Q.21 Select the option that is related to the third term in the same way as the second term is related to the first term.

GARDEN : EBPECO :: FLOWER : ?

- Ans
- 1. SFXPKE
 - 2. CJQYGT
 - 3. EMPVDS
 - 4. DMMXCS

Question ID : 65497834452
Status : Answered
Chosen Option : 4

Q.22 Study the given pattern carefully and select the number that can replace the question mark (?) in it.

11 9 7
8 12 14
440 540 ?

- Ans
- 1. 640
 - 2. 710
 - 3. 560
 - 4. 490

Question ID : 65497834457
Status : Answered
Chosen Option : 4

Q.23 Study the given pattern carefully and select the letter that can replace the question mark (?) in it.

C F I
R O ?
U X A

- Ans
- 1. U
 - 2. R
 - 3. L
 - 4. M

Question ID : 65497834444
Status : Answered
Chosen Option : 3

Q.24 In a certain code language, 'FRUSTRATION' is coded as '11' and 'TOPICAL' is coded as '7'. How will 'RESURGENCE' be coded in that language?

- Ans
- 1. 12
 - 2. 11
 - 3. 9
 - 4. 10

Question ID : 65497834436
Status : Answered
Chosen Option : 4

Q.25 In a certain code language, 'MASTER' is written as 'NBTUFS'. How will 'ENOUGH' be written in that language?

- Ans
- 1. VHIPOF
 - 2. FOPVHI
 - 3. VOHPFI
 - 4. OPHIFV

Question ID : 65497834453
Status : Answered
Chosen Option : 2

Section : Part B General Knowledge and General Awareness

Q.1 Which one of the following is a martial dance performed with swords in the state of Himachal Pradesh?

- Ans
- 1. Parasa
 - 2. Namagen
 - 3. Chhanak Chham
 - 4. Kharaiti

Question ID : 65497834472
Status : Not Answered
Chosen Option : --

Q.2 Which of the following is the first official language of Sri Lanka?

- Ans
- 1. Sinhala
 - 2. English
 - 3. Malayalam
 - 4. Tamil

Question ID : 65497834477
Status : Answered
Chosen Option : 1

Q.3 Who won the 'Hindu Prize 2019' for his/her 'India Empire and First World War Culture: Writings, Images and Songs' in the Non-fiction category?

- Ans
- 1. Santanu Das
 - 2. Meena Kandasamy
 - 3. Manoranjan Byapari
 - 4. Deepak Unnikrishnan

Question ID : 65497834475
Status : Not Answered
Chosen Option : --

Q.4 When is Chhattisgarh Formation Day observed?

- Ans
- 1. 30 May
 - 2. 15 June
 - 3. 23 October
 - 4. 1 November

Question ID : 65497834467
Status : Not Answered
Chosen Option : --

Q.5 Which of the following has been declared as one of the worst invasive species by the International Union for Conservation of Nature (IUCN)?

- Ans
- 1. Garden snail
 - 2. Giant African snail
 - 3. Channeled apple snail
 - 4. Chinese mystery snail

Question ID : 65497834480
Status : Not Answered
Chosen Option : --

Q.6 Lala Lajpat Rai was an active member of _____.

- Ans
- 1. Vaishnavism
 - 2. Arya Samaj
 - 3. Buddhism
 - 4. Jainism

Question ID : 65497834484
Status : Answered
Chosen Option : 2

Q.7 Which of the following compounds is also called 'Norwegian saltpeter'?

- Ans
- 1. Nitrous oxide
 - 2. Calcium nitrate
 - 3. Sodium nitrate
 - 4. Potassium nitrate

Question ID : 65497834469
Status : Not Answered
Chosen Option : --

Q.8 Who among the following assumed charge as one of the Election Commissioners of India on 1 September 2020?

- Ans
- 1. Rajiv Kumar
 - 2. KN Vyas
 - 3. IV Subba Rao
 - 4. Samant Goel

Question ID : 65497834462
Status : Not Answered
Chosen Option : --

Q.9 As of November 2020, who among the following was the Director-General of Sports Authority of India (SAI)?

- Ans
- 1. Anjan Kumar Mishra
 - 2. Matadin Asiwaj
 - 3. Rohit Bhardwaj
 - 4. Sandip Pradhan

Question ID : 65497834463
Status : Not Answered
Chosen Option : --

Q.10 Rearing and maintenance of honey-bees and hives for honey is called _____.

- Ans 1. sericulture
 2. apiculture
 3. pisciculture
 4. floriculture

Question ID : 65497834466
Status : Answered
Chosen Option : 2

Q.11 What was India's rank in the Ease of Doing Business Index 2020?

- Ans 1. 54
 2. 63
 3. 67
 4. 71

Question ID : 65497834464
Status : Not Answered
Chosen Option : --

Q.12 2018 Men's Hockey World Cup was hosted by _____.

- Ans 1. Malaysia
 2. Spain
 3. Australia
 4. India

Question ID : 65497834465
Status : Not Answered
Chosen Option : --

Q.13 All the fundamental rights guaranteed under Section 19 are automatically suspended under which Article of the Constitution of India?

- Ans 1. Article 353
 2. Article 354
 3. Article 351
 4. Article 352

Question ID : 65497834479
Status : Not Answered
Chosen Option : --

Q.14 A small village named Plassey known for the 'Battle of Plassey' which was fought between East India company and Nawab Siraj-ud-Daulah is located on the banks of which river?

- Ans 1. Bhagirathi
 2. Padma
 3. Hooghly
 4. Barakar

Question ID : 65497834478
Status : Not Answered
Chosen Option : --

Q.15 Generally, the warm ocean currents originate near the _____ and move towards the poles.

- Ans
- 1. Arctic circle
 - 2. Equator
 - 3. Tropic of Cancer
 - 4. Antarctic circle

Question ID : 65497834481
Status : Not Answered
Chosen Option : --

Q.16 In which month is the 'Surajkund Craft Mela' held every year in Haryana?

- Ans
- 1. March
 - 2. August
 - 3. April
 - 4. February

Question ID : 65497834460
Status : Not Answered
Chosen Option : --

Q.17 How many Indian states share their border with Sikkim?

- Ans
- 1. One
 - 2. Two
 - 3. Four
 - 4. Three

Question ID : 65497834461
Status : Not Answered
Chosen Option : --

Q.18 Amul is a success story of cooperatives in milk and milk products from _____, which brought in the White Revolution in the country.

- Ans
- 1. Delhi
 - 2. Karnataka
 - 3. Uttar Pradesh
 - 4. Gujarat

Question ID : 65497834483
Status : Answered
Chosen Option : 4

Q.19 The official mascot for the last Commonwealth Games held in Gold Coast in 2018, was:

- Ans
- 1. Borobi, a blue surfing koala
 - 2. Goldie, a kiwi bird
 - 3. Karak, a red-tailed black cockatoo
 - 4. Clyde, a thistle

Question ID : 65497834482
Status : Not Answered
Chosen Option : --

Q.20 Which of the following is NOT a medium for a mechanical wave, that is sound, to travel?

- Ans
- 1. Air
 - 2. Water
 - 3. Steel
 - 4. Vacuum

Question ID : 65497834473
Status : Answered
Chosen Option : 4

Q.21 Lactometers, hydrometers, ships and submarines are designed on _____.

- Ans
- 1. the principle of gravitation
 - 2. the principle of relative density
 - 3. Archimedes' principle
 - 4. the principle of buoyancy

Question ID : 65497834474
Status : Not Answered
Chosen Option : --

Q.22 What was the infant mortality rate in India in 2019?

- Ans
- 1. 29.7
 - 2. 33.1
 - 3. 28.3
 - 4. 32.0

Question ID : 65497834476
Status : Not Answered
Chosen Option : --

Q.23 Dara Shikoh finally lost the war of succession to _____ in the battle of Samugarh.

- Ans
- 1. Bairam Khan
 - 2. Sher Shah
 - 3. Aurangzeb
 - 4. Muhammad Azam

Question ID : 65497834470
Status : Answered
Chosen Option : 3

Q.24 The foundation day of Uttarakhand is celebrated on:

- Ans
- 1. 30 September
 - 2. 9 November
 - 3. 15 August
 - 4. 20 October

Question ID : 65497834471
Status : Not Answered
Chosen Option : --

Q.25 Who among the following chaired the 147th session of WHO Executive Board through video conference in November 2020?

- Ans**
- 1. Amit Shah
 - 2. Narendra Modi
 - 3. Ajay Kumar
 - 4. Dr Harsh Vardhan

Question ID : **65497834468**
Status : **Not Answered**
Chosen Option : --

Section : **Part C Elementary Mathematics**

Q.1 A machine depreciates by 10% per year. The present worth of the machine is ₹2,50,000. After 2 years the value of the machine will be:

- Ans**
- 1. ₹2,05,000
 - 2. ₹2,02,500
 - 3. ₹1,98,000
 - 4. ₹2,10,000

Question ID : **65497834500**
Status : **Answered**
Chosen Option : **2**

Q.2 An item was sold at a certain price. By selling it at four-fifths of that price one loses 16%. Find the percentage gain at original price.

- Ans**
- 1. 4%
 - 2. 5%
 - 3. 8%
 - 4. 7%

Question ID : **65497834509**
Status : **Answered**
Chosen Option : **2**

Q.3 Selvaraj paid ₹38,00,000 as a one-time payment for purchasing a flat. Before the hand-over of the flat key, he had to pay 5% to make the full payment. What was the additional amount to be paid?

- Ans**
- 1. ₹2,40,000
 - 2. ₹2,50,000
 - 3. ₹3,00,000
 - 4. ₹2,00,000

Question ID : **65497834492**
Status : **Not Answered**
Chosen Option : --

Q.4 The product of two numbers is 19440 and their HCF is 18. The possible number of pairs of such numbers is:

- Ans**
- 1. 4
 - 2. 2
 - 3. 1
 - 4. 3

Question ID : 65497834497
Status : Answered
Chosen Option : 1

Q.5 In a school, the total students (boys and girls only) are 720. Boys and girls are in the ratio 7 : 5. In another school, there are 560 students (boys and girls only) and the ratio of boys and girls is 3 : 5. The ratio of boys and girls in the total strength of the two schools is:

- Ans**
- 1. 65 : 63
 - 2. 60 : 63
 - 3. 63 : 65
 - 4. 65 : 60

Question ID : 65497834503
Status : Answered
Chosen Option : 3

Q.6 5 men and 3 women can earn ₹8,400 in 4 days. 9 men and 7 women can earn ₹28,700 in 7 days. In how many days will 8 men and 5 women earn ₹30,600?

- Ans**
- 1. 12 days
 - 2. 9 days
 - 3. 8 days
 - 4. 13 days

Question ID : 65497834493
Status : Answered
Chosen Option : 2

Q.7 A cuboidal metal plate of 1 cm thickness, 9 cm breadth and 81 cm length is melted to form a cube. The total surface area of the cube is:

- Ans**
- 1. 729 cm^2
 - 2. 286 cm^2
 - 3. 486 cm^2
 - 4. 300 cm^2

Question ID : 65497834506
Status : Answered
Chosen Option : 3

Q.8 While covering a distance of 24 km, a man noticed that after walking for 1 h 20 min, the distance covered by him was $\frac{7}{11}$ of the remaining distance. What was his speed?

- Ans**
- 1. 6 km/h
 - 2. 8 km/h
 - 3. 7 km/h
 - 4. 9 km/h

Question ID : **65497834494**
Status : **Not Answered**
Chosen Option : --

Q.9 A manufacturer sells an item to a wholesaler and makes a profit of 10%. The wholesaler sells the same item to a retailer at a profit of 12%. The retailer sells the same item to a customer at a profit of 15%. If the customer paid ₹21,252 for the item, then what was the cost price (in ₹) of the item for the manufacturer?

- Ans**
- 1. 18,000
 - 2. 15,000
 - 3. 12,500
 - 4. 17,500

Question ID : **65497834486**
Status : **Answered**
Chosen Option : 2

Q.10 The average age of a company A of 5 members is 44.8 years and the average age of another company B of 4 members is 48 years. By what percentage is the total age of company B less than the total age of company A?

- Ans**
- 1. $\frac{25}{3}$ %
 - 2. $\frac{31}{3}$ %
 - 3. $\frac{25}{2}$ %
 - 4. $\frac{100}{7}$ %

Question ID : **65497834498**
Status : **Answered**
Chosen Option : 4

Q.11 A, B and C individually can complete a work in 12, 10 and 15 days, respectively. All three work together and after 3 days, B and C leave the work. The remaining work will be completed by A in:

- Ans**
- 1. 6 days
 - 2. 5 days
 - 3. 3 days
 - 4. 4 days

Question ID : **65497834505**
Status : **Answered**
Chosen Option : 3

Q.12 Two positive numbers are in the ratio 5 : 8. If the sum of their squares is 356, then the sum of the two numbers is:

- Ans**
- 1. 32
 - 2. 25
 - 3. 26
 - 4. 36

Question ID : 65497834488
Status : Answered
Chosen Option : 3

Q.13 The average of six positive numbers is 12.5. If the first number is two-thirds of the sum of the last five numbers, then the average of the last five numbers is:

- Ans**
- 1. 12
 - 2. 9
 - 3. 8
 - 4. 15

Question ID : 65497834490
Status : Answered
Chosen Option : 2

Q.14 A man completes a journey in 12 h. He travels the first half of the journey at a speed of 21 km/h and the second half at a speed of 24 km/h. Find the total distance of the journey (in km).

- Ans**
- 1. 264
 - 2. 260
 - 3. 168.8
 - 4. 268.8

Question ID : 65497834496
Status : Not Answered
Chosen Option : --

Q.15 At the start of a session, the number of students in grades 6, 7 and 8 in a school was 120, 150 and 130 respectively. Later on 10 students were admitted in grades 6 and 7 and 10 students were transferred from grade 8. The ratio of the number of students at the start and those at the end of the session, provided no further admission or withdrawal/transfer had taken place, was:

- Ans**
- 1. 20 : 21
 - 2. 40 : 41
 - 3. 3 : 5
 - 4. 13 : 42

Question ID : 65497834499
Status : Answered
Chosen Option : 1

Q.16 A certain sum amounts to ₹8,571.50 in $4\frac{1}{2}$ years at 8.5% p.a. at simple interest. The simple interest on the same sum will be ₹x in $6\frac{2}{3}$ years at $10\frac{1}{2}$ % p.a. What is the value of x?

- Ans**
- 1. 4,340
 - 2. 3,980
 - 3. 4,130
 - 4. 4,520

Question ID : 65497834487
Status : Answered
Chosen Option : 1

Q.17 A shopkeeper sold 100 pencils at ₹24 for 10 pencils. To earn a profit of 20%, the cost price of one pencil is:

- Ans**
- 1. ₹2.20
 - 2. ₹1.80
 - 3. ₹2.10
 - 4. ₹2.00

Question ID : 65497834502
Status : Answered
Chosen Option : 4

Q.18 The expression $0.2 \times 2 + \frac{1}{2} \div 2 \times \frac{5}{2}$ of $2 - 1.5 + 3 \times \frac{1}{3} \div \frac{2}{3} - \frac{2}{5}$ on simplification will give the result as:

- Ans**
- 1. $\frac{1}{8}$
 - 2. $\frac{1}{4}$
 - 3. $\frac{1}{3}$
 - 4. $\frac{2}{5}$

Question ID : 65497834501
Status : Not Answered
Chosen Option : --

Q.19 The value of $[12 \div (2 \times 3)] \div [24 \div (8 - 5)]$ is:

- Ans**
- 1. $\frac{1}{4}$
 - 2. $\frac{7}{8}$
 - 3. $\frac{2}{3}$
 - 4. $\frac{3}{6}$

Question ID : 65497834495
Status : Answered
Chosen Option : 1

Q.20 If X% of Y is 100 and Y% of Z is 400, then find the ratio between X and Z.

- Ans
- 1. 4 : 1
 - 2. 1 : 4
 - 3. 2 : 3
 - 4. 1 : 3

Question ID : 65497834508
Status : Answered
Chosen Option : 2

Q.21 The ratio of two numbers is 3 : 5 and their HCF is 6. Find their LCM.

- Ans
- 1. 30
 - 2. 90
 - 3. 80
 - 4. 60

Question ID : 65497834507
Status : Answered
Chosen Option : 2

Q.22 A certain sum becomes double in 2 years at a certain rate per annum compound interest. The number of years it will become 4 times at the same compound interest rate is:

- Ans
- 1. 5
 - 2. 4
 - 3. 6
 - 4. 3

Question ID : 65497834504
Status : Answered
Chosen Option : 2

Q.23 The marked price of an article is ₹850. If a shopkeeper sold the article at 15% loss after giving 30% discount, then the cost price of the article is:

- Ans
- 1. ₹680
 - 2. ₹700
 - 3. ₹600
 - 4. ₹650

Question ID : 65497834491
Status : Not Answered
Chosen Option : --

Q.24 A store announces two successive discounts of 30% and 25%. What is the final sale price (in ₹) of a shirt costing ₹1,200?

- Ans
- 1. 780
 - 2. 630
 - 3. 720
 - 4. 600

Question ID : 65497834485
Status : Not Answered
Chosen Option : --

Q.25 The length and breadth of a rectangular field are in the ratio 4 : 3. If the cost of cultivating the field at ₹2 per m² is ₹600, then the length of the field is:

- Ans
- 1. 18 m
 - 2. 20 m
 - 3. 15 m
 - 4. 14 m

Question ID : 65497834489
Status : Not Answered
Chosen Option : --

Section : Part D English

Q.1 Select the option that can be used as a one-word substitute for the given group of words.

A partner in crime

- Ans
- 1. Companion
 - 2. Follower
 - 3. Opponent
 - 4. Accomplice

Question ID : 65497834528
Status : Answered
Chosen Option : 1

Q.2 Select the INCORRECTLY spelt word.

- Ans
- 1. Orchard
 - 2. Archary
 - 3. Anarchy
 - 4. Monarch

Question ID : 65497834520
Status : Not Answered
Chosen Option : --

Q.3 Select the most appropriate synonym of the given word.

Weary

- Ans
- 1. Fresh
 - 2. Happy
 - 3. Tired
 - 4. Upset

Question ID : 65497834515
Status : Not Answered
Chosen Option : --

Q.4 Select the most appropriate synonym of the given word.

Rambling

- Ans
- 1. Articulate
 - 2. Boring
 - 3. Elaborate
 - 4. Long-Winded

Question ID : 65497834527
Status : Not Answered
Chosen Option : --

Q.5 The following sentence has been split into four segments. Identify the segment that contains a grammatical error.

John wanted to know / if will John / come to the college / in the evening.

- Ans
- 1. come to the college
 - 2. if will John
 - 3. in the evening
 - 4. John wanted to know

Question ID : 65497834526
Status : Answered
Chosen Option : 2

Q.6 The following sentence has been split into four segments. Identify the segment that contains a grammatical error.

Owing for / his illness, / he couldn't achieve / his goals.

- Ans
- 1. his goals
 - 2. his illness
 - 3. Owing for
 - 4. he couldn't achieve

Question ID : 65497834517
Status : Not Answered
Chosen Option : --

Q.7 Select the most appropriate meaning of the given idiom.

Flea market

- Ans
- 1. A place where fish and marine animals are sold
 - 2. A place where stolen goods are sold
 - 3. A place where antiques and second-hand goods are sold
 - 4. A place where vegetables and fruits are sold

Question ID : 65497834511
Status : Answered
Chosen Option : 1

Q.8 Select the option that is closest in meaning to the underlined idiom/phrase in the given sentence.

I will always be grateful to my friend because she has been with me through thick and thin.

- Ans
- 1. in both, good times and bad times
 - 2. in your own place and other places
 - 3. over a long period of time
 - 4. during different stages of life

Question ID : 65497834525
Status : Answered
Chosen Option : 1

Q.9 Select the most appropriate option to fill in the blank.

She is so _____ of plants that she can spend her entire day in a garden.

- Ans
- 1. attached
 - 2. loving
 - 3. interested
 - 4. fond

Question ID : 65497834510
Status : Answered
Chosen Option : 4

Q.10 The following sentence has been divided into parts. One of them contains an error. Select the part that contains the error from the given options.

He had / prepare well / before the examination / so he did well.

- Ans
- 1. so he did well
 - 2. He had
 - 3. before the examination
 - 4. prepare well

Question ID : 65497834514
Status : Answered
Chosen Option : 4

Q.11 Select the INCORRECTLY spelt word.

- Ans
- 1. Metallurgy
 - 2. Observatry
 - 3. Prologue
 - 4. Adolescence

Question ID : 65497834521
Status : Answered
Chosen Option : 2

Q.12 Select the most appropriate option that can substitute the underlined segment in the given sentence. If there is no need to substitute it, select 'No substitution required'.

There have been heavy rains in the city even then hurricane made landfall.

- Ans
- 1. from the hurricane making landfall
 - 2. since the hurricane made landfall
 - 3. then the hurricane is made landfall
 - 4. No substitution required

Question ID : 65497834513
Status : Answered
Chosen Option : 2

Q.13 Select the most appropriate ANTONYM of the given word.

Appoint

- Ans
- 1. Dismiss
 - 2. Assign
 - 3. Choose
 - 4. Select

Question ID : 65497834516
Status : Answered
Chosen Option : 1

Q.14 Select the most appropriate ANTONYM of the given word.

Stable

- Ans
- 1. Secure
 - 2. Steady
 - 3. Fixed
 - 4. Shaky

Question ID : 65497834518
Status : Answered
Chosen Option : 4

Q.15 Select the most appropriate option that can substitute the underlined segment in the given sentence. If there is no need to substitute it, select 'No substitution required'.

I must replying this letter immediately.

- Ans
- 1. No substitution required
 - 2. reply for this letter
 - 3. reply this letter
 - 4. reply to this letter

Question ID : 65497834524
Status : Answered
Chosen Option : 4

Q.16 Select the option that can be used as a one-word substitute for the given group of words.

Fluid secreted by flowers which is collected by bees for making honey

- Ans
- 1. Euphoria
 - 2. Nectar
 - 3. Ambrosia
 - 4. Juice

Question ID : 65497834512
Status : Answered
Chosen Option : 2

Q.17 Select the most appropriate option that can substitute the underlined segment in the given sentence. If there is no need to substitute it, select 'No substitution required'.

She told him don't touch her bag.

- Ans
- 1. don't be touching
 - 2. not to touch
 - 3. No substitution required
 - 4. to not touched

Question ID : 65497834523
Status : Answered
Chosen Option : 2

Q.18 Select the most appropriate option to fill in the blank.

Customers _____ money for the damaged products.

- Ans
- 1. ask
 - 2. allow
 - 3. claim
 - 4. grant

Question ID : 65497834522
Status : Answered
Chosen Option : 3

Q.19 Select the most appropriate option to fill in the blank.

The heavy rain affected _____ so much that we could not proceed further.

- Ans
- 1. scene
 - 2. distance
 - 3. visibility
 - 4. outlook

Question ID : 65497834529
Status : Answered
Chosen Option : 3

Q.20 Select the option that can be used as a one-word substitute for the given group of words.

Move faster

Ans ✓ 1. Accelerate

✗ 2. Exhilarate

✗ 3. Abnegate

✗ 4. Abdicate

Question ID : 65497834519

Status : Answered

Chosen Option : 1

Comprehension:

In the following passage, some words have been deleted. Read the passage carefully and select the most appropriate option to fill in each blank.

A job or academic interview is a (1)_____ meeting at which people are asked questions by one or a (2)_____ of interviewers to find out if they are suitable for a job. Sometimes, interviews for jobs are walk-in, which means that the candidate, (3)_____ instructions in an (4)_____, goes directly with all related (5)_____ such as CV, certificates and testimonials to a place where an interview is conducted.

SubQuestion No : 21

Q.21 Select the most appropriate option to fill in blank no. 1.

Ans ✓ 1. formal

✗ 2. public

✗ 3. lethal

✗ 4. decided

Question ID : 65497834531

Status : Answered

Chosen Option : 1

Comprehension:

In the following passage, some words have been deleted. Read the passage carefully and select the most appropriate option to fill in each blank.

A job or academic interview is a (1)_____ meeting at which people are asked questions by one or a (2)_____ of interviewers to find out if they are suitable for a job. Sometimes, interviews for jobs are walk-in, which means that the candidate, (3)_____ instructions in an (4)_____, goes directly with all related (5)_____ such as CV, certificates and testimonials to a place where an interview is conducted.

SubQuestion No : 22

Q.22 Select the most appropriate option to fill in blank no. 2.

Ans ✗ 1. band

✗ 2. bunch

✗ 3. company

✓ 4. panel

Question ID : 65497834532

Status : Answered

Chosen Option : 4

Comprehension:

In the following passage, some words have been deleted. Read the passage carefully and select the most appropriate option to fill in each blank.

A job or academic interview is a (1)_____ meeting at which people are asked questions by one or a (2)_____ of interviewers to find out if they are suitable for a job. Sometimes, interviews for jobs are walk-in, which means that the candidate, (3)_____ instructions in an (4)_____, goes directly with all related (5)_____ such as CV, certificates and testimonials to a place where an interview is conducted.

SubQuestion No : 23

Q.23 Select the most appropriate option to fill in blank no. 3.

- Ans 1. preparing
 2. enacting
 3. devoting
 4. following

Question ID : 65497834533
Status : Answered
Chosen Option : 4

Comprehension:

In the following passage, some words have been deleted. Read the passage carefully and select the most appropriate option to fill in each blank.

A job or academic interview is a (1)_____ meeting at which people are asked questions by one or a (2)_____ of interviewers to find out if they are suitable for a job. Sometimes, interviews for jobs are walk-in, which means that the candidate, (3)_____ instructions in an (4)_____, goes directly with all related (5)_____ such as CV, certificates and testimonials to a place where an interview is conducted.

SubQuestion No : 24

Q.24 Select the most appropriate option to fill in blank no. 4.

- Ans 1. observation
 2. instance
 3. establishment
 4. advertisement

Question ID : 65497834534
Status : Answered
Chosen Option : 4

Comprehension:

In the following passage, some words have been deleted. Read the passage carefully and select the most appropriate option to fill in each blank.

A job or academic interview is a (1)_____ meeting at which people are asked questions by one or a (2)_____ of interviewers to find out if they are suitable for a job. Sometimes, interviews for jobs are walk-in, which means that the candidate, (3)_____ instructions in an (4)_____, goes directly with all related (5)_____ such as CV, certificates and testimonials to a place where an interview is conducted.

SubQuestion No : 25

Q.25 Select the most appropriate option to fill in blank no. 5.

- Ans 1. documents
 2. material
 3. stuff
 4. personnel

Question ID : 65497834535
Status : Answered
Chosen Option : 1

Q.1 दिये गये वाक्यांश के लिए एक शब्द दीजिये।

जो कलहप्रिय हो

- Ans
- 1. क्लेश
 - 2. कलेसी
 - 3. झगड़ालू
 - 4. झगड़ोल

Question ID : 65497834541
Status : Not Answered
Chosen Option : --

Q.2 निम्नलिखित प्रश्न में, दिए गए चार विकल्पों में से उस विकल्प का चयन करें, जो मुहावरे का अर्थ व्यक्त करता है।

नाकों चने चबवाना-

- Ans
- 1. तंग करना
 - 2. बदनाम करना
 - 3. दंग रह जाना
 - 4. गुस्सा हो जाना

Question ID : 65497834549
Status : Not Answered
Chosen Option : --

Q.3 रिक्त स्थान को भरने के लिए सबसे उपयुक्त शब्द का चयन करें।

साहित्य और जीवन का _____ संबंध है।

- Ans
- 1. अभिन्न
 - 2. पृथक
 - 3. घोर
 - 4. घनघोर

Question ID : 65497834550
Status : Not Answered
Chosen Option : --

Q.4 दिए गए शब्द का विलोम चुनें।

आचार

- Ans
- 1. विचार
 - 2. व्यवहार
 - 3. प्रचार
 - 4. अनाचार

Question ID : 65497834548
Status : Not Answered
Chosen Option : --

Q.5 दिए गए वाक्यांश के लिए एक शब्द चुनिए।

जो किसी का पक्ष न ले

- Ans
- 1. विपक्ष
 - 2. तटीय
 - 3. तटस्थ
 - 4. निपक्ष

Question ID : 65497834551
Status : Not Answered
Chosen Option : --

Q.6 निम्नलिखित प्रश्न में, दिए गए चार विकल्पों में से, उस विकल्प का चयन करें जो मुहावरे का अर्थ व्यक्त करता है।

ईद का चांद होना

- Ans
- 1. बहुत सुंदर होना
 - 2. आकर्षक होना
 - 3. बहुत समय बाद दिखायी देना
 - 4. दुर्लभ होना

Question ID : 65497834544
Status : Not Answered
Chosen Option : --

Q.7 दिए गए वाक्य में रेखांकित खंड को प्रतिस्थापित करने के लिए सबसे उपयुक्त विकल्प का चयन करें। यदि इसे प्रतिस्थापित करने की आवश्यकता नहीं है, तो विकल्प 'किसी बदलाव की आवश्यकता नहीं है' का चयन करें।

किसी भी देश की सम्पत्ति, ऐसे देश में आदर्श विद्यार्थी ही होते हैं।

- Ans
- 1. उस देश के आदर्श विद्यार्थी
 - 2. ऐसे देश के आदर्श विद्यार्थी
 - 3. किसी बदलाव की आवश्यकता नहीं है।
 - 4. उस देश में आदर्श विद्यार्थी

Question ID : 65497834542
Status : Not Answered
Chosen Option : --

Q.8 दिये गये वाक्य के किस भाग में त्रुटि है?

उनकी आपस में घनिष्ठ मैत्रता थी।

- Ans
- 1. घनिष्ठ
 - 2. मैत्रता थी।
 - 3. आपस में
 - 4. उनकी

Question ID : 65497834554
Status : Not Answered
Chosen Option : --

Q.9 निम्नलिखित प्रश्न में, दिए गए चार विकल्पों में से उस विकल्प का चयन करें, जो मुहावरे का अर्थ व्यक्त करता है।

तीन-तेरह करना

- Ans
- 1. मृत्यु को प्राप्त होना
 - 2. इधर-उधर करना
 - 3. चुपचाप भाग जाना
 - 4. खुशामद करना

Question ID : 65497834537

Status : Not Answered

Chosen Option : --

Q.10 दिए गए वाक्य का वो भाग ज्ञात करें जिसमें कोई त्रुटि है। यदि कोई त्रुटि नहीं है, तो 'कोई त्रुटि नहीं है' चुनें।

प्रतिभा की माँ (1)\ इस समय छोटे बच्चा को (2)\ कहानी सुना रही है (3)\ कोई त्रुटि नहीं है (4)

- Ans
- 1. 4
 - 2. 1
 - 3. 2
 - 4. 3

Question ID : 65497834539

Status : Not Answered

Chosen Option : --

Q.11 दिये गये वाक्य में रेखांकित अंश को प्रतिस्थापित करने के लिए सबसे उपयुक्त विकल्प का चयन करें।

हमारे गले में पराधीनता की बेड़ियाँ पड़ी थीं।

- Ans
- 1. भुजाओं में
 - 2. मस्तक में
 - 3. सीने में
 - 4. पैरों में

Question ID : 65497834553

Status : Not Answered

Chosen Option : --

Q.12 रिक्त स्थान भरने के लिए सबसे उपयुक्त शब्द का चयन करें।

मक्खियाँ _____ हैं।

- Ans
- 1. भिनभिनाती
 - 2. सनसनाती
 - 3. खनखनाती
 - 4. चटचटाती

Question ID : 65497834538

Status : Not Answered

Chosen Option : --

Q.13 दिए गए वाक्य का वह भाग ज्ञात करें जिसमें कोई त्रुटि है। यदि कोई त्रुटि नहीं है, तो 'कोई त्रुटि नहीं है' चुनें।

अध्यापक (1)/ हमसे एक लेख (2)/ लिखवाया। (3)/ कोई त्रुटि नहीं है (4)

- Ans
- 1. 3
 - 2. 1
 - 3. 4
 - 4. 2

Question ID : 65497834547
Status : Not Answered
Chosen Option : --

Q.14 दिए गए शब्द के समानार्थी शब्द का चयन करें।

द्वार

- Ans
- 1. कर्मठ
 - 2. कपाट
 - 3. कपट
 - 4. सपाट

Question ID : 65497834540
Status : Not Answered
Chosen Option : --

Q.15 सही वर्तनी वाले शब्द का चयन करें।

- Ans
- 1. सांसारिक
 - 2. संसारिक
 - 3. सांसरिक
 - 4. संसारक

Question ID : 65497834545
Status : Not Answered
Chosen Option : --

Q.16 दिए गए वाक्य में रेखांकित खंड को प्रतिस्थापित करने के लिए सबसे उपयुक्त विकल्प का चयन करें। यदि इसे प्रतिस्थापित करने की आवश्यकता नहीं है, तो विकल्प 'किसी बदलाव की आवश्यकता नहीं है' का चयन करें।

जंगल में मोर अथवा मोरनी दिखाई पड़ेगा।

- Ans
- 1. मोर अथवा मोरनी दिखाई गए।
 - 2. किसी बदलाव की आवश्यकता नहीं है।
 - 3. मोर अथवा मोरनी दिखाई देगा।
 - 4. मोर अथवा मोरनी दिखाई पड़ेगी।

Question ID : 65497834536
Status : Not Answered
Chosen Option : --

Q.17 दिए गए शब्द का विलोम चुनें।

आदर

- Ans 1. निरादर
 2. अनादर
 3. सादर
 4. अपमान

Question ID : 65497834543
Status : Not Answered
Chosen Option : --

Q.18 दिए गए शब्द के समानार्थी शब्द का चयन करें।

चंद्र

- Ans 1. पयोधर
 2. सुधाकर
 3. किकर
 4. दिवाकर

Question ID : 65497834555
Status : Not Answered
Chosen Option : --

Q.19 रिक्त स्थान को भरने के लिए सबसे उपयुक्त शब्द का चयन करें।

इस लड़की को वाद्य संगीत से _____ है।

- Ans 1. आकर्षण
 2. आसक्ति
 3. अनुराग
 4. स्नेह

Question ID : 65497834552
Status : Not Answered
Chosen Option : --

Q.20 सही वर्तनी वाले शब्द का चयन करें।

- Ans 1. प्रस्थिति
 2. पारिस्थिति
 3. परिस्थिति
 4. परिस्थित

Question ID : 65497834546
Status : Not Answered
Chosen Option : --

Comprehension:

दिए गए अनुच्छेद में कुछ शब्द हटा दिए गए हैं। दिए गए विकल्पों की सहायता से रिक्त स्थान भरें। प्रत्येक संख्या के लिए सबसे उपयुक्त विकल्प का चयन करें।

किसी भी देश की (1)_____ चेतना बोली जाने वाली भाषा के (2)_____ में (3)_____ होती है।
(4)_____ और साहित्य एक-दूसरे से (5)_____ हैं।

SubQuestion No : 21

Q.21 गद्यांश के रिक्त स्थान (1) के लिए सर्वाधिक उपयुक्त शब्द होगा-

- Ans 1. भावी
 2. सांस्कृतिक
 3. राजनीतिक
 4. सामाजिक

Question ID : 65497834557
Status : Not Answered
Chosen Option : --

Comprehension:

दिए गए अनुच्छेद में कुछ शब्द हटा दिए गए हैं। दिए गए विकल्पों की सहायता से रिक्त स्थान भरें। प्रत्येक संख्या के लिए सबसे उपयुक्त विकल्प का चयन करें।

किसी भी देश की (1)_____ चेतना बोली जाने वाली भाषा के (2)_____ में (3)_____ होती है।
(4)_____ और साहित्य एक-दूसरे से (5)_____ हैं।

SubQuestion No : 22

Q.22 गद्यांश के रिक्त स्थान (2) के लिए सर्वाधिक उपयुक्त शब्द होगा-

- Ans 1. पीछे
 2. साहित्य
 3. आगे
 4. पराक्रम

Question ID : 65497834558
Status : Not Answered
Chosen Option : --

Comprehension:

दिए गए अनुच्छेद में कुछ शब्द हटा दिए गए हैं। दिए गए विकल्पों की सहायता से रिक्त स्थान भरें। प्रत्येक संख्या के लिए सबसे उपयुक्त विकल्प का चयन करें।

किसी भी देश की (1)_____ चेतना बोली जाने वाली भाषा के (2)_____ में (3)_____ होती है।
(4)_____ और साहित्य एक-दूसरे से (5)_____ हैं।

SubQuestion No : 23

Q.23 गद्यांश के रिक्त स्थान (3) के लिए सर्वाधिक उपयुक्त शब्द होगा-

- Ans 1. दृष्टिहीन
 2. विध्वंसक
 3. ओझल
 4. परिलक्षित

Question ID : 65497834559
Status : Not Answered
Chosen Option : --

Comprehension:

दिए गए अनुच्छेद में कुछ शब्द हटा दिए गए हैं। दिए गए विकल्पों की सहायता से रिक्त स्थान भरें। प्रत्येक संख्या के लिए सबसे उपयुक्त विकल्प का चयन करें।

किसी भी देश की (1)_____ चेतना बोली जाने वाली भाषा के (2)_____ में (3)_____ होती है।
(4)_____ और साहित्य एक-दूसरे से (5)_____ हैं।

SubQuestion No : 24

Q.24 गद्यांश के रिक्त स्थान (4) के लिए सर्वाधिक उपयुक्त शब्द होगा-

- Ans**
- 1. संस्था
 - 2. समाज
 - 3. परिवार
 - 4. समुदाय

Question ID : **65497834560**
Status : **Not Answered**
Chosen Option : --

Comprehension:

दिए गए अनुच्छेद में कुछ शब्द हटा दिए गए हैं। दिए गए विकल्पों की सहायता से रिक्त स्थान भरें। प्रत्येक संख्या के लिए सबसे उपयुक्त विकल्प का चयन करें।

किसी भी देश की (1)_____ चेतना बोली जाने वाली भाषा के (2)_____ में (3)_____ होती है।
(4)_____ और साहित्य एक-दूसरे से (5)_____ हैं।

SubQuestion No : 25

Q.25 गद्यांश के रिक्त स्थान (5) के लिए सर्वाधिक उपयुक्त शब्द होगा-

- Ans**
- 1. पृथक
 - 2. अभिन्न
 - 3. भिन्न
 - 4. अलग

Question ID : **65497834561**
Status : **Not Answered**
Chosen Option : --