

## Constable GD in CAPFs NIA SSF and Rifleman GD in Assam Rifles Examination 2021

Roll Number	
Candidate Name	
Venue Name	iON Digital Zone iDZ 1 Hathipur
Exam Date	01/12/2021
Exam Time :	4:00 PM - 5:30 PM
Subject	Constable GD 2021

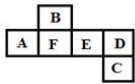
Section : **Part A General Intelligence and Reasoning**

**Q.1** In a certain code language, 'CAMEL' is written as 'ECNGN' and 'HORSE' is written as 'JQSUG'. How will 'WHALE' be written in that language?

- Ans
- 1. XJBNF
  - 2. XIBMF
  - 3. YJBNG
  - 4. YJCNG

Question ID : 65497829990  
 Status : Answered  
 Chosen Option : 3

**Q.2** A cube is made by folding the given sheet. In the cube so formed, which of the following pairs of letters will be on opposite sides?



- Ans
- 1. F and E
  - 2. C and F
  - 3. B and E
  - 4. D and F

Question ID : 65497830005  
 Status : Answered  
 Chosen Option : 4

**Q.3** Select the letter-cluster from among the given options that can replace the question mark (?) in the following series.

TOD, UQG, VSJ, WUM, XWP, ?

- Ans
- 1. YZS
  - 2. YYT
  - 3. YAS
  - 4. YYS

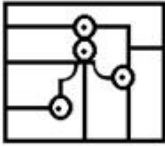
Question ID : 65497830011  
 Status : Answered  
 Chosen Option : 4

Q.4 Select the option in which the given figure is embedded (rotation is NOT allowed).

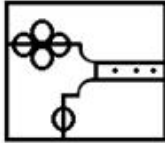


Ans

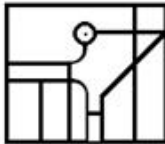
1.



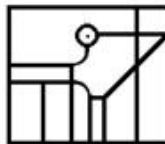
2.



3.



4.



Question ID : 65497830006  
 Status : Answered  
 Chosen Option : 4

Q.5 Select the option that is related to the third number in the same way as the second number is related to the first number and the sixth number is related to the fifth number.

18 : 26 :: 20 : ? :: 16 : 23

Ans  1. 41

2. 31

3. 29

4. 38

Question ID : 65497830003  
 Status : Not Attempted and Marked For Review  
 Chosen Option : --

Q.6 In a certain code language, 'MISTAKE' is coded as '9765412', and 'NAKED' is coded as '84123'. How will 'INTIMATE' be coded in that language?

Ans  1. 78698365

2. 79438163

3. 89786145

4. 78579452

Question ID : 65497829999  
 Status : Answered  
 Chosen Option : 4

Q.7 Select the correct option that indicates the arrangement of the given words in the order in which they appear in an English dictionary.

1. Naughty
2. Navy
3. Navigate
4. Nautical
5. Nuptial

Ans  1. 1, 4, 3, 2, 5

2. 1, 4, 3, 5, 2

3. 3, 2, 1, 4, 5

4. 1, 3, 4, 2, 5

Question ID : 65497830007

Status : Answered

Chosen Option : 1

Q.8 Read the given statements and conclusions carefully. Assuming that the information given in the statements is true, even if it appears to be at variance with commonly known facts, decide which of the given conclusions logically follow(s) from the statements.

Statements:

All scooters are two wheelers.

All cycles are two wheelers.

Conclusions:

I. All scooters are cycles.

II. All cycles are scooters.

Ans  1. Only conclusion II follows

2. Only conclusion I follows

3. Neither conclusion I nor II follows

4. Both conclusions I and II follow

Question ID : 65497829991

Status : Answered

Chosen Option : 3

Q.9 Select the number from among the given options that can replace the question mark (?) in the following series.

2, 3, 10, 39, 172, ?, 5346

Ans  1. 693

2. 885

3. 743

4. 756

Question ID : 65497830000

Status : Not Attempted and Marked For Review

Chosen Option : --

Q.10 'Earthworm' is related to 'Non-chordates' in the same way as 'Fish' is related to '\_\_\_\_\_'.  
'\_\_\_\_\_'

Ans  1. Non-chordates

2. Reptile

3. Mammal

4. Chordates

Question ID : 65497830012

Status : Answered

Chosen Option : 4

Q.11 Four letter-clusters have been given, out of which three are alike in some manner and one is different. Select the letter-cluster that is different.

- Ans  1. RNU  
 2. MJQ  
 3. GDK  
 4. EBI

Question ID : 65497829998  
Status : Answered  
Chosen Option : 1

Q.12 Select the set of words that is best represented by the given Venn diagram.



- Ans  1. Engineers, Graduates, Uneducated  
 2. Doctors, Nurses, Human beings  
 3. Females, Mothers, Daughters  
 4. Farmers, Villagers, Literates

Question ID : 65497830014  
Status : Answered  
Chosen Option : 3

Q.13 Select the number from among the given options that can replace the question mark (?) in the following series.

19, 19, 38, 114, ?, 2280

- Ans  1. 344  
 2. 1140  
 3. 456  
 4. 224

Question ID : 65497830009  
Status : Answered  
Chosen Option : 3

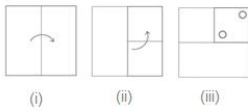
Q.14 Select the option that is related to the third term in the same way as the second term is related to the first term.

BULK : YFOP :: NOTE : ?

- Ans  1. OWQS  
 2. MLGV  
 3. HWRP  
 4. PQCH

Question ID : 65497829995  
Status : Answered  
Chosen Option : 2

**Q.15** The sequence of folding a piece of paper and the manner in which the folded paper has been cut is shown in the following figures. How would this paper look when unfolded?



**Ans**

- 1.
- 2.
- 3.
- 4.

Question ID : 65497829994  
 Status : Answered  
 Chosen Option : 3

**Q.16** A is the father of D. C and D are brothers. G is the mother of B, and C is the brother of B. How is G related to A?

- 1. Mother-in-law
- 2. Sister-in-law
- 3. Wife
- 4. Sister

Question ID : 65497829997  
 Status : Answered  
 Chosen Option : 3

**Q.17** Select the correct mirror image of the given combination when the mirror is placed at PQ as shown.



- 1. LAIOMYUJOP
- 2. BOGLNOMIIVG
- 3. LAIMONUYJOP
- 4. BOGLNOMIIVG

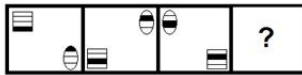
Question ID : 65497830001  
 Status : Answered  
 Chosen Option : 3

**Q.18** Four number triads have been given, out of which three are alike in some manner and one is different. Select the number triad that is different.

- Ans
- 1. (15, 30, 225)
  - 2. (17, 34, 278)
  - 3. (12, 24, 144)
  - 4. (13, 26, 169)

Question ID : 65497829992  
 Status : Answered  
 Chosen Option : 2

**Q.19** Select the figure from among the given options that can replace the question mark (?) in the following series.



Ans

- 1.
- 2.
- 3.
- 4.

Question ID : 65497830010  
 Status : Answered  
 Chosen Option : 3

**Q.20** Chirag, Firoz, Hira, Joy and Lohit are sitting in a straight line facing the north. Lohit is to the immediate right of Firoz. Chirag is to the immediate left of Joy. Only Hira is between Lohit and Chirag. Who is at the third right place of Firoz?

- Ans
- 1. Joy
  - 2. Hira
  - 3. Chirag
  - 4. Lohit

Question ID : 65497830013  
 Status : Answered  
 Chosen Option : 3

Q.21 Select the combination of letters that when sequentially placed in the blanks of the given series will complete the series.

V \_ M R \_ V \_ M \_ D \_ K M \_ D

- Ans
- 1. K D R R V R
  - 2. K D K R V K
  - 3. K D K R D R
  - 4. K D K R V R

Question ID : 65497830008

Status : Answered

Chosen Option : 4

Q.22 If 'A' denotes 'addition', 'B' denotes 'multiplication', 'C' denotes 'subtraction', and 'D' denotes 'division', then what will be the value of the following expression?

72 D 6 B 12 A 24 C 18 C (20 B 5 A 48)

- Ans
- 1. 1
  - 2. 3
  - 3. 2
  - 4. 4

Question ID : 65497830004

Status : Answered

Chosen Option : 3

Q.23 Six delivery boys, U, V, W, X, Y and Z, are standing in a row next to each other to collect their goods from the stock room. Z is to the immediate left of W. Z and Y are at the extreme ends of the row. W is exactly between Z and V. U is to the immediate left of X. Y is to the immediate right of X. Which delivery boy is at the fourth position from the right?

- Ans
- 1. U
  - 2. X
  - 3. V
  - 4. W

Question ID : 65497830002

Status : Answered

Chosen Option : 4

Q.24 In a certain code language, IMPORT is written as GKRQPR. How will EXPEND be written in that language?

- Ans
- 1. CVRGLB
  - 2. GCFLMF
  - 3. CVNGLR
  - 4. DYQFMB

Question ID : 65497829996

Status : Answered

Chosen Option : 1

Q.25 The average age of the employees of a company is 45 years. Three employees of ages 38, 45 and 49 years resigned and three new employees of ages 42, 46 and 44 years joined. What is the average age of the employees now?

- Ans
- 1. 47 years
  - 2. 46 years
  - 3. 48 years
  - 4. 45 years

Question ID : 65497829993  
Status : Answered  
Chosen Option : 4

Section : Part B General Knowledge and General Awareness

Q.1 'Healthy Air, Healthy Planet' was the theme of \_\_\_\_\_ 2021.

- Ans
- 1. World Ozone Day
  - 2. International Day of Clean Air for Blue Skies
  - 3. World Environment Day
  - 4. Mother Earth Day

Question ID : 65497830037  
Status : Answered  
Chosen Option : 4

Q.2 The film 'Thalaivii', which was released in September 2021, is the official biopic based on the life of \_\_\_\_\_.

- Ans
- 1. J Jayalalithaa
  - 2. Sheila Dixit
  - 3. Sushma Swaraj
  - 4. Indira Gandhi

Question ID : 65497830035  
Status : Answered  
Chosen Option : 1

Q.3 The Ukai dam is located on the \_\_\_\_\_ river.

- Ans
- 1. Mahi
  - 2. Narmada
  - 3. Karjan
  - 4. Tapi

Question ID : 65497830038  
Status : Answered  
Chosen Option : 3

Q.4 Which of the following is a unique feature of the Barren Islands?

- Ans
- 1. The only active volcano in India is present here.
  - 2. India's largest saltwater lake exists here.
  - 3. It is home to the primitive Asaro tribe.
  - 4. It is an uninhabited island in the Indian Ocean.

Question ID : 65497830015  
Status : Answered  
Chosen Option : 1



**Q.5** Which of the following tribes was very influential in Punjab during the thirteenth and fourteenth centuries?

- Ans
- 1. Janjuhas
  - 2. Khokhar
  - 3. Gakkhars
  - 4. Langahs

Question ID : 65497830021  
Status : Not Answered  
Chosen Option : --

**Q.6** Which of the following is NOT a method of soil conservation?

- Ans
- 1. Intercropping
  - 2. Shelter belts
  - 3. Rock dam
  - 4. Overgrazing

Question ID : 65497830025  
Status : Answered  
Chosen Option : 4

**Q.7** Quwwat-ul-Islam mosque is situated in:

- Ans
- 1. Mysuru
  - 2. Agra
  - 3. Pune
  - 4. Delhi

Question ID : 65497830024  
Status : Answered  
Chosen Option : 4

**Q.8** Which of the following was one of the eight beaches to be awarded the international 'Blue Flag' certification by Foundation of Environment Education, Denmark in October 2020?

- Ans
- 1. Karwar
  - 2. Shivrajpur
  - 3. Gopalpur
  - 4. Tithal

Question ID : 65497830032  
Status : Not Answered  
Chosen Option : --

**Q.9** As of October 2020, the Government of India fixed the Minimum Support Price (MSP) for \_\_\_\_\_ cereals.

- Ans
- 1. 5
  - 2. 10
  - 3. 12
  - 4. 7

Question ID : 65497830029  
Status : Answered  
Chosen Option : 3

Q.10 The first Indian batsman to register a triple century in test cricket was \_\_\_\_\_.

- Ans
- 1. Rohit Sharma
  - 2. Suresh Raina
  - 3. Virender Sehwag
  - 4. Shikhar Dhawan

Question ID : 65497830027  
Status : Answered  
Chosen Option : 3

Q.11 Which of the following is a natural eco system?

- Ans
- 1. Desert
  - 2. Aquarium
  - 3. Dam
  - 4. Garden

Question ID : 65497830031  
Status : Answered  
Chosen Option : 1

Q.12 Which of the following acids is injected into the skin during an ant bite?

- Ans
- 1. Formic acid
  - 2. Tartaric acid
  - 3. Ascorbic acid
  - 4. Citric acid

Question ID : 65497830030  
Status : Answered  
Chosen Option : 1

Q.13 Emma Raducanu defeated \_\_\_\_\_ to win the US Open women's single (tennis) title in September 2021.

- Ans
- 1. Marina Stakusic
  - 2. Rebecca Marino
  - 3. Mia Kupres
  - 4. Leylah Fernandez

Question ID : 65497830039  
Status : Not Answered  
Chosen Option : --

Q.14 Which of the following is a part of a flower?

- Ans
- 1. Pistil
  - 2. Mid-rib
  - 3. Veins
  - 4. Venation

Question ID : 65497830033  
Status : Answered  
Chosen Option : 1

Q.15 As of september 2021, Emmanuel Macron is the President of which country?

- Ans
- 1. Germany
  - 2. Italy
  - 3. Greece
  - 4. France

Question ID : 65497830026  
Status : Answered  
Chosen Option : 4

Q.16 'Lohri', a harvest festival of Punjab, is celebrated in the month of \_\_\_\_\_ every year.

- Ans
- 1. February
  - 2. April
  - 3. December
  - 4. January

Question ID : 65497830028  
Status : Answered  
Chosen Option : 4

Q.17 What was the reverse repo rate in October 2020?

- Ans
- 1. 3.75%
  - 2. 3.35%
  - 3. 4%
  - 4. 3.5%

Question ID : 65497830019  
Status : Answered  
Chosen Option : 4

Q.18 A commercial bank is required to obtain a licence for commencing banking business from the Reserve Bank of India, under the provisions of Section \_\_\_\_\_ of the Banking Regulation Act, 1949.

- Ans
- 1. 22
  - 2. 31
  - 3. 46
  - 4. 53

Question ID : 65497830036  
Status : Answered  
Chosen Option : 1

Q.19 Which of the following countries hosted the Asian Football Cup 2019?

- Ans
- 1. Myanmar
  - 2. China
  - 3. United Arab Emirates
  - 4. Australia

Question ID : 65497830018  
Status : Not Answered  
Chosen Option : --

Q.20 Which Section of the Indian Penal Code deals with the offence of causing miscarriage without the consent of the woman?

- Ans
- 1. Section 315
  - 2. Section 314
  - 3. Section 313
  - 4. Section 312

Question ID : 65497830022  
Status : Not Answered  
Chosen Option : --

Q.21 Unlike some other Harappan cities, Dholavira was divided into \_\_\_\_\_ parts, with each part surrounded by massive stone walls.

- Ans
- 1. three
  - 2. two
  - 3. five
  - 4. four

Question ID : 65497830034  
Status : Not Answered  
Chosen Option : --

Q.22 Which of the following types of banks operate exclusively online and do NOT have any physical branch network?

- Ans
- 1. Shadow
  - 2. Commercial
  - 3. Neo
  - 4. Retail

Question ID : 65497830016  
Status : Answered  
Chosen Option : 1

Q.23 Where was the 24th and the last Tirthankara of Jainism, Vardhamana Mahavira born in 6th century BC?

- Ans
- 1. Tamil Nadu
  - 2. Bihar
  - 3. Maharashtra
  - 4. Andhra Pradesh

Question ID : 65497830017  
Status : Answered  
Chosen Option : 2

Q.24 Which of the following cities is famous for its ruins belonging to medieval Hindu kingdom of Vijaynagara and is declared a World Heritage Site?

- Ans
- 1. Chikmagalur
  - 2. Dandeli
  - 3. Madikeri
  - 4. Hampi

Question ID : 65497830020  
Status : Answered  
Chosen Option : 4

**Q.25** Which of the following days is celebrated as International Day to End Impunity for Crimes against Journalists?

- Ans
- 1. 5 November
  - 2. 2 November
  - 3. 3 November
  - 4. 4 November

Question ID : **65497830023**  
Status : **Not Answered**  
Chosen Option : --

Section : **Part C Elementary Mathematics**

**Q.1** The LCM and HCF of two numbers are 60 and 5, respectively. If one number is divided by 2 and the quotient is 10, then find the other number.

- Ans
- 1. 15
  - 2. 20
  - 3. 12
  - 4. 30

Question ID : **65497830051**  
Status : **Answered**  
Chosen Option : 1

**Q.2** Find the compound interest (correct to two decimal places) on ₹9,500 in 2 years at 8% per annum, the interest being compounded half-yearly.

- Ans
- 1. ₹1,613.66
  - 2. ₹1,213.50
  - 3. ₹1,532.75
  - 4. ₹1,650

Question ID : **65497830056**  
Status : **Not Attempted and Marked For Review**  
Chosen Option : --

**Q.3** A can do a work in 18 days. A and B working together can do the same work in 8 days, whereas B and C working together can do the same work in 6 days. In how many days can A, B and C working together do the same work?

- Ans
- 1.  $4\frac{3}{4}$
  - 2.  $3\frac{1}{2}$
  - 3.  $4\frac{1}{2}$
  - 4.  $3\frac{4}{5}$

Question ID : **65497830063**  
Status : **Answered**  
Chosen Option : 4

**Q.4** The averages of the numbers a and b, b and c, c and d are 9, 6, 4, respectively. What is the average of a and d?

- Ans**
- 1. 4.2
  - 2. 6
  - 3. 5.5
  - 4. 7

Question ID : **65497830060**  
Status : **Answered**  
Chosen Option : **4**

**Q.5** The marked price of an article was ₹400 but the shopkeeper offered a double discount of 25% and 15%. How much did he finally sell the article for?

- Ans**
- 1. ₹278
  - 2. ₹255
  - 3. ₹300.5
  - 4. ₹325

Question ID : **65497830050**  
Status : **Answered**  
Chosen Option : **2**

**Q.6** P sells an article which costs him ₹1,200 to Q at a profit of 15%. Q then sells it to R for ₹1,449. What is the profit percentage of Q?

- Ans**
- 1. 10%
  - 2. 6%
  - 3. 7%
  - 4. 5%

Question ID : **65497830049**  
Status : **Answered**  
Chosen Option : **4**

**Q.7** The average age of 15 students of a class is 14 years. Out of these, the average age of 6 students is 15 years and that of the other 8 students is 13 years. Find the age of the 15<sup>th</sup> student.

- Ans**
- 1. 18 years
  - 2. 16 years
  - 3. 15 years
  - 4. 14 years

Question ID : **65497830052**  
Status : **Answered**  
Chosen Option : **2**

**Q.8** A shopkeeper offers a discount of 12% on a sofa-set and sells it for ₹17,776. What is the marked price (in ₹) of the sofa-set?

- Ans**
- 1. 19,800
  - 2. 19,910
  - 3. 22,000
  - 4. 20,200

Question ID : 65497830061  
Status : Answered  
Chosen Option : 4

**Q.9** Two positive numbers are in the ratio 3 : 4. If the sum of their cubes is 728, then the sum of the two numbers is:

- Ans**
- 1. 16
  - 2. 24
  - 3. 15
  - 4. 14

Question ID : 65497830042  
Status : Answered  
Chosen Option : 4

**Q.10** Two cones have their heights in the ratio of 2 : 1 and radii in the ratio of 1 : 2. Find the ratio of their volumes.

- Ans**
- 1. 4 : 3
  - 2. 3 : 4
  - 3. 1 : 2
  - 4. 2 : 1

Question ID : 65497830057  
Status : Answered  
Chosen Option : 3

**Q.11** The difference between two positive numbers  $x$  and  $y$  ( $x > y$ ) is 350. If 9.5% of  $x$  is equal to 16.5% of  $y$ , then the sum of the two numbers  $x$  and  $y$  is:

- Ans**
- 1. 1300
  - 2. 1400
  - 3. 1250
  - 4. 1200

Question ID : 65497830041  
Status : Answered  
Chosen Option : 1

Q.12 In 5 minutes,  $\frac{4}{11}$  of a bucket is filled. How much time will it take to fill the remaining bucket?

- Ans
- 1. 8 minutes
  - 2. 8 minutes 45 seconds
  - 3. 8 minutes 40 seconds
  - 4. 8 minutes 20 seconds

Question ID : 65497830059  
Status : Answered  
Chosen Option : 2

Q.13 How many bricks are required to build a 21 m long, 12 m high and 36 cm thick wall, if each brick measures 28 cm  $\times$  18 cm  $\times$  6 cm?

- Ans
- 1. 24000
  - 2. 30000
  - 3. 25000
  - 4. 20000

Question ID : 65497830043  
Status : Answered  
Chosen Option : 2

Q.14 The ratio of two positive numbers is 11 : 17 and their HCF is 4. Their LCM is:

- Ans
- 1. 648
  - 2. 784
  - 3. 748
  - 4. 746

Question ID : 65497830040  
Status : Answered  
Chosen Option : 3

Q.15 If the selling price is tripled, the profit becomes four times. Find the profit percentage.

- Ans
- 1. 50%
  - 2. 100%
  - 3. 20%
  - 4. 200%

Question ID : 65497830044  
Status : Not Attempted and Marked For Review  
Chosen Option : --



**Q.16** A person sold a car for ₹3,80,000 and incurred a loss of 5%. To have a gain of 15%, the Selling Price of the car is:

- Ans**
- 1. ₹4,20,000
  - 2. ₹40,000
  - 3. ₹4,10,000
  - 4. ₹4,60,000

Question ID : 65497830047  
Status : Answered  
Chosen Option : 4

**Q.17** Find the simple interest on ₹ 2,400 from 20 March 2019 to 31 May 2019 at  $6\frac{1}{4}\%$  rate?

- Ans**
- 1. ₹ 25
  - 2. ₹ 42
  - 3. ₹ 54
  - 4. ₹ 30

Question ID : 65497830055  
Status : Answered  
Chosen Option : 4

**Q.18** The value of  $\left(3\frac{1}{5} \div \frac{2}{3} \text{ of } 4\frac{1}{2}\right) + 5\frac{2}{3} \div 1\frac{2}{3} \text{ of } 4\frac{1}{4} - 5\frac{1}{3} \times \frac{3}{4} \div 2\frac{2}{3}$  is:

- Ans**
- 1.  $\frac{28}{15}$
  - 2.  $\frac{2}{5}$
  - 3.  $\frac{1}{3}$
  - 4.  $\frac{11}{30}$

Question ID : 65497830058  
Status : Marked For Review  
Chosen Option : 4

**Q.19** A car runs the first 272 km at an average speed of 40 km/h and the next 85 km at an average speed of 50 km/h. What is the average speed (in km/h) for the entire journey?

- Ans**
- 1. 42.5
  - 2. 44
  - 3. 40
  - 4. 42

Question ID : 65497830064  
Status : Answered  
Chosen Option : 4

**Q.20** The salary of a person is first increased by 15% and thereafter it is reduced by 15%. What is the net change in his salary?

- Ans**
- 1. No change
  - 2. Decrease, 1.5%
  - 3. Increase, 2.25%
  - 4. Decrease, 2.25%

Question ID : **65497830062**  
Status : **Answered**  
Chosen Option : **4**

**Q.21** The difference between the simple interest and the compound interest compounded annually on a certain sum of money for 2 years at a rate of 8% per annum is ₹16.80. Find the principal amount.

- Ans**
- 1. ₹2,625
  - 2. ₹2,025
  - 3. ₹2,825
  - 4. ₹2,225

Question ID : **65497830045**  
Status : **Answered**  
Chosen Option : **1**

**Q.22** What is the ratio whose terms differ by 45 and the measure of which is  $\frac{4}{7}$ ?

- Ans**
- 1. 35 : 80
  - 2. 50 : 95
  - 3. 65 : 20
  - 4. 60 : 105

Question ID : **65497830054**  
Status : **Not Attempted and Marked For Review**  
Chosen Option : **--**

**Q.23** 40 kg of an alloy A is mixed with 63 kg of alloy B. If alloy A has lead and tin in the ratio 2 : 3 and alloy B has tin and copper in the ratio 2 : 5, then find the amount of tin in the new alloy?

- Ans**
- 1. 24 kg
  - 2. 18 kg
  - 3. 36 kg
  - 4. 42 kg

Question ID : **65497830053**  
Status : **Answered**  
Chosen Option : **2**

Q.24  $\frac{1}{3 \times 4} + \frac{1}{4 \times 5} + \frac{1}{5 \times 6} + \dots + \frac{1}{20 \times 21}$   
 On simplification, the given expression will give the result as:

- Ans
- 1.  $\frac{1}{20}$
  - 2.  $\frac{2}{7}$
  - 3.  $\frac{3}{7}$
  - 4.  $\frac{1}{7}$

Question ID : 65497830046

Status : Not Attempted and Marked For Review

Chosen Option : --

Q.25 Mohan and Ramesh can together complete a work in 15 days. Mohan is 50% more efficient than Ramesh. The time taken by Mohan alone to complete the work is:

- Ans
- 1. 20 days
  - 2. 32 days
  - 3. 25 days
  - 4. 22.5 days

Question ID : 65497830048

Status : Answered

Chosen Option : 1

Section : Part D English

Q.1 Select the most appropriate option to fill in the blank.

'Of Mice and Men' is a well-known \_\_\_\_\_ by John Steinbeck.

- Ans
- 1. memorandum
  - 2. novella
  - 3. circular
  - 4. pamphlet

Question ID : 65497830072

Status : Answered

Chosen Option : 2

Q.2 Select the option that will improve the underlined part of the given sentence. In case no improvement is needed, select 'No improvement required'.

The teacher asked Mohit that why he was absent for the test.

- Ans
- 1. that why was he
  - 2. why was he
  - 3. No improvement required
  - 4. why he was

Question ID : 65497830084

Status : Answered

Chosen Option : 2

Q.3 The following sentence has been split into four segments. Identify the segment that contains a grammatical error.

The tornados / on the east coast / gives rise / to tsunamis.

- Ans
- 1. on the east coast
  - 2. to tsunamis
  - 3. gives rise
  - 4. The tornados

Question ID : 65497830065  
Status : Answered  
Chosen Option : 2

Q.4 The following sentence has been split into four segments. Identify the segment that contains a grammatical error.

Despite of being / a small girl / she fought / the bull bravely.

- Ans
- 1. the bull bravely
  - 2. a small girl
  - 3. she fought
  - 4. Despite of being

Question ID : 65497830079  
Status : Answered  
Chosen Option : 4

Q.5 Select the most appropriate ANTONYM of the given word.

Impel

- Ans
- 1. Prompt
  - 2. Repress
  - 3. Oblige
  - 4. Inspire

Question ID : 65497830083  
Status : Answered  
Chosen Option : 2

Q.6 Select the most appropriate synonym of the given word.

Aroma

- Ans
- 1. Stink
  - 2. Sourness
  - 3. Stench
  - 4. Fragrance

Question ID : 65497830075  
Status : Answered  
Chosen Option : 4

Q.7 Select the most appropriate option to fill in the blank.

The two parties held several \_\_\_\_\_ during the campaigning for elections.

- Ans
- 1. masses
  - 2. crowds
  - 3. rallies
  - 4. assemblies

Question ID : 65497830068  
Status : Answered  
Chosen Option : 3

Q.8 Select the option that will improve the underlined part of the given sentence. In case no improvement is needed, select 'No improvement required'.

Side by side fruits, Radha sells fresh flowers in the market.

- Ans
- 1. No improvement required
  - 2. Apart for fruits
  - 3. Altogether fruits
  - 4. Besides fruits

Question ID : 65497830069  
Status : Answered  
Chosen Option : 4

Q.9 Select the most appropriate option that can substitute the underlined segment in the given sentence. If there is no need to substitute it, select 'No substitution required'.

No one are required to line up for the investigation.

- Ans
- 1. No substitution required
  - 2. No one have required
  - 3. No one is required
  - 4. No one had required

Question ID : 65497830071  
Status : Answered  
Chosen Option : 3

Q.10 Select the INCORRECTLY spelt word.

- Ans
- 1. Affirm
  - 2. Charity
  - 3. Hittch
  - 4. Overall

Question ID : 65497830077  
Status : Answered  
Chosen Option : 3

**Q.11** The following sentence has been split into four segments. Identify the segment that contains a grammatical error.

Last night's / Christmas party was fun. / I wish / you would come.

- Ans  1. you would come  
 2. Last night's  
 3. I wish  
 4. Christmas party was fun

Question ID : 65497830074  
Status : Marked For Review  
Chosen Option : 1

**Q.12** Select the most appropriate synonym of the given word.

Reckless

- Ans  1. Rash  
 2. Queer  
 3. Rational  
 4. Veritable

Question ID : 65497830066  
Status : Answered  
Chosen Option : 1

**Q.13** Select the option that is closest in meaning to the underlined idiom/phrase in the given sentence.

The manager moved heaven and earth to help the factory workers who had lost their jobs.

- Ans  1. travelled to distant places  
 2. did everything possible  
 3. offered good advice  
 4. wasted a lot of time

Question ID : 65497830073  
Status : Answered  
Chosen Option : 2

**Q.14** Select the most appropriate meaning of the given idiom.

Out of the blue

- Ans  1. Sorrowfully  
 2. Unexpectedly  
 3. Without a uniform  
 4. From the sky

Question ID : 65497830067  
Status : Answered  
Chosen Option : 1

Q.15 Select the option that can be used as a one-word substitute for the given group of words.

Subject (someone) to a continuous flow of questions, criticisms or information

- Ans
- 1. Revolt
  - 2. Bombard
  - 3. Irritate
  - 4. Shout

Question ID : 65497830076  
Status : Answered  
Chosen Option : 2

Q.16 Select the option that can be used as a one-word substitute for the given group of words.

A vehicle used to carry a dead body

- Ans
- 1. Hearse
  - 2. Coffin
  - 3. Tomb
  - 4. Grave

Question ID : 65497830081  
Status : Answered  
Chosen Option : 1

Q.17 Select the most appropriate option to fill in the blank.

The pictures \_\_\_\_\_ the postures which you have to assume.

- Ans
- 1. depict
  - 2. decline
  - 3. decode
  - 4. decipher

Question ID : 65497830078  
Status : Answered  
Chosen Option : 1

Q.18 Select the option that can be used as a one-word substitute for the given group of words.

Brighten with light

- Ans
- 1. Illustrate
  - 2. Illuminate
  - 3. Terminate
  - 4. Celebrate

Question ID : 65497830070  
Status : Answered  
Chosen Option : 2

**Q.19** Select the most appropriate ANTONYM of the given word.

**Retard**

- Ans**  1. Hurry  
 2. Choke  
 3. Delay  
 4. Cram

Question ID : 65497830080  
Status : Answered  
Chosen Option : 1

**Q.20** Select the INCORRECTLY spelt word.

- Ans**  1. Illicit  
 2. Eligible  
 3. Relevent  
 4. Tactics

Question ID : 65497830082  
Status : Marked For Review  
Chosen Option : 3

**Comprehension:**

In the following passage, some words have been deleted. Read the passage carefully and select the most appropriate option to fill in each blank.

Mount Everest, a peak in the Himalayan mountain range, is at a height of 8850 metres above sea level and is considered the (1)\_\_\_\_\_ point on earth. While it is called Chomo-Lungma, or "Mother Goddess of the Land," (2)\_\_\_\_\_ the Tibetans, the people of Nepal call it Sagarmatha. The British named the mountain (3)\_\_\_\_\_ Sir George Everest, a 19th-century British surveyor of South Asia. The Everest is believed to be over 60 billion years old. Although the first (4)\_\_\_\_\_ to climb Mount Everest was made in 1921, it was not successful. It was on 29th May, 1953, that Edmund Hillary and Tenzing Norgay became the first men to (5)\_\_\_\_\_ the summit of this mountain.

**SubQuestion No : 21**

**Q.21** Select the most appropriate option to fill in blank no. 1.

- Ans**  1. longest  
 2. maximum  
 3. uppermost  
 4. highest

Question ID : 65497830086  
Status : Answered  
Chosen Option : 4



**Comprehension:**

In the following passage, some words have been deleted. Read the passage carefully and select the most appropriate option to fill in each blank.

Mount Everest, a peak in the Himalayan mountain range, is at a height of 8850 metres above sea level and is considered the (1)\_\_\_\_\_ point on earth. While it is called Chomo-Lungma, or "Mother Goddess of the Land," (2)\_\_\_\_\_ the Tibetans, the people of Nepal call it Sagarmatha. The British named the mountain (3)\_\_\_\_\_ Sir George Everest, a 19th-century British surveyor of South Asia. The Everest is believed to be over 60 billion years old. Although the first (4)\_\_\_\_\_ to climb Mount Everest was made in 1921, it was not successful. It was on 29th May, 1953, that Edmund Hillary and Tenzing Norgay became the first men to (5)\_\_\_\_\_ the summit of this mountain.

**SubQuestion No : 22**

**Q.22 Select the most appropriate option to fill in blank no. 2.**

- Ans
- 1. with
  - 2. on
  - 3. by
  - 4. for

Question ID : **65497830087**

Status : **Answered**

Chosen Option : **3**

**Comprehension:**

In the following passage, some words have been deleted. Read the passage carefully and select the most appropriate option to fill in each blank.

Mount Everest, a peak in the Himalayan mountain range, is at a height of 8850 metres above sea level and is considered the (1)\_\_\_\_\_ point on earth. While it is called Chomo-Lungma, or "Mother Goddess of the Land," (2)\_\_\_\_\_ the Tibetans, the people of Nepal call it Sagarmatha. The British named the mountain (3)\_\_\_\_\_ Sir George Everest, a 19th-century British surveyor of South Asia. The Everest is believed to be over 60 billion years old. Although the first (4)\_\_\_\_\_ to climb Mount Everest was made in 1921, it was not successful. It was on 29th May, 1953, that Edmund Hillary and Tenzing Norgay became the first men to (5)\_\_\_\_\_ the summit of this mountain.

**SubQuestion No : 23**

**Q.23 Select the most appropriate option to fill in blank no. 3.**

- Ans
- 1. from
  - 2. about
  - 3. over
  - 4. after

Question ID : **65497830088**

Status : **Answered**

Chosen Option : **4**

**Comprehension:**

In the following passage, some words have been deleted. Read the passage carefully and select the most appropriate option to fill in each blank.

Mount Everest, a peak in the Himalayan mountain range, is at a height of 8850 metres above sea level and is considered the (1)\_\_\_\_\_ point on earth. While it is called Chomo-Lungma, or "Mother Goddess of the Land," (2)\_\_\_\_\_ the Tibetans, the people of Nepal call it Sagarmatha. The British named the mountain (3)\_\_\_\_\_ Sir George Everest, a 19th-century British surveyor of South Asia. The Everest is believed to be over 60 billion years old. Although the first (4)\_\_\_\_\_ to climb Mount Everest was made in 1921, it was not successful. It was on 29th May, 1953, that Edmund Hillary and Tenzing Norgay became the first men to (5)\_\_\_\_\_ the summit of this mountain.

**SubQuestion No : 24**

**Q.24** Select the most appropriate option to fill in blank no. 4.

- Ans
- 1. trial
  - 2. struggle
  - 3. test
  - 4. attempt

Question ID : 65497830089

Status : Answered

Chosen Option : 4

**Comprehension:**

In the following passage, some words have been deleted. Read the passage carefully and select the most appropriate option to fill in each blank.

Mount Everest, a peak in the Himalayan mountain range, is at a height of 8850 metres above sea level and is considered the (1)\_\_\_\_\_ point on earth. While it is called Chomo-Lungma, or "Mother Goddess of the Land," (2)\_\_\_\_\_ the Tibetans, the people of Nepal call it Sagarmatha. The British named the mountain (3)\_\_\_\_\_ Sir George Everest, a 19th-century British surveyor of South Asia. The Everest is believed to be over 60 billion years old. Although the first (4)\_\_\_\_\_ to climb Mount Everest was made in 1921, it was not successful. It was on 29th May, 1953, that Edmund Hillary and Tenzing Norgay became the first men to (5)\_\_\_\_\_ the summit of this mountain.

**SubQuestion No : 25**

**Q.25** Select the most appropriate option to fill in blank no. 5.

- Ans
- 1. gain
  - 2. enter
  - 3. reach
  - 4. realise

Question ID : 65497830090

Status : Answered

Chosen Option : 3

Section : Part D Hindi

**Q.1** दिए गए वाक्यांश के लिए एक शब्द चुनें।

**पूछने योग्य**

- Ans
- 1. योग्य
  - 2. प्रश्न
  - 3. सुयोग्य
  - 4. प्रष्टव्य

Question ID : 65497830091

Status : Not Answered

Chosen Option : --

Q.2 दिए गए वाक्य का वह भाग ज्ञात करें जिसमें कोई त्रुटि है। यदि कोई त्रुटि नहीं है, तो 'कोई त्रुटि नहीं है' चुनें।

मैंने एक वर्ष तक(1)/ उनकी प्रतीक्षा(2)/ देखी।(3)/ कोई त्रुटि नहीं है।(4)

- Ans
- 1. 2
  - 2. 1
  - 3. 3
  - 4. 4

Question ID : 65497830100  
Status : Not Answered  
Chosen Option : --

Q.3 दिए गए वाक्य का वह भाग ज्ञात करें जिसमें कोई त्रुटि है। यदि कोई त्रुटि नहीं है, तो 'कोई त्रुटि नहीं है' चुनें।

शिक्षा का (1)/ माध्यम तो (2)/ हिन्दी ही रहेगा (3)/ कोई त्रुटि नहीं है (4)

- Ans
- 1. 4
  - 2. 1
  - 3. 2
  - 4. 3

Question ID : 65497830094  
Status : Not Answered  
Chosen Option : --

Q.4 'भाड़ झोकना' मुहावरे का सही अर्थ क्या है?

- Ans
- 1. समय व्यर्थ खोना
  - 2. हमला करना
  - 3. गालियाँ देना
  - 4. बहुत श्रम करना

Question ID : 65497830107  
Status : Not Answered  
Chosen Option : --

Q.5 निम्नलिखित शब्दों में शुद्ध वर्तनी को पहचानिए-

- Ans
- 1. अविष्कार
  - 2. अवीष्कार
  - 3. अविषकार
  - 4. आविष्कार

Question ID : 65497830103  
Status : Not Answered  
Chosen Option : --

Q.6 'जिसका भोग करना उचित हो' वाक्यांश के लिए एक शब्द होगा-

- Ans
- 1. भुक्ति
  - 2. भोग्य
  - 3. भोजन
  - 4. भजन

Question ID : 65497830110  
Status : Not Answered  
Chosen Option : --

Q.7 दिए गए वाक्य में रेखांकित खंड को प्रतिस्थापित करने के लिए सबसे उपयुक्त विकल्प का चयन करें। यदि इसे प्रतिस्थापित करने की आवश्यकता नहीं है, तो विकल्प 'किसी बदलाव की आवश्यकता नहीं है' का चयन करें।

दूर रहने वाले लोगों से हम अपनी बात दूरभाष यंत्र में कर सकते हैं।

- Ans
- 1. दूरभाष यंत्र पर कर सकते हैं।
  - 2. दूरभाष यंत्र में कर सकती हैं।
  - 3. किसी बदलाव की आवश्यकता नहीं है।
  - 4. दूरभाष यंत्र द्वारा कर सकते हैं।

Question ID : 65497830093  
Status : Not Answered  
Chosen Option : --

Q.8 दिए गए वाक्य का वह भाग ज्ञात करें जिसमें कोई त्रुटि है। यदि कोई त्रुटि नहीं है, तो 'कोई त्रुटि नहीं है' चुनें।

केवल यहाँ (1)/ दो पुस्तकें (2)/ रखी हैं। (3)/ कोई त्रुटि नहीं है (4)

- Ans
- 1. 2
  - 2. 3
  - 3. 1
  - 4. 4

Question ID : 65497830097  
Status : Not Answered  
Chosen Option : --

Q.9 शुद्ध वर्तनी बताएँ-

- Ans
- 1. मतस्य
  - 2. शौनित
  - 3. शोणित
  - 4. लालशा

Question ID : 65497830104  
Status : Not Answered  
Chosen Option : --

Q.10 दिए गए शब्द के समानार्थी शब्द का चयन करें।

सरस्वती

- Ans
- 1. शुचि
  - 2. ब्राह्मी
  - 3. धवल
  - 4. कान्ता

Question ID : 65497830095  
Status : Not Answered  
Chosen Option : --

Q.11 रिक्त स्थान की पूर्ति के लिए सबसे उपयुक्त शब्द का चयन करें।

भाषा में अभिव्यक्त विचार लिपि की \_\_\_\_\_ से सुरक्षित रहते हैं।

- Ans
- 1. प्रेरणा
  - 2. सहायता
  - 3. दया
  - 4. कृपा

Question ID : 65497830096  
Status : Not Answered  
Chosen Option : --

Q.12 दिये गये वाक्यांश के लिए एक शब्द दीजिये।

आँखों से परे

- Ans
- 1. बहुत दूर
  - 2. प्रत्यक्ष
  - 3. परोक्ष
  - 4. निकट

Question ID : 65497830099  
Status : Not Answered  
Chosen Option : --

Q.13 रिक्त स्थान की पूर्ति के लिए सबसे उपयुक्त शब्द का चयन करें-

उसके पास \_\_\_\_\_ धन है।

- Ans
- 1. प्राप्त
  - 2. अतल
  - 3. पर्याप्त
  - 4. उपयुक्त

Question ID : 65497830092  
Status : Not Answered  
Chosen Option : --

Q.14 दिए गए शब्द का समानार्थी शब्द चुनें-

रंक

- Ans
- 1. राजा
  - 2. दरिद्र
  - 3. वीरांगना
  - 4. रक्त

Question ID : 65497830101  
Status : Not Answered  
Chosen Option : --

Q.15 रिक्त स्थान की पूर्ति के लिए सबसे उपयुक्त शब्द का चयन करें-

सशस्त्र प्रहरी \_\_\_\_\_ की रक्षा कर रहे थे।

- Ans  1. कोष  
 2. कोश  
 3. कुल  
 4. कोस

Question ID : 65497830105  
Status : Not Answered  
Chosen Option : --

Q.16 दिये गये वाक्य में रेखांकित अंश को प्रतिस्थापित करने के लिए सबसे उपयुक्त विकल्प का चयन करें।

अपना दोष दूसरों के सिर क्यों जड़ते हो?

- Ans  1. मढ़ते हो?  
 2. जोड़ते हो?  
 3. करते हो?  
 4. फोड़ते हो?

Question ID : 65497830109  
Status : Not Answered  
Chosen Option : --

Q.17 उस विकल्प का चयन करें जिसमें निम्न मुहावरे का सर्वाधिक उपयुक्त अर्थ दिया गया है।

मुट्टी गर्म करना

- Ans  1. किसी को भड़काना  
 2. रिश्त देना  
 3. बुरी तरह पीटना  
 4. बहुत परेशान करना

Question ID : 65497830102  
Status : Not Answered  
Chosen Option : --

Q.18 दिये गये वाक्य में रेखांकित अंश को प्रतिस्थापित करने के लिए सबसे उपयुक्त विकल्प का चयन करें।

मैं आपके सुखी जीवन की आकांक्षा करता हूँ।

- Ans  1. आराधना  
 2. इच्छा  
 3. वासना  
 4. कामना

Question ID : 65497830108  
Status : Not Answered  
Chosen Option : --

Q.19 दिए गए शब्द का विलोम चुनें।

अंधकार

- Ans
- 1. कालिमा
  - 2. सूर्योदय
  - 3. उजाला
  - 4. प्रकाश

Question ID : 65497830098  
Status : Not Answered  
Chosen Option : --

Q.20 'हास' का विलोम शब्द होगा-

- Ans
- 1. परिहास
  - 2. उपहास
  - 3. रुदन
  - 4. गायन

Question ID : 65497830106  
Status : Not Answered  
Chosen Option : --

**Comprehension:**

दिए गए गद्यांश में से कुछ शब्द हटा दिए गए हैं। संबंधित प्रश्नों में प्रत्येक संख्या के लिए सबसे उपयुक्त विकल्प का चयन करें।

चिकित्सा (1) \_\_\_\_\_ के क्षेत्र में काफी (2) \_\_\_\_\_ हुई है। अनेक (3) \_\_\_\_\_ बीमारियों से छुटकारा मिलने लगा है, उसने (4) \_\_\_\_\_ को सुन्दर और (5) \_\_\_\_\_ बना दिया है।

SubQuestion No : 21

Q.21 गद्यांश के रिक्त स्थान (1) के लिए सर्वाधिक उपयुक्त शब्द होगा-

- Ans
- 1. संगीत
  - 2. कला
  - 3. विज्ञान
  - 4. साहित्य

Question ID : 65497830112  
Status : Not Answered  
Chosen Option : --

**Comprehension:**

दिए गए गद्यांश में से कुछ शब्द हटा दिए गए हैं। संबंधित प्रश्नों में प्रत्येक संख्या के लिए सबसे उपयुक्त विकल्प का चयन करें।

चिकित्सा (1) \_\_\_\_\_ के क्षेत्र में काफी (2) \_\_\_\_\_ हुई है। अनेक (3) \_\_\_\_\_ बीमारियों से छुटकारा मिलने लगा है, उसने (4) \_\_\_\_\_ को सुन्दर और (5) \_\_\_\_\_ बना दिया है।

SubQuestion No : 22

Q.22 गद्यांश के रिक्त स्थान (2) के लिए सर्वाधिक उपयुक्त शब्द होगा-

- Ans
- 1. गिरावट
  - 2. प्रगति
  - 3. भ्रमणशील
  - 4. विषमता

Question ID : 65497830113  
Status : Not Answered  
Chosen Option : --

**Comprehension:**

दिए गए गद्यांश में से कुछ शब्द हटा दिए गए हैं। संबंधित प्रश्नों में प्रत्येक संख्या के लिए सबसे उपयुक्त विकल्प का चयन करें।

चिकित्सा (1) \_\_\_\_\_ के क्षेत्र में काफी (2) \_\_\_\_\_ हुई है। अनेक (3) \_\_\_\_\_ बीमारियों से छुटकारा मिलने लगा है, उसने (4) \_\_\_\_\_ को सुन्दर और (5) \_\_\_\_\_ बना दिया है।

**SubQuestion No : 23**

**Q.23** गद्यांश के रिक्त स्थान (3) के लिए सर्वाधिक उपयुक्त शब्द होगा-

- Ans**  1. जानलेवा  
 2. आकर्षक  
 3. सरल  
 4. आसान

Question ID : **65497830114**  
Status : **Not Answered**  
Chosen Option : --

**Comprehension:**

दिए गए गद्यांश में से कुछ शब्द हटा दिए गए हैं। संबंधित प्रश्नों में प्रत्येक संख्या के लिए सबसे उपयुक्त विकल्प का चयन करें।

चिकित्सा (1) \_\_\_\_\_ के क्षेत्र में काफी (2) \_\_\_\_\_ हुई है। अनेक (3) \_\_\_\_\_ बीमारियों से छुटकारा मिलने लगा है, उसने (4) \_\_\_\_\_ को सुन्दर और (5) \_\_\_\_\_ बना दिया है।

**SubQuestion No : 24**

**Q.24** गद्यांश के रिक्त स्थान (4) के लिए सर्वाधिक उपयुक्त शब्द होगा-

- Ans**  1. अस्पताल  
 2. जीवन  
 3. कर्मचारी  
 4. डॉक्टर

Question ID : **65497830115**  
Status : **Not Answered**  
Chosen Option : --

**Comprehension:**

दिए गए गद्यांश में से कुछ शब्द हटा दिए गए हैं। संबंधित प्रश्नों में प्रत्येक संख्या के लिए सबसे उपयुक्त विकल्प का चयन करें।

चिकित्सा (1) \_\_\_\_\_ के क्षेत्र में काफी (2) \_\_\_\_\_ हुई है। अनेक (3) \_\_\_\_\_ बीमारियों से छुटकारा मिलने लगा है, उसने (4) \_\_\_\_\_ को सुन्दर और (5) \_\_\_\_\_ बना दिया है।

**SubQuestion No : 25**

**Q.25** गद्यांश के रिक्त स्थान (5) के लिए सर्वाधिक उपयुक्त शब्द होगा-

- Ans**  1. छोटा  
 2. कल्पनाशील  
 3. दीघ  
 4. लघु

Question ID : **65497830116**  
Status : **Not Answered**  
Chosen Option : --