

Constable GD in CAPFs NIA SSF and Rifleman GD in Assam Rifles Examination 2021

| | |
|----------------|--|
| Roll Number | www.GovtJobsAlert.In |
| Candidate Name | www.GovtJobsAlert.In |
| Venue Name | Info Educomonline Solution |
| Exam Date | 17/11/2021 |
| Exam Time : | 4:00 PM - 5:30 PM |
| Subject | Constable GD 2021 |

Section : Part A General Intelligence and Reasoning

Q.1 What is the difference between the compound interest on ₹40,000 at 20% per annum compounded half-yearly and compounded quarterly for a period of one year?

- Ans
- 1. ₹320.25
 - 2. ₹220.25
 - 3. ₹8,400
 - 4. ₹8,620.25

Question ID : 65497832156
Status : Answered
Chosen Option : 2

Q.2 In a certain code language, HIDDEN is written as IJECDM. How will FELLOW be written as in that language?

- Ans
- 1. GFMKNV
 - 2. EDKGNU
 - 3. EDKMPZ
 - 4. GFMMPZ

Question ID : 65497832153
Status : Answered
Chosen Option : 1

Q.3 If 'white' is called 'black', 'black' is called 'grey', 'grey' is called 'red', 'red' is called 'green', 'green' is called 'blue' and 'blue' is called 'yellow', then what will be the colour of 'Stop' signal light?

- Ans
- 1. Grey
 - 2. Yellow
 - 3. Blue
 - 4. Green

Question ID : 65497832172
Status : Answered
Chosen Option : 4

Q.4 Study the given pattern carefully and select the number that can replace the question mark (?) in it.

15 30 33
16 26 19
62 122 ?

Ans 1. 104

2. 124

3. 128

4. 117

Question ID : **65497832155**
Status : **Answered**
Chosen Option : **2**

Q.5 In a certain code language, 'TWO' is coded as '3' and 'FIVE' is coded as '4'. How will 'EIGHT' be coded in that language?

Ans 1. 7

2. 9

3. 5

4. 8

Question ID : **65497832164**
Status : **Answered**
Chosen Option : **3**

Q.6 'Printer' is related to 'Hardware' in the same way as 'Web Browser' is related to _____.

Ans 1. Google Chrome

2. Windows

3. Operating System

4. Software

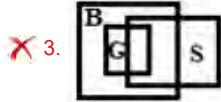
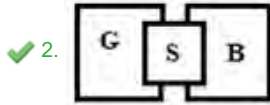
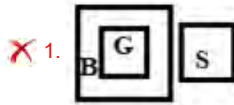
Question ID : **65497832168**
Status : **Answered**
Chosen Option : **4**

Q.7 Select the Venn diagram that best represents the relationship between the following classes.

Girls, Boys, Students

(G: Girls; B: Boys; S: Students)

Ans



Question ID : 65497832170

Status : Answered

Chosen Option : 2

Q.8 'P × Q' means 'P is the wife of Q'. 'P + Q' means 'P is the father of Q'. 'P ÷ Q' means 'P is the daughter of Q'. 'P - Q' means 'P is the son of Q'. How is E related to I in the expression 'E ÷ F + G - H ÷ I'?

Ans

1. Sister

2. Grandson

3. Daughter-in-law

4. Granddaughter

Question ID : 65497832173

Status : Answered

Chosen Option : 4

Q.9 Select the option that is related to the third number in the same way as the second number is related to the first number.

15 : 231 :: 16 : ?

Ans

1. 256

2. 260

3. 251

4. 262

Question ID : 65497832159

Status : Answered

Chosen Option : 4

Q.10 Eleven people are sitting across a rectangular table. Four persons are sitting on each longest side of the table. Boss is sitting alone at one side of the table. N and O are sitting beside each other on one of the shortest side of table. H is sitting opposite to E and between G and N. A is sitting opposite to C and between M and D. B is opposite to D and between C and G. F is sitting opposite to G. Who among them is a Boss?

- Ans
- 1. M
 - 2. A
 - 3. F
 - 4. G

Question ID : **65497832158**
Status : **Answered**
Chosen Option : **1**

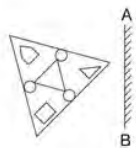
Q.11 Select the combination of letters that when sequentially placed in the blanks of the given series will complete the series.

T _ D S _ R _ S T R D _ T _ D S _ R _ S

- Ans
- 1. R T D S R T D
 - 2. D T D S S T
 - 3. D T R S R T D
 - 4. R T D T R D T

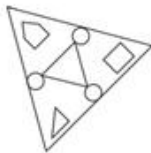
Question ID : **65497832150**
Status : **Answered**
Chosen Option : **1**

Q.12 Select the correct mirror image of the given figure when the mirror is placed at 'AB' as shown.



Ans

1.



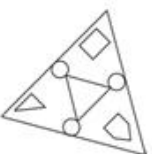
2.



3.



4.



Question ID : **65497832166**
Status : **Answered**
Chosen Option : **2**

Q.13 Select the number from among the given options that can replace the question mark (?) in the following series.

37, 41, 50, 66, ?

Ans

1. 91

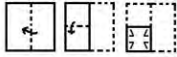
2. 97

3. 101

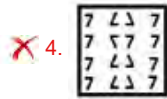
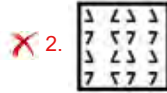
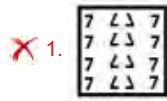
4. 85

Question ID : **65497832165**
Status : **Answered**
Chosen Option : **1**

Q.14 The sequence of folding a piece of paper and the manner in which the folded paper has been cut is shown in the following figures. How would this paper look when unfolded?



Ans



Question ID : 65497832157

Status : Answered

Chosen Option : 3

Q.15 Read the given statements and conclusions carefully. Assuming that the information given in the statements is true, even if it appears to be at variance with commonly known facts, decide which of the given conclusions logically follow(s) from the statements.

Statements:

1. All flowers are tulips.
2. No tulips are whites.

Conclusions:

- I. All tulips are flowers.
- II. Some tulips are whites.

Ans 1. Both the conclusions follow.

2. Only conclusion I follows.

3. Only conclusion II follows.

4. Neither conclusion I nor conclusion II follows.

Question ID : 65497832154

Status : Answered

Chosen Option : 4

Q.16 Select the number from among the given options that can replace the question mark (?) in the following series.

128, 109, ?, 77, 64, 53, 44

Ans 1. 92

2. 81

3. 88

4. 100

Question ID : 65497832151

Status : Answered

Chosen Option : 1

Q.17 Six people, F, G, H, I, J and K, are standing opposite to each other in a circle, facing towards the centre. F and G are adjacent to each other. F and K are opposite to each other. H is opposite to I. J is opposite to G. K is second to the left of H. Who is standing between F and I?

- Ans
- 1. H
 - 2. G
 - 3. K
 - 4. J

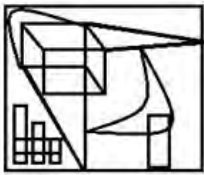
Question ID : 65497832169
Status : Answered
Chosen Option : 2

Q.18 Four letter-clusters have been given, out of which three are alike in some manner and one is different. Select the letter-cluster that is different.

- Ans
- 1. YUSR
 - 2. GDBA
 - 3. ZWUT
 - 4. IFDC

Question ID : 65497832163
Status : Answered
Chosen Option : 1

Q.19 Select the option that is embedded in the given figure (rotation is NOT allowed).



- Ans
- 1.
 - 2.
 - 3.
 - 4.

Question ID : 65497832162
Status : Answered
Chosen Option : 1

Q.20 Select the option that is related to the third letter-cluster in the same way as the second letter-cluster is related to the first letter-cluster.

FEW : GYH :: YOU : ?

- Ans 1. AQW
 2. WQA
 3. QWA
 4. QAW

Question ID : 65497832171
Status : Answered
Chosen Option : 3

Q.21 Select the letter-cluster from among the given options that can replace the question mark (?) in the following series.

BFI, EIL, HLO, KOR, ?

- Ans 1. LPS
 2. HNM
 3. QSV
 4. NRU

Question ID : 65497832167
Status : Answered
Chosen Option : 4

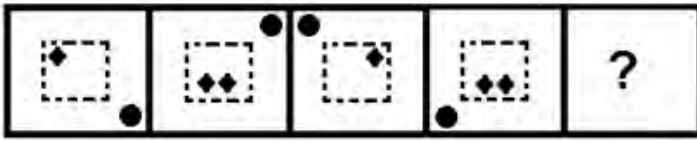
Q.22 If 'P' denotes 'addition', 'D' denotes 'subtraction', 'S' denotes 'multiplication', and 'V' denotes 'division', then what will be the value of the following expression?

15 S 2 P 2 (11 S 2) D 75 V 15 D 4 (9 S 4)

- Ans 1. 75
 2. 85
 3. -85
 4. -75

Question ID : 65497832160
Status : Answered
Chosen Option : 4

Q.23 Select the figure that will come next in the following figure series.

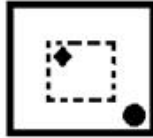


Ans


1.




2.



3.

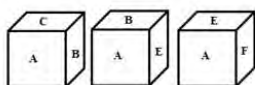


4.

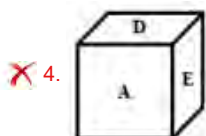
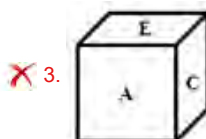
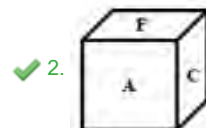
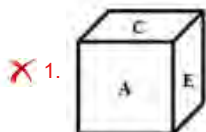


Question ID : 65497832152
Status : Answered
Chosen Option : 2

Q.24 A dice is thrown three times. Its different positions are as shown. Select its next possible position from the given options.



Ans



Question ID : **65497832161**
 Status : **Answered**
 Chosen Option : **2**

Q.25 Select the correct option that indicates the arrangement of the given words in the order in which they appear in an English dictionary.

1. Manager
2. Manicure
3. Manner
4. Mammal
5. Mandible

Ans 1. 4, 1, 5, 3, 2

2. 1, 4, 5, 2, 3

3. 4, 1, 5, 2, 3

4. 3, 4, 2, 1, 5

Question ID : **65497832149**
 Status : **Answered**
 Chosen Option : **3**

Section : **Part B General Knowledge and General Awareness**

Q.1 Who among the following won the Men's Singles event at the US Open 2020?

- Ans** 1. Alexander Zverev
 2. Dominic Thiem
 3. Bruno Soares
 4. Novak Djokovic

Question ID : **65497832174**
Status : **Answered**
Chosen Option : **4**

Q.2 The National Commission for Backward Classes Act, 1993, was repealed by The National Commission for Backward Classes (Repeal) Act in the year ____.

- Ans** 1. 2018
 2. 2017
 3. 2016
 4. 2019

Question ID : **65497832197**
Status : **Not Answered**
Chosen Option : **--**

Q.3 Who among the following cricketers won the Orange Cap in the Indian Premier League (IPL) 2020?

- Ans** 1. KL Rahul
 2. MS Dhoni
 3. Jimmy Neesham
 4. Virat Kohli

Question ID : **65497832194**
Status : **Answered**
Chosen Option : **1**

Q.4 Besides banks, the other formal major source of cheap credit in rural areas, are:

- Ans** 1. friends and relatives
 2. the cooperative societies
 3. zamindars
 4. money lenders

Question ID : **65497832192**
Status : **Answered**
Chosen Option : **2**

Q.5 What is the dominant substance that makes up the hair, nails and the top layer of skin in the human body?

- Ans** 1. Keratin
 2. Laminin
 3. Collagen
 4. Fibronectin

Question ID : 65497832175
Status : Answered
Chosen Option : 1

Q.6 The last Mughal Emperor Bahadur Shah Zafar was imprisoned in Rangoon jail by the British in the year _____.

- Ans** 1. 1826
 2. 1858
 3. 1862
 4. 1885

Question ID : 65497832196
Status : Answered
Chosen Option : 2

Q.7 Mahashay Dharampal Gulati, who passed away in December 2020, was the owner of iconic spice brand _____.

- Ans** 1. MDH
 2. Badshah
 3. Catch
 4. Everest

Question ID : 65497832188
Status : Answered
Chosen Option : 1

Q.8 A sphygmomanometer is used to measure which of the following?

- Ans** 1. Humidity
 2. Wind
 3. Electric current
 4. Blood pressure

Question ID : 65497832182
Status : Answered
Chosen Option : 4

Q.9 When did the Transgender Persons (Protection of Rights) Act, 2019 come into effect?

- Ans 1. January 2020
 2. June 2020
 3. March 2020
 4. December 2019

Question ID : 65497832190
Status : Not Answered
Chosen Option : --

Q.10 The book 'Kashmir's Untold Story: Declassified' was written by:

- Ans 1. Nandita Haksar and Arundhati Roy
 2. Iqbal Chand Malhotra and Maroof Raza
 3. C Uday Bhaskar and GD Bakshi
 4. Karan Thapar and Shobhaa De

Question ID : 65497832184
Status : Not Answered
Chosen Option : --

Q.11 _____ tax is imposed on transactions that have a negative externality; for example, pollution.

- Ans 1. Tobin
 2. Customs
 3. CTT
 4. Pigovian

Question ID : 65497832185
Status : Not Answered
Chosen Option : --

Q.12 As per Census 2011 which one of the following states does NOT fall in the Empowered Action Group (EAG) states?

- Ans 1. Punjab
 2. Rajasthan
 3. Bihar
 4. Jharkhand

Question ID : 65497832178
Status : Answered
Chosen Option : 4

Q.13 When is the Indian Armed Forces Veterans Day observed annually?

- Ans 1. 15 July
 2. 5 December
 3. 26 October
 4. 14 January

Question ID : 65497832191
Status : Answered
Chosen Option : 1

Q.14 Babur defeated Ibrahim Lodi and captured Delhi and Agra in the year ____.

- Ans 1. 1694
 2. 1372
 3. 1526
 4. 1467

Question ID : 65497832195
Status : Answered
Chosen Option : 3

Q.15 Which of the following chemicals is used to cause artificial rain (cloud seeding)?

- Ans 1. Hydrogen bromide
 2. Silver oxide
 3. Aluminium sulphide
 4. Silver iodide

Question ID : 65497832183
Status : Answered
Chosen Option : 4

Q.16 Which among the following terms denotes to the hilly parts of the Karnataka plateau?

- Ans 1. Buggyals
 2. Bets
 3. Malnad
 4. Terai

Question ID : 65497832187
Status : Not Answered
Chosen Option : --

Q.17 Which of the following states is associated with the dance drama folk theatre form 'Yakshagana'?

- Ans 1. Telangana
 2. Andhra Pradesh
 3. Karnataka
 4. Kerala

Question ID : 65497832181
Status : Answered
Chosen Option : 1

Q.18 In which of the following years was the Buddhist Chanting of Ladakh included in the UNESCO'S list of intangible cultural heritage?

- Ans 1. 2016
 2. 2013
 3. 2012
 4. 2014

Question ID : 65497832186
Status : Not Answered
Chosen Option : --

Q.19 Jwala Gutta is an Indian professional _____ player.

- Ans 1. badminton
 2. tennis
 3. table tennis
 4. football

Question ID : 65497832189
Status : Not Answered
Chosen Option : --

Q.20 The statutory power for exchange control was provided to Reserve Bank of India by the Foreign Exchange Regulation Act (FERA) of _____, which was subsequently replaced by a more comprehensive Foreign Exchange Regulation Act, 1973.

- Ans 1. 1953
 2. 1963
 3. 1947
 4. 1967

Question ID : 65497832179
Status : Not Answered
Chosen Option : --

Q.21 The Battle of Kohima was fought in 1944 between:

- Ans 1. Imperial Japanese forces and British Indian forces
 2. Chinese forces and British Indian forces
 3. Royal Burmese Army and British Indian Army
 4. Japanese forces and Communist Chinese forces

Question ID : 65497832180
Status : Answered
Chosen Option : 3

Q.22 Which of the following statements is NOT true regarding 'Spring tides'?

- Ans 1. These tides are the lowest.
 2. These tides occur on new moon days.
 3. These tides occur during full moon days.
 4. These tides are the highest.

Question ID : 65497832193
Status : Not Answered
Chosen Option : --

Q.23 Which of the following dynasties was NOT a part of the Delhi Sultanate?

- Ans 1. Lodhi
 2. Khilji
 3. Slave
 4. Sur

Question ID : 65497832176
Status : Answered
Chosen Option : 4

Q.24 Which of the following states announced the setting up of a 'Gau Cabinet' in November 2020 for the protection and promotion of cattle?

- Ans**
- 1. Bihar
 - 2. Madhya Pradesh
 - 3. Chhattisgarh
 - 4. Uttar Pradesh

Question ID : 65497832198
Status : Answered
Chosen Option : 4

Q.25 _____ became the first Indian to win a singles match at the US Open in seven years in September 2020.

- Ans**
- 1. Divij Sharan
 - 2. Sumit Nagal
 - 3. Yuki Bhambri
 - 4. Purav Raja

Question ID : 65497832177
Status : Answered
Chosen Option : 2

Section : **Part C Elementary Mathematics**

Q.1 What is the difference between the compound interest on ₹3,000 for 1 year at 5% per annum compounded yearly and that compounded half-yearly?

- Ans**
- 1. ₹ $1\frac{13}{15}$
 - 2. ₹ $1\frac{7}{8}$
 - 3. ₹ $1\frac{6}{7}$
 - 4. ₹ $1\frac{22}{25}$

Question ID : 65497832219
Status : Answered
Chosen Option : 2

Q.2 By selling 40 dozen bananas for ₹1,440, a man gains 20%. In order to gain 30%, for how much should he sell 20 dozen bananas?

- Ans**
- 1. ₹720
 - 2. ₹1,560
 - 3. ₹936
 - 4. ₹780

Question ID : 65497832199
Status : Answered
Chosen Option : 4

Q.3 If the height of a right circular cone is 24 m and its slant height is 30 m, then what is the area of its curved surface?

(Use $\pi = \frac{22}{7}$)

- Ans**
- 1. 1778.654 m²
 - 2. 1267.435 m²
 - 3. 1697.143 m²
 - 4. 1377.423 m²

Question ID : 65497832220
Status : Answered
Chosen Option : 3

Q.4 By selling an article for ₹254.38, there is a gain of 10.6%. If it is sold for ₹224.25, then the loss/gain percentage will be:

- Ans**
- 1. loss, 2.5%
 - 2. loss, 5%
 - 3. gain, 2.5%
 - 4. gain, 5%

Question ID : 65497832222
Status : Answered
Chosen Option : 1

Q.5 The average weight of 6 persons increases by 1.5 kg when a new person comes in place of one of them who was weighing 65 kg. What is the weight of the new person?

- Ans**
- 1. 75.5 kg
 - 2. 74 kg
 - 3. 66.5 kg
 - 4. 76 kg

Question ID : 65497832212
Status : Answered
Chosen Option : 2

Q.6 Akhil drives a car from his home to office at an average speed of 50 km/h and reaches office 10 minutes early. But one day due to some problem with the car, he could drive at an average speed of 30 km/h only and reached office 10 minutes late. How far is his office from home?

- Ans**
- 1. 25 km
 - 2. 37.5 km
 - 3. 12.5 km
 - 4. 30 km

Question ID : 65497832202
Status : Answered
Chosen Option : 1

Q.7 During a flight of 900 km, an aircraft was slowed down due to bad weather. Its average speed for the trip was reduced by 300 km/h and the time of flight increased by 30 min. The original duration of the flight was:

- Ans**
- 1. $3/2$ h
 - 2. 2 h
 - 3. 1 h
 - 4. 3 h

Question ID : **65497832216**
 Status : **Answered**
 Chosen Option : **3**

Q.8 The amount obtained by investing a certain sum at $r\%$ p.a. for 3 years at simple interest is equal to the simple interest on the same sum at the same rate for 19 years. What is the value of r ?

- Ans**
- 1. 4
 - 2. 5.75
 - 3. 6.25
 - 4. 8

Question ID : **65497832208**
 Status : **Answered**
 Chosen Option : **3**

Q.9 The value of $3 \times 4 \div 3$ of $24 - 3 \div 2 \times (3 - 4) \times 2 + 6 \div 4$ of 3 is:

- Ans**
- 1. $-2\frac{1}{3}$
 - 2. $3\frac{2}{3}$
 - 3. $2\frac{1}{3}$
 - 4. $-3\frac{2}{3}$

Question ID : **65497832221**
 Status : **Answered**
 Chosen Option : **2**

Q.10 A trader purchased 360 packets of pencils at the rate of ₹15 per packet. He sold 60% of the packets at the rate of ₹18 per packet and the remaining packets at the rate of ₹20 per packet. What is his gain per cent (up to one decimal place) in this transaction?

- Ans**
- 1. 25.4
 - 2. 25.5
 - 3. 25.3
 - 4. 25.2

Question ID : **65497832217**
 Status : **Answered**
 Chosen Option : **3**

Q.11 If 80% of $\frac{3}{4}$ of a number is 63, then the number is:

- Ans**
- 1. 115
 - 2. 105
 - 3. 110
 - 4. 95

Question ID : **65497832214**
Status : **Answered**
Chosen Option : **2**

Q.12 Rameshwar deposited a part of ₹3,28,000 in a bank in the name of his daughter aged 18 years, and the balance in the name of his son aged 19 years in such a way that they both receive equal amounts when they become 21 years of age. If the bank gives compound interest at 5% per annum, then how much did he invest in the name of his daughter?

- Ans**
- 1. ₹1,57,000
 - 2. ₹1,60,000
 - 3. ₹1,58,000
 - 4. ₹1,56,000

Question ID : **65497832200**
Status : **Not Answered**
Chosen Option : --

Q.13 Pipes A and B can empty a full tank in 16 hours and 24 hours, respectively. Pipe C alone can fill the empty tank in 4 hours. If A, B and C are opened together, the tank will be 35% full after:

- Ans**
- 1. $2\frac{1}{5}$ hours
 - 2. $2\frac{2}{5}$ hours
 - 3. $3\frac{1}{5}$ hours
 - 4. $3\frac{2}{5}$ hours

Question ID : **65497832223**
Status : **Answered**
Chosen Option : **2**

Q.14 The ratio of the number of men and women in a company is 5 : 4. If the number of men and women increase by 16% and 15%, respectively, then what will be the new ratio of men and women?

- Ans**
- 1. 23 : 29
 - 2. 29 : 23
 - 3. 33 : 29
 - 4. 29 : 33

Question ID : **65497832218**
Status : **Answered**
Chosen Option : **2**

Q.15 If a 10-digit number $643x1145y2$ is divisible by 88, then the value of $(2x - 3y)$ for the largest value of y is:

- Ans**
- 1. 15
 - 2. 27
 - 3. -27
 - 4. -15

Question ID : 65497832203
Status : Answered
Chosen Option : 4

Q.16 What number must be added to each of the numbers 15, 9 and 5 so that the resulting numbers may be in a continued proportion?

- Ans**
- 1. 4
 - 2. 2
 - 3. 5
 - 4. 3

Question ID : 65497832210
Status : Answered
Chosen Option : 4

Q.17 Two numbers X and Y are such that the sum of 3% of X and 2% of Y is two-third of the sum of 2% of X and 6% of Y. The ratio of three times of X to two times of Y is:

- Ans**
- 1. 3 : 4
 - 2. 5 : 9
 - 3. 9 : 5
 - 4. 4 : 3

Question ID : 65497832204
Status : Answered
Chosen Option : 3

Q.18 Two successive discounts, with the first being 10%, were given on an article having the marked price of ₹7,500. Finally, it was sold for ₹5,805. What per cent was the second discount?

- Ans**
- 1. 16%
 - 2. 15%
 - 3. 14%
 - 4. 12%

Question ID : 65497832209
Status : Answered
Chosen Option : 4

Q.19 If the number 6523678pq is divisible by 99, the missing digits p and q are:

- Ans**
- 1. $p = 3, q = 5$
 - 2. $p = 4, q = 4$
 - 3. $p = 2, q = 6$
 - 4. $p = 6, q = 2$

Question ID : 65497832205
Status : Answered
Chosen Option : 3

Q.20 If the selling price of an article is ₹900 and the discount is 40%, then find its marked price (in ₹).

- Ans**
- 1. 1,200
 - 2. 1,500
 - 3. 800
 - 4. 1,600

Question ID : 65497832213
Status : Answered
Chosen Option : 2

Q.21 The average of seven consecutive positive integers is 259. If the next five odd numbers are included, then what is the average of all the numbers (correct to two decimal places)?

- Ans**
- 1. 262.33
 - 2. 267.89
 - 3. 259.68
 - 4. 260.74

Question ID : 65497832206
Status : Not Answered
Chosen Option : --

Q.22 The area of the floor of a cubical room is 192 m^2 . The length of the longest rod that can be kept in that room is:

- Ans**
- 1. 22 m
 - 2. 24 m
 - 3. 26 m
 - 4. 18 m

Question ID : 65497832211
Status : Not Answered
Chosen Option : --

Q.23 A, B and C can complete a work in 60, 30 and 20 days, respectively. In how many days can A complete the work if he is assisted by B and C together on every fifth day?

- Ans**
- 1. 15
 - 2. 30
 - 3. 35
 - 4. 25

Question ID : **65497832215**
 Status : **Not Answered**
 Chosen Option : --

Q.24 Simplify the following expression.

$$\frac{312 \div 26 + 60 \div (42 - 55 \text{ of } 4 \div 10) \times 2}{9 + (12 - 2 \text{ of } 4)}$$

- Ans**
- 1. $1\frac{5}{13}$
 - 2. $\frac{144}{169}$
 - 3. $\frac{6}{169}$
 - 4. $1\frac{1}{26}$

Question ID : **65497832201**
 Status : **Not Answered**
 Chosen Option : --

Q.25 When x is subtracted from each of 43, 38, 11 and 10, then the numbers so obtained in this order are in proportion. What is the mean proportional between $(11x + 3)$ and $(9x - 2)$?

- Ans**
- 1. 20
 - 2. 30
 - 3. 25
 - 4. 35

Question ID : **65497832207**
 Status : **Not Answered**
 Chosen Option : --

Section : **Part D English**

Q.1 Select the most appropriate **ANTONYM** of the given word.

Hesitate

- Ans**
- 1. Delay
 - 2. Waver
 - 3. Advance
 - 4. Falter

Question ID : **65497832237**
Status : **Not Answered**
Chosen Option : --

Q.2 Select the option that can be used as a substitute for the given group of words.

Hair of animals, which is soft and used for making wool

- Ans**
- 1. Fur
 - 2. Kenosis
 - 3. Grizzly hair
 - 4. Bristles

Question ID : **65497832235**
Status : **Not Answered**
Chosen Option : --

Q.3 Select the option that can be used as a one-word substitute for the given group of words.

Break or fall apart into small fragments in the process of deterioration

- Ans**
- 1. Slump
 - 2. Sag
 - 3. Collapse
 - 4. Crumble

Question ID : **65497832226**
Status : **Not Answered**
Chosen Option : --

Q.4 Select the **INCORRECTLY** spelt word.

- Ans**
- 1. Rotate
 - 2. Rotten
 - 3. Robbery
 - 4. Round

Question ID : **65497832227**
Status : **Not Answered**
Chosen Option : --

Q.5 Select the most appropriate meaning of the given idiom.

To break new ground

- Ans** 1. To innovate or pioneer
 2. To disturb or interrupt
 3. To start digging somewhere else
 4. To look for a new building

Question ID : **65497832236**
Status : **Not Answered**
Chosen Option : --

Q.6 Select the option that can be used as a one-word substitute for the given group of words.

A large number of fish swimming together

- Ans** 1. Herd
 2. Gaggle
 3. Pride
 4. Shoal

Question ID : **65497832243**
Status : **Not Answered**
Chosen Option : --

Q.7 Select the most appropriate option to fill in the blank.

The teacher asked us to write our answers _____.

- Ans** 1. laughably
 2. latently
 3. laudably
 4. legibly

Question ID : **65497832238**
Status : **Not Answered**
Chosen Option : --

Q.8 Select the most appropriate synonym of the given word.

Plead

- Ans** 1. Request
 2. Reply
 3. Repeat
 4. Refuse

Question ID : **65497832242**
Status : **Not Answered**
Chosen Option : --

Q.9 Select the most appropriate ANTONYM of the given word.

Detest

- Ans 1. Adore
 2. Hate
 3. Reject
 4. Abhor

Question ID : 65497832225
Status : Not Answered
Chosen Option : --

Q.10 The following sentence has been divided into parts. One of them may contain an error. Select the part that contains the error from the given options. If you don't find any error, mark 'No error' as your answer.

Kavya didn't wanted / any help / in painting.

- Ans 1. Kavya didn't wanted
 2. in painting
 3. No error
 4. any help

Question ID : 65497832228
Status : Not Answered
Chosen Option : --

Q.11 Select the most appropriate option that can substitute the underlined segment in the given sentence. If there is no need to substitute it, select 'No substitution required'.

The inmates of the house are sleep when the thief entered.

- Ans 1. were sleeping
 2. No substitution required
 3. are sleeping
 4. were sleep

Question ID : 65497832230
Status : Not Answered
Chosen Option : --

Q.12 The following sentence has been divided into parts. One of them may contain an error. Select the part that contains the error from the given options. If you don't find any error, mark 'No error' as your answer.

Please let me know / whether you decide / to come with me.

- Ans 1. whether you decide
 2. to come with me
 3. Please let me know
 4. No error

Question ID : 65497832224
Status : Not Answered
Chosen Option : --

Q.13 Select the correctly spelt word.

- Ans 1. Procedure
 2. Labeling
 3. Precoutions
 4. Precipetation

Question ID : 65497832233
Status : Not Answered
Chosen Option : --

Q.14 Select the most appropriate option that can substitute the underlined segment in the given sentence. If there is no need to substitute it, select 'No substitution required'.

Molly Yvonne didn't know what to do. She was torn apart with conflicting emotions.

- Ans 1. No substitution required
 2. In
 3. By
 4. For

Question ID : 65497832240
Status : Not Answered
Chosen Option : --

Q.15 Select the most appropriate option that can substitute the underlined segment in the given sentence. If there is no need to substitute it, select 'No substitution required'.

The old man was too weak that he couldn't climb the stairs.

- Ans 1. very weak to
 2. so weak to
 3. No substitution required
 4. too weak to

Question ID : 65497832239
Status : Not Answered
Chosen Option : --

Q.16 The following sentence has been split into four segments. Identify the segment that contains a grammatical error.

Shilpi has / a keen interest / of learning / a foreign language.

- Ans 1. a keen interest
 2. of learning
 3. a foreign language
 4. Shilpi has

Question ID : 65497832241
Status : Not Answered
Chosen Option : --

Q.17 Select the most appropriate synonym of the given word.

Cruel

- Ans 1. Polite
 2. Mild
 3. Brutal
 4. Easy

Question ID : 65497832229
Status : Not Answered
Chosen Option : --

Q.18 Select the most appropriate option to fill in the blank.

His condition was so critical that a senior doctor _____ performed the operation.

- Ans 1. myself
 2. itself
 3. yourself
 4. himself

Question ID : 65497832234
Status : Not Answered
Chosen Option : --

Q.19 Select the most appropriate meaning of the given idiom.

To break into tears

- Ans 1. To cry suddenly
 2. To fidget
 3. To panic
 4. To be afraid of

Question ID : 65497832232
Status : Not Answered
Chosen Option : --

Q.20 Select the most appropriate option to fill in the blank.

Music is helpful in improving the _____ of students.

- Ans 1. attraction
 2. transfiguration
 3. solution
 4. concentration

Question ID : 65497832231
Status : Not Answered
Chosen Option : --

Comprehension:

In the following passage, some words have been deleted. Read the passage carefully and select the most appropriate option to fill in each blank.

Once, a man and his son were going into town. (1) _____ wanted to sell some potatoes. They went with (2) _____ donkey, and the donkey (3) _____ the potatoes. While they walked, (4) _____ man came past on a horse. "Shame (5) _____ you!" he said. "Why do you have a donkey, but you don't ride it?"

SubQuestion No : 21

Q.21 Select the most appropriate option to fill in blank number 1.

- Ans
- 1. It
 - 2. He
 - 3. Who
 - 4. They

Question ID : **65497832245**
Status : **Not Answered**
Chosen Option : --

Comprehension:

In the following passage, some words have been deleted. Read the passage carefully and select the most appropriate option to fill in each blank.

Once, a man and his son were going into town. (1) _____ wanted to sell some potatoes. They went with (2) _____ donkey, and the donkey (3) _____ the potatoes. While they walked, (4) _____ man came past on a horse. "Shame (5) _____ you!" he said. "Why do you have a donkey, but you don't ride it?"

SubQuestion No : 22

Q.22 Select the most appropriate option to fill in blank number 2.

- Ans
- 1. one
 - 2. their
 - 3. own
 - 4. his

Question ID : **65497832246**
Status : **Not Answered**
Chosen Option : --

Comprehension:

In the following passage, some words have been deleted. Read the passage carefully and select the most appropriate option to fill in each blank.

Once, a man and his son were going into town. (1) _____ wanted to sell some potatoes. They went with (2) _____ donkey, and the donkey (3) _____ the potatoes. While they walked, (4) _____ man came past on a horse. "Shame (5) _____ you!" he said. "Why do you have a donkey, but you don't ride it?"

SubQuestion No : 23

Q.23 Select the most appropriate option to fill in blank number 3.

- Ans
- 1. carried
 - 2. sold
 - 3. weighed
 - 4. loaded

Question ID : **65497832247**
Status : **Not Answered**
Chosen Option : --

Comprehension:

In the following passage, some words have been deleted. Read the passage carefully and select the most appropriate option to fill in each blank.

Once, a man and his son were going into town. (1) _____ wanted to sell some potatoes. They went with (2) _____ donkey, and the donkey (3) _____ the potatoes. While they walked, (4) _____ man came past on a horse. "Shame (5) _____ you!" he said. "Why do you have a donkey, but you don't ride it?"

SubQuestion No : 24

Q.24 Select the most appropriate option to fill in blank number 4.

- Ans 1. other
 2. a
 3. same
 4. some

Question ID : 65497832248
Status : Not Answered
Chosen Option : --

Comprehension:

In the following passage, some words have been deleted. Read the passage carefully and select the most appropriate option to fill in each blank.

Once, a man and his son were going into town. (1) _____ wanted to sell some potatoes. They went with (2) _____ donkey, and the donkey (3) _____ the potatoes. While they walked, (4) _____ man came past on a horse. "Shame (5) _____ you!" he said. "Why do you have a donkey, but you don't ride it?"

SubQuestion No : 25

Q.25 Select the most appropriate option to fill in blank number 5.

- Ans 1. by
 2. on
 3. at
 4. for

Question ID : 65497832249
Status : Not Answered
Chosen Option : --

Section : **Part D Hindi**

Q.1 कौनसा विलोम युग्म सुमेलित नहीं है?

- Ans 1. अंगीकार-स्वीकार
 2. अधम-उत्तम
 3. अकाम-सकाम
 4. अवनत-उन्नत

Question ID : 65497832252
Status : Answered
Chosen Option : 3

Q.2 सही वर्तनी वाले शब्द का चयन करें।

- Ans 1. इर्ष्यालू
 2. ईष्यालू
 3. ईर्ष्यालु
 4. इषालु

Question ID : 65497832258
Status : Answered
Chosen Option : 3

Q.3 दिए गए वाक्य में रेखांकित खंड को प्रतिस्थापित करने के लिए सबसे उपयुक्त विकल्प का चयन करें।
यदि इसे प्रतिस्थापित करने की आवश्यकता नहीं है, तो विकल्प 'किसी बदलाव की आवश्यकता नहीं है'
का चयन करें।

अच्छे लड़के परिश्रमी होती हैं।

- Ans 1. किसी बदलाव की आवश्यकता नहीं है।
 2. होती है।
 3. होते हैं।
 4. होता है।

Question ID : 65497832255
Status : Answered
Chosen Option : 3

Q.4 दिये गये वाक्य के किस भाग में त्रुटि है?

कवि ने प्रकृति की सुंदर शोभा का वर्णन किया है।

- Ans 1. वर्णन किया है।
 2. कवि ने
 3. प्रकृति की
 4. सुंदर शोभा का

Question ID : 65497832267
Status : Answered
Chosen Option : 3

Q.5 'अंधेर करना' मुहावरे का अर्थ बताइए।

- Ans 1. अन्याय करना
 2. अंधेरा करना
 3. घमंड करना
 4. भ्रष्टाचार करना

Question ID : 65497832260
Status : Answered
Chosen Option : 1

Q.6 'आदर और निरादर करना' यह अर्थ किस मुहावरे का है?

- Ans 1. पान-पानही खिलाना
 2. पान-फूल-सा
 3. पान-पत्ते तक सीमित होना
 4. पान-फूल पर रहना

Question ID : 65497832253
Status : Answered
Chosen Option : 1

Q.7 रिक्त स्थान को भरने के लिए सबसे उपयुक्त शब्द का चयन करें।

पेड़ पर चिड़िया _____ है।

- Ans 1. चहचहाती
 2. हिनहिनाती
 3. कडकती
 4. टिटकारती

Question ID : 65497832256
Status : Answered
Chosen Option : 1

Q.8 दिए गए शब्द के समानार्थी शब्द का चयन करें।

इंद्र

- Ans 1. भगवान
 2. यक्षराज
 3. देवराज
 4. ईश्वर

Question ID : 65497832263
Status : Answered
Chosen Option : 3

Q.9 दिए गए शब्द के समानार्थी शब्द का चयन कीजिए।

तुरंगी

- Ans 1. अस्तबल
 2. घुड़सवार
 3. घुड़साल
 4. घुड़सार

Question ID : 65497832251
Status : Answered
Chosen Option : 2

Q.10 'जो न जाना गया हो' वाक्यांश के लिए एक शब्द होगा-

- Ans 1. अज्ञात
 2. ज्ञात
 3. अनजान
 4. अतिथि

Question ID : 65497832266
Status : Answered
Chosen Option : 1

Q.11 रिक्त स्थान को भरने के लिए सबसे उपयुक्त शब्द का चयन करें।

परिवर्तन _____ का नियम है।

- Ans 1. पृथ्वी
 2. संस्कृति
 3. जगत
 4. प्रकृति

Question ID : 65497832259
Status : Answered
Chosen Option : 3

Q.12 नीचे दिए वाक्य में रिक्त-स्थान भरने के लिए सबसे उपयुक्त शब्द का चयन करें।

बरगद _____ हहरा रहा था।

- Ans 1. झाँप-झाँप
 2. साय-साय
 3. सर-सर
 4. हर-हर

Question ID : 65497832265
Status : Answered
Chosen Option : 2

Q.13 दिए गए वाक्य में रेखांकित खंड को प्रतिस्थापित करने के लिए सबसे उपयुक्त विकल्प का चयन करें।
यदि इसे प्रतिस्थापित करने की आवश्यकता नहीं है, तो विकल्प 'किसी बदलाव की आवश्यकता नहीं है'
का चयन करें।

वह मुझे अनन्तकाल से नहीं मिला।

- Ans 1. चिरकाल से
 2. प्राचीन काल में
 3. पुरातन काल से
 4. किसी बदलाव की आवश्यकता नहीं है।

Question ID : 65497832261
Status : Answered
Chosen Option : 4

Q.14 'दोपहर के बाद का समय' वाक्यांश के लिए एक शब्द होगा-

- Ans 1. अपराह्न
 2. मध्याह्न
 3. गोधूलि
 4. पूर्वाह्न

Question ID : 65497832269
Status : Answered
Chosen Option : 2

Q.15 दिये गये वाक्यांश के लिए एक सार्थक शब्द दीजिए।

जिसकी जीविका निश्चित न हो

- Ans 1. आकाशवृत्ति
 2. खेचर
 3. आत्मघाती
 4. अगोचर

Question ID : 65497832254
Status : Answered
Chosen Option : 2

Q.16 दिए गए वाक्य में रेखांकित खंड को प्रतिस्थापित करने के लिए सबसे उपयुक्त विकल्प का चयन करें।
यदि इसे प्रतिस्थापित करने की आवश्यकता नहीं है, तो विकल्प 'किसी बदलाव की आवश्यकता नहीं है'
का चयन करें।

असली भैंस का दूध बहुत मीठा होता है।

- Ans 1. भैंस का असली दूध
 2. गाय का दूध
 3. भैंस का दूध
 4. किसी बदलाव की आवश्यकता नहीं है।

Question ID : 65497832264
Status : Answered
Chosen Option : 3

Q.17 'उग्र' का विलोम शब्द होगा-

- Ans 1. सरल
 2. सौम्य
 3. प्रखर
 4. कठोर

Question ID : 65497832268
Status : Answered
Chosen Option : 1

Q.18 दिए गए वाक्य का वह भाग ज्ञात करें जिसमें कोई त्रुटि है। यदि कोई त्रुटि नहीं है, तो 'कोई त्रुटि नहीं है' चुनें।

प्रस्तुत पंक्तियाँ (1)/ कामायनी से (2)/ ली हैं। (3)/ कोई त्रुटि नहीं है/ (4)

Ans 1. 2

2. 4

3. 3

4. 1

Question ID : 65497832262

Status : Answered

Chosen Option : 3

Q.19 दिए गए वाक्य का वह भाग ज्ञात करें जिसमें कोई त्रुटि है। यदि कोई त्रुटि नहीं है, तो 'कोई त्रुटि नहीं है' चुनें।

अन्य वर्ष के (1)/ समान इस वर्ष भी (2)/ फसल अच्छी रही। (3)/ कोई त्रुटि नहीं है (4)

Ans 1. 2

2. 1

3. 3

4. 4

Question ID : 65497832250

Status : Answered

Chosen Option : 2

Q.20 सही वर्तनी वाले शब्द का चयन करें।

Ans 1. अदुतीय

2. अद्वितिय

3. अदितीत

4. अद्वितीय

Question ID : 65497832257

Status : Answered

Chosen Option : 4

Comprehension:

मनुष्य शारीरिक कष्ट से ही पीछे हटने वाला (1) _____ नहीं है। मानसिक क्लेश की संभावना से भी बहुत- से कर्मों की ओर प्रवृत्त होने का (2) _____ उसे नहीं होता। जिन बातों से समाज के बीच उपहास, निंदा, (3) _____ इत्यादि का भय रहता है, उन्हें अच्छी और कल्याणकारिणी समझते हुए भी बहुत से लोग उनसे दूर रहते हैं। (4) _____ हानि देखते हुए भी कुछ प्रथाओं का अनुसरण बड़े-बड़े समझदार तक इसलिए करते चलते हैं कि उनके त्याग से वे बुरे कहे जाएँगे; लोगों में उनका वैसा आदर - सम्मान न रह जाएगा। उसके लिए मान-ग्लानि का कष्ट सब शारीरिक (5) _____ से बढ़कर होता है।

निम्न प्रश्नों के उत्तर उपरोक्त गद्यांश के आधार पर दीजिए।

SubQuestion No : 21

Q.21 गद्यांश के रिक्त स्थान (1) के लिए सर्वाधिक उपयुक्त शब्द होगा-

- Ans
- 1. जलचर
 - 2. जानवर
 - 3. प्राणी
 - 4. नभचर

Question ID : 65497832271
Status : Answered
Chosen Option : 3

Comprehension:

मनुष्य शारीरिक कष्ट से ही पीछे हटने वाला (1) _____ नहीं है। मानसिक क्लेश की संभावना से भी बहुत- से कर्मों की ओर प्रवृत्त होने का (2) _____ उसे नहीं होता। जिन बातों से समाज के बीच उपहास, निंदा, (3) _____ इत्यादि का भय रहता है, उन्हें अच्छी और कल्याणकारिणी समझते हुए भी बहुत से लोग उनसे दूर रहते हैं। (4) _____ हानि देखते हुए भी कुछ प्रथाओं का अनुसरण बड़े-बड़े समझदार तक इसलिए करते चलते हैं कि उनके त्याग से वे बुरे कहे जाएँगे; लोगों में उनका वैसा आदर - सम्मान न रह जाएगा। उसके लिए मान-ग्लानि का कष्ट सब शारीरिक (5) _____ से बढ़कर होता है।

निम्न प्रश्नों के उत्तर उपरोक्त गद्यांश के आधार पर दीजिए।

SubQuestion No : 22

Q.22 गद्यांश के रिक्त स्थान (2) के लिए सर्वाधिक उपयुक्त शब्द होगा-

- Ans
- 1. हिम्मत
 - 2. साहस
 - 3. दुस्साहस
 - 4. प्रयास

Question ID : 65497832272
Status : Answered
Chosen Option : 3

Comprehension:

मनुष्य शारीरिक कष्ट से ही पीछे हटने वाला (1) _____ नहीं है। मानसिक क्लेश की संभावना से भी बहुत- से कर्मों की ओर प्रवृत्त होने का (2) _____ उसे नहीं होता। जिन बातों से समाज के बीच उपहास, निंदा, (3) _____ इत्यादि का भय रहता है, उन्हें अच्छी और कल्याणकारिणी समझते हुए भी बहुत से लोग उनसे दूर रहते हैं। (4) _____ हानि देखते हुए भी कुछ प्रथाओं का अनुसरण बड़े-बड़े समझदार तक इसलिए करते चलते हैं कि उनके त्याग से वे बुरे कहे जाएँगे; लोगों में उनका वैसा आदर - सम्मान न रह जाएगा। उसके लिए मान-ग्लानि का कष्ट सब शारीरिक (5) _____ से बढ़कर होता है।

निम्न प्रश्नों के उत्तर उपरोक्त गद्यांश के आधार पर दीजिए।

SubQuestion No : 23

Q.23 गद्यांश के रिक्त स्थान (3) के लिए सर्वाधिक उपयुक्त शब्द होगा-

- Ans 1. स्तुति
 2. अपमान
 3. सम्मान
 4. यश

Question ID : 65497832273
Status : Answered
Chosen Option : 2

Comprehension:

मनुष्य शारीरिक कष्ट से ही पीछे हटने वाला (1) _____ नहीं है। मानसिक क्लेश की संभावना से भी बहुत- से कर्मों की ओर प्रवृत्त होने का (2) _____ उसे नहीं होता। जिन बातों से समाज के बीच उपहास, निंदा, (3) _____ इत्यादि का भय रहता है, उन्हें अच्छी और कल्याणकारिणी समझते हुए भी बहुत से लोग उनसे दूर रहते हैं। (4) _____ हानि देखते हुए भी कुछ प्रथाओं का अनुसरण बड़े-बड़े समझदार तक इसलिए करते चलते हैं कि उनके त्याग से वे बुरे कहे जाएँगे; लोगों में उनका वैसा आदर - सम्मान न रह जाएगा। उसके लिए मान-ग्लानि का कष्ट सब शारीरिक (5) _____ से बढ़कर होता है।

निम्न प्रश्नों के उत्तर उपरोक्त गद्यांश के आधार पर दीजिए।

SubQuestion No : 24

Q.24 गद्यांश के रिक्त स्थान (4) के लिए सर्वाधिक उपयुक्त शब्द होगा-

- Ans 1. परोक्ष
 2. भीषण
 3. भयंकर
 4. प्रत्यक्ष

Question ID : 65497832274
Status : Answered
Chosen Option : 4

Comprehension:

मनुष्य शारीरिक कष्ट से ही पीछे हटने वाला (1) _____ नहीं है। मानसिक क्लेश की संभावना से भी बहुत- से कर्मों की ओर प्रवृत्त होने का (2) _____ उसे नहीं होता। जिन बातों से समाज के बीच उपहास, निंदा, (3) _____ इत्यादि का भय रहता है, उन्हें अच्छी और कल्याणकारिणी समझते हुए भी बहुत से लोग उनसे दूर रहते हैं। (4) _____ हानि देखते हुए भी कुछ प्रथाओं का अनुसरण बड़े-बड़े समझदार तक इसलिए करते चलते हैं कि उनके त्याग से वे बुरे कहे जाएँगे; लोगों में उनका वैसा आदर - सम्मान न रह जाएगा। उसके लिए मान - ग्लानि का कष्ट सब शारीरिक (5) _____ से बढ़कर होता है।

निम्न प्रश्नों के उत्तर उपरोक्त गद्यांश के आधार पर दीजिए।

SubQuestion No : 25

Q.25 गद्यांश के रिक्त स्थान (5) के लिए सर्वाधिक उपयुक्त शब्द होगा-

- Ans
- 1. अंगों
 - 2. अपराधों
 - 3. सुखों
 - 4. क्लेशों

Question ID : 65497832275

Status : Answered

Chosen Option : 3