

Constable GD in CAPFs SSF Rifleman GD in Assam Rifles and Sepoy in NCB Examination 2022

Roll Number	www.govtjobsalert.in
Candidate Name	www.govtjobsalert.in
Venue Name	iON Digital Zone iDZ Sivathapuram
Exam Date	27/01/2023
Exam Time	2:30 PM - 3:30 PM
Subject	Constable GD Examination 2022

Section : Part-A-General Intelligence and Reasoning

Q.1 In a certain code language, 'OXFORD' is written as 'OODFRX' and 'KILLING' is written as 'lIGKLLN'. How will 'SOLUTION' be written as in that language?

- Ans
- 1. UOOITSNL
 - 2. LNSTIOOU
 - 3. IOOUSTLN
 - 4. IOOULNST

Question ID : 26433069650
Status : Answered
Chosen Option : 4

Q.2 Select the option that is related to the fifth number in the same way as the second number is related to the first number and the fourth number is related to the third number.

9 : 27 :: 12 : 48 :: 6 : ?

- Ans
- 1. 18
 - 2. 20
 - 3. 12
 - 4. 22

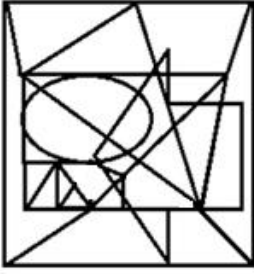
Question ID : 26433069432
Status : Answered
Chosen Option : 1

Q.3 Select the option figure in which the given figure is embedded (rotation is NOT allowed).

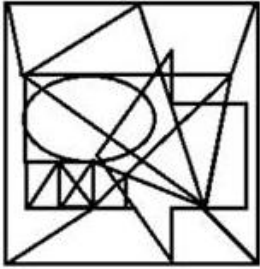


Ans

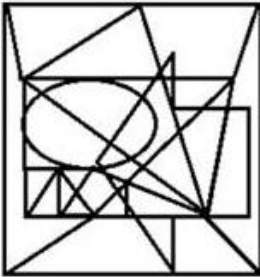
✗ 1.



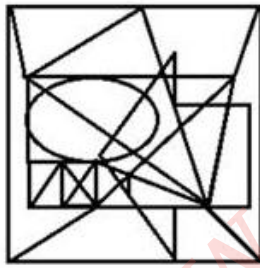
✗ 2.



✗ 3.



✓ 4.



Question ID : 26433069594
Status : Not Answered
Chosen Option : --

Q.4 Select the number from among the given options that can replace the question mark (?) in the following series.

$$\frac{1}{402}, \frac{1}{335}, ?, \frac{1}{201}, \frac{1}{134}$$

Ans

1. $\frac{1}{289}$

2. $\frac{1}{268}$

3. $\frac{1}{259}$

4. $\frac{1}{282}$

Question ID : 26433074532
Status : Answered
Chosen Option : 2

Q.5 Which option represents the correct order of the given words as they would appear in the English dictionary?

- 1 Marching
- 2 Marble
- 3 Matching
- 4 Maker
- 5 Major

Ans 1. 5,2,3,1,4

2. 5,4,3,2,1

3. 5,3,2,1,4

4. 5,4,2,1,3

Question ID : 26433069313
Status : Answered
Chosen Option : 4

Q.6 If '-' means 'division', '+' means 'multiplication', 'x' means 'addition' and '÷' means 'subtraction', which of the following equations is correct?

Ans 1. $10 - 2 + 3 \div 9 \times 2 = 8$

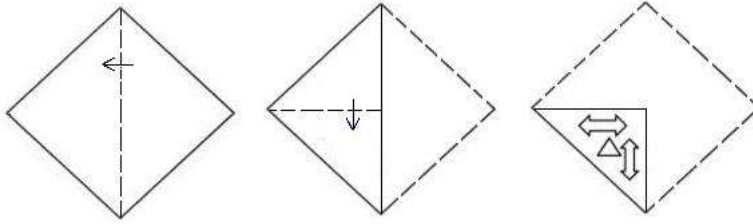
2. $10 + 3 - 2 \times 9 \div 2 = 21$

3. $20 + 6 - 4 \times 9 \div 6 = 32$

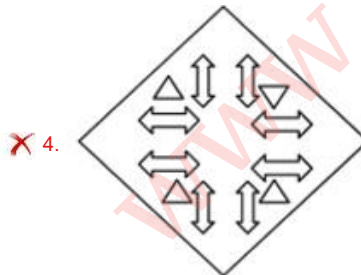
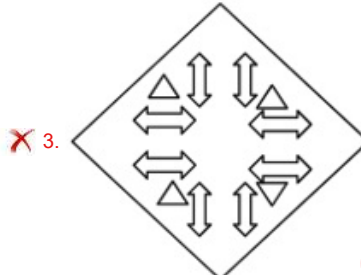
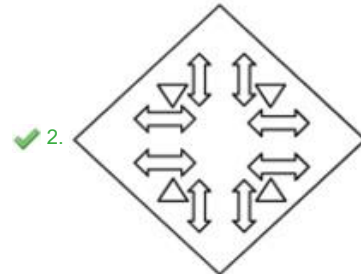
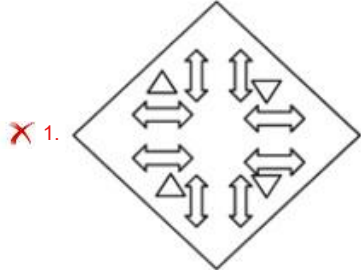
4. $20 \div 9 \times 9 - 4 + 6 = 33$

Question ID : 26433085659
Status : Not Answered
Chosen Option : --

Q.7 A paper is folded and cut as shown below. How will it appear when unfolded?



Ans



Question ID : 26433082054
Status : Answered
Chosen Option : 2

Q.11 Select the option that is related to the third word in the same way as the second word is related to the first word.

(The words must be considered as meaningful English words and must not be related to each other based on the number of letters/number of consonants/vowels in the word)

Annual : Semi-annual:: Monthly : ?

- Ans
- 1. Fortnightly
 - 2. Yearly
 - 3. Daily
 - 4. Weekly

Question ID : 26433067972
Status : Answered
Chosen Option : 1

Q.12 Which of the following letter-clusters will replace the question mark (?) in the given series?

AETO, CGRM, ?, GKNI, IMLG

- Ans
- 1. EHPJ
 - 2. EIPK
 - 3. DIQK
 - 4. EJQK

Question ID : 26433076438
Status : Answered
Chosen Option : 2

Q.13 L is the husband of O. Q is the mother-in-law of O. P is the sister of L. P is married to R. R has one son T. How is Q related to T?

- Ans
- 1. Sister
 - 2. Mother
 - 3. Mother's mother
 - 4. Father's mother

Question ID : 26433074599
Status : Answered
Chosen Option : 3

Q.14 Select the option that is related to the fifth letter-cluster in the same way as the second letter-cluster is related to the first letter-cluster and the fourth letter-cluster is related to the third letter-cluster.

AFHO : CHIP :: QDXM : SFYN :: ADGH : ?

- Ans
- 1. CFHI
 - 2. CFJR
 - 3. CHIF
 - 4. BGIP

Question ID : 26433080461
Status : Answered
Chosen Option : 1

Q.15 Which two signs should be interchanged to make the below equation mathematically correct?

$$104 \div 13 + 78 - 3 \times 2 = 143$$

- Ans** 1. \div and -
 2. \times and -
 3. \div and \times
 4. + and \times

Question ID : 264330117534
Status : Not Answered
Chosen Option : --

Q.16 Three statements are given, followed by three conclusions numbered I, II and III. Assuming the statements to be true, even if they seem to be at variance with commonly known facts, decide which of the conclusions logically follow(s) from the statements.

Statements:

All flowers are leaves.

All leaves are stems.

Some stems are roots.

Conclusions:

I. Some stems are leaves.

II. Some flowers are roots.

III. Some leaves are flowers.

- Ans** 1. Only conclusion II follows
 2. Only conclusions II and III follow
 3. Only conclusions I and III follow
 4. All conclusions follow

Question ID : 26433090992
Status : Answered
Chosen Option : 4

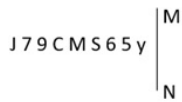
Q.17 Select the number from among the given options that can replace the question mark (?) in the following series.

53, 56, 50, ?, 47, 62

- Ans** 1. 48
 2. 59
 3. 55
 4. 44

Question ID : 26433079155
Status : Answered
Chosen Option : 4

Q.18 Select the correct mirror image of the given figure when the mirror is placed at MN as shown below.



- Ans**
- 1. y202M0e7L
 - 2. y262M0e7L
 - 3. y202MC97L
 - 4. y202M0e7L

Question ID : 26433089456
Status : Not Answered
Chosen Option : --

Q.19 Seven people are sitting in a movie theatre watching a movie facing North. D is sitting towards right of A but towards left of G. Y is sitting towards right of C and towards left of A. Z is sitting towards left of F and is second from the right end. Who is sitting second from the left end?

- Ans**
- 1. C
 - 2. Z
 - 3. A
 - 4. Y

Question ID : 26433079058
Status : Answered
Chosen Option : 4

Q.20 There are 8 people sitting in a circle facing the centre: A, B, C, D, E, F, G and H. A is sitting to the immediate right of G and immediate left of E. Second to the right of E is C. D is sitting to the immediate left of C. F is sitting to the immediate left of G. H is the immediate neighbour of F and B. Who is sitting to the immediate right of B?

- Ans**
- 1. D
 - 2. A
 - 3. C
 - 4. H

Question ID : 26433091614
Status : Answered
Chosen Option : 4

Section : Part-B-General Knowledge and General awareness

Q.1 What type of unemployment will be generated by the agricultural sector in case when it employs additional labourers only for some time of the year like the harvest season?

- Ans**
- 1. Disguised unemployment
 - 2. Cyclic unemployment
 - 3. Seasonal unemployment
 - 4. Structural unemployment

Question ID : 264330116087
Status : Answered
Chosen Option : 2

Q.2 A _____ is a deposit account opted for by many who wish to save a certain part of their earnings.

- Ans
- 1. share
 - 2. savings account
 - 3. loan
 - 4. debenture

Question ID : 264330115321
Status : Answered
Chosen Option : 2

Q.3 Export of goods enhances _____.

- Ans
- 1. expenses
 - 2. local debt
 - 3. nation's loan
 - 4. foreign exchange

Question ID : 264330115408
Status : Answered
Chosen Option : 4

Q.4 Who became the Member of Legislative Assembly from Dhamnagar constituency in Odisha, India in November 2022?

- Ans
- 1. Naveen Patnaik
 - 2. Bishnu Sethi
 - 3. Suryabanshi Suraj
 - 4. Chandrakant Jadhav

Question ID : 264330114944
Status : Not Answered
Chosen Option : --

Q.5 India's first-ever SAI Centre of Excellence for mountain terrain biking and bicycle motocross is to be set up in _____.

- Ans
- 1. Shimla
 - 2. Srinagar
 - 3. Nainital
 - 4. Ladakh

Question ID : 26433089931
Status : Not Answered
Chosen Option : --

Q.6 Sangeet Natak Akademi Awards (Akademi Puraskar) carries _____.

- Ans
- 1. Rs 1,00,000/- (Rupees one lakh) along with a Tamrapatra and Angavastram
 - 2. Rs 50,000/- along with a Tamrapatra and Angavastram
 - 3. Rs 50,000/- (Rupees Fifty thousand)
 - 4. Rs 3,00,000/- (Rupees three lakh)

Question ID : 264330115889
Status : Not Answered
Chosen Option : --

Q.7 The State Government under Consumer Protection Act 2019, by notification, shall establish a _____, in each district of the State.

- Ans
- 1. Street Consumer Disputes Redressal Commission
 - 2. National Consumer Disputes Redressal Commission
 - 3. District Consumer Disputes Redressal Commission
 - 4. Local Consumer Disputes Redressal Commission

Question ID : 264330116235
Status : Not Answered
Chosen Option : --

Q.8 The _____ was set up in 1963 with responsibilities in the field of seed production, particularly the foundation stock of HYV seeds.

- Ans
- 1. New Cooperative Development
 - 2. National Seeds Corporation
 - 3. National Farm Corporation
 - 4. Agricultural seeds corporation

Question ID : 26433054798
Status : Not Answered
Chosen Option : --

Q.9 Which of the following former Chief Economic Advisors has been appointed as the full time member of National Institution for Transforming India (NITI) Aayog in November 2022?

- Ans
- 1. Sreedharan Krishnakumari Satheesh
 - 2. Vijay Kumar Saraswat
 - 3. Rajesh Sharma
 - 4. Arvind Virmani

Question ID : 264330115024
Status : Not Answered
Chosen Option : --

Q.10 Why did Mohammed Ali Jinnah, Madan Mohan Malaviya and Mazhar UI Haq resign from the Imperial Legislative Council?

- Ans
- 1. to protest against the Rowlatt Act
 - 2. to support the Simon commission
 - 3. to support the Rowlatt Act
 - 4. to protest against the Simon commission

Question ID : 264330115702
Status : Answered
Chosen Option : 4

Q.11 Foods with starch in them will turn blue- black when they come in contact with _____.

- Ans
- 1. iodine
 - 2. blue litmus
 - 3. salt
 - 4. red litmus

Question ID : 264330115201
Status : Answered
Chosen Option : 4

Q.12 Kati Bihu, one of the three Bihu festivals of Assam, is celebrated in the month of _____.

- Ans
- 1. April
 - 2. October
 - 3. January
 - 4. December

Question ID : 264330115120
Status : Answered
Chosen Option : 1

Q.13 The members of a Vidhan Parishad are elected for a term of _____ years.

- Ans
- 1. 6
 - 2. 4
 - 3. 5
 - 4. 7

Question ID : 26433086676
Status : Not Answered
Chosen Option : --

Q.14 What are the volcanoes which have not erupted for a very long time but might erupt in future called?

- Ans
- 1. Extinct volcanoes
 - 2. Active volcanoes
 - 3. Dormant volcanoes
 - 4. Shield volcanoes

Question ID : 264330116004
Status : Answered
Chosen Option : 4

Q.15 Which of the following was the capital of Vajji Mahajanapada?

- Ans
- 1. Gaya
 - 2. Vaishali
 - 3. Anga
 - 4. Pataliputra

Question ID : 264330115462
Status : Answered
Chosen Option : 2

Q.16 The 42nd Constitutional Amendment was made according to the recommendation of _____, set up in 1976.

- Ans
- 1. Abhijeet Sen Committee
 - 2. Ajit Kumar Committee
 - 3. Abid Hussain Committee
 - 4. Swaran Singh Committee

Question ID : 26433089909
Status : Not Answered
Chosen Option : --

Q.17 In a football match, the length of a pitch must be between _____ and 120m.

- Ans
- 1. 105 m
 - 2. 110 m
 - 3. 100 m
 - 4. 90 m

Question ID : 26433071570
Status : Answered
Chosen Option : 4

Q.18 The Ghodmodini dance is a folk dance form associated with _____.

- Ans
- 1. Bihar
 - 2. Haryana
 - 3. Goa
 - 4. Gujarat

Question ID : 26433071687
Status : Answered
Chosen Option : 4

Q.19 Sri Lanka is separated from India by the _____.

- Ans
- 1. Isthmus of Kra
 - 2. Strait of Gibraltar
 - 3. Palk strait
 - 4. Isthmus of Panama

Question ID : 264330115568
Status : Answered
Chosen Option : 3

Q.20 Which two gases are released when lead nitrate is heated?

- Ans
- 1. Oxygen and nitrogen oxide
 - 2. Nitrogen dioxide and oxygen
 - 3. Carbon monoxide and oxygen
 - 4. Hydrogen and nitrogen dioxide

Question ID : 26433087849
Status : Answered
Chosen Option : 4

Section : Part-C-Elementary Mathematics

Q.1 Rajneesh deposited Rs.3,00,000 in a bank for three years. What will be the final amount if the rate of interest is 8% compounded annually?

- Ans
- 1. Rs.3,77,913.60
 - 2. Rs.3,70,000.00
 - 3. Rs.3,57,931.60
 - 4. Rs.3,50,000.00

Question ID : 26433080334
Status : Answered
Chosen Option : 1

Q.2 Two trains running in opposite directions cross a man standing on the platform in 30 sec and 15 sec respectively and they cross each other in 25 sec. The ratio of their speeds is:

- Ans
- 1. 2 : 1
 - 2. 3 : 7
 - 3. 5 : 3
 - 4. 3 : 2

Question ID : 26433080048
Status : Answered
Chosen Option : 2

Q.3

Find the value of $\frac{\frac{1}{6} \div \frac{1}{6} \times \frac{1}{6}}{\frac{1}{6} \div \frac{1}{6} \text{ of } \frac{1}{6}} - \frac{1}{36}$.

- Ans
- 1. $\frac{1}{6}$
 - 2. 0
 - 3. $\frac{1}{36}$
 - 4. 1

Question ID : 26433074975
Status : Answered
Chosen Option : 4

Q.4 A melon in the shape of a sphere having the radius of 9 cm is cut into two equal hemispheres. Find the volume (in cm^3 , rounded off to 2 decimal places) of each half. Take $\pi = \frac{22}{7}$

- Ans
- 1. 1,527.43 cm^3
 - 2. 1,547.34 cm^3
 - 3. 1,472.53 cm^3
 - 4. 1,372.35 cm^3

Question ID : 26433076249
Status : Not Answered
Chosen Option : --

Q.5 The average temperature of a certain city on different days is as follows:
Monday, Tuesday, Wednesday and Thursday = 42°
Tuesday, Wednesday, Thursday and Friday = 44°
What is the temperature on Friday if the ratio of the temperature on Monday and Friday is 3:5?

- Ans
- 1. 42°
 - 2. 44°
 - 3. 20°
 - 4. 15°

Question ID : 26433091895
Status : Answered
Chosen Option : 2

Q.6 Three men and two women can finish a work in $\frac{120}{13}$ days. Two men and three women can finish the same in 10 days. One man and one woman start the work and after 12 days, 1 more man joins the work. After three more days, it is directed to engage more men or women to finish the work the next day. How many minimum more men or women must be engaged to complete the work as per direction?

- Ans
- 1. Either 15 women or 9 men
 - 2. 5 men and 10 women
 - 3. Either 14 women or 10 men
 - 4. 7 men and 7 women

Question ID : 26433085470
Status : Answered
Chosen Option : 2

Q.7 A lady goes from home to office at a speed of 40 km/h, and returns back at a speed of 70 km/h. What is her average speed during the journey?

- Ans
- 1. $45\frac{1}{11}$ km/h
 - 2. $50\frac{10}{11}$ km/h
 - 3. $40\frac{8}{11}$ km/h
 - 4. $55\frac{7}{11}$ km/h

Question ID : 26433079847
Status : Answered
Chosen Option : 4

Q.8 Find the third proportional to 16 and 320.

- Ans
- 1. 6400
 - 2. 3200
 - 3. 8000
 - 4. 2100

Question ID : 26433076187
Status : Answered
Chosen Option : 1

Q.9 The price of a commodity increases by 10% from 2020 to 2021 and it again increases by 15% from 2021 to 2022. The difference in the prices in 2020 and 2022 is ₹35. What is the price of the commodity (in ₹) in 2021 (rounded up to one decimal place)?

- Ans
- 1. 145.3
 - 2. 154.3
 - 3. 314.5
 - 4. 134.5

Question ID : 26433085433
Status : Answered
Chosen Option : 2

Q.10 An electric geyser is sold at Rs.7,100 after reducing Rs.244 in addition to two successive discounts of 15% and 4% on the marked price. Find the marked price (in Rs.) of the geyser.

- Ans 1. 9,000
 2. 8,800
 3. 8,500
 4. 8,200

Question ID : 26433075912
Status : Answered
Chosen Option : 1

Q.11 In a discount scheme, there is 50% discount on the marked price of Rs.500, but at the end it is sold for Rs.200. What additional discount did the customer get?

- Ans 1. 30%
 2. 22%
 3. 20%
 4. 25%

Question ID : 26433083044
Status : Answered
Chosen Option : 1

Q.12 An article is marked at Rs.7,500 and available at a discount of 12%. The shopkeeper gives another off-season discount to the buyer and sell the article for Rs.5,400. Find the off-season discount. (Correct to two decimals places.)

- Ans 1. 18.18%
 2. 19.53%
 3. 18.95%
 4. 19.63%

Question ID : 26433075529
Status : Not Answered
Chosen Option : --

Q.13 A dishonest dealer professes to sell his goods at the cost price but uses a false weight of 950 g instead of 1 kg. What is his gain percentage?

- Ans 1. $5\frac{3}{19}\%$
 2. 5%
 3. $5\frac{1}{19}\%$
 4. $5\frac{5}{19}\%$

Question ID : 26433075467
Status : Not Answered
Chosen Option : --

Q.14 The third proportional to $a^3 + b^3$ and $a^2 + ab + b^2$, when $a = 2$ and $b = 3$ is:
(correct to 2 decimal places)

- Ans
- 1. 8.56
 - 2. 5.83
 - 3. 10
 - 4. 10.31

Question ID : 26433081578
Status : Not Answered
Chosen Option : --

Q.15 The material of a solid right circular cylinder is converted into the shape of a solid cone of equal radius. If the height of the cylinder is 8.8 cm, then the height of the cone is:

- Ans
- 1. 8.8 cm
 - 2. 35.2 cm
 - 3. 17.6 cm
 - 4. 26.4 cm

Question ID : 26433087412
Status : Not Answered
Chosen Option : --

Q.16 From 2011 to 2014, a town's population is increasing at the rate of 2% annually. If its population was 13,265 in 2014, then what would have been its population (Approximately) in 2011?

- Ans
- 1. 12500
 - 2. 12275
 - 3. 12250
 - 4. 12000

Question ID : 26433091563
Status : Answered
Chosen Option : 1

Q.17 A stock of food is enough for 315 men for 48 days. For how many days the same stock of food is enough, if 45 more men join?

- Ans
- 1. 46
 - 2. 42
 - 3. 48
 - 4. 44

Question ID : 26433079897
Status : Not Answered
Chosen Option : --

Q.18 If the number 40 is increased by 40%, then what will be the actual increase?

- Ans
- 1. 42
 - 2. 28
 - 3. 56
 - 4. 16

Question ID : 26433075907
Status : Answered
Chosen Option : 3

Q.19 Find the square of the sum of the digits of the smallest number divisible by both 18 and 24.

- Ans
- 1. 64
 - 2. 121
 - 3. 81
 - 4. 100

Question ID : 264330116661
Status : Answered
Chosen Option : 1

Q.20 A man can row upstream at 12 km/h and downstream at 20 km/h. Find the man's rowing speed in still water, and the rate of current.

- Ans
- 1. 16 km/h and 4 km/h
 - 2. 32 km/h and 8 km/h
 - 3. 32 km/h and 4 km/h
 - 4. 16 km/h and 8 km/h

Question ID : 26433076203
Status : Answered
Chosen Option : 4

Section : Part-D-English

Q.1 Select the most appropriate option that can substitute the underlined segment in the given sentence.

The road which connected for two villages is now deserted.

- Ans
- 1. that connected for
 - 2. will connect the
 - 3. that connected the
 - 4. which connects of

Question ID : 26433088990
Status : Answered
Chosen Option : 3

Q.2 Select the most appropriate option to fill in the blank with the synonym of the underlined word.

The casual nature of the student destroyed his studies and _____ his future.

- Ans
- 1. ruined
 - 2. skyrocketed
 - 3. rained
 - 4. traced

Question ID : 26433094736
Status : Answered
Chosen Option : 1

Q.3 Select the most appropriate ANTONYM of the given word.

Succinct

- Ans 1. Lengthy
 2. Empty
 3. Hasty
 4. Hearty

Question ID : 26433091823
Status : Not Answered
Chosen Option : --

Q.4 Select the most appropriate ANTONYM of the given word.

Cluster

- Ans 1. Consort
 2. Group
 3. Individual
 4. Special

Question ID : 26433084748
Status : Answered
Chosen Option : 3

Q.5 Select the most appropriate synonym of the given word.

Despise

- Ans 1. Elevate
 2. Hate
 3. Eradicate
 4. Revere

Question ID : 26433084665
Status : Not Answered
Chosen Option : --

Q.6 Select the correct idiom that can substitute the italicised group of words in the given sentence.

Will humanity overcome the greed of leaders all around the world? This is the *most important issue to be discussed today.*

- Ans 1. burn the candle at both ends
 2. burning question
 3. burn a hole in the pocket
 4. burn one's fingers

Question ID : 26433084758
Status : Not Answered
Chosen Option : --

Q.7 Select the most appropriate homonym to fill in the blank.
The construction _____ was far from his home.

- Ans 1. cite
 2. sight
 3. site
 4. cyte

Question ID : 26433060048
Status : Answered
Chosen Option : 3

Q.8 Select the sentence that contains the MISSPELT word from the given options.

- Ans** 1. Both of them were best friends, now they are at daggers drawn.
2. As if to fill the small hours of that cold night with warm thoughts, I picked up the book and started browsing.
3. Without the slightest warning, something new breaks into your life that you may be completely unconscious of.
4. The gist of the quote was that all reasonable men adoopt themselves to the world.

Question ID : 26433073882
Status : Not Answered
Chosen Option : --

Q.9 Select the most appropriate spelling that can correctly substitute the misspelt underlined segment in the given sentence.

He acquiesced to the plans his parents had made for him.

- Ans** 1. acquiesced
2. acquised
3. acquissed
4. aquissed

Question ID : 26433071937
Status : Not Answered
Chosen Option : --

Q.10 Select the most appropriate meaning of the given idiom.

The pot calling the kettle black

- Ans** 1. Preparing the tea without boiling water
2. People are guilty of the very fault they identify in others
3. Speaking strangely in an official meeting
4. Making things ready quickly

Question ID : 26433073488
Status : Not Answered
Chosen Option : --

Q.11 Select the most appropriate set of words to complete the sentence.

I will not spend a single _____ on a bottle of perfume until I know that I love its _____.

- Ans** 1. cent; scent
2. sent; cent
3. scent; cent
4. scent; sent

Question ID : 26433088874
Status : Not Answered
Chosen Option : --

Q.12 Select the word segment that substitutes (replaces) the bracketed word segment correctly and completes the sentence meaningfully.

Wear rubber gloves while chopping chillies (as it could irritate the skin).

- Ans
- 1. as these could irritate the skin
 - 2. as they can irritate the skin
 - 3. as it would irritate the skin
 - 4. as these would irritate the skin

Question ID : 26433088959
Status : Not Answered
Chosen Option : --

Q.13 Select the most appropriate option that can substitute the underlined segment in the given sentence.

He very pleased that you have passed with distinction.

- Ans
- 1. He is very pleased
 - 2. He will very please
 - 3. He is very please
 - 4. He has very pleased

Question ID : 264330101411
Status : Not Answered
Chosen Option : --

Q.14 Parts of the following sentence have been underlined and given as options. Select the option that contains an error.

We must acknowledge the fact that we had been visited Paris many times with friends.

- Ans
- 1. must
 - 2. had been
 - 3. acknowledge
 - 4. visited

Question ID : 26433089371
Status : Not Answered
Chosen Option : --

Q.15 Select the most appropriate synonym of the underlined word.

He was curious to know his result.

- Ans
- 1. Ingenious
 - 2. Inquisitive
 - 3. Indifferent
 - 4. Indiscriminate

Question ID : 26433084683
Status : Not Answered
Chosen Option : --

Comprehension:

In the following passage, some words have been deleted. Read the passage carefully and select the most appropriate option to fill in each blank.

I think that perhaps the sky is a (1) _____ sea of fresh water and we, (2) _____ walking under it, walk on top of it; perhaps we see everything (3) _____ down and the earth is a (4) _____ of sky, so that when we die, we fall and (5) _____ into the sky.

SubQuestion No : 16

Q.16 Select the most appropriate option to fill in blank number 1.

- Ans 1. minty
 2. vigilant
 3. huge
 4. allotted

Question ID : 26433089331
Status : Not Answered
Chosen Option : --

Comprehension:

In the following passage, some words have been deleted. Read the passage carefully and select the most appropriate option to fill in each blank.

I think that perhaps the sky is a (1) _____ sea of fresh water and we, (2) _____ walking under it, walk on top of it; perhaps we see everything (3) _____ down and the earth is a (4) _____ of sky, so that when we die, we fall and (5) _____ into the sky.

SubQuestion No : 17

Q.17 Select the most appropriate option to fill in blank number 2.

- Ans 1. primarily
 2. stubbornly
 3. instead of
 4. coldly

Question ID : 26433089332
Status : Not Answered
Chosen Option : --

Comprehension:

In the following passage, some words have been deleted. Read the passage carefully and select the most appropriate option to fill in each blank.

I think that perhaps the sky is a (1) _____ sea of fresh water and we, (2) _____ walking under it, walk on top of it; perhaps we see everything (3) _____ down and the earth is a (4) _____ of sky, so that when we die, we fall and (5) _____ into the sky.

SubQuestion No : 18

Q.18 Select the most appropriate option to fill in blank number 3.

- Ans 1. blow
 2. upside
 3. look
 4. glow

Question ID : 26433089333
Status : Not Answered
Chosen Option : --

Comprehension:

In the following passage, some words have been deleted. Read the passage carefully and select the most appropriate option to fill in each blank.

I think that perhaps the sky is a (1) _____ sea of fresh water and we, (2) _____ walking under it, walk on top of it; perhaps we see everything (3) _____ down and the earth is a (4) _____ of sky, so that when we die, we fall and (5) _____ into the sky.

SubQuestion No : 19**Q.19** Select the most appropriate option to fill in blank number 4.

- Ans
- 1. selection
 - 2. partition
 - 3. kind
 - 4. label

Question ID : 26433089334
Status : Not Answered
Chosen Option : --

Comprehension:

In the following passage, some words have been deleted. Read the passage carefully and select the most appropriate option to fill in each blank.

I think that perhaps the sky is a (1) _____ sea of fresh water and we, (2) _____ walking under it, walk on top of it; perhaps we see everything (3) _____ down and the earth is a (4) _____ of sky, so that when we die, we fall and (5) _____ into the sky.

SubQuestion No : 20**Q.20** Select the most appropriate option to fill in blank number 5.

- Ans
- 1. swing
 - 2. climb
 - 3. draw
 - 4. sink

Question ID : 26433089335
Status : Not Answered
Chosen Option : --

Section : Part-D-Hindi**Q.1** 'कोरा जवाब देना' मुहावरे का सही अर्थ है -

- Ans
- 1. अर्थहीन बात करना
 - 2. साफ इंकार करना
 - 3. चुप हो जाना
 - 4. अपमान करना

Question ID : 26433065919
Status : Not Answered
Chosen Option : --

Q.2 निम्न वाक्यांश के लिए एक शब्द क्या होगा?
जिसका कोई शत्रु नहीं जनमा है

- Ans
- 1. अज्ञातसूत
 - 2. अजातशत्रु
 - 3. अज्ञातशत्रु
 - 4. अजातसूत

Question ID : 26433070088
Status : Not Answered
Chosen Option : --

Q.3 वर्तनी की दृष्टि से शुद्ध वाक्य का चयन कीजिए-

- Ans 1. उसे तार मिला और वह तुरंत घर से चल पड़ा।
 2. यद्यपि वह उनके घर गया था, तथपि उनसे भेट नहीं हुई।
 3. मुझे प्रसननता है कि तुम स्वस्थ हो गए।
 4. वह बड़े-बड़े गृन्थ पढ़ता था ताकि विद्वान बन जाए।

Question ID : 26433062893
Status : Not Answered
Chosen Option : --

Q.4 विकल्पों में दिए गए समानार्थी शब्दों में से सर्वोचित शब्द का प्रयोग करके दिए गए वाक्य में रिक्त स्थान की पूर्ति कीजिए।
कक्षा में प्रवेश करते ही छात्रों ने शिक्षक का _____ किया।

- Ans 1. अभिवादन
 2. सत्कार
 3. अभिनन्दन
 4. स्वागत

Question ID : 26433074416
Status : Not Answered
Chosen Option : --

Q.5 'छोटे कद का आदमी' इस वाक्य खंड के लिए उचित शब्द निम्न में से क्या होगा?

- Ans 1. शैव
 2. क्रीत
 3. बौना
 4. यात्री

Question ID : 26433063055
Status : Not Answered
Chosen Option : --

Q.6 '_____ का अंतर होना' सही विकल्प का चयन कर इस मुहावरे को पूरा करें।

- Ans 1. दाएं बाएं
 2. आमने सामने
 3. आकाश पाताल
 4. ऊपर नीचे

Question ID : 26433066816
Status : Not Answered
Chosen Option : --

Q.7 निम्न वाक्य के रिक्त स्थान पर रेखांकित शब्द का उपयुक्त विलोम शब्द कौन-सा होगा?
घृणा को _____ से जीतो।

- Ans 1. प्रेम
 2. लोभ
 3. ईर्ष्या
 4. गुस्से

Question ID : 26433072619
Status : Not Answered
Chosen Option : --

Q.8 'निशाचर _____।' उपर्युक्त वाक्य में रिक्त स्थान के लिए उपयुक्त विकल्प निम्न में से क्या होगा?

- Ans
- 1. से अभिप्राय है - निशा को चुराने वाला
 - 2. से अभिप्राय है - रात्रि में चरने वाला
 - 3. से अभिप्राय है - रात्रि में विचरण करने वाला
 - 4. से अभिप्राय है - रात्रि में चोरी करने वाला

Question ID : 26433067045
Status : Not Answered
Chosen Option : --

Q.9 'अमन और कबीर 'मित्र' हैं।' विकल्पों में से कौन सा इस वाक्य में रेखांकित 'मित्र' शब्द का पर्यायवाची शब्द नहीं है?

- Ans
- 1. सहचर
 - 2. रैना
 - 3. मीत
 - 4. दोस्त

Question ID : 26433085068
Status : Not Answered
Chosen Option : --

Q.10 निम्नलिखित वाक्य में रेखांकित खंड के स्थान पर प्रयुक्त होने वाले सबसे उपयुक्त विकल्प का चयन कीजिए।
उसके पाँच सौ रुपये जुर्माना हुआ।

- Ans
- 1. उसे
 - 2. उसकी
 - 3. उसी
 - 4. वह

Question ID : 26433079572
Status : Not Answered
Chosen Option : --

Q.11 निम्नलिखित विकल्पों में से 'जिसे सबसे पहले गिनना उचित हो' वाक्यांश के लिए एक सार्थक शब्द क्या होगा ?

- Ans
- 1. अक्षम्य
 - 2. अग्रगण्य
 - 3. सुगम्य
 - 4. नगण्य

Question ID : 26433062532
Status : Not Answered
Chosen Option : --

Q.12 निम्नलिखित विकल्पों में से किस एक वाक्य में विशेषण का उचित प्रयोग किया गया है?

- Ans
- 1. वह अच्छा लड़का है।
 - 2. राम पढ़ता है।
 - 3. वह कानपुर गया।
 - 4. गीता खेलती है।

Question ID : 26433062962
Status : Not Answered
Chosen Option : --

Q.13 'रागिनी ने जब वीणा बजाना शुरू किया तो उसके स्वर से सारा वातावरण _____ हो गया।' उपरोक्त वाक्य में रिक्त स्थान की पूर्ति निम्न में से सही शब्द चुनकर कीजिए।

- Ans
- 1. झंक्रत
 - 2. झंकृत
 - 3. झनक्रत
 - 4. झनकृत

Question ID : 26433069705
Status : Not Answered
Chosen Option : --

Q.14 'ब्रह्मा' के उपयुक्त पर्यायवाची शब्द से वाक्य पूर्ण कीजिए।
_____ की उपासना कीजिए।

- Ans
- 1. लोकेश
 - 2. नरेश
 - 3. भूतेश
 - 4. पुरंदर

Question ID : 26433063084
Status : Not Answered
Chosen Option : --

Q.15 निम्नलिखित विकल्पों में से किस एक वाक्य में गुणवाचक विशेषण का उचित प्रयोग नहीं किया गया है?

- Ans
- 1. रमेश का चेहरा गोल है।
 - 2. राम सुन्दर बालक है।
 - 3. नीरज दिल्ली में रहता है।
 - 4. श्याम अच्छा लड़का है।

Question ID : 26433062973
Status : Not Answered
Chosen Option : --

Comprehension:

प्रश्न संख्या 1 से 5 तक के उत्तर दिए गए गद्यांश के आधार पर दीजिए।

ऋतुराज वसंत के आगमन से ही शीत का भयंकर प्रकोप भाग गया। पतझड़ में पश्चिम-पवन ने जीर्ण-शीर्ण 1.

_____ को गिराकर लताकुंजों, पेड़-पौधों को स्वच्छ और निर्मल बना दिया। वृक्षों और लताओं के अंग में 2.

पत्तियों के प्रस्फुटन से यौवन की मादकता छा गयी। कनेर, करवीर, मदार, पाटल, इत्यादि 3. _____

की सुगंधि दिग्दिगंत में अपनी मादकता का संचार करने लगी। न शीत की कठोरता, न ग्रीष्म का 4. _____।

समशीतोष्ण वातावरण में प्रत्येक 5. _____ की नस-नस में उत्फुल्लता और उमंग की लहरें उठ रही हैं। गेहूँ के

सुनहले बालों से पवन स्पर्श के कारण रुनझुन का संगीत फूट रहा है। पत्तों से अंधेरों पर सोया हुआ संगीत मुखर हो गया है।

SubQuestion No : 16

Q.16 विकल्पों में से उपयुक्त शब्द चुनकर रिक्त स्थान 1 की पूर्ति कीजिए।

- Ans
- 1. शाखाओं
 - 2. पत्रों
 - 3. पल्लवों
 - 4. पुष्पों

Question ID : 26433069937
Status : Not Answered
Chosen Option : --

Comprehension:

प्रश्न संख्या 1 से 5 तक के उत्तर दिए गए गद्यांश के आधार पर दीजिए।

ऋतुराज वसंत के आगमन से ही शीत का भयंकर प्रकोप भाग गया। पतझड़ में पश्चिम-पवन ने जीर्ण-शीर्ण 1. _____ को गिराकर लताकुंजों, पेड़-पौधों को स्वच्छ और निर्मल बना दिया। वृक्षों और लताओं के अंग में 2. _____ पत्तियों के प्रस्फुटन से यौवन की मादकता छा गयी। कनेर, करवीर, मदार, पाटल, इत्यादि 3. _____ की सुगंधि दिग्दिगत में अपनी मादकता का संचार करने लगी। न शीत की कठोरता, न ग्रीष्म का 4. _____। समशीतोष्ण वातावरण में प्रत्येक 5. _____ की नस-नस में उत्फुल्लता और उमंग की लहरें उठ रही हैं। गेहूँ के सुनहले बालों से पवन स्पर्श के कारण रुनझुन का संगीत फूट रहा है। पत्तों से अँधेरों पर सोया हुआ संगीत मुखर हो गया है।

SubQuestion No : 17

Q.17 विकल्पों में से उपयुक्त शब्द चुनकर रिक्त स्थान 2 की पूर्ति कीजिए।

- Ans
- 1. सूक्ष्म
 - 2. नूतन
 - 3. रंगीन
 - 4. प्राचीन

Question ID : 26433069938
Status : Not Answered
Chosen Option : --

Comprehension:

प्रश्न संख्या 1 से 5 तक के उत्तर दिए गए गद्यांश के आधार पर दीजिए।

ऋतुराज वसंत के आगमन से ही शीत का भयंकर प्रकोप भाग गया। पतझड़ में पश्चिम-पवन ने जीर्ण-शीर्ण 1. _____ को गिराकर लताकुंजों, पेड़-पौधों को स्वच्छ और निर्मल बना दिया। वृक्षों और लताओं के अंग में 2. _____ पत्तियों के प्रस्फुटन से यौवन की मादकता छा गयी। कनेर, करवीर, मदार, पाटल, इत्यादि 3. _____ की सुगंधि दिग्दिगत में अपनी मादकता का संचार करने लगी। न शीत की कठोरता, न ग्रीष्म का 4. _____। समशीतोष्ण वातावरण में प्रत्येक 5. _____ की नस-नस में उत्फुल्लता और उमंग की लहरें उठ रही हैं। गेहूँ के सुनहले बालों से पवन स्पर्श के कारण रुनझुन का संगीत फूट रहा है। पत्तों से अँधेरों पर सोया हुआ संगीत मुखर हो गया है।

SubQuestion No : 18

Q.18 विकल्पों में से उपयुक्त शब्द चुनकर रिक्त स्थान 3 की पूर्ति कीजिए।

- Ans
- 1. पुष्पों
 - 2. डालियों
 - 3. जड़ों
 - 4. पत्तों

Question ID : 26433069939
Status : Not Answered
Chosen Option : --

Comprehension:

प्रश्न संख्या 1 से 5 तक के उत्तर दिए गए गद्यांश के आधार पर दीजिए।

ऋतुराज वसंत के आगमन से ही शीत का भयंकर प्रकोप भाग गया। पतझड़ में पश्चिम-पवन ने जीर्ण-शीर्ण 1. _____ को गिराकर लताकुंजों, पेड़-पौधों को स्वच्छ और निर्मल बना दिया। वृक्षों और लताओं के अंग में 2. _____ पत्तियों के प्रस्फुटन से यौवन की मादकता छा गयी। कनेर, करवीर, मदार, पाटल, इत्यादि 3. _____ की सुगंधि दिग्दिगत में अपनी मादकता का संचार करने लगी। न शीत की कठोरता, न ग्रीष्म का 4. _____। समशीतोष्ण वातावरण में प्रत्येक 5. _____ की नस-नस में उत्फुल्लता और उमंग की लहरें उठ रही हैं। गेहूँ के सुनहले बालों से पवन स्पर्श के कारण रुनझुन का संगीत फूट रहा है। पत्तों से अँधेरों पर सोया हुआ संगीत मुखर हो गया है।

SubQuestion No : 19

Q.19 विकल्पों में से उपयुक्त शब्द चुनकर रिक्त स्थान 4 की पूर्ति कीजिए।

- Ans
- 1. ताप
 - 2. गुस्सा
 - 3. आक्रमण
 - 4. आवेश

Question ID : 26433069940
Status : Not Answered
Chosen Option : --

Comprehension:

प्रश्न संख्या 1 से 5 तक के उत्तर दिए गए गद्यांश के आधार पर दीजिए।

ऋतुराज वसंत के आगमन से ही शीत का भयंकर प्रकोप भाग गया। पतझड़ में पश्चिम-पवन ने जीर्ण-शीर्ण 1. _____ को गिराकर लताकुंजों, पेड़-पौधों को स्वच्छ और निर्मल बना दिया। वृक्षों और लताओं के अंग में 2. _____ पत्तियों के प्रस्फुटन से यौवन की मादकता छा गयी। कनेर, करवीर, मदार, पाटल, इत्यादि 3. _____ की सुगंधि दिग्दिगत में अपनी मादकता का संचार करने लगी। न शीत की कठोरता, न ग्रीष्म का 4. _____। समशीतोष्ण वातावरण में प्रत्येक 5. _____ की नस-नस में उत्फुल्लता और उमंग की लहरें उठ रही हैं। गेहूँ के सुनहले बालों से पवन स्पर्श के कारण रुनझुन का संगीत फूट रहा है। पत्तों से अँधेरों पर सोया हुआ संगीत मुखर हो गया है।

SubQuestion No : 20

Q.20 विकल्पों में से उपयुक्त शब्द चुनकर रिक्त स्थान 5 की पूर्ति कीजिए।

- Ans
- 1. पशु
 - 2. वस्तु
 - 3. पक्षी
 - 4. प्राणी

Question ID : 26433069941

Status : Not Answered

Chosen Option : --

WWW.GOVtJOBSALERT.IN