

Constable GD in CAPFs SSF Rifleman GD in Assam Rifles and Sepoy in NCB Examination 2022

Roll Number	www.govtjobsalert.in
Candidate Name	www.govtjobsalert.in
Venue Name	TCS Gito Bitan
Exam Date	13/01/2023
Exam Time	11:45 AM - 12:45 PM
Subject	Constable GD Examination 2022

Section : Part-A-General Intelligence and Reasoning

Q.1 Which of the following numbers will replace the question mark (?) in the given series?

9, 17, ?, 57, 89, 129

- Ans
- 1. 23
 - 2. 33
 - 3. 20
 - 4. 35

Question ID : 26433090064
Status : Answered
Chosen Option : 2

Q.2 Which letter cluster will replace the question mark (?) to complete the given series?

YAFU, CRRE, ?, KZPY, OQBI

- Ans
- 1. FMBR
 - 2. FYWD
 - 3. GIDO
 - 4. GRXO

Question ID : 26433079430
Status : Answered
Chosen Option : 3

Q.3 Eight people, A, B, C, D, E, F, G and H are sitting in a straight line, facing north. Only three people sit to the right of A. Only one person sits between A and B. Only four people sit between B and D. F sits to the immediate right of D. C is neither an immediate neighbour of B nor D. E sits second to the right of G. How many people sit between H and A?

- Ans
- 1. None
 - 2. Two
 - 3. Three
 - 4. One

Question ID : 26433092756
Status : Answered
Chosen Option : 3

Q.4 In a certain code language, the word 'FORM' is numerically coded as 25. The word 'SUIT' is numerically coded as 96. How is the word 'RING' numerically coded in the same code language?

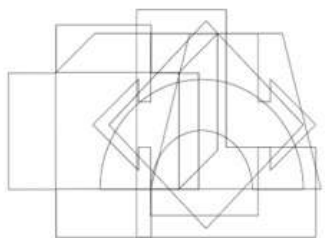
- Ans
- 1. 24
 - 2. 84
 - 3. 42
 - 4. 48

Question ID : 26433090110

Status : **Not Attempted and Marked For Review**

Chosen Option : --

Q.5 Select the option figure which is embedded in the given figure. (Rotation is NOT allowed)



Ans

- 1.
- 2.
- 3.
- 4.

Question ID : 26433085750

Status : **Answered**

Chosen Option : 3

Q.6 Which two signs should be interchanged to make the below equation mathematically correct?

$$128 - 8 + 96 \div 16 \times 20 = 16$$

- Ans
- 1. \times and \div
 - 2. $-$ and $+$
 - 3. $-$ and \times
 - 4. $+$ and \div

Question ID : 264330117567
Status : Answered
Chosen Option : 2

Q.7 Which of the following numbers will replace the question mark (?) in the given series?
4, 9, 17, 35, ?, 139

- Ans
- 1. 96
 - 2. 69
 - 3. 71
 - 4. 70

Question ID : 26433085644
Status : Not Answered
Chosen Option : --

Q.8 In a certain code language, 'FRUIT' is written as 'HTUKV' and 'TWEAK' is written as 'VYECM'. How will 'VOWEL' be written in that language?

- Ans
- 1. QXWVG
 - 2. QXWGM
 - 3. XQWGN
 - 4. XQGWM

Question ID : 26433068895
Status : Answered
Chosen Option : 3

Q.9 Three statements are given followed by three conclusions numbered I, II and III.
Assuming the statements to be true, even if they seem to be at variance with commonly known facts, decide which of the conclusions logically follow(s) from the statements.

Statements:

All waters are inks.

All glues are inks.

All inks are pens.

Conclusions:

I. All glues are pens.

II. All pens are waters.

III. Some pens are glues.

- Ans
- 1. Only conclusions I and II follow
 - 2. Only conclusions I and III follow
 - 3. All conclusions follow
 - 4. Only conclusions II and III follow

Question ID : 26433082299
Status : Answered
Chosen Option : 2

Q.10 'A + B' means 'A is the wife of B'
'A - B' means 'A is the husband of B'
'A × B' means 'A is the brother of B'
'A ÷ B' means 'A is the mother of B'
If $R + T \times S - P \div Q + N$, then which of the following statements is NOT correct?

- Ans
- 1. Q is the mother of T.
 - 2. P is the mother of Q.
 - 3. T is the brother of S.
 - 4. R is the wife of T.

Question ID : 26433090048
Status : Answered
Chosen Option : 2

Q.11 Select the option that is related to the third number in the same way as the second number is related to the first number and the sixth number is related to the fifth number.
 $4 : 30 :: 7 : ? :: 6 : 56$

- Ans
- 1. 72
 - 2. 76
 - 3. 70
 - 4. 80

Question ID : 26433067897
Status : Answered
Chosen Option : 1

Q.12 Select the option that is related to the third word in the same way as the second word is related to the first word.
(The words must be considered as meaningful English words and must NOT be related to each other based on the number of letters/number of consonants/vowels in the word)
Bat : Cricket :: Racquet : ?

- Ans
- 1. Golf
 - 2. Baseball
 - 3. Tennis
 - 4. Hockey

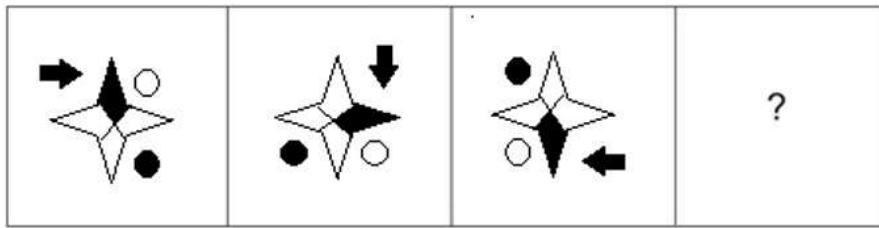
Question ID : 26433087198
Status : Answered
Chosen Option : 3

Q.13 Which of the following terms will replace the question mark (?) in the given series?
FPA, HSB, IVD, KYE, ?, NEH

- Ans
- 1. MAG
 - 2. MBG
 - 3. LBG
 - 4. LAH

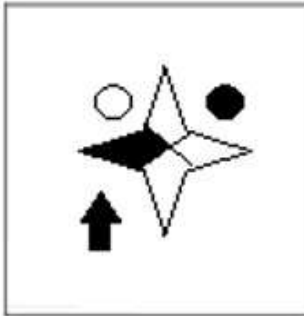
Question ID : 26433069456
Status : Answered
Chosen Option : 3

Q.14 Select the figure that will come next in the following figure series.

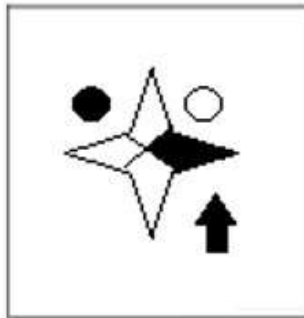


Ans

✓ 1.



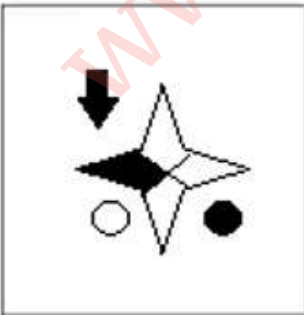
✗ 2.



✗ 3.



✗ 4.




Question ID : 26433083100
Status : Answered
Chosen Option : 1

Q.15 'Expand' is related to 'Stretch' in the same way as 'Contract' is related to '_____'.
 (The words must be considered as meaningful English words and must not be related to each other based on the number of letters/number of consonants/vowels in the word)

- Ans 1. Shrink
 2. Volume
 3. Huge
 4. Range

Question ID : 26433057750
 Status : Answered
 Chosen Option : 4

Q.16 A paper is folded and cut as shown below. How will it appear when unfolded?



Ans

- 1.
- 2.
- 3.
- 4.

Question ID : 26433090957
 Status : Answered
 Chosen Option : 2

Q.17 Select the correct mirror image of the given combination when the mirror is placed at 'PQ' as shown below.

& @ 5436 ARE | P
Q

Ans

- 1. & @ 5436 ARE
- 2. & @ 5486 ARE
- 3. & @ 5236 ARE
- 4. & @ 5436 ARE

Question ID : 26433082744

Status : Answered

Chosen Option : 4

Q.18 Ten friends went to a restaurant to have their lunch and sat in two parallel rows facing each other, such that five members are sitting in each row. K, L, M, N, O are sitting in Row 1 facing north, while persons F, G, H, I, J in Row 2 face south. N is facing the neighbour of J. Two persons sit between J and H. I sits in the middle of the line. G does not sit at any of the corners; G is neither facing M nor K. K sits to the left of M but not immediate left. J is the immediate neighbour of the person who is sitting at the corner. N does not sit at any of the corners. L is sitting second to the left of N. How many persons are sitting between J and G?

- Ans
- 1. Zero
 - 2. One
 - 3. Two
 - 4. Three

Question ID : 26433079070

Status : Not Attempted and Marked For Review

Chosen Option : --

Q.19 Which option represents the correct order of the given words as they would appear in an English dictionary?

1. MISTER
2. MASTER
3. MARTYR
4. MISTRESS
5. MARTHA

- Ans
- 1. 3, 5, 2, 1, 4
 - 2. 3, 5, 1, 2, 4
 - 3. 5, 3, 1, 2, 4
 - 4. 5, 3, 2, 1, 4

Question ID : 26433092546

Status : Answered

Chosen Option : 4

Q.20 Select the correct combination of mathematical signs to sequentially replace the * signs and to balance the given equation.

$$64 * 140 * 2 * 4 * 10$$

- Ans
- 1. +, -, =, ÷
 - 2. =, ÷, -, +
 - 3. -, +, ÷, =
 - 4. =, ÷, +, -

Question ID : 26433094996

Status : Answered

Chosen Option : 4

Section : Part-B-General Knowledge and General awareness

Q.1 The Industrial Policy Resolution,1956 classified the industries into _____ categories.

- Ans
- 1. two
 - 2. three
 - 3. four
 - 4. one

Question ID : 264330116144

Status : Not Answered

Chosen Option : --

Q.2 A Feature of Indian contitution i.e. Centrifugal form of federalism where the centre is stronger than the states is based on which model?

- Ans
- 1. Canadian model
 - 2. Britain model
 - 3. Japan model
 - 4. USA model

Question ID : 26433090676

Status : Answered

Chosen Option : 2

Q.3 Sonal Mansingh was awarded the Sangeet Natak Akademi Award for which of the following classical dance forms?

- Ans
- 1. Mohiniyattam
 - 2. Manipuri
 - 3. Odissi
 - 4. Kathakali

Question ID : 26433074076
Status : Answered
Chosen Option : 1

Q.4 What is the literacy rate among the males in India as per the Census 2011?

- Ans
- 1. 80.65%
 - 2. 82.14%
 - 3. 81.17%
 - 4. 84.35%

Question ID : 264330116058
Status : Not Answered
Chosen Option : --

Q.5 Atal Pension Yojana (APY), a pension scheme for citizens of India, is focused on the _____ sector workers.

- Ans
- 1. unspecified
 - 2. unorganised
 - 3. organised
 - 4. complicated

Question ID : 264330116195
Status : Not Answered
Chosen Option : --

Q.6 What is the standard height of a volleyball net from the ground for the men's team?

- Ans
- 1. 2.53 metres
 - 2. 2.43 metres
 - 3. 2.23 metres
 - 4. 2.33 metres

Question ID : 26433096229
Status : Not Answered
Chosen Option : --

Q.7 Which scheme has been proposed for development of state roads along coastal border areas, including connectivity of non major ports and major ports?

- Ans
- 1. Setubharatam Pariyojana
 - 2. National Highways Development Project
 - 3. The Golden Quadrilateral Project
 - 4. Sagarmala Pariyojana

Question ID : 264330115601
Status : Answered
Chosen Option : 1

Q.8 Bhopal lake, one of the largest artificial lake of its time was built in which century?

- Ans
- 1. 11th
 - 2. 13th
 - 3. 15th
 - 4. 19th

Question ID : 26433091499
Status : Not Answered
Chosen Option : --

Q.9 Which of the following is not present in a nucleus?

- Ans
- 1. nucleolus
 - 2. vacuole
 - 3. deoxyribonucleic acid
 - 4. genes

Question ID : 264330115191
Status : Not Answered
Chosen Option : --

Q.10 Which of the following acts passed by the Britishers disallowed Indians from possessing arms?

- Ans
- 1. The Arms Act, 1878
 - 2. The Arms Act, 1868
 - 3. The Arms Act, 1888
 - 4. The Arms Act, 1850

Question ID : 26433089901
Status : Not Answered
Chosen Option : --

Q.11 Who among the following has won the Balasaraswathi award for the year 2019?

- Ans 1. Krishna Ella
 2. Anuradha Pandey
 3. Alarmel Valli
 4. Mahaboob Subhani

Question ID : 264330115849
Status : Not Answered
Chosen Option : --

Q.12 Who was appointed as the new Chairman of CBSE in February 2022?

- Ans 1. Prof Dinesh Prasad Saklani
 2. Prof M Jagadesh Kumar
 3. Vineet Joshi
 4. Rajkumar Ranjan Singh

Question ID : 26433081826
Status : Not Answered
Chosen Option : --

Q.13 Who among the following was the first ruler of the Sunga dynasty?

- Ans 1. Parammitra Sunga
 2. Pushyamitra Sunga
 3. Parasmitra Sunga
 4. Pashupatinath Sunga

Question ID : 26433090575
Status : Answered
Chosen Option : 2

Q.14 As of November 2022, who among the following is the Chief Minister of Delhi?

- Ans 1. V. Narayanaswamy
 2. Arvind Kejriwal
 3. Pema Khandu
 4. Manoj Sinha

Question ID : 264330114974
Status : Answered
Chosen Option : 2

Q.15 Per capita income for a nation is calculated by dividing the country's national income by its _____.

- Ans 1. liability
 2. debt
 3. assets
 4. population

Question ID : 264330115354
Status : Not Answered
Chosen Option : --

Q.16 From which among the following countries Independence of judiciary has been borrowed in the Indian Constitution ?

- Ans
- 1. France
 - 2. USSR
 - 3. United Kingdom
 - 4. United States Of America

Question ID : 26433090669
Status : Answered
Chosen Option : 3

Q.17 Eden Gardens cricket ground is located in which of the following city?

- Ans
- 1. Chennai
 - 2. Lucknow
 - 3. Jaipur
 - 4. Kolkata

Question ID : 264330116263
Status : Answered
Chosen Option : 4

Q.18 Sodium is kept in which of the following?

- Ans
- 1. Kerosene
 - 2. Water
 - 3. Milk
 - 4. Sugar solution

Question ID : 26433089650
Status : Answered
Chosen Option : 1

Q.19 Karkidaka Vavu Bali of _____ is a Hindu ritual to appease ancestors.

- Ans
- 1. Kerala
 - 2. Maharashtra
 - 3. Meghalaya
 - 4. Goa

Question ID : 264330106220
Status : Not Answered
Chosen Option : --

Q.20 Green Revolution was originated in _____.

- Ans
- 1. Brazil
 - 2. Australia
 - 3. Mexico
 - 4. United State of America

Question ID : 264330115436
Status : Not Answered
Chosen Option : --

Section : Part-C-Elementary Mathematics

Q.1 In March, a shopkeeper has launched a discount scheme for 20% discount on the purchase of jeans and 12% discount on a coat. Also, he is offering 5% discount on using SBI card only to pay. Anand bought jeans of marked price of Rs.1,200 and a coat of marked price of Rs.4,500. How much does he have to pay if he pays through an HDFC Bank card?

- Ans
- 1. Rs.4,920
 - 2. Rs.4,560
 - 3. Rs.4,674
 - 4. Rs.5,016

Question ID : 26433080391
Status : Answered
Chosen Option : 1

Q.2 Akhil can complete a piece of work in 26 days. Sakshi and Akhil both can complete the same work in 20 days. They started together but Sakshi left after working for 6 days. Find the number of days in which Akhil will complete the remaining work.

- Ans
- 1. $55/4$ days
 - 2. $89/5$ days
 - 3. $12/5$ days
 - 4. $91/5$ days

Question ID : 264330116879
Status : Answered
Chosen Option : 4

Q.3 If 24 women can complete a work in 16 days, in how many days 32 women will complete the same work?

- Ans
- 1. 11
 - 2. 9
 - 3. 12
 - 4. 10

Question ID : 26433080331
Status : Answered
Chosen Option : 3

Q.4 A dog takes 5 leaps for every 6 leaps of a hare, but 4 leaps of the dog are equal to 5 leaps of the hare. The ratio of the speed of dog and hare is?

- Ans
- 1. 16 : 24
 - 2. 24 : 16
 - 3. 25 : 24
 - 4. 24 : 25

Question ID : 26433076381
Status : Answered
Chosen Option : 4

Q.5 In what ratio must water be mixed with milk costing Rs.15 per liter to obtain a mixture worth Rs.10 per liter? (water is available free of cost)

- Ans
- 1. 1 : 2
 - 2. 1 : 3
 - 3. 2 : 5
 - 4. 2 : 3

Question ID : 26433082707
Status : Answered
Chosen Option : 1

Q.6 If the radius of the base and the height of a cylinder are 17cm and 49 cm respectively, then what is the curved surface area of the cylinder? (Use $\pi = 22/7$)

- Ans
- 1. 5244 cm²
 - 2. 5256 cm²
 - 3. 5288 cm²
 - 4. 5236 cm²

Question ID : 26433075710
Status : Answered
Chosen Option : 4

Q.7 If a person weighing 40 kg joins, then the average weight of a group increases by 1 kg. If the weight of this person had been 28 kg, then the average weight of the group would have decreased by 1 kg. The actual average weight of the group is:

- Ans
- 1. 39 kg
 - 2. 24 kg
 - 3. 34 kg
 - 4. 29 kg

Question ID : 26433087346
Status : Not Attempted and Marked For Review
Chosen Option : --

Q.8 Cost of four chairs is equal to cost of two tables. Cost of four tables is equal to cost of two boards and cost of four boards is equal to cost of two fans. If a fan costs ₹850, then the cost of a chair is:

Ans

✗ 1. ₹425

✗ 2. ₹237.50

✓ 3. ₹106.25

✗ 4. ₹475

Question ID : 26433081565

Status : Answered

Chosen Option : 3

Q.9 A principal gives an amount of ₹26,450 in 2 years at the rate of 15% per annum on compound interest, interest is compounding annually. What is the principal?

Ans

✗ 1. ₹23,000

✓ 2. ₹20,000

✗ 3. ₹21,000

✗ 4. ₹22,000

Question ID : 26433091994

Status : Answered

Chosen Option : 2

Q.10 Find the value of y in the expression $2\frac{3}{7} \times \left[\left(11\frac{2}{6} \div \left(\frac{25}{18} + 2\frac{5}{6} - \frac{7}{36} \right) \right) \right] = y \div 72.5 \times 204$.

Ans

✗ 1. $\frac{21}{5}$

✗ 2. $\frac{19}{3}$

✓ 3. $\frac{17}{7}$

✗ 4. $\frac{15}{2}$

Question ID : 26433086266

Status : Not Attempted and Marked For Review

Chosen Option : --

Q.11 The distance 'd' a moving body travels, varies directly with time 't'. When a train travels 120 miles in 3 h, then how many miles would it travel in 8 h?

- Ans
- 1. 40
 - 2. 320
 - 3. 80
 - 4. 160

Question ID : 26433081581
Status : Answered
Chosen Option : 2

Q.12 If the simple interest on a sum of money for two years at 5% per annum is Rs.50, then what is the compound interest when compounding annually at the same rate and for the same time?

- Ans
- 1. Rs.53.00
 - 2. Rs.50.50
 - 3. Rs.53.50
 - 4. Rs.51.25

Question ID : 26433065291
Status : Answered
Chosen Option : 4

Q.13 A toy car costs Rs. 1800. Its price is reduced to Rs. 1500 in the sale. By what percentage was the price reduced?

- Ans
- 1. 60/7 percent
 - 2. 80/9 percent
 - 3. 100/7 percent
 - 4. 50/3 percent

Question ID : 264330116799
Status : Answered
Chosen Option : 4

Q.14 The LCM of the three numbers 120, 240 and 480 will be:

- Ans
- 1. 720
 - 2. 1080
 - 3. 960
 - 4. 480

Question ID : 26433091513
Status : Answered
Chosen Option : 4

Q.15 A thief is noticed by a policeman from a distance of 380 m. The thief starts running and the policeman chases him. The thief and policeman run at the speed of 25 m/sec and 30 m/sec respectively. What is the time taken by the policeman to catch the thief?

- Ans
- 1. 82 sec
 - 2. 56 sec
 - 3. 92 sec
 - 4. 76 sec

Question ID : 26433076402
Status : Answered
Chosen Option : 4

Q.16 A shopkeeper decided the price of 2 sarees and 4 shirts to be ₹1,600. With the same money one can buy 1 saree and 6 shirts. If I want to buy 12 shirts how much shall I have to pay?

- Ans
- 1. ₹4,800
 - 2. ₹2,400
 - 3. ₹1,600
 - 4. ₹1,800

Question ID : 26433075877
Status : Answered
Chosen Option : 2

Q.17 In an examination, there are three subjects of 100 marks each. A student scores 75% in the first subject and 86% in the second subject. He scored 68% in aggregate. His percentage of marks in the third subject is:

- Ans
- 1. 65%
 - 2. 48%
 - 3. 56%
 - 4. 43%

Question ID : 26433081013
Status : Answered
Chosen Option : 4

Q.18 Find the number of solid spheres, each of diameter 6 cm, that can be made by melting a solid metal cylinder of height 12 cm and diameter 6 cm.

- Ans
- 1. 6
 - 2. 3
 - 3. 4
 - 4. 2

Question ID : 26433080063
Status : Answered
Chosen Option : 3

Q.19 A and B are two typists. One afternoon, they were each given 80 pages for typing. They divided the work equally, but B finished 40 minutes before A, who took 4 hours for the same. The next afternoon, they were again given 121 pages to type. However, this time they decided to divide the work such that they finished typing simultaneously. How many pages did A have to type?

- Ans
- 1. 50 pages
 - 2. 77 pages
 - 3. 60 pages
 - 4. 55 pages

Question ID : 26433081047

Status : **Not Attempted and Marked For Review**

Chosen Option : --

Q.20 Tina gets a discount of 15 percent on a grinder whose marked price is Rs. 8200. Since she pays cash, she gets an additional 3 percent discount too. How much does she pay?

- Ans
- 1. Rs. 6850.80
 - 2. Rs. 6760.90
 - 3. Rs. 6970
 - 4. Rs. 6560

Question ID : 264330116764

Status : **Answered**

Chosen Option : 2

Section : Part-D-English

Q.1 Select the most appropriate meaning of the given idiom.

Add fuel to the flames

- Ans
- 1. On the point of dying
 - 2. At the slightest signal or provocation
 - 3. Making a bad situation even worse
 - 4. Performing a desirable action

Question ID : 26433086431

Status : **Not Answered**

Chosen Option : --

Q.2 Fill in the blanks with appropriate homonym.

If you want to _____ the world, you should be the one to take the first step.

- Ans
- 1. change (loose money)
 - 2. change (transfer)
 - 3. change (switch)
 - 4. change (alter)

Question ID : 26433092932

Status : **Answered**

Chosen Option : 4

Q.3 Select the most appropriate synonym of the word given below to fill in the blank in the following sentence.

Austere

My uncle said, "Think about a monk who lives a _____ life".

- Ans
- 1. dark
 - 2. luxurious
 - 3. strict
 - 4. logical

Question ID : 26433093261
Status : Answered
Chosen Option : 1

Q.4 Select the most appropriate option to fill in the blank.

Affluent classes live a life high on the _____.

- Ans
- 1. end
 - 2. state
 - 3. hog
 - 4. level

Question ID : 26433073214
Status : Answered
Chosen Option : 2

Q.5 Select the most appropriate option to fill in the blank.

Computers are able to process _____ amounts of data in mere seconds.

- Ans
- 1. peer
 - 2. bulge
 - 3. massive
 - 4. foster

Question ID : 26433060335
Status : Not Answered
Chosen Option : --

Q.6 Select the INCORRECTLY spelt word.

- Ans
- 1. Deseive
 - 2. Definite
 - 3. Decision
 - 4. Deposit

Question ID : 26433073926
Status : Answered
Chosen Option : 3

Q.7 Select the most appropriate option to substitute the underlined segment in the given sentence.

The surveyor wrote a report on the property after doing an on-field evaluation.

- Ans
- 1. official collection
 - 2. off-site assignment
 - 3. off-field tracking
 - 4. on-site assessment

Question ID : 26433092915
Status : Not Answered
Chosen Option : --

Q.8 Select the most appropriate option that can substitute the underlined segment in the given sentence.

During the lockdown, many families were barely able to make both the ends meet.

- Ans
- 1. can manage to make both the ends meet
 - 2. could make both the ends meet
 - 3. barely managed to make ends meet
 - 4. were making both the ends meet

Question ID : 26433094277
Status : Not Answered
Chosen Option : --

Q.9 Select the most appropriate option to fill in the blank.

The students arranged an open _____ on the topic of pandemics and social life after them.

- Ans
- 1. drought
 - 2. debase
 - 3. debt
 - 4. debate

Question ID : 26433073785
Status : Answered
Chosen Option : 4

Q.10 Which of the following options is most similar in meaning to the given word?
Seize

- Ans
- 1. Filter
 - 2. End
 - 3. Ocean
 - 4. Catch

Question ID : 26433088811
Status : Answered
Chosen Option : 4

Q.11 Select the option that expresses the given sentence in simple past tense.

- A. I was calling you some time back to resolve this issue.
- B. I had been calling you some time back to resolve this issue.
- C. I have called you some time back to resolve this issue.
- D. I called you some time back to resolve this issue.

- Ans
- 1. A
 - 2. C
 - 3. B
 - 4. D

Question ID : 26433073519
Status : Not Answered
Chosen Option : --

Q.12 Select the most appropriate ANTONYM of the given word.

Ready

- Ans
- 1. Set
 - 2. Unresponsive
 - 3. Holistic
 - 4. Humble

Question ID : 26433072419
Status : Answered
Chosen Option : 2

Q.13 Select the most appropriate option that can substitute the underlined segment in the given sentence.

To insure peace and calm, the government imposed a countrywide curfew for three days.

- Ans
- 1. To insure peace along calm
 - 2. In to ensure peace and calm
 - 3. To ensure peace and calm
 - 4. Insure peace and calm

Question ID : 26433091769
Status : Not Answered
Chosen Option : --

Q.14 Select the most appropriate synonym of the underlined word.

The manager would like to talk to the team member about an important issue immediately.

- Ans
- 1. a bad
 - 2. an enormous
 - 3. a good
 - 4. a significant

Question ID : 26433089001
Status : Answered
Chosen Option : 4

Q.15 Select the most appropriate ANTONYM of the word given in the bracket to fill in the blank.

He carried his method into every detail of life and lived on his earnings with extreme _____ (frugality).

- Ans
- 1. luxury
 - 2. spare
 - 3. assist
 - 4. ease

Question ID : 26433060327

Status : Not Answered

Chosen Option : --

Comprehension:

In the following passage, some words have been deleted. Read the passage carefully and select the most appropriate option to fill in each blank.

It's no less than a pilgrimage for those who come to our shores for medical treatments. Medical tourism in India is on an upswing, with about 5,00,000 foreign patients travelling to India for medical care. The (1) _____ worth of the industry is estimated at ₹1,000 crores, with a growth potential of 100 per cent every year. The industry is poised to bring in as much as ₹5,000 to ₹10,000 crores by 2012.

Many factors contribute to the expansion of this sector, one of them being the (2) _____ facilities. "Only when we go to different countries do we realise how much better off we are in terms of infrastructure and quality. The country has the resources to be on the global map for medical tourism as it has a combination of all the right ingredients," says Dr. Rajendra Prasad, senior consultancy neurosurgery.

India is also renowned for its talent pool and the doctors are known for their (3) _____ and knowledge. Cutting edge medical technologies and drugs available are on a par with the developed world. The cost factor is another big reason for the popularity of India as the medical destination, the difference being as much as 10 or 20 times.

The culture of 'Atithi Devo Bhava' extends into medical tourism, with quality facilities being offered by hospitals to international patients. Super speciality hospitals are successfully providing unparalleled medical treatment to patients, resulting in (4) _____ outcomes, very low risk of infections and excellent post surgery care. The whole experience can be simply termed as 'value for money'.

Medical tourism is (5) _____ a fast-growing sector. It is felt that the government is not doing enough to promote this sector. The Ministry of Tourism should pitch in a big way with more financial support to stakeholders and better infrastructure facilities. More liberal loans, tax benefits and incentives to medical service providers will go a long way in giving a boost to this industry. Promoting medical tourism would mean more employment opportunities for our people, more goodwill for the country and more dollars for the government treasury.

SubQuestion No : 16

Q.16 Select the most appropriate option to fill in blank number 1.

- Ans
- 1. current
 - 2. living
 - 3. prevalent
 - 4. modern

Question ID : 26433097072

Status : Not Answered

Chosen Option : --

Comprehension:

In the following passage, some words have been deleted. Read the passage carefully and select the most appropriate option to fill in each blank.

It's no less than a pilgrimage for those who come to our shores for medical treatments. Medical tourism in India is on an upswing, with about 5,00,000 foreign patients travelling to India for medical care. The (1) _____ worth of the industry is estimated at ₹1,000 crores, with a growth potential of 100 per cent every year. The industry is poised to bring in as much as ₹5,000 to ₹10,000 crores by 2012.

Many factors contribute to the expansion of this sector, one of them being the (2) _____ facilities. "Only when we go to different countries do we realise how much better off we are in terms of infrastructure and quality. The country has the resources to be on the global map for medical tourism as it has a combination of all the right ingredients," says Dr. Rajendra Prasad, senior consultancy neurosurgery.

India is also renowned for its talent pool and the doctors are known for their (3) _____ and knowledge. Cutting edge medical technologies and drugs available are on a par with the developed world. The cost factor is another big reason for the popularity of India as the medical destination, the difference being as much as 10 or 20 times.

The culture of 'Atithi Devo Bhava' extends into medical tourism, with quality facilities being offered by hospitals to international patients. Super speciality hospitals are successfully providing unparalleled medical treatment to patients, resulting in (4) _____ outcomes, very low risk of infections and excellent post surgery care. The whole experience can be simply termed as 'value for money'.

Medical tourism is (5) _____ a fast-growing sector. It is felt that the government is not doing enough to promote this sector. The Ministry of Tourism should pitch in a big way with more financial support to stakeholders and better infrastructure facilities. More liberal loans, tax benefits and incentives to medical service providers will go a long way in giving a boost to this industry. Promoting medical tourism would mean more employment opportunities for our people, more goodwill for the country and more dollars for the government treasury.

SubQuestion No : 17

Q.17 Select the most appropriate option to fill in blank number 2.

- Ans 1. high-end
 2. fashionable
 3. ostentatious
 4. showy

Question ID : 26433097073

Status : Not Answered

Chosen Option : --

Comprehension:

In the following passage, some words have been deleted. Read the passage carefully and select the most appropriate option to fill in each blank.

It's no less than a pilgrimage for those who come to our shores for medical treatments. Medical tourism in India is on an upswing, with about 5,00,000 foreign patients travelling to India for medical care. The (1) _____ worth of the industry is estimated at ₹1,000 crores, with a growth potential of 100 per cent every year. The industry is poised to bring in as much as ₹5,000 to ₹10,000 crores by 2012.

Many factors contribute to the expansion of this sector, one of them being the (2) _____ facilities. "Only when we go to different countries do we realise how much better off we are in terms of infrastructure and quality. The country has the resources to be on the global map for medical tourism as it has a combination of all the right ingredients," says Dr. Rajendra Prasad, senior consultancy neurosurgery.

India is also renowned for its talent pool and the doctors are known for their (3) _____ and knowledge. Cutting edge medical technologies and drugs available are on a par with the developed world. The cost factor is another big reason for the popularity of India as the medical destination, the difference being as much as 10 or 20 times.

The culture of 'Atithi Devo Bhava' extends into medical tourism, with quality facilities being offered by hospitals to international patients. Super speciality hospitals are successfully providing unparalleled medical treatment to patients, resulting in (4) _____ outcomes, very low risk of infections and excellent post surgery care. The whole experience can be simply termed as 'value for money'.

Medical tourism is (5) _____ a fast-growing sector. It is felt that the government is not doing enough to promote this sector. The Ministry of Tourism should pitch in a big way with more financial support to stakeholders and better infrastructure facilities. More liberal loans, tax benefits and incentives to medical service providers will go a long way in giving a boost to this industry. Promoting medical tourism would mean more employment opportunities for our people, more goodwill for the country and more dollars for the government treasury.

SubQuestion No : 18

Q.18 Select the most appropriate option to fill in blank number 3.

- Ans** 1. expertise
 2. conversance
 3. acquaintance
 4. intimacy

Question ID : 26433097074

Status : **Not Answered**

Chosen Option : --

Comprehension:

In the following passage, some words have been deleted. Read the passage carefully and select the most appropriate option to fill in each blank.

It's no less than a pilgrimage for those who come to our shores for medical treatments. Medical tourism in India is on an upswing, with about 5,00,000 foreign patients travelling to India for medical care. The (1) _____ worth of the industry is estimated at ₹1,000 crores, with a growth potential of 100 per cent every year. The industry is poised to bring in as much as ₹5,000 to ₹10,000 crores by 2012.

Many factors contribute to the expansion of this sector, one of them being the (2) _____ facilities. "Only when we go to different countries do we realise how much better off we are in terms of infrastructure and quality. The country has the resources to be on the global map for medical tourism as it has a combination of all the right ingredients," says Dr. Rajendra Prasad, senior consultancy neurosurgery.

India is also renowned for its talent pool and the doctors are known for their (3) _____ and knowledge. Cutting edge medical technologies and drugs available are on a par with the developed world. The cost factor is another big reason for the popularity of India as the medical destination, the difference being as much as 10 or 20 times.

The culture of 'Atithi Devo Bhava' extends into medical tourism, with quality facilities being offered by hospitals to international patients. Super speciality hospitals are successfully providing unparalleled medical treatment to patients, resulting in (4) _____ outcomes, very low risk of infections and excellent post surgery care. The whole experience can be simply termed as 'value for money'.

Medical tourism is (5) _____ a fast-growing sector. It is felt that the government is not doing enough to promote this sector. The Ministry of Tourism should pitch in a big way with more financial support to stakeholders and better infrastructure facilities. More liberal loans, tax benefits and incentives to medical service providers will go a long way in giving a boost to this industry. Promoting medical tourism would mean more employment opportunities for our people, more goodwill for the country and more dollars for the government treasury.

SubQuestion No : 19

Q.19 Select the most appropriate option to fill in blank number 4.

- Ans 1. fancy
 2. superior
 3. ultimate
 4. premium

Question ID : 26433097075

Status : Not Answered

Chosen Option : --

Comprehension:

In the following passage, some words have been deleted. Read the passage carefully and select the most appropriate option to fill in each blank.

It's no less than a pilgrimage for those who come to our shores for medical treatments. Medical tourism in India is on an upswing, with about 5,00,000 foreign patients travelling to India for medical care. The (1) _____ worth of the industry is estimated at ₹1,000 crores, with a growth potential of 100 per cent every year. The industry is poised to bring in as much as ₹5,000 to ₹10,000 crores by 2012.

Many factors contribute to the expansion of this sector, one of them being the (2) _____ facilities. "Only when we go to different countries do we realise how much better off we are in terms of infrastructure and quality. The country has the resources to be on the global map for medical tourism as it has a combination of all the right ingredients," says Dr. Rajendra Prasad, senior consultancy neurosurgery.

India is also renowned for its talent pool and the doctors are known for their (3) _____ and knowledge. Cutting edge medical technologies and drugs available are on a par with the developed world. The cost factor is another big reason for the popularity of India as the medical destination, the difference being as much as 10 or 20 times.

The culture of 'Atithi Devo Bhava' extends into medical tourism, with quality facilities being offered by hospitals to international patients. Super speciality hospitals are successfully providing unparalleled medical treatment to patients, resulting in (4) _____ outcomes, very low risk of infections and excellent post surgery care. The whole experience can be simply termed as 'value for money'.

Medical tourism is (5) _____ a fast-growing sector. It is felt that the government is not doing enough to promote this sector. The Ministry of Tourism should pitch in a big way with more financial support to stakeholders and better infrastructure facilities. More liberal loans, tax benefits and incentives to medical service providers will go a long way in giving a boost to this industry. Promoting medical tourism would mean more employment opportunities for our people, more goodwill for the country and more dollars for the government treasury.

SubQuestion No : 20

Q.20 Select the most appropriate option to fill in blank number 5.

- Ans 1. undoubtedly
 2. forsooth
 3. alright
 4. conceivably

Question ID : 26433097076

Status : Not Answered

Chosen Option : --

Section : Part-D-Hindi

Q.1 जिसमें शक्ति न हो' वाक्यांश के लिए इनमें से उपयुक्त शब्द कौन-सा है?

- Ans 1. अशक्य
 2. अशोक
 3. अशक्त
 4. शकत

Question ID : 26433066890

Status : Not Answered

Chosen Option : --

Q.2 निम्न में से कौन-सा शब्द 'कमल' शब्द का पर्यायवाची है?

- Ans
- 1. जलद
 - 2. कंचन
 - 3. नीरद
 - 4. राजीव

Question ID : 26433067075
Status : Not Answered
Chosen Option : --

Q.3 निम्नलिखित मुहावरे के उचित अर्थ का चयन कीजिए-
चेहरे पर हवाईयाँ उड़ना

- Ans
- 1. चुप रहना
 - 2. घबराना
 - 3. अचानक गिरना
 - 4. उड़ान भरना

Question ID : 26433065883
Status : Not Answered
Chosen Option : --

Q.4 "यह घटना अद्भुत है।"
उक्त वाक्य में प्रयुक्त 'अद्भुत' के स्थान पर उसके समानार्थी शब्द का प्रयोग निम्न में से किस वाक्य में नहीं किया गया है?

- Ans
- 1. यह घटना विलक्षण है।
 - 2. यह घटना अपूर्व है।
 - 3. यह घटना आश्चर्यजनक है।
 - 4. यह घटना भयानक है।

Question ID : 26433085149
Status : Not Answered
Chosen Option : --

Q.5 नीचे दिए गए वाक्य के अशुद्ध भाग का चयन कीजिए।
अध्यापक ने आपकी अभ्यास पुस्तिका का अवलोकन करके देख लिया है।

- Ans
- 1. लिया है।
 - 2. अभ्यास पुस्तिका का
 - 3. अध्यापक ने आपकी
 - 4. अवलोकन करके देख

Question ID : 26433085084
Status : Not Answered
Chosen Option : --

Q.6 'मुझे आप पुराने पते पर पत्र दीजिएगा।' इस वाक्य में 'दीजिएगा' के स्थान पर उपयुक्त शब्द क्या होगा?

- Ans
- 1. आइएगा
 - 2. लीजिएगा
 - 3. भेजिएगा
 - 4. सोचिएगा

Question ID : 26433066800
Status : Not Answered
Chosen Option : --

Q.7 निम्नलिखित वाक्य में से अशुद्धि पहचानें।
आपकी घड़ी में कै बजे हैं?

- Ans
- 1. आपकी
 - 2. बजे
 - 3. घड़ी
 - 4. कै

Question ID : 26433080930
Status : Not Answered
Chosen Option : --

Q.8 'राई का _____ बनाना।'
उपरोक्त मुहावरे में रिक्त स्थान की पूर्ति उचित शब्द द्वारा कीजिए।

- Ans
- 1. दीवार
 - 2. घर
 - 3. किला
 - 4. पहाड़

Question ID : 26433069687
Status : Not Answered
Chosen Option : --

Q.9 राहुल का बेटा नित उन्नति की ओर अग्रसर है।
उपरोक्त वाक्य में रेखांकित शब्द का उपयुक्त विलोम शब्द निम्न में से क्या होगा?

- Ans
- 1. अउन्नति
 - 2. अननति
 - 3. पदोन्नति
 - 4. अवनति

Question ID : 26433079637
Status : Not Answered
Chosen Option : --

Q.10 'जो स्त्री प्रिय बोलती है', वाक्यांश के लिए एक शब्द _____ है।

- Ans
- 1. प्रेयसी
 - 2. कोमलांगी
 - 3. कर्णप्रिय
 - 4. प्रियंवदा

Question ID : 26433062942
Status : Not Answered
Chosen Option : --

Q.11 ऊपर की ओर जाने वाला।
उपरोक्त वाक्यांश के लिए एक शब्द होगा-

- Ans
- 1. अस्ताचल
 - 2. उपही
 - 3. उरक्षत
 - 4. ऊर्ध्वगामी

Question ID : 26433070062
Status : Not Answered
Chosen Option : --

Q.12 निम्न में से कौन-सा शब्द 'बिजली' शब्द का पर्यायवाची शब्द नहीं है?

- Ans
- 1. चंचला
 - 2. दामिनी
 - 3. तड़ित
 - 4. तटिनी

Question ID : 26433067081
Status : Not Answered
Chosen Option : --

Q.13 निम्नलिखित विकल्पों में से कौन सा एक वाक्य सम्बन्धवाचक सर्वनाम का उदाहरण नहीं है?

- Ans
- 1. जो व्यक्ति आपत्ति में विचलित नहीं होता, वह अवश्य अपनी मंजिल पाता है।
 - 2. यह अच्छा विचार है।
 - 3. जो दूसरों के लिए गड्ढा खोदता है, वह स्वयं उसमें गिरता है।
 - 4. जिसे चोट लगती है, वही पीर समझता है।

Question ID : 26433091241
Status : Not Answered
Chosen Option : --

Q.14 निम्नलिखित में से किस विकल्प में सर्वनाम शब्द त्रुटिपूर्ण है?

- Ans 1. उसने अपने माली को काम से निकाल दिया।
 2. तुम तो बहुत व्यस्त हो।
 3. हमारे से अब यह सब नहीं होता।
 4. आप लोग बहुत बड़े आदमी हैं।

Question ID : 26433063003

Status : Not Answered

Chosen Option : --

Q.15 निम्नलिखित में से शुद्ध वाक्य कौन-सा है?

- Ans 1. रमेश आगरे गया था।
 2. अल्पेश सवेरे जल्दी उठता है।
 3. राघव अपने मामे के साथ घूमने गया है।
 4. सीता पटने से आयी है।

Question ID : 26433085139

Status : Not Answered

Chosen Option : --

Comprehension:

दिए गए गद्यांश के अनुसार प्रश्न संख्या 1-5 के उत्तर दीजिए।
पृथ्वी के ऊपर वायुमण्डल के स्ट्रेटोस्फियर में ओज़ोन गैस की एक मोटी परत है। यह धरती के जीवन का रक्षा कवच है जिससे (1) _____ से आने वाली हानिकारक (2) _____ रोक ली जाती हैं। किंतु पृथ्वी के ऊपर जहरीली गैसों के बादल बढ़ते जाने के कारण सूर्य की अनावश्यक किरणें बाह्य अंतरिक्ष में वर्तित नहीं हो पातीं जिसके कारण पृथ्वी का (3) _____ (ग्लोबल वार्मिंग) बढ़ता जा रहा है। इससे छोटे-बड़े सभी द्वीपसमूहों एवं महाद्वीपों के (4) _____ क्षेत्रों के डूब जाने का खतरा बढ़ गया है। इसे 'ग्रीन हाउस प्रभाव' कहते हैं। यही स्थिति रही तो मुंबई जैसे महानगर प्रलय की गोद में समा सकते हैं। पृथ्वी पर बढ़ते तापमान के कारण विश्व (5) _____ को अमृत एवं पोषक जल प्रदान करने वाले ग्लेशियर या तो लुप्त हो गए हैं या लुप्त होने की ओर बढ़ते जा रहे हैं।

SubQuestion No : 16

Q.16 दिए गए शब्दों में से उचित शब्द चुनकर रिक्त स्थान (1) की पूर्ति कीजिए।

- Ans 1. तारामण्डल
 2. शनि ग्रह
 3. चंद्रमा
 4. सूर्य

Question ID : 26433094109

Status : Not Answered

Chosen Option : --

Comprehension:

दिए गए गद्यांश के अनुसार प्रश्न संख्या 1-5 के उत्तर दीजिए।
पृथ्वी के ऊपर वायुमण्डल के स्ट्रेटोस्फियर में ओज़ोन गैस की एक मोटी परत है। यह धरती के जीवन का रक्षा कवच है जिससे (1) _____ से आने वाली हानिकारक (2) _____ रोक ली जाती हैं। किंतु पृथ्वी के ऊपर ज़हरीली गैसों के बादल बढ़ते जाने के कारण सूर्य की अनावश्यक किरणें बाह्य अंतरिक्ष में वर्तित नहीं हो पातीं जिसके कारण पृथ्वी का (3) _____ (ग्लोबल वार्मिंग) बढ़ता जा रहा है। इससे छोटे-बड़े सभी द्वीपसमूहों एवं महाद्वीपों के (4) _____ क्षेत्रों के डूब जाने का खतरा बढ़ गया है। इसे 'ग्रीन हाउस प्रभाव' कहते हैं। यही स्थिति रही तो मुंबई जैसे महानगर प्रलय की गोद में समा सकते हैं। पृथ्वी पर बढ़ते तापमान के कारण विश्व (5) _____ को अमृत एवं पोषक जल प्रदान करने वाले ग्लेशियर या तो लुप्त हो गए हैं या लुप्त होने की ओर बढ़ते जा रहे हैं।

SubQuestion No : 17

Q.17 दिए गए शब्दों में से उचित शब्द चुनकर रिक्त स्थान (2) की पूर्ति कीजिए।

- Ans 1. रौशनी
 2. किरणें
 3. तरंगें
 4. हवाएँ

Question ID : 26433094110

Status : Not Answered

Chosen Option : --

Comprehension:

दिए गए गद्यांश के अनुसार प्रश्न संख्या 1-5 के उत्तर दीजिए।
पृथ्वी के ऊपर वायुमण्डल के स्ट्रेटोस्फियर में ओज़ोन गैस की एक मोटी परत है। यह धरती के जीवन का रक्षा कवच है जिससे (1) _____ से आने वाली हानिकारक (2) _____ रोक ली जाती हैं। किंतु पृथ्वी के ऊपर ज़हरीली गैसों के बादल बढ़ते जाने के कारण सूर्य की अनावश्यक किरणें बाह्य अंतरिक्ष में वर्तित नहीं हो पातीं जिसके कारण पृथ्वी का (3) _____ (ग्लोबल वार्मिंग) बढ़ता जा रहा है। इससे छोटे-बड़े सभी द्वीपसमूहों एवं महाद्वीपों के (4) _____ क्षेत्रों के डूब जाने का खतरा बढ़ गया है। इसे 'ग्रीन हाउस प्रभाव' कहते हैं। यही स्थिति रही तो मुंबई जैसे महानगर प्रलय की गोद में समा सकते हैं। पृथ्वी पर बढ़ते तापमान के कारण विश्व (5) _____ को अमृत एवं पोषक जल प्रदान करने वाले ग्लेशियर या तो लुप्त हो गए हैं या लुप्त होने की ओर बढ़ते जा रहे हैं।

SubQuestion No : 18

Q.18 दिए गए शब्दों में से उचित शब्द चुनकर रिक्त स्थान (3) की पूर्ति कीजिए।

- Ans 1. क्षेत्रफल
 2. बोझ
 3. प्रदूषण
 4. तापमान

Question ID : 26433094111

Status : Not Answered

Chosen Option : --

Comprehension:

दिए गए गद्यांश के अनुसार प्रश्न संख्या 1-5 के उत्तर दीजिए।
पृथ्वी के ऊपर वायुमण्डल के स्ट्रेटोस्फियर में ओज़ोन गैस की एक मोटी परत है। यह धरती के जीवन का रक्षा कवच है जिससे (1) _____ से आने वाली हानिकारक (2) _____ रोक ली जाती हैं। किंतु पृथ्वी के ऊपर ज़हरीली गैसों के बादल बढ़ते जाने के कारण सूर्य की अनावश्यक किरणें बाह्य अंतरिक्ष में वर्तित नहीं हो पातीं जिसके कारण पृथ्वी का (3) _____ (ग्लोबल वार्मिंग) बढ़ता जा रहा है। इससे छोटे-बड़े सभी द्वीपसमूहों एवं महाद्वीपों के (4) _____ क्षेत्रों के डूब जाने का खतरा बढ़ गया है। इसे 'ग्रीन हाउस प्रभाव' कहते हैं। यही स्थिति रही तो मुंबई जैसे महानगर प्रलय की गोद में समा सकते हैं। पृथ्वी पर बढ़ते तापमान के कारण विश्व (5) _____ को अमृत एवं पोषक जल प्रदान करने वाले ग्लेशियर या तो लुप्त हो गए हैं या लुप्त होने की ओर बढ़ते जा रहे हैं।

SubQuestion No : 19

Q.19 दिए गए शब्दों में से उचित शब्द चुनकर रिक्त स्थान (4) की पूर्ति कीजिए।

- Ans
- 1. मैदानी
 - 2. पहाड़ी
 - 3. रेगिस्तानी
 - 4. तटीय

Question ID : 26433094112

Status : Not Answered

Chosen Option : --

Comprehension:

दिए गए गद्यांश के अनुसार प्रश्न संख्या 1-5 के उत्तर दीजिए।
पृथ्वी के ऊपर वायुमण्डल के स्ट्रेटोस्फियर में ओज़ोन गैस की एक मोटी परत है। यह धरती के जीवन का रक्षा कवच है जिससे (1) _____ से आने वाली हानिकारक (2) _____ रोक ली जाती हैं। किंतु पृथ्वी के ऊपर ज़हरीली गैसों के बादल बढ़ते जाने के कारण सूर्य की अनावश्यक किरणें बाह्य अंतरिक्ष में वर्तित नहीं हो पातीं जिसके कारण पृथ्वी का (3) _____ (ग्लोबल वार्मिंग) बढ़ता जा रहा है। इससे छोटे-बड़े सभी द्वीपसमूहों एवं महाद्वीपों के (4) _____ क्षेत्रों के डूब जाने का खतरा बढ़ गया है। इसे 'ग्रीन हाउस प्रभाव' कहते हैं। यही स्थिति रही तो मुंबई जैसे महानगर प्रलय की गोद में समा सकते हैं। पृथ्वी पर बढ़ते तापमान के कारण विश्व (5) _____ को अमृत एवं पोषक जल प्रदान करने वाले ग्लेशियर या तो लुप्त हो गए हैं या लुप्त होने की ओर बढ़ते जा रहे हैं।

SubQuestion No : 20

Q.20 दिए गए शब्दों में से उचित शब्द चुनकर रिक्त स्थान (5) की पूर्ति कीजिए।

- Ans
- 1. सभ्यता
 - 2. बिरादरी
 - 3. परिवेश
 - 4. संस्कृति

Question ID : 26433094113

Status : Not Answered

Chosen Option : --