

# Constable GD in CAPFs SSF Rifleman GD in Assam Rifles and Sepoy in NCB Examination 2022

Roll Number	<a href="http://www.govtjobsalert.in">www.govtjobsalert.in</a>
Candidate Name	<a href="http://www.govtjobsalert.in">www.govtjobsalert.in</a>
Venue Name	ION Digital Zone iDZ SARONA
Exam Date	13/02/2023
Exam Time	5:15 PM - 6:15 PM
Subject	Constable GD Examination 2022

## Section : Part-A-General Intelligence and Reasoning

**Q.1** Six students Lovely, Johnson, Will, Marie, Samantha and Joel are sitting around a circular table facing the centre. Lovely is sitting second to the left of Johnson. Will is sitting second to the right of Johnson. Samantha is sitting third to the left of Will. Joel is sitting third to the right of Johnson. Marie is the immediate neighbour of Will and Johnson. Who is sitting between Lovely and Johnson?

- Ans
- 1. Joel
  - 2. Samantha
  - 3. Will
  - 4. Marie

Question ID : 26433081783

Status : Not Attempted and Marked For Review

Chosen Option : --

**Q.2** Select the letter-cluster from among the given options that can replace the question mark (?) in the following series.  
HLPE, DHXM, ZDFU, ? , RVVK

- Ans
- 1. VQHO
  - 2. FBIR
  - 3. VZNC
  - 4. FPED

Question ID : 26433074752

Status : Answered

Chosen Option : 3

**Q.3** Which of the following numbers will replace the question mark and complete the given number series?  
14, 16, 21, 32, 49, 72, ?

- Ans
- 1. 105
  - 2. 98
  - 3. 103
  - 4. 101

Question ID : 26433069596

Status : Answered

Chosen Option : 4

**Q.4** Select the option that is related to the third word in the same way as the second word is related to the first word.  
(The words must be considered as meaningful English words and must not be related to each other based on the number of letters/number of consonants/vowels in the word)

Wheel : Cart :: Nib : ?

Ans  1. Write

2. Pen

3. Pillow

4. Paper

Question ID : 26433067971

Status : Answered

Chosen Option : 2

**Q.5** In a certain code language,  
'A + B' means 'A is the mother of B',  
'A - B' means 'A is the father of B',  
'A x B' means 'A is the brother of B' and  
'A & B' means 'A is the sister of B'.  
How is Q related to N if N - D x P + Q & C?

Ans  1. Daughter's daughter

2. Daughter

3. Sister

4. Sister's daughter

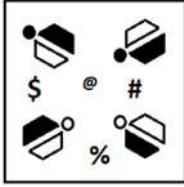
Question ID : 26433070371

Status : Answered

Chosen Option : 3

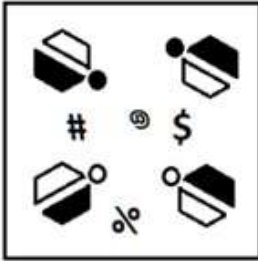
Q.6 Which of the following figures is the exact mirror image of the given problem figure when the mirror is held at the right side?

Problem figure:

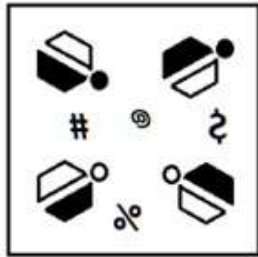


Ans

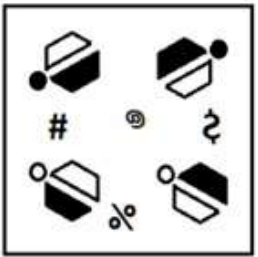
X 1.



✓ 2.



X 3.



X 4.

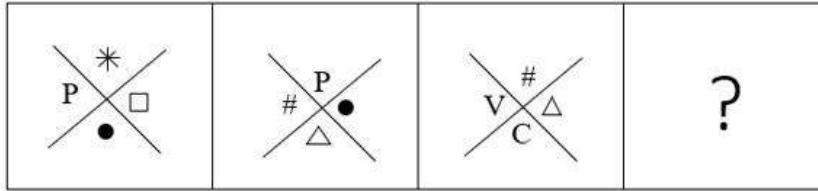


Question ID : 26433087092

Status : Answered

Chosen Option : 4

**Q.7** Select the figure from among the given options that can replace the question mark (?) in the following series.

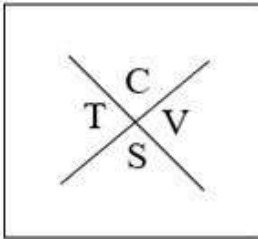


Ans


✗ 1.




✗ 2.



✗ 3.



✓ 4.



Question ID : 26433080759

Status : Not Answered

Chosen Option : --

Q.8 Nine students A, B, C, D, E, F, G, H and Z are seated in one row not necessarily in the same order. D is to the immediate left of C who is at third place to the right of E. B is at one end of the row. H is seated adjacent to both F and G. F is at the third place to the left of B. A is sitting to the immediate left of F. All these nine students are facing the north direction who is sitting in between D and A?

- Ans
- 1. F
  - 2. C
  - 3. Z
  - 4. H

Question ID : 26433079057

Status : **Not Attempted and Marked For Review**

Chosen Option : --

Q.9 Select the option that is related to the third word in the same way as the second word is related to the first word.  
(The words must be considered as meaningful English words and must not be related to each other based on the number of letters/number of consonants/vowels in the word)

India : New Delhi :: Australia : ?

- Ans
- 1. Melbourne
  - 2. Canberra
  - 3. Perth
  - 4. Sydney

Question ID : 26433079473

Status : **Answered**

Chosen Option : 4

Q.10 Which two signs should be interchanged to make the below equation mathematically correct?

$$24 \times 12 - 6 \div 40 + 20 = 28$$

- Ans
- 1. - and +
  - 2. ÷ and -
  - 3. + and ×
  - 4. + and ÷

Question ID : 264330117524

Status : **Answered**

Chosen Option : 2

Q.11 Which of the following numbers will replace the question mark (?) in the given series?  
3, 9, 21, 45, ?

- Ans
- 1. 156
  - 2. 93
  - 3. 178
  - 4. 134

Question ID : 26433082735

Status : **Answered**

Chosen Option : 2

Q.12 Select the option that is related to the fifth number in the same way as the second number is related to the first number and fourth number is related to the third number.  
2 : 2 :: 4 : 8 :: 8 : ?

- Ans
- 1. 20
  - 2. 16
  - 3. 32
  - 4. 34

Question ID : 26433069431  
Status : Answered  
Chosen Option : 3

Q.13 In a certain code language, 'DRIVER' is written as 'JSETGX' and 'DURING' is written as 'SVEIPK'. How will 'DOLLAR' be written as in that language?

- Ans
- 1. LODRAL
  - 2. MPETCN
  - 3. MPERAL
  - 4. RALLOD

Question ID : 26433090042  
Status : Not Answered  
Chosen Option : --

Q.14 Three statements are given, followed by three conclusions numbered I, II and III. Assuming the statements to be true, even if they seem to be at variance with commonly known facts, decide which of the conclusions logically follow(s) from the statements.

Statements:

No pen is a box.  
Some pens are chalks.  
All chalks are erasers.

Conclusions:

- I. Some erasers are pens.
- II. Some chalks are not boxes.
- III. Some boxes are not erasers.

- Ans
- 1. Only conclusion III follows
  - 2. Only conclusions II and III follow
  - 3. Only conclusions I and II follow
  - 4. All conclusions follow

Question ID : 26433090991  
Status : Answered  
Chosen Option : 2

Q.15 Which of the following terms will replace the question mark (?) in the given series?  
EPJY, GNKX, ILLW, ?, MHNU

- Ans
- 1. KKNV
  - 2. LJNU
  - 3. LJMU
  - 4. KJMV

Question ID : 26433069444  
Status : Answered  
Chosen Option : 4

**Q.16** Select the option that represents the correct order of the given words as they would appear in an English dictionary.

1. SPINY
2. SPINE
3. SPINACH
4. SPINNEY
5. SPIRIT
6. SPIKE

- Ans
- 1. 2, 5, 3, 4, 6, 1
  - 2. 6, 2, 5, 1, 4, 3
  - 3. 6, 3, 2, 4, 1, 5
  - 4. 3, 4, 5, 1, 2, 6

Question ID : 26433079379

Status : Answered

Chosen Option : 3

**Q.17** Which two numbers(not digits) and two signs should be interchanged to make the given equation correct?

$$18 \div 3 - 30 + 15 \times 2 = -1$$


- Ans
- 1. 3 and 30;  $\times$  and  $+$
  - 2. 2 and 18;  $+$  and  $\times$
  - 3. 15 and 3;  $+$  and  $-$
  - 4. 18 and 15;  $+$  and  $-$

Question ID : 26433092746

Status : Answered

Chosen Option : 1

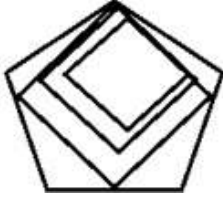
Q.18 Select the option figure in which the given figure (X) is embedded as its part  
(rotation is NOT allowed).



(X)

Ans

✓ 1.



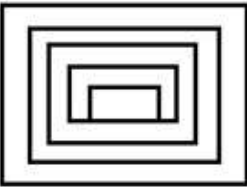
✗ 2.



✗ 3.



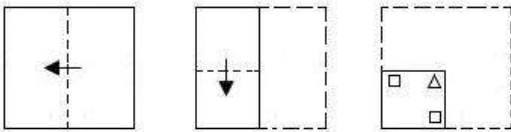
✗ 4.



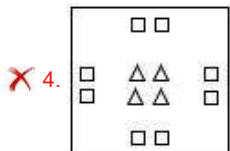
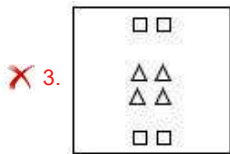
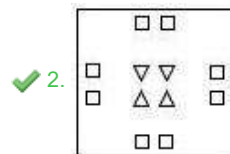
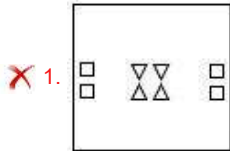
Question ID : 26433069536  
Status : Answered  
Chosen Option : 1



Q.19 A paper is folded and cut as shown below. How will it appear when unfolded?



Ans



Question ID : 26433090089  
 Status : Answered  
 Chosen Option : 2

Q.20 In a certain code language, 'SUBTLE' is written as '40CUMF', 'HANGER' is written as '90HFS', how will 'CLOTH' be written as in that language?

- Ans
- ✗ 1. 170TH
  - ✓ 2. 15PUI
  - ✗ 3. 17PUI
  - ✗ 4. 150TH

Question ID : 26433069649  
 Status : Answered  
 Chosen Option : 4

Section : Part-B-General Knowledge and General awareness

Q.1 Glaciers are generally found in \_\_\_\_\_.

- Ans
- ✗ 1. Plateaus
  - ✗ 2. Plains
  - ✓ 3. Mountains
  - ✗ 4. Rivers

Question ID : 264330115994  
 Status : Answered  
 Chosen Option : 3

**Q.2 National Rural Employment Guarantee Act assures how many days of employment every year to every rural household?**

- Ans**
- 1. 250 days
  - 2. 200 days
  - 3. 300 days
  - 4. 100 days

Question ID : 264330116086  
Status : Not Answered  
Chosen Option : --

**Q.3 The lower house of the state legislature is called \_\_\_\_\_.**

- Ans**
- 1. Vidhan Parishad
  - 2. Vidhan Sabha
  - 3. Lok Sabha
  - 4. Rajya Sabha

Question ID : 26433086675  
Status : Answered  
Chosen Option : 2

**Q.4 SEWA (Self-Employed Women's Association) Bank, a cooperative bank in Gujarat, was launched in India in \_\_\_\_\_.**

- Ans**
- 1. 1974
  - 2. 1894
  - 3. 1994
  - 4. 1874

Question ID : 264330115311  
Status : Answered  
Chosen Option : 3

**Q.5 Fundamental Duties of the Indian Constitution are adopted from which country?**

- Ans**
- 1. United States of America
  - 2. Germany
  - 3. Britain
  - 4. USSR (Now Russia)

Question ID : 264330115629  
Status : Answered  
Chosen Option : 4

Q.6 सातवाहन \_\_\_\_\_ भारत में एक शक्तिशाली राजवंश थे।

- Ans
- 1. पूर्वी
  - 2. उत्तरी
  - 3. दक्षिण
  - 4. पश्चिम

Question ID : 264330115464  
Status : Answered  
Chosen Option : 3

Q.7 In which of the following places was the Indian Association founded in colonial India?

- Ans
- 1. Poona
  - 2. Calcutta
  - 3. Surat
  - 4. Lucknow

Question ID : 26433089890  
Status : Answered  
Chosen Option : 2

Q.8 Green Revolution increased the yield of food crops, and thus contributed \_\_\_\_\_ to the Indian Economy.

- Ans
- 1. adverse
  - 2. negative
  - 3. positive
  - 4. neutral

Question ID : 264330115424  
Status : Answered  
Chosen Option : 3

Q.9 Yeast and hydrogen peroxide create \_\_\_\_\_.

- Ans
- 1. oxygen
  - 2. oxygen monoxide
  - 3. carbon dioxide
  - 4. carbon

Question ID : 264330115200  
Status : Answered  
Chosen Option : 2

**Q.10 Which Union Minister of Government of India inaugurated the 'India Chem 2022', in November 2022?**

- Ans  1. Rajnath Singh  
 2. Mansukh Mandaviya  
 3. Kiren Rijju  
 4. Rajeev Chandrashekhar

Question ID : 264330114962  
Status : Not Answered  
Chosen Option : --

**Q.11 Who became the new Chief Minister of Uttarakhand after elections in February 2022?**

- Ans  1. Bhupendra Rajnikant Patel  
 2. Jai Ram Thakur  
 3. Pushkar Singh Dhama  
 4. Pramod Sawant

Question ID : 264330115014  
Status : Answered  
Chosen Option : 3

**Q.12 How many time has India won the Men's Hockey World Cup?**

- Ans  1. 4  
 2. 2  
 3. 1  
 4. 0

Question ID : 264330116305  
Status : Answered  
Chosen Option : 2

**Q.13 Which city smart city bus project has won the India Smart Cities Award (ISAC) 2020 in the Urban Mobility category.**

- Ans  1. Indore  
 2. Aurangabad  
 3. Pune  
 4. Agra

Question ID : 264330115558  
Status : Answered  
Chosen Option : 2

Q.14 Yaoshang festival which is famous in Manipur is celebrated for \_\_\_\_ days.

- Ans  1. four  
 2. three  
 3. two  
 4. five

Question ID : 264330115127  
Status : Not Answered  
Chosen Option : --

Q.15 Who among the following is related with Chhau dance?

- Ans  1. Vidushi K.S. Jayalakshmi  
 2. Mahaboob Subhani  
 3. Suchitra Ella  
 4. Gopal Prasad Dubey

Question ID : 264330115888  
Status : Not Answered  
Chosen Option : --

Q.16 उपभोक्ता संरक्षण अधिनियम 2019 के अनुसार, एक ई-कॉमर्स इकाई भारतीय कंपनी अधिनियम के अनुसार निगमित कंपनी है और यह अनुपालन सुनिश्चित करने के लिए एक \_\_\_\_\_ नियुक्त करेगी।

- Ans  1. अधीनस्थ  
 2. कनिष्ठ कर्मचारी  
 3. सुलह अधिकारी  
 4. नोडल अधिकारी

Question ID : 264330116234  
Status : Answered  
Chosen Option : 4

Q.17 The dimension of the Hockey field is \_\_\_\_\_.

- Ans  1. 95m long and 60m wide  
 2. 96m long and 55m wide  
 3. 90m long and 50m wide  
 4. 91.4m long and 55m wide

Question ID : 264330115948  
Status : Answered  
Chosen Option : 3

Q.18 Which of the following folk dance is performed mainly in Chhattisgarh?

- Ans  1. Raut  
 2. Kalbelia  
 3. Bhangra  
 4. Roudra

Question ID : 26433071421  
Status : Answered  
Chosen Option : 1

Q.19 \_\_\_\_\_ are located on the 17th group on the periodic table.

- Ans  1. Halogens  
 2. Noble Gases  
 3. Chalcogens  
 4. Boron

Question ID : 264330115181  
Status : Answered  
Chosen Option : 2

Q.20 Which crops benefited more from the green revolution?

- Ans  1. Food grains  
 2. Vegetables  
 3. Oilseeds  
 4. Pulses

Question ID : 26433054631  
Status : Answered  
Chosen Option : 2

Section : Part-C-Elementary Mathematics

Q.1 एक वस्तु को ₹900 में बेचने पर अर्जित लाभ उसी वस्तु को ₹450 में बेचने पर हुई हानि का दोगुना है। 25% लाभ कमाने के लिए वस्तु को किस मूल्य पर बेचा जाना चाहिए?

- Ans  1. ₹950  
 2. ₹650  
 3. ₹750  
 4. ₹850

Question ID : 26433075878  
Status : Answered  
Chosen Option : 3

Q.2 A principal becomes ₹19,683 in 3 years at 8 percent per annum compound interest, compounding annually. What is the principal?

- Ans
- 1. ₹16,825
  - 2. ₹14,825
  - 3. ₹15,625
  - 4. ₹13,526

Question ID : 26433079885  
Status : Answered  
Chosen Option : 1

Q.3 At 46 km/h and 36 km/h, two trains of equal length are travelling in the same direction on parallel lines. What is the length of each train if the quicker train passes the slower train in 36 seconds?

- Ans
- 1. 47 metres
  - 2. 50 metres
  - 3. 44 metres
  - 4. 41 metres

Question ID : 26433076331  
Status : Not Answered  
Chosen Option : --

Q.4 The average age of 30 men is 25 years. 5 new men of an average age of 30 years joined them. Find the average age of all the men put together.

- Ans
- 1.  $26\frac{5}{7}$  years
  - 2.  $27\frac{5}{7}$  years
  - 3.  $25\frac{5}{7}$  years
  - 4.  $28\frac{5}{7}$  years

Question ID : 26433076303  
Status : Not Answered  
Chosen Option : --

Q.5 The population of a village during the first year increases by 5% and during the second year it diminishes by 5%. At the end of the second year its population was 9975. What was the population at the beginning of the first year?

- Ans
- 1. 9500
  - 2. 10000
  - 3. 9000
  - 4. 10500

Question ID : 26433075099  
Status : Answered  
Chosen Option : 2

Q.6 If the length, breadth, and height of a cuboidal box are 24 cm, 16 cm, and 12 cm, respectively, then the volume of the box is:

- Ans
- 1.  $4612 \text{ cm}^3$
  - 2.  $4632 \text{ cm}^3$
  - 3.  $4608 \text{ cm}^3$
  - 4.  $4644 \text{ cm}^3$

Question ID : 26433090307  
Status : Answered  
Chosen Option : 3

Q.7 If goods are purchased for Rs.600 and one fifth is sold at a loss of 20%, at what gain percent should the remainder be sold so as to gain 30% on the whole transaction?

- Ans
- 1. 40%
  - 2. 22%
  - 3. 42.5%
  - 4. 22.5%

Question ID : 26433081021  
Status : Answered  
Chosen Option : 3

Q.8 What is the total surface area of a hemisphere of diameter 7cm? Take  $\pi = \frac{22}{7}$

- Ans
- 1.  $77 \text{ cm}^2$
  - 2.  $98 \text{ cm}^2$
  - 3.  $87.5 \text{ cm}^2$
  - 4.  $115.5 \text{ cm}^2$

Question ID : 26433076250  
Status : Answered  
Chosen Option : 1

Q.9 Find the HCF of 0.25, 2.08 and 8.1.

- Ans
- 1. 0.01
  - 2. 0.1
  - 3. 0.05
  - 4. 0.02

Question ID : 26433082589  
Status : Answered  
Chosen Option : 3



**Q.10** The salary of an employee is first increased by 15% and then it is decreased by 25%.  
What is the percentage increase or decrease in his salary?

- Ans
- 1. 13.75% decrease
  - 2. 12.89% decrease
  - 3. 11.23% increase
  - 4. 14% increase

Question ID : 26433082710  
Status : Not Answered  
Chosen Option : --

**Q.11** A single discount equivalent to 5%, 10%, 15% and 20% is:

- Ans
- 1. 42.76%
  - 2. 41.86%
  - 3. 32.88%
  - 4. 36.92%

Question ID : 26433080222  
Status : Answered  
Chosen Option : 2

**Q.12** Mohan and Ramesh together can do a piece of work in 6 days, and Mohan alone can do it in 10 days. In how many days can Ramesh alone do the same work?

- Ans
- 1. 7.5
  - 2. 11.25
  - 3. 8
  - 4. 15

Question ID : 26433076206  
Status : Answered  
Chosen Option : 3

**Q.13** Find the greatest number by which when numbers 47, 95 and 187 are divided, leave the same remainder in each case.

- Ans
- 1. 6
  - 2. 8
  - 3. 2
  - 4. 4

Question ID : 26433082342  
Status : Answered  
Chosen Option : 3

Q.14 Mohan and Sohan invested ₹6,000 and ₹8,000 respectively in a property simultaneously and after 6 months Sohan withdraws his invested amount. What is the ratio of money received by Mohan and Sohan respectively at the end of one year?

- Ans
- 1. 4:3
  - 2. 2:3
  - 3. 3:4
  - 4. 3:2

Question ID : 26433075672

Status : Not Answered

Chosen Option : --

Q.15 Anit can do a piece of work in 77 days. Ram can do the same work in 11 days. Ram and Anit start working together but Ram left the work 3 days before the completion of the work. Find the approximate number of days in which the work is completed.

- Ans
- 1. 17 days
  - 2. 11 days
  - 3. 14 days
  - 4. 12 days

Question ID : 264330116918

Status : Answered

Chosen Option : 2

Q.16 A milkman bought 45 litres of milk and mixed 15 litres of water in it. If the price per litre of the mixture becomes ₹50, then what is the cost price of the milk per litre? (water is available free of cost)

- Ans
- 1. ₹61  $\frac{2}{3}$
  - 2. ₹34  $\frac{2}{3}$
  - 3. ₹33  $\frac{2}{3}$
  - 4. ₹66  $\frac{2}{3}$

Question ID : 26433076395

Status : Not Answered

Chosen Option : --

Q.17 Vidhi gave Radha ₹8,000 on compound interest for 2 years at 5% per annum, compounding annually. How much loss would Vidhi have suffered had she given it to Radha for 2 years at 5% per annum on simple interest?

- Ans
- 1. ₹12
  - 2. ₹18
  - 3. ₹20
  - 4. ₹15

Question ID : 26433080124  
Status : Answered  
Chosen Option : 2

Q.18 There are 50 students in a class. If the ratio of the number of boys to the girls is 16 : 9, then what is the mean proportional between the number of boys and girls in the school?

- Ans
- 1. 16
  - 2. 22
  - 3. 36
  - 4. 24

Question ID : 26433082388  
Status : Answered  
Chosen Option : 3

Q.19 A car is travelling at a uniform speed of 51 km/h. The distance travelled by the car from 10:40 a.m. to 1:00 p.m. is:

- Ans
- 1. 125 km
  - 2. 119 km
  - 3. 100 km
  - 4. 115 km

Question ID : 26433081591  
Status : Not Answered  
Chosen Option : --

Q.20 Dinesh offers his customers a discount of 15% on a raincoat and he still makes a profit of 25%. What is the actual cost of the raincoat marketed for Rs.800?

- Ans
- 1. Rs.540
  - 2. Rs.546
  - 3. Rs.544
  - 4. Rs.542

Question ID : 26433082976  
Status : Answered  
Chosen Option : 1

Q.1 Parts of the following sentence have been underlined and given as options. Select the option that contains an error.

We all know that sugar and honey tastes very sweet.

- Ans
- 1. sweet
  - 2. know
  - 3. tastes
  - 4. all

Question ID : 26433089370  
Status : Answered  
Chosen Option : 3

Q.2 Select the most appropriate option to fill in the blank as synonym for the underlined word.

The most arrogant employee in his company was sacked by the boss. No one could tolerate his \_\_\_\_\_ nature.

- Ans
- 1. pricey
  - 2. plain
  - 3. dicey
  - 4. haughty

Question ID : 26433094735  
Status : Answered  
Chosen Option : 4

Q.3 Select the INCORRECTLY spelt word.

- Ans
- 1. Venerate
  - 2. Viceregal
  - 3. Retinal
  - 4. Dalmation

Question ID : 26433073761  
Status : Answered  
Chosen Option : 2

Q.4 Select the most appropriate ANTONYM of the given word.

Revive

- Ans
- 1. Revolve
  - 2. Rejuvenate
  - 3. Destroy
  - 4. Incline

Question ID : 26433090798  
Status : Answered  
Chosen Option : 3

Q.5 Select the most appropriate option that can substitute the underlined segment in the given sentence. If there is no need to substitute it, select 'No substitution required'.

Nithi was not feeling well, yet she decide to go to work.

- Ans
- 1. No substitution required
  - 2. yet she decided to go to work
  - 3. or she decided to go for work
  - 4. yet she have decided to go to work

Question ID : 26433091872  
Status : Answered  
Chosen Option : 2

Q.6 Substitute the underlined word segment with most appropriate idiom.

They had to cancel their trip at the last minute due to bad weather.

- Ans
- 1. at sixes and sevens
  - 2. at somebody's beck and call
  - 3. at a stone's throw
  - 4. at the eleventh hour

Question ID : 26433084693  
Status : Not Answered  
Chosen Option : --

Q.7 Select the most appropriate synonym of the given word.

Secure

- Ans
- 1. Secret
  - 2. Independent
  - 3. Safe
  - 4. Comfortable

Question ID : 26433088130  
Status : Answered  
Chosen Option : 3

Q.8 Select the most appropriate option that can substitute the underlined segment in the given sentence.

The door which connecting the two offices is kept locked.

- Ans
- 1. connects
  - 2. does connecting
  - 3. can connecting
  - 4. has connecting

Question ID : 26433088829  
Status : Answered  
Chosen Option : 3

Q.9 Select the most appropriate option that can substitute the underlined segment in the given sentence.

After a long journey I was looking forward to sleep on a comfortable bed.

- Ans  1. sleeping in a  
 2. sleep into a  
 3. sleeps on a  
 4. sleep over a

Question ID : 264330101306  
Status : Answered  
Chosen Option : 1

Q.10 Select the most appropriate synonym of the given word.

Objective

- Ans  1. Subjective  
 2. Purpose  
 3. Tyrannical  
 4. Heartfelt

Question ID : 26433073983  
Status : Answered  
Chosen Option : 2

Q.11 Select the most appropriate option to fill in the blank.

Soumyashree, while talking on the topic, could not \_\_\_\_\_ the interview board.

- Ans  1. impress  
 2. conceive  
 3. stabilise  
 4. permeate

Question ID : 26433073790  
Status : Not Answered  
Chosen Option : --

Q.12 Select the most appropriate ANTONYM of the given word.

Esteem

- Ans  1. Notice  
 2. Value  
 3. Regret  
 4. Condemn

Question ID : 26433090788  
Status : Not Answered  
Chosen Option : --

Q.13 Select the most appropriate meaning of the given idiom.

Get a second wind

- Ans
- 1. Have less energy and be extremely tired
  - 2. Having less energy after resting
  - 3. Have two different choices
  - 4. Have renewed energy after having been tired

Question ID : 26433070652  
Status : Answered  
Chosen Option : 3

Q.14 Select the most appropriate ANTONYM of the word given in brackets to fill in the blank.

The keeper had no intention to \_\_\_\_\_ (attend) the goal, but the ball was hit too hard to be stopped.

- Ans
- 1. believe
  - 2. bring
  - 3. blow
  - 4. miss

Question ID : 26433089748  
Status : Answered  
Chosen Option : 4

Q.15 Select the most appropriate synonym of the given word to fill in the blank in the sentence.

Elaborate

A/an \_\_\_\_\_ water clock depicting zodiac signs is present in the city museum.

- Ans
- 1. beautiful
  - 2. resonant
  - 3. divulging
  - 4. intricate

Question ID : 26433060557  
Status : Answered  
Chosen Option : 1

**Comprehension:**

In the following passage, some words have been deleted. Read the passage carefully and select the most appropriate option to fill in each blank.

People who hitchhike talk about (1)\_\_\_\_\_ experiences in the course of their journeys. While there are (2)\_\_\_\_\_ bitter experiences, most of the trips are pleasant. What comes out as a common point worth mentioning (3)\_\_\_\_\_ the goodness that most drivers and riders exhibit. The (4)\_\_\_\_\_ rendered by them not just in giving them a ride but in also sponsoring food along the way. Faith in humanity and (5)\_\_\_\_\_ wins in the bargain.

**SubQuestion No : 16**

**Q.16 Select the most appropriate option to fill in blank number 1.**

- Ans  1. worried  
 2. varied  
 3. conversant  
 4. emptied

Question ID : 26433091776  
Status : Answered  
Chosen Option : 3

**Comprehension:**

In the following passage, some words have been deleted. Read the passage carefully and select the most appropriate option to fill in each blank.

People who hitchhike talk about (1)\_\_\_\_\_ experiences in the course of their journeys. While there are (2)\_\_\_\_\_ bitter experiences, most of the trips are pleasant. What comes out as a common point worth mentioning (3)\_\_\_\_\_ the goodness that most drivers and riders exhibit. The (4)\_\_\_\_\_ rendered by them not just in giving them a ride but in also sponsoring food along the way. Faith in humanity and (5)\_\_\_\_\_ wins in the bargain.

**SubQuestion No : 17**

**Q.17 Select the most appropriate option to fill in blank number 2.**

- Ans  1. such  
 2. much  
 3. lot  
 4. few

Question ID : 26433091777  
Status : Answered  
Chosen Option : 4



**Comprehension:**

In the following passage, some words have been deleted. Read the passage carefully and select the most appropriate option to fill in each blank.

People who hitchhike talk about (1)\_\_\_\_\_ experiences in the course of their journeys. While there are (2)\_\_\_\_\_ bitter experiences, most of the trips are pleasant. What comes out as a common point worth mentioning (3)\_\_\_\_\_ the goodness that most drivers and riders exhibit. The (4)\_\_\_\_\_ rendered by them not just in giving them a ride but in also sponsoring food along the way. Faith in humanity and (5)\_\_\_\_\_ wins in the bargain.

**SubQuestion No : 18**

**Q.18 Select the most appropriate option to fill in blank number 3.**

Ans  1. are

2. am

3. is

4. on

Question ID : 26433091778

Status : Answered

Chosen Option : 4

**Comprehension:**

In the following passage, some words have been deleted. Read the passage carefully and select the most appropriate option to fill in each blank.

People who hitchhike talk about (1)\_\_\_\_\_ experiences in the course of their journeys. While there are (2)\_\_\_\_\_ bitter experiences, most of the trips are pleasant. What comes out as a common point worth mentioning (3)\_\_\_\_\_ the goodness that most drivers and riders exhibit. The (4)\_\_\_\_\_ rendered by them not just in giving them a ride but in also sponsoring food along the way. Faith in humanity and (5)\_\_\_\_\_ wins in the bargain.

**SubQuestion No : 19**

**Q.19 Select the most appropriate option to fill in blank number 4.**

Ans  1. brevity

2. stringency

3. hospitality

4. conformity

Question ID : 26433091779

Status : Answered

Chosen Option : 2

**Comprehension:**

In the following passage, some words have been deleted. Read the passage carefully and select the most appropriate option to fill in each blank.

People who hitchhike talk about (1)\_\_\_\_\_ experiences in the course of their journeys. While there are (2)\_\_\_\_\_ bitter experiences, most of the trips are pleasant. What comes out as a common point worth mentioning (3)\_\_\_\_\_ the goodness that most drivers and riders exhibit. The (4)\_\_\_\_\_ rendered by them not just in giving them a ride but in also sponsoring food along the way. Faith in humanity and (5)\_\_\_\_\_ wins in the bargain.

**SubQuestion No : 20**

**Q.20** Select the most appropriate option to fill in blank number 5.

- Ans  1. consciousness  
 2. humaneness  
 3. frailty  
 4. animosity

Question ID : 26433091780  
Status : Answered  
Chosen Option : 1

## Section : Part-D-Hindi

**Q.1** 'अपना \_\_\_\_\_ सीधा करना' इस मुहावरे को पूरा करें।

- Ans  1. मतलब  
 2. कमर  
 3. उल्लू  
 4. दिमाग

Question ID : 26433066815  
Status : Not Answered  
Chosen Option : --

**Q.2** निम्न वाक्य में रेखांकित शब्द के लिए विकल्पों में कौन सा शब्द सर्वाधिक उपयुक्त होगा?  
'मैंने तलवार द्वारा शत्रु को मार दिया।'

- Ans  1. वह  
 2. को  
 3. से  
 4. ने

Question ID : 26433066713  
Status : Not Answered  
Chosen Option : --

Q.3 निम्न शब्द के पर्यायवाची शब्द का किस वाक्य में प्रयोग किया गया है?  
पृथ्वी

- Ans  1. वसुधा हरी-भरी है।  
 2. सरिता हरी-भरी है।  
 3. किसलय हरी-भरी है।  
 4. भागीरथी बड़ी है।

Question ID : 26433066935  
Status : Not Answered  
Chosen Option : --

Q.4 'तुम्हारा गांव किधर को है?' इस वाक्य में अशुद्धि पहचाने-

- Ans  1. किधर को  
 2. गांव  
 3. तुम्हारा  
 4. है

Question ID : 26433091302  
Status : Not Answered  
Chosen Option : --

Q.5 निम्न वाक्यांश के लिए सही वर्तनी वाले उपयुक्त एक शब्द का चयन कीजिए।  
जिसे ईश्वर में विश्वास हो

- Ans  1. आस्तिख  
 2. आप्तिक  
 3. आशिक  
 4. आस्तिक

Question ID : 26433070087  
Status : Not Answered  
Chosen Option : --

Q.6 दिए गए मुहावरे में रेखांकित अंश के स्थान पर सबसे उपयुक्त विकल्प कौन-सा होगा?  
'अंधों में काना रानी'

- Ans  1. दोस्त  
 2. राजा  
 3. नौकर  
 4. महाराजा

Question ID : 26433066738  
Status : Not Answered  
Chosen Option : --

Q.7 यह हॉल पंडित समाज के लिए आरक्षित है।  
उपरोक्त वाक्य में रेखांकित पद के स्थान पर निम्न में से कौन सा शब्द आ सकता है?

- Ans
- 1. मूर्ख
  - 2. शिक्षित
  - 3. बुद्ध
  - 4. गरीब

Question ID : 26433079174  
Status : Not Answered  
Chosen Option : --

Q.8 नीचे दिए शब्द के लिए उचित वाक्यांश दिए गए विकल्पों में से चुनिए-  
निरंकुश

- Ans
- 1. जिस पर किसी प्रकार का नियंत्रण न हो
  - 2. जिस पर नियंत्रण किया गया हो
  - 3. जिसे आशा न रह गई हो
  - 4. जिसका कोई आकार न हो

Question ID : 26433062392  
Status : Not Answered  
Chosen Option : --

Q.9 निम्नलिखित में से शुद्ध वाक्य का चयन कीजिए।

- Ans
- 1. उसे शिमला जाना है।
  - 2. उसका शिमला जाना है।
  - 3. उससे शिमला जाना है।
  - 4. उसने शिमला जाना है।

Question ID : 26433066962  
Status : Not Answered  
Chosen Option : --

Q.10 "एक अच्छे निबंध में बुद्धि व हृदय का सामंजस्य होना चाहिए।"  
उक्त वाक्य में प्रयुक्त 'सामंजस्य' के स्थान पर उसके समानार्थी शब्द का प्रयोग निम्न में से किस वाक्य में  
किया गया है?

- Ans
- 1. एक अच्छे निबंध में बुद्धि व हृदय का मिश्रण होना चाहिए।
  - 2. एक अच्छे निबंध में बुद्धि व हृदय का सौष्ठव होना चाहिए।
  - 3. एक अच्छे निबंध में बुद्धि व हृदय का समन्वय होना चाहिए।
  - 4. एक अच्छे निबंध में बुद्धि व हृदय का समुदाय होना चाहिए।

Question ID : 26433067031  
Status : Not Answered  
Chosen Option : --

Q.11 'छत पर कौआ बोल रहा है।'  
उपरोक्त वाक्य में प्रयुक्त 'कौआ' शब्द का पर्याय क्या है?

- Ans
- 1. शिख
  - 2. काक
  - 3. खग
  - 4. पिक

Question ID : 26433080859  
Status : Not Answered  
Chosen Option : --

Q.12 'नकटा \_\_\_\_\_।'।  
उपर्युक्त वाक्य में रिक्त स्थान के लिए उपयुक्त विकल्प निम्न में से क्या होगा?

- Ans
- 1. का अर्थ होता है जिसका कद छोटा हो
  - 2. का अर्थ होता है जिसका नाम न हो
  - 3. का अर्थ होता है जिसकी नाक कटी हो
  - 4. का अर्थ होता है जिसका अंगूठा छोटा हो

Question ID : 26433067044  
Status : Not Answered  
Chosen Option : --

Q.13 निम्नलिखित वाक्य में रेखांकित शब्द के विलोम से वाक्य के रिक्त स्थान की पूर्ति कीजिए।  
अगर पूत कृपूत हो तो मात-पिता का जीवन व्यर्थ हो जाता है और यदि \_\_\_\_\_ हो तो सार्थक।

- Ans
- 1. सपूत
  - 2. विज्ञ
  - 3. उद्योगी
  - 4. दुपूत

Question ID : 26433085005  
Status : Not Answered  
Chosen Option : --

Q.14 'रेगिस्तान में \_\_\_\_\_ की सवारी बहुत मजेदार होती है।' इस वाक्य में रिक्त स्थान की पूर्ति शुद्ध  
शब्द द्वारा कीजिए।

- Ans
- 1. उंट
  - 2. ऊट
  - 3. ऊँट
  - 4. ऊख

Question ID : 26433069704  
Status : Not Answered  
Chosen Option : --

Q.15 निम्नलिखित विकल्पों में से कौन सा एक वाक्य क्रिया-विशेषण से सम्बन्ध रखता है?

- Ans
- 1. वे कमाते हैं।
  - 2. पिता का कर्तव्य है कि संतानों का पालन करे।
  - 3. हम पढ़ते हैं।
  - 4. किशन बहुत तेज दौड़ता है।

Question ID : 26433062956

Status : Not Answered

Chosen Option : --

**Comprehension:**

निम्नलिखित गद्यांश में से कुछ शब्द हटा दिए गए हैं। दिए गए विकल्पों की सहायता से रिक्त स्थानों की पूर्ति कीजिए। प्रत्येक संख्या के लिए उपयुक्त विकल्प का चयन कीजिए।

एक पाठशाला का 1. \_\_\_\_\_ था। मैं भी 2. \_\_\_\_\_ बुलाया गया था। वहाँ के प्रधान अध्यापक का एक मात्र पुत्र, जिसकी अवस्था आठ 3. \_\_\_\_\_ की थी, बड़े लाड़ से नुमाइश में मिस्टर हादी के कोल्हू की तरह दिखाया जा रहा था। उसका मुँह पीला था, आँखें सफेद 4. \_\_\_\_\_, दृष्टि भूमि से उठती नहीं थी। 5. \_\_\_\_\_ पूछे जा रहे थे। उनका वह उत्तर दे रहा था।

SubQuestion No : 16

Q.16 रिक्त स्थान 1 की पूर्ति के लिए सर्वाधिक उपयुक्त विकल्प का चयन कीजिए।

- Ans
- 1. वार्षिकोत्सव
  - 2. लोहार
  - 3. मार्गोत्सव
  - 4. दैनिकोत्सव

Question ID : 26433079704

Status : Not Answered

Chosen Option : --

**Comprehension:**

निम्नलिखित गद्यांश में से कुछ शब्द हटा दिए गए हैं। दिए गए विकल्पों की सहायता से रिक्त स्थानों की पूर्ति कीजिए। प्रत्येक संख्या के लिए उपयुक्त विकल्प का चयन कीजिए।

एक पाठशाला का 1. \_\_\_\_\_ था। मैं भी 2. \_\_\_\_\_ बुलाया गया था। वहाँ के प्रधान अध्यापक का एक मात्र पुत्र, जिसकी अवस्था आठ 3. \_\_\_\_\_ की थी, बड़े लाड़ से नुमाइश में मिस्टर हादी के कोल्हू की तरह दिखाया जा रहा था। उसका मुँह पीला था, आँखें सफेद 4. \_\_\_\_\_, दृष्टि भूमि से उठती नहीं थी। 5. \_\_\_\_\_ पूछे जा रहे थे। उनका वह उत्तर दे रहा था।

SubQuestion No : 17

Q.17 रिक्त स्थान 2 की पूर्ति के लिए सर्वाधिक उपयुक्त विकल्प का चयन कीजिए।

- Ans
- 1. वहाँ
  - 2. सबमें
  - 3. कहाँ
  - 4. किधर

Question ID : 26433079705

Status : Not Answered

Chosen Option : --

**Comprehension:**

निम्नलिखित गद्यांश में से कुछ शब्द हटा दिए गए हैं। दिए गए विकल्पों की सहायता से रिक्त स्थानों की पूर्ति कीजिए। प्रत्येक संख्या के लिए उपयुक्त विकल्प का चयन कीजिए।

एक पाठशाला का 1. \_\_\_\_\_ था। मैं भी 2. \_\_\_\_\_ बुलाया गया था। वहाँ के प्रधान अध्यापक का एक मात्र पुत्र, जिसकी अवस्था आठ 3. \_\_\_\_\_ की थी, बड़े लाड़ से नुमाइश में मिस्टर हादी के कोल्हू की तरह दिखाया जा रहा था। उसका मुँह पीला था, आँखें सफेद 4. \_\_\_\_\_, दृष्टि भूमि से उठती नहीं थी। 5. \_\_\_\_\_ पूछे जा रहे थे। उनका वह उत्तर दे रहा था।

**SubQuestion No : 18**

Q.18 रिक्त स्थान 3 की पूर्ति के लिए सर्वाधिक उपयुक्त विकल्प का चयन कीजिए।

- Ans  1. वर्ष  
 2. घड़ी  
 3. दिन  
 4. पल

Question ID : 26433079706

Status : Not Answered

Chosen Option : --

**Comprehension:**

निम्नलिखित गद्यांश में से कुछ शब्द हटा दिए गए हैं। दिए गए विकल्पों की सहायता से रिक्त स्थानों की पूर्ति कीजिए। प्रत्येक संख्या के लिए उपयुक्त विकल्प का चयन कीजिए।

एक पाठशाला का 1. \_\_\_\_\_ था। मैं भी 2. \_\_\_\_\_ बुलाया गया था। वहाँ के प्रधान अध्यापक का एक मात्र पुत्र, जिसकी अवस्था आठ 3. \_\_\_\_\_ की थी, बड़े लाड़ से नुमाइश में मिस्टर हादी के कोल्हू की तरह दिखाया जा रहा था। उसका मुँह पीला था, आँखें सफेद 4. \_\_\_\_\_, दृष्टि भूमि से उठती नहीं थी। 5. \_\_\_\_\_ पूछे जा रहे थे। उनका वह उत्तर दे रहा था।

**SubQuestion No : 19**

Q.19 रिक्त स्थान 4 की पूर्ति के लिए सर्वाधिक उपयुक्त विकल्प का चयन कीजिए।

- Ans  1. होगी  
 2. थीं  
 3. होती  
 4. था

Question ID : 26433079707

Status : Not Answered

Chosen Option : --

**Comprehension:**

निम्नलिखित गद्यांश में से कुछ शब्द हटा दिए गए हैं। दिए गए विकल्पों की सहायता से रिक्त स्थानों की पूर्ति कीजिए। प्रत्येक संख्या के लिए उपयुक्त विकल्प का चयन कीजिए।

एक पाठशाला का 1. \_\_\_\_\_ था। मैं भी 2. \_\_\_\_\_ बुलाया गया था। वहाँ के प्रधान अध्यापक का एक मात्र पुत्र, जिसकी अवस्था आठ 3. \_\_\_\_\_ की थी, बड़े लाड़ से नुमाइश में मिस्टर हादी के कोल्हू की तरह दिखाया जा रहा था। उसका मुँह पीला था, आँखें सफेद 4. \_\_\_\_\_, दृष्टि भूमि से उठती नहीं थी। 5. \_\_\_\_\_ पूछे जा रहे थे। उनका वह उत्तर दे रहा था।

**SubQuestion No : 20**

Q.20 रिक्त स्थान 5 की पूर्ति के लिए सर्वाधिक उपयुक्त विकल्प का चयन कीजिए।

- Ans
- 1. रिश्ते
  - 2. बातें
  - 3. कहानी
  - 4. प्रश्न

Question ID : 26433079708

Status : Not Answered

Chosen Option : --

WWW.GOV TJOB SALTER