

Constable GD in CAPFs SSF Rifleman GD in Assam Rifles and Sepoy in NCB Examination 2022

Roll Number	www.govtjobsalert.in
Candidate Name	www.govtjobsalert.in
Venue Name	Sri Balaji College Of Engineering And Technology
Exam Date	09/02/2023
Exam Time	5:15 PM - 6:15 PM
Subject	Constable GD Examination 2022

Section : **Part-A-General Intelligence and Reasoning**

Q.1 Three statements are given followed by three conclusions numbered I, II and III. Assuming the statements to be true, even if they seem to be at variance with commonly known facts, decide which of the conclusions logically follow(s) from the statements.

Statements:

All drinks are shakes.

All teas are shakes.

All shakes are coffee.

Conclusions:

I. All coffees are teas.

II. All coffees are drinks.

III. Some coffees are shakes.

- Ans 1. Only conclusion II follows
2. Only conclusion III follows
3. Only conclusions I and III follow
4. Only conclusions I and II follow

Question ID : 26433082308

Status : Answered

Chosen Option : 2

Q.2 Select the correct mirror image of the given figure when the mirror is placed at MN as shown below.

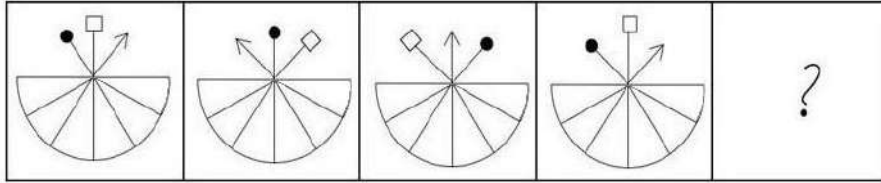
- Ans 1.
- 2.
- 3.
- 4.

Question ID : 26433085541

Status : Answered

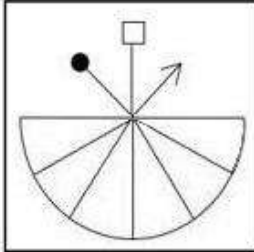
Chosen Option : 4

Q.3 Select the figure that will come in place of the question mark (?) in the following figure series.

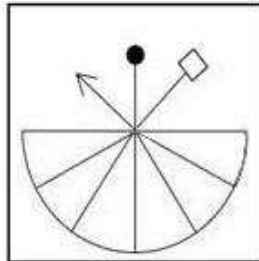


Ans

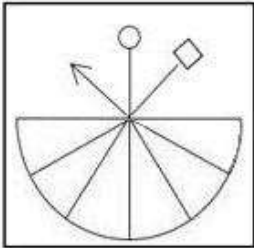
✗ 1.



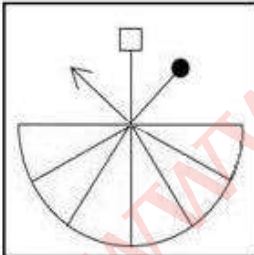
✓ 2.



✗ 3.



✗ 4.



Question ID : 26433081691

Status : Answered

Chosen Option : 2

Q.4 In a certain coded language, 'war door' is coded as 'plane potato', 'cauliflower war' is coded as 'racecar plane', and 'door tower' is coded as 'potato mountain'. What is the code word for 'tower'?

- Ans
- 1. racecar
 - 2. plane
 - 3. mountain
 - 4. potato

Question ID : 26433069038
Status : Answered
Chosen Option : 3

Q.5 Seven people, A, B, C, D, E, F and G are sitting in a straight row, facing north. A sits third to the left of D. D sits to the extreme right. Only two people sit between A and F. B is an immediate neighbour of F. Only one person sits between C and D. G is not an immediate neighbour of A. Who sits to the extreme left?

- Ans
- 1. G
 - 2. F
 - 3. E
 - 4. B

Question ID : 26433056928
Status : Answered
Chosen Option : 2

Q.6 Which of the following terms will replace the question mark (?) in the given series?
BTLW, YXIA, VBF, SFCI, ?

- Ans
- 1. PBZI
 - 2. VJCN
 - 3. VJCM
 - 4. PJZM

Question ID : 26433069452
Status : Answered
Chosen Option : 4

Q.7 Select the option that is related to the third word in the same way as the second word is related to the first word.
(The words must be considered as meaningful English words and must not be related to each other based on the number of letters/number of consonants/vowels in the word)

Litchi : Fruit :: Jive : ?

- Ans
- 1. Horse
 - 2. Black
 - 3. Dance
 - 4. Computer

Question ID : 26433079479
Status : Answered
Chosen Option : 3

Q.8 Which of the following letter-clusters will replace the question mark (?) in the given series?

EINT, DJMU, CKLV, ?, AMJX

- Ans
- 1. BMKX
 - 2. ALXW
 - 3. BMKV
 - 4. BLKW

Question ID : 26433076433

Status : Answered

Chosen Option : 4

Q.9 Select the correct combination of mathematical signs to sequentially replace the * signs and to balance the given equation.

$92 * 4 * 5 * 5 * 5 * 7$

- Ans
- 1. ÷, =, ×, +, -
 - 2. -, +, =, ÷, ×
 - 3. =, +, -, ×, ÷
 - 4. ×, ÷, =, -, +

Question ID : 26433094992

Status : Answered

Chosen Option : 1

Q.10 In a certain code language,

'A + B' means 'A is the brother of B',

'A - B' means 'A is the mother of B',

'A × B' means 'A is the son of B' and

'A ÷ B' means 'A is the sister of B'.

If $C + D - L ÷ P × Q × V$, then which of the following statements is NOT correct?

- Ans
- 1. C is P's father's brother.
 - 2. L is Q's daughter.
 - 3. D is V's son's wife.
 - 4. D is P's mother.

Question ID : 26433070376

Status : Answered

Chosen Option : 1

Q.11 In a certain code, the word 'PASTE' is written as 'FUTBQ'. The word 'VIBES' is written as 'TFCJW'. How is the word 'START' written in the same code?

- Ans
- 1. USBUT
 - 2. SUTBU
 - 3. TUBSU
 - 4. USUBT

Question ID : 26433090106

Status : Answered

Chosen Option : 4

Q.12 Which of the numbers(not digits) should be interchanged in the below equation to make it mathematically correct?

$$162 \div 9 \times 16 + 18 - 27 = 126$$

- Ans
- 1. 16 and 9
 - 2. 9 and 18
 - 3. 18 and 27
 - 4. 27 and 9

Question ID : 264330117529
Status : Answered
Chosen Option : 2

Q.13 Select the option that is related to the third term in the same way as the second term is related to the first term and the sixth term is related to the fifth term.

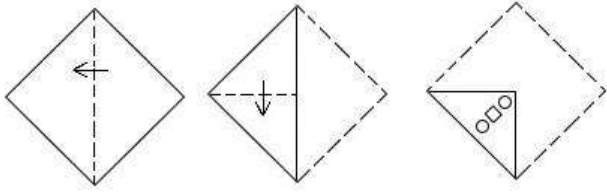
$$14 : 203 :: 16 : ? :: 18 : 333$$

- Ans
- 1. 224
 - 2. 264
 - 3. 230
 - 4. 274

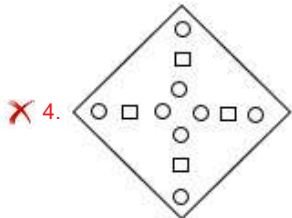
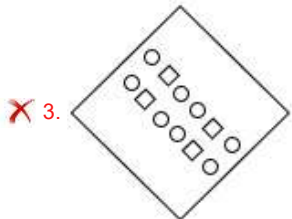
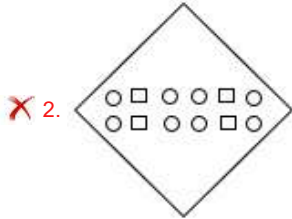
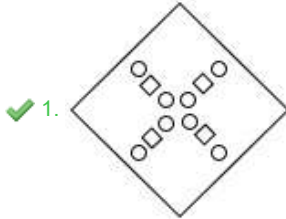
Question ID : 26433069091
Status : Answered
Chosen Option : 2

WWW.GOVtJOBSAlert.in

Q.14 A paper is folded and cut as shown below. How will it appear when unfolded?



Ans



Question ID : 26433090953
 Status : Answered
 Chosen Option : 1

Q.15 Which of the following numbers will replace the question mark (?) in the given series?
 27, 28, 36, 63, ?, 252

- Ans ✓ 1. 127
 ✗ 2. 131
 ✗ 3. 130
 ✗ 4. 125

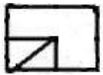
Question ID : 26433085640
 Status : Answered
 Chosen Option : 1

Q.16 Six students Fernandes, Dsouza, Marc, Dmello, Anthony and Charlene are sitting around a circular table facing the centre. Fernandes is sitting to the immediate right of Dsouza. Marc is sitting second to the left of Fernandes. Anthony is sitting second to the right of Dsouza. Dmello is sitting to the immediate left of Marc. Charlene is sitting to the immediate right of Anthony. Who is sitting between Fernandes and Charlene?

- Ans
- 1. Dmello
 - 2. Marc
 - 3. Dsouza
 - 4. Anthony

Question ID : 26433081788
 Status : Answered
 Chosen Option : 4

Q.17 Select the option figure in which the given figure is embedded as its part (rotation is not allowed).



Ans

- 1.
- 2.
- 3.
- 4.

Question ID : 26433069541
 Status : Marked For Review
 Chosen Option : 4

Q.18 Select the option that is related to the fifth term in the same way as the second term is related to the first term and the fourth term is related to the third term.
HONK : MPRK :: STAR : TCWV :: LONE : ?

- Ans
- 1. MQQH
 - 2. GPQO
 - 3. GPRO
 - 4. QPRE

Question ID : 26433058007
Status : Answered
Chosen Option : 3

Q.19 Which of the following numbers will replace the question marks (?) in the given series?

44, 47, 52, 59, 68, ?, ?, 107

- Ans
- 1. 82, 98
 - 2. 88, 100
 - 3. 80, 94
 - 4. 79, 92

Question ID : 26433070225
Status : Answered
Chosen Option : 4

Q.20 Which of the following options represents the correct order of the given words as they would appear in the English dictionary?

1. Desist
2. Desert
3. Design
4. Deserve
5. Designate

- Ans
- 1. 2, 3, 5, 4, 1
 - 2. 2, 4, 3, 1, 5
 - 3. 2, 4, 3, 5, 1
 - 4. 3, 4, 2, 1, 5

Question ID : 26433086967
Status : Answered
Chosen Option : 3

Section : Part-B-General Knowledge and General awareness

Q.1 Pradhan Mantri Mudra Yojana (PMMY) is a scheme launched by the Hon'ble Prime Minister of India on April 8, 2015 for providing _____ to the non-corporate enterprises.

- Ans
- 1. skill training
 - 2. house
 - 3. subsidy
 - 4. loan

Question ID : 264330116204
Status : Answered
Chosen Option : 4

Q.2 Charu Sija Mathur is a name that is synonymous with _____ dance.

- Ans
- 1. Chhau
 - 2. Kuchipudi
 - 3. Odissi
 - 4. Manipuri

Question ID : 264330115858
Status : Not Answered
Chosen Option : --

Q.3 Which of the following Hindu goddesses is worshipped during the festival of Gangaur?

- Ans
- 1. Saraswati
 - 2. Kali
 - 3. Lakshmi
 - 4. Parvati

Question ID : 26433094894
Status : Answered
Chosen Option : 4

Q.4 Which Article of the Constitution of India sets out the different Fundamental Duties for Indian citizens?

- Ans
- 1. Article 74A
 - 2. Article 51A
 - 3. Article 88B
 - 4. Article 44B

Question ID : 26433054520
Status : Answered
Chosen Option : 2

Q.5 Article 76 of the Indian Constitution deals with _____.

- Ans
- 1. Attorney-General for India
 - 2. Council of Ministers
 - 3. Governor of India
 - 4. Home Minister

Question ID : 264330115660
Status : Not Answered
Chosen Option : --

Q.6 Who is serving as the 34th Foreign Secretary of India from 2022?

- Ans 1. Subrahmanyam Jaishankar
 2. Vinay Mohan Kwatra
 3. Harsh Vardhan Shringla
 4. Vijay Keshav Gokhale

Question ID : 264330115019
Status : **Not Answered**
Chosen Option : --

Q.7 Which of the following cities emerged as the second capital of the Kushanas during their empire?

- Ans 1. Kannauj
 2. Mathura
 3. Purushpur
 4. Pataliputra

Question ID : 26433089861
Status : **Not Answered**
Chosen Option : --

Q.8 _____ are known as the powerhouses of the cell.

- Ans 1. Mitochondria
 2. Lysosomes
 3. Ribosome
 4. Nucleus

Question ID : 264330115237
Status : **Answered**
Chosen Option : 4

Q.9 Which of the following is an example of direct tax?

- Ans 1. Custom duty
 2. Excise tax
 3. Personal income tax
 4. G.S.T.

Question ID : 26433054778
Status : **Answered**
Chosen Option : 3

Q.10 The dimensions of the basketball court is measured _____ from the inner edge of the boundary line.

- Ans
- 1. 28 × 12 m
 - 2. 30 × 45 m
 - 3. 28 × 15 m
 - 4. 30 × 15 m

Question ID : 26433089940
Status : Not Answered
Chosen Option : --

Q.11 Who was the president of the first session of Congress held in 1885?

- Ans
- 1. Dinshaw Wacha
 - 2. Dadabhai Naoroji
 - 3. Allan Octavian Hume
 - 4. Womesh Chandra Bonnerjee

Question ID : 26433099170
Status : Not Answered
Chosen Option : --

Q.12 Manik Saha, chief minister of Tripura, became Member of Legislative Assembly from _____ constituency in by-election held in June 2022.

- Ans
- 1. Gakulnagar
 - 2. Town Bardowali
 - 3. Agartala
 - 4. Belonia

Question ID : 264330114970
Status : Not Answered
Chosen Option : --

Q.13 Which country is the smallest neighbouring country of India area wise?

- Ans
- 1. Nepal
 - 2. Bhutan
 - 3. Sri Lanka
 - 4. Maldives

Question ID : 264330116096
Status : Not Answered
Chosen Option : --

Q.14 Which of the following is an example of endogenic forces?

- Ans 1. Building mountains
 2. Glaciers
 3. Sea-waves
 4. Wind

Question ID : 264330115999
Status : Not Answered
Chosen Option : --

Q.15 Identify an element that does NOT belong to the third period.

- Ans 1. Silicon
 2. Argon
 3. Bromine
 4. Phosphorus

Question ID : 26433087851
Status : Not Answered
Chosen Option : --

Q.16 Major Dhyan Chand was born in which of the following city of India?

- Ans 1. Aligarh
 2. Lucknow
 3. Allahabad
 4. Dehradun

Question ID : 264330116272
Status : Not Answered
Chosen Option : --

Q.17 _____ is an international body that lends capital to the government of various countries.

- Ans 1. State bank of India
 2. Reserve bank of India
 3. Central bank of India
 4. World bank

Question ID : 264330115316
Status : Answered
Chosen Option : 4

Q.18 In order to provide basic healthcare to all, _____ and _____ need to be integrated in our basic health infrastructure.

- Ans
- 1. education and medicine
 - 2. communication and technology
 - 3. accessibility and affordability
 - 4. education and technology

Question ID : 264330115563
Status : Answered
Chosen Option : 3

Q.19 Which of the following is a folk dance of Mizoram?

- Ans
- 1. Dhumal dance
 - 2. Chhau dance
 - 3. Koli dance
 - 4. Cheraw dance

Question ID : 26433071660
Status : Not Answered
Chosen Option : --

Q.20 Norman Borlaug, father of Green Revolution in the world, was awarded _____.

- Ans
- 1. Olympic medal
 - 2. Bharat Ratna
 - 3. Nobel peace prize
 - 4. Gallantry award

Question ID : 264330115432
Status : Not Answered
Chosen Option : --

Section : Part-C-Elementary Mathematics

Q.1 If an electricity bill is paid before the due date, one gets a reduction of 5% on the amount of the bill. If a person gets a reduction money of Rs.350, then the amount of electricity bill is:

- Ans
- 1. Rs.6,000
 - 2. Rs.6,500
 - 3. Rs.7,000
 - 4. Rs.8,000

Question ID : 26433061073
Status : Answered
Chosen Option : 3

Q.2 A can do a piece of work in 15 days and B does the same work in 25 days. In how many days will A and B together complete this work?

Ans

1. $6\frac{5}{16}$

2. $9\frac{3}{8}$

3. $7\frac{5}{16}$

4. $8\frac{5}{16}$

Question ID : 26433080228

Status : Answered

Chosen Option : 2

Q.3 The number 'a' is inversely proportional to 'e', when $a = 50$, $e = 22$. Find the equation relating 'a' and 'e'.

Ans

1. $e = 11a$

2. $a = \frac{1100}{e}$

3. $a = 13e$

4. $a = \frac{1213}{e}$

Question ID : 26433080035

Status : Answered

Chosen Option : 2

Q.4 The average number of passengers in a train increased from 135408 last year to 141050 this year. What was the increase percent?

Ans

1. 5.25 percent

2. 4.16 percent

3. 10.64 percent

4. 14.15 percent

Question ID : 264330116808

Status : Answered

Chosen Option : 2

Q.5 A principal will become ₹441 in 2 years at the rate of 5% per annum compound interest, compounding annually. What is the principal?

- Ans
- 1. ₹300
 - 2. ₹350
 - 3. ₹400
 - 4. ₹405

Question ID : 26433082927
Status : Answered
Chosen Option : 3

Q.6 The third proportional of a^2b and $3ab$ is:

- Ans
- 1. $9a$
 - 2. ab
 - 3. $9b$
 - 4. $9ab$

Question ID : 26433075154
Status : Answered
Chosen Option : 3

Q.7 In an examination, 20% students failed in English, 60% failed in Mathematics and 15% failed in both. Find the percentage of students who passed in both the subjects.

- Ans
- 1. 36%
 - 2. 40%
 - 3. 34%
 - 4. 35%

Question ID : 26433080157
Status : Answered
Chosen Option : 4

Q.8 A dishonest shopkeeper uses a weight of 900 gm instead of 1 kg and sells 1 kg pulses at its cost price. What will be his profit percentage on selling 10 kg pulses?

- Ans
- 1. $1\frac{100}{9}\%$
 - 2. $\frac{100}{9}\%$
 - 3. $\frac{10}{9}\%$
 - 4. $1\frac{10}{9}\%$

Question ID : 26433074281
Status : Answered
Chosen Option : 2

Q.9 To go 144 km upstream, a rower takes 12 hours, while it takes her only 9 hours to row the same distance downstream. What was the speed (in km/h) of the stream?

- Ans 1. 2 km/h
 2. 1 km/h
 3. 1.5 km/h
 4. 3 km/h

Question ID : 26433075815
Status : Answered
Chosen Option : 1

Q.10 Akshara sold an article for Rs.25,000. If she had offered a discount of 15% on the selling price, then she would have earned a profit of 10%. What is the cost price?

- Ans 1. Rs.18,318.20
 2. Rs.20,318.18
 3. Rs.25,519.20
 4. Rs.19,318.18

Question ID : 26433082714
Status : Answered
Chosen Option : 4

Q.11 A man purchased 5 bags of rice at the rate of ₹900 each, 7 bags of rice at ₹1,000 each and 8 bags of rice at the rate of ₹1,200 each. What is the average cost of 1 kg of rice if each bag contains 50 kg of rice?

- Ans 1. ₹25.5
 2. ₹19.1
 3. ₹21.1
 4. ₹20.5

Question ID : 26433081010
Status : Marked For Review
Chosen Option : 2

Q.12 In a class of only boys and girls, the number of girl is half the number of boys and the average marks of girls are double of the average marks of boys. If the average marks of the class are 56, then what are the average marks of boys?

- Ans 1. 40
 2. 42
 3. 44
 4. 38

Question ID : 26433081703
Status : Answered
Chosen Option : 2

Q.13 A man can row upstream at 8 km/h and downstream at 12 km/h. Find the man's speed in still water and speed of water respectively?

- Ans
- 1. 10 km/h and 2 km/h
 - 2. 2 km/h and 10 km/h
 - 3. 8 km/h and 12 km/h
 - 4. 12 km/h and 8 km/h

Question ID : 26433073040
Status : Answered
Chosen Option : 1

Q.14 If the curved surface area of a solid hemisphere is $2,772 \text{ cm}^2$, find its volume (use $\pi = \frac{22}{7}$).

- Ans
- 1. $29,414 \text{ cm}^3$
 - 2. $21,134 \text{ cm}^3$
 - 3. $12,324 \text{ cm}^3$
 - 4. $19,404 \text{ cm}^3$

Question ID : 26433075250
Status : Answered
Chosen Option : 4

Q.15 Find the least number, which is exactly divisible by 8, 24 and 30.

- Ans
- 1. 150
 - 2. 60
 - 3. 130
 - 4. 120

Question ID : 26433090278
Status : Answered
Chosen Option : 4

Q.16 A and B can do a piece of work in 42 days, and B and C can do it in 56 days. If B alone can do it in 70 days, in how many days can C do the work?

- Ans
- 1. 280 days
 - 2. 550 days
 - 3. 340 days
 - 4. 200 days

Question ID : 264330116888
Status : Answered
Chosen Option : 1

Q.17 If in a triangle ABC, $AB = AC$ and $\angle ACD = 95^\circ$, where D is an outside point on extension to line BC, then $\angle BAC$ is equal to:

- Ans
- 1. 55°
 - 2. 65°
 - 3. 15°
 - 4. 10°

Question ID : 26433074241
Status : Answered
Chosen Option : 4

Q.18 A, B and C start at the same time, from the same point and in the same direction to run around a circular ground. A completes a round in 240 sec, B in 300 sec and C in 160 sec. After how much time will they meet again at the starting point?

- Ans
- 1. 42 min
 - 2. 41 min
 - 3. 43 min
 - 4. 40 min

Question ID : 26433082605
Status : Answered
Chosen Option : 4

Q.19 The compound interest on a sum at a certain rate per annum compounded annually for 2 years is Rs.832 and the simple interest on the same sum for the same period and at the same rate of interest is Rs.800. The difference in the compound interest and simple interest for a period of 3 years would be:

- Ans
- 1. Rs.99.48
 - 2. Rs.66.52
 - 3. Rs.48.00
 - 4. Rs.98.56

Question ID : 26433076042
Status : Not Attempted and Marked For Review
Chosen Option : --

Q.20 A man purchased an old bicycle for ₹1,200 and spent ₹1,800 on its repairing. He sold it for ₹2,400. What is his loss percentage?

- Ans
- 1. 30 Percent
 - 2. 40 Percent
 - 3. 20 Percent
 - 4. 10 Percent

Question ID : 26433080219
Status : Answered
Chosen Option : 3

Q.1 Select the INCORRECTLY spelt word.

- Ans 1. Unanimously
 2. Teelotaler
 3. Contagious
 4. Irreparable

Question ID : 26433084698
Status : Answered
Chosen Option : 2

Q.2 Select the most appropriate synonym of the word given in brackets to fill in the blank.

Technology has _____ (supreme) importance in the life of modern men.

- Ans 1. paramount
 2. magnanimous
 3. miraculous
 4. profuse

Question ID : 26433070466
Status : Answered
Chosen Option : 1

Q.3 Select the most appropriate option that can substitute the underlined segment in the given sentence. If there is no need to substitute it, select 'No substitution'.

Alice won't be coming to the concert as she was ill.

- Ans 1. No substitution
 2. she is
 3. she is going to be
 4. she will be

Question ID : 26433088909
Status : Answered
Chosen Option : 4

Q.4 Select the most appropriate meaning of the underlined idiom.

One can always start off with a clean slate for a new and better life.

- Ans 1. Situation in which you can start again
 2. An innocent man who has nothing to spend
 3. Provide a clear record to one's superiors
 4. A person with no crimes to his record

Question ID : 26433073207
Status : Answered
Chosen Option : 1

Q.5 Select the most appropriate ANTONYM of the underlined word in the given sentence.

Sanjeev is always busy with his business activities.

- Ans
- 1. active
 - 2. engaged
 - 3. idle
 - 4. enthusiastic

Question ID : 26433092093
Status : Answered
Chosen Option : 3

Q.6 Select the most appropriate ANTONYM of the given word.

Enormous

- Ans
- 1. Broad
 - 2. Huge
 - 3. Gorgeous
 - 4. Tiny

Question ID : 26433073921
Status : Answered
Chosen Option : 4

Q.7 Select the most appropriate meaning of the underlined idiom in the given sentence.

The matrimonial alliance between the two kingdoms was actually a Judas kiss.

- Ans
- 1. Deceitful pretence of friendship
 - 2. Incestuous relationship
 - 3. A strong bond
 - 4. Made through intense bloodshed

Question ID : 26433072090
Status : Answered
Chosen Option : 1

Q.8 Select the most appropriate synonym of the given word.

Confined

- Ans
- 1. Limited
 - 2. Extravagant
 - 3. Diluted
 - 4. Halted

Question ID : 26433088758
Status : Answered
Chosen Option : 1

Q.9 A part of the given sentence which has been underlined may contain a spelling error. Select the option that correctly rectifies the spelling error. If there is no error, select 'No error'.

Writing under a pseudonym might not give one the actual recognition that he/she deserves.

- Ans 1. Pseudonym
 2. Pseudoniem
 3. Psaudonym
 4. No error

Question ID : 26433071790
Status : Answered
Chosen Option : 1

Q.10 Select the word that is similar in meaning to the underlined word.

This course will provide you with a rudimentary knowledge of Sanskrit.

- Ans 1. Extensive
 2. Exhaustive
 3. Elementary
 4. Intricate

Question ID : 26433087947
Status : Answered
Chosen Option : 1

Q.11 Select the most appropriate synonym of the given word.

Gigantic

- Ans 1. Idle
 2. Small
 3. Tiny
 4. Huge

Question ID : 26433074048
Status : Answered
Chosen Option : 4

Q.12 Select the most appropriate option to substitute the underlined segment in the given sentence.

My friend has been a teacher since 10 years.

- Ans 1. for 10 years
 2. till 10 years
 3. from 10 years
 4. within 10 years

Question ID : 26433099059
Status : Answered
Chosen Option : 1

Q.13 Parts of the following sentence have been given as options. Select the option that contains an error.

I told Jack that we seen a good film last week with our friends from Mexico.

- Ans
- 1. week with our
 - 2. I told Jack that we
 - 3. seen a good film last
 - 4. friends from Mexico

Question ID : 26433088468
Status : Answered
Chosen Option : 3

Q.14 Select the most appropriate option that can substitute the underlined segment in the given sentence. If there is no need to substitute it, select 'No substitution required'.

The purchase of computers is sure to cost more than you estimate.

- Ans
- 1. No substitution required
 - 2. is sure of cost
 - 3. is sure to costing
 - 4. is sure of costing

Question ID : 26433092110
Status : Answered
Chosen Option : 2

Q.15 Select the most appropriate ANTONYM of the word given in the bracket to fill in the blank.

He was absolutely (courteous)_____ to me.

- Ans
- 1. discourteous
 - 2. polite
 - 3. genteel
 - 4. solicitous

Question ID : 26433059596
Status : Answered
Chosen Option : 1

Comprehension:

In the following passage, some words have been deleted. Read the passage carefully and select the most appropriate option to fill in each blank.

Management like any other art can be learnt and developed. Management means managing all our (1)_____ - money, material, machines and most importantly, manpower. Since we can maximise (2)_____ only through people they have to be treated well. (3)_____ is the key to man-management. People can be forced to work but they have to be motivated to work well. People can be motivated as much through (4)_____ for doing their best as through timely and brief reprimands for poor performance. In order to maximise production, a manager will have to be 'tough and nice', not 'nice and tough' because everyone needs not only to be praised but also (5)_____.

SubQuestion No : 16

Q.16 Select the most appropriate option to fill in blank 1.

- Ans 1. Characters
 2. Resources
 3. Activities
 4. Features

Question ID : 26433092904
Status : Answered
Chosen Option : 2

Comprehension:

In the following passage, some words have been deleted. Read the passage carefully and select the most appropriate option to fill in each blank.

Management like any other art can be learnt and developed. Management means managing all our (1)_____ - money, material, machines and most importantly, manpower. Since we can maximise (2)_____ only through people they have to be treated well. (3)_____ is the key to man-management. People can be forced to work but they have to be motivated to work well. People can be motivated as much through (4)_____ for doing their best as through timely and brief reprimands for poor performance. In order to maximise production, a manager will have to be 'tough and nice', not 'nice and tough' because everyone needs not only to be praised but also (5)_____.

SubQuestion No : 17

Q.17 Select the most appropriate option to fill in blank 2.

- Ans 1. complexity
 2. richness
 3. productivity
 4. affection

Question ID : 26433092905
Status : Answered
Chosen Option : 3

Comprehension:

In the following passage, some words have been deleted. Read the passage carefully and select the most appropriate option to fill in each blank.

Management like any other art can be learnt and developed. Management means managing all our (1)_____ - money, material, machines and most importantly, manpower. Since we can maximise (2)_____ only through people they have to be treated well. (3)_____ is the key to man-management. People can be forced to work but they have to be motivated to work well. People can be motivated as much through (4)_____ for doing their best as through timely and brief reprimands for poor performance. In order to maximise production, a manager will have to be 'tough and nice', not 'nice and tough' because everyone needs not only to be praised but also (5)_____.

SubQuestion No : 18

Q.18 Select the most appropriate option to fill in blank 3.

- Ans
- 1. Mindfulness
 - 2. Observation
 - 3. Motivation
 - 4. Preservation

Question ID : 26433092906
Status : Answered
Chosen Option : 3

Comprehension:

In the following passage, some words have been deleted. Read the passage carefully and select the most appropriate option to fill in each blank.

Management like any other art can be learnt and developed. Management means managing all our (1)_____ - money, material, machines and most importantly, manpower. Since we can maximise (2)_____ only through people they have to be treated well. (3)_____ is the key to man-management. People can be forced to work but they have to be motivated to work well. People can be motivated as much through (4)_____ for doing their best as through timely and brief reprimands for poor performance. In order to maximise production, a manager will have to be 'tough and nice', not 'nice and tough' because everyone needs not only to be praised but also (5)_____.

SubQuestion No : 19

Q.19 Select the most appropriate option to fill in blank 4.

- Ans
- 1. pampering
 - 2. penalty
 - 3. power
 - 4. praise

Question ID : 26433092907
Status : Answered
Chosen Option : 4

Comprehension:

In the following passage, some words have been deleted. Read the passage carefully and select the most appropriate option to fill in each blank.

Management like any other art can be learnt and developed. Management means managing all our (1)_____ - money, material, machines and most importantly, manpower. Since we can maximise (2)_____ only through people they have to be treated well. (3)_____ is the key to man-management. People can be forced to work but they have to be motivated to work well. People can be motivated as much through (4)_____ for doing their best as through timely and brief reprimands for poor performance. In order to maximise production, a manager will have to be 'tough and nice', not 'nice and tough' because everyone needs not only to be praised but also (5)_____.

SubQuestion No : 20

Q.20 Select the most appropriate option to fill in blank 5.

- Ans
- 1. emphasised
 - 2. disappointed
 - 3. reprimanded
 - 4. commanded

Question ID : 26433092908
Status : Answered
Chosen Option : 3

Section : Part-D-Hindi

Q.1 'आज खेत में एक विषधर देखा वह बहुत ही खतरनाक _____ था।' 'साँप' के पर्याय से उक्त वाक्य के रिक्त स्थान की पूर्ति कीजिए।

- Ans
- 1. केशरी
 - 2. सारंग
 - 3. भुजंग
 - 4. नाराच

Question ID : 26433084986
Status : Not Answered
Chosen Option : --

Q.2 विधवा स्त्री हिंदू समाज की सबसे दयनीय प्राणी है और _____ स्त्री हर रीति-रिवाज को निभाने की अधिकारिणी। 'विधवा' के विलोम शब्द से उक्त वाक्य के रिक्त स्थान की पूर्ति करें।

- Ans
- 1. सुलक्षणा
 - 2. सधवा
 - 3. सौभाग्यशालिनी
 - 4. सबला

Question ID : 26433080870
Status : Not Answered
Chosen Option : --

Q.3 'शराब पीनी बुरी आदत है।' इस वाक्य में अशुद्ध शब्द है-

- Ans 1. पीनी
 2. शराब
 3. आदत
 4. बुरी

Question ID : 26433066796
Status : Not Answered
Chosen Option : --

Q.4 निम्न में से कौन-सा शब्द समूह 'तालाब' शब्द का पर्यायवाची समूह नहीं है?

- Ans 1. तड़ाग, सर, सरोवर
 2. सर, तड़ाग, पुष्कर
 3. सरिता, हिम, सागर
 4. जलाशय, पुष्कर, सरोवर

Question ID : 26433067071
Status : Not Answered
Chosen Option : --

Q.5 जो शब्द क्रिया की विशेषता बताएं उन्हें कहते हैं-

- Ans 1. विशेषण
 2. समुच्चयबोधक
 3. सर्वनाम
 4. क्रिया विशेषण

Question ID : 26433085044
Status : Not Answered
Chosen Option : --

Q.6 निम्नलिखित वाक्य में रेखांकित खंड के स्थान पर प्रयुक्त होने वाले सबसे उपयुक्त विकल्प का चयन कीजिए।
आँचल ने सबकी नाक में द्राम कर रखा है।

- Ans 1. मूल्य
 2. दम
 3. बाम
 4. कीमत

Question ID : 26433079567
Status : Not Answered
Chosen Option : --

Q.7 निम्न वाक्यांश के लिए सार्थक शब्द/सही विकल्प चुनें।
जो सब कुछ जानता है

- Ans 1. सामंत
 2. सर्वज्ञ
 3. सर्वस्व
 4. सर्वसर्वा

Question ID : 26433066929
Status : Not Answered
Chosen Option : --

Q.8 'थाली का बैगन होना' मुहावरे का सही अर्थ है -

- Ans 1. जल्दी दोस्त बन जाना
 2. इधर उधर की बातें करना
 3. बैगन की सब्जी बनाना
 4. सिद्धांतहीन व्यक्ति होना

Question ID : 26433065924
Status : Not Answered
Chosen Option : --

Q.9 निम्नलिखित में से 'सर्वनाम' सम्बन्धी अशुद्धि वाले वाक्य की पहचान कीजिये-

- Ans 1. कृपया आप जल्दी आयें।
 2. मैं सदैव समय पर कार्यालय जाता हूँ।
 3. तुम तुम्हारा काम करो।
 4. रमा तुम्हें विद्यालय पहुँचा देगी।

Question ID : 26433063005
Status : Not Answered
Chosen Option : --

Q.10 निम्न वाक्यांश के लिए एक शब्द क्या होगा?
जो स्मरण करने योग्य है

- Ans 1. स्मरणीय
 2. पूजनीय
 3. अनुकरणीय
 4. गवेषणीय

Question ID : 26433070098
Status : Not Answered
Chosen Option : --

Q.11 'रोहन रात में भोजन नहीं खाता।'
उपरोक्त वाक्य के किस भाग में अशुद्धि है?

- Ans 1. भोजन
 2. नहीं खाता।
 3. रात में
 4. रोहन

Question ID : 26433092142
Status : Not Answered
Chosen Option : --

Q.12 "अजय की बुद्धि भ्रष्ट हो गई है।"
उक्त वाक्य में प्रयुक्त 'बुद्धि' के स्थान पर उसके समानार्थी शब्द का प्रयोग निम्न में से किस वाक्य में नहीं किया गया है?

- Ans 1. अजय की अक्ल भ्रष्ट हो गई है।
 2. अजय की विधु भ्रष्ट हो गई है।
 3. अजय की मति भ्रष्ट हो गई है।
 4. अजय की समझ भ्रष्ट हो गई है।

Question ID : 26433067032
Status : Not Answered
Chosen Option : --

Q.13 ' _____ पोछना' इस मुहावरे को पूरा करें।

- Ans 1. हाथ
 2. आँसू
 3. कान
 4. पैर

Question ID : 26433066814
Status : Not Answered
Chosen Option : --

Q.14 निम्नलिखित विकल्पों में से 'परम्परा से सुना हुआ' वाक्यांश के लिए एक सार्थक शब्द क्या होगा?

- Ans 1. आनुश्राविक
 2. वन्दनीय
 3. आशातीत
 4. कर्णप्रिय

Question ID : 26433062471
Status : Not Answered
Chosen Option : --

Q.15 निम्नलिखित में से शुद्ध वाक्य का चयन कीजिये-

- Ans 1. तमाम देश भर में यह बात फैल गई।
 2. तमाम देश भर में फैल गई है बात।
 3. देशभर में यह बात फैल गयी।
 4. देशभर में यह बात फैली गई।

Question ID : 26433062824

Status : Not Answered

Chosen Option : --

Comprehension:

निम्न गद्यांश के आधार पर प्रश्न संख्या 1-5 के उत्तर दीजिए।
बच्चों पर ही 1. _____ निर्भर है और वही हमारी 2. _____ हैं। इसलिए आज संसार में 3. _____ की मनोवृत्ति और विचार शैली को शिक्षा द्वारा बदलने का प्रयास किया जा रहा है। यदि हमें 4. _____ की चिन्ता है, तो हमें 5. _____ की भी चिन्ता करनी होगी।

SubQuestion No : 16

Q.16 गद्यांश में रिक्त स्थान 1 की पूर्ति के लिए सबसे उपयुक्त विकल्प का चयन विकल्पों में से कीजिए।

- Ans 1. भविष्य
 2. वर्तमान
 3. ब्रह्मांड
 4. भूत

Question ID : 26433092001

Status : Not Answered

Chosen Option : --

Comprehension:

निम्न गद्यांश के आधार पर प्रश्न संख्या 1-5 के उत्तर दीजिए।
बच्चों पर ही 1. _____ निर्भर है और वही हमारी 2. _____ हैं। इसलिए आज संसार में 3. _____ की मनोवृत्ति और विचार शैली को शिक्षा द्वारा बदलने का प्रयास किया जा रहा है। यदि हमें 4. _____ की चिन्ता है, तो हमें 5. _____ की भी चिन्ता करनी होगी।

SubQuestion No : 17

Q.17 गद्यांश में रिक्त स्थान 2 की पूर्ति के लिए सबसे उपयुक्त विकल्प का चयन विकल्पों में से कीजिए।

- Ans 1. आशा
 2. भविष्य
 3. बेसहारा
 4. निराशा

Question ID : 26433092002

Status : Not Answered

Chosen Option : --

Comprehension:

निम्न गद्यांश के आधार पर प्रश्न संख्या 1-5 के उत्तर दीजिए।
बच्चों पर ही 1. _____ निर्भर है और वही हमारी 2. _____ हैं। इसलिए आज संसार में 3. _____ की मनोवृत्ति और विचार शैली को शिक्षा द्वारा बदलने का प्रयास किया जा रहा है। यदि हमें 4. _____ की चिन्ता है, तो हमें 5. _____ की भी चिन्ता करनी होगी।

SubQuestion No : 18

Q.18 गद्यांश में रिक्त स्थान 3 की पूर्ति के लिए सबसे उपयुक्त विकल्प का चयन विकल्पों में से कीजिए।

- Ans 1. बच्चों
 2. विचार
 3. नेता
 4. बुजुर्गों

Question ID : 26433092003

Status : Not Answered

Chosen Option : --

Comprehension:

निम्न गद्यांश के आधार पर प्रश्न संख्या 1-5 के उत्तर दीजिए।
बच्चों पर ही 1. _____ निर्भर है और वही हमारी 2. _____ हैं। इसलिए आज संसार में 3. _____ की मनोवृत्ति और विचार शैली को शिक्षा द्वारा बदलने का प्रयास किया जा रहा है। यदि हमें 4. _____ की चिन्ता है, तो हमें 5. _____ की भी चिन्ता करनी होगी।

SubQuestion No : 19

Q.19 गद्यांश में रिक्त स्थान 4 की पूर्ति के लिए सबसे उपयुक्त विकल्प का चयन विकल्पों में से कीजिए।

- Ans 1. ब्रह्मांड
 2. भविष्य
 3. भूत
 4. वर्तमान

Question ID : 26433092004

Status : Not Answered

Chosen Option : --

Comprehension:

निम्न गद्यांश के आधार पर प्रश्न संख्या 1-5 के उत्तर दीजिए।
बच्चों पर ही 1. _____ निर्भर है और वही हमारी 2. _____ हैं। इसलिए आज संसार में 3. _____ की मनोवृत्ति और विचार शैली को शिक्षा द्वारा बदलने का प्रयास किया जा रहा है। यदि हमें 4. _____ की चिन्ता है, तो हमें 5. _____ की भी चिन्ता करनी होगी।

SubQuestion No : 20

Q.20 गद्यांश में रिक्त स्थान 5 की पूर्ति के लिए सबसे उपयुक्त विकल्प का चयन विकल्पों में से कीजिए।

- Ans 1. कल्याण
 2. बच्चों
 3. बुजुर्गों
 4. प्रौढ़ों

Question ID : 26433092005

Status : Not Answered

Chosen Option : --