

Constable GD in CAPFs SSF Rifleman GD in Assam Rifles and Sepoy in NCB Examination 2022

Roll Number	www.govtjobsalert.in
Candidate Name	www.govtjobsalert.in
Venue Name	iON Digital Zone iDZ Jamshedpur
Exam Date	01/02/2023
Exam Time	9:00 AM - 10:00 AM
Subject	Constable GD Examination 2022

Section : Part-A-General Intelligence and Reasoning

Q.1 Select the correct mirror image of the given figure when the mirror is placed at MN as shown below.



- Ans
- 1. tEVθEORθ
 - 2. tEVθEORθ
 - 3. tEVθEORθ
 - 4. tEVθEORθ

Question ID : 26433089460
Status : Answered
Chosen Option : 1

Q.2 Select the option that is related to the fourth term in the same way as the first term is related to the second term and the fifth term is related to the sixth term.
104 : 13 :: ? : 37 :: 168 : 21

- Ans
- 1. 304
 - 2. 248
 - 3. 296
 - 4. 280

Question ID : 26433074548
Status : Answered
Chosen Option : 3

Q.3 Which of the following numbers will replace the question mark (?) in the given series?
2880, 480, 96, ?, 8, 4

- Ans
- 1. 24
 - 2. 76
 - 3. 46
 - 4. 56

Question ID : 26433076748
Status : Answered
Chosen Option : 1

Q.4 In a certain code language, 'DANCE' is written as 'AECDN', 'MUSIC' is written as 'IUCMS', how will 'SONG' be written as in that language?

- Ans
- 1. GNSO
 - 2. OSNG
 - 3. OGNS
 - 4. SNGO

Question ID : 26433069654

Status : Answered

Chosen Option : 3

Q.5 Three statements are given, followed by three conclusions numbered I, II and III. Assuming the statements to be true, even if they seem to be at variance with commonly known facts, decide which of the conclusions logically follow(s) from the statements.

Statements:

Some paints are brushes.

All brushes are easels.

Some easels are tables.

Conclusions:

I. Some brushes are tables.

II. Some paints are easels.

III. Some easels are brushes.

- Ans
- 1. Only conclusions I and III follow
 - 2. All conclusions follow
 - 3. Only conclusion III follows
 - 4. Only conclusions II and III follow

Question ID : 26433090996

Status : Answered

Chosen Option : 2

Q.6 Which of the mathematical signs should be interchanged in the below equation to make it mathematically correct?

$$72 - 6 + 2 \times 216 \div 24 = 420$$

- Ans
- 1. \times and \div
 - 2. $-$ and \times
 - 3. $-$ and $+$
 - 4. $-$ and \div

Question ID : 264330117561

Status : Answered

Chosen Option : 4

Q.7 Which letter cluster will replace the question mark (?) to complete the given series?
DKBN, ENWS, ?, GTMC, HWHH

- Ans
- 1. QRFG
 - 2. RQFX
 - 3. GQFR
 - 4. FQRX

Question ID : 26433079424

Status : Answered

Chosen Option : 4

Q.8 Which option will replace the question mark (?) to complete the given figure series?



Ans

✗ 1.



✗ 2.



✓ 3.



✗ 4.

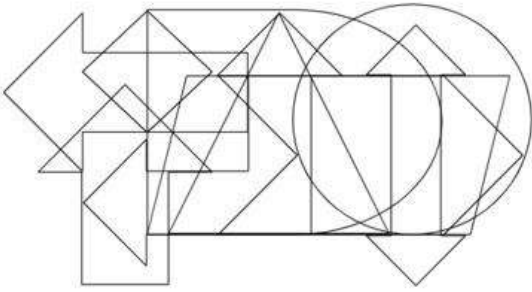


Question ID : 26433078967

Status : Answered

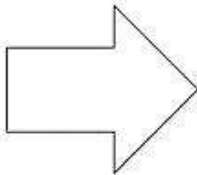
Chosen Option : 3

Q.9 Select the option figure which is embedded in the given figure. (Rotation is Not allowed)




Ans


✗ 1.



✓ 2.



✗ 3.



✗ 4.



Question ID : 26433085744

Status : Answered

Chosen Option : 2

Q.10 Which two signs should be interchanged to make the given equation correct?
 $790 + 5 \div 58 \times 5 - 96 = 352$

Ans ✓ 1. + and ÷

✗ 2. + and -

✗ 3. + and ×

✗ 4. ÷ and ×

Question ID : 26433082666

Status : Answered

Chosen Option : 1

Q.11 Which letter-cluster will replace the question mark (?) to complete the given series?
AZME, CYOG, ?, GWSK, IVUM

- Ans
- 1. FYRJ
 - 2. FXRJ
 - 3. EXQI
 - 4. FXQJ

Question ID : 26433067939
Status : Answered
Chosen Option : 3

Q.12 Which of the following options will replace the question mark (?) in the given series?
103, 110, 105, ?, 107, 114, 109

- Ans
- 1. 110
 - 2. 108
 - 3. 111
 - 4. 112

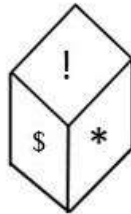
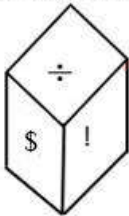
Question ID : 26433089445
Status : Answered
Chosen Option : 4

Q.13 Select the option that is related to the fifth term in the same way as the second term is related to the first term and the fourth term is related to the third term.
QUEST : VUGWS :: REACH : JECGT :: SOLVE : ?

- Ans
- 1. GXNOV
 - 2. GXNQU
 - 3. VONXG
 - 4. UQNXG

Question ID : 26433087192
Status : Answered
Chosen Option : 2

Q.14 Two different positions of the same dice, with the symbols \$, @, !, *, ∞, ÷, are shown. Find the symbol on the face opposite the face showing '÷'.



- Ans
- 1. @
 - 2. !
 - 3. *
 - 4. ∞

Question ID : 26433089512
Status : Answered
Chosen Option : 3

Q.15 'P % Q' means 'P is the brother of Q'.
'P + Q' means 'P is the daughter of Q'.
'P = Q' means 'P is the son of Q'.
'P # Q' means 'P is the wife of Q'.
If L + M % N = O # P, how is P related to L?

- Ans
- 1. Father's father
 - 2. Father's brother
 - 3. Mother's brother
 - 4. Sister's husband

Question ID : 26433087004
Status : Answered
Chosen Option : 1

Q.16 In a certain code language, 'MARINE' is coded as '100' and 'NORMAL' is coded as '126'. How will 'REALM' be coded in that language?

- Ans
- 1. 98
 - 2. 88
 - 3. 78
 - 4. 70

Question ID : 26433081514
Status : Not Attempted and Marked For Review
Chosen Option : --

Q.17 Which option represents the correct order of the given words as they would appear in the English dictionary?
1 pointed
2 pollen
3 populate
4 popular
5 podium

- Ans
- 1. 5,3,4,2,1
 - 2. 5,4,2,3,1
 - 3. 5,1,2,4,3
 - 4. 5,3,1,4,2

Question ID : 26433069298
Status : Answered
Chosen Option : 3

Q.18 Select the option that is related to the third word in the same way as the second word is related to the first word.
(The words must be considered as meaningful English words and must not be related to each other based on the number of letters/number of consonants/vowels in the word)

Friend : Foe :: Die : ?

- Ans
- 1. End
 - 2. Live
 - 3. Life
 - 4. Cry

Question ID : 26433067976
Status : Answered
Chosen Option : 2

Q.19 Six friends M, N, O, P, Q and R, are sitting in a row facing South. N is exactly in between P and Q. O is to the immediate left of R. M is to the immediate right of P. If Q is at the extreme left of the row, then who is sitting to the immediate left to O?

- Ans
- 1. Q
 - 2. M
 - 3. N
 - 4. P

Question ID : 26433079062
Status : Answered
Chosen Option : 2

Q.20 Eight people, D, E, G, H, M, N, Y and Z are sitting in a straight line, facing north. Y sits at one of the extreme ends of the line. Only three people sit between Y and Z. E sits second to the right of Z. Only three people sit between E and D. G sits at one of the positions to the left of D but not at an extreme end of the line. M is not an immediate neighbour of Z. N sits second to the right of H. How many people sit to the left of H?

- Ans
- 1. Three
 - 2. None
 - 3. Two
 - 4. One

Question ID : 26433092424
Status : Answered
Chosen Option : 1

Section : Part-B-General Knowledge and General awareness

Q.1 Base changes the colour of the red litmus to _____.

- Ans
- 1. blue
 - 2. purple
 - 3. pink
 - 4. yellow

Question ID : 264330115264
Status : Answered
Chosen Option : 1

Q.2 In 1873, he founded the Satya-Shodhak Samaj. Who is referred to as 'he' here?

- Ans
- 1. Govindrao Phule
 - 2. Gopal Hari Deshmukh
 - 3. Savitribai Phule
 - 4. Jyotiba Phule

Question ID : 264330115725
Status : Answered
Chosen Option : 4

Q.3 At Devaprayag the Bhagirathi is Joined by _____.

- Ans
- 1. The Alaknanda
 - 2. The Ghaghra
 - 3. The Kosi
 - 4. The Yamuna

Question ID : 26433087891
Status : Answered
Chosen Option : 1

Q.4 Who took over as the Chief of Army Staff on April 30, 2022?

- Ans
- 1. Manoj Mukund Naravane
 - 2. Vineet Joshi
 - 3. Nitin Paranjape
 - 4. Manoj Pande

Question ID : 264330115051
Status : Answered
Chosen Option : 4

Q.5 Who looks after the development, maintenance and management of inland water ways in India?

- Ans
- 1. Steel Authority of India
 - 2. Inland Waterways Authority of India
 - 3. National Highway Authority of India
 - 4. Airport Authority of India

Question ID : 264330115595
Status : Answered
Chosen Option : 2

Q.6 Who among the following politicians became the President of India in July 2022?

- Ans
- 1. Jai Ram Thakur
 - 2. Ram Nath Kovind
 - 3. Droupadi Murmu
 - 4. Smriti Irani

Question ID : 264330114887
Status : Answered
Chosen Option : 3

Q.7 Personal Disposable income is money that is available for household consumption, _____ and spending after accounting for income tax.

- Ans**
- 1. Goods and Service Tax
 - 2. sales tax
 - 3. interest
 - 4. savings

Question ID : 264330115348
Status : Answered
Chosen Option : 4

Q.8 Which of the following Articles of the Constitution of India provides for 'protection against arrest and detention in certain cases'?

- Ans**
- 1. Article 10
 - 2. Article 47
 - 3. Article 35
 - 4. Article 22

Question ID : 26433086806
Status : Answered
Chosen Option : 3

Q.9 Disadvantage of the industrial development is _____.

- Ans**
- 1. sustainable development
 - 2. pollution
 - 3. high revenue collection
 - 4. economic growth

Question ID : 264330115393
Status : Answered
Chosen Option : 2

Q.10 As of November 2022, who is the Union Minister of Information & Broadcasting and Youth Affairs & Sports in India?

- Ans**
- 1. Anurag Singh Thakur
 - 2. Kiren Rijju
 - 3. Narayan Rane
 - 4. Ashwini Vaishnav

Question ID : 264330114929
Status : Answered
Chosen Option : 1

Q.11 If there is need for four labourers and seven are working, then what kind of unemployment are the extra three labourers suffering from?

- Ans**
- 1. Cyclic unemployment
 - 2. Frictional unemployment
 - 3. Structural unemployment
 - 4. Disguised unemployment

Question ID : 264330116091
Status : Answered
Chosen Option : 4

Q.12 Which of the following is an example of indirect tax?

- Ans**
- 1. Gift tax
 - 2. Corporation tax for firms
 - 3. Property tax
 - 4. G.S.T.

Question ID : 26433054802
Status : Answered
Chosen Option : 4

Q.13 Limestone, chalk and marble are different forms of _____.

- Ans**
- 1. Calcium oxide
 - 2. Calcium carbonate
 - 3. Calcium hydroxide
 - 4. Calcium phosphate

Question ID : 264330115164
Status : Answered
Chosen Option : 2

Q.14 The annual festival of Gangaur, celebrated by the married women of Rajasthan, is observed in the Hindu month of _____.

- Ans**
- 1. Phalgun
 - 2. Ashvina
 - 3. Kartika
 - 4. Chaitra

Question ID : 264330115105
Status : Answered
Chosen Option : 3

Q.15 Which country won the maximum gold medal in the 2020 Summer Paralympics?

- Ans**
- 1. United States of America
 - 2. Great Britain
 - 3. China
 - 4. Russia

Question ID : 264330115924
Status : **Marked For Review**
Chosen Option : 3

Q.16 'Arthashastra' was written by:

- Ans**
- 1. Kautilya
 - 2. Vishakhadutta
 - 3. Megasthenes
 - 4. Vasudeva

Question ID : 26433090572
Status : **Answered**
Chosen Option : 1

Q.17 Alamel Valli is an exponent of which of the following classical dance forms?

- Ans**
- 1. Bharatanatyam
 - 2. Kathak
 - 3. Kathakali
 - 4. Odissi

Question ID : 26433071666
Status : **Answered**
Chosen Option : 3

Q.18

In which sport is the field often oval with a rectangular area in the middle, that is 22 yards (20.12 metres) by 10 feet (3.04 metres) wide?

- Ans**
- 1. Cricket
 - 2. Lawn Tennis
 - 3. Basketball
 - 4. Volleyball

Question ID : 26433089937
Status : **Answered**
Chosen Option : 1

Q.19 The _____ is the sole link of communication between the Cabinet and the Governor.

- Ans
- 1. Advocate General
 - 2. Chief Minister
 - 3. Chief Election Commissioner
 - 4. Chairman of State Public Service Commission

Question ID : 26433089186
Status : Answered
Chosen Option : 2

Q.20 C. V. Chandrasekhar was awarded the Padma Bhushan for his contribution in _____.

- Ans
- 1. Kuchipudi
 - 2. Kathak
 - 3. Bharatnatyam
 - 4. Manipuri

Question ID : 264330115893
Status : Answered
Chosen Option : 3

Section : Part-C-Elementary Mathematics

Q.1 Find the absolute difference between the greatest 3-digit number and the smallest 4-digit number divisible by 12, 25 and 18.

- Ans
- 1. 900
 - 2. 300
 - 3. 600
 - 4. 1200

Question ID : 264330116646
Status : Answered
Chosen Option : 1

Q.2 A shopkeeper announces the following three discount schemes on the purchase of an article. Which of these schemes is the best scheme for a customer?

- A. Two successive discounts of 15% and 18%
- B. Buy 6 articles and get 2 free
- C. A flat discount of 30%

- Ans
- 1. Both schemes A and C give the same discount
 - 2. Scheme A
 - 3. Scheme B
 - 4. Scheme C

Question ID : 26433075762
Status : Answered
Chosen Option : 2

Q.3 If 12 men or 9 women can do a piece of work in 36 days, then how many days will 16 men and 18 women take to finish the same work?

- Ans
- 1. $13\frac{1}{5}$
 - 2. $12\frac{4}{5}$
 - 3. $14\frac{3}{5}$
 - 4. $10\frac{4}{5}$

Question ID : 26433082929
Status : Answered
Chosen Option : 4

Q.4 The current birth rate per ten thousand is 450, whereas the corresponding death rate is 120 per ten thousand. Find the net growth rate in terms of the population increase in percentage.

- Ans
- 1. 2.3%
 - 2. 2%
 - 3. 3%
 - 4. 3.3%

Question ID : 26433080127
Status : Not Attempted and Marked For Review
Chosen Option : --

Q.5 On mixing two classes A and B of students having average marks 50 and 80, respectively, the average marks obtained is 60. Find the respective ratio of the students in the classes A and B.

- Ans
- 1. 3 : 2
 - 2. 2 : 3
 - 3. 2 : 1
 - 4. 1 : 2

Question ID : 26433081009
Status : Answered
Chosen Option : 3

Q.6 A can paint 5 chairs in an hour and B can paint 3 chairs in an hour. Determine how much time they will require to paint 40 chairs when they work together.

- Ans
- 1. 12 hours
 - 2. 10 hours
 - 3. 8 hours
 - 4. 5 hours

Question ID : 26433071340
Status : Answered
Chosen Option : 4

Q.7 The weights of two persons A and B are in ratio of 5 : 3 respectively. If the weight of A increases by 5% and the total weight of A and B becomes 92 kg with an increase of 15%, then find the percentage increase in the weight of B. (Correct to 2 decimal places)

- Ans 1. 31.67 Percent
 2. 30.66 Percent
 3. 32.66 Percent
 4. 36.66 Percent

Question ID : 26433080162
Status : Marked For Review
Chosen Option : 3

Q.8 If a right circular cone of height 24 cm has a volume of $392\pi\text{ cm}^3$, then the curved surface area is:

- Ans 1. $163\pi\text{ cm}^2$
 2. $191\pi\text{ cm}^2$
 3. $175\pi\text{ cm}^2$
 4. $185\pi\text{ cm}^2$

Question ID : 26433076088
Status : Answered
Chosen Option : 3

Q.9 The simplified value of $\frac{5}{16}$ of $\frac{7}{8} \times 6 + 15 - 10$ is:

- Ans 1. $\frac{425}{64}$
 2. $\frac{850}{64}$
 3. $\frac{425}{128}$
 4. $\frac{525}{64}$

Question ID : 26433081002
Status : Answered
Chosen Option : 1

Q.10 Find the mean proportional of squares of $\frac{x}{y}$ and $\frac{y}{z}$.

Ans

1. $\left(\frac{x}{z}\right)^{3/2}$

2. $\sqrt{\frac{x}{z}}$

3. $\frac{x}{z}$

4. $\left(\frac{x}{z}\right)^2$

Question ID : 26433079938

Status : Answered

Chosen Option : 3

Q.11 If you are buying one jacket at ₹2,500 and buying two similar jackets at ₹4,500, then find the discount percentage. (Marked price of one jacket is ₹2500)

Ans 1. 12 Percent

2. 15 Percent

3. 10 Percent

4. 18 Percent

Question ID : 26433080173

Status : Answered

Chosen Option : 3

Q.12 A police officer follows a thief who is at a distance of 800 m from him. If they run at a speed of 8 km/h and 7 km/h, respectively, how long does the police officer have to run to catch up with the thief?

Ans 1. 4000 m

2. 4800 m

3. 5600 m

4. 6400 m

Question ID : 26433073133

Status : Answered

Chosen Option : 4

Q.13 In a college, there are two courses. In M.Com. 450 students passed out of 500, while in M.A. 1500 students passed the exam out of 2000 students. What is the combined pass percentage of the college?

- Ans
- 1. 78%
 - 2. 79%
 - 3. 75.5%
 - 4. 76.75%

Question ID : 26433082497
Status : Answered
Chosen Option : 1

Q.14 A sum of money amounts to ₹14,112 at the rate of 20% per annum compounded annually for 3 years. Find the sum of money.

- Ans
- 1. ₹8,099.60
 - 2. ₹7,167.70
 - 3. ₹9,166.87
 - 4. ₹8,166.67

Question ID : 26433082722
Status : Answered
Chosen Option : 4

Q.15 A thief started running at a speed of 15 m/s, after running for 12 sec a policeman started running to catch the thief in the same direction at a speed of 20 m/s. How many metre will the policeman run to catch the thief?

- Ans
- 1. 740 m
 - 2. 754 m
 - 3. 720 m
 - 4. 744 m

Question ID : 26433075694
Status : Answered
Chosen Option : 3

Q.16 If the radius of a sphere is increased by 5%, what percentage increase takes place in the surface area of the sphere?

- Ans
- 1. 18%
 - 2. 25%
 - 3. 10.25%
 - 4. 15.25%

Question ID : 26433083059
Status : Answered
Chosen Option : 3

Q.17 The price of a mobile first successively decreases by 5%, 2% and after that the price is increased successively by 10%, 20%, respectively. What is the final change in the price of the mobile?

Ans

1. $17\frac{153}{250}\%$

2. $21\frac{113}{250}\%$

3. $22\frac{123}{250}\%$

4. $22\frac{223}{250}\%$

Question ID : 26433076073

Status : Answered

Chosen Option : 4

Q.18 A house worth Rs.1,00,000 is sold by A to B at a profit of 6%. B sells house back to A at 3% loss. What is the gain/loss of A in the entire transaction?

Ans 1. Loss of Rs.3,280

2. Gain of Rs.2,802

3. Loss of Rs.2,280

4. Gain of Rs.2,820

Question ID : 26433076373

Status : Answered

Chosen Option : 4

Q.19 Soni sold a mobile phone to Raju at a profit of 10%, Raju sold it to Alok at a loss of 5% and Alok sold it to Sohan at a profit of 20%. If Sohan bought it for ₹ 6,270, what is the cost price (in ₹) of the mobile for Soni?

Ans

1. ₹5,000

2. ₹5,500

3. ₹4,500

4. ₹4,650

Question ID : 26433075546

Status : Answered

Chosen Option : 2

Q.20 Price of 3 CTs is ₹3,300.What would be the price (in ₹) of 10 CTs?

- Ans
- 1. ₹11,000
 - 2. ₹12,000
 - 3. ₹10,000
 - 4. ₹33,000

Question ID : 26433076010
Status : Answered
Chosen Option : 1

Section : Part-D-English

Q.1 Select the most appropriate homonym to fill in the blank.

This nation is _____ to each of its citizens.

- Ans
- 1. feel
 - 2. fur
 - 3. fair
 - 4. fare

Question ID : 26433088790
Status : Answered
Chosen Option : 3

Q.2 Select the most appropriate ANTONYM of the given word.

Truth

- Ans
- 1. Falsity
 - 2. Lay
 - 3. Loyalty
 - 4. Reality

Question ID : 26433072859
Status : Answered
Chosen Option : 1

Q.3 Select the option with the correct spelling of the underlined word in the given sentence.

They waited for him in the adjcent room.

- Ans
- 1. adjacentt
 - 2. adgencent
 - 3. adjacent
 - 4. addjacent

Question ID : 26433073610
Status : Answered
Chosen Option : 3

Q.4 Select the most appropriate synonym of the given word.

Blend

- Ans 1. Disunity
 2. Scatter
 3. Fusion
 4. Destruction

Question ID : 26433072072
Status : Answered
Chosen Option : 3

Q.5 Select the correct spelling of the word to fill in the blank in the given sentence.

Shyam _____ an _____ letter from his employer.

- Ans 1. received; acknowledgment
 2. reseived; knowledgement
 3. recievid; acknowledgment
 4. recievid; aknowlegdement

Question ID : 26433084767
Status : Answered
Chosen Option : 1

Q.6 Select the most appropriate ANTONYM of the underlined word in the following sentence.

It is quite comprehensible that now young people's minds are constantly being reshaped by the media's constant meddling of certain unfathomable ideas and moral standards.

- Ans 1. Constantly
 2. Comprehensible
 3. Meddling
 4. Reshape

Question ID : 26433092863
Status : Answered
Chosen Option : 2

Q.7 Select the most appropriate synonym of the underlined word.

A leading actor has said in a new interview that nepotism does not matter, and she is the best example of that.

- Ans 1. favouritism
 2. neutrality
 3. unbiasedness
 4. objectivity

Question ID : 26433088839
Status : Answered
Chosen Option : 1

Q.8 Select the most appropriate option that can substitute the underlined segment in the given sentence.

The teacher asked me to tell him what is his name?

- Ans
- 1. what name is he?
 - 2. what the name is.
 - 3. what his name was.
 - 4. what he is called is.

Question ID : 264330102392
Status : Answered
Chosen Option : 3

Q.9 Select the most appropriate option to fill in the blank.

He seized a thief by his _____ and forced him to answer.

- Ans
- 1. colour
 - 2. choler
 - 3. caller
 - 4. collar

Question ID : 26433087942
Status : Answered
Chosen Option : 4

Q.10 Select the correct idiom that can substitute the italicised group of words in the given sentence.

Prof. Ram Prasad was an environmental activist, and apparently, he became *annoying and irritating* to leather factories over the years.

- Ans
- 1. a vexed question
 - 2. a thorn in the flesh
 - 3. a slow coach
 - 4. an uphill task

Question ID : 26433084762
Status : Answered
Chosen Option : 2

Q.11 Select the most appropriate synonym for the underlined word in the given sentence.

The moral failure was the result of his lassitude.

- Ans
- 1. derision
 - 2. luxury
 - 3. weariness
 - 4. indulgence

Question ID : 26433073752
Status : Answered
Chosen Option : 1

Q.12 Select the most appropriate option to fill in the blank.
The child _____ not guilty of shoplifting.

- Ans 1. questioned
 2. nagged
 3. said
 4. pleaded

Question ID : 26433085599
Status : Answered
Chosen Option : 4

Q.13 Select the correct option to substitute the underlined segment in the given sentence. If no substitution is required, select 'No substitution'.

Slow and steady wins the race.

- Ans 1. No substitution
 2. had won the race
 3. won the race
 4. will win the race

Question ID : 26433090808
Status : Answered
Chosen Option : 1

Q.14 The following sentence has been divided into parts. One of them may contain an error. Select the part that contains the error from the given options. If you don't find any error, mark 'No error' as your answer.
The shield used by the / warrior have been one / made of strong iron.

- Ans 1. No error
 2. warrior have been one
 3. made of strong iron
 4. The shield used by the

Question ID : 26433099906
Status : Answered
Chosen Option : 2

Q.15 Select the most appropriate meaning of the underlined idiom that can be substituted in the following sentence.

The robber showed a clean pair of heels when the policeman came nearer.

- Ans 1. stole and ran away with heels
 2. stood so as to show the heels
 3. showed how clean the heels were
 4. ran away

Question ID : 26433072234
Status : Answered
Chosen Option : 4

Comprehension:

In the following passage, some words have been deleted. Read the passage carefully and select the most appropriate option to fill in each blank.

Transformation of a sentence means (1) _____ the words or forms of the sentence without changing (2) _____ meaning. Such changes can be in the form (3) _____ changes from negative sentences into assertive, interrogative or exclamatory sentences and vice versa (4) _____ change in narration or change in voice or changes from simple to (5) _____ or complex sentences.

SubQuestion No : 16

Q.16 Select the most appropriate option to fill in blank number 1.

Ans ✓ 1. changing

✗ 2. to change

✗ 3. of change

✗ 4. change

Question ID : 26433088564

Status : Answered

Chosen Option : 1

Comprehension:

In the following passage, some words have been deleted. Read the passage carefully and select the most appropriate option to fill in each blank.

Transformation of a sentence means (1) _____ the words or forms of the sentence without changing (2) _____ meaning. Such changes can be in the form (3) _____ changes from negative sentences into assertive, interrogative or exclamatory sentences and vice versa (4) _____ change in narration or change in voice or changes from simple to (5) _____ or complex sentences.

SubQuestion No : 17

Q.17 Select the most appropriate option to fill in blank number 2.

Ans ✓ 1. its

✗ 2. their

✗ 3. her

✗ 4. his

Question ID : 26433088565

Status : Answered

Chosen Option : 1

Comprehension:

In the following passage, some words have been deleted. Read the passage carefully and select the most appropriate option to fill in each blank.

Transformation of a sentence means (1) _____ the words or forms of the sentence without changing (2) _____ meaning. Such changes can be in the form (3) _____ changes from negative sentences into assertive, interrogative or exclamatory sentences and vice versa (4) _____ change in narration or change in voice or changes from simple to (5) _____ or complex sentences.

SubQuestion No : 18

Q.18 Select the most appropriate option to fill in blank number 3.

- Ans 1. in
 2. at
 3. on
 4. of

Question ID : 26433088566

Status : Answered

Chosen Option : 4

Comprehension:

In the following passage, some words have been deleted. Read the passage carefully and select the most appropriate option to fill in each blank.

Transformation of a sentence means (1) _____ the words or forms of the sentence without changing (2) _____ meaning. Such changes can be in the form (3) _____ changes from negative sentences into assertive, interrogative or exclamatory sentences and vice versa (4) _____ change in narration or change in voice or changes from simple to (5) _____ or complex sentences.

SubQuestion No : 19

Q.19 Select the most appropriate option to fill in blank number 4.

- Ans 1. but
 2. or
 3. yet
 4. so

Question ID : 26433088567

Status : Answered

Chosen Option : 2

Comprehension:

In the following passage, some words have been deleted. Read the passage carefully and select the most appropriate option to fill in each blank.

Transformation of a sentence means (1) _____ the words or forms of the sentence without changing (2) _____ meaning. Such changes can be in the form (3) _____ changes from negative sentences into assertive, interrogative or exclamatory sentences and vice versa (4) _____ change in narration or change in voice or changes from simple to (5) _____ or complex sentences.

SubQuestion No : 20

Q.20 Select the most appropriate option to fill in blank number 5.

- Ans 1. compound
 2. negative
 3. positive
 4. assertive

Question ID : 26433088568
Status : Answered
Chosen Option : 2

Section : Part-D-Hindi

Q.1 निम्नलिखित शब्द के सही पर्यायवाची शब्द का चयन विकल्पों में से कीजिए।
बिजली

- Ans 1. दामिनी
 2. यामा
 3. पद्मा
 4. अर्कजा

Question ID : 26433066940
Status : Not Answered
Chosen Option : --

Q.2 'कुछ समय उपरान्त हमारा साहित्य उच्चकोटि का था।'
उपरोक्त वाक्य के किस भाग में अनुपयुक्त शब्द का प्रयोग किया गया है?

- Ans 1. का था
 2. हमारा
 3. कुछ समय उपरान्त
 4. साहित्य उच्चकोटि

Question ID : 26433062804
Status : Not Answered
Chosen Option : --

Q.3 निम्नलिखित में से शुद्ध वाक्य कौन सा है?

- Ans
- 1. राध अच्छ लड़की है।
 - 2. राधा अच्छी लड़का है।
 - 3. राधा अच्छी लड़की है।
 - 4. राधा अच्छा लड़की है।

Question ID : 26433080931
Status : Not Answered
Chosen Option : --

Q.4 'दीक्षांत समारोह _____।' उपर्युक्त वाक्य में रिक्त स्थान के लिए उपयुक्त विकल्प निम्न में से क्या होगा?

- Ans
- 1. से अभिप्राय विवाह पूर्व किए जाने वाले रीति-रिवाज से है
 - 2. से अभिप्राय उपनयन संस्कार से होता है
 - 3. से अभिप्राय संन्यास लेने के लिए किए जाने वाले रीति-रिवाज से है
 - 4. से अभिप्राय शिक्षा के समापन पर किए जाने वाले संस्कार से है

Question ID : 26433067049
Status : Not Answered
Chosen Option : --

Q.5 निम्न वाक्यांश के लिए उपयुक्त एक शब्द का चयन विकल्पों में से कीजिए।
'जो युद्ध में स्थिर रहता है'

- Ans
- 1. योजक
 - 2. युयुत्सु
 - 3. युद्धस्थ
 - 4. युधिष्ठिर

Question ID : 26433070092
Status : Not Answered
Chosen Option : --

Q.6 'आग में _____ डालना' उपर्युक्त मुहावरे में रिक्त स्थान की पूर्ति उचित शब्द द्वारा कीजिए।

- Ans
- 1. तेल
 - 2. घी
 - 3. मिर्च
 - 4. नमक

Question ID : 26433069689
Status : Not Answered
Chosen Option : --

Q.7 दिए गए विकल्पों में से कौन सा शब्द निम्नलिखित वाक्य में रेखांकित शब्द का पर्यायवाची नहीं है?
भारतीय जनमानस के बीच माता 'सरस्वती' संगीत कला की जननी के रूप में पूजनीय हैं।

- Ans
- 1. शारदा
 - 2. विमला
 - 3. सहचरी
 - 4. हंस वाहिनी

Question ID : 26433091339
Status : Not Answered
Chosen Option : --

Q.8 निम्न वाक्य में रेखांकित शब्द के स्थान पर सर्वोचित विकल्प चुनिए।
'वह अमीर होने पर भी संतुष्ट नहीं है।'

- Ans
- 1. दुःखी
 - 2. सुखी
 - 3. योगी
 - 4. मर्यादित

Question ID : 26433084962
Status : Not Answered
Chosen Option : --

Q.9 निम्नलिखित मुहावरे के लिए उपयुक्त सार्थक शब्द क्या होगा?
आसमान पर चढ़ना

- Ans
- 1. अभिमान होना
 - 2. डर लगना
 - 3. बहुत नाराज होना
 - 4. उड़ते रहना

Question ID : 26433065769
Status : Not Answered
Chosen Option : --

Q.10 निम्नलिखित में से 'माता' का समानार्थी शब्द नहीं है-

- Ans
- 1. वामा
 - 2. अंबा
 - 3. मैया
 - 4. जननी

Question ID : 26433085081
Status : Not Answered
Chosen Option : --

Q.11 निम्नलिखित वाक्यांश के लिए एक सार्थक शब्द चुनिए।
जो अस्त-व्यस्त हो

- Ans 1. विज्ञप्ति
 2. विपर्यस्त
 3. विकीर्ण
 4. विद्युत्प्रभ

Question ID : 26433062739
Status : Not Answered
Chosen Option : --

Q.12 निम्नलिखित विकल्पों में से किस एक वाक्य में सर्वनाम के प्रयोग सम्बन्धी अशुद्धि है?

- Ans 1. माता जी ! मुझे आपकी बहुत याद आती है।
 2. मैंने अपना काम कर लिया।
 3. पुनीत ने महेश से कहा, तुम घर चलो मैं दो घंटे बाद आऊँगा।
 4. उसके हाथ में जो कलम है, यह मेरी है।

Question ID : 26433062975
Status : Not Answered
Chosen Option : --

Q.13 'महात्मा गांधी की साधना _____ थी।'
उपरोक्त वाक्य में 'अलौकिक' शब्द के एकार्थी शब्द से वाक्य पूर्ण कीजिए।

- Ans 1. असाधारण
 2. अनुस्यूत
 3. अकथनीय
 4. असहनीय

Question ID : 26433079241
Status : Not Answered
Chosen Option : --

Q.14 'कैंसर रोग बड़ा _____ है।' इस वाक्य में रिक्त स्थान की पूर्ति शुद्ध शब्द द्वारा कीजिए।

- Ans 1. दूसाध्य
 2. दुरसाध्य
 3. दुःसाध्य
 4. दुसाधय

Question ID : 26433080906
Status : Not Answered
Chosen Option : --

Q.15 'अनु बहुत सुंदर लड़की है।'

उपरोक्त वाक्य में रेखांकित शब्द क्या है?

- Ans
- 1. विशेषण
 - 2. क्रियाविशेषण
 - 3. विशेष्य
 - 4. प्रविशेषण

Question ID : 26433063053

Status : Not Answered

Chosen Option : --

Comprehension:

निम्नलिखित गद्यांश में कुछ शब्दों को हटा दिया गया है। दिए गए विकल्पों की सहायता से रिक्त स्थानों की पूर्ति कीजिए। प्रत्येक संख्या के लिए सबसे उपयुक्त विकल्प का चयन कीजिए।
विद्या अभ्यास से 1. _____ होती है। जन्म से ही कोई व्यक्ति किसी काम में 2. _____ नहीं होता। अभ्यास के द्वारा जड़ बुद्धि वाले व्यक्ति सुजान अर्थात् 3. _____ बन जाते हैं। जो पहले से सुजान होते हैं, अभ्यास उन्हें और अधिक 4. _____ बना देता है, जिससे वे कार्य में पारंगत हो जाते हैं। अभ्यास को 5. _____ की सीमा में नहीं बाँधा जा सकता है।

SubQuestion No : 16

Q.16 रिक्त स्थान 1 की पूर्ति के लिए सबसे उपयुक्त विकल्प का चयन कीजिए।

- Ans
- 1. दूर
 - 2. समझ
 - 3. प्राप्त
 - 4. सफल

Question ID : 264330111071

Status : Not Answered

Chosen Option : --

Comprehension:

निम्नलिखित गद्यांश में कुछ शब्दों को हटा दिया गया है। दिए गए विकल्पों की सहायता से रिक्त स्थानों की पूर्ति कीजिए। प्रत्येक संख्या के लिए सबसे उपयुक्त विकल्प का चयन कीजिए।
विद्या अभ्यास से 1. _____ होती है। जन्म से ही कोई व्यक्ति किसी काम में 2. _____ नहीं होता। अभ्यास के द्वारा जड़ बुद्धि वाले व्यक्ति सुजान अर्थात् 3. _____ बन जाते हैं। जो पहले से सुजान होते हैं, अभ्यास उन्हें और अधिक 4. _____ बना देता है, जिससे वे कार्य में पारंगत हो जाते हैं। अभ्यास को 5. _____ की सीमा में नहीं बाँधा जा सकता है।

SubQuestion No : 17

Q.17 रिक्त स्थान 2 की पूर्ति के लिए सबसे उपयुक्त विकल्प का चयन कीजिए।

- Ans
- 1. पारंगत
 - 2. हार
 - 3. धैर्य
 - 4. उत्पन्न

Question ID : 264330111072

Status : Not Answered

Chosen Option : --

Comprehension:

निम्नलिखित गद्यांश में कुछ शब्दों को हटा दिया गया है। दिए गए विकल्पों की सहायता से रिक्त स्थानों की पूर्ति कीजिए। प्रत्येक संख्या के लिए सबसे उपयुक्त विकल्प का चयन कीजिए।
विद्या अभ्यास से 1. _____ होती है। जन्म से ही कोई व्यक्ति किसी काम में 2. _____ नहीं होता। अभ्यास के द्वारा जड़ बुद्धि वाले व्यक्ति सुजान अर्थात् 3. _____ बन जाते हैं। जो पहले से सुजान होते हैं, अभ्यास उन्हें और अधिक 4. _____ बना देता है, जिससे वे कार्य में पारंगत हो जाते हैं। अभ्यास को 5. _____ की सीमा में नहीं बाँधा जा सकता है।

SubQuestion No : 18

Q.18 रिक्त स्थान 3 की पूर्ति के लिए सबसे उपयुक्त विकल्प का चयन कीजिए।

- Ans
- 1. अभ्यास
 - 2. कमज़ोर
 - 3. बुद्धिमान
 - 4. बुद्धि

Question ID : 264330111073

Status : Not Answered

Chosen Option : --

Comprehension:

निम्नलिखित गद्यांश में कुछ शब्दों को हटा दिया गया है। दिए गए विकल्पों की सहायता से रिक्त स्थानों की पूर्ति कीजिए। प्रत्येक संख्या के लिए सबसे उपयुक्त विकल्प का चयन कीजिए।
विद्या अभ्यास से 1. _____ होती है। जन्म से ही कोई व्यक्ति किसी काम में 2. _____ नहीं होता। अभ्यास के द्वारा जड़ बुद्धि वाले व्यक्ति सुजान अर्थात् 3. _____ बन जाते हैं। जो पहले से सुजान होते हैं, अभ्यास उन्हें और अधिक 4. _____ बना देता है, जिससे वे कार्य में पारंगत हो जाते हैं। अभ्यास को 5. _____ की सीमा में नहीं बाँधा जा सकता है।

SubQuestion No : 19

Q.19 रिक्त स्थान 4 की पूर्ति के लिए सबसे उपयुक्त विकल्प का चयन कीजिए।

- Ans
- 1. अकुशल
 - 2. मजबूत
 - 3. कुशल
 - 4. सफलता

Question ID : 264330111074

Status : Not Answered

Chosen Option : --

Comprehension:

निम्नलिखित गद्यांश में कुछ शब्दों को हटा दिया गया है। दिए गए विकल्पों की सहायता से रिक्त स्थानों की पूर्ति कीजिए। प्रत्येक संख्या के लिए सबसे उपयुक्त विकल्प का चयन कीजिए।
विद्या अभ्यास से 1. _____ होती है। जन्म से ही कोई व्यक्ति किसी काम में 2. _____ नहीं होता। अभ्यास के द्वारा जड़ बुद्धि वाले व्यक्ति सुजान अर्थात् 3. _____ बन जाते हैं। जो पहले से सुजान होते हैं, अभ्यास उन्हें और अधिक 4. _____ बना देता है, जिससे वे कार्य में पारंगत हो जाते हैं। अभ्यास को 5. _____ की सीमा में नहीं बाँधा जा सकता है।

SubQuestion No : 20

Q.20 रिक्त स्थान 5 की पूर्ति के लिए सबसे उपयुक्त विकल्प का चयन कीजिए।

- Ans 1. मज़बूती
 2. समय
 3. मात्रा
 4. शिक्षा

Question ID : 264330111075

Status : Not Answered

Chosen Option : --

WWW.GOVtJOBSALERT.COM