

Constable GD in CAPFs SSF Rifleman GD in Assam Rifles and Sepoy in NCB Examination 2022

Roll Number	www.govtjobsalert.in
Candidate Name	www.govtjobsalert.in
Venue Name	iON Digital Zone iDZ 1 Patliputra
Exam Date	31/01/2023
Exam Time	9:00 AM - 10:00 AM
Subject	Constable GD Examination 2022

Section : **Part-A-General Intelligence and Reasoning**

Q.1 In a certain code language,
'A + B' means 'A is the mother of B',
'A - B' means 'A is the father of B',
'A x B' means 'A is the brother of B' and
'A & B' means 'A is the wife of B'.
How is N related to R if N & P - Q + T x R?

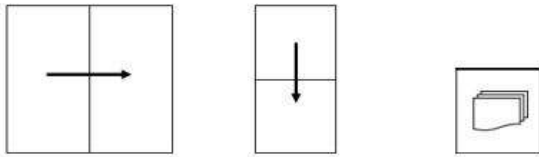
- Ans** 1. Mother's mother
 2. Mother's sister
 3. Mother
 4. Father's mother

Question ID : 26433070372

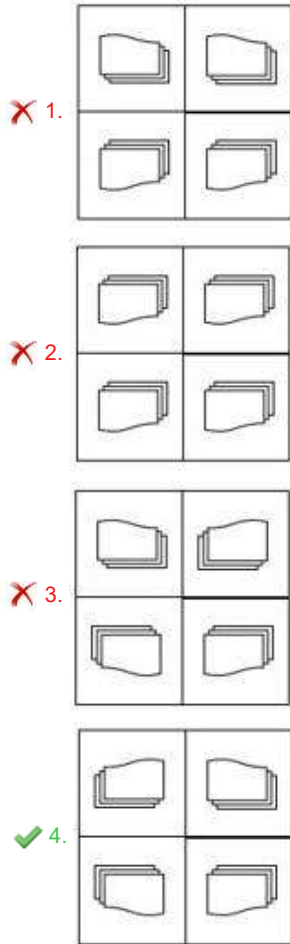
Status : **Answered**

Chosen Option : 1

Q.2 A paper is folded and cut as shown below. How will it appear when unfolded?



Ans



Question ID : 26433089788

Status : Answered

Chosen Option : 1

Q.3 Which of the following terms will replace the question mark (?) in the given series?
UNEO, TLBK, SJYG, ?, QFSY

- Ans
- ✗ 1. HCVR
 - ✗ 2. CVHR
 - ✗ 3. VRCH
 - ✓ 4. RHVC

Question ID : 26433068984

Status : Answered

Chosen Option : 4

Q.4 Select the option that is related to the third word in the same way as the second word is related to the first word.
(The words must be considered as meaningful English words and must not be related to each other based on the number of letters/number of consonants/vowels in the word)

Colour : Green :: Figure : ?

- Ans
- 1. Angle
 - 2. Diagonal
 - 3. Triangle
 - 4. Point

Question ID : 26433079475
Status : Answered
Chosen Option : 3

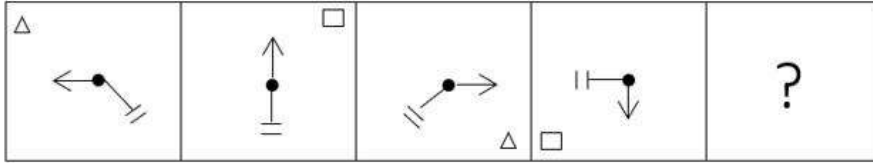
Q.5 In a certain code language, 'AROUND' is written as 'PSBFPW' and 'ARTIST' is written as 'USBVUK'. How will 'AUTHOR' be written as in that language?

- Ans
- 1. ROHTUA
 - 2. TUAROH
 - 3. UVBTQJ
 - 4. UVBROH

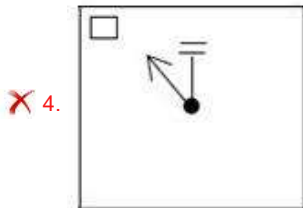
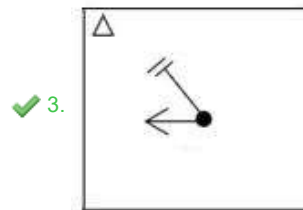
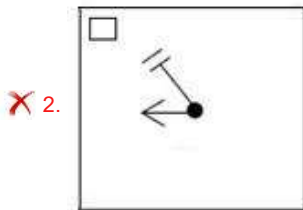
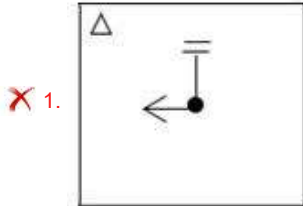
Question ID : 26433090037
Status : Answered
Chosen Option : 3

WWW.GOVtJOBsaLert.in

Q.6 Select the figure from among the given options that can replace the question mark (?) in the following series.



Ans



Question ID : 26433080751
 Status : Answered
 Chosen Option : 3

Q.7 Which of the following numbers will replace the question mark (?) in the given series?
 1, 9, 65, 457, ?

- Ans**
- ✗ 1. 4258
 - ✗ 2. 3125
 - ✓ 3. 3201
 - ✗ 4. 5289

Question ID : 26433082011
 Status : Not Answered
 Chosen Option : --

Q.8 Which two signs should be interchanged in the following equation to make it correct?
 $87 \times 24 \div 12 - 16 + 14 = 176$

Ans 1. - and +

2. \times and +

3. \div and +

4. \times and \div

Question ID : 26433090137

Status : Answered

Chosen Option : 1

Q.9 Six students Lucy, Lorraine, Simran, Dolly, Vikas and Frances are sitting around a circular table facing the centre. Lucy is sitting second to the left of Frances. Lorraine is sitting second to the left of Lucy. Vikas is sitting to the immediate right of Lorraine. Simran is sitting second to the left of Vikas. Dolly is an immediate neighbour to Lucy. Who is sitting between Frances and Lorraine?

Ans 1. Simran

2. Lucy

3. Dolly

4. Vikas

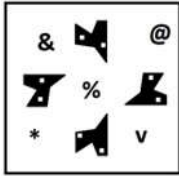
Question ID : 26433081784

Status : Answered

Chosen Option : 1


Q.10 Which of the following figures is the exact mirror image of the given problem figure when the mirror is held at the right side?

Problem figure:

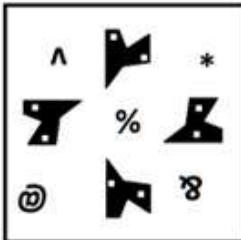


Ans

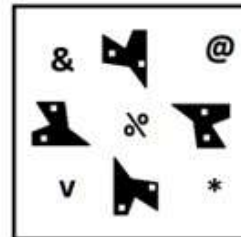
✗ 1.




✗ 2.



✗ 3.



✓ 4.



Question ID : 26433087087
Status : Answered
Chosen Option : 4

Q.11 Select the option that is related to the fifth number in the same way as the second number is related to the first number and the fourth number is related to the third number.

18 : 3 :: 55 : 4 :: 334 : ?

- Ans
- 1. 8
 - 2. 6
 - 3. 5
 - 4. 7

Question ID : 26433069423
Status : Answered
Chosen Option : 4

Q.12 In a certain code language, 'SHIP' is written as 'T17O' and 'KITE' is written as 'L29D'. How will 'HOPE' be written in that language?

- Ans
- 1. I30D
 - 2. H31E
 - 3. D31I
 - 4. I31D

Question ID : 26433069644
Status : Answered
Chosen Option : 4

Q.13 Which of the following numbers will replace the question marks (?) in the given series?

1, 3, 4, 7, ?, ?, 29

- Ans
- 1. 10, 20
 - 2. 12, 22
 - 3. 14, 24
 - 4. 11, 18

Question ID : 26433070221
Status : Answered
Chosen Option : 4

Q.14 Which option represents the correct order of the given words as they would appear in the English dictionary?

- 1 gather
- 2 garbage
- 3 gamble
- 4 garnish
- 5 gastronomy

- Ans
- 1. 3,4,1,2,5
 - 2. 3,5,2,1,3
 - 3. 3,2,4,5,1
 - 4. 3,4,2,5,1

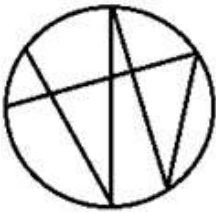
Question ID : 26433069326
Status : Answered
Chosen Option : 3

Q.15 Select the option figure in which the given figure is embedded as its part (rotation is not allowed).

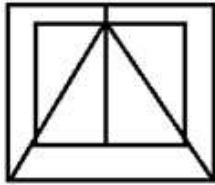


Ans


✗ 1.



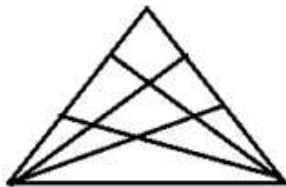
✓ 2.



✗ 3.



✗ 4.



Question ID : 26433069537
Status : Answered
Chosen Option : 2

Q.16 Which of the mathematical signs should be interchanged in the below equation to make it mathematically correct?
 $320 \times 8 - 216 + 72 \div 5 = 184$

Ans

✗ 1. + and ×

✗ 2. - and ÷

✗ 3. + and ÷

✓ 4. × and ÷

Question ID : 264330117525
Status : Answered
Chosen Option : 4

Q.17 Select the letter-cluster from among the given options that can replace the question mark (?) in the following series.
KRBP, IPHV, GNNB, ? , CJZN

- Ans 1. ELTH
 2. PDLR
 3. ETLH
 4. PRSB

Question ID : 26433074753
Status : Answered
Chosen Option : 1

Q.18 Three statements are given, followed by three conclusions numbered I, II and III. Assuming the statements to be true, even if they seem to be at variance with commonly known facts, decide which of the conclusions logically follow(s) from the statements.

Statements:
All pencils are erasers.
All pens are erasers.
All erasers are scales.

Conclusions:
I. All pens are scales.
II. All erasers are pencils.
III. Some erasers are pens.

- Ans 1. Only conclusion I and II follow
 2. Only conclusions II and III follow
 3. All conclusions follow
 4. Only conclusions I and III follow

Question ID : 26433090986
Status : Answered
Chosen Option : 4

Q.19 Select the option that is related to the third word in the same way as the second word is related to the first word. (The words must be considered as meaningful English words and must not be related to each other based on the number of letters/number of consonants/vowels in the word.)
Success : Failure :: Probably : ?

- Ans 1. Urgently
 2. Definitely
 3. Perhaps
 4. Promptly

Question ID : 26433067376
Status : Answered
Chosen Option : 2

Q.20 Six people P, Q, R, S, T, and U are sitting on a wall facing the South. Only Q is sitting between P and S. U is the immediate left of R. T is sitting to the right of S. Q is to the immediate right of P. Only U is between T and R. Who is sitting to the immediate right of S?

- Ans
- 1. U
 - 2. P
 - 3. T
 - 4. R

Question ID : 26433074627
Status : Answered
Chosen Option : 3

Section : Part-B-General Knowledge and General awareness

Q.1 Who is elected as the first woman member of Rajya Sabha in India from Nagaland in April 2022?

- Ans
- 1. Phangnon Konyak
 - 2. Miriam Rengma
 - 3. Jesmina Zeliang
 - 4. Priyanka Gandhi

Question ID : 264330114957
Status : Answered
Chosen Option : 1

Q.2 Chhath Puja is dedicated to which of the following Gods?

- Ans
- 1. Shiva
 - 2. Surya Dev
 - 3. Krishna
 - 4. Rama

Question ID : 264330105969
Status : Answered
Chosen Option : 2

Q.3 When did the first phase of Green Revolution started?

- Ans
- 1. Mid 1980s
 - 2. Mid 1970s
 - 3. Mid 1960s
 - 4. Mid 1950s

Question ID : 26433054626
Status : Answered
Chosen Option : 3

Q.4 The _____th Amendment (in the year 2020), of Indian Constitution extended the reservation of Scheduled Castes and Scheduled Tribes.

- Ans
- 1. 106
 - 2. 107
 - 3. 105
 - 4. 104

Question ID : 264330116229
Status : Answered
Chosen Option : 4

Q.5 Microfinance institution provides financial services to _____ individuals.

- Ans
- 1. illegal-income
 - 2. high-income
 - 3. low-income
 - 4. ex-army men

Question ID : 264330115312
Status : Answered
Chosen Option : 1

Q.6 Fundamental Duties were included in the Indian constitution on the recommendation of _____.

- Ans
- 1. Shah Commission
 - 2. Administrative Reform Commission
 - 3. Swaran Singh Committee
 - 4. Mandal Commission

Question ID : 264330115630
Status : Answered
Chosen Option : 4

Q.7 What is the primary motive of a private sector entity?

- Ans
- 1. Profit
 - 2. Public welfare
 - 3. Promote government policies
 - 4. Charity

Question ID : 264330116081
Status : Answered
Chosen Option : 1

Q.8 Who became the second lieutenant governor of Jammu and Kashmir?

Ans 1. Shri Manoj Sinha

2. Shri Praful Patel

3. Shri Radha Krishna Mathur

4. Shri Girish Chandra Murmu

Question ID : 264330115015

Status : Answered

Chosen Option : 2

Q.9 Which of the following is primarily NOT associated with the folk-dance forms of Punjab?

Ans 1. Luddi

2. Giddha

3. Lavani

4. Bhangra

Question ID : 26433071450

Status : Answered

Chosen Option : 1

Q.10 The waste we generate is _____.

I. Biodegradable

II. Non-biodegradable

Ans 1. Neither I nor II

2. Only I

3. Only II

4. Both I and II

Question ID : 264330115259

Status : Answered

Chosen Option : 4

Q.11 Who among the following was conferred a Doctorate by the Akhil Bharatiya Gandharva Mahavidyalaya in 1981?

Ans 1. Pandit Birju Maharaj

2. Kelucharan Mohapatra

3. M.R Krishnamurthy

4. Amala Akkineni

Question ID : 264330115883

Status : Not Answered

Chosen Option : --

Q.12 Article 157 of the Constitution of India, states which of the following qualifications to be fulfilled for a person to be appointed Governor of a state?

(i) He/She should be an Indian citizen.

(ii) He/She should have completed 35 years of age.

- Ans
- 1. Only (ii)
 - 2. Only (i)
 - 3. Neither (i) nor (ii)
 - 4. Both (i) and (ii)

Question ID : 26433089916
Status : Answered
Chosen Option : 4

Q.13 Which is the outermost layer of the earth composed of crust and upper mantle?

- Ans
- 1. Lithosphere
 - 2. Asthenosphere
 - 3. Outer Core
 - 4. Mesosphere

Question ID : 264330115995
Status : Answered
Chosen Option : 2

Q.14 Sports Authority of India was formed in which year?

- Ans
- 1. 1982
 - 2. 1983
 - 3. 1987
 - 4. 1984

Question ID : 264330116300
Status : Not Answered
Chosen Option : --

Q.15 Whose prashasti was found on the Ashokan pillar at Allahabad?

- Ans
- 1. Samudragupta
 - 2. Chandragupta II
 - 3. Chandragupta
 - 4. Samudragupta II

Question ID : 26433089191
Status : Answered
Chosen Option : 4

Q.16 Main aim of Green Revolution was to _____.

- Ans 1. increase the production of High Yielding Variety of food crops
 2. decrease the consumption of Chloro Floro Chemicals
 3. decrease the production of milk
 4. increase the total area of land

Question ID : 264330115419
Status : Answered
Chosen Option : 1

Q.17 The second round table conference was held in _____.

- Ans 1. December 1929
 2. October 1930
 3. March 1931
 4. December 1931

Question ID : 26433089891
Status : Answered
Chosen Option : 3

Q.18 Milk and face cream are examples of _____.

- Ans 1. emulsion
 2. aerosol
 3. sol
 4. foam

Question ID : 264330115176
Status : Answered
Chosen Option : 1

Q.19 Which of the following cannot be considered as a health infrastructure indicator?

- Ans 1. maternal mortality
 2. infant mortality
 3. life expectancy
 4. cost of living

Question ID : 264330115559
Status : Answered
Chosen Option : 4

Q.20 As per FIFA rules, the circumference of a football ball used in official sanctioned matches must measure between:

- Ans 1. 27 and 28 inches.
 2. 25 and 26 inches.
 3. 29 and 30 inches.
 4. 24 and 25 inches.

Question ID : 264330115943
Status : Not Answered
Chosen Option : --

Section : Part-C-Elementary Mathematics

Q.1 In a village, the population increased from 12,500 to 15,000 in a year. What is the percentage increase in population in a year?

- Ans 1. 15%
 2. 10%
 3. 25%
 4. 20%

Question ID : 26433085432
Status : Answered
Chosen Option : 4

Q.2 Of the two numbers, 28% of the first is equal to 64% of the second. What is the ratio of the first and second number?

- Ans 1. 16 : 7
 2. 7 : 16
 3. 5 : 8
 4. 8 : 5

Question ID : 26433082386
Status : Answered
Chosen Option : 1

Q.3 Three cubes each of volume 4096 cm^3 are joined end to end to form a new solid. What is the surface area of the new solid?

- Ans 1. 1536 cm^2
 2. 3584 cm^2
 3. 1792 cm^2
 4. 1280 cm^2

Question ID : 26433087418
Status : Answered
Chosen Option : 2

Q.4 A train travelling at the speed of 65 km/h leaves Bombay at 10:00 A.M. and another train travelling at the speed of 76 km/h starts at 12:00 P.M. in the same direction. At what distance (in km) from Bombay will they be together?

- Ans
- 1. 925 km
 - 2. 988 km
 - 3. 898.18 km
 - 4. 1,000 km

Question ID : 26433075505
Status : Answered
Chosen Option : 3

Q.5 Sohan invested Rs.6,250 for future and he gets Rs.15,552 after 5 years. If the interest is compounded yearly, then what is the rate of interest?

- Ans
- 1. 20%
 - 2. 15%
 - 3. 10%
 - 4. 18%

Question ID : 26433075684
Status : Not Answered
Chosen Option : --

Q.6 The mean proportional between 0.09 and 0.64 is:

- Ans
- 1. 0.24
 - 2. 0.72
 - 3. 5.76
 - 4. 2.4

Question ID : 26433087369
Status : Answered
Chosen Option : 1

Q.7 After allowing a discount of 12% on its marked price, the selling price of a mobile phone is Rs.22,352. If no discount is allowed, then the shopkeeper gains 25%. The cost price of the mobile phone is:

- Ans
- 1. Rs.20,320
 - 2. Rs.20,230
 - 3. Rs.22,320
 - 4. Rs.22,560

Question ID : 26433075188
Status : Answered
Chosen Option : 1

Q.8 A container contains 36 litres of water. From this container, 6 litres of the content were taken out and replaced by oil. This process was repeated two times. How much water is inside the container?

- Ans
- 1. 30 litres
 - 2. 28 litres
 - 3. 25 litres
 - 4. 20 litres

Question ID : 26433076068
Status : Answered
Chosen Option : 3

Q.9 A boat can travel at a speed of 15.5 km/h in still water. If speed of the stream is 4.5 km/h, then how much time will it take to go 76 km downstream and 104.5 km upstream?

- Ans
- 1. 15 hours 20 minutes
 - 2. 13 hours 18 minutes
 - 3. 12 hours 30 minutes
 - 4. 18 hours 13 minutes

Question ID : 26433063239
Status : Answered
Chosen Option : 2

Q.10 Sidhu wants to join a college and finds the rating of 9 out of 10 for campus placements and 8 out of 10 for teaching. Based on his requirement Sidhu gives 55% weightage to campus placements, and 45% weightage to teaching. The final rating of the college out of 10 is:

- Ans
- 1. 7.45
 - 2. 8.15
 - 3. 8.55
 - 4. 9.15

Question ID : 26433079910
Status : Not Answered
Chosen Option : --

Q.11 If the surface area of a sphere S_1 is 800% greater than that of sphere S_2 , and the volume of sphere S_2 is $x\%$ lower than sphere S_1 , then 'x' in terms of percentage is: (Rounded off to two places of decimals)

- Ans
- 1. 80.30%
 - 2. 3.70%
 - 3. 96.29%
 - 4. 2.68%

Question ID : 26433079918
Status : Not Answered
Chosen Option : --

Q.12 A coffee maker with a marked price of Rs.4,500 is available on successive discounts of 20%, 10% and 5%. Find the selling price of the coffee maker.

- Ans
- 1. Rs.3,072
 - 2. Rs.3,076
 - 3. Rs.3,074
 - 4. Rs.3,078

Question ID : 26433082972

Status : Answered

Chosen Option : 4

Q.13 Rakesh can do a piece of work in 45 days and Manoj can do the same work in 90 days. Find the time required to complete the same work if they work on alternate days and Rakesh starts the work.

- Ans
- 1. 66 days
 - 2. 60 days
 - 3. 50 days
 - 4. 40 days

Question ID : 264330116913

Status : Answered

Chosen Option : 2

Q.14 Applied to a bill for ₹80,000, find the difference between a discount of 15% and two successive discounts of 10% and 5%.

- Ans
- 1. ₹200
 - 2. ₹600
 - 3. No difference
 - 4. ₹400

Question ID : 26433092160

Status : Answered

Chosen Option : 4

Q.15 If the sum of two numbers is 15 and their HCF and LCM are 3 and 18, respectively, then the sum of the reciprocals of the two numbers is:

- Ans
- 1. $\frac{5}{18}$
 - 2. $\frac{2}{9}$
 - 3. $\frac{1}{9}$
 - 4. $\frac{1}{6}$

Question ID : 26433091982

Status : Answered

Chosen Option : 1

Q.16 A shopkeeper sells one-fourth of his goods at a profit of 20%, another one-fourth at a profit of 25%, and another one-fourth at a profit of 10% and the rest at a loss of 5%. His overall profit percentage is:

- Ans
- 1. 10 Percent
 - 2. 20 Percent
 - 3. 12.5 Percent
 - 4. 25 Percent

Question ID : 26433081563
Status : Answered
Chosen Option : 3

Q.17 2 years ago, the value of my car was ₹ 3,62,500. If the value depreciates by 2% every year, then now its value (in ₹) is :

- Ans
- 1. 348145
 - 2. 354425
 - 3. 342254
 - 4. 338455

Question ID : 26433076276
Status : Answered
Chosen Option : 1

Q.18 Raju can do a piece of work in 10 hours and Ram can do it in 15 hours. In how much time will they finish the whole work working together?

- Ans
- 1. 4 hours
 - 2. 5 hours
 - 3. 7 hours
 - 4. 6 hours

Question ID : 26433075795
Status : Answered
Chosen Option : 4

Q.19 The radius of a hemisphere is 14 cm. Its curved surface area (in cm^2) will be: (Use $\pi = \frac{22}{7}$)

- Ans
- 1. 1232
 - 2. 1132
 - 3. 1098
 - 4. 1188

Question ID : 26433085770
Status : Answered
Chosen Option : 1

Q.20 Three bells commence tolling together and toll at intervals of 8 sec, 10 sec and 12 sec respectively. In 30 min, how many times do they toll together?

- Ans
- 1. 14
 - 2. 17
 - 3. 16
 - 4. 18

Question ID : 26433082344
Status : Answered
Chosen Option : 1

Section : Part-D-English

Q.1 The sentence given below has one misspelt word. Spot the INCORRECTLY spelt word and select its correct spelling.

She wraped the gift in a gift paper.

- Ans
- 1. Vraped
 - 2. Vrapped
 - 3. Wrapped
 - 4. Wrraped

Question ID : 26433073562
Status : Answered
Chosen Option : 3

Q.2 Select the most appropriate option that can substitute the underlined segment in the given sentence.

When we went to the cinema, the film already started.

- Ans
- 1. had already started
 - 2. has started
 - 3. would already start
 - 4. was already start

Question ID : 26433088830
Status : Answered
Chosen Option : 1

Q.3 Parts of the following sentence have been given as options. One of them may contain an error. Select the part that contains the error from the given options. If you don't find any error, mark 'No error' as your answer.

He goes to Shimla every year but this year he was going to Goa.

- Ans
- 1. he was going to Goa
 - 2. No error
 - 3. but this year
 - 4. He goes to Shimla every year

Question ID : 26433088856
Status : Answered
Chosen Option : 2

Q.4 Select the appropriate idiom that can replace the underlined phrase in the following sentence.

He is experienced and full of wisdom as he is teaching chemistry at a university at a very young age of 25.

- Ans 1. an old head on young shoulders
 2. a frog in a small pond
 3. an alpha mom
 4. a silver fox

Question ID : 26433072282
Status : Answered
Chosen Option : 1

Q.5 Select the most appropriate synonym of the given word.

Serpentine

- Ans 1. Nascent
 2. Prosthetic
 3. Fiery
 4. Zigzag

Question ID : 26433073984
Status : Answered
Chosen Option : 1

Q.6 Select the most appropriate option that can substitute the underlined segment in the given sentence.

Between the 11 members of the team, there was great discord and this led to their dismal performance.

- Ans 1. Between the 11 member off the team
 2. Among the 11 members of the team
 3. Between the 11 members in the team
 4. Beside the 11 members of the team

Question ID : 26433091772
Status : Answered
Chosen Option : 2

Q.7 Select the most appropriate synonym of the given word.

Solitary

- Ans 1. Joyful
 2. Hardship
 3. Single
 4. Awkward

Question ID : 26433087914
Status : Answered
Chosen Option : 2

Q.8 Select the most appropriate ANTONYM of the word given in the brackets to fill in the blank and complete the sentence.

I don't want to offend him, so I'm hesitant to say or do anything _____ (polite).

- Ans
- 1. bluff
 - 2. kind
 - 3. rude
 - 4. abrupt

Question ID : 26433089838
Status : Answered
Chosen Option : 3

Q.9 Select the most appropriate meaning of the given idiom.
Fish out of water

- Ans
- 1. Be nostalgic about something
 - 2. Be a survivor
 - 3. Not feeling comfortable in a new environment
 - 4. Go fishing

Question ID : 26433070802
Status : Answered
Chosen Option : 3

Q.10 Select the most appropriate ANTONYM of the given word.

Misfortune

- Ans
- 1. Condemn
 - 2. Blessing
 - 3. Affliction
 - 4. Support

Question ID : 26433090793
Status : Answered
Chosen Option : 2

Q.11 Select the correctly spelt word.

- Ans
- 1. Messenjer
 - 2. Messenger
 - 3. Masenger
 - 4. Massanger

Question ID : 26433094749
Status : Answered
Chosen Option : 4

Q.12 Select the most appropriate ANTONYM of the given word.

Compact

- Ans 1. Short
 2. Expand
 3. Multiple
 4. Compress

Question ID : 26433090782
Status : Answered
Chosen Option : 2

Q.13 Select the most appropriate synonym of the underlined word in the given sentence.

Her progress is unparalleled with that of any other teacher.

- Ans 1. plight
 2. scenario
 3. dilemma
 4. betterment

Question ID : 26433092106
Status : Answered
Chosen Option : 4

Q.14 Select the most appropriate synonym of the given word to fill in the blank in the sentence.

Compulsion

Some people have a disorder from which comes the _____ to check doors and ensure that they are properly locked.

- Ans 1. agreement
 2. obligation
 3. passion
 4. exertion

Question ID : 26433060552
Status : Answered
Chosen Option : 4

Q.15 Select the most appropriate option that can substitute the underlined segment in the given sentence. If there is no need to substitute it, select 'No substitution'.

Because I had to catch the train, and as we were short on time, I forget to pack my toothbrush for our vacation.

- Ans 1. I have forget to pack my toothbrush for our vacation
 2. I forgot to pack my toothbrush for our vacation
 3. No substitution
 4. I have forgot to pack my toothbrush for our vacation

Question ID : 264330101022
Status : Answered
Chosen Option : 2

Comprehension:

In the following passage, some words have been deleted. Read the passage carefully and select the most appropriate option to fill in each blank.

My breath is halted, like gasping for air (1) _____ crying far too long and hard. It is like a hiccup, with a shivering sharpness (2) _____ nerves. It is like icicles running (3) _____ your spine or aluminum in your mouth, an eerie amount of emotions that cannot compare (4) _____ the actual feelings you've managed to live (5) _____. I just watched you die; I say to myself silently.

SubQuestion No : 16

Q.16 Select the most appropriate option to fill in blank number 1.

Ans 1. under

2. about

3. after

4. in

Question ID : 26433091381

Status : Answered

Chosen Option : 3

Comprehension:

In the following passage, some words have been deleted. Read the passage carefully and select the most appropriate option to fill in each blank.

My breath is halted, like gasping for air (1) _____ crying far too long and hard. It is like a hiccup, with a shivering sharpness (2) _____ nerves. It is like icicles running (3) _____ your spine or aluminum in your mouth, an eerie amount of emotions that cannot compare (4) _____ the actual feelings you've managed to live (5) _____. I just watched you die; I say to myself silently.

SubQuestion No : 17

Q.17 Select the most appropriate option to fill in blank number 2.

Ans 1. from

2. between

3. around

4. of

Question ID : 26433091382

Status : Answered

Chosen Option : 2

Comprehension:

In the following passage, some words have been deleted. Read the passage carefully and select the most appropriate option to fill in each blank.

My breath is halted, like gasping for air (1) _____ crying far too long and hard. It is like a hiccup, with a shivering sharpness (2) _____ nerves. It is like icicles running (3) _____ your spine or aluminum in your mouth, an eerie amount of emotions that cannot compare (4) _____ the actual feelings you've managed to live (5) _____. I just watched you die; I say to myself silently.

SubQuestion No : 18

Q.18 Select the most appropriate option to fill in blank number 3.

- Ans 1. besides
 2. down
 3. among
 4. thorough

Question ID : 26433091383
Status : Answered
Chosen Option : 4

Comprehension:

In the following passage, some words have been deleted. Read the passage carefully and select the most appropriate option to fill in each blank.

My breath is halted, like gasping for air (1) _____ crying far too long and hard. It is like a hiccup, with a shivering sharpness (2) _____ nerves. It is like icicles running (3) _____ your spine or aluminum in your mouth, an eerie amount of emotions that cannot compare (4) _____ the actual feelings you've managed to live (5) _____. I just watched you die; I say to myself silently.

SubQuestion No : 19

Q.19 Select the most appropriate option to fill in blank number 4.

- Ans 1. away
 2. to
 3. inside
 4. across

Question ID : 26433091384
Status : Answered
Chosen Option : 2

Comprehension:

In the following passage, some words have been deleted. Read the passage carefully and select the most appropriate option to fill in each blank.

My breath is halted, like gasping for air (1) _____ crying far too long and hard. It is like a hiccup, with a shivering sharpness (2) _____ nerves. It is like icicles running (3) _____ your spine or aluminum in your mouth, an eerie amount of emotions that cannot compare (4) _____ the actual feelings you've managed to live (5) _____. I just watched you die; I say to myself silently.

SubQuestion No : 20

Q.20 Select the most appropriate option to fill in blank number 5.

- Ans 1. within
 2. through
 3. out
 4. instead

Question ID : 26433091385
Status : Answered
Chosen Option : 1

Section : Part-D-Hindi

Q.1 निम्नलिखित वाक्य में रेखांकित शब्द के स्थान पर उपयुक्त पर्यायवाची शब्द कौन-सा होगा?

ईश्वर मानव का सृजन करके वंदनीय हो गया।

- Ans 1. निर्माण
 2. जन्म
 3. पैदावार
 4. उत्पत्ति

Question ID : 26433066902
Status : Not Answered
Chosen Option : --

Q.2 रेखांकित अंश के स्थान पर सबसे उपयुक्त विकल्प इनमें से कौन-सा है?

गतवर्ष वह दिल्ली जाने वाला है।

- Ans 1. उस वर्ष
 2. पिछले वर्ष
 3. विगत वर्ष
 4. अगले वर्ष

Question ID : 26433066875
Status : Not Answered
Chosen Option : --

Q.3 दिए गए मुहावरे में रेखांकित अंश के स्थान पर सबसे उपयुक्त विकल्प कौन-सा होगा?
'छठी का मिठाई याद आना।'

- Ans
- 1. दूध
 - 2. चीनी
 - 3. नमक
 - 4. पकवान

Question ID : 26433066743
Status : Not Answered
Chosen Option : --

Q.4 जिसका तेज निकल गया है।

दिए गए वाक्यांश के लिए एक शब्द होगा-

- Ans
- 1. तेजोमय
 - 2. तेजस्वी
 - 3. तेजोदीप्त
 - 4. निस्तेज

Question ID : 26433070056
Status : Not Answered
Chosen Option : --

Q.5 दिए गए वाक्य में रेखांकित अंश के स्थान पर सबसे उपयुक्त विकल्प कौन-सा होगा?

गोली लगते ही उनका प्राण उड़ गया।

- Ans
- 1. उनकी प्राण उड़ गई।
 - 2. उनके प्राण उड़ गए।
 - 3. उनको प्राण उड़ गया।
 - 4. उनके प्राण उड़ गई।

Question ID : 26433079187
Status : Not Answered
Chosen Option : --

Q.6 निम्नलिखित विकल्पों में से 'जो आदर करने योग्य हो' वाक्यांश के लिए एक सार्थक शब्द क्या होगा ?

- Ans
- 1. आशावान
 - 2. आदरणीय
 - 3. शक्तिमान
 - 4. ताकतवर

Question ID : 26433062467
Status : Not Answered
Chosen Option : --

Q.7 माता- पिता पर आदर करना चाहिए। इस वाक्य में अशुद्ध शब्द है-

- Ans
- 1. चाहिए
 - 2. माता- पिता
 - 3. आदर
 - 4. पर

Question ID : 26433091303
Status : Not Answered
Chosen Option : --

Q.8 सामने शेर को आते देखकर शिखर के _____ खड़े हो गये।
रिक्त स्थान की पूर्ति उचित मुहावरे द्वारा कीजिए।

- Ans
- 1. पैर
 - 2. रोंगटे
 - 3. बाल
 - 4. मित्र

Question ID : 26433062613
Status : Not Answered
Chosen Option : --

Q.9 निम्नलिखित में से शुद्ध वाक्य है-

- Ans
- 1. बुरी खबर कान- कान फैल जाती है।
 - 2. बुरी खबर कानू- कानू फैल जाती है।
 - 3. बुरी खबर कानों- कान फैल जाती है।
 - 4. बुरी खबर कानो- हाथ फैल जाती है।

Question ID : 26433066847
Status : Not Answered
Chosen Option : --

Q.10 वाक्य में रेखांकित शब्द के स्थान पर पर्यायवाची शब्द को लिखकर वाक्य को पूरा कीजिए।

पति-पत्नी के झगड़े का हेतु क्या हो सकता है?

- Ans
- 1. औचित्य
 - 2. महत्त्व
 - 3. विषय
 - 4. कारण

Question ID : 26433065697
Status : Not Answered
Chosen Option : --

Q.11 विकल्पों में से उचित अवधिवाचक क्रिया विशेषण चयन कीजिए।

- Ans 1. वह, कोई
 2. नित्य, लगातार
 3. हर रोज, हर बार
 4. इधर, उधर

Question ID : 26433063049
Status : Not Answered
Chosen Option : --

Q.12 सज्जन का सत्कार होता है और दुर्जन का _____।

सत्कार के विलोम शब्द से वाक्य पूर्ण करें।

- Ans 1. तिरस्कार
 2. स्वागत
 3. अपमान
 4. परिष्कार

Question ID : 26433080876
Status : Not Answered
Chosen Option : --

Q.13 भाववाचक संज्ञा शब्द से प्रयुक्त गलत वाक्य को पढ़कर विकल्पों में से शुद्ध वाक्य छाँटिए।

उनकी जवान चला गया पर अहंकार गया नहीं।

- Ans 1. उनके जवान चले गए पर अहंकार गया नहीं।
 2. उनकी जवानी चली गयी पर अहंकार गया नहीं।
 3. उनका जवानी चली गयी पर अहंकार गया नहीं।
 4. उनके जवानी चला गया पर अहंकार गया नहीं।

Question ID : 26433063031
Status : Not Answered
Chosen Option : --

Q.14 भारतीय सभ्यता में अलंकार का विशेष महत्त्व है।

निम्न में से कौन-सा शब्द, वाक्य में प्रयुक्त 'अलंकार' शब्द का पर्यायवाची शब्द नहीं है?

- Ans 1. सज्जा
 2. आभूषण
 3. छंद
 4. सजावट

Question ID : 26433080860
Status : Not Answered
Chosen Option : --

Q.15 'मूर्ख' के समानार्थी शब्द से वाक्य पूर्ण कीजिए।

_____ व्यक्ति में समझने की शक्ति का नितांत अभाव है।

- Ans 1. अनजान
 2. मूढ़
 3. अनभिज्ञ
 4. अचर

Question ID : 26433063097

Status : Not Answered

Chosen Option : --

Comprehension:

निम्नलिखित गद्यांश में से कुछ शब्द हटा दिए गए हैं। दिए गए विकल्पों की सहायता से रिक्त स्थानों की पूर्ति कीजिए। प्रत्येक संख्या के लिए उपयुक्त विकल्प का चयन कीजिए।

राजप्पा ने नागराजन के 1. _____ को देखने की 2. _____ कभी नहीं प्रकट की। लेकिन जब 3. _____ लड़के उसे देख रहे होते तो वह नीची 4. _____ से देख लेता। सचमुच नागराजन का अलबम 5. _____ प्यारा था।

SubQuestion No : 16

Q.16 रिक्त स्थान 1 की पूर्ति के लिए सर्वाधिक उपयुक्त विकल्प का चयन कीजिए।

- Ans 1. अलबम
 2. श्रेय
 3. किताब
 4. कार

Question ID : 26433079603

Status : Not Answered

Chosen Option : --

Comprehension:

निम्नलिखित गद्यांश में से कुछ शब्द हटा दिए गए हैं। दिए गए विकल्पों की सहायता से रिक्त स्थानों की पूर्ति कीजिए। प्रत्येक संख्या के लिए उपयुक्त विकल्प का चयन कीजिए।

राजप्पा ने नागराजन के 1. _____ को देखने की 2. _____ कभी नहीं प्रकट की। लेकिन जब 3. _____ लड़के उसे देख रहे होते तो वह नीची 4. _____ से देख लेता। सचमुच नागराजन का अलबम 5. _____ प्यारा था।

SubQuestion No : 17

Q.17 रिक्त स्थान 2 की पूर्ति के लिए सर्वाधिक उपयुक्त विकल्प का चयन कीजिए।

- Ans 1. हुड़क
 2. इच्छा
 3. लत
 4. प्रसन्नता

Question ID : 26433079604

Status : Not Answered

Chosen Option : --

Comprehension:

निम्नलिखित गद्यांश में से कुछ शब्द हटा दिए गए हैं। दिए गए विकल्पों की सहायता से रिक्त स्थानों की पूर्ति कीजिए। प्रत्येक संख्या के लिए उपयुक्त विकल्प का चयन कीजिए।

राजप्पा ने नागराजन के 1. _____ को देखने की 2. _____ कभी नहीं प्रकट की। लेकिन जब 3. _____ लड़के उसे देख रहे होते तो वह नीची 4. _____ से देख लेता। सचमुच नागराजन का अलबम 5. _____ प्यारा था।

SubQuestion No : 18

Q.18 रिक्त स्थान 3 की पूर्ति के लिए सर्वाधिक उपयुक्त विकल्प का चयन कीजिए।

- Ans
- 1. पहले
 - 2. दूसरे
 - 3. तीसरे
 - 4. चौथे

Question ID : 26433079605

Status : Not Answered

Chosen Option : --

Comprehension:

निम्नलिखित गद्यांश में से कुछ शब्द हटा दिए गए हैं। दिए गए विकल्पों की सहायता से रिक्त स्थानों की पूर्ति कीजिए। प्रत्येक संख्या के लिए उपयुक्त विकल्प का चयन कीजिए।

राजप्पा ने नागराजन के 1. _____ को देखने की 2. _____ कभी नहीं प्रकट की। लेकिन जब 3. _____ लड़के उसे देख रहे होते तो वह नीची 4. _____ से देख लेता। सचमुच नागराजन का अलबम 5. _____ प्यारा था।

SubQuestion No : 19

Q.19 रिक्त स्थान 4 की पूर्ति के लिए सर्वाधिक उपयुक्त विकल्प का चयन कीजिए।

- Ans
- 1. आँखों
 - 2. हथेली
 - 3. आवाज
 - 4. पाँव

Question ID : 26433079606

Status : Not Answered

Chosen Option : --

Comprehension:

निम्नलिखित गद्यांश में से कुछ शब्द हटा दिए गए हैं। दिए गए विकल्पों की सहायता से रिक्त स्थानों की पूर्ति कीजिए। प्रत्येक संख्या के लिए उपयुक्त विकल्प का चयन कीजिए।

राजप्पा ने नागराजन के 1. _____ को देखने की 2. _____ कभी नहीं प्रकट की। लेकिन जब 3. _____ लड़के उसे देख रहे होते तो वह नीची 4. _____ से देख लेता। सचमुच नागराजन का अलबम 5. _____ प्यारा था।

SubQuestion No : 20

Q.20 रिक्त स्थान 5 की पूर्ति के लिए सर्वाधिक उपयुक्त विकल्प का चयन कीजिए।

- Ans**
- 1. ठीक
 - 2. साधारण
 - 3. हलका
 - 4. बेहद

Question ID : 26433079607

Status : Not Answered

Chosen Option : --

WWW.GOV TJOB SALTER. IN