

Constable GD in CAPFs SSF Rifleman GD in Assam Rifles and Sepoy in NCB Examination 2022

Roll Number	www.govtjobsalert.in
Candidate Name	www.govtjobsalert.in
Venue Name	iON Digital Zone iDZ 1 Sector 62
Exam Date	07/02/2023
Exam Time	2:30 PM - 3:30 PM
Subject	Constable GD Examination 2022

Section : Part-A-General Intelligence and Reasoning

Q.1 Select the number from among the given options that can replace the question mark (?) in the following series.
73, 74, 66, 93, 29, ?

- Ans 1. 154
 2. 146
 3. 145
 4. 164

Question ID : 26433078924
Status : Answered
Chosen Option : 1

Q.2 Which letter-cluster will replace the question mark (?) to complete the given series?
CMUZ, FOVB, ?, LSXF, OUYH

- Ans 1. JQWD
 2. IQXD
 3. JQXD
 4. IQWD

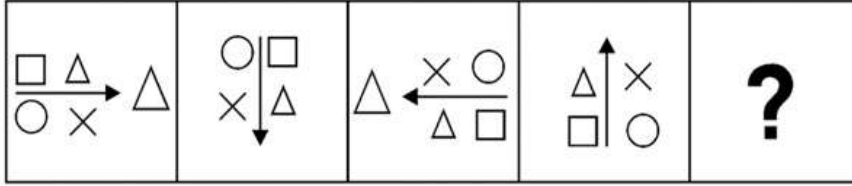
Question ID : 26433067949
Status : Answered
Chosen Option : 4

Q.3 In a code language, 'sweet fruits' is coded as 're de', 'mango is sweet' is coded as 'de me ke', 'orange is citrus' is coded as 'ke le pe', 'eat orange' is coded as 'pe ne'. What is the code for the word 'eat'?

- Ans 1. ne
 2. pe
 3. re
 4. de

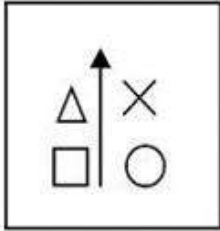
Question ID : 26433082267
Status : Answered
Chosen Option : 1

Q.4 Select the figure from among the given options that can replace the question mark (?) in the following series.

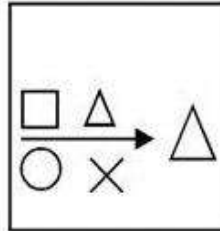


Ans

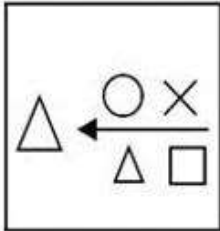
✗ 1.



✓ 2.



✗ 3.



✗ 4.



Question ID : 26433080483

Status : Answered

Chosen Option : 2

Q.5 Select the correct mirror image of the given figure when the mirror is placed at MN as shown below.



Ans

- 1. x † S m n 0 0 j k
- 2. x † S n w 0 j k
- 3. x † S n w 0 0 j k
- 4. x † S n w 0 j k

Question ID : 26433082335

Status : Answered

Chosen Option : 4

Q.6 Which of the mathematical signs should be interchanged in the below equation to make it mathematically correct?
 $135 \div 15 \times 27 + 3 - 18 = 252$

- Ans
- 1. + and ×
 - 2. + and ×
 - 3. ÷ and +
 - 4. + and -

Question ID : 264330117491

Status : Answered

Chosen Option : 3

Q.7 In a certain code language, 'MOVE' is written as 'NQWG' and 'RUST' is written as 'SWTV'. How will 'TASK' be written in that language?

- Ans
- 1. CUMU
 - 2. CUUM
 - 3. UCTM
 - 4. UCMU

Question ID : 26433068894

Status : Answered

Chosen Option : 3

Q.8 Three Statements are given followed by Three conclusions numbered I, II and III. Assuming the statements to be true, even if they seem to be at variance with commonly known facts, decide which of the conclusions logically follow(s) from the statements.

Statements:

All apples are cake.

All cakes are bananas.

Some bananas are fruit.

Conclusions:

I. Some apples are cake.

II. Some bananas are apples.

III. Some fruits are bananas.

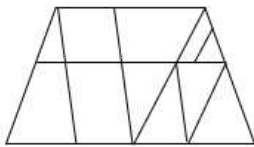
- Ans**
- 1. Both conclusions I and II follow.
 - 2. Both conclusions II and III follow.
 - 3. Both conclusions I and III follow.
 - 4. All conclusions follow.

Question ID : 26433081796

Status : Answered

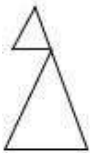
Chosen Option : 4

Q.9 Select the option figure which is embedded in the given figure. (Rotation is NOT allowed)

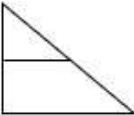


Ans

1.



2.



3.



4.



Question ID : 26433069333

Status : Answered

Chosen Option : 1

Q.10 Which letter-cluster will replace the question mark (?) to complete the given series?
LQOA, ?, LUOE, LWOG, LYOI

- Ans
- 1. LRMC
 - 2. CTPL
 - 3. LSOC
 - 4. CRML

Question ID : 26433068038
Status : Answered
Chosen Option : 3

Q.11 'Strength' is related to 'Weakness' in the same way as 'Courage' is related to
'_____'.
(The words must be considered as meaningful English words and must not be related
to each other based on the number of letters/number of consonants/vowels in the
word)

- Ans
- 1. Power
 - 2. Fight
 - 3. Bravery
 - 4. Cowardice

Question ID : 26433057749
Status : Answered
Chosen Option : 4

Q.12 'A + B' means 'B is the paternal grandfather of A'
'A @ B' means 'B is the brother of A'
'A % B' means 'B is the daughter of A'
'A \$ B' means 'B is the husband of A'
If A \$ B % C @ D + E, then how is E related to A?

- Ans
- 1. Father
 - 2. Son
 - 3. Brother
 - 4. Father in law

Question ID : 26433068531
Status : Answered
Chosen Option : 4

Q.13 Select the option that is related to the third word in the same way as the second word
is related to the first word. (The words must be considered as meaningful English
words and must not be related to each other based on the number of letters/number of
consonants/vowels in the word.)
Horse : Stable :: Birds : ?

- Ans
- 1. Hive
 - 2. Nest
 - 3. Sky
 - 4. Fly

Question ID : 26433069580
Status : Answered
Chosen Option : 2

Q.14 Seven people I, II, III, IV, V, VI, and VII are sitting around a circular table facing the centre. I and III are not sitting next to each other. VII is sitting between VI and IV. IV is sitting to the immediate left of I. Only II is sitting between V and III. Who is sitting between I and VII?

- Ans
- 1. II
 - 2. VI
 - 3. IV
 - 4. III

Question ID : 264330114208
Status : Answered
Chosen Option : 3

Q.15 Select the option that is related to the third number in the same way as the second number is related to the first number and the sixth number is related to the fifth number.

64 : 16 :: 169 : ? :: 256 : 32

- Ans
- 1. 24
 - 2. 30
 - 3. 28
 - 4. 26

Question ID : 26433067896
Status : Answered
Chosen Option : 4

Q.16 If A denotes \div , B denotes \times , C denotes $+$ and D denotes $-$, then what will be the value of the following equation?
24 B 12 A 8 C 10 D 6 =?

- Ans
- 1. 40
 - 2. 60
 - 3. 36
 - 4. 48

Question ID : 26433085654
Status : Answered
Chosen Option : 1

Q.17 Which option represents the correct order of the given words as they would appear in the English dictionary?

1. lantern
2. lavish
3. lament
4. latitude
5. lately

- Ans
- 1. 3,5,1,4,2
 - 2. 3,1,5,4,2
 - 3. 3,1,4,2,5
 - 4. 3,5,4,1,2

Question ID : 26433069308
Status : Answered
Chosen Option : 2

Q.18 A teacher makes 10 kindergarten children sit in two parallel rows, such that five children are sitting in each row facing each other. Anu, Bobby, Lilly, Tom and Sudha sitting in Row 1 face north, while children Priya, Rama, Uma, Kala and Guna in Row 2 face the south direction. Lilly is facing the immediate neighbour of Guna. Tom sits third to the left of Sudha. Anu does not sit at the corners. Neither Priya nor Rama sits at the corner. Guna sits in the middle of the line. Only one child sits between Lilly and Tom. Kala sits at one of the corners but not facing Sudha. Priya sits to the right of Rama but not immediate. Which child is facing Tom?

- Ans
- 1. Kala
 - 2. Uma
 - 3. Guna
 - 4. Priya

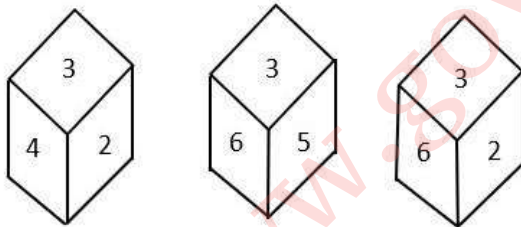
Question ID : 26433079067
 Status : Answered
 Chosen Option : 4

Q.19 Which number will replace the question mark (?) in the following series?
 57, 50, 64, ?, 71, 36

- Ans
- 1. 50
 - 2. 43
 - 3. 62
 - 4. 40

Question ID : 26433067841
 Status : Answered
 Chosen Option : 2

Q.20 Three different positions of the same dice are shown. Find the number on the face opposite the face showing '3'.



- Ans
- 1. 2
 - 2. 4
 - 3. 5
 - 4. 1

Question ID : 26433090078
 Status : Answered
 Chosen Option : 4

Q.1 Which of the following is a paddy crop?

- Ans 1. rice
 2. cotton
 3. cucumber
 4. jute

Question ID : 264330115525
Status : Answered
Chosen Option : 1

Q.2 A budget document that relates to the assets and liabilities in the capital account of the government, is referred as:

- Ans 1. zero budget
 2. capital budget
 3. revenue budget
 4. long term budget

Question ID : 264330115278
Status : Answered
Chosen Option : 2

Q.3 As of November 2022, who is the President of Bharatiya Janata Party, a political party in India?

- Ans 1. Amit Shah
 2. Narendra Modi
 3. Jagat Prakash Nadda
 4. Swatantra Dev Singh

Question ID : 264330114939
Status : Answered
Chosen Option : 3

Q.4 From the following, which one is NOT the principle of Parliamentary Government of India?

- Ans 1. Dissolution of the lower house
 2. Clear division of power among Legislature, Executive and Judiciary
 3. Majority party rule
 4. Collective responsibility

Question ID : 26433090675
Status : Answered
Chosen Option : 1

Q.5 The inscriptions of the Pallavas mention a number of local assemblies. These included the _____, which was an assembly of brahmin land owners.

- Ans**
- 1. naukayan
 - 2. sabha
 - 3. parishad
 - 4. bhraman

Question ID : 264330115457
Status : Answered
Chosen Option : 4

Q.6 The bedrock of India's democracy is the rule of law and that means we have to have _____.

- Ans**
- 1. freedom of speech
 - 2. a written constitution
 - 3. an independent judiciary
 - 4. sovereignty of the Parliament

Question ID : 264330115613
Status : Answered
Chosen Option : 3

Q.7 Which mountain range prevents the cold Siberian winds from entering India?

- Ans**
- 1. Himalayas
 - 2. Satpura Range
 - 3. Aravali Hills
 - 4. Western Ghats

Question ID : 264330115980
Status : Answered
Chosen Option : 1

Q.8 Who has replaced Ajit Mohan as the new Indian head of Meta in November 2022?

- Ans**
- 1. Sandhya Devanathan
 - 2. Ankhi Das
 - 3. Abhijit Bose
 - 4. Rajiv Aggarwal

Question ID : 264330114981
Status : Answered
Chosen Option : 4

Q.9 Which among the following classical dance forms was originally known as Sadir Attam?

- Ans**
- 1. Sattriya
 - 2. Bharatanatyam
 - 3. Manipuri
 - 4. Kuchipudi

Question ID : 264330115064
Status : Answered
Chosen Option : 1

Q.10 Economists have found that a poor nation can only progress only if they have good

- Ans**
- 1. Industrial Sector
 - 2. Agricultural sector
 - 3. Service Sector
 - 4. Private Sector

Question ID : 264330116143
Status : Answered
Chosen Option : 2

Q.11 Who among the following was awarded the TTK Memorial Award by Madras Music Academy?

- Ans**
- 1. Mahaboob Subhani
 - 2. Uday Shankar
 - 3. Pandit Birju Maharaj
 - 4. Vempati Chinna Satyam

Question ID : 264330115848
Status : Not Answered
Chosen Option : --

Q.12 SAMADHAN portal allows online registration with the intent to make justice for workmen simple and quick. Industrial dispute is raised before _____ of the area.

- Ans**
- 1. Block Development Officer
 - 2. Custom Officer
 - 3. Conciliation Officer
 - 4. Circle Inspector

Question ID : 264330116194
Status : Not Answered
Chosen Option : --

Q.13 Which of these is a micronutrient?

- Ans 1. iron
 2. carbohydrates
 3. fibre
 4. water

Question ID : 264330115231
Status : Answered
Chosen Option : 3

Q.14 What was the female literacy rate of India as per the Census 2011?

- Ans 1. 67.78%
 2. 65.46%
 3. 69.89%
 4. 63.52%

Question ID : 264330116057
Status : Answered
Chosen Option : 2

Q.15 What are the products formed when lead reacts with copper chloride?

- Ans 1. Copper oxide and lead chloride
 2. Lead oxide and copper hydroxide
 3. Lead oxide and copper
 4. Lead chloride and copper

Question ID : 26433087844
Status : Answered
Chosen Option : 2

Q.16 The people of Kashmir dedicates the Navreh festival to Goddess _____ and pay homage to her during the festival.

- Ans 1. Sita
 2. Parvati
 3. Sharika
 4. Lakshmi

Question ID : 264330115115
Status : Not Answered
Chosen Option : --

Q.17 Mirabai Chanu belongs to which of the following state of India?

- Ans 1. Tripura
 2. Manipur
 3. Nagaland
 4. Assam

Question ID : 264330116262
Status : Answered
Chosen Option : 2

Q.18 With which country did India had a war in the region of the McMahon line in 1962?

- Ans 1. China
 2. Bhutan
 3. Pakistan
 4. Nepal

Question ID : 264330115687
Status : Answered
Chosen Option : 1

Q.19 Who hosted the 2011 cricket world cup?

- Ans 1. India
 2. India, Sri Lanka, Bangladesh
 3. Australia
 4. Sri Lanka, Bangladesh only

Question ID : 264330115955
Status : Answered
Chosen Option : 1

Q.20 Aluminium smelting is the _____ most important metallurgical industry in India.

- Ans 1. fourth
 2. third
 3. second
 4. first

Question ID : 264330115403
Status : Answered
Chosen Option : 3

Section : Part-C-Elementary Mathematics

Q.1 Find the third proportional to 24 and 12.

- Ans 1. 9
 2. 7
 3. 6
 4. 5

Question ID : 26433080031
Status : Answered
Chosen Option : 3

Q.2 If p and q are two single digit natural numbers of a number 728pq such that it is divisible by 80, then p×q is equal to:

- Ans
- 1. 5
 - 2. 10
 - 3. 0
 - 4. 15

Question ID : 26433080239
Status : Answered
Chosen Option : 3

Q.3 The two numbers are in the ratio 2:3. If eight is added to each of the numbers, then their ratio changed to 8:11. What are the two numbers?

- Ans
- 1. 12 and 18
 - 2. 36 and 54
 - 3. 24 and 36
 - 4. 18 and 27

Question ID : 26433075667
Status : Answered
Chosen Option : 3

Q.4 If the total surface area of a solid right circular cylinder is 1100 cm^2 and its radius is 7 cm, then find its curved surface area. (Use $\pi = \frac{22}{7}$)

- Ans
- 1. 792 cm^2
 - 2. 562 cm^2
 - 3. 930 cm^2
 - 4. 840 cm^2

Question ID : 26433080073
Status : Answered
Chosen Option : 1

Q.5 The height and the radius of a cone are 21 cm and $7\sqrt{7}$ cm, respectively. Find the volume of the cone (take $\pi = \frac{22}{7}$).

- Ans
- 1. $6,982 \text{ cm}^3$
 - 2. $7,546 \text{ cm}^3$
 - 3. $7,634 \text{ cm}^3$
 - 4. $6,724 \text{ cm}^3$

Question ID : 26433076115
Status : Answered
Chosen Option : 2

Q.6 Akash can do a piece of work in 74 days. Vishal can do this work in 37 days. Akash started the work alone. After how many days should Vishal join him, so that the total work is finished in 40 days?

- Ans
- 1. 19 days
 - 2. 25 days
 - 3. 16 days
 - 4. 23 days

Question ID : 264330116878
Status : Answered
Chosen Option : 4

Q.7 Rani goes to school from home at a speed of 30 km/h and returns to home at the speed of 20 km/h. If the distance between her home and school is 8 km, then what is the average speed of the whole journey?

- Ans
- 1. 22 km/h
 - 2. 28 km/h
 - 3. 26 km/h
 - 4. 24 km/h

Question ID : 26433075643
Status : Answered
Chosen Option : 4

Q.8 Samir purchased 20 dozens of toys at the rate of Rs.372 per dozen. He sold each one of them at the rate of Rs.32. What was his percentage profit?

- Ans
- 1. 4.2%
 - 2. 2.2%
 - 3. 3.6%
 - 4. 3.2%

Question ID : 26433075232
Status : Answered
Chosen Option : 4

Q.9 A company employed 200 workers to complete a certain work in 150 days. In 50 days, only one-fourth of the work was completed. In order to complete the entire work in time, how many additional workers need to be employed?

- Ans
- 1. 150
 - 2. 100
 - 3. 50
 - 4. 75

Question ID : 26433075988
Status : Answered
Chosen Option : 2

Q.10 The population of a town increased by 10% in the first year and decreased by 10% in the second year. If the population at the end of the second year is 990000, then find the population at the beginning of the first year.

- Ans
- 1. 12,00,000
 - 2. 10,00,000
 - 3. 13,00,000
 - 4. 15,00,000

Question ID : 26433082723
Status : Answered
Chosen Option : 2

Q.11 On a winter's day, the average temperature during the day time is 34°C. At night the temperature falls to 8°C. What is the percent decrease?

- Ans
- 1. 26 percent
 - 2. 76.47 percent
 - 3. 84.68 percent
 - 4. 42 percent

Question ID : 264330116798
Status : Answered
Chosen Option : 2

Q.12 A person travels in a car for 450 km at an average speed of 30 km/h, then 360 km at 40 km/h and finally reaches to the destination by travelling 150 km at a speed of 50 km/h. Determine the average speed during the whole journey.

- Ans
- 1. $\frac{320}{9}$ km/h
 - 2. $\frac{370}{9}$ km/h
 - 3. $\frac{340}{9}$ km/h
 - 4. $\frac{310}{9}$ km/h

Question ID : 26433074302
Status : Answered
Chosen Option : 1

Q.13 Find the discount, if the marked price of book is Rs.5000 and sold it for Rs. 4000.

- Ans
- 1. Rs. 1100
 - 2. Rs. 1500
 - 3. Rs. 1200
 - 4. Rs. 1000

Question ID : 264330116717
Status : Answered
Chosen Option : 4

Q.14 If the difference between the compound and simple interest on a certain sum of money for three years at 8% per annum is Rs.61.60, then find the sum.

- Ans
- 1. Rs.2,125
 - 2. Rs.5,050
 - 3. Rs.4,050
 - 4. Rs.3,125

Question ID : 26433064993
Status : Answered
Chosen Option : 4

Q.15 Find the average of the square of the following numbers:
5, 8, 9, 12, 15 and 16.

- Ans
- 1. 130.50
 - 2. 132.50
 - 3. 131.75
 - 4. 131.25

Question ID : 264330116685
Status : Answered
Chosen Option : 2

Q.16 What will be the sum of HCF and LCM of 12 and 16?

- Ans
- 1. 56
 - 2. 44
 - 3. 52
 - 4. 48

Question ID : 264330116656
Status : Answered
Chosen Option : 3

Q.17 There was a discount of 10 percent on sling bags. Mayuri bought a sling bag and got a 5 percent extra discount for paying cash. She paid Rs. 2565. What was the price tag on the sling bag?

- Ans
- 1. Rs. 3400
 - 2. Rs. 2000
 - 3. Rs. 2800
 - 4. Rs. 3000

Question ID : 264330116763
Status : Answered
Chosen Option : 4

Q.18 Suresh sold his mobile phone to Mohan for ₹29,700 at a gain of 10%. What was the cost price of the phone for Suresh?

- Ans
- 1. ₹25,000
 - 2. ₹26,000
 - 3. ₹28,000
 - 4. ₹27,000

Question ID : 26433074564
Status : Answered
Chosen Option : 4

Q.19 The price of sugar is decreased by 5%. If a family wants to keep their expenses on sugar, the same as earlier, then the family will have to increase the consumption of sugar by:

- Ans
- 1. $5\frac{5}{19}\%$
 - 2. $5\frac{2}{19}\%$
 - 3. $5\frac{4}{19}\%$
 - 4. 5%

Question ID : 26433074954
Status : Answered
Chosen Option : 1

Q.20 The wheel of an engine is $3\frac{3}{4}$ m in circumference and makes 4 revolutions in 2 seconds. How much distance (in km) will this train travel in 2 hours?

- Ans
- 1. 54 km
 - 2. 70 km
 - 3. 62 km
 - 4. 50 km

Question ID : 26433076043
Status : Answered
Chosen Option : 1

Section : Part-D-English

Q.1 Select the most appropriate ANTONYM of the underlined word in the following sentence.

The robbers were captured and brought to the jail.

- Ans
- 1. Composed
 - 2. Destroyed
 - 3. Released
 - 4. Seized

Question ID : 26433072239
Status : Answered
Chosen Option : 3

Q.2 Select the most appropriate option to fill in the blank.

She needs to be _____ if she wants to stand up to her bullies.

- Ans
- 1. bolder
 - 2. blonder
 - 3. balder
 - 4. boulder

Question ID : 26433084619
Status : Answered
Chosen Option : 2

Q.3 Select the most appropriate option to fill in the blank.

A couple of parrots _____ on the telephone wires.

- Ans
- 1. perched
 - 2. flew
 - 3. seeded
 - 4. waited

Question ID : 26433060334
Status : Answered
Chosen Option : 2

Q.4 Select the most appropriate meaning of the underlined idiom in the given sentence.

The child made a wry face when he was denied entry into the museum.

- Ans
- 1. An obscene gesture
 - 2. An earnest request
 - 3. A disappointed look
 - 4. An offending remark

Question ID : 26433072063
Status : Answered
Chosen Option : 3

Q.5 Select the most appropriate ANTONYM of the given word.

Tasty

- Ans
- 1. Supreme
 - 2. Hollow
 - 3. Transient
 - 4. Insipid

Question ID : 26433074382
Status : Answered
Chosen Option : 4

Q.6 Select the most appropriate option to fill in the blank.

A feeling comes over one that so much evil and misfortune _____ the world that a little more or less does not make much difference.

- Ans
- 1. had shadowed
 - 2. shadowing
 - 3. shadowed
 - 4. shadow

Question ID : 26433092113
Status : Answered
Chosen Option : 4

Q.7 Select the most appropriate synonym of the given word.

Baffle

- Ans
- 1. Perceive
 - 2. Confuse
 - 3. Betray
 - 4. Convince

Question ID : 26433088996
Status : Answered
Chosen Option : 2

Q.8 Select the most appropriate meaning of the given idiom.
Be in seventh heaven

- Ans
- 1. To be extremely happy
 - 2. To support someone strongly
 - 3. To be prepared for trouble
 - 4. To be impossible to understand

Question ID : 26433086429
Status : Answered
Chosen Option : 1

Q.9 Select the most appropriate option that can substitute the underlined segment in the given sentence.

The doctors always wear a right and suitable uniform.

- Ans
- 1. virtuous
 - 2. decent
 - 3. nice
 - 4. fit

Question ID : 26433086463
Status : Answered
Chosen Option : 1

Q.10 Select the INCORRECTLY spelt word.

- Ans 1. Defroded
 2. Discrimination
 3. Continuation
 4. Maintenance

Question ID : 26433073880
Status : Answered
Chosen Option : 1

Q.11 Select the option that expresses the given sentence in past perfect tense.

- A. Fortunately, the movie had not been starting on time.
B. Fortunately, the movie was not starting on time.
C. Fortunately, the movie had not started on time.
D. Fortunately, the movie did not start on time.

- Ans 1. C
 2. B
 3. D
 4. A

Question ID : 26433073518
Status : Answered
Chosen Option : 1

Q.12 Select the most appropriate option to substitute the underlined segment in the given sentence.

He asked me if I have anything to say.

- Ans 1. if I want anything
 2. if I am having anything
 3. if I had anything
 4. if I has anything

Question ID : 26433093473
Status : Answered
Chosen Option : 3

Q.13 Select the most appropriate ANTONYM of the given word.

Officious

- Ans 1. Obtrusive
 2. Legal
 3. Imperial
 4. Timid

Question ID : 26433072417
Status : Not Answered
Chosen Option : --

Q.14 Select the INCORRECTLY spelt word.

- Ans 1. Calendar
 2. Acclaim
 3. Conveince
 4. Opportunity

Question ID : 26433072365
Status : Answered
Chosen Option : 3

Q.15 Select the most appropriate synonym of the given word.

Accomplish

- Ans 1. Approve
 2. Fail
 3. Achieve
 4. Disappoint

Question ID : 26433074042
Status : Answered
Chosen Option : 3

Comprehension:

In the following passage, some words have been deleted. Read the passage carefully and select the most appropriate option to fill in each blank.

Twenty five years ago, few people realised that computers (1)_____ about to become part of our daily lives. This short period of time has seen (2)_____ changes, in business, education and public administration. Jobs which took weeks to complete in the past are now carried out in minutes. People who spent all day copying and checking calculations are now freed from these (3)_____ tasks. Students have become as familiar with hardware and software as their parents were with pencils and exercise books.

Computerisation of public records has enabled government departments to analyse the needs of citizens in detail. Some of us may wonder, (4)_____, life has really improved as a result of these changes. Many jobs disappeared, for example, when intelligent machines took over the work. Employers complain that clerical (5)_____ have become dependent on calculators and cannot do simple arithmetic.

SubQuestion No : 16

Q.16 Select the most appropriate option to fill in blank 1.

- Ans 1. be
 2. were
 3. is
 4. was

Question ID : 26433089079
Status : Answered
Chosen Option : 2

Comprehension:

In the following passage, some words have been deleted. Read the passage carefully and select the most appropriate option to fill in each blank.

Twenty five years ago, few people realised that computers (1)_____ about to become part of our daily lives. This short period of time has seen (2)_____ changes, in business, education and public administration. Jobs which took weeks to complete in the past are now carried out in minutes. People who spent all day copying and checking calculations are now freed from these (3)_____ tasks. Students have become as familiar with hardware and software as their parents were with pencils and exercise books. Computerisation of public records has enabled government departments to analyse the needs of citizens in detail. Some of us may wonder, (4)_____, life has really improved as a result of these changes. Many jobs disappeared, for example, when intelligent machines took over the work. Employers complain that clerical (5)_____ have become dependent on calculators and cannot do simple arithmetic.

SubQuestion No : 17

Q.17 Select the most appropriate option to fill in blank 2.

- Ans 1. enormous
 2. hazardous
 3. indigenious
 4. anonymous

Question ID : 26433089080
Status : Answered
Chosen Option : 1

Comprehension:

In the following passage, some words have been deleted. Read the passage carefully and select the most appropriate option to fill in each blank.

Twenty five years ago, few people realised that computers (1)_____ about to become part of our daily lives. This short period of time has seen (2)_____ changes, in business, education and public administration. Jobs which took weeks to complete in the past are now carried out in minutes. People who spent all day copying and checking calculations are now freed from these (3)_____ tasks. Students have become as familiar with hardware and software as their parents were with pencils and exercise books. Computerisation of public records has enabled government departments to analyse the needs of citizens in detail. Some of us may wonder, (4)_____, life has really improved as a result of these changes. Many jobs disappeared, for example, when intelligent machines took over the work. Employers complain that clerical (5)_____ have become dependent on calculators and cannot do simple arithmetic.

SubQuestion No : 18

Q.18 Select the most appropriate option to fill in blank 3.

- Ans 1. boring
 2. bored
 3. bore
 4. bores

Question ID : 26433089081
Status : Answered
Chosen Option : 1

Comprehension:

In the following passage, some words have been deleted. Read the passage carefully and select the most appropriate option to fill in each blank.

Twenty five years ago, few people realised that computers (1)_____ about to become part of our daily lives. This short period of time has seen (2)_____ changes, in business, education and public administration. Jobs which took weeks to complete in the past are now carried out in minutes. People who spent all day copying and checking calculations are now freed from these (3)_____ tasks. Students have become as familiar with hardware and software as their parents were with pencils and exercise books. Computerisation of public records has enabled government departments to analyse the needs of citizens in detail. Some of us may wonder, (4)_____, life has really improved as a result of these changes. Many jobs disappeared, for example, when intelligent machines took over the work. Employers complain that clerical (5)_____ have become dependent on calculators and cannot do simple arithmetic.

SubQuestion No : 19

Q.19 Select the most appropriate option to fill in blank 4.

- Ans 1. subsequently
 2. however
 3. therefore
 4. for instance

Question ID : 26433089082
Status : Answered
Chosen Option : 1

Comprehension:

In the following passage, some words have been deleted. Read the passage carefully and select the most appropriate option to fill in each blank.

Twenty five years ago, few people realised that computers (1)_____ about to become part of our daily lives. This short period of time has seen (2)_____ changes, in business, education and public administration. Jobs which took weeks to complete in the past are now carried out in minutes. People who spent all day copying and checking calculations are now freed from these (3)_____ tasks. Students have become as familiar with hardware and software as their parents were with pencils and exercise books. Computerisation of public records has enabled government departments to analyse the needs of citizens in detail. Some of us may wonder, (4)_____, life has really improved as a result of these changes. Many jobs disappeared, for example, when intelligent machines took over the work. Employers complain that clerical (5)_____ have become dependent on calculators and cannot do simple arithmetic.

SubQuestion No : 20

Q.20 Select the most appropriate option to fill in blank 5.

- Ans 1. staff
 2. soldiers
 3. messengers
 4. religions

Question ID : 26433089083
Status : Answered
Chosen Option : 1

Q.1 निम्नलिखित में से शुद्ध वर्तनी वाला शब्द कौन-सा है?

- Ans
- 1. ईतवार
 - 2. ईटवार
 - 3. एतवार
 - 4. इतवार

Question ID : 26433066749
Status : Not Answered
Chosen Option : --

Q.2 विकल्पों में से शुद्ध वर्तनी वाले वाक्य का चयन कीजिए।

- Ans
- 1. फ़िज़ूल खर्च मत करो।
 - 2. मीरा आटा गुँध रही है।
 - 3. सुधा नीरपराध है।
 - 4. शत्रु युद्धभूमी से दौड़ गया।

Question ID : 26433079234
Status : Not Answered
Chosen Option : --

Q.3 'सकाम' शब्द का सही विलोम शब्द क्या होगा?

- Ans
- 1. कुकाम
 - 2. निकाम
 - 3. दुर्काम
 - 4. निष्काम

Question ID : 26433067093
Status : Not Answered
Chosen Option : --

Q.4 निम्न वाक्य में रेखांकित अंश के स्थान पर सबसे उपयुक्त विकल्प का चयन कीजिए।
उसने पुरस्कार का अपमान कर दिया।

- Ans
- 1. आपमान
 - 2. तिरस्कार
 - 3. बेइज्जत
 - 4. समापन

Question ID : 26433066870
Status : Not Answered
Chosen Option : --

Q.5 निम्न में से 'अग्नि' का पर्याय है-

- Ans 1. अनल
 2. अम्बक
 3. अमिय
 4. अनिल

Question ID : 26433062912
Status : Not Answered
Chosen Option : --

Q.6 'खून पसीना एक करना' मुहावरे का उचित अर्थ है-

- Ans 1. परिश्रम न करना
 2. कठिन परिश्रम करना
 3. कुछ न समझना
 4. लड़ाई करना

Question ID : 26433065881
Status : Not Answered
Chosen Option : --

Q.7 निम्नलिखित मुहावरे के लिए उपयुक्त सार्थक शब्द क्या होगा?
आंख की किरकिरी होना

- Ans 1. आंखों में कुछ चला जाना
 2. अप्रिय लगना
 3. व्यर्थ का काम करना
 4. बहुत अधिक प्रिय होना

Question ID : 26433065780
Status : Not Answered
Chosen Option : --

Q.8 'जो वर्ष में एक बार होता हो' वाक्यांश के लिए सार्थक शब्द है-

- Ans 1. एक वर्ष
 2. वार्षिक
 3. वर्षा
 4. भीषण

Question ID : 26433062226
Status : Not Answered
Chosen Option : --

Q.9 'गाँव से संबंधित' वाक्यांश के लिए इनमें से उपयुक्त शब्द कौन-सा है?

- Ans 1. ग्रामीण
 2. देशी
 3. शहरी
 4. गायक

Question ID : 26433066889
Status : Not Answered
Chosen Option : --

Q.10 'भीष्म पितामह ने अविवाहित रहने का प्रण लिया था।'
उपरोक्त वाक्य में प्रयुक्त शब्द 'प्रण' के पर्यायवाची शब्द का चयन विकल्पों में से कीजिए।

- Ans 1. कटक
 2. प्रतिज्ञा
 3. व्रत
 4. संकल्प

Question ID : 26433069739
Status : Not Answered
Chosen Option : --

Q.11 जो सुगमता से साधा जाए
ऊपर दिए गए वाक्यांश के लिए एक शब्द क्या होगा?

- Ans 1. दुर्गम्य
 2. सुसाध्य
 3. सुगम्य
 4. दुःसाध्य

Question ID : 26433070061
Status : Not Answered
Chosen Option : --

Q.12 "निरंजन ड्राइवर को कार चलवाता है।"
उपरोक्त वाक्य में कारक सम्बन्धी त्रुटि पहचानकर निम्नलिखित में से शुद्ध वाक्य का चयन कीजिए।

- Ans 1. निरंजन ड्राइवर की कार चलवाता है।
 2. निरंजन ड्राइवर से कार चलवाता है।
 3. निरंजन ड्राइवर पर कार चलवाता है।
 4. निरंजन ड्राइवर के लिए कार चलवाता है।

Question ID : 26433066963
Status : Not Answered
Chosen Option : --

Q.13 निम्न वाक्य में रेखांकित शब्द को विकल्पों में दिए गए शब्दों में से उचित शब्द से बदलें।
मुझे आशंका है कि वह इतना काम कर सकेगा या नहीं।

- Ans
- 1. भय
 - 2. खेद
 - 3. शंका
 - 4. अदेशा

Question ID : 26433062875
Status : Not Answered
Chosen Option : --

Q.14 निम्नलिखित विकल्पों में से किस एक वाक्य में संख्यावाचक विशेषण का उचित प्रयोग नहीं किया गया है?

- Ans
- 1. राम ने दो मीटर कपड़ा खरीदा।
 - 2. हमें चन्द्रमा सुन्दर प्रतीत होता है।
 - 3. मेरी आठ बीघा जमीन ननिहाल में है।
 - 4. सौ ग्राम धनिया की कीमत क्या है?

Question ID : 26433062968
Status : Not Answered
Chosen Option : --

Q.15 निम्न वाक्य में रेखांकित शब्द के उपयुक्त विलोम शब्द द्वारा रिक्त स्थान की पूर्ति कीजिए।
कभी कभी परिस्थितियाँ मनुष्य को आस्तिक से _____ बना देती हैं।

- Ans
- 1. धार्मिक
 - 2. तार्किक
 - 3. आत्यंतिक
 - 4. नास्तिक

Question ID : 26433072618
Status : Not Answered
Chosen Option : --

Comprehension:

निम्नलिखित गद्यांश में कुछ शब्दों को हटा दिया गया है। दिए गए विकल्पों की सहायता से रिक्त स्थानों की पूर्ति कीजिए। प्रत्येक संख्या के लिए सबसे उपयुक्त विकल्प का चयन कीजिए।
आजकल देखा जाता है कि लोगों में त्योहारों को मनाने की 1. _____ कम होती जा रही है। पुराने उत्साह और आस्था का अभाव 2. _____ दिखाई देता है। जहाँ त्योहार मनाए भी जाते हैं उनके पीछे अन्य 3. _____ होते हैं। त्योहार मनाने के लिए समय और धन दोनों की 4. _____ होती है। जीवन में प्रतिस्पर्धा बढ़ गई है। सब बातों के केंद्र में 5. _____ आ गया है।

SubQuestion No : 16

Q.16 रिक्त स्थान 1 की पूर्ति के लिए सबसे उपयुक्त विकल्प का चयन कीजिए।

- Ans
- 1. कार्य
 - 2. सपना
 - 3. प्रवृत्ति
 - 4. उक्ति

Question ID : 26433011131
Status : Not Answered
Chosen Option : --

Comprehension:

निम्नलिखित गद्यांश में कुछ शब्दों को हटा दिया गया है। दिए गए विकल्पों की सहायता से रिक्त स्थानों की पूर्ति कीजिए। प्रत्येक संख्या के लिए सबसे उपयुक्त विकल्प का चयन कीजिए।
आजकल देखा जाता है कि लोगों में त्योहारों को मनाने की 1. _____ कम होती जा रही है। पुराने उत्साह और आस्था का अभाव 2. _____ दिखाई देता है। जहाँ त्योहार मनाए भी जाते हैं उनके पीछे अन्य 3. _____ होते हैं। त्योहार मनाने के लिए समय और धन दोनों की 4. _____ होती है। जीवन में प्रतिस्पर्धा बढ़ गई है। सब बातों के केंद्र में 5. _____ आ गया है।

SubQuestion No : 17

Q.17 रिक्त स्थान 2 की पूर्ति के लिए सबसे उपयुक्त विकल्प का चयन कीजिए।

- Ans 1. सर्वत्र
 2. जग
 3. अछूता
 4. कम

Question ID : 264330111132

Status : Not Answered

Chosen Option : --

Comprehension:

निम्नलिखित गद्यांश में कुछ शब्दों को हटा दिया गया है। दिए गए विकल्पों की सहायता से रिक्त स्थानों की पूर्ति कीजिए। प्रत्येक संख्या के लिए सबसे उपयुक्त विकल्प का चयन कीजिए।
आजकल देखा जाता है कि लोगों में त्योहारों को मनाने की 1. _____ कम होती जा रही है। पुराने उत्साह और आस्था का अभाव 2. _____ दिखाई देता है। जहाँ त्योहार मनाए भी जाते हैं उनके पीछे अन्य 3. _____ होते हैं। त्योहार मनाने के लिए समय और धन दोनों की 4. _____ होती है। जीवन में प्रतिस्पर्धा बढ़ गई है। सब बातों के केंद्र में 5. _____ आ गया है।

SubQuestion No : 18

Q.18 रिक्त स्थान 3 की पूर्ति के लिए सबसे उपयुक्त विकल्प का चयन कीजिए।

- Ans 1. त्योहार
 2. कारण
 3. गुण
 4. आसान

Question ID : 264330111133

Status : Not Answered

Chosen Option : --

Comprehension:

निम्नलिखित गद्यांश में कुछ शब्दों को हटा दिया गया है। दिए गए विकल्पों की सहायता से रिक्त स्थानों की पूर्ति कीजिए। प्रत्येक संख्या के लिए सबसे उपयुक्त विकल्प का चयन कीजिए।
आजकल देखा जाता है कि लोगों में त्योहारों को मनाने की 1. _____ कम होती जा रही है। पुराने उत्साह और आस्था का अभाव 2. _____ दिखाई देता है। जहाँ त्योहार मनाए भी जाते हैं उनके पीछे अन्य 3. _____ होते हैं। त्योहार मनाने के लिए समय और धन दोनों की 4. _____ होती है। जीवन में प्रतिस्पर्धा बढ़ गई है। सब बातों के केंद्र में 5. _____ आ गया है।

SubQuestion No : 19

Q.19 रिक्त स्थान 4 की पूर्ति के लिए सबसे उपयुक्त विकल्प का चयन कीजिए।

- Ans 1. अनावश्यकता
 2. आवश्यकता
 3. समझ
 4. बढ़ाव

Question ID : 264330111134

Status : Not Answered

Chosen Option : --

Comprehension:

निम्नलिखित गद्यांश में कुछ शब्दों को हटा दिया गया है। दिए गए विकल्पों की सहायता से रिक्त स्थानों की पूर्ति कीजिए। प्रत्येक संख्या के लिए सबसे उपयुक्त विकल्प का चयन कीजिए।
आजकल देखा जाता है कि लोगों में त्योहारों को मनाने की 1. _____ कम होती जा रही है। पुराने उत्साह और आस्था का अभाव 2. _____ दिखाई देता है। जहाँ त्योहार मनाए भी जाते हैं उनके पीछे अन्य 3. _____ होते हैं। त्योहार मनाने के लिए समय और धन दोनों की 4. _____ होती है। जीवन में प्रतिस्पर्धा बढ़ गई है। सब बातों के केंद्र में 5. _____ आ गया है।

SubQuestion No : 20

Q.20 रिक्त स्थान 5 की पूर्ति के लिए सबसे उपयुक्त विकल्प का चयन कीजिए।

- Ans 1. परिवार
 2. प्यार
 3. झगड़ा
 4. धन

Question ID : 264330111135

Status : Not Answered

Chosen Option : --