

Constable GD in CAPFs SSF Rifleman GD in Assam Rifles and Sepoy in NCB Examination 2022

Roll Number	www.govtjobsalert.in
Candidate Name	www.govtjobsalert.in
Venue Name	iON Digital Zone iDZ Harahuwa Chauraha
Exam Date	25/01/2023
Exam Time	2:30 PM - 3:30 PM
Subject	Constable GD Examination 2022

Section : **Part-A-General Intelligence and Reasoning**

Q.1 Select the option that is related to the fourth term in the same way as the first term is related to the second term and the fifth term is related to the sixth term.
512 : 10 :: ? : 11 :: 1331 : 13

- Ans
- 1. 343
 - 2. 441
 - 3. 1000
 - 4. 729

Question ID : 26433074546

Status : Answered

Chosen Option : 4

Q.2 Which of the following numbers will replace the question mark (?) in the given series?
-1, 0, 3, 8, 15, ?

- Ans
- 1. 13
 - 2. 32
 - 3. 56
 - 4. 24

Question ID : 26433082739

Status : Answered

Chosen Option : 4

Q.3 Three statements are given, followed by three conclusions numbered I, II and III. Assuming the statements to be true, even if they seem to be at variance with commonly known facts, decide which of the conclusions logically follow(s) from the statements.

Statements:

No ties are pants.

All pants are shirts.

All ties are shirts.

Conclusions:

I. Some shirts are ties.

II. Some shirts are pants.

III. Some ties are shirts.

- Ans**
- 1. All conclusions follow
 - 2. Only conclusion III follows
 - 3. Only conclusions I and III follow
 - 4. Only conclusions II and III follow

Question ID : 26433090994

Status : Answered

Chosen Option : 1

Q.4 Select the option that is related to the third word in the same way as the second word is related to the first word. (The words must be considered as meaningful English words and must not be related to each other based on the number of letters/number of consonants/vowels in the word)

Car : Seat belt :: Fan : ?

- Ans**
- 1. Wind
 - 2. Room
 - 3. Blade
 - 4. Electricity


Question ID : 26433067974

Status : Answered

Chosen Option : 3

Q.5 Select the correct mirror image of the given figure when the mirror is placed at MN as shown below.

PFX15n3G



- Ans**
- 1. QEN2IXF9
 - 2. QEN15XF9
 - 3. GEN2IXF9
 - 4. QEN2IXF9

Question ID : 26433089458

Status : Answered

Chosen Option : 4

Q.6 Which of the following numbers will replace the question mark (?) and complete the given number series?
5, 293, 437, 509, ?

- Ans
- 1. 535
 - 2. 540
 - 3. 550
 - 4. 545

Question ID : 26433067859
Status : Answered
Chosen Option : 4

Q.7 In a certain code language, 'CRAZE' is written as 'DTDDJ', 'GLORY' is written as 'HNRVD', how will 'FAME' be written as in that language?

- Ans
- 1. GOPI
 - 2. IPCG
 - 3. GCPI
 - 4. GCIP

Question ID : 26433069652
Status : Answered
Chosen Option : 3

Q.8 Select the option that is related to the fifth letter-cluster in the same way as the second letter-cluster is related to the first letter-cluster and the fourth letter-cluster is related to the third letter-cluster.

CAPTURE : PACERUT :: BANKING : NABGNIK :: CHARITY : ?

- Ans
- 1. AHCYTIR
 - 2. RAHCYTI
 - 3. YTIRAHC
 - 4. RITYCHA

Question ID : 26433069632
Status : Answered
Chosen Option : 1

Q.9 Select the option that represents the correct order of the given words as they would appear in an English dictionary.

1. RAY
2. RAVISH
3. RATIONAL
4. RATABLE
5. RASH
6. RAPTURE

- Ans
- 1. 4, 6, 5, 3, 2, 1
 - 2. 5, 6, 4, 3, 2, 1
 - 3. 6, 5, 4, 3, 2, 1
 - 4. 3, 6, 5, 4, 2, 1

Question ID : 26433079383
Status : Answered
Chosen Option : 3

Q.10 Select the correct combination of mathematical signs to sequentially replace the * signs and to balance the given equation.
 $720 * 24 * 4 * 100 * 40 * 20$

- Ans
- 1. $\div, \times, =, +, -$
 - 2. $-, +, \div, \times, =$
 - 3. $+, =, \times, \div, -$
 - 4. $\times, \div, +, =, -$

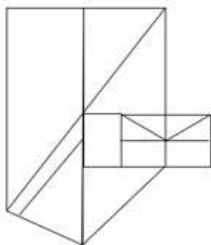
Question ID : 26433094988
Status : Answered
Chosen Option : 1

Q.11 Which of the following terms will replace the question mark (?) in the given series?
XDZA, VFXC, ?, LPNM, DXFU

- Ans
- 1. SJTH
 - 2. SJIG
 - 3. RJTG
 - 4. RITH

Question ID : 26433068303
Status : Answered
Chosen Option : 3

Q.12 Select the option figure which is embedded in the given figure. (Rotation is NOT allowed)



Ans

- 1.
- 2.
- 3.
- 4.

Question ID : 26433069336
Status : Answered
Chosen Option : 2

Q.13 Seven friends M, N, O, P, Q, R and S are sitting on a straight bench facing towards east. P is sitting exactly at the middle position. Only four friends are sitting to the left of M. Only Q is sitting between R and S. O is sitting third to the right of S. Who is sitting at the second place from the right end?

- Ans
- 1. N
 - 2. M
 - 3. O
 - 4. R

Question ID : 26433079060
Status : Answered
Chosen Option : 3

Q.14 In a certain code language, 'GOLDEN' is written as 'MHPGPF' and 'GERMAN' is written as 'SFHPCO'. How will 'GLOBAL' be written as in that language?

- Ans
- 1. OLGNC D
 - 2. PMHLAB
 - 3. OLGLAB
 - 4. PMHNCD

Question ID : 26433090046
Status : Answered
Chosen Option : 2

Q.15 Six students are sitting around a circular table facing the centre. Jitender is an immediate neighbour of both Shahid and Jaya. Komal is sitting second to the right of Shahid. Tarun is sitting third to the left of Jaya. Vijay is an immediate neighbour of both Komal and Jaya. Who is the immediate neighbour of Jitender and Tarun?

- Ans
- 1. Jaya
 - 2. Shahid
 - 3. Vijay
 - 4. Komal

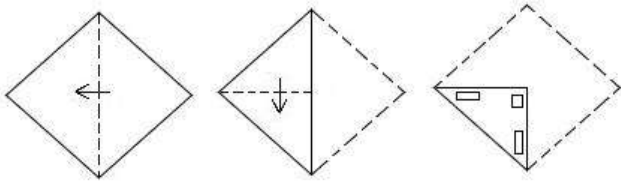
Question ID : 26433069664
Status : Answered
Chosen Option : 3

Q.16 'A # B' means 'B is the sister of A'
'A @ B' means 'B is the brother of A'
'A % B' means 'B is the daughter of A'
'A \$ B' means 'B is the husband of A'
If A \$ B % C # D @ E, then how is E related to A?

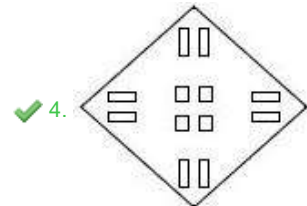
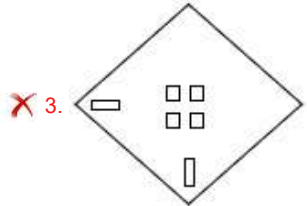
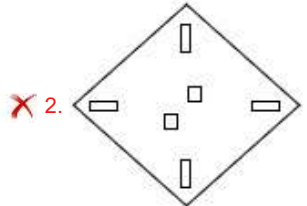
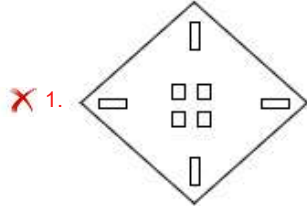
- Ans
- 1. Son
 - 2. Brother
 - 3. Father
 - 4. Husband

Question ID : 26433068534
Status : Not Attempted and Marked For Review
Chosen Option : --

Q.17 A paper is folded and cut as shown below. How will it appear when unfolded?



Ans



Question ID : 26433090093

Status : Answered

Chosen Option : 4

Q.18 Which of the following terms will replace the question mark (?) in the given series?
BDPY, HITB, ?, TSBH, ZXFK

Ans ✗ 1. NMXE

✓ 2. NNXE

✗ 3. NMXF

✗ 4. NNYF

Question ID : 26433069448

Status : Answered

Chosen Option : 2

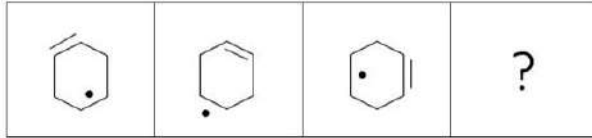
Q.19 Which two signs should be interchanged to make the below equation mathematically correct?

$$18 + 60 \div 15 \times 24 - 12 = 84$$

- Ans
- ✓ 1. \times and $+$
 - ✗ 2. $+$ and $-$
 - ✗ 3. \div and $-$
 - ✗ 4. \times and \div

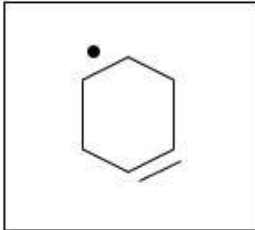
Question ID : 264330117494
Status : Answered
Chosen Option : 1

Q.20 Select the figure from among the given options that can replace the question mark (?) in the following series.

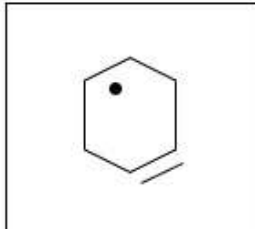


Ans

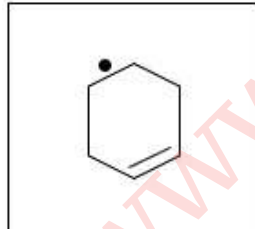
✗ 1.



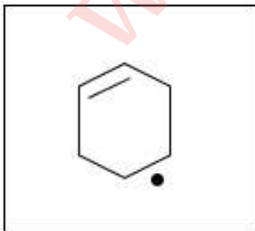
✗ 2.



✓ 3.



✗ 4.



Question ID : 26433080764
Status : Answered
Chosen Option : 3

Q.1 'Kharchi Puja' is primarily celebrated in which of the following states of India?

- Ans
- 1. Bihar
 - 2. Rajasthan
 - 3. Tamil Nadu
 - 4. Tripura

Question ID : 26433094890
Status : Answered
Chosen Option : 4

Q.2 The Reserve Bank of India was established on _____.

- Ans
- 1. May 1, 1932
 - 2. January 1, 1945
 - 3. April 1, 1935
 - 4. June 1, 1935

Question ID : 26433054800
Status : Answered
Chosen Option : 3

Q.3 Who has been awarded Sangeet Natak Akademi Award in the year 2016 for the contribution to Chhau?

- Ans
- 1. Suchitra Ella
 - 2. Vidushi K.S. Jayalakshmi
 - 3. Mahaboob Subhani
 - 4. Gopal Prasad Dubey

Question ID : 264330115891
Status : Answered
Chosen Option : 1

Q.4 _____ are an example of public goods and services.

- Ans
- 1. roads
 - 2. clothes
 - 3. cosmetic products
 - 4. a pack of biscuits

Question ID : 264330115281
Status : Answered
Chosen Option : 1

Q.5 निम्नलिखित में से किस राज्य में द्विसदनीय विधायिका है?

- Ans 1. पंजाब
 2. कर्नाटक
 3. तमिलनाडु
 4. हरियाणा

Question ID : 26433086861
Status : Answered
Chosen Option : 2

Q.6 During which movement did Chauri-Chaura incident happen?

- Ans 1. Civil Disobedience Movement
 2. Non-cooperation movement
 3. Champaran Movement
 4. Quit India Movement

Question ID : 264330115690
Status : Answered
Chosen Option : 2

Q.7 As per Consumer Protection Rules, 2021, National Commission shall have jurisdiction to entertain complaints where value of the goods or services paid as consideration exceeds _____.

- Ans 1. rupees one crore
 2. rupees ten crore
 3. rupees two crore
 4. rupees five crore

Question ID : 264330116237
Status : Answered
Chosen Option : 1

Q.8 _____ is associated with spoilage, development of off-flavors, deterioration of textures, discoloration and loss of nutritional value.

- Ans 1. food conservation
 2. food preservation
 3. food processing
 4. food deterioration

Question ID : 264330115262
Status : Answered
Chosen Option : 4

Q.9 Area wise the largest state of India is _____.

- Ans 1. Uttar Pradesh
 2. Madhya Pradesh
 3. Maharashtra
 4. Rajasthan

Question ID : 264330116089
Status : Answered
Chosen Option : 4

Q.10 _____ एक अभ्यास है जिसका उद्देश्य वैकल्पिक मौसम में एक से अधिक फसलों की खेती करना है।

- Ans 1. वन कृषि
 2. खरीफ फसल लेना
 3. सीढ़ीदार खेती
 4. बहुविध फसल खेती

Question ID : 264330115428
Status : Answered
Chosen Option : 4

Q.11 Amongst the following, which boxing weight class is the heaviest?

- Ans 1. Pin
 2. Light
 3. Feather
 4. Fly

Question ID : 26433086733
Status : Answered
Chosen Option : 4

Q.12 A sudden and constant rainfall, along with violent thunder and lightning is called the _____.

- Ans 1. Break of the monsoon
 2. Onset of the monsoon
 3. Cloudburst monsoon
 4. Burst of the monsoon

Question ID : 264330115983
Status : Answered
Chosen Option : 4

Q.13 How many player play at a time in a Kabaddi match from one team?

Ans 1. 6

2. 7

3. 5

4. 8

Question ID : 26433071574
Status : Answered
Chosen Option : 2

Q.14 Which of the following dynasties controlled the Silk Route during post Mauryan period?

Ans 1. Cheras

2. Satavahanas

3. Shungas

4. Kushanas

Question ID : 26433085227
Status : Answered
Chosen Option : 4

Q.15 Who won the bypoll election and became Member of Legislative Assembly from Brajarajnagar constituency in Odisha, India in 2022?

Ans 1. Piyush Goyal

2. Alaka Mohanty

3. Asish Das

4. Sudip Roy Barman

Question ID : 264330114966
Status : Answered
Chosen Option : 2

Q.16 As of March 2022, which of the following dance forms is in the category of a classical dance by the Sangeet Natak Akademi?

Ans 1. Bihu

2. Kalbeliya

3. Ghoomar

4. Manipuri

Question ID : 26433070805
Status : Answered
Chosen Option : 2

Q.17 Which of the following does not come from sugarcane?

- Ans 1. khandsari
 2. honey
 3. molasses
 4. sugar

Question ID : 264330115528
Status : Answered
Chosen Option : 2

Q.18 Which part of the Constitution of India deals with the Panchayat?

- Ans 1. Part VIII
 2. Part IX
 3. Part X
 4. Part XI

Question ID : 264330115616
Status : Answered
Chosen Option : 2

Q.19 Who has been appointed as the Permanent Representative of India to the United Nations in June 2022?

- Ans 1. Asoke Kumar Mukerji
 2. Ruchira Kamboj
 3. Syed Akbaruddin
 4. Nirupam Sen

Question ID : 264330114984
Status : Answered
Chosen Option : 2

Q.20 आधुनिक आवर्त नियम (Modern Periodic Law) का प्रतिपादन किसने किया?

- Ans 1. मोसले (Moseley)
 2. लोथर मेयर (Lothar Meyer)
 3. मेंडलीफ (Mendeleev)
 4. डोबेराइनर (Dobereiner)

Question ID : 26433066698
Status : Not Answered
Chosen Option : --

Q.1 A man, who practices running, covers the first half of the distance at 4 km/h and the remaining half of the distance at 6 km/h. What is his average speed?

- Ans
- 1. 5 km/h
 - 2. 5.2 km/h
 - 3. 4.8 km/h
 - 4. 4.5 km/h

Question ID : 26433075921
Status : Answered
Chosen Option : 3

Q.2 Three years ago, Rahul borrowed a sum of money at compound interest rate of 10% per annum compounding annually. If the present value of that borrowed money is Rs.11,979, how much money was borrowed by Rahul?

- Ans
- 1. Rs.9,000
 - 2. Rs.8,979
 - 3. Rs.9,979
 - 4. Rs.8,000

Question ID : 26433080340
Status : Answered
Chosen Option : 1

Q.3 If A, B and C work individually, then they can finish a piece of work in 27, 36 and 45 days respectively. How many days are required to complete the task if they work together?

- Ans
- 1. $13\frac{11}{47}$
 - 2. $15\frac{9}{47}$
 - 3. $10\frac{33}{47}$
 - 4. $11\frac{23}{47}$

Question ID : 26433079891
Status : Answered
Chosen Option : 4

Q.4 In 65 litres of a mixture of kerosene and petrol, the ratio of kerosene to petrol is 3 : 2. In order to make this ratio 4 : 5, how many litres of petrol should be added to the given mixture?

- Ans
- 1. 29.25
 - 2. 24.5
 - 3. 23.25
 - 4. 22.75

Question ID : 26433080000
Status : Answered
Chosen Option : 4

Q.5 A dealer marks an air-conditioner for ₹1,20,000 and allows a discount of 12% on it. What is its selling price (in ₹)?

- Ans
- 1. 1,10,500
 - 2. 1,16,000
 - 3. 1,06,050
 - 4. 1,05,600

Question ID : 26433061890

Status : Answered

Chosen Option : 4

Q.6 A shopkeeper listed the marked price of a table as a certain amount and he gave two successive discounts of 10% and 10%. If the shopkeeper sold it at ₹1,458, then the marked price is:

- Ans
- 1. ₹1,800
 - 2. ₹1,870
 - 3. ₹1,850
 - 4. ₹1,830

Question ID : 26433090303

Status : Answered

Chosen Option : 1

Q.7 An amount of ₹10,000 becomes ₹12,100 in 2 years at a certain interest rate compounded annually. Find the amount after 4 years.

- Ans
- 1. ₹14,341
 - 2. ₹16,461
 - 3. ₹13,431
 - 4. ₹14,641

Question ID : 26433081719

Status : Answered

Chosen Option : 4

Q.8 A number is increased by 8% and then, the increased number is decreased by 8%. What is the net increase or decrease in the number?

- Ans
- 1. 0.36% increase
 - 2. 0.36% decrease
 - 3. 0.64% decrease
 - 4. 0.64% increase

Question ID : 26433075968

Status : Answered

Chosen Option : 3

Q.9 If books bought at prices ranging from Rs.200 to Rs.350 are being sold at prices ranging from Rs.300 to Rs.450, what is the highest possible profit that might be made in selling 8 books?

- Ans
- 1. Rs.1,800
 - 2. Rs.2,000
 - 3. Rs.400
 - 4. Rs.1,600

Question ID : 26433076036
Status : Answered
Chosen Option : 1

Q.10 If a number 'a' is divisible by 18 and another number 'b' is divisible by 12, then $(a^2 - b^2)$ is divisible by :

- Ans
- 1. 48
 - 2. 30
 - 3. 36
 - 4. 40

Question ID : 26433081701
Status : Answered
Chosen Option : 4

Q.11 If the radius and height of the cylinder are 91 m and 2.5 m, respectively, then what is the curved surface area and total surface area of the cylinder in respective manner? (Use $\pi = 22/7$)

- Ans
- 1. 2430 m^2 and 73482 m^2
 - 2. 1340 m^2 and 54382 m^2
 - 3. 1420 m^2 and 53582 m^2
 - 4. 1430 m^2 and 53482 m^2

Question ID : 26433085493
Status : Answered
Chosen Option : 4

Q.12 Find the ratio of the total surface area to curved surface area of a cylinder whose radius is 20 cm and height 50 cm.

- Ans
- 1. 5 : 7
 - 2. 7 : 5
 - 3. 3 : 5
 - 4. 5 : 3

Question ID : 26433066327
Status : Answered
Chosen Option : 2

Q.13

The HCF of $\frac{3}{4}$, $\frac{5}{7}$, $\frac{7}{9}$ and $\frac{1}{12}$ will be:

Ans

1. $\frac{1}{63}$

2. $\frac{1}{126}$

3. $\frac{1}{252}$

4. $\frac{1}{378}$

Question ID : 26433091511

Status : Answered

Chosen Option : 3

Q.14 Ram wants to paint all the walls and ceiling of his reading room personally. He started painting his room and after painting the area of 16 m^2 , a paint tin of 4 litres is exhausted. How many paint tins are required to paint the remaining area, if the total area of his room to be painted is 176 m^2 ?

Ans 1. 20

2. 30

3. 40

4. 10

Question ID : 26433079940

Status : Answered

Chosen Option : 3

Q.15 If x and y are inversely proportional to each other and $x = 27$ when $y = 7$, then what is the value of x when $y = 21$?

Ans 1. 21

2. 9

3. 7

4. 27

Question ID : 26433079776

Status : Answered

Chosen Option : 2

Q.16 A thief moving at 40 km/h covers a distance in 5 hours 15 minutes. If the police chasing him cover the same distance at 50 km/h, then how long will the police take to cover the same distance?

- Ans
- 1. 5 hours 20 minutes
 - 2. 4 hours 12 minutes
 - 3. 3 hours 15 minutes
 - 4. 4 hours 50 minutes

Question ID : 26433074996
Status : Answered
Chosen Option : 2

Q.17 An umbrella is bought at Rs.80 and sold at Rs.68. What is the percentage of loss?

- Ans
- 1. 12%
 - 2. 15%
 - 3. 14%
 - 4. 13%

Question ID : 26433075143
Status : Answered
Chosen Option : 2

Q.18 The average weight of 20 people is 75 kgs. The average weight of 10 people out of them is 70 kgs. The average weight of 5 people out of the remaining people is 75 kgs. Find the average weight of 5 people remaining in the end.

- Ans
- 1. 80 kgs
 - 2. 75 kgs
 - 3. 90 kgs
 - 4. 85 kgs

Question ID : 264330116688
Status : Answered
Chosen Option : 4

Q.19 By what percentage should a car driver increase the speed of the car to reduce the time by 40% to cover a fixed distance?

- Ans
- 1. $68\frac{1}{3}\%$
 - 2. $66\frac{2}{3}\%$
 - 3. $53\frac{1}{6}\%$
 - 4. $64\frac{1}{3}\%$

Question ID : 26433091505
Status : Answered
Chosen Option : 2

Q.20 A is thrice as good a workman as B. A started the work and they worked together on alternate days and finished the work in 24 days. The number of days taken by A alone to finish the work was:

- Ans 1. 16
 2. 24
 3. 21
 4. 18

Question ID : 26433087394
Status : Answered
Chosen Option : 4

Section : Part-D-English

Q.1 Select the most appropriate option that can substitute the underlined segment in the given sentence.

My boss have insured me that my salary will be credited next week.

- Ans 1. have ensured
 2. has assured
 3. has cautioned
 4. had entrusted

Question ID : 26433088162
Status : Answered
Chosen Option : 2

Q.2 Select the most appropriate ANTONYM of the given word.

Obvious

- Ans 1. Evident
 2. Ambiguous
 3. Inherent
 4. Apparent

Question ID : 26433092072
Status : Answered
Chosen Option : 2

Q.3 Select the most appropriate ANTONYM of the given word.

Enormous

- Ans 1. Stumble
 2. Enjoyable
 3. Mammoth
 4. Negligible

Question ID : 26433092069
Status : Answered
Chosen Option : 4

Q.4 Select the most appropriate synonym of the given word.

Gloomy

- Ans 1. Unhappy
 2. Blissful
 3. Hopeful
 4. Light

Question ID : 26433072070
Status : Answered
Chosen Option : 1

Q.5 Select the most appropriate synonym of the given word.

Stratified

- Ans 1. Scattered
 2. Consolidated
 3. Laminated
 4. Ungraded

Question ID : 26433089099
Status : Answered
Chosen Option : 1

Q.6 Select the most appropriate option that can substitute the underlined segment in the given sentence.

Josephine confessed that she couldn't stand another hour out daylight.

- Ans 1. couldn't wait another hour from
 2. couldn't stand another hour of
 3. couldn't stand another hour for
 4. couldn't stand other hour in

Question ID : 26433091967
Status : Answered
Chosen Option : 4

Q.7 Identify the correctly spelt sentence.

- Ans 1. Human personality is classifide into three types- introvert, extrovert and ambivert.
 2. Human persunality is clasified into three types- introvert, extrovert and ambivert.
 3. Human personality is classified into three types- introvert, extrovert and ambivert.
 4. Human personality is classified into three types- introvert, extrovert and ambivert

Question ID : 26433072825
Status : Answered
Chosen Option : 3

Q.8 Select the most appropriate option that can substitute the underlined segment in the given sentence. If there is no need to substitute it, select 'No substitution'.

Henry worked for a few years as a sargent in the army.

- Ans 1. No substitution
 2. sergeant
 3. sergant
 4. sergent

Question ID : 26433074005
Status : Answered
Chosen Option : 3

Q.9 Select the most appropriate synonym of the given word.

Annoyance

- Ans 1. Anger
 2. Hatred
 3. Emotion
 4. Agony

Question ID : 26433088204
Status : Answered
Chosen Option : 1

Q.10 Select the most appropriate ANTONYM of the underlined word in the following sentence.

My brother became very frail after his long sickness.

- Ans 1. Strong
 2. Violent
 3. Feeble
 4. Docile

Question ID : 26433072242
Status : Answered
Chosen Option : 3

Q.11 Select the most appropriate synonym to substitute the underlined word in the given sentence.

The strict measures employed by the government ensured there was peace.

- Ans 1. liberal
 2. austere
 3. orthodox
 4. valiant

Question ID : 26433074018
Status : Answered
Chosen Option : 2

Q.12 The following sentence has been split into four segments. Identify the segment that contains a grammatical error.
They have / always take / an hour's walk / before breakfast.

- Ans
- 1. an hour's walk
 - 2. always take
 - 3. before breakfast
 - 4. They have

Question ID : 26433099633
Status : Answered
Chosen Option : 4

Q.13 Select the most appropriate meaning of the given idiom.

Lay hands on

- Ans
- 1. To touch or grasp someone, often with the threat of violence
 - 2. To gently lay one's hand on someone
 - 3. To try new things
 - 4. To give up

Question ID : 26433072223
Status : Answered
Chosen Option : 3

Q.14 Select the word segment that substitutes (replaces) the bracketed word segment correctly and completes the sentence meaningfully:
Distribute these fruits and desserts (WITHIN) the girls, the boys and the teachers.

- Ans
- 1. for
 - 2. in
 - 3. across
 - 4. among

Question ID : 264330101434
Status : Answered
Chosen Option : 4

Q.15 Select the correct idiom that can substitute the italicised group of words in the given sentence.

To succeed in competitive exams is not *an easy task*.

- Ans
- 1. cat's paw
 - 2. a black sheep
 - 3. child's play
 - 4. a bed of thorns

Question ID : 26433084760
Status : Answered
Chosen Option : 3

Comprehension:

In the following passage, some words have been deleted. Read the passage carefully and select the most appropriate option to fill in each blank.

Inevitably, my approach will often be a personal one; how the idea grew in my mind, what shapes it took, how it (1) _____ me and affected my action. There will also be some (2) _____ personal experiences which have nothing to do with the subject in its wider aspects, but which coloured my mind and influenced my approach to the whole problem. Our judgments of countries and peoples are based on many factors; among them our personal contacts, if there have been any, have a (3) _____ influence. If we do not personally know the people of a country we are apt to misjudge them even (4) _____ than otherwise, and (5) _____ them entirely alien and different.

SubQuestion No : 16

Q.16 Select the most appropriate option to fill in blank number 1.

- Ans
- 1. will influence
 - 2. is influenced
 - 3. is influencing
 - 4. influenced

Question ID : 26433092117

Status : Answered

Chosen Option : 1

Comprehension:

In the following passage, some words have been deleted. Read the passage carefully and select the most appropriate option to fill in each blank.

Inevitably, my approach will often be a personal one; how the idea grew in my mind, what shapes it took, how it (1) _____ me and affected my action. There will also be some (2) _____ personal experiences which have nothing to do with the subject in its wider aspects, but which coloured my mind and influenced my approach to the whole problem. Our judgments of countries and peoples are based on many factors; among them our personal contacts, if there have been any, have a (3) _____ influence. If we do not personally know the people of a country we are apt to misjudge them even (4) _____ than otherwise, and (5) _____ them entirely alien and different.

SubQuestion No : 17

Q.17 Select the most appropriate option to fill in blank number 2.

- Ans
- 1. entirety
 - 2. entirely
 - 3. entire
 - 4. untiredly

Question ID : 26433092118

Status : Answered

Chosen Option : 2

Comprehension:

In the following passage, some words have been deleted. Read the passage carefully and select the most appropriate option to fill in each blank.

Inevitably, my approach will often be a personal one; how the idea grew in my mind, what shapes it took, how it (1) _____ me and affected my action. There will also be some (2) _____ personal experiences which have nothing to do with the subject in its wider aspects, but which coloured my mind and influenced my approach to the whole problem. Our judgments of countries and peoples are based on many factors; among them our personal contacts, if there have been any, have a (3) _____ influence. If we do not personally know the people of a country we are apt to misjudge them even (4) _____ than otherwise, and (5) _____ them entirely alien and different.

SubQuestion No : 18

Q.18 Select the most appropriate option to fill in blank number 3.

- Ans 1. marked
 2. marking
 3. marks
 4. mark

Question ID : 26433092119
Status : Answered
Chosen Option : 1

Comprehension:

In the following passage, some words have been deleted. Read the passage carefully and select the most appropriate option to fill in each blank.

Inevitably, my approach will often be a personal one; how the idea grew in my mind, what shapes it took, how it (1) _____ me and affected my action. There will also be some (2) _____ personal experiences which have nothing to do with the subject in its wider aspects, but which coloured my mind and influenced my approach to the whole problem. Our judgments of countries and peoples are based on many factors; among them our personal contacts, if there have been any, have a (3) _____ influence. If we do not personally know the people of a country we are apt to misjudge them even (4) _____ than otherwise, and (5) _____ them entirely alien and different.

SubQuestion No : 19

Q.19 Select the most appropriate option to fill in blank number 4.

- Ans 1. most
 2. very much
 3. much
 4. more

Question ID : 26433092120
Status : Answered
Chosen Option : 4

Comprehension:

In the following passage, some words have been deleted. Read the passage carefully and select the most appropriate option to fill in each blank.

Inevitably, my approach will often be a personal one; how the idea grew in my mind, what shapes it took, how it (1) _____ me and affected my action. There will also be some (2) _____ personal experiences which have nothing to do with the subject in its wider aspects, but which coloured my mind and influenced my approach to the whole problem. Our judgments of countries and peoples are based on many factors; among them our personal contacts, if there have been any, have a (3) _____ influence. If we do not personally know the people of a country we are apt to misjudge them even (4) _____ than otherwise, and (5) _____ them entirely alien and different.

SubQuestion No : 20

Q.20 Select the most appropriate option to fill in blank number 5.

- Ans 1. consider
 2. had considered
 3. considered
 4. to consider

Question ID : 26433092121
Status : Answered
Chosen Option : 1

Section : Part-D-Hindi

Q.1 एक साथ प्रयुक्त होने वाला कौन-सा समानार्थी शब्द निम्न वाक्य के लिए उपयुक्त होगा?
साधु संत _____ भोजन से खूब संतुष्ट होते हैं।

- Ans 1. घास - पात
 2. घिसा - पिटा
 3. शाक - भाजी
 4. मांस - मछली

Question ID : 26433079244
Status : Not Answered
Chosen Option : --

Q.2 निम्नलिखित वाक्य के किस शब्द में अशुद्धि है?
दिल्ली से जयपूर तक चौड़ी सड़क है।

- Ans 1. चौड़ी
 2. दिल्ली
 3. सड़क
 4. जयपूर

Question ID : 26433066752
Status : Not Answered
Chosen Option : --

Q.3 'वह गाड़ी के पास सो रहा है।'
अनिश्चयवाचक सर्वनाम का प्रयोग कर इस वाक्य को पुनः लिखिए।

- Ans
- 1. वे गाड़ी के पास सो रहे हैं।
 - 2. कौन गाड़ी के पास सो रहा है?
 - 3. कोई गाड़ी के पास सो रहा है।
 - 4. वह स्वयं गाड़ी के पास सो रहा है।

Question ID : 26433066979
Status : Not Answered
Chosen Option : --

Q.4 निम्नलिखित में से कौन सा शब्द भाववाचक संज्ञा नहीं है?

- Ans
- 1. लघुता
 - 2. आलस्य
 - 3. समृद्धि
 - 4. सजावट

Question ID : 26433085027
Status : Not Answered
Chosen Option : --

Q.5 'असफल' का विलोम शब्द क्या होगा?

- Ans
- 1. विगत
 - 2. निष्फल
 - 3. विफल
 - 4. सफल

Question ID : 26433085078
Status : Not Answered
Chosen Option : --

Q.6 निम्न वाक्यांश के लिए एक शब्द क्या होगा?
जो सब कुछ जानता है

- Ans
- 1. समान
 - 2. सर्वज्ञ
 - 3. सामाजिक
 - 4. सर्वस्व

Question ID : 26433070090
Status : Not Answered
Chosen Option : --

Q.7 पवन तेज गति से चल रही है।
उपरोक्त वाक्य के रेखांकित पद का पर्यायवाची किस विकल्प में है?

- Ans
- 1. मोषक
 - 2. मृगवाहन
 - 3. अयन
 - 4. दुश्मन

Question ID : 26433079183
Status : Not Answered
Chosen Option : --

Q.8 दिए गए मुहावरे में रेखांकित अंश के स्थान पर सबसे उपयुक्त विकल्प कौन-सा होगा?
गज भर की मकान होना।

- Ans
- 1. जुबान
 - 2. पहचान
 - 3. दुकान
 - 4. दीवार

Question ID : 26433066742
Status : Not Answered
Chosen Option : --

Q.9 निम्न में से किस वाक्य में 'निजी' के सही पर्यायवाची शब्द का प्रयोग हुआ है?

- Ans
- 1. राघव सामाजिक कार्यों में रूचि लेता है।
 - 2. विनय अत्यंत सभ्य है।
 - 3. आज प्रत्येक व्यक्ति वैयक्तिक लाभ के पीछे दौड़ रहा है।
 - 4. इस प्रकार के कार्यों से ही देश का सर्वांगीण विकास होगा।

Question ID : 26433067012
Status : Not Answered
Chosen Option : --

Q.10 'अपने मुंह _____ बनना' इस मुहावरे को पूरा करें।

- Ans
- 1. सुंदर
 - 2. मियां मिट्टू
 - 3. चालाक
 - 4. अच्छा

Question ID : 26433066818
Status : Not Answered
Chosen Option : --

Q.11 "अभ्युदय दिल्ली की किताबें लाकर पढ़ता है।"
उपरोक्त वाक्य में कारक सम्बन्धी त्रुटि पहचानकर निम्नलिखित में से शुद्ध वाक्य का चयन कीजिए।

- Ans
- 1. अभ्युदय दिल्ली के किताबें लाकर पढ़ता है।
 - 2. अभ्युदय दिल्ली से किताबें लाकर पढ़ता है।
 - 3. अभ्युदय दिल्ली को किताबें लाकर पढ़ता है।
 - 4. अभ्युदय दिल्ली पर किताबें लाकर पढ़ता है।

Question ID : 26433066966
Status : Not Answered
Chosen Option : --

Q.12 'यज्ञशाला _____।'।
उपर्युक्त वाक्य में रिक्त स्थान के लिए उपयुक्त विकल्प निम्न में से क्या होगा?

- Ans
- 1. वह स्थान है, जहां न्याय किया जाता है
 - 2. वह स्थान है, जहां हवन किया जाता है
 - 3. वह स्थान है, जहां बैठकर चर्चा होती है
 - 4. वह स्थान है, जहां व्यायाम होता है

Question ID : 26433067047
Status : Not Answered
Chosen Option : --

Q.13 दिए गए वाक्य में रेखांकित अंश के स्थान पर सबसे उपयुक्त विकल्प कौन-सा होगा?
दुर्गा के अनेकों नाम हैं।

- Ans
- 1. करोड़ों
 - 2. अनेक
 - 3. बहुतों
 - 4. लाखों

Question ID : 26433066717
Status : Not Answered
Chosen Option : --

Q.14 निम्नलिखित वाक्य का शुद्ध रूप किस वाक्य में लिखा गया है?
'गोपाल ने रसगुल्ले या जलेबी खाया।'

- Ans
- 1. गोपाल ने रसगुल्ला या जलेबी खायी।
 - 2. गोपाल ने रसगुल्ले या जलेबी खाए।
 - 3. गोपाल ने रसगुल्ला या जलेबी खाया।
 - 4. गोपाल ने रसगुल्ला या जलेबी खायीं।

Question ID : 26433079236
Status : Not Answered
Chosen Option : --

Q.15 'बिना पलक गिराए' वाक्यांश के लिए सार्थक शब्द है-

- Ans 1. पलक
 2. अपलक
 3. बंधक
 4. निद्रा

Question ID : 26433062229

Status : Not Answered

Chosen Option : --

Comprehension:

निम्न गद्यांश के आधार पर प्रश्न संख्या 1-5 के उत्तर दीजिए।
दूर संचार के साधनों को 1. _____ कहा जाता है। किसी भी देश के 2. _____ दूरसंचार के विकसित साधनों की अहम भूमिका रहती है। 3. _____ को जल्दी-से-जल्दी भेजने या प्राप्त करने के लिए मनुष्य पुरातन काल से ही साधन खोजता आ रहा है। पुरातन काल में संदेश भेजने के लिए हम 4. _____ सहायता लिया करते थे। कवियों की कल्पना के संदेशवाहक मेघ व चंद्रमा थे। समय के परिवर्तन के फलस्वरूप विज्ञान के क्षेत्र में आई क्रांति के कारण कबूतरों के स्थान पर आकाश में 5. _____ उड़ने लगे, ऊँट एवं घोड़ों का स्थान रेल एवं मोटर गाड़ियों ने ले लिया, मेघदूत के स्थान पर प्रयोग की जाने लगी रेडियो व सूक्ष्म तरंगें तथा चंद्रमा का स्थान ले लिया कृत्रिम उपग्रहों ने।

SubQuestion No : 16

Q.16 गद्यांश में दिए गए रिक्त स्थान 1 के लिए सर्वाधिक उपयुक्त शब्द का चयन विकल्पों में से कीजिए।

- Ans 1. 'वर्तमान समाज का स्नायुत्रं'
 2. 'सबका साथ'
 3. 'बेईमान व्यक्ति'
 4. 'ईमानदार व्यक्ति'

Question ID : 26433086293

Status : Not Answered

Chosen Option : --

Comprehension:

निम्न गद्यांश के आधार पर प्रश्न संख्या 1-5 के उत्तर दीजिए।
दूर संचार के साधनों को 1. _____ कहा जाता है। किसी भी देश के 2. _____ दूरसंचार के विकसित साधनों की अहम भूमिका रहती है। 3. _____ को जल्दी-से-जल्दी भेजने या प्राप्त करने के लिए मनुष्य पुरातन काल से ही साधन खोजता आ रहा है। पुरातन काल में संदेश भेजने के लिए हम 4. _____ सहायता लिया करते थे। कवियों की कल्पना के संदेशवाहक मेघ व चंद्रमा थे। समय के परिवर्तन के फलस्वरूप विज्ञान के क्षेत्र में आई क्रांति के कारण कबूतरों के स्थान पर आकाश में 5. _____ उड़ने लगे, ऊँट एवं घोड़ों का स्थान रेल एवं मोटर गाड़ियों ने ले लिया, मेघदूत के स्थान पर प्रयोग की जाने लगी रेडियो व सूक्ष्म तरंगें तथा चंद्रमा का स्थान ले लिया कृत्रिम उपग्रहों ने।

SubQuestion No : 17

Q.17 गद्यांश में दिए गए रिक्त स्थान 2 के लिए सर्वाधिक उपयुक्त शब्द का चयन विकल्पों में से कीजिए।

- Ans 1. समसामयिक परिवेश
 2. साहित्यिक परिवेश
 3. आर्थिक विकास में
 4. सामाजिक भूमिका

Question ID : 26433086294

Status : Not Answered

Chosen Option : --

Comprehension:

निम्न गद्यांश के आधार पर प्रश्न संख्या 1-5 के उत्तर दीजिए।
दूर संचार के साधनों को 1. _____ कहा जाता है। किसी भी देश के 2. _____ दूरसंचार के विकसित साधनों की अहम भूमिका रहती है। 3. _____ को जल्दी-से-जल्दी भेजने या प्राप्त करने के लिए मनुष्य पुरातन काल से ही साधन खोजता आ रहा है। पुरातन काल में संदेश भेजने के लिए हम 4. _____ सहायता लिया करते थे। कवियों की कल्पना के संदेशवाहक मेघ व चंद्रमा थे। समय के परिवर्तन के फलस्वरूप विज्ञान के क्षेत्र में आई क्रांति के कारण कबूतरों के स्थान पर आकाश में 5. _____ उड़ने लगे, ऊँट एवं घोड़ों का स्थान रेल एवं मोटर गाड़ियों ने ले लिया, मेघदूत के स्थान पर प्रयोग की जाने लगी रेडियो व सूक्ष्म तरंगें तथा चंद्रमा का स्थान ले लिया कृत्रिम उपग्रहों ने।

SubQuestion No : 18

Q.18 गद्यांश में दिए गए रिक्त स्थान 3 के लिए सर्वाधिक उपयुक्त शब्द का चयन विकल्पों में से कीजिए।

- Ans
- 1. आकलन/प्राकलन
 - 2. संकल्प/विकल्प
 - 3. रिक्तियों/विकल्पों
 - 4. सूचनाओं/समाचारों

Question ID : 26433086295

Status : Not Answered

Chosen Option : --

Comprehension:

निम्न गद्यांश के आधार पर प्रश्न संख्या 1-5 के उत्तर दीजिए।
दूर संचार के साधनों को 1. _____ कहा जाता है। किसी भी देश के 2. _____ दूरसंचार के विकसित साधनों की अहम भूमिका रहती है। 3. _____ को जल्दी-से-जल्दी भेजने या प्राप्त करने के लिए मनुष्य पुरातन काल से ही साधन खोजता आ रहा है। पुरातन काल में संदेश भेजने के लिए हम 4. _____ सहायता लिया करते थे। कवियों की कल्पना के संदेशवाहक मेघ व चंद्रमा थे। समय के परिवर्तन के फलस्वरूप विज्ञान के क्षेत्र में आई क्रांति के कारण कबूतरों के स्थान पर आकाश में 5. _____ उड़ने लगे, ऊँट एवं घोड़ों का स्थान रेल एवं मोटर गाड़ियों ने ले लिया, मेघदूत के स्थान पर प्रयोग की जाने लगी रेडियो व सूक्ष्म तरंगें तथा चंद्रमा का स्थान ले लिया कृत्रिम उपग्रहों ने।

SubQuestion No : 19

Q.19 गद्यांश में दिए गए रिक्त स्थान 4 के लिए सर्वाधिक उपयुक्त शब्द का चयन विकल्पों में से कीजिए।

- Ans
- 1. इन्टरनेट, सोशल मीडिया
 - 2. कबूतर, ऊँट, घोड़ों तथा अन्य जानवरों की
 - 3. फोन, मोबाईल
 - 4. आवाज देकर, बुलाकर

Question ID : 26433086296

Status : Not Answered

Chosen Option : --

Comprehension:

निम्न गद्यांश के आधार पर प्रश्न संख्या 1-5 के उत्तर दीजिए।

दूर संचार के साधनों को 1. _____ कहा जाता है। किसी भी देश के 2. _____ दूरसंचार के विकसित साधनों की अहम भूमिका रहती है। 3. _____ को जल्दी-से-जल्दी भेजने या प्राप्त करने के लिए मनुष्य पुरातन काल से ही साधन खोजता आ रहा है। पुरातन काल में संदेश भेजने के लिए हम 4. _____ सहायता लिया करते थे। कवियों की कल्पना के संदेशवाहक मेघ व चंद्रमा थे। समय के परिवर्तन के फलस्वरूप विज्ञान के क्षेत्र में आई क्रांति के कारण कबूतरों के स्थान पर आकाश में 5. _____ उड़ने लगे, ऊँट एवं घोड़ों का स्थान रेल एवं मोटर गाड़ियों ने ले लिया, मेघदूत के स्थान पर प्रयोग की जाने लगी रेडियो व सूक्ष्म तरंगें तथा चंद्रमा का स्थान ले लिया कृत्रिम उपग्रहों ने।

SubQuestion No : 20

Q.20 गद्यांश में दिए गए रिक्त स्थान 5 के लिए सर्वाधिक उपयुक्त शब्द का चयन विकल्पों में से कीजिए।

- Ans
- 1. ट्रैक्टर
 - 2. बैलगाड़ी
 - 3. वायुयान
 - 4. बस

Question ID : 26433086297

Status : Not Answered

Chosen Option : --

WWW.GOV TJOB SALES