

Constable GD in CAPFs SSF Rifleman GD in Assam Rifles and Sepoy in NCB Examination 2022

Roll Number	www.govtjobsalert.in
Candidate Name	www.govtjobsalert.in
Venue Name	Pawan Online Solutions
Exam Date	27/01/2023
Exam Time	11:45 AM - 12:45 PM
Subject	Constable GD Examination 2022

Section : **Part-A-General Intelligence and Reasoning**

Q.1 Read the given statements and conclusions carefully. Assuming that the information given in the statements is true, even if it appears to be at variance with commonly known facts, decide which of the given conclusions logically follow(s) from the statements.

Statements:

- All rats are lions
- Some rats are jackals
- No jackal is mongoose

Conclusions:

- I. Some jackals are lions
- II. Some rats are not mongoose
- III. No mongoose is a lion

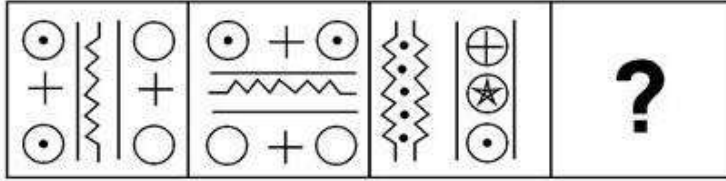
- Ans** 1. Both conclusions I and II follow
 2. Only conclusion I follows
 3. Only conclusion II follows
 4. Neither conclusion I, II or III follows

Question ID : 26433082662

Status : Answered

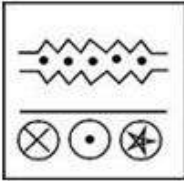
Chosen Option : 1

Q.2 Find the options which is related to the third figure in the same manner as second figure is related with the first figure.
(First figure is the leftmost figure.)

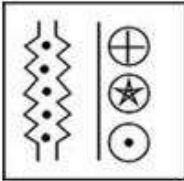


Ans

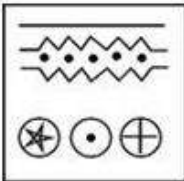
✗ 1.



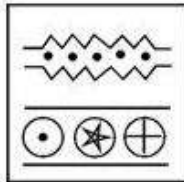
✗ 2.



✗ 3.



✓ 4.



Question ID : 26433078864

Status : Answered

Chosen Option : 4

Q.3 Which of the following letter-clusters will replace the question mark (?) in the given series?

SFJW, QHLU, ?, MLPQ, KNRO

Ans

✗ 1. PJNS

✗ 2. OKNR

✗ 3. PJNR

✓ 4. OJNS

Question ID : 26433076446

Status : Answered

Chosen Option : 4

Q.4 In a certain code language, 'BORED' is written as 'YLIVW' and 'FIGHT' is written as 'URTSG'. How will 'PRINT' be written in that language?

- Ans
- 1. FIRNK
 - 2. FJTNK
 - 3. KIRMG
 - 4. KJSMG

Question ID : 26433081511
Status : Answered
Chosen Option : 3

Q.5 In a code language, 'corrupt men' is coded as 'vu ka', 'he is corrupt' is coded as 'hu na vu', 'she is serious' is coded as 'po na du', and 'she faints' is coded as 'po gu'. What is the code for the word 'serious'?

- Ans
- 1. hu
 - 2. vu
 - 3. gu
 - 4. du

Question ID : 26433069467
Status : Answered
Chosen Option : 2

Q.6 Which of the following numbers will replace the question marks (?) in the given series?

156, 144, 133, 123, 114, ?, 99, ?, 88, 84

- Ans
- 1. 110, 90
 - 2. 109, 91
 - 3. 107, 94
 - 4. 106, 93

Question ID : 26433082867
Status : Answered
Chosen Option : 3

Q.7 Which option represents the correct order of the given words as they would appear in the English dictionary?

- 1 branch
- 2 brunch
- 3 bracket
- 4 brass
- 5 bread

- Ans
- 1. 3,1,4,2,5
 - 2. 3,1,5,4,2
 - 3. 1,3,4,5,2
 - 4. 3,1,4,5,2

Question ID : 26433069297
Status : Answered
Chosen Option : 4

Q.8 Which two signs, from the given options, should be interchanged to make the given equation correct?

$$210 \div 7 \times 320 \div (16 - 4 \times 15 \times 17) = 15 + 5$$

- Ans
- 1. + and -
 - 2. \times and \div
 - 3. \times and +
 - 4. \div and +

Question ID : 26433082487

Status : **Not Attempted and Marked For Review**

Chosen Option : --

Q.9 Six friends P, Q, R, S, T and U are sitting around a circular table facing the centre. P sits second to the right of U. R sits third to the right of Q. S and R both are the immediate neighbours of P. Who sits between Q and U?

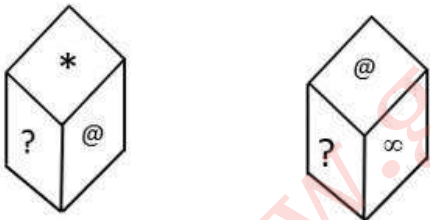
- Ans
- 1. T
 - 2. P
 - 3. R
 - 4. S

Question ID : 26433092773

Status : **Answered**

Chosen Option : 1

Q.10 Two different positions of the same dice, with the symbols *, ?, @, %, \$, ∞ , are shown. Find the symbol on the face opposite the face showing '*'.



- Ans
- 1. ∞
 - 2. \$
 - 3. @
 - 4. %

Question ID : 26433089511

Status : **Answered**

Chosen Option : 1

Q.11 Select the correct mirror image of the given figure when the mirror is placed at MN as shown below.

cALculATiVe |
M
N

Ans

1. eViTAlUcIAc
2. eViTAluCIAc
3. eViTAlucIAc
4. eViTAluCIAc

Question ID : 26433085551

Status : Answered

Chosen Option : 4

Q.12 P @ Q का अर्थ है 'P, Q की बहन है'
P & Q का अर्थ है 'P, Q का भाई है'
P # Q का अर्थ है 'P, Q की माता है'
यदि A # B @ C & D # E @ F है, तो B, F से किस प्रकार संबंधित है?

Ans

1. नानी
2. मौसी
3. भाई
4. बहन

Question ID : 26433081684

Status : Answered

Chosen Option : 2

Q.13 Which letter-cluster will replace the question mark (?) to complete the given series?
DFGI, JLMO, PRSU, VXYA, ?

Ans

1. BCDE
2. BDEF
3. BCFG
4. BDEG

Question ID : 26433067725

Status : Answered

Chosen Option : 4

Q.14 Which of the following numbers will replace the question mark (?) in the given series?
3840, 384, ?, 8, 2, 1

Ans 1. 48

2. 28

3. 38

4. 58

Question ID : 26433076747

Status : Answered

Chosen Option : 1

Q.15 Seven people, E, F, G, H, I, J and K are sitting in a straight row, facing north. H is sitting fourth to the left of I. K is sitting third to the left of F. J is sitting third to the right of F. G is sitting fourth to the right of K. Who sits at the third position from the left end of the row?

Ans 1. F

2. G

3. H

4. E

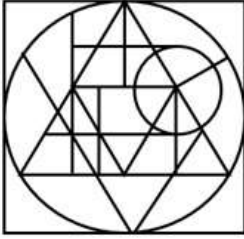
Question ID : 26433068280

Status : Answered

Chosen Option : 4

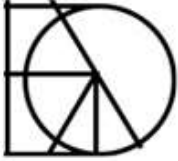
WWW.GOVtJOBSAlert.in

Q.16 Select the option figure which is embedded in the given figure. (Rotation is NOT allowed).

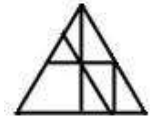


Ans

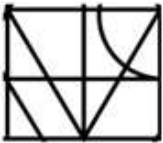
✗ 1.



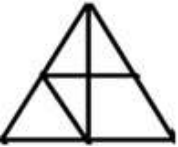
✓ 2.



✗ 3.



✗ 4.



Question ID : 26433076579

Status : Answered

Chosen Option : 2

Q.17 Select the option that is related to the third term in the same way as the second term is related to the first term.

GENERAL : 7514518112 :: RELATION : ?

Ans ✗ 1. 78905621

✗ 2. 17865432

✗ 3. 198765432

✓ 4. 1851212091514

Question ID : 26433067265

Status : Answered

Chosen Option : 4

Q.18 Select the option that is related to the third number in the same way as the second number is related to the first number and the sixth number is related to the fifth number.

4 : 96 :: 13 : ? :: 9 : 161

Ans 1. 247

2. 249

3. 169

4. 240

Question ID : 26433069190

Status : Not Attempted and
Marked For Review

Chosen Option : --

Q.19 उस विकल्प का चयन करें जो तीसरे शब्द से उसी प्रकार संबंधित है, जिस प्रकार दूसरा शब्द पहले शब्द से संबंधित है।

(शब्दों को अर्थपूर्ण शब्दों के रूप में माना जाना चाहिए और शब्द में अक्षरों की संख्या/व्यंजनों की संख्या/स्वरों की संख्या के आधार पर उन्हें एक-दूसरे से संबंधित नहीं किया जाना चाहिए)

मुर्गी : चूजा :: तितली : ?

Ans 1. हिरण का बच्चा

2. इल्ली

3. बिल्ली का बच्चा

4. बछड़ा

Question ID : 26433082577

Status : Answered

Chosen Option : 2

Q.20 Which two signs should be interchanged to make the below equation mathematically correct?

$30 + 54 \div 18 - 48 \times 16 = 58$

Ans 1. \times and $+$

2. $+$ and $+$

3. $+$ and \times

4. $+$ and $-$

Question ID : 264330117542

Status : Answered

Chosen Option : 1

Section : Part-B-General Knowledge and General awareness

Q.1 Which scheme was launched by Indian government for creation of self employment opportunities for unemployed educated youth?

Ans 1. National Rural Employment Guarantee Act

2. Annapurna scheme

3. Grameen Udyami Yojana

4. Pradhan Mantri Rozgar Yojana

Question ID : 264330116067

Status : Answered

Chosen Option : 4

Q.2 Who among the following was the founder of the Mauryan Empire?

Ans 1. Samudragupta

2. Chandragupta Maurya

3. Ashoka

4. Chandragupta II

Question ID : 26433090571

Status : Answered

Chosen Option : 2

Q.3 $\text{Fe} + \text{CuSO}_4 \rightarrow \text{FeSO}_4 + \text{Cu}$

This is an example of _____ reaction.

Ans 1. displacement

2. redox

3. neutralisation

4. reversible

Question ID : 264330115163

Status : Answered

Chosen Option : 1

Q.4 Garba folk dance belongs to which of the following states of India?

Ans 1. Madhya Pradesh

2. Maharashtra

3. Gujarat

4. Rajasthan

Question ID : 26433074072

Status : Answered

Chosen Option : 3

Q.5 Which state of India hosted the 2015 National Games of India?

Ans 1. Goa

2. Haryana

3. Kerala

4. Gujarat

Question ID : 264330115923

Status : Not Answered

Chosen Option : --

Q.6 In 2019-20, India had _____ km of broad gauge railway lines.

- Ans
- 1. 73400
 - 2. 65700
 - 3. 63950
 - 4. 61200

Question ID : 264330115392
Status : Not Answered
Chosen Option : --

Q.7 In India, Information Technology Act was passed in the year _____.

- Ans
- 1. 2000
 - 2. 2001
 - 3. 2008
 - 4. 2005

Question ID : 264330116213
Status : Answered
Chosen Option : 1

Q.8 ब्रिटिश औपनिवेशिक शासन के तहत भारत की अर्थव्यवस्था मूल रूप से कृषि प्रधान रही। उस समय देश की लगभग कितने प्रतिशत जनसंख्या कृषि से प्रत्यक्ष या अप्रत्यक्ष रूप से आजीविका प्राप्त करती थी?

- Ans
- 1. 65
 - 2. 85
 - 3. 60
 - 4. 70

Question ID : 264330116147
Status : Answered
Chosen Option : 3

Q.9 Which Indian Cricketer is known as "The Wall" ?

- Ans
- 1. Sachin Tendulkar
 - 2. Harbhajan Singh
 - 3. Mahendra Singh Dhoni
 - 4. Rahul Dravid

Question ID : 264330116281
Status : Answered
Chosen Option : 4

Q.10 निम्नलिखित उदाहरण में, प्राथमिक मांसाहारी कौन है?
घास-टिड्डा-मेंढक-सांप-बाज़

- Ans
- 1. बाज़
 - 2. घास
 - 3. टिड्डा
 - 4. मेंढक

Question ID : 264330115195
Status : Answered
Chosen Option : 1

Q.11 Who among the following was elected as the President of Board of Control for Cricket in India(BCCI) in October 2022?

- Ans
- 1. Roger Binny
 - 2. Virat Kohli
 - 3. Sourav Ganguly
 - 4. Jay Shah

Question ID : 264330114928
Status : Answered
Chosen Option : 1

Q.12 India's first lavender festival was inaugurated in _____ in May 2022.

- Ans
- 1. Delhi
 - 2. Kerala
 - 3. Jammu and Kashmir
 - 4. Assam

Question ID : 264330115104
Status : Answered
Chosen Option : 2

Q.13 He wrote 'Vande Mataram' as a hymn to the motherland. Who is 'he' referred to?

- Ans
- 1. Bankim Chandra Chattopadhyay
 - 2. Aurobindo Ghosh
 - 3. Jawaharlal Nehru
 - 4. Ravindranath Tagore

Question ID : 264330115719
Status : Answered
Chosen Option : 1

Q.14 What should be the minimum age for being a member of Lok Sabha?

Ans 1. 25

2. 30

3. 32

4. 35

Question ID : 26433086845

Status : Answered

Chosen Option : 1

Q.15 C_2H_5OH is the chemical formula of _____.

Ans 1. propene

2. methane

3. butyne

4. ethanol

Question ID : 26433091491

Status : Answered

Chosen Option : 4

Q.16 निम्नलिखित में से कौन सा एक कृषि आधारित उद्योग है?

Ans 1. लोहा तथा इस्पात

2. रेशम वस्त्र

3. सीमेंट

4. पेट्रोसायन

Question ID : 264330115576

Status : Answered

Chosen Option : 2

Q.17 Who, in August 2022, was appointed as the Secretary to the President of India?

Ans 1. IFS Vivek Kumar

2. IAS Rajesh Verma

3. Dr. Hiren Joshi

4. IFS Sanjeev Kumar Singla

Question ID : 264330115032

Status : Not Answered

Chosen Option : --

Q.18 कलामंडलम रमनकुट्टी नायर को किस नृत्य शैली में उनके योगदान के लिए पद्म भूषण से सम्मानित किया गया।

- Ans 1. कथकली
 2. लावणी
 3. कथक
 4. मणिपुरी

Question ID : 264330115867
Status : Answered
Chosen Option : 1

Q.19 The _____ committee was set up to make recommendations about the fundamental duties.

- Ans 1. Balwant Ray Mehta
 2. Swaminathan
 3. Bibek Debroy
 4. Swaran Singh

Question ID : 26433090665
Status : Answered
Chosen Option : 4

Q.20 All banks which are included in the _____ Schedule to the Reserve Bank of India Act, 1934 are Scheduled Banks.

- Ans 1. third
 2. fifth
 3. second
 4. first

Question ID : 264330115329
Status : Answered
Chosen Option : 1

Section : Part-C-Elementary Mathematics

Q.1 One third of a journey is covered at the rate of 30 km/h, one fourth at the rate of 50 km/h and the rest at 60 km/h. Find the average speed for the whole journey. (Correct to 2 decimal places)

- Ans 1. 43.37 km/h
 2. 45.37 km/h
 3. 44.37 km/h
 4. 42.37 km/h

Question ID : 26433080154
Status : Not Answered
Chosen Option : --

Q.2 If $27 : 81 :: x : 63$, then find the value of x .

- Ans
- 1. 27
 - 2. 36
 - 3. 42
 - 4. 21

Question ID : 26433079774
Status : Answered
Chosen Option : 4

Q.3 A solid metallic sphere of radius 21 cm is melted and moulded into small right circular cones, each of radius 7 cm and height of 3 cm. The number of such cones is:

- Ans
- 1. 186
 - 2. 126
 - 3. 252
 - 4. 224

Question ID : 26433075487
Status : Answered
Chosen Option : 3

Q.4 Which of the following ratios is the greatest?

$$\frac{3}{4}, \frac{1}{2}, \frac{7}{8} \text{ and } \frac{5}{6}$$

- Ans
- 1. $\frac{5}{6}$
 - 2. $\frac{3}{4}$
 - 3. $\frac{1}{2}$
 - 4. $\frac{7}{8}$

Question ID : 26433076007
Status : Answered
Chosen Option : 4

Q.5 The LCM of 30, 36 and 40 is divided by 10. The result is X's square. Find the value of X.

Ans 1. 4

2. 6

3. 5

4. 7

Question ID : 264330116645

Status : Answered

Chosen Option : 2

Q.6 A silver shop owner claims that he is selling silver at ₹65/g when cost price is ₹70/g, but he is giving 900 mg instead of 1 g. The percentage of profit or loss of the shop owner (correct to 2 decimal places) is:

Ans 1. Profit 3.17%

2. Loss 3.27%

3. Loss 3.12%

4. Profit 3.07%

Question ID : 26433079931

Status : Not Answered

Chosen Option : --

Q.7 If 6 men can complete a work in 4 days and 3 women can complete the same work in 7 days, then find the time taken to complete same work by 8 men and 3 women.

Ans 1. $\frac{22}{15}$ days

2. $\frac{24}{13}$ days

3. $\frac{25}{12}$ days

4. $\frac{21}{10}$ days

Question ID : 26433066322

Status : Not Answered

Chosen Option : --

Q.8 रवि और सुहास क्रमशः 2 km/h और 4 km/h की चाल से A से B तक चलते हैं जिनके बीच की दूरी 24 km है। सुहास B पर पहुँचता है, और तुरंत वापस लौटता है और C पर रवि से मिलता है। A से C के बीच की दूरी ज्ञात कीजिए।

Ans 1. 20 km

2. 12 km

3. 16 km

4. 15 km

Question ID : 26433065097

Status : Answered

Chosen Option : 2

Q.9 The population of a village increased from 90000 to 98000 in 1 year. Find the rate of growth of population. (Rounded off to one decimal place)

- Ans
- 1. 7.6%
 - 2. 8.9%
 - 3. 6.2%
 - 4. 9.2%

Question ID : 26433080043
Status : Answered
Chosen Option : 2

Q.10 Arun applied for a job of English teacher in a school. In the test for the job, he scored 9 in speaking, 8 in listening, 6 in writing, and 7 in interview. For calculating the final score, weights of 4, 3, 3 and 4 were assigned to speaking, listening, writing and interview respectively. What is the weighted average score of Arun? (Round off to two decimal places)

- Ans
- 1. 7.75
 - 2. 6.95
 - 3. 7.57
 - 4. 7.45

Question ID : 26433082496
Status : Not Answered
Chosen Option : --

Q.11 A shopkeeper offers the following three discount schemes. Which scheme(s) has/have the maximum discount percentage?

- I. Two successive discounts of 5% and 20%
- II. Buy 6, get 2 free
- III. Buy 6, get 4 free

- Ans
- 1. Only I and II
 - 2. Only I
 - 3. Only III
 - 4. Only II

Question ID : 26433082975
Status : Answered
Chosen Option : 3

Q.12 A certain sum becomes ₹26,980 in 3 years and ₹40,280 in 8 years at simple interest. Find the rate of interest.

- Ans
- 1. 14%
 - 2. 12%
 - 3. 13%
 - 4. 11%

Question ID : 26433066244
Status : Not Answered
Chosen Option : --

Q.13 The difference between a discount of 30% and two successive discounts of 17% and 13% on Rs.5,000 is _____.

- Ans
- 1. Rs.110.50
 - 2. Rs.1,389.50
 - 3. Rs.850.00
 - 4. Rs.539.50

Question ID : 26433080317
Status : Not Answered
Chosen Option : --

Q.14 If the radius of the base and the slant height of a cone are 13 cm and 35 cm respectively, then what is the curved surface area of the cone?

- Ans
- 1. 1484 cm^2
 - 2. 1470 cm^2
 - 3. 1440 cm^2
 - 4. 1430 cm^2

Question ID : 26433075707
Status : Answered
Chosen Option : 4

Q.15 Sanju can do a piece of work in 17 days and Rohan can do the same work in 68 days. Find the time required to complete the same work if they are working on alternate days and Sanju starts the work on first day.

- Ans
- 1. $105/4$ days
 - 2. $41/4$ days
 - 3. $107/4$ days
 - 4. $109/4$ days

Question ID : 264330116897
Status : Not Answered
Chosen Option : --

Q.16 A child aged 8 years is weighs 20 kg. By the time the child is 15 years old, he weighs 42 kg. What is the percent increase in the weight?

- Ans
- 1. 100 percent
 - 2. 110 percent
 - 3. 120 percent
 - 4. 80 percent

Question ID : 264330116817
Status : Answered
Chosen Option : 2

Q.17 If $30 + 180 \div 30 \times 6 - 15 - 16 - 60 \div n - 15 = 0$, then the value of n is:

- Ans 1. 0
 2. 3
 3. 2
 4. 1

Question ID : 26433075488
Status : Answered
Chosen Option : 2

Q.18 Two sprinters cover the same distance at the speed of 18 km/h and 20 km/h, respectively. Find the distance travelled when one takes 15 minutes longer than the other.

- Ans 1. 40 km
 2. 45 km
 3. 42 km
 4. 46 km

Question ID : 26433075119
Status : Not Answered
Chosen Option : --

Q.19 Find the percentage concentration of wine in the wine–water solution having the ratio of 7 : 1 respectively.

- Ans 1. 76.3%
 2. 52.9%
 3. 87.5%
 4. 49.4%

Question ID : 26433080012
Status : Not Attempted and Marked For Review
Chosen Option : --

Q.20 A seller professes to sell his grapes at cost price but still gains $11\frac{1}{9}\%$ by using faulty weight . What weight does he use instead of 1 kg ?

- Ans 1. 900 g
 2. 10 g
 3. 850 g
 4. 990 g

Question ID : 26433074925
Status : Answered
Chosen Option : 1

Q.1 Select the most appropriate ANTONYM of the given word.

Witty

- Ans 1. Fashionable
 2. Stupid
 3. Interesting
 4. Smart

Question ID : 26433084895
Status : Not Answered
Chosen Option : --

Q.2 Select the most appropriate ANTONYM of the given word.

Honest

- Ans 1. Frank
 2. Open
 3. Corrupt
 4. Foolish

Question ID : 26433072811
Status : Not Answered
Chosen Option : --

Q.3 Select the most appropriate option that can substitute the underlined segment in the given sentence.

The waiters were quick to replenish their stock of food.

- Ans 1. look for
 2. fill up
 3. take back
 4. ask for

Question ID : 26433099876
Status : Not Answered
Chosen Option : --

Q.4 Identify the spelling error in the given sentence and select the option that rectifies the error.

It is necessary for candidates to carry their examination admit cards with them.

- Ans 1. examineition
 2. admit
 3. necessary
 4. candidets

Question ID : 26433060321
Status : Not Answered
Chosen Option : --

Q.5 Select the most appropriate homonym to fill in the blank.

The annual extraction of this _____ costs around \$10,000,000.

- Ans
- 1. o'er
 - 2. arc
 - 3. ore
 - 4. or

Question ID : 26433088436
Status : Not Answered
Chosen Option : --

Q.6 Select the most appropriate meaning of the given idiom.

Bury the hatchet

- Ans
- 1. To end a quarrel
 - 2. To convince someone
 - 3. To be in fear
 - 4. To face a risk

Question ID : 26433073703
Status : Not Answered
Chosen Option : --

Q.7 Parts of the following sentence have been given as options. One of them may contain an error. Select the part that contains the error from the given options. If you don't find any error, mark 'No error' as your answer.

Rover had eaten the pie before we gets home.

- Ans
- 1. we gets home
 - 2. Rover had eaten
 - 3. No error
 - 4. the pie before

Question ID : 26433090487
Status : Not Answered
Chosen Option : --

Q.8 Select the most appropriate synonym for the underlined word in the given sentence.

Her debonair combined with quick wit added to her oratory skills.

- Ans
- 1. charming
 - 2. corpulent
 - 3. amorous
 - 4. churlish

Question ID : 26433073751
Status : Not Answered
Chosen Option : --

Q.9 Select the most appropriate meaning of the given idiom.

Chew someone out

- Ans**
- 1. To tackle a difficulty
 - 2. To scold someone
 - 3. Make someone laugh
 - 4. To eat

Question ID : **26433073714**
Status : **Not Answered**
Chosen Option : --

Q.10 Select the most appropriate option to fill in the blank.
The farmer _____ up and saw a tractor approaching him.

- Ans**
- 1. sit
 - 2. looked
 - 3. bent
 - 4. cleared

Question ID : **26433085598**
Status : **Not Answered**
Chosen Option : --

Q.11 Select the most appropriate synonym of the word given in the bracket to fill in the blank.

You have _____ (built up) a lot of muscles by going to the gym.

- Ans**
- 1. enhanced
 - 2. elevated
 - 3. boosted
 - 4. gained

Question ID : **26433084621**
Status : **Not Answered**
Chosen Option : --

Q.12 Identify and correct the INCORRECTLY spelt word in the given sentence.
The monkeys were snatching food from the passengers in the bus.

- Ans**
- 1. monkeys
 - 2. snatching
 - 3. bas
 - 4. pasengers

Question ID : **26433072761**
Status : **Not Answered**
Chosen Option : --

Q.13 Select the most appropriate synonym of the underlined word from the given options.

My grandmother, a pious lady, died peacefully in her village.

- Ans 1. Devout
 2. Envious
 3. Attractive
 4. Gallant

Question ID : 26433086515
Status : Not Answered
Chosen Option : --

Q.14 Select the most appropriate option that can substitute the underlined segment in the given sentence. If there is no need to substitute it, select 'No substitution required'.

Men never have managed to abolish wars up to now but maybe they will find a way in future.

- Ans 1. have never managed
 2. never has managed
 3. will have never managed
 4. No substitution required

Question ID : 26433089091
Status : Not Answered
Chosen Option : --

Q.15 Select the correct word for the blanks in the given sentence.

Venga boys is a famous musical _____ of the country and Madhu gave me a _____ on my birthday.

- Ans 1. group
 2. band
 3. troop
 4. ring

Question ID : 26433060533
Status : Not Answered
Chosen Option : --

Comprehension:

In the following passage, some words have been deleted. Read the passage carefully and select the most appropriate option to fill in each blank.

The feeling of affection comes only if trust and respect are (1)_____. Without trust and respect, you feel that the other is (2)_____ to make you unhappy and/or does not wish well for you and hence you can never feel attraction for him/her. You always see each other as being in (3)_____. And that is why today in the family, you find that people have been living together for years and years and still don't feel (4)_____ to each other, because that basic trust and respect are missing. Affection comes when we (5)_____ that two or more persons want to make each other happy. Then for the first time, we feel that we are related to the other person. This feeling is called affection.

SubQuestion No : 16

Q.16 Select the most appropriate option to fill in blank number 1.

- Ans 1. verified
 2. constrained
 3. ensured
 4. confirmed

Question ID : 26433088527
Status : Not Answered
Chosen Option : --

Comprehension:

In the following passage, some words have been deleted. Read the passage carefully and select the most appropriate option to fill in each blank.

The feeling of affection comes only if trust and respect are (1)_____. Without trust and respect, you feel that the other is (2)_____ to make you unhappy and/or does not wish well for you and hence you can never feel attraction for him/her. You always see each other as being in (3)_____. And that is why today in the family, you find that people have been living together for years and years and still don't feel (4)_____ to each other, because that basic trust and respect are missing. Affection comes when we (5)_____ that two or more persons want to make each other happy. Then for the first time, we feel that we are related to the other person. This feeling is called affection.

SubQuestion No : 17

Q.17 Select the most appropriate option to fill in blank number 2.

- Ans 1. pressured
 2. trying
 3. hesitated
 4. shying

Question ID : 26433088528
Status : Not Answered
Chosen Option : --

Comprehension:

In the following passage, some words have been deleted. Read the passage carefully and select the most appropriate option to fill in each blank.

The feeling of affection comes only if trust and respect are (1)_____. Without trust and respect, you feel that the other is (2)_____ to make you unhappy and/or does not wish well for you and hence you can never feel attraction for him/her. You always see each other as being in (3)_____. And that is why today in the family, you find that people have been living together for years and years and still don't feel (4)_____ to each other, because that basic trust and respect are missing. Affection comes when we (5)_____ that two or more persons want to make each other happy. Then for the first time, we feel that we are related to the other person. This feeling is called affection.

SubQuestion No : 18

Q.18 Select the most appropriate option to fill in blank number 3.

- Ans 1. opposition
 2. business
 3. affection
 4. friendship

Question ID : 26433088529
Status : Not Answered
Chosen Option : --

Comprehension:

In the following passage, some words have been deleted. Read the passage carefully and select the most appropriate option to fill in each blank.

The feeling of affection comes only if trust and respect are (1)_____. Without trust and respect, you feel that the other is (2)_____ to make you unhappy and/or does not wish well for you and hence you can never feel attraction for him/her. You always see each other as being in (3)_____. And that is why today in the family, you find that people have been living together for years and years and still don't feel (4)_____ to each other, because that basic trust and respect are missing. Affection comes when we (5)_____ that two or more persons want to make each other happy. Then for the first time, we feel that we are related to the other person. This feeling is called affection.

SubQuestion No : 19

Q.19 Select the most appropriate option to fill in blank number 4.

- Ans 1. effected
 2. separated
 3. related
 4. affected

Question ID : 26433088530
Status : Not Answered
Chosen Option : --

Comprehension:

In the following passage, some words have been deleted. Read the passage carefully and select the most appropriate option to fill in each blank.

The feeling of affection comes only if trust and respect are (1)_____. Without trust and respect, you feel that the other is (2)_____ to make you unhappy and/or does not wish well for you and hence you can never feel attraction for him/her. You always see each other as being in (3)_____. And that is why today in the family, you find that people have been living together for years and years and still don't feel (4)_____ to each other, because that basic trust and respect are missing. Affection comes when we (5)_____ that two or more persons want to make each other happy. Then for the first time, we feel that we are related to the other person. This feeling is called affection.

SubQuestion No : 20

Q.20 Select the most appropriate option to fill in blank number 5.

- Ans
- 1. grant
 - 2. permit
 - 3. confess
 - 4. recognise

Question ID : 26433088531
Status : Not Answered
Chosen Option : --

Section : Part-D-Hindi

Q.1 'सारंग' निम्नलिखित में से किसका पर्यायवाची शब्द है?

- Ans
- 1. हिरण
 - 2. गथा
 - 3. सितार
 - 4. हंस

Question ID : 26433091171
Status : Answered
Chosen Option : 1

Q.2 निम्नलिखित वाक्य के किस शब्द में अशुद्धि है?
आगरा के निकट दो रेलगाड़ीयों की टक्कर हो गई।

- Ans
- 1. टक्कर
 - 2. आगरा
 - 3. रेलगाड़ीयों
 - 4. निकट

Question ID : 26433066766
Status : Answered
Chosen Option : 3

Q.3 'प्रतिभा' शब्द के समानार्थी शब्द से निम्न वाक्य में रिक्त स्थान की पूर्ति कीजिए।
विजय में _____ शक्ति प्रबल है।

- Ans
- 1. पाचन
 - 2. मेधा
 - 3. शारीरिक
 - 4. धारण

Question ID : 26433079240
Status : Answered
Chosen Option : 2

Q.4 निम्न वाक्य में रेखांकित शब्द का विलोम शब्द क्या होगा?
भारत विश्व का सबसे बड़ा 'लोकतंत्र' है।

- Ans
- 1. राजतंत्र
 - 2. भ्रष्टतंत्र
 - 3. जनता द्वारा शासन
 - 4. जनता का शासन

Question ID : 26433085074
Status : Answered
Chosen Option : 1

Q.5 निम्नलिखित वाक्यांश के लिए उपयुक्त सार्थक शब्द क्या होगा?
जिसने इंद्र पर विजय प्राप्त की हो

- Ans
- 1. इंद्र जीता
 - 2. इंद्रजीत
 - 3. इन्द्रजय
 - 4. इंद्र विजय

Question ID : 26433073311
Status : Answered
Chosen Option : 2

Q.6 निम्नलिखित में से कौन सा एक विशेषण शब्द नहीं है?

- Ans
- 1. दोगुना
 - 2. काला
 - 3. पुराना
 - 4. आप

Question ID : 26433085050
Status : Answered
Chosen Option : 4

Q.7 निम्नलिखित वाक्य में रेखांकित शब्द का पर्यायवाची शब्द क्या होगा?
'विनीत' होना सभी के बस की बात नहीं है।

- Ans
- 1. संजीविनी
 - 2. विनती
 - 3. सुशील
 - 4. लड़का

Question ID : 26433091338
Status : Answered
Chosen Option : 3

Q.8 निम्नलिखित मुहावरे का सही अर्थ क्या है?
छक्के छुड़ाना

- Ans
- 1. हरा देना
 - 2. भुला देना
 - 3. भला बुरा करना
 - 4. साफ कर देना

Question ID : 26433065768
Status : Answered
Chosen Option : 1

Q.9 निम्नलिखित मुहावरे के सही अर्थ का चयन विकल्पों में से कीजिए।
अगस्त्य का समुद्र पान

- Ans
- 1. दिमाग काम न करना
 - 2. असंभव कार्य करना
 - 3. समझ में कुछ न आना
 - 4. रहस्य छुपा रखना

Question ID : 26433070008
Status : Answered
Chosen Option : 1

Q.10 निम्न विकल्पों में से शुद्ध वाक्य का चयन कीजिए।

- Ans
- 1. मेरे पिताजी से रोटी नहीं खाई जाती।
 - 2. राम ने पढ़ता होगा।
 - 3. सुरेश ने गीते गा रहा था।
 - 4. लड़की पुस्तक पढ़ी है।

Question ID : 26433063077
Status : Answered
Chosen Option : 4

Q.11 'जिसके बालों में चंद्रमा है' वाक्यांश के लिए एक शब्द है-

- Ans
- 1. चक्रपाणि
 - 2. चंद्रशेखर
 - 3. चंद्रचूड़
 - 4. चंद्रग्रहण

Question ID : 26433069942
Status : Answered
Chosen Option : 4

Q.12 वह पौधों को खींचती है।

उपरोक्त वाक्य में रेखांकित शब्द के स्थान पर उचित शब्द क्या होगा?

- Ans
- 1. भीजती
 - 2. सींचती
 - 3. रचती
 - 4. सुखाती

Question ID : 26433062785
Status : Answered
Chosen Option : 2

Q.13 किस विकल्प में पौनःपुन्यबोधक क्रियाविशेषण के उदाहरण गलत हैं?

- Ans
- 1. निकट, उस तरफ, परसों
 - 2. बार – बार, बहुधा, अक्सर
 - 3. पुनः, फिर, हरबार
 - 4. प्रतिदिन, घड़ी – घड़ी, बार – बार

Question ID : 26433063052
Status : Answered
Chosen Option : 1

Q.14 निम्नलिखित विकल्पों में से 'जो बात पहले कभी न हुई हो' वाक्यांश के लिए एक सार्थक शब्द कौन सा है?

- Ans
- 1. भूतपूर्व
 - 2. निष्क्रिय
 - 3. सक्रिय
 - 4. अभूतपूर्व

Question ID : 26433062540
Status : Answered
Chosen Option : 4

Q.15 निम्नलिखित वाक्य में रेखांकित खंड के स्थान पर प्रयुक्त होने वाले सबसे उपयुक्त विकल्प का चयन कीजिए।

मैंने कल दिल्ली जा रहा हूँ।

- Ans
- 1. मैं
 - 2. मुझे
 - 3. हम
 - 4. मेरे

Question ID : 26433079666

Status : Answered

Chosen Option : 1

Comprehension:

निम्नलिखित गद्यांश में कुछ शब्दों को हटा दिया गया है। दिए गए विकल्पों की सहायता से रिक्त स्थानों की पूर्ति कीजिए। प्रत्येक संख्या के लिए सबसे उपयुक्त विकल्प का चयन कीजिए।

मनुष्य के जन्म के साथ विभिन्न समस्याएँ भी 1. _____ होती है। प्रारंभ में समस्याएँ 2. _____ होती हैं बाद में वे सामाजिक समस्या के रूप में विकसित हो जाती हैं। मानव कभी भी अपने आप में 3. _____ नहीं होता। किसी न किसी प्रकार का 4. _____ प्रत्येक के जीवन में होता है। कुछ ऐसी 5. _____ होती हैं जो पूर्ण न होने पर समस्या बन जाती हैं।

SubQuestion No : 16

Q.16 रिक्त स्थान 1 की पूर्ति के लिए सबसे उपयुक्त विकल्प का चयन कीजिए।

- Ans
- 1. सिमट
 - 2. उत्पन्न
 - 3. अप्रत्यक्ष
 - 4. अंत

Question ID : 264330111065

Status : Answered

Chosen Option : 2

Comprehension:

निम्नलिखित गद्यांश में कुछ शब्दों को हटा दिया गया है। दिए गए विकल्पों की सहायता से रिक्त स्थानों की पूर्ति कीजिए। प्रत्येक संख्या के लिए सबसे उपयुक्त विकल्प का चयन कीजिए।

मनुष्य के जन्म के साथ विभिन्न समस्याएँ भी 1. _____ होती है। प्रारंभ में समस्याएँ 2. _____ होती हैं बाद में वे सामाजिक समस्या के रूप में विकसित हो जाती हैं। मानव कभी भी अपने आप में 3. _____ नहीं होता। किसी न किसी प्रकार का 4. _____ प्रत्येक के जीवन में होता है। कुछ ऐसी 5. _____ होती हैं जो पूर्ण न होने पर समस्या बन जाती हैं।

SubQuestion No : 17

Q.17 रिक्त स्थान 2 की पूर्ति के लिए सबसे उपयुक्त विकल्प का चयन कीजिए।

- Ans
- 1. एक
 - 2. सबकी
 - 3. अनगिनत
 - 4. व्यक्तिगत

Question ID : 264330111066

Status : Answered

Chosen Option : 2

Comprehension:

निम्नलिखित गद्यांश में कुछ शब्दों को हटा दिया गया है। दिए गए विकल्पों की सहायता से रिक्त स्थानों की पूर्ति कीजिए। प्रत्येक संख्या के लिए सबसे उपयुक्त विकल्प का चयन कीजिए।
मनुष्य के जन्म के साथ विभिन्न समस्याएँ भी 1. _____ होती है। प्रारंभ में समस्याएँ 2. _____ होती हैं बाद में वे सामाजिक समस्या के रूप में विकसित हो जाती हैं। मानव कभी भी अपने आप में 3. _____ नहीं होता। किसी न किसी प्रकार का 4. _____ प्रत्येक के जीवन में होता है। कुछ ऐसी 5. _____ होती हैं जो पूर्ण न होने पर समस्या बन जाती हैं।

SubQuestion No : 18

Q.18 रिक्त स्थान 3 की पूर्ति के लिए सबसे उपयुक्त विकल्प का चयन कीजिए।

- Ans
- 1. इतना
 - 2. अधूरा
 - 3. बढ़ता
 - 4. पूर्ण

Question ID : 264330111067

Status : Answered

Chosen Option : 4

Comprehension:

निम्नलिखित गद्यांश में कुछ शब्दों को हटा दिया गया है। दिए गए विकल्पों की सहायता से रिक्त स्थानों की पूर्ति कीजिए। प्रत्येक संख्या के लिए सबसे उपयुक्त विकल्प का चयन कीजिए।
मनुष्य के जन्म के साथ विभिन्न समस्याएँ भी 1. _____ होती है। प्रारंभ में समस्याएँ 2. _____ होती हैं बाद में वे सामाजिक समस्या के रूप में विकसित हो जाती हैं। मानव कभी भी अपने आप में 3. _____ नहीं होता। किसी न किसी प्रकार का 4. _____ प्रत्येक के जीवन में होता है। कुछ ऐसी 5. _____ होती हैं जो पूर्ण न होने पर समस्या बन जाती हैं।

SubQuestion No : 19

Q.19 रिक्त स्थान 4 की पूर्ति के लिए सबसे उपयुक्त विकल्प का चयन कीजिए।

- Ans
- 1. समय
 - 2. अभाव
 - 3. परिणाम
 - 4. प्रयास

Question ID : 264330111068

Status : Answered

Chosen Option : 2

Comprehension:

निम्नलिखित गद्यांश में कुछ शब्दों को हटा दिया गया है। दिए गए विकल्पों की सहायता से रिक्त स्थानों की पूर्ति कीजिए। प्रत्येक संख्या के लिए सबसे उपयुक्त विकल्प का चयन कीजिए।
मनुष्य के जन्म के साथ विभिन्न समस्याएँ भी 1. _____ होती है। प्रारंभ में समस्याएँ 2. _____ होती हैं बाद में वे सामाजिक समस्या के रूप में विकसित हो जाती हैं। मानव कभी भी अपने आप में 3. _____ नहीं होता। किसी न किसी प्रकार का 4. _____ प्रत्येक के जीवन में होता है। कुछ ऐसी 5. _____ होती हैं जो पूर्ण न होने पर समस्या बन जाती हैं।

SubQuestion No : 20

Q.20 रिक्त स्थान 5 की पूर्ति के लिए सबसे उपयुक्त विकल्प का चयन कीजिए।

- Ans 1. इच्छाएँ
 2. सुरक्षा
 3. भिन्नता
 4. निर्धनता

Question ID : 264330111069

Status : Answered

Chosen Option : 3

WWW.GOV TJOB SALTER