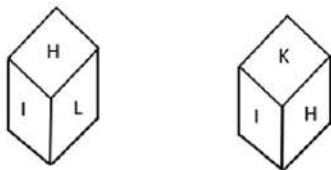


Constable GD in CAPFs SSF Rifleman GD in Assam Rifles and Sepoy in NCB Examination 2022

Roll Number	www.govtjobsalert.in
Candidate Name	www.govtjobsalert.in
Venue Name	iON Digital Zone iDZ 1 Sector 62
Exam Date	17/01/2023
Exam Time	2:30 PM - 3:30 PM
Subject	Constable GD Examination 2022

Section : Part-A-General Intelligence and Reasoning

Q.1 Two different positions of the same dice are shown having alphabets 'G' to 'L'. Find the alphabet on the face opposite the face showing 'K'



- Ans
- 1. H
 - 2. J
 - 3. L
 - 4. G

Question ID : 26433085511
Status : Answered
Chosen Option : 3

Q.2 Which of the following letter-clusters will replace the question mark (?) and complete the following letter-cluster series?
FZ, GA, JZ, OA, ?

- Ans
- 1. VZ
 - 2. VY
 - 3. UA
 - 4. UZ

Question ID : 26433067284
Status : Answered
Chosen Option : 1

Q.3 Select the set in which the numbers are related in the same way as are the numbers of the following set.

(NOTE : Operations should be performed on the whole numbers, without breaking down the numbers into its constituent digits. E.g. 13 – Operations on 13 such as adding /subtracting/multiplying etc. to 13 can be performed. Breaking down 13 into 1 and 3 and then performing mathematical operations on 1 and 3 is NOT allowed)
(40, 10, 150)
(65, 35, 150)

- Ans 1. (75, 40, 225)
 2. (30, 12, 120)
 3. (55, 10, 225)
 4. (70, 30, 270)

Question ID : 26433076490
Status : Not Answered
Chosen Option : --

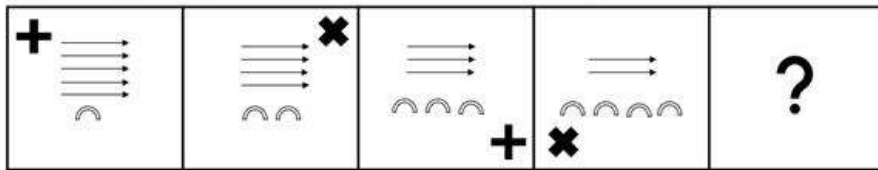
Q.4 Select the correct mirror image of the given figure when the mirror is placed at MN as shown below.



- Ans 1. R F 5 m G Y u s
 2. R F 5 m G Y u s
 3. R F 5 m G Y u s
 4. R F 5 m G Y u s

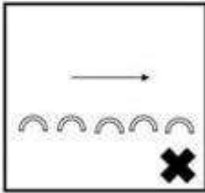
Question ID : 26433080807
Status : Answered
Chosen Option : 4

Q.5 Select the figure that will come next in the following figure series.

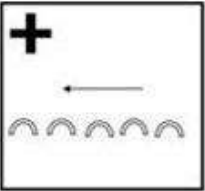


Ans

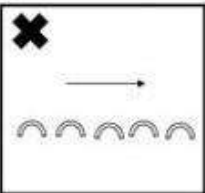
✗ 1.



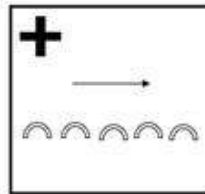
✗ 2.



✗ 3.

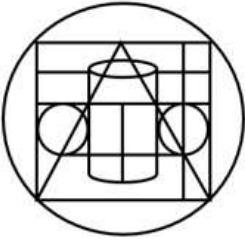


✓ 4.



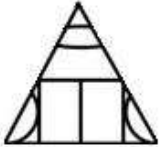
Question ID : 26433076494
 Status : Answered
 Chosen Option : 4

Q.6 Select the option figure which is embedded in the given figure. (Rotation is NOT allowed).




Ans

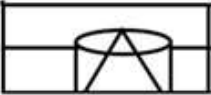
✓ 1.



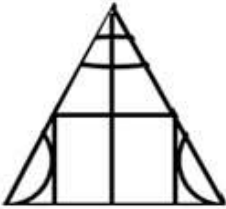
✗ 2.



✗ 3.



✗ 4.



Question ID : 26433076578

Status : Answered

Chosen Option : 1

Q.7 In a certain code language, ZERO is coded as 64, and FIVE is coded as 42. How will ELEVEN be coded in that language?

Ans ✗ 1. 64

✓ 2. 63

✗ 3. 62

✗ 4. 61

Question ID : 26433067998

Status : Answered

Chosen Option : 2

Q.8 If 'P' means 'addition', 'Q' means 'subtraction', 'R' means 'multiplication', and 'S' means 'division'. What will be the value of the following expression?
76 P 42 S 6 Q 22 P (8 R 15)

- Ans
- 1. 171
 - 2. 221
 - 3. 181
 - 4. 121

Question ID : 264330114182
Status : Answered
Chosen Option : 3

Q.9 Which of the following numbers will replace the question marks (?) in the given series?
11, 33, 66, 110, 165, ?, ?

- Ans
- 1. 231, 308
 - 2. 222, 236
 - 3. 226, 254
 - 4. 212, 234

Question ID : 26433069048
Status : Answered
Chosen Option : 1

Q.10 Select the option that is related to the fifth letter-cluster in the same way as the second letter-cluster is related to the first letter-cluster and the fourth letter-cluster is related to the third letter-cluster.
BOTH: WJEQ :: FACE: SXVT :: KING: ?

- Ans
- 1. PRMT
 - 2. MKPI
 - 3. OQLS
 - 4. NPKR

Question ID : 26433057497
Status : Not Attempted and Marked For Review
Chosen Option : --

Q.11 Which of the following numbers will replace the question mark(?) in the given series?
56000, 14000, 2800, ?, 140, 35, 7

- Ans
- 1. 400
 - 2. 560
 - 3. 700
 - 4. 350

Question ID : 26433080441
Status : Marked For Review
Chosen Option : 3

Q.12 Three Statements are given followed by Three conclusions numbered I, II and III. Assuming the statements to be true, even if they seem to be at variance with commonly known facts, decide which of the conclusions logically follow(s) from the statements.

Statements:

All bottles are cups.

All cups are plates.

Some plates are tables.

Conclusions:

I Some cups are bottles.

II Some plates are cups.

III Some tables are plates.

- Ans
- 1. Both conclusions II and III follow.
 - 2. Both conclusions I and II follow.
 - 3. All conclusions follow.
 - 4. Both conclusions I and III follow.

Question ID : 26433074630

Status : Answered

Chosen Option : 3

Q.13 Which two signs should be interchanged to make the below equation mathematically correct?

$$42 + 14 \div 28 \times 98 - 14 = 105$$

- Ans
- 1. \div and $-$
 - 2. $-$ and $+$
 - 3. \times and \div
 - 4. $+$ and \times

Question ID : 264330117541

Status : Answered

Chosen Option : 4

Q.14 Which option represents the correct order of the given words as they would appear in the English dictionary?

1 Straight

2 Strict

3 Stamp

4 Sticker

5 Streaming

- Ans
- 1. 3,5,4,1,2
 - 2. 4,5,2,3,1
 - 3. 3,4,1,5,2
 - 4. 4,3,1,5,2

Question ID : 26433069270

Status : Answered

Chosen Option : 3

Q.15 Eight colleagues A, B, C, D, E, F, G and H are sitting in a circle facing the centre, not necessarily in the same order. G sits third to the left of D. E is third to the left of G. H sits to the immediate right of D. B is second to the right of E. F is an immediate neighbour of E. F is third to the left of C. Who is sitting on the immediate left of D?

- Ans
- 1. C
 - 2. H
 - 3. E
 - 4. A

Question ID : 26433079055
Status : Answered
Chosen Option : 4

Q.16 Select the option that is related to the third word in the same way as the second word is related to the first word.
(The words must be considered as meaningful English words and must not be related to each other based on the number of letters / number of consonants / vowels in the word)

Rat : Rodent :: Crocodile : ?

- Ans
- 1. Mammal
 - 2. Herbivorous
 - 3. Reptile
 - 4. Water

Question ID : 26433082576
Status : Answered
Chosen Option : 3

Q.17 In a certain language, ADVICE is written as VDAECI and BELONG is written as LEBGNO. How will BETTER be written in the same language?

- Ans
- 1. RETTEB
 - 2. CFUUFs
 - 3. TEBRET
 - 4. YVGGVI

Question ID : 26433074589
Status : Answered
Chosen Option : 3

Q.18 G + H means 'G is the sister of H'
G × H means 'G is the father of H'
G ÷ H means 'G is the son of H'
G - H means 'G is the daughter of H'
If P - J + D ÷ S, then how is J related to S?

- Ans
- 1. Maternal aunt
 - 2. Brother
 - 3. Paternal aunt
 - 4. Daughter

Question ID : 26433080431
Status : Answered
Chosen Option : 4

Q.19 Six friends (Aman, Biplab, Chirantan, Divya, Elizabeth and Firoz) are sitting around a circular table facing the centre. Aman sits third to the left of Biplab. Chirantan is an immediate neighbour of Aman. Elizabeth sits second to the right of Divya. Chirantan is not an immediate neighbour of Divya. Who sit between Aman and Biplab from the left of Aman?

- Ans
- 1. Firoz and Elizabeth
 - 2. Divya and Chirantan
 - 3. Firoz and Divya
 - 4. Chirantan and Elizabeth

Question ID : 26433092772
Status : Answered
Chosen Option : 4

Q.20 Which of the following letter-clusters will replace the question mark (?) in the given series?
GPQU, FQRT, ?, DSTR, CTUQ

- Ans
- 1. ERSS
 - 2. ERRS
 - 3. FQSS
 - 4. EQRS

Question ID : 26433076445
Status : Answered
Chosen Option : 1

Section : Part-B-General Knowledge and General awareness

Q.1 The famous Nauchandi Fair happens once a year in the state of _____.

- Ans
- 1. Tamil Nadu
 - 2. Madhya Pradesh
 - 3. Uttar Pradesh
 - 4. Kerala

Question ID : 264330115087
Status : Answered
Chosen Option : 3

Q.2 As per November 2022, who is the Chief Economic Advisor of India?

- Ans
- 1. Krishnamurthy Subramanian
 - 2. Balwant Rai Mehta
 - 3. V. Anantha Nageswaran
 - 4. Surender Singh

Question ID : 264330114901
Status : Marked For Review
Chosen Option : 2

Q.3 Who was the Prime Minister during the Eighth Five Year Plan?

- Ans 1. P. V. Narsimha Rao
 2. Manmohan Singh
 3. Narendra Modi
 4. L K Advani

Question ID : 264330116129
Status : Answered
Chosen Option : 3

Q.4 Who sworn in as the 49th Chief Justice of India in August 2022?

- Ans 1. Nuthalapati Venkata Ramana
 2. Ranjan Gogoi
 3. Sharad Arvind Bobde
 4. Uday Umesh Lalit

Question ID : 264330115031
Status : Not Answered
Chosen Option : --

Q.5 Jatin Ghoswami won numerous awards for his contribution in which dance form?

- Ans 1. Odissi
 2. Kuchipudi
 3. Bharatnatyam
 4. Sattriya

Question ID : 264330115830
Status : Not Answered
Chosen Option : --

Q.6 Development of _____ was the motto of the first five year plan in India.

- Ans 1. rivers
 2. buildings
 3. agriculture
 4. architecture

Question ID : 264330115367
Status : Answered
Chosen Option : 3

Q.7 Which among the following metals has the highest electrical conductivity?

- Ans 1. Lithium
 2. Silver
 3. Platinum
 4. Gold

Question ID : 264330115149
Status : Answered
Chosen Option : 2

Q.8 Who among the following lit the Olympic cauldron in the Summer Olympics 2020?

- Ans 1. Vanderlei Cordeiro de Lima
 2. Jordan Duckitt
 3. Naomi Osaka
 4. Dinigeer Yilamujiang

Question ID : 264330115950
Status : Not Answered
Chosen Option : --

Q.9 Swachh Bharat Mission was launched to fulfil the vision of a cleaner India by _____.

- Ans 1. October 2,2015
 2. October 2,2018
 3. October 2,2017
 4. October 2,2019

Question ID : 264330116176
Status : Not Answered
Chosen Option : --

Q.10 What is the minimum age requirement to be elected as President of India?

- Ans 1. 35 years
 2. 34 years
 3. 25 years
 4. 30 years

Question ID : 26433074902
Status : Answered
Chosen Option : 1

Q.11 The football club Mohun Bagan was founded in which year?

- Ans 1. 1892
 2. 1889
 3. 1873
 4. 1878

Question ID : 264330116292
Status : Not Answered
Chosen Option : --

Q.12 The fundamental duties in the Indian Constitution are taken from which country's Constitution?

- Ans 1. USA
 2. Canada
 3. USSR (now Russia)
 4. France

Question ID : 26433090664
Status : Marked For Review
Chosen Option : 1

Q.13 Which of the following is an exclusive martial dance form of Manipur?

- Ans
- 1. Bihu
 - 2. Kummi
 - 3. Thang Ta
 - 4. Danda-Jatra

Question ID : 26433072926
Status : Not Answered
Chosen Option : --

Q.14 Neonatal mortality rate refers to the number of deaths during the first _____ of life per 1000 live births in a given year or other period.

- Ans
- 1. 28 days
 - 2. 27 days
 - 3. 26 days
 - 4. 25 days

Question ID : 264330116039
Status : Not Answered
Chosen Option : --

Q.15 Which of the following comes under Mollusca?

- Ans
- 1. Turtle
 - 2. Musca
 - 3. Sting ray
 - 4. Octopus

Question ID : 264330115213
Status : Not Answered
Chosen Option : --

Q.16 Identify the only natural satellite of Earth.

- Ans
- 1. Callisto
 - 2. Lo
 - 3. Titan
 - 4. Moon

Question ID : 26433091490
Status : Answered
Chosen Option : 4

Q.17 _____ are things a firm owns.

- Ans
- 1. Debentures
 - 2. Assets
 - 3. Liabilities
 - 4. Loan

Question ID : 264330115328
Status : Answered
Chosen Option : 2

Q.18 General Dyer took command during the martial law in which year?

- Ans
- 1. 1945
 - 2. 1819
 - 3. 1919
 - 4. 1929

Question ID : 264330115718
Status : Not Answered
Chosen Option : --

Q.19 What helps in expanding trade and commerce and brings in foreign exchange?

- Ans
- 1. import of machines
 - 2. export of manufactured goods
 - 3. import of manufactured goods
 - 4. import of raw materials

Question ID : 264330115575
Status : Answered
Chosen Option : 2

Q.20 Which of the following archaeological sites is NOT located in present day India?

- Ans
- 1. Mahagara
 - 2. Chirand
 - 3. Hallur
 - 4. Mehrgarh

Question ID : 26433089123
Status : Not Answered
Chosen Option : --

Section : Part-C-Elementary Mathematics

Q.1 Simplify the given expression.

$$\frac{7 + \frac{13}{5} \text{ of } \left(\frac{5}{52}\right)}{\frac{13 + \frac{15}{11} \text{ of } \left(\frac{14}{5}\right)}$$

- Ans
- 1. $\frac{389}{14}$
 - 2. $\frac{323}{13}$
 - 3. $\frac{294}{13}$
 - 4. $\frac{287}{13}$

Question ID : 26433075407
Status : Answered
Chosen Option : 3

Q.2 A can run 1 km in 4 min, and B can cover the same distance in 4 min 10 sec. By what distance can A beat B in a 1 km race?

- Ans 1. 45 m
 2. 40 m
 3. 35 m
 4. 30 m

Question ID : 26433073042
Status : Answered
Chosen Option : 2

Q.3 A sum of money doubles itself at compound interest in 10 years. In how many years will it be four times at the same rate of interest?

- Ans 1. 10
 2. 20
 3. 15
 4. 5

Question ID : 26433076380
Status : Answered
Chosen Option : 3

Q.4 The marked price of a chair was Rs.5,000. The shopkeeper was offering a discount of 20%, but on further bargaining agreed to offer a successive discount and finally sold the chair for Rs.3,600. What was the second discount offered by the shopkeeper?

- Ans 1. 12%
 2. 10%
 3. 11%
 4. 9%

Question ID : 26433080361
Status : Answered
Chosen Option : 2

Q.5 If 90 is divided into two parts in the ratio of 2:3, then what are the values of two parts?

- Ans 1. 50 and 40
 2. 36 and 54
 3. 42 and 48
 4. 40 and 50

Question ID : 26433075663
Status : Answered
Chosen Option : 2

Q.6 The weight of five boys is recorded as 22.450 kg, 24.150 kg, 24.720 kg, 28.530 kg and 25.150 kg. What is the average weight of all the five boys?

- Ans
- 1. 29 kg
 - 2. 27 kg
 - 3. 25 kg
 - 4. 26 kg

Question ID : 26433076392
Status : Answered
Chosen Option : 3

Q.7 A bus covered a distance of 72 km in 60 min. What is the speed of the bus in km/h?

- Ans
- 1. 91
 - 2. 56
 - 3. 84
 - 4. 72

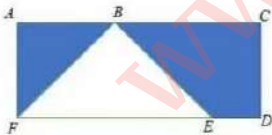
Question ID : 26433080003
Status : Answered
Chosen Option : 4

Q.8 A hemisphere of lead of radius 5 cm is cast into a right circular cone of height 75 cm. If the volume of cone and hemisphere are equal, then what will be the radius of the base of the cone?

- Ans
- 1. 1.8 cm
 - 2. 1.4 cm
 - 3. 1.5 cm
 - 4. 1.2 cm

Question ID : 26433075419
Status : Answered
Chosen Option : 1

Q.9 Find the area of the shaded region of the diagram, where ACDF is a rectangle, AC = 90 cm, AF = CD = 20 cm and ED = 10 cm.



- Ans
- 1. 1000 cm^2
 - 2. 1400 cm^2
 - 3. 1200 cm^2
 - 4. 1100 cm^2

Question ID : 26433075745
Status : Answered
Chosen Option : 1

Q.10 A man spends 31% and 9% of his monthly income on food and clothing, respectively, and one third of the remaining on the education of children. He saves ₹4,500 per month, which is equal to half the balance after spending on food, clothing and education of children. His monthly salary is:

- Ans
- 1. ₹21,000
 - 2. ₹22,500
 - 3. ₹20,650
 - 4. ₹26,700

Question ID : 26433082793
Status : Answered
Chosen Option : 2

Q.11 A, B, and C start running simultaneously, starting from a point, around a circular track of length 900m, with respective speeds of 3m/s, 5m/s, and 6m/s. A and B run in the same direction while C runs in the opposite direction of the other two. After how much time will they meet for the first time?

- Ans
- 1. 12 minutes
 - 2. 13 minutes
 - 3. 14 minutes
 - 4. 15 minutes

Question ID : 26433063960
Status : Not Attempted and Marked For Review
Chosen Option : --

Q.12 A certain sum of money becomes $\frac{216}{125}$ times of itself in 3 years at compound interest, compounded annually. What is the rate of interest?

- Ans
- 1. 40 percent
 - 2. 20 percent
 - 3. 10 percent
 - 4. 30 percent

Question ID : 26433079878
Status : Answered
Chosen Option : 2

Q.13 A lady professes to sell sugar at 20% profit on the cost price and using a weight which is 30% less than the actual measure. What is her gain percentage?

Ans

1. $67\frac{3}{7}$ percent

2. $71\frac{3}{7}$ percent

3. $81\frac{2}{7}$ percent

4. $57\frac{1}{7}$ percent

Question ID : 26433079863

Status : Answered

Chosen Option : 2

Q.14 The difference between two numbers is 1086. When we divide the larger number by the smaller we get six as quotient and six as remainder. Find the larger number.

Ans

1. 1402

2. 1302

3. 1502

4. 1202

Question ID : 26433081535

Status : Answered

Chosen Option : 2

Q.15 After getting two successive discounts Rupa got a dress at Rs. 1619.20, whose marked price is Rs. 2000. If the second discount is 8 percent, then the first discount is:

Ans

1. 10 percent

2. 6 percent

3. 12 percent

4. 15 percent

Question ID : 264330116745

Status : Answered

Chosen Option : 3

Q.16

If $p : q = 1 : 2$, what is the value of $\frac{2p + 3q}{4p + 5q}$?

Ans

1. $\frac{7}{4}$

2. $\frac{5}{3}$

3. $\frac{4}{7}$

4. $\frac{3}{5}$

Question ID : 26433080324

Status : Answered

Chosen Option : 3

Q.17 A and B together can do a piece of work in 20 days, and B and C together can do the same work in 100 days. If B alone can do the same work in 140 days, then in how many days will A and C together can complete the same work?

Ans

1. 125/8 days

2. 175/8 days

3. 111/3 days

4. 145/6 days

Question ID : 264330116860

Status : Answered

Chosen Option : 2

Q.18 A can do a piece of work in 4 days, while B can do it in 8 days. If they work on alternate days beginning with A, then in how many days will the work be completed?

Ans

1. 3

2. 4

3. 3.5

4. 5

Question ID : 26433075204

Status : Answered

Chosen Option : 4

Q.19 If a diamond ring is sold for ₹5,94,320, then a woman will get a loss of 5%. At what price should she sell it so that her profit becomes 25%?

Ans

1. ₹7,32,140

2. ₹7,42,800

3. ₹7,52,010

4. ₹7,82,000

Question ID : 26433076076

Status : Answered

Chosen Option : 4

Q.20 In a panchayat election, there were two candidates A and B. Candidate A got 42% of the votes and lost to B by 8000 votes. What is the total number of votes?

- Ans
- 1. 30000
 - 2. 3000
 - 3. 5000
 - 4. 50000

Question ID : 26433081014
Status : Answered
Chosen Option : 4

Section : Part-D-English

Q.1 Select the correct word for the blanks in the given sentence.

My father loves to read a _____ and wants to _____ flight tickets for Delhi.

- Ans
- 1. reserve
 - 2. notepad
 - 3. book
 - 4. purchase

Question ID : 26433060532
Status : Answered
Chosen Option : 3

Q.2 Select the most appropriate ANTONYM of the given word.

Doleful

- Ans
- 1. Joyous
 - 2. Worthless
 - 3. Horrid
 - 4. Dismal

Question ID : 26433071980
Status : Answered
Chosen Option : 1

Q.3 Select the correct spelling of the underlined word in the following sentence.

In edition to snacks, please bring cold drinks.

- Ans
- 1. adition
 - 2. addition
 - 3. eddition
 - 4. audition

Question ID : 26433072370
Status : Answered
Chosen Option : 2

Q.4 Select the most appropriate synonym of the given word.
Despise

- Ans** 1. Treasure
 2. Desire
 3. Dislike
 4. Like

Question ID : 26433086488
Status : Marked For Review
Chosen Option : 1

Q.5 Select the most appropriate option that can substitute the underlined segment in the given sentence.

Does it difficult to drive a lorry through a crowded narrow lane?

- Ans** 1. Aren't it
 2. Do it
 3. Isn't it
 4. Would it

Question ID : 26433088988
Status : Answered
Chosen Option : 3

Q.6 Select the most appropriate meaning of the given idiom.

In the blink of an eye

- Ans** 1. Happen fast and instantaneously
 2. To make progress
 3. To flourish
 4. To allow someone to move fast

Question ID : 26433072678
Status : Answered
Chosen Option : 1

Q.7 Select the most appropriate option to fill in the blank.

The teacher _____ another picture in the slide to explain his point of view.

- Ans** 1. excluded
 2. extracted
 3. inserted
 4. obtained

Question ID : 26433074066
Status : Answered
Chosen Option : 3

Q.8 Select the most appropriate meaning of the given idiom.

An arm and a leg

- Ans** 1. Too much bothering
 2. Very expensive
 3. Too much criticism
 4. Willing to work

Question ID : 26433073713
Status : Answered
Chosen Option : 2

Q.9 Select the INCORRECTLY spelt word.

- Ans** 1. Seceade
 2. Seismic
 3. Relevance
 4. Titillate

Question ID : 26433073603
Status : Marked For Review
Chosen Option : 4

Q.10 Select the most appropriate option to fill in the blank.

One day, an old man was walking through the forest _____ suddenly he heard someone crying for help.

- Ans** 1. which
 2. when
 3. while
 4. than

Question ID : 26433072730
Status : Answered
Chosen Option : 2

Q.11 Select the most appropriate synonym of the given word.

Annoy

- Ans** 1. Irritate
 2. Testify
 3. Suppress
 4. Delight

Question ID : 26433073429
Status : Answered
Chosen Option : 1

Q.12 Parts of the following sentence have been underlined and given as options. Select the option that contains an error.

Tomorrow in the exam hall, I am busy writing answers.

- Ans
- 1. writing
 - 2. am
 - 3. busy
 - 4. answers

Question ID : 26433089366
Status : Answered
Chosen Option : 2

Q.13 Select the correct option to substitute the underlined segment in the given sentence.
Ever since young, we were taught that we can obey our elders.

- Ans
- 1. should
 - 2. cannot
 - 3. May
 - 4. need not

Question ID : 26433092996
Status : Answered
Chosen Option : 1

Q.14 Select the most appropriate homonym to fill in the blank.

Due to the attack his vital organs _____ functioning.

- Ans
- 1. seized
 - 2. sized
 - 3. ceased
 - 4. seas

Question ID : 26433089071
Status : Answered
Chosen Option : 1

Q.15 Select the most appropriate ANTONYM of the given word.

Cynical

- Ans
- 1. Negligent
 - 2. Silent
 - 3. Optimistic
 - 4. Usurper

Question ID : 26433071969
Status : Answered
Chosen Option : 3

Comprehension:

In the following passage, some words have been deleted. Read the passage carefully and select the most appropriate option to fill in each blank.

Mirrors (1) _____ used since ages. It is said that Archimedes used huge mirrors to focus the heat of the sun's rays on enemy ships to burn them. The same (2) _____ is used in solar cookers, where mirrors are used to reflect and focus the sun's rays onto cooking containers. Astronomers use huge concave mirrors to focus starlight. The mirrors used in telescopes are polished by giving a thin coat of silver or aluminium to the glass. With the telescopes, astronomers can see the heavenly bodies, but even without the telescopes one can see the moon. A full moon shining (3) _____ is a beautiful sight. But it is also a puzzle, because if the sun and the moon both give the same light, then why is the moonlight more pleasant? The reason is that the moon reflects very (4) _____ sunlight, in fact, only seven per cent of the light it receives. The earth reflects about half of the radiation that it receives from the sun. Imagine how bright the earth must be looking from the moon! One can even read a book on the moon in the earthlight. However, you do not have to travel all the way to the moon to realise how strong the earth's light is. Observe the crescent moon soon after the new moon. The bright crescent is illuminated by the sun. The rest of the moon is illuminated by earthlight. In other words, the light reflected by the earth is falling on the moon. This is being reflected back to us and is strong enough to show the moon (5) _____. As the crescent increases in size, this effect disappears.

SubQuestion No : 16

Q.16 Select the most appropriate option to fill in blank number 1.

- Ans 1. has been
 2. is being
 3. have been
 4. are

Question ID : 26433060972

Status : Marked For Review

Chosen Option : 3

Comprehension:

In the following passage, some words have been deleted. Read the passage carefully and select the most appropriate option to fill in each blank.

Mirrors (1) _____ used since ages. It is said that Archimedes used huge mirrors to focus the heat of the sun's rays on enemy ships to burn them. The same (2) _____ is used in solar cookers, where mirrors are used to reflect and focus the sun's rays onto cooking containers. Astronomers use huge concave mirrors to focus starlight. The mirrors used in telescopes are polished by giving a thin coat of silver or aluminium to the glass. With the telescopes, astronomers can see the heavenly bodies, but even without the telescopes one can see the moon. A full moon shining (3) _____ is a beautiful sight. But it is also a puzzle, because if the sun and the moon both give the same light, then why is the moonlight more pleasant? The reason is that the moon reflects very (4) _____ sunlight, in fact, only seven per cent of the light it receives. The earth reflects about half of the radiation that it receives from the sun. Imagine how bright the earth must be looking from the moon! One can even read a book on the moon in the earthlight. However, you do not have to travel all the way to the moon to realise how strong the earth's light is. Observe the crescent moon soon after the new moon. The bright crescent is illuminated by the sun. The rest of the moon is illuminated by earthlight. In other words, the light reflected by the earth is falling on the moon. This is being reflected back to us and is strong enough to show the moon (5) _____. As the crescent increases in size, this effect disappears.

SubQuestion No : 17

Q.17 Select the most appropriate option to fill in blank number 2.

- Ans 1. verity
 2. principle
 3. supposition
 4. moral

Question ID : 26433060973

Status : Answered

Chosen Option : 2

Comprehension:

In the following passage, some words have been deleted. Read the passage carefully and select the most appropriate option to fill in each blank.

Mirrors (1) _____ used since ages. It is said that Archimedes used huge mirrors to focus the heat of the sun's rays on enemy ships to burn them. The same (2) _____ is used in solar cookers, where mirrors are used to reflect and focus the sun's rays onto cooking containers. Astronomers use huge concave mirrors to focus starlight. The mirrors used in telescopes are polished by giving a thin coat of silver or aluminium to the glass. With the telescopes, astronomers can see the heavenly bodies, but even without the telescopes one can see the moon. A full moon shining (3) _____ is a beautiful sight. But it is also a puzzle, because if the sun and the moon both give the same light, then why is the moonlight more pleasant? The reason is that the moon reflects very (4) _____ sunlight, in fact, only seven per cent of the light it receives. The earth reflects about half of the radiation that it receives from the sun. Imagine how bright the earth must be looking from the moon! One can even read a book on the moon in the earthlight. However, you do not have to travel all the way to the moon to realise how strong the earth's light is. Observe the crescent moon soon after the new moon. The bright crescent is illuminated by the sun. The rest of the moon is illuminated by earthlight. In other words, the light reflected by the earth is falling on the moon. This is being reflected back to us and is strong enough to show the moon (5) _____. As the crescent increases in size, this effect disappears.

SubQuestion No : 18

Q.18 Select the most appropriate option to fill in blank number 3.

Ans 1. beneath

2. overhead

3. ahead

4. upward

Question ID : 26433060974

Status : Marked For Review

Chosen Option : 3

Comprehension:

In the following passage, some words have been deleted. Read the passage carefully and select the most appropriate option to fill in each blank.

Mirrors (1) _____ used since ages. It is said that Archimedes used huge mirrors to focus the heat of the sun's rays on enemy ships to burn them. The same (2) _____ is used in solar cookers, where mirrors are used to reflect and focus the sun's rays onto cooking containers. Astronomers use huge concave mirrors to focus starlight. The mirrors used in telescopes are polished by giving a thin coat of silver or aluminium to the glass. With the telescopes, astronomers can see the heavenly bodies, but even without the telescopes one can see the moon. A full moon shining (3) _____ is a beautiful sight. But it is also a puzzle, because if the sun and the moon both give the same light, then why is the moonlight more pleasant? The reason is that the moon reflects very (4) _____ sunlight, in fact, only seven per cent of the light it receives. The earth reflects about half of the radiation that it receives from the sun. Imagine how bright the earth must be looking from the moon! One can even read a book on the moon in the earthlight. However, you do not have to travel all the way to the moon to realise how strong the earth's light is. Observe the crescent moon soon after the new moon. The bright crescent is illuminated by the sun. The rest of the moon is illuminated by earthlight. In other words, the light reflected by the earth is falling on the moon. This is being reflected back to us and is strong enough to show the moon (5) _____. As the crescent increases in size, this effect disappears.

SubQuestion No : 19

Q.19 Select the most appropriate option to fill in blank number 4.

- Ans 1. minute
 2. less
 3. petty
 4. little

Question ID : 26433060975

Status : Answered

Chosen Option : 2

Comprehension:

In the following passage, some words have been deleted. Read the passage carefully and select the most appropriate option to fill in each blank.

Mirrors (1) _____ used since ages. It is said that Archimedes used huge mirrors to focus the heat of the sun's rays on enemy ships to burn them. The same (2) _____ is used in solar cookers, where mirrors are used to reflect and focus the sun's rays onto cooking containers. Astronomers use huge concave mirrors to focus starlight. The mirrors used in telescopes are polished by giving a thin coat of silver or aluminium to the glass. With the telescopes, astronomers can see the heavenly bodies, but even without the telescopes one can see the moon. A full moon shining (3) _____ is a beautiful sight. But it is also a puzzle, because if the sun and the moon both give the same light, then why is the moonlight more pleasant? The reason is that the moon reflects very (4) _____ sunlight, in fact, only seven per cent of the light it receives. The earth reflects about half of the radiation that it receives from the sun. Imagine how bright the earth must be looking from the moon! One can even read a book on the moon in the earthlight. However, you do not have to travel all the way to the moon to realise how strong the earth's light is. Observe the crescent moon soon after the new moon. The bright crescent is illuminated by the sun. The rest of the moon is illuminated by earthlight. In other words, the light reflected by the earth is falling on the moon. This is being reflected back to us and is strong enough to show the moon (5) _____. As the crescent increases in size, this effect disappears.

SubQuestion No : 20

Q.20 Select the most appropriate option to fill in blank number 5.

- Ans 1. lowly
 2. faintly
 3. gloomily
 4. feebly

Question ID : 26433060976

Status : Marked For Review

Chosen Option : 3

Section : Part-D-Hindi

Q.1 निम्नलिखित वाक्य के किस खंड में त्रुटि है?
सूर्य पूर्व पर उगता है।

- Ans 1. पूर्व
 2. पर
 3. उगता
 4. सूर्य

Question ID : 26433066759

Status : Not Answered

Chosen Option : --

Q.2 निम्नलिखित वाक्य के रिक्त स्थान में सबसे उपयुक्त मुहावरा क्या होगा?
'राहुल अपनी माँ की _____ है।'

- Ans 1. गाल बजाना
 2. ईद का चाँद
 3. अंधे की लाठी
 4. अक्ल का दुश्मन

Question ID : 26433066721

Status : Not Answered

Chosen Option : --

Q.3 निम्नलिखित वाक्य के किस शब्द में अशुद्धि है?
अत्यधिक कार्य स्वास्थ्य को बिगाड़ देता है।

- Ans
- 1. कार्य
 - 2. अत्यधिक
 - 3. स्वास्थ्य
 - 4. बिगाड़

Question ID : 26433066765
Status : Not Answered
Chosen Option : --

Q.4 निम्न वाक्य में रेखांकित मुहावरे का उपयुक्त अर्थ दिए गए विकल्पों में से चुनिए।
उसके शोक तो देखो, सींग कटाकर बछड़ों में मिल रहा है।

- Ans
- 1. नुकसान उठाकर लाभ की प्रतीक्षा
 - 2. हानि करके लाभ की योजना बनाना
 - 3. ग़लत काम करके छिपना
 - 4. बूढ़ा होकर बच्चों जैसा काम करना

Question ID : 26433062310
Status : Not Answered
Chosen Option : --

Q.5 विकल्पों में दिए गए किस वाक्य में निम्न शब्द के सही विलोम शब्द का उपयोग हुआ है?
अपमान

- Ans
- 1. मुझे कार्यालय में बहुत मर्यादित किया गया।
 - 2. मुझे कार्यालय में बहुत अनादर मिला।
 - 3. मुझे कार्यालय में बहुत सम्मान मिला।
 - 4. मुझे बहुत सामान मिला।

Question ID : 26433066945
Status : Not Answered
Chosen Option : --

Q.6 'अचला नदी में पानी भरने गयी।'।
उपरोक्त वाक्य में कारक सम्बन्धी त्रुटि पहचानकर निम्नलिखित में से शुद्ध वाक्य का चयन कीजिए।

- Ans
- 1. अचला नदी ने पानी भरने गयी।
 - 2. अचला नदी को पानी भरने गयी।
 - 3. अचला नदी से पानी भरने गयी।
 - 4. अचला नदी के लिए पानी भरने गयी।

Question ID : 26433066970
Status : Not Answered
Chosen Option : --

Q.7 'रमेश घर आया।' इस वाक्य का संदिग्ध भूतकाल में रूपांतरण होगा -

- Ans 1. रमेश घर आ रहा था।
 2. रमेश घर आ गया होगा।
 3. रमेश घर आया था।
 4. रमेश घर आएगा।

Question ID : 26433062320
Status : Not Answered
Chosen Option : --

Q.8 'अंडे से जन्म लेने वाला' वाक्यांश के लिए एक शब्द क्या होगा?

- Ans 1. अंडक
 2. अंडज
 3. अंडाणु
 4. जलज

Question ID : 26433065855
Status : Not Answered
Chosen Option : --

Q.9 'धन से सम्बन्ध रखने वाला' वाक्यांश के लिए उचित शब्द क्या होगा?

- Ans 1. आर्थिक
 2. मूल्यवान
 3. कीमती
 4. मालिक

Question ID : 26433065911
Status : Not Answered
Chosen Option : --

Q.10 निम्नलिखित विकल्पों में से 'पृथ्वी से सम्बन्ध रखने वाला' वाक्यांश के लिए एक सार्थक शब्द क्या होगा ?

- Ans 1. सार्थक
 2. निरर्थक
 3. पार्थिव
 4. अपार्थिव

Question ID : 26433062539
Status : Not Answered
Chosen Option : --

Q.11 निम्नलिखित वाक्य में रेखांकित खंड के स्थान पर प्रयुक्त होने वाले सबसे उपयुक्त विकल्प का चयन कीजिए।

विकास और आकाश एक ढाबे पर खाना खाता है।

- Ans
- 1. खा चुके
 - 2. पाता
 - 3. खाते
 - 4. खाती

Question ID : 26433079665
Status : Not Answered
Chosen Option : --

Q.12 निम्नलिखित में से कौन सा एक अनेकार्थी शब्द नहीं है?

- Ans
- 1. बुद्धि
 - 2. मुद्रा
 - 3. गुरु
 - 4. राशि

Question ID : 26433091318
Status : Not Answered
Chosen Option : --

Q.13 'माँ ने पुत्र को अंक में ले लिया।' इस वाक्य में प्रयुक्त 'अंक' शब्द निम्न में से किस अर्थ को व्यक्त करता है?

- Ans
- 1. गोद
 - 2. आँख
 - 3. गिनती के अंक
 - 4. संख्या

Question ID : 26433080912
Status : Not Answered
Chosen Option : --

Q.14 किसी संज्ञा या सर्वनाम शब्द की विशेषता बताने वाले शब्द क्या कहलाते हैं?

- Ans
- 1. क्रिया
 - 2. क्रिया विशेषण
 - 3. समुच्चयबोधक
 - 4. विशेषण

Question ID : 26433085049
Status : Not Answered
Chosen Option : --

Q.15 'हिमाद्रि' का उपयुक्त पर्यायवाची शब्द क्या है?

- Ans
- 1. पर्वत
 - 2. शैल
 - 3. हिमालय
 - 4. हिम

Question ID : 26433091170

Status : Not Answered

Chosen Option : --

Comprehension:

निम्नलिखित गद्यांश में कुछ शब्दों को हटा दिया गया है। दिए गए विकल्पों की सहायता से रिक्त स्थानों की पूर्ति कीजिए। प्रत्येक संख्या के लिए सबसे उपयुक्त विकल्प का चयन कीजिए।
मनुष्य एक 1. _____ प्राणी है। इसका अर्थ है की वह 2. _____ जिए और दूसरों को भी जीने दे। वह अपने सुख दुःख के साथ दूसरों के सुख दुःख की ओर भी 3. _____ दे। अपने स्वार्थ को छोड़कर दूसरे के हित की भी सोचे। अपनी स्वार्थ सिद्धि करना 4. _____ नहीं है। 5. _____ ही सच्ची मानवता है।

SubQuestion No : 16

Q.16 रिक्त स्थान 1 की पूर्ति के लिए सबसे उपयुक्त विकल्प का चयन करें।

- Ans
- 1. साहित्यिक
 - 2. पौराणिक
 - 3. सामाजिक
 - 4. राजनीतिक

Question ID : 264330110903

Status : Not Answered

Chosen Option : --

Comprehension:

निम्नलिखित गद्यांश में कुछ शब्दों को हटा दिया गया है। दिए गए विकल्पों की सहायता से रिक्त स्थानों की पूर्ति कीजिए। प्रत्येक संख्या के लिए सबसे उपयुक्त विकल्प का चयन कीजिए।
मनुष्य एक 1. _____ प्राणी है। इसका अर्थ है की वह 2. _____ जिए और दूसरों को भी जीने दे। वह अपने सुख दुःख के साथ दूसरों के सुख दुःख की ओर भी 3. _____ दे। अपने स्वार्थ को छोड़कर दूसरे के हित की भी सोचे। अपनी स्वार्थ सिद्धि करना 4. _____ नहीं है। 5. _____ ही सच्ची मानवता है।

SubQuestion No : 17

Q.17 रिक्त स्थान 2 की पूर्ति के लिए सबसे उपयुक्त विकल्प का चयन करें।

- Ans
- 1. स्वयं
 - 2. हम
 - 3. तुम
 - 4. अपने आप

Question ID : 264330110904

Status : Not Answered

Chosen Option : --

Comprehension:

निम्नलिखित गद्यांश में कुछ शब्दों को हटा दिया गया है। दिए गए विकल्पों की सहायता से रिक्त स्थानों की पूर्ति कीजिए। प्रत्येक संख्या के लिए सबसे उपयुक्त विकल्प का चयन कीजिए।
मनुष्य एक 1. _____ प्राणी है। इसका अर्थ है वह 2. _____ जिए और दूसरों को भी जीने दे। वह अपने सुख दुःख के साथ दूसरों के सुख दुःख की ओर भी 3. _____ दें। अपने स्वार्थ को छोड़कर दूसरे के हित की भी सोचे। अपनी स्वार्थ सिद्धि करना 4. _____ नहीं है। 5. _____ ही सच्ची मानवता है।

SubQuestion No : 18

Q.18 रिक्त स्थान 3 की पूर्ति के लिए सबसे उपयुक्त विकल्प का चयन करें।

- Ans 1. ध्यान
 2. नज़रंदाज़
 3. अपमान
 4. निरादर

Question ID : 264330110905
Status : Not Answered
Chosen Option : --

Comprehension:

निम्नलिखित गद्यांश में कुछ शब्दों को हटा दिया गया है। दिए गए विकल्पों की सहायता से रिक्त स्थानों की पूर्ति कीजिए। प्रत्येक संख्या के लिए सबसे उपयुक्त विकल्प का चयन कीजिए।
मनुष्य एक 1. _____ प्राणी है। इसका अर्थ है वह 2. _____ जिए और दूसरों को भी जीने दे। वह अपने सुख दुःख के साथ दूसरों के सुख दुःख की ओर भी 3. _____ दें। अपने स्वार्थ को छोड़कर दूसरे के हित की भी सोचे। अपनी स्वार्थ सिद्धि करना 4. _____ नहीं है। 5. _____ ही सच्ची मानवता है।

SubQuestion No : 19

Q.19 रिक्त स्थान 4 की पूर्ति के लिए सबसे उपयुक्त विकल्प का चयन करें।

- Ans 1. दोस्ती
 2. मानवता
 3. अमानवीयता
 4. मनवता

Question ID : 264330110906
Status : Not Answered
Chosen Option : --

Comprehension:

निम्नलिखित गद्यांश में कुछ शब्दों को हटा दिया गया है। दिए गए विकल्पों की सहायता से रिक्त स्थानों की पूर्ति कीजिए। प्रत्येक संख्या के लिए सबसे उपयुक्त विकल्प का चयन कीजिए।
मनुष्य एक 1. _____ प्राणी है। इसका अर्थ है वह 2. _____ जिए और दूसरों को भी जीने दे। वह अपने सुख दुःख के साथ दूसरों के सुख दुःख की ओर भी 3. _____ दें। अपने स्वार्थ को छोड़कर दूसरे के हित की भी सोचे। अपनी स्वार्थ सिद्धि करना 4. _____ नहीं है। 5. _____ ही सच्ची मानवता है।

SubQuestion No : 20

Q.20 रिक्त स्थान 5 की पूर्ति के लिए सबसे उपयुक्त विकल्प का चयन करें।

- Ans 1. अपना हित
 2. घर का हित
 3. बच्चों का हित
 4. परहित

Question ID : 264330110907
Status : Not Answered
Chosen Option : --