

Constable GD in CAPFs SSF Rifleman GD in Assam Rifles and Sepoy in NCB Examination 2022

Roll Number	www.govtjobsalert.in
Candidate Name	www.govtjobsalert.in
Venue Name	iON Digital Zone iDZ 1 Sector 62
Exam Date	08/02/2023
Exam Time	11:45 AM - 12:45 PM
Subject	Constable GD Examination 2022

Section : Part-A-General Intelligence and Reasoning

Q.1 In a certain code language, 'BEAUTY' is written as 'DDZTVA' and 'GLORIA' is written as 'INNTHZ'. How will 'CLEAVE' be written in that language?

- Ans
- 1. ENGZXD
 - 2. ENDZXD
 - 3. EKGZWD
 - 4. ENG CXG

Question ID : 26433081761

Status : Answered

Chosen Option : 2

Q.2 उस विकल्प का चयन कीजिए जो तीसरे शब्द से उसी प्रकार संबंधित है जिस प्रकार दूसरा शब्द पहले शब्द से संबंधित है। (शब्दों को अर्थपूर्ण शब्दों के रूप में मानना है और उन्हें शब्द में अक्षरों/व्यंजनों/स्वरों की संख्या के आधार पर एक-दूसरे से संबंधित नहीं करना है।)
छात्र : कक्षा :: देश : ?

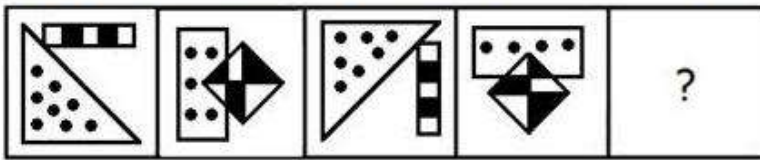
- Ans
- 1. महाद्वीप
 - 2. क्षेत्र
 - 3. परिषद
 - 4. राष्ट्र

Question ID : 26433069575

Status : Answered

Chosen Option : 1

Q.3 Select the figure that will come next in the following series.



Ans

- 1.
- 2.
- 3.
- 4.

Question ID : 26433078970
Status : Answered
Chosen Option : 4

Q.4 Which letter-cluster will replace the question mark (?) to complete the given series?
WDGP, TBDN, QZAL, ?, KVIH

- Ans
- 1. MXYJ
 - 2. NXXJ
 - 3. OXYI
 - 4. MWXK

Question ID : 26433068033
Status : Answered
Chosen Option : 2

Q.5 Which number will replace the question mark (?) in the following series?
42, 56, 72, ?, 110, 132

- Ans 1. 90
 2. 84
 3. 80
 4. 92

Question ID : 26433067835
Status : Answered
Chosen Option : 1

Q.6 If '+' means 'x', '-' means '÷', 'x' means '+', and '÷' means '-', then which of the following equation would be correct?

- Ans 1. $32 \div 8 \times 4 + 64 - 16 = 48$
 2. $24 \times 4 + 4 \div 64 - 16 = 60$
 3. $32 - 4 \div 8 \times 64 \div 16 = 36$
 4. $48 - 8 + 4 \times 64 \div 16 = 72$

Question ID : 264330117486
Status : Answered
Chosen Option : 4

Q.7 'A + B' means 'B is the father of A'
'A - B' means 'B is the mother of A'
'A \$ B' means 'B is the husband of A'
If A + B - C \$ D, then how is D related to A?

- Ans 1. Father's brother
 2. Father's father
 3. Son
 4. Father

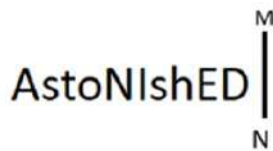
Question ID : 26433068526
Status : Answered
Chosen Option : 2

Q.8 Which letter-cluster will replace the question mark (?) to complete the given series?
CVRK, FYUN, ?, LEAT, OHDW

- Ans 1. IBXQ
 2. ICXQ
 3. JCXQ
 4. JBXQ

Question ID : 26433067942
Status : Answered
Chosen Option : 1

Q.9 Select the correct mirror image of the given figure when the mirror is placed at MN as shown below.



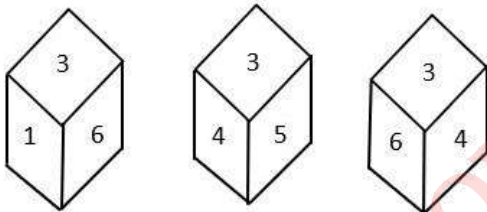
- Ans
- ✓ 1. AstoNlshED
 - ✗ 2. astoNlshED
 - ✗ 3. AstoNlshED
 - ✗ 4. astoNlshED

Question ID : 26433085554

Status : Answered

Chosen Option : 1

Q.10 Three different positions of the same dice are shown. Find the number on the face opposite the face showing ' 3 '.



- Ans
- ✗ 1. 6
 - ✓ 2. 2
 - ✗ 3. 5
 - ✗ 4. 4

Question ID : 26433090071

Status : Answered

Chosen Option : 2

Q.11 Seven people, J, K, L, M, N, O and P are sitting in a straight row, facing north. J sits fourth to the left of N. O sits third to the right of J. M sits fourth to the left of O. Only three people sit between P and L. No one sits to the left of L. Who sits at the second position from the right end of the row?

- Ans
- ✗ 1. P
 - ✗ 2. N
 - ✓ 3. O
 - ✗ 4. M

Question ID : 26433068283

Status : Answered

Chosen Option : 3

Q.12 In a code language, 'he is late' is coded as 'ah hu lu', 'she is expected' is coded as 'bo hu ma', and 'she arrived late' is coded as 'bo ka lu'. What is the code for the word 'arrived'?

- Ans
- 1. bo
 - 2. lu
 - 3. ka
 - 4. hu

Question ID : 26433069470
Status : Answered
Chosen Option : 3

Q.13 A, B, C, D, and E are five students sitting around a circular table facing the centre. D sits to the immediate right of A. C is not sitting next to D or A. E is sitting to the immediate right of C. Who is sitting to the immediate right of D?

- Ans
- 1. E
 - 2. B
 - 3. A
 - 4. C

Question ID : 264330114203
Status : Answered
Chosen Option : 2

Q.14 Which of the following numbers will replace the question mark (?) in the given series?
1, 2, 3, 5, 8, ?, 21, 34

- Ans
- 1. 17
 - 2. 16
 - 3. 11
 - 4. 13

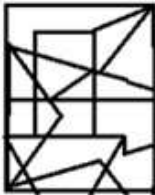
Question ID : 26433076752
Status : Answered
Chosen Option : 4

Q.15 Select the option figure in which the given figure is embedded (rotation is NOT allowed).

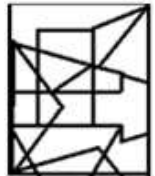


Ans

✗ 1.



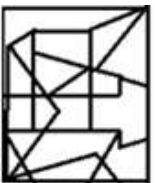
✓ 2.



✗ 3.



✗ 4.



Question ID : 26433069251
Status : Answered
Chosen Option : 4

Q.16 Select the option that is related to the third word in the same way as the second word is related to the first word. (The words must be considered as meaningful English words and must not be related to each other based on the number of letters/number of consonants/vowels in the word.)
Ostrich : Bird :: Frog : ?

Ans

✗ 1. Reptile

✗ 2. Mammal

✓ 3. Amphibian

✗ 4. Rodent

Question ID : 26433067363
Status : Answered
Chosen Option : 1

Q.17 Three statements are given, followed by three conclusions numbered I, II and III. Assuming the statements to be true, even if they seem to be at variance with commonly known facts, decide which of the conclusions logically follow(s) from the statements.

Statements:

Some chairs are beds.

Some tables are desks.

All beds are tables.

Conclusions:

I. Some chairs are tables.

II. Some desks are beds.

III. Some desks are chairs.

- Ans
- 1. All the conclusions follow
 - 2. Only conclusion I follows
 - 3. Only conclusion II follows
 - 4. Only conclusion III follows

Question ID : 26433085680

Status : Answered

Chosen Option : 2

Q.18 Which option represents the correct order of the given words as they would appear in the English dictionary?

1 fragile

2 frame

3 friction

4 fragment

5 fragrance

- Ans
- 1. 1,4,5,3,2
 - 2. 1,5,4,2,3
 - 3. 1,4,5,2,3
 - 4. 1,5,4,3,2

Question ID : 26433069301

Status : Answered

Chosen Option : 3

Q.19 Select the correct combination of mathematical signs to sequentially replace the * signs and to balance the given equation.

$6 * 14 * 2 * 1 * 11 * 52$

- Ans
- 1. $\times, \div, -, +, =$
 - 2. $\times, \div, -, \times, =$
 - 3. $\times, -, \div, +, =$
 - 4. $\times, \div, -, -, =$

Question ID : 26433082882

Status : Answered

Chosen Option : 1

Q.20 Select the option that is related to the fifth number in the same way as the second number is related to the first number and the fourth number is related to the third number.

64 : 5 :: 49 : 4 :: 81 : ?

Ans 1. 6

2. 9

3. 3

4. 8

Question ID : 26433069410

Status : Answered

Chosen Option : 1

Section : Part-B-General Knowledge and General awareness

Q.1 Who is known as the father of Green Revolution in the World?

Ans 1. R.K.V. Rao

2. Norman Borlaug

3. M.S. Swaminathan.

4. Raja Krishna

Question ID : 264330116150

Status : Answered

Chosen Option : 3

Q.2 Which of the following country was not a part of 2019 South Asian Games?

Ans 1. Taiwan

2. Bangladesh

3. Bhutan

4. India

Question ID : 264330115936

Status : Answered

Chosen Option : 1

Q.3 Chhath Puja, an ancient Hindu festival, can fall in which of the following months?

Ans 1. March

2. November

3. August

4. May

Question ID : 264330115108

Status : Answered

Chosen Option : 1

Q.4 _____ is known as Golden Fiber.

- Ans 1. Jute
 2. Corn
 3. Cotton
 4. Synthetic thread

Question ID : 264330115396
Status : Answered
Chosen Option : 1

Q.5 What is the trophic level of dead organic matter in detritus food chain?

- Ans 1. third
 2. fourth
 3. second
 4. first

Question ID : 264330115246
Status : Answered
Chosen Option : 4

Q.6 कौन सी योजना प्रत्येक सहायता प्राप्त परिवार को तीन वर्ष के भीतर गरीबी रेखा से ऊपर लाने के लिए देश के ग्रामीण क्षेत्रों में शुरू की गई?

- Ans 1. ग्रामीण उद्यमी योजना
 2. प्रधानमंत्री रोजगार योजना
 3. गरीब कल्याण रोजगार योजना
 4. स्वर्णजयंती ग्राम स्वरोजगार योजना

Question ID : 264330116070
Status : Answered
Chosen Option : 1

Q.7 किन क्षेत्रों में गहन निर्वाह कृषि की जाती है?

- Ans 1. भूमि पर आबादी दबाव रहित क्षेत्र
 2. भूमि पर औसत आबादी दबाव वाले क्षेत्र
 3. भूमि पर कम आबादी दबाव वाले क्षेत्र
 4. भूमि पर उच्च आबादी दबाव वाले क्षेत्र

Question ID : 264330115520
Status : Answered
Chosen Option : 4

Q.8 जनवरी 2022 में नागरिक उड्डयन मंत्रालय द्वारा राष्ट्रीय वायु खेल नीति (NASP) के ड्राफ्ट में किस प्रकार की शासन संरचना प्रस्तावित की गई थी?

- Ans 1. दो स्तरीय
 2. तीन स्तरीय
 3. चार स्तरीय
 4. एकल स्तरीय

Question ID : 264330114976
Status : Answered
Chosen Option : 1

Q.9 After how many Minutes Half Time starts in a Hockey match?

- Ans 1. 45 Minutes
 2. 30 Minutes
 3. 120 Minutes
 4. 90 Minutes

Question ID : 264330116284
Status : Answered
Chosen Option : 1

Q.10 As of November 2022, who among the following is the Chief Minister of Kerala, India?

- Ans 1. Pinarayi Vijayan
 2. Anandiben Patel
 3. Basavaraj Bommai
 4. Naveen Patnaik

Question ID : 264330114932
Status : Answered
Chosen Option : 1

Q.11 Which of the following books was written by Kautilya?

- Ans 1. Suktawali
 2. Indica
 3. Arthashastra
 4. Mudra Rakshasa

Question ID : 26433099147
Status : Answered
Chosen Option : 3

Q.12 Choose among the given options, the function of the budget is:

- Ans 1. to provide names of states
 2. to provide detailed description of incomes and expenditure of Government
 3. to provide description of states and union
 4. to provide details of villages

Question ID : 264330115273
Status : Answered
Chosen Option : 2

Q.13 An Act to provide for mental healthcare and services for persons with mental illness and to protect, promote and fulfill the rights of such persons is called _____.

- Ans 1. Mental Health Act, 2017
 2. Mentally Disable Act, 2017
 3. Mental Healthcare Act, 2017
 4. Mental Peace Act, 2017

Question ID : 264330116216
Status : Answered
Chosen Option : 3

Q.14 सहायक गठबंधन प्रणाली, जिसके तहत किसी भारतीय शासक को अपने खुद के सशस्त्र बलों को भंग करना पड़ता था और अपने क्षेत्र में ब्रिटिश सेना और निवासियों को स्वीकार करना पड़ता था, निम्नलिखित में से किसने शुरू की थी?

- Ans 1. लॉर्ड मिंटो
 2. लॉर्ड हेस्टिंग्स
 3. लॉर्ड विलियम बेंटिक
 4. लॉर्ड वैलेस्ली

Question ID : 26433099164
Status : Answered
Chosen Option : 4

Q.15 Kathakali primarily originated from which of the following states?

- Ans 1. Karnataka
 2. Kerala
 3. Andhra Pradesh
 4. Tamil Nadu

Question ID : 264330115059
Status : Answered
Chosen Option : 2

Q.16 Yumlembam Gambhini Devi was awarded the Padma Shri for which art form?

- Ans
- 1. Lavani
 - 2. Kathakali
 - 3. Manipuri
 - 4. Kathak

Question ID : 264330115870
Status : Not Answered
Chosen Option : --

Q.17 In post-independent India, the first elected Parliament came into existence in _____.

- Ans
- 1. April 1952
 - 2. April 1957
 - 3. March 1957
 - 4. March 1951

Question ID : 26433089915
Status : Answered
Chosen Option : 4

Q.18 _____ is the common name of Silicon Dioxide.

- Ans
- 1. Quartz
 - 2. Plaster of Paris
 - 3. Slaked Lime
 - 4. White Vitriol

Question ID : 264330115167
Status : Answered
Chosen Option : 1

Q.19 Seventh Schedule of the Indian Constitution deals with _____.

- Ans
- 1. Powers of Parliament
 - 2. Panchayat Raj
 - 3. Judiciary of the states
 - 4. Distribution of power between centre and states

Question ID : 264330115608
Status : Answered
Chosen Option : 4

Q.20 What kind of weather conditions are experienced as the distance from sea increases?

- Ans 1. Extreme
 2. Light
 3. Moderate
 4. Temperate

Question ID : 264330115975
Status : Answered
Chosen Option : 4

Section : Part-C-Elementary Mathematics

Q.1 Ajit takes twice as much time as Arun and thrice as much time as Sanjeev to complete a job. If working together, all three can complete it in 53 hours, then find the time taken by Sanjeev alone to complete the job.

- Ans 1. 105 hours
 2. 100 hours
 3. 106 hours
 4. 103 hours

Question ID : 26433074944
Status : Answered
Chosen Option : 3

Q.2 In a school, 20% of the boys is the same in number as $\frac{2}{3}$ of the girls. What is the ratio of boys to girls in that school?

- Ans 1. 10 : 9
 2. 3 : 10
 3. 9 : 10
 4. 10 : 3

Question ID : 26433073020
Status : Answered
Chosen Option : 4

Q.3 Amit can complete a piece of work in 120 days. Amit and Sejal can complete the same work in 72 days. They started together but Sejal left after working for 20 days. Find the approximate number of days in which Amit will complete the remaining work.

- Ans 1. 87 days
 2. 76 days
 3. 90 days
 4. 84 days

Question ID : 264330116900
Status : Answered
Chosen Option : 1

Q.4 A person follows a strict diet and loses his weight from 80 kg to 72 kg in a month. The percent weight loss of the person is:

- Ans
- 1. 12 percent
 - 2. 10 percent
 - 3. 8 percent
 - 4. 5 percent

Question ID : 264330116820
Status : Answered
Chosen Option : 2

Q.5 The marked price of an article is Rs.1000 and shopkeeper gave 40 percent discount. What will be the selling price ?

- Ans
- 1. Rs. 700
 - 2. Rs. 400
 - 3. Rs. 600
 - 4. Rs 500

Question ID : 264330116712
Status : Answered
Chosen Option : 3

Q.6 Two years ago, the population of a city was 260000. If the population is depreciating by 4% every year, its present population now is:

- Ans
- 1. 139616
 - 2. 239000
 - 3. 239616
 - 4. 339610

Question ID : 26433081038
Status : Answered
Chosen Option : 3

Q.7 Three runners start running on a circular track. They start from the same point at 6 AM and take 12 seconds, 15 seconds and 24 seconds respectively to finish 1 round. At what time will they meet again at the starting point?

- Ans
- 1. 6:03:20 AM
 - 2. 6:02:30 AM
 - 3. 6:01:40 AM
 - 4. 6:02:00 AM

Question ID : 264330116649
Status : Answered
Chosen Option : 4

Q.8 A man rows downstream to some destination and returns in 3 hours. If the speed of the boat in still water and the speed of stream are 6 km/h and 3 km/h, respectively, then the distance of the destination from the starting place is:

- Ans
- 1. 6.75 km
 - 2. 5.55 km
 - 3. 3.25 km
 - 4. 4.20 km

Question ID : 26433074998
Status : Answered
Chosen Option : 1

Q.9 How many two-digit numbers are divisible by 6?

- Ans
- 1. 12
 - 2. 18
 - 3. 15
 - 4. 16

Question ID : 26433075808
Status : Answered
Chosen Option : 3

Q.10 The curved surface area of a cone is 1100 cm^2 . If the diameter of the cone is 28 cm, then the slant height of the cone is:

(use $\pi = \frac{22}{7}$)

- Ans
- 1. 37.5 cm
 - 2. 12.5 cm
 - 3. 44 cm
 - 4. 25 cm

Question ID : 26433087413
Status : Answered
Chosen Option : 4

Q.11 The prices of a school bag and a shoe are in the ratio 11 : 9. The price of a school bag is Rs.450 more than the price of a shoe. The price of a shoe is:

- Ans
- 1. Rs. 2,000
 - 2. Rs. 2,025
 - 3. Rs. 2,050
 - 4. Rs. 2,150

Question ID : 26433081017
Status : Answered
Chosen Option : 2

Q.12 A merchant marks up his goods by 20% and gives a discount of 10%. He uses a faulty balance which measures 800 grams instead of 1 kg. What is his net percentage profit?

- Ans
- 1. 20%
 - 2. 25%
 - 3. 35%
 - 4. 15%

Question ID : 26433075726
Status : Answered
Chosen Option : 3

Q.13 A boy buys a toy car for Rs.650 and sells it for Rs.750. Find the gain percentage.

- Ans
- 1. 13.33%
 - 2. 15.38%
 - 3. 16.38%
 - 4. 14.38%

Question ID : 26433065064
Status : Answered
Chosen Option : 2

Q.14 If the volume of a cylindrical pillar is 924 m^3 and its curved surface area is 264 m^2 , then the total surface area is:

- Ans
- 1. $182 \pi \text{ m}^2$
 - 2. 184 m^2
 - 3. $164 \pi \text{ m}^2$
 - 4. 164 m^2

Question ID : 26433075898
Status : Answered
Chosen Option : 1

Q.15 A shopkeeper earns a profit of 8% after offering a 15% discount on the marked price. To clear the stock, the shopkeeper offers a successive discount of $x\%$ and earns no profit or loss. What is the value (approximate) of ' x '?

- Ans
- 1. 7.8
 - 2. 7.6
 - 3. 7.4
 - 4. 8.0

Question ID : 26433081710
Status : Answered
Chosen Option : 4

Q.16 Rashmi brought 50 books at the rate of Rs.80 each, 46 pens at the rate of Rs.60 each and 60 pencils at the rate of Rs.30 each. Calculate the average price (in Rs.) of all the stationary goods. (Rounded up to 2 decimal places)

- Ans
- 1. Rs.49.87
 - 2. Rs.65.79
 - 3. Rs.46.77
 - 4. Rs.54.87

Question ID : 26433082706
Status : Answered
Chosen Option : 4

Q.17 If the simple interest on a sum of money at 6% per annum for 2 years is Rs.1,800, find the compound interest on the same sum for the same period at the same rate, compounding annually?

- Ans
- 1. Rs.1,584
 - 2. Rs.1,458
 - 3. Rs.1,548
 - 4. Rs.1,854

Question ID : 26433073027
Status : Answered
Chosen Option : 4

Q.18 Find the mean proportional of 500 and 8000.

- Ans
- 1. 200
 - 2. 4000
 - 3. 2000
 - 4. 632.46

Question ID : 26433080322
Status : Answered
Chosen Option : 3

Q.19 The average age of 2 children of a family is 12 years. The average age of father, mother and 2 children is 30 years. If the father is 4 years elder to the mother, then find the age of the father?

- Ans
- 1. 52 years
 - 2. 50 years
 - 3. 48 years
 - 4. 46 years

Question ID : 264330116680
Status : Answered
Chosen Option : 2

Q.20 A man walks from P to Q at a speed 10 km/h, but comes back from Q to P at 12 km/h.
Find his average speed.

- Ans
- 1. $10\frac{10}{11}$ km/h
 - 2. $11\frac{10}{11}$ km/h
 - 3. $9\frac{10}{11}$ km/h
 - 4. $\frac{10}{11}$ km/h

Question ID : 26433064030
Status : Answered
Chosen Option : 1

Section : Part-D-English

Q.1 Select the most appropriate synonym of the word given below to fill in the blank in the following sentence.

Adversity

The sage said, "One should keep patience during _____".

- Ans
- 1. good times
 - 2. tribute
 - 3. challenges
 - 4. hardships

Question ID : 26433084775
Status : Answered
Chosen Option : 4

Q.2 Select the most appropriate synonym for the underlined word in the given sentence.

The wily Jerry mouse very deftly removed the cheese from the trap.

- Ans
- 1. worn
 - 2. crafty
 - 3. worrisome
 - 4. wise

Question ID : 26433073755
Status : Answered
Chosen Option : 2

Q.3 Select the most appropriate option that can substitute the underlined words in the given sentence.

Hima was so affected by the movie that she has not speak a word to anyone for a week.

- Ans
- 1. that she has not been spoken a word
 - 2. that she is speaking
 - 3. that she has been speaking
 - 4. that she did not speak a word

Question ID : 26433099935
Status : Answered
Chosen Option : 4

Q.4 Select the INCORRECTLY spelt word

- Ans
- 1. Radar
 - 2. Rather
 - 3. Robber
 - 4. Rebber

Question ID : 26433071817
Status : Answered
Chosen Option : 4

Q.5 Select the most appropriate meaning of the given idiom.

Forty winks

- Ans
- 1. To do something forty times
 - 2. To take a short nap
 - 3. To hurry and rush
 - 4. To be worried

Question ID : 26433073706
Status : Answered
Chosen Option : 3

Q.6 The following sentence has been split into four segments. Identify the segment that contains a grammatical error.

When I / was / young, I / play hockey.

- Ans
- 1. was
 - 2. When I
 - 3. young, I
 - 4. play hockey

Question ID : 26433092277
Status : Answered
Chosen Option : 4

Q.7 Select the most appropriate ANTONYM of the given word.

Common

- Ans 1. Rare
 2. Ordinary
 3. Boring
 4. Shocking

Question ID : 26433086375
Status : Answered
Chosen Option : 1

Q.8 Select the most appropriate ANTONYM of the given word.

Hostility

- Ans 1. Silliness
 2. Enmity
 3. Absurdity
 4. Friendship

Question ID : 26433073919
Status : Answered
Chosen Option : 4

Q.9 Parts of the given sentence have been given as options. One of them contains a spelling error. Select the option that rectifies the error.

The Magdeburg water bridge is the longest navigable aquaduct built over the river Elbe in Germany.

- Ans 1. navaigable
 2. longgest
 3. aqueduct
 4. brige

Question ID : 26433072044
Status : Answered
Chosen Option : 3

Q.10 Select the most appropriate antonym of the bracketed word to fill in the blank.

It would be _____ (annoying) to watch India hosting the World Cup and winning it at the same time.

- Ans 1. irksome
 2. plaguy
 3. pesky
 4. delightful

Question ID : 26433060717
Status : Answered
Chosen Option : 1

Q.11 Select the most appropriate option to fill in the blank.

Evelyn became very angry; it seemed to her that she _____ never fulfil her dream of being a great musician.

- Ans 1. would
 2. will
 3. can
 4. ought to

Question ID : 26433090440
Status : Answered
Chosen Option : 1

Q.12 Select the most appropriate option to fill in the blank.

The Kathakali dance form, which combines music, dance, poetry, drama and mime, uses _____ costumes.

- Ans 1. elaborate
 2. scruffy
 3. generic
 4. gaudy

Question ID : 26433071743
Status : Answered
Chosen Option : 3

Q.13 Select the most appropriate meaning of the given idiom.

A Penelope's web

- Ans 1. A daily job
 2. An important job
 3. An endless job
 4. A meaningless job

Question ID : 26433070685
Status : Answered
Chosen Option : 4

Q.14 Select the most appropriate option to fill in the blank.

Don't go to the neighbour's garden, _____ not allowed to go there.

- Ans 1. your
 2. yore
 3. yor
 4. you're

Question ID : 26433088939
Status : Answered
Chosen Option : 4

**Q.15 Which of the following options is most similar in meaning to the given word?
Laudable**

- Ans** 1. Preventable
 2. Praiseworthy
 3. Sensible
 4. Returnable

Question ID : 26433088813
Status : Answered
Chosen Option : 2

Comprehension:

In the following passage, some words have been deleted. Read the passage carefully and select the most appropriate option to fill in each blank.

The Chinese rulers were called the Shang. Chinese civilisation is one of the oldest civilisations of the world which (1)_____ in north-east China. The Chinese had thought (2)_____ a very clever way of casting weapons and pots which were made of bronze. These people first made a rough model of the object they wanted to cast or make. Then, they shaped the clay mould closely (3)_____ the prepared model. When the clay was dry, the mould was (4)_____ and cut into pieces. These carved pieces were filled with molten bronze and left to cool down. In the final process, the mould was removed and a perfectly formed object was (5)_____.

SubQuestion No : 16

Q.16 Select the most appropriate option to fill in blank number 1.

- Ans** 1. flourished
 2. flaunted
 3. displayed
 4. exhibited

Question ID : 26433088885
Status : Answered
Chosen Option : 4

Comprehension:

In the following passage, some words have been deleted. Read the passage carefully and select the most appropriate option to fill in each blank.

The Chinese rulers were called the Shang. Chinese civilisation is one of the oldest civilisations of the world which (1)_____ in north-east China. The Chinese had thought (2)_____ a very clever way of casting weapons and pots which were made of bronze. These people first made a rough model of the object they wanted to cast or make. Then, they shaped the clay mould closely (3)_____ the prepared model. When the clay was dry, the mould was (4)_____ and cut into pieces. These carved pieces were filled with molten bronze and left to cool down. In the final process, the mould was removed and a perfectly formed object was (5)_____.

SubQuestion No : 17

Q.17 Select the most appropriate option to fill in blank number 2.

- Ans** 1. down
 2. in
 3. up
 4. into

Question ID : 26433088886
Status : Answered
Chosen Option : 3

Comprehension:

In the following passage, some words have been deleted. Read the passage carefully and select the most appropriate option to fill in each blank.

The Chinese rulers were called the Shang. Chinese civilisation is one of the oldest civilisations of the world which (1)_____ in north-east China. The Chinese had thought (2)_____ a very clever way of casting weapons and pots which were made of bronze. These people first made a rough model of the object they wanted to cast or make. Then, they shaped the clay mould closely (3)_____ the prepared model. When the clay was dry, the mould was (4)_____ and cut into pieces. These carved pieces were filled with molten bronze and left to cool down. In the final process, the mould was removed and a perfectly formed object was (5)_____.

SubQuestion No : 18

Q.18 Select the most appropriate option to fill in blank number 3.

- Ans
- 1. beside
 - 2. across
 - 3. around
 - 4. behind

Question ID : 26433088887

Status : Answered

Chosen Option : 2

Comprehension:

In the following passage, some words have been deleted. Read the passage carefully and select the most appropriate option to fill in each blank.

The Chinese rulers were called the Shang. Chinese civilisation is one of the oldest civilisations of the world which (1)_____ in north-east China. The Chinese had thought (2)_____ a very clever way of casting weapons and pots which were made of bronze. These people first made a rough model of the object they wanted to cast or make. Then, they shaped the clay mould closely (3)_____ the prepared model. When the clay was dry, the mould was (4)_____ and cut into pieces. These carved pieces were filled with molten bronze and left to cool down. In the final process, the mould was removed and a perfectly formed object was (5)_____.

SubQuestion No : 19

Q.19 Select the most appropriate option to fill in blank number 4.

- Ans
- 1. slipped
 - 2. closed
 - 3. removed
 - 4. distanced

Question ID : 26433088888

Status : Answered

Chosen Option : 3

Comprehension:

In the following passage, some words have been deleted. Read the passage carefully and select the most appropriate option to fill in each blank.

The Chinese rulers were called the Shang. Chinese civilisation is one of the oldest civilisations of the world which (1)_____ in north-east China. The Chinese had thought (2)_____ a very clever way of casting weapons and pots which were made of bronze. These people first made a rough model of the object they wanted to cast or make. Then, they shaped the clay mould closely (3)_____ the prepared model. When the clay was dry, the mould was (4)_____ and cut into pieces. These carved pieces were filled with molten bronze and left to cool down. In the final process, the mould was removed and a perfectly formed object was (5)_____.

SubQuestion No : 20

Q.20 Select the most appropriate option to fill in blank number 5.

- Ans 1. dropped
 2. disclosed
 3. revealed
 4. divulged

Question ID : 26433088889
Status : Answered
Chosen Option : 2

Section : Part-D-Hindi

Q.1 'जिस पर आक्रमण न किया गया हो' वाक्यांश के लिए एक शब्द है-

- Ans 1. आक्रांत
 2. आक्रमणशील
 3. अनाधिकृत
 4. अनाक्रांत

Question ID : 26433062156
Status : Not Answered
Chosen Option : --

Q.2 निम्नलिखित वाक्यांश के लिए सार्थक शब्द चुनिए।
अवसर के अनुसार बदल जाने वाला

- Ans 1. अवश्यभावी
 2. स्वार्थन्वेषी
 3. अवसरवादी
 4. फायदामंद

Question ID : 26433069981
Status : Not Answered
Chosen Option : --

Q.3 वर्तनी की दृष्टि से दिए गए वाक्य के अशुद्ध भाग का चयन कीजिए-
घोषणा की गई कि लोग अपने-अपने हथियार मालखाने में जमा कर दें।

- Ans
- 1. घोषणा की गई
 - 2. में जमा कर दें।
 - 3. कि लोग अपने-अपने
 - 4. हथियार मालखाने

Question ID : 26433062883
Status : Not Answered
Chosen Option : --

Q.4 शब्द विचार की दृष्टि से क्रिया विशेषण शब्द है-

- Ans
- 1. विकारी
 - 2. अविकारी
 - 3. सकर्मक
 - 4. अकर्मक

Question ID : 26433085047
Status : Not Answered
Chosen Option : --

Q.5 निम्नलिखित मुहावरे का सही अर्थ विकल्पों में से चुनिए।
छाती पर कोदो दलना

- Ans
- 1. प्रतिशोधात्मक कष्ट पहुँचाना
 - 2. लापरवाह होना
 - 3. पीछे लगे रहना
 - 4. कुछ भी ध्यान न देना

Question ID : 26433070011
Status : Not Answered
Chosen Option : --

Q.6 निम्नलिखित विकल्पों में से किस एक वाक्य में 'अनृत' शब्द के लिए उचित विलोम का प्रयोग हुआ है?

- Ans
- 1. सत्य की विजय होती है।
 - 2. वह बेहतर करता है।
 - 3. वह अपराधी है।
 - 4. वह सुन्दर है।

Question ID : 26433091190
Status : Not Answered
Chosen Option : --

Q.7 निम्नलिखित वाक्य में उचित विकल्प चुनकर शब्द बदलें-
'उसकी भाषा सरल और सुबोधपूर्ण होती है।'

- Ans
- 1. सरल और सुबोध
 - 2. सरस और सुबोधपूर्ण
 - 3. सरल और सुबोध
 - 4. सहज और सुबोधक

Question ID : 26433062807
Status : Not Answered
Chosen Option : --

Q.8 निम्न में से कौन-सा शब्द 'समुद्र' शब्द का पर्यायवाची शब्द है?

- Ans
- 1. नीरज
 - 2. अम्बर
 - 3. सागर
 - 4. वारिद

Question ID : 26433067077
Status : Not Answered
Chosen Option : --

Q.9 'तुम्हारे तो साँस में दम हो गया।' इस वाक्य में 'साँस' के स्थान पर उपयुक्त शब्द क्या होगा?

- Ans
- 1. आँख
 - 2. नाक
 - 3. मुँह
 - 4. सर

Question ID : 26433066802
Status : Not Answered
Chosen Option : --

Q.10 'आँवले के रस का उपयोग आपके लिए लाभकारी साबित होगा।' उपरोक्त वाक्य में प्रयुक्त 'उपयोग' शब्द का सही अर्थ क्या होगा?

- Ans
- 1. फायदेमंद
 - 2. धोना
 - 3. लाभकारी
 - 4. पीना

Question ID : 26433080916
Status : Not Answered
Chosen Option : --

Q.11 दिए गए विकल्पों में से कौन सा शब्द निम्नलिखित वाक्य में रेखांकित शब्द का पर्यायवाची नहीं है?
'समुद्र' पर सेतु का निर्माण करना उन्नत यात्रिकी का परिणाम है।

- Ans 1. रवि
 2. पयोधि
 3. रत्नाकर
 4. अर्णव

Question ID : 26433091342
Status : Not Answered
Chosen Option : --

Q.12 निम्नलिखित वाक्य के किस शब्द में अशुद्धि है?
लोग रबीवार को छुट्टी मनाते हैं।

- Ans 1. छुट्टी
 2. रबीवार
 3. मनाते
 4. लोग

Question ID : 26433066769
Status : Not Answered
Chosen Option : --

Q.13 निम्नलिखित मुहावरे के लिए उपयुक्त सार्थक शब्द क्या होगा?
दांतों तले उंगली दबाना

- Ans 1. आश्चर्य करना
 2. खुश होना
 3. भूखे पेट होना
 4. गरीब होना

Question ID : 26433065772
Status : Not Answered
Chosen Option : --

Q.14 निम्नलिखित वाक्यांश के लिए उपयुक्त सार्थक शब्द क्या होगा?
सरकारी अधिकारियों का शासन

- Ans 1. राजशाही
 2. नौकरशाही
 3. सरकार
 4. शासन

Question ID : 26433073314
Status : Not Answered
Chosen Option : --

Q.15 निम्न विकल्पों में से किसमें गलत अपादान कारक का प्रयोग हुआ है?

- Ans
- 1. वह लखनऊ से आया है।
 - 2. दूध से दही बनता है।
 - 3. मेरे हाथ से छड़ी छूट पड़ी।
 - 4. वह मुझको अलग रहता है।

Question ID : 26433063032

Status : Not Answered

Chosen Option : --

Comprehension:

निम्नलिखित गद्यांश में कुछ शब्दों को हटा दिया गया है। दिए गए विकल्पों की सहायता से रिक्त स्थानों की पूर्ति कीजिए। प्रत्येक संख्या के लिए सबसे उपयुक्त विकल्प का चयन कीजिए।
आम एक ऐसा फल है, जो बच्चों को ही नहीं, बड़ों को भी 1. _____ है। इसीलिए इसे फलों का राजा कहते हैं। इसकी बहुत सी 2. _____ होती है। स्वास्थ्य के लिए यह बहुत 3. _____ होता है। इसका अचार डाला जाता है, जिसका सब बहुत वर्षों तक 4. _____ करते हैं। दूध के साथ इसका रस निकालकर पीया जाता है। यद्यपि बाग से आम तोड़कर खाना चोरी होती है, पर बच्चों के लिए तो यह खेल है, मनोरंजन का 5. _____ है।

SubQuestion No : 16

Q.16 रिक्त स्थान 1 की पूर्ति के लिए सबसे उपयुक्त विकल्प का चयन कीजिए।

- Ans
- 1. फेंकना
 - 2. आनंद
 - 3. नापसंद
 - 4. पसंद

Question ID : 264330111089

Status : Not Answered

Chosen Option : --

Comprehension:

निम्नलिखित गद्यांश में कुछ शब्दों को हटा दिया गया है। दिए गए विकल्पों की सहायता से रिक्त स्थानों की पूर्ति कीजिए। प्रत्येक संख्या के लिए सबसे उपयुक्त विकल्प का चयन कीजिए।
आम एक ऐसा फल है, जो बच्चों को ही नहीं, बड़ों को भी 1. _____ है। इसीलिए इसे फलों का राजा कहते हैं। इसकी बहुत सी 2. _____ होती है। स्वास्थ्य के लिए यह बहुत 3. _____ होता है। इसका अचार डाला जाता है, जिसका सब बहुत वर्षों तक 4. _____ करते हैं। दूध के साथ इसका रस निकालकर पीया जाता है। यद्यपि बाग से आम तोड़कर खाना चोरी होती है, पर बच्चों के लिए तो यह खेल है, मनोरंजन का 5. _____ है।

SubQuestion No : 17

Q.17 रिक्त स्थान 2 की पूर्ति के लिए सबसे उपयुक्त विकल्प का चयन कीजिए।

- Ans
- 1. किस्में
 - 2. पेड़ों
 - 3. लाभ
 - 4. बातें

Question ID : 264330111090

Status : Not Answered

Chosen Option : --

Comprehension:

निम्नलिखित गद्यांश में कुछ शब्दों को हटा दिया गया है। दिए गए विकल्पों की सहायता से रिक्त स्थानों की पूर्ति कीजिए। प्रत्येक संख्या के लिए सबसे उपयुक्त विकल्प का चयन कीजिए।
आम एक ऐसा फल है, जो बच्चों को ही नहीं, बड़ों को भी 1. _____ है। इसीलिए इसे फलों का राजा कहते हैं। इसकी बहुत सी 2. _____ होती है। स्वास्थ्य के लिए यह बहुत 3. _____ होता है। इसका अचार डाला जाता है, जिसका सब बहुत वर्षों तक 4. _____ करते हैं। दूध के साथ इसका रस निकालकर पीया जाता है। यद्यपि बाग से आम तोड़कर खाना चोरी होती है, पर बच्चों के लिए तो यह खेल है, मनोरंजन का 5. _____ है।

SubQuestion No : 18

Q.18 रिक्त स्थान 3 की पूर्ति के लिए सबसे उपयुक्त विकल्प का चयन कीजिए।

- Ans 1. लाभदायक
 2. नुकसानदेह
 3. विकारक
 4. अग्निकारक

Question ID : 264330111091

Status : Not Answered

Chosen Option : --

Comprehension:

निम्नलिखित गद्यांश में कुछ शब्दों को हटा दिया गया है। दिए गए विकल्पों की सहायता से रिक्त स्थानों की पूर्ति कीजिए। प्रत्येक संख्या के लिए सबसे उपयुक्त विकल्प का चयन कीजिए।
आम एक ऐसा फल है, जो बच्चों को ही नहीं, बड़ों को भी 1. _____ है। इसीलिए इसे फलों का राजा कहते हैं। इसकी बहुत सी 2. _____ होती है। स्वास्थ्य के लिए यह बहुत 3. _____ होता है। इसका अचार डाला जाता है, जिसका सब बहुत वर्षों तक 4. _____ करते हैं। दूध के साथ इसका रस निकालकर पीया जाता है। यद्यपि बाग से आम तोड़कर खाना चोरी होती है, पर बच्चों के लिए तो यह खेल है, मनोरंजन का 5. _____ है।

SubQuestion No : 19

Q.19 रिक्त स्थान 4 की पूर्ति के लिए सबसे उपयुक्त विकल्प का चयन कीजिए।

- Ans 1. सेवन
 2. मनोरंजन
 3. इच्छा
 4. खाना

Question ID : 264330111092

Status : Not Answered

Chosen Option : --

Comprehension:

निम्नलिखित गद्यांश में कुछ शब्दों को हटा दिया गया है। दिए गए विकल्पों की सहायता से रिक्त स्थानों की पूर्ति कीजिए। प्रत्येक संख्या के लिए सबसे उपयुक्त विकल्प का चयन कीजिए।
आम एक ऐसा फल है, जो बच्चों को ही नहीं, बड़ों को भी 1. _____ है। इसीलिए इसे फलों का राजा कहते हैं। इसकी बहुत सी 2. _____ होती हैं। स्वास्थ्य के लिए यह बहुत 3. _____ होता है। इसका अचार डाला जाता है, जिसका सब बहुत वर्षों तक 4. _____ करते हैं। दूध के साथ इसका रस निकालकर पीया जाता है। यद्यपि बाग से आम तोड़कर खाना चोरी होती है, पर बच्चों के लिए तो यह खेल है, मनोरंजन का 5. _____ है।

SubQuestion No : 20

Q.20 रिक्त स्थान 5 की पूर्ति के लिए सबसे उपयुक्त विकल्प का चयन कीजिए।

- Ans
- 1. प्रकृति
 - 2. जीवन
 - 3. साधन
 - 4. प्राप्ति

Question ID : 264330111093

Status : Not Answered

Chosen Option : --

WWW.GOV TJOB SALE