

Constable GD in CAPFs SSF Rifleman GD in Assam Rifles and Sepoy in NCB Examination 2022

Roll Number	www.govtjobsalert.in
Candidate Name	www.govtjobsalert.in
Venue Name	iON Digital Zone iDZ 1 Moula Ali
Exam Date	16/01/2023
Exam Time	11:45 AM - 12:45 PM
Subject	Constable GD Examination 2022

Section : **Part-A-General Intelligence and Reasoning**

Q.1 Select the option that is related to the third word in the same way as the second word is related to the first word. (The words must be considered as meaningful English words and must not be related to each other based on the number of letters/number of consonants/vowels in the word.)

Doctor : Stethoscope :: Blacksmith : ?

- Ans
- 1. Axe
 - 2. Iron
 - 3. Pen
 - 4. Anvil

Question ID : 26433086257

Status : Answered

Chosen Option : 4

Q.2 Select the correct mirror image of the given figure when the mirror is placed at MN as shown below.



- Ans
- 1. 7 8 b F B G 2 T
 - 2. 7 8 p F B G 2 T
 - 3. 7 8 b F B G 2 T
 - 4. 7 2 G B F d 8 7

Question ID : 26433080811

Status : Answered

Chosen Option : 1

Q.3 Three Statements are given followed by Three conclusions numbered I, II and III. Assuming the statements to be true, even if they seem to be at variance with commonly known facts, decide which of the conclusions logically follow(s) from the statements.

Statements:

All pencils are houses.

All houses are cars.

All cars are trucks.

Conclusions:

I. Some houses are pencils.

II. Some cars are houses.

III. Some trucks are cars.

- Ans**
- 1. Both conclusions I and II follow.
 - 2. All conclusions follow.
 - 3. Both conclusions II and III follow.
 - 4. Both conclusions I and III follow.

Question ID : 26433074634

Status : Answered

Chosen Option : 2

Q.4 Which of the following options will replace the question mark (?) in the given series?
7, 14, 28, 56, ?, 224, 448

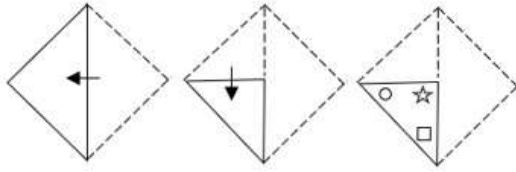
- Ans**
- 1. 116
 - 2. 124
 - 3. 112
 - 4. 108

Question ID : 26433089443

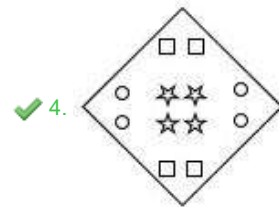
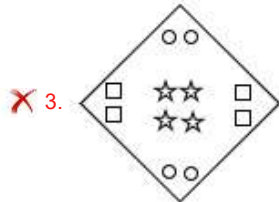
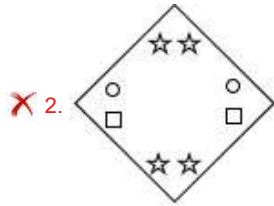

Status : Answered

Chosen Option : 3

Q.5 A paper is folded and cut as shown below. How will it appear when unfolded?



Ans



Question ID : 26433090951

Status : Answered

Chosen Option : 4

Q.6 'A + B' means 'A is the brother of B'.
 'A - B' means 'A is the mother of B'.
 'A × B' means 'A is the husband of B'.
 'A ÷ B' means 'A is the sister of B'.
 'A @ B' means 'A is the son of B'.
 If $C \div D @ E \times F - G$, how is C related to G?

Ans ✗ 1. Brother

✓ 2. Sister

✗ 3. Mother's sister

✗ 4. Sister's husband

Question ID : 26433087003

Status : Answered

Chosen Option : 2

Q.7 In a certain code language, the word 'FAME' is written as 'IDPH'. The word 'PINK' is written as 'SLQN'. How is the word 'RUDE' written in the same code language?

- Ans
- 1. UVIG
 - 2. UXGH
 - 3. TXGI
 - 4. TWHG

Question ID : 26433090104

Status : Answered

Chosen Option : 2

Q.8 Eight people, D, E, G, H, K, L, S and T are sitting in a straight line, facing north. E sits fourth from the right end of the line. No one sits between G and E. G sits third to the right of H. Only five people sit between K and H. L sits to the immediate right of T. S does not sit at any of the extreme ends of the line. How many people sit between S and D?

- Ans
- 1. None
 - 2. More than two
 - 3. Two
 - 4. One

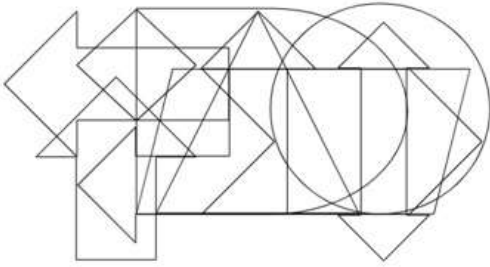
Question ID : 26433092423

Status : Answered

Chosen Option : 4

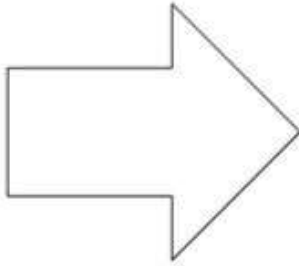
WWW.GOVtJOBSAlert.in

Q.9 Select the option figure which is embedded in the given figure. (Rotation is Not allowed)

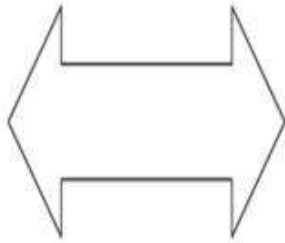


Ans


✗ 1.



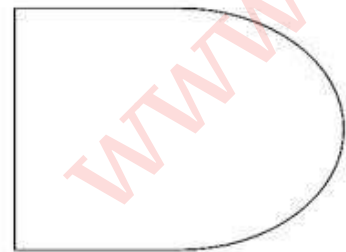
✗ 2.



✗ 3.



✓ 4.



Question ID : 26433085743
Status : Answered
Chosen Option : 4

Q.10 Which of the following numbers will replace the question mark (?) in the given series?
2, 4, 6, 10, 14, ?, 26, 34, 42

- Ans
- 1. 24
 - 2. 20
 - 3. 25
 - 4. 22

Question ID : 26433083119
Status : Answered
Chosen Option : 2

Q.11 Which letter cluster will replace the question mark (?) to complete the given series?
DKBN, EMYP, ?, GQST, HSPV

- Ans
- 1. FOVR
 - 2. GHVR
 - 3. HVRO
 - 4. ROVF

Question ID : 26433079423
Status : Answered
Chosen Option : 1

Q.12 Which two signs should be interchanged to make the below equation mathematically correct?

$$3 \times 144 - 6 \div 40 + 20 = 52$$

- Ans
- 1. ÷ and -
 - 2. + and ÷
 - 3. - and +
 - 4. + and ×

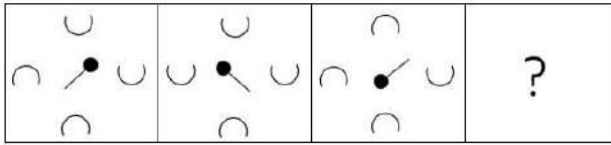
Question ID : 264330117560
Status : Answered
Chosen Option : 1

Q.13 In a certain code language, If FLED is coded as 3921 and GIFT is coded as 46317, how will HUNK be coded in that language?

- Ans
- 1. 8211411
 - 2. 19211316
 - 3. 720107
 - 4. 518118

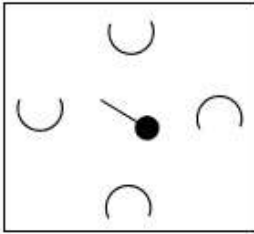
Question ID : 26433068066
Status : Answered
Chosen Option : 4

Q.14 Select the figure from among the given options that can replace the question mark (?) in the following series.

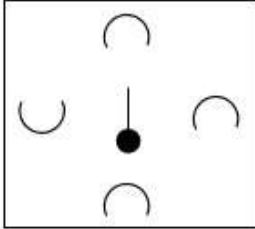


Ans

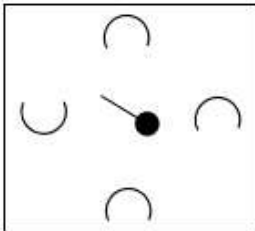
✓ 1.



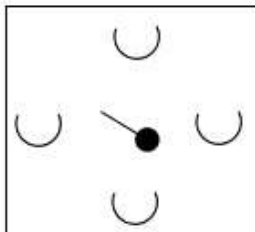
✗ 2.



✗ 3.



✗ 4.



Question ID : 26433080766

Status : Not Answered

Chosen Option : --

Q.15 Six students are sitting around a circular table facing the centre. A sits to the immediate left of C. E sits third to the right of D. D is an immediate neighbour of C. B is an immediate neighbour of both E and F. How many persons sit between C and B from either side?

Ans ✗ 1. 3

✗ 2. 1

✗ 3. 0

✓ 4. 2

Question ID : 26433079504

Status : Answered

Chosen Option : 4

Q.16 Select the correct combination of mathematical signs to sequentially replace the * signs and to balance the given equation.

$$14 * 3 * 8 * 8 * 6 * 7$$

- Ans
- 1. +, ×, =, -, ×
 - 2. +, ×, ×, -, =
 - 3. ×, +, -, =, ×
 - 4. -, =, +, ×, ×

Question ID : 26433094990

Status : Answered

Chosen Option : 3

Q.17 Select the set in which the numbers are related in the same way as are the numbers of the following sets.

(NOTE : Operations should be performed on the whole numbers, without breaking down the numbers into its constituent digits. E.g. 13 – Operations on 13 such as adding /subtracting/multiplying etc. to 13 can be performed. Breaking down 13 into 1 and 3 and then performing mathematical operations on 1 and 3 is not allowed)

(10, 450, 5)

(8, 360, 5)

- Ans
- 1. (7, 189, 3)
 - 2. (9, 340, 4)
 - 3. (7, 285, 5)
 - 4. (9, 223, 3)

Question ID : 26433076536

Status : Answered

Chosen Option : 1

Q.18 Which option represents the correct order of the given words as they would appear in the English dictionary?

- 1 Mountain
- 2 Mould
- 3 Monster
- 4 Mouth
- 5 Moving

- Ans
- 1. 2, 3, 1, 4, 5
 - 2. 3, 2, 1, 4, 5
 - 3. 1, 2, 3, 4, 5
 - 4. 4, 3, 2, 1, 5

Question ID : 26433081635

Status : Answered

Chosen Option : 2

Q.19 Which of the following terms will replace the question mark (?) in the given series?
BWGV, CUJR, DSMN, EQPJ, ?

- Ans
- 1. FOSE
 - 2. FSSF
 - 3. FOSF
 - 4. FSSN

Question ID : 26433069450
Status : Answered
Chosen Option : 3

Q.20 Select the option that is related to the fifth term in the same way as the second term is related to the first term and the fourth term is related to the third term.
MEMORY : NFNPSZ :: BRAIN : CSBJO :: DREAM : ?

- Ans
- 1. ESFBN
 - 2. EFFSE
 - 3. NBFSE
 - 4. NBFEF

Question ID : 26433057688
Status : Answered
Chosen Option : 1

Section : Part-B-General Knowledge and General awareness

Q.1 Atal Mission for Rejuvenation and Urban Transformation (AMRUT) 2.0 guidelines have been formulated with the aim of assisting states making our cities _____.

- Ans
- 1. water secure
 - 2. technologically friendly
 - 3. financially secure
 - 4. debt secure

Question ID : 264330116180
Status : Not Answered
Chosen Option : --

Q.2 Which of the following Articles of the Indian Constitution deals with the Right against Exploitation?

- Ans
- 1. Article 33 - 34
 - 2. Article 37 - 38
 - 3. Article 23 - 24
 - 4. Article 27 - 28

Question ID : 26433086805
Status : Answered
Chosen Option : 1

Q.3 Identify the element that is NOT a metalloid.

- Ans 1. Xenon
 2. Polonium
 3. Tellurium
 4. Germanium

Question ID : 26433086745
Status : Not Answered
Chosen Option : --

Q.4 Which of the following is correct regarding net national product?

- Ans 1. $NNP \equiv GNP - \text{Depreciation}$
 2. $NNP \equiv GNP \times \text{Depreciation}$
 3. $NNP \equiv GNP + \text{Depreciation}$
 4. $NNP \equiv GNP + \text{Depreciation}$

Question ID : 264330115347
Status : Not Answered
Chosen Option : --

Q.5 Which organization was founded in 1867 in Bombay?

- Ans 1. Theosophical society
 2. Prarthana Samaj
 3. Young Bengal Movement
 4. Ramkrishna Mission

Question ID : 264330115724
Status : Not Answered
Chosen Option : --

Q.6 In 2015, the Planning Commission was replaced with the _____.

- Ans 1. NITI Aayog
 2. NaBFID
 3. Monetary Policy Committee
 4. Competition Commission of India

Question ID : 26433066658
Status : Answered
Chosen Option : 1

Q.7 Norman Borlaug, father of Green Revolution in the world, was _____ (in terms of nationality).

- Ans 1. Spanish
 2. Indian
 3. American
 4. Chinese

Question ID : 264330115430
Status : Answered
Chosen Option : 3

Q.8 Which of the following Indian ministers hosted LeadIT summit with Sweden on the sidelines of United Nations Framework Convention on Climate Change (COP27)?

- Ans
- 1. Gajendra Singh Shekhawat
 - 2. Narayan Rane
 - 3. Kiren Rijiju
 - 4. Bhupender Yadav

Question ID : 264330115050
Status : Not Answered
Chosen Option : --

Q.9 As per Railway Yearbook 2019–20, what is the length (in km) of narrow gauge in India?

- Ans
- 1. 12365
 - 2. 20334
 - 3. 9876
 - 4. 1604

Question ID : 264330115594
Status : Not Answered
Chosen Option : --

Q.10 In which of the following countries was the ICC U19 Cricket World Cup 2022 organised?

- Ans
- 1. Bangladesh
 - 2. West Indies
 - 3. New Zealand
 - 4. South Africa

Question ID : 26433086731
Status : Not Answered
Chosen Option : --

Q.11 Which of the following states uses the bamboo drip irrigation system?

- Ans
- 1. Tripura
 - 2. Sikkim
 - 3. Meghalaya
 - 4. Assam

Question ID : 26433087890
Status : Not Answered
Chosen Option : --

Q.12 Phooldei, a harvest festival, is primarily celebrated in which of the following states of India?

- Ans 1. Meghalaya
 2. Uttarakhand
 3. Andhra Pradesh
 4. Gujarat

Question ID : 26433094892
Status : Not Answered
Chosen Option : --

Q.13 The National Commission for Women was set up as statutory body in January _____.

- Ans 1. 1992
 2. 1999
 3. 1995
 4. 1989

Question ID : 264330116043
Status : Not Answered
Chosen Option : --

Q.14 Deficiency of which of the following causes weak bones and tooth decay?

- Ans 1. Vitamin A
 2. Iodine
 3. Calcium
 4. Iron

Question ID : 264330115217
Status : Answered
Chosen Option : 3

Q.15 Who received the Best Dance director Award from the Assam Government?

- Ans 1. Jatin Goswami
 2. Krishna Ella
 3. Anuradha Pandey
 4. Amala Akkineni

Question ID : 264330115834
Status : Not Answered
Chosen Option : --

Q.16 Kusukuntla Prabhakar Reddy, became Member of Legislative Assembly from _____ constituency in Telangana, in November 2022.

- Ans
- 1. Hyderabad
 - 2. Warangal
 - 3. Munugode
 - 4. Secunderabad

Question ID : 264330114968
Status : Answered
Chosen Option : 3

Q.17 In the context of Basketball, which of the following statements is correct?

- Ans
- 1. A player is to be substituted within 20 seconds.
 - 2. Two teams of five players are required to start a game.
 - 3. Each basketball must have weight of minimum 700 grams
 - 4. The basketball game was invented in 1981.

Question ID : 26433089938
Status : Not Answered
Chosen Option : --

Q.18 Who among the following can issue ordinance when the state legislature is not in session and he is satisfied that immediate action is required?

- Ans
- 1. Chief Minister
 - 2. President
 - 3. Speaker of the Legislative Assembly
 - 4. Governor

Question ID : 26433086827
Status : Answered
Chosen Option : 2

Q.19 _____ was the capital of Magadha for several year before is was shifted to Pataliputra.

- Ans
- 1. Rajagriha
 - 2. Taxilla
 - 3. Sarnath
 - 4. Ujjain

Question ID : 26433085230
Status : Answered
Chosen Option : 1

Q.20 The world famous dancer Gulabo Sapera is known for which of the following dance forms?

- Ans
- 1. Ghoomar
 - 2. Chakari
 - 3. Kalbelia
 - 4. Bhavai

Question ID : 26433071454
Status : Not Answered
Chosen Option : --

Section : Part-C-Elementary Mathematics

Q.1 Evaluate the following.
 $75 - 50 \div 5 \text{ of } 2 + 36 \div 6 \text{ of } 4 \times 2 (18 - 5 \text{ of } 2)$

- Ans
- 1. 96
 - 2. 98
 - 3. 97
 - 4. 94

Question ID : 26433080146
Status : Not Attempted and Marked For Review
Chosen Option : --

Q.2 A and B together can complete a work in 26 days. A alone can complete it in 52 days. If B works at 50 percent efficiency, then in how many days A and B together will complete the work?

- Ans
- 1. $104/3$ days
 - 2. $107/3$ days
 - 3. $67/3$ days
 - 4. $58/3$ days

Question ID : 264330116864
Status : Not Attempted and Marked For Review
Chosen Option : --

Q.3 A thief is noticed by a policeman from a distance of 150 m. The thief starts running and the policeman chases him. The thief and policeman run at the speed of 11km/h and 12km/h, respectively. What is the distance between them after 6 minutes?

- Ans
- 1. 100 m
 - 2. 150 m
 - 3. 50 m
 - 4. 200 m

Question ID : 26433073038
Status : Not Attempted and Marked For Review
Chosen Option : --

Q.4 Ravi sold two bikes for ₹ 42,188 each. On one bike he gained 20% while on the other he lost 20%. How much per cent does he gain or lose overall?

- Ans
- 1. 4% gain
 - 2. 10% loss
 - 3. 4% loss
 - 4. 10% gain

Question ID : 26433075545
Status : Answered
Chosen Option : 3

Q.5 The average of 15 results is 60. If the average of the first eight results is 58, and that of the last six is 62, then find the ninth result.

- Ans
- 1. 62
 - 2. 60
 - 3. 64
 - 4. 63

Question ID : 26433080152
Status : Answered
Chosen Option : 3

Q.6 What is the LCM of 6 and 110?

- Ans
- 1. 440
 - 2. 300
 - 3. 330
 - 4. 660

Question ID : 26433082493
Status : Answered
Chosen Option : 3

Q.7 What is the surface area (in cm^2) of a sphere whose diameter is 21 cm?

- Ans
- 1. 2772
 - 2. 1386
 - 3. 3465
 - 4. 5544

Question ID : 26433081074
Status : Not Answered
Chosen Option : --

Q.8 What is the discount percentage on 'Buy 5 Get 3 Free'?

- Ans
- 1. 39.25%
 - 2. 36.5%
 - 3. 35.5%
 - 4. 37.5%

Question ID : 26433075729
Status : Answered
Chosen Option : 4

Q.9 What is 10 percent of 15 percent of 25 percent of ₹4,800?

- Ans
- 1. ₹24
 - 2. ₹21
 - 3. ₹18
 - 4. ₹16

Question ID : 26433079850
Status : Answered
Chosen Option : 3

Q.10 An amount of ₹8,00,000 is needed after 2 years to buy a car. The amount deposited in a bank gives 8% per annum interest. What should be the approximate amount to be deposited in present in the bank to meet the requirement; if the interest is compounded annually?

- Ans
- 1. ₹4,55,567
 - 2. ₹5,66,647
 - 3. ₹6,85,871
 - 4. ₹6,44,457

Question ID : 26433081723
Status : Not Attempted and Marked For Review
Chosen Option : --

Q.11 Find the compound interest, compounding annually on ₹22,500 in 2 years, if the rate of interest is 5% for the first year, and 8% for the second year.

- Ans
- 1. ₹3,015
 - 2. ₹3,215
 - 3. ₹3,315
 - 4. ₹3,115

Question ID : 26433080191
Status : Not Attempted and Marked For Review
Chosen Option : --

Q.12 A trader marks his goods at 50 percent above the cost price and allows a discount of 30 percent. What is his gain percent?

- Ans
- 1. 10 percent
 - 2. 6 percent
 - 3. 8 percent
 - 4. 5 percent

Question ID : 264330116749
Status : Answered
Chosen Option : 4

Q.13 If $\frac{2a+b}{a+4b} = 1$, then what is the value of $\frac{a+b}{a-b}$?

- Ans
- 1. 3
 - 2. 2
 - 3. 4
 - 4. 1

Question ID : 26433079870
Status : Answered
Chosen Option : 2

Q.14 30% of the men are over the age of 25 years, and 80% are under or equal to 50 years of age. Football is played by 20% of all men. What percentage of football players are under or equal to 50 years of age, if 20% of men over the age of 50 years play football?

- Ans
- 1. 77%
 - 2. 80%
 - 3. 71%
 - 4. 82%

Question ID : 26433076324
Status : Not Answered
Chosen Option : --

Q.15 If 18 workers can lay a road in 15 h, then how many more workers are required to lay the same road in 9 h?

- Ans
- 1. 15
 - 2. 18
 - 3. 12
 - 4. 30

Question ID : 26433075915
Status : Answered
Chosen Option : 4

Q.16 A batsman in his 13th inning makes a score of 85 runs and there by increases his average by five runs. What is his average after 13th innings?

- Ans 1. 26
 2. 25
 3. 23
 4. 20

Question ID : 26433080153
Status : Not Answered
Chosen Option : --

Q.17 In a circular race of 2,700 m, P and Q start from point A in opposite directions at speeds of 23 km/h and 49 km/h, respectively. What is the time taken by them to meet for the first time?

- Ans 1. 135 sec
 2. 130 sec
 3. 140 sec
 4. 145 sec

Question ID : 26433074462
Status : Not Answered
Chosen Option : --

Q.18 20 men can earn ₹520 in 6 days. How much money will 18 men earn in 10 days?

- Ans 1. ₹780
 2. ₹620
 3. ₹740
 4. ₹660

Question ID : 26433080134
Status : Not Answered
Chosen Option : --

Q.19 .What is the change in the curved surface area of a cylinder when we double the radius and the height is halved?

- Ans 1. Four times
 2. Tripled
 3. Doubled
 4. No change

Question ID : 26433073049
Status : Not Answered
Chosen Option : --

Q.20 Rishabh bought some T-shirts at 3 for ₹252, and sold them at 5 for ₹200. Find his gain or loss percentage.

- Ans
- 1. Loss 72.5%
 - 2. Loss 52.4%
 - 3. Gain 83.2%
 - 4. Gain 62.5%

Question ID : 26433080014
Status : Not Answered
Chosen Option : --

Section : Part-D-English

Q.1 Select the most appropriate synonym of the underlined word.

There was palpable tension in the negotiation room.

- Ans
- 1. indistinguishable
 - 2. imperceptible
 - 3. insensible
 - 4. detectable

Question ID : 26433088838
Status : Not Attempted and Marked For Review
Chosen Option : --

Q.2 Select the most appropriate option to fill in the blank.

He is determined to _____ any kind of task to prove his talent.

- Ans
- 1. entrust
 - 2. escape
 - 3. avoid
 - 4. undertake

Question ID : 26433074068
Status : Answered
Chosen Option : 4

Q.3 Select the most appropriate option to substitute the underlined segment in the given sentence to make it a meaningful sentence. If no substitution is required, select 'No substitution'.

Patients who do previous heart attacks and those with cardiac failure are at a higher risk of having a cardiac arrest.

- Ans
- 1. who have had previous heart attack and they with cardiac failure are at a higher risk of having
 - 2. who have had previous heart attacks and those of cardiac failure are at a higher risk of having
 - 3. No substitution
 - 4. who have had previous heart attacks and those with cardiac failure are at a higher risk of having

Question ID : 26433092047
Status : Answered
Chosen Option : 2

Q.4 Select the most appropriate synonym of the given word.

Dodge

- Ans 1. Cheat
 2. Determine
 3. Announce
 4. Advice

Question ID : 26433088490
Status : Not Answered
Chosen Option : --

Q.5 Select the correct option to substitute the underlined segment in the given sentence. If no substitution is required, select 'No substitution'.

The patient had died before the doctor came.

- Ans 1. will be dead
 2. No substitution
 3. died
 4. is dead

Question ID : 26433090807
Status : Marked For Review
Chosen Option : 2

Q.6 Select the most appropriate option to fill in the blank.

The patient suffered an epileptic _____.

- Ans 1. caesar
 2. scissors
 3. sizar
 4. seizure

Question ID : 26433087941
Status : Answered
Chosen Option : 2

Q.7 Select the option with the correct spelling of the underlined word in the given sentence.

In order to find the anamoly, scientists had to repeat the experiment over a hundred times.

- Ans 1. annomaly
 2. anomally
 3. anemoly
 4. anomaly

Question ID : 26433073607
Status : Answered
Chosen Option : 2

Q.8 The following sentence has been divided into parts. One of them may contain an error. Select the part that contains the error from the given options.

My friend Ragini /shall completed/ her task/ by then.

- Ans 1. her task
 2. shall completed
 3. by then
 4. My friend Ragini

Question ID : 26433089825
Status : Answered
Chosen Option : 2

Q.9 Select the most appropriate ANTONYM of the given word.

Sublime

- Ans 1. Singular
 2. Ordinary
 3. Apparent
 4. Equal

Question ID : 26433071984
Status : Not Answered
Chosen Option : --

Q.10 Select the most appropriate meaning of the underlined idiom that can be substituted in the following sentence.

She knows Spanish after a fashion.

- Ans 1. only after the fashion is done
 2. in a certain fashion
 3. in a fashionable way
 4. to only a certain extent

Question ID : 26433072233
Status : Answered
Chosen Option : 3

Q.11 Fill in the blanks with the correct homophone.

I _____ some essential items from the supermarket.

- Ans 1. bout
 2. boat
 3. bought
 4. bot

Question ID : 26433089750
Status : Answered
Chosen Option : 3

Q.12 Select the most appropriate option to substitute the underlined segment in the given sentence.

We hope these measure will take us further to a good position.

- Ans
- 1. hopes these measures will take us
 - 2. hope these measures will take us
 - 3. hope those measure will take us
 - 4. hope these measures will taking

Question ID : 26433093018
Status : Answered
Chosen Option : 2

Q.13 Select the most appropriate meaning of the given idiom.

A herculean task

- Ans
- 1. A machine work
 - 2. A tough job
 - 3. An important work
 - 4. A simple work

Question ID : 26433072814
Status : Answered
Chosen Option : 2

Q.14 Select the INCORRECTLY spelt word.

- Ans
- 1. Periphery
 - 2. Fractural
 - 3. Antagonistic
 - 4. Historigraphy

Question ID : 26433073656
Status : Answered
Chosen Option : 4

Q.15 In the given sentence, a word is given in brackets. Select the most appropriate ANTONYM of the word to fill in the blank.

The boss wanted complete information. He asked about every _____ (huge) detail.

- Ans
- 1. mighty
 - 2. minute
 - 3. solid
 - 4. significant

Question ID : 26433058368
Status : Answered
Chosen Option : 3

Comprehension:

In the following passage, some words have been deleted. Read the passage carefully and select the most appropriate option to fill in each blank.

I looked out (1) _____ the city. The sun hung low in the sky, shining weakly (2) _____ the clouds, casting long shadows on the grass. I realised that it would be (3) _____ soon. The sun would set, finally, the (4) _____ would rise in the sky. Another day (5) _____ end. Another day lost.

SubQuestion No : 16

Q.16 Select the most appropriate option to fill in blank number 1.

- Ans 1. outside
 2. under
 3. across
 4. inside

Question ID : 26433092835
Status : Answered
Chosen Option : 3

Comprehension:

In the following passage, some words have been deleted. Read the passage carefully and select the most appropriate option to fill in each blank.

I looked out (1) _____ the city. The sun hung low in the sky, shining weakly (2) _____ the clouds, casting long shadows on the grass. I realised that it would be (3) _____ soon. The sun would set, finally, the (4) _____ would rise in the sky. Another day (5) _____ end. Another day lost.

SubQuestion No : 17

Q.17 Select the most appropriate option to fill in blank number 2.

- Ans 1. into
 2. upon
 3. through
 4. though

Question ID : 26433092836
Status : Answered
Chosen Option : 1

Comprehension:

In the following passage, some words have been deleted. Read the passage carefully and select the most appropriate option to fill in each blank.

I looked out (1) _____ the city. The sun hung low in the sky, shining weakly (2) _____ the clouds, casting long shadows on the grass. I realised that it would be (3) _____ soon. The sun would set, finally, the (4) _____ would rise in the sky. Another day (5) _____ end. Another day lost.

SubQuestion No : 18

Q.18 Select the most appropriate option to fill in blank number 3.

Ans 1. colourful

2. dark

3. bright

4. light

Question ID : 26433092837

Status : Answered

Chosen Option : 2

Comprehension:

In the following passage, some words have been deleted. Read the passage carefully and select the most appropriate option to fill in each blank.

I looked out (1) _____ the city. The sun hung low in the sky, shining weakly (2) _____ the clouds, casting long shadows on the grass. I realised that it would be (3) _____ soon. The sun would set, finally, the (4) _____ would rise in the sky. Another day (5) _____ end. Another day lost.

SubQuestion No : 19

Q.19 Select the most appropriate option to fill in blank number 4.

Ans 1. sun

2. stars

3. moon

4. planets

Question ID : 26433092838

Status : Answered

Chosen Option : 3

Comprehension:

In the following passage, some words have been deleted. Read the passage carefully and select the most appropriate option to fill in each blank.

I looked out (1) _____ the city. The sun hung low in the sky, shining weakly (2) _____ the clouds, casting long shadows on the grass. I realised that it would be (3) _____ soon. The sun would set, finally, the (4) _____ would rise in the sky. Another day (5) _____ end. Another day lost.

SubQuestion No : 20

Q.20 Select the most appropriate option to fill in blank number 5.

- Ans
- 1. will
 - 2. cannot
 - 3. would
 - 4. should

Question ID : 26433092839
Status : Answered
Chosen Option : 1

Section : Part-D-Hindi

Q.1 निम्न मुहावरे को किस विकल्प द्वारा पूर्ण किया जा सकता है?
'सागर में _____'

- Ans
- 1. पानी भरना
 - 2. दूध भरना
 - 3. सागर भरना
 - 4. पैसा भरना

Question ID : 26433066812
Status : Not Answered
Chosen Option : --

Q.2 निम्नलिखित वाक्यांश के लिए एक सार्थक शब्द चुनिए।
ऐसी बात जो लोग परंपरा से सुनते आये हों

- Ans
- 1. शैव
 - 2. स्मरणीय
 - 3. किंवदंती
 - 4. अनुसूया

Question ID : 26433062738
Status : Not Answered
Chosen Option : --

Q.3 निम्नलिखित वाक्य में से अशुद्धि पहचानें-
तलवार एक अच्छा अस्त्र है।

- Ans 1. अस्त्र
 2. अच्छा
 3. एक
 4. तलवार

Question ID : 26433066828
Status : Not Answered
Chosen Option : --

Q.4 निम्नलिखित में से किस वाक्य में 'निर्माण' के विलोम शब्द का प्रयोग हुआ है?

- Ans 1. प्रकाश हमेशा तिमिर का नाश करता है।
 2. उत्तर भारत का मैदान एक समतल भूमि है।
 3. हमारे सामने वाला मकान जर्जर अवस्था में है।
 4. तरुण भारत संघ भारत का गैर सरकारी संगठन है।

Question ID : 26433091174
Status : Not Answered
Chosen Option : --

Q.5 निम्न वाक्य में रेखांकित शब्द को विकल्पों में दिए गए किस शब्द से बदला जा सकता है, जिससे वाक्य के अर्थ में कोई परिवर्तन न हो?
प्रतिदिन रियाज़ करने के कारण वह प्रवीण हो गया।

- Ans 1. कसरत
 2. उपासना
 3. अभ्यास
 4. आसन

Question ID : 26433084961
Status : Not Answered
Chosen Option : --

Q.6 निम्नलिखित शब्द का सही पर्यायवाची शब्द विकल्पों में से चुनिए।
नदी

- Ans 1. हिमनद
 2. चपला
 3. तरंगिणी
 4. सरोज

Question ID : 26433066939
Status : Not Answered
Chosen Option : --

Q.7 निम्न में से किस वाक्य में 'खिन्न' के सही पर्यायवाची शब्द का प्रयोग हुआ है?

- Ans 1. जया का मन उदास हो गया।
 2. रंजन उसके प्रति अनासक्त था।
 3. सुनैना ने मुक्त कंठ से उसकी प्रशंसा की।
 4. राजीव आज बेहद प्रसन्न था।

Question ID : 26433067014
Status : Not Answered
Chosen Option : --

Q.8 नीचे दिए गए वाक्य में रेखांकित अंश के स्थान पर सबसे उपयुक्त विकल्प कौन-सा होगा?
वह धीमी स्वर में बोला।

- Ans 1. गुस्से
 2. करुण
 3. धीमों
 4. धीमे

Question ID : 26433066719
Status : Not Answered
Chosen Option : --

Q.9 'यह रास्ता _____ है, सावधानी से चलें।' उपरोक्त वाक्य में रिक्त स्थान की पूर्ति शुद्ध वर्तनी वाले सही शब्द द्वारा कीजिए।

- Ans 1. दुग्रम
 2. दुगर्म
 3. दुर्गम
 4. दुरगम

Question ID : 26433080904
Status : Not Answered
Chosen Option : --

Q.10 'जिसके दो पद (पैर) हैं' वाक्यांश के लिए सार्थक शब्द क्या होगा?

- Ans 1. द्विपद
 2. द्वापर
 3. द्विज
 4. चतुष्पद

Question ID : 26433065859
Status : Not Answered
Chosen Option : --

Q.11 निम्नलिखित में से किस एक वाक्य में सर्वनाम के प्रयोग सम्बन्धी अशुद्धि है?

- Ans
- 1. सभी छात्र अपने-अपने घर जाएं।
 - 2. सबकी अपनी-अपनी मजबूरियां थीं।
 - 3. जो लोग अन्दर आना चाहते हैं, वह आ सकते हैं।
 - 4. मैं आपके केबिन में बैठा था।

Question ID : 26433062974

Status : Not Answered

Chosen Option : --

Q.12 'पूरब और उत्तर के बीच की दिशा' वाक्यांश के लिए उचित शब्द बताइए -

- Ans
- 1. वायव्य
 - 2. पूर्व
 - 3. पश्चिम
 - 4. ईशान

Question ID : 26433065915

Status : Not Answered

Chosen Option : --

Q.13 निम्नलिखित विकल्पों में से कौन सा एक वाक्य संकेतवाचक सर्वनाम का नहीं है?

- Ans
- 1. वह भिखारी हमेशा मन्दिर के सामने बैठता है।
 - 2. राम का घर कौन सा है?
 - 3. वे पुरानी फाइलें हैं।
 - 4. यह लड़का हमारे विद्यालय का चपरासी नीरज है।

Question ID : 26433062978

Status : Not Answered

Chosen Option : --

Q.14 "राहुल के स्वभाव में क्रोध का भाव अधिक है।"

उक्त वाक्य में प्रयुक्त 'क्रोध' के स्थान पर उसके विलोम शब्द का प्रयोग निम्न में से किस वाक्य में किया गया है?

- Ans
- 1. राहुल के स्वभाव में घृणा का भाव अधिक है।
 - 2. राहुल के स्वभाव में क्षमा का भाव अधिक है।
 - 3. राहुल के स्वभाव में ईर्ष्या का भाव अधिक है।
 - 4. राहुल के स्वभाव में दया का भाव अधिक है।

Question ID : 26433067020

Status : Not Answered

Chosen Option : --

Q.15 नीचे दिए मुहावरे का सही अर्थ दिए गए विकल्पों में से चुनिए-
लँगोटी में फाग खेलना

- Ans 1. दरिद्रता में आनंद लूटना
 2. लँगोट पहनना
 3. बचपन से होली के गीत गाना
 4. होली खेलना

Question ID : 26433062314

Status : Not Answered

Chosen Option : --

Comprehension:

दिए गए गद्यांश में से कुछ शब्दों को हटा दिया गया है। गद्यांश के आधार पर पूछे गए प्रश्नों में उन रिक्त स्थानों के लिए सर्वाधिक उपयुक्त शब्दों का चयन विकल्पों में से कीजिए।

भारतवर्ष ने कभी भी भौतिक वस्तुओं के (1). _____ को बहुत अधिक महत्त्व नहीं दिया है। उसकी दृष्टि से मनुष्य के भीतर जो महान (2). _____ गुण स्थिर भाव से बैठा हुआ है, वहीं चरम और परम है। लोभ-मोह, काम-क्रोध आदि विचार मनुष्य में (3). _____ रूप से विद्यमान रहते हैं, पर उन्हें प्रधान शक्ति मान लेना और अपने मन तथा बुद्धि को उन्हीं के इशारे पर छोड़ देना बहुत बुरा (4). _____ है। भारतवर्ष ने कभी भी उन्हें उचित नहीं माना, उन्हें सदा (5). _____ के बंधन से बांधकर रखने का प्रयत्न किया है।

SubQuestion No : 16

Q.16 दिए गए शब्दों में से उचित शब्द चुनकर रिक्त स्थान (1) की पूर्ति कीजिए।

- Ans 1. प्रयोग
 2. विग्रह
 3. संग्रह
 4. लाभ

Question ID : 26433090343

Status : Not Answered

Chosen Option : --

Comprehension:

दिए गए गद्यांश में से कुछ शब्दों को हटा दिया गया है। गद्यांश के आधार पर पूछे गए प्रश्नों में उन रिक्त स्थानों के लिए सर्वाधिक उपयुक्त शब्दों का चयन विकल्पों में से कीजिए।

भारतवर्ष ने कभी भी भौतिक वस्तुओं के (1). _____ को बहुत अधिक महत्त्व नहीं दिया है। उसकी दृष्टि से मनुष्य के भीतर जो महान (2). _____ गुण स्थिर भाव से बैठा हुआ है, वहीं चरम और परम है। लोभ-मोह, काम-क्रोध आदि विचार मनुष्य में (3). _____ रूप से विद्यमान रहते हैं, पर उन्हें प्रधान शक्ति मान लेना और अपने मन तथा बुद्धि को उन्हीं के इशारे पर छोड़ देना बहुत बुरा (4). _____ है। भारतवर्ष ने कभी भी उन्हें उचित नहीं माना, उन्हें सदा (5). _____ के बंधन से बांधकर रखने का प्रयत्न किया है।

SubQuestion No : 17

Q.17 दिए गए शब्दों में से उचित शब्द चुनकर रिक्त स्थान (2) की पूर्ति कीजिए।

- Ans 1. विशेष
 2. आंतरिक
 3. महत्त्वपूर्ण
 4. बाह्य

Question ID : 26433090344

Status : Not Answered

Chosen Option : --

Comprehension:

दिए गए गद्यांश में से कुछ शब्दों को हटा दिया गया है। गद्यांश के आधार पर पूछे गए प्रश्नों में उन रिक्त स्थानों के लिए सर्वाधिक उपयुक्त शब्दों का चयन विकल्पों में से कीजिए।

भारतवर्ष ने कभी भी भौतिक वस्तुओं के (1). _____ को बहुत अधिक महत्त्व नहीं दिया है। उसकी दृष्टि से मनुष्य के भीतर जो महान (2). _____ गुण स्थिर भाव से बैठा हुआ है, वही चरम और परम है। लोभ-मोह, काम-क्रोध आदि विचार मनुष्य में (3). _____ रूप से विद्यमान रहते हैं, पर उन्हें प्रधान शक्ति मान लेना और अपने मन तथा बुद्धि को उन्हीं के इशारे पर छोड़ देना बहुत बुरा (4). _____ है। भारतवर्ष ने कभी भी उन्हें उचित नहीं माना, उन्हें सदा (5). _____ के बंधन से बाँधकर रखने का प्रयत्न किया है।

SubQuestion No : 18

Q.18 दिए गए शब्दों में से उचित शब्द चुनकर रिक्त स्थान (3) की पूर्ति कीजिए।

- Ans
- 1. स्वाभाविक
 - 2. ऐच्छिक
 - 3. विशेष
 - 4. अनिवार्य

Question ID : 26433090345

Status : Not Answered

Chosen Option : --

Comprehension:

दिए गए गद्यांश में से कुछ शब्दों को हटा दिया गया है। गद्यांश के आधार पर पूछे गए प्रश्नों में उन रिक्त स्थानों के लिए सर्वाधिक उपयुक्त शब्दों का चयन विकल्पों में से कीजिए।

भारतवर्ष ने कभी भी भौतिक वस्तुओं के (1). _____ को बहुत अधिक महत्त्व नहीं दिया है। उसकी दृष्टि से मनुष्य के भीतर जो महान (2). _____ गुण स्थिर भाव से बैठा हुआ है, वही चरम और परम है। लोभ-मोह, काम-क्रोध आदि विचार मनुष्य में (3). _____ रूप से विद्यमान रहते हैं, पर उन्हें प्रधान शक्ति मान लेना और अपने मन तथा बुद्धि को उन्हीं के इशारे पर छोड़ देना बहुत बुरा (4). _____ है। भारतवर्ष ने कभी भी उन्हें उचित नहीं माना, उन्हें सदा (5). _____ के बंधन से बाँधकर रखने का प्रयत्न किया है।

SubQuestion No : 19

Q.19 दिए गए शब्दों में से उचित शब्द चुनकर रिक्त स्थान (4) की पूर्ति कीजिए।

- Ans
- 1. कार्य
 - 2. तरीका
 - 3. प्रणाली
 - 4. आचरण

Question ID : 26433090346

Status : Not Answered

Chosen Option : --

Comprehension:

दिए गए गद्यांश में से कुछ शब्दों को हटा दिया गया है। गद्यांश के आधार पर पूछे गए प्रश्नों में उन रिक्त स्थानों के लिए सर्वाधिक उपयुक्त शब्दों का चयन विकल्पों में से कीजिए।

भारतवर्ष ने कभी भी भौतिक वस्तुओं के (1). _____ को बहुत अधिक महत्त्व नहीं दिया है। उसकी दृष्टि से मनुष्य के भीतर जो महान (2). _____ गुण स्थिर भाव से बैठा हुआ है, वही चरम और परम है। लोभ-मोह, काम-क्रोध आदि विचार मनुष्य में (3). _____ रूप से विद्यमान रहते हैं, पर उन्हें प्रधान शक्ति मान लेना और अपने मन तथा बुद्धि को उन्हीं के इशारे पर छोड़ देना बहुत बुरा (4). _____ है। भारतवर्ष ने कभी भी उन्हें उचित नहीं माना, उन्हें सदा (5). _____ के बंधन से बाँधकर रखने का प्रयत्न किया है।

SubQuestion No : 20

Q.20 दिए गए शब्दों में से उचित शब्द चुनकर रिक्त स्थान (5) की पूर्ति कीजिए।

Ans ✓ 1. संयम

✗ 2. बेड़ियों

✗ 3. मोह

✗ 4. रिशतों

Question ID : 26433090347

Status : Not Answered

Chosen Option : --

WWW.GOVtJOBSALEXON