

Constable GD in CAPFs SSF Rifleman GD in Assam Rifles and Sepoy in NCB Examination 2022

Roll Number	www.govtjobsalert.in
Candidate Name	www.govtjobsalert.in
Venue Name	iON Digital Zone iDZ Sivathapuram
Exam Date	25/01/2023
Exam Time	11:45 AM - 12:45 PM
Subject	Constable GD Examination 2022

Section : Part-A-General Intelligence and Reasoning

Q.1 Six students Jason, Tushar, Anand, Stacey, Steven and Max are sitting around a circular table facing the centre. Jason is sitting third to the right of Tushar. Anand is sitting second to the left of Jason. Steven is an immediate neighbour of Anand and Jason. Max is sitting to the immediate right of Jason. Stacey is to the immediate left of Tushar. Who is sitting between Max and Steven?

- Ans
- 1. Stacey
 - 2. Jason
 - 3. Tushar
 - 4. Anand

Question ID : 26433081785
Status : Answered
Chosen Option : 2

Q.2 Which of the following numbers will replace the question marks (?) in the given series?
31, 33, 36, 41, 48, ?, ?

- Ans
- 1. 60, 74
 - 2. 64, 78
 - 3. 70, 82
 - 4. 59, 72

Question ID : 26433070222
Status : Answered
Chosen Option : 4

Q.3 In a certain code language, 'FLY' is coded as 43 and 'HAT' is coded as 29. How will 'BEACH' be coded in that language?

- Ans
- 1. 19
 - 2. 39
 - 3. 22
 - 4. 40

Question ID : 26433074517
Status : Answered
Chosen Option : 1

Q.4 Select the correct mirror image of the given combination when the mirror is placed at 'PQ' as shown below.

(%E^VGHSW | P
Q

- Ans
- 1. WZHGV^E\0(
 - 2. WZHGV^E\0(
 - 3. WZHGVvE\0(
 - 4. MZHGV^E\0(

Question ID : 26433082745

Status : Answered

Chosen Option : 2

Q.5 A, B, C, D, E, F, G and H are sitting around a square table facing the centre of the table. Some of them are sitting at the corners while some are sitting at the exact centre of the sides. E sits third to the left of G. E sits at one of the corners. B sits second to the right of F. E does not sit at any of the corners. F is not an immediate neighbour of E. H is an immediate neighbour of A. H does not sit in any of the middles of the sides. Only three people sit between H and C from either sides. If all the persons are made to sit in alphabetical order in a clockwise direction starting from A, then how many places does B shift in either direction with respect to its previous position?

- Ans
- 1. 2
 - 2. 3
 - 3. 1
 - 4. 4

Question ID : 26433069666

Status : Answered

Chosen Option : 3

Q.6 'Near' is related to 'Close' in the same way as 'Distant' is related to '_____'. (The words must be considered as meaningful English words and must not be related to each other based on the number of letters/number of consonants/vowels in the word)

- Ans
- 1. Beside
 - 2. Run
 - 3. Away
 - 4. Compass

Question ID : 26433057751

Status : Answered

Chosen Option : 3

Q.7 Which of the following numbers will replace the question mark (?) in the given series?
10, 0, 20, 10, 30, 20, 40, 30, ?

Ans 1. 50

2. 20

3. 40


4. 70

Question ID : 26433069044

Status : Answered

Chosen Option : 1

Q.8 Two different positions of the same dice are shown having numbers 1 to 6 represented as dots. Find the number on the face opposite the face showing '1'.



Ans 1. 6

2. 4

3. 3

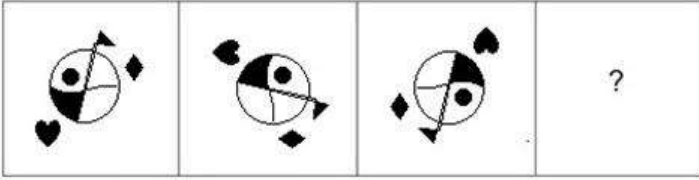
4. 2

Question ID : 26433085507

Status : Answered

Chosen Option : 1

Q.9 Select the figure that will replace the question mark (?) in the following figure series.

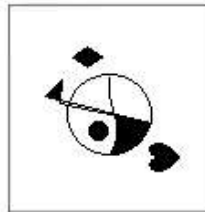


Ans

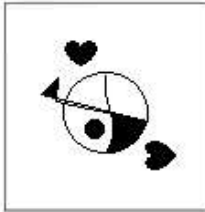
✗ 1.



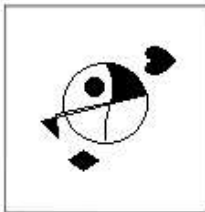
✓ 2.



✗ 3.



✗ 4.



Question ID : 26433070423
Status : Answered
Chosen Option : 2

Q.10 Three statements are given followed by three conclusions numbered I, II and III. Assuming the statements to be true, even if they seem to be at variance with commonly known facts, decide which of the conclusions logically follow(s) from the statements.

Statements:

All chocolates are biscuits.

All chips are biscuits.

All biscuits are potatoes.

Conclusions:

I. All chips are potatoes.

II. All potatoes are chocolates.

III. Some potatoes are chips.

- Ans**
- 1. Only conclusions I and II follow
 - 2. All conclusions follow
 - 3. Only conclusions II and III follow
 - 4. Only conclusions I and III follow

Question ID : 26433082300

Status : Answered

Chosen Option : 4

Q.11 Select the option that is related to the third word in the same way as the second word is related to the first word.

(The words must be considered as meaningful English words and must not be related to each other based on the number of letters/number of consonants/vowels in the word)

Extra : inadequate :: Appear : ?

- Ans**
- 1. Melt
 - 2. People
 - 3. Disappear
 - 4. Sink

Question ID : 26433079476

Status : Answered

Chosen Option : 3

Q.12 Select the option that is related to the third number in the same way as the second number is related to the first number and the sixth number is related to the fifth number.

27 : 189 :: 32 : ? :: 18 : 126

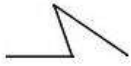
- Ans**
- 1. 236
 - 2. 220
 - 3. 238
 - 4. 224

Question ID : 26433067937

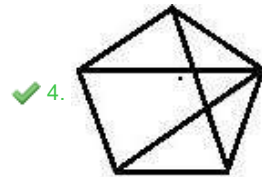
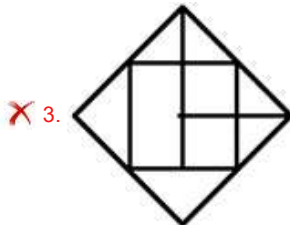
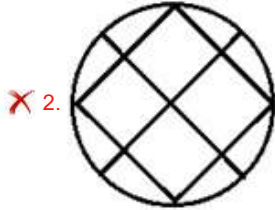
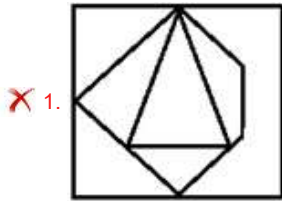
Status : Answered

Chosen Option : 4

Q.13 Select the option figure in which the given figure is embedded as its part (rotation is not allowed).



Ans



Question ID : 26433069538

Status : Answered

Chosen Option : 4

Q.14 Select the letter-cluster from among the given options that can replace the question mark (?) in the following series.
FYBL, CVFP, ZSJT, ?, TMRB

Ans ✗ 1. NTPS

✓ 2. WPNX

✗ 3. WLXP

✗ 4. NKEC

Question ID : 26433074754

Status : Answered

Chosen Option : 2

Q.15 Which option represents the correct order of the given words as they would appear in the English dictionary?

- 1 Ranked
- 2 Ragging
- 3 Rack
- 4 Rainbow
- 5 Radar

- Ans 1. 3,5,2,4,1
 2. 3,5,2,1,4
 3. 3,4,2,5,1
 4. 3,4,2,1,5

Question ID : 26433069266
Status : Answered
Chosen Option : 1

Q.16 Which of the following letter-clusters will replace the question mark (?) and complete the following letter-cluster series?
GS, EU, AW, UY, MA, ?

- Ans 1. BC
 2. DC
 3. CC
 4. CB

Question ID : 26433067280
Status : Answered
Chosen Option : 3

Q.17 If 'A' means 'subtraction', 'B' means 'division', 'C' means 'multiplication', and 'D' means 'addition', then what will be the value of following expression?
8 A 80 B 16 C 90 D 21

- Ans 1. -463
 2. -421
 3. 463
 4. 421

Question ID : 264330114178
Status : Answered
Chosen Option : 2

Q.18 In a code language, 'She will come' is written as 'vu de ja', 'Come and eat' is written as 'te vu ma', 'all will eat' is written as 'ma nu ja'. What is the code for the word 'all' in that language?

- Ans 1. te
 2. nu
 3. ma
 4. ja

Question ID : 26433068932
Status : Answered
Chosen Option : 2

Q.19 Which of the mathematical signs should be interchanged in the below equation to make it mathematically correct?

$$192 - 16 + 18 \times 6 \div 24 = 96$$

- Ans
- 1. - and +
 - 2. - and \times
 - 3. - and \div
 - 4. \times and \div

Question ID : 264330117526
Status : Answered
Chosen Option : 3

Q.20 In a certain code language,
'A + B' means 'A is the mother of B',
'A - B' means 'A is the father of B',
'A x B' means 'A is the brother of B' and
'A & B' means 'A is the daughter of B'.
How is N related to V if $N \times L - T \& G + V$?

- Ans
- 1. Father's father
 - 2. Father
 - 3. Brother
 - 4. Father's brother

Question ID : 26433070373
Status : Answered
Chosen Option : 4

Section : Part-B-General Knowledge and General awareness

Q.1 The SEVA app was launched by which of the following ministers to track coal dispatch?

- Ans
- 1. Ramvilas Paswan
 - 2. Nitin Gadkari
 - 3. Piyush Goyal
 - 4. Suresh Prabhu

Question ID : 264330115016
Status : Not Answered
Chosen Option : --

Q.2 Which among the following Vedas is the oldest?

- Ans
- 1. Sama
 - 2. Rig
 - 3. Atharva
 - 4. Yajur

Question ID : 264330115443
Status : Answered
Chosen Option : 2

Q.3 _____ was introduced during fifth five year plan.

Ans 1. Minimum Needs Programme

2. Day School

3. Beti Bachao

4. Swachh Bharat

Question ID : 264330115363
Status : Answered
Chosen Option : 3

Q.4 SME stands for small and _____ enterprises.

Ans 1. medium-sized

2. manufacturing

3. modern-sized

4. mid -term

Question ID : 264330115313
Status : Answered
Chosen Option : 1

Q.5 Which of the following was the first BCCI president?

Ans 1. RE Grant Govan

2. Anthony D'Mello

3. Roger Binny

4. JC Mukherjee

Question ID : 264330116264
Status : Answered
Chosen Option : 2

Q.6 As of November 2022, who among the following is the Governor of Andhra Pradesh, India?

Ans 1. Anusuiya Uikey

2. Bhagat Singh Koshyari

3. Biswabhusan Harichandan

4. Hemant Soren

Question ID : 264330114897
Status : Answered
Chosen Option : 3

Q.7 The maximum inflation in India was recorded in the year _____ at 25.2 per cent was mainly attributed to the failure of kharif crops in the previous year and also to the hike in crude oil prices in the previous year.

- Ans 1. 1974-75
 2. 2019-20
 3. 2015-16
 4. 1998-99

Question ID : 264330116145
Status : Answered
Chosen Option : 4

Q.8 Raut Nacha, Panthi and Soowa are famous dance styles of which of the following states?

- Ans 1. Jharkhand
 2. Rajasthan
 3. Chhattisgarh
 4. Gujarat

Question ID : 26433071451
Status : Answered
Chosen Option : 3

Q.9 The age of the subscriber under Atal Pension Yojana (APY) should be between_____.

- Ans 1. 18-40 years
 2. 40-60 years
 3. 15-30 years
 4. 25-50 years

Question ID : 264330116196
Status : Answered
Chosen Option : 1

Q.10 What is the emerging magma from a volcano onto the earth's surface called?

- Ans 1. Ash
 2. Lava
 3. Pyroclastics flows
 4. Falls

Question ID : 264330115996
Status : Answered
Chosen Option : 2

Q.11 Which Constitutional Amendment introduced the fundamental Duties?

- Ans 1. 44th
 2. 41st
 3. 43rd
 4. 42nd

Question ID : 264330115631
Status : Answered
Chosen Option : 3

Q.12 In 2015, MN Subramaniam Endowment Award - The Music Academy Madras was awarded to _____.

- Ans 1. Anuradha Pandey
 2. Krishna Ella
 3. Mahaboob Subhani
 4. Alarmel Valli

Question ID : 264330115850
Status : Answered
Chosen Option : 1

Q.13 The celebrations for Paryushan Parv is held for ____ days by the Digambara sect of Jains.

- Ans 1. 16
 2. 12
 3. 14
 4. 10

Question ID : 264330115083
Status : Not Answered
Chosen Option : --

Q.14 _____ is an indicator used by experts to gauge the number of people dying prematurely due to a particular disease.

- Ans 1. gross national product
 2. goods and service tax
 3. gross domestic diseases
 4. global burden of diseases

Question ID : 264330115560
Status : Answered
Chosen Option : 3

Q.15 How many High Courts are there in India as of 2022?

- Ans 1. 22
 2. 25
 3. 23
 4. 20

Question ID : 264330115667
Status : Answered
Chosen Option : 2

Q.16 When was the Harijan Sewak Sangh founded as a result of the Poona Pact?

- Ans 1. 1938
 2. 1932
 3. 1936
 4. 1940

Question ID : 26433089892
Status : Not Answered
Chosen Option : --

Q.17 The Avogadro's number is 6.022×10^{23}

- Ans 1. 10^{22}
 2. 10^{24}
 3. 10^{25}
 4. 10^{23}

Question ID : 264330115145
Status : Answered
Chosen Option : 2

Q.18 Who was the flag bearer for India for the closing ceremony of the Asian Games 2018?

- Ans 1. Sanjeev Rajput
 2. Deepak Kumar
 3. Neeraj Chopra
 4. Rani Rampal

Question ID : 264330115912
Status : Not Answered
Chosen Option : --

Q.19 In which of the following union territories was the highest literacy rate recorded in 2011?

- Ans 1. Daman and Diu
 2. Andaman and Nicobar
 3. Puducherry
 4. Lakshadweep

Question ID : 264330116059
Status : Answered
Chosen Option : 4

Q.20 Where will you find plastids in a leaf cell?

- Ans 1. cell wall
 2. cytoplasm
 3. nucleus
 4. cell membrane

Question ID : 264330115192
Status : Answered
Chosen Option : 2

Section : Part-C-Elementary Mathematics

Q.1 Jiya gets a discount of 30 percent and 10 percent on a bill. The total discount she got is:

- Ans 1. 39 percent
 2. 37 percent
 3. 40 percent
 4. 35 percent

Question ID : 264330116765
Status : Answered
Chosen Option : 2

Q.2 The cost price of 2 pens and 3 notebooks is ₹220 and the cost price of 2 pens and 4 notebooks is ₹250. Find the ratio between the cost price of the pen and the notebook.

- Ans 1. 5 : 13
 2. 1 : 2
 3. 13 : 6
 4. 5 : 12

Question ID : 26433076411
Status : Answered
Chosen Option : 3

Q.3 The least number which should be added to 1845 to make it divisible by 3, 4, 5 and 6 is:

- Ans 1. 12
 2. 15
 3. 3
 4. 9

Question ID : 26433082347
Status : Answered
Chosen Option : 2

Q.4 A person can row 66 km downstream in 6 h and 72 km upstream in 8 h. What is the speed of the current?

- Ans
- 1. 4 km/h
 - 2. 2 km/h
 - 3. 3 km/h
 - 4. 1 km/h

Question ID : 26433064924
Status : Answered
Chosen Option : 4

Q.5 Sonal, Kriti, and Priti together can complete a piece of work in 6 days while Kriti and Priti can do the same work separately in 30 and 18 days, then in how many days Sonal alone can do the same work?

- Ans
- 1. 88/7 days
 - 2. 14/5 days
 - 3. 90/7 days
 - 4. 66/5 days

Question ID : 264330116880
Status : Answered
Chosen Option : 3

Q.6 In a particular year the average monthly expenditure of Vipin was ₹6,250 during the first 4 months, ₹6,500 during the next 4 months, and ₹x during the remaining months of the year. If the total savings in the year was ₹15,000 and his monthly salary is ₹9,600, then find the value of x.

- Ans
- 1. ₹12,750
 - 2. ₹12,000
 - 3. ₹12,300
 - 4. ₹13,000

Question ID : 26433079911
Status : Answered
Chosen Option : 3

Q.7 The marked price of a general study book is Rs.800. If it is sold at 15% and 20% successive discounts, then find its selling price.

- Ans
- 1. Rs.544
 - 2. Rs.534
 - 3. Rs.528
 - 4. Rs.520

Question ID : 26433082973
Status : Answered
Chosen Option : 1

Q.8 The volume of a hemisphere is 32 times the volume of a sphere with radius 3 units. the diameter of the hemisphere is _____ units.

- Ans
- 1. 6
 - 2. 24
 - 3. 18
 - 4. 12

Question ID : 26433071268
Status : Answered
Chosen Option : 2

Q.9 A sum of money is paid back in two annual instalments of Rs.1,25,000 each. If rate of interest is 6% per annum and interest is compounding annually, then find the sum borrowed.(Consider round up integral value)

- Ans
- 1. Rs.1,50,375
 - 2. Rs.2,39,174
 - 3. Rs.2,29,174
 - 4. Rs.1,19,375

Question ID : 26433074995
Status : Answered
Chosen Option : 3

Q.10 A work can be finished by 10 men in 8 days and by 10 women in 7 days. In how many days will the work be finished if 10 women and 10 men work on alternate days, with the women starting on the first day?

- Ans
- 1. $7\frac{3}{7}$
 - 2. 7.5
 - 3. $7\frac{4}{7}$
 - 4. $7\frac{3}{8}$

Question ID : 26433071266
Status : Answered
Chosen Option : 1

Q.11 A fruit vendor purchases oranges at Rs.150, Rs.90 and Rs.75 per kg. These oranges purchased at three different prices are mixed in the ratio 4 : 5 : 6 respectively, and are sold at a profit of 40%. Find the selling price (in Rs.) of oranges per kg.

- Ans
- 1. 160
 - 2. 150
 - 3. 140
 - 4. 210

Question ID : 26433075911
Status : Answered
Chosen Option : 3

Q.12 If the price of oil increases by 25 percent and Arpit increase the expenditure on oil by 10 percent, then by how much percent will he reduce the quantity of oil purchased?

- Ans
- 1. 22 percent
 - 2. 42 percent
 - 3. 12 percent
 - 4. 88 percent

Question ID : 264330116800
Status : Answered
Chosen Option : 3

Q.13 In a trapezium, the lengths of opposite parallel sides are 12 cm and 8 cm respectively, and the shortest distance between them is 16 cm, Find the area of the trapezium.

- Ans
- 1. 84.5 cm^2
 - 2. 144 cm^2
 - 3. 62.5 cm^2
 - 4. 160 cm^2

Question ID : 26433079972
Status : Answered
Chosen Option : 4

Q.14 In an election Santosh got 24000 more votes than Mantosh. If Mantosh and Santosh got 30% and 40% of the total votes respectively. Find the total number of votes cast.

- Ans
- 1. 250000
 - 2. 254000
 - 3. 240000
 - 4. 245000

Question ID : 26433080159
Status : Answered
Chosen Option : 3

Q.15 A shopkeeper bought 240 chocolates at ₹9 per dozen. If he sold all of them at ₹1 each, what was his profit percentage?

- Ans
- 1. 24%
 - 2. 27%
 - 3. $33\frac{1}{3}\%$
 - 4. $66\frac{1}{6}\%$

Question ID : 26433082094
Status : Answered
Chosen Option : 3

Q.16 Students' strength of a co-educational School is 3,000. If the ratio of the number of boys to the number of girls in the school is 4 : 1, then what is the mean proportion of the number of boys and girls in the School, given that only boys and girls are students in the school?

- Ans
- 1. 1300
 - 2. 1400
 - 3. 1100
 - 4. 1200

Question ID : 26433090252
Status : Answered
Chosen Option : 4

Q.17 If a natural number when divided by 5,6 and 7 leaves a remainder 4 in each case,then what is the smallest possible three digit natural number?

- Ans
- 1. 218
 - 2. 214
 - 3. 212
 - 4. 216

Question ID : 26433075636
Status : Answered
Chosen Option : 2

Q.18 An aeroplane covers a certain distance at a speed 510 km/h in 3 h. To cover the same distance in $10\frac{1}{5}$ h, it must fly at a speed of:

- Ans
- 1. 150 km/h
 - 2. 250 km/h
 - 3. 305 km/h
 - 4. 230 km/h

Question ID : 26433080046
Status : Answered
Chosen Option : 1

Q.19 The average of 8 numbers is 24. If one of the numbers is excluded, the average becomes 22. Find the excluded number.

- Ans
- 1. 38
 - 2. 36
 - 3. 37
 - 4. 35

Question ID : 26433075462
Status : Answered
Chosen Option : 1

Q.20 What is the difference between the compound interest, compounding annually and simple interest on ₹8,300 at 10% per annum for 2 years?

- Ans 1. ₹83
 2. ₹1,743
 3. ₹1,660
 4. ₹38

Question ID : 26433066057
Status : Answered
Chosen Option : 1

Section : Part-D-English

Q.1 Select the most appropriate ANTONYM of the underlined word.

The authority tries to subjugate the marginalised people.

- Ans 1. subordinate
 2. liberate
 3. enslave
 4. trap

Question ID : 26433093937
Status : Answered
Chosen Option : 2

Q.2 Choose the option that can substitute the underlined segment correctly and complete the meaning of the sentence.

The grandmother asked Rita to close the window as she suddenly started feeling extremely cold.

- Ans 1. Freezing
 2. Frosting
 3. Icing
 4. Cold

Question ID : 26433088879
Status : Not Answered
Chosen Option : --

Q.3 Select the most appropriate meaning of the given idiom.
Throw caution to the wind

- Ans 1. Carefree
 2. Careful
 3. Be cautious
 4. Ignore the risk

Question ID : 26433070803
Status : Answered
Chosen Option : 3

Q.4 Select the most appropriate ANTONYM of the given word.

Hasty

- Ans 1. Cautious
 2. Reckless
 3. Brisk
 4. Quick

Question ID : 26433072668
Status : Answered
Chosen Option : 2

Q.5 Select the option that expresses the given sentence in simple past tense.

- A. Last year, I have travelled to Japan.
B. Last year, I was travelling to Japan.
C. Last year, I travelled to Japan.
D. Last year, I had been travelling to Japan.

- Ans 1. A
 2. B
 3. C
 4. D

Question ID : 26433073520
Status : Answered
Chosen Option : 3

Q.6 Select the most appropriate ANTONYM of the given word.

Celebrate

- Ans 1. Disgrace
 2. Manipulate
 3. Instigate
 4. Tabulate

Question ID : 26433073803
Status : Answered
Chosen Option : 1

Q.7 Select the most appropriate option to fill in the blank.

The moon looks bright and beautiful in the cloudless night sky. Yet it is very small compared _____ Earth.

- Ans 1. with
 2. than
 3. to
 4. in

Question ID : 26433072726
Status : Answered
Chosen Option : 3

Q.8 Select the most appropriate option that can substitute the underlined segment in the given sentence.

This blue shirt you have wearing really looks expensive.

- Ans 1. has wear
 2. are wearing
 3. will wearing
 4. had wear

Question ID : 26433096155
Status : Answered
Chosen Option : 2

Q.9 Select the most appropriate synonym of the given word.

Beautiful

- Ans 1. Dull
 2. Drab
 3. Pretty
 4. Homely

Question ID : 26433072532
Status : Answered
Chosen Option : 3

Q.10 Select the most appropriate synonym of the given word to fill in the blank in the sentence.

Casual

Sita wore a _____ yet stunning dress at the birthday party of her son.

- Ans 1. temporary
 2. formal
 3. regular
 4. uniform

Question ID : 26433060549
Status : Answered
Chosen Option : 2

Q.11 A part of the given sentence which has been underlined may contain a spelling error. Select the option that correctly rectifies the spelling error. If there is no error, select 'No error'.

Technology has become an indispensable element in our day-to-day activities.

- Ans 1. Endispensable
 2. Indispensable
 3. Indispinsable
 4. No error

Question ID : 26433071787
Status : Answered
Chosen Option : 2

Q.12 Select the INCORRECTLY spelt word.

- Ans 1. Appearance
 2. Appropriate
 3. Apparatus
 4. Appreciate

Question ID : 26433073927
Status : Answered
Chosen Option : 1

Q.13 Select the most appropriate meaning of the italicised idiom in the given sentence.
"Hold your horses !" said Mom as I reached for a cookie. "They are still too hot to eat."

- Ans 1. Be patient
 2. Be in a rage
 3. Be docile
 4. Be in a hurry

Question ID : 264330101305
Status : Answered
Chosen Option : 1

Q.14 Select the most appropriate ANTONYM of the word given in the brackets to fill in the blank and complete the sentence.

The water was too _____ (profound) to take a swim.

- Ans 1. shallow
 2. dangerous
 3. hot
 4. turbid

Question ID : 26433089839
Status : Answered
Chosen Option : 2

Q.15 Select the most appropriate synonym of the given word.

Heyday

- Ans 1. Yesteryears
 2. Dreamy
 3. Prime
 4. Fateful

Question ID : 26433073985
Status : Answered
Chosen Option : 2

Comprehension:

In the following passage, some words have been deleted. Read the passage carefully and select the most appropriate option to fill in each blank.

Residents of Victorian Street in Thornton (1)_____ disturbed last night by an unusual accident. At eleven o'clock a car broke down near the end of the street and the driver left his vehicle (2)_____ while he went on with his journey by taxi. An hour later, the car's alarm went off when it was hit (3)_____ a stolen van. The engine of the van blew up, so the thief tried to drive away in the car. But he gave up when the car would not (4)_____ and (5)_____ a bicycle instead.

SubQuestion No : 16

Q.16 Select the most appropriate option to fill in blank number 1.

- Ans 1. is
 2. were
 3. are
 4. was

Question ID : 26433060287

Status : Answered

Chosen Option : 2

Comprehension:

In the following passage, some words have been deleted. Read the passage carefully and select the most appropriate option to fill in each blank.

Residents of Victorian Street in Thornton (1)_____ disturbed last night by an unusual accident. At eleven o'clock a car broke down near the end of the street and the driver left his vehicle (2)_____ while he went on with his journey by taxi. An hour later, the car's alarm went off when it was hit (3)_____ a stolen van. The engine of the van blew up, so the thief tried to drive away in the car. But he gave up when the car would not (4)_____ and (5)_____ a bicycle instead.

SubQuestion No : 17

Q.17 Select the most appropriate option to fill in blank number 2.

- Ans 1. then
 2. here
 3. there
 4. their

Question ID : 26433060288

Status : Answered

Chosen Option : 3

Comprehension:

In the following passage, some words have been deleted. Read the passage carefully and select the most appropriate option to fill in each blank.

Residents of Victorian Street in Thornton (1)_____ disturbed last night by an unusual accident. At eleven o'clock a car broke down near the end of the street and the driver left his vehicle (2)_____ while he went on with his journey by taxi. An hour later, the car's alarm went off when it was hit (3)_____ a stolen van. The engine of the van blew up, so the thief tried to drive away in the car. But he gave up when the car would not (4)_____ and (5)_____ a bicycle instead.

SubQuestion No : 18

Q.18 Select the most appropriate option to fill in blank number 3.

- Ans 1. on
 2. in
 3. by
 4. above

Question ID : 26433060289

Status : Answered

Chosen Option : 3

Comprehension:

In the following passage, some words have been deleted. Read the passage carefully and select the most appropriate option to fill in each blank.

Residents of Victorian Street in Thornton (1)_____ disturbed last night by an unusual accident. At eleven o'clock a car broke down near the end of the street and the driver left his vehicle (2)_____ while he went on with his journey by taxi. An hour later, the car's alarm went off when it was hit (3)_____ a stolen van. The engine of the van blew up, so the thief tried to drive away in the car. But he gave up when the car would not (4)_____ and (5)_____ a bicycle instead.

SubQuestion No : 19

Q.19 Select the most appropriate option to fill in blank number 4.

- Ans 1. started
 2. start
 3. starting
 4. starts

Question ID : 26433060290

Status : Answered

Chosen Option : 2

Comprehension:

In the following passage, some words have been deleted. Read the passage carefully and select the most appropriate option to fill in each blank.

Residents of Victorian Street in Thornton (1)_____ disturbed last night by an unusual accident. At eleven o'clock a car broke down near the end of the street and the driver left his vehicle (2)_____ while he went on with his journey by taxi. An hour later, the car's alarm went off when it was hit (3)_____ a stolen van. The engine of the van blew up, so the thief tried to drive away in the car. But he gave up when the car would not (4)_____ and (5)_____ a bicycle instead.

SubQuestion No : 20

Q.20 Select the most appropriate option to fill in blank number 5.

- Ans 1. parked
 2. stole
 3. bought
 4. lent

Question ID : 26433060291
Status : Answered
Chosen Option : 2

Section : Part-D-Hindi

Q.1 निम्नलिखित में से क्या 'इंगित' का क्या अर्थ नहीं होता है?

- Ans 1. संकेत
 2. अवस्था
 3. इशारा
 4. अभिप्राय

Question ID : 26433080946
Status : Not Answered
Chosen Option : --

Q.2 'शब' के अर्थ से निम्न वाक्य की पूर्ति कीजिए।
शमशानघाट में शव को _____ दस बजे पहुँचाया गया।

- Ans 1. दिन
 2. दोपहर
 3. सुबह
 4. रात

Question ID : 26433079237
Status : Not Answered
Chosen Option : --

Q.3 निम्नलिखित विकल्पों में से 'जो अपने मत का अनुयायी हो' वाक्यांश के लिए एक सार्थक शब्द क्या होगा ?

- Ans 1. स्वाभिमान
 2. आत्माभिमत
 3. परिवेश
 4. आलोचक

Question ID : 26433062468
Status : Not Answered
Chosen Option : --

Q.4 निम्न में से कौन सा वाक्य क्रिया विशेषण का उदाहरण नहीं है?

- Ans 1. आज तेज़ बारिश होगी।
 2. अब उठ भी जाओ।
 3. तुम्हें कम बोलना चाहिए।
 4. वह धीरे-धीरे चलता है।

Question ID : 26433063050
Status : Not Answered
Chosen Option : --

Q.5 निम्न वाक्यांश के लिए एक शब्द क्या होगा?
जिसका दूसरा उपाय न हो

- Ans 1. अन्यतम
 2. अनन्योपाय
 3. अन्यग
 4. अन्योन्य

Question ID : 26433070063
Status : Not Answered
Chosen Option : --

Q.6 'मेरे पास एक बहुत लंबी खड़ी है।' इस वाक्य में अशुद्ध शब्द का प्रयोग पहचानिए।

- Ans 1. लंबी-सी
 2. बहुत
 3. एक
 4. खड़ी

Question ID : 26433085060
Status : Not Answered
Chosen Option : --

Q.7 बलराम विनय का ज्येष्ठ भाई है।
उपरोक्त वाक्य में रेखांकित शब्द के विलोम शब्द का चयन कीजिए।

- Ans 1. कनिष्ठ
 2. प्रिय
 3. घनिष्ठ
 4. बड़ा

Question ID : 26433079638
Status : Not Answered
Chosen Option : --

Q.8 निम्नलिखित वाक्य में रेखांकित खंड के स्थान पर प्रयुक्त होने वाले सबसे उपयुक्त विकल्प का चयन कीजिए।
आज से यह नियम चालू है।

- Ans 1. लागू
 2. पीछे
 3. आगे
 4. ऊपर

Question ID : 26433079564
Status : Not Answered
Chosen Option : --

Q.9 'उल्टा चोर कोतवाल को डांटे' मुहावरे का सही अर्थ क्या है?

- Ans 1. चोर को सजा देना
 2. छोटों को धमकाना
 3. स्वयं दोषी होते हुए भी निर्दोष को धमकाना
 4. बड़े व्यक्ति में दोष होना

Question ID : 26433062605
Status : Not Answered
Chosen Option : --

Q.10 'फल देने वाला' वाक्यांश के लिए इनमें से उपयुक्त शब्द कौन-सा है?

- Ans 1. फलदार
 2. फलाहारी
 3. फलहरी
 4. फलदायी

Question ID : 26433066891
Status : Not Answered
Chosen Option : --

Q.11 विष्णु जी को माधव के नाम से पुकारो या _____ के नाम से वह हमेशा सुनते हैं।
'विष्णु' के पर्याय से उपरोक्त वाक्य पूर्ण कीजिए।

- Ans 1. जनार्दन
 2. अमर
 3. ईश्वर
 4. गिरीश

Question ID : 26433084983
Status : Not Answered
Chosen Option : --

Q.12 'आप इस पत्र पर हस्ताक्षर बना दीजिए।' इस वाक्य में अनुपयुक्त शब्द क्या है?

- Ans 1. पत्र
 2. बना
 3. हस्ताक्षर
 4. इस

Question ID : 26433091304
Status : Not Answered
Chosen Option : --

Q.13 निम्नलिखित मुहावरे के उचित अर्थ का चयन कीजिए-
टांग अड़ाना

- Ans 1. उन्नति न करना
 2. लँगड़ी मारना
 3. अड़चन डालना
 4. चापलूसी करना

Question ID : 26433065884
Status : Not Answered
Chosen Option : --

Q.14 निम्न वाक्य में त्रुटि पहचानिए।
लड़कियों में सहनशीलता पाई जाती हैं।

- Ans 1. लड़कियों में
 2. सहनशीलता
 3. लड़कियों, हैं
 4. पाई जाती है

Question ID : 26433063038
Status : Not Answered
Chosen Option : --

Q.15 'एकमात्र दो उपाय हैं।' रेखांकित शब्द के स्थान पर उपयुक्त शब्द क्या होगा?

- Ans 1. क्या
 2. केवल
 3. दोमात्र
 4. कुछ

Question ID : 26433062205

Status : Not Answered

Chosen Option : --

Comprehension:

निम्नलिखित गद्यांश में कुछ शब्दों को हटा दिया गया है। दिए गए विकल्पों की सहायता से रिक्त स्थानों की पूर्ति कीजिए। प्रत्येक संख्या के लिए सबसे उपयुक्त विकल्प का चयन कीजिए।

1. _____ पर चलना अत्यंत कठिन है। इस पर चलने वाले को कठिनाइयां भले ही आएँ, किन्तु वह 2. _____ नहीं है। जो लोग कठिनता देखकर 3. _____ हो जाते हैं, वे जल्दी ही अपना मार्ग बदल लेते हैं। मार्ग बदलने का अर्थ है कि वे असत्य की ओर बढ़ जाते हैं। इस प्रकार वे 4. _____ हो जाते हैं। इससे जीवन का 5. _____ ही नष्ट हो जाता है। ऐसा जीवन असफल हो जाता है।

SubQuestion No : 16

Q.16 रिक्त स्थान 1 की पूर्ति के लिए सबसे उपयुक्त विकल्प का चयन करें।

- Ans 1. सत्य के मार्ग
 2. प्रवंचना के मार्ग
 3. अनीति के मार्ग
 4. मिथ्या के मार्ग

Question ID : 264330110879

Status : Not Answered

Chosen Option : --

Comprehension:

निम्नलिखित गद्यांश में कुछ शब्दों को हटा दिया गया है। दिए गए विकल्पों की सहायता से रिक्त स्थानों की पूर्ति कीजिए। प्रत्येक संख्या के लिए सबसे उपयुक्त विकल्प का चयन कीजिए।

1. _____ पर चलना अत्यंत कठिन है। इस पर चलने वाले को कठिनाइयां भले ही आएँ, किन्तु वह 2. _____ नहीं है। जो लोग कठिनता देखकर 3. _____ हो जाते हैं, वे जल्दी ही अपना मार्ग बदल लेते हैं। मार्ग बदलने का अर्थ है कि वे असत्य की ओर बढ़ जाते हैं। इस प्रकार वे 4. _____ हो जाते हैं। इससे जीवन का 5. _____ ही नष्ट हो जाता है। ऐसा जीवन असफल हो जाता है।

SubQuestion No : 17

Q.17 रिक्त स्थान 2 की पूर्ति के लिए सबसे उपयुक्त विकल्प का चयन करें।

- Ans 1. खोता
 2. भटकता
 3. सोता
 4. पटकता

Question ID : 264330110880

Status : Not Answered

Chosen Option : --

Comprehension:

निम्नलिखित गद्यांश में कुछ शब्दों को हटा दिया गया है। दिए गए विकल्पों की सहायता से रिक्त स्थानों की पूर्ति कीजिए। प्रत्येक संख्या के लिए सबसे उपयुक्त विकल्प का चयन कीजिए।

1. _____ पर चलना अत्यंत कठिन है। इस पर चलने वाले को कठिनाइयां भले ही आएँ, किन्तु वह 2. _____ नहीं है। जो लोग कठिनता देखकर 3. _____ हो जाते हैं, वे जल्दी ही अपना मार्ग बदल लेते हैं। मार्ग बदलने का अर्थ है कि वे असत्य की ओर बढ़ जाते हैं। इस प्रकार वे 4. _____ हो जाते हैं। इससे जीवन का 5. _____ ही नष्ट हो जाता है। ऐसा जीवन असफल हो जाता है।

SubQuestion No : 18

Q.18 रिक्त स्थान 3 की पूर्ति के लिए सबसे उपयुक्त विकल्प का चयन करें।

- Ans
- 1. सजग
 - 2. कायर
 - 3. अविचलित
 - 4. विचलित

Question ID : 264330110881

Status : Not Answered

Chosen Option : --

Comprehension:

निम्नलिखित गद्यांश में कुछ शब्दों को हटा दिया गया है। दिए गए विकल्पों की सहायता से रिक्त स्थानों की पूर्ति कीजिए। प्रत्येक संख्या के लिए सबसे उपयुक्त विकल्प का चयन कीजिए।

1. _____ पर चलना अत्यंत कठिन है। इस पर चलने वाले को कठिनाइयां भले ही आएँ, किन्तु वह 2. _____ नहीं है। जो लोग कठिनता देखकर 3. _____ हो जाते हैं, वे जल्दी ही अपना मार्ग बदल लेते हैं। मार्ग बदलने का अर्थ है कि वे असत्य की ओर बढ़ जाते हैं। इस प्रकार वे 4. _____ हो जाते हैं। इससे जीवन का 5. _____ ही नष्ट हो जाता है। ऐसा जीवन असफल हो जाता है।

SubQuestion No : 19

Q.19 रिक्त स्थान 4 की पूर्ति के लिए सबसे उपयुक्त विकल्प का चयन करें।

- Ans
- 1. अनाश्रमी
 - 2. बुद्धिभ्रष्ट
 - 3. लूटमार
 - 4. पथभ्रष्ट

Question ID : 264330110882

Status : Not Answered

Chosen Option : --

Comprehension:

निम्नलिखित गद्यांश में कुछ शब्दों को हटा दिया गया है। दिए गए विकल्पों की सहायता से रिक्त स्थानों की पूर्ति कीजिए। प्रत्येक संख्या के लिए सबसे उपयुक्त विकल्प का चयन कीजिए।

1. _____ पर चलना अत्यंत कठिन है। इस पर चलने वाले को कठिनाइयां भले ही आएँ, किन्तु वह 2. _____ नहीं है। जो लोग कठिनता देखकर 3. _____ हो जाते हैं, वे जल्दी ही अपना मार्ग बदल लेते हैं। मार्ग बदलने का अर्थ है कि वे असत्य की ओर बढ़ जाते हैं। इस प्रकार वे 4. _____ हो जाते हैं। इससे जीवन का 5. _____ ही नष्ट हो जाता है। ऐसा जीवन असफल हो जाता है।

SubQuestion No : 20

Q.20 रिक्त स्थान 5 की पूर्ति के लिए सबसे उपयुक्त विकल्प का चयन करें।

- Ans 1. निमित्त
 2. अभिप्राय
 3. मंशा
 4. नियत

Question ID : 264330110883

Status : Not Answered

Chosen Option : --

WWW.GOVtJOBSALERT.COM