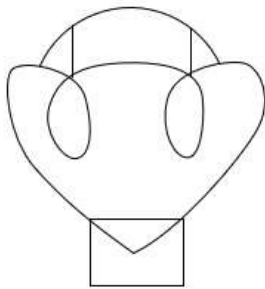


Constable GD in CAPFs SSF Rifleman GD in Assam Rifles and Sepoy in NCB Examination 2022

Roll Number	www.govtjobsalert.in
Candidate Name	www.govtjobsalert.in
Venue Name	ION Digital Zone iDZ 2 Chinamushidiwada
Exam Date	31/01/2023
Exam Time	2:30 PM - 3:30 PM
Subject	Constable GD Examination 2022


Section : Part-A-General Intelligence and Reasoning

Q.1 Select the option figure which is embedded in the given figure. (Rotation is NOT allowed)

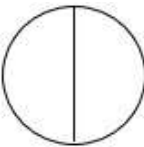


Ans


✗ 1.



✗ 2.



✓ 3.



✗ 4.



Question ID : 26433069340
Status : Answered
Chosen Option : 3

Q.2 In this question, three statements are given, followed by two conclusions numbered I and II. Assuming the statements to be true, even if they seem to be at variance with commonly known facts, decide which of the conclusions logically follows/follow from the statements.

Statements:

Some watches are clocks.

All clocks are black.

All black are big.

Conclusions:

I. Some watches are big.

II. Some watches are black.

Ans 1. Only conclusion II follows.

2. Both conclusions I and II follow.

3. Neither conclusion I nor II follows.

4. Only conclusion I follows.

Question ID : 26433070395

Status : Answered

Chosen Option : 2

Q.3 Which two signs should be interchanged to make the below equation mathematically correct?

$$78 + 3 \div 26 - 8 \times 24 = 25$$

Ans 1. \div and \times

2. \div and $+$

3. $+$ and $-$

4. \times and $+$

Question ID : 264330117497

Status : Answered

Chosen Option : 4

Q.4 A @ B means 'A is the sister of B'.

A & B means 'A is the brother of B'.

A # B means 'A is the wife of B'.

A ^ B means 'A is the mother of B'.

A + B means 'A is the father of B'.

If $U \wedge Q \wedge R @ N \& C \wedge I @ J @ A$, then which of the following statements is NOT correct?

Ans 1. C is the daughter of Q.

2. Q is the maternal grandfather of I.

3. J is the daughter of C

4. Q is the mother of N.

Question ID : 26433068949

Status : Answered

Chosen Option : 2

Q.5 Which of the following numbers will replace the question mark (?) in the given series?
13, 4, 17, 8, 21, 16, 25 ?

- Ans
- 1. 36
 - 2. 39
 - 3. 32
 - 4. 29

Question ID : 26433067881
Status : Answered
Chosen Option : 3

Q.6 Which of the following numbers will replace the question mark (?) in the given series?
12, 24, 48, 84, 132, ?

- Ans
- 1. 192
 - 2. 162
 - 3. 176
 - 4. 144

Question ID : 26433069050
Status : Answered
Chosen Option : 1

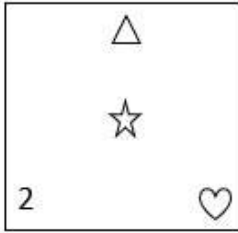
www.govtjobsalert.in

Q.7 Which figure should replace the question mark (?) if the series were to be continued?

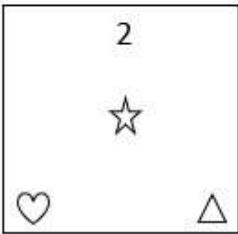
△	△	♥	♥	?
☆	2	2	☆	
2	♥	☆	△	2

Ans

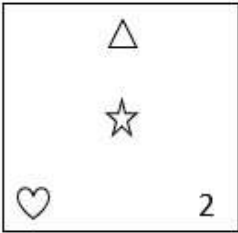
✓ 1.



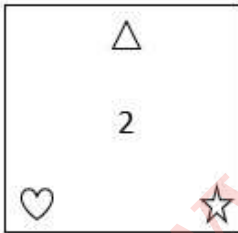
✗ 2.



✗ 3.



✗ 4.



Question ID : 26433076623
 Status : Not Answered
 Chosen Option : --

Q.8 In a certain language, RAT is coded as 3, BOTTLE is coded as 6, how will MOBILE be coded in the same language?

Ans ✓ 1. 6

✗ 2. 18

✗ 3. 12

✗ 4. 5

Question ID : 26433074591
 Status : Answered
 Chosen Option : 1

Q.9 Select the set in which the numbers are related in the same way as are the numbers of the following set.

(NOTE : Operations should be performed on the whole numbers, without breaking down the numbers into its constituent digits. E.g. 13 – Operations on 13 such as adding /subtracting/multiplying etc. to 13 can be performed. Breaking down 13 into 1 and 3 and then performing mathematical operations on 1 and 3 is NOT allowed)
(45, 24, 231)
(65, 47, 198)

Ans 1. (46, 13, 363)

2. (35, 12, 296)

3. (75, 45, 390)

4. (70, 35, 285)

Question ID : 26433076489

Status : Not Answered

Chosen Option : --

Q.10 Six students are sitting around a circular table facing the centre. Raj is the immediate neighbour of Liam and Maria. Siddharth is sitting to the second right of Maria. Tanya is sitting to the third left of Liam. Nathan is sitting to the immediate left of Liam. Who is the immediate neighbour of Siddharth and Maria?

Ans 1. Liam

2. Tanya

3. Nathan

4. Raj

Question ID : 26433074605

Status : Answered

Chosen Option : 2

Q.11 Seven friends A, B, C, D, E, F and G are sitting around a circle facing towards the centre. D is sitting third to the right of A and immediately left of G. Only B is sitting between G and E. C is sitting to the immediate left of F. Who is sitting second to the left of G?

Ans 1. C

2. A

3. F

4. E

Question ID : 26433079054

Status : Answered

Chosen Option : 3

Q.12 Select the correct mirror image of the given figure when the mirror is placed at MN as shown below.

S n M w D N A
M ————— N

Ans

- 1. S n M w D N A
- 2. A n D w M n S
- 3. A n D w M n S
- 4. A n D w M n S

Question ID : 26433080806
Status : Answered
Chosen Option : 2

Q.13 In a certain code language, TIRE D is coded as 56, and FRESH is coded as 56. How will HEAVEN be coded in that language?

Ans

- 1. 56
- 2. 55
- 3. 52
- 4. 54

Question ID : 26433067997
Status : Answered
Chosen Option : 2

Q.14 Which of the following terms will replace the question mark (?) in the given series? WKRF, VLQG, TNOI, ?, MUHP

Ans

- 1. PQML
- 2. QQLL
- 3. QLLQ
- 4. QPLM

Question ID : 26433068306
Status : Answered
Chosen Option : 2

Q.15 Which option represents the correct order of the given words as they would appear in the English dictionary?

- 1 Glass
- 2 Glycerine
- 3 Glare
- 4 Glow
- 5 Glamorous

- Ans 1. 5,3,1,2,4
2. 5,3,1,4,2
3. 3,1,4,5,2
4. 3,5,4,1,2

Question ID : 26433069272

Status : Answered

Chosen Option : 2

Q.16 If '+' means '-', '-' means '+', 'x' means '÷', and '÷' means 'x'. Which of the following will be the value of the expression?

$$81 \times 9 + 21 - 7 \div 147$$

- Ans 1. 6
2. 9
3. 294
4. 303

Question ID : 264330114184

Status : Answered

Chosen Option : 2

Q.17 Select the option that is related to the fifth letter-cluster in the same way as the second letter-cluster is related to the first letter-cluster and the fourth letter-cluster is related to the third letter-cluster.

PENSION : NENSIOP :: QUALITY : YUALITQ :: PRODUCT : ?

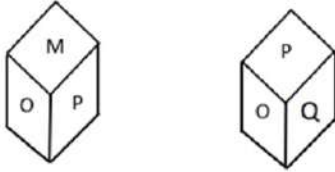
- Ans 1. TCUDORP
2. ORPTCUD
3. DUCTPRO
4. TRODUCP

Question ID : 26433069635

Status : Answered

Chosen Option : 4

Q.18 Two different positions of the same dice are shown having alphabets 'M' to 'R'. Find the alphabet on the face opposite the face showing 'M'.



- Ans 1. Q
 2. P
 3. R
 4. N

Question ID : 26433085513
Status : Not Answered
Chosen Option : --

Q.19 Which of the following letters will replace the question mark (?) and complete the following letter series?
B, C, G, P, F, ?

- Ans 1. F
 2. E
 3. C
 4. D

Question ID : 26433067286
Status : Not Answered
Chosen Option : --

Q.20 Select the option that is related to the fifth letter-cluster in the same way as the second letter-cluster is related to the first letter-cluster and the fourth letter-cluster is related to the third letter-cluster.

NEAR: KJEG :: SAME: FFQT :: EARN: ?

- Ans 1. JXGR
 2. JFWS
 3. TFVK
 4. VZIM

Question ID : 26433057496
Status : Not Answered
Chosen Option : --

Q.1 The Dronacharya Award for coaches started in which year?

Ans 1. 1985

2. 1984

3. 1982

4. 1987

Question ID : 264330116257
Status : Not Answered
Chosen Option : --

Q.2 The _____ refers to the excess of government's revenue expenditure over revenue receipts.

Ans 1. revenue surplus

2. revenue deficit

3. capital deficit

4. fiscal deficit

Question ID : 264330115284
Status : Not Answered
Chosen Option : --

Q.3 What is the name of the first Indian tribal president?

Ans 1. Droupadi Murmu

2. Bishweswar Tudu

3. Jasvantsinh Bhabhor

4. Sudarshan Bhagat

Question ID : 264330114987
Status : Answered
Chosen Option : 1

Q.4 What is different about castor seeds?

Ans 1. It is the only rabi crop

2. It is neither rabi nor kharif

3. It is only zaid crop

4. It is both rabi and kharif crop

Question ID : 264330115531
Status : Not Answered
Chosen Option : --

Q.5 Songkran is a Buddhist festival. This festival is celebrated for several days in the month of _____.

- Ans
- 1. March
 - 2. June
 - 3. April
 - 4. May

Question ID : 264330115089
Status : Not Answered
Chosen Option : --

Q.6 As per the 73rd and 74th amendment India has _____-tier government system.

- Ans
- 1. Three
 - 2. Four
 - 3. Two
 - 4. Single

Question ID : 264330115619
Status : Not Answered
Chosen Option : --

Q.7 Which of the following has been conferred the Kalidas Samman in February 2022?

- Ans
- 1. Kumar Gandharva
 - 2. Zia Mohiuddin Dagar
 - 3. M. Venkateshkumar
 - 4. Bhupen Khakhar

Question ID : 264330115829
Status : Not Answered
Chosen Option : --

Q.8 Which state has the highest sex ratio as per the Census 2011?

- Ans
- 1. Odisha
 - 2. Andhra Pradesh
 - 3. Kerala
 - 4. Tamil Nadu

Question ID : 264330116038
Status : Not Answered
Chosen Option : --

Q.9 Shevroy Hills and the Javadi Hills are located to the _____.

- Ans
- 1. northeast of the Western Ghats
 - 2. southeast of the Eastern Ghats
 - 3. southwest of the Eastern Ghats
 - 4. southeast of the Western Ghats

Question ID : 264330115986
Status : Not Answered
Chosen Option : --

Q.10 Who among the following became Member of Legislative Assembly from Bochahan, Bihar in India, in April 2022?

- Ans 1. Baby Kumari
 2. Amar Kumar Paswan
 3. Ramvriksh Sada
 4. Tej Pratap Yadav

Question ID : 264330114903
Status : Not Answered
Chosen Option : --

Q.11 Jagoi and Cholom are the two main divisions in which of the following classical dance forms?

- Ans 1. Kathak
 2. Odissi
 3. Manipuri
 4. Sattriya

Question ID : 26433071449
Status : Not Answered
Chosen Option : --

Q.12 Which Article of the Constitution of India mandates the position of a Vice President of India?

- Ans 1. Article 42
 2. Article 53
 3. Article 63
 4. Article 49

Question ID : 26433054539
Status : Not Answered
Chosen Option : --

Q.13 For the first time in the world, the Five-Year Plan (1928–32), was implemented by _____ in Soviet Union.

- Ans 1. Steve Jobs
 2. Karl Marx
 3. Adam Smith
 4. Joseph Stalin

Question ID : 264330115369
Status : Not Answered
Chosen Option : --

Q.14 Swachh Bharat Mission was launched in year _____.

Ans 1. 2012

2. 2014

3. 2016

4. 2013

Question ID : 264330116175

Status : Not Answered

Chosen Option : --

Q.15 Which of the following major incidents occurred in 1919?

Ans 1. Jallianwala bagh massacre

2. Bengal partition

3. Non-cooperation movement

4. Champaran movement

Question ID : 26433089881

Status : Not Answered

Chosen Option : --

Q.16 The 12th Five-Year Plan aims to achieve annual average economic growth rate of _____.

Ans 1. 6.2 per cent

2. 9.3 per cent

3. 7.1 per cent

4. 8.2 per cent

Question ID : 264330116128

Status : Not Answered

Chosen Option : --

Q.17 The sound waves having frequencies less than _____ Hz are called infrasonic waves.

Ans 1. 15

2. 5

3. 10

4. 20

Question ID : 264330115151

Status : Not Answered

Chosen Option : --

Q.18 The mascot of 2022 National games of India is based on which animal?

- Ans
- 1. Peacock
 - 2. Lion
 - 3. Cheetah
 - 4. Cow

Question ID : 264330115952
Status : Not Answered
Chosen Option : --

Q.19 In plants cell, _____ are primarily organelles in which materials such as starch, oils and protein granules are stored.

- Ans
- 1. Leucoplasts
 - 2. Mitochondria
 - 3. Vacuoles
 - 4. Chromoplasts

Question ID : 264330115212
Status : Not Answered
Chosen Option : --

Q.20 Which of the following rivers is named only once in Rigveda?

- Ans
- 1. Ganga
 - 2. Indus
 - 3. Saraswati
 - 4. Jhelum

Question ID : 26433089850
Status : Not Answered
Chosen Option : --

Section : Part-C-Elementary Mathematics

Q.1 The cost price of 20 balls is the same as the selling price of 18 balls. Find the profit percentage.

- Ans
- 1. $\frac{100}{9}\%$
 - 2. 16%
 - 3. 10%
 - 4. 14%

Question ID : 26433075724
Status : Answered
Chosen Option : 1

Q.2 Anand with his family travelled from Guntur to Rajahmundry by car at a speed of 50 km/h and returned to Guntur at a speed of 60 km/h. The average speed for the whole journey is: (Consider up to two decimal places)

- Ans
- 1. 54.54 km/h
 - 2. 64.64 km/h
 - 3. 34.54 km/h
 - 4. 44.34 km/h

Question ID : 26433081042
Status : Answered
Chosen Option : 1

Q.3 A dealer fixed the price of an article 40% above the cost of production. While selling it he allows a discount of 20% and makes a profit of Rs.72. Find the cost of production (in Rs.) of the article.

- Ans
- 1. Rs.540
 - 2. Rs.600
 - 3. Rs.750
 - 4. Rs.590

Question ID : 26433066306
Status : Answered
Chosen Option : 2

Q.4 A rectangular ground 90m long and 42 m wide has two cross roads in its centre. The road parallel to the length is 7 m wide and the other road is 3 m wide, both roads are perpendicular to each other. The cost of laying the bricks at the rate of Rs.25 per m², on the roads, will be:

- Ans
- 1. Rs.18,308
 - 2. Rs.18,575
 - 3. Rs.18,375
 - 4. Rs.16,375

Question ID : 26433083057
Status : Not Answered
Chosen Option : --

Q.5 In what time will ₹6,750 amount to ₹8,984.25 at the interest rate of 20% per annum, compounded half yearly?

- Ans
- 1. $2\frac{1}{2}$ year
 - 2. $\frac{1}{2}$ year
 - 3. $1\frac{1}{2}$ year
 - 4. 2 year

Question ID : 26433076401
Status : Not Answered
Chosen Option : --

Q.6 Which type of numbers are NOT co-prime?

- Ans
- 1. Any two prime numbers
 - 2. Any two consecutive odd numbers
 - 3. Any two consecutive numbers
 - 4. Any two consecutive even numbers

Question ID : 26433080284

Status : Answered

Chosen Option : 4

Q.7 Ramesh and Suresh can complete a piece of work in 10 days and 12 days, respectively. If they are working on alternate days, starting with Ramesh, in how many days will the entire work be finished?

- Ans
- 1. $12\frac{10}{11}$
 - 2. $10\frac{10}{11}$
 - 3. $12\frac{5}{6}$
 - 4. $10\frac{5}{6}$

Question ID : 26433075569

Status : Answered

Chosen Option : 2

Q.8 The ratio of alcohol to water in three types of drugs of equal quantity is 2 : 5, 5 : 9 and 8 : 13 respectively. Equal quantity of all the three drugs is mixed. Find the ratio of alcohol to water after mixing .

- Ans
- 1. 34 : 38
 - 2. 12 : 19
 - 3. 43 : 83
 - 4. 57 : 61

Question ID : 26433081576

Status : Not Answered

Chosen Option : --

Q.9 Johnson borrows ₹30,000 at 5% compound interest per annum. He wants to pay this amount back by the end of 2 years in two equal yearly installments. How much does he have to pay approximately at the end of each year?

- Ans
- 1. ₹16,134
 - 2. ₹15,231
 - 3. ₹16,274
 - 4. ₹15,784

Question ID : 26433080241
Status : Not Answered
Chosen Option : --

Q.10 Find three numbers in the ratio of 6 : 4 : 10 such that the sum of their squares is equal to 3800.

- Ans
- 1. 30, 20 and 40
 - 2. 30, 30 and 50
 - 3. 40, 20 and 50
 - 4. 30, 20 and 50

Question ID : 26433081028
Status : Not Attempted and Marked For Review
Chosen Option : --

Q.11 In a panchayat election an independent candidate got 28% of the total votes polled and was declared the winner. The rest of the votes were equally divided among the candidates of three national parties. If the total votes polled were 1200, how many votes did the each candidate of national party get?

- Ans
- 1. 312
 - 2. 272
 - 3. 292
 - 4. 288

Question ID : 26433081483
Status : Answered
Chosen Option : 4

Q.12 The salary of an employee in the month of March is ₹7,500 and the company increases his salary every month by 2%. His salary in the month of May of the same year is:

- Ans
- 1. ₹7,803
 - 2. ₹6,484
 - 3. ₹4,348
 - 4. ₹4,843

Question ID : 26433081558
Status : Answered
Chosen Option : 1

Q.13 A car covers the first 35 km in 15 minutes and the next 45 km in 25 minutes. What is the average speed of the car?

- Ans 1. 120 km/h
 2. 130 km/h
 3. 124 km/h
 4. 135 km/h

Question ID : 26433080226

Status : Not Attempted and Marked For Review

Chosen Option : --

Q.14 A can complete $\frac{3}{4}$ th of the work in 9 days and B can complete $\frac{2}{5}$ th of the work in 12 days. With the help of C, all three together complete the whole work in $\frac{60}{11}$ days and earn Rs. 330. If money is shared in the ratio of work done, then find the difference in the share of C and the share of A.

- Ans 1. Rs.40
 2. Rs.30
 3. Rs.70
 4. Rs.60

Question ID : 264330116859

Status : Not Answered

Chosen Option : --

Q.15 The price of 2 tables is equal to the price of 5 chairs. If price of a chair is Rs. 500, then what is the average price of 6 tables and 9 chairs?

- Ans 1. Rs 750
 2. Rs 800
 3. Rs 900
 4. Rs 850

Question ID : 264330116691

Status : Answered

Chosen Option : 2

Q.16 If Ram bought 15 shirts of ₹520 each, 20 pants of ₹600 each and 15 kurtas at ₹650 each, then the average value of each article is:

- Ans 1. ₹591
 2. ₹691
 3. ₹519
 4. ₹619

Question ID : 26433079905

Status : Not Answered

Chosen Option : --

Q.17 The single discount equivalent to the successive discounts of 30 percent, 15 percent and 5 percent is:

- Ans 1. 43.475 percent
 2. 48.80 percent
 3. 56.525 percent
 4. 59.50 percent

Question ID : 264330116744
Status : Not Answered
Chosen Option : --

Q.18 If the diameter and height of a cylinder are d cm and $\frac{d}{2}$ cm, respectively, then its volume is:

- Ans 1. $\pi \frac{d^2}{2} \text{ cm}^3$
 2. $\pi d^2 \text{ cm}^3$
 3. $\pi \frac{d^3}{8} \text{ cm}^3$
 4. $\pi \frac{d^2}{4} \text{ cm}^3$

Question ID : 26433075535
Status : Not Answered
Chosen Option : --

Q.19 If a number 'a' is divisible by 6 and 21, then 5a is divisible by :

- Ans 1. 180
 2. 610
 3. 440
 4. 210

Question ID : 26433081699
Status : Not Answered
Chosen Option : --

Q.20 The total cost price of a book and pen is Rs.371. If the book cost price is 12% more than the pen, find the cost price of the pen.

- Ans 1. Rs.200
 2. Rs.150
 3. Rs.125
 4. Rs.175

Question ID : 26433076034
Status : Not Answered
Chosen Option : --

Q.1 Select the most appropriate ANTONYM of the given word.

Initial

- Ans 1. Trivial
 2. Inaugural
 3. Fractional
 4. Terminal

Question ID : 26433071971
Status : Answered
Chosen Option : 4

Q.2 Select the most appropriate meaning of the given idiom.

Let the cat out of the bag

- Ans 1. To make an announcement
 2. To praise oneself
 3. To work continuously
 4. To reveal a secret accidentally

Question ID : 26433072677
Status : Answered
Chosen Option : 1

Q.3 Parts of the following sentence have been underlined and given as options. Select the option that contains an error.

They eating three apples after last night's dinner.

- Ans 1. night's
 2. after
 3. eating
 4. three

Question ID : 26433089365
Status : Not Answered
Chosen Option : --

Q.4 Select the most appropriate ANTONYM of the given word.

Latent

- Ans 1. Obvious
 2. Deceitful
 3. Casual
 4. Dormant

Question ID : 26433071979
Status : Not Answered
Chosen Option : --

Q.5 Select the most appropriate synonym of the given word.

Salty

- Ans** 1. Feline
 2. Prim
 3. Saline
 4. Pricky

Question ID : 26433089341
Status : Answered
Chosen Option : 4

Q.6 Select the most appropriate synonym of the given word.

Adamant

- Ans** 1. Lax
 2. Flexible
 3. Stubborn
 4. Genuine

Question ID : 26433073431
Status : Not Answered
Chosen Option : --

Q.7 Select the most appropriate option to fill in the blank.

Advancement in science and technology in many areas _____ the lives of people more advanced than the ancient times.

- Ans** 1. was made
 2. has made
 3. is made
 4. have made

Question ID : 26433072732
Status : Answered
Chosen Option : 4

Q.8 Select the INCORRECTLY spelt word.

- Ans** 1. Gaiety
 2. Neigh
 3. Mischivious
 4. Inoculate

Question ID : 26433073602
Status : Not Answered
Chosen Option : --

Q.9 Select the most appropriate set of words to complete the sentence.

While teaching my son how to drive a car, I told him if he didn't hit the _____ in time he would _____ the car's side mirror.

- Ans
- 1. break; break
 - 2. brake; break
 - 3. brake; brake
 - 4. break; brake

Question ID : 26433088872
Status : Answered
Chosen Option : 2

Q.10 Select the correct option to substitute the underlined segment in the given sentence.
Many people across the globe have been effected by the pandemic.

- Ans
- 1. have affected
 - 2. have been affected
 - 3. have effected
 - 4. has been effected

Question ID : 26433092995
Status : Not Answered
Chosen Option : --

Q.11 Select the most appropriate meaning of the given idiom.

Sow wild oats

- Ans
- 1. Engaging in fighting
 - 2. Engaging in planning
 - 3. Engaging in disobedience
 - 4. Engaging in rebelliousness or promiscuity

Question ID : 26433072280
Status : Not Answered
Chosen Option : --

Q.12 Identify the correctly spelt sentence.

- Ans
- 1. The water cycle is a circular process.
 - 2. The water cycle is a circuler proces.
 - 3. The water cycle is a circqlar process.
 - 4. The water cycle is a circular proces.

Question ID : 26433072828
Status : Answered
Chosen Option : 1

Q.13 Select the most appropriate **ANTONYM** of the given word.
Rare

- Ans** 1. Usual
 2. Careless
 3. Discreet
 4. Unique

Question ID : 26433086345
Status : Answered
Chosen Option : 1

Q.14 Select the most appropriate **ANTONYM** of the given word.

Propagate

- Ans** 1. Disseminate
 2. Spread
 3. Communicate
 4. Deplete

Question ID : 26433073573
Status : Not Answered
Chosen Option : --

Q.15 Select the most appropriate option that can substitute the underlined segment in the given sentence.

The reported alarm of the earthquake scared every citizen of the country.

- Ans** 1. alarming report
 2. alarmed report
 3. reporting alarm
 4. alarm reporting

Question ID : 26433088165
Status : Answered
Chosen Option : 3

Comprehension:

In the following passage, some words have been deleted. Read the passage carefully and select the most appropriate option to fill in each blank.

Humans have (1)_____ that animals do not have a life and maybe exploited in any way they see fit, but this (2)_____ is incorrect and must be altered before it is too late. We fail to recognise that the pain we (3)_____ on animals will come back to haunt us, and no matter how (4)_____ the discovery we make by causing harm to animals, it will be futile. It can never (5)_____ the human actions.

SubQuestion No : 16

Q.16 Select the most appropriate option to fill in blank number 1.

- Ans
- 1. assigned
 - 2. claimed
 - 3. assumed
 - 4. pretended

Question ID : 26433061001
Status : Not Answered
Chosen Option : --

Comprehension:

In the following passage, some words have been deleted. Read the passage carefully and select the most appropriate option to fill in each blank.

Humans have (1)_____ that animals do not have a life and maybe exploited in any way they see fit, but this (2)_____ is incorrect and must be altered before it is too late. We fail to recognise that the pain we (3)_____ on animals will come back to haunt us, and no matter how (4)_____ the discovery we make by causing harm to animals, it will be futile. It can never (5)_____ the human actions.

SubQuestion No : 17

Q.17 Select the most appropriate option to fill in blank number 2.

- Ans
- 1. perspective
 - 2. fact
 - 3. data
 - 4. superstition

Question ID : 26433061002
Status : Not Answered
Chosen Option : --

Comprehension:

In the following passage, some words have been deleted. Read the passage carefully and select the most appropriate option to fill in each blank.

Humans have (1)_____ that animals do not have a life and maybe exploited in any way they see fit, but this (2)_____ is incorrect and must be altered before it is too late. We fail to recognise that the pain we (3)_____ on animals will come back to haunt us, and no matter how (4)_____ the discovery we make by causing harm to animals, it will be futile. It can never (5)_____ the human actions.

SubQuestion No : 18

Q.18 Select the most appropriate option to fill in blank number 3.

Ans 1. convict

2. afflict

3. conflict

4. inflict

Question ID : 26433061003

Status : Not Answered

Chosen Option : --

Comprehension:

In the following passage, some words have been deleted. Read the passage carefully and select the most appropriate option to fill in each blank.

Humans have (1)_____ that animals do not have a life and maybe exploited in any way they see fit, but this (2)_____ is incorrect and must be altered before it is too late. We fail to recognise that the pain we (3)_____ on animals will come back to haunt us, and no matter how (4)_____ the discovery we make by causing harm to animals, it will be futile. It can never (5)_____ the human actions.

SubQuestion No : 19

Q.19 Select the most appropriate option to fill in blank number 4.

Ans 1. bad

2. limited

3. painful

4. significant

Question ID : 26433061004

Status : Not Answered

Chosen Option : --

Comprehension:

In the following passage, some words have been deleted. Read the passage carefully and select the most appropriate option to fill in each blank.

Humans have (1)_____ that animals do not have a life and maybe exploited in any way they see fit, but this (2)_____ is incorrect and must be altered before it is too late. We fail to recognise that the pain we (3)_____ on animals will come back to haunt us, and no matter how (4)_____ the discovery we make by causing harm to animals, it will be futile. It can never (5)_____ the human actions.

SubQuestion No : 20

Q.20 Select the most appropriate option to fill in blank number 5.

- Ans 1. specify
 2. justify
 3. nullify
 4. classify

Question ID : 26433061005
Status : Not Answered
Chosen Option : --

Section : Part-D-Hindi

Q.1 निम्नलिखित वाक्य के किस खंड में त्रुटि है?
'मुझे भारी दुःख हुआ।'

- Ans 1. हुआ
 2. दुःख
 3. मुझे
 4. भारी

Question ID : 26433066758
Status : Not Answered
Chosen Option : --

Q.2 निम्नलिखित वाक्य की पूर्ति उचित कर्ता कारक चिह्न से करें।
'सोहन _____ घर का सारा काम किया है।'

- Ans 1. ने
 2. पर
 3. में
 4. से

Question ID : 26433085029
Status : Not Answered
Chosen Option : --

Q.3 'फूल किसे नहीं भाते हैं!'
उपरोक्त वाक्य में रेखांकित शब्द के उचित पर्यायवाची शब्द का चयन कीजिए।

- Ans
- 1. रसाल
 - 2. कुसुम
 - 3. अवनी
 - 4. कांता

Question ID : 26433079618
Status : Not Answered
Chosen Option : --

Q.4 निम्नलिखित शब्दों में से कौन सा शब्द अनेकार्थी शब्द है?

- Ans
- 1. पोत
 - 2. रेलगाड़ी
 - 3. जहाज
 - 4. हवाई जहाज

Question ID : 26433091320
Status : Not Answered
Chosen Option : --

Q.5 "अक्षदा उपवन में टहलने गई थी।"
उपर्युक्त वाक्य को संदिग्ध वर्तमान काल का प्रयोग कर पुनः लिखिए।

- Ans
- 1. अक्षदा उपवन में टहलने गई।
 - 2. अक्षदा उपवन में टहल रही थी।
 - 3. अक्षदा उपवन में टहलने गई होगी।
 - 4. अक्षदा उपवन में टहलने जा रही है।

Question ID : 26433066982
Status : Not Answered
Chosen Option : --

Q.6 निम्नलिखित वाक्यांश के लिए उपयुक्त सार्थक शब्द क्या होगा?
आयु में बड़ा व्यक्ति

- Ans
- 1. पूजनीय
 - 2. ज्येष्ठ
 - 3. श्रेष्ठ
 - 4. महान

Question ID : 26433065758
Status : Not Answered
Chosen Option : --

Q.7 रेखांकित शब्द-समूह के लिए सर्वाधिक उपयुक्त विकल्प चुनें।
राजभवन के अंदर महिलाओं का निवास है।

- Ans 1. स्त्रियावास
 2. अंतःपुर
 3. स्त्रीपुर
 4. आवास

Question ID : 26433062279
Status : Not Answered
Chosen Option : --

Q.8 दिए गए वाक्यों में से किस वाक्य में सही विभक्ति चिह्न का प्रयोग नहीं हुआ है?

- Ans 1. गर्मियों की छुट्टियाँ शुरू होने वाली थीं।
 2. रोहन हवाई जहाज़ से मुम्बई जायेगा।
 3. कोच्चि में रामानुजन पर मौसी रहती हैं।
 4. सौम्या के नाना का घर देहरादून में है।

Question ID : 26433074408
Status : Not Answered
Chosen Option : --

Q.9 निम्नलिखित वाक्य के रिक्त स्थान में सबसे उपयुक्त मुहावरा क्या होगा?
'रेल दुर्घटना में दुर्गा _____ बच गई।'

- Ans 1. पानी पानी
 2. नौ-दो
 3. एक-एक
 4. बाल-बाल

Question ID : 26433066723
Status : Not Answered
Chosen Option : --

Q.10 निम्नलिखित वाक्य के किस खंड में त्रुटि है?
'सच में क्या तुम्हें प्रथम स्थान मिला है?'

- Ans 1. मिला है?
 2. क्या तुम्हें
 3. सच में
 4. प्रथम स्थान

Question ID : 26433066755
Status : Not Answered
Chosen Option : --

Q.11 'अंजुमन हँस रही थी।' इस वाक्य का सकर्मक क्रिया में रूपांतरण होगा -

- Ans
- 1. अंजुमन हँस कर चली गई।
 - 2. नैना अंजुमन को हँसा रही है।
 - 3. अंजुमन हँसती है।
 - 4. अंजुमन से हँसा नहीं जाता।

Question ID : 26433062322
Status : Not Answered
Chosen Option : --

Q.12 वाक्य में रेखांकित मुहावरे का उपयुक्त अर्थ दिए गए विकल्पों में से चुनिए- वह तो हरदम लंगर-लंगोट कसकर तैयार रहता है।

- Ans
- 1. स्वागत को तैयार होना
 - 2. काम करने को तैयार होना
 - 3. लड़ने को तैयार होना
 - 4. जाने को तैयार होना

Question ID : 26433062309
Status : Not Answered
Chosen Option : --

Q.13 विकल्पों में से किस वाक्य में नीचे दिए गए शब्द के उपयुक्त विलोम शब्द का प्रयोग हुआ है? अवनति

- Ans
- 1. भारत में आर्थिक जागृति हो रही है।
 - 2. अपने देश में शारीरिक दुर्बलता हो रही है।
 - 3. भारत में आर्थिक विसंगति हो रही है।
 - 4. भारत में आर्थिक उन्नति हो रही है।

Question ID : 26433066944
Status : Not Answered
Chosen Option : --

Q.14 'बिना वेतन के काम करने वाला' वाक्यांश के लिए उचित शब्द बताइए -

- Ans
- 1. वैतनिक
 - 2. सवैतनिक
 - 3. अवैतनिक
 - 4. निवैतनिक

Question ID : 26433065910
Status : Not Answered
Chosen Option : --

Q.15 इनमें से क्या 'महावीर' का अर्थ नहीं है?

- Ans
- 1. जैन तीर्थंकर
 - 2. महादेव
 - 3. हनुमान
 - 4. शक्तिशाली

Question ID : 26433080940

Status : Not Answered

Chosen Option : --

Comprehension:

निम्नलिखित गद्यांश में कुछ शब्दों को हटा दिया गया है। दिए गए विकल्पों की सहायता से रिक्त स्थानों की पूर्ति कीजिए। प्रत्येक संख्या के लिए सबसे उपयुक्त विकल्प का चयन कीजिए।
संसार के सभी महापुरुष 1. _____ के कारण ही महान बने हैं। राम ने 2. _____ भटक कर लंका पर विजय प्राप्त की थी। 3. _____ ने मराठों को एकत्रित करके हिन्दुओं की रक्षा की थी। कोलंबस ने स्वावलंबन से ही 4. _____ की खोज की थी। स्वावलंबन का गुण वैसे तो किसी भी आयु में हो सकता है परन्तु यह बालकों में शीघ्र उत्पन्न किया जा सकता है। यह चरित्र में विकास की 5. _____ है।

SubQuestion No : 16

Q.16 रिक्त स्थान 1 की पूर्ति के लिए सबसे उपयुक्त विकल्प का चयन करें।

- Ans
- 1. सुस्त
 - 2. स्वावलंबन
 - 3. आलसी
 - 4. काहिल

Question ID : 264330110915

Status : Not Answered

Chosen Option : --

Comprehension:

निम्नलिखित गद्यांश में कुछ शब्दों को हटा दिया गया है। दिए गए विकल्पों की सहायता से रिक्त स्थानों की पूर्ति कीजिए। प्रत्येक संख्या के लिए सबसे उपयुक्त विकल्प का चयन कीजिए।
संसार के सभी महापुरुष 1. _____ के कारण ही महान बने हैं। राम ने 2. _____ भटक कर लंका पर विजय प्राप्त की थी। 3. _____ ने मराठों को एकत्रित करके हिन्दुओं की रक्षा की थी। कोलंबस ने स्वावलंबन से ही 4. _____ की खोज की थी। स्वावलंबन का गुण वैसे तो किसी भी आयु में हो सकता है परन्तु यह बालकों में शीघ्र उत्पन्न किया जा सकता है। यह चरित्र में विकास की 5. _____ है।

SubQuestion No : 17

Q.17 रिक्त स्थान 2 की पूर्ति के लिए सबसे उपयुक्त विकल्प का चयन करें।

- Ans
- 1. तन-मन
 - 2. कण-कण
 - 3. वन-वन
 - 4. वन-वान

Question ID : 264330110916

Status : Not Answered

Chosen Option : --

Comprehension:

निम्नलिखित गद्यांश में कुछ शब्दों को हटा दिया गया है। दिए गए विकल्पों की सहायता से रिक्त स्थानों की पूर्ति कीजिए। प्रत्येक संख्या के लिए सबसे उपयुक्त विकल्प का चयन कीजिए।
संसार के सभी महापुरुष 1. _____ के कारण ही महान बने हैं। राम ने 2. _____ भटक कर लंका पर विजय प्राप्त की थी। 3. _____ ने मराठों को एकत्रित करके हिन्दुओं की रक्षा की थी। कोलंबस ने स्वावलंबन से ही 4. _____ की खोज की थी। स्वावलंबन का गुण वैसे तो किसी भी आयु में हो सकता है परन्तु यह बालकों में शीघ्र उत्पन्न किया जा सकता है। यह चरित्र में विकास की 5. _____ है।

SubQuestion No : 18

Q.18 रिक्त स्थान 3 की पूर्ति के लिए सबसे उपयुक्त विकल्प का चयन करें।

- Ans
- 1. बालाजी विश्वनाथ
 - 2. बाजी प्रभु देशपांडे
 - 3. बाजीराव
 - 4. छत्रपति शिवाजी

Question ID : 264330110917

Status : Not Answered

Chosen Option : --

Comprehension:

निम्नलिखित गद्यांश में कुछ शब्दों को हटा दिया गया है। दिए गए विकल्पों की सहायता से रिक्त स्थानों की पूर्ति कीजिए। प्रत्येक संख्या के लिए सबसे उपयुक्त विकल्प का चयन कीजिए।
संसार के सभी महापुरुष 1. _____ के कारण ही महान बने हैं। राम ने 2. _____ भटक कर लंका पर विजय प्राप्त की थी। 3. _____ ने मराठों को एकत्रित करके हिन्दुओं की रक्षा की थी। कोलंबस ने स्वावलंबन से ही 4. _____ की खोज की थी। स्वावलंबन का गुण वैसे तो किसी भी आयु में हो सकता है परन्तु यह बालकों में शीघ्र उत्पन्न किया जा सकता है। यह चरित्र में विकास की 5. _____ है।

SubQuestion No : 19

Q.19 रिक्त स्थान 4 की पूर्ति के लिए सबसे उपयुक्त विकल्प का चयन करें।

- Ans
- 1. अमेरिका
 - 2. रूस
 - 3. भारत
 - 4. अफ्रीका

Question ID : 264330110918

Status : Not Answered

Chosen Option : --

Comprehension:

निम्नलिखित गद्यांश में कुछ शब्दों को हटा दिया गया है। दिए गए विकल्पों की सहायता से रिक्त स्थानों की पूर्ति कीजिए। प्रत्येक संख्या के लिए सबसे उपयुक्त विकल्प का चयन कीजिए।
संसार के सभी महापुरुष 1. _____ के कारण ही महान बने हैं। राम ने 2. _____ भटक कर लंका पर विजय प्राप्त की थी। 3. _____ ने मराठों को एकत्रित करके हिन्दुओं की रक्षा की थी। कोलंबस ने स्वावलंबन से ही 4. _____ की खोज की थी। स्वावलंबन का गुण वैसे तो किसी भी आयु में हो सकता है परन्तु यह बालकों में शीघ्र उत्पन्न किया जा सकता है। यह चरित्र में विकास की 5. _____ है।

SubQuestion No : 20

Q.20 रिक्त स्थान 5 की पूर्ति के लिए सबसे उपयुक्त विकल्प का चयन करें।

- Ans** 1. प्रथम सीढ़ी
 2. चतुर्थ सीढ़ी
 3. द्वितीय सीढ़ी
 4. तृतीय सीढ़ी

Question ID : 264330110919

Status : Not Answered

Chosen Option : --

WWW.GOVtJOBSALERT.COM