

Constable GD in CAPFs SSF Rifleman GD in Assam Rifles and Sepoy in NCB Examination 2022

Roll Number	www.govtjobsalert.in
Candidate Name	www.govtjobsalert.in
Venue Name	Institute of Hardware Networking And Communication Center Sarnath
Exam Date	02/02/2023
Exam Time	2:30 PM - 3:30 PM
Subject	Constable GD Examination 2022

Section : Part-A-General Intelligence and Reasoning

Q.1 In a certain code language, 'BREAD is written as 'BED19', 'IRONY' is written as 'IOY32', how will 'SHARP' be written as in that language?

- Ans
- 1. SAP26
 - 2. 26SAP
 - 3. SHA26
 - 4. SAP62

Question ID : 26433069647
Status : Answered
Chosen Option : 1

Q.2 Which option represents the correct order of the given words as they would appear in the English dictionary?

1. micro
2. minute
3. miles
4. mimic
5. miniature

- Ans
- 1. 1,5,2,4,3
 - 2. 1,4,5,3,2
 - 3. 1,3,4,5,2
 - 4. 1,4,3,5,2

Question ID : 26433069293
Status : Answered
Chosen Option : 3

Q.3 Which of the following numbers will replace the question mark (?) in the given series?
89, 214, ?, 773, 1285, 2014

- Ans
- 1. 422
 - 2. 342
 - 3. 430
 - 4. 446

Question ID : 26433076743
Status : Answered
Chosen Option : 3

Q.4 Which letter-cluster will replace the question mark (?) to complete the given series?
ZYXW, STUV, RQPO, ?, JIHG, CDEF

- Ans
- 1. NMLK
 - 2. KLMN
 - 3. JIHG
 - 4. LKMN

Question ID : 26433067721

Status : Not Answered

Chosen Option : --

Q.5 A @ B का अर्थ है 'A, B का पति है'।
A & B का अर्थ है 'A, B की पुत्री है'।
A # B का अर्थ है 'A, B का पिता है'।
A % B का अर्थ है 'A, B का सहोदर है'।
यदि H @ K % M # P & S है, तो S, K से किस प्रकार संबंधित है?

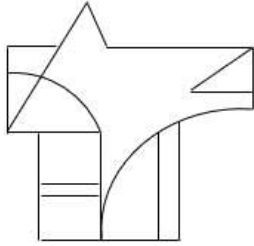
- Ans
- 1. भाई
 - 2. बहन
 - 3. पिता
 - 4. भाभी

Question ID : 26433069620

Status : Answered

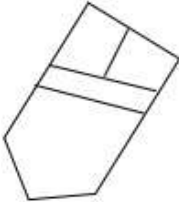
Chosen Option : 4

Q.6 Select the option figure which is embedded in the given figure. (Rotation is NOT allowed)

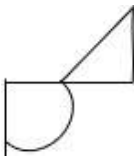


Ans

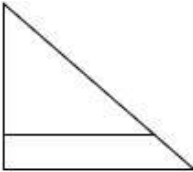
✗ 1.




✗ 2.



✗ 3.



✓ 4.



Question ID : 26433069355
Status : Answered
Chosen Option : 4

Q.7 Three statements are given, followed by three conclusions numbered I, II and III. Assuming the statements to be true, even if they seem to be at variance with commonly known facts, decide which of the conclusions logically follow(s) from the statements.

Statements:

All trees are walls.

No wall is a door.

Some doors are rooms.

Conclusions:

I. Some rooms are walls.

II. No trees are doors.

III. All walls are trees.

- Ans**
- 1. Only conclusions I and III follow
 - 2. All conclusions follow
 - 3. Only conclusions II and III follow
 - 4. Only conclusion II follows

Question ID : 26433090989

Status : Answered

Chosen Option : 4

Q.8 Select the option that is related to the third word in the same way as the second word is related to the first word. (The words must be considered as meaningful English words and must not be related to each other based on the number of letters/number of consonants/vowels in the word.)

Doctor : Hospital :: Engineer : ?

- Ans**
- 1. Court
 - 2. Construct
 - 3. School
 - 4. Site

Question ID : 26433067855

Status : Answered

Chosen Option : 2

Q.9 Seven people I, J, K, L, M, N and O, are sitting in a straight row, facing the north. Only five people sit to the left of M. J sits third to the left of O. O is not an immediate neighbour of M. K sits to the immediate right of N. I sits fourth to the right of J. Who sits at the extreme right end of the row?

- Ans**
- 1. L
 - 2. K
 - 3. O
 - 4. I

Question ID : 26433076526

Status : Answered

Chosen Option : 1

Q.10 Select the option that is related to the fifth number in the same way as the second number is related to the first number and the fourth number is related to the third number.

31 : 14 :: 23 : 10 :: 39 : ?

- Ans
- 1. 22
 - 2. 20
 - 3. 18
 - 4. 19

Question ID : 26433069428
Status : Answered
Chosen Option : 3

Q.11 Six students are sitting around a circular table facing the centre. Ken is sitting to the immediate right of Joe. Joe is sitting third to the left of Ben. Kat is sitting to the immediate right of Ben. Jen is the immediate neighbour of Ben and Ken. Who is the immediate neighbour of Ken and Mel?

- Ans
- 1. Jen
 - 2. Ben
 - 3. Joe
 - 4. Kat

Question ID : 26433081770
Status : Answered
Chosen Option : 3

Q.12 Select the letter-cluster from among the given options that can replace the question mark (?) in the following series.
RXUT, VVYX, ZTCB, ?, HPKJ

- Ans
- 1. DRGF
 - 2. FDNT
 - 3. DGFR
 - 4. FQCU

Question ID : 26433074739
Status : Answered
Chosen Option : 1

Q.13 Which two numbers(not digits), from the given options, should be interchanged to make the given equation correct?
 $(48 \div 3 + 6) \div 11 = 81 - 27 \div 3 \times 5$

- Ans
- 1. 48 and 81
 - 2. 5 and 6
 - 3. 81 and 27
 - 4. 11 and 5

Question ID : 26433082483
Status : Not Answered
Chosen Option : --

Q.14 In a certain code language, 'CHURCH' is written as 'FKXUFK' and 'MUMBAI' is written as 'XPEDL'. How will 'TEMPLE' be written in that language?

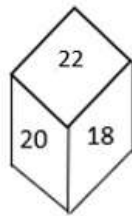
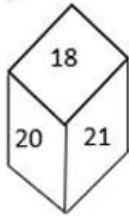
- Ans
- 1. WHPSHO
 - 2. WHPOSH
 - 3. WHSPOH
 - 4. WHPSOH

Question ID : 26433080468

Status : Answered

Chosen Option : 4

Q.15 Two different positions of the same dice are shown. Find the number on the face opposite the face showing '21'.



- Ans
- 1. 20
 - 2. 24
 - 3. 19
 - 4. 22

Question ID : 26433089507

Status : Answered

Chosen Option : 1

WWW.GOVtjobsalert.in

Q.16 Which of the following figures is the exact mirror image of the given problem figure when the mirror is held at the right side?

Problem figure:



Ans

✓ 1.




✗ 2.



✗ 3.



✗ 4.



Question ID : 26433087090

Status : Answered

Chosen Option : 1

Q.17 Which two signs should be interchanged to make the below equation mathematically correct?

$$60 \div 3 \times 20 - 15 + 12 = 6$$

- Ans
- 1. \times and $-$
 - 2. $-$ and $+$
 - 3. \div and \times
 - 4. \div and $-$

Question ID : 264330117511

Status : Answered

Chosen Option : 3

Q.18 उस विकल्प का चयन कीजिए जो तीसरे शब्द से उसी प्रकार संबंधित है, जिस प्रकार दूसरा शब्द पहले शब्द से संबंधित है। (शब्दों को अर्थपूर्ण शब्दों के रूप में माना जाना चाहिए और शब्द में अक्षरों/व्यंजनों/स्वरों की संख्या के आधार पर एक दूसरे से संबंधित नहीं किया जाना चाहिए)
सिंह : गुफा :: राजा : _____

- Ans
- 1. जाला
 - 2. महल
 - 3. नौकर
 - 4. खरगोश

Question ID : 26433078831

Status : Answered

Chosen Option : 2

Q.19 Which of the following numbers will replace the question mark (?) in the given series?
11, 35, 69, 209, 417, ?

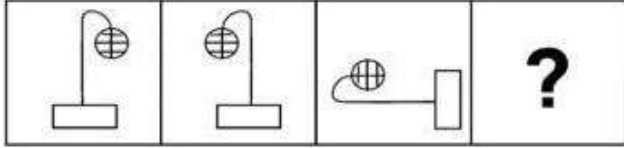
- Ans
- 1. 1152
 - 2. 1125
 - 3. 1253
 - 4. 1521

Question ID : 26433069118

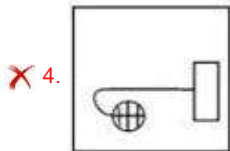
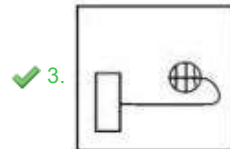
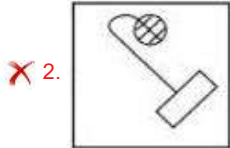
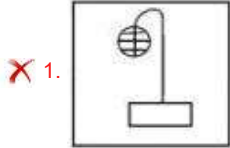
Status : Not Answered

Chosen Option : --

Q.20 Find the options which is related to the third figure in the same manner as second figure is related with the first figure.
(First figure is the leftmost figure.)



Ans



Question ID : 26433078860
Status : Answered
Chosen Option : 3

Section : Part-B-General Knowledge and General awareness

Q.1 Which of the following award is not awarded on the National sports Day?

- Ans
- ✗ 1. Arjuna Award
 - ✗ 2. Dronacharya Award
 - ✓ 3. Paramveer Chakra
 - ✗ 4. Dhyan Chand Award

Question ID : 264330116303
Status : Answered
Chosen Option : 3

Q.2 दशहरा, जो रावण पर भगवान राम की विजय का प्रतीक है, हिंदू माह _____ में मनाया जाता है।

- Ans
- ✓ 1. अश्विन
 - ✗ 2. कार्तिक
 - ✗ 3. फाल्गुन
 - ✗ 4. चैत्र

Question ID : 264330115100
Status : Answered
Chosen Option : 1

Q.3 In which year was the Minimum Wages Act introduced in India?

Ans 1. 1950

2. 1948

3. 1951

4. 1949

Question ID : 264330116084

Status : Not Answered

Chosen Option : --

Q.4 Which of the following dancers is related with Kathakali?

Ans 1. Darshana Jhaveri

2. Shovana Narayan

3. Vempati Chinna Satyam

4. Kunchu Kurup

Question ID : 264330115886

Status : Answered

Chosen Option : 2

Q.5 The Criminal Procedure _____, allows police officers or prison officers to collect certain identifiable information (such as fingerprints, biological samples) from convicts or those who have been arrested for an offence.

Ans 1. Samples Act, 2022

2. Punishment Act, 2022

3. Marks Act, 2021

4. Identification Act, 2022

Question ID : 264330116232

Status : Not Answered

Chosen Option : --

Q.6 In which year was the term 'secular' added to the Preamble of the Indian Constitution?

Ans 1. 1976

2. 1970

3. 1972

4. 1974

Question ID : 26433090662

Status : Answered

Chosen Option : 3

Q.7 Blossom shower is common in _____.

- Ans 1. Kerala
 2. West Bengal
 3. Assam
 4. Uttar Pradesh

Question ID : 26433089658
Status : Answered
Chosen Option : 3

Q.8 What is the chemical name of baking soda?

- Ans 1. Calcium sulphate hemihydrate
 2. Sodium hydrogencarbonate
 3. Calcium sulphate
 4. Sodium carbonate

Question ID : 264330115198
Status : Answered
Chosen Option : 4

Q.9 _____ provides supporting services in the main areas of industrial and agricultural production, domestic and foreign trade and commerce.

- Ans 1. Education
 2. Communication
 3. Trade
 4. Infrastructure

Question ID : 264330115545
Status : Answered
Chosen Option : 3

Q.10 जमींदारी संघ को लोकप्रिय रूप से किस नाम से जाना जाता था?

- Ans 1. लैंडहोल्डर्स सोसाइटी
 2. टैनेट सोसाइटी
 3. पीजेंट सोसाइटी
 4. फार्मर्स सोसाइटी

Question ID : 264330115693
Status : Answered
Chosen Option : 4

Q.11 A reaction in which reactants combine to form products and again products recombine to form reactants is called _____ reaction.

- Ans
- 1. irreversible
 - 2. redox
 - 3. reversible
 - 4. displacement

Question ID : 264330115159
Status : Not Answered
Chosen Option : --

Q.12 Which House of the States participate(s) in the election of the President of India?

- Ans
- 1. Legislative Assembly
 - 2. Neither Legislative Assembly and Legislative Council
 - 3. Legislative Council
 - 4. Both, Legislative Assembly and Legislative Council

Question ID : 26433074851
Status : Answered
Chosen Option : 1

Q.13 In which of the following year did Australia Host the Commonwealth Games?

- Ans
- 1. 2014
 - 2. 2018
 - 3. 1998
 - 4. 2002

Question ID : 264330115919
Status : Not Answered
Chosen Option : --

Q.14 निम्नलिखित में से कौन-सी नृत्य शैली एडवका संगीत वाद्ययंत्र से संबंधित है?

- Ans
- 1. मणिपुरी
 - 2. ओडिसी
 - 3. कथक
 - 4. मोहिनीअट्टम

Question ID : 26433086710
Status : Answered
Chosen Option : 2

Q.15 Which of the following is NOT a component of the Green Revolution?

- Ans 1. Multiple cropping pattern
 2. Application of fertilisers and chemicals
 3. Minimum support price
 4. High yielding variety seeds

Question ID : 26433054629
Status : Answered
Chosen Option : 3

Q.16 Who among the following became Member of Legislative Assembly from Mokama, Bihar in India, in November 2022?

- Ans 1. Tejashwi Yadav
 2. Neelam Devi
 3. Mohan Kumar Gupta
 4. Anandiben Patel

Question ID : 264330114924
Status : Answered
Chosen Option : 2

Q.17 International trade agreements have _____ as parties.

- Ans 1. two or more states
 2. two different cities
 3. two or more countries
 4. two or more provinces

Question ID : 264330115388
Status : Answered
Chosen Option : 3

Q.18 Who has been elected as the Chairperson of the Audit Bureau of Circulations (ABC) for 2022-2023?

- Ans 1. Madhukar Kamath
 2. Pratap Pawar
 3. Ashish Agarwal
 4. Devendra Vijay Darda

Question ID : 264330115001
Status : Not Answered
Chosen Option : --

Q.19 बुद्ध शाक्य गण नामक एक छोटे गण से संबंधित थे, और एक _____ थे।

- Ans
- 1. शूद्र
 - 2. वैश्य
 - 3. ब्रह्म
 - 4. क्षत्रिय

Question ID : 26433089854
Status : Answered
Chosen Option : 3

Q.20 In _____, a crisis in the balance of payments led to the introduction of economic reforms in India.

- Ans
- 1. 1997
 - 2. 1991
 - 3. 2001
 - 4. 1981

Question ID : 264330115298
Status : Not Answered
Chosen Option : --

Section : Part-C-Elementary Mathematics

Q.1 A shopkeeper offers a pen free on buying every dozen pens. Calculate % discount offered by the shopkeeper. Cost price of all the pens is same. (rounded off to one decimal place)

- Ans
- 1. 8.3 Percent
 - 2. 12.5 Percent
 - 3. 6.3 Percent
 - 4. 7.6 Percent

Question ID : 26433081572
Status : Answered
Chosen Option : 1

Q.2 Two trains start at the same time from Bangalore and Chennai and proceed towards each other at the speeds of 80 km/h and 95 km/h. When they meet, it is found that one train has travelled 180 km more than the other. The distance between Bangalore and Chennai is:

- Ans
- 1. 345 km
 - 2. 400 km
 - 3. 1200 km
 - 4. 2100 km

Question ID : 26433075888
Status : Not Answered
Chosen Option : --

Q.3 M, N, and O can do work in 22, 24, and 16 days respectively. If they work for a day alternately such that M works on the first day, N works on the second day, O works on the third day and then again M works on the fourth day and so on, then in how many days approximately, the work will be completed?

- Ans
- 1. 17 days
 - 2. 20 days
 - 3. 16 days
 - 4. 19 days

Question ID : 264330116916
Status : Answered
Chosen Option : 1

Q.4 Abhi has a solid sphere of diameter 10 cm. He cuts it into two equal halves and decides to paint it. The painting cost per square cm is Rs.10. Which of the following is the approximate difference between the painting cost of the sphere and the hemispheres? (Use $\pi = 22/7$, rounded off to two decimal places.)

- Ans
- 1. Rs.1,600.00
 - 2. Rs.1,500.556
 - 3. Rs.1,571.43
 - 4. Rs.1,512.45

Question ID : 26433075331
Status : Not Answered
Chosen Option : --

Q.5 If the price of petrol becomes Rs.110/litre from Rs.95/litre, by how much percentage the consumption of petrol should be reduced by Ravi so that his expenditure remains the same? (correct up to two decimals)

- Ans
- 1. 15.29%
 - 2. 16.34%
 - 3. 14.63%
 - 4. 13.64%

Question ID : 26433080292
Status : Answered
Chosen Option : 1

Q.6 If 3,x,12 and $2x + 7$ are in proportion, then $6x$ is :

- Ans
- 1. $\frac{21}{2}$
 - 2. 42
 - 3. 21
 - 4. $\frac{7}{2}$

Question ID : 26433081716
Status : Answered
Chosen Option : 3

Q.7 The greatest number that can exactly divide 1560 and 2040 is X. What is the value of $121 - X$?

Ans 1. 1

2. 24

3. 49

4. 20

Question ID : 264330116641

Status : Not Answered

Chosen Option : --

Q.8 The sum of two numbers is 21, and their HCF and LCM are 7 and 14, respectively. The sum of the reciprocals of the two numbers is:

Ans

1. $\frac{1}{4}$

2. $\frac{1}{14}$

3. $\frac{3}{14}$

4. $\frac{3}{4}$

Question ID : 26433082591

Status : Answered

Chosen Option : 3

Q.9 The fourth proportional 6, 9, 18 is:

Ans 1. 15

2. 9

3. 24

4. 27

Question ID : 26433082646

Status : Answered

Chosen Option : 4

Q.10 A person invests ₹30,000 for 5 years at a certain rate of interest compounded annually. At the end of 1 year, if the sum amounts to ₹34,200, then find the amount at the end of the second year.

- Ans
- ✓ 1. ₹38,988
 - ✗ 2. ₹39,876
 - ✗ 3. ₹45,432
 - ✗ 4. ₹44,365

Question ID : 26433080039
Status : Not Answered
Chosen Option : --

Q.11 14 persons can complete $\frac{5}{12}$ part of a work in 18 days, working 7 hours daily. How many hours working daily will 21 persons complete the rest of the work in 15 days?

- Ans
- ✓ 1. $7\frac{21}{25}$ hours
 - ✗ 2. $3\frac{21}{25}$ hours
 - ✗ 3. $11\frac{3}{25}$ hours
 - ✗ 4. $9\frac{16}{25}$ hours

Question ID : 26433064934
Status : Not Answered
Chosen Option : --

Q.12 Three bicycles are bought for Rs.16,500 and the transport cost per bicycle is Rs.200. What should be the selling price (in Rs.) of each bicycle to have a profit of 8%?

- Ans
- ✗ 1. 5661
 - ✗ 2. 5166
 - ✗ 3. 6651
 - ✓ 4. 6156

Question ID : 26433071253
Status : Answered
Chosen Option : 4

Q.13 If a man climbs a hill at 6 km/h on the journey from foot to top of the hill and returns at 10 km/h, then find his average speed for the journey (in km/h).

- Ans
- ✗ 1. 6.5
 - ✗ 2. 4
 - ✗ 3. 8
 - ✓ 4. 7.5

Question ID : 26433079907
Status : Answered
Chosen Option : 4

Q.14 Vinod buys an article and sells it at a loss of 5%. If he would have bought it for 20% less and sold it for Rs.25 more, he would have gained 20%. What was the original cost price?

- Ans 1. Rs.2,500
 2. Rs.2,000
 3. Rs.2,250
 4. Rs.1,850

Question ID : 26433075466
Status : Not Answered
Chosen Option : --

Q.15 The present population of a city is estimated to be 10 lakh and is expected to increase to 12.10 lakh during the next 2 years. The uniform annual rate of growth is:

- Ans 1. 8%
 2. 12%
 3. 10%
 4. 7%

Question ID : 26433076083
Status : Not Answered
Chosen Option : --

Q.16 The percentage equivalence of the fraction $\frac{3}{4}$ is:

- Ans 1. 80%
 2. 65%
 3. 75%
 4. 70%

Question ID : 26433075101
Status : Answered
Chosen Option : 3

Q.17 In a circular race of 625 m, X and Y start from the same point, at the same time and at speeds of 36 km/h and 54 km/h, respectively. When will they meet again for the first time on the track if they are running in the opposite directions?

- Ans 1. In 15 seconds
 2. In 20 seconds
 3. In 25 seconds
 4. In 10 seconds

Question ID : 26433076382
Status : Answered
Chosen Option : 3

Q.18 The height of a right circular cone is 24 cm and its slant height is 25 cm. What is the curved surface area of the cone?

(Use $\pi = \frac{22}{7}$)

- Ans
- 1. 528 cm²
 - 2. 550 cm²
 - 3. 648 cm²
 - 4. 548 cm²

Question ID : 26433075212

Status : Answered

Chosen Option : 2

Q.19 The average marks obtained by Mahesh in five subjects is 62 and he obtains 71 marks in the sixth subject. What is the average of the marks secured by Mahesh in all six subjects?

- Ans
- 1. 63.5
 - 2. 65.5
 - 3. 64.6
 - 4. 62.4

Question ID : 26433080287

Status : Answered

Chosen Option : 1

Q.20 The marked price of a woollen jacket is Rs.800. The shopkeeper allows a discount of 10% on every item. Due to off-season, the shopkeeper allows additional discount of 5% on jacket. Find the selling price of the jacket?

- Ans
- 1. Rs.720
 - 2. Rs.684
 - 3. Rs.705
 - 4. Rs.668

Question ID : 26433065276

Status : Answered

Chosen Option : 4

Section : Part-D-English

Q.1 Select the most appropriate meaning of the given idiom.

Keep a straight face

- Ans
- 1. To pretend to be cheerful
 - 2. When a plan suddenly fails
 - 3. To be stingy
 - 4. Look serious though you want to laugh

Question ID : 26433072683

Status : Answered

Chosen Option : 1

Q.2 Select the most appropriate synonym of the given word.

Attain

- Ans 1. Achieve
 2. Abandon
 3. Destroy
 4. Commence

Question ID : 26433073690
Status : Answered
Chosen Option : 1

Q.3 Select the most appropriate option to fill in the blank.

The play usually needs half an hour for its preparation and makeup, and its performance _____ within ten minutes.

- Ans 1. would end
 2. ends
 3. has ended
 4. ended

Question ID : 26433089301
Status : Answered
Chosen Option : 4

Q.4 Select the most appropriate option to fill in the blank.

Most often, child labour occurs when families _____ financial challenges or uncertainty – whether due to poverty, sudden illness of a caregiver or job loss of a primary wage earner.

- Ans 1. face
 2. emulate
 3. contend
 4. happen

Question ID : 26433084864
Status : Answered
Chosen Option : 1

Q.5 Select the most appropriate ANTONYM of the given word.

Quiet

- Ans 1. Stillness
 2. Commotion
 3. Compose
 4. Completely

Question ID : 26433086344
Status : Answered
Chosen Option : 2

Q.6 Select the most appropriate option to fill in the blank.

It is better to end up certain matters than _____ a dead horse.

- Ans
- 1. talking
 - 2. riding
 - 3. coaching
 - 4. beating

Question ID : 26433073211
Status : Answered
Chosen Option : 2

Q.7 Select the most appropriate option that can substitute the underlined segment in the given sentence. If there is no need to substitute it, select 'No substitution required'.

While I was driving the car, my brother talked over phone to his kid.

- Ans
- 1. was talking over the phone
 - 2. had talked over the phone
 - 3. No substitution required
 - 4. talking over the phone

Question ID : 26433088559
Status : Answered
Chosen Option : 1

Q.8 Select the most appropriate synonym of the underlined word in the given sentence.

Incompetent people keep on blaming others for their failures.

- Ans
- 1. inappropriate
 - 2. inefficient
 - 3. incongruous
 - 4. inevitable

Question ID : 26433092109
Status : Answered
Chosen Option : 2

Q.9 Select the most appropriate ANTONYM of the given word.

Salient

- Ans
- 1. Noteworthy
 - 2. Striking
 - 3. Clear
 - 4. Negligible

Question ID : 26433072667
Status : Answered
Chosen Option : 4

Q.10 Select the most appropriate option to fill in the blank.

The cat couldn't find a _____ place for its kittens in the backyard of the house.

- Ans
- 1. stern
 - 2. drastic
 - 3. proper
 - 4. vague

Question ID : 26433073788
Status : Answered
Chosen Option : 3

Q.11 Select the most appropriate homophone of the given word.

Ate

- Ans
- 1. Egg
 - 2. Hate
 - 3. Eight
 - 4. Weight

Question ID : 26433086351
Status : Answered
Chosen Option : 2

Q.12 Select the INCORRECTLY spelt word.

- Ans
- 1. Abundant
 - 2. Ecstasy
 - 3. Pionier
 - 4. Engineer

Question ID : 26433073652
Status : Answered
Chosen Option : 3

Q.13 Select the most appropriate option that can substitute the underlined segment in the given sentence. If there is no need to substitute it, select 'No substitution required'.

Robinson Crusoe puzzles when he discovered a footprint in the sand.

- Ans
- 1. was puzzled
 - 2. has puzzled
 - 3. is puzzled
 - 4. No substitution required

Question ID : 264330101273
Status : Answered
Chosen Option : 1

Q.14 Select the most appropriate ANTONYM of the given word.

Restore

- Ans 1. Destroy
 2. Random
 3. Recover
 4. Productive

Question ID : 26433090796
Status : Answered
Chosen Option : 1

Q.15 Select the most appropriate synonym of the word 'doubtful' from the following sentence.

He was in a dilemma about the completion of the project investigation because of his health issues.

- Ans 1. Completion
 2. Project
 3. Dilemma
 4. Investigation

Question ID : 26433072262
Status : Answered
Chosen Option : 3

Comprehension:

In the following passage, some words have been deleted. Read the passage carefully and select the most appropriate option to fill in each blank.

The world is becoming increasingly (1)_____. Since 2007, more than half of the world's population has been living in cities, and that share is (2)_____ to rise to 60 per cent by 2030. Cities and metropolitan areas are powerhouses of economic growth—(3)_____ about 60 per cent of global GDP. However, they also account for about 70 per cent of global carbon emissions and over 60 per cent of (4)_____ use. Rapid urbanisation is resulting in a growing number of slum dwellers, inadequate and (5)_____ infrastructure and services, worsening air pollution and unplanned urban sprawl.

SubQuestion No : 16

Q.16 Select the most appropriate option to fill in blank number 1.

- Ans 1. intensified
 2. urbanised
 3. localised
 4. decentralised

Question ID : 26433088180
Status : Answered
Chosen Option : 4

Comprehension:

In the following passage, some words have been deleted. Read the passage carefully and select the most appropriate option to fill in each blank.

The world is becoming increasingly (1)_____. Since 2007, more than half of the world's population has been living in cities, and that share is (2)_____ to rise to 60 per cent by 2030. Cities and metropolitan areas are powerhouses of economic growth—(3)_____ about 60 per cent of global GDP. However, they also account for about 70 per cent of global carbon emissions and over 60 per cent of (4)_____ use. Rapid urbanisation is resulting in a growing number of slum dwellers, inadequate and (5)_____ infrastructure and services, worsening air pollution and unplanned urban sprawl.

SubQuestion No : 17**Q.17 Select the most appropriate option to fill in blank number 2.****Ans** ✓ 1. projected

✗ 2. contrived

✗ 3. multiplied

✗ 4. planned

Question ID : 26433088181

Status : Answered

Chosen Option : 1

Comprehension:

In the following passage, some words have been deleted. Read the passage carefully and select the most appropriate option to fill in each blank.

The world is becoming increasingly (1)_____. Since 2007, more than half of the world's population has been living in cities, and that share is (2)_____ to rise to 60 per cent by 2030. Cities and metropolitan areas are powerhouses of economic growth—(3)_____ about 60 per cent of global GDP. However, they also account for about 70 per cent of global carbon emissions and over 60 per cent of (4)_____ use. Rapid urbanisation is resulting in a growing number of slum dwellers, inadequate and (5)_____ infrastructure and services, worsening air pollution and unplanned urban sprawl.

SubQuestion No : 18**Q.18 Select the most appropriate option to fill in blank number 3.****Ans** ✗ 1. attempting

✗ 2. exploiting

✓ 3. contributing

✗ 4. causing

Question ID : 26433088182

Status : Answered

Chosen Option : 3

Comprehension:

In the following passage, some words have been deleted. Read the passage carefully and select the most appropriate option to fill in each blank.

The world is becoming increasingly (1)_____. Since 2007, more than half of the world's population has been living in cities, and that share is (2)_____ to rise to 60 per cent by 2030. Cities and metropolitan areas are powerhouses of economic growth—(3)_____ about 60 per cent of global GDP. However, they also account for about 70 per cent of global carbon emissions and over 60 per cent of (4)_____ use. Rapid urbanisation is resulting in a growing number of slum dwellers, inadequate and (5)_____ infrastructure and services, worsening air pollution and unplanned urban sprawl.

SubQuestion No : 19

Q.19 Select the most appropriate option to fill in blank number 4.

- Ans
- 1. wealth
 - 2. nature
 - 3. assets
 - 4. resource

Question ID : 26433088183

Status : Answered

Chosen Option : 4

Comprehension:

In the following passage, some words have been deleted. Read the passage carefully and select the most appropriate option to fill in each blank.

The world is becoming increasingly (1)_____. Since 2007, more than half of the world's population has been living in cities, and that share is (2)_____ to rise to 60 per cent by 2030. Cities and metropolitan areas are powerhouses of economic growth—(3)_____ about 60 per cent of global GDP. However, they also account for about 70 per cent of global carbon emissions and over 60 per cent of (4)_____ use. Rapid urbanisation is resulting in a growing number of slum dwellers, inadequate and (5)_____ infrastructure and services, worsening air pollution and unplanned urban sprawl.

SubQuestion No : 20

Q.20 Select the most appropriate option to fill in blank number 5.

- Ans
- 1. destructed
 - 2. overburdened
 - 3. redundant
 - 4. necessary

Question ID : 26433088184

Status : Answered

Chosen Option : 3

Section : Part-D-Hindi

Q.1 निम्न में से किस वाक्य में वर्तनी की त्रुटि है, पहचान करें?

- Ans
- 1. रमेश बाजार से सब्जी लाया।
 - 2. नेहा की स्कूल में मन नहीं लगाता।
 - 3. सुजाता मनोहर के गाँव से है।
 - 4. महेंद्र बड़े जमींदार का बेटा है।

Question ID : 26433067108

Status : Not Answered

Chosen Option : --

Q.2 निम्न शब्दों में से आश्रम का पर्याय शब्द है-

- Ans
- 1. निवास
 - 2. थान
 - 3. अखाड़ा
 - 4. साकेत

Question ID : 26433074415
Status : Not Answered
Chosen Option : --

Q.3 "प्रत्येक व्यक्ति को स्वयं आत्मनिर्भर होना चाहिए।"
उपरोक्त वाक्य का शुद्ध रूप क्या होगा?

- Ans
- 1. प्रत्येक व्यक्ति को स्वयं में आत्मनिर्भर होना चाहिए।
 - 2. प्रत्येक व्यक्ति को आत्मनिर्भर मिलाना चाहिए।
 - 3. प्रत्येक व्यक्ति को स्वयं आत्मनिर्भर रहना चाहिए।
 - 4. प्रत्येक व्यक्ति को आत्मनिर्भर होना चाहिए।

Question ID : 26433066998
Status : Not Answered
Chosen Option : --

Q.4 निम्नलिखित विकल्पों में से 'तलवार की धार पर चलना' मुहावरे का अर्थ क्या है?

- Ans
- 1. चाल सफल न होना।
 - 2. ताकतवर होना
 - 3. अनावश्यक सलाह देना
 - 4. जोखिम-भरा काम करना

Question ID : 26433062554
Status : Not Answered
Chosen Option : --

Q.5 निम्नलिखित विकल्पों में से कौन सा एक वाक्य मूल क्रिया-विशेषण से सम्बन्ध नहीं रखता है?

- Ans
- 1. नगर यहाँ से दूर पड़ता है।
 - 2. वह अचानक आ गया।
 - 3. सीता खेलती-कूदती रहती है।
 - 4. तुम ठीक कह रहे हो।

Question ID : 26433062957
Status : Not Answered
Chosen Option : --

Q.6 निम्न वाक्यांश के लिए एक शब्द क्या होगा?
जिसके शेखर पर चन्द्र हो

- Ans
- 1. चन्द्रकान्त
 - 2. चन्दरेखा
 - 3. चन्द्रशेखर
 - 4. चन्द्रपाणि

Question ID : 26433070085
Status : Not Answered
Chosen Option : --

Q.7 "मनुष्य को किसी के प्रति द्वेष नहीं रखना चाहिए।"
उक्त वाक्य में प्रयुक्त 'द्वेष' के स्थान पर उसके समानार्थी शब्द का प्रयोग निम्न में से किस वाक्य में किया गया है?

- Ans
- 1. मनुष्य को किसी के प्रति ममता नहीं रखनी चाहिए।
 - 2. मनुष्य को किसी के प्रति ईर्ष्या नहीं रखनी चाहिए।
 - 3. मनुष्य को किसी के प्रति प्रतिशोध का भाव नहीं रखना चाहिए।
 - 4. मनुष्य को किसी के प्रति क्रोध नहीं रखना चाहिए।

Question ID : 26433067029
Status : Not Answered
Chosen Option : --

Q.8 'जो निगाह से परे हो' इस वाक्यांश के लिए सार्थक शब्द है -

- Ans
- 1. प्रत्यक्ष
 - 2. परोक्ष
 - 3. दृष्टिक्षेप
 - 4. प्रत्यागत

Question ID : 26433062336
Status : Not Answered
Chosen Option : --

Q.9 'उसकी महिला भी उसके साथ आई है।' इस वाक्य में रेखांकित शब्द के स्थान पर सर्वोपयुक्त शब्द निम्न में से क्या होगा?

- Ans
- 1. साथी
 - 2. मित्र
 - 3. स्त्री
 - 4. पत्नी

Question ID : 26433062781
Status : Not Answered
Chosen Option : --

Q.10 "नम्रतापूर्वक याचना करना _____ कहलाता है।"
उपरोक्त वाक्य में रिक्त स्थान पर किस शब्द का प्रयोग उपयुक्त होगा?

- Ans
- 1. अनुदेश
 - 2. अनुरोध
 - 3. आग्रह
 - 4. अनुग्रह

Question ID : 26433067007
Status : Not Answered
Chosen Option : --

Q.11 नीचे दिए गए मुहावरे में रेखांकित अंश के स्थान पर सबसे उपयुक्त विकल्प कौन-सा होगा?
तिल का पहाड़ करना

- Ans
- 1. ताड़
 - 2. आम
 - 3. खजूर
 - 4. पेड़

Question ID : 26433066746
Status : Not Answered
Chosen Option : --

Q.12 आज शीतल पवन बह रही है।
उपरोक्त वाक्य में रेखांकित शब्द के उचित पर्यायवाची शब्द का चयन विकल्पों में से कीजिए।

- Ans
- 1. बतासा
 - 2. अनिल
 - 3. अनल
 - 4. क्षणदा

Question ID : 26433079724
Status : Not Answered
Chosen Option : --

Q.13 जिससे किसी कार्य के करने का बोध होता है, उसे कहते हैं-

- Ans
- 1. संज्ञा
 - 2. सर्वनाम
 - 3. विशेषण
 - 4. क्रिया

Question ID : 26433085036
Status : Not Answered
Chosen Option : --

Q.14 विकल्पों में दिया गया कौन सा शब्द निम्न वाक्य में रेखांकित अंश के स्थान पर आ सकता है?
वह सचमुच में बीमार है।

- Ans
- 1. झूठ
 - 2. वाकई
 - 3. सच
 - 4. सत्य

Question ID : 26433066878
Status : Not Answered
Chosen Option : --

Q.15 दिए गए वाक्य के रेखांकित शब्द को सर्वोचित विकल्प से प्रतिस्थापित करें।
बरात का अभिवादन आत्मीयता से किया गया।

- Ans
- 1. सम्मान
 - 2. अभिनंदन
 - 3. स्वागत
 - 4. अपमान

Question ID : 26433069914
Status : Not Answered
Chosen Option : --

Comprehension:

निम्नलिखित गद्यांश में कुछ शब्दों को हटा दिया गया है। दिए गए विकल्पों की सहायता से रिक्त स्थानों की पूर्ति कीजिए। प्रत्येक संख्या के लिए सबसे उपयुक्त विकल्प का चयन कीजिए।
मनुष्य विवेकशील 1. _____ है। सब कुछ जानने और समझने की 2. _____ उसमें विद्यमान है। विशेष ज्ञान रूप विज्ञान उसकी इसी 3. _____ वृत्ति का परिणाम है। पेड़ से फल को 4. _____ गिरते हुए देखा तो जिज्ञासा हुई कि वस्तुएँ नीचे पृथ्वी पर ही क्यों गिरती हैं? विज्ञान ने गुरुत्वाकर्षण का महत्त्वपूर्ण 5. _____ दिया।

SubQuestion No : 16

Q.16 रिक्त स्थान 1 की पूर्ति के लिए सबसे उपयुक्त विकल्प का चयन कीजिए।

- Ans
- 1. आविष्कार
 - 2. प्राणी
 - 3. मानव
 - 4. असाध्य

Question ID : 264330111041
Status : Not Answered
Chosen Option : --

Comprehension:

निम्नलिखित गद्यांश में कुछ शब्दों को हटा दिया गया है। दिए गए विकल्पों की सहायता से रिक्त स्थानों की पूर्ति कीजिए। प्रत्येक संख्या के लिए सबसे उपयुक्त विकल्प का चयन कीजिए।
मनुष्य विवेकशील 1. _____ है। सब कुछ जानने और समझने की 2. _____ उसमें विद्यमान है। विशेष ज्ञान रूप विज्ञान उसकी इसी 3. _____ वृत्ति का परिणाम है। पेड़ से फल को 4. _____ गिरते हुए देखा तो जिज्ञासा हुई कि वस्तुएँ नीचे पृथ्वी पर ही क्यों गिरती हैं? विज्ञान ने गुरुत्वाकर्षण का महत्त्वपूर्ण 5. _____ दिया।

SubQuestion No : 17

Q.17 रिक्त स्थान 2 की पूर्ति के लिए सबसे उपयुक्त विकल्प का चयन कीजिए।

- Ans 1. घड़ियाँ
 2. इच्छा
 3. गुंजाइश
 4. मशीन

Question ID : 264330111042
Status : Not Answered
Chosen Option : --

Comprehension:

निम्नलिखित गद्यांश में कुछ शब्दों को हटा दिया गया है। दिए गए विकल्पों की सहायता से रिक्त स्थानों की पूर्ति कीजिए। प्रत्येक संख्या के लिए सबसे उपयुक्त विकल्प का चयन कीजिए।
मनुष्य विवेकशील 1. _____ है। सब कुछ जानने और समझने की 2. _____ उसमें विद्यमान है। विशेष ज्ञान रूप विज्ञान उसकी इसी 3. _____ वृत्ति का परिणाम है। पेड़ से फल को 4. _____ गिरते हुए देखा तो जिज्ञासा हुई कि वस्तुएँ नीचे पृथ्वी पर ही क्यों गिरती हैं? विज्ञान ने गुरुत्वाकर्षण का महत्त्वपूर्ण 5. _____ दिया।

SubQuestion No : 18

Q.18 रिक्त स्थान 3 की पूर्ति के लिए सबसे उपयुक्त विकल्प का चयन कीजिए।

- Ans 1. विचित्र
 2. जिज्ञासा
 3. रोग
 4. शांत

Question ID : 264330111043
Status : Not Answered
Chosen Option : --

Comprehension:

निम्नलिखित गद्यांश में कुछ शब्दों को हटा दिया गया है। दिए गए विकल्पों की सहायता से रिक्त स्थानों की पूर्ति कीजिए। प्रत्येक संख्या के लिए सबसे उपयुक्त विकल्प का चयन कीजिए।
मनुष्य विवेकशील 1. _____ है। सब कुछ जानने और समझने की 2. _____ उसमें विद्यमान है। विशेष ज्ञान रूप विज्ञान उसकी इसी 3. _____ वृत्ति का परिणाम है। पेड़ से फल को 4. _____ गिरते हुए देखा तो जिज्ञासा हुई कि वस्तुएँ नीचे पृथ्वी पर ही क्यों गिरती हैं? विज्ञान ने गुरुत्वाकर्षण का महत्त्वपूर्ण 5. _____ दिया।

SubQuestion No : 19

Q.19 रिक्त स्थान 4 की पूर्ति के लिए सबसे उपयुक्त विकल्प का चयन कीजिए।

- Ans 1. हमेशा
 2. नीचे
 3. उठाते
 4. आते

Question ID : 264330111044
Status : Not Answered
Chosen Option : --

Comprehension:

निम्नलिखित गद्यांश में कुछ शब्दों को हटा दिया गया है। दिए गए विकल्पों की सहायता से रिक्त स्थानों की पूर्ति कीजिए। प्रत्येक संख्या के लिए सबसे उपयुक्त विकल्प का चयन कीजिए।
मनुष्य विवेकशील 1. _____ है। सब कुछ जानने और समझने की 2. _____ उसमें विद्यमान है। विशेष ज्ञान रूप विज्ञान उसकी इसी 3. _____ वृत्ति का परिणाम है। पेड़ से फल को 4. _____ गिरते हुए देखा तो जिज्ञासा हुई कि वस्तुएँ नीचे पृथ्वी पर ही क्यों गिरती हैं? विज्ञान ने गुरुत्वाकर्षण का महत्त्वपूर्ण 5. _____ दिया।

SubQuestion No : 20

Q.20 रिक्त स्थान 5 की पूर्ति के लिए सबसे उपयुक्त विकल्प का चयन कीजिए।

- Ans
- 1. सूचना
 - 2. क्षेत्र
 - 3. ज्ञान
 - 4. सिद्धांत

Question ID : 264330111045

Status : Not Answered

Chosen Option : --

WWW.GOVtJOBSALERT.IN