

Constable GD in CAPFs SSF Rifleman GD in Assam Rifles and Sepoy in NCB Examination 2022

Roll Number	www.govtjobsalert.in
Candidate Name	www.govtjobsalert.in
Venue Name	BR Online Services
Exam Date	06/02/2023
Exam Time	11:45 AM - 12:45 PM
Subject	Constable GD Examination 2022

Section : Part-A-General Intelligence and Reasoning

Q.1 If '+' means '÷', '÷' means '-', '-' means '×', and '×' means '+'. Which of the following will be the value of the expression?
 $32 \div 64 + 8 - 5 \times 36$

- Ans
- 1. 32
 - 2. 38
 - 3. 30
 - 4. 28

Question ID : 264330114189

Status : Answered

Chosen Option : 4

Q.2 In a certain code language, 'Tango is dance' is written as 'de be le', 'dance is practice' is written as 'le be ke' and 'let's dance' is written as 're le'. How will 'practice' be written in that language?

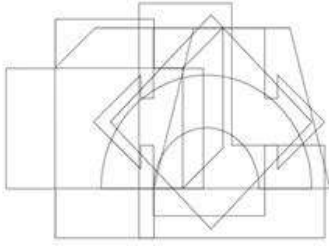
- Ans
- 1. le
 - 2. ke
 - 3. be
 - 4. de

Question ID : 26433070328

Status : Answered


Chosen Option : 2

Q.3 Select the option figure which is embedded in the given figure. (Rotation is NOT allowed)

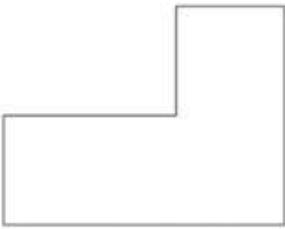


Ans

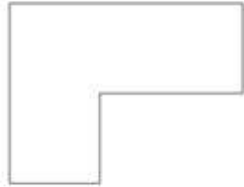
✗ 1.



✗ 2.



✗ 3.



✓ 4.



Question ID : 26433085748
Status : Answered
Chosen Option : 4

Q.4 Six persons H, R, J, S, N and B are sitting in a row facing North. B is not sitting beside J, who is sitting at the extreme right. H is the immediate neighbour of N and B. N is not sitting beside S and J. R is the immediate neighbour of S and J. Who is sitting to the immediate right of B?

- Ans
- 1. H
 - 2. J
 - 3. S
 - 4. N

Question ID : 26433079064
Status : Answered
Chosen Option : 3

Q.5 Which of the following numbers will replace the question mark (?) in the given series?
7, 21, 25, ?, 131, 917

- Ans
- 1. 105
 - 2. 115
 - 3. 120
 - 4. 125

Question ID : 26433069082
Status : Answered
Chosen Option : 4

Q.6 Which of the following numbers will replace the question mark (?) in the given series?
3, ?, 27, 44, 63, 86, 115

- Ans
- 1. 14
 - 2. 17
 - 3. 19
 - 4. 11

Question ID : 26433090060
Status : Answered
Chosen Option : 1

Q.7 Select the correct mirror image of the given figure, when the mirror is placed at MN as shown below.



Ans

- 1.
- 2.
- 3.
- 4.

Question ID : 26433090148

Status : Answered

Chosen Option : 3

www.govtjobsale.in

Q.8 Which figure should replace the question mark (?) if the series were to be continued?

5	X	D	☆	V	□	S	☆	V	X	D	N	
L	O	N	N	3	L	3	L	□	□	Z	3	?
□	V	☆	D	X	5	N	D	X	V	☆	S	

Ans

✗ 1.

F	X	D
N	□	Z
3	V	☆

✗ 2.

S	X	N
Z	3	N
□	V	☆

✓ 3.

F	X	D
Z	3	N
□	V	☆

✗ 4.

S	☆	V
3	F	□
N	D	X

Question ID : 26433076629
 Status : Answered
 Chosen Option : 2

Q.9 Which of the following letters will replace the question mark (?) and complete the following letter series?
 I, K, O, U, C, ?

- Ans
- ✗ 1. K
 - ✓ 2. M
 - ✗ 3. N
 - ✗ 4. L

Question ID : 26433067291
 Status : Answered
 Chosen Option : 2

Q.10 Three statements are given, followed by three conclusions numbered I, II and III. Assuming the statements to be true, even if they seem to be at variance with commonly known facts, decide which of the conclusions logically follow(s) from the statements.

Statements:

No carrots are beets.

Some carrots are gingers.

Some gingers are beets.

Conclusions:

I. All beets are gingers.

II. Some gingers are carrots.

III. Some beets are carrots.

- Ans**
- 1. Only conclusions II and III follow
 - 2. All conclusions follow
 - 3. Only conclusion II follows
 - 4. Only conclusions I and III follow

Question ID : 26433090999
Status : Answered
Chosen Option : 3

Q.11 Select the option that is related to the fourth term in the same way as the first term is related to the second term and the fifth term is related to the sixth term.
625 : 35 :: ? : 27 :: 361 : 29

- Ans**
- 1. 121
 - 2. 100
 - 3. 256
 - 4. 289

Question ID : 26433074550
Status : Answered
Chosen Option : 4

Q.12 Which two signs should be interchanged to make the below equation mathematically correct?
 $18 + 72 \div 12 \times 36 - 12 = 132$

- Ans**
- 1. + and -
 - 2. × and ÷
 - 3. + and -
 - 4. × and +

Question ID : 264330117565
Status : Answered
Chosen Option : 4

Q.13 Which letter cluster will replace the question mark (?) to complete the given series?
WGVQ, CWHY, ?, OCFO, USRW

- Ans 1. IMTG
 2. HWBT
 3. TDGT
 4. OSXG

Question ID : 26433079428
Status : Answered
Chosen Option : 4

Q.14 In a certain code language INVADE is written as 'LRYEGI' and CATER is written as 'FEWIU'. How will WIRING be written in the same code language?

- Ans 1. ZMVMQL
 2. ZNUNQK
 3. ZMVMQK
 4. ZMUMQK

Question ID : 26433076684
Status : Answered
Chosen Option : 4

Q.15 Select the option that is related to the third word in the same way as the second word is related to the first word.
(The words must be considered as meaningful English words and must NOT be related to each other based on the number of letters/number of consonants/vowels in the word)
Army : Land :: Navy : ?

- Ans 1. Desert
 2. Forest
 3. Water
 4. Mountain

Question ID : 26433087196
Status : Answered
Chosen Option : 3

Q.16 Seven people Z, H, B, W, S, R, and G are sitting in a straight row, facing north. Only two people sit to the left of S. Only two people sit to the right of H. Only H sits between G and Z. Only S sits between W and G. B sits at the extreme right of the row. Who sits at the extreme left of the row?

- Ans 1. W
 2. R
 3. S
 4. Z

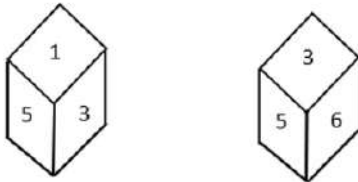
Question ID : 26433092598
Status : Answered
Chosen Option : 2

Q.17 'A = B' means 'A is the son of B'
'A * B' means 'A is the mother of B'
'A % B' means 'A is the husband of B'
'A \$ B' means 'A is the sister of B'
If 'X \$ D = M * N', then how is M related to X?

- Ans 1. Daughter
 2. Mother
 3. Sister
 4. Paternal grandmother

Question ID : 26433087129
Status : Answered
Chosen Option : 2

Q.18 Two different positions of the same dice are shown having numbers 1 to 6. Find the number on the face opposite the face showing '1'.



- Ans 1. 4
 2. 3
 3. 2
 4. 6

Question ID : 26433085518
Status : Answered
Chosen Option : 4

Q.19 Which option represents the correct order of the given words as they would appear in the English dictionary?
1 Train
2 Truck
3 Transport
4 Travel
5 Trade

- Ans 1. 5,1,3,4,2
 2. 5,3,1,4,2
 3. 5,4,3,1,2
 4. 5,1,4,2,3

Question ID : 26433069277
Status : Answered
Chosen Option : 1

Q.20 Select the option that is related to the third word in the same way as the second word is related to the first word.
(The words must be considered as meaningful English words and must not be related to each other based on the number of letters/ number of consonants / vowels in the word)

Labourer : Spade :: Sculptor : ?

- Ans
- 1. Axe
 - 2. Chisel
 - 3. Sword
 - 4. Pen

Question ID : 26433068054
Status : Answered
Chosen Option : 2

Section : Part-B-General Knowledge and General awareness

Q.1 Which of the following is a secondary sector activity?

- Ans
- 1. Mining
 - 2. Forestry
 - 3. Manufacturing
 - 4. Quarrying

Question ID : 264330116093
Status : Answered
Chosen Option : 3

Q.2 What are Kho-Kho players sitting in the squares called?

- Ans
- 1. Runners
 - 2. Active Chaser
 - 3. Chasers
 - 4. Blockers

Question ID : 26433092333
Status : Answered
Chosen Option : 4

Q.3 Which two categories of age group are considered in Khelo India Youth Games?

- Ans
- 1. Under 14 and Under 21
 - 2. Under 17 and Under 21
 - 3. Under 17 and Under 25
 - 4. Under 17 and Under 14

Question ID : 264330115960
Status : Answered
Chosen Option : 2

Q.4 Kelucharan Mohapatra was related to which classical dance form?

- Ans
- 1. Manipuri
 - 2. Kathakali
 - 3. Sattriya
 - 4. Odissi

Question ID : 26433072928
Status : Answered
Chosen Option : 4

Q.5 _____ the then Minister of Agriculture had been a key person in bringing the new agricultural technology to India under Green Revolution

- Ans
- 1. MV Rao
 - 2. C Subramaniam
 - 3. Benjamin Peary Pal
 - 4. MS Swaminathan

Question ID : 26433054804
Status : Answered
Chosen Option : 2

Q.6 The council of ministers in a state are appointed on the advice of the _____.

- Ans
- 1. President
 - 2. Chief minister
 - 3. Chief justice of High Court
 - 4. Governor

Question ID : 26433089188
Status : Answered
Chosen Option : 4

Q.7 GNP stands for _____.

- Ans
- 1. gross national product
 - 2. gross negligence product
 - 3. gross net product
 - 4. gross null product

Question ID : 264330115352
Status : Answered
Chosen Option : 1

Q.8 Who among the following is related with Mohiniyattam?

- Ans
- 1. Manjit Bawa
 - 2. Ratan Thiyam
 - 3. Kanak Rele
 - 4. Shanti Dave

Question ID : 264330115895
Status : Answered
Chosen Option : 2

Q.9 How is the vegetation affected by construction of large dams?

- Ans**
- 1. The plants produce nodules to produce nitrogen-fixing bacteria.
 - 2. Vegetation gives rise to oxygen under aerobic conditions.
 - 3. The growth of fungus is a lot.
 - 4. The submerged vegetation rots under anaerobic conditions and gives rise to large amounts of methane, which is also a greenhouse gas.

Question ID : 26433087838
Status : Answered
Chosen Option : 4

Q.10 Which among the following Union Ministers of India inaugurated the 25th National Conference on e-Governance (NCeG) held in Katra, Jammu & Kashmir in November 2022?

- Ans**
- 1. Arjun Munda
 - 2. Piyush Goyal
 - 3. Pralhad Joshi
 - 4. Jitendra Singh

Question ID : 264330114908
Status : Answered
Chosen Option : 4

Q.11 NITI is abbreviation for_____.

- Ans**
- 1. National Institution for Transferring India
 - 2. National Institution for Telecommunication India
 - 3. National Invention for Transforming India
 - 4. National Institution for Transforming India

Question ID : 264330115374
Status : Answered
Chosen Option : 4

Q.12 Ghiyasuddin Balban ruled in India in which of the following period?

- Ans**
- 1. 1206-1210
 - 2. 1235-1265
 - 3. 1266-1287
 - 4. 1211-1240

Question ID : 264330115446
Status : Answered
Chosen Option : 3

Q.13 Which project is built for hydel power production and irrigation in the Sutlej river basin?

- Ans
- 1. Nagarjuna project
 - 2. Hirakud project
 - 3. Bhakra Nangal project
 - 4. Sardar Sarovar dam

Question ID : 26433091496
Status : Marked For Review
Chosen Option : 1

Q.14 Which among the following started "Bharat Jodo Yatra" in September 2022?

- Ans
- 1. Rahul Gandhi
 - 2. Amit Shah
 - 3. Akbaruddin Owaisi
 - 4. Arvind Kejriwal

Question ID : 264330114889
Status : Answered
Chosen Option : 1

Q.15 The Non-Cooperation-Khilafat Movement began in January _____.

- Ans
- 1. 1925
 - 2. 1928
 - 3. 1921
 - 4. 1911

Question ID : 26433089899
Status : Answered
Chosen Option : 1

Q.16 When governments legally obliged food producers to add extra nutrients to particular foods or categories of foods it is called _____.

- Ans
- 1. food fortification
 - 2. food protection
 - 3. food adulteration
 - 4. food packaging

Question ID : 264330115266
Status : Answered
Chosen Option : 1

Q.17 Which among the following festivals is also celebrated to remember King Mahabali in Kerala?

- Ans** 1. Onam
 2. Vishu
 3. Ugadi
 4. Puthando

Question ID : 264330115094
Status : Answered
Chosen Option : 3

Q.18 Fundamental Rights was borrowed from the Constitution of .

- Ans** 1. United Kingdom
 2. South Africa
 3. Germany
 4. The United States of America

Question ID : 26433089957
Status : Answered
Chosen Option : 4

Q.19 Who took over as the new President of India International Centre (IIC) in June 2022?

- Ans** 1. Shyam Saran
 2. Karan Singh
 3. Narinder Nath Vohra
 4. Kamaladevi Chattopadhyaya

Question ID : 264330115055
Status : Answered
Chosen Option : 4

Q.20 Which technology is used by doctors to advise his patients sitting at a distance of thousands of kilometers from them?

- Ans** 1. Tele-Medicine
 2. Tele-Selling
 3. Tele-Commerce
 4. Tele-Porting

Question ID : 264330115599
Status : Answered
Chosen Option : 1

Q.1 Three milk bottles of 1 litre, 750 millilitres and 650 millilitres with milk percentage respectively 45%, 50% and 60% are emptied in a same container simultaneously. What is the percentage of milk in the mixture?

- Ans
- 1. 50.625%
 - 2. 52.625%
 - 3. 56.225%
 - 4. 55.625%

Question ID : 26433081704
Status : Answered
Chosen Option : 1

Q.2 The area of a triangle whose base and corresponding height are, respectively, 3.2m and 75 cm, is:

- Ans
- 1. 3 m^2
 - 2. 2 m^2
 - 3. 1.2 m^2
 - 4. 2.5 m^2

Question ID : 26433075508
Status : Answered
Chosen Option : 3

Q.3 A dealer marks his goods 30% higher than their cost price. In order to sell his goods at a no profit no loss basis, what discount percentage should he allow (correct up to 2 decimal places)?

- Ans
- 1. 25.25%
 - 2. 23.08%
 - 3. 12.28%
 - 4. 28.08%

Question ID : 26433083043
Status : Answered
Chosen Option : 2

Q.4 25 doctors can diagnose 75 patients in 5 hours. If five doctors leave the job, then how many patients can be diagnosed in 6 hours?

- Ans
- 1. 74
 - 2. 70
 - 3. 72
 - 4. 76

Question ID : 26433080185
Status : Answered
Chosen Option : 3

Q.5 How many digits will be there after the decimal point in the product of 0.124 and 1.0204?

- Ans
- 1. 8
 - 2. 6
 - 3. 7
 - 4. 5

Question ID : 26433082354
Status : Answered
Chosen Option : 3

Q.6 A merchant offers 20% discount on the marked price. He offers a further discount of 10% on the reduced price on cash payments. What does a customer have to pay in cash for an item whose marked price is ₹ 5000 ?

- Ans
- 1. ₹3,600
 - 2. ₹4,000
 - 3. ₹4,800
 - 4. ₹4,200

Question ID : 26433080223
Status : Answered
Chosen Option : 1

Q.7 P can do a piece of work in 15 days, while Q can do it in 10 days. If they work on alternate days beginning with P, in how many days will the work be finished?

- Ans
- 1. 12
 - 2. 14
 - 3. 11
 - 4. 13

Question ID : 26433075798
Status : Answered
Chosen Option : 1

Q.8 A cop sees a thief at a distance of 120 m. He starts chasing the thief who is running at a speed of 6 m/sec. The cop is chasing him with a speed of 8 m/sec. Find the distance covered by the thief before the cop catches him.

- Ans
- 1. 320 m
 - 2. 360 m
 - 3. 240 m
 - 4. 180 m

Question ID : 26433075953
Status : Answered
Chosen Option : 2

Q.9 A police officer follows a thief who is at a distance of 800 m from him. If they run at the speeds of 8 km/h and 7 km/h, respectively, what distance (in metre) does the police officer run to catch the thief?

- Ans 1. 6400
 2. 4000
 3. 5600
 4. 4800

Question ID : 26433075814
Status : Answered
Chosen Option : 1

Q.10

Which of the following options can be the value of k if $\frac{(143 \div 13 \times k - 3 \times 3)}{(6^2 - 7 \times 5 + k^2)} = 1$

- Ans 1. 2
 2. 4
 3. 3
 4. 1

Question ID : 26433082953
Status : Answered
Chosen Option : 4

Q.11 The largest distance between any two points on a sphere is 6 units. What is the volume of the sphere?

- Ans 1. 18π cubic units
 2. 64π cubic units
 3. 36π cubic units
 4. 24π cubic units

Question ID : 26433071369
Status : Answered
Chosen Option : 3

Q.12 The average weight of 10 workers travelling in a boat is increased by 2.8 kg when one of the workers, who weighs 58 kg, is replaced by a new worker. Find the weight of the new worker.

- Ans 1. 86 kg
 2. 84 kg
 3. 82 kg
 4. 68 kg

Question ID : 26433081006
Status : Marked For Review
Chosen Option : 2

Q.13 A year ago, Ram's income was Rs.20000 per month and expenditure was Rs.16,000 per month. Now if his income is increased by 10% and expenses increased by 15%. What would be the net change in his savings per month?

- Ans
- 1. Decreased by Rs.500
 - 2. Increased by Rs.500
 - 3. Decreased by Rs.400
 - 4. Increased by Rs.400

Question ID : 26433071304
Status : Answered
Chosen Option : 3

Q.14 ₹1,20,000 becomes ₹1,50,528 in two years at a certain rate of compound interest, compounding annually in an investment scheme. In the same scheme, the sum of ₹P is invested and it becomes ₹3,51,232 in three years. What is the value of P?

- Ans
- 1. 3,00,000
 - 2. 2,25,000
 - 3. 2,75,000
 - 4. 2,50,000

Question ID : 26433085460
Status : Answered
Chosen Option : 3

Q.15 Renu purchased two watches and each of them at the same price and sold one of them at a profit of 20% and the other at a profit of 24.2%. If the difference between their selling prices is ₹189, then what is the cost price of each of the watches?

- Ans
- 1. ₹8,123
 - 2. ₹6,120
 - 3. ₹4,500
 - 4. ₹7,640

Question ID : 26433080019
Status : Answered
Chosen Option : 3

Q.16 In 2021, in a city 30% of the people were vaccinated by Covid 19 vaccinations in the month of June, 50% of the remaining in July and 20% of the remaining in August. Still 84000 are left for vaccination. Find the total population of the city.(Everyone in the town is eligible for the vaccination)

- Ans
- 1. 3.10 lakh
 - 2. 4 lakh
 - 3. 3 lakh
 - 4. 3.5 lakh

Question ID : 26433080158
Status : Answered
Chosen Option : 3

Q.17 P and Q together can complete a piece of work in 20 days. Q and R together can complete it in 30 days. If P is twice as good a workman as R, then in how many days can Q alone complete it?

- Ans
- 1. 50
 - 2. 10
 - 3. 60
 - 4. 25

Question ID : 26433083052
Status : Answered
Chosen Option : 3

Q.18 Calculate the fourth proportional of 6, 10 and 12.

- Ans
- 1. 16
 - 2. 28
 - 3. 20
 - 4. 24

Question ID : 26433075102
Status : Answered
Chosen Option : 3

Q.19 The present population of a town is 95,000. The population increases by 15% in the first year, increases by 20% in the second year and decreases by 12% in the third year. Find the population of the town after three years.

- Ans
- 1. 1,15,368
 - 2. 1,16,568
 - 3. 1,16,368
 - 4. 1,15,568

Question ID : 26433064990
Status : Answered
Chosen Option : 1

Q.20 A cloth merchant bought 42 shirts, each at a price of ₹520. He sold each of them for ₹548. Find his percentage profit on each shirt. (Rounded off to two decimal places)

- Ans
- 1. 3.34%
 - 2. 6.42%
 - 3. 2.63%
 - 4. 5.38%

Question ID : 26433080018
Status : Answered
Chosen Option : 4

Q.1 Select the most appropriate ANTONYM of the word given in the brackets to fill in the blank and complete the sentence.

The best way to motivate someone for their hard work is to _____ (criticise) them for their little accomplishments.

- Ans
- 1. blame
 - 2. censure
 - 3. praise
 - 4. control

Question ID : 26433089840
Status : Answered
Chosen Option : 3

Q.2 Select the most appropriate synonym for the underlined word in the given sentence.

When the owner stopped paying the workers, a lot of them went rogue.

- Ans
- 1. ruffian
 - 2. reconnoitre
 - 3. reformer
 - 4. naughty

Question ID : 26433072075
Status : Answered
Chosen Option : 1

Q.3 Select the most appropriate synonym of the given word.

Vacate

- Ans
- 1. Fabricate
 - 2. Depart
 - 3. Remember
 - 4. Strain

Question ID : 26433073459
Status : Answered
Chosen Option : 2

Q.4 The following sentence has been split into four segments. Identify the segment that contains a grammatical error.

What does kangaroos / eat? / They are / quite strong.

- Ans
- 1. quite strong
 - 2. They are
 - 3. What does kangaroos
 - 4. eat

Question ID : 264330108881
Status : Answered
Chosen Option : 3

Q.5 Select the most appropriate synonym of the underlined word.

I believe you are impartial while making decisions.

- Ans
- 1. Biased
 - 2. Fair
 - 3. Good
 - 4. Offensive

Question ID : 26433088999
Status : Answered
Chosen Option : 2

Q.6 Select the most appropriate option that can substitute the underlined segment in the given sentence.

The advocate who appeared to the accused was least hopeful of the case.

- Ans
- 1. appeared of the accused
 - 2. appeared by the accused
 - 3. appeared for the accused
 - 4. appeared on the accused

Question ID : 264330103765
Status : Answered
Chosen Option : 3

Q.7 Select the most appropriate option to fill in the blank.

Though technology has advanced, environmental problems still have a drastic _____ on mankind.

- Ans
- 1. result
 - 2. purpose
 - 3. impact
 - 4. assume

Question ID : 26433073409
Status : Answered
Chosen Option : 3

Q.8 Select the most appropriate option to fill in the blanks and make the sentence meaningful.

She was _____ for the wrong _____ of the past.

- Ans
- 1. fined; deeds
 - 2. fined; duds
 - 3. find; did
 - 4. find; deeds

Question ID : 26433092096
Status : Answered
Chosen Option : 1

Q.9 Select the most appropriate meaning of the underlined idiom that can be substituted in the following sentence.

He is not a great leader but, he has the gift of gab.

- Ans
- 1. gift to gamble
 - 2. gift of speaking
 - 3. gift of sleeping
 - 4. gift of a leader

Question ID : 26433072238
Status : Answered
Chosen Option : 2

Q.10 Select the MISSPELT word.

- Ans
- 1. Preference
 - 2. Avoidance
 - 3. Correction
 - 4. Toleranse

Question ID : 26433086337
Status : Answered
Chosen Option : 4

Q.11 Select the most appropriate ANTONYM of the underlined word in the given sentence.
The causes of war in the country are very pathetic.

- Ans
- 1. occasions
 - 2. creations
 - 3. consequences
 - 4. factors

Question ID : 26433055485
Status : Answered
Chosen Option : 3

Q.12 Select the most appropriate idiom that can substitute the underlined segment in the given sentence.

He has got this notorious reputation of teasing and making fun of people.

- Ans
- 1. cutting corners
 - 2. pulling someone's leg
 - 3. falling prey
 - 4. pulling oneself together

Question ID : 264330100894
Status : Answered
Chosen Option : 2

Q.13 Select the most appropriate ANTONYM of the given word.

Pure

- Ans
- 1. Virtuous
 - 2. Foolish
 - 3. Tainted
 - 4. Humble

Question ID : 26433072202
Status : Answered
Chosen Option : 3

Q.14 Identify the MISSPELT word in the following sentence.

Since there are numerous topics of discussions with varying requirements, specific disciplines and age range require distinct interactive learning strategies.

- Ans
- 1. interactive
 - 2. requirements
 - 3. disciplines
 - 4. discussions

Question ID : 26433073663
Status : Answered
Chosen Option : 4

Q.15 Select the most appropriate option that can substitute the underlined segment in the given sentence. If there is no need to substitute it, select 'No substitution'.

This trailer gives a sneak peak of the magnum opus that has been created by the southern film industry.

- Ans
- 1. gives a sneak peek of the magnum opus
 - 2. give a sneak peak of the magnum opus
 - 3. gives a sneak peak on the magnum opus
 - 4. No substitution

Question ID : 26433091766
Status : Answered
Chosen Option : 4

Comprehension:

In the following passage, some words have been deleted. Read the passage carefully and select the most appropriate option to fill in each blank.

Buck (1)_____ over against the sled, (2)_____, sobbing for breath, helpless. This was Spitz's opportunity. He sprang upon Buck, and twice his teeth sank into his (3)_____ foe and ripped and tore the flesh to the bone. Then Francois' lash (4)_____, and Buck had the satisfaction of watching Spitz receive the worst whipping as yet (5)_____ to any of the team.

SubQuestion No : 16

Q.16 Select the most appropriate option to fill in blank number 1.

- Ans 1. staggered
 2. pranced
 3. strutted
 4. swaggered

Question ID : 26433065192
Status : Answered
Chosen Option : 1

Comprehension:

In the following passage, some words have been deleted. Read the passage carefully and select the most appropriate option to fill in each blank.

Buck (1)_____ over against the sled, (2)_____, sobbing for breath, helpless. This was Spitz's opportunity. He sprang upon Buck, and twice his teeth sank into his (3)_____ foe and ripped and tore the flesh to the bone. Then Francois' lash (4)_____, and Buck had the satisfaction of watching Spitz receive the worst whipping as yet (5)_____ to any of the team.

SubQuestion No : 17

Q.17 Select the most appropriate option to fill in blank number 2.

- Ans 1. exterminated
 2. exhausted
 3. excited
 4. eloquent

Question ID : 26433065193
Status : Answered
Chosen Option : 2

Comprehension:

In the following passage, some words have been deleted. Read the passage carefully and select the most appropriate option to fill in each blank.

Buck (1)_____ over against the sled, (2)_____, sobbing for breath, helpless. This was Spitz's opportunity. He sprang upon Buck, and twice his teeth sank into his (3)_____ foe and ripped and tore the flesh to the bone. Then Francois' lash (4)_____, and Buck had the satisfaction of watching Spitz receive the worst whipping as yet (5)_____ to any of the team.

SubQuestion No : 18

Q.18 Select the most appropriate option to fill in blank number 3.

- Ans 1. unresisting
 2. unsatiable
 3. undetermined
 4. unquenchable

Question ID : 26433065194
Status : Answered
Chosen Option : 1

Comprehension:

In the following passage, some words have been deleted. Read the passage carefully and select the most appropriate option to fill in each blank.

Buck (1)_____ over against the sled, (2)_____, sobbing for breath, helpless. This was Spitz's opportunity. He sprang upon Buck, and twice his teeth sank into his (3)_____ foe and ripped and tore the flesh to the bone. Then Francois' lash (4)_____, and Buck had the satisfaction of watching Spitz receive the worst whipping as yet (5)_____ to any of the team.

SubQuestion No : 19

Q.19 Select the most appropriate option to fill in blank number 4.

- Ans 1. defeneded
 2. deteriorated
 3. demeaned
 4. descended

Question ID : 26433065195
Status : Answered
Chosen Option : 4

Comprehension:

In the following passage, some words have been deleted. Read the passage carefully and select the most appropriate option to fill in each blank.

Buck (1)_____ over against the sled, (2)_____, sobbing for breath, helpless. This was Spitz's opportunity. He sprang upon Buck, and twice his teeth sank into his (3)_____ foe and ripped and tore the flesh to the bone. Then Francois' lash (4)_____, and Buck had the satisfaction of watching Spitz receive the worst whipping as yet (5)_____ to any of the team.

SubQuestion No : 20

Q.20 Select the most appropriate option to fill in blank number 5.

- Ans 1. advertised
 2. automated
 3. administered
 4. adjudged

Question ID : 26433065196
Status : Answered
Chosen Option : 4

Section : Part-D-Hindi

Q.1 मिश्र वाक्य - 'यह वही लड़का है जिससे मैं मिल चुका हूँ।' निम्नलिखित विकल्पों में से इस वाक्य के लिए कौन सा एक उचित सरल वाक्य होगा?

- Ans 1. लड़का है जिससे मैं मिल चुका हूँ।
 2. इस लड़के से मैं मिल चुका हूँ।
 3. यह लड़का है जिससे मिल चुका हूँ।
 4. वही लड़का है जिससे मैं मिल चुका हूँ।

Question ID : 26433062439
Status : Not Answered
Chosen Option : --

Q.2 'जो छूने योग्य न हो' वाक्यांश के लिए इनमें से सही शब्द क्या है?

- Ans 1. अचूक
 2. अमर
 3. अछूत
 4. अजर

Question ID : 26433070140
Status : Not Answered
Chosen Option : --

Q.3 विकल्पों में दिए गए किस शब्द के साथ कारक चिह्न जुड़ा हुआ है?

- Ans 1. कर्मों
 2. सबको
 3. फल
 4. पड़ता

Question ID : 26433085035
Status : Not Answered
Chosen Option : --

Q.4 'रक्त' शब्द के लिए समानार्थी शब्द नहीं है-

- Ans 1. आनन
 2. लहू
 3. रुधिर
 4. लोहित

Question ID : 26433085083
Status : Not Answered
Chosen Option : --

Q.5 'समुचित स्वच्छता स्वास्थ्य के लिए आवश्यक है।' इस वाक्य के किस शब्द में वर्तनीगत अशुद्धि है?

- Ans 1. स्वास्थ्य
 2. स्वच्छता
 3. समुचित
 4. आवश्यक

Question ID : 26433085067
Status : Not Answered
Chosen Option : --

Q.6 'नेताजी की मृत्यु क्षोभजनक है।' इस वाक्य में रेखांकित शब्द के स्थान पर निम्न में से कौन सा शब्द उपयुक्त होगा?

- Ans 1. दुःखद
 2. सुखद
 3. निराशा
 4. सहज

Question ID : 26433085058
Status : Not Answered
Chosen Option : --

Q.7 'अंग-अंग _____ होना'
निम्न में से उपयुक्त शब्द द्वारा उपरोक्त मुहावरे में रिक्त स्थान की पूर्ति कीजिए।

- Ans 1. चमकदार
 2. ढीला
 3. बोझिल
 4. चोटिल

Question ID : 26433069691
Status : Not Answered
Chosen Option : --

Q.8 निम्नलिखित में से सर्वनाम सम्बन्धी अशुद्धि युक्त वाक्य का चयन कीजिए।

- Ans
- 1. यह उनका आदेश है।
 - 2. मेरे लिए तुम क्या लाये हो?
 - 3. हमारे रीति-रिवाज आपसे भिन्न हैं।
 - 4. मेरे में अनंत शक्ति है।

Question ID : 26433063001
Status : Not Answered
Chosen Option : --

Q.9 'जो पर के अधीन है' वाक्यांश के लिए एक शब्द _____ है।

- Ans
- 1. पहलवान
 - 2. परोपकारी
 - 3. पारिश्रमिक
 - 4. पराधीन

Question ID : 26433062940
Status : Not Answered
Chosen Option : --

Q.10 निम्न में से कौन-सा शब्द 'पहाड़' शब्द का पर्यायवाची शब्द नहीं है?

- Ans
- 1. भूधर
 - 2. पर्वत
 - 3. अमल
 - 4. गिरि

Question ID : 26433067079
Status : Not Answered
Chosen Option : --

Q.11 निम्नलिखित वाक्य के रिक्त स्थान में सबसे उपयुक्त मुहावरा क्या होगा?
'शिवाजी ने औरंगजेब की _____ थी।'

- Ans
- 1. कमर ठोक दी
 - 2. कमर तोड़ दी
 - 3. कमर टिका दी
 - 4. कमर बांध दी

Question ID : 26433066728
Status : Not Answered
Chosen Option : --

Q.12 निम्न वाक्य में रेखांकित अंश के स्थान पर सबसे उपयुक्त विकल्प कौन-सा होगा?
हमें अपने माता-पिता की शुश्रूषा करनी चाहिए।

- Ans 1. दिनचर्या
 2. सेवा
 3. नौकरी
 4. बात-चीत

Question ID : 26433072586
Status : Not Answered
Chosen Option : --

Q.13 'गुड़ गन्ने के रसे से बनता है।' इस वाक्य के किस शब्द में वर्तनीगत अशुद्धि है?

- Ans 1. रसे
 2. गुड़
 3. गन्ने
 4. बनता

Question ID : 26433085064
Status : Not Answered
Chosen Option : --

Q.14 'मोहन की उम्र के अनुसार इतना भोजन पर्याप्त है।' इस वाक्य में प्रयुक्त 'पर्याप्त' शब्द का अर्थ क्या है?

- Ans 1. आवश्यकता से कम
 2. उपयुक्त
 3. आवश्यकता से अधिक
 4. आवश्यक

Question ID : 26433080918
Status : Not Answered
Chosen Option : --

Q.15 निम्न में से किस वाक्य में 'अंचल' के सही अनेकार्थी शब्द का प्रयोग हुआ है?

- Ans 1. मैंने उस नाटक का प्रथम अंक पढ़ लिया।
 2. अंकुश के माध्यम से हाथी को नियंत्रित किया गया।
 3. इस प्रदेश में हरियाली अधिक है।
 4. शरीर के सभी अंग शिथिल हो गए।

Question ID : 26433085141
Status : Not Answered
Chosen Option : --

Comprehension:

निम्नलिखित गद्यांश में कुछ शब्दों को हटा दिया गया है। दिए गए विकल्पों की सहायता से रिक्त स्थानों की पूर्ति कीजिए। प्रत्येक संख्या के लिए सबसे उपयुक्त विकल्प का चयन कीजिए।

1. _____ की खोज के साथ एक नए युग की शुरुआत हुई। अब आदमी अपने 2. _____ को लिखकर रखने लगा, जिससे वह 'सभ्य' कहा जाने लगा। आदमी के लिखना आरंभ करने से ही 3. _____ का आरंभ हुआ और एक पीढ़ी के विचार दूसरी पीढ़ी तक पहुंचने लगे। इसी के साथ 4. _____ गति तेज़ हुई। इस प्रकार एक नए युग की 5. _____ हुई।

SubQuestion No : 16

Q.16 रिक्त स्थान 1 की पूर्ति के लिए सबसे उपयुक्त विकल्प का चयन करें।

- Ans 1. तकनीकी
 2. अक्षर
 3. शब्द
 4. छंद

Question ID : 264330110945

Status : Not Answered

Chosen Option : --

Comprehension:

निम्नलिखित गद्यांश में कुछ शब्दों को हटा दिया गया है। दिए गए विकल्पों की सहायता से रिक्त स्थानों की पूर्ति कीजिए। प्रत्येक संख्या के लिए सबसे उपयुक्त विकल्प का चयन कीजिए।

1. _____ की खोज के साथ एक नए युग की शुरुआत हुई। अब आदमी अपने 2. _____ को लिखकर रखने लगा, जिससे वह 'सभ्य' कहा जाने लगा। आदमी के लिखना आरंभ करने से ही 3. _____ का आरंभ हुआ और एक पीढ़ी के विचार दूसरी पीढ़ी तक पहुंचने लगे। इसी के साथ 4. _____ गति तेज़ हुई। इस प्रकार एक नए युग की 5. _____ हुई।

SubQuestion No : 17

Q.17 रिक्त स्थान 2 की पूर्ति के लिए सबसे उपयुक्त विकल्प का चयन करें।

- Ans 1. खेलना-कूदना
 2. लेखा-जोखा
 3. पढ़ाई-लिखाई
 4. हिसाब-किताब

Question ID : 264330110946

Status : Not Answered

Chosen Option : --

Comprehension:

निम्नलिखित गद्यांश में कुछ शब्दों को हटा दिया गया है। दिए गए विकल्पों की सहायता से रिक्त स्थानों की पूर्ति कीजिए। प्रत्येक संख्या के लिए सबसे उपयुक्त विकल्प का चयन कीजिए।

1. _____ की खोज के साथ एक नए युग की शुरुआत हुई। अब आदमी अपने 2. _____ को लिखकर रखने लगा, जिससे वह 'सभ्य' कहा जाने लगा। आदमी के लिखना आरंभ करने से ही 3. _____ का आरंभ हुआ और एक पीढ़ी के विचार दूसरी पीढ़ी तक पहुंचने लगे। इसी के साथ 4. _____ गति तेज़ हुई। इस प्रकार एक नए युग की 5. _____ हुई।

SubQuestion No : 18

Q.18 रिक्त स्थान 3 की पूर्ति के लिए सबसे उपयुक्त विकल्प का चयन करें।

- Ans
- 1. अंग्रेजी
 - 2. मराठी
 - 3. संस्कृत
 - 4. इतिहास

Question ID : 264330110947

Status : Not Answered

Chosen Option : --

Comprehension:

निम्नलिखित गद्यांश में कुछ शब्दों को हटा दिया गया है। दिए गए विकल्पों की सहायता से रिक्त स्थानों की पूर्ति कीजिए। प्रत्येक संख्या के लिए सबसे उपयुक्त विकल्प का चयन कीजिए।

1. _____ की खोज के साथ एक नए युग की शुरुआत हुई। अब आदमी अपने 2. _____ को लिखकर रखने लगा, जिससे वह 'सभ्य' कहा जाने लगा। आदमी के लिखना आरंभ करने से ही 3. _____ का आरंभ हुआ और एक पीढ़ी के विचार दूसरी पीढ़ी तक पहुंचने लगे। इसी के साथ 4. _____ गति तेज़ हुई। इस प्रकार एक नए युग की 5. _____ हुई।

SubQuestion No : 19

Q.19 रिक्त स्थान 4 की पूर्ति के लिए सबसे उपयुक्त विकल्प का चयन करें।

- Ans
- 1. विनाश की
 - 2. पतन की
 - 3. अधोमुख
 - 4. विकास की

Question ID : 264330110948

Status : Not Answered

Chosen Option : --

Comprehension:

निम्नलिखित गद्यांश में कुछ शब्दों को हटा दिया गया है। दिए गए विकल्पों की सहायता से रिक्त स्थानों की पूर्ति कीजिए। प्रत्येक संख्या के लिए सबसे उपयुक्त विकल्प का चयन कीजिए।

1. _____ की खोज के साथ एक नए युग की शुरुआत हुई। अब आदमी अपने 2. _____ को लिखकर रखने लगा, जिससे वह 'सभ्य' कहा जाने लगा। आदमी के लिखना आरंभ करने से ही 3. _____ का आरंभ हुआ और एक पीढ़ी के विचार दूसरी पीढ़ी तक पहुंचने लगे। इसी के साथ 4. _____ गति तेज़ हुई। इस प्रकार एक नए युग की 5. _____ हुई।

SubQuestion No : 20

Q.20 रिक्त स्थान 5 की पूर्ति के लिए सबसे उपयुक्त विकल्प का चयन करें।

- Ans**
- 1. शुरुआत
 - 2. अंत
 - 3. अवशिष्ट
 - 4. शेष

Question ID : 264330110949

Status : Not Answered

Chosen Option : --

WWW.GOV TJOB SALTER