

Constable GD in CAPFs SSF Rifleman GD in Assam Rifles and Sepoy in NCB Examination 2022

Roll Number	www.govtjobsalert.in
Candidate Name	www.govtjobsalert.in
Venue Name	Dr. Ghanshyam Singh College Of Education
Exam Date	30/01/2023
Exam Time	5:15 PM - 6:15 PM
Subject	Constable GD Examination 2022

Section : **Part-A-General Intelligence and Reasoning**

Q.1 Six students Tanya, Roop, Johar, Soma, Manvi and Deep are sitting around a circular table facing the centre. Soma is sitting second to the right of Deep. Soma is an immediate neighbour of both Manvi and Johar. Roop is sitting second to the left of Johar. Deep is an immediate neighbour of both Johar and Roop. Who is the immediate neighbour of Tanya and Deep?

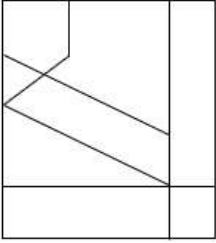
- Ans
- 1. Soma
 - 2. Roop
 - 3. Manvi
 - 4. Johar

Question ID : 26433069128

Status : Answered

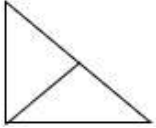
Chosen Option : 2

Q.2 Select the option figure which is embedded in the given figure. (Rotation is NOT allowed)

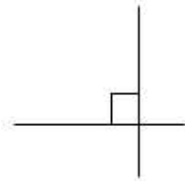


Ans

✗ 1.



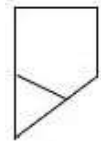
✗ 2.



✗ 3.



✓ 4.



Question ID : 26433069352

Status : Answered

Chosen Option : 4

Q.3 Which two numbers(not digits) and two signs should be interchanged to make the given equation correct?
 $100 \times 5 - 110 \div 2 + 12 = 210$

Ans ✗ 1. 2 and 12; \times and $+$

✓ 2. 5 and 2; $+$ and $-$

✗ 3. 2 and 12; \div and \times

✗ 4. 12 and 5; \times and $-$

Question ID : 26433092745

Status : Not Attempted and
Marked For Review

Chosen Option : --

Q.4 A @ B means 'A is the husband of B'.
 A & B means 'A is the mother of B'.
 A # B means 'A is the daughter of B'.
 A % B means 'A is the sister of B'.
 If R # L % G @ V & P, then how is L related to P?

- Ans 1. Mother-in-law or father-in-law
 2. Father's sister
 3. Mother's sister
 4. Grandparent

Question ID : 26433069617
 Status : Answered
 Chosen Option : 2

Q.5 Select the option that is related to the fifth letter-cluster in the same way as the second letter-cluster is related to the first letter-cluster and the fourth letter-cluster is related to the third letter-cluster.
 HALF: SFOT :: DAMP: WFNJ :: AREA: ?

- Ans 1. ZIVZ
 2. YMJZ
 3. ZWVY
 4. FWJY

Question ID : 26433057490
 Status : Answered
 Chosen Option : 1

Q.6 Select the correct mirror image of the given figure when the mirror is placed at MN as shown below.

F G R z c 6 n W
 M ————— N

- Ans 1. F G R z c 6 n W
 2. F G R z c 6 n W
 3. W n 6 c z R G F
 4. F G R z c 6 n W

Question ID : 26433080800
 Status : Answered
 Chosen Option : 1

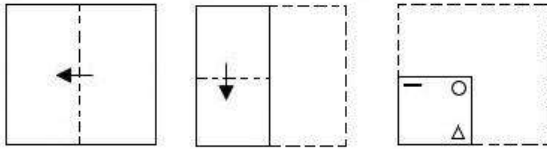
Q.7 Select the option that is related to the third word in the same way as the second word is related to the first word (The words must be considered as meaningful English words and must not be related to each other based on the number of letters/consonants/vowels in the word).

Cosmology: Universe :: Morphology : _____

- Ans
- 1. Radio
 - 2. Sturcture Of Living Things
 - 3. Function
 - 4. Trees

Question ID : 26433078826
 Status : Answered
 Chosen Option : 2

Q.8 A paper is folded and cut as shown below. How will it appear when unfolded?



- Ans
- 1.
 - 2.
 - 3.
 - 4.

Question ID : 26433090088
 Status : Answered
 Chosen Option : 1

Q.9 In a certain code language, 'DESIGN' is written as 'TFEPIK' and 'DESIRE' is written as 'TFEGTK'. How will 'DEVICE' be written as in that language?

- Ans
- 1. VEDGEK
 - 2. WFEGEK
 - 3. ECIVED
 - 4. VEDECI

Question ID : 26433090041

Status : Not Attempted and
Marked For Review

Chosen Option : --

Q.10 Six people A, B, C, D, E and F are sitting around a circular table, facing the centre. C is sitting second to the left of E. B is the immediate neighbour of E and F. A is sitting second to the right of B. Who is sitting between B and A when considered from the right of B?

- Ans
- 1. D
 - 2. E
 - 3. C
 - 4. F

Question ID : 26433081516

Status : Answered

Chosen Option : 4

Q.11 In a certain code language, FLAME is written as 'LPGQK', and BURNT is written as 'HYXRZ'. How will 'FRIED' be written in the same code language?

- Ans
- 1. LVOJK
 - 2. LVPIJ
 - 3. LWPIJ
 - 4. LVOIJ

Question ID : 26433067991

Status : Answered

Chosen Option : 4

Q.12 Select the option that represents the correct order of the given words as they would appear in an English dictionary.

1. HALOGEN
2. HAIRY
3. HAIKU
4. HAND
5. HAMPER
6. HANK

- Ans
- 1. 3, 2, 1, 5, 4, 6
 - 2. 4, 3, 1, 2, 5, 6
 - 3. 2, 3, 1, 5, 4, 6
 - 4. 3, 1, 2, 4, 5, 6

Question ID : 26433079378

Status : Answered

Chosen Option : 1

Q.13 Select the figure from among the given options that can replace the question mark (?) in the following series.

△	↑	=	
☆	□	X	
=	☆	□	?
↑	=	☆	

Ans

✗ 1.

☆
X
◇
=

✓ 2.

☆
◇
X
□

✗ 3.

☆
=
X
□

✗ 4.

☆
X
◇
□

Question ID : 26433080758
 Status : Answered
 Chosen Option : 2

Q.14 Which number will replace the question mark (?) in the following series?
 182, 132, 90, 56, ?, 12, 2

- Ans
- ✗ 1. 24
 - ✗ 2. 52
 - ✗ 3. 36
 - ✓ 4. 30

Question ID : 26433068474
 Status : Answered
 Chosen Option : 4

Q.15 Which of the following terms will replace the question mark (?) in the given series?
?, CSAT, BPVM, AMQF, ZJLY

- Ans
- 1. FVDA
 - 2. DVFA
 - 3. VDFB
 - 4. AVRF

Question ID : 26433068988
Status : Answered
Chosen Option : 2

Q.16 Which two signs should be interchanged to make the below equation mathematically correct?

$$64 - 16 \times 25 \div 80 + 10 = 59$$

- Ans
- 1. + and -
 - 2. + and \times
 - 3. - and +
 - 4. \times and -

Question ID : 264330117508
Status : Answered
Chosen Option : 3

Q.17 Select the letter-cluster from among the given options that can replace the question mark (?) in the following series.
WGVJ, CCBP, IYHV, ?, UQTH

- Ans
- 1. UMBR
 - 2. OUNB
 - 3. OMNB
 - 4. UOME

Question ID : 26433074736
Status : Answered
Chosen Option : 2

Q.18 In this question, three statements are given, followed by two conclusions numbered I and II. Assuming the statements to be true, even if they seem to be at variance with commonly known facts, decide which of the conclusions logically follows/follow from the statements.

Statements:

Some chairs are bedsheets.

All cots are chairs.

All pillows are bedsheets.

Conclusions:

I. Some pillows are chairs.

II. Some cots are bedsheets.

- Ans
- 1. Both conclusions I and II follow.
 - 2. Only conclusion II follows.
 - 3. Only conclusion I follows.
 - 4. Neither conclusion I nor II follows.

Question ID : 26433070389
Status : Answered
Chosen Option : 4

Q.19 Which of the following numbers will replace the question mark (?) in the given series?
0, 7, 26, 63, ?

- Ans 1. 120
 2. 81
 3. 124
 4. 69

Question ID : 26433082734
Status : Answered
Chosen Option : 3

Q.20 Select the set in which the numbers are related in the same way as are the numbers of the following set.

(NOTE : Operations should be performed on the whole numbers, without breaking down the numbers into its constituent digits. E.g. 13 – Operations on 13 such as adding /subtracting/multiplying etc. to 13 can be performed. Breaking down 13 into 1 and 3 and then performing mathematical operations on 1 and 3 is NOT allowed)
(10, 300, 40)
(12, 192, 20)

- Ans 1. (16, 226, 30)
 2. (17, 156, 12)
 3. (20, 160, 10)
 4. (18, 228, 20)

Question ID : 26433076483
Status : Not Attempted and Marked For Review
Chosen Option : --

Section : Part-B-General Knowledge and General awareness

Q.1 Which of the following is a professional table tennis player?

- Ans 1. Parupalli Kashyap
 2. Aparna Popat
 3. Saurav Ghosal
 4. Manika Batra

Question ID : 264330115947
Status : Answered
Chosen Option : 4

Q.2 Ruler of which dynasty built the Kandariya Mahadeva temple in 999?

- Ans 1. Sunga
 2. Chandela
 3. Nanda
 4. Gupta

Question ID : 264330106593
Status : Answered
Chosen Option : 2

Q.3 Which article of Indian constitution is related with Protection of interests of minorities?

- Ans 1. 33
 2. 31
 3. 27
 4. 29

Question ID : 26433089945
Status : Answered
Chosen Option : 3

Q.4 The prime themes of Kathak are tied to which of the following cults of Hinduism?

- Ans 1. Shaivism
 2. Buddhism
 3. Shaktism
 4. Vaishnavism

Question ID : 26433086627
Status : Answered
Chosen Option : 1

Q.5 Cycas and Pinus are which type of plants?

- Ans 1. Pteridophyta
 2. Gymnosperms
 3. Thallophyta
 4. Angiosperms

Question ID : 264330115206
Status : Not Attempted and Marked For Review
Chosen Option : --

Q.6 What helps in the cultivation of rabi crops?

- Ans 1. Mahawat
 2. Southeast trade winds
 3. Westerly jet streams
 4. Northwest winds

Question ID : 26433087884
Status : Answered
Chosen Option : 4

Q.7 The Finance Commission of India submits its report to _____.

- Ans 1. The head of NITI Ayog
 2. The Finance minister of India
 3. The President of India
 4. The Prime minister of India

Question ID : 26433090672
Status : Answered
Chosen Option : 2

Q.8 Which state has the lowest sex ratio as per the Census 2011?

- Ans 1. Maharashtra
 2. Rajasthan
 3. Bihar
 4. Haryana

Question ID : 264330116032
Status : Answered
Chosen Option : 4

Q.9 Which of the following is an output of farming?

- Ans 1. Air
 2. crops
 3. water
 4. machines

Question ID : 264330115542
Status : Answered
Chosen Option : 2

Q.10 Which Union Minister of State addressed the inaugural function of 4th National Young Superintendents of Police Conference and Police Expo in September 2022?

- Ans 1. Bishweswar Tudu
 2. Arjun Munda
 3. Nityanand Rai
 4. Meenakshi Lekhi

Question ID : 264330114961
Status : Not Answered
Chosen Option : --

Q.11 A microfinance loan is defined as a collateral-free loan given to a household having annual household income up to Rs. _____.

- Ans 1. 300000
 2. 400000
 3. 500000
 4. 600000

Question ID : 264330115295
Status : Answered
Chosen Option : 2

Q.12 _____ (NRLM) is a poverty alleviation project implemented by the Government of India.

- Ans 1. National Rural Living Mission
 2. National Rural Lands Mission
 3. National Ration Livelihood Mission
 4. National Rural Livelihood Mission

Question ID : 264330116169
Status : Answered
Chosen Option : 4

Q.13 Which is the last Five year plan that was put to effect in India?

- Ans 1. Thirteenth
 2. Eleventh
 3. Twelfth
 4. Tenth

Question ID : 264330116122
Status : Not Answered
Chosen Option : --

Q.14 Gaddam Padmaja Reddy won Padma Shri for which dance form?

- Ans 1. Kathakali
 2. Lavani
 3. Bharatnatyam
 4. Kuchipudi

Question ID : 264330115823
Status : Answered
Chosen Option : 3

Q.15 Who has been appointed as the Director of the Forest Research Institute in March 2022?

- Ans** 1. Renu Singh
 2. Vikas Rana
 3. Arun Singh Rawat
 4. Ajay Thakur

Question ID : 264330114998
Status : Answered
Chosen Option : 4

Q.16 Captain Roop Singh Stadium is located in which of the following city?

- Ans** 1. Jabalpur
 2. Indore
 3. Gwalior
 4. Jaipur

Question ID : 264330116251
Status : Not Answered
Chosen Option : --

Q.17 Why was the year 1757 an important year for the English East India Company in India?

- Ans** 1. In 1757 the English East India Company got control over Hyderabad by defeating the Nizam in the Battle of Plassey.
 2. In 1757 the English East India Company got control over Madras by defeating Nawab Siraj-ud-daulah in the Battle of Plassey.
 3. In 1757 the English East India Company got control over Oudh by defeating Nawab Siraj-ud-daulah in the Battle of Berar.
 4. In 1757 the English East India Company got control over Bengal by defeating Nawab Siraj-ud-daulah in the Battle of Plassey.

Question ID : 26433091464
Status : Answered
Chosen Option : 4

Q.18 Which among the following festivals is also known as Dala Puja devoted to worshipping the sun is traditionally celebrated by the people of Bihar?

- Ans** 1. Bihula
 2. Madhushravani
 3. Chhath Puja
 4. Sama Chakeva

Question ID : 264330115126
Status : Answered
Chosen Option : 3

Q.19 M.S.Swaminathan (father of Green Revolution in India), was _____ by profession.

- Ans 1. scientist
 2. police officer
 3. army officer
 4. judge

Question ID : 264330115423
Status : Answered
Chosen Option : 1

Q.20 Which among the following statements is incorrect?

- Ans 1. The melting point of ice decreases with decrease in pressure.
 2. Spherical Shape of liquid droplets is due to the property of surface tension in liquids.
 3. Evaporation takes place only on the surface of liquids.
 4. Liquids at high altitudes boil at lower temperature due to low atmospheric pressure at high altitudes.

Question ID : 264330115180
Status : Answered
Chosen Option : 3

Section : Part-C-Elementary Mathematics

Q.1 A man spends 87% of his income. His income increased by 18% and he increased his expenditure by 17%. His savings will then be increased by : (Consider up to two decimals only)

- Ans 1. 29.2%
 2. 24.69%
 3. 18.54%
 4. 27.32%

Question ID : 26433076266
Status : Answered
Chosen Option : 2

Q.2 Mohan walks on a circular track 1500 metre in circumference. If the speed of Mohan is 75metre/min, then what is the time taken by Mohan to cover one round of track?

- Ans 1. 18 min
 2. 20 min
 3. 22 min
 4. 15 min

Question ID : 26433075699
Status : Answered
Chosen Option : 2

Q.3 Successive discounts of 10%, 15% and 20% amount to a single discount of:

Ans 1. 38.8%

2. 35.8%

3. 39.7%

4. 33.7%

Question ID : 26433061382

Status : **Not Attempted and Marked For Review**

Chosen Option : --

Q.4 What is the volume of a cube (in cm^3), whose longest diagonal measures $11\sqrt{3}$ cm?

Ans 1. 1000

2. 1331

3. 121

4. 144

Question ID : 26433075007

Status : **Answered**

Chosen Option : 2

Q.5 If radius of a cylinder is increased by 20% keeping the height unchanged, then by what percent does the volume of the cylinder increase?

Ans 1. 44%

2. 40%

3. 24%

4. 50%

Question ID : 26433083060

Status : **Answered**

Chosen Option : 1

Q.6 Find the fourth proportional to $7x - 1$, $9x + 5$ and $8x + 1$, if $x = 3$.

Ans 1. 50

2. 30

3. 60

4. 40

Question ID : 26433080183

Status : **Answered**

Chosen Option : 4

Q.7 Two objects were sold for ₹9,900 each. One object was sold at a loss of 10% and the other object was sold at a gain of 10%. The net gain or loss in the whole transaction is:

- Ans
- 1. Gain ₹1,000
 - 2. Loss ₹200
 - 3. Loss ₹600
 - 4. Gain ₹100

Question ID : 26433081561
Status : Answered
Chosen Option : 2

Q.8 A shopkeeper marks his goods 12 percent above cost price, but allows 12 percent discount for cash. His net gain or loss percent is:

- Ans
- 1. 1.44 percent loss
 - 2. No gain no loss
 - 3. 1.5 percent gain
 - 4. 1 percent loss

Question ID : 264330116738
Status : Answered
Chosen Option : 1

Q.9 What is the compound interest (in ₹ , rounded off to two decimal places) on ₹ 20,000 in two years at 4% per annum, the interest being compounded half-yearly?

- Ans
- 1. 1548.64
 - 2. 1600.00
 - 3. 1500.00
 - 4. 1648.64

Question ID : 26433075559
Status : Answered
Chosen Option : 4

Q.10 The average marks obtained in a subject by 60 students in a class is 82. The average marks of boys and girls in that subject are 75 and 85 respectively. The number of boys in the class is:

- Ans
- 1. 26
 - 2. 32
 - 3. 18
 - 4. 30

Question ID : 26433076263
Status : Not Attempted and Marked For Review
Chosen Option : --

Q.11 If Rs.X is the price of 10 pens that cost Rs.42 per dozen, and Y hours is the time taken to travel 175 km at 12.5 km/h, then the value of $X^2 + Y^2$ is:

- Ans** 1. 1421
 2. 724
 3. 881
 4. 1850

Question ID : 26433075319
Status : Answered
Chosen Option : 1

Q.12 The salary of Neeta is first increased by 13% and then it is decreased by 13%. What is the change in her salary?

- Ans** 1. Increase of 1.69%
 2. Increase of 16.9%
 3. Decrease of 16.9%
 4. Decrease of 1.69%

Question ID : 26433074918
Status : Answered
Chosen Option : 4

Q.13 Anupam started a business with an initial investment of ₹2,00,000. In the first year, he incurred a loss of 4%. However, during the second year, he earned a profit of 10%, and in the third year he earned a profit of 15%. Calculate his net profit for the entire period of three years.

- Ans** 1. ₹42,503
 2. ₹42,808
 3. ₹42,880
 4. ₹42,530

Question ID : 26433076231
Status : Not Answered
Chosen Option : --

Q.14 Two containers with equal capacity have milk and water in the ratio of 3 : 4 and 3 : 1 respectively. If both the containers are emptied into a bigger container having the capacity to contain the whole mixture, then what is the ratio of milk to water in the bigger container?

- Ans** 1. 32 : 31
 2. 23 : 11
 3. 33 : 21
 4. 33 : 23

Question ID : 26433076394
Status : Answered
Chosen Option : 4

Q.15 A and B undertake to do a piece of work for Rs. 330. A can do it in 11 days and B can do it in 22 days. With the help of C, they finish it in 6 days. How much should C be paid for his work?

- Ans
- 1. Rs.140
 - 2. Rs.70
 - 3. Rs.80
 - 4. Rs.60

Question ID : 264330116853
Status : Not Answered
Chosen Option : --

Q.16 Two numbers are in the ratio of 2 : 3. Their HCF and LCM are 21 and 126, respectively. What is the difference of these two numbers?

- Ans
- 1. 18
 - 2. 20
 - 3. 21
 - 4. 25

Question ID : 26433080272
Status : Answered
Chosen Option : 3

Q.17 A and B together can do a piece of work in 12 days, B and C together in 15 days, C and A together in 20 days. If A, B and C work together, then how many days will be required to do the same work?

- Ans
- 1. 5
 - 2. 7
 - 3. 7.5
 - 4. 10

Question ID : 26433076205
Status : Not Answered
Chosen Option : --

Q.18 Mohan goes to office from home at a speed of 20 km/h and returns to home from office at a certain speed. If the average speed is 24 km/h, then what is the speed while returning?

- Ans
- 1. 30 km/h
 - 2. 28 km/h
 - 3. 32 km/h
 - 4. 26 km/h

Question ID : 26433075690
Status : Answered
Chosen Option : 2

Q.19 The smallest number which when reduced by 5, is divisible 12, 16, and 18 is:

- Ans 1. 137
 2. 161
 3. 173
 4. 149

Question ID : 26433082346
Status : Not Answered
Chosen Option : --

Q.20 Laxman marks his goods at 60% above the cost price and allows a discount of 20%.
What is his gain/loss percentage?

- Ans 1. Profit 30%
 2. Loss 30%
 3. Profit 28%
 4. Loss 28%

Question ID : 26433075231
Status : Not Answered
Chosen Option : --

Section : Part-D-English

Q.1 Select the most appropriate synonym of the given word.

Counsel

- Ans 1. Slim
 2. Advice
 3. Minister
 4. Scintillate

Question ID : 26433088129
Status : Answered
Chosen Option : 2

Q.2 Select the most appropriate ANTONYM of the given word.

Protest

- Ans 1. Support
 2. Notice
 3. Provide
 4. Assert

Question ID : 26433090787
Status : Answered
Chosen Option : 1

Q.3 Select the most appropriate synonym of the given word.

Plead

- Ans
- 1. Mourn
 - 2. Reject
 - 3. Beseech
 - 4. Welcome

Question ID : 26433072190
Status : Answered
Chosen Option : 3

Q.4 Select the most appropriate ANTONYM of the underlying word in the given sentence and complete the sentence.

In the debate competition he scored less due to his banal arguments, while his opponent won because of his _____ arguments.

- Ans
- 1. pure
 - 2. timid
 - 3. novel
 - 4. weary

Question ID : 26433084710
Status : Answered
Chosen Option : 4

Q.5 Select the most appropriate ANTONYM of the given word.

Blank

- Ans
- 1. Valuate
 - 2. Trembled
 - 3. Filled
 - 4. Filed

Question ID : 26433066090
Status : Answered
Chosen Option : 3

Q.6 Select the most appropriate option that can substitute the underlined segment in the given sentence.

The reign of Akbar was the one glorious periods in Indian history.

- Ans
- 1. was one of the glorious periods
 - 2. were one of the glorious period
 - 3. was one glorious periods
 - 4. was one of the glorious period

Question ID : 26433092286
Status : Answered
Chosen Option : 1

Q.7 Select the most appropriate option to fill in the blank.

Mike talks in an American _____.

- Ans
- 1. assent
 - 2. accent
 - 3. ascend
 - 4. ascent

Question ID : 26433084618
Status : Answered
Chosen Option : 4

Q.8 The following sentence has been divided into parts. One of them may contain an error. Select the part that contains the error from the given options. If you don't find any error, mark 'No error' as your answer.
He will give you / good advice if / you will ask him.

- Ans
- 1. He will give you
 - 2. you will ask him
 - 3. good advice if
 - 4. No error

Question ID : 26433086359
Status : Answered
Chosen Option : 2

Q.9 Select the most appropriate option that can substitute the underlined segment in the given sentence.

If you not ready with the song, it is better to let them know.

- Ans
- 1. If you could not be ready with the song
 - 2. If you were not ready with the song
 - 3. If you would not be ready with the song
 - 4. If you are not ready with the song

Question ID : 26433091871
Status : Answered
Chosen Option : 4

Q.10 Select the INCORRECTLY spelt word.

- Ans
- 1. Theoretical
 - 2. Administration
 - 3. Amplefication
 - 4. Interpretation

Question ID : 26433073509
Status : Answered
Chosen Option : 3

Q.11 Select the INCORRECTLY spelt word.

Ans 1. Reluctant

2. Cautious

3. Ordinary

4. Slippery

Question ID : 26433073504

Status : Answered

Chosen Option : 1

Q.12 Select the most appropriate meaning of the given idiom.

Spill the beans

Ans 1. To swallow beans curry

2. Tell something that should be kept secret

3. To spit the bitter fruits

4. To hide important information

Question ID : 26433072577

Status : Answered

Chosen Option : 2

Q.13 Select the most appropriate synonym of the given word to fill in the blank in the sentence.

Daunt

My coach said, "Failures didn't _____ the hero."

Ans 1. brave

2. moralize

3. discourage

4. hopeless

Question ID : 26433060556

Status : Answered

Chosen Option : 3

Q.14 Select the most appropriate meaning of the given idiom.

Back to square one

Ans 1. To escape

2. To hope something happens the way you want it to

3. To be treated badly

4. Having to start all over again

Question ID : 26433072671

Status : Answered

Chosen Option : 4

Q.15 Select the most appropriate option that can substitute the underlined segment in the given sentence.

He's in and out in town making plans.

- Ans
- 1. out and beside
 - 2. with and out
 - 3. out and about
 - 4. east and west

Question ID : 26433088508

Status : Answered

Chosen Option : 3

Comprehension:

In the following passage, some words have been deleted. Read the passage carefully and select the most appropriate option to fill in each blank.

Isolation and loneliness (1) _____ by the Covid-19 pandemic and lockdown policies negatively (2) _____ the mental health of the public throughout the entire globe. These result in an increase in emotional (3) _____, (4) _____ of hopelessness and extreme anxiety, which are (5) _____ by variations in emotional responses and style of living.

SubQuestion No : 16

Q.16 Select the most appropriate option to fill in blank number 1.

- Ans
- 1. built
 - 2. constructed
 - 3. caused
 - 4. prepared

Question ID : 26433091733

Status : Answered

Chosen Option : 3

Comprehension:

In the following passage, some words have been deleted. Read the passage carefully and select the most appropriate option to fill in each blank.

Isolation and loneliness (1) _____ by the Covid-19 pandemic and lockdown policies negatively (2) _____ the mental health of the public throughout the entire globe. These result in an increase in emotional (3) _____, (4) _____ of hopelessness and extreme anxiety, which are (5) _____ by variations in emotional responses and style of living.

SubQuestion No : 17

Q.17 Select the most appropriate option to fill in blank number 2.

- Ans
- 1. shown
 - 2. did
 - 3. formed
 - 4. impacted

Question ID : 26433091734

Status : Answered

Chosen Option : 4

Comprehension:

In the following passage, some words have been deleted. Read the passage carefully and select the most appropriate option to fill in each blank.

Isolation and loneliness (1) _____ by the Covid-19 pandemic and lockdown policies negatively (2) _____ the mental health of the public throughout the entire globe. These result in an increase in emotional (3) _____, (4) _____ of hopelessness and extreme anxiety, which are (5) _____ by variations in emotional responses and style of living.

SubQuestion No : 18

Q.18 Select the most appropriate option to fill in blank number 3.

- Ans 1. stress
 2. anxiety
 3. death
 4. state

Question ID : 26433091735
Status : Answered
Chosen Option : 2

Comprehension:

In the following passage, some words have been deleted. Read the passage carefully and select the most appropriate option to fill in each blank.

Isolation and loneliness (1) _____ by the Covid-19 pandemic and lockdown policies negatively (2) _____ the mental health of the public throughout the entire globe. These result in an increase in emotional (3) _____, (4) _____ of hopelessness and extreme anxiety, which are (5) _____ by variations in emotional responses and style of living.

SubQuestion No : 19

Q.19 Select the most appropriate option to fill in blank number 4.

- Ans 1. feelings
 2. notion
 3. idea
 4. concept

Question ID : 26433091736
Status : Answered
Chosen Option : 1

Comprehension:

In the following passage, some words have been deleted. Read the passage carefully and select the most appropriate option to fill in each blank.

Isolation and loneliness (1) _____ by the Covid-19 pandemic and lockdown policies negatively (2) _____ the mental health of the public throughout the entire globe. These result in an increase in emotional (3) _____, (4) _____ of hopelessness and extreme anxiety, which are (5) _____ by variations in emotional responses and style of living.

SubQuestion No : 20

Q.20 Select the most appropriate option to fill in blank number 5.

- Ans 1. accompanied
 2. preserved
 3. guarded
 4. surrounded

Question ID : 26433091737
Status : Answered
Chosen Option : 4

Section : Part-D-Hindi

Q.1 'विश्वस्त' शब्द के लिए उचित वाक्यांश है-

- Ans 1. जिस पर विश्वास न किया गया हो
 2. जिस पर शक किया गया हो
 3. जिसे बहुत याद किया गया हो
 4. जिस पर विश्वास किया गया हो

Question ID : 26433065872
Status : Not Answered
Chosen Option : --

Q.2 निम्नलिखित वाक्यांश के लिए उपयुक्त सार्थक शब्द क्या होगा?
जिसे पढ़ना-लिखना आता हो

- Ans 1. साक्षर
 2. प्रधान
 3. पढ़ाकू
 4. विद्वान

Question ID : 26433065752
Status : Not Answered
Chosen Option : --

Q.3 निम्नलिखित में से कौन-सा वाक्य संज्ञा के प्रयोग की दृष्टि से शुद्ध है?

- Ans 1. राहुल बचपने में बहुत शरारती था।
 2. राहुल बचपने में बड़ा शरारती था।
 3. राहुल का बचपनत्व बहुत शरारती था।
 4. राहुल बचपन में बहुत शरारती था।

Question ID : 26433066961
Status : Not Answered
Chosen Option : --

Q.4 'प्रकृति कुपित होकर अपना _____ रूप दिखाती है।' रिक्त स्थान की पूर्ति उचित शब्द द्वारा कीजिए।

- Ans
- 1. अहितकारी
 - 2. विनाशकारी
 - 3. कल्याणकारी
 - 4. निर्माणकारी

Question ID : 26433069682
Status : Not Answered
Chosen Option : --

Q.5 'स्वजाति' के विपरीतार्थक शब्द का चयन कर निम्न वाक्य पूर्ण कीजिए।
_____ व्यक्ति से नफरत न करें।

- Ans
- 1. विजाति
 - 2. सुमति
 - 3. प्रजाति
 - 4. संपत्ति

Question ID : 26433063090
Status : Not Answered
Chosen Option : --

Q.6 विकल्पों में दिए गए किस वाक्य में निम्न शब्द के पर्यायवाची शब्द का प्रयोग हुआ है?
तालाब

- Ans
- 1. सरिता सूखी है।
 - 2. मेघ फट पड़े।
 - 3. पंक में कमल खिला है।
 - 4. जलाशय में कमल खिला है।

Question ID : 26433066934
Status : Not Answered
Chosen Option : --

Q.7 निम्नलिखित वाक्य के किस पद में त्रुटि है?
मैंने सुइ, कंधि, दर्पण और पुस्तकें मोल लीं।

- Ans
- 1. मैंने, लीं
 - 2. दर्पण, पुस्तकें
 - 3. सुइ, कंधि
 - 4. और, मोल

Question ID : 26433063067
Status : Not Answered
Chosen Option : --

Q.8 निम्नलिखित में से अशुद्ध वाक्य कौन-सा है?

- Ans
- 1. निशांत होनहार लड़का है।
 - 2. वह नित्य गाने की कसरत करता है।
 - 3. पल्लवी कल मुंबई जाएगी।
 - 4. हमें प्रतिदिन व्यायाम करना चाहिए।

Question ID : 26433066986
Status : Not Answered
Chosen Option : --

Q.9 "तुम उसे गालियाँ क्यों निकाल रहे हो?"
उपरोक्त वाक्य में क्रिया सम्बन्धी त्रुटि पहचानकर निम्नलिखित में से शुद्ध वाक्य का चयन कीजिए।

- Ans
- 1. तुम उसे गालियाँ क्यों दे रहे हो?
 - 2. तुम उसे गालियाँ क्यों बोल रहे हो?
 - 3. तुम उसे गालियाँ क्यों बता रहे हो?
 - 4. तुम उसे गालियाँ क्यों कह रहे हो?

Question ID : 26433066974
Status : Not Answered
Chosen Option : --

Q.10 'मक्खी मारना' मुहावरे का क्या अर्थ है?

- Ans
- 1. इधर-उधर करना
 - 2. बेकार बैठे रहना
 - 3. मक्खियों को उड़ाना
 - 4. परेशान करना

Question ID : 26433066807
Status : Not Answered
Chosen Option : --

Q.11 'जो सिद्ध या पूरा किया जा सके' इस वाक्यांश के लिए सार्थक शब्द है -

- Ans
- 1. इच्छा
 - 2. अभिलाषा
 - 3. साध्य
 - 4. गंतव्य

Question ID : 26433062333
Status : Not Answered
Chosen Option : --

Q.12 निम्नलिखित मुहावरे में कौन सा शब्द अशुद्ध है?
सौ लकड़हारे की एक लोहार की

- Ans 1. लकड़हारे
 2. एक
 3. सौ
 4. लोहार

Question ID : 26433062814
Status : Not Answered
Chosen Option : --

Q.13 रेखांकित शब्द के विलोम से दिए गए वाक्य के रिक्त स्थान की पूर्ति कीजिए।
उत्तम प्रकृति के लोग सम्मानित होते हैं किंतु दुष्ट _____।

- Ans 1. असहनीय
 2. लांछित
 3. निर्लज्ज
 4. अपमानित

Question ID : 26433085004
Status : Not Answered
Chosen Option : --

Q.14 मेरी शिमला जाने की बड़ी इच्छा है।
उपरोक्त वाक्य में रेखांकित शब्द के उचित पर्यायवाची शब्द का चयन विकल्पों में से कीजिए।

- Ans 1. अतुल
 2. अभिलाषा
 3. स्मृति
 4. प्रेम

Question ID : 26433079721
Status : Not Answered
Chosen Option : --

Q.15 विकल्पों में से कौन सा शब्द निम्न वाक्य के रेखांकित शब्द के लिए सर्वाधिक उपयुक्त होगा?
'सीता राम की स्त्री थी'

- Ans 1. महिला
 2. पत्नी
 3. नायिका
 4. औरत

Question ID : 26433066712
Status : Not Answered
Chosen Option : --

Comprehension:

निम्नलिखित गद्यांश में से कुछ शब्द हटा दिए गए हैं। दिए गए विकल्पों की सहायता से रिक्त स्थानों की पूर्ति कीजिए। प्रत्येक संख्या के लिए उपयुक्त विकल्प का चयन कीजिए।
एक बार मैं बस में 1. _____ कर रहा था। मेरे साथ मेरी पत्नी और तीन बच्चे 2. _____ थे। बस में कुछ खराबी थी, रुक-रुक कर चलती थी। गंतव्य से कोई आठ 3. _____ पहले ही एक निर्जन सुनसान स्थान में बस ने जवाब दे दिया। रात के कोई दस 4. _____ होंगे। बस में यात्री घबरा गए। कंडक्टर उतर गया 5. _____ एक साइकिल लेकर चलता बना।

SubQuestion No : 16

Q.16 रिक्त स्थान 1 की पूर्ति के लिए सर्वाधिक उपयुक्त विकल्प का चयन कीजिए।

- Ans
- 1. खेल
 - 2. आराम
 - 3. भजन
 - 4. यात्रा

Question ID : 26433079698

Status : Not Answered

Chosen Option : --

Comprehension:

निम्नलिखित गद्यांश में से कुछ शब्द हटा दिए गए हैं। दिए गए विकल्पों की सहायता से रिक्त स्थानों की पूर्ति कीजिए। प्रत्येक संख्या के लिए उपयुक्त विकल्प का चयन कीजिए।
एक बार मैं बस में 1. _____ कर रहा था। मेरे साथ मेरी पत्नी और तीन बच्चे 2. _____ थे। बस में कुछ खराबी थी, रुक-रुक कर चलती थी। गंतव्य से कोई आठ 3. _____ पहले ही एक निर्जन सुनसान स्थान में बस ने जवाब दे दिया। रात के कोई दस 4. _____ होंगे। बस में यात्री घबरा गए। कंडक्टर उतर गया 5. _____ एक साइकिल लेकर चलता बना।

SubQuestion No : 17

Q.17 रिक्त स्थान 2 की पूर्ति के लिए सर्वाधिक उपयुक्त विकल्प का चयन कीजिए।

- Ans
- 1. भर
 - 2. तक
 - 3. भी
 - 4. सामने

Question ID : 26433079699

Status : Not Answered

Chosen Option : --

Comprehension:

निम्नलिखित गद्यांश में से कुछ शब्द हटा दिए गए हैं। दिए गए विकल्पों की सहायता से रिक्त स्थानों की पूर्ति कीजिए। प्रत्येक संख्या के लिए उपयुक्त विकल्प का चयन कीजिए।
एक बार मैं बस में 1. _____ कर रहा था। मेरे साथ मेरी पत्नी और तीन बच्चे 2. _____ थे। बस में कुछ खराबी थी, रुक-रुक कर चलती थी। गंतव्य से कोई आठ 3. _____ पहले ही एक निर्जन सुनसान स्थान में बस ने जवाब दे दिया। रात के कोई दस 4. _____ होंगे। बस में यात्री घबरा गए। कंडक्टर उतर गया 5. _____ एक साइकिल लेकर चलता बना।

SubQuestion No : 18

Q.18 रिक्त स्थान 3 की पूर्ति के लिए सर्वाधिक उपयुक्त विकल्प का चयन कीजिए।

- Ans
- 1. किलो
 - 2. मिलीमीटर
 - 3. किलोमीटर
 - 4. सेंटीमीटर

Question ID : 26433079700

Status : Not Answered

Chosen Option : --

Comprehension:

निम्नलिखित गद्यांश में से कुछ शब्द हटा दिए गए हैं। दिए गए विकल्पों की सहायता से रिक्त स्थानों की पूर्ति कीजिए। प्रत्येक संख्या के लिए उपयुक्त विकल्प का चयन कीजिए।
एक बार मैं बस में 1. _____ कर रहा था। मेरे साथ मेरी पत्नी और तीन बच्चे 2. _____ थे। बस में कुछ खराबी थी, रुक-रुक कर चलती थी। गंतव्य से कोई आठ 3. _____ पहले ही एक निर्जन सुनसान स्थान में बस ने जवाब दे दिया। रात के कोई दस 4. _____ होंगे। बस में यात्री घबरा गए। कंडक्टर उतर गया 5. _____ एक साइकिल लेकर चलता बना।

SubQuestion No : 19

Q.19 रिक्त स्थान 4 की पूर्ति के लिए सर्वाधिक उपयुक्त विकल्प का चयन कीजिए।

- Ans
- 1. पद
 - 2. समय
 - 3. बजे
 - 4. गज

Question ID : 26433079701

Status : Not Answered

Chosen Option : --

Comprehension:

निम्नलिखित गद्यांश में से कुछ शब्द हटा दिए गए हैं। दिए गए विकल्पों की सहायता से रिक्त स्थानों की पूर्ति कीजिए। प्रत्येक संख्या के लिए उपयुक्त विकल्प का चयन कीजिए।
एक बार मैं बस में 1. _____ कर रहा था। मेरे साथ मेरी पत्नी और तीन बच्चे 2. _____ थे। बस में कुछ खराबी थी, रुक-रुक कर चलती थी। गंतव्य से कोई आठ 3. _____ पहले ही एक निर्जन सुनसान स्थान में बस ने जवाब दे दिया। रात के कोई दस 4. _____ होंगे। बस में यात्री घबरा गए। कंडक्टर उतर गया 5. _____ एक साइकिल लेकर चलता बना।

SubQuestion No : 20

Q.20 रिक्त स्थान 5 की पूर्ति के लिए सर्वाधिक उपयुक्त विकल्प का चयन कीजिए।

- Ans 1. और
 2. क्योंकि
 3. परंतु
 4. किंतु

Question ID : 26433079702

Status : Not Answered

Chosen Option : --

WWW.GOVtJOBSALERT.COM