

Constable GD in CAPFs SSF Rifleman GD in Assam Rifles and Sepoy in NCB Examination 2022

Roll Number	www.govtjobsalert.in
Candidate Name	www.govtjobsalert.in
Venue Name	Pawan Ganga Educational Centre 1
Exam Date	13/01/2023
Exam Time	9:00 AM - 10:00 AM
Subject	Constable GD Examination 2022

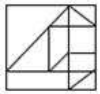
Section : Part-A-General Intelligence and Reasoning

Q.1 Select the letter-cluster from among the given options that can replace the question mark (?) in the following series.
TDKV, MWOZ, FPSD, ? , RBAL

- Ans
- 1. YUXL
 - 2. TPSJ
 - 3. YDHX
 - 4. YIWH

Question ID : 26433074750
Status : Answered
Chosen Option : 4

Q.2 Select the option figure that is embedded in the given figure (rotation is NOT allowed).



- Ans
- 1.
 - 2.
 - 3.
 - 4.

Question ID : 26433069487
Status : Answered
Chosen Option : 2

Q.3 Select the correct mirror image of the given combination when the mirror is placed at 'PQ' as shown below.

\OITR#36789@ |
P
Q

- Ans
- ✓ 1. @e87ae#ЯTIO/
 - ✗ 2. @8e7ae#ЯTIO\
 - ✗ 3. @8e7ae#ЯTIO/
 - ✗ 4. @e87ae#ЯTIO\

Question ID : 26433082747
Status : Answered
Chosen Option : 1

Q.4 Which option represents the correct order of the given words as they would appear in the English dictionary?

1. Tasty
2. Tackle
3. Tamarind
4. Tadpole
5. Tagline

- Ans
- ✗ 1. 4,3,2,5,1
 - ✗ 2. 4,3,2,1,5
 - ✓ 3. 2,4,5,3,1
 - ✗ 4. 2,4,3,5,1

Question ID : 26433069276
Status : Answered
Chosen Option : 3

Q.5 Six students are sitting around a circular table facing the centre. Marshal is sitting second to the left of Sandra. Carol is sitting second to the right of Sandra. Shashi is the immediate neighbour of Sandra and Carol. Sahil is sitting third to the left of Sandra. Jade is sitting third to the left of Carol. Who is sitting between Marshal and Carol?

- Ans
- ✓ 1. Sahil
 - ✗ 2. Sandra
 - ✗ 3. Jade
 - ✗ 4. Shashi

Question ID : 26433081781
Status : Not Answered
Chosen Option : --

Q.6 Six people J, K, L, M, N and O are sitting in a straight row, facing north. O and N are sitting at the extreme ends of the line. There are only three people to the right of K and only three people to the left of J. O is sitting second to the left of K. M is sitting in between J and N. Who is sitting in between O and K?

- Ans
- 1. M
 - 2. L
 - 3. J
 - 4. N

Question ID : 26433056045
Status : Answered
Chosen Option : 2

Q.7 'Flow' is related to 'Stagnant' in the same way as 'Fall' is related to '_____'.
(The words must be considered as meaningful English words and must not be related to each other based on the number of letters/number of consonants/vowels in the word)

- Ans
- 1. Rise
 - 2. Drop
 - 3. Market
 - 4. Static

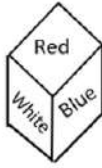
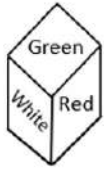
Question ID : 26433057753
Status : Answered
Chosen Option : 4

Q.8 In a certain code language BANTER is written as 'EZQSHQ' and HAVEN is written as 'KZYDQ'. How will ADVENT be written in the same code language?

- Ans
- 1. DCYDQS
 - 2. DCZEPU
 - 3. DBYCOS
 - 4. DBYDPS

Question ID : 26433076683
Status : Answered
Chosen Option : 1

Q.9 Two different positions of the same dice are shown having colours- Red, Blue, Pink, Green, white and black.
Find the colour on the face opposite to the face showing 'Green'.



- Ans
- 1. Black
 - 2. White
 - 3. Pink
 - 4. Blue

Question ID : 26433085517
Status : Answered
Chosen Option : 3

Q.10 In a certain code language,
'A + B' means 'A is the mother of B',
'A - B' means 'A is the father of B',
'A x B' means 'A is the brother of B',
'A & B' means 'A is the son of B' and
'A @ B' means 'A is the sister of B'.
How is G related to N if N x P @ Q - L x M & G?

- Ans
- 1. Brother's wife
 - 2. Sister
 - 3. Wife
 - 4. Mother

Question ID : 26433070369
Status : Not Answered
Chosen Option : --

Q.11 Which two signs should be interchanged to make the below equation mathematically correct?
 $35 + 21 - 168 \div 28 \times 7 = 154$

- Ans
- 1. - and +
 - 2. + and ÷
 - 3. × and -
 - 4. ÷ and -

Question ID : 264330117522
Status : Not Answered
Chosen Option : --

Q.12 Which of the following letters will replace the question mark (?) and complete the following letter series?
D, B, X, R, J, ?

- Ans 1. A
 2. Y
 3. Z
 4. X

Question ID : 26433067290
Status : Answered
Chosen Option : 3

Q.13 Three statements are given followed by three conclusions numbered I, II and III. Assuming the statements to be true, even if they seem to be at variance with commonly known facts, decide which of the conclusions logically follow(s) from the statements.

Statements:

- All tubes are pipes.
- All switches are pipes.
- All pipes are boards.

Conclusions:

- I. All switches are boards.
- II. All boards are tubes.
- III. Some boards are switches.

- Ans 1. Only conclusions I and II follow
 2. Only conclusions I and III follow
 3. Only conclusions II and III follow
 4. All conclusions follow

Question ID : 26433082302
Status : Answered
Chosen Option : 1

Q.14 In a code language, 'DEVOTE' is written as '71' and 'DIALECT' is written as '54'. How will 'DIESEL' be written in that language?

- Ans 1. 54
 2. 53
 3. 47
 4. 49

Question ID : 26433068934
Status : Answered
Chosen Option : 1

Q.15 Which two signs should be interchanged to make the below equation mathematically correct?

$$45 + 3 \div 27 - 9 \times 18 = 14$$

- Ans 1. + and -
 2. \times and +
 3. \div and +
 4. \div and \times

Question ID : 264330114188
Status : Not Answered
Chosen Option : --

Q.16 Which of the following numbers will replace the question mark (?) in the given series?
2, ?, 10, 14, 18, 22, 26, 30

Ans 1. 6

2. 7

3. 8

4. 5

Question ID : 26433069054

Status : Answered

Chosen Option : 1

Q.17 Select the option that is related to the fourth term in the same way as the first term is related to the second term and the fifth term is related to the sixth term.
18 : 30 :: ? : 66 :: 54 : 102

Ans 1. 36

2. 46

3. 42

4. 38

Question ID : 26433069085

Status : Answered

Chosen Option : 1

Q.18 Select the option that is related to the third word in the same way as the second word is related to the first word.
(The words must be considered as meaningful English words and must not be related to each other based on the number of letters/number of consonants/vowels in the word)
Poem : Poet :: Shoes : ?

Ans 1. Cobbler

2. Carpenter

3. Doctor

4. Chef

Question ID : 26433079471

Status : Answered

Chosen Option : 1

Q.19 Which figure should replace the question mark (?) if the series were to be continued?

O	B	K	L	
B L A C K	O C L A S	L O C S A	K S O C B	?
	S	K	B	A

Ans

✗ 1.

A
S O K B C
L

✗ 2.

A
S O C B K
L

✗ 3.

A
B K S O C
L

✓ 4.

A
O K S B C
L

Question ID : 26433076628
Status : Answered
Chosen Option : 3

Q.20 Which of the following numbers will replace the question mark (?) in the given series?
40, 40, ?, 58, 76, 100, 130

Ans ✓ 1. 46

✗ 2. 55

✗ 3. 70

✗ 4. 45

Question ID : 26433069402
Status : Answered
Chosen Option : 1

Q.1 The _____ has the authority to regulate microfinance in India.

- Ans
- 1. State Bank of India
 - 2. Reserve Bank of India
 - 3. Union Bank of India
 - 4. Rural Bank of India

Question ID : 264330115309
Status : Not Answered
Chosen Option : --

Q.2 Which was not the part of Original Indian Constitution that was adopted in the year 1950?

- Ans
- 1. Emergency Provisions
 - 2. Fundamental Duties
 - 3. Directive Principles of State Policy
 - 4. Fundamental Rights

Question ID : 264330115627
Status : Not Answered
Chosen Option : --

Q.3 Bastar Rebellion in central India broke out in _____.

- Ans
- 1. 1905
 - 2. 1910
 - 3. 1915
 - 4. 1918

Question ID : 264330115716
Status : Not Answered
Chosen Option : --

Q.4 Identify the energy used in cooking food.

- Ans
- 1. Wind energy
 - 2. Electrical energy
 - 3. Chemical energy
 - 4. Mechanical energy

Question ID : 26433087837
Status : Not Answered
Chosen Option : --

Q.5 Pawan Hans Helicopters Limited provides helicopter services to whom in its off-shore operations?

- Ans
- 1. Hindustan Petroleum Corporation Limited
 - 2. Indian Oil
 - 3. Oil and Natural Gas Corporation
 - 4. Oil India and Reliance Industries

Question ID : 264330115556
Status : Not Answered
Chosen Option : --

Q.6 Which of the following is a type of earthquake wave?

- Ans
- 1. D-waves
 - 2. P-waves
 - 3. B-waves
 - 4. C-waves

Question ID : 264330115992
Status : Not Answered
Chosen Option : --

Q.7 Which of the following famous bollywood personalities won the by-elections in April 2022 to become the Member of Parliament from Asansol, West Bengal?

- Ans
- 1. Sonu Sood
 - 2. Babul Supriyo
 - 3. Shatrughan Sinha
 - 4. Jaya Bachchan

Question ID : 264330115012
Status : Not Answered
Chosen Option : --

Q.8 Indian Olympic Association was formed in which year?

- Ans
- 1. 1927
 - 2. 1934
 - 3. 1928
 - 4. 1943

Question ID : 264330116266
Status : Answered
Chosen Option : 2

Q.9 What is the timeframe of the second five year plan of India?

- Ans
- 1. 1951 - 56
 - 2. 1957 - 62
 - 3. 1948 - 53
 - 4. 1956 - 61

Question ID : 26433054611
Status : Answered
Chosen Option : 2

Q.10 _____ five year plan was launched with specific objective of "Growth with Stability"

- Ans
- 1. Eighth
 - 2. First
 - 3. Second
 - 4. Fourth

Question ID : 264330115373
Status : Not Answered
Chosen Option : --

Q.11 As of November 2022, who among the following is the Governor of Uttar Pradesh, India?

- Ans
- 1. Arif Mohammad Khan
 - 2. Ram Naik
 - 3. Sudarshan Agrawal
 - 4. Anandiben Patel

Question ID : 264330114907
Status : Not Answered
Chosen Option : --

Q.12 When was the Supreme Court of India inaugurated?

- Ans
- 1. 26 January 1952
 - 2. 28 January 1952
 - 3. 26 January 1948
 - 4. 28 January 1950

Question ID : 26433074907
Status : Not Answered
Chosen Option : --

Q.13 Which of the following folk dances is associated with Jammu and Kashmir?

- Ans 1. Kud
 2. Jawara
 3. Bhavai
 4. Hojagiri

Question ID : 26433070840
Status : Answered
Chosen Option : 1

Q.14 The motto of Asian Games 2018 was _____.

- Ans 1. Diversity Shines Here
 2. Play for Peace, Progress and Prosperity
 3. Ever Onward
 4. Energy of Asia

Question ID : 264330115959
Status : Not Answered
Chosen Option : --

Q.15 Under which scheme, an overdraft (OD) facility up to Rs. 10,000 is available to eligible account holders?

- Ans 1. Pradhan Mantri Kaushal Vikas Yojana
 2. Pradhan Mantri Suraksha Bima Yojana
 3. Pradhan Mantri Jan-Dhan Yojana
 4. Skill India Mission

Question ID : 264330116198
Status : Not Answered
Chosen Option : --

Q.16 Who among the following was the last king of the Mauryan empire?

- Ans 1. Ashoka
 2. Bindusara
 3. Chandragupta
 4. Brihadratha

Question ID : 264330115445
Status : Not Answered
Chosen Option : --

Q.17 Which Indian state has the second lowest literacy rate as per the Census report 2011?

- Ans 1. Himachal Pradesh
 2. Mizoram
 3. Rajasthan
 4. Arunachal Pradesh

Question ID : 264330116061
Status : Answered
Chosen Option : 4

Q.18 If the proportion of fine particles is relatively higher in soil, then it is called _____ soil.

- Ans 1. sandy
 2. watery
 3. clayey
 4. loamy

Question ID : 264330115194
Status : Not Answered
Chosen Option : --

Q.19 सेकेरनेई, नागालैंड का एक प्रमुख त्यौहार है, यह एक _____ दिवसीय उत्सव है, जो शुद्धि और पवित्रता का प्रतीक है।

- Ans 1. 10-15
 2. 9-13
 3. 7-8
 4. 8-10

Question ID : 264330115093
Status : Not Answered
Chosen Option : --

Q.20 Which of the following artist has received the Soviet Land Nehru Award?

- Ans 1. Thiruvaidaimarudur Kuppiah Kalyanasundaram
 2. Pandit Birju Maharaj
 3. Krishna Ella
 4. Mahaboob Subhani

Question ID : 264330115852
Status : Not Answered
Chosen Option : --

Section : Part-C-Elementary Mathematics

Q.1 A boat's speed in still water is 9 km/h, while the stream's speed is 1.5 km/h. A man rows to a location 105 km away and then returns to his starting position. The total time taken by him is:

- Ans 1. 20.5 hours
 2. 24 hours
 3. 19 hours
 4. 22 hours

Question ID : 26433065296
Status : Not Answered
Chosen Option : --

Q.2 A retailer purchased some goods for ₹1,280 and he sold one-third at a loss of 15%. At what gain percentage should the remaining be sold, so as to gain 15% on the whole transaction?

- Ans
- 1. 32 Percent
 - 2. 30 Percent
 - 3. 28 Percent
 - 4. 31 Percent

Question ID : 26433080166
Status : Not Answered
Chosen Option : --

Q.3 A sofa-set is offered for sale at three successive discounts of 10%, 5%, and 2%. Find the net selling price of the sofa-set, if its marked price is ₹18,000.

- Ans
- 1. ₹16,920.28
 - 2. ₹16,084.00
 - 3. ₹15,082.20
 - 4. ₹17,230.00

Question ID : 26433076327
Status : Not Answered
Chosen Option : --

Q.4 Ratio of Copper and Gold in first and second alloy are 3 : 4 and 2 : 5 respectively. 14 kg of the first alloy is mixed with 21 kg of the second alloy. Find the ratio of Copper and Gold, respectively, in the new mixture.

- Ans
- 1. 23 : 12
 - 2. 17 : 13
 - 3. 5 : 9
 - 4. 12 : 23

Question ID : 26433076030
Status : Not Answered
Chosen Option : --

Q.5 P can do a piece of work in 200 days. Q and R can do the same work in 100 days. P, Q and R started the work together and they worked together for 40 days and then Q left the work and P and R together finished the remaining work in 40 days. Find the number of days in which Q alone can do the total work.

- Ans
- 1. 180 days
 - 2. 200 days
 - 3. 160 days
 - 4. 210 days

Question ID : 264330116882
Status : Not Answered
Chosen Option : --

Q.6 If a shopkeeper offers a 10% discount, he makes a 10% profit. Under the same conditions, if he offers a 25% discount, then how much percentage of profit or loss will he get?

- Ans
- 1. 25% loss
 - 2. 20% profit
 - 3. 25% profit
 - 4. 8.33% loss

Question ID : 26433076035
Status : Not Answered
Chosen Option : --

Q.7 Find the greatest possible length which can be used to measure exactly the lengths 8 m 75 cm, 1.75 m and 12 m 20 cm.

- Ans
- 1. 10 cm
 - 2. 15 cm
 - 3. 5 cm
 - 4. 20 cm

Question ID : 26433081467
Status : Not Answered
Chosen Option : --

Q.8 Sohan borrowed money at the rate of 20% per annum on compound interest, interest was compounding annually and he paid it in three equal instalments, each instalment was to be paid at the end of every year. If each instalment was for ₹1,250, then the money borrowed by Sohan was (nearest integral value):

- Ans
- 1. ₹2,633
 - 2. ₹2,466
 - 3. ₹4,660
 - 4. ₹4,860

Question ID : 26433090305
Status : Not Answered
Chosen Option : --

Q.9 The difference between simple and compound interests compounded annually on a certain sum of money for 2 years at 4% per annum is Rs.80. The sum (in Rs.) is:

- Ans
- 1. 50,000
 - 2. 45,000
 - 3. 60,000
 - 4. 70,000

Question ID : 26433075240
Status : Answered
Chosen Option : 1

Q.10 The marked price of an article is 25% above its cost price. If it is sold for ₹450 with a profit of 6.4%, then the discount percent is closest to:

- Ans
- 1. 13%
 - 2. 16%
 - 3. 12%
 - 4. 15%

Question ID : 26433080109
Status : Not Answered
Chosen Option : --

Q.11 In an election between A and B, B secured 16,200 votes and defeated A by 8% of the total votes. If there are no invalid votes, what is the difference in votes between A and B?

- Ans
- 1. 2300
 - 2. 2500
 - 3. 2200
 - 4. 2400

Question ID : 26433085435
Status : Not Answered
Chosen Option : --

Q.12 The average of 7 natural numbers is 70. Among them six numbers are 32, 69, 72, 65, 79, 48. What is the seventh number?

- Ans
- 1. 120
 - 2. 135
 - 3. 125
 - 4. 130

Question ID : 26433080285
Status : Answered
Chosen Option : 3

Q.13 The area of a right-angled triangle is 42 cm^2 . If its perpendicular is equal to 10 cm, find the length of its base.

- Ans
- 1. 4.8 cm
 - 2. 4.2 cm
 - 3. 8.4 cm
 - 4. 8.0 cm

Question ID : 26433075278
Status : Answered
Chosen Option : 3

Q.14 The fourth proportional to 3,5,9 is:

- Ans 1. 135
 2. 45
 3. 27
 4. 15

Question ID : 26433073023
Status : Answered
Chosen Option : 4

Q.15 A solid sphere is cut into two equal halves. What is the ratio of the total surface area of each hemisphere to that of the solid sphere?

- Ans 1. 2:3
 2. 1:2
 3. 3:5
 4. 3:4

Question ID : 26433075479
Status : Answered
Chosen Option : 4

Q.16 Find the mean proportional between 256 and 484.

- Ans 1. 360
 2. 323
 3. 352
 4. 552

Question ID : 26433081025
Status : Answered
Chosen Option : 3

Q.17 A car driver is driving car at a speed of 70 km/h and a bus is moving 35 metres ahead of him. After 15 seconds, the bus is 40 metres behind of him. Find the speed of the bus.

- Ans 1. 78 km/h
 2. 52 km/h
 3. 64 km/h
 4. 65 km/h

Question ID : 26433076198
Status : Not Answered
Chosen Option : --

Q.18 A and B can complete a piece of work in 18 days and 12 days, respectively. They work on alternate days till the work gets completed. How long (in days) would it take A and B to complete the work, starting with A on the first day?

- Ans
- 1. 15 days
 - 2. 14 days
 - 3. 16 days
 - 4. 14.5 days

Question ID : 26433075773
Status : Answered
Chosen Option : 4

Q.19 In an election contested by two parties, party A secured 16 percent of the total votes more than party B. If party B got 25200 votes and there are no invalid votes, by how many votes did party B lose the election?

- Ans
- 1. 9600
 - 2. 1800
 - 3. 5400
 - 4. 3600

Question ID : 264330116802
Status : Not Answered
Chosen Option : --

Q.20 Express $0.45\overline{235}$ as a fraction.

- Ans
- 1. $\frac{1419}{99900}$
 - 2. $\frac{14190}{9990}$
 - 3. $\frac{1491}{9990}$
 - 4. $\frac{4519}{9990}$

Question ID : 26433092020
Status : Not Answered
Chosen Option : --

Q.1 Select the most appropriate **ANTONYM** of the word given in brackets to fill in the blank.

The doctor had to go with operation as Raj's condition was very _____ (comical).

- Ans 1. serious
 2. prone
 3. curious
 4. peculiar

Question ID : 26433089749
Status : Answered
Chosen Option : 1

Q.2 Select the **INCORRECTLY** spelt word.

- Ans 1. Flimsy
 2. Etiquette
 3. Supercede
 4. Intercede

Question ID : 26433074001
Status : Answered
Chosen Option : 2

Q.3 Select the most appropriate synonym of the given word to fill in the blank in the sentence.

Yields
Binu's land _____ high quality of wheat and grams.

- Ans 1. touches
 2. subdues
 3. produces
 4. meets

Question ID : 26433060551
Status : Answered
Chosen Option : 3

Q.4 Select the word segment that substitutes (replaces) the bracketed word segment correctly and completes the sentence meaningfully.
Nishtha writes very well, (didn't she)?

- Ans 1. isn't it
 2. wasn't it
 3. doesn't it
 4. doesn't she

Question ID : 26433088797
Status : Answered
Chosen Option : 4

Q.5 Select the most appropriate **ANTONYM** of the given word.

Brittle

- Ans**
- 1. Delicate
 - 2. Bitter
 - 3. Attractive
 - 4. Resilient

Question ID : 26433071975

Status : **Not Attempted and Marked For Review**

Chosen Option : --

Q.6 Select the most appropriate meaning of the given idiom.

Blow one's own trumpet

- Ans**
- 1. To be very keen
 - 2. To be confused
 - 3. To disgrace oneself
 - 4. To praise oneself

Question ID : 26433074057

Status : **Answered**

Chosen Option : 3

Q.7 Select the most appropriate synonym of the given word.

Dazzling

- Ans**
- 1. Brilliant
 - 2. Drizzly
 - 3. Murky
 - 4. Dull

Question ID : 26433073435

Status : **Not Attempted and Marked For Review**

Chosen Option : --

Q.8 The following sentence has been split into four segments. Identify the segment that contains a grammatical error.

While my wife / cooked the food, / I writing / a book.

- Ans**
- 1. a book
 - 2. cooked the food,
 - 3. I writing
 - 4. While my wife

Question ID : 26433086451

Status : **Answered**

Chosen Option : 3

Q.9 Select the most appropriate synonym to substitute the underlined word in the given sentence.

He had created a cocoon of human activities - conversation, interaction, affection - and it filled his life like an overflowing soup bowl.

- Ans
- 1. bundle
 - 2. fabric
 - 3. encasement
 - 4. downy

Question ID : 26433073866

Status : **Not Attempted and Marked For Review**

Chosen Option : --

Q.10 Select the INCORRECTLY spelt word.

- Ans
- 1. Garrulous
 - 2. Simultaneous
 - 3. Technike
 - 4. Reluctant

Question ID : 26433073730

Status : **Answered**

Chosen Option : 3

Q.11 Select the most appropriate ANTONYM of the underlined word to fill in the blank.

He borrowed money from his father and _____ it to his friend to help him.

- Ans
- 1. reckoned
 - 2. beguiled
 - 3. lent
 - 4. beget

Question ID : 26433089069

Status : **Not Attempted and Marked For Review**

Chosen Option : --

Q.12 Select the most appropriate option to fill in the blank.

The manager decided to _____ the meeting, as many of the members were not present.

- Ans
- 1. cut down
 - 2. call off
 - 3. call on
 - 4. carry on

Question ID : 26433073408

Status : **Answered**

Chosen Option : 4

Q.13 Select the most appropriate ANTONYM of the given word.

Applaud

- Ans
- 1. Commend
 - 2. Magnify
 - 3. Approve
 - 4. Denounce

Question ID : 26433072670

Status : **Not Attempted and Marked For Review**

Chosen Option : --

Q.14 Select the appropriate idiom that can replace the underlined phrase in the following sentence.

As he is never on time, he regrets uselessly on missing the flight.

- Ans
- 1. cries wolf
 - 2. finds fault with
 - 3. cries for the moon
 - 4. cries over split milk

Question ID : 26433072516

Status : **Answered**

Chosen Option : 3

Q.15 Select the most appropriate option that can substitute the underlined segment in the given sentence.

VPN allows us to use the internet anonymously to value our safety and our identity.

- Ans
- 1. to derogate our safety
 - 2. to ensure our safety
 - 3. to improve our safety
 - 4. to rationalise our safety

Question ID : 26433096157

Status : **Answered**

Chosen Option : 3

Comprehension:

In the following passage, some words have been deleted. Read the passage carefully and select the most appropriate option to fill in each blank.

Munoo began (1)_____. He felt resentful and disheartened, thinking how he hated his uncle. But he saw that the fellow on the steel horse, who had been the cause of his (2)_____, had come to grief fifty yards ahead, having collided with a calf (3)_____ among the crowds of men and women near the fruit shops at the crossroads. So he walked along reassured, forgetful still but sufficiently cautious, with (4) _____ ahead of him, another on the row of shops, and an occasional glance behind, to see that there was not another steel horse, or bicycle, as the juggler (5)_____ it, following.

SubQuestion No : 16

Q.16 Select the most appropriate option to fill in blank number 1.

- Ans
- 1. cry
 - 2. cried
 - 3. having cried
 - 4. to cry

Question ID : 26433063571

Status : Answered

Chosen Option : 4

Comprehension:

In the following passage, some words have been deleted. Read the passage carefully and select the most appropriate option to fill in each blank.

Munoo began (1)_____. He felt resentful and disheartened, thinking how he hated his uncle. But he saw that the fellow on the steel horse, who had been the cause of his (2)_____, had come to grief fifty yards ahead, having collided with a calf (3)_____ among the crowds of men and women near the fruit shops at the crossroads. So he walked along reassured, forgetful still but sufficiently cautious, with (4) _____ ahead of him, another on the row of shops, and an occasional glance behind, to see that there was not another steel horse, or bicycle, as the juggler (5)_____ it, following.

SubQuestion No : 17

Q.17 Select the most appropriate option to fill in blank number 2.

- Ans
- 1. have punished
 - 2. be punished
 - 3. having punish
 - 4. punishment

Question ID : 26433063572

Status : Answered

Chosen Option : 4

Comprehension:

In the following passage, some words have been deleted. Read the passage carefully and select the most appropriate option to fill in each blank.

Munoo began (1)_____. He felt resentful and disheartened, thinking how he hated his uncle. But he saw that the fellow on the steel horse, who had been the cause of his (2)_____, had come to grief fifty yards ahead, having collided with a calf (3)_____ among the crowds of men and women near the fruit shops at the crossroads. So he walked along reassured, forgetful still but sufficiently cautious, with (4) _____ ahead of him, another on the row of shops, and an occasional glance behind, to see that there was not another steel horse, or bicycle, as the juggler (5)_____ it, following.

SubQuestion No : 18

Q.18 Select the most appropriate option to fill in blank number 3.

- Ans 1. whom strayed about
 2. who strayed about
 3. that strayed
 4. whose strayed about

Question ID : 26433063573

Status : Answered

Chosen Option : 1

Comprehension:

In the following passage, some words have been deleted. Read the passage carefully and select the most appropriate option to fill in each blank.

Munoo began (1)_____. He felt resentful and disheartened, thinking how he hated his uncle. But he saw that the fellow on the steel horse, who had been the cause of his (2)_____, had come to grief fifty yards ahead, having collided with a calf (3)_____ among the crowds of men and women near the fruit shops at the crossroads. So he walked along reassured, forgetful still but sufficiently cautious, with (4) _____ ahead of him, another on the row of shops, and an occasional glance behind, to see that there was not another steel horse, or bicycle, as the juggler (5)_____ it, following.

SubQuestion No : 19

Q.19 Select the most appropriate option to fill in blank number 4.

- Ans 1. one eye in his uncle
 2. one eye on his uncle
 3. one eye about his uncle
 4. one eye with his uncle

Question ID : 26433063574

Status : Not Answered

Chosen Option : --

Comprehension:

In the following passage, some words have been deleted. Read the passage carefully and select the most appropriate option to fill in each blank.

Munoo began (1)_____. He felt resentful and disheartened, thinking how he hated his uncle. But he saw that the fellow on the steel horse, who had been the cause of his (2)_____, had come to grief fifty yards ahead, having collided with a calf (3) _____ among the crowds of men and women near the fruit shops at the crossroads. So he walked along reassured, forgetful still but sufficiently cautious, with (4) _____ ahead of him, another on the row of shops, and an occasional glance behind, to see that there was not another steel horse, or bicycle, as the juggler (5)_____it, following.

SubQuestion No : 20

Q.20 Select the most appropriate option to fill in blank number 5.

- Ans 1. have been called
 2. had called
 3. has called
 4. had been called

Question ID : 26433063575

Status : Answered

Chosen Option : 2

Section : Part-D-Hindi

Q.1 निम्न वाक्यांश के लिए सार्थक शब्द का चयन विकल्पों में से कीजिए।
जिसके पार देखा जा सके।

- Ans 1. पारभासक
 2. पारमासक
 3. पाददर्शन
 4. पारदर्शक

Question ID : 26433066923

Status : Not Answered

Chosen Option : --

Q.2 निम्नलिखित में से कौन सा वाक्य करण कारक का उदाहरण नहीं है?

- Ans 1. वह कलम से पत्र लिख रही थी।
 2. सब ही भाग्य को रोते हैं।
 3. बच्चे गेंद से खेल रहे हैं।
 4. मैंने लाठी से सांप मारा।

Question ID : 26433085034

Status : Not Answered

Chosen Option : --

Q.3 भगवान इंद्र स्वर्ग के राजा हैं।
उपरोक्त वाक्य में प्रयुक्त 'इंद्र' शब्द का पर्याय निम्न में से क्या है?

- Ans 1. खगेश
 2. माधव
 3. इंदु
 4. सुरेश

Question ID : 26433080857
Status : Not Answered
Chosen Option : --

Q.4 निम्नलिखित में से 'पट' का अर्थ क्या नहीं होता है?

- Ans 1. किवाड़
 2. डालना
 3. वस्त्र
 4. पर्दा

Question ID : 26433080944
Status : Not Answered
Chosen Option : --

Q.5 नीचे दिए शब्द के लिए उचित वाक्यांश दिए गए विकल्पों में से चुनिए-
अभूतपूर्व

- Ans 1. जो भेदा न जा सके
 2. जो किसी पर अभियोग लगाए
 3. जिस पर अभियोग लगाया गया हो
 4. जो पहले घटित न हुआ हो

Question ID : 26433062390
Status : Not Answered
Chosen Option : --

Q.6 नीचे दिए गए वाक्यांश के लिए एक शब्द होगा-
जिस पेड़ के पत्ते झड़ गए हों।

- Ans 1. पर्णल
 2. अधेर
 3. अपर्ण
 4. सूखा

Question ID : 26433070065
Status : Not Answered
Chosen Option : --

Q.7 निम्नलिखित वाक्य के रिक्त स्थान में सबसे उपयुक्त मुहावरा क्या होगा?
'अध्यापक को देखते ही वह _____ गया।'

- Ans
- 1. भीगी बिल्ली बन
 - 2. बाजी मार
 - 3. मुहतोड़ जवाब देना
 - 4. पहाड़ टूट

Question ID : 26433066727
Status : Not Answered
Chosen Option : --

Q.8 जो परिश्रम करते हैं, वे सफल होते हैं।
उपरोक्त वाक्य के किस शब्द में वर्तनीगत अशुद्धि है?

- Ans
- 1. सफल
 - 2. करते
 - 3. परिश्रम
 - 4. वाक्य शुद्ध है

Question ID : 26433085062
Status : Not Answered
Chosen Option : --

Q.9 निम्नलिखित विकल्पों में से कौन सा एक वाक्य क्रिया-विशेषण से सम्बन्ध रखता है?

- Ans
- 1. कोई काम न करना।
 - 2. तुम घर जाओ।
 - 3. क्या मैं घर जाऊँ।
 - 4. वह अब धीरे-धीरे चलेगा।

Question ID : 26433062954
Status : Not Answered
Chosen Option : --

Q.10 निम्नलिखित मुहावरे के उचित अर्थ का चयन कीजिए-
अपना किया पाना

- Ans
- 1. कम काम करना
 - 2. अपनी वस्तु पाना
 - 3. कर्म का फल भोगना
 - 4. कुछ न करना

Question ID : 26433065886
Status : Not Answered
Chosen Option : --

Q.11 आकाश में तारे निकले हुए हैं।
उपरोक्त वाक्य में रेखांकित शब्द के विलोम शब्द का चयन विकल्पों में से कीजिए।

- Ans 1. पाताल
 2. आसमान
 3. उदर
 4. वन

Question ID : 26433079640
Status : Not Answered
Chosen Option : --

Q.12 निम्नलिखित वाक्य के किस शब्द में वर्तनीगत अशुद्धि है?
हमारे मन में प्राणी मत्र के लिए करुणा होनी चाहिए।

- Ans 1. प्राणी
 2. हमारे
 3. मत्र
 4. करुणा

Question ID : 26433080929
Status : Not Answered
Chosen Option : --

Q.13 निम्न वाक्य में रेखांकित शब्द को विकल्पों में दिए गए शब्दों में से उचित शब्द से बदलें।
राम की वाणी से परशुराम का अहंकार काफूर हो गया।

- Ans 1. धनुष
 2. दंश
 3. अभियान
 4. दर्प

Question ID : 26433074410
Status : Not Answered
Chosen Option : --

Q.14 मिश्र वाक्य - 'जब मैंने तुम्हें देखा था, तुम रुग्णावस्था में थे।' निम्नलिखित विकल्पों में से इस वाक्य के लिए कौन सा एक उचित सरल वाक्य होगा?

- Ans 1. जब तुम्हें देखा था, तुम रुग्णावस्था में थे।
 2. मैंने तुम्हें रुग्णावस्था में देखा था।
 3. रुग्णावस्था में जब तुम्हें देखा था।
 4. तुम रुग्णावस्था में जब मैंने तुम्हें देखा था।

Question ID : 26433062438
Status : Not Answered
Chosen Option : --

Q.15 'मुंशी प्रेमचन्द द्वारा लिखित कहानियाँ अद्वितीय हैं।' वाक्य में प्रयुक्त 'अद्वितीय' शब्द का अर्थ क्या है?

- Ans
- 1. जिसकी किसी से समानता की जा सके।
 - 2. जो किसी के समान हो।
 - 3. जिसके समान कोई दूसरा न हो।
 - 4. जो बहुत अच्छा हो।

Question ID : 26433069735

Status : Not Answered

Chosen Option : --

Comprehension:

निम्नलिखित गद्यांश में कुछ शब्दों को हटा दिया गया है। दिए गए विकल्पों की सहायता से रिक्त स्थानों की पूर्ति कीजिए।

एक बार 1. _____ बात है। मैं दिल्ली 2. _____ आगरा जा रहा था। जब मैं 3. _____ पर पहुंचा तो गाड़ी चलने वाली थी। मुझे उस गाड़ी में जाना अवश्य था, अतः बिना 4. _____ लिए एक डिब्बे में चढ़ गया। अभी एक स्टेशन ही निकला था कि डिब्बे में 5. _____ आ गया।

SubQuestion No : 16

Q.16 रिक्त स्थान 1 की पूर्ति के लिए सबसे उपयुक्त विकल्प का चयन करें।

- Ans
- 1. कि
 - 2. की
 - 3. कई
 - 4. मिश्र में

Question ID : 264330110939

Status : Not Answered

Chosen Option : --

Comprehension:

निम्नलिखित गद्यांश में कुछ शब्दों को हटा दिया गया है। दिए गए विकल्पों की सहायता से रिक्त स्थानों की पूर्ति कीजिए।

एक बार 1. _____ बात है। मैं दिल्ली 2. _____ आगरा जा रहा था। जब मैं 3. _____ पर पहुंचा तो गाड़ी चलने वाली थी। मुझे उस गाड़ी में जाना अवश्य था, अतः बिना 4. _____ लिए एक डिब्बे में चढ़ गया। अभी एक स्टेशन ही निकला था कि डिब्बे में 5. _____ आ गया।

SubQuestion No : 17

Q.17 रिक्त स्थान 2 की पूर्ति के लिए सबसे उपयुक्त विकल्प का चयन करें।

- Ans
- 1. पर
 - 2. से
 - 3. में
 - 4. को

Question ID : 264330110940

Status : Not Answered

Chosen Option : --

Comprehension:

निम्नलिखित गद्यांश में कुछ शब्दों को हटा दिया गया है। दिए गए विकल्पों की सहायता से रिक्त स्थानों की पूर्ति कीजिए।

एक बार 1. _____ बात है। मैं दिल्ली 2. _____ आगरा जा रहा था। जब मैं 3. _____ पर पहुंचा तो गाड़ी चलने वाली थी। मुझे उस गाड़ी में जाना अवश्य था, अतः बिना 4. _____ लिए एक डिब्बे में चढ़ गया। अभी एक स्टेशन ही निकला था कि डिब्बे में 5. _____ आ गया।

SubQuestion No : 18

Q.18 रिक्त स्थान 3 की पूर्ति के लिए सबसे उपयुक्त विकल्प का चयन करें।

- Ans
- 1. मुंबई
 - 2. हवाई अड्डे
 - 3. स्टेशन
 - 4. मध्य प्रदेश

Question ID : 264330110941
Status : Not Answered
Chosen Option : --

Comprehension:

निम्नलिखित गद्यांश में कुछ शब्दों को हटा दिया गया है। दिए गए विकल्पों की सहायता से रिक्त स्थानों की पूर्ति कीजिए।

एक बार 1. _____ बात है। मैं दिल्ली 2. _____ आगरा जा रहा था। जब मैं 3. _____ पर पहुंचा तो गाड़ी चलने वाली थी। मुझे उस गाड़ी में जाना अवश्य था, अतः बिना 4. _____ लिए एक डिब्बे में चढ़ गया। अभी एक स्टेशन ही निकला था कि डिब्बे में 5. _____ आ गया।

SubQuestion No : 19

Q.19 रिक्त स्थान 4 की पूर्ति के लिए सबसे उपयुक्त विकल्प का चयन करें।

- Ans
- 1. पैसे
 - 2. धन
 - 3. सामान
 - 4. टिकट

Question ID : 264330110942
Status : Not Answered
Chosen Option : --

Comprehension:

निम्नलिखित गद्यांश में कुछ शब्दों को हटा दिया गया है। दिए गए विकल्पों की सहायता से रिक्त स्थानों की पूर्ति कीजिए।

एक बार 1. _____ बात है। मैं दिल्ली 2. _____ आगरा जा रहा था। जब मैं 3. _____ पर पहुंचा तो गाड़ी चलने वाली थी। मुझे उस गाड़ी में जाना अवश्य था, अतः बिना 4. _____ लिए एक डिब्बे में चढ़ गया। अभी एक स्टेशन ही निकला था कि डिब्बे में 5. _____ आ गया।

SubQuestion No : 20

Q.20 रिक्त स्थान 5 की पूर्ति के लिए सबसे उपयुक्त विकल्प का चयन करें।

- Ans
- 1. डॉक्टर
 - 2. टी.टी
 - 3. ड्राईवर
 - 4. चालक

Question ID : 264330110943
Status : Not Answered
Chosen Option : --