

# Constable GD in CAPFs SSF Rifleman GD in Assam Rifles and Sepoy in NCB Examination 2022

|                |  |
|----------------|--|
| Roll Number    | <a href="http://www.govtjobsalert.in">www.govtjobsalert.in</a> |
| Candidate Name | <a href="http://www.govtjobsalert.in">www.govtjobsalert.in</a> |
| Venue Name     | iON Digital Zone iDZ 2 Sector 62                               |
| Exam Date      | 27/01/2023   |
| Exam Time      | 5:15 PM - 6:15 PM  |
| Subject        | Constable GD Examination 2022                                  |

## Section : Part-A-General Intelligence and Reasoning

Q.1 Which letter-cluster will replace the question mark (?) to complete the given series?

DCAB, ?, NMKL, SRPQ, XWUV

- Ans
- 1. EFIH
  - 2. EFHI
  - 3. HIFG
  - 4. IHFG

Question ID : 26433067715

Status : Answered

Chosen Option : 4

Q.2 Which of the following interchanges of signs would make the given equation correct?

$192 \div 16 + 8 \times 25 - 95 = 26$

- Ans
- 1.  $\times$  and  $-$
  - 2.  $-$  and  $+$
  - 3.  $+$  and  $\times$
  - 4.  $+$  and  $+$

Question ID : 26433081085

Status : Answered

Chosen Option : 3

Q.3 Which option represents the correct order of the given words as they would appear in the English dictionary?

- 1 demolish
- 2 demon
- 3 destroy
- 4 decor
- 5 detour

- Ans
- 1. 4,1,2,3,5
  - 2. 4,2,1,5,3
  - 3. 4,5,1,2,3
  - 4. 4,1,3,2,5

Question ID : 26433069287

Status : Answered

Chosen Option : 1

**Q.4** Select the set in which the numbers are related in the same way as are the numbers of the following sets.

(NOTE : Operations should be performed on the whole numbers, without breaking down the numbers into its constituent digits. E.g. 13 – Operations on 13 such as adding/subtracting/multiplying etc. to 13 can be performed. Breaking down 13 into 1 and 3 and then performing mathematical operations on 1 and 3 is not allowed)  
(13, 390, 6)  
(9, 180, 4)

Ans  1. (11, 385, 7)

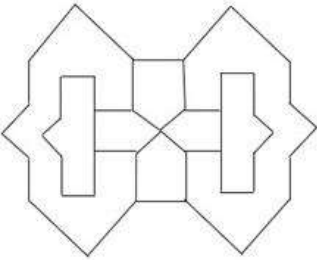
2. (9, 220, 5)

3. (8, 224, 4)

4. (12, 432, 9)

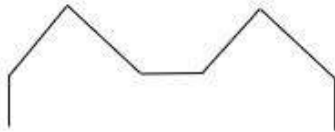
Question ID : 26433076534  
Status : Answered  
Chosen Option : 1

**Q.5** Select the option figure which is embedded in the given figure. (Rotation is NOT allowed)

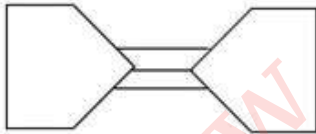


Ans

1.



2.



3.



4.



Question ID : 26433069353  
Status : Answered  
Chosen Option : 1

Q.6 A @ B means 'A is the spouse of B'.  
A & B means 'A is the father of B'.  
A # B means 'A is the mother of B'.  
A % B means 'A is the sister of B'.  
If H @ V & K % Q # F, then how is H related to F?

- Ans
- 1. Mother-in-law
  - 2. Maternal grandmother
  - 3. Paternal grandfather
  - 4. Father-in-law

Question ID : 26433069618  
Status : Answered  
Chosen Option : 1

Q.7 Which of the following numbers will replace the question mark (?) in the given series?  
1, 5, 16, 41, 87, 161, ?

- Ans
- 1. 206
  - 2. 266
  - 3. 226
  - 4. 270

Question ID : 26433069116  
Status : Answered  
Chosen Option : 2

Q.8 Six people M, N, O, P, Q and R are sitting around a circular table, facing the centre. Q is the immediate neighbour of M and R. N is sitting third to the left of Q. O is the immediate neighbour of R and N. R is sitting second to the left of N. Who is sitting between M and N when considered from the right of N?

- Ans
- 1. Q
  - 2. R
  - 3. O
  - 4. P

Question ID : 26433081517  
Status : Answered  
Chosen Option : 4

Q.9 Which of the following numbers will replace the question mark (?) in the given series?  
132, 154, 176, ?, 220

- Ans
- 1. 184
  - 2. 192
  - 3. 198
  - 4. 189

Question ID : 26433076735  
Status : Answered  
Chosen Option : 3

Q.10 In a certain code language, If CAB is coded as 75 and DIP is coded as 52, how will FLY be coded in that language?

- Ans
- 1. 42
  - 2. 38
  - 3. 26
  - 4. 44

Question ID : 26433068064  
Status : Not Answered  
Chosen Option : --

Q.11 Select the option that is related to the fifth letter-cluster in the same way as the second letter-cluster is related to the first letter-cluster and the fourth letter-cluster is related to the third letter-cluster.

ONCE: LLVS :: LIST: OQFD :: PACK: ?

- Ans
- 1. IXVM
  - 2. KZXP
  - 3. KYVM
  - 4. JYWO

Question ID : 26433057499  
Status : Answered  
Chosen Option : 3

Q.12 Which two signs should be interchanged to make the below equation mathematically correct?

$$24 + 36 \times 32 - 8 \div 20 = 148$$

- Ans
- 1. - and +
  - 2. + and ÷
  - 3. + and ×
  - 4. ÷ and -

Question ID : 264330117509  
Status : Answered  
Chosen Option : 4

Q.13 Select the letter-cluster from among the given options that can replace the question mark (?) in the following series.

RBWP, TWYR, VRAT, ?, ZHEX

- Ans
- 1. XMCV
  - 2. FVGW
  - 3. FTXH
  - 4. XCVM

Question ID : 26433074737  
Status : Answered  
Chosen Option : 1

Q.14 Select the correct mirror image of the given figure when the mirror is placed at MN as shown below.

S O B x z F G L

M

N

- Ans
- ✓ 1. L F G z x B O S
  - ✗ 2. L F G z x B O S
  - ✗ 3. L F G z x B O S
  - ✗ 4. L F G z x B O S

Question ID : 26433080809  
Status : Answered  
Chosen Option : 1

Q.15 Three Statements are given followed by Three conclusions numbered I, II and III. Assuming the statements to be true, even if they seem to be at variance with commonly known facts, decide which of the conclusions logically follow(s) from the statements.

Statements:

All books are hard.  
Some hard are stone.  
Some stone are cars.

Conclusions:

I. Some hard are books.  
II. All hard are stone.  
III. Some cars are stone.

- Ans
- ✗ 1. Both conclusions I and II follow.
  - ✗ 2. All conclusions follow.
  - ✓ 3. Both conclusions I and III follow.
  - ✗ 4. Both conclusions II and III follow.

Question ID : 26433074632  
Status : Answered  
Chosen Option : 3

Q.16 Which figure should replace the question mark (?) if the series were to be continued?

|   |   |   |   |   |   |   |   |   |   |   |   |   |
|---|---|---|---|---|---|---|---|---|---|---|---|---|
| F | 3 | C | 3 | C | F | □ | B | 3 | B | 3 | □ | ? |
|   | V |   |   | B |   |   | C |   |   | A |   |   |
|   | B |   |   | V |   |   | A |   |   | C |   |   |
| 8 | □ | A | □ | A | 8 | 8 | V | F | V | F | 8 |   |

Ans

✓ 1.

|   |   |   |
|---|---|---|
| V | A | B |
|   | 3 |   |
|   | F |   |
| 8 | C | □ |

✗ 2.

|   |   |   |
|---|---|---|
| □ | A | 8 |
|   | 3 |   |
|   | F |   |
| B | C | V |

✗ 3.

|   |   |   |
|---|---|---|
| 3 | □ | B |
|   | C |   |
|   | A |   |
| F | 8 | V |

✗ 4.

|   |   |   |
|---|---|---|
| V | F | B |
|   | 3 |   |
|   | A |   |
| 8 | C | □ |

Question ID : 26433076639

Status : Answered

Chosen Option : 1

Q.17 Six students are sitting around a circular table facing the centre. A sits to the immediate left of C. E sits third to the right of D. D is an immediate neighbour of C. B is an immediate neighbour of both E and F. Who is the immediate neighbour of C and E?

Ans ✗ 1. B

✓ 2. A

✗ 3. D

✗ 4. F

Question ID : 26433079502

Status : Answered

Chosen Option : 2

Q.18 In a code language, 'PAPER' is written as 'QCSIW' and 'BOARD' is written as 'CQDVI', how will 'PENCIL' be written in that language?

- Ans
- 1. RGQGNR
  - 2. QGQGNR
  - 3. QGPGNP
  - 4. PGQGNP

Question ID : 26433079390  
Status : Not Answered  
Chosen Option : --

Q.19 Select the option that is related to the third word in the same way as the second word is related to the first word (The words must be considered as meaningful English words and must not be related to each other based on the number of letters/consonants/vowels in the word).

Bouquet : Flower :: Chain : \_\_\_\_\_

- Ans
- 1. Heavy
  - 2. Link
  - 3. Plant
  - 4. Tree

Question ID : 26433078827  
Status : Answered  
Chosen Option : 2

Q.20 Three different positions of the same dice are shown. Find the number on the face opposite the face having '1'.

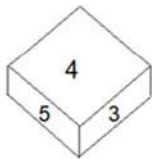


Figure 1

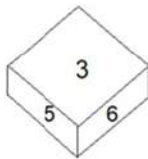


Figure 2

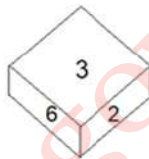


Figure 3

- Ans
- 1. 3
  - 2. 5
  - 3. 6
  - 4. 2

Question ID : 26433089451  
Status : Answered  
Chosen Option : 1

**Q.1 Under which scheme, 5 Crore LPG (Liquified Petroleum Gas) connections were provided to Below Poverty Line (BPL) families?**

- Ans**  1. Pradhan Mantri Ujjwala Yojana  
 2. Sansad Adarsh Gram Yojana  
 3. Skill India Mission  
 4. Beti Bachao Beti Padhao

Question ID : 264330116178  
Status : Answered  
Chosen Option : 1

**Q.2 The winter rain in Tamil Nadu is due to the \_\_\_\_\_.**

- Ans**  1. local air  
 2. north-east trade winds  
 3. south-west trade winds  
 4. temperate cyclone

Question ID : 26433089656  
Status : Answered  
Chosen Option : 2

**Q.3 Mopin is the cultural festival of which Indian state?**

- Ans**  1. Nagaland  
 2. Arunachal Pradesh  
 3. Maharashtra  
 4. Mizoram

Question ID : 264330109604  
Status : Answered  
Chosen Option : 4

**Q.4 Which of the following Articles of the Constitution of India empowers the President of India to pardon in case of punishment or sentence?**

- Ans**  1. Article 66  
 2. Article 72  
 3. Article 78  
 4. Article 65

Question ID : 26433074904  
Status : Answered  
Chosen Option : 1



**Q.5** Kelucharan Mohapatra won recognition in which dance form?

- Ans  1. Kuchipudi  
 2. Sattriya  
 3. Odissi  
 4. Chhau

Question ID : 264330115832  
Status : Not Answered  
Chosen Option : --

**Q.6** \_\_\_\_\_ is an asset pledged by a borrower, to a lender as security for a loan.

- Ans  1. Multilateral  
 2. Bilateral  
 3. Unilateral  
 4. Collateral

Question ID : 264330115296  
Status : Not Answered  
Chosen Option : --

**Q.7** Who has been appointed as the Deputy Election Commissioner of India in October 2022?

- Ans  1. Sunil Arora  
 2. Ajay Bhadoo  
 3. Om Prakash Rawat  
 4. Rajiv Kumar

Question ID : 264330114999  
Status : Answered  
Chosen Option : 3

**Q.8** Who was India's flag-bearer for the closing ceremony of the 18th Asian Games 2018?

- Ans  1. PT Usha  
 2. Rani Rampal  
 3. Hima Das  
 4. Neeraj Chopra

Question ID : 26433092321  
Status : Answered  
Chosen Option : 3

**Q.9** The term towards faster and more inclusive growth was coined in which Five year plan?

- Ans  1. 11th  
 2. 10th  
 3. 8th  
 4. 9th

Question ID : 264330116131  
Status : Not Answered  
Chosen Option : --

**Q.10** Hockey India League (HIL) started in which of the following year?

- Ans  1. 2011  
 2. 2013  
 3. 2012  
 4. 2010

Question ID : 264330116294  
Status : Answered  
Chosen Option : 2

**Q.11** Identify the correct statement about nuclear fission.

- Ans  1. The nucleus of a heavy atom, when bombarded with low-energy neutrons, can be split apart into lighter nuclei.  
 2. Nuclear fission is the coming together of high-energy electrons and low-energy neutrons.  
 3. The nucleus of a low-energy atom, when bombarded with high-energy neutrons, can be split apart into lighter nuclei.  
 4. The nucleus of a low-energy atom, when bombarded with high-energy neutrons, can be split apart into heavier nuclei.

Question ID : 26433096237  
Status : Not Answered  
Chosen Option : --

**Q.12** When did the infamous Jallianwala Bagh incident take place?

- Ans  1. 11 April 1919  
 2. 13 April 1920  
 3. 13 April 1919  
 4. 13 April 1918

Question ID : 264330106573  
Status : Answered  
Chosen Option : 3

Q.13 Identify the Mauryan king who gave up conquest after winning a war.

- Ans
- 1. Bindusara
  - 2. Dashratha
  - 3. Chandragupta Maurya
  - 4. Ashoka

Question ID : 26433085214  
Status : Not Answered  
Chosen Option : --

Q.14 India has second largest \_\_\_\_\_ network in the world, aggregating to about 62.16 lakh km (2020–21).

- Ans
- 1. air
  - 2. road
  - 3. rail
  - 4. sea

Question ID : 264330115543  
Status : Answered  
Chosen Option : 3

Q.15 According to the 2011 census, what is the population density (per square km) of India?

- Ans
- 1. 442
  - 2. 382
  - 3. 198
  - 4. 298

Question ID : 264330116041  
Status : Answered  
Chosen Option : 1

Q.16 As of November 2022, who was the Chief Minister of Gujarat before elections held in 2022?

- Ans
- 1. Bhupendra Patel
  - 2. Vijay Rupani
  - 3. Dhanjibhai Patel
  - 4. Isudan Gadhvi

Question ID : 264330114918  
Status : Answered  
Chosen Option : 1

**Q.17 Under which Five Year Plan in India, the implementation of the Family Planning Programme was amongst the major targets of the Plan?**

- Ans
- 1. Third
  - 2. Fifth
  - 3. Second
  - 4. Fourth

Question ID : 26433082235  
Status : Not Answered  
Chosen Option : --

**Q.18 Which of the following is NOT a source of protein?**

- Ans
- 1. Fish
  - 2. Meat
  - 3. Milk
  - 4. Lemon

Question ID : 264330115215  
Status : Answered  
Chosen Option : 4

**Q.19 The Kathakali dance form originated in which part of India?**

- Ans
- 1. North India
  - 2. South India
  - 3. East India
  - 4. West India

Question ID : 26433086708  
Status : Answered  
Chosen Option : 2

**Q.20 On which date was Andhra Pradesh formed?**

- Ans
- 1. 2 October 1956
  - 2. 26 January 1953
  - 3. 15 August 1953
  - 4. 1 November 1956

Question ID : 26433090660  
Status : Answered  
Chosen Option : 4

Q.1 A and B together can do a piece of work in 21 days. B and C together can do it in 24 days. A and C together can do it in 33 days. In how many days approximately will A, B and C finish it together?

- Ans
- 1. 14 days
  - 2. 17 days
  - 3. 15 days
  - 4. 13 days

Question ID : 264330116862  
Status : Answered  
Chosen Option : 2

Q.2 A and B together can do a piece of work in 20 days, while B alone can finish it in 25 days. How many days will A take to complete the same work alone?

- Ans
- 1. 150
  - 2. 60
  - 3. 100
  - 4. 80

Question ID : 26433079892  
Status : Answered  
Chosen Option : 3

Q.3 Priya allows 5 percent discount on the marked price of her goods and still earns a profit of 18 percent. What is the cost price of an item, if its marked price is Rs. 944?

- Ans
- 1. Rs. 684
  - 2. Rs. 580
  - 3. Rs. 854
  - 4. Rs. 760

Question ID : 264330116747  
Status : Answered  
Chosen Option : 4

Q.4 Find the fourth proportional of 3 hours 20 minutes, 1 hour 50 minutes, and 6 hours 20 minutes.

- Ans
- 1. 3 hours 19 minutes
  - 2. 4 hours 29 minutes
  - 3. 4 hours 19 minutes
  - 4. 3 hours 29 minutes

Question ID : 26433080120  
Status : Answered  
Chosen Option : 4

**Q.5** In a circular race of 5000 m, starting from the same point, the speeds of two contestants A and B are 36 km/h and 54 km/h, respectively. The difference between the time taken (in seconds) to meet for the first time when they are running in the opposite directions and when they are running in the same direction?

- Ans
- 1. 600
  - 2. 800
  - 3. 200
  - 4. 1000

Question ID : 26433066183  
Status : Not Answered  
Chosen Option : --

**Q.6** A ream of 500 pages is bought for ₹280, and packets of 25 pages are made from it. Each packet is sold for ₹18. Find the percentage profit or loss. (Rounded off up to one decimal place).

- Ans
- 1. 24.6% loss
  - 2. 28.6% profit
  - 3. 26.5% profit
  - 4. 24.5% profit

Question ID : 26433081707  
Status : Answered  
Chosen Option : 2

**Q.7** The diameter of a hemisphere is 6 cm. The ratio of the magnitudes of its curved surface area to the total surface area is:

- Ans
- 1. 2 : 3
  - 2. 1 : 2
  - 3. 3 : 5
  - 4. 1 : 3

Question ID : 26433075210  
Status : Answered  
Chosen Option : 1

**Q.8** Find the sum of the digits of the greatest number that can exactly divide 288 and 432.

- Ans
- 1. 12
  - 2. 4
  - 3. 3
  - 4. 9

Question ID : 264330116635  
Status : Answered  
Chosen Option : 1

Q.9 Three number are in the ratio of 4 : 5 : 6, and their LCM is 180. Their HCF is:

- Ans
- 1. 2
  - 2. 4
  - 3. 8
  - 4. 3

Question ID : 26433082352  
Status : Answered  
Chosen Option : 2

Q.10 If ratio of X to Y is 3 : 4, then determine the relation between X and Y.

- Ans
- 1. Both X is 75 percent of Y and Y is 133.33 percent of X
  - 2. X is 80 percent of Y
  - 3. X is 35 percent of Y
  - 4. Y is 120 percent of X

Question ID : 26433076005  
Status : Answered  
Chosen Option : 1

Q.11 A shopkeeper offers three successive discounts of 15%, 30% and 4% on an article. If the article is marked at ₹1,950, what is its selling price (in ₹, rounded off to the nearest tens)?

- Ans
- 1. 1,110
  - 2. 1,150
  - 3. 1,130
  - 4. 1,020

Question ID : 26433061891  
Status : Answered  
Chosen Option : 1

Q.12 The average of sales of an electronics shop in the years 2001, 2002, 2003 and 2004 is 1850, and that for the years 2002, 2003, 2004 and 2005 is 2125. If the sales in 2005 are 1200, then find the sales in 2001?

- Ans
- 1. 110
  - 2. 100
  - 3. 120
  - 4. 130

Question ID : 26433076302  
Status : Not Answered  
Chosen Option : --

Q.13 The population of a village increases by  $12\frac{1}{2}\%$  in the first year and decrease by 8% in the second year. If the present population of village is 3200, then what will be the population of the village after 2 years?

- Ans
- 1. 3312
  - 2. 3564
  - 3. 3412
  - 4. 3388

Question ID : 26433075681  
Status : Answered  
Chosen Option : 2

Q.14 Determine the fourth proportional to 11.6 m, 9.2 m, 32.8 m. (Consider up to two decimals)

- Ans
- 1. 20.01 m
  - 2. 28.01 m
  - 3. 22.01 m
  - 4. 26.01 m

Question ID : 26433081030  
Status : Answered  
Chosen Option : 3

Q.15 A, B and C run on a circular track. Time taken by A, B, and C to complete one round are 6 min, 8 min and 3 min respectively. If they start together at 5 p.m., then at what time will they meet again at the starting point?

- Ans
- 1. 5:12 p.m.
  - 2. 5:18 p.m.
  - 3. 5:08 p.m.
  - 4. 5:24 p.m.

Question ID : 26433076014  
Status : Not Answered  
Chosen Option : --

Q.16 If the radius of the base and the slant height of a cone are 17cm and 25 cm respectively, then what is the total surface area of the cone?

- Ans
- 1.  $2292 \text{ cm}^2$
  - 2.  $2266 \text{ cm}^2$
  - 3.  $2288 \text{ cm}^2$
  - 4.  $2244 \text{ cm}^2$

Question ID : 26433075708  
Status : Answered  
Chosen Option : 2



Q.17 Afzal's monthly income is Rs.35,000. He spends 20% of his monthly income on food, 30% on clothes, and 15% on rent. How much money does Afzal save monthly?

- Ans
- 1. Rs.16,660
  - 2. Rs.14,200
  - 3. Rs.12,250
  - 4. Rs.15,220

Question ID : 26433080297  
Status : Answered  
Chosen Option : 1

Q.18 A woman gains 30 percent by selling an article for a certain price. If she sells it at double price, then the profit made is :

- Ans
- 1. 140 percent
  - 2. 160 percent
  - 3. 120 percent
  - 4. 130 percent

Question ID : 26433079858  
Status : Answered  
Chosen Option : 2

Q.19 The average of 11 numbers is 7.5. What should be the 12th number added to them to make the average 8.5?

- Ans
- 1. 19.5
  - 2. 17.5
  - 3. 11.5
  - 4. 21.5

Question ID : 26433079844  
Status : Answered  
Chosen Option : 1

Q.20 Find the compound interest on ₹3,00,000, compounded half-yearly, for  $2\frac{1}{2}$  years at the rate of 20% per annum.

- Ans
- 1. ₹1,62,156
  - 2. ₹1,83,153
  - 3. ₹1,92,156
  - 4. ₹1,73,153

Question ID : 26433080125  
Status : Answered  
Chosen Option : 2

Q.1 Select the most appropriate synonym of the given word.

Reckon

- Ans  1. Relieve  
 2. Release  
 3. Think  
 4. Terminate

Question ID : 26433073637  
Status : Not Answered  
Chosen Option : --

Q.2 Select the most appropriate option that can substitute the underlined segment in the given sentence.

He has given us no reason to be prestigious of him.

- Ans  1. be proudly  
 2. be auspicious  
 3. be suspicious  
 4. be ambitious

Question ID : 26433088509  
Status : Not Answered  
Chosen Option : --

Q.3 The following sentence has been divided into parts. One of them may contain an error. Select the part that contains the error from the given options.

Tomorrow is a/ holiday for all /except me as/ I will writing my exam.

- Ans  1. I will writing my exam  
 2. holiday for all  
 3. Tomorrow is a  
 4. except me as

Question ID : 26433089823  
Status : Not Answered  
Chosen Option : --

Q.4 Select the most appropriate option to fill in the blank.

He visited his mother \_\_\_\_\_ after she was discharged from the hospital.

- Ans  1. now and then  
 2. by and by  
 3. round and round  
 4. more or less

Question ID : 26433084651  
Status : Not Answered  
Chosen Option : --

**Q.5** Select the correct option to substitute the underlined segment in the given sentence.

Let clear the doubts, if any.

- Ans
- 1. Let mine
  - 2. Let me
  - 3. Let myself
  - 4. Let my

Question ID : 26433092998  
Status : Not Answered  
Chosen Option : --

**Q.6** Select the most appropriate synonym of the given word.

**Noble**

- Ans
- 1. Agile
  - 2. Regular
  - 3. Humble
  - 4. Dignified

Question ID : 26433072191  
Status : Not Answered  
Chosen Option : --

**Q.7** Select the **INCORRECTLY** spelt word.

- Ans
- 1. Pester
  - 2. Referance
  - 3. Orientation
  - 4. Exaggerate

Question ID : 26433073601  
Status : Not Answered  
Chosen Option : --

**Q.8** Select the **INCORRECTLY** spelt word.

- Ans
- 1. Repugnent
  - 2. Malicious
  - 3. Perceive
  - 4. Vacuous

Question ID : 26433073605  
Status : Not Answered  
Chosen Option : --

Q.9 Select the correct word for the blanks in the given sentence.

Health is a state of \_\_\_\_\_ being, and a \_\_\_\_\_ is used to draw water from the ground.

- Ans  1. well  
 2. tubewell  
 3. fine  
 4. good

Question ID : 26433060540  
Status : Not Answered  
Chosen Option : --

Q.10 Select the most appropriate ANTONYM of the given word.

Erudite

- Ans  1. Ignorant  
 2. Civilized  
 3. Primeval  
 4. Inherent

Question ID : 26433071982  
Status : Not Answered  
Chosen Option : --

Q.11 Select the most appropriate ANTONYM of the underlying word in the given sentence and complete the sentence.

He was \_\_\_\_\_ by his brother's attitude, but his mother's words calmed him.

- Ans  1. acquitted  
 2. effaced  
 3. solaced  
 4. agitated

Question ID : 26433084711  
Status : Not Answered  
Chosen Option : --

Q.12 Select the most appropriate meaning of the given idiom.

Explore all avenues

- Ans  1. To discover new ideas  
 2. To discover new things  
 3. Try out every possibility to get a result  
 4. To discover new routes

Question ID : 26433072681  
Status : Not Answered  
Chosen Option : --

Q.13 Select the most appropriate meaning of the given idiom.

Spinning one's wheels

- Ans  1. To do a lot of work for achieving something  
 2. To make a lot of effort without achieving anything  
 3. To talk about random things  
 4. To talk about oneself for achieving something

Question ID : 26433072680  
Status : Not Answered  
Chosen Option : --

Q.14 Select the most appropriate homonym to fill in the blank.

He planned a weeklong \_\_\_\_\_ down the Nile.

- Ans  1. crews  
 2. cruse  
 3. crus  
 4. cruise

Question ID : 26433089073  
Status : Not Answered  
Chosen Option : --

Q.15 Select the most appropriate ANTONYM of the given word.

Obvious

- Ans  1. Plain  
 2. Straight  
 3. Clear  
 4. Cryptic

Question ID : 26433072271  
Status : Not Answered  
Chosen Option : --

**Comprehension:**

In the following passage, some words have been deleted. Read the passage carefully and select the most appropriate option to fill in each blank.

Amla tree is (1) \_\_\_\_\_ to be thousands of years old. It is called aamaleki and dhaatri in Sanskrit. Its botanical name is Emblica Officinalis. The amla tree is a medium (2) \_\_\_\_\_ tree with citrus fruits. It is found almost everywhere in India (3) \_\_\_\_\_ for some very high mountainous regions. It is found (4) \_\_\_\_\_ in Madhya Pradesh. The leaves are very small and have a close (5) \_\_\_\_\_ to those of Gulmohar. The amla tree has slender branches which grow upwards and surround the trees on all sides.

**SubQuestion No : 16**

**Q.16 Select the most appropriate option to fill in blank no. 1.**

- Ans  1. considered  
 2. reviewed  
 3. examined  
 4. contemplated

Question ID : 26433072256

Status : Not Answered

Chosen Option : --

**Comprehension:**

In the following passage, some words have been deleted. Read the passage carefully and select the most appropriate option to fill in each blank.

Amla tree is (1) \_\_\_\_\_ to be thousands of years old. It is called aamaleki and dhaatri in Sanskrit. Its botanical name is Emblica Officinalis. The amla tree is a medium (2) \_\_\_\_\_ tree with citrus fruits. It is found almost everywhere in India (3) \_\_\_\_\_ for some very high mountainous regions. It is found (4) \_\_\_\_\_ in Madhya Pradesh. The leaves are very small and have a close (5) \_\_\_\_\_ to those of Gulmohar. The amla tree has slender branches which grow upwards and surround the trees on all sides.

**SubQuestion No : 17**

**Q.17 Select the most appropriate option to fill in blank no. 2.**

- Ans  1. sized  
 2. sorted  
 3. assessed  
 4. weighed

Question ID : 26433072257

Status : Not Answered

Chosen Option : --

**Comprehension:**

In the following passage, some words have been deleted. Read the passage carefully and select the most appropriate option to fill in each blank.

Amla tree is (1) \_\_\_\_\_ to be thousands of years old. It is called aamaleki and dhaatri in Sanskrit. Its botanical name is Emblica Officinalis. The amla tree is a medium (2) \_\_\_\_\_ tree with citrus fruits. It is found almost everywhere in India (3) \_\_\_\_\_ for some very high mountainous regions. It is found (4) \_\_\_\_\_ in Madhya Pradesh. The leaves are very small and have a close (5) \_\_\_\_\_ to those of Gulmohar. The amla tree has slender branches which grow upwards and surround the trees on all sides.

**SubQuestion No : 18**

**Q.18 Select the most appropriate option to fill in blank no. 3.**

- Ans  1. till  
 2. without  
 3. except  
 4. unless

Question ID : 26433072258

Status : Not Answered

Chosen Option : --

**Comprehension:**

In the following passage, some words have been deleted. Read the passage carefully and select the most appropriate option to fill in each blank.

Amla tree is (1) \_\_\_\_\_ to be thousands of years old. It is called aamaleki and dhaatri in Sanskrit. Its botanical name is Emblica Officinalis. The amla tree is a medium (2) \_\_\_\_\_ tree with citrus fruits. It is found almost everywhere in India (3) \_\_\_\_\_ for some very high mountainous regions. It is found (4) \_\_\_\_\_ in Madhya Pradesh. The leaves are very small and have a close (5) \_\_\_\_\_ to those of Gulmohar. The amla tree has slender branches which grow upwards and surround the trees on all sides.

**SubQuestion No : 19**

**Q.19 Select the most appropriate option to fill in blank no. 4.**

- Ans  1. abundantly  
 2. lavishly  
 3. profusely  
 4. wholly

Question ID : 26433072259

Status : Not Answered

Chosen Option : --

**Comprehension:**

In the following passage, some words have been deleted. Read the passage carefully and select the most appropriate option to fill in each blank.

Amla tree is (1) \_\_\_\_\_ to be thousands of years old. It is called aamaleki and dhaatri in Sanskrit. Its botanical name is Emblica Officinalis. The amla tree is a medium (2) \_\_\_\_\_ tree with citrus fruits. It is found almost everywhere in India (3) \_\_\_\_\_ for some very high mountainous regions. It is found (4) \_\_\_\_\_ in Madhya Pradesh. The leaves are very small and have a close (5) \_\_\_\_\_ to those of Gulmohar. The amla tree has slender branches which grow upwards and surround the trees on all sides.

**SubQuestion No : 20**

**Q.20** Select the most appropriate option to fill in blank no. 5.

- Ans  1. congruence  
 2. harmony  
 3. resemblance  
 4. coincidence

Question ID : 26433072260  
Status : Not Answered  
Chosen Option : --

## Section : Part-D-Hindi

**Q.1** 'किसी बात पर बार-बार जोर देना' वाक्यांश के लिए उचित शब्द क्या होगा?

- Ans  1. आग्रह  
 2. नाद  
 3. कलरव  
 4. मुनादी

Question ID : 26433065913  
Status : Answered  
Chosen Option : 1

**Q.2** 'जानने की इच्छा' वाक्यांश के लिए सार्थक शब्द है-

- Ans  1. जिज्ञासा  
 2. जानकारी  
 3. अज्ञ  
 4. जिजीविषा

Question ID : 26433065857  
Status : Answered  
Chosen Option : 1

**Q.3** 'वह पुरुष जिसकी पत्नी मर गई हो' इस वाक्यांश के लिए सार्थक शब्द है -

- Ans  1. साधक  
 2. सधवा  
 3. विधवा  
 4. विधुर

Question ID : 26433062334  
Status : Answered  
Chosen Option : 4



Q.4 "चोर को क्षमा दान कर दिया गया।"  
उपरोक्त वाक्य में क्रिया सम्बन्धी त्रुटि पहचानकर निम्नलिखित में से शुद्ध वाक्य का चयन कीजिए।

- Ans  1. चोर को क्षमा दान प्रदान किया गया।  
 2. चोर को क्षमा कर दिया गया।  
 3. चोर को क्षमा दान दे दिया गया।  
 4. चोर को क्षमा दान किया गया।

Question ID : 26433066975  
Status : Answered  
Chosen Option : 2

Q.5 'बाढ़ के कारण जान-माल की भारी \_\_\_\_\_ हो चुकी थी।'  
उपरोक्त वाक्य में रिक्त स्थान की पूर्ति उपयुक्त शब्द द्वारा कीजिए।

- Ans  1. तबाही  
 2. विनाशलीला  
 3. रंजिश  
 4. उगाही

Question ID : 26433069683  
Status : Answered  
Chosen Option : 1

Q.6 निम्न में से अशुद्ध शब्द की पहचान करें।

- Ans  1. उज्ज्वल  
 2. अनधिकार  
 3. अतिथि  
 4. कवयित्री

Question ID : 26433067106  
Status : Answered  
Chosen Option : 2

Q.7 नीचे दिए मुहावरे का सही अर्थ दिए गए विकल्पों में से चुनिए-  
लोहा मानना

- Ans  1. सच्चाई स्वीकार करना  
 2. गलती स्वीकार करना  
 3. वीरता स्वीकार करना  
 4. श्रेष्ठता स्वीकार करना

Question ID : 26433062312  
Status : Answered  
Chosen Option : 3

Q.8 निम्नलिखित में से सकर्मक क्रिया का उदाहरण नहीं है-

- Ans  1. बालक दौड़ता है।  
 2. सोहन साइकिल चलाता है।  
 3. मोहन दूध पीता है।  
 4. श्यामा ढोलक बजाती है।

Question ID : 26433085040  
Status : Answered  
Chosen Option : 1

Q.9 निम्न में से किस वाक्य में 'क्लेश' के सही पर्यायवाची शब्द का प्रयोग हुआ है?

- Ans  1. सुयश मूर्ख है।  
 2. उस बात का मुझे दुःख है।  
 3. अश्विन अधिक रुष्ट हो गया।  
 4. काव्या की खुशी का ठिकाना नहीं था।

Question ID : 26433067017  
Status : Not Answered  
Chosen Option : --

Q.10 विकल्पों में दिए गए शब्दों में से उचित शब्द चुनकर निम्न वाक्य पूर्ण करें।  
हमें \_\_\_\_\_ का निरादर नहीं करना चाहिए।

- Ans  1. अन्न  
 2. अन  
 3. अन्य  
 4. अन्

Question ID : 26433062911  
Status : Answered  
Chosen Option : 1

Q.11 निम्नलिखित वाक्य के किस खंड में त्रुटि है?  
मोहिनी का पती परदेश में है।

- Ans  1. परदेश  
 2. पती  
 3. का  
 4. मोहिनी

Question ID : 26433066761  
Status : Answered  
Chosen Option : 2

Q.12 निम्नलिखित में से किस वाक्य में दिए गए शब्द के सही विलोम शब्द का प्रयोग किया गया है?  
अंधकार

- Ans
- 1. कमरे में चाँदनी है।
  - 2. कमरे में धुआँ फैला है।
  - 3. कमरे में रसायन फैल रहा है।
  - 4. कमरे में प्रकाश फैला हुआ है।

Question ID : 26433066947  
Status : Answered  
Chosen Option : 4

Q.13 आज मैच देखकर आनंद आ गया।  
उपरोक्त वाक्य में रेखांकित शब्द के उचित पर्यायवाची शब्द का चयन कीजिए।

- Ans
- 1. सुधी
  - 2. मधवा
  - 3. प्रसन्नता
  - 4. रम्य

Question ID : 26433079722  
Status : Answered  
Chosen Option : 3

Q.14 निम्नलिखित विकल्पों में से 'आस्तीन का साँप' मुहावरे का अर्थ क्या है?

- Ans
- 1. प्रिय बनकर धोखा देने वाला
  - 2. विश्वासपात्र बनना
  - 3. सबका प्रिय बनकर रहने वाला
  - 4. दुष्टता करना

Question ID : 26433062548  
Status : Answered  
Chosen Option : 1

Q.15 घोड़ा जंगल की तरफ भागा।  
उपरोक्त वाक्य में 'की तरफ' के बदले कौन सा शब्द प्रयोग हो सकता है ?

- Ans
- 1. के निकट
  - 2. की ओर
  - 3. की ओर
  - 4. के सामने

Question ID : 26433062693  
Status : Answered  
Chosen Option : 2

**Comprehension:**

निम्नलिखित गद्यांश में कुछ शब्दों को हटा दिया गया है। दिए गए विकल्पों की सहायता से रिक्त स्थानों की पूर्ति कीजिए। प्रत्येक संख्या के लिए सबसे उपयुक्त विकल्प का चयन कीजिए।  
स्कूली सत्र और परीक्षा समाप्त होने के पश्चात लम्बी 1. \_\_\_\_\_ का आनंद कुछ और ही होता है। पढाई का बोझ सिर से 2. \_\_\_\_\_ जाता है। उस समय परीक्षा के 3. \_\_\_\_\_ की प्रतीक्षा होती है। छुट्टियों का समय हमारा 4. \_\_\_\_\_ होता है। हमारे लिए यह समय अतुल्य 5. \_\_\_\_\_ से कम नहीं होता है।

**SubQuestion No : 16**

Q.16 रिक्त स्थान 1 की पूर्ति के लिए सबसे उपयुक्त विकल्प का चयन कीजिए।

- Ans  1. बातों  
 2. रुचियों  
 3. छुट्टियों  
 4. कक्षाओं

Question ID : 264330111005  
Status : Answered  
Chosen Option : 3

**Comprehension:**

निम्नलिखित गद्यांश में कुछ शब्दों को हटा दिया गया है। दिए गए विकल्पों की सहायता से रिक्त स्थानों की पूर्ति कीजिए। प्रत्येक संख्या के लिए सबसे उपयुक्त विकल्प का चयन कीजिए।  
स्कूली सत्र और परीक्षा समाप्त होने के पश्चात लम्बी 1. \_\_\_\_\_ का आनंद कुछ और ही होता है। पढाई का बोझ सिर से 2. \_\_\_\_\_ जाता है। उस समय परीक्षा के 3. \_\_\_\_\_ की प्रतीक्षा होती है। छुट्टियों का समय हमारा 4. \_\_\_\_\_ होता है। हमारे लिए यह समय अतुल्य 5. \_\_\_\_\_ से कम नहीं होता है।

**SubQuestion No : 17**

Q.17 रिक्त स्थान 2 की पूर्ति के लिए सबसे उपयुक्त विकल्प का चयन कीजिए।

- Ans  1. मर  
 2. उतर  
 3. चढ़  
 4. बढ़

Question ID : 264330111006  
Status : Answered  
Chosen Option : 2

**Comprehension:**

निम्नलिखित गद्यांश में कुछ शब्दों को हटा दिया गया है। दिए गए विकल्पों की सहायता से रिक्त स्थानों की पूर्ति कीजिए। प्रत्येक संख्या के लिए सबसे उपयुक्त विकल्प का चयन कीजिए।  
स्कूली सत्र और परीक्षा समाप्त होने के पश्चात लम्बी 1. \_\_\_\_\_ का आनंद कुछ और ही होता है। पढाई का बोझ सिर से 2. \_\_\_\_\_ जाता है। उस समय परीक्षा के 3. \_\_\_\_\_ की प्रतीक्षा होती है। छुट्टियों का समय हमारा 4. \_\_\_\_\_ होता है। हमारे लिए यह समय अतुल्य 5. \_\_\_\_\_ से कम नहीं होता है।

**SubQuestion No : 18**

Q.18 रिक्त स्थान 3 की पूर्ति के लिए सबसे उपयुक्त विकल्प का चयन कीजिए।

- Ans  1. ध्यान  
 2. योजना  
 3. परिणाम  
 4. प्रमाण

Question ID : 264330111007  
Status : Answered  
Chosen Option : 3

**Comprehension:**

निम्नलिखित गद्यांश में कुछ शब्दों को हटा दिया गया है। दिए गए विकल्पों की सहायता से रिक्त स्थानों की पूर्ति कीजिए। प्रत्येक संख्या के लिए सबसे उपयुक्त विकल्प का चयन कीजिए।  
स्कूली सत्र और परीक्षा समाप्त होने के पश्चात लम्बी 1. \_\_\_\_\_ का आनंद कुछ और ही होता है। पढाई का बोझ सिर से 2. \_\_\_\_\_ जाता है। उस समय परीक्षा के 3. \_\_\_\_\_ की प्रतीक्षा होती है। छुट्टियों का समय हमारा 4. \_\_\_\_\_ होता है। हमारे लिए यह समय अतुल्य 5. \_\_\_\_\_ से कम नहीं होता है।

**SubQuestion No : 19**

Q.19 रिक्त स्थान 4 की पूर्ति के लिए सबसे उपयुक्त विकल्प का चयन कीजिए।

- Ans
- 1. व्यवसाय
  - 2. मिलाकर
  - 3. अपना
  - 4. कार्यक्रम

Question ID : 264330111008

Status : Answered

Chosen Option : 3

**Comprehension:**

निम्नलिखित गद्यांश में कुछ शब्दों को हटा दिया गया है। दिए गए विकल्पों की सहायता से रिक्त स्थानों की पूर्ति कीजिए। प्रत्येक संख्या के लिए सबसे उपयुक्त विकल्प का चयन कीजिए।  
स्कूली सत्र और परीक्षा समाप्त होने के पश्चात लम्बी 1. \_\_\_\_\_ का आनंद कुछ और ही होता है। पढाई का बोझ सिर से 2. \_\_\_\_\_ जाता है। उस समय परीक्षा के 3. \_\_\_\_\_ की प्रतीक्षा होती है। छुट्टियों का समय हमारा 4. \_\_\_\_\_ होता है। हमारे लिए यह समय अतुल्य 5. \_\_\_\_\_ से कम नहीं होता है।

**SubQuestion No : 20**

Q.20 रिक्त स्थान 5 की पूर्ति के लिए सबसे उपयुक्त विकल्प का चयन कीजिए।

- Ans
- 1. जीवन
  - 2. व्यतीत
  - 3. मित्रों
  - 4. संपत्ति

Question ID : 264330111009

Status : Answered

Chosen Option : 4