

Constable GD in CAPFs SSF Rifleman GD in Assam Rifles and Sepoy in NCB Examination 2022

Roll Number	www.govtjobsalert.in
Candidate Name	www.govtjobsalert.in
Venue Name	iON Digital Zone iDZ Tirunelveli
Exam Date	30/01/2023
Exam Time	11:45 AM - 12:45 PM
Subject	Constable GD Examination 2022

Section : Part-A-General Intelligence and Reasoning

Q.1 Select the option that is related to the fifth letter-cluster in the same way as the second letter-cluster is related to the first letter-cluster and the fourth letter-cluster is related to the third letter-cluster.

GKP : FHK :: BJS : AGN :: DIX : ?

- Ans
- 1. ELS
 - 2. EHS
 - 3. CHS
 - 4. CFS

Question ID : 26433057748
Status : Answered
Chosen Option : 4

Q.2 Which of the numbers(not digits) should be interchanged in the below equation to make it mathematically correct?

$216 \div 9 \times 16 + 24 - 27 = 126$

- Ans
- 1. 16 and 9
 - 2. 27 and 9
 - 3. 24 and 27
 - 4. 9 and 24

Question ID : 264330117564
Status : Not Answered
Chosen Option : --

Q.3 Select the set in which the numbers are related in the same way as are the numbers of the following sets.

(NOTE : Operations should be performed on the whole numbers, without breaking down the numbers into its constituent digits. E.g. 13 – Operations on 13 such as adding/subtracting/multiplying etc. to 13 can be performed. Breaking down 13 into 1 and 3 and then performing mathematical operations on 1 and 3 is not allowed)

(17, 153, 81)

(19, 171, 81)

- Ans
- 1. (14, 126, 90)
 - 2. (11, 99, 72)
 - 3. (16, 144, 75)
 - 4. (15, 135, 81)

Question ID : 26433076549
Status : Answered
Chosen Option : 4

Q.4 Select the option that is related to the third word in the same way as the second word is related to the first word.
(The words must be considered as meaningful English words and must NOT be related to each other based on the number of letters/number of consonants/vowels in the word)
Smell : Nose :: Colours : ?

- Ans 1. Ears
 2. Eyes
 3. Paint
 4. Rainbow

Question ID : 26433087195
Status : Answered
Chosen Option : 2

Q.5 Which of the following numbers will replace the question marks (?) in the given series?
10, 20, 15, ?, ?, 30, 25, 35, 30

- Ans 1. 20, 20
 2. 25, 20
 3. 25, 25
 4. 35, 30

Question ID : 26433069045
Status : Answered
Chosen Option : 2

Q.6 Which of the following letter-clusters will replace the question mark (?) and complete the following letter-cluster series?
MNA, WDB, EVA, KPB, OLA, ?

- Ans 1. QJA
 2. QJB
 3. QKA
 4. QKB

Question ID : 26433067281
Status : Answered
Chosen Option : 2

Q.7 Which of the following numbers will replace the question mark (?) in the given series?
9, ?, 33, 50, 69, 92, 121

- Ans 1. 20
 2. 14
 3. 22
 4. 16

Question ID : 26433090059
Status : Not Attempted and Marked For Review
Chosen Option : --

Q.8 Three statements are given followed by Three conclusions numbered I, II & III. Assuming the statements to be true, even if they seem to be at variance with commonly known facts, decide which of the conclusions logically follow(s) from the statements.

Statements:

Some doctors are tigers.

All tigers are umbrellas.

Some umbrellas are buses.

Conclusions:

I. Some doctors are umbrellas.

II. Some tigers are umbrellas.

III. Some buses are umbrellas.

Ans ✓ 1. All conclusions follow.

✗ 2. Both conclusions I and III follow.

✗ 3. Both conclusions I and II follow.

✗ 4. Both conclusions II and III follow.

Question ID : 26433081795

Status : Answered

Chosen Option : 2

Q.9 Seven people S, F, A, G, D, H, and T are sitting in a straight row, facing north. Only two people sit to the right of G. F is third to the right of A. S is the immediate neighbour to D and A. G is the immediate neighbour to F and H. Who sits at the extreme right of the row?

Ans ✓ 1. T

✗ 2. H

✗ 3. G

✗ 4. A

Question ID : 26433092597

Status : Answered

Chosen Option : 1

Q.10 In a certain code language, 'LAST' is written as 'NCQR' and 'CAKE' is written as 'ECIC'. How will 'JUMP' be written in that language?

Ans ✓ 1. LWKN

✗ 2. WLKN

✗ 3. WLNK

✗ 4. LWNK

Question ID : 26433068893

Status : Answered

Chosen Option : 1

Q.11 Which two signs should be interchanged to make the below equation mathematically correct?

$$8 + 32 \div 16 \times 11 - 5 = 22$$

- Ans
- 1. \times and \div
 - 2. $-$ and $+$
 - 3. \div and $-$
 - 4. $+$ and \times

Question ID : 264330114179

Status : Answered

Chosen Option : 4

Q.12 Preethi arranges different colours of teddy bears in her bedroom in two parallel rows facing each other such that four teddies are in each row. Orange, Yellow, Grey and Brown teddies are in Row 1 facing north, while Red, White, Black and Pink teddies are in Row 2 facing south. Orange teddy is adjacent to the Grey teddy. Pink teddy does not face the Orange one. White teddy faces the one that is second to the right of the Grey teddy. The Black one is second to the right of the Pink teddy. The Brown teddy is not at any of the corners. The Orange teddy is not at any of the extreme ends. The Grey teddy faces the Red one. How many teddies are there between Red and White teddies?

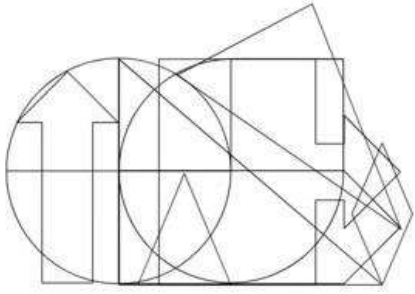
- Ans
- 1. Two
 - 2. Three
 - 3. zero
 - 4. One

Question ID : 26433079066

Status : Not Answered

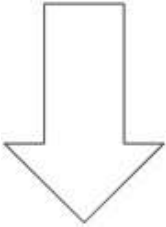
Chosen Option : --

Q.13 Select the option figure which is embedded in the given figure. (Rotation is NOT allowed)

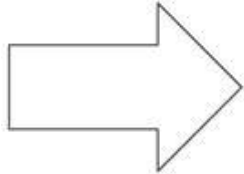


Ans

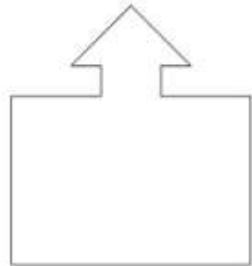
✗ 1.



✗ 2.



✗ 3.



✓ 4.



Question ID : 26433085747

Status : Answered

Chosen Option : 4

Q.14 Which letter cluster will replace the question mark (?) to complete the given series?
GYCQ, ICZR, ?, MKTT, OOQU

- Ans
- 1. QDRS
 - 2. KRRS
 - 3. RRKS
 - 4. KGWS

Question ID : 26433079427
Status : Answered
Chosen Option : 4

Q.15 Select the correct mirror image of the given figure when the mirror is placed at MN
as shown below.



- Ans
- 1. k n u 3 1 3 p q k
 - 2. k u n 3 u k
 - 3. k u n 3 u k
 - 4. k n u 3 u k

Question ID : 26433082334
Status : Answered
Chosen Option : 3

Q.16 Which option represents the correct order of the given words as they would appear in the English dictionary?
1 Flower
2 Flow
3 Floor
4 Flour
5 Flame

- Ans
- 1. 5,3,1,2,4
 - 2. 5,3,4,2,1
 - 3. 5,4,3,2,1
 - 4. 2,3,4,1,5

Question ID : 26433069267
Status : Answered
Chosen Option : 2

Q.17 'X – Y' means 'X is the brother of Y'
'X # Y' means 'X is the daughter of Y'
'X * Y' means 'X is the father of Y'
'X \$ Y' means 'X is the wife of Y'
If 'A \$ B – D * C', then how is A related to D?

Ans 1. A is the sister-in-law of D

2. A is the sister of D

3. A is the daughter of D

4. A is the son of D

Question ID : 26433087128

Status : Answered

Chosen Option : 1

Q.18 In a certain code language, 'TEA' is coded as 26 and 'DANCE' is coded as 27. How will 'CROWN' be coded in that language?

Ans 1. 54

2. 47

3. 68

4. 73

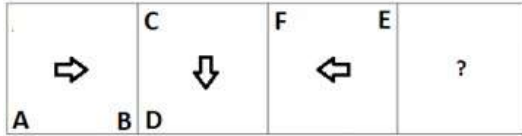
Question ID : 26433074518

Status : Answered

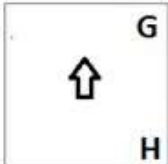
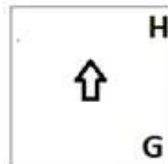
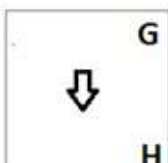
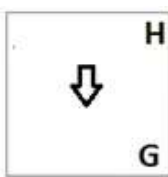
Chosen Option : 4

WWW.GOVtjobSalert.in

Q.19 Select the figure from among the given options that can replace the question mark (?) in the following series.



Ans

- 1. 
- 2. 
- 3. 
- 4. 

Question ID : 26433074725
 Status : Answered
 Chosen Option : 2

Q.20 Two different positions of the same dice are shown having symbols- \$, Δ, ¥, Ω, O and *. Find the symbol on the face opposite the face showing 'O'.



- Ans
- 1. \$
 - 2. *
 - 3. ¥
 - 4. Ω

Question ID : 26433085508
 Status : Answered
 Chosen Option : 2

Q.1 How many nations (including EOR and ROC teams) participated in the 2020 Summer Olympics?

- Ans
- 1. 210
 - 2. 203
 - 3. 206
 - 4. 209

Question ID : 264330115913
Status : Not Answered
Chosen Option : --

Q.2 It connects all types of computers across the world. Which communication technology is being spoken about here?

- Ans
- 1. Internet
 - 2. Pager
 - 3. Post cards
 - 4. Cable

Question ID : 264330115598
Status : Not Answered
Chosen Option : --

Q.3 Which among the following pairs of ore-metal is incorrect?

- Ans
- 1. Bornite - Copper
 - 2. Cinnabar - Nickel
 - 3. Magnetite - Iron
 - 4. Galena - Lead

Question ID : 264330115146
Status : Answered
Chosen Option : 2

Q.4 After the passage of which Constitutional Amendment Act, are there now six fundamental rights?

- Ans
- 1. 102nd Amendment in 1996
 - 2. 44th Amendment in 1952
 - 3. 11th Amendment in 1952
 - 4. 44th Amendment in 1978

Question ID : 26433089911
Status : Not Answered
Chosen Option : --

Q.5 Which of the following is the largest tributary of the Indus river?

- Ans 1. Sutlej River
 2. Shyok River
 3. Chenab River
 4. Ravi River

Question ID : 26433089665
Status : Answered
Chosen Option : 3

Q.6 Among the given options, Ministry of Social Justice and Empowerment doesn't patronise _____.

- Ans 1. e-Shram
 2. Nasha Mukht Bharat Abhiyaan
 3. e-ANUDAAN
 4. National Portal for Transgender persons

Question ID : 264330116193
Status : Not Answered
Chosen Option : --

Q.7 As per 2011 census, which Indian state has the lowest literacy rate?

- Ans 1. Maharashtra
 2. Bihar
 3. Uttar Pradesh
 4. Jharkhand

Question ID : 264330116056
Status : Answered
Chosen Option : 2

Q.8 As of December 2022, who among the following is the Governor of West Bengal, India?

- Ans 1. Ashok Gehlot
 2. Jagdeep Dhankar
 3. CV Ananda Bose
 4. Mamata Banerjee

Question ID : 264330114898
Status : Answered
Chosen Option : 3

Q.9 Which of the following Metals of Harappan civilization got from present-day Rajasthan and Oman?

- Ans**
- 1. Tin
 - 2. Gold
 - 3. Silver
 - 4. Copper

Question ID : 264330115444
Status : Not Answered
Chosen Option : --

Q.10 _____ war took place during fourth five year plan.

- Ans**
- 1. India -Pakistan
 - 2. Indo China
 - 3. World war II
 - 4. World war I

Question ID : 264330115364
Status : Not Answered
Chosen Option : --

Q.11 Bathukamma, a flower festival, is celebrated in which of the following states?

- Ans**
- 1. Tamil Nadu
 - 2. Gujarat
 - 3. Telangana
 - 4. Rajasthan

Question ID : 264330115084
Status : Not Answered
Chosen Option : --

Q.12 In India, the Industrial Policy Resolution was passed in the year _____ for the first time.

- Ans**
- 1. 1948
 - 2. 1949
 - 3. 1946
 - 4. 1947

Question ID : 264330116142
Status : Not Answered
Chosen Option : --

Q.13 The maximum strength of the Lower House of Parliament is:

- Ans 1. 500
 2. 590
 3. 552
 4. 250

Question ID : 26433089969
Status : Answered
Chosen Option : 3

Q.14 _____ is defined as the body's ability to function efficiently and effectively in work and leisure activities, to be healthy, to resist diseases and to meet emergency situations.

- Ans 1. aerobic fitness
 2. muscular endurance
 3. mental fitness
 4. physical fitness

Question ID : 264330115230
Status : Not Answered
Chosen Option : --

Q.15 E Krishna Iyer was related to which classical dance form?

- Ans 1. Odissi
 2. Kathak
 3. Sattriya
 4. Bharatnatyam

Question ID : 26433072927
Status : Answered
Chosen Option : 4

Q.16 National Income = C (household consumption) + G(_____) + I (investment expense) + NX (net exports).

- Ans 1. household expenditure
 2. government expenditure
 3. individual expenditure
 4. non government expenditure

Question ID : 264330115351
Status : Not Answered
Chosen Option : --

Q.17 Ranji Trophy is related to which of the following game?

- Ans 1. Tennis
 2. Cricket
 3. Baseball
 4. Football

Question ID : 264330116261
Status : Answered
Chosen Option : 2

Q.18 Which among the following received the Kerala Sangeet Natak Academy fellowship (1974)?

- Ans 1. Kalamandalam Kalyanikutty Amma
 2. Anuradha Pandey
 3. Shovana Narayan
 4. Mahaboob Subhani

Question ID : 264330115847
Status : Not Answered
Chosen Option : --

Q.19 Which of the following monuments has been declared a national monument by the Prime Minister of India in November 2022?

- Ans 1. Rukhmini Temple
 2. Mangarh Dham
 3. Musa Bagh
 4. Gol Gumbaz

Question ID : 264330115054
Status : Not Answered
Chosen Option : --

Q.20 Mahatma Gandhi returned to Indian in January _____.

- Ans 1. 1911
 2. 1917
 3. 1919
 4. 1915

Question ID : 26433089898
Status : Answered
Chosen Option : 1

Q.1 A thief started running after seeing a policeman at a distance of 225 m. Instantly, the policeman started chasing the thief. The thief and the police ran at the rate of 9 km/h and 10 km/h respectively. Find the distance between them after 4.2 min.

- Ans
- 1. 180 m
 - 2. 175 m
 - 3. 165 m
 - 4. 155 m

Question ID : 26433075923

Status : **Not Attempted and Marked For Review**

Chosen Option : --

Q.2 In one hill station train there are three categories of seats. The seats are numbered from 1 to 50 in the first class, 51 to 150 in the second class and 151 to 300 in the third class. Every December, the seat occupancy was 30% in the first class, 50% in the second class and 100% in the third class. If the per seat charges are ₹2,000, ₹1,000 and ₹500 in first class, second class and third class respectively, then the income ratio per category in December month is:

- Ans
- 1. 6 : 10 : 15
 - 2. 4 : 2 : 1
 - 3. 1 : 2 : 3
 - 4. 3 : 10 : 30

Question ID : 26433079945

Status : **Not Answered**

Chosen Option : --

Q.3 A man gives two successive discounts of 8 percent and 6 percent on a chair, which has the marked price of Rs. 1200. How much would be the selling price of the chair?

- Ans
- 1. Rs. 1176.52
 - 2. Rs. 1080.54
 - 3. Rs. 1037.76
 - 4. Rs. 1104.24

Question ID : 264330116762

Status : **Not Attempted and Marked For Review**

Chosen Option : --

Q.4 A shopkeeper gives 3 toys free of cost on buying 9 toys and all toys are of same type. What is the discount percentage that a customer gets?

- Ans
- 1. 25%
 - 2. 10%
 - 3. 20%
 - 4. 15%

Question ID : 26433076428
Status : Not Answered
Chosen Option : --

Q.5 Pinky fills her car tank with 20 liters of petrol. She goes on a journey and end up with just 5.5 liters of petrol left in the tank. What is the percent change in the petrol in the tank?

- Ans
- 1. 14.5 percent
 - 2. 72.5 percent
 - 3. 5.5 percent
 - 4. 85.5 percent

Question ID : 264330116797
Status : Answered
Chosen Option : 2

Q.6 On 10 February 2014, a train leaves Delhi at 6 a.m. and reaches Jainagar at 10 a.m.. Another train leaves Jainagar at 8 a.m. and reaches Delhi at 11:30 a.m.. At what time do the two trains cross each other?

- Ans
- 1. 6:56 a.m.
 - 2. 9:15 a.m.
 - 3. 8:48 a.m.
 - 4. 8:56 a.m.

Question ID : 26433075887
Status : Answered
Chosen Option : 2

Q.7 A car runs 450 km on 35 litres of petrol. How many kilometres can the car run on 25 litres of petrol (rounded off to two decimal places)?

- Ans
- 1. 323.42 km
 - 2. 324.42 km
 - 3. 322.42 km
 - 4. 321.43 km

Question ID : 26433079775
Status : Answered
Chosen Option : 4

Q.8 Anay does the $\frac{5}{11}$ th part of the work in 10 days and Rohan does the $\frac{5}{6}$ th of the same work in 15 days. They started together but Rohan left the work 5 days before the completion of the work and Anay completed the work. Find the number of days after which Rohan left work.

- Ans 1. $\frac{153}{20}$ days
 2. $\frac{177}{20}$ days
 3. $\frac{140}{9}$ days
 4. $\frac{186}{9}$ days

Question ID : 264330116877

Status : Not Attempted and Marked For Review

Chosen Option : --

Q.9 A and B alone can do a piece of work in 7 days and 14 days respectively. In how many days the work will be completed if they both work on alternate days starting with A?

- Ans 1. 10
 2. 8
 3. 9
 4. 11

Question ID : 26433074310

Status : Answered

Chosen Option : 3

Q.10 A shopkeeper marks his goods 12% above the cost price and allows 6% discount. What profit percentage does he make?

- Ans 1. 5.82%
 2. 6%
 3. 5.5%
 4. 5.28%

Question ID : 26433075187

Status : Answered

Chosen Option : 2

Q.11 In a pharma company, a scientist is mixing the purified form of Acetone and Toluene to invent some medicine. The cost of the solution obtained after mixing Acetone and Toluene is Rs.16 per litre. Acetone costs Rs.14 per litre to the scientist. Due to storage issue, Toluene's cost is expensive than Acetone to the scientist. The ratio of Toluene to Acetone in the solution is 4 : 1. What is the cost of Toluene per litre (in ₹) to the scientist?

- Ans 1. 21
 2. 18.5
 3. 16.5
 4. 20

Question ID : 26433081639

Status : Not Answered

Chosen Option : --

Q.12 If a rectangle has 10 cm long diagonal and perimeter 28 cm, then the area of the rectangle is:

- Ans
- 1. 60 cm^2
 - 2. 24 cm^2
 - 3. 48 cm^2
 - 4. 96 cm^2

Question ID : 26433087405
Status : Not Answered
Chosen Option : --

Q.13 In an election, Rashika and Nikita were against each other. Rashika received 54% votes and won the election by 1280 votes. How many total votes were cast in the election?

- Ans
- 1. 15500
 - 2. 15000
 - 3. 16000
 - 4. 16500

Question ID : 26433080295
Status : Answered
Chosen Option : 3

Q.14 How much approximate amount will be received on a principal of ₹40,000 at the rate of 8% per annum to be compounded half yearly at the end of one and half years?

- Ans
- 1. ₹44,995
 - 2. ₹45,625
 - 3. ₹42,675
 - 4. ₹43,915

Question ID : 26433091561
Status : Answered
Chosen Option : 1

Q.15 The average of first five prime number is:

- Ans
- 1. 5.6
 - 2. 5.2
 - 3. 5.4
 - 4. 5.5

Question ID : 26433075638
Status : Answered
Chosen Option : 1

Q.16 If the surface area of a sphere is 5544 cm^2 , what is its volume?

- Ans
- 1. $38,809 \text{ cm}^3$
 - 2. $38,808 \text{ cm}^3$
 - 3. $36,864 \text{ cm}^3$
 - 4. $37,800 \text{ cm}^3$

Question ID : 26433066325
Status : Not Answered
Chosen Option : --

Q.17 Find the value of $-67 + 700 \div [85 - \{8 \times 9 + (28 - 5 \times 5)\}]$.

- Ans
- 1. 4
 - 2. 1
 - 3. 2
 - 4. 3

Question ID : 26433082952
Status : Answered
Chosen Option : 4

Q.18 A sum of Rs.9,350 was taken as a loan. This is paid in two equal instalments. If the rate of interest is 20% per annum compounded annually, then what is the value of each instalment?

- Ans
- 1. Rs.2600
 - 2. Rs.2160
 - 3. Rs.6120
 - 4. Rs.6200

Question ID : 26433075349
Status : Not Answered
Chosen Option : --

Q.19 If a seven-digit number 42971K2 is divisible by 44, then the value of K is:

- Ans
- 1. 4
 - 2. 7
 - 3. 5
 - 4. 6

Question ID : 26433075714
Status : Answered
Chosen Option : 2

Q.20 If Ram, Robert and Rahim started a firm by investing ₹50,000, ₹30,000 and ₹40,000 respectively for the same time period, then the ratio of the share of Rahim to that of Robert is _____, out of the profit of ₹18,000.

- Ans 1. 4 : 3
 2. 3 : 4
 3. 4 : 5
 4. 3 : 5

Question ID : 26433079929
Status : Not Answered
Chosen Option : --

Section : Part-D-English

Q.1 Complete the sentence by choosing the most appropriate synonym of the underlined word.

When you look at something you _____ it.

- Ans 1. hear
 2. see
 3. ignore
 4. touch

Question ID : 26433088865
Status : Answered
Chosen Option : 2

Q.2 Select the option that expresses the given sentence in past perfect tense.

- A. I read a lot about mythology.
B. I had been reading a lot about mythology.
C. I was reading a lot about mythology.
D. I had read a lot about mythology.

- Ans 1. C
 2. D
 3. B
 4. A

Question ID : 26433073517
Status : Not Answered
Chosen Option : --

Q.3 Select the most appropriate option to fill in the blank.

One night, a hunter _____ near a river when he began to dream.

- Ans 1. was slept
 2. sleep
 3. is sleeping
 4. was sleeping

Question ID : 26433072727
Status : Answered
Chosen Option : 1

Q.4 Identify the MISSPELT word in the following sentence.

As they only require minimal supervision and support, naturally bright learners are largely unaffected by classroom dynamics.

- Ans
- 1. minimal
 - 2. supervision
 - 3. dinamics
 - 4. unaffected

Question ID : 26433073662
Status : Answered
Chosen Option : 3

Q.5 Select the most appropriate option that can substitute the underlined segment in the given sentence. If there is no need to substitute it, select 'No substitution'.

The entire economy has been effected by the riots in the state.

- Ans
- 1. have been effected
 - 2. No substitution
 - 3. have been affected
 - 4. has been affected

Question ID : 26433091765
Status : Answered
Chosen Option : 3

Q.6 Select the most appropriate ANTONYM of the underlined word.

Blunt objects will not have that much impact.

- Ans
- 1. Sharp
 - 2. Honest
 - 3. Torrid
 - 4. Lame

Question ID : 26433094733
Status : Not Answered
Chosen Option : --

Q.7 Select the most appropriate ANTONYM of the given word.

Sage

- Ans
- 1. Useless
 - 2. Threatening
 - 3. Foolish
 - 4. Plain

Question ID : 26433073804
Status : Not Answered
Chosen Option : --

Q.8 Fill in the blanks with the correct homophone.

Before planning a trip, considering the _____ for the trip is necessary.

- Ans
- 1. fair
 - 2. fare
 - 3. fore
 - 4. fear

Question ID : 26433092934
Status : Answered
Chosen Option : 2

Q.9 Select the most appropriate meaning of the given idiom.

Done for

- Ans
- 1. Retreated
 - 2. Depreciated
 - 3. Finished a job
 - 4. Ruined

Question ID : 26433086330
Status : Answered
Chosen Option : 3

Q.10 Select the most appropriate meaning of the underlined idiom that can be substituted in the following sentence.

The new Prince is not fit to hold a candle to his dead father.

- Ans
- 1. holding the light to
 - 2. cannot to be compared with
 - 3. holding in high esteem,
 - 4. showing the way to

Question ID : 26433072237
Status : Answered
Chosen Option : 2

Q.11 Select the most appropriate option that can substitute the underlined segment in the given sentence. If there is no need to substitute it, select 'No substitution'.
To stay healthy, you must keep away from smoking.

- Ans
- 1. No substitution
 - 2. you can keep away from smoking.
 - 3. you will keep away from smoking.
 - 4. you may keep away from smoking.

Question ID : 26433093080
Status : Not Answered
Chosen Option : --

Q.12 Select the most appropriate synonym of the given word.

Glimpse

- Ans 1. Vision
 2. Glance
 3. Gawk
 4. See through

Question ID : 26433073393
Status : Answered
Chosen Option : 2

Q.13 Select the INCORRECTLY spelt word.

- Ans 1. Moan
 2. Definite
 3. Extinguish
 4. Consientious

Question ID : 26433073741
Status : Answered
Chosen Option : 4

Q.14 Select the most appropriate option to fill in the blank.

The farmers used to _____ seeds by this time.

- Ans 1. soe
 2. sew
 3. sow
 4. so

Question ID : 26433089070
Status : Answered
Chosen Option : 3

Q.15 Select the most appropriate antonym of the given word.

Extravagant

- Ans 1. Frugal
 2. Wicked
 3. Mean
 4. Wasteful

Question ID : 26433072358
Status : Not Answered
Chosen Option : --

Comprehension:

In the following passage, some words have been deleted. Read the passage carefully and select the most appropriate option to fill in each blank.

The Great Depression was a severe (1) _____ economic depression in the decade (2) _____ World War II. In most countries the depression (3) _____ in about 1929 and lasted until the late 1930s or early 1940s. It was the longest, most widespread, and deepest depression of the 20th century. In the 21st century, the Great Depression is commonly used as an example of how far the world's economy can (4) _____.

The depression originated in the U.S. Economic historians usually (5) _____ the start of the Great Depression to the sudden devastating collapse of US stock market prices on 29 October 1929, known as Black Tuesday; some dispute this conclusion, and see the stock crash as a symptom, rather than a cause, of the Great Depression.

SubQuestion No : 16

Q.16 Select the most appropriate option to fill in blank number 1.

- Ans 1. worldwide
 2. statewide
 3. nationwide
 4. citywide

Question ID : 26433060646

Status : Answered

Chosen Option : 1

Comprehension:

In the following passage, some words have been deleted. Read the passage carefully and select the most appropriate option to fill in each blank.

The Great Depression was a severe (1) _____ economic depression in the decade (2) _____ World War II. In most countries the depression (3) _____ in about 1929 and lasted until the late 1930s or early 1940s. It was the longest, most widespread, and deepest depression of the 20th century. In the 21st century, the Great Depression is commonly used as an example of how far the world's economy can (4) _____.

The depression originated in the U.S. Economic historians usually (5) _____ the start of the Great Depression to the sudden devastating collapse of US stock market prices on 29 October 1929, known as Black Tuesday; some dispute this conclusion, and see the stock crash as a symptom, rather than a cause, of the Great Depression.

SubQuestion No : 17

Q.17 Select the most appropriate option to fill in blank number 2.

- Ans 1. proceeding
 2. receding
 3. succeeding
 4. preceding

Question ID : 26433060647

Status : Answered

Chosen Option : 3

Comprehension:

In the following passage, some words have been deleted. Read the passage carefully and select the most appropriate option to fill in each blank.

The Great Depression was a severe (1) _____ economic depression in the decade (2) _____ World War II. In most countries the depression (3) _____ in about 1929 and lasted until the late 1930s or early 1940s. It was the longest, most widespread, and deepest depression of the 20th century. In the 21st century, the Great Depression is commonly used as an example of how far the world's economy can (4) _____.

The depression originated in the U.S. Economic historians usually (5) _____ the start of the Great Depression to the sudden devastating collapse of US stock market prices on 29 October 1929, known as Black Tuesday; some dispute this conclusion, and see the stock crash as a symptom, rather than a cause, of the Great Depression.

SubQuestion No : 18

Q.18 Select the most appropriate option to fill in blank number 3.

- Ans 1. started
 2. followed
 3. proceeded
 4. ended

Question ID : 26433060648

Status : Answered

Chosen Option : 1

Comprehension:

In the following passage, some words have been deleted. Read the passage carefully and select the most appropriate option to fill in each blank.

The Great Depression was a severe (1) _____ economic depression in the decade (2) _____ World War II. In most countries the depression (3) _____ in about 1929 and lasted until the late 1930s or early 1940s. It was the longest, most widespread, and deepest depression of the 20th century. In the 21st century, the Great Depression is commonly used as an example of how far the world's economy can (4) _____.

The depression originated in the U.S. Economic historians usually (5) _____ the start of the Great Depression to the sudden devastating collapse of US stock market prices on 29 October 1929, known as Black Tuesday; some dispute this conclusion, and see the stock crash as a symptom, rather than a cause, of the Great Depression.

SubQuestion No : 19

Q.19 Select the most appropriate option to fill in blank number 4.

- Ans 1. negate
 2. backtrack
 3. decline
 4. slip

Question ID : 26433060649

Status : Not Answered

Chosen Option : --

Comprehension:

In the following passage, some words have been deleted. Read the passage carefully and select the most appropriate option to fill in each blank.

The Great Depression was a severe (1) _____ economic depression in the decade (2) _____ World War II. In most countries the depression (3) _____ in about 1929 and lasted until the late 1930s or early 1940s. It was the longest, most widespread, and deepest depression of the 20th century. In the 21st century, the Great Depression is commonly used as an example of how far the world's economy can (4) _____.

The depression originated in the U.S. Economic historians usually (5) _____ the start of the Great Depression to the sudden devastating collapse of US stock market prices on 29 October 1929, known as Black Tuesday; some dispute this conclusion, and see the stock crash as a symptom, rather than a cause, of the Great Depression.

SubQuestion No : 20

Q.20 Select the most appropriate option to fill in blank number 5.

- Ans
- 1. merit
 - 2. emblem
 - 3. assign
 - 4. attribute

Question ID : 26433060650
Status : Not Answered
Chosen Option : --

Section : Part-D-Hindi

Q.1 'जो बहुत बोलता है', वाक्यांश के लिए एक शब्द _____ है।

- Ans
- 1. बधिर
 - 2. बंधुआ
 - 3. बहका
 - 4. वाचाल

Question ID : 26433062939
Status : Not Answered
Chosen Option : --

Q.2 निम्नलिखित में से किस वाक्य में 'उत्तम पुरुष सर्वनाम' सम्बन्धी अशुद्धि है?

- Ans
- 1. हमारे गाँव यहाँ से 200 मील दूर है।
 - 2. मुझे दिन में तीन बार जूस पीना होता है।
 - 3. मेरा नाम राहुल है।
 - 4. मुझे कल दिल्ली जाना है।

Question ID : 26433063000
Status : Not Answered
Chosen Option : --

Q.3 निम्नलिखित शब्द के सही पर्यायवाची शब्द का चयन विकल्पों में से कीजिए।
सोना

- Ans 1. कंचन
 2. रजत
 3. सुमन
 4. कंगन

Question ID : 26433066943
Status : Not Answered
Chosen Option : --

Q.4 'तिनकों का घर' वाक्यांश के लिए इनमें से उपयुक्त शब्द कौन-सा है?

- Ans 1. आरसी
 2. महल
 3. कुटज
 4. उटज

Question ID : 26433066888
Status : Not Answered
Chosen Option : --

Q.5 निम्नलिखित में से किस वाक्य में वर्तनीगत अशुद्धि है?

- Ans 1. 'आर्यावर्त' एक राष्ट्रीय दैनिक है।
 2. यहाँ अंतर्विश्वविद्यालय प्रतियोगिता होगी।
 3. वह मेरा इकलौता बेटा है।
 4. उसने मोतियों का एक हार खरीदा।

Question ID : 26433079233
Status : Not Answered
Chosen Option : --

Q.6 निम्न विकल्पों में से शुद्ध वाक्य का चयन कीजिए।

- Ans 1. बेटी बेटा से पूछा।
 2. बेटो बेटियों से पूछा।
 3. बेटे ने बेटी से पूछा।
 4. बेटा ने बेटी से पूछा।

Question ID : 26433063039
Status : Not Answered
Chosen Option : --

Q.7 'वह पढ़ना माँगता है।' इस वाक्य में रेखांकित शब्द के स्थान पर उपयुक्त शब्द क्या होगा?

- Ans
- 1. जाता
 - 2. सोचता
 - 3. चाहता
 - 4. खाता

Question ID : 26433062206
Status : Not Answered
Chosen Option : --

Q.8 पिछले साल गाँव में भयानक बाढ़ आई थी।
उपरोक्त वाक्य में रेखांकित शब्द के विलोम शब्द का चयन कीजिए।

- Ans
- 1. सूखा
 - 2. अकाल
 - 3. नदी
 - 4. पानी

Question ID : 26433069761
Status : Not Answered
Chosen Option : --

Q.9 निम्नलिखित में से 'अपेक्षा' का अर्थ नहीं होता है-

- Ans
- 1. आशा
 - 2. विचार
 - 3. आवश्यकता
 - 4. इच्छा

Question ID : 26433080947
Status : Not Answered
Chosen Option : --

Q.10 'लताओं से आच्छादित रमणीय स्थान'
ऊपर दिए गए वाक्यांश के लिए एक शब्द क्या होगा?

- Ans
- 1. निकुंज
 - 2. वट
 - 3. अमराई
 - 4. जंगल

Question ID : 26433070060
Status : Not Answered
Chosen Option : --

Q.11 'राम ने केबल दो रूपये लिए।' इस वाक्य के किस शब्द में वर्तनीगत अशुद्धि है?

- Ans
- 1. लिए
 - 2. राम
 - 3. रूपये
 - 4. केबल

Question ID : 26433085063
Status : Not Answered
Chosen Option : --

Q.12 'एक और एक ग्यारह' होते हैं।' इस मुहावरे का सही अर्थ है -

- Ans
- 1. गलत लोगों का समूह
 - 2. एक कार्य के दो लाभ
 - 3. संगठन में शक्ति
 - 4. बड़ा समूह

Question ID : 26433062606
Status : Not Answered
Chosen Option : --

Q.13 निम्नलिखित मुहावरे का उपयुक्त अर्थ क्या होगा?
खून का घूंट पीना

- Ans
- 1. भाग जाना
 - 2. चुगली करना
 - 3. कोई गर्म चीज पीना
 - 4. क्रोध दबाना

Question ID : 26433065779
Status : Not Answered
Chosen Option : --

Q.14 'मैं रविवार के दिन तुम्हारे घर आऊंगा।' इस वाक्य में रेखांकित शब्द के स्थान सही पर शब्द क्या होगा?

- Ans
- 1. को
 - 2. में
 - 3. के लिए
 - 4. पर

Question ID : 26433085057
Status : Not Answered
Chosen Option : --

Q.15 'वसन' के दो अर्थ हैं। एक अर्थ है 'स्त्रियों के कमर का एक आभूषण'। इसके दूसरे अर्थ से निम्न वाक्य पूर्ण कीजिए।

'नए _____ से पूजा करने की विधि है।'

- Ans
- 1. घंटी
 - 2. ज्योति
 - 3. वस्त्र
 - 4. सिंदूर

Question ID : 26433079238

Status : Not Answered

Chosen Option : --

Comprehension:

निम्नलिखित गद्यांश में कुछ शब्दों को हटा दिया गया है। दिए गए विकल्पों की सहायता से रिक्त स्थानों की पूर्ति कीजिए। प्रत्येक संख्या के लिए सबसे उपयुक्त विकल्प का चयन कीजिए।
परिश्रम 1. _____ का द्वार है। मनुष्य 2. _____ के सहारे ही विकसित अवस्था तक पहुंचा है। उसी के सहारे उसने अन्न उपजाया। 3. _____ का विकास किया, जिसके सहारे आज यहाँ जगमगाती सभ्यता चल रही है।
4. _____ से किया गया परिश्रम ही परिश्रम कहलाता है। परिश्रम करने वाला मनुष्य सदा सुखी रहता है।
परिश्रमी व्यक्ति का जीवन 5. _____ से पूर्ण होता है।

SubQuestion No : 16

Q.16 रिक्त स्थान 1 की पूर्ति के लिए सबसे उपयुक्त विकल्प का चयन करें।

- Ans
- 1. अवनति
 - 2. उन्नति
 - 3. अधःपतन
 - 4. झुकाव

Question ID : 264330110885

Status : Not Answered

Chosen Option : --

Comprehension:

निम्नलिखित गद्यांश में कुछ शब्दों को हटा दिया गया है। दिए गए विकल्पों की सहायता से रिक्त स्थानों की पूर्ति कीजिए। प्रत्येक संख्या के लिए सबसे उपयुक्त विकल्प का चयन कीजिए।
परिश्रम 1. _____ का द्वार है। मनुष्य 2. _____ के सहारे ही विकसित अवस्था तक पहुंचा है। उसी के सहारे उसने अन्न उपजाया। 3. _____ का विकास किया, जिसके सहारे आज यहाँ जगमगाती सभ्यता चल रही है।
4. _____ से किया गया परिश्रम ही परिश्रम कहलाता है। परिश्रम करने वाला मनुष्य सदा सुखी रहता है।
परिश्रमी व्यक्ति का जीवन 5. _____ से पूर्ण होता है।

SubQuestion No : 17

Q.17 रिक्त स्थान 2 की पूर्ति के लिए सबसे उपयुक्त विकल्प का चयन करें।

- Ans
- 1. विश्राम
 - 2. अवकाश
 - 3. परिश्रम
 - 4. अनुद्यम

Question ID : 264330110886

Status : Not Answered

Chosen Option : --

Comprehension:

निम्नलिखित गद्यांश में कुछ शब्दों को हटा दिया गया है। दिए गए विकल्पों की सहायता से रिक्त स्थानों की पूर्ति कीजिए। प्रत्येक संख्या के लिए सबसे उपयुक्त विकल्प का चयन कीजिए।
परिश्रम 1. _____ का द्वार है। मनुष्य 2. _____ के सहारे ही विकसित अवस्था तक पहुंचा है। उसी के सहारे उसने अन्न उपजाया। 3. _____ का विकास किया, जिसके सहारे आज यहाँ जगमगाती सभ्यता चल रही है।
4. _____ से किया गया परिश्रम ही परिश्रम कहलाता है। परिश्रम करने वाला मनुष्य सदा सुखी रहता है।
परिश्रमी व्यक्ति का जीवन 5. _____ से पूर्ण होता है।

SubQuestion No : 18

Q.18 रिक्त स्थान 3 की पूर्ति के लिए सबसे उपयुक्त विकल्प का चयन करें।

- Ans 1. तकनीक
 2. स्कूल
 3. कॉलेज
 4. कारखाना

Question ID : 264330110887

Status : Not Answered

Chosen Option : --

Comprehension:

निम्नलिखित गद्यांश में कुछ शब्दों को हटा दिया गया है। दिए गए विकल्पों की सहायता से रिक्त स्थानों की पूर्ति कीजिए। प्रत्येक संख्या के लिए सबसे उपयुक्त विकल्प का चयन कीजिए।
परिश्रम 1. _____ का द्वार है। मनुष्य 2. _____ के सहारे ही विकसित अवस्था तक पहुंचा है। उसी के सहारे उसने अन्न उपजाया। 3. _____ का विकास किया, जिसके सहारे आज यहाँ जगमगाती सभ्यता चल रही है।
4. _____ से किया गया परिश्रम ही परिश्रम कहलाता है। परिश्रम करने वाला मनुष्य सदा सुखी रहता है।
परिश्रमी व्यक्ति का जीवन 5. _____ से पूर्ण होता है।

SubQuestion No : 19

Q.19 रिक्त स्थान 4 की पूर्ति के लिए सबसे उपयुक्त विकल्प का चयन करें।

- Ans 1. मन रहित
 2. अमन
 3. मन तथा बुद्धि
 4. अपमान

Question ID : 264330110888

Status : Not Answered

Chosen Option : --

Comprehension:

निम्नलिखित गद्यांश में कुछ शब्दों को हटा दिया गया है। दिए गए विकल्पों की सहायता से रिक्त स्थानों की पूर्ति कीजिए। प्रत्येक संख्या के लिए सबसे उपयुक्त विकल्प का चयन कीजिए।
परिश्रम 1. _____ का द्वार है। मनुष्य 2. _____ के सहारे ही विकसित अवस्था तक पहुंचा है। उसी के सहारे उसने अन्न उपजाया। 3. _____ का विकास किया, जिसके सहारे आज यहाँ जगमगाती सभ्यता चल रही है। 4. _____ से किया गया परिश्रम ही परिश्रम कहलाता है। परिश्रम करने वाला मनुष्य सदा सुखी रहता है। परिश्रमी व्यक्ति का जीवन 5. _____ से पूर्ण होता है।

SubQuestion No : 20

Q.20 रिक्त स्थान 5 की पूर्ति के लिए सबसे उपयुक्त विकल्प का चयन करें।

- Ans**
- 1. नम्रता
 - 2. दीनता
 - 3. स्वाभिमान
 - 4. सौम्यता

Question ID : 264330110889

Status : Not Answered

Chosen Option : --

WWW.GOVtJOBSALERT.COM