

Constable (GD) in CAPFs, NIA, SSF and Rifleman (GD) in Assam Rifles Examination, 2018

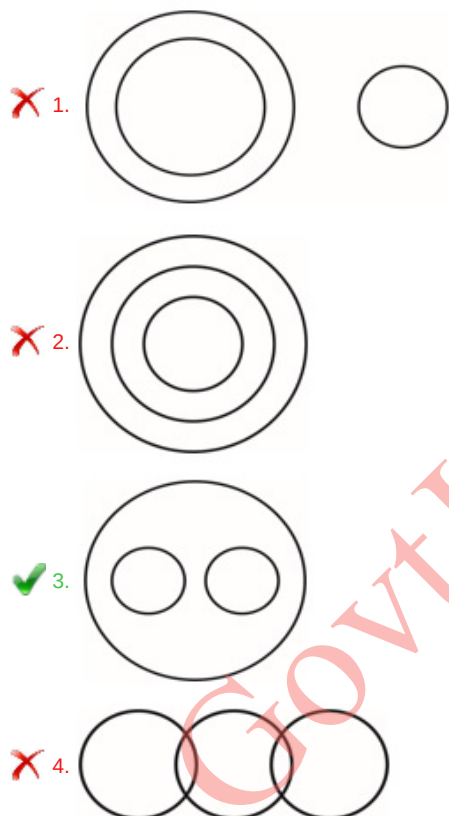
Roll No. :	www.GovtJobsAlert.In
Registration No.	
Name :	
Exam Venue :	ION Digital Zone iDZ 2 Chinamushidiwada
Exam Time :	4:00 PM - 5:30 PM
Exam Date :	15/02/2019

Section : General Section

Q.1 Select the Venn diagram that best represents the given set of classes.

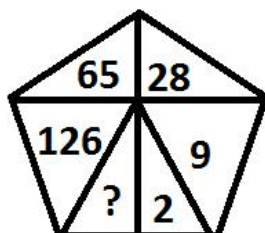
Stationery, Pen, Eraser

Ans



Question ID : 9895803645
Chosen Option : 3

Q.2 Select the option that will correctly replace the question mark (?) in the given pattern.



- Ans 1. 1
 2. 216

3. 217

4. 36

Question ID : 9895803638
Chosen Option : 3

Q.3 Select the option that will correctly replace the question mark (?) in the series.

7, 19, 36, 63, ?

Ans 1. 125

2. 105

3. 115

4. 95

Question ID : 9895803635
Chosen Option : 3

Q.4 Select the option that will correctly replace the question mark (?) in the series.

107, 103, 87, 51, ?

Ans 1. -13

2. 15

3. 13

4. -15

Question ID : 9895803634
Chosen Option : 4

Q.5 In a certain code, COMPUTER is written as CEMOPRTU. How will CUPBOARD be written in that code?

Ans 1. ABCDOPRU

2. ABCDORPU

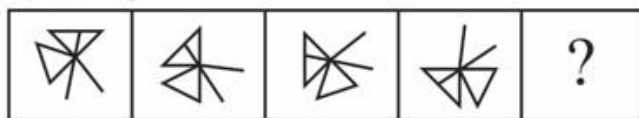
3. ABCDOQRU

4. ABDCOPRU

Question ID : 9895803627
Chosen Option : 3

Q.6 Choose the option that would follow next in the given figure series.

Problem Fig.



A

B

C

D

E

Ans

1.



2.



✓ 3.



✗ 4.



Question ID : 9895803640

Chosen Option : 1

Q.7 The statements below are followed by two conclusions labeled I and II. Assuming that the information in the statements is true, even if it appears at variance with generally established facts, decide which conclusion(s) logically and definitely follow(s) from the information given in the statements.

Statements:

- 1) Some tables are sofas.
- 2) Some sofas are papers.

Conclusion

I: Some sofas are tables.

II: Some papers are sofas.

Ans ✗ 1. Only conclusion I follows.

✗ 2. Only conclusion II follows.

✓ 3. Both conclusions follow.

✗ 4. Neither conclusion I nor conclusion II follows.

Question ID : 9895803633

Chosen Option : 4

Q.8 Select the option that will correctly replace the question mark (?) in the series.

RGN, PIM, NKL, ?

Ans ✓ 1. LMK

✗ 2. LMJ

✗ 3. LVW

✗ 4. LWU

Question ID : 9895803621

Chosen Option : 1

Q.9 Select the option that is related to the third number in the same way as the second number is related to the first number.

54 : 6 :: 42 : ?

Ans ✗ 1. 5

✗ 2. 6

✗ 3. 9

✓ 4. 7

Question ID : 9895803636

Chosen Option : 1

Q.1 In a certain code, JOY is written as 150. How will FEED be written in that code?

Ans ✓ 1. 80

✗ 2. 90

3. 50

4. 20

Question ID : 9895803628

Chosen Option : 1

Q.1 Eight friends A, B, C, D, E, F, G and H are sitting around a circular table facing each other for a lunch. A is opposite D and third to the right of B. G is between A and F. H is to the right of A. E is between C and D. Who is sitting opposite G?

Ans 1. F

2. C

3. B

4. E

Question ID : 9895803630

Chosen Option : 3

Q.1 The statements below are followed by two conclusions labeled I and II. Assuming that the information in the statements is true, even if it appears at variance with generally established facts, decide which conclusion(s) logically and definitely follow(s) from the information given in the statements.

Statements:

1) All spiders are snails.

2) All molars are snails.

Conclusion

I: No spider is a molar.

II: Some spiders are molars.

Ans 1. Only conclusion II follows.

2. Only conclusion I follows.

3. Either conclusion I or conclusion II follows.

4. Both conclusions follow.

Question ID : 9895803632

Chosen Option : 3

Q.1 Choose the option that most closely resembles the mirror image of the given figure when the mirror is placed at the right side.



Ans

1. 

2. 

3. 

4. 

Question ID : 9895803643

Chosen Option : 4

Q.1
4 Choose the odd number out of the given options.

- Ans
- 1. 17
 - 2. 89
 - 3. 63
 - 4. 37

Question ID : 9895803637
Chosen Option : 4

Q.1
5 Choose the odd one out of the given options.

- Ans
- 1. Legs
 - 2. Stomach
 - 3. Heart
 - 4. Kidneys

Question ID : 9895803623
Chosen Option : 4

Q.1
6 Seven friends O, P, Q, R, S, T and U are watching a movie sitting in a row. P is sitting at one extreme end. Q is sitting to the immediate left of S. P is sitting second to the right of T. U is not sitting at any extreme end. O is sitting between R and T. Who is sitting in the middle?

- Ans
- 1. T
 - 2. R
 - 3. O
 - 4. Q

Question ID : 9895803629
Chosen Option : 2

Q.1
7 A square transparent sheet with a pattern is given. How will the pattern appear when the transparent sheet is folded along the dotted line?



- Ans
- 1.
 - 2.
 - 3.
 - 4.

Question ID : 9895803644
Chosen Option : 2

Q.1

8 Choose the odd one out of the given options.

- Ans
- 1. CJK
 - 2. EHK
 - 3. FHJ
 - 4. KOJ

Question ID : 9895803622
Chosen Option : 3

Q.1 Select the option that is related to the third term in the same way as the second term is related to the first term.

9
Ichthyology: Fishes : : Palaeography : ?

- Ans
- 1. Writings
 - 2. Soil
 - 3. Shells
 - 4. Moon

Question ID : 9895803624
Chosen Option : 1

Q.2 Find out the two signs to be interchanged to make the following equation correct.

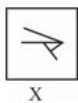
0
 $27 + 27 \times 27 - 27 \div 27 = -701$

- Ans
- 1. - and \times
 - 2. + and \div
 - 3. - and \div
 - 4. \times and \div

Question ID : 9895803639
Chosen Option : 3

Q.2 Choose the option in which the figure marked 'X' is embedded. (Rotation is not allowed)

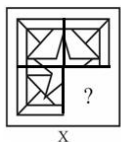
1



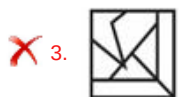
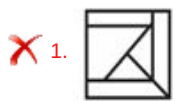
- Ans
- 1.
 - 2.
 - 3.
 - 4.

Question ID : 9895803642
Chosen Option : 2

Q.2 Select a figure from amongst the four alternatives that when placed in the blank space (?) of figure X will complete the pattern. (Rotation is not allowed).



Ans



Question ID : 9895803641
Chosen Option : 4

Q.2 J, K, L, M, N and O are six teachers. Each one teaches a different subject out of Hindi, English, Math, Science, Social Science and Arts, not necessarily in the same order. Each of them teaches on only one day, from Monday to Saturday, not necessarily in the same order.

J teaches Science on Wednesday. O teaches Math second after J. K teaches on the first day of the week, but teaches neither Hindi nor English. M teaches English before N and L teaches Arts before J. Which subject is taught on Thursday?

- Ans
- 1. Science
 - 2. Arts
 - 3. English
 - 4. Social Science

Question ID : 9895803631
Chosen Option : 4

Q.2 Select the option that is related to the third term in the same way as the second term is related to the first term.

BFH : EIK :: GKM : ?

- Ans
- 1. JNP
 - 2. KMG
 - 3. MKG
 - 4. IKM

Question ID : 9895803626
Chosen Option : 1

Q.2 Select the option that is related to the third term in the same way as the second term is related to the first term.

Innocent : Guilty :: Moistened : ?

- Ans
- 1. Drench
 - 2. Dried
 - 3. Desire
 - 4. Wet

Question ID : 9895803625
Chosen Option : 2

Q.2
6 Who started the newspaper Mook Nayak in the year 1920?

- Ans
- 1. Dadabhai Naoroji
 - 2. Jyotiba Phule
 - 3. B. R Ambedkar
 - 4. Mahadeo Govind Ranade

Question ID : 9895805012
Chosen Option : 3

Q.2
7 What was the official mascot of the third Asian Para Games 2018?

- Ans
- 1. Momo
 - 2. Appu
 - 3. Ezomon
 - 4. Chim Yen

Question ID : 9895805005
Chosen Option : 3

Q.2
8 Which part protects an unopened flower?

- Ans
- 1. Sepal
 - 2. Stamen
 - 3. Petal
 - 4. Anther

Question ID : 9895805017
Chosen Option : 3

Q.2
9 Which schedule was added to the Indian Constitution in 1992 as a result of 73rd amendment?

- Ans
- 1. 12th
 - 2. 9th
 - 3. 8th
 - 4. 11th

Question ID : 9895805013
Chosen Option : 1

Q.3
0 Which of the following is a Maharatna that is a central public sector enterprise?

- Ans
- 1. Hindustan Petroleum Corporation Limited
 - 2. ONGC Videsh Limited
 - 3. NTPC Limited
 - 4. PEC limited

Question ID : 9895805024
Chosen Option : 4

Q.3
1 The 2009 Nobel Peace prize was awarded to _____ for his extraordinary efforts to strengthen International Diplomacy.

- Ans
- 1. Justin Trudeau
 - 2. Kofi Annan
 - 3. Barack Obama
 - 4. Dalai Lama

Question ID : 9895805004
Chosen Option : 1

Q.3
2 What is the party symbol of Communist Party of India (M)?

- Ans
- 1. Elephant
 - 2. Lotus flower
 - 3. Broom
 - 4. Hammer and Sickle

Question ID : 9895805016
Chosen Option : 2

Q.3
3 Name the bacteria that causes dysentery.

- Ans
- 1. Shigella
 - 2. Vibrio Cholerae
 - 3. Streptococcus pyogenes bacteria
 - 4. Mycobacterium tuberculosis

Question ID : 9895805020
Chosen Option : 3

Q.3
4 Which of the below is an alloy of mercury?

- Ans
- 1. Brass
 - 2. Nichrome
 - 3. Stellite
 - 4. Amalgam

Question ID : 9895805008
Chosen Option : 4

Q.3
5 Who founded the Swaraj Party?

- Ans
- 1. C.R. Das and Motilal Nehru
 - 2. Bal Gangadhar Tilak and Lala Lajpat Rai
 - 3. Mahatma Gandhi and B.R. Ambedkar
 - 4. Jawaharlal Nehru and Motilal Nehru

Question ID : 9895805007
Chosen Option : 2

Q.3
6 When did the Indian Constituent assembly adopt the constitution?

Ans

- 1. 26 November 1949
- 2. 26 January 1950
- 3. 26 November 1950
- 4. 26 January 1949

Question ID : 9895805023
Chosen Option : 3

Q.3
7 Liquefied petroleum gas consists of:

- Ans
- 1. Hexane and benzene
 - 2. Nitrogen and ethane
 - 3. Propane and butane
 - 4. Nonane and octane

Question ID : 9895805009
Chosen Option : 4

Q.3
8 Who led the revolt of 1857 in the city of Kanpur?

- Ans
- 1. Rani Lakshmi Bai
 - 2. Nana Sahib
 - 3. Begum Hazrat Mahal
 - 4. Kunwar Singh

Question ID : 9895805019
Chosen Option : 2

Q.3
9 Which of the following is NOT the role of Food Corporation of India?

- Ans
- 1. Ensuring that farmers are not forced to sell their produce below MSP
 - 2. Making laws related to agricultural credit and indebtedness
 - 3. Procurement of buffer stock
 - 4. Setting up purchase centres to buy produce from the farmers

Question ID : 9895805025
Chosen Option : 3

Q.4
0 Who is the winner of Man Booker Award 2018 for the book Milkman?

- Ans
- 1. Anna Burns
 - 2. Daisy Johnson
 - 3. Richard Powers
 - 4. Robin Robertson

Question ID : 9895805006
Chosen Option : 2

Q.4
1 Which Chinese business tycoon (also the richest man of China) recently stepped down from Alibaba, the company he co-founded?

- Ans 1. Jack Ma
 2. Lei Jun
 3. Daniel Zhang
 4. Guo Guangchang

Question ID : 9895805026
Chosen Option : 2

Q.4 Which major cities of the country are connected by the Golden quadrilateral super highways?

2

- Ans 1. Delhi-Varanasi-Chennai-Pune-Delhi
 2. Delhi-Dhanbad-Vishakapatnam-Surat-Delhi
 3. Delhi-Kolkata-Chennai-Mumbai-Delhi
 4. Delhi-Kolkata-Angola-Mumbai-Delhi

Question ID : 9895805003
Chosen Option : 2

Q.4 The new year celebrated by Maharashtra Hindus is referred to by which name?

3

- Ans 1. Ugadi
 2. Puthando
 3. Vishu
 4. Gudi Padwa

Question ID : 9895805010
Chosen Option : 3

Q.4 What does road density indicate?

4

- Ans 1. The length of road per 100 sq. km of land area
 2. The length of road per 1000 km of land area
 3. The length of road per 1000 sq. km of land area
 4. The length of road per 100 km of land area

Question ID : 9895805018
Chosen Option : 4

Q.4 Out of the given options, which crop grows in black soil?

5

- Ans 1. Cashew nut
 2. Sugarcane
 3. Tea
 4. Cotton

Question ID : 9895805015
Chosen Option : 3

Q.4 Pandavani is a folk singing style popular in the state of:

6

- Ans 1. Bihar

- 2. Jharkhand
- 3. Chattisgarh
- 4. Uttar Pradesh

Question ID : 9895805014
Chosen Option : 1

Q.4
7 The southern most Jyotirlinga temple is located in which Indian state?

- Ans
- 1. Andhra Pradesh
 - 2. Karnataka
 - 3. Tamil Nadu
 - 4. Kerala

Question ID : 9895805021
Chosen Option : 4

Q.4
8 Setting up of which of these is associated with White Revolution in India?

- Ans
- 1. Mother Dairy
 - 2. Paras
 - 3. Saras
 - 4. Amul

Question ID : 9895805027
Chosen Option : 2

Q.4
9 _____ is a chemical process or a reaction between fuel (hydrocarbon) and oxygen, producing heat and light energy resulting in a flame.

- Ans
- 1. Convection
 - 2. Carbonisation
 - 3. Combustion
 - 4. Conduction

Question ID : 9895805011
Chosen Option : 3

Q.5
0 Who was awarded the 'FIFA Player of the Year 2018'?

- Ans
- 1. Mohammed Salah
 - 2. Cristiano Ronaldo
 - 3. Luka Modric
 - 4. Lionel Messi

Question ID : 9895805022
Chosen Option : 1

Q.5
1 The value of $\left(\frac{7}{8} \div 5\frac{1}{4} \times 7\frac{1}{5} - \frac{3}{20} \text{ of } \frac{2}{3}\right) \div \frac{1}{2} + \left(\frac{3}{5} \times 7\frac{1}{2} + \frac{2}{3} \div \frac{8}{15}\right)$ is equal to $7 + k$, where $k =$

- Ans
- 1. $\frac{3}{5}$
 - 2. $\frac{1}{5}$

3. $\frac{1}{20}$

4. $\frac{19}{20}$

Question ID : 9895805129

Chosen Option : 3

Q.5
2 A can complete $33\frac{1}{2}\%$ of a work in 5 days and B can complete 40% of the same work in 10 days. They work together for 5 days and then B left the work. A alone will complete the remaining work in:

Ans 1. $7\frac{1}{2}$ days

2. 5 days

3. 7 days

4. $5\frac{1}{2}$ days

Question ID : 9895805148

Chosen Option : 4

Q.5
3 The value of $\frac{[5.7 + 1.9 \text{ of } 0.4] + 1.5}{1.5 + [12.5 - (7.5 - 2.5)]}$ is:

Ans 1. 0.25

2. 0.5

3. 25

4. 5

Question ID : 9895805130

Chosen Option : 1

Q.5
4 If A is 75% more than B, C is 40% less than D and D is 20% more than A, then which one of the following is true?

Ans 1. $63C = 50B$

2. $25B = 21C$

3. $21B = 25C$

4. $50C = 63B$

Question ID : 9895805136

Chosen Option : 1

Q.5
5 The average weight of all the students in a class was 45.5 kg. Later on 5 students weighing 44.6 kg, 43.4 kg, 44 kg, 45.5 kg and 43.5 kg leave the class. As a result, the average weight of the remaining students increases by 500g. What was the number of students in the class, initially?

Ans 1. 18

2. 20

3. 16

4. 21

Question ID : 9895805132

Chosen Option : 4

Q.5
6 In finding the HCF of two numbers by division method, the last divisor is 174 and the quotient are 1, 7 and 2, respectively. If the sum of the two numbers is divided by 11, the remainder is:

Ans 1. 2

- 2. 8
- 3. 1
- 4. 7

Question ID : 9895805128
Chosen Option : 3

Q.5 A person sells an article at a certain price. What is his gain percent, if by selling it at 80% of that price, he loses 16%?
7

- Ans
- 1. 4
 - 2. 4.5
 - 3. 5
 - 4. 6

Question ID : 9895805134
Chosen Option : 1

Q.5 Study the following table and answer questions:
8

Number of candidates appeared in an examination from five cities:

Cities	Number of candidate (in thousands)	Ratio of candidates passed and failed
A	75	3 : 2
B	124	16 : 15
C	108	7 : 5
D	81	5 : 4
E	148	17 : 20

The number of candidates appearing for the examination from city D is what percent of the total number of candidates failed in cities A and B?

- Ans
- 1. 72
 - 2. 87
 - 3. 80
 - 4. 90

Question ID : 9895805152
Chosen Option : 4

Q.5 A shopkeeper allows 20% discount on the marked price of an article and still makes a profit of 28%. If he sells it at 12.5% discount on the marked price, then his gain percent is:
9

- Ans
- 1. 20.5
 - 2. 24.6
 - 3. 36
 - 4. 40

Question ID : 9895805133
Chosen Option : 1

Q.6 A boat goes 2 km upstream and 3 km downstream in 45 minutes while it goes 3 km upstream and 9 km downstream in 90 minutes. What is the speed (in km/hr) of boat when going downstream?
0

- Ans
- 1. 9
 - 2. 10.5
 - 3. 12
 - 4. 9.5

Question ID : 9895805146
Chosen Option : 4

Q.6
1 What is the compound interest on a sum of ₹7500 for $2\frac{3}{4}$ years at 8% p.a., the interest being compounded yearly?
(nearest to an integer)

- Ans
- 1. ₹1248
 - 2. ₹1773
 - 3. ₹1348
 - 4. ₹1783

Question ID : 9895805141
Chosen Option : 3

Q.6
2 If x is the fourth proportional to 36, 48 and 15, and 4.2, y , 9 and 13.5 are in proportion, then the difference between y and x is:

- Ans
- 1. 13.7
 - 2. 16.4
 - 3. 15.6
 - 4. 14.8

Question ID : 9895805137
Chosen Option : 1

Q.6
3 The driver of a mini bus driving at 82 km/hr locates a motor bike 150 m ahead of him. After 20 seconds, the motorbike was 100 m behind the bus. The speed (in km/hr) of the motorbike is:

- Ans
- 1. 39
 - 2. 37
 - 3. 35
 - 4. 40

Question ID : 9895805147
Chosen Option : 4

Q.6
4 9 men and 12 women can complete a work in 4 days, whereas 3 men and 6 women can complete it in 10 days. The number of days in which 15 women will complete the work is:

- Ans
- 1. 9
 - 2. 10
 - 3. 12
 - 4. 8

Question ID : 9895805149
Chosen Option : 2

Q.6
5 The average of 13 numbers is 65. The average of first three numbers is 63 and that of next numbers is 64.5. The 11th number is 2 more than the 12th number but less than the 13th by 2.5. What is the average of 11th and 12th number?

- Ans
- 1. 67.5
 - 2. 67
 - 3. 65.5
 - 4. 65

Question ID : 9895805131
Chosen Option : 4

Q.6
6 An alloy X contains by weight copper and tin in the ration 7 : 3 and alloy Y contain copper and tin in the ratio 3 : 2. X and Y are taken in the ratio 4 : 1 and melted to form alloy Z. The percentage of copper in alloy Z is:

- Ans
- 1. 70

- 2. 56
- 3. 65
- 4. 68

Question ID : 9895805139
Chosen Option : 2

Q.6 The radius of the base of a conical tent is 5 m and its height is 12 m. how many metres of canvas of width 5 metres will
7 be required to make it? (use $\pi = \frac{22}{7}$)

- Ans
- 1. $42\frac{3}{7}$
 - 2. $40\frac{6}{7}$
 - 3. $40\frac{3}{7}$
 - 4. $42\frac{5}{7}$

Question ID : 9895805145
Chosen Option : 2

Q.6 The area of a circular park is 3π times the area of a triangular field with sides 20 m, 20 m and 24 m. What is the
8 perimeter (nearest to an integer) of the circular park?

- Ans
- 1. 151
 - 2. 156
 - 3. 162
 - 4. 153

Question ID : 9895805143
Chosen Option : 3

Q.6 Study the following table and answer questions:
9

Number of candidates appeared in an examination from five cities:

Cities	Number of candidate (in thousands)	Ratio of candidates passed and failed
A	75	3 : 2
B	124	16 : 15
C	108	7 : 5
D	81	5 : 4
E	148	17 : 20

The number of cities, in which pass percentage of candidates is more than 55%, is:

- Ans
- 1. 3
 - 2. 2
 - 3. 4
 - 4. 1

Question ID : 9895805151
Chosen Option : 2

Q.7 The median of the observations 10, 11, 13, 17, $x + 2$, $x + 4$, 31, 33, 36, 42, arranged in ascending order 24. What is the
0 mean of the data?

- Ans 1. 25.2
 2. 24.1
 3. 25.4
 4. 23.9

Question ID : 9895805142
 Chosen Option : 4

Q.7
 1 A certain sum amounts to ₹11760 in $2\frac{1}{2}$ years at 9% p.a. simple interest. What will be the simple interest on the same sum for $4\frac{2}{3}$ years at 15% p.a?

- Ans 1. ₹6336
 2. ₹6363
 3. ₹6436
 4. ₹6433

Question ID : 9895805140
 Chosen Option : 2

Q.7
 2 Water in a canal 3 m wide and 1.2 m deep, is flowing with the velocity of 10 km/h. how much area (in hectares) will it irrigate in half an hour, if 9 cm of standing water is needed?

- Ans 1. 20
 2. 18.8
 3. 21
 4. 20.4

Question ID : 9895805144
 Chosen Option : 2

Q.7
 3 Study the following table and answer questions:

Number of candidates appeared in an examination from five cities:

Cities	Number of candidate (in thousands)	Ratio of candidates passed and failed
A	75	3 : 2
B	124	16 : 15
C	108	7 : 5
D	81	5 : 4
E	148	17 : 20

The ratio of the total number of candidates who passed from cities A and C to that who failed in cities B and E is:

- Ans 1. 7 : 9
 2. 53 : 66
 3. 9 : 11
 4. 4 : 7

Question ID : 9895805150
 Chosen Option : 2

Q.7
 4 Ritu sold an article at a loss of 12%. Had she sold it for ₹55.80 more, she would have gained 13%. To gain 10%, she must sell it for ₹:

- Ans 1. 274.80
 2. 280.46
 3. 245.52
 4. 271.60

Question ID : 9895805135
Chosen Option : 3

Q.7 A sum of 3392 is divided among A, B, C and D such that the ratio for shares of A and B is 2 : 5, that of B and C is 3 : 7 and that of C and D is 5 : 8. What is the share of C?

- Ans
- 1. ₹1060
 - 2. ₹1696
 - 3. ₹848
 - 4. ₹840

Question ID : 9895805138
Chosen Option : 1

Section : English Language

Q.1 Select the most appropriate word to fill in the blank.

Fortunately, only a few _____ were hurt in the train accident.

- Ans
- 1. customers
 - 2. passengers
 - 3. clients
 - 4. vendors

Question ID : 9895804585
Chosen Option : 2

Q.2 Select the option that means the same as the given idiom.

State-of-the-art

- Ans
- 1. Very large
 - 2. Scientific
 - 3. Creatively made
 - 4. Most advanced

Question ID : 9895804587
Chosen Option : 4

Q.3 Select the word which means the same as the group of words given.

One who does not drink alcohol.

- Ans
- 1. vegetarian
 - 2. faithful
 - 3. religious
 - 4. teetotaler

Question ID : 9895804588
Chosen Option : 3

Q.4 Select the antonym of the given word.

MAJOR

- Ans
- 1. Significant
 - 2. Leading
 - 3. Powerless
 - 4. Minor

Question ID : 9895804583
Chosen Option : 4

Q.5 Select the most appropriate option to fill in the blank.

I wish to travel the whole world, but I _____ afford it.

- Ans
- 1. shouldn't
 - 2. wouldn't
 - 3. can't
 - 4. won't

Question ID : 9895804572
Chosen Option : 3

Q.6 From the given options, identify the segment in the sentence which contains the grammatical error.

I know the most easiest way to solve this problem.

- Ans
- 1. I know
 - 2. most easiest
 - 3. to solve
 - 4. this problem

Question ID : 9895804566
Chosen Option : 1

Q.7 Select the synonym of the given word.

RARELY

- Ans
- 1. Usually
 - 2. Often
 - 3. Seldom
 - 4. Frequently

Question ID : 9895804580
Chosen Option : 1

Q.8 Select the synonym of the given word.

ANNUAL

- Ans
- 1. Timely
 - 2. Routine
 - 3. Yearly
 - 4. Basic

Question ID : 9895804581

Chosen Option : 3

Q.9 Select the correctly spelt word.

- Ans
- 1. Eveluation
 - 2. Evaluation
 - 3. Evaluasion
 - 4. Evaluetion

Question ID : 9895804591

Chosen Option : 3

Q.1 Select the most appropriate option to substitute the underlined segment in the given sentence. If there is no need to substitute it, select No improvement.

The Constitution of India was prepared after a thorough study of constitutions of various countries.

- Ans
- 1. with a thorough
 - 2. before a thorough
 - 3. in a thorough
 - 4. No improvement

Question ID : 9895804570

Chosen Option : 4

Q.1 Select the most appropriate option to fill in the blank.

_____ you hurry up, you will be late.

- Ans
- 1. Unless
 - 2. Although
 - 3. If
 - 4. Since

Question ID : 9895804573

Chosen Option : 3

Q.1 Select the most appropriate option to substitute the underlined segment in the given sentence. If there is no need to substitute it, select No improvement.

Much of the people in the train were asleep at the time of the accident.

- Ans
- 1. Little of the people
 - 2. No improvement
 - 3. Most of the people
 - 4. More of the people

Question ID : 9895804571

Chosen Option : 1

Q.1 Select the most appropriate word to fill in the blank.

He is six feet _____.

- Ans
- 1. long

2. high

3. tall

4. short

Question ID : 9895804584

Chosen Option : 2

Q.1 Select the most appropriate option to substitute the underlined segment in the given sentence. If there is no need to substitute it, select No improvement.

4

The terrain of India is make of mountains, plateaus and plains.

Ans 1. No improvement

2. is made of

3. is making of

4. is makes of

Question ID : 9895804569

Chosen Option : 3

Comprehension:

In the following passage some words have been deleted. Fill in the blanks with the help of the alternatives given.

The sky was always a deep sapphire blue. The snow was hard and only by cutting steps in (1) _____ we were able to walk. A false move would have been (2) _____. Stopping at every step, (3) _____ on our axes, we tried to (4) _____ down our hearts, which were (5) _____ as though they would burst.

SubQuestion No : 15

Q.1 Select the most appropriate option that will fill in the blank number 1.

Ans 1. this

2. that

3. them

4. it

Question ID : 9895804575

Chosen Option : 3

Comprehension:

In the following passage some words have been deleted. Fill in the blanks with the help of the alternatives given.

The sky was always a deep sapphire blue. The snow was hard and only by cutting steps in (1) _____ we were able to walk. A false move would have been (2) _____. Stopping at every step, (3) _____ on our axes, we tried to (4) _____ down our hearts, which were (5) _____ as though they would burst.

SubQuestion No : 16

Q.1 Select the most appropriate option that will fill in the blank number 2.

Ans

- 1. danger
- 2. fatal
- 3. disaster
- 4. final

Question ID : 9895804576
Chosen Option : 4

Comprehension:

In the following passage some words have been deleted. Fill in the blanks with the help of the alternatives given.

The sky was always a deep sapphire blue. The snow was hard and only by cutting steps in (1) _____ we were able to walk. A false move would have been (2) _____. Stopping at every step, (3) _____ on our axes, we tried to (4) _____ down our hearts, which were (5) _____ as though they would burst.

SubQuestion No : 17

Q.1
7 Select the most appropriate option that will fill in the blank number 3.

- Ans
- 1. leans
 - 2. leaned
 - 3. leaning
 - 4. lean

Question ID : 9895804577
Chosen Option : 4

Comprehension:

In the following passage some words have been deleted. Fill in the blanks with the help of the alternatives given.

The sky was always a deep sapphire blue. The snow was hard and only by cutting steps in (1) _____ we were able to walk. A false move would have been (2) _____. Stopping at every step, (3) _____ on our axes, we tried to (4) _____ down our hearts, which were (5) _____ as though they would burst.

SubQuestion No : 18

Q.1
8 Select the most appropriate option that will fill in the blank number 4.

- Ans
- 1. compose
 - 2. calm
 - 3. pacify
 - 4. soothe

Question ID : 9895804578
Chosen Option : 3

Comprehension:

In the following passage some words have been deleted. Fill in the blanks with the help of the alternatives given.

The sky was always a deep sapphire blue. The snow was hard and only by cutting steps in (1) _____ we were able to walk. A false move would have been (2) _____. Stopping at every step, (3) _____ on our axes, we tried to (4) _____ down our hearts, which were (5) _____ as though they would burst.

SubQuestion No : 19

Q.1
9 Select the most appropriate option that will fill in the blank number 5.

- Ans
- 1. thumping
 - 2. crushing
 - 3. thrashing
 - 4. moving

Question ID : 9895804579
Chosen Option : 4

Q.2
0 Select the word which means the same as the group of words given.

One who cannot read or write.

- Ans
- 1. ignoble
 - 2. illegible
 - 3. illiterate
 - 4. ignorant

Question ID : 9895804589
Chosen Option : 1

Q.2
1 Select the antonym of the given word.

URBAN

- Ans
- 1. Developed
 - 2. Rural
 - 3. Modern
 - 4. Backward

Question ID : 9895804582
Chosen Option : 1

Q.2
2 From the given options, identify the segment in the sentence which contains the grammatical error.

He is a young man about twenty-five years but very learned.

- Ans
- 1. He is
 - 2. a young man
 - 3. but very learned.
 - 4. about twenty-five years

Question ID : 9895804567
Chosen Option : 4

Q.2
3 Select the option that means the same as the given idiom.

To keep one's fingers crossed

- Ans
- 1. To wish for the best
 - 2. To be very happy
 - 3. To try very hard
 - 4. To be frightened

Question ID : 9895804875
Chosen Option : 2

Q.2
4 Select the correctly spelt word.

- Ans
- 1. Clarence
 - 2. Clearance
 - 3. Clearence
 - 4. Clearance

Question ID : 9895804590
Chosen Option : 3

Q.2
5 From the given options, identify the segment in the sentence which contains the grammatical error.

My sister tried to tempt me with sweets so that I ought not tell our parents about the vase she broke.

- Ans
- 1. with sweets
 - 2. ought not tell
 - 3. tried to tempt me
 - 4. about the vase

Question ID : 9895804568
Chosen Option : 1

Section : Hindi Language

Q.1 दिए गए वाक्य का वह भाग ज्ञात करें जिसमें कोई त्रुटि है।

संवेदना के बिना कोई भाषा जीवंत नहीं हो सकता।

- Ans
- 1. कोई भाषा
 - 2. संवेदना के बिना
 - 3. हो सकता।
 - 4. जीवंत नहीं

Question ID : 9895804903
Chosen Option : --

Q.2

दिये गये वाक्यांश के लिए एक शब्द दीजिये।

जो आँखों के सामने न हो

- Ans
- 1. समक्ष
 - 2. अपरोक्ष
 - 3. परोक्ष
 - 4. प्रत्यक्ष

Question ID : 9895804924
Chosen Option : --

Q.3 दिये गये वाक्यांश के लिए एक शब्द दीजिये।

जो कभी न मरे

- Ans
- 1. अमर
 - 2. अजर
 - 3. आमरण
 - 4. नज़र

Question ID : 9895804925
Chosen Option : --

Q.4 रिक्त स्थान को भरने के लिए उपयुक्त शब्द का चयन करें।

वह _____ तेज भागता है।

- Ans
- 1. सबसे
 - 2. तुमको
 - 3. आपको
 - 4. मुझे

Question ID : 9895804909
Chosen Option : --

Q.5 सही वर्तनी वाले शब्द का चयन करें।

- Ans
- 1. सथावर
 - 2. स्थाबर
 - 3. स्थावर
 - 4. स्थावार

Question ID : 9895804926
Chosen Option : --

Q.6 रिक्त स्थान को भरने के लिए उपयुक्त शब्द का चयन करें।

यही मेरी और _____ परिवार की कामना है।

- Ans
- 1. अपने

2. हमारी
 3. इसने
 4. मेरे

Question ID : 9895804910
Chosen Option : --

Q.7 दिए गए वाक्य में रेखांकित खंड को प्रतिस्थापित करने के लिए सबसे उपयुक्त विकल्प का चयन करें।

उसे पक्का विश्वास था कि बड़े व्यक्ति ने कोई अपराध किया है।

- Ans 1. पक्का विश्वास थे
 2. पक्के विश्वास था
 3. पक्की विश्वास था
 4. पक्का विश्वास था

Question ID : 9895804906
Chosen Option : --

Comprehension:

निम्नलिखित गद्यांश के रिक्त स्थानों की पूर्ति गद्यांश के नीचे दिए गए प्रश्नों के अनुसार कीजिए-

जननी और जन्मभूमि _____ (1) हैं। _____ (2) हमें जन्म देती है और मातृभूमि अपने अन्न-जल से हमारा पालन-पोषण करती है। इसीलिए माँ के ऋण से _____ (3) होना संभव नहीं है। धरती की _____ (4) में लोट-पोट कर हम बड़े होते हैं। तभी तो कहा गया है, जननी और जन्मभूमि _____ (5) से भी श्रेष्ठ है।

SubQuestion No : 8

Q.8 गद्यांश में संकेतित रिक्त स्थान (1) के लिए उपयुक्त शब्द होगा।

- Ans 1. महान
 2. तुच्छ
 3. उत्तम
 4. हीन

Question ID : 9895804913
Chosen Option : --

Comprehension:

निम्नलिखित गद्यांश के रिक्त स्थानों की पूर्ति गद्यांश के नीचे दिए गए प्रश्नों के अनुसार कीजिए-

जननी और जन्मभूमि _____ (1) हैं। _____ (2) हमें जन्म देती है और मातृभूमि अपने अन्न-जल से हमारा पालन-पोषण करती है। इसीलिए माँ के ऋण से _____ (3) होना संभव नहीं है। धरती की _____ (4) में लोट-पोट कर हम बड़े होते हैं। तभी तो कहा गया है, जननी और जन्मभूमि _____ (5) से भी श्रेष्ठ है।

SubQuestion No : 9

Q.9 गद्यांश में संकेतित रिक्त स्थान (2) के लिए उपयुक्त शब्द होगा।

- Ans
- 1. माता
 - 2. नदी
 - 3. स्त्री
 - 4. धरती

Question ID : 9895804914
Chosen Option : --

Comprehension:

निम्नलिखित गद्यांश के रिक्त स्थानों की पूर्ति गद्यांश के नीचे दिए गए प्रश्नों के अनुसार कीजिए-

जननी और जन्मभूमि _____ (1) हैं। _____ (2) हमें जन्म देती है और मातृभूमि अपने अन्न-जल से हमारा पालन-पोषण करती है। इसीलिए माँ के ऋण से _____ (3) होना संभव नहीं है। धरती की _____ (4) में लोट-पोट कर हम बड़े होते हैं। तभी तो कहा गया है, जननी और जन्मभूमि _____ (5) से भी श्रेष्ठ है।

SubQuestion No : 10

Q.10 गद्यांश में संकेतित रिक्त स्थान (3) के लिए उपयुक्त शब्द होगा।

- Ans
- 1. ऋणी
 - 2. उऋण
 - 3. कर्जदार
 - 4. उत्तीर्ण

Question ID : 9895804915
Chosen Option : --

Comprehension:

निम्नलिखित गद्यांश के रिक्त स्थानों की पूर्ति गद्यांश के नीचे दिए गए प्रश्नों के अनुसार कीजिए-

जननी और जन्मभूमि _____ (1) हैं। _____ (2) हमें जन्म देती है और मातृभूमि अपने अन्न-जल से हमारा पालन-पोषण करती है। इसीलिए माँ के ऋण से _____ (3) होना संभव नहीं है। धरती की _____ (4) में लोट-पोट कर हम बड़े होते हैं। तभी तो कहा गया है, जननी और जन्मभूमि _____ (5) से भी श्रेष्ठ है।

SubQuestion No : 11

Q.1 गद्यांश में संकेतित रिक्त स्थान (4) के लिए उपयुक्त शब्द होगा।

- Ans
- 1. रजत
 - 2. मकरंद
 - 3. पराग
 - 4. रज

Question ID : 9895804916
Chosen Option : --

Comprehension:

निम्नलिखित गद्यांश के रिक्त स्थानों की पूर्ति गद्यांश के नीचे दिए गए प्रश्नों के अनुसार कीजिए-

जननी और जन्मभूमि _____ (1) हैं। _____ (2) हमें जन्म देती है और मातृभूमि अपने अन्न-जल से हमारा पालन-पोषण करती है। इसीलिए माँ के ऋण से _____ (3) होना संभव नहीं है। धरती की _____ (4) में लोट-पोट कर हम बड़े होते हैं। तभी तो कहा गया है, जननी और जन्मभूमि _____ (5) से भी श्रेष्ठ है।

SubQuestion No : 12

Q.2 गद्यांश में संकेतित रिक्त स्थान (5) के लिए उपयुक्त शब्द होगा।

- Ans
- 1. पृथ्वी
 - 2. स्वर्ग
 - 3. सूर्य
 - 4. आकाश

Question ID : 9895804917

Chosen Option : --

Q.1 निम्नलिखित में से उस विकल्प का चयन करें जो 'आस्तीन का साँप' मुहावरे का अर्थ व्यक्त करता है।

- Ans
- 1. धोखेबाज मित्र
 - 2. सच्चा मित्र
 - 3. आस्तीन से साँप निकालना
 - 4. आस्तीन में साँप पालना

Question ID : 9895804922

Chosen Option : --

Q.1 दिए गए वाक्य का वह भाग जात करें जिसमें कोई त्रुटि है।

भारत इक्कीसवीं सदियों में बेरोजगारी और गरीबी जैसी समस्याओं से मुक्ति पा सकेगा।

- Ans
- 1. मुक्ति पा सकेगा।
 - 2. बेरोजगारी और गरीबी
 - 3. जैसी समस्याओं से
 - 4. भारत इक्कीसवीं सदियों में

Question ID : 9895804904

Chosen Option : --

Q.1 रिक्त स्थान को भरने के लिए उपयुक्त शब्द का चयन करें।

बिजली _____ पर बारिश नहीं हुई।

- Ans
- 1. भड़की
 - 2. नाची
 - 3. कड़की
 - 4. जागी

Question ID : 9895804911

Chosen Option : --

Q.1 दिए गए वाक्य में रेखांकित खंड को प्रतिस्थापित करने के लिए सबसे उपयुक्त विकल्प का चयन करें।

दिल्ली से मुंबई आने वाला ट्रेन दो घंटे की देरी से आएगी।

- Ans
- 1. आनी वाला ट्रेन
 - 2. आने वाली ट्रेन
 - 3. आने वाला ट्रेन
 - 4. आना वाली ट्रेन

Question ID : 9895804907

Chosen Option : --

Q.1
7

रिक्त स्थान को भरने के लिए उपयुक्त शब्द का चयन करें।

कुर्सी के _____ मेरी कलम गिर गई।

- Ans
- 1. भीतर
 - 2. दूर
 - 3. अंदर
 - 4. नीचे

Question ID : 9895804908
Chosen Option : --

Q.1 दिए गए वाक्य का वह भाग ज्ञात करें जिसमें कोई त्रुटि है।

आत्मा को स्वस्थ रखने के लिए शरीर का स्वस्थ होनी अनिवार्य है।

- Ans
- 1. आत्मा को
 - 2. शरीर का स्वस्थ होनी
 - 3. अनिवार्य है।
 - 4. स्वस्थ रखने के लिए

Question ID : 9895804902
Chosen Option : --

Q.1 दिए गए शब्द का विलोम चुनें।

आधुनिक

- Ans
- 1. प्राचीन
 - 2. अधुनातन
 - 3. इहलोक
 - 4. परलोक

Question ID : 9895804918
Chosen Option : --

Q.2 दिए गए शब्द का विलोम चुनें।

निःस्वार्थ

- Ans
- 1. समर्थ
 - 2. परोपकार
 - 3. अंतरात्मा
 - 4. स्वार्थ

Question ID : 9895804919
Chosen Option : --

Q.2
1

दिए गए शब्द के पर्यायवाची शब्द का चयन करें।

पल

- Ans
- 1. क्षण
 - 2. रात
 - 3. दिन
 - 4. मन

Question ID : 9895804921
Chosen Option : --

Q.2
2 दिए गए शब्द के पर्यायवाची शब्द का चयन करें।

कमर

- Ans
- 1. हाथ
 - 2. कंधा
 - 3. पैर
 - 4. कटि

Question ID : 9895804920
Chosen Option : --

Q.2
3 निम्नलिखित में से उस विकल्प का चयन करें जो 'घोड़े बेचकर सोना' मुहावरे का अर्थ व्यक्त करता है।

- Ans
- 1. घोड़े बेचकर सोना खरीदना
 - 2. घोड़े बेचना
 - 3. निश्चिंत होकर सोना
 - 4. हलकी नींद में सोना

Question ID : 9895804923
Chosen Option : --

Q.2
4 सही वर्तनी वाले शब्द का चयन करें।

- Ans
- 1. प्रासद
 - 2. प्रसाद
 - 3. परसाद
 - 4. प्रसद

Question ID : 9895804927
Chosen Option : --

Q.2
5 दिए गए वाक्य में रेखांकित खंड को प्रतिस्थापित करने के लिए सबसे उपयुक्त विकल्प का चयन करें।

छुट्टी का घंटा बजते ही, बच्चों के चेहरों से खिलखिलाहट आ जाती है।

- Ans
- 1. बच्चों के चेहरे को
 - 2. बच्चों के चेहरों पर
 - 3. बच्चों के चेहरे ने

✘ 4. बच्चों के चेहरों को

Question ID : 9895804905
Chosen Option : --

GovtJobsAlert.In