

## Constable (GD) in CAPFs, NIA, SSF and Rifleman (GD) in Assam Rifles Examination, 2018

Roll No. :	<a href="http://www.GovtJobsAlert.In">www.GovtJobsAlert.In</a>
Registration No.	
Name :	
Exam Venue :	ION Digital Zone iDZ Hebbal
Exam Time :	4:00 PM - 5:30 PM
Exam Date :	18/02/2019

Section : General Section

Q.1 Which one of the following four-letter clusters does NOT belong to the group?

- Ans
- 1. NKLM
  - 2. SOPQ
  - 3. WTUV
  - 4. HEFG

Question ID : 9895803826  
Chosen Option : 2

Q.2 Four numbers have been given out of which three are alike in some manner, while one is different. Choose the odd one.

- Ans
- 1. 73
  - 2. 53
  - 3. 33
  - 4. 23

Question ID : 9895803841  
Chosen Option : 1


Q.3 Select the option that is related to the third term in the same way as the second term is related to the first term.

CGEI : XTVR :: FJHL : ?

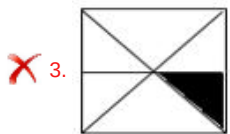
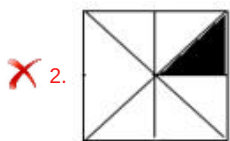
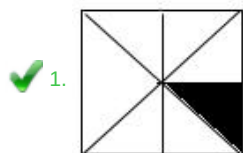
- Ans
- 1. OUQS
  - 2. TNRP
  - 3. UOQS
  - 4. UQSO

Question ID : 9895803830  
Chosen Option : 4

Q.4 Choose the figure from the options that would follow next in the given series.



Ans



Question ID : 9895803844  
Chosen Option : 4

Q.5 Six friends A, B, C, D, E and F are sitting around a round table facing the centre. C is seated between A and B, who is to the immediate left of D. If C is facing E, who is facing F?

- Ans
- ✗ 1. A
  - ✗ 2. D
  - ✓ 3. B
  - ✗ 4. E

Question ID : 9895803833  
Chosen Option : 1

Q.6 Pick the odd one out.

- Ans
- ✗ 1. London
  - ✓ 2. Spain
  - ✗ 3. Paris
  - ✗ 4. Rome

Question ID : 9895803827  
Chosen Option : 4

Q.7 If in a code language, MOTHER is coded as OMHTRE, then THURSDAY would be coded as:

- Ans
- ✗ 1. HTRUSDAY
  - ✓ 2. HTRUDSYA
  - ✗ 3. HTRUSDYA
  - ✗ 4. UHTDSRYA

Question ID : 9895803831  
Chosen Option : 2

Q.8 The numbers in the following set are related in a certain way. Choose the set that is similar to the following set:

{4, 6, 9}

- Ans
- ✗ 1. {6, 8, 12}

2. {9, 15, 18}

3. {12, 14, 18}

4. {6, 12, 24}

Question ID : 9895803842

Chosen Option : 1

Q.9 Select the correct option that will fill in the blank and complete the series.

1, 3, 8, 19, 42, \_\_\_\_

Ans  1. 89

2. 77

3. 93

4. 85

Question ID : 9895803838

Chosen Option : 1

Q.1<sub>0</sub> Select the correct option that will fill in the blank and complete the series.

6, 9, 18, 27, \_\_\_\_, 81

Ans  1. 62

2. 54

3. 48

4. 36

Question ID : 9895803839

Chosen Option : 2

Q.1<sub>1</sub> Pick the odd pair out.

Ans  1. 5-31

2. 3-23

3. 12-86

4. 8-58

Question ID : 9895803840

Chosen Option : 1

Q.1<sub>2</sub> If in a code language, MACE = 5 and MASTER = 7, then SOLUTION = ?

Ans  1. 8

2. 11

3. 10

4. 9

Question ID : 9895803832

Chosen Option : 4

Q.1<sub>3</sub>

Select the option that is related to the third term in the same way as the second term is related to the first term.

Heart : Veins :: River : ?

- Ans
- 1. Current
  - 2. Water
  - 3. Tributaries
  - 4. Ocean

Question ID : 9895803829  
Chosen Option : 1

Q.1 Select the correct option that will fill in the blank and complete the series.  
4

pmtz, rkvx, tixv, vgzt, \_\_\_\_\_

- Ans
- 1. yerb
  - 2. zdcw
  - 3. xeyv
  - 4. xebr

Question ID : 9895803825  
Chosen Option : 3

Q.1 The statements below are followed by two conclusions labeled I and II. Assuming that the information in the statements is true, even if it appears to be at variance with generally established facts, decide which conclusion(s) logically and definitely follow(s) from the information given in the statements.  
5

Statements:

- 1.) All cups are mugs.
- 2.) All mugs are utensils.

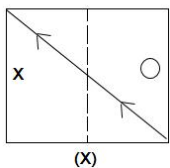
Conclusions:

- I. All cups are utensils.
- II. Some utensils are cups.

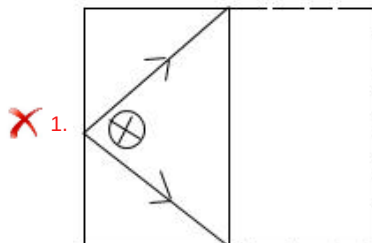
- Ans
- 1. Only conclusion I follows
  - 2. Neither conclusion I nor II follows
  - 3. Both conclusions I and II follow
  - 4. Only conclusion II follows

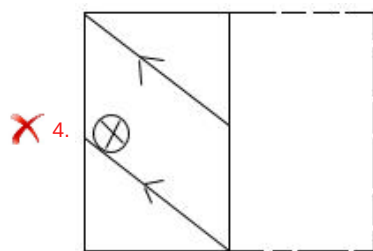
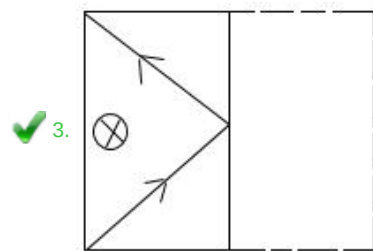
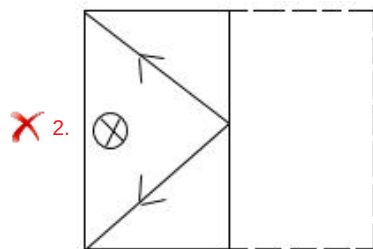
Question ID : 9895803836  
Chosen Option : 3

Q.1 How would the pattern given on the square transparent sheet marked 'X' look when the sheet is folded along the dotted line?  
6



Ans





Question ID : 9895803848  
Chosen Option : 4

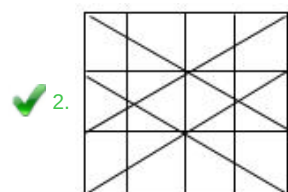
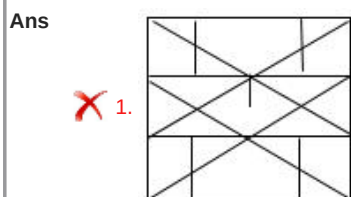
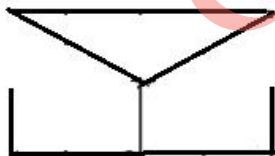
Q.1  
7 Which two signs should be interchanged to make the following equation correct?

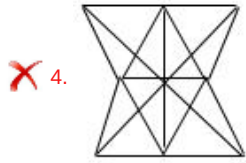
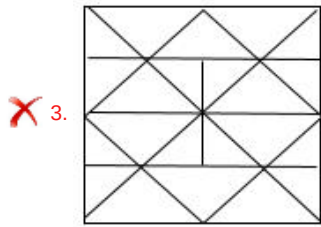
$$12 + 18 \times 24 \div 6 - 3 = 19$$

- Ans
- ✓ 1.  $\div$  and  $+$
  - ✗ 2.  $+$  and  $\times$
  - ✗ 3.  $-$  and  $\div$
  - ✗ 4.  $\times$  and  $\div$

Question ID : 9895803843  
Chosen Option : 3

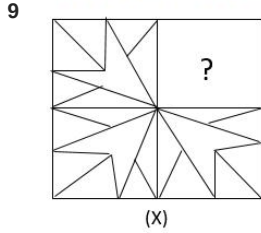
Q.1  
8 Choose the figure from the options in which the given figure is embedded.



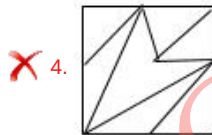
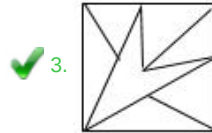
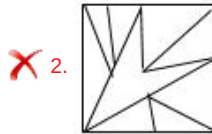
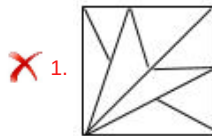


Question ID : 9895803847  
Chosen Option : 1

Q.1 Select the figure which when placed in the blank space of the figure marked 'X' would complete the pattern.

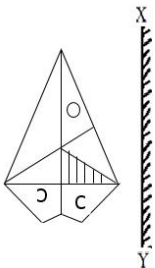


Ans



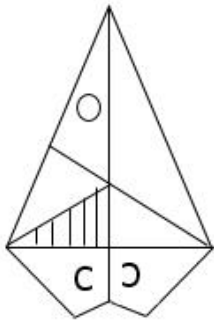
Question ID : 9895803845  
Chosen Option : 4

Q.2 Choose the alternative which most closely resembles the mirror image of the given word when mirror is placed at XY line.

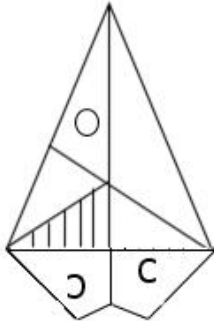


Ans

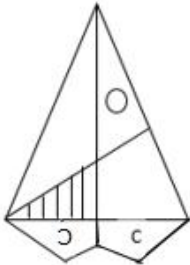
1.



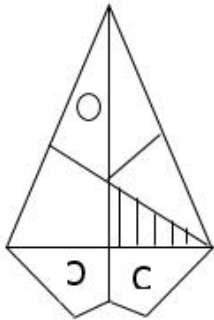
2.



3.



4.



Question ID : 9895803846  
Chosen Option : 4

Q.2  
1 TIME is related to CLOCK in the same way as DISTANCE is related to:

- Ans  1. SPACE  
 2. KILOMETRE  
 3. DESTINATION  
 4. ODOMETER

Question ID : 9895803828  
Chosen Option : 2

Q.2  
2 Pinky is taller than Priya but shorter than Reena. Riya is taller than Sheela, who is shorter than Priya. Reena is taller than Riya, who is taller than Pinky. Who is the shortest?

- Ans  1. Sheela  
 2. Priya  
 3. Riya

4. Pinky

Question ID : 9895803835  
Chosen Option : 1

**Q.2** The statement below is followed by three conclusions labeled I, II and III. You have to assume everything in the statement to be true, and then decide which of the three suggested conclusions logically follows for pursuing.

**Statements:**

- 1.) No school is an institution.
- 2.) All establishments that are not institutions have buildings.

**Conclusions:**

- I. Schools are not establishments.
- II. All schools have buildings.
- III. Schools do not have buildings.

- Ans**
1. Only conclusion III follows
  2. Only conclusion II follows
  3. Either conclusion I or II follow
  4. Only conclusion I follows

Question ID : 9895803837  
Chosen Option : --

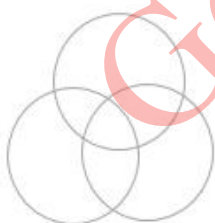
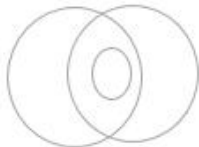
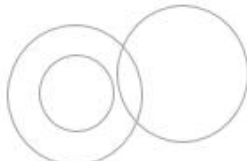
**Q.2** P, Q, R, S, T and U are standing in a queue. Q is just ahead of P. S is just behind T. U is NOT near R, who is separated from Q by two persons. Who is standing at the front of the queue?

- Ans**
1. Q
  2. R
  3. U
  4. T

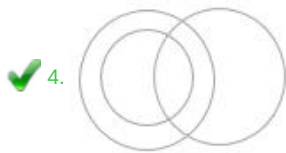
Question ID : 9895803834  
Chosen Option : --

**Q.2** Which of the following Venn diagrams correctly represents the relationships among the classes:  
5 Women, Mothers, Engineers

**Ans**

1. 
2. 
3. 





Question ID : 9895803849  
Chosen Option : 4

Q.2 Who replaced Sachchidananda Sinha as Chairman of the Constituent Assembly of India?

6

- Ans
- 1. Mohandas Karamchand Gandhi
  - 2. Dr. Rajendra Prasad
  - 3. Sardar Vallabhbhai Patel
  - 4. Pt. Jawaharlal Nehru

Question ID : 9895805386  
Chosen Option : --

Q.2 The objective of the 12<sup>th</sup> 5 Year Plan was \_\_\_\_\_.

7

- Ans
- 1. Reducting poverty and exploitation of women
  - 2. Growth with stability and progressive achievement
  - 3. Faster and more inclusive growth
  - 4. Faster, sustainable and more inclusive growth

Question ID : 9895805393  
Chosen Option : 1

Q.2 The Finance Minister of India, in his budget speech announced the launching of the indigenously developed semi high-speed train named as \_\_\_\_\_.

8

- Ans
- 1. Vikramsheela Express
  - 2. Veer Jawan Express
  - 3. Vaicom Express
  - 4. Vande Bharat Express

Question ID : 9895805395  
Chosen Option : 1

Q.2 Sanjhi, the paper craft is said to have originated in which of the following places of India?

9

- Ans
- 1. Indore
  - 2. Bhubaneshwar
  - 3. Mathura
  - 4. Coimbatore

Question ID : 9895805390  
Chosen Option : --

Q.3 Why is it important to have iodised salt in our diet?

0

- Ans
- 1. It helps in smooth functioning of the thyroid gland
  - 2. It helps in building bones

- 3. It improves eyesight
- 4. It helps in gaining height

Question ID : 9895805405  
Chosen Option : 1

Q.3  
1 Fundamental duties were incorporated in the Indian Constitution by:

- Ans
- 1. 25th Amendment
  - 2. 56th Amendment
  - 3. 42nd Amendment
  - 4. 14th Amendment

Question ID : 9895805398  
Chosen Option : 4

Q.3  
2 Who played a decisive role in the integration of the princely states of India?

- Ans
- 1. TT Krishnamurthy
  - 2. Sardar Vallabhbhai Patel
  - 3. Motilal Nehru
  - 4. APJ Abdul Kalam

Question ID : 9895805396  
Chosen Option : 2

Q.3  
3 The Right to Property was deleted from the list of Fundamental Rights by which of the Amendment of Indian Constitution?

- Ans
- 1. 41<sup>st</sup> Amendment
  - 2. 42<sup>nd</sup> Amendment
  - 3. 44<sup>th</sup> Amendment
  - 4. 43<sup>rd</sup> Amendment

Question ID : 9895805397  
Chosen Option : 2

Q.3  
4 Milk becomes sour if kept outside the refrigerator in summers because of:

- Ans
- 1. the calcium present in it
  - 2. its colour
  - 3. the conversion of lactose sugar to lactic acid
  - 4. the breakdown of proteins

Question ID : 9895805407  
Chosen Option : 3

Q.3  
5 Where is the Konark Sun Temple situated?

- Ans
- 1. Tirupati
  - 2. Odisha
  - 3. Madurai

4. Kedarnath

Question ID : 9895805392  
Chosen Option : 2

Q.3  
6 Who called dams as the 'Temples of Modern India'?

- Ans  1. Pt. Jawaharlal Nehru  
 2. Sardar Vallabhbhai Patel  
 3. T Krishnanchari  
 4. Mohandas Karamchand Gandhi

Question ID : 9895805403  
Chosen Option : 3

Q.3  
7 'Moonwalk', the famous dance move, is associated with:

- Ans  1. Misha Bryan  
 2. Fred Astaire  
 3. Michael Jackson  
 4. Adele

Question ID : 9895805391  
Chosen Option : 3

Q.3  
8 Which is the first Indian state to start rooftop rainwater harvesting?

- Ans  1. Tamil Nadu  
 2. Kerala  
 3. Rajasthan  
 4. Assam

Question ID : 9895805404  
Chosen Option : 2

Q.3  
9 Which of the following is not a Greenhouse gas?

- Ans  1. Carbon Dioxide  
 2. Nitrous Oxide  
 3. Methane  
 4. Argon

Question ID : 9895805406  
Chosen Option : 3

Q.4  
0 Name the acid present in tamarind.

- Ans  1. Amino acid  
 2. Citric acid  
 3. Tartaric acid  
 4. Lactic acid

Question ID : 9895805408

Chosen Option : 4

Q.4  
1 Who was the first Indian woman player to reach the Olympics badminton singles quarterfinals?

- Ans
- 1. PV Sindhu
  - 2. Saina Nehwal
  - 3. Ashwini P
  - 4. Aparna Popat

Question ID : 9895805388

Chosen Option : 2

Q.4  
2 The \_\_\_\_\_ movement was led by Muhammad Ali and Shaukat Ali.

- Ans
- 1. Sultaniya Movement
  - 2. Deoband Movement
  - 3. Badshahi Movement
  - 4. Khilafat Movement

Question ID : 9895805399

Chosen Option : 4

Q.4  
3 Name the place where the Olympic Games originated?

- Ans
- 1. Latvia
  - 2. Aden
  - 3. Greece
  - 4. Baghdad

Question ID : 9895805387

Chosen Option : 3

Q.4  
4 As per the interim Budget 2019, the 22<sup>nd</sup> AIIMS is proposed to come up in \_\_\_\_\_.

- Ans
- 1. Assam
  - 2. Haryana
  - 3. Jharkhand
  - 4. Maharashtra

Question ID : 9895805394

Chosen Option : 4

Q.4  
5 Acidity in stomach after overeating can be remedied by consuming:

- Ans
- 1. lemon juice
  - 2. vegetables
  - 3. fruit juice
  - 4. baking soda

Question ID : 9895805389

Chosen Option : 1

Q.4

6 The Lahore session of the Indian National Congress declared to celebrate 26th January as the Independence day in the year \_\_\_\_\_.

- Ans
- 1. 1920
  - 2. 1930
  - 3. 1942
  - 4. 1935

Question ID : 9895805400  
Chosen Option : 3

Q.4  
7 Who amongst the following founded the Bharatiya Jana Sangh (BJS) in 1977?

- Ans
- 1. Deen Dayal Upadhyaya
  - 2. Vinayak Savarkar
  - 3. Ashutosh Mukherjee
  - 4. Shyama Prasad Mukherjee

Question ID : 9895805384  
Chosen Option : 2

Q.4  
8 Robben Island, the world heritage site is associated to which of the following figures?

- Ans
- 1. John F. Kennedy
  - 2. Jimmy Carter
  - 3. Winston Churchill
  - 4. Nelson Mandela

Question ID : 9895805385  
Chosen Option : 1

Q.4  
9 Which of the following soils is found in the northern plains of India?

- Ans
- 1. Black soil
  - 2. Arid soil
  - 3. Alluvial soil
  - 4. Laterite soil

Question ID : 9895805402  
Chosen Option : 3

Q.5  
0 The Simon Commission which was sent by the British Government was boycotted because:

- Ans
- 1. It gave special powers to the Princely states.
  - 2. There were differences amongst the members.
  - 3. The Commission did not have any Indian member.
  - 4. The Commission curbed financial independence of India.

Question ID : 9895805401  
Chosen Option : 1

Q.5  
1 The area of a triangular park is equal to  $5\sqrt{3}$  times the area of a triangular field with sides 18 m, 80 m and 82 m.

What is the side of the triangular park?

- Ans  1. 100 m  
 2. 125 m  
 3. 120 m  
 4. 140 m

Question ID : 9895805705  
 Chosen Option : --

Q.5 Two numbers are in the ratio 5 : 6. If 16 is subtracted from each, the numbers will be in the ratio 3 : 4. If 8 is added to the first number and 3 is subtracted from the second, then they will be in the ratio:

- Ans  1. 15 : 16  
 2. 13 : 14  
 3. 14 : 13  
 4. 16 : 15

Question ID : 9895805699  
 Chosen Option : 3

Q.5 Suman sold an article for 882 after allowing 16% discount on its marked price. Had she not allowed any discount, she would have gained 20% on the cost price. What is the cost price of the article?

- Ans  1. 875  
 2. 750  
 3. 850  
 4. 725

Question ID : 9895805695  
 Chosen Option : --

Q.5 The curved surface area of a right circular cylinder of height 28 cm is  $176 \text{ cm}^2$ . The volume (in  $\text{cm}^3$ ) of cylinder is  
 4 (Take  $\pi = \frac{22}{7}$ )

- Ans  1. 176  
 2. 66  
 3. 110  
 4. 88

Question ID : 9895805706  
 Chosen Option : --

Q.5 A person covered a distance of 250 km at a certain speed. If his speed is 20% less, he would have covered the same distance in  $1\frac{1}{4}$  hours less time. His speed (in km/hr), initially was:

- Ans  1. 50  
 2.  $47\frac{1}{2}$   
 3.  $52\frac{1}{2}$   
 4. 45

Question ID : 9895805709  
 Chosen Option : 2

Q.5  
 6

Study the following table and answer questions:

Number of students studying in five schools of a city

Schools	No of Students	Ratio of boys and girls Boys : Girls
A	680	9 : 8
B	720	4 : 5
C	540	5 : 13
D	660	2 : 1
E	900	13 : 12

The total number of girls in schools B and C is what percent less than the total number of boys in schools A and D?

- Ans  1. 1.25  
 2. 11.25  
 3. 4  
 4. 10

Question ID : 9895805714  
 Chosen Option : 2

Q.5 Working together, A, B and C can complete a work in 36 days. If the efficiency of A, B and C are in the ratio 5 : 6 : 9, then B alone will complete the same work in:

- Ans  1. 90 days  
 2. 100 days  
 3. 60 days  
 4. 120 days

Question ID : 9895805710  
 Chosen Option : 1

Q.5 The compound interest on a certain sum at a certain rate percent per annum for the second year and the third year are ₹3300 and ₹3630, respectively. The sum is:

- Ans  1. ₹25000  
 2. ₹32000  
 3. ₹30000  
 4. ₹28400

Question ID : 9895805703  
 Chosen Option : 1

Q.5 A boat can cover 36 km downstream and 16 km upstream in 10 hours. It can cover 3 km downstream and 1.2 km upstream in 48 minutes. What is the speed (in km/hr) of the boat when going upstream?

- Ans  1. 2  
 2. 4  
 3. 2.5  
 4. 3.5

Question ID : 9895805708  
 Chosen Option : 1

Q.6 Let  $x$  be the greatest number such that when 12085, 16914 and 13841 are divided by it, the remainder in each case is same. The sum of digits of  $x$  is:

- Ans  1. 13  
 2. 19  
 3. 16  
 4. 14

Question ID : 9895805690  
Chosen Option : 1

Q.6  
1 The average weight of a certain number of persons in a group was 75.5 kg. Later on, 4 persons weighing 72.6 kg, 74 kg, 73.4 kg and 70 kg joined the group. As a result, the average weight of all persons in the group reduced by 500g. The number of persons in the group, initially, was:

- Ans
- 1. 24
  - 2. 16
  - 3. 18
  - 4. 20

Question ID : 9895805693  
Chosen Option : 1

Q.6  
2 The value of  $[0.08 \div 1.2 \text{ of } (3.4 - 2.6) \times 0.8 \text{ of } 3.2]$  of  $\frac{9}{16}$  lies between :

- Ans
- 1. 0.09 and 0.11
  - 2. 0.11 and 0.13
  - 3. 0.07 and 0.09
  - 4. 0.13 to 0.15

Question ID : 9895805692  
Chosen Option : 1

Q.6  
3 The simple interest on a certain sum in  $5\frac{1}{2}$  years at 6% p.a. is ₹2541. What will be the amount of the same sum in  $5\frac{2}{3}$  years at  $8\frac{1}{7}$ % p.a.?

- Ans
- 1. ₹12153
  - 2. ₹11253
  - 3. ₹13125
  - 4. ₹11235

Question ID : 9895805702  
Chosen Option : 1

Q.6  
4 Study the following table and answer questions:

Number of students studying in five schools of a city

Schools	No of Students	Ratio of boys and girls Boys : Girls
A	680	9 : 8
B	720	4 : 5
C	540	5 : 13
D	660	2 : 1
E	900	13 : 12

The ratio of the number of boys in school A to the number of girls in school E is:

- Ans
- 1. 3 : 4
  - 2. 5 : 12
  - 3. 8 : 13
  - 4. 5 : 6

Question ID : 9895805712  
Chosen Option : 1



Q.6 The average of 41 numbers is 63. The average of first 21 number is 61.5 and that of last 21 numbers is 65.5. if 21<sup>st</sup> number is excluded then the average of remaining numbers is:

- Ans
- 1. 62.5
  - 2. 63.575
  - 3. 63.5
  - 4. 62.475

Question ID : 9895805694  
Chosen Option : 3

Q.6 A sum of ₹4107 is divided between A, B, C and D such that the ratio of shares of A and B is 3 : 4, that of B and C is 2 : 1 and that of C and D is 3 : 5. The share of B is:

- Ans
- 1. ₹1443
  - 2. ₹1332
  - 3. ₹1003
  - 4. ₹1223

Question ID : 9895805700  
Chosen Option : 4

Q.6 A sold an article to B at 25% profit. B sold it to C at a profit of 10% and C sold it to D at 40% loss. If D bought it for ₹46.20, then the difference between the profits of A and B is:

- Ans
- 1. ₹8.50
  - 2. ₹15
  - 3. ₹6
  - 4. ₹7

Question ID : 9895805696  
Chosen Option : 2

Q.6 Two solutions of acid and water containing acid and water in the ratio 2 : 7 and 4 : 5, respectively are mixed in the ratio 2 : 5. What is the ratio of acid and water in the resulting solution?

- Ans
- 1. 8 : 17
  - 2. 8 : 13
  - 3. 2 : 1
  - 4. 3 : 7

Question ID : 9895805701  
Chosen Option : 2

Q.6 A person sells a watch at a profit of 26%. If he had bought it at 20% less and sold for ₹81.60 less, he would have gained 32%. What is the original cost price (in ₹) of the watch?

- Ans
- 1. 400
  - 2. 450
  - 3. 360
  - 4. 480

Question ID : 9895805697  
Chosen Option : 2

Q.7  
0 The value of  $\frac{1\frac{2}{3} + \left[ 16\frac{1}{2} - \left\{ 1\frac{1}{10} \left( 3\frac{1}{3} + 5 \right) \right\} \right]}{\frac{1}{4} \text{ of } 2\frac{1}{2} + \frac{3}{5} \times 4\frac{4}{5}}$  is:

Ans

1.  $1\frac{2}{5}$

2.  $3\frac{2}{5}$

3.  $3\frac{1}{5}$

4.  $1\frac{4}{5}$

Question ID : 9895805691  
Chosen Option : 1

Q.7  
1 What is the mean of the range, median and mode of the data:

2, 3, 1, 1, 3, 4, 2, 1, 1, 4, 5, 2, 4, 2, 2, 1, 3, 3, 2, 5

Ans

1. 4

2.  $3\frac{1}{3}$

3.  $2\frac{2}{3}$

4.  $4\frac{1}{2}$

Question ID : 9895805704  
Chosen Option : 3

Q.7  
2 When 32% of a number  $x$  was added to another number  $y$ , then  $y$  increases by 24%. The value of  $\frac{(2x+y)}{(3x-y)}$  is:

Ans

1. 3

2. 2

3. 1

4. 8

Question ID : 9895805698  
Chosen Option : 1

Q.7  
3 If the radius of a sphere is decreased by 25%, then the percentage decrease in its surface area is:

Ans

1. 43.75

2. 37.50

3. 40

4. 42

Question ID : 9895805707  
Chosen Option : 3

Q.7  
4 Two pipes A and B can fill a tank in 12 minutes and 15 minutes, respectively. When an outlet pipe C is also opened, then the three pipes together can fill the tank in 10 minutes. In how many minutes can C alone empty the full tank?

Ans

1. 20

2. 24

3. 16

4. 18

Q.7 Study the following table and answer questions:

5

Number of students studying in five schools of a city

Schools	No of Students	Ratio of boys and girls Boys : Girls
A	680	9 : 8
B	720	4 : 5
C	540	5 : 13
D	660	2 : 1
E	900	13 : 12

In how many schools, the number of girls is more than the average number of boys per school?

- Ans
- 1. 4
  - 2. 1
  - 3. 2
  - 4. 3

Question ID : 9895805713

Chosen Option : --

Section : English Language

Q.1 Select the most appropriate option to fill in the blank.

Scientists tried to find out the \_\_\_\_\_ behind the occurrence of the phenomenon.

- Ans
- 1. illustration
  - 2. interpretation
  - 3. clarification
  - 4. cause

Question ID : 9895805237

Chosen Option : 3

Q.2 Select the most appropriate option to substitute the underlined segment in the given sentence. If there is no need to substitute it, select No improvement.

The Indian forces are known for their bravery.

- Ans
- 1. force are known for
  - 2. forces is known for
  - 3. No improvement
  - 4. forces are known of

Question ID : 9895805233

Chosen Option : 3

Q.3 From the given options, identify the segment in the sentence which contains the grammatical error.

Dr. Rana is our teacher of English since this semester.

- Ans
- 1. this semester.
  - 2. Dr. Rana is
  - 3. our teacher
  - 4. of English since

Question ID : 9895805232

Chosen Option : 1

Q.4 Select the synonym of the given word.

NOMADIC

- Ans
- 1. Brave
  - 2. Roving
  - 3. Wild
  - 4. Barbaric

Question ID : 9895805244

Chosen Option : 3

Q.5 From the given options, identify the segment in the sentence which contains the grammatical error.

Nowadays spectacles are costly than they used to be.

- Ans
- 1. costly than
  - 2. Nowadays
  - 3. they used to be.
  - 4. spectacles are

Question ID : 9895805231

Chosen Option : 4

Q.6 Select the most appropriate word to fill in the blank.

Dinosaurs are an \_\_\_\_\_ species now.

- Ans
- 1. age-old
  - 2. extinct
  - 3. antique
  - 4. ancient

Question ID : 9895805255

Chosen Option : 4

Q.7 Select the antonym of the given word.

LATENT

- Ans
- 1. Forbidding
  - 2. Artificial
  - 3. Hidden
  - 4. Obvious

Question ID : 9895805246

Chosen Option : 1

Q.8 Select the synonym of the given word.

HANDY

- Ans
- 1. Funny
  - 2. Nice
  - 3. Convenient
  - 4. Easy

Question ID : 9895805245  
Chosen Option : 1

Q.9 Select the correctly spelt word.

- Ans
- 1. Acommodate
  - 2. Accommadate
  - 3. Accommodate
  - 4. Accomodate

Question ID : 9895805253  
Chosen Option : --

Q.1 Select the most appropriate option to substitute the underlined segment in the given sentence. If there is no need to substitute it, select No improvement.

We should offer due respects to all elderly persons.

- Ans
- 1. offer due respects for
  - 2. No improvement
  - 3. offer due respect to
  - 4. offers due respects to

Question ID : 9895805234  
Chosen Option : 2

Q.1 Select the word which means the same as the group of words given.

Something which gets broken easily

- Ans
- 1. Weak
  - 2. Soft
  - 3. Feeble
  - 4. Fragile

Question ID : 9895805251  
Chosen Option : 1

Q.1 Select the most appropriate option to fill in the blank.

The baby bird was \_\_\_\_\_ by its mother.

- Ans
- 1. thrown
  - 2. renounced
  - 3. sacrificed
  - 4. abandoned

Question ID : 9895805236  
Chosen Option : 2

Q.1  
3 Select the option that means the same as the given idiom.

A stone's throw away

- Ans
- 1. At a short distance
  - 2. Very far off
  - 3. At a remote location
  - 4. Many miles away

Question ID : 9895805248  
Chosen Option : 1

Q.1  
4 Select the antonym of the given word.

MALEVOLENT

- Ans
- 1. Well-mannered
  - 2. Positive
  - 3. Kind
  - 4. Cruel

Question ID : 9895805247  
Chosen Option : 4

Q.1  
5 Select the most appropriate option to substitute the underlined segment in the given sentence. If there is no need to substitute it, select No improvement.

Regular exercise lead to fitness of the body.

- Ans
- 1. will leads to fitness of the body
  - 2. leads to fitness of the body
  - 3. No improvement
  - 4. leading to fitness of the body

Question ID : 9895805235  
Chosen Option : 3

Q.1  
6 From the given options, identify the segment in the sentence which contains the grammatical error.

We must visit this ancient temple which are a hundred years old.

- Ans
- 1. this ancient temple
  - 2. a hundred years old.
  - 3. which are
  - 4. We must visit

Question ID : 9895805230  
Chosen Option : 2

Comprehension:

In the following passage some words have been deleted. Fill in the blanks with the help of the alternatives given.

The neglect of one half of mankind costs the world a great deal both, in economic and social (1) \_\_\_\_\_. A family (2) \_\_\_\_\_ an educated mother is, in most cases, a poorer family than one in which everyone is educated and can (3) \_\_\_\_\_ a living. A family with an uneducated mother may (4) \_\_\_\_\_ in other ways too, because the mother is (5) \_\_\_\_\_ to help the children in their education.

SubQuestion No : 17

Q.1  
7 Select the most appropriate option that will fill in the blank number 1.

- Ans
- 1. areas
  - 2. values
  - 3. terms
  - 4. aspects

Question ID : 9895805239  
Chosen Option : --

Comprehension:

In the following passage some words have been deleted. Fill in the blanks with the help of the alternatives given.

The neglect of one half of mankind costs the world a great deal both, in economic and social (1) \_\_\_\_\_. A family (2) \_\_\_\_\_ an educated mother is, in most cases, a poorer family than one in which everyone is educated and can (3) \_\_\_\_\_ a living. A family with an uneducated mother may (4) \_\_\_\_\_ in other ways too, because the mother is (5) \_\_\_\_\_ to help the children in their education.

SubQuestion No : 18

Q.1  
8 Select the most appropriate option that will fill in the blank number 2.

- Ans
- 1. of
  - 2. without
  - 3. including
  - 4. with

Question ID : 9895805240  
Chosen Option : 4

Comprehension:

In the following passage some words have been deleted. Fill in the blanks with the help of the alternatives given.

The neglect of one half of mankind costs the world a great deal both, in economic and social (1) \_\_\_\_\_. A family (2) \_\_\_\_\_ an educated mother is, in most cases, a poorer family than one in which everyone is educated and can (3) \_\_\_\_\_ a living. A family with an uneducated mother may (4) \_\_\_\_\_ in other ways too, because the mother is (5) \_\_\_\_\_ to help the children in their education.

SubQuestion No : 19

Q.1  
9 Select the most appropriate option that will fill in the blank number 3.

- Ans
- 1. create
  - 2. manage
  - 3. plan
  - 4. earn

Question ID : 9895805241  
Chosen Option : --

Comprehension:

In the following passage some words have been deleted. Fill in the blanks with the help of the alternatives given.

The neglect of one half of mankind costs the world a great deal both, in economic and social (1) \_\_\_\_\_. A family (2) \_\_\_\_\_ an educated mother is, in most cases, a poorer family than one in which everyone is educated and can (3) \_\_\_\_\_ a living. A family with an uneducated mother may (4) \_\_\_\_\_ in other ways too, because the mother is (5) \_\_\_\_\_ to help the children in their education.

SubQuestion No : 20

Q.2  
0 Select the most appropriate option that will fill in the blank number 4.

- Ans
- 1. destroy
  - 2. prosper
  - 3. fail
  - 4. suffer

Question ID : 9895805242  
Chosen Option : --

Comprehension:

In the following passage some words have been deleted. Fill in the blanks with the help of the alternatives given.

The neglect of one half of mankind costs the world a great deal both, in economic and social (1) \_\_\_\_\_. A family (2) \_\_\_\_\_ an educated mother is, in most cases, a poorer family than one in which everyone is educated and can (3) \_\_\_\_\_ a living. A family with an uneducated mother may (4) \_\_\_\_\_ in other ways too, because the mother is (5) \_\_\_\_\_ to help the children in their education.

SubQuestion No : 21

Q.2  
1 Select the most appropriate option that will fill in the blank number 5.

- Ans
- 1. unable
  - 2. eligible
  - 3. qualified
  - 4. able



Question ID : 9895805243

Chosen Option : --

Q.2 Select the word which means the same as the group of words given.

One who speaks many languages

- Ans
- 1. Multilingual
  - 2. Monolingual
  - 3. Linguist
  - 4. Bilingual

Question ID : 9895805250

Chosen Option : --

Q.2 Select the most appropriate word to fill in the blank.

Apart from cows, buffaloes are also \_\_\_\_\_ for mass milk production for humans.

- Ans
- 1. reared
  - 2. produced
  - 3. developed
  - 4. grown

Question ID : 9895805254

Chosen Option : 2

Q.2 Select the correctly spelt word.

- Ans
- 1. Exeggeration
  - 2. Exaggeration
  - 3. Exaggaration
  - 4. Exageration

Question ID : 9895805252

Chosen Option : 4

Q.2 Select the option that means the same as the given idiom.

The grass is greener on the other side

- Ans
- 1. Only green grass grows well
  - 2. Things appear better for others
  - 3. Green grass grows everywhere
  - 4. Many things looks like green grass

Question ID : 9895805249

Chosen Option : 3

Section : Hindi Language

Q.1

दिए गए शब्द का विलोम चुनें।

मौन

Ans

- ✓ 1. चुप  
✗ 2. स्वरचित  
✗ 3. कंठस्थ  
✗ 4. मुखर

Question ID : 9895805553  
Chosen Option : --

Q.2 दिए गए वाक्य में रेखांकित खंड को प्रतिस्थापित करने के लिए उपयुक्त विकल्प का चयन करें।

तुम्हारे गुरु तुमकी प्रार्थना स्वीकार कर सकते हैं, परन्तु हम नहीं।

Ans

- ✓ 1. तुम प्रार्थना  
✗ 2. तुम्हारी प्रार्थना  
✗ 3. तुझे प्रार्थना  
✗ 4. तुमसे प्रार्थना

Question ID : 9895805541  
Chosen Option : --

Q.3 रिक्त स्थान को भरने के लिए उपयुक्त शब्द का चयन करें।

सबने \_\_\_\_\_ बजाई।

Ans

- ✗ 1. बाजा  
✓ 2. तालियाँ  
✗ 3. बोलियाँ  
✗ 4. गाल

Question ID : 9895805545  
Chosen Option : --

Q.4 दिए गए शब्द के पर्यायवाची शब्द का चयन करें।

राष्ट्र

Ans

- ✗ 1. संसार  
✗ 2. बाहर  
✗ 3. देश  
✓ 4. धरती

Question ID : 9895805554  
Chosen Option : --

Q.5 सही वर्तनी वाले शब्द का चयन करें।

- Ans
- 1. बनवास
  - 2. वनवाश
  - 3. वनबास
  - 4. वनवास

Question ID : 9895805561  
Chosen Option : --

Q.6 दिए गए शब्द का विलोम चुनें।

दूषित

- Ans
- 1. स्वच्छ
  - 2. भ्रष्ट
  - 3. प्रदूषित
  - 4. विकृत

Question ID : 9895805552  
Chosen Option : --

Q.7 दिये गये वाक्यांश के लिए एक शब्द दीजिये।

जो कम बोलता हो

- Ans
- 1. वाचाल
  - 2. मितभाषी
  - 3. मूक
  - 4. मितव्ययी

Question ID : 9895805558  
Chosen Option : --

Q.8 दिए गए वाक्य का वह भाग ज्ञात करें जिसमें कोई त्रुटि है।

कभी न कभी इस भ्रष्टाचार के विरुद्ध हमें आवाज उठानी होगा।

- Ans
- 1. इस भ्रष्टाचार के
  - 2. आवाज उठानी होगा।
  - 3. विरुद्ध हमें
  - 4. कभी न कभी

Question ID : 9895805538  
Chosen Option : --

Q.9 दिए गए शब्द के पर्यायवाची शब्द का चयन करें।

मरुस्थल

- Ans
- 1. धूल
  - 2. ऊँट

✓ 3. रेगिस्तान

✗ 4. रेत

Question ID : 9895805555

Chosen Option : --

Q.1 निम्नलिखित में से उस विकल्प का चयन करें जो 'थाली का बैंगन' मुहावरे का अर्थ व्यक्त करता है।

Ans

✗ 1. घमंडी व्यक्ति

✗ 2. सिद्धांतवादी व्यक्ति

✓ 3. सिद्धांतरहित व्यक्ति

✗ 4. इधर की बात उधर करने वाला व्यक्ति

Question ID : 9895805556

Chosen Option : --

Q.1 रिक्त स्थान को भरने के लिए उपयुक्त शब्द का चयन करें।

जो करे वह \_\_\_\_\_।

Ans

✗ 1. मरे

✗ 2. सोये

✗ 3. भरे

✓ 4. जागे

Question ID : 9895805544

Chosen Option : --

Q.1 दिए गए वाक्य का वह भाग ज्ञात करें जिसमें कोई त्रुटि है।

सब्जियाँ इतनी महँगी हैं कि उन्हें खरीदते हुए ग्राहक को सोचना पड़ना रहा है।

Ans

✗ 1. सोचना पड़ना रहा है।

✓ 2. सब्जियाँ इतनी महँगी हैं कि

✗ 3. ग्राहक को

✗ 4. उन्हें खरीदते हुए

Question ID : 9895805537

Chosen Option : --

Q.1 सही वर्तनी वाले शब्द का चयन करें।

Ans

✗ 1. रसोइघर

✗ 2. रसौईघर

✓ 3. रसोईघर

✗ 4. रसौइघर

Question ID : 9895805560  
Chosen Option : --

Q.1  
4 रिक्त स्थान को भरने के लिए उपयुक्त शब्द का चयन करें।

बोलने के पहले \_\_\_\_\_ करो।

- Ans
- 1. पिया
  - 2. खाया
  - 3. सोचा
  - 4. सोया

Question ID : 9895805543  
Chosen Option : --

Q.1  
5 दिए गए वाक्य में रेखांकित खंड को प्रतिस्थापित करने के लिए उपयुक्त विकल्प का चयन करें।

मुझे जिस वस्तु की आवश्यकता है यह वस्तु तुम मुझे दे देना।

- Ans
- 1. यही वस्तु तुम मुझे दे देना।
  - 2. वह वस्तु तुम मुझे दे देना।
  - 3. उस वस्तु तुम मुझे दे देना।
  - 4. वह वस्तु तुम मेरे को दे देना।

Question ID : 9895805540  
Chosen Option : --

Q.1  
6 निम्नलिखित में से उस विकल्प का चयन करें जो 'दंग रह जाना' मुहावरे का अर्थ व्यक्त करता है।

- Ans
- 1. बदल जाना
  - 2. नाराज़ हो जाना
  - 3. परेशान हो जाना
  - 4. चकित हो जाना

Question ID : 9895805557  
Chosen Option : --

Q.1  
7 दिए गए वाक्य में रेखांकित खंड को प्रतिस्थापित करने के लिए उपयुक्त विकल्प का चयन करें।

मिठाईयाँ लेकर विजय बाबू घर चला गया।

- Ans
- 1. घर चले गया।
  - 2. घर चले गए।
  - 3. घर गए चले।
  - 4. घर चली गयी।

Question ID : 9895805539  
Chosen Option : --

Q.1  
8

रिक्त स्थान को भरने के लिए उपयुक्त शब्द का चयन करें।

राजीव छत \_\_\_\_\_ सो रहा है।

- Ans
- 1. पर
  - 2. से
  - 3. अंदर
  - 4. में

Question ID : 9895805542  
Chosen Option : --

Comprehension:

निम्नलिखित गद्यांश के रिक्त स्थानों की पूर्ति गद्यांश के नीचे दिए गए प्रश्नों के अनुसार कीजिए -

संगीत के बारे में प्रायः जन साधारण की यह \_\_\_\_\_ (1) है कि यह मन बहलाने अथवा \_\_\_\_\_ (2) का साधन है, अथवा भजन-पूजन में कविताएँ एवं छंद आदि भगवान के गुणगान की वस्तुएँ हैं। वस्तुतः \_\_\_\_\_ (3) के और भी उपयोग हैं। यह \_\_\_\_\_ (4) ही नहीं, मूक पशु-पक्षियों तक की \_\_\_\_\_ (5) को प्रेरित करने में सक्षम है। मनुष्य समझदार होने के कारण और भी अधिक लाभान्वित होता है।

SubQuestion No : 19

Q.1  
9 गद्यांश में संकेतित रिक्त स्थान (1) के लिए उपयुक्त शब्द होगा -

- Ans
- 1. मान्यता
  - 2. धरती
  - 3. साधन
  - 4. गायन

Question ID : 9895805547  
Chosen Option : --

Comprehension:

निम्नलिखित गद्यांश के रिक्त स्थानों की पूर्ति गद्यांश के नीचे दिए गए प्रश्नों के अनुसार कीजिए -

संगीत के बारे में प्रायः जन साधारण की यह \_\_\_\_\_ (1) है कि यह मन बहलाने अथवा \_\_\_\_\_ (2) का साधन है, अथवा भजन-पूजन में कविताएँ एवं छंद आदि भगवान के गुणगान की वस्तुएँ हैं। वस्तुतः \_\_\_\_\_ (3) के और भी उपयोग हैं। यह \_\_\_\_\_ (4) ही नहीं, मूक पशु-पक्षियों तक की \_\_\_\_\_ (5) को प्रेरित करने में सक्षम है। मनुष्य समझदार होने के कारण और भी अधिक लाभान्वित होता है।

SubQuestion No : 20

Q.2  
0 गद्यांश में संकेतित रिक्त स्थान (2) के लिए उपयुक्त शब्द होगा -

- Ans
- 1. धरती
  - 2. मनोरंजन
  - 3. भरपूर
  - 4. विश्व

Question ID : 9895805548  
Chosen Option : --

Comprehension:

निम्नलिखित गद्यांश के रिक्त स्थानों की पूर्ति गद्यांश के नीचे दिए गए प्रश्नों के अनुसार कीजिए -

संगीत के बारे में प्रायः जन साधारण की यह \_\_\_\_\_ (1) है कि यह मन बहलाने अथवा \_\_\_\_\_ (2) का साधन है, अथवा भजन-पूजन में कविताएँ एवं छंद आदि भगवान के गुणगान की वस्तुएँ हैं। वस्तुतः \_\_\_\_\_ (3) के और भी उपयोग हैं। यह \_\_\_\_\_ (4) ही नहीं, मूक पशु-पक्षियों तक की \_\_\_\_\_ (5) को प्रेरित करने में सक्षम है। मनुष्य समझदार होने के कारण और भी अधिक लाभान्वित होता है।

SubQuestion No : 21

Q.2  
1 गद्यांश में संकेतित रिक्त स्थान (3) के लिए उपयुक्त शब्द होगा -

- Ans
- 1. तबला
  - 2. मृदंग
  - 3. पुस्तक
  - 4. संगीत

## Comprehension:

निम्नलिखित गद्यांश के रिक्त स्थानों की पूर्ति गद्यांश के नीचे दिए गए प्रश्नों के अनुसार कीजिए -

संगीत के बारे में प्रायः जन साधारण की यह \_\_\_\_\_ (1) है कि यह मन बहलाने अथवा \_\_\_\_\_ (2) का साधन है, अथवा भजन-पूजन में कविताएँ एवं छंद आदि भगवान के गुणगान की वस्तुएँ हैं। वस्तुतः \_\_\_\_\_ (3) के और भी उपयोग हैं। यह \_\_\_\_\_ (4) ही नहीं, मूक पशु-पक्षियों तक की \_\_\_\_\_ (5) को प्रेरित करने में सक्षम है। मनुष्य समझदार होने के कारण और भी अधिक लाभान्वित होता है।

SubQuestion No : 22

Q.2 गद्यांश में संकेतित रिक्त स्थान (4) के लिए उपयुक्त शब्द होगा -

- Ans
- 1. मनुष्य
  - 2. घृणा
  - 3. आकाश
  - 4. पानी

## Comprehension:

निम्नलिखित गद्यांश के रिक्त स्थानों की पूर्ति गद्यांश के नीचे दिए गए प्रश्नों के अनुसार कीजिए -

संगीत के बारे में प्रायः जन साधारण की यह \_\_\_\_\_ (1) है कि यह मन बहलाने अथवा \_\_\_\_\_ (2) का साधन है, अथवा भजन-पूजन में कविताएँ एवं छंद आदि भगवान के गुणगान की वस्तुएँ हैं। वस्तुतः \_\_\_\_\_ (3) के और भी उपयोग हैं। यह \_\_\_\_\_ (4) ही नहीं, मूक पशु-पक्षियों तक की \_\_\_\_\_ (5) को प्रेरित करने में सक्षम है। मनुष्य समझदार होने के कारण और भी अधिक लाभान्वित होता है।

SubQuestion No : 23

Q.3 गद्यांश में संकेतित रिक्त स्थान (5) के लिए उपयुक्त शब्द होगा -

- Ans
- 1. स्वाद
  - 2. घ्राण



3. भावनाओं

4. रोग

Question ID : 9895805551  
Chosen Option : --

Q.2  
4 दिये गये वाक्यांश के लिए एक शब्द दीजिये।

जो सब कुछ जानता हो

Ans  1. मर्मज्ञ

2. कर्मज्ञ

3. सर्वज्ञ

4. अल्पज्ञ

Question ID : 9895805559  
Chosen Option : --

Q.2  
5 दिए गए वाक्य का वह भाग ज्ञात करें जिसमें कोई त्रुटि है।

वन प्रकृति की देन हैं, वे देश से सुंदरता में वृद्धि करते हैं।

Ans  1. वन प्रकृति की देन हैं,

2. वे देश से

3. वृद्धि करते हैं।

4. सुंदरता में

Question ID : 9895805536  
Chosen Option : --