

Constable (GD) in CAPFs, NIA, SSF and Rifleman (GD) in Assam Rifles Examination, 2018

Roll No. :	www.GovtJobsAlert.In
Registration No.	
Name :	
Exam Venue :	iON Digital Zone iDZ Asansol
Exam Time :	4:00 PM - 5:30 PM
Exam Date :	19/02/2019

Section : General Section

Q.1 Which one of the following four-letter clusters does NOT belong to the group?

- Ans
- 1. KQOM
 - 2. WZXY
 - 3. CIGE
 - 4. PVTR

Question ID : 9895803927
Chosen Option : 3

Q.2 Select the option that is related to the third term in the same way as the second term is related to the first term.

Temple : Worship :: Court : ?

- Ans
- 1. Judge
 - 2. Jurisdiction
 - 3. Lawyer
 - 4. Argument

Question ID : 9895803930
Chosen Option : 1

Q.3 If in a code language BADE = 1254 and HATE = 18520, then HEALER = ?

- Ans
- 1. 58121185
 - 2. 58112158
 - 3. 18512158
 - 4. 15818512

Question ID : 9895803933
Chosen Option : 3

Q.4 Select the option that is related to the third term in the same way as the second term is related to the first term.

BYWD : DWUF :: FUSH : ?

- Ans
- 1. HTRJ
 - 2. HSQJ
 - 3. HSJQ

4. JQOL

Question ID : 9895803931
Chosen Option : 2

Q.5 AGENDA is related to MEETING in the same way as PROGRAMME is related to:

- Ans 1. SPEECH
 2. INAUGURATION
 3. FUNCTION
 4. ORGANISATION

Question ID : 9895803929
Chosen Option : 1

Q.6 If in a code language ADVENTURES is coded as VDANEUTSER, then SYSTEMATIC would be coded as:

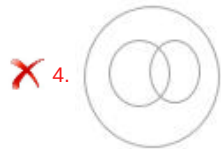
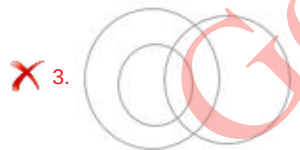
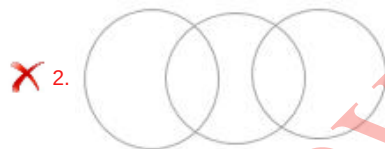
- Ans 1. CITETAMSYS
 2. SYSMETITAC
 3. YSTSMETACI
 4. SYSETAMCIT

Question ID : 9895803932
Chosen Option : 4

Q.7 Which of the following Venn diagrams correctly represents the relationships among the classes:

Products, Factory, Machines

Ans



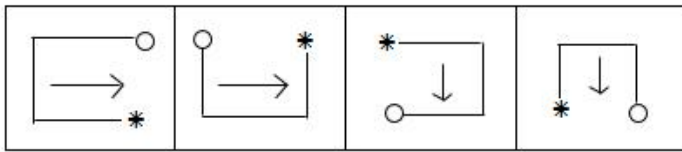
Question ID : 9895803950
Chosen Option : 2

Q.8 R is taller than T. Both P and Q are taller than S, whose height is between P and T. If S is taller than T, who is the shortest?

- Ans 1. S
 2. Q
 3. P
 4. T

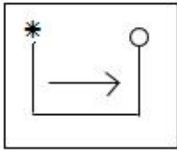
Question ID : 9895803936
Chosen Option : 2

Q.9 Choose the option that would follow next in the given figure series.

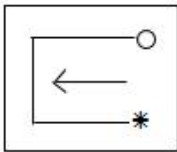


Ans

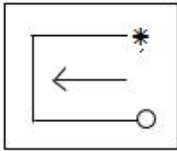
1.



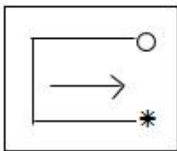
2.



3.



4.



Question ID : 9895803945
Chosen Option : 1

Q.1 Pick the odd one out.

Ans

1. Plate

2. Tyre

3. Ring

4. Bangle

Question ID : 9895803928
Chosen Option : 4

Q.1 Select the correct option that will fill in the blank and complete the series.

dmt, fkv, ihy, mdc, ____

Ans

1. rzh

2. qzl

3. ryh

4. rxi

Question ID : 9895803926
Chosen Option : 3

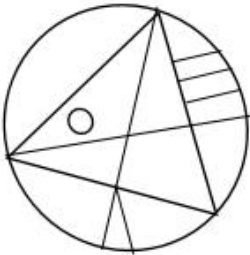
Q.1

2 Choose the alternative which most closely resembles the mirror image of the given word when mirror is placed at right side.

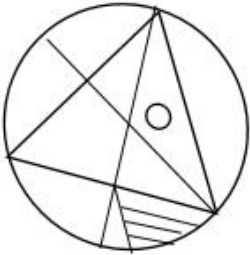


Ans

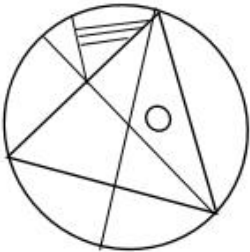
1.



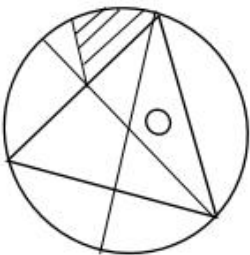
2.



3.



4.



Question ID : 9895803947
Chosen Option : 4

Q.1 Which number will follow next in the given number series?

15, 12, 19, 14, 25, 16, ?

Ans 1. 33

2. 31

3. 29

4. 35

Question ID : 9895803939
Chosen Option : 1

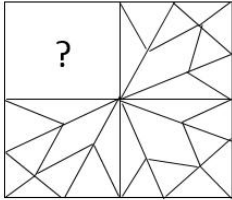
Q.1 Six girls are sitting in a row facing West. Kim is to the left of Sima and Sony is between Piku and Ria. There are two people seated between Piku and Sima, who is separated from Neela by one person. If Piku is seated at one end of the row, who is at the other end?

Ans 1. Sima

- 2. Kim
- 3. Neela
- 4. Ria

Question ID : 9895803935
Chosen Option : 2

Q.1 Select the figure which when placed in the blank space of the figure marked 'X' would complete the pattern.



(X)

Ans

- 1.
- 2.
- 3.
- 4.

Question ID : 9895803946
Chosen Option : 3

Q.1 The statements below are followed by two conclusions labeled I and II. Assuming that the information in the statements is true, even if it appears to be at variance with generally established facts, decide which conclusion(s) logically and definitely follow(s) from the information given in the statements.

6

Statements:

1. All roads are streets.
2. Some streets are avenues.

Conclusions:

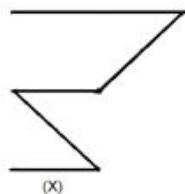
- I. Some roads are avenues.
- II. All avenues are roads.

Ans

- 1. Only conclusion II follows
- 2. Both conclusions I and II follow
- 3. Only conclusion I follows
- 4. Neither conclusion I nor II follows

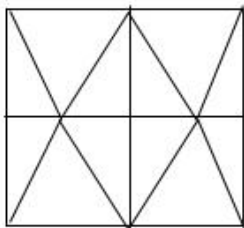
Question ID : 9895803946
Chosen Option : 3

Q.1
7 Choose the option in which the figure marked 'X' is embedded.

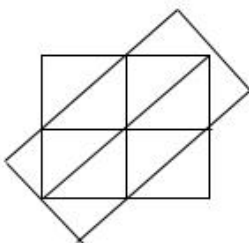


Ans

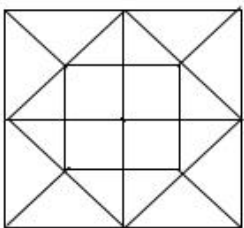
X 1.



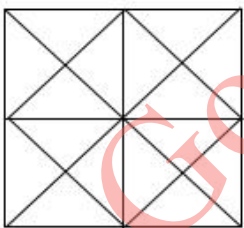
X 2.



X 3.



✓ 4.



Q.1
8 The statements below are followed by two conclusions labeled I and II. Assuming that the information in the statements is true, even if it appears to be at variance with generally established facts, decide which conclusion(s) logically and definitely follow(s) from the information given in the statements.

Statements:

1. Some animals are tigers.
2. All tigers are vertebrates.

Conclusions:

- I. All vertebrates are tigers.
- II. Some vertebrates are animals.

Ans

- 1. Only conclusion II follows
- 2. Only conclusion I follows
- 3. Both conclusion I & II follow
- 4. Neither conclusion I nor II follows

Question ID : 9895803938
Chosen Option : 1

Q.1
9 Pick the odd pair out.

- Ans
- 1. 5-13
 - 2. 17-49
 - 3. 15-41
 - 4. 9-25

Question ID : 9895803941
Chosen Option : 4

Q.2
0 Six persons A, B, C, D, E and F are sitting around a round table facing the centre. B is seated to the left of D. E is seated to the right of C. A is facing F, who is seated to the left of C. Who is seated to the left of A?

- Ans
- 1. D
 - 2. E
 - 3. C
 - 4. B

Question ID : 9895803934
Chosen Option : 2

Q.2
1 Which two signs should be interchanged to make the following equation correct?

$$6 \times 2 + 8 - 16 \div 4 = 18$$

- Ans
- 1. + and \div
 - 2. - and \div
 - 3. \times and \div
 - 4. + and \times

Question ID : 9895803944
Chosen Option : 1

Q.2
2 The numbers in the following set are related in a certain way. Choose the set that is similar to the following set:

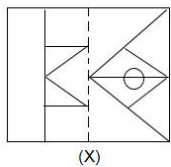
{128, 8, 32}

- Ans
- 1. {122, 10, 30}
 - 2. {64, 4, 16}
 - 3. {196, 7, 14}
 - 4. {144, 36, 72}

Question ID : 9895803943
Chosen Option : 3

Q.2
3

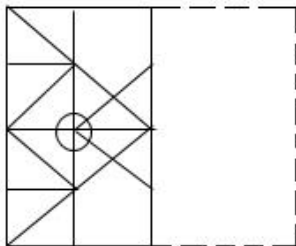
How would the pattern given on the square transparent sheet marked 'X' look when the sheet is folded along the dotted line?



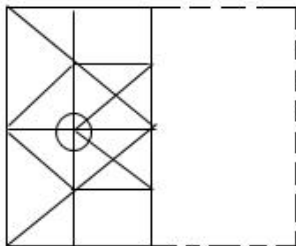
(X)

Ans

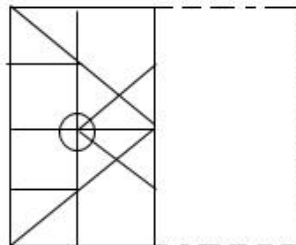
1.



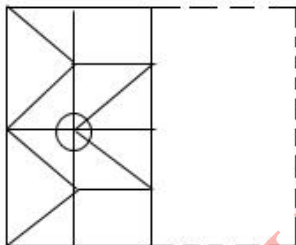
2.



3.



4.



Question ID : 9895803949
Chosen Option : 2

Q.2 Four numbers have been given out of which three are alike in some manner, while one is different. Choose the odd one.

4

1. 125

2. 1321

3. 729

4. 343

Question ID : 9895803942
Chosen Option : 1

Q.2 Select the correct option that will fill in the blank and complete the series.

5

5, ____, 10, 19, 35, 60

Ans 1. 6

- 2. 9
- 3. 8
- 4. 7

Question ID : 9895803940
Chosen Option : 4

Q.2 Neutral, expansionary, and contractionary strategies are related to which policy of the government?
6

- Ans
- 1. Monetary policy
 - 2. Banking policy
 - 3. Fiscal policy
 - 4. Budgetary policy

Question ID : 9895805467
Chosen Option : 2

Q.2 Baking soda, the common cooking ingredient, has which of the following chemical name?
7

- Ans
- 1. Sodium bicarbonate
 - 2. Sodium benzoate
 - 3. Monosodium glutamate
 - 4. Sodium chloride

Question ID : 9895805474
Chosen Option : 1

Q.2 What is the SI unit for the measurement of pressure?
8

- Ans
- 1. Pascal
 - 2. Joule
 - 3. Newton
 - 4. Ampere

Question ID : 9895805473
Chosen Option : 2

Q.2 In which year did Ms. Sushmita Sen become the first Indian woman to win the 'Miss Universe' title?
9

- Ans
- 1. 1996
 - 2. 1991
 - 3. 1994
 - 4. 1998

Question ID : 9895805466
Chosen Option : 2

Q.3 Who has won Sayed Modi India Grand Prix Gold Badminton Title 2018 in Men's Singles Titles?
0

- Ans
- 1. Sameer Verma
 - 2. Srikanth Kidambi
 - 3. Prannoy Kumar

4. Ajay Jayaram

Question ID : 9895805463
Chosen Option : 2

Q.3 What was the event that fundamentally changed Sardar Vallabhbhai Patel's life and drove him towards politics?

1

- Ans 1. The Gandhi Irwin Pact (year 1931)
2. Meeting with Mahatma Gandhi in Godhra (year 1917)
3. Non-Cooperation Movement (year 1922)
4. Bardoli Satyagraha (year 1928)

Question ID : 9895805483
Chosen Option : 1

Q.3 During whose rule was the historical Nalanda University established?

2

- Ans 1. Kumaragupta
2. Chandragupta
3. Dasratha
4. Bindusara

Question ID : 9895805481
Chosen Option : 2

Q.3 Which of the following is regarded as the shortest river of India?

3

- Ans 1. Narmada
2. Arvari
3. Godavari
4. Kaveri

Question ID : 9895805478
Chosen Option : 1

Q.3 Which among the following is the smallest mountain range in the world?

4

- Ans 1. Ural
2. Sutter Buttes
3. Alps
4. Sierra Nevada

Question ID : 9895805479
Chosen Option : 1

Q.3 Who is the founder of 'Sulabh Sanitation and Social Reform Movement'?

5

- Ans 1. Dr Bindeshwar Pathak
2. Baba Amte
3. Aruna Roy
4. Medha Patkar

Question ID : 9895805477

Chosen Option : 3

Q.3
6 Which of the following is a nocturnal animal?

- Ans
- 1. Murids
 - 2. Porcupine
 - 3. Hamster
 - 4. Bat

Question ID : 9895805475

Chosen Option : 3

Q.3
7 'The Mousetrap' was a famous play written by:

- Ans
- 1. Agatha Christie
 - 2. William Shakespeare
 - 3. Caryl Churchill
 - 4. George Bernard Shaw

Question ID : 9895805465

Chosen Option : 2

Q.3
8 Which country among the following options has the shortest constitution in the world?

- Ans
- 1. Norway
 - 2. United Kingdom
 - 3. India
 - 4. United States of America

Question ID : 9895805470

Chosen Option : 1

Q.3
9 'Jhumur' a traditional dance form, is performed in which of the following states?

- Ans
- 1. Madhya Pradesh
 - 2. Odisha
 - 3. Bengal
 - 4. Assam

Question ID : 9895805459

Chosen Option : 1

Q.4
0 Which city among the following is the most densely populated city, as of 2018?

- Ans
- 1. Shanghai
 - 2. Istanbul
 - 3. Tokyo
 - 4. Paris

Question ID : 9895805480

Chosen Option : 4

Q.4
1 The famous 'Ratnagiri Monastery' is located in which Indian state?

- Ans
- 1. Karnataka
 - 2. Orissa
 - 3. Jharkhand
 - 4. Gujarat

Question ID : 9895805461

Chosen Option : 1

Q.4
2 The ancient cities of Harappa and Mohenjo-Daro emerged along the banks of which river?

- Ans
- 1. Indus River
 - 2. Ganga River
 - 3. Brahmaputra River
 - 4. Baghmata River

Question ID : 9895805482

Chosen Option : 3

Q.4
3 Aravind Adiga got the prestigious Man Booker Prize for which book?

- Ans
- 1. The White Tiger
 - 2. The Kite Runner
 - 3. God of Small Things
 - 4. Selection Day

Question ID : 9895805464

Chosen Option : 2

Q.4
4 'Bishan Singh Bedi' is a legendary Indian player of:

- Ans
- 1. lawn tennis
 - 2. cricket
 - 3. hockey
 - 4. football

Question ID : 9895805462

Chosen Option : 4

Q.4
5 India recognizes the Right to _____ as being part of Right to Life (Article 21).

- Ans
- 1. Acceptance
 - 2. Water
 - 3. Fitness
 - 4. Medication

Question ID : 9895805472

Chosen Option : 2

Q.4
6 In which year was the Right to Education Act enacted in India?

- Ans 1. 2006
 2. 2009
 3. 2004
 4. 2011

Question ID : 9895805471
Chosen Option : 4

Q.4
7 Which Indian state has the largest area under forest cover?

- Ans 1. Kerala
 2. Arunachal Pradesh
 3. Madhya Pradesh
 4. Chhattisgarh

Question ID : 9895805476
Chosen Option : 4

Q.4
8 Union Cabinet has decide to raise contribution of Central Government to National Pension System (NPS) corpus of its employee from 10% to _____.

- Ans 1. 11%
 2. 12%
 3. 14%
 4. 20%

Question ID : 9895805469
Chosen Option : 1

Q.4
9 'Hemis Festival' is celebrated in which Indian state?

- Ans 1. Tamil Nadu
 2. Punjab
 3. Jammu and Kashmir
 4. Karnataka

Question ID : 9895805460
Chosen Option : 3

Q.5
0 Eminent economist and columnist _____ has resigned as part time member of Economic Advisory Council to the Prime Minister Narendra Modi.

- Ans 1. Arvind Subramanian
 2. Jagdish Bhagwati
 3. Raghuram Rajan
 4. Surjit Bhalla

Question ID : 9895805468
Chosen Option : 2

Q.5
1 The average of 15 numbers is 56. The average of first 8 numbers is 54.4 and that of last 8 numbers is 56.6. If 8th number is excluded then what is the average of the remaining numbers? (correct to one decimal place)

- Ans 1. 56.6
 2. 53.8

3. 56.2

4. 53.6

Question ID : 9895805775
Chosen Option : 2

Q.5 Study the following table, (which shows the number of units of an item manufactured and sold by 5 companies) and answer the question.

Company	No. of Units (in thousand)	
	Manufactured	Sold
A	42	30
B	45	32
C	36	26
D	51	36
E	54	40

What percent of total number of units sold by companies A, B and D is equal to the number of units manufactured by company C? (correct to one decimal place)

Ans 1. 40.9

2. 36.7

3. 35.6

4. 33.3

Question ID : 9895805789
Chosen Option : 1

Q.5 Walking at 75 % of his usual speed, Raghu is 80 minutes late to his office. What is his usual time in hours to cover the same distance?

Ans 1. $3\frac{1}{2}$

2. 5

3. 4

4. $4\frac{1}{2}$

Question ID : 9895805784
Chosen Option : 1

Q.5 The value of:

$$\frac{3}{8} \text{ of } \frac{4}{5} \div 1\frac{1}{5} + \frac{3}{7} \text{ of } \frac{7}{12} \div \frac{1}{40} \text{ of } \frac{2}{5} - 3\frac{2}{3} \div \frac{11}{30} \text{ of } \frac{2}{3}$$

Ans 1. $10\frac{1}{4}$

2. $2\frac{1}{4}$

3. $2\frac{1}{2}$

4. $3\frac{1}{3}$

Question ID : 9895805766
Chosen Option : 4

Q.5 Amina saves 16 % of her income. Now her income is increased by 20 % but she still saves the same amount as before. What is the percentage increase in her expenditure?

Ans 1. 20.4

- 2. 24.2
- 3. 21.6
- 4. 23.8

Question ID : 9895805771
Chosen Option : 2

Q.5 Two alloys A and B contain copper and zinc in the ratio 7 : 2 and 5 : 3 respectively. How many kg of A and B must be melted in order to get an alloy of 44 kg containing copper and zinc in the ratio 3 : 1?

- Ans**
- 1. 36 kg, 8 kg
 - 2. 24 kg, 20 kg
 - 3. 30 kg, 14 kg
 - 4. 28 kg, 16 kg

Question ID : 9895805772
Chosen Option : 2

Q.5 What is the average of the mean, median and range of the data:

34, 41, 6, 13, 27, 20, 48, and 55 ?

- Ans**
- 1. $30\frac{1}{3}$
 - 2. $30\frac{1}{2}$
 - 3. $36\frac{1}{3}$
 - 4. $36\frac{2}{3}$

Question ID : 9895805779
Chosen Option : 1

Q.5 The compound interest on a sum of ₹15800 for 2 years at 9% per annum, when the interest is compound 8 monthly, is (nearest to a rupee):

- Ans**
- 1. ₹3016
 - 2. ₹2956
 - 3. ₹3018
 - 4. ₹2992

Question ID : 9895805778
Chosen Option : 3

Q.5 Study the following table, (which shows the number of units of an item manufactured and sold by 5 companies) and answer the question.

Company	No. of Units (in thousand)	
	Manufactured	Sold
A	42	30
B	45	32
C	36	26
D	51	36
E	54	40

The ratio of the number of units manufactured by companies C and E together and the number of units sold by A and D together is?

- Ans**
- 1. 24 : 13
 - 2. 15 : 11

3. 17 : 15

4. 15 : 13

Question ID : 9895805788

Chosen Option : 4

Q.6 Note-books are bought at 16 for ₹700 and sold at 11 for ₹500. How many notebooks should be sold to gain ₹450?
0

Ans 1. 260

2. 254

3. 264

4. 272

Question ID : 9895805769

Chosen Option : 2

Q.6 The diagonal of a rectangle field is 15 m and its area is 108 m^2 . What is the cost of fencing the field at ₹50.50 per m?
1

Ans 1. ₹2121

2. ₹2222

3. ₹1919

4. ₹2020

Question ID : 9895805780

Chosen Option : 4

Q.6 Study the following table, (which shows the number of units of an item manufactured and sold by 5 companies) and answer the question.
2

Company	No. of Units (in thousand)	
	Manufactured	Sold
A	42	30
B	45	32
C	36	26
D	51	36
E	54	40

Which Company sold the highest percentage of units as compared to manufactured by it?

Ans 1. A

2. E

3. C

4. B

Question ID : 9895805787

Chosen Option : 2

Q.6 Two trains start at the same time, P from A to B and Q from B to A. If they arrive at B and A, respectively, $2\frac{1}{2}$ hours and 10 hours after they passed each other, and the speed of P is 90 km/hr, then the speed of Q in km/hr is?
3

Ans 1. 75

2. 60

3. 45

4. 80

Question ID : 9895805783

Chosen Option : 3

Q.6

4 If x is subtracted from each other of 17, 14, 22 and 18 then these numbers are in proportion, in this order. What is the mean proportion between $9x$ and $5x$?

- Ans
- 1. $6\sqrt{5}$
 - 2. 7
 - 3. $3\sqrt{5}$
 - 4. 6

Question ID : 9895805773
Chosen Option : 3

Q.6 A sum of ₹ x is divided among A, B and C such that the ratio of shares of A and B is 3 : 4 and that of B and C is 5 : 6. If C receives ₹1440 more than what A receives, then the value of x is?

- Ans
- 1. 9440
 - 2. 9280
 - 3. 9000
 - 4. 9600

Question ID : 9895805774
Chosen Option : 2

Q.6 A sum of ₹6900 was lent partly at 5% and the rest at 8% simple interest. Total interest received after 3 years from both was ₹1359. What was the ratio of money lent at 5% and 8%?

- Ans
- 1. 10 : 13
 - 2. 31 : 38
 - 3. 11 : 12
 - 4. 14 : 9

Question ID : 9895805777
Chosen Option : 4

Q.6 A person bought 80 m cloth at ₹110 per m and sold 75% of it at a gain of 6%. At what gain percent did he sell the remaining cloth, if he gained 10% on his outlay?

- Ans
- 1. 26%
 - 2. 24%
 - 3. 22%
 - 4. 28%

Question ID : 9895805770
Chosen Option : 2

Q.6 Let x be the least number which when divided by 10, 12, 14 and 16 leaves the remainders 2, 4, 6 and 8, respectively, but x is divisible by 17. When x is divided by 52, the quotient is:

- Ans
- 1. 96
 - 2. 92
 - 3. 99
 - 4. 95

Question ID : 9895805765
Chosen Option : 2

Q.6 The volume of a right circular cone is 2464 cm^3 . If the radius of its base is 14 cm, then its curved surface area (in cm^2) is: (take $\pi = \frac{22}{7}$)

- Ans
- 1. $44\sqrt{58}$

2. $88\sqrt{58}$

3. $44\sqrt{85}$

4. $88\sqrt{85}$

Question ID : 9895805782

Chosen Option : 3

Q.7 Working together A, B and C can complete a piece of work in 24 days. After working together for 4 days, C left the work. A and B completed the remaining work in 30 days. The number of days taken by C alone to complete the same work is:

Ans 1. 60

2. 90

3. 72

4. 54

Question ID : 9895805785

Chosen Option : 3

Q.7 A shopkeeper marks the price of an article 25% above its cost price. After allowing 10% discount on the market price, the article is sold for ₹720. What is the difference (in ₹) between the cost price and market price of the article?

Ans 1. 180

2. 160

3. 150

4. 120

Question ID : 9895805768

Chosen Option : 3

Q.7 How many spherical balls each of 2cm radius can be made out of a solid metallic cube of edge 44 cm? (take $\pi = \frac{22}{7}$)

Ans 1. 2532

2. 2448

3. 2420

4. 2541

Question ID : 9895805781

Chosen Option : 3

Q.7 The value of $[9.5 \div (0.6 \times 0.75 + 0.8 \div 16) + 0.75] \div (0.03 \div 0.6 \text{ of } 0.01)$ lies between:

Ans 1. 1 and 2

2. 2 and 3

3. 3 and 4

4. 0 and 1

Question ID : 9895805767

Chosen Option : 1

Q.7 The average ages of boys and girls in a class is 14.5 years and 15 years respectively. If the ratio of the number of boys and girls is 2 : 3, then what is the average age (in years) of all students in the class?

Ans 1. 15.4

2. 15.2

3. 14.8

4. 14.6

Question ID : 9895805776
Chosen Option : 3

Q.7 A can do $\frac{3}{5}$ th of a work in 12 days, B can do $\frac{1}{3}$ rd of that work in 15 days. They worked together for 12 days and then A left the work, B alone will complete the remaining work in?

- Ans
- 1. 9 days
 - 2. 4 days
 - 3. 5 days
 - 4. 6 days

Question ID : 9895805786
Chosen Option : 1

Section : English Language

Q.1 Select the most appropriate option to substitute the underlined segment in the given sentence. If there is no need to substitute it, select No improvement.

Operation Flood was started with the primary objective for linking rural producers with urban consumers.

- Ans
- 1. was started with the primary objective of
 - 2. was started with the primary objectives of
 - 3. was started with primary objective
 - 4. No improvement

Question ID : 9895805313
Chosen Option : 1

Q.2 Select the most appropriate option to substitute the underlined segment in the given sentence. If there is no need to substitute it, select No improvement.

Dancing around a totem pole was one of the favourite pastimes of the American Indians.

- Ans
- 1. No improvement
 - 2. are the favourite pastimes
 - 3. were one of the favourite pastimes
 - 4. was one of the favourite pastime

Question ID : 9895805311
Chosen Option : 2

Q.3 Select the most appropriate option to fill in the blank.

If you listened carefully, you _____.

- Ans
- 1. will understand
 - 2. would understand
 - 3. would have understood
 - 4. understand

Question ID : 9895805314
Chosen Option : 1

Q.4

From the given options, identify the segment in the sentence which contains the grammatical error.

He want to finish the assignment in the last week but in fact he could not.

- Ans
- 1. want to finish
 - 2. the assignment
 - 3. in the last week
 - 4. he could not

Question ID : 9895805308
Chosen Option : 4

Q.5 Select the synonym of the given word.

IMPAIR

- Ans
- 1. Improve
 - 2. Combine
 - 3. Weaken
 - 4. Introduce

Question ID : 9895805323
Chosen Option : 2

Q.6 Select the synonym of the given word.

GALLANT

- Ans
- 1. Wealthy
 - 2. Wild
 - 3. Courageous
 - 4. Violent

Question ID : 9895805322
Chosen Option : 1

Q.7 Select the word which means the same as the group of words given.

A city which is multicultural

- Ans
- 1. Urban
 - 2. Metro
 - 3. Global
 - 4. Cosmopolitan

Question ID : 9895805329
Chosen Option : 4

Q.8 From the given options, identify the segment in the sentence which contains the grammatical error.

The speech he made on his visit to our college concerning our society's needs have bothered me greatly.

- Ans
- 1. concerning our
 - 2. The speech
 - 3. have bothered

4. on his visit

Question ID : 9895805309
Chosen Option : 1

Q.9 Select the option that means the same as the given idiom.

To sound a red alert.

- Ans 1. To raise an alarm
 2. To wave a red flag
 3. To hear an alarm
 4. To press a red button

Question ID : 9895805327
Chosen Option : 4

Q.10 Select the antonym of the given word.

DUBIOUS

- Ans 1. Doubtful
 2. Docile
 3. Certain
 4. Faithful

Question ID : 9895805325
Chosen Option : 1

Q.11 Select the most appropriate option to substitute the underlined segment in the given sentence. If there is no need to substitute it, select No improvement.

The GATT Treaty, it is explained, would allow subsidised to the extent of 10% of the market price.

- Ans 1. No improvement
 2. would allow supply
 3. would allow subsidy
 4. would allow support

Question ID : 9895805312
Chosen Option : 2

Comprehension:

In the following passage some words have been deleted. Fill in the blanks with the help of the alternatives given.

After my job was over, I went to Mumbai and returned after (1) _____ six months. I had barely taken (2) _____ my clothes when I saw Ratan standing (3) _____ a new baby. He was (4) _____ with joy. Even my daughter could not have (5) _____ such joy on finding her younger brother after several years.

SubQuestion No : 12

Q.12 Select the most appropriate option that will fill in the blank number 1.

- Ans 1. nearly

- 2. hardly
- 3. rarely
- 4. merely

Question ID : 9895805317
Chosen Option : 1

Comprehension:

In the following passage some words have been deleted. Fill in the blanks with the help of the alternatives given.

After my job was over, I went to Mumbai and returned after (1) _____ six months. I had barely taken (2) _____ my clothes when I saw Ratan standing (3) _____ a new baby. He was (4) _____ with joy. Even my daughter could not have (5) _____ such joy on finding her younger brother after several years.

SubQuestion No : 13

Q.1
3 Select the most appropriate option that will fill in the blank number 2.

- Ans
- 1. off
 - 2. of
 - 3. over
 - 4. away

Question ID : 9895805318
Chosen Option : 3

Comprehension:

In the following passage some words have been deleted. Fill in the blanks with the help of the alternatives given.

After my job was over, I went to Mumbai and returned after (1) _____ six months. I had barely taken (2) _____ my clothes when I saw Ratan standing (3) _____ a new baby. He was (4) _____ with joy. Even my daughter could not have (5) _____ such joy on finding her younger brother after several years.

SubQuestion No : 14

Q.1
4 Select the most appropriate option that will fill in the blank number 3.

- Ans
- 1. with
 - 2. along
 - 3. near
 - 4. by

Question ID : 9895805319
Chosen Option : 1

Comprehension:

In the following passage some words have been deleted. Fill in the blanks with the help of the alternatives given.

After my job was over, I went to Mumbai and returned after (1) _____ six months. I had barely taken (2) _____ my clothes when I saw Ratan standing (3) _____ a new baby. He was (4) _____ with joy. Even my daughter could not have (5) _____ such joy on finding her younger brother after several years.

SubQuestion No : 15

Q.1
5 Select the most appropriate option that will fill in the blank number 4.

- Ans
- 1. singing
 - 2. bursting
 - 3. skipping
 - 4. dancing

Question ID : 9895805320
Chosen Option : 3

Comprehension:

In the following passage some words have been deleted. Fill in the blanks with the help of the alternatives given.

After my job was over, I went to Mumbai and returned after (1) _____ six months. I had barely taken (2) _____ my clothes when I saw Ratan standing (3) _____ a new baby. He was (4) _____ with joy. Even my daughter could not have (5) _____ such joy on finding her younger brother after several years.

SubQuestion No : 16

Q.1
6 Select the most appropriate option that will fill in the blank number 5.

- Ans
- 1. thought
 - 2. understood
 - 3. advised
 - 4. felt

Question ID : 9895805321
Chosen Option : 1

Q.1
7 Select the antonym of the given word.

HOSTILE

- Ans
- 1. Serene
 - 2. Friendly
 - 3. Negative
 - 4. Optimistic

Question ID : 9895805324
Chosen Option : 4

Q.1
8 Select the most appropriate option to fill in the blank.

Invite everyone in the group to _____ us for a weekend party.

- Ans
- 1. join them
 - 2. join each other
 - 3. join together
 - 4. join

Question ID : 9895805315
Chosen Option : 4

Q.1
9 From the given options, identify the segment in the sentence which contains the grammatical error.

Every one of the survivor of the capsized ship has told the same story.

- Ans
- 1. the same story
 - 2. Every one
 - 3. capsized ship
 - 4. of the survivor

Question ID : 9895805310
Chosen Option : 4

Q.2
0 Select the correctly spelt word.

- Ans
- 1. Thoroughfare
 - 2. Thoroghfare
 - 3. Throughfare
 - 4. Thoroufare

Question ID : 9895805330
Chosen Option : 2

Q.2
1 Select the word which means the same as the group of words given.

One who knows everything

- Ans
- 1. Omnipotent
 - 2. Omniscient
 - 3. Omnipatient
 - 4. Omnipresent

Question ID : 9895805328
Chosen Option : 2

Q.2
2 Select the most appropriate word to fill in the blank.

A successful entertainer _____ the right mood before beginning a joke or story.

- Ans
- 1. engages
 - 2. creates
 - 3. spreads

4. enjoys

Question ID : 9895805333
Chosen Option : 4

Q.2
3 Select the option that means the same as the given idiom.

In the good books

- Ans 1. To do favourable things
 2. To collect good books
 3. To be in favour of
 4. To accompany good people

Question ID : 9895805326
Chosen Option : 2

Q.2
4 Select the correctly spelt word.

- Ans 1. Equivalent
 2. Equivalant
 3. Equivelent
 4. Eqivalent

Question ID : 9895805331
Chosen Option : 3

Q.2
5 Select the most appropriate word to fill in the blank.

The soldiers were instructed to _____ restraint and handle the situation peacefully.

- Ans 1. prevent
 2. control
 3. resist
 4. exercise

Question ID : 9895805332
Chosen Option : 2

Section : Hindi Language

Q.1 दिए गए शब्द का विलोम चुनें।

आस्था

- Ans 1. क्षमा
 2. प्रार्थना
 3. विराग
 4. अनास्था

Question ID : 9895805630
Chosen Option : --

Q.2

दिए गए वाक्य में रेखांकित खंड को प्रतिस्थापित करने के लिए उपयुक्त विकल्प का चयन करें।

मैंने इन सब बातों को गहराई पर अनुभव किया।

Ans

- 1. बातों को गहराई से
- 2. बातों में गहराई की
- 3. बातों पर गहराई की
- 4. गहराई पर बातों की

Question ID : 9895805618
Chosen Option : --

Q.3 दिए गए शब्द का विलोम चुनें।

दुर्लभ

Ans

- 1. अलभ
- 2. सुलभ
- 3. दुर्जन
- 4. सज्जन

Question ID : 9895805631
Chosen Option : --

Q.4 दिए गए वाक्य में रेखांकित खंड को प्रतिस्थापित करने के लिए उपयुक्त विकल्प का चयन करें।

जीवन के इस पड़ाव पर आकर उसके व्यवहार में ठहराव आ गई है।

Ans

- 1. ठहराव आ गया है।
- 2. ठहराव आए गए हैं।
- 3. ठहराव जा कर गया है।
- 4. ठहराव आ गए है।

Question ID : 9895805619
Chosen Option : --

Q.5 सही वर्तनी वाले शब्द का चयन करें।

Ans

- 1. चिकीत्सालय
- 2. चिकित्सालय
- 3. चिकीतसालय
- 4. चीकितसालय

Question ID : 9895805638
Chosen Option : --

Q.6 दिये गये वाक्यांश के लिए एक शब्द दीजिये।

मेहनत करने वाला

Ans

- 1. मेहनताना
- 2. आलसी
- 3. कामचोर
- 4. कर्मठ

Question ID : 9895805637
Chosen Option : --

Q.7 निम्नलिखित में से उस विकल्प का चयन करें जो 'दो नावों पर पैर रखना' मुहावरे का अर्थ व्यक्त करता है।

- Ans
- 1. दो विरोधी पक्षों का आश्रय लेना
 - 2. नदी पार करना
 - 3. दो नावों पर एक साथ घूमना
 - 4. एक साथ कई काम करना

Question ID : 9895805635
Chosen Option : --

Q.8 रिक्त स्थान को भरने के लिए उपयुक्त शब्द का चयन करें।

पढ़ लो _____ सो जाओ।

- Ans
- 1. क्योंकि
 - 2. बल्कि
 - 3. या
 - 4. लेकिन

Question ID : 9895805623
Chosen Option : --

Q.9 सही वर्तनी वाले शब्द का चयन करें।

- Ans
- 1. हसतलिखित
 - 2. हस्तलिखीत
 - 3. हस्तलीखित
 - 4. हस्तलिखित

Question ID : 9895805639
Chosen Option : --

Q.10 रिक्त स्थान को भरने के लिए उपयुक्त शब्द का चयन करें।

हम _____ साथ पूर्ण सहयोग करेंगे।

- Ans
- 1. हमारे
 - 2. अपने
 - 3. आपके

✗ 4. आप

Question ID : 9895805622
Chosen Option : --

Q.1
1 दिये गये वाक्यांश के लिए एक शब्द दीजिये।

जिसका आदि न हो

- Ans
- ✓ 1. अनादि
 - ✗ 2. अमर
 - ✗ 3. अजर
 - ✗ 4. अनंत

Question ID : 9895805636
Chosen Option : --

Comprehension:

निम्नलिखित गद्यांश के रिक्त स्थानों की पूर्ति गद्यांश के नीचे दिए गए प्रश्नों के अनुसार कीजिए -

महापुरुषों ने समय को सच्चा _____ (1) माना है। वह इसलिए क्योंकि सभी मनुष्यों को अनेक प्रकार की _____ (2) समय स्वयं ही देता रहता है। मान लीजिये, किसी को ट्रेन पकड़नी है, यदि वह ठीक समय पर रेलवे स्टेशन पर _____ (3) जाएगा तभी वह _____ (4) को पकड़ सकेगा। एक क्षण की _____ (5) से ट्रेन छूट जाएगी। तब वह अवश्य ही पश्चाताप से भर कर अपने मन में सोचेगा कि काश मैं दो चार क्षण पहले ही चल देता।

SubQuestion No : 12

Q.1
2 गद्यांश में संकेतित रिक्त स्थान (1) के लिए उपयुक्त शब्द होगा -

- Ans
- ✗ 1. गायक
 - ✗ 2. शत्रु
 - ✗ 3. पुत्र
 - ✓ 4. गुरु

Question ID : 9895805625
Chosen Option : --

Comprehension:

निम्नलिखित गद्यांश के रिक्त स्थानों की पूर्ति गद्यांश के नीचे दिए गए प्रश्नों के अनुसार कीजिए -

महापुरुषों ने समय को सच्चा _____ (1) माना है। वह इसलिए क्योंकि सभी मनुष्यों को अनेक प्रकार की _____ (2) समय स्वयं ही देता रहता है। मान लीजिये, किसी को ट्रेन पकड़नी है, यदि वह ठीक समय पर रेलवे स्टेशन पर _____ (3) जाएगा तभी वह _____ (4) को पकड़ सकेगा। एक क्षण की _____ (5) से ट्रेन छूट जाएगी। तब वह अवश्य ही पश्चाताप से भर कर अपने मन में सोचेगा कि काश मैं दो चार क्षण पहले ही चल देता।

SubQuestion No : 13

Q.1
3 गद्यांश में संकेतित रिक्त स्थान (2) के लिए उपयुक्त शब्द होगा -

- Ans
- 1. शिक्षाएँ
 - 2. वायु
 - 3. भोजन
 - 4. आकाश

Question ID : 9895805626
Chosen Option : --

Comprehension:

निम्नलिखित गद्यांश के रिक्त स्थानों की पूर्ति गद्यांश के नीचे दिए गए प्रश्नों के अनुसार कीजिए -

महापुरुषों ने समय को सच्चा _____ (1) माना है। वह इसलिए क्योंकि सभी मनुष्यों को अनेक प्रकार की _____ (2) समय स्वयं ही देता रहता है। मान लीजिये, किसी को ट्रेन पकड़नी है, यदि वह ठीक समय पर रेलवे स्टेशन पर _____ (3) जाएगा तभी वह _____ (4) को पकड़ सकेगा। एक क्षण की _____ (5) से ट्रेन छूट जाएगी। तब वह अवश्य ही पश्चाताप से भर कर अपने मन में सोचेगा कि काश मैं दो चार क्षण पहले ही चल देता।

SubQuestion No : 14

Q.1
4 गद्यांश में संकेतित रिक्त स्थान (3) के लिए उपयुक्त शब्द होगा -

- Ans
- 1. उड़

2. पहुँच

3. लेट

4. लड़ाई

Question ID : 9895805627

Chosen Option : --

Comprehension:

निम्नलिखित गद्यांश के रिक्त स्थानों की पूर्ति गद्यांश के नीचे दिए गए प्रश्नों के अनुसार कीजिए -

महापुरुषों ने समय को सच्चा _____ (1) माना है। वह इसलिए क्योंकि सभी मनुष्यों को अनेक प्रकार की _____ (2) समय स्वयं ही देता रहता है। मान लीजिये, किसी को ट्रेन पकड़नी है, यदि वह ठीक समय पर रेलवे स्टेशन पर _____ (3) जाएगा तभी वह _____ (4) को पकड़ सकेगा। एक क्षण की _____ (5) से ट्रेन छूट जाएगी। तब वह अवश्य ही पश्चाताप से भर कर अपने मन में सोचेगा कि काश मैं दो चार क्षण पहले ही चल देता।

SubQuestion No : 15

Q.1
5 गद्यांश में संकेतित रिक्त स्थान (4) के लिए उपयुक्त शब्द होगा -

Ans

1. ट्रेन

2. साइकिल

3. बस

4. जहाज

Question ID : 9895805628

Chosen Option : --

Comprehension:

निम्नलिखित गद्यांश के रिक्त स्थानों की पूर्ति गद्यांश के नीचे दिए गए प्रश्नों के अनुसार कीजिए -

महापुरुषों ने समय को सच्चा _____ (1) माना है। वह इसलिए क्योंकि सभी मनुष्यों को अनेक प्रकार की _____ (2) समय स्वयं ही देता रहता है। मान लीजिये, किसी को ट्रेन पकड़नी है, यदि वह ठीक समय पर रेलवे स्टेशन पर _____ (3) जाएगा तभी वह _____ (4) को पकड़ सकेगा। एक क्षण की _____ (5) से ट्रेन छूट जाएगी। तब वह अवश्य ही पश्चाताप से भर कर अपने मन में सोचेगा कि काश मैं दो चार क्षण पहले ही चल देता।

SubQuestion No : 16

Q.1
6 गद्यांश में संकेतित रिक्त स्थान (5) के लिए उपयुक्त शब्द होगा -

- Ans
- 1. ऊँचाई
 - 2. देरी
 - 3. जल्दी
 - 4. लक्ष्य

Question ID : 9895805629
Chosen Option : --

Q.1
7 दिए गए शब्द के पर्यायवाची शब्द का चयन करें।

सरस्वती

- Ans
- 1. माता
 - 2. देवी
 - 3. शारदा
 - 4. नेत्री

Question ID : 9895805633
Chosen Option : --

Q.1
8 दिए गए वाक्य का वह भाग ज्ञात करें जिसमें कोई त्रुटि है।

फूलों का गुच्छा अतिथि पर सादर भेंट किया गया।

- Ans
- 1. सादर भेंट
 - 2. किया गया।
 - 3. अतिथि पर
 - 4. फूलों का गुच्छा

Question ID : 9895805615

Chosen Option : --

Q.1 दिए गए वाक्य का वह भाग ज्ञात करें जिसमें कोई त्रुटि है।

आज मैं आपके दर्शन करके धन्यता हो गया।

- Ans
- 1. हो गया।
 - 2. आपके दर्शन
 - 3. करके धन्यता
 - 4. आज मैं

Question ID : 9895805614

Chosen Option : --

Q.2 दिए गए वाक्य में रेखांकित खंड को प्रतिस्थापित करने के लिए उपयुक्त विकल्प का चयन करें।

रात होने के कारण जहाँ रुके हैं, यहाँ पर डेरा डाल लेते हैं।

- Ans
- 1. कहाँ पर डेरा डाल लेता है।
 - 2. वहीं पर डेरा डाल लेते हैं।
 - 3. जहाँ पर डेरा डाल लेते हैं।
 - 4. कहीं पर डेरा डाल लेते हैं।

Question ID : 9895805617

Chosen Option : --

Q.2 निम्नलिखित में से उस विकल्प का चयन करें जो 'दूर के ढोल सुनावने' मुहावरे का अर्थ व्यक्त करता है।

- Ans
- 1. दूर के ढोल अच्छे लगना
 - 2. दूर से लोगों को देखना
 - 3. दूर से ढोल सुनना
 - 4. दूर की वस्तुएँ अच्छे लगना

Question ID : 9895805634

Chosen Option : --

Q.2 रिक्त स्थान को भरने के लिए उपयुक्त शब्द का चयन करें।

इस बात से _____ क्या।

- Ans
- 1. मुझे
 - 2. आप
 - 3. मेरे से
 - 4. मैंने

Question ID : 9895805621

Chosen Option : --

Q.2
3

दिए गए शब्द के पर्यायवाची शब्द का चयन करें।

रात्रि

- Ans
- 1. गजनी
 - 2. ज्ञानी
 - 3. रजनी
 - 4. हिमानी

Question ID : 9895805632
Chosen Option : --

Q.2
4 रिक्त स्थान को भरने के लिए उपयुक्त शब्द का चयन करें।

स्वस्थ शरीर में स्वस्थ मन का _____ होता है।

- Ans
- 1. निवास
 - 2. अभाव
 - 3. अंधकार
 - 4. निकास

Question ID : 9895805620
Chosen Option : --

Q.2
5 दिए गए वाक्य का वह भाग ज्ञात करें जिसमें कोई त्रुटि है।

जब धन की आवश्यकता होती है तब किसी से उधार माँगने का नौबत आ जाती है।

- Ans
- 1. जब धन की
 - 2. तब किसी से
 - 3. आवश्यकता होती है
 - 4. उधार माँगने का नौबत आ जाती है।

Question ID : 9895805616
Chosen Option : --