

Constable (GD) in CAPFs, NIA, SSF and Rifleman (GD) in Assam Rifles Examination, 2018

Roll No. :	www.GovtJobsAlert.In
Registration No.	
Name :	MD EHSAN
Exam Venue :	ION Digital Zone iDZ Baruiapur
Exam Time :	9:00 AM - 10:30 AM
Exam Date :	21/02/2019

Section : General Section

Q.1 The statements below are followed by two conclusions labeled I and II. Assuming that the information in the statements is true, even if it appears at variance with generally established facts, decide which conclusion(s) logically and definitely follow(s) from the information given in the statements.

Statements:

- 1) Some stores are rooms.
- 2) Some rooms are posters.

Conclusion:

- I. Some rooms are stores.
II: Some posters are rooms.

- Ans** 1. Only conclusion I follows.
 2. Both conclusions follow.
 3. Only conclusion II follows.
 4. Neither conclusion I nor conclusion II follows.

Question ID : 9895803989
Chosen Option : 3

Q.2 Select the option that is related to the third term in the same way as the second term is related to the first term.

Initial : Final :: Mourn : ?

- Ans** 1. Recall
 2. Recap
 3. Murmur
 4. Rejoice

Question ID : 9895803981
Chosen Option : 4

Q.3 Select the option that will correctly replace the question mark (?) in the series.

0, 8, 24, 48, ?

- Ans** 1. 81
 2. 87
 3. 89
 4. 80

Question ID : 9895803990
Chosen Option : 1

Q.4 Select the option that is related to the third number in the same way as the second number is related to the first number.

12 : 180 :: 14 : ?

- Ans
- 1. 144
 - 2. 221
 - 3. 169
 - 4. 238

Question ID : 9895803992
Chosen Option : 4

Q.5 Choose the option that most closely resembles the mirror image of the given word if the mirror is placed at the right side.

HOMAGE

- Ans
- 1. **ƎHOMGE**
 - 2. **HOWAGE**
 - 3. **ƎHOMGE**
 - 4. **ƎHOMGE**

Question ID : 9895803999
Chosen Option : 1

Q.6 The statements below are followed by two conclusions labeled I and II. Assuming that the information in the statements is true, even if it appears at variance with generally established facts, decide which conclusion(s) logically and definitely follow(s) from the information given in the statements.

Statements:

- 1) All customers are clients.
- 2) All clients are medicines.

Conclusion:

- I. Some medicines are customers.
- II. Some medicines are clients.

- Ans
- 1. Either conclusion I or conclusion II follows.
 - 2. Both conclusions follow.
 - 3. Only conclusion II follows.
 - 4. Only conclusion I follows.

Question ID : 9895803988
Chosen Option : 2

Q.7 In a certain code, VIROLOGY is written as LOGYVIRO. How will SEMANTIC be written in that code?

- Ans
- 1. **NTICSEMA**
 - 2. **CITNAMES**
 - 3. **NTJCSEMA**
 - 4. **NTICSFMA**

Question ID : 9895803983
Chosen Option : 1

Q.8 There is only one runway which will be used by seven flights one by one. P and Q will use the runway neither first nor last. S will use it second after R. M will use it second before O. N will use it after O and before R. Q will use it just before S. Who will use the runway in the middle?

- Ans
- 1. O
 - 2. N
 - 3. P
 - 4. Q

Question ID : 9895803987
Chosen Option : 2

Q.9 Choose the odd one out of the given options.

- Ans
- 1. Silicon
 - 2. Magnesium
 - 3. Tungsten
 - 4. Aurum

Question ID : 9895803979
Chosen Option : 3

Q.1₀ Choose the odd one out of the given options.

- Ans
- 1. RGD
 - 2. HIL
 - 3. EKM
 - 4. QSC

Question ID : 9895803978
Chosen Option : 1

Q.1 Eight friends A, B, C, D, E, F, H and G are sitting around a circular table facing each other for a group discussion. A is
1 opposite F and second to the right of E. G is between C and A. H is to the left of E. Who is sitting to the immediate left of A?

- Ans
- 1. Either G or D
 - 2. B
 - 3. C
 - 4. Either B or D

Question ID : 9895803986
Chosen Option : 3

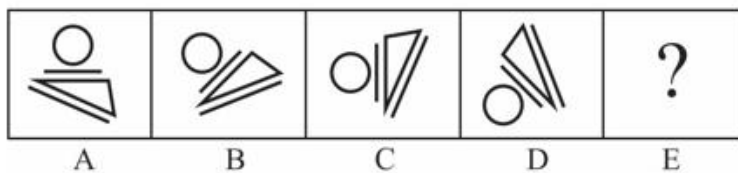
Q.1 Seven friends O, P, Q, R, S, T and U are watching a cricket match sitting in a stadium. P is sitting at one extreme end. T
2 is sitting between Q and U, and R is sitting to the immediate right of S and immediate left of Q. U is sitting second to the left of P. Who is sitting between U and P?

- Ans
- 1. R
 - 2. O
 - 3. S
 - 4. Q

Question ID : 9895803985
Chosen Option : 3

Q.1
3

Choose the option that would follow next in the given figure series.



Ans

- 1.
- 2.
- 3.
- 4.

Question ID : 9895803996
Chosen Option : 4

Q.1 Select the option that is related to the third term in the same way as the second term is related to the first term.

4 AC : CI :: GH : ?

- Ans
- 1. UY
 - 2. UX
 - 3. UU
 - 4. UV

Question ID : 9895803982
Chosen Option : 4

Q.1 In a certain code, OPTIMIST is written as 121. How will PESSIMIST be written in that code?

- 5
- Ans
- 1. 129
 - 2. 105
 - 3. 131
 - 4. 127

Question ID : 9895803984
Chosen Option : 2

Q.1 Select the option that will correctly replace the question mark (?) in the series.

6 PRL, QPM, RNN, SLO, ?

- Ans
- 1. TIO
 - 2. TKP
 - 3. TJP

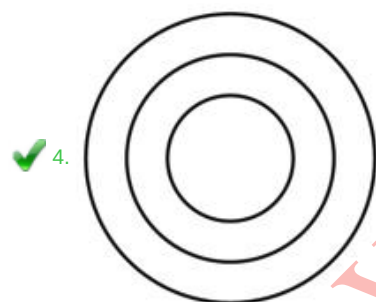
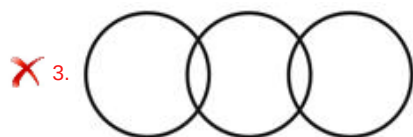

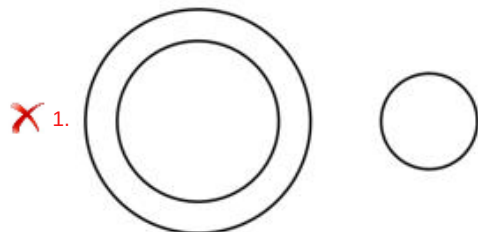
4. TIP

Question ID : 9895803977
Chosen Option : 3

Q.1 ₇ Select the Venn diagram that best represents the given set of classes.

Animals, Mammals, Deer

Ans



GovtJobsAlert.In

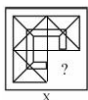
Question ID : 9895804001
Chosen Option : 1

Q.1 ₈ Choose the odd number out of the given options.



- Ans 1. 151
 2. 163
 3. 157
 4. 161

Question ID : 9895803993
Chosen Option : 3

Q.1 ₉ Select a figure from amongst the four alternatives, that when placed in the blank space (?) of figure X will complete the pattern. (Rotation is not allowed).



Ans



Question ID : 9895803997
Chosen Option : 3

Q.2 Find out the two signs to be interchanged to make the following equation correct.

$$18 + 3 \times 27 - 9 \div 3 = 78$$

- Ans 1. + and ×
 2. + and ÷
 3. - and ÷
 4. + and -

Question ID : 9895803995
Chosen Option : 3

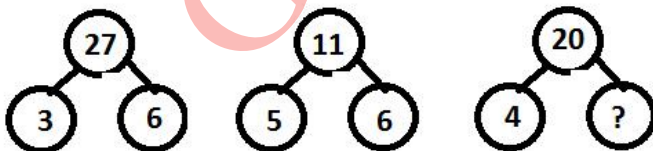
Q.2 Select the option that will correctly replace the question mark (?) in the series.

12, 22, 42, 82, ?

- Ans 1. 172
 2. 182
 3. 152
 4. 162

Question ID : 9895803991
Chosen Option : 4

Q.2 Select the option that will correctly replace the question mark (?) in the given pattern.



- Ans 1. 6
 2. 24
 3. 36
 4. 8

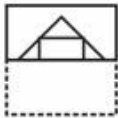
Question ID : 9895803994
Chosen Option : 1

Q.2 A square transparent sheet with a pattern is given. How will the pattern appear when the transparent sheet is folded along the dotted line?



Ans

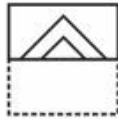
✓ 1.



✗ 2.



✗ 3.



✗ 4.



Question ID : 9895804000
Chosen Option : 1

Q.2 Select the option that is related to the third term in the same way as the second term is related to the first term.

4

Blend : Mix :: Request : ?

Ans

✗ 1. Deny

✗ 2. Noting

✓ 3. Solicit

✗ 4. Accept

Question ID : 9895803980
Chosen Option : 4

Q.2 Select a figure from amongst the four alternatives, that when placed in the blank space (?) of figure X will complete the pattern. (Rotation is not allowed).

5



x

Ans

✗ 1.



✗ 2.



✗ 3.



✓ 4.



Question ID : 9895803998
Chosen Option : 4

Q.2 Which of the following statements about the Indus Valley Civilization is NOT true?

6

Ans 1.

It was an urban civilisation where people lived in well planned towns

2. Animal meat was the staple food

3.

It flourished around 2500 BC in the present day Pakistan and Western India

4. The houses were made of baked bricks

Question ID : 9895806381

Chosen Option : 4

Q.2
7 Dry Ice is the solid form of:

Ans 1. methane

2. carbon dioxide

3. oxygen

4. ozone

Question ID : 9895806390

Chosen Option : 4

Q.2
8 Timur invaded India during the reign of:

Ans 1. Akbar

2. Alauddin Khilji

3. Feroz Shah Tughlaq

4. Nasir-ud-Din Mahmud Shah Tughluq

Question ID : 9895806382

Chosen Option : 3

Q.2
9 Who wrote the book 'War and Peace'?

Ans 1. Vladimir Lenin

2. Leo Tolstoy

3. Karl Marx

4. Anton Chekhov

Question ID : 9895806400

Chosen Option : 2

Q.3
0 India has won 8 Olympic gold medals for field hockey. When was the last time India won a gold medal for hockey in Olympics?

Ans 1. 1976

2. 1984

3. 1988

4. 1980

Question ID : 9895806401

Chosen Option : 2

Q.3
1 Which of the following statements is NOT true about angiosperms?

Ans

- 1. They have stems, leaves and roots
- 2. Conifers, Cycads and Ginkgo are examples of angiosperms
- 3. They have to undergo pollination before they can reproduce
- 4. The flowers carry the reproductive organs

Question ID : 9895806389
Chosen Option : 3

Q.3
2 The economic survey is usually presented _____ before the Union Budget.

- Ans
- 1. 1 day
 - 2. 15 days
 - 3. 7 days
 - 4. 2 days

Question ID : 9895806396
Chosen Option : 3

Q.3
3 Gita Gopinath became the first woman to occupy the position of Chief Economist of:

- Ans
- 1. World Trade Organisation
 - 2. UNESCO
 - 3. World Bank
 - 4. International Monetary Fund

Question ID : 9895806398
Chosen Option : 1

Q.3
4 The holy place of the Jains, Shravanabelagola is situated in which district of Karnataka?

- Ans
- 1. Shimoga District
 - 2. Bellary District
 - 3. Mysore District
 - 4. Hassan District

Question ID : 9895806405
Chosen Option : 2

Q.3
5 The Government of India releases MSP of agricultural produce from time to time. What is the full form of MSP?

- Ans
- 1. Minimum Selling Price
 - 2. Minimum Support Price
 - 3. Maximum Selling Price
 - 4. Maximum Support Price

Question ID : 9895806397
Chosen Option : 3

Q.3
6 Golconda Fort was built in the 13th century by the _____ Dynasty.

Ans

- 1. Kakatiya
- 2. Chola
- 3. Periyar
- 4. Chalukya

Question ID : 9895806404
Chosen Option : 4

Q.3
7 In the context of climate, what is the full form of ITCZ?

- Ans
- 1. Indian Trough Conversation Zone
 - 2. Inter Tropical Convergence Zone
 - 3. Intra Temperate Control Zone
 - 4. Islandic Tropical Climate Zone

Question ID : 9895806386
Chosen Option : 2

Q.3
8 The Indian athlete Dutee Chand is associated to which of the following sporting events?

- Ans
- 1. Shotput
 - 2. Javelin
 - 3. Jumping
 - 4. Sprinting

Question ID : 9895806399
Chosen Option : 2

Q.3
9 A special property of acids and bases is their ability to _____ each other's properties.

- Ans
- 1. Crystalize
 - 2. Neutralize
 - 3. Amortize
 - 4. Naturalize

Question ID : 9895806387
Chosen Option : 2

Q.4
0 According to the report published by the World Health Organization (WHO) in 2017, approximately how many people in the world do NOT have access to safe drinking water at home?

- Ans
- 1. 4.2 billion
 - 2. 900 million
 - 3. 500 million
 - 4. 2.1 billion

Question ID : 9895806391
Chosen Option : 4

Q.4
1 'Kuchipudi' derives its roots from:

- Ans
- 1. Kerala

- 2. Andhra Pradesh
- 3. Puducherry
- 4. Tamil Nadu

Question ID : 9895806403
Chosen Option : 4

Q.4 Swachh Bharat Abhiyan was launched by the government of India on the birth anniversary of:
2

- Ans
- 1. Mahatma Gandhi
 - 2. Vallabhbhai Patel
 - 3. Jawaharlal Nehru
 - 4. Atal Bihari Vajpayee

Question ID : 9895806388
Chosen Option : 2

Q.4 The Constitution of India came into force on 26 January 1950. Which act or governing document did it replace?
3

- Ans
- 1. Government of India Act, 1858
 - 2. Government of India Act, 1935
 - 3. Indian Councils Act, 1892
 - 4. Regulating Act, 1773

Question ID : 9895806392
Chosen Option : 3

Q.4 The parliament has powers to amend the provisions of the Constitution of India. Which article of the constitution confers this power on the parliament?
4

- Ans
- 1. Article 1
 - 2. Article 256
 - 3. Article 55
 - 4. Article 368

Question ID : 9895806394
Chosen Option : 2

Q.4 The first major nationwide Satyagraha launched by Mahatma Gandhi was against:
5

- Ans
- 1. Rowlatt Act
 - 2. Partition of Bengal
 - 3. Tax on Khadi products
 - 4. Salt tax

Question ID : 9895806383
Chosen Option : 1

Q.4 Which of the following is NOT true about the 'Protection of Women from Domestic Violence Act, 2005'?
6

- Ans
- 1. Injury can be physical, emotional or economic.
 - 2. It also applies to violence at workplace.

3.

It applies in case of injury or harm or threat of injury or harm by the adult male member of the household.

4.

The term 'Domestic' includes all women who live or have lived in a shared household with the accused male member.

Question ID : 9895806393

Chosen Option : 2

Q.4
7 The host country for 2022 FIFA World Cup is:

Ans 1. Japan

2. Germany

3. France

4. Qatar

Question ID : 9895806402

Chosen Option : 3

Q.4
8 'Slash and burn' type of farming is also known as:

Ans 1. shifting farming

2. intensive subsistence farming

3. extensive farming

4. commercial farming

Question ID : 9895806384

Chosen Option : 2

Q.4
9 What is the monthly salary of the President of India as per 2018 Budget?

Ans 1. 4 lakhs

2. 2 lakhs

3. 5 lakhs

4. 3 lakhs

Question ID : 9895806395

Chosen Option : 1

Q.5
0 Which of the following is NOT a method of soil conservation?

Ans 1. Intercropping

2. Mulching

3. Contour Ploughing

4. Weathering

Question ID : 9895806385

Chosen Option : 2

Q.5
1 A sector is cut from a circle of diameter 42 cm. If the angle of the sector is 150° then what is its area in cm^2 .

(Take $\pi = \frac{22}{7}$)

Ans 1. 584.8

2. 577.5

3. 564.6

4. 580.4

Question ID : 9895806296
Chosen Option : 3

Q.5
2 The present ages of A and B are in the ratio 15 : 8. After 8 years their ages will be in the ratio 17 : 10. What will be the ratio of ages of A and B after 10 years from now?

Ans 1. 10 : 7

2. 8 : 5

3. 5 : 3

4. 7 : 4

Question ID : 9895806291
Chosen Option : 4

Q.5
3 A circus tent is cylindrical to a height of 3 meters and conical above it. If the radius of the base is 52.5 m and the slant height of the cone is 52m, then the total area of the canvas required to make it is:

Ans 1. 3048π

2. 3045π

3. 2730π

4. 2842π

Question ID : 9895806297
Chosen Option : 3

Q.5
4 The compound interest on a sum of ₹ 24500 at 10% p.a for $2\frac{2}{5}$ years interest compounded yearly is:

Ans 1. ₹ 6338.40

2. ₹ 6342

3. ₹ 6330.80

4. ₹ 6340

Question ID : 9895806294
Chosen Option : 1

Q.5
5 Study the following table, which shows the number of units of a product manufactured and sold by a company in five years, and answer questions.

Years	Number of units (in thousands) Manufactured	sold
2013	350	320
2014	375	315
2015	300	280
2016	450	423
2017	420	360

What percent of total units of the product manufactured in 2013 and 2015 is the total units unsold during the five years? (correct to one decimal place)

Ans 1. 30.8

2. 30.3

3. 29.6

4. 29.4

Question ID : 9895806303
Chosen Option : 3

Q.5
6

Study the following table, which shows the number of units of a product manufactured and sold by a company in five years, and answer questions.

Years	Number of units (in thousands) Manufactured	sold
2013	350	320
2014	375	315
2015	300	280
2016	450	423
2017	420	360

The ratio of the total number of units sold in 2014 and 2015 to the number of units manufactured in 2017 is:

- Ans 1. 17 : 12
 2. 19 : 14
 3. 9 : 8
 4. 14 : 17

Question ID : 9895806304
 Chosen Option : 3

Q.5 The value of $1.6 \div 1.6$ of $1.6 + 0.6$ of $1.4 \div 0.5 - 0.001 \times 1.5 \div 0.075$ lies between:

- Ans 1. 2.4 and 2.6
 2. 2.6 and 2.8
 3. 2.2 and 2.4
 4. 2 and 2.2

Question ID : 9895806283
 Chosen Option : 2

Q.5 The average of 10 numbers is 41. The average of first 3 numbers is 39.4 and the average of last 4 numbers is 43.5. 4th number is 2 more than the 5th number and 0.2 more than the 6th number. What is the average of the 4th and 6th numbers

- Ans 1. 38.7
 2. 38.9
 3. 39.6
 4. 39.9

Question ID : 9895806285
 Chosen Option : 1

Q.5 The average age of 24 students in a class is 15.5 years. The age of their teacher is 28 years more than the average of all twenty five. What is the age of the teacher in years?

- Ans 1. $40\frac{1}{3}$
 2. $41\frac{2}{3}$
 3. $44\frac{2}{3}$
 4. $42\frac{1}{3}$

Question ID : 9895806284
 Chosen Option : 4

Q.6 If 12, x, 8 and 14 are in proportion, then what is the mean proportional between $(x - 12)$ and $(x + 4)$?

- Ans 1. 12
 2. 11
 3. 16

✓ 4. 15

Question ID : 9895806290
Chosen Option : 1

Q.6 A 280 m long train is running at 108 km/hr. In how much time will it cross a bridge of length 170 m?

- 1
Ans
- ✗ 1. 10 sec
 - ✓ 2. 15 sec
 - ✗ 3. 16 sec
 - ✗ 4. 12 sec

Question ID : 9895806300
Chosen Option : 2

Q.6 A shopkeepers profit was 16% of the sale of his goods. If the price at which he buys decreases by 20% while he reduces his selling price by 23%, what is now his percentage of profit? (correct to one decimal place)

- 2
Ans
- ✓ 1. 14.6
 - ✗ 2. 15.4
 - ✗ 3. 14.9
 - ✗ 4. 15.8

Question ID : 9895806287
Chosen Option : 3

Q.6 The largest sphere is carved out of a cube of side 7 cm. What is the volume of the sphere in cm^3 (Take $\pi = \frac{22}{7}$)

- 3
Ans
- ✓ 1. $179\frac{2}{3}$
 - ✗ 2. $182\frac{1}{3}$
 - ✗ 3. $179\frac{1}{3}$
 - ✗ 4. $182\frac{2}{3}$

Question ID : 9895806298
Chosen Option : 2

Q.6 Two vessels A and B contain solution of acid and water. In A and B the ratio of acid and water are 7 : 3 and 4 : 1, respectively. They are mixed in the ration 1 : 2. What is the ratio of acid and water in the resulting solution?

- 4
Ans
- ✗ 1. 15 : 8
 - ✗ 2. 16 : 7
 - ✓ 3. 23 : 7
 - ✗ 4. 25 : 9

Question ID : 9895806292
Chosen Option : 1

Q.6 Let x be the least multiple of 29 which when divided by 20, 21, 22, 24 and 28 then the remainders are 13, 14, 15, 17 and 21 respectively. What is the sum of digits of x?

- 5
Ans
- ✗ 1. 18
 - ✗ 2. 22
 - ✗ 3. 19
 - ✓ 4. 23

Question ID : 9895806281
Chosen Option : 3

Q.6 At what percentage above the cost price must an article be marked so as to gain 38% after allowing a customer a discount of 8% on the marked price?

- Ans**
- 1. 48
 - 2. 46
 - 3. 50
 - 4. 45

Question ID : 9895806286
Chosen Option : 2

Q.6 The numbers 6, 8, 11, 12, $2x - 8$, $2x + 10$, 35, 41, 42, 50 are written in ascending order. If their median is 25, then what is the mean of the numbers?

- Ans**
- 1. 24.8
 - 2. 24.6
 - 3. 25.5
 - 4. 25.2

Question ID : 9895806295
Chosen Option : 3

Q.6 A takes 6 hours more than B to cover a distance of 60 km. But if A doubles his speed, he takes 3 hours less than B to cover the same distance. The speed (in km/hr) of A is:

- Ans**
- 1. $3\frac{1}{3}$
 - 2. $4\frac{2}{3}$
 - 3. 4
 - 4. 5

Question ID : 9895806299
Chosen Option : 4

Q.6 A sum of ₹ 1518 is divided among A, B, and C, such that A receives 20% more than B and B receives 20% less than C. What is the share of C in the sum?

- Ans**
- 1. ₹ 528
 - 2. ₹ 440
 - 3. ₹ 550
 - 4. ₹ 572

Question ID : 9895806289
Chosen Option : 1

Q.7 Study the following table, which shows the number of units of a product manufactured and sold by a company in five years, and answer questions.

Years	Number of units (in thousands) Manufactured	sold
2013	350	320
2014	375	315
2015	300	280
2016	450	423
2017	420	360

In which year the number of units of the product sold is 19000 more than the average number of units manufactured per year?

- Ans**
- 1. 2016

- 2. 2015
- 3. 2017
- 4. 2014

Question ID : 9895806305
Chosen Option : 2

Q.7 The simple interest on a certain sum is $11\frac{1}{9}\%$ of the sum and the number of years is equal to the rate percent per annum.
1 What will be the simple interest on a sum of ₹ 12600 at the same rate for $2\frac{4}{5}$ years?

- Ans
- 1. ₹ 1216
 - 2. ₹ 1224
 - 3. ₹ 1176
 - 4. ₹ 1164

Question ID : 9895806293
Chosen Option : 4

Q.7 A can complete $\frac{2}{3}$ of a work in 8 days. B can complete $\frac{3}{5}$ of the same work in 12 days and C can complete $\frac{4}{9}$ of the same work in 8 days. A and B worked together for 5 days. How much time (in days) will C alone take to complete the remaining work?
2

- Ans
- 1. 6
 - 2. $7\frac{1}{2}$
 - 3. $8\frac{1}{2}$
 - 4. 9

Question ID : 9895806302
Chosen Option : 3

Q.7 The ratios of efficiencies of A and B of doing a certain work is 5 : 8. Working together they can complete the work in 20 days. A alone will complete 25% of that work in:
3

- Ans
- 1. 14 days
 - 2. 12 days
 - 3. 11 days
 - 4. 13 days

Question ID : 9895806301
Chosen Option : 2

Q.7 If 20% more would be gained by selling an article for ₹ 93 than selling it for ₹ 85, then the cost price of the article is:
4

- Ans
- 1. ₹ 64
 - 2. ₹ 40
 - 3. ₹ 56
 - 4. ₹ 60

Question ID : 9895806288
Chosen Option : 2

Q.7 The value of $5\frac{5}{6} \div 3\frac{1}{2} \times 2\frac{1}{10} + \frac{3}{5}$ of $7\frac{1}{2} \div \frac{2}{3} - \frac{2}{3} \div \frac{8}{15} \times 1\frac{1}{5}$

Ans

1. $8\frac{3}{4}$

2. $2\frac{3}{5}$

3. $8\frac{3}{5}$

4. $1\frac{3}{4}$

Question ID : 9895806282
Chosen Option : 2

Section : English Language

Q.1 Select the antonym of the given word.

GRANT

Ans 1. Refuse

2. Approve

3. Reject

4. Sanction

Question ID : 9895806066
Chosen Option : 4

Q.2 Select the most appropriate option to substitute the underlined segment in the given sentence. If there is no need to substitute it, select No improvement.

A team of doctors is focusing over treatment of cancer at an early age.

Ans 1. is focusing onto treatment of cancer

2. is focusing on treatment of cancer

3. No improvement

4. is focusing in treatment of cancer

Question ID : 9895806055
Chosen Option : 4

Q.3 From the given options, identify the segment in the sentence which contains the grammatical error.

As a painter he are good if not better than Suresh.

Ans 1. he are good

2. than Suresh

3. if not better

4. As a painter

Question ID : 9895806052
Chosen Option : 1

Q.4 Select the most appropriate option to substitute the underlined segment in the given sentence. If there is no need to substitute it, select No improvement.

He have been working on and off for two years to complete a book.

Ans 1. has work

2. have worked

3. No improvement

4. has been working

Question ID : 9895806053

Chosen Option : 2

Q.5 Select the word which means the same as the group of words given.

One who makes an eloquent public speech

Ans 1. Leader

2. Debater

3. Speaker

4. Orator

Question ID : 9895806070

Chosen Option : 1

Q.6 Select the most appropriate option to substitute the underlined segment in the given sentence. If there is no need to substitute it, select No improvement.

Would you mind help me with these questions?

Ans 1. Would you mind helping

2. Would you mind for helping

3. No improvement

4. Would you mind to help

Question ID : 9895806054

Chosen Option : 4

Q.7 Select the word which means the same as the group of words given.

The absence of government in a country

Ans 1. Bureaucracy

2. Anarchy

3. Autocracy

4. Democracy

Question ID : 9895806071

Chosen Option : 4

Q.8 Select the option that means the same as the given idiom.

In black and white

Ans 1. In writing

2. In colour

3. Scanned

4. Photocopied

Question ID : 9895806068

Chosen Option : 3

Comprehension:

In the following passage some words have been deleted. Fill in the blanks with the help of the alternatives given.

In 1893, Lokmanya Tilak converted the Ganapati festival _____ (1) a national celebration. He campaigned for _____ (2) wide celebration of this public festival throughout Maharashtra. It was _____ (3) this festival that he _____ (4) mobilise public support for the nationalist _____ (5)

SubQuestion No : 9

Q.9 Select the most appropriate option that will fill in the blank number 1.

- Ans
- 1. with
 - 2. into
 - 3. for
 - 4. to

Question ID : 9895806059
Chosen Option : 1

Comprehension:

In the following passage some words have been deleted. Fill in the blanks with the help of the alternatives given.

In 1893, Lokmanya Tilak converted the Ganapati festival _____ (1) a national celebration. He campaigned for _____ (2) wide celebration of this public festival throughout Maharashtra. It was _____ (3) this festival that he _____ (4) mobilise public support for the nationalist _____ (5)

SubQuestion No : 10

Q.10 Select the most appropriate option that will fill in the blank number 2.

- Ans
- 1. a
 - 2. some
 - 3. the
 - 4. one

Question ID : 9895806060
Chosen Option : 2

Comprehension:

In the following passage some words have been deleted. Fill in the blanks with the help of the alternatives given.

In 1893, Lokmanya Tilak converted the Ganapati festival _____ (1) a national celebration. He campaigned for _____ (2) wide celebration of this public festival throughout Maharashtra. It was _____ (3) this festival that he _____ (4) mobilise public support for the nationalist _____ (5)

SubQuestion No : 11

Q.1

1 Select the most appropriate option that will fill in the blank number 3.

- Ans
- 1. with
 - 2. through
 - 3. without
 - 4. throughout

Question ID : 9895806061
Chosen Option : 2

Comprehension:

In the following passage some words have been deleted. Fill in the blanks with the help of the alternatives given.

In 1893, Lokmanya Tilak converted the Ganapati festival _____ (1) a national celebration. He campaigned for _____ (2) wide celebration of this public festival throughout Maharashtra. It was _____ (3) this festival that he _____ (4) mobilise public support for the nationalist _____ (5)

SubQuestion No : 12

Q.1
2 Select the most appropriate option that will fill in the blank number 4.

- Ans
- 1. may
 - 2. can
 - 3. will
 - 4. could

Question ID : 9895806062
Chosen Option : 1

Comprehension:

In the following passage some words have been deleted. Fill in the blanks with the help of the alternatives given.

In 1893, Lokmanya Tilak converted the Ganapati festival _____ (1) a national celebration. He campaigned for _____ (2) wide celebration of this public festival throughout Maharashtra. It was _____ (3) this festival that he _____ (4) mobilise public support for the nationalist _____ (5)

SubQuestion No : 13

Q.1
3 Select the most appropriate option that will fill in the blank number 5.

- Ans
- 1. movement
 - 2. term
 - 3. season
 - 4. festival

Question ID : 9895806063
Chosen Option : 3

Q.1

4 Select the most appropriate option to fill in the blank.

'Discovery of India' _____ by Jawaharlal Nehru.

- Ans
- 1. have been written
 - 2. has written
 - 3. has been written
 - 4. have written

Question ID : 9895806057
Chosen Option : 2

Q.1
5 Select the correctly spelt word.

- Ans
- 1. Acquaintance
 - 2. Acquaintance
 - 3. Acquaintance
 - 4. Acquaintance

Question ID : 9895806072
Chosen Option : 2

Q.1
6 From the given options, identify the segment in the sentence which contains the grammatical error:

When I asked for directions, he gave me many wrong informations.

- Ans
- 1. When I asked
 - 2. for directions
 - 3. wrong informations
 - 4. gave me many

Question ID : 9895806051
Chosen Option : 2

Q.1
7 Select the synonym of the given word.

ZENITH

- Ans
- 1. Peak
 - 2. Border
 - 3. Brink
 - 4. Edge

Question ID : 9895806065
Chosen Option : 3

Q.1
8 Select the option that means the same as the given idiom.

Hit the nail on the head

- Ans
- 1. Accurately right
 - 2. Hit the nail exactly
 - 3. Use hammer and nail

4. Use some tools

Question ID : 9895806069
Chosen Option : 1

Q.1
9 Select the synonym of the given word.

RESISTANCE

- Ans 1. Approval
 2. Recognition
 3. Refusal
 4. Enthusiasm

Question ID : 9895806064
Chosen Option : 3

Q.2
0 Select the antonym of the given word.

HUMILITY

- Ans 1. Cruelty
 2. Shyness
 3. Obedience
 4. Modesty

Question ID : 9895806067
Chosen Option : 3

Q.2
1 Select the most appropriate option to fill in the blank.

One should be careful to check the grease and oil in _____ car occasionally for it's smooth functioning.

- Ans 1. ones
 2. their
 3. our
 4. one's

Question ID : 9895806056
Chosen Option : 2

Q.2
2 From the given options, identify the segment in the sentence which contains the grammatical error.

Is the older person always more wiser than the younger one?

- Ans 1. Is the
 2. more wiser
 3. older person always
 4. than the younger one?

Question ID : 9895806050
Chosen Option : 2

Q.2
3 Select the most appropriate word to fill in the blank.

Many tourists to India visit the beautiful valley of Kashmir _____ in spring and summer.

- Ans
- 1. generally
 - 2. rarely
 - 3. especially
 - 4. frequently

Question ID : 9895806074
Chosen Option : 3

Q.2 Select the most appropriate word to fill in the blank.
4

Our society is _____ by the evil of corruption; the integrity of even senior officials is disputed.

- Ans
- 1. indicated
 - 2. endangered
 - 3. specified
 - 4. identified

Question ID : 9895806075
Chosen Option : 4

Q.2 Select the correctly spelt word.
5

- Ans
- 1. Millennium
 - 2. Milennium
 - 3. Millenniam
 - 4. Millenium

Question ID : 9895806073
Chosen Option : 4

Section : Hindi Language

Q.1 दिये गये वाक्यांश के लिए एक शब्द दीजिये।

जिसका अंत न हो

- Ans
- 1. अनंत
 - 2. अंतिम
 - 3. अजर
 - 4. अज्ञात

Question ID : 9895806046
Chosen Option : --

Q.2 रिक्त स्थान को भरने के लिए उपयुक्त शब्द का चयन करें।

घोड़े पर सवार वह _____ पड़ा।

- Ans
- 1. उड़
 - 2. खेल

3. गिर

4. धर

Question ID : 9895806032

Chosen Option : --

Q.3 निम्नलिखित में से उस विकल्प का चयन करें जो 'नाक में दम करना' मुहावरे का अर्थ व्यक्त करता है।

Ans 1. अपमान करना

2. बहुत परेशान करना

3. दम को रोकना

4. शान्त रहना

Question ID : 9895806044

Chosen Option : --

Q.4 दिए गए शब्द के पर्यायवाची शब्द का चयन करें।

प्रधान

Ans 1. गौण

2. मंत्री

3. नेता

4. मुख्य

Question ID : 9895806043

Chosen Option : --

Q.5 निम्नलिखित में से उस विकल्प का चयन करें जो 'घर फूँककर तमाशा देखना' मुहावरे का अर्थ व्यक्त करता है।

Ans 1. निकम्मा होना

2. घर को फूँकना

3. अपनी हानि करके मोजमस्ती करना

4. तमाशा देखना

Question ID : 9895806045

Chosen Option : --

Q.6 दिये गये वाक्यांश के लिए एक शब्द दीजिये।

जिसमें कोई संदेह न हो

Ans 1. संदेहशील

2. संदेहास्पद

3. निस्संदेह

4. ससंदेह

Question ID : 9895806047
Chosen Option : --

Q.7 सही वर्तनी वाले शब्द का चयन करें।

- Ans 1. चतुरभुज
 2. चतुर्भुज
 3. चर्तुभुज
 4. चतूर्भूज

Question ID : 9895806049
Chosen Option : --

Comprehension:

निम्नलिखित गद्यांश के रिक्त स्थानों की पूर्ति गद्यांश के नीचे दिए गए प्रश्नों के अनुसार कीजिए-

दैनिक जीवन के सभी कार्य मनुष्य और _____ (1) एक समान करते हैं। मनुष्य और पशु दोनों में यदि कोई अंतर है तो बस यही कि मनुष्य में परोपकार की _____ (2) होती है। वह इसमें आनंद अनुभव करता है। पशु इस _____ (3) से वंचित रह जाते हैं। परोपकार तो हमारी भारतीय _____ (4) के मूल में है। भारतीय इतिहास में ऐसे अनेक उदाहरण मिल जाएँगे जिन्होंने _____ (5) के लिए अपना सर्वस्व दान कर दिया।

SubQuestion No : 8

Q.8 गद्यांश में संकेतित रिक्त स्थान (1) के लिए उपयुक्त शब्द होगा।

- Ans 1. पशु
 2. सूर्य
 3. तारे
 4. चाँद

Question ID : 9895806035
Chosen Option : --

Comprehension:

निम्नलिखित गद्यांश के रिक्त स्थानों की पूर्ति गद्यांश के नीचे दिए गए प्रश्नों के अनुसार कीजिए-

दैनिक जीवन के सभी कार्य मनुष्य और _____ (1) एक समान करते हैं। मनुष्य और पशु दोनों में यदि कोई अंतर है तो बस यही कि मनुष्य में परोपकार की _____ (2) होती है। वह इसमें आनंद अनुभव करता है। पशु इस _____ (3) से वंचित रह जाते हैं। परोपकार तो हमारी भारतीय _____ (4) के मूल में है। भारतीय इतिहास में ऐसे अनेक उदाहरण मिल जाएँगे जिन्होंने _____ (5) के लिए अपना सर्वस्व दान कर दिया।

SubQuestion No : 9

Q.9 गद्यांश में संकेतित रिक्त स्थान (2) के लिए उपयुक्त शब्द होगा।

- Ans
- 1. भावना
 - 2. संकेत
 - 3. खिलवाड़
 - 4. घृणा

Question ID : 9895806036

Chosen Option : --

Comprehension:

निम्नलिखित गद्यांश के रिक्त स्थानों की पूर्ति गद्यांश के नीचे दिए गए प्रश्नों के अनुसार कीजिए-

दैनिक जीवन के सभी कार्य मनुष्य और _____ (1) एक समान करते हैं। मनुष्य और पशु दोनों में यदि कोई अंतर है तो बस यही कि मनुष्य में परोपकार की _____ (2) होती है। वह इसमें आनंद अनुभव करता है। पशु इस _____ (3) से वंचित रह जाते हैं। परोपकार तो हमारी भारतीय _____ (4) के मूल में है। भारतीय इतिहास में ऐसे अनेक उदाहरण मिल जाएँगे जिन्होंने _____ (5) के लिए अपना सर्वस्व दान कर दिया।

SubQuestion No : 10

Q.10 गद्यांश में संकेतित रिक्त स्थान (3) के लिए उपयुक्त शब्द होगा।

- Ans
- 1. तमाशा
 - 2. दुख
 - 3. खेल
 - 4. आनंद

Question ID : 9895806037

Chosen Option : --

Comprehension:

निम्नलिखित गद्यांश के रिक्त स्थानों की पूर्ति गद्यांश के नीचे दिए गए प्रश्नों के अनुसार कीजिए-

दैनिक जीवन के सभी कार्य मनुष्य और _____ (1) एक समान करते हैं। मनुष्य और पशु दोनों में यदि कोई अंतर है तो बस यही कि मनुष्य में परोपकार की _____ (2) होती है। वह इसमें आनंद अनुभव करता है। पशु इस _____ (3) से वंचित रह जाते हैं। परोपकार तो हमारी भारतीय _____ (4) के मूल में है। भारतीय इतिहास में ऐसे अनेक उदाहरण मिल जाएँगे जिन्होंने _____ (5) के लिए अपना सर्वस्व दान कर दिया।

SubQuestion No : 11

Q.1
1 गद्यांश में संकेतित रिक्त स्थान (4) के लिए उपयुक्त शब्द होगा।

- Ans
- 1. संस्कृति
 - 2. पुस्तक
 - 3. देश
 - 4. पुराण

Question ID : 9895806038
Chosen Option : --

Comprehension:

निम्नलिखित गद्यांश के रिक्त स्थानों की पूर्ति गद्यांश के नीचे दिए गए प्रश्नों के अनुसार कीजिए-

दैनिक जीवन के सभी कार्य मनुष्य और _____ (1) एक समान करते हैं। मनुष्य और पशु दोनों में यदि कोई अंतर है तो बस यही कि मनुष्य में परोपकार की _____ (2) होती है। वह इसमें आनंद अनुभव करता है। पशु इस _____ (3) से वंचित रह जाते हैं। परोपकार तो हमारी भारतीय _____ (4) के मूल में है। भारतीय इतिहास में ऐसे अनेक उदाहरण मिल जाएँगे जिन्होंने _____ (5) के लिए अपना सर्वस्व दान कर दिया।

SubQuestion No : 12

Q.1
2 गद्यांश में संकेतित रिक्त स्थान (5) के लिए उपयुक्त शब्द होगा।

- Ans
- 1. मूर्खता
 - 2. लड़ाई
 - 3. परोपकार
 - 4. संघर्ष

Question ID : 9895806039
Chosen Option : --

Q.1
3 दिए गए शब्द का विलोम चुनें।

निर्मल

- Ans
- 1. कमजोर
 - 2. मलिन
 - 3. निर्जल
 - 4. ताकतवर

Question ID : 9895806041
Chosen Option : --

Q.1
4 दिए गए वाक्य में रेखांकित खंड को प्रतिस्थापित करने के लिए उपयुक्त विकल्प का चयन करें।

इस समय हमारे देश से भावनात्मक एकता की आवश्यकता है।

- Ans
- 1. इस समय हमारे देशों को
 - 2. इस समय हमारे देश पर
 - 3. इस समय हमारे देश का
 - 4. इस समय हमारे देशों का

Question ID : 9895806029
Chosen Option : --

Q.1
5 दिए गए वाक्य का वह भाग ज्ञात करें जिसमें कोई त्रुटि है।

समय की गति बड़ी अद्भुत है, समय किसी की भी प्रतीक्षा नहीं करती।

- Ans
- 1. प्रतीक्षा नहीं करती।
 - 2. समय की गति
 - 3. समय किसी की भी
 - 4. बड़ी अद्भुत है,

Question ID : 9895806024
Chosen Option : --

Q.1
6 दिए गए शब्द का विलोम चुनें।

उज्ज्वल

- Ans
- 1. प्रकाशित
 - 2. स्वच्छ
 - 3. पारदर्शी
 - 4. धूमिल

Question ID : 9895806040
Chosen Option : --

Q.1
7 रिक्त स्थान को भरने के लिए उपयुक्त शब्द का चयन करें।

बाहर _____ आया है?

- Ans
- 1. कौन
 - 2. मैं
 - 3. हम
 - 4. किसने

Question ID : 9895806033
Chosen Option : --

Q.1
8 दिए गए वाक्य में रेखांकित खंड को प्रतिस्थापित करने के लिए उपयुक्त विकल्प का चयन करें।

मुझे पनीर का मिठाई बहुत पसंद है।

- Ans
- 1. पनीर को मिठाई
 - 2. पनीर में मिठाई
 - 3. पनीर से मिठाई
 - 4. पनीर की मिठाई

Question ID : 9895806027
Chosen Option : --

Q.1
9 दिए गए वाक्य का वह भाग ज्ञात करें जिसमें कोई त्रुटि है।

जंगल में जाने पर उसके सामने भील आ गई।

- Ans
- 1. जाने पर
 - 2. जंगल में
 - 3. भील आ गई।
 - 4. उसके सामने

Question ID : 9895806025
Chosen Option : --

Q.2
0 सही वर्तनी वाले शब्द का चयन करें।

- Ans
- 1. गायीका
 - 2. गायिका
 - 3. गयिका
 - 4. गयीका

Question ID : 9895806048
Chosen Option : --

Q.2
1

दिए गए शब्द के पर्यायवाची शब्द का चयन करें।

संपूर्ण

- Ans
- 1. पूरा
 - 2. छोटा
 - 3. अधूरा
 - 4. आधा

Question ID : 9895806042
Chosen Option : --

Q.2 दिए गए वाक्य का वह भाग ज्ञात करें जिसमें कोई त्रुटि है।

अपना संतान किसे अच्छी नहीं लगती, फिर भी दूसरों के प्रति उदार रहना हमारा धर्म है।

- Ans
- 1. फिर भी दूसरों के प्रति उदार रहना
 - 2. हमारा धर्म है
 - 3. अपना संतान
 - 4. किसे अच्छी नहीं लगती,

Question ID : 9895806026
Chosen Option : --

Q.3 रिक्त स्थान को भरने के लिए उपयुक्त शब्द का चयन करें।

महात्मा गांधी _____ हैं।

- Ans
- 1. असत्यवादी
 - 2. अल्पज
 - 3. वाचाल
 - 4. लोकप्रिय

Question ID : 9895806031
Chosen Option : --

Q.4 दिए गए वाक्य में रेखांकित खंड को प्रतिस्थापित करने के लिए उपयुक्त विकल्प का चयन करें।

दिवाली के त्योहार पर बाजार में दुकानों भी सजी है।

- Ans
- 1. दुकान भी सजा है।
 - 2. दुकान भी सजे हैं।
 - 3. दुकानों भी सजे हैं।
 - 4. दुकानें भी सजी हैं।

Question ID : 9895806028
Chosen Option : --

Q.2
5 रिक्त स्थान को भरने के लिए उपयुक्त शब्द का चयन करें।

घर के _____ अस्पताल है।

- Ans
- 1. सामने
 - 2. अंदर
 - 3. द्वारा
 - 4. बिना

Question ID : 9895806030
Chosen Option : --

GovtJobsAlert.In