

Constable (GD) in CAPFs, NIA, SSF and Rifleman (GD) in Assam Rifles Examination, 2018

Roll No. :	www.GovtJobsAlert.In
Registration No.	
Name :	
Exam Venue :	ION Digital Zone IDZ Thrissur
Exam Time :	4:00 PM - 5:30 PM
Exam Date :	21/02/2019

Section : General Section

Q.1 If A = 2 and D = 5, and SEA = 28, then COUNTRY = _____.

- Ans
- 1. 123
 - 2. 132
 - 3. 112
 - 4. 121

Question ID : 9895806237
Chosen Option : 1

Q.2 Read the given statements and conclusions carefully and decide which of the conclusions logically follow(s) from the statements.

Statements:

- 1) All students in my class are active.
- 2) Rohini is not active.

Conclusions:

- I. Rohini is not a student of my class.
- II. Rohini must be active.

- Ans
- 1. Both conclusions I and II follow.
 - 2. Only conclusion I follows.
 - 3. Only conclusion II follows.
 - 4. Neither conclusion I nor II follows.

Question ID : 9895806242
Chosen Option : 3

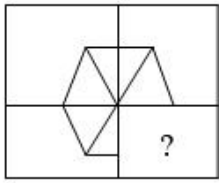
Q.3 Choose the word from the given options that is similar to the given words and hence belongs to the same group.

Lira, Dinar, Rupee

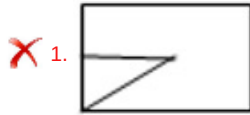
- Ans
- 1. Lisbon
 - 2. Cairo
 - 3. Rial
 - 4. Oslo

Question ID : 9895806235

Q.4 Select the correct option to complete the following pattern.



Ans



Question ID : 9895806252

Chosen Option : 4

Q.5 In the following number series, two numbers have been put within brackets. Study the series carefully and select the correct alternative with respect to the series.

0, 7, 26, 63, (124), 215, 342, (512)

Ans ✓ 1.

The first bracketed number (from the left) is correct and the second is incorrect.

✗ 2.

The first bracketed number (from the left) is incorrect and the second is correct.

✗ 3. Both the bracketed numbers are incorrect.

✗ 4. Both the bracketed numbers are correct.

Question ID : 9895806249

Chosen Option : 1

Q.6 Select the option that most closely resembles the mirror image of the given word when the mirror is placed vertically.

UNION

Ans ✗ 1. NOINU

✗ 2. ∩ III∩

✓ 3. H∩III

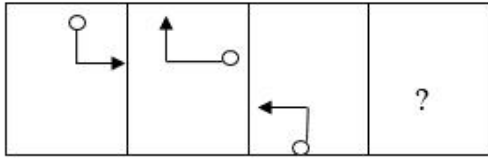
✗ 4. H∩III ∩

Question ID : 9895806253

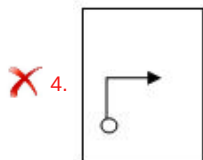
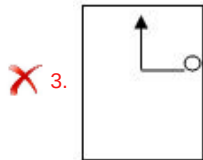
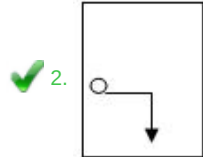
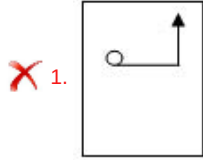
Chosen Option : 1

Q.7

Select the figure that will come next in the following series.



Ans



Question ID : 9895806250
Chosen Option : 2

Q.8 Select the number that DOES NOT belong to the following group.

1, 2, 5, 12, 20, 32, 45

- Ans
- 1. 45
 - 2. 32
 - 3. 20
 - 4. 12

Question ID : 9895806245
Chosen Option : 3

Q.9 In a private school, there were five teachers. Abi and Geetha were teaching French and English. Harini and Geetha were teaching English and Science. Diva and Abi were teaching Maths and French. Hema and Geetha were teaching Social Science and French.

Which subject is taught by maximum number of teachers?

- Ans
- 1. Science
 - 2. Maths
 - 3. French
 - 4. English

Question ID : 9895806240
Chosen Option : 3

Q.1 L, M, N and O are to be seated in a row. However, N and O cannot be together. Moreover, M cannot be in the third place from the left. L and M are sitting beside each other. Considering the seating from left to right which of the following must be true?

- Ans
- 1. N is at the third place.
 - 2. L is at the third place.
 - 3. N is at the first place.
 - 4. O is at the third place.





Question ID : 9895806241

Chosen Option : 1

Q.1 Select the Venn diagram that best represents the given set of classes.

Animals, Reptiles, Snakes

Ans

- 1. 
- 2. 
- 3. 
- 4. 

Question ID : 9895806255

Chosen Option : 4

Q.1 Four numbers have been given out of which three are alike in some manner, while one is different. Choose the odd one.

- Ans
- 1. 250
 - 2. 95
 - 3. 159
 - 4. 150

Question ID : 9895806247

Chosen Option : 3

Q.1
3

Given is a statement, followed by four conclusions. Read the statement carefully and decide which of the conclusions logically follow(s) from the given statement.

Statement:

This book can help because all good books help.

Conclusions:

- I. This is not a good book.
- II. This is a good book.
- III. No good book helps.
- IV. Some good books help.

- Ans**
- 1. Only conclusion I follows.
 - 2. All the conclusions follow.
 - 3. Only conclusion II follows.
 - 4. Both conclusions III and IV follow.

Question ID : 9895806243
Chosen Option : 3

Q.1 Five friends are sitting in a circle, all facing the centre. Mohan is to the left of Raju. Vinith is to the right of Arjun and between Arjun and Naveen. Who is between Raju and Naveen?

- Ans**
- 1. Arjun and Vinith
 - 2. Vinith
 - 3. Arjun
 - 4. Mohan

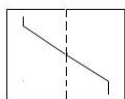
Question ID : 9895806239
Chosen Option : 2

Q.1 Four words have been given out of which three are alike in some manner, while one is different. Choose the odd one.

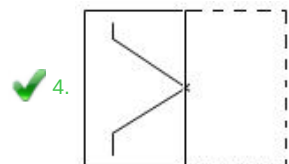
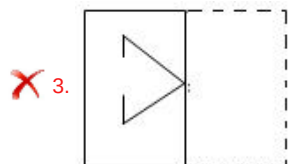
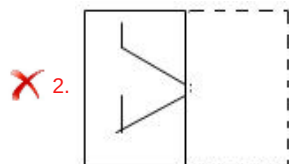
- Ans**
- 1. Necklace
 - 2. Bracelet
 - 3. Jewellery
 - 4. Anklet

Question ID : 9895806232
Chosen Option : 3

Q.1 A square transparent sheet with a pattern is given. How will the pattern appear when the transparent sheet is folded along the dotted line?



- Ans**
- 1.



Question ID : 9895806254
Chosen Option : 4

Q.1
7 Which two signs need to be interchanged to make the given equation correct?

$$3 \div 2 - 4 \times 5 + 5 = 1$$

- Ans
- ✗ 1. + and -
 - ✗ 2. × and -
 - ✗ 3. ÷ and ×
 - ✓ 4. + and ÷

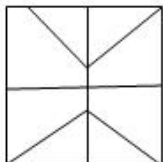
Question ID : 9895806248
Chosen Option : 3

Q.1
8 Select the option in which the given figure is embedded.



- Ans
- ✗ 1.
 - ✗ 2.
 - ✓ 3.

4.



Question ID : 9895806251
Chosen Option : 4

Q.1 Select the option that is related to the third term in the same way as the second term is related to the first term.

9

Angle : Radian :: Mass : _____.

- Ans 1. Kilogram
 2. Litre
 3. Degree
 4. Height

Question ID : 9895806236
Chosen Option : 1

Q.2 Select the correct option that will fill in the blank and complete the series.

0

5, 22, 39, 56, ___?

- Ans 1. 89
 2. 76
 3. 73
 4. 87

Question ID : 9895806244
Chosen Option : 3

Q.2 Identify the odd one from the following.

1

- Ans 1. dFh
 2. gHj
 3. uWy
 4. rTv

Question ID : 9895806233
Chosen Option : 2

Q.2 If CENTRAL is coded as BFMUQBK, then FRIENDS will be coded as _____.

2

- Ans 1. ESHEMER
 2. ESHFMER
 3. ESHENER
 4. ESHFNER

Question ID : 9895806238
Chosen Option : 2

Q.2 Four pairs of words have been given, out of which three are alike in some manner, while one is different. Choose out the odd one.

3

- Ans 1. Chef : Knife

- 2. Saw : Carpenter
- 3. Sculptor : Chisel
- 4. Doctor : Stethoscope

Question ID : 9895806234
Chosen Option : 3

Q.2 Select the option that is related to the third number in the same way as the second number is related to the first number.

4
7 : 50 :: 13 : ____?

- Ans
- 1. 160
 - 2. 144
 - 3. 170
 - 4. 169

Question ID : 9895806246
Chosen Option : 4

Q.2 Select the term that will come next in the following series.

5
YCL, MQZ, _____, OSB

- Ans
- 1. AEN
 - 2. BFQ
 - 3. ADM
 - 4. BEM

Question ID : 9895806231
Chosen Option : 1

Q.2 Which of the following statements about 'Biological Magnification' is FALSE?

6
Ans 1.

Its maximum concentration is at the top level of the food chain.

2.

Its maximum concentration is at the bottom level of the food chain.

3. It differs depending on the level of ecosystem.

4.

The chemicals enter the food chain through absorption from water or soil.

Question ID : 9895806437
Chosen Option : 4

Q.2 The first Mughal emperor, Babur came to India from:

- 7
Ans
- 1. Syria
 - 2. Greece
 - 3. Ferghana
 - 4. Persia

Question ID : 9895806432
Chosen Option : 3

Q.2
8 Banks were nationalised in India through an ordinance passed in the year:

- Ans
- 1. 1976
 - 2. 1963
 - 3. 1969
 - 4. 1954

Question ID : 9895806447
Chosen Option : 2

Q.2
9 Who presented the first Union Budget of Independent India?

- Ans
- 1. NV Gadgil
 - 2. Maulana Azad
 - 3. CD Deshmukh
 - 4. RK Shanmukham Chetty

Question ID : 9895806445
Chosen Option : 3

Q.3
0 _____ is the oldest mountain range in the Indian subcontinent.

- Ans
- 1. Himalaya
 - 2. Vindhya
 - 3. Aravali
 - 4. Satpura

Question ID : 9895806434
Chosen Option : 3

Q.3
1 'Sevasadan', 'Karmabhoomi' and 'Gaban' are some of the masterpieces of which Hindi writer?

- Ans
- 1. Bhisham Sahni
 - 2. Premchand
 - 3. Harishchandra
 - 4. Ramdhari Singh 'Dinkar'

Question ID : 9895806450
Chosen Option : 3

Q.3
2 As of January 2019, the Chief Minister of Chhattisgarh is:

- Ans
- 1. Shiv Dahariya
 - 2. Bhupesh Baghel
 - 3. Kamal Nath
 - 4. Kawasi Lakhma

Question ID : 9895806448
Chosen Option : 2

Q.3
3 Which of the following diseases is caused by bacteria?

- Ans
- 1. Rabies

- 2. Chicken Pox
- 3. Small Pox
- 4. Tuberculosis

Question ID : 9895806440
Chosen Option : 1

Q.3
4 Which of the following is NOT an amphibian?

- Ans
- 1. Frog
 - 2. Tortoise
 - 3. Salamander
 - 4. Toad

Question ID : 9895806439
Chosen Option : 4

Q.3
5 Life on earth began in the oceans almost _____ years ago.

- Ans
- 1. 1 billion
 - 2. 100 million
 - 3. 500 million
 - 4. 3.5 billion

Question ID : 9895806436
Chosen Option : 4

Q.3
6 Which chemical is widely used to unclog drains and sinks?

- Ans
- 1. Sodium Chloride
 - 2. Nitrogen Hydroxide
 - 3. Hydrogen Peroxide
 - 4. Sodium Hydroxide

Question ID : 9895806441
Chosen Option : 1

Q.3
7 The concept of five - year plans in the Constitution of India is borrowed from _____.

- Ans
- 1. Russia
 - 2. England
 - 3. The United States
 - 4. Germany

Question ID : 9895806443
Chosen Option : 1

Q.3
8 The Fiscal Year in India is considered between:

- Ans
- 1. 1 April – 31 March
 - 2. 1 January – 31 December

3. 1 July – 30 June

4. 31 March – 1 April

Question ID : 9895806446
Chosen Option : 1

Q.3
9 Which state hosts the annual Surajkund Crafts fair?

Ans 1. Rajasthan

2. Uttar Pradesh

3. Punjab

4. Haryana

Question ID : 9895806454
Chosen Option : 3

Q.4
0 Which of the following statements with respect to Article 22 of the Constitution and Criminal Law on fundamental rights of an arrested person is NOT correct?

Ans 1.

The Right to be informed at the time of arrest of the offence for which the person is being arrested

2.

A boy under 15 years of age and women cannot be called to the police station only for questioning

3.

The Right to be presented before a magistrate within 24 hours of arrest

4.

Confessions made in police custody can be used as evidence against the accused

Question ID : 9895806444
Chosen Option : 3

Q.4
1 Which team has won the Ranji Trophy maximum number of times?

Ans 1. Saurashtra

2. Tamil Nadu

3. Mumbai

4. Vidarbha

Question ID : 9895806451
Chosen Option : 4

Q.4
2 Which country ranks first in the 'Per Capita' Summer Olympic medals tally?

Ans 1. Netherlands

2. Finland

3. Japan

4. Hungary

Question ID : 9895806452
Chosen Option : 1

Q.4
3 The Brahmaputra river is called 'Tsangpo' in Tibet. What is it called in Bangladesh?

Ans 1. Meghna

- 2. Padma
- 3. Karnaphuli
- 4. Jamuna

Question ID : 9895806435
Chosen Option : 3

Q.4
4 Chandragupta Maurya established the Mauryan Empire by defeating the:

- Ans
- 1. Nandas
 - 2. Chalukyas
 - 3. Pallavas
 - 4. Shungas

Question ID : 9895806431
Chosen Option : 3

Q.4
5 Victoria Memorial is located in:

- Ans
- 1. Lahore
 - 2. Mumbai
 - 3. Kolkata
 - 4. New Delhi

Question ID : 9895806453
Chosen Option : 1

Q.4
6 'Gidda' is a dance form of which state?

- Ans
- 1. Punjab
 - 2. Assam
 - 3. West Bengal
 - 4. Odisha

Question ID : 9895806455
Chosen Option : 4

Q.4
7 Who was the first Indian woman president of Indian National Congress?

- Ans
- 1. Vijaya Lakshmi Pandit
 - 2. Sarojini Naidu
 - 3. Sucheta Kriplani
 - 4. Aruna Asaf Ali

Question ID : 9895806433
Chosen Option : 2

Q.4
8 Which of the following statements is not a good argument in favour of a democracy?

- Ans
- 1. Democracies are more accountable to the people
 - 2. Democracies have better resolutions of conflicts

3. People feel free and equal in a democracy

4. Democracies are more prosperous than others

Question ID : 9895806442

Chosen Option : 4

Q.4
9 Which of the following statements about sound is FALSE?

Ans 1. The audible range of an average human is 20 Hz – 20 kHz.

2.

The speed of sound remains uniform irrespective of the temperature or medium.

3. Sound travels as a longitudinal wave.

4. Sound cannot travel in a vacuum.

Question ID : 9895806438

Chosen Option : 3

Q.5
0 The Dadasaheb Phalke Award announced in 2018 was awarded to:

Ans 1. Late Yash Chopra

2. Late Rajesh Khanna

3. Late Shashi Kapoor

4. Late Vinod Khanna

Question ID : 9895806449

Chosen Option : 2

Q.5
1 If the interest on money be 1 paisa per rupee per month, what is the rate per cent per annum?

Ans 1. 12%

2. 15%

3. 10%

4. $10\frac{1}{2}\%$

Question ID : 9895806344

Chosen Option : 1

Q.5
2 The median of the data 28, 31, 42, 37, 26, 34, 18, 23 is:

Ans 1. 30

2. 29.5

3. 31.5

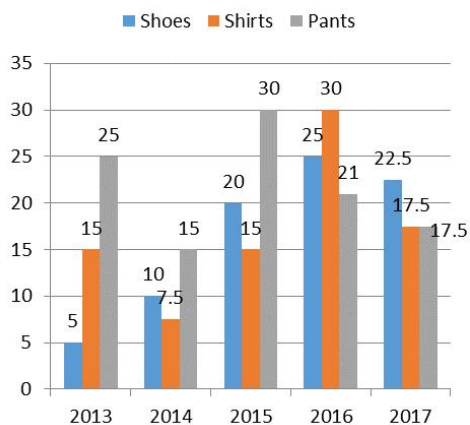
4. 28

Question ID : 9895806337

Chosen Option : 2

Q.5
3

Study the following graph which shows the production (in thousands) of different items, and answer these questions.



The ratio between the number of pants produced by the company in the year 2014, 2015 and 2016 respectively is:

- Ans
- 1. 3 : 4 : 6
 - 2. 5 : 10 : 7
 - 3. 1 : 2 : 3
 - 4. 3 : 4 : 5

Question ID : 9895806354
Chosen Option : 4

Q.5
4 The area of an equilateral triangle is 173 cm^2 then of the perimeter the equilateral triangle (use $\sqrt{3} = 1.73$) is:

- Ans
- 1. 40 cm
 - 2. 60 cm
 - 3. 100 cm
 - 4. 20 cm

Question ID : 9895806350
Chosen Option : 2

Q.5
5 A pen drive was sold at a price after giving two successive discounts of 30% and 20%. If the selling price of the item was ₹ 560, then what was the marked price of the pen drive?

- Ans
- 1. ₹ 1000
 - 2. ₹ 840
 - 3. ₹ 1140
 - 4. ₹ 1280

Question ID : 9895806343
Chosen Option : 2

Q.5
6 A discount of 30% on the marked price of a shirt enables a man to purchase a tie also, which costs him ₹ 210. How much did the man pay for the shirt?

- Ans
- 1. ₹ 540
 - 2. ₹ 490
 - 3. ₹ 630
 - 4. ₹ 700

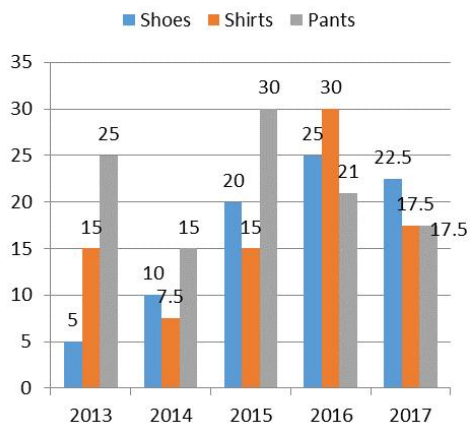
Question ID : 9895806336
Chosen Option : 2

Q.5 The cost price of 120 bags is ₹ 15 each. 40 of them were sold for ₹18 each. At what price should the remaining be sold in order to get an overall profit of ₹ 4 per bag?

- Ans**
- 1. ₹ 19.5
 - 2. ₹ 22.5
 - 3. ₹ 16
 - 4. ₹ 20

Question ID : 9895806339
Chosen Option : 2

Q.5 Study the following graph which shows the production (in thousands) of different items, and answer these questions.



The total number of all products produced by the company in the year 2014 and 2016 together is:

- Ans**
- 1. 105700
 - 2. 108500
 - 3. 1075
 - 4. 10750

Question ID : 9895806353
Chosen Option : 4

Q.5 Seven persons have 20, 30, 40, 50, 60, 70 and 80 chocolates with them. If each of them is given 5 chocolates additionally, what will be the average number of chocolates with them?

- Ans**
- 1. 50
 - 2. 55
 - 3. 45
 - 4. 60

Question ID : 9895806334
Chosen Option : 2

Q.6 A beats B by 125 m in a kilometer race. Find B's speed if A's speed is 16 m/sec.:

- Ans**
- 1. 18 m/sec
 - 2. 14 m/sec
 - 3. 7 m/sec
 - 4. 21 m/sec

Question ID : 9895806349
Chosen Option : 2

Q.6 The ratio of the present ages of Meera and Sheela is 9 : 5. After 8 years Sheela would reach the present age of Meera.

1 What is the present ages (in years) of Sheela?

- Ans
- 1. 18
 - 2. 10
 - 3. 5
 - 4. 9

Question ID : 9895806341
Chosen Option : 1

Q.6 The difference between simple interest and compound interest on ₹ 2500 at 4% per annum for two years is (in ₹):

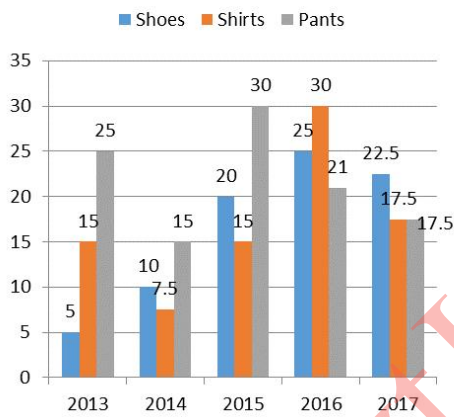
2

- Ans
- 1. ₹ 40
 - 2. ₹ 4
 - 3. ₹ 45
 - 4. ₹ 14

Question ID : 9895806345
Chosen Option : 1

Q.6 Study the following graph which shows the production (in thousands) of different items, and answer these questions.

3



The difference between the total number of Shoes and Shirts produced by the company in the year 2016 and the number of Pants produced by the company in the year 2014 is:

- Ans
- 1. 40000
 - 2. 35000
 - 3. 32000
 - 4. 38000

Question ID : 9895806355
Chosen Option : 2

Q.6 Suresh sells a pen at ₹ 120 for $33\frac{1}{3}\%$ profit. At what price should he sell it to gain 40%?

4

- Ans
- 1. ₹ 160
 - 2. ₹ 120
 - 3. ₹ 140
 - 4. ₹ 126

Question ID : 9895806340
Chosen Option : --

Q.6
5 If 12 men or 20 women can do a work in 54 days, then in how many days can 9 men and 12 women together do the work?

- Ans
- 1. 38
 - 2. 32
 - 3. 40
 - 4. 35

Question ID : 9895806347
Chosen Option : 1

Q.6
6 What should come in place of the question mark (?) in the following question?

$$1 - [5 - \{2 + (-5 + 6 - 2)\}] = ?$$

- Ans
- 1. 0
 - 2. 2
 - 3. -2
 - 4. -4

Question ID : 9895806333
Chosen Option : --

Q.6
7 A started running towards north direction at 6:00 a.m. B also started running towards north direction at 10:00 a.m. At what time will they meet if the speeds of A and B are in the ratio 3 : 7 and they started from the same point?

- Ans
- 1. 1 p.m.
 - 2. 2 p.m.
 - 3. 1:30 p.m.
 - 4. 12:30 p.m.

Question ID : 9895806348
Chosen Option : --

Q.6
8 The area of the base of a right circular cone is $\frac{1408}{7}$ cm² and its height is 6 cm. Taking $\pi = \frac{22}{7}$, the curved surface area of the cone is:

- Ans
- 1. $\frac{1670}{7}$ cm²
 - 2. $\frac{1067}{7}$ cm²
 - 3. $\frac{1760}{7}$ cm²
 - 4. $\frac{7160}{7}$ cm²

Question ID : 9895806352
Chosen Option : --

Q.6
9 The perimeter (in metres) of a semicircle is numerically equal to its area (in square meters). The length of its diameter is (Take $\pi = \frac{22}{7}$)

- Ans
- 1. $6\frac{6}{11}$ meters
 - 2. $3\frac{3}{11}$ meters
 - 3. $6\frac{2}{11}$ meters

4. $5\frac{6}{11}$ meters

Question ID : 9895806351
Chosen Option : --

Q.7
0 There are two numbers a^2 and 9. Their mean proportion is b, then

$$(a^2 + b^2) : (a^2 - b^2) = ?$$

- Ans 1. 5 : 4
 2. 3 : 4
 3. 3 : 2
 4. 1 : 1

Question ID : 9895806342
Chosen Option : 1

Q.7
1 The average number of chocolates with six children is six. If another child joined them the average number of chocolates with the seven children will become 7. What is the number of chocolates with the seventh child?

- Ans 1. 14
 2. 11
 3. 12
 4. 13

Question ID : 9895806335
Chosen Option : --

Q.7
2 A and B working together can complete a job in 30 days. The ratio of their efficiencies is 3 : 2. In how many days can the faster person complete the job?

- Ans 1. 50
 2. 30
 3. 40
 4. 60

Question ID : 9895806346
Chosen Option : 1

Q.7
3 What should come in place of the question mark (?) in the following question?

$$2 - [6 - \{3 + (-4 + 5 + 1) \times 8\} + 12] = ?$$

- Ans 1. 4
 2. 2
 3. 3
 4. 1

Question ID : 9895806332
Chosen Option : --

Q.7
4 Find the least square number which is divisible by 4, 8, 2, 6 and 12?

- Ans 1. 36
 2. 24
 3. 48
 4. 144

Question ID : 9895806331
Chosen Option : --

Q.7 In a class of 80 students, 60% passed in Economics and only 20% not passed in History. The maximum number of students who can neither passed in Economics nor in History is:

- Ans
- 1. 20
 - 2. 12
 - 3. 24
 - 4. 16

Question ID : 9895806338
Chosen Option : --

Section : English Language

Q.1 Select the most appropriate option to substitute the underlined segment in the given sentence. If there is no need to substitute it, select No improvement.

Even if you did not know where I was, you can always have telephoned me to ask.

- Ans
- 1. you could always have telephoned me
 - 2. No improvement
 - 3. you will always have telephoned me
 - 4. you should always have telephoned me

Question ID : 9895806106
Chosen Option : 4

Comprehension:

In the following passage some words have been deleted. Fill in the blanks with the help of the alternatives given.

Women have _____ (1) been held in high esteem in our country. During the Vedic period they _____ (2) important positions in social and religious _____ (3) Without women, religious ceremonies were _____ (4) incomplete. Our mythological and philosophical writings bear witness to the fact that the tradition of having high regard for women was long _____ (5)

SubQuestion No : 2

Q.2 Select the most appropriate option that will fill in the blank number 1.

- Ans
- 1. never
 - 2. seldom
 - 3. always
 - 4. hardly

Question ID : 9895806111
Chosen Option : 1

Comprehension:

In the following passage some words have been deleted. Fill in the blanks with the help of the alternatives given.

Women have _____ (1) been held in high esteem in our country. During the Vedic period they _____ (2) important positions in social and religious _____ (3) Without women, religious ceremonies were _____ (4) incomplete. Our mythological and philosophical writings bear witness to the fact that the tradition of having high regard for women was long _____ (5)

SubQuestion No : 3

Q.3 Select the most appropriate option that will fill in the blank number 2.

- Ans
- 1. occupied
 - 2. developed
 - 3. demanded
 - 4. offered

Question ID : 9895806112
Chosen Option : 4

Comprehension:

In the following passage some words have been deleted. Fill in the blanks with the help of the alternatives given.

Women have _____ (1) been held in high esteem in our country. During the Vedic period they _____ (2) important positions in social and religious _____ (3) Without women, religious ceremonies were _____ (4) incomplete. Our mythological and philosophical writings bear witness to the fact that the tradition of having high regard for women was long _____ (5)

SubQuestion No : 4

Q.4 Select the most appropriate option that will fill in the blank number 3.

- Ans
- 1. books
 - 2. literature
 - 3. life
 - 4. thoughts

Question ID : 9895806113
Chosen Option : 2

Comprehension:

In the following passage some words have been deleted. Fill in the blanks with the help of the alternatives given.

Women have _____ (1) been held in high esteem in our country. During the Vedic period they _____ (2) important positions in social and religious _____ (3) Without women, religious ceremonies were _____ (4) incomplete. Our mythological and philosophical writings bear witness to the fact that the tradition of having high regard for women was long _____ (5)

SubQuestion No : 5

Q.5 Select the most appropriate option that will fill in the blank number 4.

- Ans
- 1. accepted
 - 2. believed
 - 3. performed
 - 4. considered

Question ID : 9895806114
Chosen Option : 3

Comprehension:

In the following passage some words have been deleted. Fill in the blanks with the help of the alternatives given.

Women have _____ (1) been held in high esteem in our country. During the Vedic period they _____ (2) important positions in social and religious _____ (3) Without women, religious ceremonies were _____ (4) incomplete. Our mythological and philosophical writings bear witness to the fact that the tradition of having high regard for women was long _____ (5)

SubQuestion No : 6

Q.6 Select the most appropriate option that will fill in the blank number 5.

- Ans
- 1. awaited
 - 2. maintained
 - 3. valued
 - 4. discontinued

Question ID : 9895806115
Chosen Option : 3

Q.7 From the given options, identify the segment in the sentence which contains the grammatical error.

When questioned about their laziness, almost all the boys gave the same excuse, 'We all are tired.'

- Ans
- 1. When questioned
 - 2. almost all the boys
 - 3. 'We all are tired.'
 - 4. about their laziness

Question ID : 9895806103
Chosen Option : 2

Q.8 Select the most appropriate option to fill in the blank.

Macbeth is the tragedy of a man who was _____ with great qualities.

- Ans
- 1. endowed
 - 2. conferred
 - 3. empowered
 - 4. advantaged

Question ID : 9895806108
Chosen Option : 4

Q.9 Select the most appropriate option to fill in the blank.

All the respondents should express their _____ views in this questionnaire.

- Ans
- 1. candid
 - 2. confident
 - 3. convincing
 - 4. contrary

Question ID : 9895806109
Chosen Option : 3

Q.10 Select the option that means the same as the given idiom.

To split hairs

- Ans
- 1. To occupy one's time in dressing
 - 2. To stop the argument in between
 - 3. To get angry about someone's fashion
 - 4. To engage in discussing irrelevant details

Question ID : 9895806121
Chosen Option : 3

Q.11 Select the most appropriate word to fill in the blank.

The government should provide attractive tax _____ for the salaried class.

- Ans
- 1. structures
 - 2. documents
 - 3. suggestions
 - 4. bids

Question ID : 9895806126
Chosen Option : 2

Q.12 Select the most appropriate option to substitute the underlined segment in the given sentence. If there is no need to substitute it, select No improvement.

In spite of his illness, the man run a few yards before withdrawing from the race.

- Ans
- 1. ran a few yards before withdrew from
 - 2. ran a few yards before withdrawing from
 - 3. No improvement
 - 4. running a few yards before withdrawing from

Question ID : 9895806105
Chosen Option : --

Q.13

Select the word which means the same as the group of words given.

Organisms that live on another

- Ans
- 1. Bacteria
 - 2. Microbes
 - 3. Viruses
 - 4. Parasites

Question ID : 9895806122
Chosen Option : --

Q.1 From the given options, identify the segment in the sentence which contains the grammatical error.

4

The person at the counter when filling up my details asked me how many languages did I know.

- Ans
- 1. did I know
 - 2. at the counter
 - 3. filling up my details
 - 4. how many languages

Question ID : 9895806102
Chosen Option : --

Q.1 Select the option that means the same as the given idiom.

5

To read between the lines

- Ans
- 1. To ask someone to read every line
 - 2. To understand more than actual words
 - 3. To look for the meaning of every word
 - 4. To understand the dictionary meanings

Question ID : 9895806120
Chosen Option : --

Q.1 Select the correctly spelt word.

6

- Ans
- 1. Scisors
 - 2. Scissors
 - 3. Scissars
 - 4. Sissors

Question ID : 9895806124
Chosen Option : --

Q.1 Select the correctly spelt word.

7

- Ans
- 1. Allteration
 - 2. Altaration
 - 3. Alterashion
 - 4. Alteration

Question ID : 9895806125

Chosen Option : --

Q.1 From the given options, identify the segment in the sentence which contains the grammatical error.

8

Soon I was informed by reliable sources that their parents had no any responsibilities towards the family.

- Ans
- 1. towards the family
 - 2. by reliable sources
 - 3. Soon I was informed
 - 4. no any responsibilities

Question ID : 9895806104

Chosen Option : --

Q.1 Select the synonym of the given word.

9

CONFLUENCE

- Ans
- 1. Junction
 - 2. Flow
 - 3. Diversion
 - 4. Stream

Question ID : 9895806117

Chosen Option : --

Q.2 Select the antonym of the given word.

0

Genuine

- Ans
- 1. True
 - 2. False
 - 3. Frank
 - 4. Actual

Question ID : 9895806119

Chosen Option : --

Q.2 Select the most appropriate option to substitute the underlined segment in the given sentence. If there is no need to substitute it, select No improvement.

1

The City Development Council resolved at a recent meeting to take steps to controlling pollution immediately.

- Ans
- 1. to take steps to control pollution immediately
 - 2. No improvement
 - 3. to take steps of control pollution immediately
 - 4. to take steps for control pollution immediately

Question ID : 9895806107

Chosen Option : --

Q.2 Select the word which means the same as the group of words given.

2

A short stay at a place

- Ans
- 1. Voyage

- 2. Lodge
- 3. Sojourn
- 4. Trip

Question ID : 9895806123
Chosen Option : --

Q.2
3 Select the synonym of the given word.

PSEUDONYM

- Ans
- 1. Family name
 - 2. Alias
 - 3. Namesake
 - 4. First name

Question ID : 9895806116
Chosen Option : --

Q.2
4 Select the most appropriate word to fill in the blank.

The Director has still not given his _____ to conduct the survey of natural resources.

- Ans
- 1. compliance
 - 2. projection
 - 3. consent
 - 4. request

Question ID : 9895806127
Chosen Option : --

Q.2
5 Select the antonym of the given word.

Interruption

- Ans
- 1. Disruption
 - 2. Hinderance
 - 3. Continuity
 - 4. Temporary

Question ID : 9895806118
Chosen Option : --

Section : Hindi Language

Q.1 दिए गए शब्द के पर्यायवाची शब्द का चयन करें।

रावण

- Ans
- 1. चतुरानन
 - 2. पंचानन
 - 3. दशानन

✗ 4. पीतांबर

Question ID : 9895805913
Chosen Option : --

Q.2 दिए गए वाक्य का वह भाग ज्ञात करें जिसमें कोई त्रुटि है।

समाचार पत्र समाचार का भंडार तो हैं ही, इसके साथ इसके एक उपयोग और भी है।

- Ans ✓ 1. समाचार पत्र
✗ 2. समाचार का भंडार तो हैं ही,
✗ 3. इसके साथ
✗ 4. इसके एक उपयोग और भी है।

Question ID : 9895805895
Chosen Option : --

Q.3 दिए गए वाक्य में रेखांकित खंड को प्रतिस्थापित करने के लिए उपयुक्त विकल्प का चयन करें।

एकता और संगठन का भावना जागृत करने के लिए उन्होंने अनेक प्रयास किए।

- Ans ✗ 1. संगठन की भावना
✗ 2. संगठन को भावना
✗ 3. संगठन पर भावना
✓ 4. संगठन से भावना

Question ID : 9895805897
Chosen Option : --

Comprehension:

निम्नलिखित गद्यांश के रिक्त स्थानों की पूर्ति गद्यांश के नीचे दिए गए प्रश्नों के अनुसार कीजिए -

प्रसन्न रहना ईश्वर की सर्वोपरि भक्ति है। प्रसन्नता मानव को ईश्वर का दिया हुआ अनुपम उपहार है। आज के व्यक्ति को प्रसन्नता व मानसिक शांति की इसलिए _____ (1) है क्योंकि अधिकांश मनुष्य अपने जीवन से _____ (2) है। खुश रहना सरल नहीं है। व्यर्थ ही भविष्य की _____ (3) बनाते रहना और अतीत की अप्रिय घटनाओं में खोए रहना प्रसन्नता प्राप्ति में _____ (4) है। प्रसन्न रहकर हम _____ (5) के कृपा पात्र बन सकते हैं।

SubQuestion No : 4

Q.4 गद्यांश में संकेतित रिक्त स्थान (1) के लिए उपयुक्त शब्द होगा।

- Ans ✗ 1. तृष्णा
✗ 2. क्षुधा

3. वासना
 4. आवश्यकता

Question ID : 9895805905
Chosen Option : --

Comprehension:

निम्नलिखित गद्यांश के रिक्त स्थानों की पूर्ति गद्यांश के नीचे दिए गए प्रश्नों के अनुसार कीजिए -

प्रसन्न रहना ईश्वर की सर्वोपरि भक्ति है। प्रसन्नता मानव को ईश्वर का दिया हुआ अनुपम उपहार है। आज के व्यक्ति को प्रसन्नता व मानसिक शांति की इसलिए _____ (1) है क्योंकि अधिकांश मनुष्य अपने जीवन से _____ (2) है। खुश रहना सरल नहीं है। व्यर्थ ही भविष्य की _____ (3) बनाते रहना और अतीत की अप्रिय घटनाओं में खोए रहना प्रसन्नता प्राप्ति में _____ (4) है। प्रसन्न रहकर हम _____ (5) के कृपा पात्र बन सकते हैं।

SubQuestion No : 5

Q.5 गद्यांश में संकेतित रिक्त स्थान (2) के लिए उपयुक्त शब्द होगा।

- Ans 1. मित्रता
 2. प्रशंसा
 3. सहायता
 4. अप्रसन्न

Question ID : 9895805906
Chosen Option : --

Comprehension:

निम्नलिखित गद्यांश के रिक्त स्थानों की पूर्ति गद्यांश के नीचे दिए गए प्रश्नों के अनुसार कीजिए -

प्रसन्न रहना ईश्वर की सर्वोपरि भक्ति है। प्रसन्नता मानव को ईश्वर का दिया हुआ अनुपम उपहार है। आज के व्यक्ति को प्रसन्नता व मानसिक शांति की इसलिए _____ (1) है क्योंकि अधिकांश मनुष्य अपने जीवन से _____ (2) है। खुश रहना सरल नहीं है। व्यर्थ ही भविष्य की _____ (3) बनाते रहना और अतीत की अप्रिय घटनाओं में खोए रहना प्रसन्नता प्राप्ति में _____ (4) है। प्रसन्न रहकर हम _____ (5) के कृपा पात्र बन सकते हैं।

SubQuestion No : 6

Q.6 गद्यांश में संकेतित रिक्त स्थान (3) के लिए उपयुक्त शब्द होगा।

Ans

- 1. पकवान
- 2. योजनाएँ
- 3. लेख
- 4. कपड़े

Question ID : 9895805907
Chosen Option : --

Comprehension:

निम्नलिखित गद्यांश के रिक्त स्थानों की पूर्ति गद्यांश के नीचे दिए गए प्रश्नों के अनुसार कीजिए -

प्रसन्न रहना ईश्वर की सर्वोपरि भक्ति है। प्रसन्नता मानव को ईश्वर का दिया हुआ अनुपम उपहार है। आज के व्यक्ति को प्रसन्नता व मानसिक शांति की इसलिए _____ (1) है क्योंकि अधिकांश मनुष्य अपने जीवन से _____ (2) है। खुश रहना सरल नहीं है। व्यर्थ ही भविष्य की _____ (3) बनाते रहना और अतीत की अप्रिय घटनाओं में खोए रहना प्रसन्नता प्राप्ति में _____ (4) है। प्रसन्न रहकर हम _____ (5) के कृपा पात्र बन सकते हैं।

SubQuestion No : 7

Q.7 गद्यांश में संकेतित रिक्त स्थान (4) के लिए उपयुक्त शब्द होगा।

- Ans
- 1. आगे
 - 2. बाधक
 - 3. पीछे
 - 4. ऊपर

Question ID : 9895805908
Chosen Option : --

Comprehension:

निम्नलिखित गद्यांश के रिक्त स्थानों की पूर्ति गद्यांश के नीचे दिए गए प्रश्नों के अनुसार कीजिए -

प्रसन्न रहना ईश्वर की सर्वोपरि भक्ति है। प्रसन्नता मानव को ईश्वर का दिया हुआ अनुपम उपहार है। आज के व्यक्ति को प्रसन्नता व मानसिक शांति की इसलिए _____ (1) है क्योंकि अधिकांश मनुष्य अपने जीवन से _____ (2) है। खुश रहना सरल नहीं है। व्यर्थ ही भविष्य की _____ (3) बनाते रहना और अतीत की अप्रिय घटनाओं में खोए रहना प्रसन्नता प्राप्ति में _____ (4) है। प्रसन्न रहकर हम _____ (5) के कृपा पात्र बन सकते हैं।

SubQuestion No : 8

Q.8

गद्यांश में संकेतित रिक्त स्थान (5) के लिए
उपयुक्त शब्द होगा।

- Ans
- 1. ईश्वर
 - 2. सहायक
 - 3. मंत्री
 - 4. प्रधानमंत्री

Question ID : 9895805909
Chosen Option : --

Q.9 निम्नलिखित में से उस विकल्प का चयन करें जो 'चिकना घड़ा' मुहावरे का अर्थ व्यक्त करता है।

- Ans
- 1. निर्लज्ज व्यक्ति
 - 2. मजबूत घड़ा
 - 3. घड़ा चिकना करके पानी भरना
 - 4. घड़े का चिकना होना

Question ID : 9895805915
Chosen Option : --

Q.1 दिए गए वाक्य में रेखांकित खंड को प्रतिस्थापित करने के लिए उपयुक्त विकल्प का चयन करें।

रोगी के आस-पास हमें भीड़ नहीं लगाना चाहिए।

- Ans
- 1. भीड़ नहीं लगानी चाहिए।
 - 2. भीड़ मत लगानी चाहिए।
 - 3. भीड़ नहीं लगाने चाहिए।
 - 4. भीड़ लगानी मत चाहिए।

Question ID : 9895805899
Chosen Option : --

Q.1 निम्नलिखित में से उस विकल्प का चयन करें जो 'दाल में कुछ काला होना' मुहावरे का अर्थ व्यक्त करता है।

- Ans
- 1. दाल में कुछ गिर जाना
 - 2. दाल का काला होना
 - 3. सत्यता प्रमाणित होना
 - 4. आशंका/संदेह होना

Question ID : 9895805914
Chosen Option : --

Q.1 दिए गए शब्द का विलोम चुनें।

सुधा

- Ans
- 1. रस

- 2. गरल
- 3. अमृत
- 4. जल

Question ID : 9895805910
Chosen Option : --

Q.1
3 दिए गए शब्द का विलोम चुनें।

नित्य

- Ans
- 1. वार
 - 2. अनित्य
 - 3. रोज
 - 4. वासर

Question ID : 9895805911
Chosen Option : --

Q.1
4 दिए गए वाक्य में रेखांकित खंड को प्रतिस्थापित करने के लिए उपयुक्त विकल्प का चयन करें।

अपनी गलतियों को समझते हुए भी वह उसे सुधारते का प्रयास नहीं करता।

- Ans
- 1. सुधारने का प्रयास
 - 2. सुधारने की प्रयास
 - 3. सुधारने का प्रयास
 - 4. सुधारने का प्रयास

Question ID : 9895805898
Chosen Option : --

Q.1
5 रिक्त स्थान को भरने के लिए उपयुक्त शब्द का चयन करें।

उसे चोट लगने पर खून _____ लगा।

- Ans
- 1. चलने
 - 2. भागने
 - 3. बहने
 - 4. जाने

Question ID : 9895805901
Chosen Option : --

Q.1
6 दिए गए शब्द के पर्यायवाची शब्द का चयन करें।

आत्मज

- Ans
- 1. पुत्र

- 2. पत्नी
- 3. पिता
- 4. पुत्री

Question ID : 9895805912
Chosen Option : --

Q.1
7 रिक्त स्थान को भरने के लिए उपयुक्त शब्द का चयन करें।

वह कक्षा की _____ जा रहा है।

- Ans
- 1. उत्तर
 - 2. और
 - 3. ओर
 - 4. दिशा

Question ID : 9895805900
Chosen Option : --

Q.1
8 रिक्त स्थान को भरने के लिए उपयुक्त शब्द का चयन करें।

स्वतंत्रता दिवस पर देशभक्ति के गीत _____।

- Ans
- 1. गूँजे
 - 2. नाचे
 - 3. सजे
 - 4. बोले

Question ID : 9895805902
Chosen Option : --

Q.1
9 दिये गये वाक्यांश के लिए एक शब्द दीजिये।

जो उपकार को न मानता हो

- Ans
- 1. कृतघ्न
 - 2. कर्मठ
 - 3. कर्मज
 - 4. कृतज

Question ID : 9895805917
Chosen Option : --

Q.2
0 सही वर्तनी वाले शब्द का चयन करें।

- Ans
- 1. रसेइया

✓ 2. रसोइया

✗ 3. रसोईया

✗ 4. रसौईया

Question ID : 9895805919

Chosen Option : --

Q.2
1 दिए गए वाक्य का वह भाग ज्ञात करें जिसमें कोई त्रुटि है।

जिम्मेदार नागरिक होने के नाते मालिक को नौकर के बच्चे के पढ़ाना चाहिए।

Ans

✗ 1. होने के नाते

✗ 2. बच्चे के पढ़ाना चाहिए।

✗ 3. मालिक को नौकर के

✓ 4. जिम्मेदार नागरिक

Question ID : 9895805894

Chosen Option : --

Q.2
2 दिए गए वाक्य का वह भाग ज्ञात करें जिसमें कोई त्रुटि है।

सभ्यता के विकास के साथ ही चिंताजनक अवस्था उत्पन्न होता जा रही है।

Ans

✗ 1. चिंताजनक अवस्था

✗ 2. के साथ ही

✓ 3. सभ्यता के विकास

✗ 4. उत्पन्न होता जा रही है।

Question ID : 9895805896

Chosen Option : --

Q.2
3 दिये गये वाक्यांश के लिए एक शब्द दीजिये।

जो अच्छे कुल में उत्पन्न हुआ हो

Ans

✓ 1. तल्लीन

✗ 2. कुलीन

✗ 3. शालीन

✗ 4. मलीन

Question ID : 9895805916

Chosen Option : --

Q.2
4 सही वर्तनी वाले शब्द का चयन करें।

Ans

✗ 1. रोहीणी

- 2. रोहिणि
- 3. रौहिणी
- 4. रोहिणी

Question ID : 9895805918
Chosen Option : --

Q.2
5 रिक्त स्थान को भरने के लिए उपयुक्त शब्द का चयन करें।

मुझे तुम पर _____ नहीं है।

- Ans
- 1. विश्वास
 - 2. प्रेम
 - 3. घृणा
 - 4. पूजा

Question ID : 9895805903
Chosen Option : --